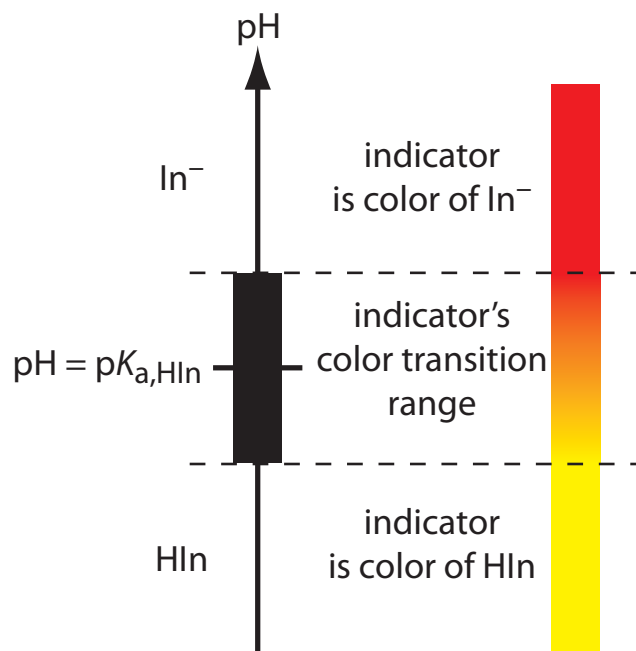

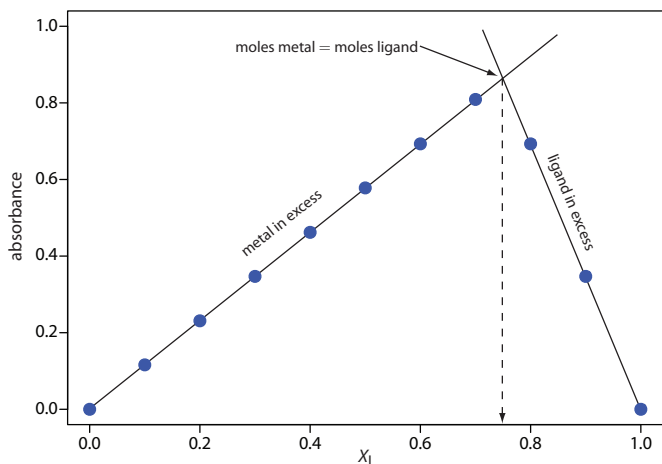


Analytical Chemistry 2.0



Production History

Print Version

Modern Analytical Chemistry by David Harvey

ISBN 0-07-237547-7

Copyright © 2000 by McGraw-Hill Companies

Copyright transferred to David Harvey, February 15, 2008

Electronic Versions

Analytical Chemistry 2.0 by David Harvey

Complete revision of the print version.

Copyright

This work is licensed under the Creative Commons Attribution-NonCommercial-ShareAlike 3.0 Unported License. To view a copy of this license, visit <http://creativecommons.org/licenses/by-nc-sa/3.0/> or send a letter to Creative Commons, 171 Second Street, Suite 300, San Francisco, California, 94105, USA. Under the conditions of this copyright you are free to share this work with others, either electronically or in print. You also are free to remix or adapt the work, provided that you attribute the original work and author and that you distribute your work under the same or similar licence. You may not use this work for commercial purposes.

Illustrations and Photographs

Unless otherwise indicated, all illustrations and photographs are original to this text and are covered by the copyright described in the previous section. Other illustrations are in the public domain or are have a copyright under one or more variants of a GNU or Creative Commons license. For reused content, a hyperlink in the figure caption provides a link to the original source. Click [here](#) for a list of reused illustrations and the specific copyright information.

Brief Table of Contents

Preface	xvii
1. Introduction to Analytical Chemistry	1
2. Basic Tools of Analytical Chemistry	13
3. The Vocabulary of Analytical Chemistry	41
4. Evaluating Analytical Data	63
5. Standardizing Analytical Methods	153
6. Equilibrium Chemistry	209
7. Collecting and Preparing Samples	285
8. Gravimetric Methods	355
9. Titrimetric Methods	411
10. Spectroscopic Methods	543
11. Electrochemical Methods	667
12. Chromatographic and Electrophoretic Methods	783
13. Kinetic Methods	885
14. Developing a Standard Method	945
15. Quality Assurance	995
Additional Resources	1021
Appendix	1071

Detailed Table of Contents

Preface xvii

A	Organization	xviii
B	Role of Equilibrium Chemistry	xviii
C	Computational Software	xix
D	How to Use The Electronic Textbook's Features.	xix
E	Acknowledgments	xxi
F	Updates and Future Editions	xxiii
G	How To Contact the Author	xxiii

Introduction to Analytical Chemistry 1

1A	What is Analytical Chemistry?	2
1B	The Analytical Perspective	5
1C	Common Analytical Problems.	8
1D	Key Terms.	8
1E	Chapter Summary	9
1F	Problems	9
1G	Solutions to Practice Exercises	10

Basic Tools of Analytical Chemistry 13

2A	Measurements in Analytical Chemistry	14
2A.1	Units of Measurement	14
2A.2	Uncertainty in Measurements	16
2B	Concentration	18
2B.1	Molarity and Formality	19
2B.2	Normality	20
2B.3	Molality	20
2B.4	Weight, Volume, and Weight-to-Volume Ratios.	20
2B.5	Parts Per Million and Parts Per Billion	20
2B.6	Converting Between Concentration Units	21
2B.7	p-Functions	22
2C	Stoichiometric Calculations.	23
2D	Basic Equipment.	26
2D.1	Equipment for Measuring Mass.	26
2D.2	Equipment for Measuring Volume	27
2D.3	Equipment for Drying Samples.	29
2E	Preparing Solutions	30
2E.1	Preparing Stock Solutions.	30
2E.2	Preparing Solutions by Dilution.	32

2F	Spreadsheets and Computational Software	33
2G	The Laboratory Notebook	34
2H	Key Terms	34
2I	Chapter Summary	35
2J	Problems	35
2K	Solutions to Practice Exercises	38
The Vocabulary of Analytical Chemistry		41
3A	Analysis, Determination and Measurement	42
3B	Techniques, Methods, Procedures, and Protocols	43
3C	Classifying Analytical Techniques	44
3D	Selecting an Analytical Method	45
3D.1	Accuracy	45
3D.2	Precision	46
3D.3	Sensitivity	46
3D.4	Specificity and Selectivity	47
3D.5	Robustness and Ruggedness	50
3D.6	Scale of Operation	50
3D.7	Equipment, Time, and Cost	52
3D.8	Making the Final Choice	52
3E	Developing the Procedure	53
3E.1	Compensating for Interferences	53
3E.2	Calibration	54
3E.3	Sampling	55
3E.4	Validation	55
3F	Protocols	55
3G	The Importance of Analytical Methodology	57
3H	Key Terms	57
3I	Chapter Summary	58
3J	Problems	58
3K	Solutions to Practice Exercises	61
Evaluating Analytical Data		63
4A	Characterizing Measurements and Results	64
4A.1	Measures of Central Tendency	64
4A.2	Measures of Spread	66
4B	Characterizing Experimental Errors	68
4B.1	Errors Affecting Accuracy	68
4B.2	Errors Affecting Precision	73
4B.3	Error and Uncertainty	75
4C	Propagation of Uncertainty	76
4C.1	A Few Symbols	77

4C.2	Uncertainty When Adding or Subtracting	77
4C.3	Uncertainty When Multiplying or Dividing	78
4C.4	Uncertainty for Mixed Operations.	79
4C.5	Uncertainty for Other Mathematical Functions.	80
4C.6	Is Calculating Uncertainty Actually Useful?	81
4D	The Distribution of Measurements and Results	83
4D.1	Populations and Samples	84
4D.2	Probability Distributions for Populations	84
4D.3	Confidence Intervals for Populations.	90
4D.4	Probability Distributions for Samples	92
4D.5	Confidence Intervals for Samples.	96
4D.6	A Cautionary Statement	98
4E	Statistical Analysis of Data	98
4E.1	Significance Testing	99
4E.2	Constructing a Significance Test.	99
4E.3	One-Tailed and Two-Tailed Significance Tests	100
4E.4	Errors in Significance Testing.	102
4F	Statistical Methods for Normal Distributions.	102
4F.1	Comparing \bar{X} to μ	102
4F.2	Comparing s^2 to σ^2	105
4F.3	Comparing Two Sample Variances	106
4F.4	Comparing Two Sample Means	107
4F.5	Outliers	114
4G	Detection Limits	117
4H	Using Excel and R to Analyze Data.	120
4H.1	Excel	120
4H.2	R.	124
4I	Key Terms.	132
4J	Chapter Summary	132
4K	Problems	133
4L	Solutions to Practice Exercises	143

Standardizing Analytical Methods 153

5A	Analytical Standards.	154
5A.1	Primary and Secondary Standards	154
5A.2	Other Reagents	154
5A.3	Preparing Standard Solutions.	155
5B	Calibrating the Signal (S_{total})	156
5C	Determining the Sensitivity (k_A)	156
5C.1	Single-Point versus Multiple-Point Standardizations	157
5C.2	External Standards.	158
5C.3	Standard Additions	161
5C.4	Internal Standards	167

5D	Linear Regression and Calibration Curves	170
5D.1	Linear Regression of Straight Line Calibration Curves	172
5D.2	Unweighted Linear Regression with Errors in y	172
5D.3	Weighted Linear Regression with Errors in y	182
5D.4	Weighted Linear Regression with Errors in Both x and y	185
5D.5	Curvilinear and Multivariate Regression	185
5E	Blank Corrections	186
5F	Using Excel and R for a Regression Analysis	188
5F.1	Excel	188
5F.2	R	192
5G	Key Terms	197
5H	Chapter Summary	197
5I	Problems	198
5J	Solutions to Practice Exercises	202

Equilibrium Chemistry 209

6A	Reversible Reactions and Chemical Equilibria	210
6B	Thermodynamics and Equilibrium Chemistry	211
6C	Manipulating Equilibrium Constants	213
6D	Equilibrium Constants for Chemical Reactions	214
6D.1	Precipitation Reactions	214
6D.2	Acid–Base Reactions	215
6D.3	Complexation Reactions	220
6D.4	Oxidation–Reduction (Redox) Reactions	222
6E	Le Châtelier’s Principle	226
6F	Ladder Diagrams	228
6F.1	Ladder Diagrams for Acid–Base Equilibria	228
6F.2	Ladder Diagrams for Complexation Equilibria	232
6F.3	Ladder Diagram for Oxidation/Reduction Equilibria	234
6G	Solving Equilibrium Problems	235
6G.1	A Simple Problem—Solubility of $\text{Pb}(\text{IO}_3)_2$	236
6G.2	A More Complex Problem—The Common Ion Effect	237
6G.3	A Systematic Approach to Solving Equilibrium Problems	239
6G.4	pH of a Monoprotic Weak Acid	241
6G.5	pH of a Polyprotic Acid or Base	243
6G.6	Effect of Complexation on Solubility	246
6H	Buffer Solutions	249
6H.1	Systematic Solution to Buffer Problems	249
6H.2	Representing Buffer Solutions with Ladder Diagrams	252
6H.3	Preparing Buffers	253
6I	Activity Effects	254
6J	Using Excel and R to Solve Equilibrium Problems	260

6J.1	Excel	260
6J.2	R	263
6K	Some Final Thoughts on Equilibrium Calculations	266
6L	Key Terms	267
6M	Chapter Summary	268
6N	Problems	269
6O	Solutions to Practice Exercises	273

Collecting and Preparing Samples 285

7A	The Importance of Sampling	286
7B	Designing A Sampling Plan	289
7B.1	Where to Sample the Target Population	289
7B.2	What Type of Sample to Collect	293
7B.3	How Much Sample to Collect	295
7B.4	How Many Samples to Collect	298
7B.5	Minimizing the Overall Variance	299
7C	Implementing the Sampling Plan	301
7C.1	Solutions	301
7C.2	Gases	303
7C.3	Solids	305
7D	Separating the Analyte from Interferents	311
7E	General Theory of Separation Efficiency	312
7F	Classifying Separation Techniques	315
7F.1	Separations Based on Size	316
7F.2	Separations Based on Mass or Density	317
7F.3	Separations Based on Complexation Reactions (Masking)	319
7F.4	Separations Based on a Change of State	321
7F.5	Separations Based on a Partitioning Between Phases	324
7G	Liquid–Liquid Extractions	329
7G.1	Partition Coefficients and Distribution Ratios	330
7G.2	Liquid–Liquid Extraction With No Secondary Reactions	331
7G.3	Liquid–Liquid Extractions Involving Acid–Base Equilibria	334
7G.4	Liquid–Liquid Extraction of a Metal–Ligand Complex	337
7H	Separation Versus Preconcentration	339
7I	Key Terms	339
7K	Problems	340

Gravimetric Methods 355

8A	Overview of Gravimetric Methods	356
8A.1	Using Mass as an Analytical Signal	356
8A.2	Types of Gravimetric Methods	357
8A.3	Conservation of Mass	357

8A.4	Why Gravimetry is Important	358
8B	Precipitation Gravimetry	358
8B.1	Theory and Practice	358
8B.2	Quantitative Applications	372
8B.2	Qualitative Applications.	379
8B.3	Evaluating Precipitation Gravimetry.	379
8C	Volatilization Gravimetry	381
8C.1	Theory and Practice	381
	Thermogravimetry.	381
8C.2	Quantitative Applications	386
8C.3	Evaluating Volatilization Gravimetry	390
8D	Particulate Gravimetry	390
8D.1	Theory and Practice.	390
8D.2	Quantitative Applications	392
8D.3	Evaluating Particulate Gravimetry	394
8E	Key Terms	394
8F	Chapter Summary.	395
8G	Problems.	395
8H	Solutions to Practice Exercises.	405

Titrimetric Methods 411

9A	Overview of Titrimetry	412
9A.1	Equivalence Points and End points	412
9A.2	Volume as a Signal	412
9A.3	Titration Curves.	414
9A.4	The Buret.	416
9B	Acid–Base Titrations	417
9B.1	Acid–Base Titration Curves	418
9B.2	Selecting and Evaluating the End point	426
9B.3	Titrations in Nonaqueous Solvents.	434
9B.5	Qualitative Applications.	450
9B.6	Characterization Applications	450
9B.7	Evaluation of Acid–Base Titrimetry	454
9C	Complexation Titrations	459
9C.1	Chemistry and Properties of EDTA.	459
9C.2	Complexometric EDTA Titration Curves	462
9C.3	Selecting and Evaluating the End point	468
9C.4	Quantitative Applications	473
9C.5	Evaluation of Complexation Titrimetry	478
9D	Redox Titrations	478
9D.1	Redox Titration Curves	479
9D.2	Selecting and Evaluating the End point	485
9D.3	Quantitative Applications	491

9D.4	Evaluation of Redox Titrimetry	502
9E	Precipitation Titrations	502
9E.1	Titration Curves	503
9E.2	Selecting and Evaluating the End point	505
9E.3	Quantitative Applications	508
9E.4	Evaluation of Precipitation Titrimetry	510
9F	Key Terms	511
9H	Problems	512
9I	Solutions to Practice Exercises	528

Spectroscopic Methods 543

10A	Overview of Spectroscopy	544
10A.1	What is Electromagnetic Radiation	544
10A.2	Photons as a Signal Source	547
10A.3	Basic Components of Spectroscopic Instruments	550
	Signal Processors	556
10B	Spectroscopy Based on Absorption	556
10B.1	Absorbance Spectra	556
10B.2	Transmittance and Absorbance	561
10B.3	Absorbance and Concentration: Beer's Law	563
10B.4	Beer's Law and Multicomponent Samples	564
10B.5	Limitations to Beer's Law	564
10C	UV/Vis and IR Spectroscopy	567
10C.1	Instrumentation	567
10C.2	Quantitative Applications	574
10C.3	Qualitative Applications	586
10C.4	Characterization Applications	587
10C.5	Evaluation of UV/Vis and IR Spectroscopy	595
10D	Atomic Absorption Spectroscopy	599
10D.1	Instrumentation	599
10D.2	Quantitative Applications	603
10D.3	- Evaluation of Atomic Absorption Spectroscopy	610
10E	Emission Spectroscopy	612
10F	Photoluminescence Spectroscopy	613
10F.1	Fluorescence and Phosphorescence Spectra	613
10F.2	Instrumentation	618
10F.3	Quantitative Applications	620
10F.4	Evaluation of Photoluminescence Spectroscopy	624
10G	Atomic Emission Spectroscopy	626
10G.1	Atomic Emission Spectra	626
10G.2	Equipment	627
10G.3	Quantitative Applications	628
10G.4	Evaluation of Atomic Emission Spectroscopy	634

10H	Spectroscopy Based on Scattering	636
10H.1	Origin of Scattering.	636
10H.2	Turbidimetry and Nephelometry.	636
10I	Key Terms.	642
10J	Chapter Summary	643
10K	Problems	644
10L	Solutions to Practice Exercises	662

Electrochemical Methods 667

11A	Overview of Electrochemistry	668
11A.2	Five Important Concepts	668
11A.2	Controlling and Measuring Current and Potential	670
11A.3	Interfacial Electrochemical Techniques.	673
11B	Potentiometric Methods	674
11B.1	Potentiometric Measurements	675
11B.2	Reference Electrodes	681
11B.3	Metallic Indicator Electrodes	685
11B.4	Membrane Electrodes.	687
11B.5	Quantitative Applications	700
11B.6	Evaluation.	710
11C	Coulometric Methods	713
11C.1	Controlled-Potential Coulometry	713
11C.2	Controlled-Current Coulometry	717
11C.3	Quantitative Applications	720
11C.4	Characterization Applications	726
11C.5	- Evaluation	727
11D	Voltammetric Methods	729
11D.1	Voltammetric Measurements	729
11D.2	Current in Voltammetry	732
11D.3	Shape of Voltammograms	736
11D.4	Quantitative and Qualitative Aspects of Voltammetry	737
11D.5	Voltammetric Techniques	739
11D.6	Quantitative Applications	747
11D.7	Characterization Applications	755
11D.8	Evaluation.	760
11E	Key Terms	761
11F	Chapter Summary	762
11G	Problems	763
11H	Solutions to Practice Exercises.	777

Chromatographic and Electrophoretic Methods 783

12A	Overview of Analytical Separations	784
12A.1	Two Limitations of Liquid-Liquid Extractions.	784

12A.2	A Better Way to Separate Mixtures	784
12A.3	Chromatographic Separations	787
12A.4	Electrophoretic Separations	788
12B	General Theory of Column Chromatography	789
12B.1	Chromatographic Resolution	791
12B.2	Solute Retention Factor	792
12B.3	Selectivity.	795
12B.4	Column Efficiency	795
12B.5	Peak Capacity.	797
12B.6	Asymmetric Peaks	798
12C	Optimizing Chromatographic Separations.	799
12C.1	Using the Retention factor to Optimize Resolution	800
12C.2	Using Selectivity to Optimize Resolution.	801
12C.3	Using Column Efficiency to Optimize Resolution	803
12D	Gas Chromatography	807
12D.1	Mobile Phase.	808
12D.2	Chromatographic Columns.	808
12D.3	Sample Introduction	811
12D.4	Temperature Control.	815
12D.5	Detectors for Gas Chromatography.	815
12D.6	Quantitative Applications	818
12D.7	Qualitative Applications	822
12D.8	Evaluation	826
12E	High-Performance Liquid Chromatography	827
12E.1	HPLC Columns.	827
12E.2	Mobile Phases	830
12E.3	HPLC Plumbing	834
12E.4	Detectors for HPLC.	836
12E.5	Quantitative Applications.	840
12E.6	Evaluation	843
12F	Other Forms of Liquid Chromatography	843
12F.1	Liquid-Solid Adsorption Chromatography	844
12F.2	Ion-Exchange Chromatography	844
12F.3	Size-Exclusion Chromatography	848
12F.4	Supercritical Fluid Chromatography	849
12G	Electrophoresis	851
12G.1	Theory of Capillary Electrophoresis.	852
12G.2	Instrumentation	857
12G.3	Capillary Electrophoresis Methods	861
12G.4	Evaluation	866
12H	Key Terms.	867
12I	Summary	868
12J	Problems.	869

12K	Solutions to Practice Exercises	881
Kinetic Methods		885
13A	Kinetic Methods Versus Equilibrium Methods	886
13B	Chemical Kinetics	887
13B.1	Theory and Practice	887
13B.2	Classifying Chemical Kinetic Methods.	890
13B.3	Making Kinetic Measurements.	900
13B.4	Quantitative Applications	902
13B.5	Characterization Applications	905
13B.6	Evaluation of Chemical Kinetic Methods.	908
	Accuracy	909
13C	Radiochemistry	912
13C.1	Theory and Practice	913
13C.2	Instrumentation.	913
13C.3	Quantitative Applications	914
13C.4	Characterization Applications	918
13C.5	Evaluation	919
13D	Flow Injection Analysis	920
13D.1	Theory and Practice.	920
13D.2	Instrumentation	924
13D.3	Quantitative Applications	928
13D.4	Evaluation.	932
13E	Key Terms	933
13F	Summary	933
13G	Problems.	934
13H	Solutions to Practice Exercises.	943
Developing a Standard Method		945
14A	Optimizing the Experimental Procedure	946
14A.1	Response Surfaces	946
14A.2	Searching Algorithms for Response Surfaces.	947
14A.3	Mathematical Models of Response Surfaces	954
14B	Verifying the Method.	964
14B.1	Single Operator Characteristics	964
14B.2	Blind Analysis of Standard Samples	965
14B.3	Ruggedness Testing	965
14B.4	Equivalency Testing	968
14C	Validating the Method as a Standard Method	969
14C.1	Two-Sample Collaborative Testing.	969
14C.2	Collaborative Testing and Analysis of Variance.	974
14C.3	What is a Reasonable Result for a Collaborative Study?	980
14D	Using Excel and R for an Analysis of Variance.	981

14D.1	Excel	981
14D.2	R	982
14E	Key Terms	984
14G	Problems	985
14H	Solutions to Practice Exercises	994

Quality Assurance 995

15A	The Analytical Perspective—Revisited	996
15B	Quality Control	997
15C	Quality Assessment	999
15C.1	Internal Methods of Quality Assessment	999
15C.2	External Methods of Quality Assessment	1004
15D	Evaluating Quality Assurance Data	1004
15D.1	Prescriptive Approach	1004
15D.2	Performance-Based Approach	1007
15E	Key Terms	1014
15G	Problems	1015
15H	Solutions to Practice Exercises	1018

Additional Resources 1021

Chapter 1	1022
Chapter 2	1024
Chapter 3	1025
Chapter 4	1026
Chapter 5	1030
Chapter 6	1034
Chapter 7	1037
Chapter 8	1041
Chapter 9	1042
Chapter 10	1045
Chapter 11	1053
Chapter 12	1058
Chapter 13	1065
Chapter 14	1068
Chapter 15	1070

Appendix 1071

Appendix 1: Normality	1072
Appendix 2: Propagation of Uncertainty	1073
Standardizing a Solution of NaOH	1073

Identifying and Analyzing Sources of Uncertainty	1073
Estimating the Standard Deviation for Measurements	1075
Completing the Propagation of Uncertainty	1076
Evaluating the Sources of Uncertainty	1078
Appendix 3: Single-Sided Normal Distribution	1079
Appendix 4: Critical Values for t -Test	1081
Appendix 5: Critical Values for the F-Test	1082
Appendix 6: Critical Values for Dixon's Q -Test	1084
Appendix 7: Critical Values for Grubb's Test	1085
Appendix 8: Recommended Primary Standards	1086
Appendix 9: Correcting Mass for the Buoyancy of Air	1088
Appendix 10: Solubility Products	1090
Appendix 11: Acid Dissociation Constants	1094
Appendix 12: Formation Constants	1102
Appendix 13: Standard Reduction Potentials	1107
Appendix 14: Random Number Table	1118
Appendix 15: Polarographic Half-Wave Potentials	1119
Appendix 16: Countercurrent Separations	1120
Appendix 17: Review of Chemical Kinetics	1127
A17.1 Chemical Reaction Rates	1127
A17.2 The Rate Law	1127
A17.3 Kinetic Analysis of Selected Reactions	1128
Copyright Information for Reused Figures and Illustrations	1133

Preface

Preface

Overview

- A Organization
- B Role of Equilibrium Chemistry
- C Computational Software
- D How to Use The Electronic Textbook's Features
- E Acknowledgments
- F Updates and Future Editions
- G How To Contact the Author

As currently taught in the United States, introductory courses in analytical chemistry emphasize quantitative (and sometimes qualitative) methods of analysis along with a heavy dose of equilibrium chemistry. Analytical chemistry, however, is much more than a collection of analytical methods and an understanding of equilibrium chemistry; it is an approach to solving chemical problems. Although equilibrium chemistry and analytical methods are important, their coverage should not come at the expense of other equally important topics. The introductory course in analytical chemistry is the ideal place in the undergraduate chemistry curriculum for exploring topics such as experimental design, sampling, calibration strategies, standardization, optimization, statistics, and the validation of experimental results. Analytical methods come and go, but best practices for designing and validating analytical methods are universal. Because chemistry is an experimental science it is essential that all chemistry students understand the importance of making good measurements.

My goal in preparing this textbook is to find a more appropriate balance between theory and practice, between “classical” and “modern” analytical methods, between analyzing samples and collecting samples and preparing them for analysis, and between analytical methods and data analysis. There is more material here than anyone can cover in one semester; it is my hope that the diversity of topics will meet the needs of different instructors, while, perhaps, suggesting some new topics to cover.

A Organization

This textbook is organized into four parts. Chapters 1–3 serve as a general introduction, providing: an overview of analytical chemistry (Chapter 1); a review of the basic equipment and mathematical tools of analytical chemistry, including significant figures, units, and stoichiometry (Chapter 2); and an introduction to the terminology of analytical chemistry (Chapter 3). Familiarity with this material is assumed throughout the remainder of the textbook.

Chapters 4–7 cover a number of topics that are important in understanding how analytical methods work. Later chapters are mostly independent of these chapters, allowing an instructor to choose those topics that support his or her goals. Chapter 4 provides an introduction to the statistical analysis of data. Methods for calibrating equipment and standardizing methods are covered in Chapter 5, along with a discussion of linear regression. Chapter 6 provides an introduction to equilibrium chemistry, stressing both the rigorous solution to equilibrium problems and the use of semi-quantitative approaches, such as ladder diagrams. The importance of collecting the right sample, and methods for separating analytes and interferents are the subjects of Chapter 7.

Chapters 8–13 cover the major areas of analysis, including gravimetry (Chapter 8), titrimetry (Chapter 9), spectroscopy (Chapter 10), electrochemistry (Chapter 11), chromatography and electrophoresis (Chapter 12), and kinetic methods (Chapter 13). Related techniques, such as acid–base titrimetry and redox titrimetry, are intentionally gathered together in single chapters. Combining related techniques in this way encourages students to see the similarity between methods, rather than focusing on their differences. The first technique in each chapter is generally that which is most commonly covered in an introductory course.

Finally, the textbook concludes with two chapters discussing the design and maintenance of analytical methods, two topics of importance to all experimental chemists. Chapter 14 considers the development of an analytical method, including its optimization, its verification, and its validation. Quality control and quality assessment are discussed in Chapter 15.

B Role of Equilibrium Chemistry

Equilibrium chemistry often receives a significant emphasis in the introductory analytical chemistry course. Although it is an important topic, an overemphasis on the computational aspects of equilibrium chemistry may lead students to confuse analytical chemistry with equilibrium chemistry. Solving equilibrium problems is important—it is equally important, however, for students to recognize when such calculations are impractical, or to recognize when a simpler, more intuitive approach is all they need to answer a question. For example, in discussing the gravimetric analysis of Ag^+ by precipitating AgCl , there is little point in calculating the equilib-

rium solubility of AgCl because the equilibrium concentration of Cl^- is rarely known. It is important, however, for students to understand that a large excess of Cl^- increases the solubility of AgCl due to the formation of soluble silver–chloro complexes. To balance the presentation of a rigorous approach to solving equilibrium problems, this textbook also introduces ladder diagrams as a means for rapidly evaluating the effect of solution conditions on an analysis. Students are encouraged to use the approach best suited to the problem at hand.

C Computational Software

Many of the topics in this textbook benefit from the availability of appropriate computational software. There are many software packages available to instructors and students, including spreadsheets (e.g. Excel), numerical computing environments (e.g. Mathematica, Mathcad, Matlab, R), statistical packages (e.g. SPSS, Minitab), and data analysis/graphing packages (e.g. Origin). Because of my familiarity with Excel and R, examples of their use in solving problems are incorporated into this textbook. Instructors interested in incorporating other software packages into future editions of this textbook are encouraged to contact me at harvey@depauw.edu.

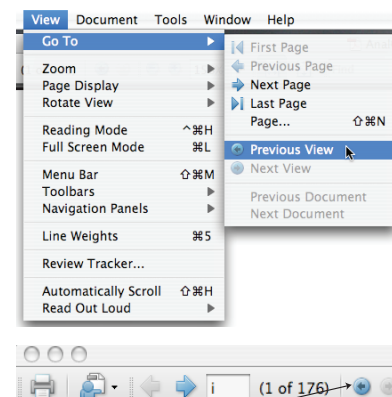
D How to Use The Electronic Textbook's Features

As with any format, an electronic textbook has advantages and disadvantages. Perhaps the biggest disadvantage to an electronic textbook is that you cannot hold it in your hands (and I, for one, like the feel of book in my hands when reading) and leaf through it. More specifically, you cannot mark your place with a finger, flip back several pages to look at a table or figure, and then return to your reading when you are done. To overcome this limitation, an electronic textbook can make extensive use of hyperlinks.

Whenever the text refers to an object that is not on the current page—a figure, a table, an equation, an appendix, a worked example, a practice exercise—the text is displayed in [blue and is underlined](#). Clicking on the hyperlink transports you to the relevant object. There are two methods for returning to your original location within the textbook. When there is no ambiguity about where to return, such as when reviewing an answer to a practice exercise, a second [text hyperlink](#) is included.

Most objects have links from multiple places within the text, which means a single return hyperlink is not possible. To return to your original place select **View: Go To: Previous View** from the menu bar. If you do not like to use pull down menus, you can configure the toolbar to include buttons for “Previous View” and for “Next View.” To do this, click on **View: Toolbars: More Tools...**, scroll down to the category for **Page Navigation Tools** and check the boxes for **Previous View** and for **Next View**. Your toolbar now includes buttons that you can use to return to your original

Although you can use any PDF reader to read this electronic textbook, the use of Adobe's Acrobat Reader is strongly encouraged. Several features of this electronic textbook—notably the commenting tools and the inclusion of video—are available only when using Acrobat Reader 8.0 or later. If you do not have Acrobat Reader installed on your computer, you can obtain it from [Adobe's web site](#).



Click this button to return to your original position within the text

position within the text. These buttons will appear each time you open the electronic textbook.

There are several additional hyperlinks to help you navigate within the electronic textbook. The Table of Contents—both the brief form and the expanded form—provide hyperlinks to chapters, to main sections, and to subsections. The “Chapter Overview” on the first page of each chapter provides hyperlinks to the chapter’s main sections. The textbook’s title, which appears at the top of each even numbered page, is a hyperlink to the brief table of contents, and the chapter title, which appears at the top of most odd numbered pages, is a hyperlink to the chapter’s first page. The collection of key terms at the end of each chapter are hyperlinks to where the terms were first introduced, and the **KEY TERMS** in the text are hyperlinks that return you to the collection of key terms. Taken together, these hyperlinks provide for a easy navigation.

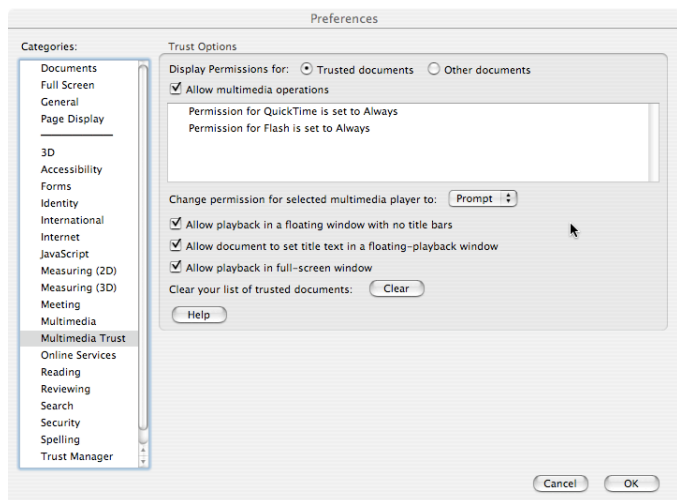
If you are using Adobe Reader, you can configure the program to remember where you were when you last closed the electronic textbook. Select **Adobe Reader: Preferences...** from the menu bar. Select the category “Documents” and check the box for “Restore last view settings when re-opening documents.” This is a global change that will affect all documents that you open using Adobe Reader.

There are two additional features of the electronic textbook that you may find useful. The first feature is the incorporation of QuickTime and Flash movies. Some movies are configured to run when the page is displayed, and other movies include start, pause, and stop buttons.

If you find that you cannot play a movie check your permissions. You can do this by selecting **Adobe Reader: Preferences...** from the menu bar. Choose the option for “Multimedia Trust” and check the option for “Allow multimedia operations.” If the permission for QuickTime or Flash is set to “Never” you can change it to “Prompt,” which will ask you to authorize the use of multimedia when you first try to play the movie, or change it to “Always” if you do not wish to prevent any files from playing movies.

A second useful feature is the availability of Adobe’s commenting tools, which allow you to highlight text, to create text boxes in which you can type notes, to add sticky notes, and to attach files. You can access the commenting tools by selecting **Tools: Commenting & Markup** from the menu bar.


If you do not like to use the menu bar, you can add tools to the toolbar by selecting **View: Toolbars: Commenting & Markup** from the menu bar. To control what appears on the toolbar, select **View: Toolbars: More Tools...** and check the boxes for the tools you find most useful. Details on some of the tools are shown here. You can alter any tool’s properties, such




as color, by right-clicking on the tool and selecting **Tool Default Properties...** from the pop-up menu.



These tools allow you to highlight, to underline, and to cross out text. Select the tool and then click and drag over the relevant text.



The text box tool allows you to provide short annotations to the textbook. Select the tool and then click and drag to create a text box. Click in the textbook and type your note.



The sticky note tool is useful when you have a longer annotation or when you want to make your annotation easier to see. Click in the textbook at the spot where you wish to add the sticky note. Type your entry and then click the close button to collapse the note into its icon. Hovering the cursor over the icon displays the note and clicking on the icon allows you to edit your note.



The pencil tool allows you to use your mouse to write notes on the text. The eraser tool allows you to erase notes.



The paperclip tool allows you to attach a file to the textbook. Select the tool and click in the textbook at the spot where you wish to attach the file. Use the browser to find the file and select OK. The resulting icon is a link to the file. You can open the file by clicking on the icon.

E Acknowledgments

This textbook began as a print version published in 2000 by McGraw-Hill, and the support of the then editorial staff (Jim Smith, Publisher for Chemistry; Kent Peterson, Sponsoring Editor for Chemistry; Shirley Oberbroeckling, Developmental Editor for Chemistry; and Jayne Klein, Project Manager) is gratefully acknowledged. The assistance of Thomas Timp (Sponsoring Editor for Chemistry) and Tamara Hodge (Senior Sponsoring Editor for Chemistry) in returning the copyright to me also is acknowledged. The following individuals kindly reviewed portions of the print version as it worked its way through the publication process:

David Ballantine, Northern Illinois University

John Bauer, Illinois State University

Ali Bazzi, University of Michigan–Dearborn

Steven D. Brown, University of Delaware
Wendy Clevenger, University of Tennessee–Chattanooga
Cathy Cobb, Augusta State University
Paul Flowers, University of North Carolina–Pembroke
George Foy, York College of Pennsylvania
Nancy Gordon, University of Southern Maine
Virginia M. Indivero, Swarthmore College
Michael Janusa, Nicholls State University
J. David Jenkins, Georgia Southern University
David Karpovich, Saginaw Valley State University
Gary Kinsel, University of Texas at Arlington
John McBride, Hofstra University
Richard S. Mitchell, Arkansas State University
George A. Pearce, Jr., LeMoyne College
Gary Rayson, New Mexico State University
David Redfield, NW Nazarene University
Vincent Remcho, West Virginia University
Jeanette K. Rice, Georgia Southern University
Martin W. Rowe, Texas A&M University
Alexander Scheeline, University of Illinois
James D. Stuart, University of Connecticut
Thomas J. Wenzel, Bates College
David Zax, Cornell University

I am particularly grateful for their detailed comments and suggestions. Much of what is good in the print edition is the result of their interest and ideas.

Without the support of DePauw University and its Faculty Development Committee, work on this project would not have been possible. This project began in 1992 with a summer course development grant, and received further summer support from the President's Discretionary Fund. Portions of the first draft were written during a sabbatical leave in fall 1993. The second draft was completed with the support of a Fisher Fellowship in fall 1995. Converting the print version into this electronic version was completed as part of a year-long sabbatical during the 2008/09 academic year.

The following faculty members and students graciously provided data for figures included in this textbook: Bridget Gourley and Jeanette Pope (DePauw University), Michelle Bushey, Zoe LaPier, Christopher Schardon, and Kyle Meinhardt (Trinity University), and Dwight Stoll, Jason Schultz, Joanna Berry, and Kaelene Lundstrom (Gustavus Adolphus College).

I am grateful to the following individuals for their encouragement and support, for their camaraderie at curricular development workshops, or for their testing of draft versions of this eText: Cynthia Larive (University of California–Riverside), Ted Kuwana (Kansas), Alex Scheeline (University of Illinois), Tom Spudich (United States Military Academy), Heather Bul-

len (University of Northern Kentucky), Richard Kelly (East Stroudsburg University), William Otto (University of Maine–Machias), Alanah Fitch (Loyola University), Thomas Wenzel (Bates College), Anna Cavinato (Eastern Oregon University), Steve Petrovic (University of Southern Oregon), Erin Gross (Creighton University), Mark Vitha (Drake University), Sara Choung (Point Loma Nazarene University), Michael Setter (John Carroll University), Corrine Lehr (California Polytechnic State University), and Bryan Hanson (DePauw University).

F Updates and Future Editions

As with any textbook in its first edition, *Analytical Chemistry 2.0* likely has some typographical errors. As they are reported, corrections to the textbook will be posted at the textbook's web site

http://web.me.com/dtharvey1213/Analytical_Chemistry_2.0/Welcome.html

From time-to-time a corrected version of the first edition will be published with the title *Analytical Chemistry 2.x*, where x is the update number.

Current plans are for a new edition of the textbook roughly every three years, with *Analytical Chemistry 3.0* being available in approximately 2013. If you are interested in contributing problems, case studies, data sets, photographs, figures or any other content, please contact the author at harvey@depauw.edu.

G How To Contact the Author

Working on this textbook continues to be an interesting challenge and a rewarding endeavour. One interesting aspect of electronic publishing is that a book is not static—corrections, new examples and problems, and new topics are easy to add, and new editions released as needed. I welcome your input and encourage you to contact me with suggestions for improving this electronic textbook. You can reach me by e-mail at harvey@depauw.edu.

Chapter 1

Introduction to Analytical Chemistry

Chapter Overview

- 1A What is Analytical Chemistry?
- 1B The Analytical Perspective
- 1C Common Analytical Problems
- 1D Key Terms
- 1E Chapter Summary
- 1F Problems
- 1G Solutions to Practice Exercises

Chemistry is the study of matter, including its composition and structure, its physical properties, and its reactivity. There are many ways to study chemistry, but, we traditionally divide it into five fields: organic chemistry, inorganic chemistry, biochemistry, physical chemistry, and analytical chemistry. Although this division is historical and, perhaps, arbitrary—as witnessed by current interest in interdisciplinary areas such as bioanalytical chemistry and organometallic chemistry—these five fields remain the simplest division spanning the discipline of chemistry.

Training in each of these fields provides a unique perspective to the study of chemistry. Undergraduate chemistry courses and textbooks are more than a collection of facts; they are a kind of apprenticeship. In keeping with this spirit, this chapter introduces the field of analytical chemistry and highlights the unique perspectives that analytical chemists bring to the study of chemistry.

1A What is Analytical Chemistry?

“Analytical chemistry is what analytical chemists do.”

This quote is attributed to C. N. Reilly (1925-1981) on receipt of the 1965 Fisher Award in Analytical Chemistry. Reilly, who was a professor of chemistry at the University of North Carolina at Chapel Hill, was one of the most influential analytical chemists of the last half of the twentieth century.

Let's begin with a deceptively simple question. What is analytical chemistry? Like all fields of chemistry, analytical chemistry is too broad and too active a discipline for us to define completely. In this chapter, therefore, we will try to say a little about what analytical chemistry is, as well as a little about what analytical chemistry is not.

Analytical chemistry is often described as the area of chemistry responsible for characterizing the composition of matter, both qualitatively (Is there any lead in this sample?) and quantitatively (How much lead is in this sample?). As we shall see, this description is misleading.

Most chemists routinely make qualitative and quantitative measurements. For this reason, some scientists suggest that analytical chemistry is not a separate branch of chemistry, but simply the application of chemical knowledge.¹ In fact, you probably have performed quantitative and qualitative analyses in other chemistry courses.

Defining analytical chemistry as the application of chemical knowledge ignores the unique perspective that analytical chemists bring to the study of chemistry. The craft of analytical chemistry is not in performing a routine analysis on a routine sample, which more appropriately is called chemical analysis, but in improving established analytical methods, in extending existing analytical methods to new types of samples, and in developing new analytical methods for measuring chemical phenomena.²

Here is one example of this distinction between analytical chemistry and chemical analysis. Mining engineers evaluate the value of an ore by comparing the cost of removing the ore with the value of its contents. To estimate its value they analyze a sample of the ore. The challenge of developing and validating an appropriate quantitative analytical method is the analytical chemist's responsibility. After its development, the routine, daily application of the analytical method is the job of the chemical analyst.

Another distinction between analytical chemistry and chemical analysis is that analytical chemists work to improve and extend established analytical methods. For example, several factors complicate the quantitative analysis of nickel in ores, including nickel's unequal distribution within the ore, the ore's complex matrix of silicates and oxides, and the presence of other metals that may interfere with the analysis. Figure 1.1 shows a schematic outline of one standard analytical method in use during the late nineteenth century.³ The need for many reactions, digestions, and filtrations makes this analytical method both time-consuming and difficult to perform accurately.

You might, for example, have determined the amount of acetic acid in vinegar using an acid-base titration, or used a qual scheme to identify which of several metal ions are in an aqueous sample.

Seven Stages of an Analytical Method

1. Conception of analytical method (birth).
2. Successful demonstration that the analytical method works.
3. Establishment of the analytical method's capabilities.
4. Widespread acceptance of the analytical method.
5. Continued development of the analytical method leads to significant improvements.
6. New cycle through steps 3–5.
7. Analytical method can no longer compete with newer analytical methods (death).

Steps 1–3 and 5 are the province of analytical chemistry; step 4 is the realm of chemical analysis.

The seven stages of an analytical method given here are modified from Fassel, V. A. *Fresenius' Z. Anal. Chem.* **1986**, 324, 511–518 and Hieftje, G. M. *J. Chem. Educ.* **2000**, 77, 577–583.

¹ Ravey, M. *Spectroscopy*, **1990**, 5(7), 11.

² de Haseth, J. *Spectroscopy*, **1990**, 5(7), 11.

³ Fresenius, C. R. *A System of Instruction in Quantitative Chemical Analysis*; John Wiley and Sons: New York, 1881.

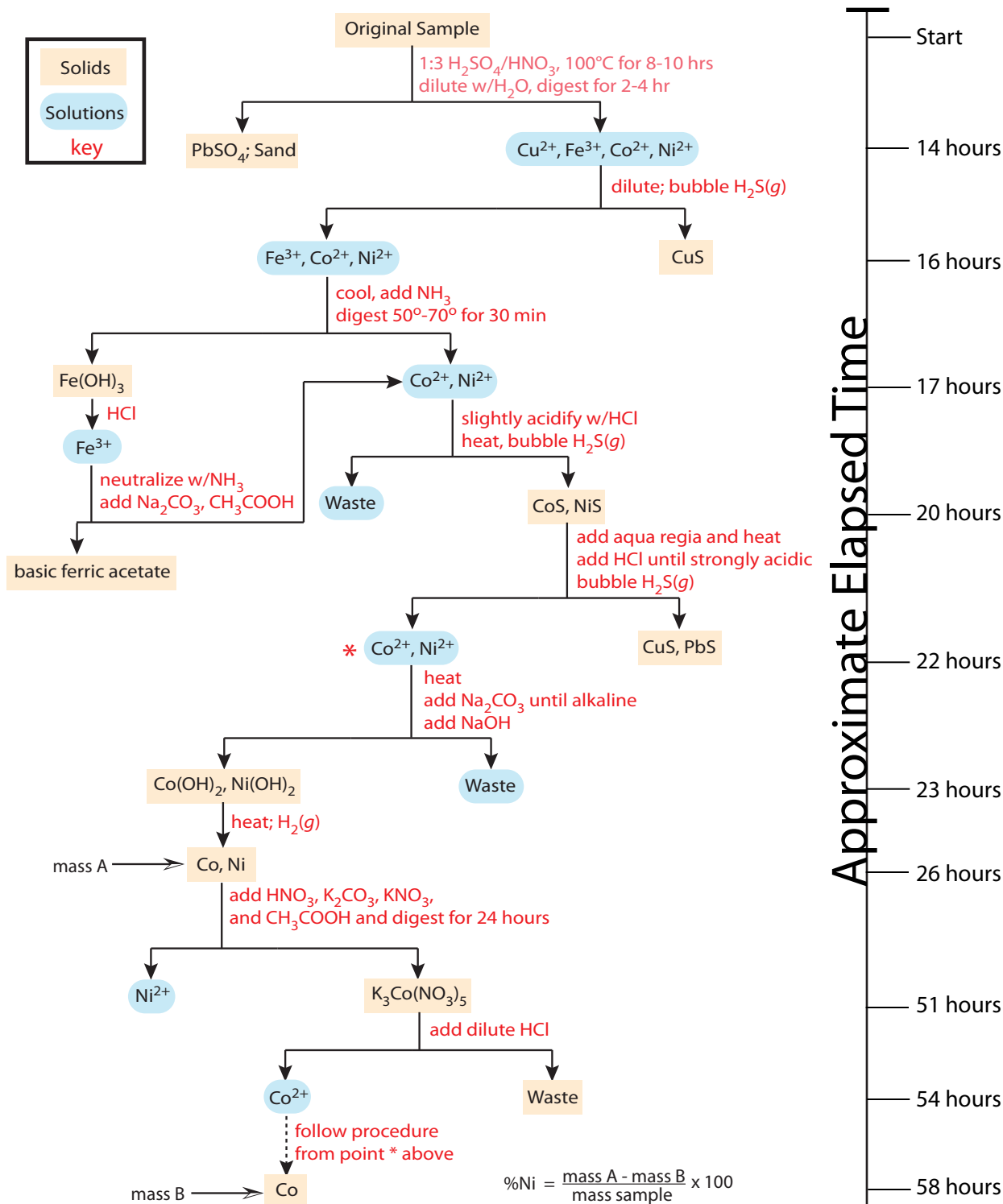
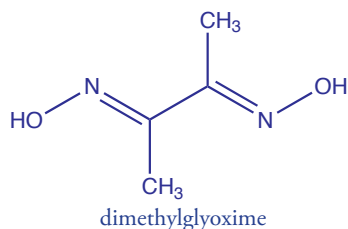


Figure 1.1 Fresenius' analytical scheme for the gravimetric analysis of Ni in ores. Note that the mass of nickel is not determined directly. Instead, Co and Ni are isolated and weighed (mass A), and then Co is isolated and weighed (mass B). The timeline shows that after digesting a sample, it takes approximately 44 hours to complete an analysis. This scheme is an example of a gravimetric analysis in which mass is the important measurement. See Chapter 8 for more information about gravimetric procedures.



The development, in 1905, of dimethylglyoxime (dmg), a reagent that selectively precipitates Ni^{2+} and Pd^{2+} , led to an improved analytical method for the quantitative analysis of nickel.⁴ The resulting analysis, as shown in Figure 1.2, requires fewer manipulations and less time after completing the sample's dissolution. By the 1970s, flame atomic absorption spectrometry replaced gravimetry as the standard method for analyzing nickel in ores,⁵ resulting in an even more rapid analysis. Today, the standard analytical method utilizes an inductively coupled plasma optical emission spectrometer.

A more appropriate description of analytical chemistry is “the science of inventing and applying the concepts, principles, and...strategies for measuring the characteristics of chemical systems.”⁶ Analytical chemists

4 Kolthoff, I. M.; Sandell, E. B. *Textbook of Quantitative Inorganic Analysis*, 3rd Ed., The Macmillan Company: New York, 1952.

5 Van Loon, J. C. *Analytical Atomic Absorption Spectroscopy*, Academic Press: New York, 1980.

6 Murray, R. W. *Anal. Chem.* **1991**, *63*, 271A.

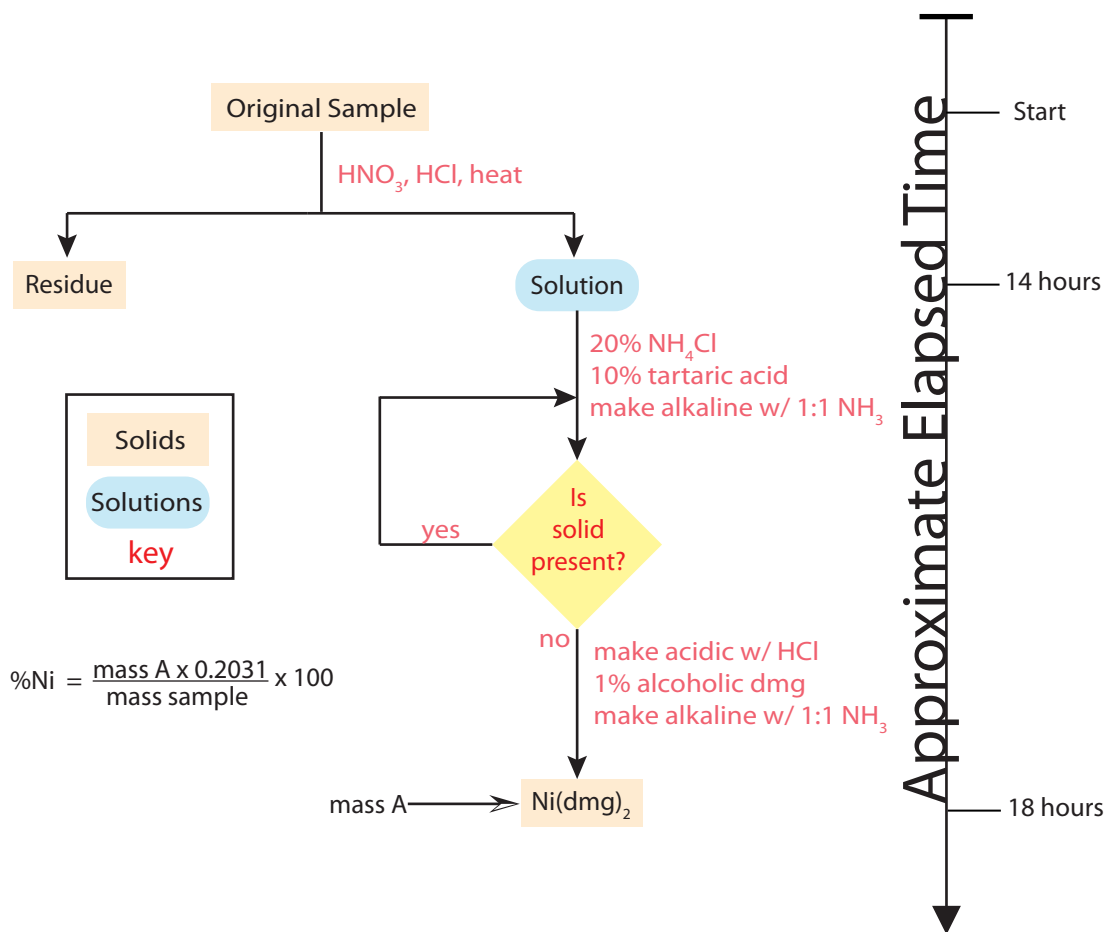


Figure 1.2 Gravimetric analysis for Ni in ores by precipitating $\text{Ni}(\text{dmg})_2$. The timeline shows that it takes approximately four hours to complete an analysis after digesting the sample, which is 10x shorter than for the method in Figure 1.1. The factor of 0.2301 in the equation for %Ni accounts for the difference in the formula weights for Ni and $\text{Ni}(\text{dmg})_2$; see Chapter 8 for further details.

typically operate at the extreme edges of analysis, extending and improving the ability of all chemists to make meaningful measurements on smaller samples, on more complex samples, on shorter time scales, and on species present at lower concentrations. Throughout its history, analytical chemistry has provided many of the tools and methods necessary for research in the other traditional areas of chemistry, as well as fostering multidisciplinary research in, to name a few, medicinal chemistry, clinical chemistry, toxicology, forensic chemistry, materials science, geochemistry, and environmental chemistry.

You will come across numerous examples of analytical methods in this textbook, most of which are routine examples of chemical analysis. It is important to remember, however, that nonroutine problems prompted analytical chemists to develop these methods.

The next time you are in the library, look through a recent issue of an analytically oriented journal, such as *Analytical Chemistry*. Focus on the titles and abstracts of the research articles. Although you may not recognize all the terms and analytical methods, you will begin to answer for yourself the question “What is analytical chemistry?”

A recent editorial in *Analytical Chemistry* entitled “Some Words about Categories of Manuscripts” nicely highlights what makes a research endeavour relevant to modern analytical chemistry. The full citation is Murray, R. W. *Anal. Chem.* **2008**, *80*, 4775.

1B The Analytical Perspective

Having noted that each field of chemistry brings a unique perspective to the study of chemistry, we now ask a second deceptively simple question. What is the analytical perspective? Many analytical chemists describe this perspective as an analytical approach to solving problems.⁷ Although there are probably as many descriptions of the analytical approach as there are analytical chemists, it is convenient for our purpose to define it as the five-step process shown in [Figure 1.3](#).

Three general features of this approach deserve our attention. First, in steps 1 and 5 analytical chemists may collaborate with individuals outside the realm of analytical chemistry. In fact, many problems on which analytical chemists work originate in other fields. Second, the analytical approach includes a feedback loop (steps 2, 3, and 4) in which the result of one step may require reevaluating the other steps. Finally, the solution to one problem often suggests a new problem.

Analytical chemistry begins with a problem, examples of which include evaluating the amount of dust and soil ingested by children as an indicator of environmental exposure to particulate based pollutants, resolving contradictory evidence regarding the toxicity of perfluoro polymers during combustion, and developing rapid and sensitive detectors for chemical and biological weapons. At this point the analytical approach may involve a collaboration between the analytical chemist and the individual or agency

These examples are taken from a series of articles, entitled the “Analytical Approach,” which was a regular feature of the journal *Analytical Chemistry*, a bimonthly publication of the American Chemical Society. The first issue of each month continues to publish a variety of engaging articles highlighting current trends in analytical chemistry.

⁷ For several different viewpoints see (a) Beilby, A. L. *J. Chem. Educ.* **1970**, *47*, 237-238; (b) Lucchesi, C. A. *Am. Lab.* **1980**, October, 112-119; (c) Atkinson, G. F. *J. Chem. Educ.* **1982**, *59*, 201-202; (d) Pardue, H. L.; Woo, J. *J. Chem. Educ.* **1984**, *61*, 409-412; (e) Guarnieri, M. *J. Chem. Educ.* **1988**, *65*, 201-203; (f) Strobil, H. A. *Am. Lab.* **1990**, October, 17-24.

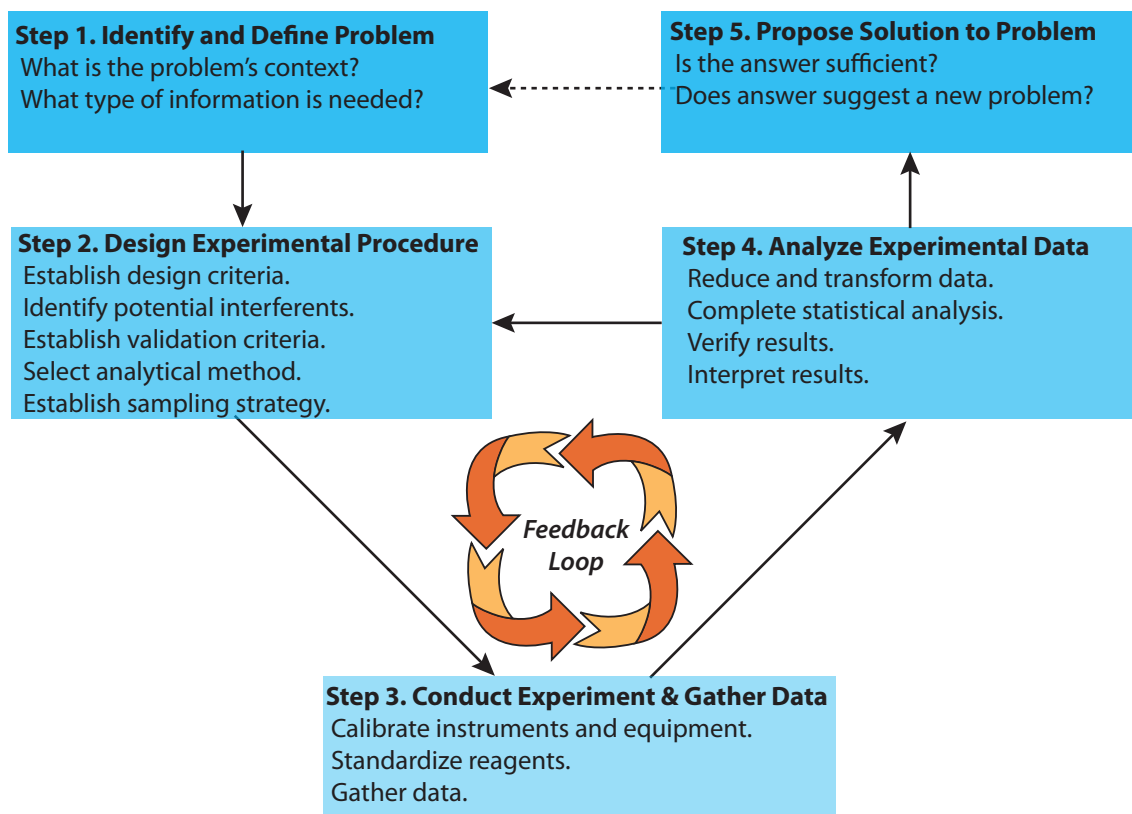


Figure 1.3 Flow diagram showing one view of the analytical approach to solving problems (modified after Atkinson.^{7c}

Chapter 3 provides an introduction to the language of analytical chemistry. You will find terms such as accuracy, precision, and sensitivity defined there.

See Chapter 7 for information about collecting, storing, and preparing samples.

See Chapter 14 for a discussion about validating analytical methods. Calibration and standardization methods, including a discussion of linear regression, are covered in Chapter 5.

working on the problem. Together they determine what information is needed. It also is important for the analytical chemist to understand how the problem relates to broader research goals or policy issues. The type of information needed and the problem's context are essential to designing an appropriate experimental procedure.

To design the experimental procedure the analytical chemist considers criteria such as the desired accuracy, precision, sensitivity, and detection limits; the urgency with which results are needed; the cost of a single analysis; the number of samples to be analyzed; and the amount of sample available for analysis. Finding an appropriate balance between these parameters is frequently complicated by their interdependence. For example, improving precision may require a larger amount of sample. Consideration is also given to collecting, storing, and preparing samples, and to whether chemical or physical interferences will affect the analysis. Finally a good experimental procedure may still yield useless information if there is no method for validating the results.

The most visible part of the analytical approach occurs in the laboratory. As part of the validation process, appropriate chemical and physical standards are used to calibrate any equipment and to standardize any reagents.

The data collected during the experiment are then analyzed. Frequently the data is reduced or transformed to a more readily analyzable form. A statistical treatment of the data is used to evaluate accuracy and precision,

and to validate the procedure. Results are compared to the original design criteria and the experimental design is reconsidered, additional trials are run, or a solution to the problem is proposed. When a solution is proposed, the results are subject to an external evaluation that may result in a new problem and the beginning of a new cycle.

As noted earlier some scientists question whether the analytical approach is unique to analytical chemistry.¹ Here, again, it helps to distinguish between a chemical analysis and analytical chemistry. For other analytically oriented scientists, such as a physical organic chemist or a public health officer, the primary emphasis is how the analysis supports larger research goals involving fundamental studies of chemical or physical processes, or improving access to medical care. The essence of analytical chemistry, however, is in developing new tools for solving problems, and in defining the type and quality of information available to other scientists.

[Chapter 4](#) introduces the statistical analysis of data.

Practice Exercise 1.1

As an exercise, let's adapt our model of the analytical approach to the development of a simple, inexpensive, portable device for completing bioassays in the field. Before continuing, locate and read the article

“Simple Telemedicine for Developing Regions: Camera Phones and Paper-Based Microfluidic Devices for Real-Time, Off-Site Diagnosis”

by Andres W. Martinez, Scott T. Phillips, Emanuel Carriho, Samuel W. Thomas III, Hayat Sindi, and George M. Whitesides. You will find it on pages 3699-3707 in Volume 80 of the journal *Analytical Chemistry*, which was published in 2008. As you read the article, pay particular attention to how it emulates the analytical approach. It might be helpful to consider the following questions:

- What is the analytical problem and why is it important?
- What criteria did the authors consider in designing their experiments?
- What is the basic experimental procedure?
- What interferences were considered and how did they overcome them?
- How did the authors calibrate the assay?
- How did the authors validate their experimental method?
- Is there evidence of repeating steps 2, 3, and 4?
- Was there a successful conclusion to the problem?

Don't let the technical details in the paper overwhelm you. If you skim over these you will find that the paper is well-written and accessible.

Click [here](#) to review your answers to these questions.

This exercise provides you with an opportunity to think about the analytical approach in the context of a real analytical problem. Boxed exercises such as this provide you with a variety of challenges ranging from simple review problems to more open-ended exercises. You will find answers to exercises at the end of each chapter.

Use this [link](#) to access the article's abstract from the journal's web site. If your institution has an on-line subscription you also will be able to download a PDF version of the article.

1C Common Analytical Problems

Many problems in analytical chemistry begin with the need to identify what is present in a sample. This is the scope of a **QUALITATIVE ANALYSIS**, examples of which include identifying the products of a chemical reaction, screening an athlete's urine for the presence of a performance-enhancing drug, or determining the spatial distribution of Pb on the surface of an airborne particulate. Much of the early work in analytical chemistry involved the development of simple chemical tests to identify inorganic ions and organic functional groups. The classical laboratory courses in inorganic and organic qualitative analysis, still taught at some schools, are based on this work.⁸ Currently, most qualitative analyses use methods such as infrared (IR) spectroscopy and nuclear magnetic resonance (NMR) spectroscopy. These qualitative applications are covered adequately elsewhere in the undergraduate curriculum and, so, will receive no further consideration in this text.

Perhaps the most common analytical problem is a **QUANTITATIVE ANALYSIS**. Examples of typical quantitative analyses include the elemental analysis of a newly synthesized compound, measuring the concentration of glucose in blood, or determining the difference between the bulk and surface concentrations of Cr in steel. Much of the analytical work in clinical, pharmaceutical, environmental, and industrial labs involves developing new quantitative methods for trace amounts of chemical species in complex samples. Most of the examples in this text are quantitative analyses.

Another important area of analytical chemistry, which receives some attention in this text, is the development of new methods for characterizing physical and chemical properties. Determinations of chemical structure, equilibrium constants, particle size, and surface structure are examples of a **CHARACTERIZATION ANALYSIS**.

The purpose of a qualitative, quantitative, or characterization analysis is to solve a problem associated with a particular sample. The purpose of a **FUNDAMENTAL ANALYSIS**, on the other hand, is to improve our understanding of the theory behind an analytical method. Extending and improving the theory on which an analytical method is based, studying an analytical method's limitations, and designing and modifying existing analytical method are examples of fundamental studies in analytical chemistry.

1D Key Terms

characterization analysis fundamental analysis qualitative analysis
quantitative analysis

⁸ See, for example, the following laboratory texts: (a) Sorum, C. H.; Lagowski, J. J. *Introduction to Semimicro Qualitative Analysis*, 5th Ed.; Prentice-Hall: Englewood, NJ, 1977; (b) Shriner, R. L.; Fuson, R. C.; Curtin, D. Y. *The Systematic Identification of Organic Compounds*, 5th Ed.; John Wiley and Sons: New York, 1964.

Current research in the areas of quantitative analysis, qualitative analysis, and characterization analysis are reviewed biennially (odd-numbered years) in *Analytical Chemistry's* series of "Application Reviews." The 2007 issue, for example, reviews forensic science, water, pharmaceuticals, geochemistry, and proteomics, to name a few.

Current research in the area of fundamental analysis is reviewed biennially (even-numbered years) in *Analytical Chemistry's* series of "Fundamental Reviews." The 2008 issue, for example, reviews fiber-optic chemical sensors and biosensors, thermal analysis, chiral separations, chemometrics, and solid state NMR, to name a few.

As you review this chapter, try to define a key term in your own words. Check your answer by clicking on the key term, which will take you to the page where it was first introduced. Clicking on the **KEY TERM** there, will bring you back to this page so that you can continue with another key term.

1E Chapter Summary

Analytical chemists work to improve the ability of all chemists to make meaningful measurements. Chemists working in the other traditional areas of chemistry, as well as in interdisciplinary fields such as medicinal chemistry, clinical chemistry, and environmental chemistry, need better tools for analyzing materials. The need to work with smaller samples, with more complex materials, with processes occurring on shorter time scales, and with species present at lower concentrations challenges analytical chemists to improve existing analytical methods and to develop new ones.

Typical problems on which analytical chemists work include qualitative analyses (What is present?), quantitative analyses (How much is present?), characterization analyses (What are the sample's chemical and physical properties?), and fundamental analyses (How does this method work and how can it be improved?).

1F Problems

1. For each of the following problems indicate whether its solution requires a qualitative analysis, a quantitative analysis, a characterization analysis, or a fundamental analysis. More than one type of analysis may be appropriate for some problems.
 - (a) A hazardous-waste disposal site is believed to be leaking contaminants into the local groundwater.
 - (b) An art museum is concerned that a recent acquisition is a forgery.
 - (c) Airport security needs a more reliable method for detecting the presence of explosive materials in luggage.
 - (d) The structure of a newly discovered virus needs to be determined.
 - (e) A new visual indicator is needed for an acid–base titration.
 - (f) A new law requires a method for evaluating whether automobiles are emitting too much carbon monoxide.
2. Read the article “When Machine Tastes Coffee: Instrumental Approach to Predict the Sensory Profile of Espresso Coffee,” by several scientists working at the Nestlé Research Center in Lausanne, Switzerland. You will find the article on pages 1574-1581 in Volume 80 of *Analytical Chemistry*, published in 2008. Write an essay summarizing the nature of the problem and how it was solved. As a guide, refer to Figure 1.3 for a model of the analytical approach to solving problems.

Use this [link](#) to access the article's abstract from the journal's web site. If your institution has an on-line subscription you also will be able to download a PDF version of the article.

1G Solutions to Practice Exercises

Literature Exercise 1.1

What is the analytical problem and why is it important?

A medical diagnosis often relies on the results of a clinical analysis. When visiting a doctor, he or she may ask the nurse to draw a sample of your blood and send it to the lab for analysis. In some cases the result of the analysis is available in 10-15 minutes. What is possible in a developed country, such as the United States, may not be feasible in a country with fewer resources because lab equipment is expensive, and because there may be a shortage of trained personnel to run the tests and to interpret the results. The problem addressed in this paper, therefore, is the development of a reliable device for rapidly and quantitatively performing clinical assays in less than ideal circumstances.

What criteria did the authors consider in designing their experiments?

In considering solutions to this problem, the authors identify seven important criteria for the device: it must be inexpensive; it must operate without the need for much electricity, so that it can be taken to remote sites; it must be adaptable to many types of assays; its operation must not require a highly skilled technician; it must be quantitative; it must be accurate; and it must produce results rapidly.

What is the basic experimental procedure?

The authors describe the development of a paper-based microfluidic device that allows anyone to run an analysis by dipping the device into a sample (synthetic urine, in this case). The sample moves by capillary action into test zones containing reagents that react with specific species (glucose and protein, for this prototype device). The reagents react to produce a color whose intensity is proportional to the species' concentration. Digital pictures of the microfluidic device are taken with a cell phone camera and sent to an off-site physician who analyzes the picture using image editing software and interprets the assay's result.

What interferences were considered and how did they overcome them?

In developing this analytical method the authors considered several chemical or physical interferences. One concern was the possibility of non-specific interactions between the paper and the glucose or protein, which could lead to non-uniform image in the test zones. A careful analysis of the distribution of glucose and protein in the test zones showed that this was not a problem. A second concern was the possible presence in samples of particulate materials that might interfere with the analyses. Paper is a natural filter for particulate materials and the authors found that samples containing dust, sawdust, and pollen did not interfere with the analysis for glucose. Pollen, however, is an interferent for the protein analysis, presumably because it, too, contains protein.

This is an example of a colorimetric method of analysis. Colorimetric methods are covered in [Chapter 10](#).

How did the author's calibrate the assay?

To calibrate the device the authors analyzed a series of standard solutions containing known concentrations of glucose and protein. Because an image's intensity depends upon the available light, a standard sample is run with the test samples, which allows a single calibration curve to be used for samples collected under different lighting conditions.

How did the author's validate their experimental method?

The test device contains two test zones for each analyte, allowing for duplicate analyses and providing one level of experimental validation. To further validate the device, the authors completed 12 analyses at each of three known concentrations of glucose and protein, obtaining acceptable accuracy and precision in all cases.

Is there any evidence of repeating steps 2, 3, and 4?

Developing this analytical method required several repetitive paths through steps 2, 3, and 4 of the analytical approach. Examples of this feedback loop include optimizing the shape of the test zones, and evaluating the importance of sample size.

In summary, the authors report the successful development of an inexpensive, portable, and easy-to-use device for running clinical samples in developing countries.

Click [here](#) to return to the chapter.

Chapter 2

Basic Tools of Analytical Chemistry

Chapter Overview

- 2A Measurements in Analytical Chemistry
- 2B Concentration
- 2C Stoichiometric Calculations
- 2D Basic Equipment
- 2E Preparing Solutions
- 2F Spreadsheets and Computational Software
- 2G The Laboratory Notebook
- 2H Key Terms
- 2I Chapter Summary
- 2J Problems
- 2K Solutions to Practice Exercises

In the chapters that follow we will explore many aspects of analytical chemistry. In the process we will consider important questions such as “How do we treat experimental data?”, “How do we ensure that our results are accurate?”, “How do we obtain a representative sample?”, and “How do we select an appropriate analytical technique?” Before we look more closely at these and other questions, we will first review some basic tools of importance to analytical chemists.

2A Measurements in Analytical Chemistry

Analytical chemistry is a quantitative science. Whether determining the concentration of a species, evaluating an equilibrium constant, measuring a reaction rate, or drawing a correlation between a compound's structure and its reactivity, analytical chemists engage in “measuring important chemical things.”¹ In this section we briefly review the use of units and significant figures in analytical chemistry.

2A.1 Units of Measurement

A measurement usually consists of a unit and a number expressing the quantity of that unit. We may express the same physical measurement with different units, which can create confusion. For example, the mass of a sample weighing 1.5 g also may be written as 0.0033 lb or 0.053 oz. To ensure consistency, and to avoid problems, scientists use a common set of fundamental units, several of which are listed in Table 2.1. These units are called **SI units** after the *Système International d'Unités*.

We define other measurements using these fundamental SI units. For example, we measure the quantity of heat produced during a chemical reaction in joules, (J), where

$$1 \text{ J} = 1 \frac{\text{m}^2 \text{kg}}{\text{s}^2}$$

¹ Murray, R. W. *Anal. Chem.* **2007**, *79*, 1765.

Some measurements, such as absorbance, do not have units. Because the meaning of a unitless number may be unclear, some authors include an artificial unit. It is not unusual to see the abbreviation AU, which is short for absorbance unit, following an absorbance value. Including the AU clarifies that the measurement is an absorbance value.

It is important for scientists to agree upon a common set of units. In 1999 NASA lost a Mar's Orbiter spacecraft because one engineering team used English units and another engineering team used metric units. As a result, the spacecraft came too close to the planet's surface, causing its propulsion system to overheat and fail.

Table 2.1 Fundamental SI Units of Importance to Analytical Chemistry

Measurement	Unit	Symbol	Definition (1 unit is...)
mass	kilogram	kg	...the mass of the international prototype, a Pt-Ir object housed at the Bureau International de Poids and Measures at Sèvres, France. [†]
distance	meter	m	...the distance light travels in $(299\,792\,458)^{-1}$ seconds.
temperature	Kelvin	K	...equal to $(273.16)^{-1}$, where 273.16 K is the triple point of water (where its solid, liquid, and gaseous forms are in equilibrium).
time	second	s	...the time it takes for 9 192 631 770 periods of radiation corresponding to a specific transition of the ¹³³ Cs atom.
current	ampere	A	...the current producing a force of 2×10^{-7} N/m when maintained in two straight parallel conductors of infinite length separated by one meter (in a vacuum).
amount of substance	mole	mol	...the amount of a substance containing as many particles as there are atoms in exactly 0.012 kilogram of ¹² C.

[†] The mass of the international prototype changes at a rate of approximately 1 μg per year due to reversible surface contamination. The reference mass, therefore, is determined immediately after its cleaning by a specified procedure.

Table 2.2 Derived SI Units and Non-SI Units of Importance to Analytical Chemistry

Measurement	Unit	Symbol	Equivalent SI Units
length	angstrom (non-SI)	Å	$1 \text{ Å} = 1 \times 10^{-10} \text{ m}$
volume	liter (non-SI)	L	$1 \text{ L} = 10^{-3} \text{ m}^3$
force	newton (SI)	N	$1 \text{ N} = 1 \text{ m} \cdot \text{kg}/\text{s}^2$
pressure	pascal (SI)	Pa	$1 \text{ Pa} = 1 \text{ N}/\text{m}^2 = 1 \text{ kg}/(\text{m} \cdot \text{s}^2)$
	atmosphere (non-SI)	atm	$1 \text{ atm} = 101,325 \text{ Pa}$
energy, work, heat	joule (SI)	J	$1 \text{ J} = \text{N} \cdot \text{m} = 1 \text{ m}^2 \cdot \text{kg}/\text{s}^2$
	calorie (non-SI)	cal	$1 \text{ cal} = 4.184 \text{ J}$
	electron volt (non-SI)	eV	$1 \text{ eV} = 1.602\,177\,33 \times 10^{-19} \text{ J}$
power	watt (SI)	W	$1 \text{ W} = 1 \text{ J}/\text{s} = 1 \text{ m}^2 \cdot \text{kg}/\text{s}^3$
charge	coulomb (SI)	C	$1 \text{ C} = 1 \text{ A} \cdot \text{s}$
potential	volt (SI)	V	$1 \text{ V} = 1 \text{ W}/\text{A} = 1 \text{ m}^2 \cdot \text{kg}/(\text{s}^3 \cdot \text{A})$
frequency	hertz (SI)	Hz	$1 \text{ Hz} = \text{s}^{-1}$
temperature	Celsius (non-SI)	°C	$^{\circ}\text{C} = \text{K} - 273.15$

Table 2.2 provides a list of some important derived SI units, as well as a few common non-SI units.

Chemists frequently work with measurements that are very large or very small. A mole contains 602 213 670 000 000 000 000 particles and some analytical techniques can detect as little as 0.000 000 000 000 001 g of a compound. For simplicity, we express these measurements using **SCIENTIFIC NOTATION**; thus, a mole contains $6.022\,136\,7 \times 10^{23}$ particles, and the detected mass is 1×10^{-15} g. Sometimes it is preferable to express measurements without the exponential term, replacing it with a prefix (Table 2.3). A mass of 1×10^{-15} g, for example, is the same as 1 fg, or femtogram.

Writing a lengthy number with spaces instead of commas may strike you as unusual. For numbers containing more than four digits on either side of the decimal point, however, the currently accepted practice is to use a thin space instead of a comma.

Table 2.3 Common Prefixes for Exponential Notation

Prefix	Symbol	Factor	Prefix	Symbol	Factor	Prefix	Symbol	Factor
yotta	Y	10^{24}	kilo	k	10^3	micro	μ	10^{-6}
zetta	Z	10^{21}	hecto	h	10^2	nano	n	10^{-9}
eta	E	10^{18}	deka	da	10^1	pico	p	10^{-12}
peta	P	10^{15}	-	-	10^0	femto	f	10^{-15}
tera	T	10^{12}	deci	d	10^{-1}	atto	a	10^{-18}
giga	G	10^9	centi	c	10^{-2}	zepto	z	10^{-21}
mega	M	10^6	milli	m	10^{-3}	yocto	y	10^{-24}




Figure 2.1 When weighing an object on a balance, the measurement fluctuates in the final decimal place. We record this cylinder's mass as $1.2637 \text{ g} \pm 0.0001 \text{ g}$.

In the measurement 0.0990 g , the zero in green is a significant digit and the zeros in red are not significant digits.

2A.2 Uncertainty in Measurements

A measurement provides information about its magnitude and its uncertainty. Consider, for example, the balance in Figure 2.1, which is recording the mass of a cylinder. Assuming that the balance is properly calibrated, we can be certain that the cylinder's mass is more than 1.263 g and less than 1.264 g . We are uncertain, however, about the cylinder's mass in the last decimal place since its value fluctuates between 6, 7, and 8. The best we can do is to report the cylinder's mass as $1.2637 \text{ g} \pm 0.0001 \text{ g}$, indicating both its magnitude and its absolute uncertainty.

SIGNIFICANT FIGURES

SIGNIFICANT FIGURES are a reflection of a measurement's magnitude and uncertainty. The number of significant figures in a measurement is the number of digits known exactly plus one digit whose value is uncertain. The mass shown in Figure 2.1, for example, has five significant figures, four which we know exactly and one, the last, which is uncertain.

Suppose we weigh a second cylinder, using the same balance, obtaining a mass of 0.0990 g . Does this measurement have 3, 4, or 5 significant figures? The zero in the last decimal place is the one uncertain digit and is significant. The other two zero, however, serve to show us the decimal point's location. Writing the measurement in scientific notation (9.90×10^{-2}) clarifies that there are but three significant figures in 0.0990 .

Example 2.1

How many significant figures are in each of the following measurements? Convert each measurement to its equivalent scientific notation or decimal form.

- 0.0120 mol HCl
- 605.3 mg CaCO_3
- $1.043 \times 10^{-4} \text{ mol Ag}^+$
- $9.3 \times 10^4 \text{ mg NaOH}$

SOLUTION

- Three significant figures; $1.20 \times 10^{-2} \text{ mol HCl}$.
- Four significant figures; $6.053 \times 10^2 \text{ mg CaCO}_3$.
- Four significant figures; $0.0001043 \text{ mol Ag}^+$.
- Two significant figures; 93000 mg NaOH .

The log of 2.8×10^2 is 2.45. The log of 2.8 is 0.45 and the log of 10^2 is 2. The 2 in 2.45, therefore, only indicates the power of 10 and is not a significant digit.

There are two special cases when determining the number of significant figures. For a measurement given as a logarithm, such as pH, the number of significant figures is equal to the number of digits to the right of the decimal point. Digits to the left of the decimal point are not significant figures since they only indicate the power of 10. A pH of 2.45, therefore, contains two significant figures.

An exact number has an infinite number of significant figures. Stoichiometric coefficients are one example of an exact number. A mole of CaCl_2 , for example, contains exactly two moles of chloride and one mole of calcium. Another example of an exact number is the relationship between some units. There are, for example, exactly 1000 mL in 1 L. Both the 1 and the 1000 have an infinite number of significant figures.

Using the correct number of significant figures is important because it tells other scientists about the uncertainty of your measurements. Suppose you weigh a sample on a balance that measures mass to the nearest ± 0.1 mg. Reporting the sample's mass as 1.762 g instead of 1.7623 g is incorrect because it does not properly convey the measurement's uncertainty. Reporting the sample's mass as 1.76231 g also is incorrect because it falsely suggests an uncertainty of ± 0.01 mg.

SIGNIFICANT FIGURES IN CALCULATIONS

Significant figures are also important because they guide us when reporting the result of an analysis. In calculating a result, the answer can never be more certain than the least certain measurement in the analysis. Rounding answers to the correct number of significant figures is important.

For addition and subtraction round the answer to the last decimal place that is significant for each measurement in the calculation. The exact sum of 135.621, 97.33, and 21.2163 is 254.1673. Since the last digit that is significant for all three numbers is in the hundredth's place

$$\begin{array}{r} 135.621 \\ 97.33 \\ \underline{21.2163} \\ 254.1673 \end{array}$$

The last common decimal place shared by 135.621, 97.33, and 21.2163 is shown in red.

we round the result to 254.17. When working with scientific notation, convert each measurement to a common exponent before determining the number of significant figures. For example, the sum of 4.3×10^5 , 6.17×10^7 , and 3.23×10^4 is 622×10^5 , or 6.22×10^7 .

$$\begin{array}{r} 617 \times 10^5 \\ 4.3 \times 10^5 \\ \underline{0.323 \times 10^5} \\ 621.623 \times 10^5 \end{array}$$

The last common decimal place shared by 4.3×10^5 , 6.17×10^7 , and 3.23×10^4 is shown in red.

For multiplication and division round the answer to the same number of significant figures as the measurement with the fewest significant figures. For example, dividing the product of 22.91 and 0.152 by 16.302 gives an answer of 0.214 because 0.152 has the fewest significant figures.

$$\frac{22.91 \times 0.152}{16.302} = 0.2131 = 0.214$$

It is important to recognize that the rules for working with significant figures are generalizations. What is conserved in a calculation is uncertainty, not the number of significant figures. For example, the following calculation is correct even though it violates the general rules outlined earlier.

$$\frac{101}{99} = 1.02$$

Since the relative uncertainty in each measurement is approximately 1% (101 ± 1 , 99 ± 1), the relative uncertainty in the final answer also must be approximately 1%. Reporting the answer as 1.0 (two significant figures), as required by the general rules, implies a relative uncertainty of 10%, which is too large. The correct answer, with three significant figures, yields the expected relative uncertainty. Chapter 4 presents a more thorough treatment of uncertainty and its importance in reporting the results of an analysis.

There is no need to convert measurements in scientific notation to a common exponent when multiplying or dividing.

Finally, to avoid “round-off” errors it is a good idea to retain at least one extra significant figure throughout any calculation. Better yet, invest in a good scientific calculator that allows you to perform lengthy calculations without recording intermediate values. When your calculation is complete, round the answer to the correct number of significant figures using the following simple rules.

1. Retain the least significant figure if it and the digits that follow are less than half way to the next higher digit. For example, rounding 12.442 to the nearest tenth gives 12.4 since 0.442 is less than half way between 0.400 and 0.500.
2. Increase the least significant figure by 1 if it and the digits that follow are more than half way to the next higher digit. For example, rounding 12.476 to the nearest tenth gives 12.5 since 0.476 is more than half way between 0.400 and 0.500.
3. If the least significant figure and the digits that follow are exactly half-way to the next higher digit, then round the least significant figure to the nearest even number. For example, rounding 12.450 to the nearest tenth gives 12.4, while rounding 12.550 to the nearest tenth gives 12.6. Rounding in this manner ensures that we round up as often as we round down.

Practice Exercise 2.1

For a problem involving both addition and/or subtraction, and multiplication and/or division, be sure to account for significant figures at each step of the calculation. With this in mind, to the correct number of significant figures, what is the result of this calculation?

$$\frac{0.250 \times (9.93 \times 10^{-3}) - 0.100 \times (1.927 \times 10^{-2})}{9.93 \times 10^{-3} + 1.927 \times 10^{-2}} =$$

Click [here](#) to review your answer to this exercise.

2B Concentration

CONCENTRATION is a general measurement unit stating the amount of solute present in a known amount of solution

$$\text{Concentration} = \frac{\text{amount of solute}}{\text{amount of solution}} \quad 2.1$$

Although we associate the terms “solute” and “solution” with liquid samples, we can extend their use to gas-phase and solid-phase samples as well. [Table 2.4](#) lists the most common units of concentration.

2B.1 Molarity and Formality

Both molarity and formality express concentration as moles of solute per liter of solution. There is, however, a subtle difference between molarity and formality. **MOLARITY** is the concentration of a particular chemical species. **FORMALITY**, on the other hand, is a substance's total concentration without regard to its specific chemical form. There is no difference between a compound's molarity and formality if it dissolves without dissociating into ions. The formal concentration of a solution of glucose, for example, is the same as its molarity.

For a compound that ionize in solution, such as NaCl, molarity and formality are different. Dissolving 0.1 moles of CaCl₂ in 1 L of water gives a solution containing 0.1 moles of Ca²⁺ and 0.2 moles of Cl⁻. The molarity of NaCl, therefore, is zero since there is essentially no undissociated NaCl. The solution, instead, is 0.1 M in Ca²⁺ and 0.2 M in Cl⁻. The formality

A solution that is 0.0259 M in glucose is 0.0259 F in glucose as well.

Table 2.4 Common Units for Reporting Concentration

Name	Units	Symbol
molarity	$\frac{\text{moles solute}}{\text{liters solution}}$	M
formality	$\frac{\text{moles solute}}{\text{liters solution}}$	F
normality	$\frac{\text{equivalents solute}}{\text{liters solution}}$	N
molality	$\frac{\text{moles solute}}{\text{kilograms solvent}}$	m
weight percent	$\frac{\text{grams solute}}{100 \text{ grams solution}}$	% w/w
volume percent	$\frac{\text{mL solute}}{100 \text{ mL solution}}$	% v/v
weight-to-volume percent	$\frac{\text{grams solute}}{100 \text{ mL solution}}$	% w/v
parts per million	$\frac{\text{grams solute}}{10^6 \text{ grams solution}}$	ppm
parts per billion	$\frac{\text{grams solute}}{10^9 \text{ grams solution}}$	ppb

An alternative expression for weight percent is

$$\frac{\text{grams solute}}{\text{grams solution}} \times 100$$

You can use similar alternative expressions for volume percent and for weight-to-volume percent.

of NaCl, however, is 0.1 F since it represents the total amount of NaCl in solution. The rigorous definition of molarity, for better or worse, is largely ignored in the current literature, as it is in this textbook. When we state that a solution is 0.1 M NaCl we understand it to consist of Na^+ and Cl^- ions. The unit of formality is used only when it provides a clearer description of solution chemistry.

Molarity is used so frequently that we use a symbolic notation to simplify its expression in equations and in writing. Square brackets around a species indicate that we are referring to that species' molarity. Thus, $[\text{Na}^+]$ is read as "the molarity of sodium ions."

2B.2 Normality

Normality is a concentration unit that is no longer in common use. Because you may encounter normality in older handbooks of analytical methods, it can be helpful to understand its meaning. **NORMALITY** defines concentration in terms of an equivalent, which is the amount of one chemical species reacting stoichiometrically with another chemical species. Note that this definition makes an equivalent, and thus normality, a function of the chemical reaction in which the species participates. Although a solution of H_2SO_4 has a fixed molarity, its normality depends on how it reacts. You will find a more detailed treatment of normality in [Appendix 1](#).

2B.3 Molality

MOLALITY is used in thermodynamic calculations where a temperature independent unit of concentration is needed. Molarity is based on the volume of solution containing the solute. Since density is a temperature dependent property a solution's volume, and thus its molar concentration, changes with temperature. By using the solvent's mass in place of the solution's volume, the resulting concentration becomes independent of temperature.

2B.4 Weight, Volume, and Weight-to-Volume Ratios

WEIGHT PERCENT (% w/w), **VOLUME PERCENT** (% v/v) and **WEIGHT-TO-VOLUME PERCENT** (% w/v) express concentration as the units of solute present in 100 units of solution. A solution of 1.5% w/v NH_4NO_3 , for example, contains 1.5 gram of NH_4NO_3 in 100 mL of solution.

2B.5 Parts Per Million and Parts Per Billion

PARTS PER MILLION (ppm) and **PARTS PER BILLION** (ppb) are ratios giving the grams of solute to, respectively, one million or one billion grams of sample. For example, a steel that is 450 ppm in Mn contains 450 μg of Mn for every gram of steel. If we approximate the density of an aqueous solution as 1.00 g/mL, then solution concentrations can be expressed in ppm or ppb using the following relationships.

One handbook that still uses normality is *Standard Methods for the Examination of Water and Wastewater*, a joint publication of the American Public Health Association, the American Water Works Association, and the Water Environment Federation. This handbook is one of the primary resources for the environmental analysis of water and wastewater.

$$\text{ppm} = \frac{\text{mg}}{\text{L}} = \frac{\text{g}}{\text{g}} \quad \text{ppb} = \frac{\text{g}}{\text{L}} = \frac{\text{ng}}{\text{mL}}$$

For gases a part per million usually is a volume ratio. Thus, a helium concentration of 6.3 ppm means that one liter of air contains 6.3 μL of He.

2B.6 Converting Between Concentration Units

The most common ways to express concentration in analytical chemistry are molarity, weight percent, volume percent, weight-to-volume percent, parts per million and parts per billion. By recognizing the general definition of concentration given in [equation 2.1](#), it is easy to convert between concentration units.

You should be careful when using parts per million and parts per billion to express the concentration of an aqueous solute. The difference between a solute's concentration in mg/L and $\mu\text{g/g}$, for example, is significant if the solution's density is not 1.00 g/mL . For this reason many organizations advise against using the abbreviation ppm and ppb (see www.nist.gov). If in doubt, include the exact units, such as $0.53 \mu\text{g Pb}^{2+}/\text{L}$ for the concentration of lead in a sample of seawater.

Example 2.2

A concentrated solution of ammonia is 28.0% w/w NH_3 and has a density of 0.899 g/mL . What is the molar concentration of NH_3 in this solution?

SOLUTION

$$\frac{28.0 \text{ g NH}_3}{100 \text{ g solution}} \times \frac{0.899 \text{ g solution}}{\text{mL solution}} \times \frac{1 \text{ mol NH}_3}{17.04 \text{ g NH}_3} \times \frac{1000 \text{ mL}}{\text{L}} = 14.8 \text{ M}$$

Example 2.3

The maximum permissible concentration of chloride in a municipal drinking water supply is $2.50 \times 10^2 \text{ ppm Cl}^-$. When the supply of water exceeds this limit it often has a distinctive salty taste. What is the equivalent molar concentration of Cl^- ?

SOLUTION

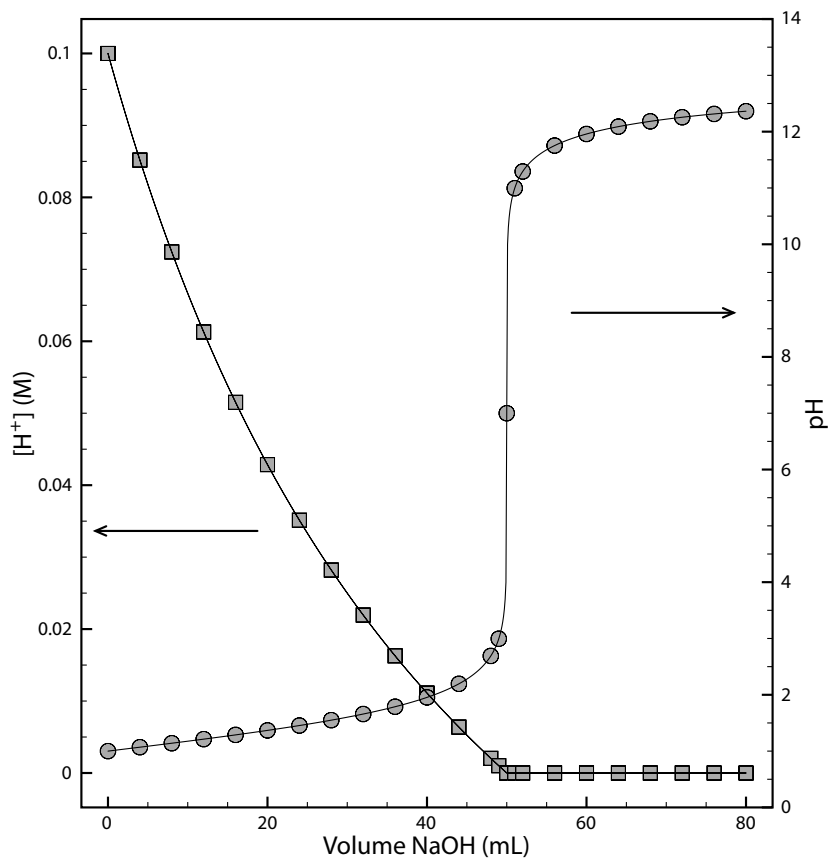
$$\frac{2.50 \times 10^2 \text{ mg Cl}^-}{\text{L}} \times \frac{1 \text{ g}}{1000 \text{ mg}} \times \frac{1 \text{ mol Cl}^-}{35.453 \text{ g Cl}^-} = 7.05 \times 10^{-3} \text{ M}$$

Practice Exercise 2.2

Which solution— 0.50 M NaCl or 0.25 M SrCl_2 —has the larger concentration when expressed in $\mu\text{g/mL}$?

Click [here](#) to review your answer to this exercise.

Figure 2.2 Graph showing the progress for the titration of 50.0 mL of 0.10 M HCl with 0.10 M NaOH. The $[H^+]$ is shown on the left y-axis and the pH on the right y-axis.



2B.7 p-Functions

Sometimes it is inconvenient to use the concentration units in Table 2.4. For example, during a reaction a species' concentration may change by many orders of magnitude. If we want to display the reaction's progress graphically we might plot the reactant's concentration as a function of time or as a function of the volume of a reagent being added to the reaction. Such is the case in Figure 2.2 for the titration of HCl with NaOH. The y-axis on the left-side of the figure displays the $[H^+]$ as a function of the volume of NaOH. The initial $[H^+]$ is 0.10 M and its concentration after adding 80 mL of NaOH is 4.3×10^{-13} M. We can easily follow the change in $[H^+]$ for the first 14 additions of NaOH. For the remaining additions of NaOH, however, the change in $[H^+]$ is too small to see.

When working with concentrations spanning many orders of magnitude, it is often more convenient to express concentration using a **p-FUNCTION**. The p-function of X is written as pX and is defined as

$$pX = -\log(X)$$

The pH of a solution that is 0.10 M H^+ is

$$pH = -\log[H^+] = -\log(0.10) = 1.00$$

and the pH of 4.3×10^{-13} M H^+ is

Acid–base titrations, as well as several other types of titrations, are covered in [Chapter 9](#).

A more appropriate equation for pH is

$$pH = -\log(a_{H^+})$$

where a_{H^+} is the activity of the hydrogen ion. See [Chapter 6](#) for more details. For now the approximate equation

$$pH = -\log[H^+]$$

is sufficient.

$$\text{pH} = -\log[\text{H}^+] = -\log(4.3 \times 10^{-13}) = 12.37$$

Figure 2.2 shows that plotting pH as a function of the volume of NaOH provides more detail about how the concentration of H^+ changes during the titration.

Example 2.4

What is pNa for a solution of $1.76 \times 10^{-3} \text{ M Na}_3\text{PO}_4$?

SOLUTION

Since each mole of Na_3PO_4 contains three moles of Na^+ , the concentration of Na^+ is

$$[\text{Na}^+] = (1.76 \times 10^{-3} \text{ M}) \times \frac{3 \text{ mol Na}^+}{\text{mol Na}_3\text{PO}_4} = 5.28 \times 10^{-3} \text{ M}$$

and pNa is

$$\text{pNa} = -\log[\text{Na}^+] = -\log(5.28 \times 10^{-3}) = 2.277$$

Example 2.5

What is the $[\text{H}^+]$ in a solution that has a pH of 5.16?

SOLUTION

The concentration of H^+ is

$$\text{pH} = -\log[\text{H}^+] = 5.16$$

$$\log[\text{H}^+] = -5.16$$

$$[\text{H}^+] = \text{antilog}(-5.16) = 10^{-5.16} = 6.9 \times 10^{-6} \text{ M}$$

If $X = 10^a$, then $\log(X) = a$.

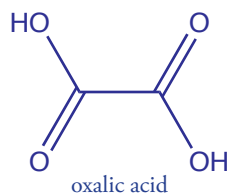
Practice Exercise 2.3

What is pK and pSO_4 for a solution containing 1.5 g K_2SO_4 in a total volume of 500.0 mL?

Click [here](#) to review your answer to this exercise.

2C Stoichiometric Calculations

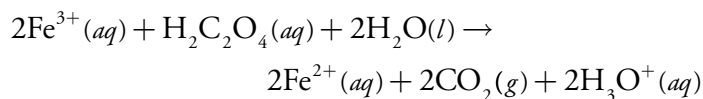
A balanced reaction, which gives the stoichiometric relationship between the moles of reactants and the moles of products, provides the basis for many analytical calculations. Consider, for example, an analysis for oxalic acid, $\text{H}_2\text{C}_2\text{O}_4$, in which Fe^{3+} oxidizes oxalic acid to CO_2 .



Oxalic acid, in sufficient amounts, is toxic. At lower physiological concentrations it leads to the formation of kidney stones. The leaves of the rhubarb plant contain relatively high concentrations of oxalic acid. The stalk, which many individuals enjoy eating, contains much smaller concentrations of oxalic acid.

Note that we retain an extra significant figure throughout the calculation, rounding to the correct number of significant figures at the end. We will follow this convention in any problem involving more than one step.

If we forget that we are retaining an extra significant figure, we might report the final answer with one too many significant figures. In this chapter we will mark the extra digit in **red** for emphasis. Be sure that you pick a system for keeping track of significant figures.



The balanced reaction indicates that one mole of oxalic acid reacts with two moles of Fe^{3+} . As shown in Example 2.6, we can use this balanced reaction to determine the amount of oxalic acid in a sample of rhubarb.

Example 2.6

The amount of oxalic acid in a sample of rhubarb was determined by reacting with Fe^{3+} . After extracting a 10.62 g of rhubarb with a solvent, oxidation of the oxalic acid required 36.44 mL of 0.0130 M Fe^{3+} . What is the weight percent of oxalic acid in the sample of rhubarb?

SOLUTION

We begin by calculating the moles of Fe^{3+} used in the reaction

$$\frac{0.0130 \text{ mol Fe}^{3+}}{\text{L}} \times 0.03644 \text{ L} = 4.737 \times 10^{-4} \text{ mol Fe}^{3+}$$

The moles of oxalic acid reacting with the Fe^{3+} , therefore, is

$$4.737 \times 10^{-4} \text{ mol Fe}^{3+} \times \frac{1 \text{ mol H}_2\text{C}_2\text{O}_4}{2 \text{ mol Fe}^{3+}} = 2.368 \times 10^{-4} \text{ mol H}_2\text{C}_2\text{O}_4$$

Converting the moles of oxalic acid to grams of oxalic acid

$$2.368 \times 10^{-4} \text{ mol C}_2\text{H}_2\text{O}_4 \times \frac{90.03 \text{ g H}_2\text{C}_2\text{O}_4}{\text{mol H}_2\text{C}_2\text{O}_4} = 2.132 \times 10^{-2} \text{ g H}_2\text{C}_2\text{O}_4$$

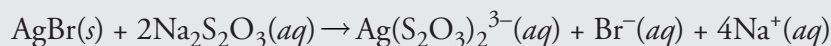
and calculating the weight percent gives the concentration of oxalic acid in the sample of rhubarb as

$$\frac{2.132 \times 10^{-2} \text{ g H}_2\text{C}_2\text{O}_4}{10.62 \text{ g rhubarb}} \times 100 = 0.201\% \text{ w/w H}_2\text{C}_2\text{O}_4$$

The analyte in Example 2.6, oxalic acid, is in a chemically useful form because there is a reagent, Fe^{3+} , that reacts with it quantitatively. In many analytical methods, we must convert the analyte into a more accessible

Practice Exercise 2.4

You can dissolve a precipitate of AgBr by reacting it with $\text{Na}_2\text{S}_2\text{O}_3$, as shown here.

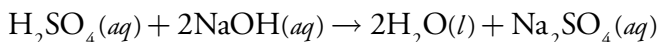


How many mL of 0.0138 M $\text{Na}_2\text{S}_2\text{O}_3$ do you need to dissolve 0.250 g of AgBr ?

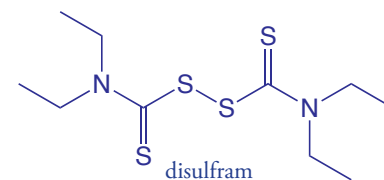
Click [here](#) to review your answer to this question

form before we can complete the analysis. For example, one method for the quantitative analysis of disulfiram, $C_{10}H_{20}N_2S_4$ —the active ingredient in the drug Antabuse—requires that we convert the sulfur to H_2SO_4 by first oxidizing it to SO_2 by combustion, and then oxidizing the SO_2 to H_2SO_4 by bubbling it through a solution of H_2O_2 . When the conversion is complete, the amount of H_2SO_4 is determined by titrating with NaOH.

To convert the moles of NaOH used in the titration to the moles of disulfiram in the sample, we need to know the stoichiometry of the reactions. Writing a balanced reaction for H_2SO_4 and NaOH is straightforward



but the balanced reactions for the oxidations of $C_{10}H_{20}N_2S_4$ to SO_2 , and of SO_2 to H_2SO_4 are not as immediately obvious. Although we can balance these redox reactions, it is often easier to deduce the overall stoichiometry by using a little chemical logic.



Example 2.7

An analysis for disulfiram, $C_{10}H_{20}N_2S_4$, in Antabuse is carried out by oxidizing the sulfur to H_2SO_4 and titrating the H_2SO_4 with NaOH. If a 0.4613-g sample of Antabuse is taken through this procedure, requiring 34.85 mL of 0.02500 M NaOH to titrate the H_2SO_4 , what is the %w/w disulfiram in the sample?

SOLUTION

Calculating the moles of H_2SO_4 is easy—first, we calculate the moles of NaOH used in the titration

$$(0.02500 \text{ M}) \times (0.03485 \text{ L}) = 8.7125 \times 10^{-4} \text{ mol NaOH}$$

and then we use the balanced reaction to calculate the corresponding moles of H_2SO_4 .

$$8.7125 \times 10^{-4} \text{ mol NaOH} \times \frac{1 \text{ mol } H_2SO_4}{2 \text{ mol NaOH}} = 4.3562 \times 10^{-4} \text{ mol } H_2SO_4$$

We do not need balanced reactions to convert the moles of H_2SO_4 to the corresponding moles of $C_{10}H_{20}N_2S_4$. Instead, we take advantage of a conservation of mass—all the sulfur in $C_{10}H_{20}N_2S_4$ must end up in the H_2SO_4 ; thus

$$4.3562 \times 10^{-4} \text{ mol } H_2SO_4 \times \frac{1 \text{ mol S}}{\text{mol } H_2SO_4} \times \frac{1 \text{ mol } C_{10}H_{20}N_2S_4}{4 \text{ mol S}} = 1.0890 \times 10^{-4} \text{ mol } C_{10}H_{20}N_2S_4$$

Here is where we use a little chemical logic! A conservation of mass is the essence of stoichiometry.

$$\begin{aligned} & \text{or} \\ & 1.0890 \times 10^{-4} \text{ mol C}_{10}\text{H}_{20}\text{N}_2\text{S}_4 \times \\ & \quad \frac{296.54 \text{ g C}_{10}\text{H}_{20}\text{N}_2\text{S}_4}{\text{mol C}_{10}\text{H}_{20}\text{N}_2\text{S}_4} = 0.032293 \text{ g C}_{10}\text{H}_{20}\text{N}_2\text{S}_4 \\ & \frac{0.032293 \text{ g C}_{10}\text{H}_{20}\text{N}_2\text{S}_4}{0.4613 \text{ g sample}} \times 100 = 7.000\% \text{ w/w C}_{10}\text{H}_{20}\text{N}_2\text{S}_4 \end{aligned}$$

2D Basic Equipment

The array of equipment for making analytical measurements is impressive, ranging from the simple and inexpensive, to the complex and expensive. With three exceptions—measuring mass, measuring volume, and drying materials—we will postpone the discussion of equipment to later chapters where its application to specific analytical methods is relevant.

2D.1 Equipment for Measuring Mass

An object's mass is measured using a digital electronic **ANALYTICAL BALANCE** (Figure 2.3).² An electromagnet levitates the sample pan above a permanent cylindrical magnet. The amount of light reaching a photodetector indicates the sample pan's position. Without an object on the balance, the amount of light reaching the detector is the balance's null point. Placing an object on the balance displaces the sample pan downward by a force equal to the product of the sample's mass and its acceleration due to gravity. The balance detects this downward movement and generates a counterbalancing force by increasing the current to the electromagnet. The current returning the balance to its null point is proportional to the object's mass. A typical

² For a review of other types of electronic balances, see Schoonover, R. M. *Anal. Chem.* **1982**, *54*, 973A-980A.

Although we tend to use interchangeably, the terms “weight” and “mass,” there is an important distinction between them. Mass is the absolute amount of matter in an object, measured in grams. Weight is a measure of the gravitational force acting on the object:

$$\text{weight} = \text{mass} \times \text{gravitational acceleration}$$

An object has a fixed mass but its weight depends upon the local acceleration due to gravity, which varies subtly from location-to-location.

A balance measures an object's weight, not its mass. Because weight and mass are proportional to each other, we can calibrate a balance using a standard weight whose mass is traceable to the standard prototype for the kilogram. A properly calibrated balance will give an accurate value for an object's mass.




Figure 2.3 The photo shows a typical digital electronic balance capable of determining mass to the nearest ± 0.1 mg. The sticker inside the balance's wind shield is its annual calibration certification.

electronic balance has a capacity of 100-200 grams, and can measure mass to the nearest ± 0.01 mg to ± 1 mg.

If the sample is not moisture sensitive, a clean and dry container is placed on the balance. The container's mass is called the tare. Most balances allow you to set the container's tare to a mass of zero. The sample is transferred to the container, the new mass is measured and the sample's mass determined by subtracting the tare. Samples that absorb moisture from the air are treated differently. The sample is placed in a covered weighing bottle and their combined mass is determined. A portion of the sample is removed and the weighing bottle and remaining sample are reweighed. The difference between the two masses gives the sample's mass.

Several important precautions help to minimize errors when measuring an object's mass. A balance should be placed on a stable surface to minimize the effect of vibrations in the surrounding environment, and should be maintained in a level position. The sensitivity of an analytical balance is such that it can measure the mass of a fingerprint. For this reason materials being weighed should normally be handled using tongs or laboratory tissues. Volatile liquid samples must be weighed in a covered container to avoid the loss of sample by evaporation. Air currents can significantly affect a sample's mass. To avoid air currents the balance's glass doors should be closed, or the balance's wind shield should be in place. A sample that is cooler or warmer than the surrounding air will create a convective air currents that affects the measurement of its mass. For this reason, warm or cool your sample to room temperature before determining its mass. Finally, samples dried in an oven should be stored in a desiccator to prevent them from reabsorbing moisture from the atmosphere.

2D.2 Equipment for Measuring Volume

Analytical chemists use a variety of glassware to measure a liquid's volume. The choice of what type of glassware to use depends on how accurately we need to know the liquid's volume and whether we are interested in containing or delivering the liquid.

A graduated cylinder is the simplest device for delivering a known volume of a liquid reagent (Figure 2.4). The graduated scale allows you to deliver any volume up to the cylinder's maximum. Typical accuracy is $\pm 1\%$ of the maximum volume. A 100-mL graduated cylinder, for example, is accurate to ± 1 mL.

A **VOLUMETRIC PIPET** provides a more accurate method for delivering a known volume of solution. Several different styles of pipets are available, two of which are shown in [Figure 2.5](#). Transfer pipets provide the most accurate means for delivering a known volume of solution. A transfer pipet delivering less than 100 mL generally is accurate to the hundredth of a mL. Larger transfer pipets are accurate to the tenth of a mL. For example, the 10-mL transfer pipet in [Figure 2.5](#) will deliver 10.00 mL with an accuracy of ± 0.02 mL.




Figure 2.4 A 500-mL graduated cylinder. Source: [Hannes Grobe](#) (commons.wikimedia.org).

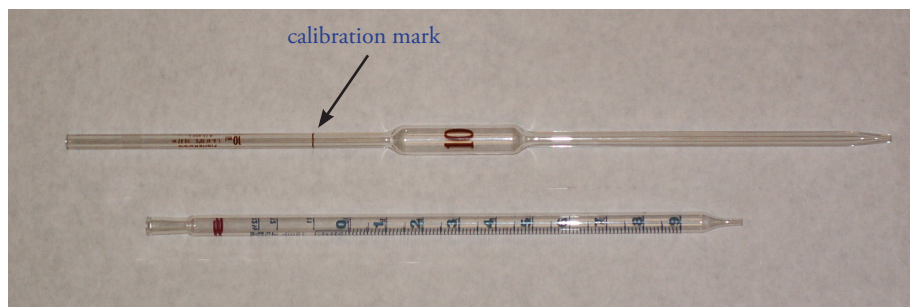


Figure 2.5 Two examples of 10-mL volumetric pipets. The pipet on the top is a transfer pipet and the pipet on the bottom is a Mohr measuring pipet. The transfer pipet delivers a single volume of 10.00 mL when filled to its calibration mark. The Mohr pipet has a mark every 0.1 mL, allowing for the delivery of variable volumes. It also has additional graduations at 11 mL, 12 mL, and 12.5 mL.

Never use your mouth to suck a solution into a pipet!



Figure 2.6 Digital micropipets. From the left, the pipets deliver volumes of 500 μL –200 μL ; 0.5 μL –10 μL ; 1000 μL –100 μL ; 1 μL –20 μL . Source: [Retama](#) (commons.wikimedia.org).

A recent report describes a nanopipet capable of dispensing extremely small volumes. Scientists at the Brookhaven National Laboratory used a germanium nanowire to make a pipet delivering a 35 zeptoliter (10^{-21} L) drop of a liquid gold-germanium alloy. You can read about this work in the [April 21, 2007 issue of *Science News*](#).

To fill a transfer pipet suction use a rubber bulb to pull the liquid up past the calibration mark (see Figure 2.5). After replacing the bulb with your finger, adjust the liquid's level to the calibration mark and dry the outside of the pipet with a laboratory tissue. Allow the pipet's contents to drain into the receiving container with the pipet's tip touching the inner wall of the container. A small portion of the liquid will remain in the pipet's tip and should not be blown out. With some measuring pipets any solution remaining in the tip must be blown out.

Delivering microliter volumes of liquids is not possible using transfer or measuring pipets. Digital micropipets (Figure 2.6), which come in a variety of volume ranges, provide for the routine measurement of microliter volumes.

Graduated cylinders and pipets deliver a known volume of solution. A **VOLUMETRIC FLASK**, on the other hand, contains a specific volume of solution (Figure 2.7). When filled to its calibration mark a volumetric flask containing less than 100 mL is generally accurate to the hundredth of a mL, whereas larger volumetric flasks are accurate to the tenth of a mL. For example, a 10-mL volumetric flask contains $10.00 \text{ mL} \pm 0.02 \text{ mL}$ and a 250-mL volumetric flask contains $250.0 \text{ mL} \pm 0.12 \text{ mL}$.




Figure 2.7 A 500-mL volumetric flask. Source: [Hannes Grobe](#) (commons.wikimedia.org).

Because a volumetric flask contains a solution, it is useful for preparing a solution with an accurately known concentration. Transfer the reagent to the volumetric flask and add enough solvent to bring the reagent into solution. Continuing adding solvent in several portions, mixing thoroughly after each addition. Adjust the volume to the flask's calibration mark using a dropper. Finally, complete the mixing process by inverting and shaking the flask at least 10 times.

If you look closely at a volumetric pipet or volumetric flask you will see markings similar to those shown in Figure 2.8. The text of the markings, which reads

10 mL T. D. at 20 °C ± 0.02 mL

indicates that the pipet is calibrated to deliver (T. D.) 10 mL of solution with an uncertainty of ± 0.02 mL at a temperature of 20 °C. The temperature is important because glass expands and contracts with changes in temperatures. At higher or lower temperatures, the pipet's accuracy is less than ± 0.02 mL. For more accurate results you can calibrate your volumetric glassware at the temperature you are working. You can accomplish this by weighing the amount of water contained or delivered and calculate the volume using its temperature dependent density.

You should take three additional precautions when working with pipets and volumetric flasks. First, the volume delivered by a pipet or contained by a volumetric flask assumes that the glassware is clean. Dirt and grease on the inner surface prevents liquids from draining evenly, leaving droplets of the liquid on the container's walls. For a pipet this means that the delivered volume is less than the calibrated volume, while drops of liquid above the calibration mark mean that a volumetric flask contains more than its calibrated volume. Commercially available cleaning solutions can be used to clean pipets and volumetric flasks.

Second, when filling a pipet or volumetric flask the liquid's level must be set exactly at the calibration mark. The liquid's top surface is curved into a **MENISCUS**, the bottom of which should be exactly even with the glassware's calibration mark (Figure 2.9). When adjusting the meniscus keep your eye in line with the calibration mark to avoid parallax errors. If your eye level is above the calibration mark you will overfill the pipet or volumetric flask and you will underfill them if your eye level is below the calibration mark.

Finally, before using a pipet or volumetric flask rinse it with several small portions of the solution whose volume you are measuring. This ensures the removal of any residual liquid remaining in the pipet or volumetric flask.

2D.3 Equipment for Drying Samples

Many materials need to be dried prior to analysis to remove residual moisture. Depending on the material, heating to a temperature between 110



Figure 2.8 Close-up of the 10-mL transfer pipet from Figure 2.5.

A volumetric flask has similar markings, but uses the abbreviation T. C. for "to contain" in place of T. D.




Figure 2.9 Proper position of the solution's meniscus relative to the volumetric flask's calibration mark.




Figure 2.10 Example of a muffle furnace.



Figure 2.11 Example of a desiccator. The solid in the bottom of the desiccator is the desiccant, which in this case is silica gel. Source: [Hannes Grobe](https://commons.wikimedia.org/wiki/File:Desiccator.jpg) (commons.wikimedia.org).

°C and 140 °C is usually sufficient. Other materials need much higher temperatures to initiate thermal decomposition.

Conventional drying ovens provide maximum temperatures of 160 °C to 325 °C (depending on the model). Some ovens include the ability to circulate heated air, allowing for a more efficient removal of moisture and shorter drying times. Other ovens provide a tight seal for the door, allowing the oven to be evacuated. In some situations a microwave oven can replace a conventional laboratory oven. Higher temperatures, up to 1700 °C, require a muffle furnace (Figure 2.10).

After drying or decomposing a sample, it should be cooled to room temperature in a desiccator to prevent the reabsorption of moisture. A **DESICCATOR** (Figure 2.11) is a closed container that isolates the sample from the atmosphere. A drying agent, called a **DESICCANT**, is placed in the bottom of the container. Typical desiccants include calcium chloride and silica gel. A perforated plate sits above the desiccant, providing a shelf for storing samples. Some desiccators include a stopcock that allows them to be evacuated.

2E Preparing Solutions

Preparing a solution of known concentration is perhaps the most common activity in any analytical lab. The method for measuring out the solute and solvent depend on the desired concentration unit and how exact the solution's concentration needs to be known. Pipets and volumetric flasks are used when a solution's concentration must be exact; graduated cylinders, beakers and reagent bottles suffice when concentrations need only be approximate. Two methods for preparing solutions are described in this section.

2E.1 Preparing Stock Solutions

A **STOCK SOLUTION** is prepared by weighing out an appropriate portion of a pure solid or by measuring out an appropriate volume of a pure liquid and diluting to a known volume. Exactly how this is done depends on the required concentration unit. For example, to prepare a solution with a desired molarity you weigh out an appropriate mass of the reagent, dissolve it in a portion of solvent, and bring to the desired volume. To prepare a solution where the solute's concentration is a volume percent, you measure out an appropriate volume of solute and add sufficient solvent to obtain the desired total volume.

Example 2.8

Describe how to prepare the following three solutions: (a) 500 mL of approximately 0.20 M NaOH using solid NaOH; (b) 1 L of 150.0 ppm Cu^{2+} using Cu metal; and (c) 2 L of 4% v/v acetic acid using concentrated glacial acetic acid (99.8% w/w acetic acid).

SOLUTION

- (a) Since the concentration is known to two significant figures the mass of NaOH and the volume of solution do not need to be measured exactly. The desired mass of NaOH is

$$\frac{0.20 \text{ mol NaOH}}{\text{L}} \times \frac{40.0 \text{ g NaOH}}{\text{mol NaOH}} \times 0.50 \text{ L} = 4.0 \text{ g}$$

To prepare the solution, place 4.0 grams of NaOH, weighed to the nearest tenth of a gram, in a bottle or beaker and add approximately 500 mL of water.

- (b) Since the concentration of Cu^{2+} has four significant figures, the mass of Cu metal and the final solution volume must be measured exactly. The desired mass of Cu metal is

$$\frac{150.0 \text{ mg Cu}}{\text{L}} \times 1.000 \text{ L} = 150.0 \text{ mg Cu} = 0.1500 \text{ g Cu}$$

To prepare the solution we measure out exactly 0.1500 g of Cu into a small beaker and dissolve using small portion of concentrated HNO_3 . The resulting solution is transferred into a 1-L volumetric flask. Rinse the beaker several times with small portions of water, adding each rinse to the volumetric flask. This process, which is called a **QUANTITATIVE TRANSFER**, ensures that the complete transfer of Cu^{2+} to the volumetric flask. Finally, additional water is added to the volumetric flask's calibration mark.

- (c) The concentration of this solution is only approximate so it is not necessary to measure the volumes exactly, nor is it necessary to account for the fact that glacial acetic acid is slightly less than 100% w/w acetic acid (it is approximately 99.8% w/w). The necessary volume of glacial acetic acid is

$$\frac{4 \text{ mL CH}_3\text{COOH}}{100 \text{ mL}} \times 2000 \text{ mL} = 80 \text{ mL CH}_3\text{COOH}$$

To prepare the solution, use a graduated cylinder to transfer 80 mL of glacial acetic acid to a container that holds approximately 2 L and add sufficient water to bring the solution to the desired volume.

Practice Exercise 2.5

Provide instructions for preparing 500 mL of 0.1250 M KBrO_3 .

Click [here](#) to review your answer to this exercise.

2E.2 Preparing Solutions by Dilution

Solutions are often prepared by diluting a more concentrated stock solution. A known volume of the stock solution is transferred to a new container

Practice Exercise 2.6

To prepare a standard solution of Zn^{2+} you dissolve a 1.004 g sample of Zn wire in a minimal amount of HCl and dilute to volume in a 500-mL volumetric flask. If you dilute 2.000 mL of this stock solution to 250.0 mL, what is the concentration of Zn^{2+} , in $\mu\text{g/mL}$, in your standard solution?

Click [here](#) to review your answer to this exercise.

Equation 2.2 applies only when the concentration are written in terms of volume, as is the case with molarity. Using this equation with a mass-based concentration unit, such as % w/w, leads to an error. See Rodríguez-López, M.; Carrasquillo, A. J. *Chem. Educ.* **2005**, *82*, 1327-1328 for further discussion.

and brought to a new volume. Since the total amount of solute is the same before and after **DILUTION**, we know that

$$C_o \times V_o = C_d \times V_d \quad 2.2$$

where C_o is the stock solution's concentration, V_o is the volume of stock solution being diluted, C_d is the dilute solution's concentration, and V_d is the volume of the dilute solution. Again, the type of glassware used to measure V_o and V_d depends on how exact the solution's concentration must be known.

Example 2.9

A laboratory procedure calls for 250 mL of an approximately 0.10 M solution of NH_3 . Describe how you would prepare this solution using a stock solution of concentrated NH_3 (14.8 M).

SOLUTION

Substituting known volumes in [equation 2.2](#)

$$14.8 \text{ M} \times V_o = 0.10 \text{ M} \times 0.25 \text{ L}$$

and solving for V_o gives 1.69×10^{-3} liters, or 1.7 mL. Since we are making a solution that is approximately 0.10 M NH_3 we can use a graduated cylinder to measure the 1.7 mL of concentrated NH_3 , transfer the NH_3 to a beaker, and add sufficient water to give a total volume of approximately 250 mL.

As shown in the following example, we can use [equation 2.2](#) to calculate a solution's original concentration using its known concentration after dilution.

Example 2.10

A sample of an ore was analyzed for Cu^{2+} as follows. A 1.25 gram sample of the ore was dissolved in acid and diluted to volume in a 250-mL volumetric flask. A 20 mL portion of the resulting solution was transferred by pipet to a 50-mL volumetric flask and diluted to volume. An analysis of this solution gave the concentration of Cu^{2+} as $4.62 \mu\text{g/L}$. What is the weight percent of Cu in the original ore?

SOLUTION

Substituting known volumes (with significant figures appropriate for pipets and volumetric flasks) into [equation 2.2](#)

$$(\text{g/L Cu}^{2+})_o \times 20.00 \text{ mL} = 4.62 \text{ g/L Cu}^{2+} \times 50.00 \text{ mL}$$

and solving for $(\mu\text{g/L Cu}^{2+})_o$ gives the original solution concentration as $11.55 \mu\text{g/L Cu}^{2+}$. To calculate the grams of Cu^{2+} we multiply this concentration by the total volume

$$\frac{11.55 \text{ g Cu}^{2+}}{\text{mL}} \times 250.0 \text{ mL} \times \frac{1 \text{ g}}{10^6 \text{ g}} = 2.888 \times 10^{-3} \text{ g Cu}^{2+}$$

The weight percent Cu is

$$\frac{2.888 \times 10^{-3} \text{ g Cu}^{2+}}{1.25 \text{ g sample}} \times 100 = 0.231\% \text{ w/w Cu}^{2+}$$

2F Spreadsheets and Computational Software

Analytical chemistry is an inherently quantitative discipline. Whether you are completing a statistical analysis, trying to optimize experimental conditions, or exploring how a change in pH affects a compound's solubility, the ability to work with complex mathematical equations is essential. Spreadsheets, such as Microsoft Excel can be an important tool for analyzing your data and for preparing graphs of your results. Scattered throughout the text you will find instructions for using spreadsheets.

Although spreadsheets are useful, they are not always well suited for working with scientific data. If you plan to pursue a career in chemistry you may wish to familiarize yourself with a more sophisticated computational software package, such as the freely available open-source program that goes by the name R, or commercial programs such as Mathematica and Matlab. You will find instructions for using R scattered throughout the text.

Despite the power of spreadsheets and computational programs, *don't forget that the most important software is that behind your eyes and between your ears.* The ability to think intuitively about chemistry is a critically important skill. In many cases you will find it possible to determine if an ana-

If you do not have access to Microsoft Excel or another commercial spreadsheet package, you might consider using Calc, a freely available open-source spreadsheet that is part of the OpenOffice.org software package at www.openoffice.org.

You can download the current version of R from www.r-project.org. Click on the link for Download: CRAN and find a local mirror site. Click on the link for the mirror site and then use the link for Linux, MacOS X, or Windows under the heading "Download and Install R."

lytical method is feasible, or to approximate the optimum conditions for an analytical method without resorting to complex calculations. Why spend time developing a complex spreadsheet or writing software code when a “back-of-the-envelope” estimate will do the trick? Once you know the general solution to your problem, you can spend time using spreadsheets and computational programs to work out the specifics. Throughout the text we will introduce tools for developing your ability to think intuitively.

2G The Laboratory Notebook

Finally, we can not end a chapter on the basic tools of analytical chemistry without mentioning the laboratory notebook. Your laboratory notebook is your most important tool when working in the lab. If kept properly, you should be able to look back at your laboratory notebook several years from now and reconstruct the experiments on which you worked.

Your instructor will provide you with detailed instructions on how he or she wants you to maintain your notebook. Of course, you should expect to bring your notebook to the lab. Everything you do, measure, or observe while working in the lab should be recorded in your notebook as it takes place. Preparing data tables to organize your data will help ensure that you record the data you need, and that you can find the data when it is time to calculate and analyze your results. Writing a narrative to accompany your data will help you remember what you did, why you did it, and why you thought it was significant. Reserve space for your calculations, for analyzing your data, and for interpreting your results. Take your notebook with you when you do research in the library.

Maintaining a laboratory notebook may seem like a great deal of effort, but if you do it well you will have a permanent record of your work. Scientists working in academic, industrial and governmental research labs rely on their notebooks to provide a written record of their work. Questions about research carried out at some time in the past can be answered by finding the appropriate pages in the laboratory notebook. A laboratory notebook is also a legal document that helps establish patent rights and proof of discovery.

2H Key Terms

As you review this chapter, try to define a key term in your own words. Check your answer by clicking on the key term, which will take you to the page where it was first introduced. Clicking on the **KEY TERM** there, will bring you back to this page so that you can continue with another key term.

analytical balance	concentration	desiccant
desiccator	dilution	formality
meniscus	molality	molarity
normality	parts per million	parts per billion
p-function	quantitative transfer	scientific notation
significant figures	SI units	stock solution
volume percent	volumetric flask	volumetric pipet
weight percent	weight-to-volume percent	

2I Chapter Summary

There are a few basic numerical and experimental tools with which you must be familiar. Fundamental measurements in analytical chemistry, such as mass and volume, use base SI units, such as the kilogram. Other units, such as energy, are defined in terms of these base units. When reporting measurements, we must be careful to include only those digits that are significant, and to maintain the uncertainty implied by these significant figures when transforming measurements into results.

The relative amount of a constituent in a sample is expressed as a concentration. There are many ways to express concentration, the most common of which are molarity, weight percent, volume percent, weight-to-volume percent, parts per million and parts per billion. Concentrations also can be expressed using p-functions.

Stoichiometric relationships and calculations are important in many quantitative analyses. The stoichiometry between the reactants and products of a chemical reaction are given by the coefficients of a balanced chemical reaction.

Balances, volumetric flasks, pipets, and ovens are standard pieces of equipment that you will routinely use in the analytical lab. You should be familiar with the proper way to use this equipment. You also should be familiar with how to prepare a stock solution of known concentration, and how to prepare a dilute solution from a stock solution.

2J Problems

1. Indicate how many significant figures are in each of the following numbers.
 - a. 903
 - b. 0.903
 - c. 1.0903
 - d. 0.0903
 - e. 0.09030
 - f. 9.03×10^2
2. Round each of the following to three significant figures.
 - a. 0.89377
 - b. 0.89328
 - c. 0.89350
 - d. 0.8997
 - e. 0.08907
3. Round each to the stated number of significant figures.
 - a. the atomic weight of carbon to 4 significant figures
 - b. the atomic weight of oxygen to 3 significant figures
 - c. Avogadro's number to 4 significant figures
 - d. Faraday's constant to 3 significant figures
4. Report results for the following calculations to the correct number of significant figures.
 - a. $4.591 + 0.2309 + 67.1 =$

- b. $313 - 273.15 =$
- c. $712 \times 8.6 =$
- d. $1.43/0.026 =$
- e. $(8.314 \times 298)/96485 =$
- f. $\log(6.53 \times 10^{-5}) =$
- g. $10^{-7.14} =$
- h. $(6.51 \times 10^{-5}) \times (8.14 \times 10^{-9}) =$
5. A 12.1374 g sample of an ore containing Ni and Co was carried through Fresenius' analytical scheme shown in [Figure 1.1](#). At point A the combined mass of Ni and Co was found to be 0.2306 g, while at point B the mass of Co was found to be 0.0813 g. Report the weight percent Ni in the ore to the correct number of significant figures.
6. [Figure 1.2](#) shows an analytical method for the analysis of Ni in ores based on the precipitation of Ni^{2+} using dimethylglyoxime. The formula for the precipitate is $\text{Ni}(\text{C}_4\text{H}_{14}\text{N}_4\text{O}_4)_2$. Calculate the precipitate's formula weight to the correct number of significant figures.
7. An analyst wishes to add 256 mg of Cl^- to a reaction mixture. How many mL of 0.217 M BaCl_2 is this?
8. The concentration of lead in an industrial waste stream is 0.28 ppm. What is its molar concentration?
9. Commercially available concentrated hydrochloric acid is 37.0% w/w HCl. Its density is 1.18 g/mL. Using this information calculate (a) the molarity of concentrated HCl, and (b) the mass and volume (in mL) of solution containing 0.315 moles of HCl.
10. The density of concentrated ammonia, which is 28.0% w/w NH_3 , is 0.899 g/mL. What volume of this reagent should be diluted to 1.0×10^3 mL to make a solution that is 0.036 M in NH_3 ?
11. A 250.0 mL aqueous solution contains 45.1 μg of a pesticide. Express the pesticide's concentration in weight percent, in parts per million, and in parts per billion.
12. A city's water supply is fluoridated by adding NaF. The desired concentration of F^- is 1.6 ppm. How many mg of NaF should be added per gallon of treated water if the water supply already is 0.2 ppm in F^- ?
13. What is the pH of a solution for which the concentration of H^+ is 6.92×10^{-6} M? What is the $[\text{H}^+]$ in a solution whose pH is 8.923?

14. When using a graduate cylinder, the absolute accuracy with which you can deliver a given volume is $\pm 1\%$ of the cylinder's maximum volume. What are the absolute and relative uncertainties if you deliver 15 mL of a reagent using a 25 mL graduated cylinder? Repeat for a 50 mL graduated cylinder.
15. Calculate the molarity of a potassium dichromate solution prepared by placing 9.67 grams of $\text{K}_2\text{Cr}_2\text{O}_7$ in a 100-mL volumetric flask, dissolving, and diluting to the calibration mark.
16. For each of the following explain how you would prepare 1.0 L of a solution that is 0.10 M in K^+ . Repeat for concentrations of 1.0×10^2 ppm K^+ and 1.0% w/v K^+ .
- a. KCl b. K_2SO_4 c. $\text{K}_3\text{Fe}(\text{CN})_6$
17. A series of dilute NaCl solutions are prepared starting with an initial stock solution of 0.100 M NaCl. Solution A is prepared by pipeting 10 mL of the stock solution into a 250-mL volumetric flask and diluting to volume. Solution B is prepared by pipeting 25 mL of solution A into a 100-mL volumetric flask and diluting to volume. Solution C is prepared by pipeting 20 mL of solution B into a 500-mL volumetric flask and diluting to volume. What is the molar concentration of NaCl in solutions A, B and C?
18. Calculate the molar concentration of NaCl, to the correct number of significant figures, if 1.917 g of NaCl is placed in a beaker and dissolved in 50 mL of water measured with a graduated cylinder. If this solution is quantitatively transferred to a 250-mL volumetric flask and diluted to volume, what is its concentration to the correct number of significant figures?
19. What is the molar concentration of NO_3^- in a solution prepared by mixing 50.0 mL of 0.050 M KNO_3 with 40.0 mL of 0.075 M NaNO_3 ? What is p NO_3 for the mixture?
20. What is the molar concentration of Cl^- in a solution prepared by mixing 25.0 mL of 0.025 M NaCl with 35.0 mL of 0.050 M BaCl_2 ? What is pCl for the mixture?
21. To determine the concentration of ethanol in cognac a 5.00 mL sample of cognac is diluted to 0.500 L. Analysis of the diluted cognac gives an ethanol concentration of 0.0844 M. What is the molar concentration of ethanol in the undiluted cognac?

This is an example of a serial dilution, which is a useful method for preparing very dilute solutions of reagents.

2K Solutions to Practice Exercises

Practice Exercise 2.1

The correct answer to this exercise is 1.9×10^{-2} . To see why this is correct, let's work through the problem in a series of steps. Here is the original problem

$$\frac{0.250 \times (9.93 \times 10^{-3}) - 0.100 \times (1.927 \times 10^{-2})}{9.93 \times 10^{-3} + 1.927 \times 10^{-2}} =$$

Following the correct order of operations we first complete the two multiplications in the numerator. In each case the answer has three significant figures, although we retain an extra digit, highlight in red, to avoid round-off errors.

$$\frac{2.482 \times 10^{-3} - 1.927 \times 10^{-3}}{9.93 \times 10^{-3} + 1.927 \times 10^{-2}} =$$

Completing the subtraction in the numerator leaves us with two significant figures since the last significant digit for each value is in the hundredths place.

$$\frac{0.555 \times 10^{-3}}{9.93 \times 10^{-3} + 1.927 \times 10^{-2}} =$$

The two values in the denominator have different exponents. Because we are adding together these values, we first rewrite them using a common exponent.

$$\frac{0.555 \times 10^{-3}}{0.993 \times 10^{-2} + 1.927 \times 10^{-2}} =$$

The sum in the denominator has four significant figures since each value has three decimal places.

$$\frac{0.555 \times 10^{-3}}{2.920 \times 10^{-2}} =$$

Finally, we complete the division, which leaves us with a result having two significant figures.

$$\frac{0.555 \times 10^{-3}}{2.920 \times 10^{-2}} = 1.9 \times 10^{-2}$$

Click [here](#) to return to the chapter.

Practice Exercise 2.2

The concentrations of the two solutions are

$$\frac{0.50 \text{ mol NaCl}}{\text{L}} \times \frac{58.43 \text{ g NaCl}}{\text{mol NaCl}} \times \frac{10^6 \text{ g}}{\text{g}} \times \frac{1 \text{ L}}{1000 \text{ mL}} = 2.9 \times 10^3 \text{ g/mL}$$

$$\frac{0.25 \text{ mol SrCl}_2}{\text{L}} \times \frac{158.5 \text{ g SrCl}_2}{\text{mol NaCl}} \times \frac{10^6 \text{ g}}{\text{g}} \times \frac{1 \text{ L}}{1000 \text{ mL}} = 4.0 \times 10^3 \text{ g/mL}$$

The solution of SrCl_2 has the larger concentration when expressed in $\mu\text{g}/\text{mL}$ instead of in mol/L .

Click [here](#) to return to the chapter.

Practice Exercise 2.3

The concentrations of K^+ and SO_4^{2-} are

$$\frac{1.5 \text{ g K}_2\text{SO}_4}{0.500 \text{ L}} \times \frac{1 \text{ mol K}_2\text{SO}_4}{174.3 \text{ g K}_2\text{SO}_4} \times \frac{2 \text{ mol K}^+}{\text{mol K}_2\text{SO}_4} = 3.44 \times 10^{-2} \text{ M K}^+$$

$$\frac{1.5 \text{ g K}_2\text{SO}_4}{0.500 \text{ L}} \times \frac{1 \text{ mol K}_2\text{SO}_4}{174.3 \text{ g K}_2\text{SO}_4} \times \frac{1 \text{ mol SO}_4^{2-}}{\text{mol K}_2\text{SO}_4} = 1.72 \times 10^{-2} \text{ M SO}_4^{2-}$$

The pK and pSO_4 values are

$$\text{pK} = -\log(3.44 \times 10^{-2}) = 1.46$$

$$\text{pSO}_4 = -\log(1.72 \times 10^{-2}) = 1.76$$

Click [here](#) to return to the chapter.

Practice Exercise 2.4

First, we find the moles of AgBr

$$0.250 \text{ g AgBr} \times \frac{1 \text{ mol AgBr}}{187.8 \text{ g AgBr}} = 1.331 \times 10^{-3}$$

and then the moles and volume of $\text{Na}_2\text{S}_2\text{O}_3$

$$1.331 \times 10^{-3} \text{ mol AgBr} \times \frac{2 \text{ mol Na}_2\text{S}_2\text{O}_3}{\text{mol AgBr}} = 2.662 \times 10^{-3}$$

$$2.662 \times 10^{-3} \text{ mol Na}_2\text{S}_2\text{O}_3 \times \frac{1 \text{ L}}{0.0138 \text{ mol Na}_2\text{S}_2\text{O}_3} \times \frac{1000 \text{ mL}}{\text{L}} = 193 \text{ mL}$$

Click [here](#) to return to the chapter.

Practice Exercise 2.5

Preparing 500 mL of 0.1250 M KBrO_3 requires

$$0.500 \text{ L} \times \frac{0.1250 \text{ mol KBrO}_3}{\text{L}} \times \frac{167.00 \text{ g KBrO}_3}{\text{mol KBrO}_3} = 10.44 \text{ g KBrO}_3$$

Because the concentration has four significant figures, we must prepare the solution using volumetric glassware. Place a 10.44 g sample of KBrO_3 in a 500-mL volumetric flask and fill part way with water. Swirl to dissolve the KBrO_3 and then dilute with water to the flask's calibration mark.

Click [here](#) to return to the chapter.

Practice Exercise 2.6

The first solution is a stock solution, which we then dilute to prepare the standard solution. The concentration of Zn^{2+} in the stock solution is

$$\frac{1.004 \text{ g Zn}}{500 \text{ mL}} \times \frac{10^6 \text{ g}}{\text{g}} = 2008 \text{ g/mL}$$

To find the concentration of the standard solution we use equation 2.3

$$\frac{2008 \text{ g Zn}^{2+}}{\text{mL}} \times 2.000 \text{ mL} = C_{\text{new}} \times 250.0 \text{ mL}$$

where C_{new} is the standard solution's concentration. Solving gives a concentration of $16.06 \mu\text{g Zn}^{2+}/\text{mL}$.

Click [here](#) to return to the chapter.

Chapter 3

The Vocabulary of Analytical Chemistry

Chapter Overview

- 3A Analysis, Determination, and Measurement
- 3B Techniques, Methods, Procedures, and Protocols
- 3C Classifying Analytical Techniques
- 3D Selecting an Analytical Method
- 3E Developing the Procedure
- 3F Protocols
- 3G The Importance of Analytical Methodology
- 3H Key Terms
- 3I Chapter Summary
- 3J Problems
- 3K Solutions to Practice Exercises

If you leaf through an issue of the journal *Analytical Chemistry*, you will soon discover that the authors and readers share a common vocabulary of analytical terms. You are probably familiar with some of these terms, such as accuracy and precision, but other terms, such as analyte and matrix may be less familiar to you. In order to participate in the community of analytical chemists, you must first understand its vocabulary. The goal of this chapter, therefore, is to introduce you to some important analytical terms. Becoming comfortable with these terms will make the material in the chapters that follow easier to read and understand.

3A Analysis, Determination and Measurement

The first important distinction we will make is among the terms analysis, determination, and measurement. An analysis provides chemical or physical information about a sample. The component of interest in the sample is called the **ANALYTE**, and the remainder of the sample is the **MATRIX**. In an analysis we determine the identity, concentration, or properties of an analyte. To make this determination we measure one or more of the analyte's chemical or physical properties.

An example helps clarify the difference between an **ANALYSIS**, a **DETERMINATION** and a **MEASUREMENT**. In 1974 the federal government enacted the Safe Drinking Water Act to ensure the safety of public drinking water supplies. To comply with this act, municipalities regularly monitor their drinking water supply for potentially harmful substances. One such substance is fecal coliform bacteria. Municipal water departments collect and analyze samples from their water supply. They determine the concentration of fecal coliform bacteria by passing a portion of water through a membrane filter, placing the filter in a dish containing a nutrient broth, and incubating for 22–24 hr at $44.5\text{ }^{\circ}\text{C} \pm 0.2\text{ }^{\circ}\text{C}$. At the end of the incubation period they count the number of bacterial colonies in the dish and report the result as the number of colonies per 100 mL (Figure 3.1). Thus, municipal water departments analyze samples of water to determine the concentration of fecal coliform bacteria by measuring the number of bacterial colonies that form during a carefully defined incubation period.

Fecal coliform counts provide a general measure of the presence of pathogenic organisms in a water supply. For drinking water, the current maximum contaminant level (MCL) for total coliforms, including fecal coliforms is less than 1 colony/100 mL. Municipal water departments must regularly test the water supply and must take action if more than 5% of the samples in any month test positive for coliform bacteria.

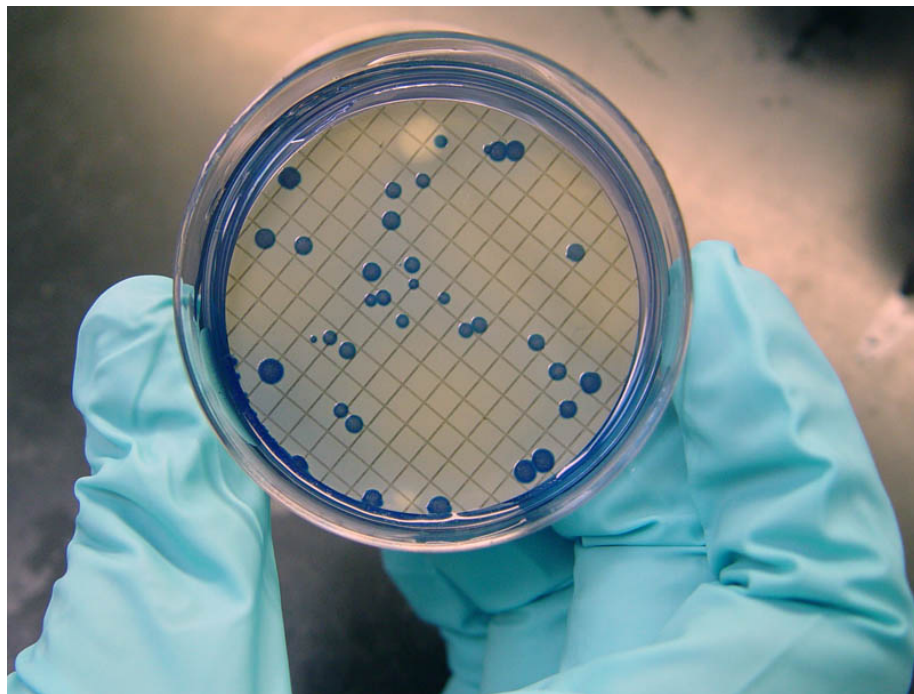


Figure 3.1 Colonies of fecal coliform bacteria from a water supply. Source: Susan Boyer. Photo courtesy of ARS–USDA (www.ars.usda.gov).

3B Techniques, Methods, Procedures, and Protocols

Suppose you are asked to develop an analytical method to determine the concentration of lead in drinking water. How would you approach this problem? To provide a structure for answering this question let's draw a distinction among four levels of analytical methodology: techniques, methods, procedures, and protocols.¹

A **TECHNIQUE** is any chemical or physical principle we can use to study an analyte. There are many techniques for determining the concentration of lead in drinking water.² In graphite furnace atomic absorption spectroscopy (GFAAS), for example, we first convert aqueous lead ions into a free atom state—a process we call atomization. We then measure the amount of light absorbed by the free atoms. Thus, GFAAS uses both a chemical principle (atomization) and a physical principle (absorption of light).

A **METHOD** is the application of a technique for a specific analyte in a specific matrix. As shown in Figure 3.2, the GFAAS method for determining lead in water is different from that for lead in soil or blood.

A **PROCEDURE** is a set of written directions telling us how to apply a method to a particular sample, including information on obtaining samples, handling interferences, and validating results. A method may have several procedures as each analyst or agency adapts it to a specific need. As shown in Figure 3.2, the American Public Health Agency and the American Society for Testing Materials publish separate procedures for determining the concentration of lead in water.

1 Taylor, J. K. *Anal. Chem.* **1983**, *55*, 600A–608A.

2 Fitch, A.; Wang, Y.; Mellican, S.; Macha, S. *Anal. Chem.* **1996**, *68*, 727A–731A.

See Chapter 10 for a discussion of graphite furnace atomic absorption spectroscopy. Chapters 8–13 provide coverage for a range of important analytical techniques.

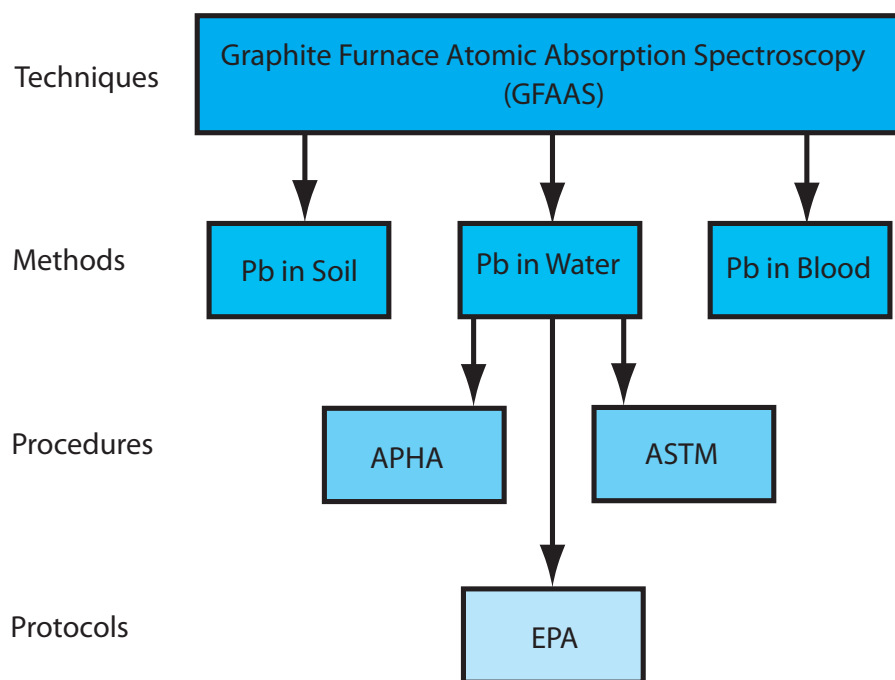


Figure 3.2 Chart showing the hierarchical relationship among a technique, methods using that technique, and procedures and protocols for one method. The abbreviations are APHA: American Public Health Association, ASTM: American Society for Testing Materials, EPA: Environmental Protection Agency.




Figure 3.3 Graduated cylinders containing 0.10 M $\text{Cu}(\text{NO}_3)_2$. Although the cylinders contain the same concentration of Cu^{2+} , the cylinder on the left contains 1.0×10^{-4} mol Cu^{2+} and the cylinder on the right contains 2.0×10^{-4} mol Cu^{2+} .

Finally, a **PROTOCOL** is a set of stringent guidelines specifying a procedure that must be followed if an agency is to accept the results. Protocols are common when the result of an analysis supports or defines public policy. When determining the concentration of lead in water under the Safe Drinking Water Act, for example, labs must use a protocol specified by the Environmental Protection Agency.

There is an obvious order to these four levels of analytical methodology. Ideally, a protocol uses a previously validated procedure. Before developing and validating a procedure, a method of analysis must be selected. This requires, in turn, an initial screening of available techniques to determine those that have the potential for monitoring the analyte.

3C Classifying Analytical Techniques

Analyzing a sample generates a chemical or physical **SIGNAL** that is proportional to the amount of analyte in the sample. This signal may be anything we can measure, such as mass or absorbance. It is convenient to divide analytical techniques into two general classes depending on whether the signal is proportional to the mass or moles of analyte, or to the analyte's concentration.

Consider the two graduated cylinders in Figure 3.3, each containing a solution of 0.010 M $\text{Cu}(\text{NO}_3)_2$. Cylinder 1 contains 10 mL, or 1.0×10^{-4} moles of Cu^{2+} , and cylinder 2 contains 20 mL, or 2.0×10^{-4} moles of Cu^{2+} . If a technique responds to the absolute amount of analyte in the sample, then the signal due to the analyte, S_A , is

$$S_A = k_A n_A \quad 3.1$$

where n_A is the moles or grams of analyte in the sample, and k_A is a proportionality constant. Since cylinder 2 contains twice as many moles of Cu^{2+} as cylinder 1, analyzing the contents of cylinder 2 gives a signal that is twice that of cylinder 1.

A second class of analytical techniques are those that respond to the analyte's concentration, C_A

$$S_A = k_A C_A \quad 3.2$$

Since the solutions in both cylinders have the same concentration of Cu^{2+} , their analysis yields identical signals.

A technique responding to the absolute amount of analyte is a **TOTAL ANALYSIS TECHNIQUE**. Mass and volume are the most common signals for a total analysis technique, and the corresponding techniques are gravimetry (Chapter 8) and titrimetry (Chapter 9). With a few exceptions, the signal for a total analysis technique is the result of one or more chemical reactions involving the analyte. These reactions may involve any combination of precipitation, acid–base, complexation, or redox chemistry. The stoichiometry of the reactions determines the value of k_A in equation 3.1.

Historically, most early analytical methods used a total analysis technique. For this reason, total analysis techniques are often called “classical” techniques.

Spectroscopy (Chapter 10) and electrochemistry (Chapter 11), in which an optical or electrical signal is proportional to the relative amount of analyte in a sample, are examples of **CONCENTRATION TECHNIQUES**. The relationship between the signal and the analyte's concentration is a theoretical function that depends on experimental conditions and the instrumentation used to measure the signal. For this reason the value of k_A in [equation 3.2](#) must be determined experimentally.

Since most concentration techniques rely on measuring an optical or electrical signal, they also are known as “instrumental” techniques.

3D Selecting an Analytical Method

A method is the application of a technique to a specific analyte in a specific matrix. We can develop an analytical method for determining the concentration of lead in drinking water using any of the techniques mentioned in the previous section. A gravimetric method, for example, might precipitate the lead as PbSO_4 or PbCrO_4 , and use the precipitate's mass as the analytical signal. Lead forms several soluble complexes, which we can use to design a complexation titrimetric method. As shown in [Figure 3.2](#), we can use graphite furnace atomic absorption spectroscopy to determine the concentration of lead in drinking water. Finally, the availability of multiple oxidation states (Pb^0 , Pb^{2+} , Pb^{4+}) makes electrochemical methods feasible.

The requirements of the analysis determine the best method. In choosing a method, consideration is given to some or all the following design criteria: accuracy, precision, sensitivity, selectivity, robustness, ruggedness, scale of operation, analysis time, availability of equipment, and cost.

3D.1 Accuracy

ACCURACY is how closely the result of an experiment agrees with the “true” or expected result. We can express accuracy as an absolute error, e

$$e = \text{obtained result} - \text{expected result}$$

or as a percentage relative error, $\%e_r$

$$\%e_r = \frac{\text{obtained result} - \text{expected result}}{\text{expected result}} \times 100$$

A method's accuracy depends on many things, including the signal's source, the value of k_A in [equation 3.1](#) or [equation 3.2](#), and the ease of handling samples without loss or contamination. In general, methods relying on total analysis techniques, such as gravimetry and titrimetry, produce results of higher accuracy because we can measure mass and volume with high accuracy, and because the value of k_A is known exactly through stoichiometry.

Since it is unlikely that we know the true result, we use an expected or accepted result when evaluating accuracy. For example, we might use a reference standard, which has an accepted value, to establish an analytical method's accuracy.

You will find a more detailed treatment of accuracy in Chapter 4, including a discussion of sources of errors.

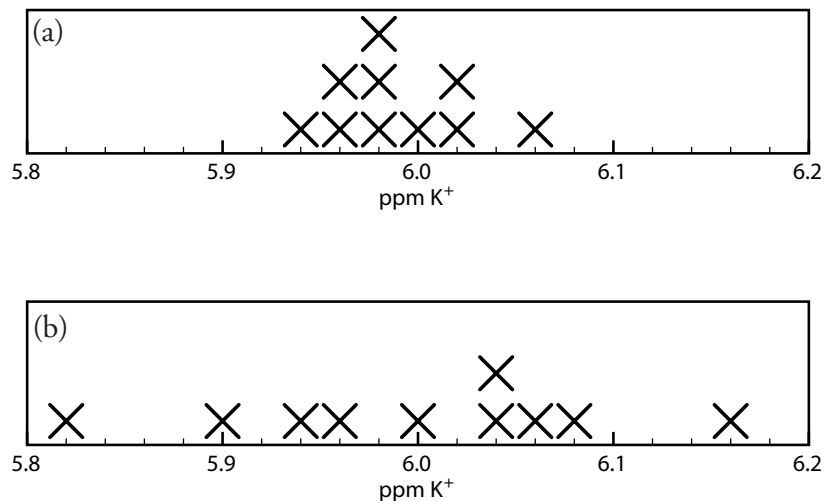


Figure 3.4 Two determinations of the concentration of K^+ in serum, showing the effect of precision on the distribution of individual results. The data in (a) are less scattered and, therefore, more precise than the data in (b).

Confusing accuracy and precision is a common mistake. See [Ryder, J.; Clark, A. *U. Chem. Ed.* **2002**, *6*, 1–3](#), and [Tomlinson, J.; Dyson, P. J.; Garratt, J. *U. Chem. Ed.* **2001**, *5*, 16–23](#) for discussions of this and other common misconceptions about the meaning of error.

You will find a more detailed treatment of precision in [Chapter 4](#), including a discussion of sources of errors.

Confidence, as we will see in [Chapter 4](#), is a statistical concept that builds on the idea of a population of results. For this reason, we will postpone our discussion of detection limits to [Chapter 4](#). For now, the definition of a detection limit given here is sufficient.

3D.2 Precision

When a sample is analyzed several times, the individual results are rarely the same. Instead, the results are randomly scattered. **PRECISION** is a measure of this variability. The closer the agreement between individual analyses, the more precise the results. For example, in determining the concentration of K^+ in serum the results shown in Figure 3.4(a) are more precise than those in Figure 3.4(b). It is important to understand that precision does not imply accuracy. That the data in Figure 3.4(a) are more precise does not mean that the first set of results is more accurate. In fact, neither set of results may be accurate.

A method's precision depends on several factors, including the uncertainty in measuring the signal and the ease of handling samples reproducibly. In most cases we can measure the signal for a total analysis method with a higher precision than the corresponding signal for a concentration method. Precision is covered in more detail in Chapter 4.

3D.3 Sensitivity

The ability to demonstrate that two samples have different amounts of analyte is an essential part of many analyses. A method's **SENSITIVITY** is a measure of its ability to establish that such differences are significant. Sensitivity is often confused with a method's **DETECTION LIMIT**, which is the smallest amount of analyte that we can determine with confidence.

Sensitivity is equivalent to the proportionality constant, k_A , in [equation 3.1](#) and [equation 3.2](#).³ If ΔS_A is the smallest difference that we can measure between two signals, then the smallest detectable difference in the absolute amount or relative amount of analyte is

³ IUPAC Compendium of Chemical Terminology, Electronic version, <http://goldbook.iupac.org/S05606.html>.

$$\Delta n_A = \frac{\Delta S_A}{k_A} \quad \text{or} \quad \Delta C_A = \frac{\Delta S_A}{k_A}$$

Suppose, for example, that our analytical signal is a measurement of mass using a balance whose smallest detectable increment is ± 0.0001 g. If our method's sensitivity is 0.200, then our method can conceivably detect a difference in mass of as little as

$$\Delta n_A = \frac{\pm 0.0001 \text{ g}}{0.200} = \pm 0.0005 \text{ g}$$

For two methods with the same ΔS_A , the method with the greater sensitivity—the larger k_A —is better able to discriminate between smaller amounts of analyte.

3D.4 Specificity and Selectivity

An analytical method is specific if its signal depends only on the analyte.⁴ Although **SPECIFICITY** is the ideal, few analytical methods are completely free from the influence of interfering species. When an **INTERFERENT** contributes to the signal, we expand [equation 3.1](#) and [equation 3.2](#) to include its contribution to the sample's signal, S_{samp}

$$S_{\text{samp}} = S_A + S_I = k_A n_A + k_I n_I \quad 3.3$$

$$S_{\text{samp}} = S_A + S_I = k_A C_A + k_I C_I \quad 3.4$$

where S_I is the interferent's contribution to the signal, k_I is the interferent's sensitivity, and n_I and C_I are the moles (or grams) and concentration of the interferent in the sample.

SELECTIVITY is a measure of a method's freedom from interferences.⁵ The selectivity of a method for the interferent relative to the analyte is defined by a **SELECTIVITY COEFFICIENT**, $K_{A,I}$

$$K_{A,I} = \frac{k_I}{k_A} \quad 3.5$$

which may be positive or negative depending on the sign of k_I and k_A . The selectivity coefficient is greater than +1 or less than -1 when the method is more selective for the interferent than for the analyte.

Determining the selectivity coefficient's value is easy if we already know the values for k_A and k_I . As shown by [Example 3.1](#), we also can determine $K_{A,I}$ by measuring S_{samp} in the presence of and in the absence of the interferent.

Although k_A and k_I are usually positive, they also may be negative. For example, some analytical methods work by measuring the concentration of a species that reacts with the analyte. As the analyte's concentration increases, the concentration of the species producing the signal decreases, and the signal becomes smaller. If the signal in the absence of analyte is assigned a value of zero, then the subsequent signals are negative.

4 (a) Persson, B-A; Vessman, J. *Trends Anal. Chem.* **1998**, *17*, 117–119; (b) Persson, B-A; Vessman, J. *Trends Anal. Chem.* **2001**, *20*, 526–532.

5 Valcárcel, M.; Gomez-Hens, A.; Rubio, S. *Trends Anal. Chem.* **2001**, *20*, 386–393.

Example 3.1

A method for the analysis of Ca^{2+} in water suffers from an interference in the presence of Zn^{2+} . When the concentration of Ca^{2+} is 100 times greater than that of Zn^{2+} the analysis for Ca^{2+} gives a relative error of +0.5%. What is the selectivity coefficient for this method?

SOLUTION

Since only relative concentrations are reported, we can arbitrarily assign absolute concentrations. To make the calculations easy, we will let $C_{\text{Ca}} = 100$ (arbitrary units) and $C_{\text{Zn}} = 1$. A relative error of +0.5% means that the signal in the presence of Zn^{2+} is 0.5% greater than the signal in the absence of zinc. Again, we can assign values to make the calculation easier. If the signal in the absence of zinc is 100 (arbitrary units), then the signal in the presence of zinc is 100.5.

The value of k_{Ca} is determined using [equation 3.2](#)

$$k_{\text{Ca}} = \frac{S_{\text{Ca}}}{C_{\text{Ca}}} = \frac{100}{100} = 1$$

In the presence of zinc the signal is given by [equation 3.4](#); thus

$$S_{\text{samp}} = 100.5 = k_{\text{Ca}} C_{\text{Ca}} + k_{\text{Zn}} C_{\text{Zn}} = (1 \times 100) + k_{\text{Zn}} \times 1$$

Solving for k_{Zn} gives a value of 0.5. The selectivity coefficient is

$$K_{\text{Ca,Zn}} = \frac{k_{\text{Zn}}}{k_{\text{Ca}}} = \frac{0.5}{1} = 0.5$$

Practice Exercise 3.1

Wang and colleagues describe a fluorescence method for the analysis of Ag^+ in water. When analyzing a solution containing 1.0×10^{-9} M Ag^+ and 1.1×10^{-7} M Ni^{2+} the fluorescence intensity (the signal) was +4.9% greater than that obtained for a sample of 1.0×10^{-9} M Ag^+ . What is $K_{\text{Ag,Ni}}$ for this analytical method? The full citation for the data in this exercise is Wang, L.; Liang, A. N.; Chen, H.; Liu, Y.; Qian, B.; Fu, J. *Anal. Chim. Acta* **2008**, 616, 170-176.

Click [here](#) to review your answer to this exercise.

The selectivity coefficient provides us with a useful way to evaluate an interferent's potential effect on an analysis. Solving [equation 3.5](#) for k_1

$$k_1 = K_{\text{A,I}} \times k_{\text{A}} \quad 3.6$$

substituting in [equation 3.3](#) and [equation 3.4](#), and simplifying gives

If you are unsure why the signal in the presence of zinc is 100.5, note that the percentage relative error for this problem is given by

$$\frac{\text{obtained result} - 100}{100} \times 100 = +0.5\%$$

Solving gives an obtained result of 100.5.

$$S_{\text{samp}} = k_A \{n_A + K_{A,I} \times n_I\} \quad 3.7$$

$$S_{\text{samp}} = k_A \{C_A + K_{A,I} \times C_I\} \quad 3.8$$

An interferent will not pose a problem as long as the term $K_{A,I} \times n_I$ in equation 3.7 is significantly smaller than n_A , or if $K_{A,I} \times C_I$ in equation 3.8 is significantly smaller than C_A .

Example 3.2

Barnett and colleagues developed a method for determining the concentration of codeine in poppy plants.⁶ As part of their study they determined the method's response to codeine in the presence of several interferents. For example, the authors found that the method's signal for 6-methoxycodeine was 6 (arbitrary units) when that for an equimolar solution of codeine was 40.

- What is the value of the selectivity coefficient when 6-methoxycodeine is the interferent and codeine is the analyte.
- If the concentration of codeine must be known with an accuracy of $\pm 0.50\%$, what is the maximum relative concentration of 6-methoxycodeine (i.e. [6-methoxycodeine]/[codeine]) that can be present?

SOLUTION

- The signals due to the analyte, S_A , and the interferent, S_I , are

$$S_A = k_A C_A \quad S_I = k_I C_I$$

Solving these equations for k_A and k_I , and substituting into [equation 3.6](#) gives

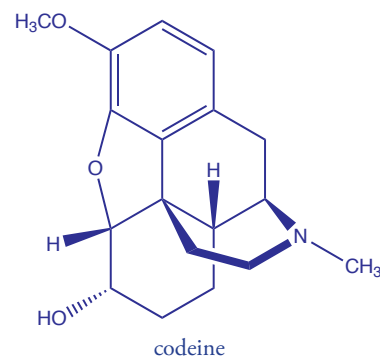
$$K_{A,I} = \frac{S_I/C_I}{S_A/C_A}$$

Since the concentrations of analyte and interferent are equimolar ($C_A = C_I$), we have

$$K_{A,I} = \frac{S_I}{S_A} = \frac{6}{40} = 0.15$$

- To achieve an accuracy of better than $\pm 0.50\%$ the term $K_{A,I} \times C_I$ in equation 3.8 must be less than 0.50% of C_A ; thus

$$K_{A,I} \times C_I \leq 0.0050 \times C_A$$



⁶ Barnett, N. W.; Bowser, T. A.; Geraldi, R. D.; Smith, B. *Anal. Chim. Acta* **1996**, *318*, 309–317.

Solving this inequality for the ratio C_I/C_A and substituting in the value for $K_{A,I}$ from part (a) gives

$$\frac{C_I}{C_A} \leq \frac{0.0050}{K_{A,I}} = \frac{0.0050}{0.15} = 0.033$$

Therefore, the concentration of 6-methoxycodeine can not exceed 3.3% of codeine's concentration.

Practice Exercise 3.2

Mercury (II) also is an interferent in the fluorescence method for Ag^+ developed by Wang and colleagues (see [Practice Exercise 3.1](#) for the citation). The selectivity coefficient, $K_{\text{Ag,Hg}}$ has a value of -1.0×10^{-3} .

- What is the significance of the selectivity coefficient's negative sign?
- Suppose you plan to use this method to analyze solutions with concentrations of Ag^+ that are no smaller than 1.0 nM. What is the maximum concentration of Hg^{2+} you can tolerate to ensure that your percentage relative errors are less than $\pm 1.0\%$?

Click [here](#) to review your answers to this exercise.

Look back at [Figure 1.1](#), which shows Fresenius' analytical method for the determination of nickel in ores. The reason there are so many steps in this procedure is that precipitation reactions generally are not very selective. The method in [Figure 1.2](#) includes fewer steps because dimethylglyoxime is a more selective reagent. Even so, if an ore contains palladium, additional steps will be needed to prevent the palladium from interfering.

When a method's signal is the result of a chemical reaction—for example, when the signal is the mass of a precipitate—there is a good chance that the method is not very selective and that it is susceptible to interferences. Problems with selectivity also are more likely when the analyte is present at a very low concentration.⁷

3D.5 Robustness and Ruggedness

For a method to be useful it must provide reliable results. Unfortunately, methods are subject to a variety of chemical and physical interferences that contribute uncertainty to the analysis. When a method is relatively free from chemical interferences, we can use it on many analytes in a wide variety of sample matrices. Such methods are considered **ROBUST**.

Random variations in experimental conditions also introduces uncertainty. If a method's sensitivity, k , is too dependent on experimental conditions, such as temperature, acidity, or reaction time, then a slight change in any of these conditions may give a significantly different result. A **RUGGED** method is relatively insensitive to changes in experimental conditions.

3D.6 Scale of Operation

Another way to narrow the choice of methods is to consider three potential limitations: the amount of sample available for the analysis, the expected concentration of analyte in the samples, and the minimum amount of ana-

⁷ Rodgers, L. B. J. *Chem. Educ.* **1986**, *63*, 3–6.

lyte that produces a measurable signal. Collectively, these limitations define the analytical method's scale of operations.

We can display the scale of operations graphically (Figure 3.5) by plotting the sample's size on the x -axis and the analyte's concentration on the y -axis.⁸ For convenience, we divide samples into macro (>0.1 g), meso (10 mg–100 mg), micro (0.1 mg–10 mg), and ultramicro (<0.1 mg) sizes, and we divide analytes into major ($>1\%$ w/w), minor (0.01% w/w–1% w/w), trace ($10^{-7}\%$ w/w–0.01% w/w), and ultratrace ($<10^{-7}\%$ w/w) components. The analyte's concentration and the sample's size provide a characteristic description for an analysis. For example, in a microtrace analysis the sample weighs between 0.1 mg–10 mg and contains a concentration of analyte between $10^{-2}\%$ w/w– $10^{-7}\%$ w/w.

Diagonal lines connecting the axes show combinations of sample size and analyte concentration containing the same mass of analyte. As shown in Figure 3.5, for example, a 1-g sample that is 1% w/w analyte has the same amount of analyte (10 mg) as a 100-mg sample that is 10% w/w analyte, or a 10-mg sample that is 100% w/w analyte.

8 (a) Sandell, E. B.; Elving, P. J. in Kolthoff, I. M.; Elving, P. J., eds. *Treatise on Analytical Chemistry*, Interscience: New York, Part I, Vol. 1, Chapter 1, pp. 3–6; (b) Potts, L. W. *Quantitative Analysis—Theory and Practice*, Harper and Row: New York, 1987, pp. 12.

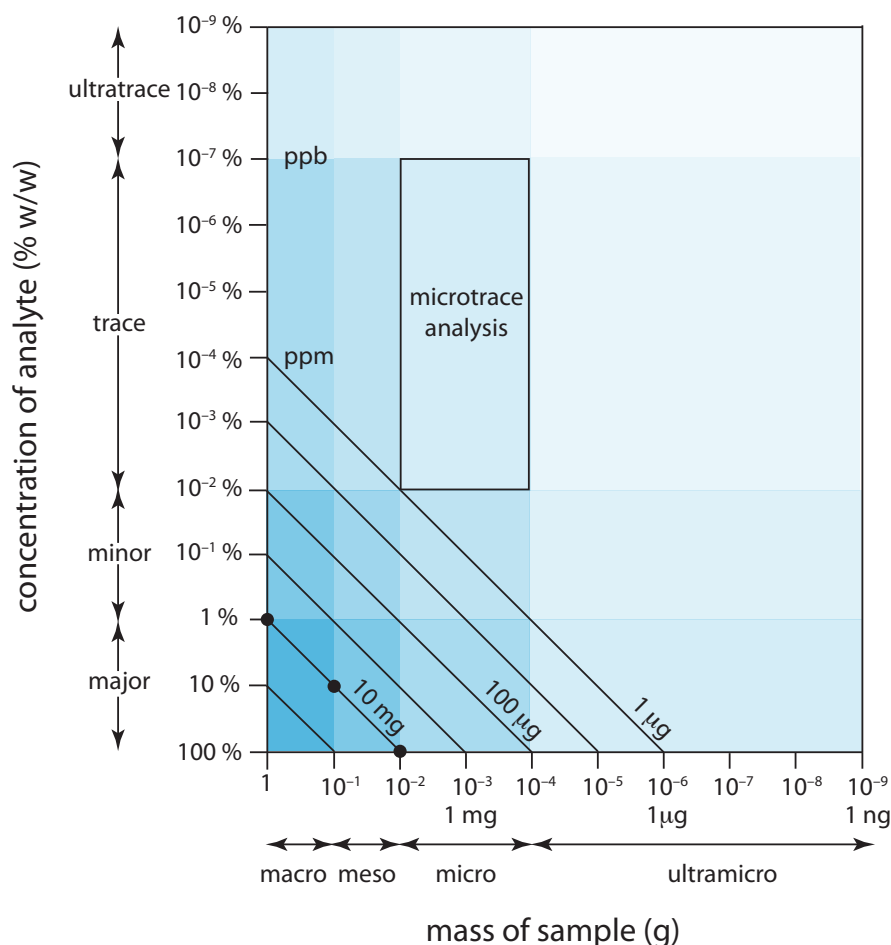


Figure 3.5 Scale of operations for analytical methods (adapted from references 8a and 8b).

The shaded areas define different types of analyses. The boxed area, for example, represents a microtrace analysis.

The diagonal lines show combinations of sample size and analyte concentration containing the same mass of analyte. The three filled circles (●), for example, indicate analyses using 10 mg of analyte.

It should not surprise you to learn that total analysis methods typically require macro or meso samples containing major analytes. Concentration methods are particularly useful for minor, trace, and ultratrace analytes in macro, meso, and micro samples.

We can use [Figure 3.5](#) to establish limits for analytical methods. If a method's minimum detectable signal is equivalent to 10 mg of analyte, then it is best suited to a major analyte in a macro or meso sample. Extending the method to an analyte with a concentration of 0.1% w/w requires a sample of 10 g, which is rarely practical due to the complications of carrying such a large amount of material through the analysis. On the other hand, small samples containing trace amounts of analyte place significant restrictions on an analysis. For example, 1-mg sample with an analyte present at $10^{-4}\%$ w/w contains just 1 ng of analyte. If we can isolate the analyte in 1 mL of solution, then we need an analytical method that can reliably detect it at a concentration of 1 ng/mL.

3D.7 Equipment, Time, and Cost

Finally, we can compare analytical methods with respect to equipment needs, the time to complete an analysis, and the cost per sample. Methods relying on instrumentation are equipment-intensive and may require significant operator training. For example, the graphite furnace atomic absorption spectroscopic method for determining lead in water requires a significant capital investment in the instrument and an experienced operator to obtain reliable results. Other methods, such as titrimetry, require less expensive equipment and less training.

The time to complete an analysis for one sample is often fairly similar from method to method. This is somewhat misleading, however, because much of this time is spent preparing solutions and gathering together equipment. Once the solutions and equipment are in place, the sampling rate may differ substantially from method to method. Additionally, some methods are more easily automated. This is a significant factor in selecting a method for a laboratory that handles a high volume of samples.

The cost of an analysis depends on many factors, including the cost of equipment and reagents, the cost of hiring analysts, and the number of samples that can be processed per hour. In general, methods relying on instruments cost more per sample than other methods.

3D.8 Making the Final Choice

Unfortunately, the design criteria discussed in this section are not mutually independent.⁹ Working with smaller samples or improving selectivity often comes at the expense of precision. Minimizing cost and analysis time may decrease accuracy. Selecting a method requires carefully balancing the design criteria. Usually, the most important design criterion is accuracy, and the best method is the one giving the most accurate result. When the need for results is urgent, as is often the case in clinical labs, analysis time may become the critical factor.

⁹ Valcárcel, M.; Ríos, A. *Anal. Chem.* **1993**, *65*, 781A–787A.

In some cases it is the sample's properties that determine the best method. A sample with a complex matrix, for example, may require a method with excellent selectivity to avoid interferences. Samples in which the analyte is present at a trace or ultratrace concentration usually require a concentration method. If the quantity of sample is limited, then the method must not require a large amount of sample.

Determining the concentration of lead in drinking water requires a method that can detect lead at the parts per billion concentration level. Selectivity is important because other metal ions are present at significantly higher concentrations. A method using graphite furnace atomic absorption spectroscopy is a common choice for determining lead in drinking water because it meets these specifications. The same method is also useful for determining lead in blood where its ability to detect low concentrations of lead using a few microliters of sample are important considerations.

3E Developing the Procedure

After selecting a method the next step is to develop a procedure that will accomplish the goals of our analysis. In developing the procedure attention is given to compensating for interferences, to selecting and calibrating equipment, to acquiring a representative sample, and to validating the method.

3E.1 Compensating for Interferences

A method's accuracy depends on its selectivity for the analyte. Even the best method, however, may not be free from interferents that contribute to the measured signal. Potential interferents may be present in the sample itself or in the reagents used during the analysis.

When the sample is free of interferents, the total signal, S_{total} , is a sum of the signal due to the analyte, S_{A} , and the signal due to interferents in the reagents, S_{reag} ,

$$S_{\text{total}} = S_{\text{A}} + S_{\text{reag}} = kn_{\text{A}} + S_{\text{reag}} \quad 3.9$$

$$S_{\text{total}} = S_{\text{A}} + S_{\text{reag}} = kC_{\text{A}} + S_{\text{reag}} \quad 3.10$$

Without an independent determination of S_{reag} we cannot solve equation 3.9 or 3.10 for the moles or concentration of analyte.

To determine the contribution of S_{reag} in equations 3.9 and 3.10 we measure the signal for a **METHOD BLANK**, a solution that does not contain the sample. Consider, for example, a procedure in which we dissolve a 0.1-g sample in a portion of solvent, add several reagents, and dilute to 100 mL with additional solvent. To prepare the method blank we omit the sample and dilute the reagents to 100 mL using the solvent. Because the analyte is absent, S_{total} for the method blank is equal to S_{reag} . Knowing the value for S_{reag} makes it is easy to correct S_{total} for the reagent's contribution to the total signal; thus

A method blank also is known as a reagent blank.

When the sample is a liquid, or is in solution, we use an equivalent volume of an inert solvent as a substitute for the sample.

$$(S_{\text{total}} - S_{\text{reag}}) = S_A = kn_A$$

$$(S_{\text{total}} - S_{\text{reag}}) = S_A = kC_A$$

By itself, a method blank cannot compensate for an interferent that is part of the sample's matrix. If we happen to know the interferent's identity and concentration, then we can add it to the method blank; however, this is not a common circumstance. A more common approach is to find a method for separating the analyte and interferent by removing one from the sample. Once the separation is complete, we can proceed with the analysis using [equation 3.9](#) or [equation 3.10](#).

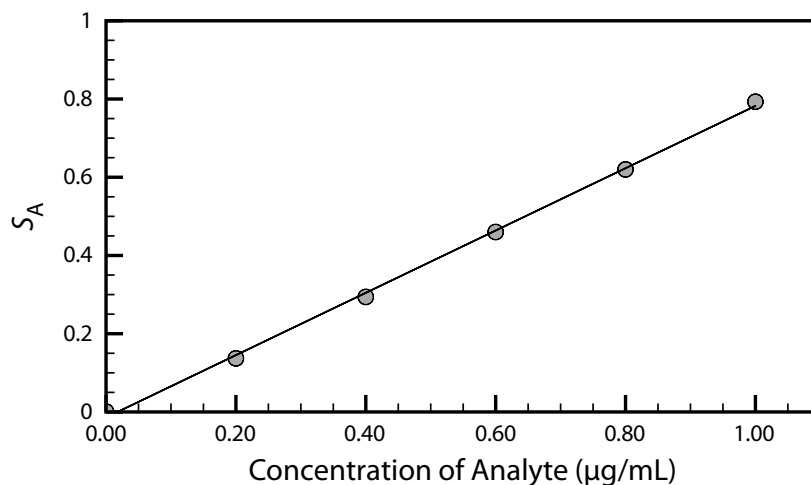
Methods for effecting this separation are discussed in [Chapter 7](#).

3E.2 Calibration

A simple definition of a quantitative analytical method is that it is a mechanism for converting a measurement, the signal, into the amount of analyte in a sample. Assuming that we can correct for the method blank and that we can compensate for interferents, a quantitative analysis is nothing more than solving [equation 3.1](#) or [equation 3.2](#) for n_A or C_A .

To solve these equations we need the value of k_A . For a total analysis method we usually know the value of k_A because it is defined by the stoichiometry of the chemical reactions generating the signal. For a concentration method, however, the value of k_A usually is a complex function of experimental conditions. A **CALIBRATION** is the process of experimentally determining the value of k_A by measuring the signal for one or more standard samples, each containing a known concentration of analyte. With a single standard we can calculate the value of k_A using [equation 3.1](#) or [equation 3.2](#). When using several standards with different concentrations of analyte, the result is best viewed visually by plotting S_A versus the concentration of analyte in the standards. Such a plot is known as a **CALIBRATION CURVE**, an example of which is shown in [Figure 3.6](#).

Figure 3.6 Example of a calibration curve. The filled circles (●) are the individual results for the standard samples and the line is the best fit to the data determined by a linear regression analysis. See [Chapter 5](#) for a further discussion of calibration curves and an explanation of linear regression.



3E.3 Sampling

Selecting an appropriate method and executing it properly helps us ensure that our analyses are accurate. If we analyze the wrong samples, however, then the accuracy of our work is of little consequence.

A proper sampling strategy ensures that our samples are representative of the material from which they are taken. Biased or nonrepresentative sampling, and contaminating samples during or after their collection are sampling errors that can lead to a significant error in accuracy. It is important to realize that sampling errors are independent of errors in the analytical method. As a result, sampling errors can not be corrected by evaluating a reagent blank.

[Chapter 7](#) provides a more detailed discussion of sampling, including strategies for obtaining representative samples.

3E.4 Validation

If we are to have confidence in our procedure we must demonstrate that it can provide acceptable results, a process we call **VALIDATION**. Perhaps the most important part of validating a procedure is establishing that its precision and accuracy are appropriate for the problem under investigation. We also ensure that the written procedure has sufficient detail so that different analysts or laboratories will obtain comparable results. Ideally, validation uses a standard sample whose composition closely matches the samples that will be analyzed. In the absence of appropriate standards, we can evaluate accuracy by comparing results to those obtained using a method of known accuracy.

You will find more details about validating analytical methods in [Chapter 14](#).

3F Protocols

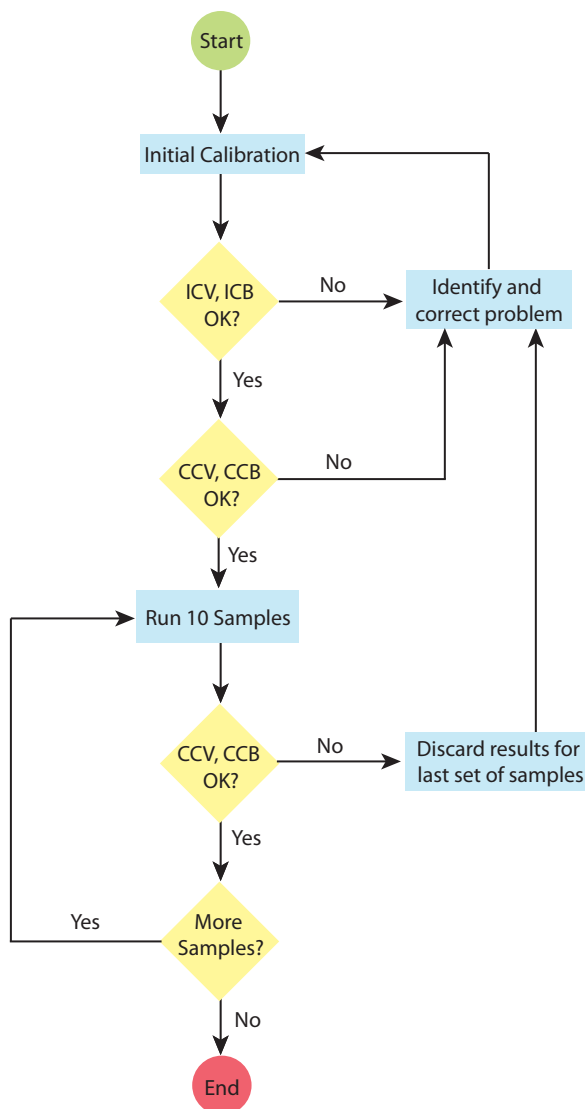
Earlier we defined a protocol as a set of stringent written guidelines specifying an exact procedure that must be followed before an agency will accept the results of an analysis. In addition to the considerations taken into account when designing a procedure, a protocol also contains explicit instructions regarding internal and external quality assurance and quality control (QA/QC) procedures.¹⁰ The goal of internal QA/QC is to ensure that a laboratory's work is both accurate and precise. External QA/QC is a process in which an external agency certifies a laboratory.

As an example, let's outline a portion of the Environmental Protection Agency's protocol for determining trace metals in water by graphite furnace atomic absorption spectroscopy as part of its Contract Laboratory Program (CLP). The CLP protocol (see [Figure 3.7](#)) calls for an initial calibration using a method blank and three standards, one of which is at the detection limit. The resulting calibration curve is verified by analyzing initial calibration verification (ICV) and initial calibration blank (ICB) samples. The lab's result for the ICV sample must fall within $\pm 10\%$ of its expected

¹⁰ (a) Amore, F. *Anal. Chem.* **1979**, *51*, 1105A–1110A; (b) Taylor, J. K. *Anal. Chem.* **1981**, *53*, 1588A–1593A.

Figure 3.7 Schematic diagram showing a portion of the EPA's protocol for determining trace metals in water using graphite furnace atomic absorption spectrometry.

The abbreviations are ICV: initial calibration verification; ICB: initial calibration blank; CCV: continuing calibration verification; CCB: continuing calibration blank.



concentration. If the result is outside this limit the analysis is stopped, and the problem identified and corrected before continuing.

After a successful analysis of the ICV and ICB samples, the lab re verifies the calibration by analyzing a continuing calibration verification (CCV) sample and a continuing calibration blank (CCB). Results for the CCV also must be within $\pm 10\%$ of its expected concentration. Again, if the lab's result for the CCV is outside the established limits, the analysis is stopped, the problem identified and corrected, and the system recalibrated as described above. Additional CCV and the CCB samples are analyzed before the first sample and after the last sample, and between every set of ten samples. If the result for any CCV or CCB sample is unacceptable, the results for the last set of samples are discarded, the system is recalibrated, and the samples reanalyzed. By following this protocol, every result is bound by successful checks on the calibration. Although not shown in Figure 3.7, the protocol also contains instructions for analyzing duplicate or split samples, and for using of spike tests to verify accuracy.

3G The Importance of Analytical Methodology

The importance of analytical methodology is evident if we examine environmental monitoring programs. The purpose of a monitoring program is to determine the present status of an environmental system, and to assess long term trends in the system's health. These are broad and poorly defined goals. In many cases, an environmental monitoring program begins before the essential questions are known. This is not surprising since it is difficult to formulate questions in the absence of any results. Without careful planning, however, a poor experimental design may result in data that has little value.

These concerns are illustrated by the Chesapeake Bay Monitoring Program. This research program, designed to study nutrients and toxic pollutants in the Chesapeake Bay, was initiated in 1984 as a cooperative venture between the federal government, the state governments of Maryland, Virginia, and Pennsylvania, and the District of Columbia. A 1989 review of the program highlights the problems common to many monitoring programs.¹¹

At the beginning of the Chesapeake Bay monitoring program, little attention was given to selecting analytical methods, in large part because the eventual use of the monitoring data had yet to be specified. The analytical methods initially chosen were standard methods already approved by the Environmental Protection Agency (EPA). In many cases these methods were not useful because they were designed to detect pollutants at their legally mandated maximum allowed concentrations. In unpolluted waters, however, the concentrations of these contaminants are often well below the detection limit of the EPA methods. For example, the detection limit for the EPA approved standard method for phosphate was 7.5 ppb. Since actual phosphate concentrations in Chesapeake Bay were below the EPA method's detection limit, it provided no useful information. On the other hand, the detection limit for a non-approved variant of the EPA method, a method routinely used by chemical oceanographers, was 0.06 ppb. In other cases, such as the elemental analysis for particulate forms of carbon, nitrogen and phosphorous, EPA approved procedures provided poorer reproducibility than nonapproved methods.

3H Key Terms

accuracy	analysis	analyte
calibration	calibration curve	concentration techniques
detection limit	determination	interferent
matrix	measurement	method
method blank	precision	procedure
protocol	QA/QC	robust

As you review this chapter, try to define a key term in your own words. Check your answer by clicking on the key term, which will take you to the page where it was first introduced. Clicking on the **KEY TERM** there, will bring you back to this page so that you can continue with another key term.

11 D'Elia, C. F.; Sanders, J. G.; Capone, D. G. *Environ. Sci. Technol.* **1989**, *23*, 768–774.

rugged	selectivity	selectivity coefficient
sensitivity	signal	specificity
technique	total analysis techniques	validation

3I Chapter Summary

Every discipline has its own vocabulary. Your success in studying analytical chemistry will improve if you master this vocabulary. Be sure that you understand the difference between an analyte and its matrix, a technique and a method, a procedure and a protocol, and a total analysis technique and a concentration technique.

In selecting an analytical method we consider criteria such as accuracy, precision, sensitivity, selectivity, robustness, ruggedness, the amount of available sample, the amount of analyte in the sample, time, cost, and the availability of equipment. These criteria are not mutually independent, and it often is necessary to find an acceptable balance between them.

In developing a procedure or protocol, we give consideration to compensating for interferences, calibrating the method, obtaining an appropriate sample, and validating the analysis. Poorly designed procedures and protocols produce results that are insufficient to meet the needs of the analysis.

3J Problems

1. When working with a solid sample, it often is necessary to bring the analyte into solution by digesting the sample with a suitable solvent. Any remaining solid impurities are removed by filtration before continuing with the analysis. In a typical total analysis method, the procedure might read

After digesting the sample in a beaker, remove any solid impurities by passing the solution containing the analyte through filter paper, collecting the filtrate in a clean Erlenmeyer flask. Rinse the beaker with several small portions of solvent, passing these rinsings through the filter paper and collecting them in the same Erlenmeyer flask. Finally, rinse the filter paper with several portions of solvent, collecting the rinsings in the same Erlenmeyer flask.

For a typical concentration method, however, the procedure might state

After digesting the sample in a beaker, remove any solid impurities by filtering a portion of the solution containing the analyte. Collect and discard the first several mL of filtrate before collecting a sample of approximately 5 mL for further analysis.

Explain why these two procedures are different.

2. A certain concentration method works best when the analyte's concentration is approximately 10 ppb.
 - (a) If the method requires a sample of 0.5 mL, about what mass of analyte is being measured?
 - (b) If the analyte is present at 10% w/v, how would you prepare the sample for analysis?
 - (c) Repeat for the case where the analyte is present at 10% w/w.
 - (d) Based on your answers to parts (a)–(c), comment on the method's suitability for the determination of a major analyte.

3. An analyst needs to evaluate the potential effect of an interferent, I, on the quantitative analysis for an analyte, A. She begins by measuring the signal for a sample in which the interferent is absent and the analyte is present with a concentration of 15 ppm, obtaining an average signal of 23.3 (arbitrary units). When analyzing a sample in which the analyte is absent and the interferent is present with a concentration of 25 ppm, she obtains an average signal of 13.7.
 - (a) What is the sensitivity for the analyte?
 - (b) What is the sensitivity for the interferent?
 - (c) What is the value of the selectivity coefficient?
 - (d) Is the method more selective for the analyte or the interferent?
 - (e) What is the maximum concentration of interferent relative to that of the analyte (i.e. $[\text{interferent}]/[\text{analyte}]$), if the error in the analysis is to be less than 1%?

4. A sample was analyzed to determine the concentration of an analyte. Under the conditions of the analysis the sensitivity is 17.2 ppm^{-1} . What is the analyte's concentration if S_{total} is 35.2 and S_{reag} is 0.6?

5. A method for the analysis of Ca^{2+} in water suffers from an interference in the presence of Zn^{2+} . When the concentration of Ca^{2+} is 50 times greater than that of Zn^{2+} , an analysis for Ca^{2+} gives a relative error of -2.0% . What is the value of the selectivity coefficient for this method?

6. The quantitative analysis for reduced glutathione in blood is complicated by the presence of many potential interferents. In one study, when analyzing a solution of 10 ppb glutathione and 1.5 ppb ascorbic acid, the signal was 5.43 times greater than that obtained for the analysis of

10 ppb glutathione.¹² What is the selectivity coefficient for this analysis? The same study found that when analyzing a solution of 350 ppb methionine and 10 ppb glutathione the signal was 0.906 times less than that obtained for the analysis of 10 ppb glutathione. What is the selectivity coefficient for this analysis? In what way do these interferents behave differently?

7. Oungpipat and Alexander described a method for determining the concentration of glycolic acid (GA) in a variety of samples, including physiological fluids such as urine.¹³ In the presence of only GA, the signal is given as

$$S_{\text{samp},1} = k_{\text{GA}} C_{\text{GA}}$$

and in the presence of both glycolic acid and ascorbic acid (AA), the signal is

$$S_{\text{samp},2} = k_{\text{GA}} C_{\text{GA}} + k_{\text{AA}} C_{\text{AA}}$$

When the concentration of glycolic acid is 1.0×10^{-4} M and the concentration of ascorbic acid is 1.0×10^{-5} M, the ratio of the two signals was found to be

$$\frac{S_{\text{samp},2}}{S_{\text{samp},1}} = 1.44$$

- (a) Using the ratio of the two signals, determine the value of the selectivity ratio $K_{\text{GA,AA}}$.
- (b) Is the method more selective toward glycolic acid or ascorbic acid?
- (c) If the concentration of ascorbic acid is 1.0×10^{-5} M, what is the smallest concentration of glycolic acid that can be determined such that the error introduced by failing to account for the signal from ascorbic acid is less than 1%?
8. Ibrahim and co-workers developed a new method for the quantitative analysis of hypoxanthine, a natural compound of some nucleic acids.¹⁴ As part of their study they evaluated the method's selectivity for hypoxanthine in the presence of several possible interferents, including ascorbic acid.

¹² Jiménez-Prieto, R.; Velasco, A.; Silva, M.; Pérez-Bendito, D. *Anal. Chem. Acta* **1992**, 269, 273–279.

¹³ Oungpipat, W.; Alexander, P. W. *Anal. Chim. Acta* **1994**, 295, 36–46.

¹⁴ Ibrahim, M. S.; Ahmad, M. E.; Temerk, Y. M.; Kaucake, A. M. *Anal. Chim. Acta* **1996**, 328, 47–52.

- (a) When analyzing a solution of 1.12×10^{-6} M hypoxanthine the authors obtained a signal of 7.45×10^{-5} amps. What is the sensitivity for hypoxanthine? You may assume that the signal has been corrected for the method blank.
- (b) When a solution containing 1.12×10^{-6} M hypoxanthine and 6.5×10^{-5} M ascorbic acid was analyzed a signal of 4.04×10^{-5} amps was obtained. What is the selectivity coefficient for this method?
- (c) Is the method more selective for hypoxanthine or for ascorbic acid?
- (d) What is the largest concentration of ascorbic acid that may be present if a concentration of 1.12×10^{-6} M hypoxanthine is to be determined within $\pm 1\%$?
9. Examine a procedure from *Standard Methods for the Analysis of Waters and Wastewaters* (or another manual of standard analytical methods) and identify the steps taken to compensate for interferences, to calibrate equipment and instruments, to standardize the method and to acquire a representative sample.

3K Solutions to Practice Exercises

Practice Exercise 3.1

Since the signal for Ag^+ in the presence of Ni^{2+} is given as a relative error, the fact that are not given absolute signals is of no consequence. Instead, we will assign a value of 100 as the signal for 1×10^{-9} M Ag^+ . With a relative error of +4.9%, the signal for the solution of 1×10^{-9} M Ag^+ and 1.1×10^{-7} M Ni^{2+} is 104.9. The sensitivity for Ag^+ is determined using the solution that does not contain Ni^{2+} .

$$k_{\text{Ag}} = \frac{S_{\text{Ag}}}{C_{\text{Ag}}} = \frac{100}{1 \times 10^{-9} \text{ M}} = 1.0 \times 10^{11} \text{ M}^{-1}$$

Substituting into equation 3.4 values for k_{Ag} , S_{samp} for the solution containing Ag^+ and Ni^{2+} , and the concentrations of Ag^+ and Ni^{2+}

$$S_{\text{samp}} = 104.9 = (1.0 \times 10^{11} \text{ M}^{-1}) \times (1.0 \times 10^{-9} \text{ M}) + k_{\text{Ni}} \times (1.1 \times 10^{-7} \text{ M})$$

and solving gives k_{Ni} as $4.5 \times 10^7 \text{ M}^{-1}$. The selectivity coefficient is

$$K_{\text{Ag,Ni}} = \frac{k_{\text{Ni}}}{k_{\text{Ag}}} = \frac{4.5 \times 10^7 \text{ M}^{-1}}{1.0 \times 10^{11} \text{ M}^{-1}} =$$

Click [here](#) to return to the chapter.

Practice Exercise 3.2

(a) A negative value for $K_{\text{Ag,Hg}}$ means that the presence of Hg^{2+} decreases the signal from Ag^+ .

(b) In this case we need to consider an error of -1% , since the effect of Hg^{2+} is to decrease the signal from Ag^+ . To achieve this error, the term $K_{\text{A,I}} \times C_{\text{I}}$ in equation 3.8 must be less than -1% of C_{A} ; thus

$$K_{\text{Ag,Hg}} \times C_{\text{Hg}} = -0.01 \times C_{\text{Ag}}$$

Substituting in known values for $K_{\text{Ag,Hg}}$ and C_{Ag} , we find that the maximum concentration of Hg^{2+} is 1.0×10^{-8} M.

Click [here](#) to return to the chapter.

Chapter 4

Evaluating Analytical Data

Chapter Overview

- 4A Characterizing Measurements and Results
- 4B Characterizing Experimental Errors
- 4C Propagation of Uncertainty
- 4D The Distribution of Measurements and Results
- 4E Statistical Analysis of Data
- 4F Statistical Methods for Normal Distributions
- 4G Detection Limits
- 4H Using Excel and R to Analyze Data
- 4I Key Terms
- 4J Chapter Summary
- 4K Problems
- 4L Solutions to Practice Exercises

When using an analytical method we make three separate evaluations of experimental error. First, before beginning an analysis we evaluate potential sources of errors to ensure that they will not adversely effect our results. Second, during the analysis we monitor our measurements to ensure that errors remain acceptable. Finally, at the end of the analysis we evaluate the quality of the measurements and results, comparing them to our original design criteria. This chapter provides an introduction to sources of error, to evaluating errors in analytical measurements, and to the statistical analysis of data.



Figure 4.1 An uncirculated 2005 Lincoln head penny. The “D” below the date indicates that this penny was produced at the United States Mint at Denver, Colorado. Pennies produced at the Philadelphia Mint do not have a letter below the date. Source: United States Mint image (www.usmint.gov).

4A Characterizing Measurements and Results

Let’s begin by choosing a simple quantitative problem requiring a single measurement—What is the mass of a penny? As you consider this question, you probably recognize that it is too broad. Are we interested in the mass of a United States penny or of a Canadian penny, or is the difference relevant? Because a penny’s composition and size may differ from country to country, let’s limit our problem to pennies from the United States.

There are other concerns we might consider. For example, the United States Mint currently produces pennies at two locations (Figure 4.1). Because it seems unlikely that a penny’s mass depends upon where it is minted, we will ignore this concern. Another concern is whether the mass of a newly minted penny is different from the mass of a circulating penny. Because the answer this time is not obvious, let’s narrow our question to—What is the mass of a circulating United States Penny?

A good way to begin our analysis is to examine some preliminary data. Table 4.1 shows masses for seven pennies from my change jar. In examining this data it is immediately apparent that our question does not have a simple answer. That is, we can not use the mass of a single penny to draw a specific conclusion about the mass of any other penny (although we might conclude that all pennies weigh at least 3 g). We can, however, characterize this data by reporting the spread of individual measurements around a central value.

4A.1 Measures of Central Tendency

One way to characterize the data in Table 4.1 is to assume that the masses are randomly scattered around a central value that provides the best estimate of a penny’s expected, or “true” mass. There are two common ways to estimate central tendency: the mean and the median.

MEAN

The **MEAN**, \bar{X} , is the numerical average for a data set. We calculate the mean by dividing the sum of the individual values by the size of the data set

Table 4.1 Masses of Seven Circulating U. S. Pennies

Penny	Mass (g)
1	3.080
2	3.094
3	3.107
4	3.056
5	3.112
6	3.174
7	3.198

$$\bar{X} = \frac{\sum_i X_i}{n}$$

where X_i is the i^{th} measurement, and n is the size of the data set.

Example 4.1

What is the mean for the data in [Table 4.1](#)?

SOLUTION

To calculate the mean we add together the results for all measurements

$$3.080 + 3.094 + 3.107 + 3.056 + 3.112 + 3.174 + 3.198 = 21.821 \text{ g}$$

and divide by the number of measurements

$$\bar{X} = \frac{21.821 \text{ g}}{7} = 3.117 \text{ g}$$

The mean is the most common estimator of central tendency. It is not a robust estimator, however, because an extreme value—one much larger or much smaller than the remainder of the data—strongly influences the mean's value.¹ For example, if we mistakenly record the third penny's mass as 31.07 g instead of 3.107 g, the mean changes from 3.117 g to 7.112 g!

An estimator is robust if its value is not affected too much by an unusually large or unusually small measurement.

MEDIAN

The **MEDIAN**, \tilde{X} , is the middle value when we order our data from the smallest to the largest value. When the data set includes an odd number of entries, the median is the middle value. For an even number of entries, the median is the average of the $n/2$ and the $(n/2) + 1$ values, where n is the size of the data set.

When $n = 5$, the median is the third value in the ordered data set; for $n = 6$, the median is the average of the third and fourth members of the ordered data set.

Example 4.2

What is the median for the data in [Table 4.1](#)?

SOLUTION

To determine the median we order the measurements from the smallest to the largest value

$$3.056 \quad 3.080 \quad 3.094 \quad 3.107 \quad 3.112 \quad 3.174 \quad 3.198$$

Because there are seven measurements, the median is the fourth value in the ordered data set; thus, the median is 3.107 g.

As shown by Examples 4.1 and 4.2, the mean and the median provide similar estimates of central tendency when all measurements are compara-

¹ Rousseeuw, P. J. *J. Chemom.* **1991**, *5*, 1–20.

ble in magnitude. The median, however, provides a more robust estimate of central tendency because it is less sensitive to measurements with extreme values. For example, introducing the transcription error discussed earlier for the mean changes the median's value from 3.107 g to 3.112 g.

4A.2 Measures of Spread

If the mean or median provides an estimate of a penny's expected mass, then the spread of individual measurements provides an estimate of the difference in mass among pennies or of the uncertainty in measuring mass with a balance. Although we often define spread relative to a specific measure of central tendency, its magnitude is independent of the central value. Changing all measurements in the same direction, by adding or subtracting a constant value, changes the mean or median, but does not change the spread. There are three common measures of spread: the range, the standard deviation, and the variance.

RANGE

The **RANGE**, w , is the difference between a data set's largest and smallest values.

$$w = X_{\text{largest}} - X_{\text{smallest}}$$

The range provides information about the total variability in the data set, but does not provide any information about the distribution of individual values. The range for the data in Table 4.1 is

$$w = 3.198 \text{ g} - 3.056 \text{ g} = 0.142 \text{ g}$$

STANDARD DEVIATION

The **STANDARD DEVIATION**, s , describes the spread of a data set's individual values about its mean, and is given as

$$s = \sqrt{\frac{\sum_i (X_i - \bar{X})^2}{n - 1}} \quad 4.1$$

where X_i is one of n individual values in the data set, and \bar{X} is the data set's mean value. Frequently, the relative standard deviation, s_r , is reported.

$$s_r = \frac{s}{\bar{X}}$$

The percent relative standard deviation, $\%s_r$, is $s_r \times 100$.

Example 4.3

What are the standard deviation, the relative standard deviation and the percent relative standard deviation for the data in [Table 4.1](#)?

SOLUTION

To calculate the standard deviation we first calculate the difference between each measurement and the mean value (3.117), square the resulting differences, and add them together to give the numerator of [equation 4.1](#).

$$(3.080 - 3.117)^2 = (-0.037)^2 = 0.001369$$

$$(3.094 - 3.117)^2 = (-0.023)^2 = 0.000529$$

$$(3.107 - 3.117)^2 = (-0.010)^2 = 0.000100$$

$$(3.056 - 3.117)^2 = (-0.061)^2 = 0.003721$$

$$(3.112 - 3.117)^2 = (-0.005)^2 = 0.000025$$

$$(3.174 - 3.117)^2 = (+0.057)^2 = 0.003249$$

$$(3.198 - 3.117)^2 = (+0.081)^2 = 0.006561$$

$$0.015554$$

Next, we divide this sum of the squares by $n-1$, where n is the number of measurements, and take the square root.

$$s = \sqrt{\frac{0.015554}{7-1}} = 0.051 \text{ g}$$

Finally, the relative standard deviation and percent relative standard deviation are

$$s_r = \frac{0.051 \text{ g}}{3.117 \text{ g}} = 0.016 \quad \%s_r = (0.016) \times 100\% = 1.6\%$$

It is much easier to determine the standard deviation using a scientific calculator with built in statistical functions.

For obvious reasons, the numerator of [equation 4.1](#) is called a sum of squares.

Many scientific calculators include two keys for calculating the standard deviation. One key calculates the standard deviation for a data set of n samples drawn from a larger collection of possible samples, which corresponds to [equation 4.1](#). The other key calculates the standard deviation for all possible samples. The latter is known as the population's standard deviation, which we will cover later in this chapter. Your calculator's manual will help you determine the appropriate key for each.

VARIANCE

Another common measure of spread is the square of the standard deviation, or the **VARIANCE**. We usually report a data set's standard deviation, rather than its variance, because the mean value and the standard deviation have the same unit. As we will see shortly, the variance is a useful measure of spread because its values are additive.

Example 4.4

What is the variance for the data in [Table 4.1](#)?

SOLUTION

The variance is the square of the absolute standard deviation. Using the standard deviation from Example 4.3 gives the variance as

$$s^2 = (0.051)^2 = 0.0026$$

Practice Exercise 4.1

The following data were collected as part of a quality control study for the analysis of sodium in serum; results are concentrations of Na⁺ in mmol/L.

140 143 141 137 132 157 143 149 118 145

Report the mean, the median, the range, the standard deviation, and the variance for this data. This data is a portion of a larger data set from Andrew, D. F.; Herzberg, A. M. *Data: A Collection of Problems for the Student and Research Worker*, Springer-Verlag:New York, 1985, pp. 151–155.

Click [here](#) to review your answer to this exercise.

4B Characterizing Experimental Errors

Characterizing the mass of a penny using the data in [Table 4.1](#) suggests two questions. First, does our measure of central tendency agree with the penny's expected mass? Second, why is there so much variability in the individual results? The first of these questions addresses the accuracy of our measurements, and the second asks about their precision. In this section we consider the types of experimental errors affecting accuracy and precision.

4B.1 Errors Affecting Accuracy

Accuracy is a measure of how close a measure of central tendency is to the expected value, μ . We can express accuracy as either an absolute error, e

$$e = \bar{X} - \mu \quad 4.2$$

or as a percent relative error, $\%e_r$.

$$\%e_r = \frac{\bar{X} - \mu}{\mu} \times 100 \quad 4.3$$

Although equations 4.2 and 4.3 use the mean as the measure of central tendency, we also can use the median.

We call errors affecting the accuracy of an analysis determinate. Although there may be several different sources of **DETERMINATE ERROR**, each source has a specific magnitude and sign. Some sources of determinate error are positive and others are negative, and some are larger in magnitude and others are smaller. The cumulative effect of these determinate errors is a net positive or negative error in accuracy.

We assign determinate errors into four categories—sampling errors, method errors, measurement errors, and personal errors—each of which we consider in this section.

SAMPLING ERRORS

A determinate **SAMPLING ERROR** occurs when our sampling strategy does not provide a representative sample. For example, if you monitor the envi-

The convention for representing statistical parameters is to use a Roman letter for a value calculated from experimental data, and a Greek letter for the corresponding expected value. For example, the experimentally determined mean is \bar{X} , and its underlying expected value is μ . Likewise, the standard deviation by experiment is s , and the underlying expected value is σ .

It is possible, although unlikely, that the positive and negative determinate errors will offset each other, producing a result with no net error in accuracy.

ronmental quality of a lake by sampling a single location near a point source of pollution, such as an outlet for industrial effluent, then your results will be misleading. In determining the mass of a U. S. penny, our strategy for selecting pennies must ensure that we do not include pennies from other countries.

METHOD ERRORS

In any analysis the relationship between the signal and the absolute amount of analyte, n_A , or the analyte's concentration, C_A , is

$$S_{\text{total}} = k_A n_A + S_{\text{mb}} \quad 4.4$$

$$S_{\text{total}} = k_A C_A + S_{\text{mb}} \quad 4.5$$

where k_A is the method's sensitivity for the analyte and S_{mb} is the signal from the method blank. A determinate **METHOD ERROR** exists when our value for k_A or S_{mb} is invalid. For example, a method in which S_{total} is the mass of a precipitate assumes that k is defined by a pure precipitate of known stoichiometry. If this assumption is not true, then the resulting determination of n_A or C_A is inaccurate. We can minimize a determinate error in k_A by calibrating the method. A method error due to an interferent in the reagents is minimized by using a proper method blank.

MEASUREMENT ERRORS

The manufacturers of analytical instruments and equipment, such as glassware and balances, usually provide a statement of the item's maximum **MEASUREMENT ERROR**, or **TOLERANCE**. For example, a 10-mL volumetric pipet (Figure 4.2) has a tolerance of ± 0.02 mL, which means that the pipet delivers an actual volume within the range 9.98–10.02 mL at a temperature of 20°C. Although we express this tolerance as a range, the error is determinate; thus, the pipet's expected volume is a fixed value within the stated range.

Volumetric glassware is categorized into classes depending on its accuracy. Class A glassware is manufactured to comply with tolerances specified by agencies such as the National Institute of Standards and Technology or the American Society for Testing and Materials. The tolerance level for Class A glassware is small enough that we normally can use it without calibration. The tolerance levels for Class B glassware are usually twice those for Class A glassware. Other types of volumetric glassware, such as beakers and graduated cylinders, are unsuitable for accurately measuring volumes. [Table 4.2](#) provides a summary of typical measurement errors for Class A volumetric glassware. Tolerances for digital pipets and for balances are listed in [Table 4.3](#) and [Table 4.4](#).

We can minimize determinate measurement errors by calibrating our equipment. Balances are calibrated using a reference weight whose mass can

An awareness of potential sampling errors is especially important when working with heterogeneous materials. Strategies for obtaining representative samples are covered in [Chapter 5](#).



Figure 4.2 Close-up of a 10-mL volumetric pipet showing that it has a tolerance of ± 0.02 mL at 20°C.

be traced back to the SI standard kilogram. Volumetric glassware and digital pipets can be calibrated by determining the mass of water that it delivers or contains and using the density of water to calculate the actual volume. It is never safe to assume that a calibration will remain unchanged during an analysis or over time. One study, for example, found that repeatedly exposing volumetric glassware to higher temperatures during machine washing and oven drying, leads to small, but significant changes in the glassware's calibration.² Many instruments drift out of calibration over time and may require frequent recalibration during an analysis.

² Castanheira, I.; Batista, E.; Valente, A.; Dias, G.; Mora, M.; Pinto, L.; Costa, H. S. *Food Control* **2006**, *17*, 719–726.

Table 4.2 Measurement Errors for Type A Volumetric Glassware[†]

Transfer Pipets		Volumetric Flasks		Burets	
Capacity (mL)	Tolerance (mL)	Capacity (mL)	Tolerance (mL)	Capacity (mL)	Tolerance (mL)
1	±0.006	5	±0.02	10	±0.02
2	±0.006	10	±0.02	25	±0.03
5	±0.01	25	±0.03	50	±0.05
10	±0.02	50	±0.05		
20	±0.03	100	±0.08		
25	±0.03	250	±0.12		
50	±0.05	500	±0.20		
100	±0.08	1000	±0.30		
		2000	±0.50		

[†] Tolerance values are from the ASTM E288, E542, and E694 standards.

Table 4.3 Measurement Errors for Digital Pipets[†]

Pipet Range	Volume (mL or μL) [‡]	Percent Measurement Error
10–100 μL	10	±3.0%
	50	±1.0%
	100	±0.8%
100–1000 μL	100	±3.0%
	500	±1.0%
	1000	±0.6%
1–10 mL	1	±3.0%
	5	±0.8%
	10	±0.6%

[†] Values are from www.eppendorf.com. [‡] Units for volume match the units for the pipet's range.

Table 4.4 Measurement Errors for Selected Balances

Balance	Capacity (g)	Measurement Error
Precisa 160M	160	± 1 mg
A & D ER 120M	120	± 0.1 mg
Metler H54	160	± 0.01 mg

PERSONAL ERRORS

Finally, analytical work is always subject to **PERSONAL ERROR**, including the ability to see a change in the color of an indicator signaling the endpoint of a titration; biases, such as consistently overestimating or underestimating the value on an instrument's readout scale; failing to calibrate instrumentation; and misinterpreting procedural directions. You can minimize personal errors by taking proper care.

IDENTIFYING DETERMINATE ERRORS

Determinate errors can be difficult to detect. Without knowing the expected value for an analysis, the usual situation in any analysis that matters, there is nothing to which we can compare our experimental result. Nevertheless, there are strategies we can use to detect determinate errors.

The magnitude of a **CONSTANT DETERMINATE ERROR** is the same for all samples and is more significant when analyzing smaller samples. Analyzing samples of different sizes, therefore, allows us to detect a constant determinate error. For example, consider a quantitative analysis in which we separate the analyte from its matrix and determine its mass. Let's assume that the sample is 50.0% w/w analyte. As shown in Table 4.5, the expected amount of analyte in a 0.100 g sample is 0.050 g. If the analysis has a positive constant determinate error of 0.010 g, then analyzing the sample gives 0.060 g of analyte, or a concentration of 60.0% w/w. As we increase the size of the sample the obtained results become closer to the expected result. An upward or downward trend in a graph of the analyte's obtained

Table 4.5 Effect of a Constant Determinate Error on the Analysis of a Sample Containing 50% w/w Analyte

Mass Sample (g)	Expected Mass of Analyte (g)	Constant Error (g)	Obtained Mass of Analyte (g)	Obtained Concentration of Analyte (%w/w)
0.100	0.050	0.010	0.060	60.0
0.200	0.100	0.010	0.110	55.0
0.400	0.200	0.010	0.210	52.5
0.800	0.400	0.010	0.410	51.2
1.600	0.800	0.010	0.810	50.6

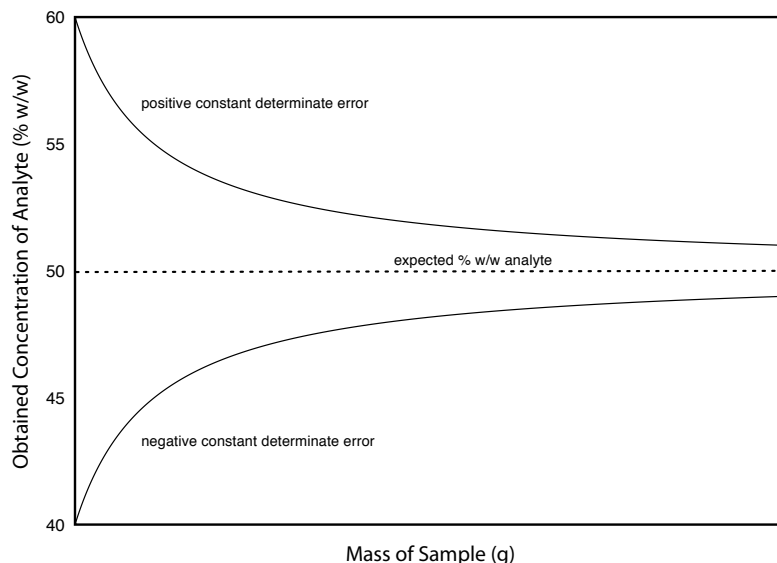


Figure 4.3 Effect of a constant determinate error on the determination of an analyte in samples of varying size.

concentration versus the sample's mass (Figure 4.3) is evidence of a constant determinate error.

A **PROPORTIONAL DETERMINATE ERROR**, in which the error's magnitude depends on the amount of sample, is more difficult to detect because the result of the analysis is independent of the amount of sample. Table 4.6 outlines an example showing the effect of a positive proportional error of 1.0% on the analysis of a sample that is 50.0% w/w in analyte. Regardless of the sample's size, each analysis gives the same result of 50.5% w/w analyte.

One approach for detecting a proportional determinate error is to analyze a standard containing a known amount of analyte in a matrix similar to the samples. Standards are available from a variety of sources, such as the National Institute of Standards and Technology (where they are called **STANDARD REFERENCE MATERIALS**) or the American Society for Testing and Materials. Table 4.7, for example, lists certified values for several analytes in a standard sample of *Ginkgo bilboa* leaves. Another approach is to compare your analysis to an analysis carried out using an independent analytical method known to give accurate results. If the two methods give significantly different results, then a determinate error is the likely cause.

Table 4.6 Effect of a Proportional Determinate Error on the Analysis of a Sample Containing 50% w/w Analyte

Mass Sample (g)	Expected Mass of Analyte (g)	Proportional Error (%)	Obtained Mass of Analyte (g)	Obtained Concentration of Analyte (%w/w)
0.100	0.050	1.00	0.0505	50.5
0.200	0.100	1.00	0.101	50.5
0.400	0.200	1.00	0.202	50.5
0.800	0.400	1.00	0.404	50.5
1.600	0.800	1.00	0.808	50.5

Table 4.7 Certified Concentrations for SRM 3246: *Ginkgo biloba* (Leaves)[†]

Class of Analyte	Analyte	Mass Fraction (mg/g or ng/g)		
Flavonoids/Ginkgolide B (mass fractions in mg/g)	Quercetin	2.69	±	0.31
	Kaempferol	3.02	±	0.41
	Isorhamnetin	0.517	±	0.099
	Total Aglycones	6.22	±	0.77
Selected Terpenes (mass fractions in mg/g)	Ginkgolide A	0.57	±	0.28
	Ginkgolide B	0.470	±	0.090
	Ginkgolide C	0.59	±	0.22
	Ginkgolide J	0.18	±	0.10
	Bilobalide	1.52	±	0.40
	Total Terpene Lactones	3.3	±	1.1
Selected Toxic Elements (mass fractions in ng/g)	Cadmium	20.8	±	1.0
	Lead	995	±	30
	Mercury	23.08	±	0.17

[†] The primary purpose of this Standard Reference Material is to validate analytical methods for determining flavonoids, terpene lactones, and toxic elements in *Ginkgo biloba* or other materials with a similar matrix. Values are from the official Certificate of Analysis available at www.nist.gov.

Constant and proportional determinate errors have distinctly different sources, which we can define in terms of the relationship between the signal and the moles or concentration of analyte (equation 4.4 and equation 4.5). An invalid method blank, S_{mb} , is a constant determinate error as it adds or subtracts a constant value to the signal. A poorly calibrated method, which yields an invalid sensitivity for the analyte, k_A , will result in a proportional determinate error.

4B.2 Errors Affecting Precision

Precision is a measure of the spread of individual measurements or results about a central value, which we express as a range, a standard deviation, or a variance. We make a distinction between two types of precision: repeatability and reproducibility. **REPEATABILITY** is the precision when a single analyst completes the analysis in a single session using the same solutions, equipment, and instrumentation. **REPRODUCIBILITY**, on the other hand, is the precision under any other set of conditions, including between analysts, or between laboratory sessions for a single analyst. Since reproducibility includes additional sources of variability, the reproducibility of an analysis cannot be better than its repeatability.

Errors affecting precision are indeterminate and are characterized by random variations in their magnitude and their direction. Because they are random, positive and negative **INDETERMINATE ERRORS** tend to cancel,

provided that enough measurements are made. In such situations the mean or median is largely unaffected by the precision of the analysis.

SOURCES OF INDETERMINATE ERROR

We can assign indeterminate errors to several sources, including collecting samples, manipulating samples during the analysis, and making measurements. When collecting a sample, for instance, only a small portion of the available material is taken, increasing the chance that small-scale inhomogeneities in the sample will affect repeatability. Individual pennies, for example, may show variations from several sources, including the manufacturing process, and the loss of small amounts of metal or the addition of dirt during circulation. These variations are sources of indeterminate sampling errors.

During an analysis there are many opportunities for introducing indeterminate method errors. If our method for determining the mass of a penny includes directions for cleaning them of dirt, then we must be careful to treat each penny in the same way. Cleaning some pennies more vigorously than others introduces an indeterminate method error.

Finally, any measuring device is subject to an indeterminate measurement error due to limitations in reading its scale. For example, a buret with scale divisions every 0.1 mL has an inherent indeterminate error of ± 0.01 – 0.03 mL when we estimate the volume to the hundredth of a milliliter (Figure 4.4).

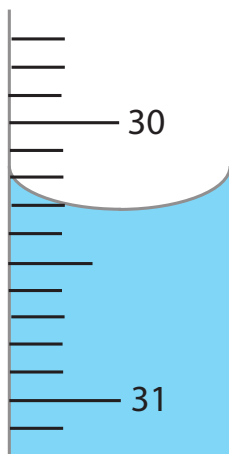


Figure 4.4 Close-up of a buret showing the difficulty in estimating volume. With scale divisions every 0.1 mL it is difficult to read the actual volume to better than ± 0.01 – 0.03 mL.

EVALUATING INDETERMINATE ERROR

An indeterminate error due to analytical equipment or instrumentation is generally easy to estimate by measuring the standard deviation for several replicate measurements, or by monitoring the signal's fluctuations over time in the absence of analyte (Figure 4.5) and calculating the standard deviation. Other sources of indeterminate error, such as treating samples inconsistently, are more difficult to estimate.

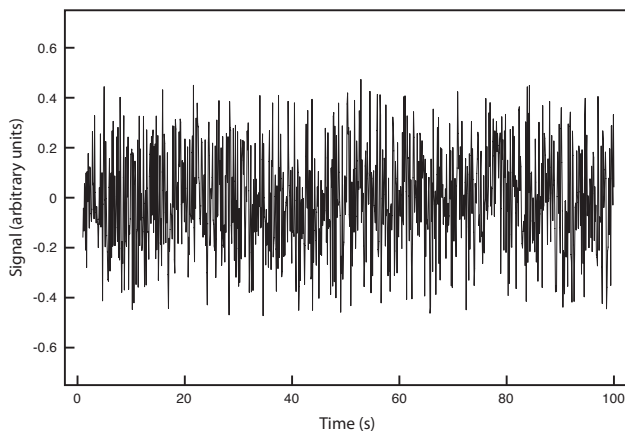


Figure 4.5 Background noise in an instrument showing the random fluctuations in the signal.

Table 4.8 Replicate Determinations of the Mass of a Single Circulating U. S. Penny

Replicate	Mass (g)	Replicate	Mass (g)
1	3.025	6	3.023
2	3.024	7	3.022
3	3.028	8	3.021
4	3.027	9	3.026
5	3.028	10	3.024

To evaluate the effect of indeterminate measurement error on our analysis of the mass of a circulating United States penny, we might make several determinations for the mass of a single penny (Table 4.8). The standard deviation for our original experiment (see Table 4.1) is 0.051 g, and it is 0.0024 g for the data in Table 4.8. The significantly better precision when determining the mass of a single penny suggests that the precision of our analysis is not limited by the balance. A more likely source of indeterminate error is a significant variability in the masses of individual pennies.

In Section 4E we will discuss a statistical method—the *F*-test—that you can use to show that this difference is significant.

4B.3 Error and Uncertainty

Analytical chemists make a distinction between error and uncertainty.³ **ERROR** is the difference between a single measurement or result and its expected value. In other words, error is a measure of **BIAS**. As discussed earlier, we can divide error into determinate and indeterminate sources. Although we can correct for determinate errors, the indeterminate portion of the error remains. With statistical significance testing, which is discussed later in this chapter, we can determine if our results show evidence of bias.

UNCERTAINTY expresses the range of possible values for a measurement or result. Note that this definition of uncertainty is not the same as our definition of precision. We calculate precision from our experimental data, providing an estimate of indeterminate errors. Uncertainty accounts for all errors—both determinate and indeterminate—that might reasonably affect a measurement or result. Although we always try to correct determinate errors before beginning an analysis, the correction itself is subject to uncertainty.

Here is an example to help illustrate the difference between precision and uncertainty. Suppose you purchase a 10-mL Class A pipet from a laboratory supply company and use it without any additional calibration. The pipet's tolerance of ± 0.02 mL is its uncertainty because your best estimate of its expected volume is $10.00 \text{ mL} \pm 0.02 \text{ mL}$. This uncertainty is primarily determinate error. If you use the pipet to dispense several replicate portions of solution, the resulting standard deviation is the pipet's precision. Table 4.9 shows results for ten such trials, with a mean of 9.992 mL and a standard deviation of ± 0.006 mL. This standard deviation is the precision

See Table 4.2 for the tolerance of a 10-mL class A transfer pipet.

3 Ellison, S.; Wegscheider, W.; Williams, A. *Anal. Chem.* **1997**, *69*, 607A–613A.

Table 4.9 Experimental Results for Volume Delivered by a 10-mL Class A Transfer Pipet

Number	Volume (mL)	Number	Volume (mL)
1	10.002	6	9.983
2	9.993	7	9.991
3	9.984	8	9.990
4	9.996	9	9.988
5	9.989	10	9.999

with which we expect to deliver a solution using a Class A 10-mL pipet. In this case the published uncertainty for the pipet (± 0.02 mL) is worse than its experimentally determined precision (± 0.006 mL). Interestingly, the data in Table 4.9 allows us to calibrate this specific pipet's delivery volume as 9.992 mL. If we use this volume as a better estimate of this pipet's expected volume, then its uncertainty is ± 0.006 mL. As expected, calibrating the pipet allows us to decrease its uncertainty.⁴

4C Propagation of Uncertainty

Suppose you dispense 20 mL of a reagent using the Class A 10-mL pipet whose calibration information is given in Table 4.9. If the volume and uncertainty for one use of the pipet is 9.992 ± 0.006 mL, what is the volume and uncertainty when we use the pipet twice?

As a first guess, we might simply add together the volume and the maximum uncertainty for each delivery; thus

$$(9.992 \text{ mL} + 9.992 \text{ mL}) \pm (0.006 \text{ mL} + 0.006 \text{ mL}) = 19.984 \pm 0.012 \text{ mL}$$

It is easy to appreciate that combining uncertainties in this way overestimates the total uncertainty. Adding the uncertainty for the first delivery to that of the second delivery assumes that with each use the indeterminate error is in the same direction and is as large as possible. At the other extreme, we might assume that the uncertainty for one delivery is positive and the other is negative. If we subtract the maximum uncertainties for each delivery,

$$(9.992 \text{ mL} + 9.992 \text{ mL}) \pm (0.006 \text{ mL} - 0.006 \text{ mL}) = 19.984 \pm 0.000 \text{ mL}$$

we clearly underestimate the total uncertainty.

So what is the total uncertainty? From the previous discussion we know that the total uncertainty is greater than ± 0.000 mL and less than ± 0.012 mL. To estimate the cumulative effect of multiple uncertainties we use a mathematical technique known as the propagation of uncertainty. Our treatment of the propagation of uncertainty is based on a few simple rules.

Although we will not derive or further justify these rules here, you may consult the additional resources at the end of this chapter for references that discuss the propagation of uncertainty in more detail.

⁴ Kadis, R. *Talanta* **2004**, *64*, 167–173.

4C.1 A Few Symbols

A **PROPAGATION OF UNCERTAINTY** allows us to estimate the uncertainty in a result from the uncertainties in the measurements used to calculate the result. For the equations in this section we represent the result with the symbol R , and the measurements with the symbols A , B , and C . The corresponding uncertainties are u_R , u_A , u_B , and u_C . We can define the uncertainties for A , B , and C using standard deviations, ranges, or tolerances (or any other measure of uncertainty), as long as we use the same form for all measurements.

The requirement that we express each uncertainty in the same way is a critically important point. Suppose you have a range for one measurement, such as a pipet's tolerance, and standard deviations for the other measurements. All is not lost. There are ways to convert a range to an estimate of the standard deviation. See [Appendix 2](#) for more details.

4C.2 Uncertainty When Adding or Subtracting

When adding or subtracting measurements we use their absolute uncertainties for a propagation of uncertainty. For example, if the result is given by the equation

$$R = A + B - C$$

then the absolute uncertainty in R is

$$u_R = \sqrt{u_A^2 + u_B^2 + u_C^2} \quad 4.6$$

Example 4.5

When dispensing 20 mL using a 10-mL Class A pipet, what is the total volume dispensed and what is the uncertainty in this volume? First, complete the calculation using the manufacturer's tolerance of 10.00 mL \pm 0.02 mL, and then using the calibration data from [Table 4.9](#).

SOLUTION

To calculate the total volume we simply add the volumes for each use of the pipet. When using the manufacturer's values, the total volume is

$$V = 10.00 \text{ mL} + 10.00 \text{ mL} = 20.00 \text{ mL}$$

and when using the calibration data, the total volume is

$$V = 9.992 \text{ mL} + 9.992 \text{ mL} = 19.984 \text{ mL}$$

Using the pipet's tolerance value as an estimate of its uncertainty gives the uncertainty in the total volume as

$$u_R = \sqrt{(0.02)^2 + (0.02)^2} = 0.028 \text{ mL}$$

and using the standard deviation for the data in [Table 4.9](#) gives an uncertainty of

$$u_R = \sqrt{(0.006)^2 + (0.006)^2} = 0.0085 \text{ mL}$$

Rounding the volumes to four significant figures gives $20.00 \text{ mL} \pm 0.03 \text{ mL}$ when using the tolerance values, and $19.98 \pm 0.01 \text{ mL}$ when using the calibration data.

4C.3 Uncertainty When Multiplying or Dividing

When multiplying or dividing measurements we use their relative uncertainties for a propagation of uncertainty. For example, if the result is given by the equation

$$R = \frac{A \times B}{C}$$

then the relative uncertainty in R is

$$\frac{u_R}{R} = \sqrt{\left(\frac{u_A}{A}\right)^2 + \left(\frac{u_B}{B}\right)^2 + \left(\frac{u_C}{C}\right)^2} \quad 4.7$$

Example 4.6

The quantity of charge, Q , in coulombs passing through an electrical circuit is

$$Q = I \times t$$

where I is the current in amperes and t is the time in seconds. When a current of $0.15 \text{ A} \pm 0.01 \text{ A}$ passes through the circuit for $120 \text{ s} \pm 1 \text{ s}$, what is the total charge passing through the circuit and its uncertainty?

SOLUTION

The total charge is

$$Q = (0.15 \text{ A}) \times (120 \text{ s}) = 18 \text{ C}$$

Since charge is the product of current and time, the relative uncertainty in the charge is

$$\frac{u_R}{R} = \sqrt{\left(\frac{0.01}{0.15}\right)^2 + \left(\frac{1}{120}\right)^2} = 0.0672$$

The absolute uncertainty in the charge is

$$u_R = R \times 0.0672 = (18 \text{ C}) \times (0.0672) = 1.2 \text{ C}$$

Thus, we report the total charge as $18 \text{ C} \pm 1 \text{ C}$.

4C.4 Uncertainty for Mixed Operations

Many chemical calculations involve a combination of adding and subtracting, and multiply and dividing. As shown in the following example, we can calculate uncertainty by treating each operation separately using [equation 4.6](#) and [equation 4.7](#) as needed.

Example 4.7

For a concentration technique the relationship between the signal and the an analyte's concentration is

$$S_{\text{total}} = k_A C_A + S_{\text{mb}}$$

What is the analyte's concentration, C_A , and its uncertainty if S_{total} is 24.37 ± 0.02 , S_{mb} is 0.96 ± 0.02 , and k_A is $0.186 \pm 0.003 \text{ ppm}^{-1}$.

SOLUTION

Rearranging the equation and solving for C_A

$$C_A = \frac{S_{\text{total}} - S_{\text{mb}}}{k_A} = \frac{24.37 - 0.96}{0.186 \text{ ppm}^{-1}} = 125.9 \text{ ppm}$$

gives the analyte's concentration as 126 ppm. To estimate the uncertainty in C_A , we first determine the uncertainty for the numerator using [equation 4.6](#).

$$u_R = \sqrt{(0.02)^2 + (0.02)^2} = 0.028$$

The numerator, therefore, is 23.41 ± 0.028 . To complete the calculation we estimate the relative uncertainty in C_A using [equation 4.7](#).

$$\frac{u_R}{R} = \sqrt{\left(\frac{0.028}{23.41}\right)^2 + \left(\frac{0.003}{0.186}\right)^2} = 0.0162$$

The absolute uncertainty in the analyte's concentration is

$$u_R = (125.9 \text{ ppm}) \times (0.0162) = 2.0 \text{ ppm}$$

Thus, we report the analyte's concentration as $126 \text{ ppm} \pm 2 \text{ ppm}$.

Practice Exercise 4.2

To prepare a standard solution of Cu^{2+} you obtain a piece of copper from a spool of wire. The spool's initial weight is 74.2991 g and its final weight is 73.3216 g. You place the sample of wire in a 500 mL volumetric flask, dissolve it in 10 mL of HNO_3 , and dilute to volume. Next, you pipet a 1 mL portion to a 250-mL volumetric flask and dilute to volume. What is the final concentration of Cu^{2+} in mg/L, and its uncertainty? Assume that the uncertainty in the balance is $\pm 0.1 \text{ mg}$ and that you are using Class A glassware.

Click [here](#) when to review your answer to this exercise.

Table 4.10 Propagation of Uncertainty for Selected Mathematical Functions[†]

Function	u_R
$R = kA$	$u_R = ku_A$
$R = A + B$	$u_R = \sqrt{u_A^2 + u_B^2}$
$R = A - B$	$u_R = \sqrt{u_A^2 + u_B^2}$
$R = A \times B$	$\frac{u_R}{R} = \sqrt{\left(\frac{u_A}{A}\right)^2 + \left(\frac{u_B}{B}\right)^2}$
$R = \frac{A}{B}$	$\frac{u_R}{R} = \sqrt{\left(\frac{u_A}{A}\right)^2 + \left(\frac{u_B}{B}\right)^2}$
$R = \ln(A)$	$u_R = \frac{u_A}{A}$
$R = \log(A)$	$u_R = 0.4343 \times \frac{u_A}{A}$
$R = e^A$	$\frac{u_R}{R} = u_A$
$R = 10^A$	$\frac{u_R}{R} = 2.303 \times u_A$
$R = A^k$	$\frac{u_R}{R} = k \times \frac{u_A}{A}$

[†] Assumes that the measurements A and B are independent; k is a constant whose value has no uncertainty.

4C.5 Uncertainty for Other Mathematical Functions

Many other mathematical operations are common in analytical chemistry, including powers, roots, and logarithms. Table 4.10 provides equations for propagating uncertainty for some of these function.

Example 4.8

If the pH of a solution is 3.72 with an absolute uncertainty of ± 0.03 , what is the $[\text{H}^+]$ and its uncertainty?

SOLUTION

The concentration of H^+ is

$$[\text{H}^+] = 10^{-\text{pH}} = 10^{-3.72} = 1.91 \times 10^{-4} \text{ M}$$

or $1.9 \times 10^{-4} \text{ M}$ to two significant figures. From [Table 4.10](#) the relative uncertainty in $[\text{H}^+]$ is

$$\frac{u_R}{R} = 2.303 \times u_A = 2.303 \times 0.03 = 0.069$$

The uncertainty in the concentration, therefore, is

$$(1.91 \times 10^{-4} \text{ M}) \times (0.069) = 1.3 \times 10^{-5} \text{ M}$$

We report the $[\text{H}^+]$ as $1.9 (\pm 0.1) \times 10^{-4} \text{ M}$.

Writing this result as

$$1.9 (\pm 0.1) \times 10^{-4} \text{ M}$$

is equivalent to

$$1.9 \times 10^{-4} \text{ M} \pm 0.1 \times 10^{-4} \text{ M}$$

Practice Exercise 4.3

A solution of copper ions is blue because it absorbs yellow and orange light. Absorbance, A , is defined as

$$A = -\log \frac{P}{P_0}$$

where P_0 is the power of radiation from the light source and P is the power after it passes through the solution. What is the absorbance if P_0 is 3.80×10^2 and P is 1.50×10^2 ? If the uncertainty in measuring P_0 and P is 15, what is the uncertainty in the absorbance?

Click [here](#) to review your answer to this exercise.

4C.6 Is Calculating Uncertainty Actually Useful?

Given the effort it takes to calculate uncertainty, it is worth asking whether such calculations are useful. The short answer is, yes. Let's consider three examples of how we can use a propagation of uncertainty to help guide the development of an analytical method.

One reason for completing a propagation of uncertainty is that we can compare our estimate of the uncertainty to that obtained experimentally. For example, to determine the mass of a penny we measure mass twice—once to tare the balance at 0.000 g, and once to measure the penny's mass. If the uncertainty for measuring mass is ± 0.001 g, then we estimate the uncertainty in measuring mass as

$$u_{\text{mass}} = \sqrt{(0.001)^2 + (0.001)^2} = 0.0014 \text{ g}$$

If we measure a penny's mass several times and obtain a standard deviation of ± 0.050 g, then we have evidence that our measurement process is out of control. Knowing this, we can identify and correct the problem.

We also can use propagation of uncertainty to help us decide how to improve an analytical method's uncertainty. In [Example 4.7](#), for instance, we calculated an analyte's concentration as $126 \text{ ppm} \pm 2 \text{ ppm}$, which is a percent uncertainty of 1.6%. Suppose we want to decrease the percent uncertainty to no more than 0.8%. How might we accomplish this? Looking back at the calculation, we see that the concentration's relative uncertainty is determined by the relative uncertainty in the measured signal (corrected for the reagent blank)

$$\frac{2 \text{ ppm}}{126 \text{ ppm}} \times 100 = 1.6\%$$

$$\frac{0.028}{23.41} = 0.0012 \text{ or } 0.12\%$$

and the relative uncertainty in the method's sensitivity, k_A ,

$$\frac{0.003 \text{ ppm}^{-1}}{0.186 \text{ ppm}^{-1}} = 0.016 \text{ or } 1.6\%$$

Of these terms, the uncertainty in the method's sensitivity dominates the overall uncertainty. Improving the signal's uncertainty will not improve the overall uncertainty of the analysis. To achieve an overall uncertainty of 0.8% we must improve the uncertainty in k_A to $\pm 0.0015 \text{ ppm}^{-1}$.

Practice Exercise 4.4

Verify that an uncertainty of $\pm 0.0015 \text{ ppm}^{-1}$ for k_A is the correct result. Click [here](#) to review your answer to this exercise.

Finally, we can use a propagation of uncertainty to determine which of several procedures provides the smallest uncertainty. When diluting a stock solution there are usually several different combinations of volumetric glassware that will give the same final concentration. For instance, we can dilute a stock solution by a factor of 10 using a 10-mL pipet and a 100-mL volumetric flask, or by using a 25-mL pipet and a 250-mL volumetric flask. We also can accomplish the same dilution in two steps using a 50-mL pipet and 100-mL volumetric flask for the first dilution, and a 10-mL pipet and a 50-mL volumetric flask for the second dilution. The overall uncertainty in the final concentration—and, therefore, the best option for the dilution—depends on the uncertainty of the transfer pipets and volumetric flasks. As shown below, we can use the tolerance values for volumetric glassware to determine the optimum dilution strategy.⁵

⁵ Lam, R. B.; Isenhour, T. L. *Anal. Chem.* **1980**, *52*, 1158–1161.

Example 4.9

Which of the following methods for preparing a 0.0010 M solution from a 1.0 M stock solution provides the smallest overall uncertainty?

- (a) A one-step dilution using a 1-mL pipet and a 1000-mL volumetric flask.
- (b) A two-step dilution using a 20-mL pipet and a 1000-mL volumetric flask for the first dilution, and a 25-mL pipet and a 500-mL volumetric flask for the second dilution.

SOLUTION

The dilution calculations for case (a) and case (b) are

$$\text{case (a): } 1.0 \text{ M} \times \frac{1.000 \text{ mL}}{1000.0 \text{ mL}} = 0.0010 \text{ M}$$

$$\text{case (b): } 1.0 \text{ M} \times \frac{20.00 \text{ mL}}{1000.0 \text{ mL}} \times \frac{25.00 \text{ mL}}{500.0 \text{ mL}} = 0.0010 \text{ M}$$

Using tolerance values from [Table 4.2](#), the relative uncertainty for case (a) is

$$\frac{u_R}{R} = \sqrt{\left(\frac{0.006}{1.000}\right)^2 + \left(\frac{0.3}{1000.0}\right)^2} = 0.006$$

and for case (b) the relative uncertainty is

$$\frac{u_R}{R} = \sqrt{\left(\frac{0.03}{20.00}\right)^2 + \left(\frac{0.3}{1000.0}\right)^2 + \left(\frac{0.03}{25.00}\right)^2 + \left(\frac{0.2}{500.0}\right)^2} = 0.002$$

Since the relative uncertainty for case (b) is less than that for case (a), the two-step dilution provides the smallest overall uncertainty.

See [Appendix 2](#) for a more detailed treatment of the propagation of uncertainty.

4D The Distribution of Measurements and Results

Earlier we reported results for a determination of the mass of a circulating United States penny, obtaining a mean of 3.117 g and a standard deviation of 0.051 g. [Table 4.11](#) shows results for a second, independent determination of a penny's mass, as well as the data from the first experiment. Although the means and standard deviations for the two experiments are similar, they are not identical. The difference between the experiments raises some interesting questions. Are the results for one experiment better than those for the other experiment? Do the two experiments provide equivalent estimates for the mean and the standard deviation? What is our best estimate of a penny's expected mass? To answer these questions we need to understand how to predict the properties of all pennies by analyz-

Table 4.11 Results for Two Determinations of the Mass of a Circulating United States Penny

First Experiment		Second Experiment	
Penny	Mass (g)	Penny	Mass (g)
1	3.080	1	3.052
2	3.094	2	3.141
3	3.107	3	3.083
4	3.056	4	3.083
5	3.112	5	3.048
6	3.174		
7	3.198		
\bar{X}	3.117		3.081
s	0.051		0.037

ing a small sample of pennies. We begin by making a distinction between populations and samples.

4D.1 Populations and Samples

A **POPULATION** is the set of all objects in the system we are investigating. For our experiment, the population is all United States pennies in circulation. This population is so large that we cannot analyze every member of the population. Instead, we select and analyze a limited subset, or **SAMPLE** of the population. The data in Table 4.11, for example, are results for two samples drawn from the larger population of all circulating United States pennies.

4D.2 Probability Distributions for Populations

Table 4.11 provides the mean and standard deviation for two samples of circulating United States pennies. What do these samples tell us about the population of pennies? What is the largest possible mass for a penny? What is the smallest possible mass? Are all masses equally probable, or are some masses more common?

To answer these questions we need to know something about how the masses of individual pennies are distributed around the population's average mass. We represent the distribution of a population by plotting the probability or frequency of obtaining an specific result as a function of the possible results. Such plots are called **PROBABILITY DISTRIBUTIONS**.

There are many possible probability distributions. In fact, the probability distribution can take any shape depending on the nature of the population. Fortunately many chemical systems display one of several common probability distributions. Two of these distributions, the binomial distribution and the normal distribution, are discussed in this section.

BINOMIAL DISTRIBUTION

The **BINOMIAL DISTRIBUTION** describes a population in which the result is the number of times a particular event occurs during a fixed number of trials. Mathematically, the binomial distribution is

$$P(X, N) = \frac{N!}{X!(N - X)!} \times p^X \times (1 - p)^{N - X}$$

where $P(X, N)$ is the probability that an event occurs X times during N trials, and p is the event's probability for a single trial. If you flip a coin five times, $P(2, 5)$ is the probability that the coin will turn up "heads" exactly twice.

A binomial distribution has well-defined measures of central tendency and spread. The expected mean value is

$$\mu = Np$$

and the expected spread is given by the variance

$$\sigma^2 = Np(1 - p)$$

or the standard deviation.

$$\sigma = \sqrt{Np(1 - p)}$$

The binomial distribution describes a population whose members can take on only specific, discrete values. When you roll a die, for example, the possible values are 1, 2, 3, 4, 5, or 6. A roll of 3.45 is not possible. As shown in Example 4.10, one example of a chemical system obeying the binomial distribution is the probability of finding a particular isotope in a molecule.

The term $N!$ reads as N -factorial and is the product $N \times (N-1) \times (N-2) \times \dots \times 1$. For example, $4!$ is $4 \times 3 \times 2 \times 1 = 24$. Your calculator probably has a key for calculating factorials.

Example 4.10

Carbon has two stable, non-radioactive isotopes, ^{12}C and ^{13}C , with relative isotopic abundances of, respectively, 98.89% and 1.11%.

- What are the mean and the standard deviation for the number of ^{13}C atoms in a molecule of cholesterol ($\text{C}_{27}\text{H}_{44}\text{O}$)?
- What is the probability that a molecule of cholesterol has no atoms of ^{13}C ?

SOLUTION

The probability of finding an atom of ^{13}C in a molecule of cholesterol follows a binomial distribution, where X is the number of ^{13}C atoms, N is the number of carbon atoms in a molecule of cholesterol, and p is the probability that any single atom of carbon is ^{13}C .

- The mean number of ^{13}C atoms in a molecule of cholesterol is

$$\mu = Np = 27 \times 0.0111 = 0.300$$

with a standard deviation of

$$\sigma = \sqrt{Np(1-p)} = \sqrt{27 \times 0.0111 \times (1-0.0111)} = 0.172$$

- (b) The probability of finding a molecule of cholesterol without an atom of ^{13}C is

$$P(0,27) = \frac{27!}{0!(27-0)!} \times (0.0111)^0 \times (1-0.0111)^{27-0} = 0.740$$

There is a 74.0% probability that a molecule of cholesterol will not have an atom of ^{13}C , a result consistent with the observation that the mean number of ^{13}C atoms per molecule of cholesterol, 0.300, is less than one.

A portion of the binomial distribution for atoms of ^{13}C in cholesterol is shown in Figure 4.6. Note in particular that there is little probability of finding more than two atoms of ^{13}C in any molecule of cholesterol.

NORMAL DISTRIBUTION

A binomial distribution describes a population whose members have only certain, discrete values. This is the case with the number of ^{13}C atoms in cholesterol. A molecule of cholesterol, for example, can have two ^{13}C atoms, but it can not have 2.5 atoms of ^{13}C . A population is continuous if its members may take on any value. The efficiency of extracting cholesterol from a sample, for example, can take on any value between 0% (no cholesterol extracted) and 100% (all cholesterol extracted).

The most common continuous distribution is the Gaussian, or **NORMAL DISTRIBUTION**, the equation for which is

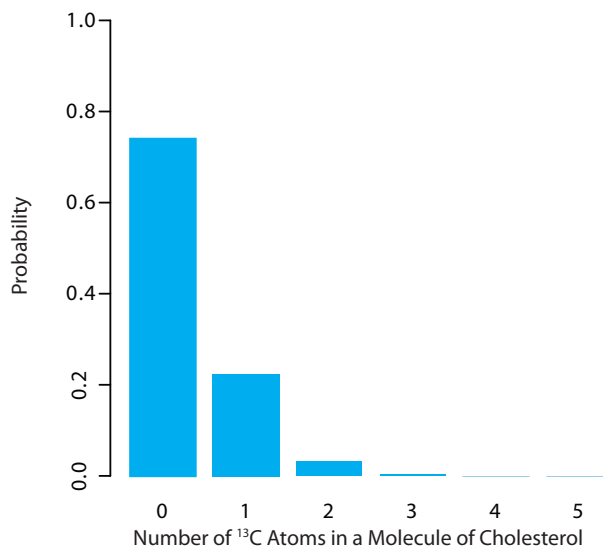


Figure 4.6 Portion of the binomial distribution for the number of naturally occurring ^{13}C atoms in a molecule of cholesterol. Only 3.6% of cholesterol molecules contain more than one atom of ^{13}C , and only 0.33% contain more than two atoms of ^{13}C .

$$f(X) = \frac{1}{\sqrt{2\pi\sigma^2}} e^{-\frac{(X-\mu)^2}{2\sigma^2}}$$

where μ is the expected mean for a population with n members

$$\mu = \frac{\sum_i X_i}{n}$$

and σ^2 is the population's variance.

$$\sigma^2 = \frac{\sum_i (X_i - \mu)^2}{n} \quad 4.8$$

Examples of normal distributions, each with an expected mean of 0 and with variances of 25, 100, or 400, are shown in Figure 4.7. Two features of these normal distribution curves deserve attention. First, note that each normal distribution has a single maximum corresponding to μ , and that the distribution is symmetrical about this value. Second, increasing the population's variance increases the distribution's spread and decreases its height; the area under the curve, however, is the same for all three distribution.

The area under a normal distribution curve is an important and useful property as it is equal to the probability of finding a member of the population with a particular range of values. In Figure 4.7, for example, 99.99% of the population shown in curve (a) have values of X between -20 and 20. For curve (c), 68.26% of the population's members have values of X between -20 and 20.

Because a normal distribution depends solely on μ and σ^2 , the probability of finding a member of the population between any two limits is the same for all normally distributed populations. Figure 4.8, for example, shows that 68.26% of the members of a normal distribution have a value

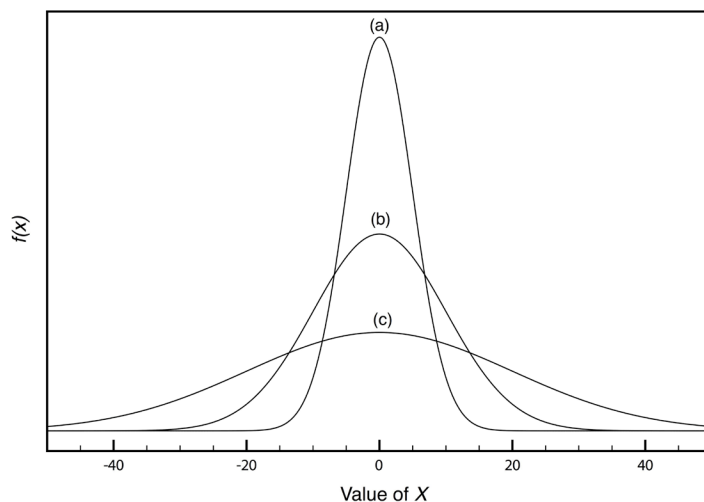


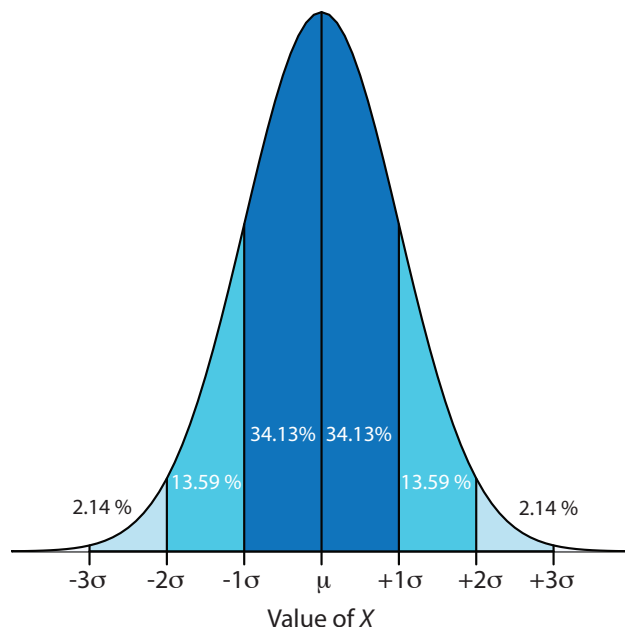
Figure 4.7 Normal distribution curves for:

(a) $\mu = 0$; $\sigma^2 = 25$

(b) $\mu = 0$; $\sigma^2 = 100$

(c) $\mu = 0$; $\sigma^2 = 400$

Figure 4.8 Normal distribution curve showing the area under the curve for several different ranges of values of X . As shown here, 68.26% of the members of a normally distributed population have values within $\pm 1\sigma$ of the population's expected mean, and 13.59% have values between $\mu - 1\sigma$ and $\mu - 2\sigma$. The area under the curve between any two limits can be found using the probability table in [Appendix 3](#).



within the range $\mu \pm 1\sigma$, and that 95.44% of population's members have values within the range $\mu \pm 2\sigma$. Only 0.17% members of a population have values exceeding the expected mean by more than $\pm 3\sigma$. Additional ranges and probabilities are gathered together in a probability table that you will find in [Appendix 3](#). As shown in Example 4.11, if we know the mean and standard deviation for a normally distributed population, then we can determine the percentage of the population between any defined limits.

Example 4.11

The amount of aspirin in the analgesic tablets from a particular manufacturer is known to follow a normal distribution with $\mu = 250$ mg and $\sigma^2 = 25$. In a random sampling of tablets from the production line, what percentage are expected to contain between 243 and 262 mg of aspirin?

SOLUTION

We do not determine directly the percentage of tablets between 243 mg and 262 mg of aspirin. Instead, we first find the percentage of tablets with less than 243 mg of aspirin and the percentage of tablets having more than 262 mg of aspirin. Subtracting these results from 100%, gives the percentage of tablets containing between 243 mg and 262 mg of aspirin.

To find the percentage of tablets with less than 243 mg of aspirin or more than 262 mg of aspirin we calculate the deviation, z , of each limit from μ in terms of the population's standard deviation, σ

$$z = \frac{X - \mu}{\sigma}$$

where X is the limit in question. The deviation for the lower limit is

$$z_{\text{lower}} = \frac{243 - 250}{5} = -1.4$$

and the deviation for the upper limit is

$$z_{\text{upper}} = \frac{262 - 250}{5} = +2.4$$

Using the table in [Appendix 3](#), we find that the percentage of tablets with less than 243 mg of aspirin is 8.08%, and the percentage of tablets with more than 262 mg of aspirin is 0.82%. Therefore, the percentage of tablets containing between 243 and 262 mg of aspirin is

$$100.00\% - 8.08\% - 0.82\% = 91.10\%$$

Figure 4.9 shows the distribution of aspirin in the tablets, with the area in blue showing the percentage of tablets containing between 243 mg and 262 mg of aspirin.

Practice Exercise 4.5

What percentage of aspirin tablets will contain between 240 mg and 245 mg of aspirin if the population's mean is 250 mg and the population's standard deviation is 5 mg.

Click [here](#) to review your answer to this exercise.

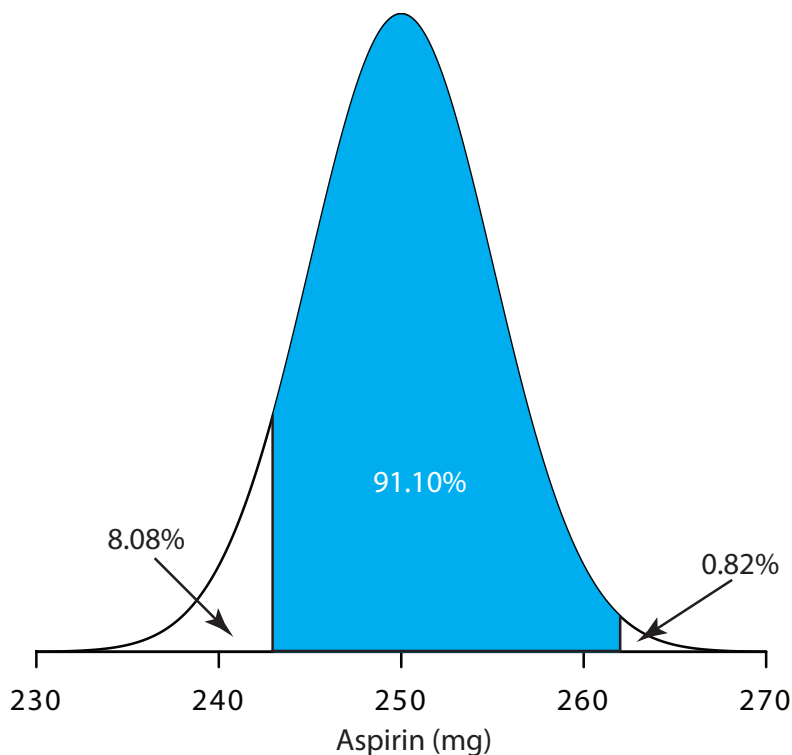


Figure 4.9 Normal distribution for the population of aspirin tablets in [Example 4.11](#). The population's mean and standard deviation are 250 mg and 5 mg, respectively. The shaded area shows the percentage of tablets containing between 243 mg and 262 mg of aspirin.

4D.3 Confidence Intervals for Populations

If we randomly select a single member from a population, what is its most likely value? This is an important question, and, in one form or another, it is at the heart of any analysis in which we wish to extrapolate from a sample to the sample's parent population. One of the most important features of a population's probability distribution is that it provides a way to answer this question.

Figure 4.8 shows that for a normal distribution, 68.26% of the population's members are found within the range of $\mu \pm 1\sigma$. Stating this another way, there is a 68.26% probability that the result for a single sample drawn from a normally distributed population is in the interval $\mu \pm 1\sigma$. In general, if we select a single sample we expect its value, X_i to be in the range

$$X_i = \mu \pm z\sigma \quad 4.9$$

where the value of z is how confident we are in assigning this range. Values reported in this fashion are called **CONFIDENCE INTERVALS**. Equation 4.9, for example, is the confidence interval for a single member of a population. Table 4.12 gives the confidence intervals for several values of z . For reasons we will discuss later in the chapter, a 95% confidence level is a common choice in analytical chemistry.

When $z=1$, we call this the 68.26% confidence interval.

Example 4.12

What is the 95% confidence interval for the amount of aspirin in a single analgesic tablet drawn from a population for which μ is 250 mg and σ^2 is 25?

SOLUTION

Using Table 4.12, we find that z is 1.96 for a 95% confidence interval. Substituting this into equation 4.9, gives the confidence interval for a single tablet as

$$X_i = \mu \pm 1.96\sigma = 250 \text{ mg} \pm (1.96 \times 5) = 250 \text{ mg} \pm 10 \text{ mg}$$

Table 4.12 Confidence Intervals for a Normal Distribution ($\mu \pm z\sigma$)

z	Confidence Interval (%)
0.50	38.30
1.00	68.26
1.50	86.64
1.96	95.00
2.00	95.44
2.50	98.76
3.00	99.73
3.50	99.95

A confidence interval of $250 \text{ mg} \pm 10 \text{ mg}$ means that 95% of the tablets in the population contain between 240 and 260 mg of aspirin.

Alternatively, we can express a confidence interval for the expected mean in terms of the population's standard deviation and the value of a single member drawn from the population.

$$\mu = X_i \pm z\sigma \quad 4.10$$

Example 4.13

The population standard deviation for the amount of aspirin in a batch of analgesic tablets is known to be 7 mg of aspirin. If you randomly select and analyze a single tablet and find that it contains 245 mg of aspirin, what is the 95% confidence interval for the population's mean?

SOLUTION

The 95% confidence interval for the population mean is given as

$$\mu = X_i \pm z\sigma = 245 \text{ mg} \pm (1.96 \times 7) \text{ mg} = 245 \text{ mg} \pm 14 \text{ mg}$$

Therefore, there is 95% probability that the population's mean, μ , lies within the range of 231 mg to 259 mg of aspirin.

It is unusual to predict the population's expected mean from the analysis of a single sample. We can extend confidence intervals to include the mean of n samples drawn from a population of known σ . The standard deviation of the mean, $\sigma_{\bar{x}}$, which also is known as the **STANDARD ERROR OF THE MEAN**, is

$$\sigma_{\bar{x}} = \frac{\sigma}{\sqrt{n}}$$

The confidence interval for the population's mean, therefore, is

$$\mu = \bar{X} \pm \frac{z\sigma}{\sqrt{n}} \quad 4.11$$

[Problem 8](#) at the end of the chapter asks you to derive this equation using a propagation of uncertainty.

Example 4.14

What is the 95% confidence interval for the analgesic tablets described in Example 4.13, if an analysis of five tablets yields a mean of 245 mg of aspirin?

SOLUTION

In this case the confidence interval is

$$\mu = 245 \text{ mg} \pm \frac{1.96 \times 7}{\sqrt{5}} \text{ mg} = 245 \text{ mg} \pm 6 \text{ mg}$$

Thus, there is a 95% probability that the population's mean is between 239 to 251 mg of aspirin. As expected, the confidence interval when using the mean of five samples is smaller than that for a single sample.

Practice Exercise 4.6

An analysis of seven aspirin tablets from a population known to have a standard deviation of 5, gives the following results in mg aspirin per tablet:

246 249 255 251 251 247 250

What is the 95% confidence interval for the population's expected mean?

Click [here](#) when you are ready to review your answer.

4D.4 Probability Distributions for Samples

In working example 4.11–4.14 we assumed that the amount of aspirin in analgesic tablets is normally distributed. Without analyzing every member of the population, how can we justify this assumption? In situations where we can not study the whole population, or when we can not predict the mathematical form of a population's probability distribution, we must deduce the distribution from a limited sampling of its members.

SAMPLE DISTRIBUTIONS AND THE CENTRAL LIMIT THEOREM

Let's return to the problem of determining a penny's mass to explore further the relationship between a population's distribution and the distribution of a sample drawn from that population. The two sets of data in [Table 4.11](#) are too small to provide a useful picture of a sample's distribution. To gain a better picture of the distribution of pennies we need a larger sample, such as that shown in [Table 4.13](#). The mean and the standard deviation for this sample of 100 pennies are 3.095 g and 0.0346 g, respectively.

A **HISTOGRAM** ([Figure 4.10](#)) is a useful way to examine the data in [Table 4.13](#). To create the histogram, we divide the sample into mass intervals and determine the percentage of pennies within each interval ([Table 4.14](#)). Note that the sample's mean is the midpoint of the histogram.

[Figure 4.10](#) also includes a normal distribution curve for the population of pennies, assuming that the mean and variance for the sample provide appropriate estimates for the mean and variance of the population. Although the histogram is not perfectly symmetric, it provides a good approximation of the normal distribution curve, suggesting that the sample of 100 pennies

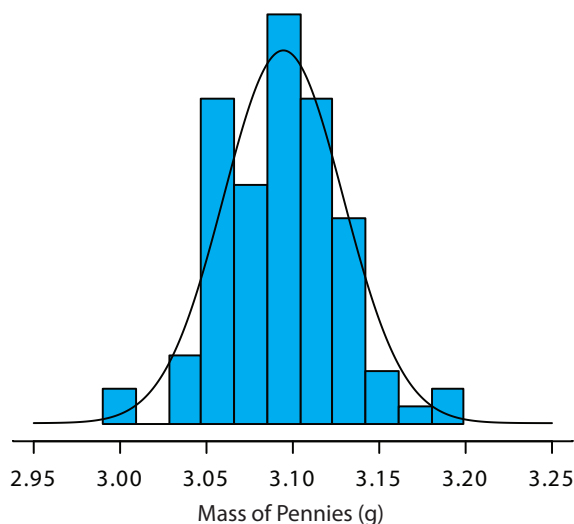
Table 4.13 Masses for a Sample of 100 Circulating U. S. Pennies

Penny	Mass (g)	Penny	Mass (g)	Penny	Mass (g)	Penny	Mass (g)
1	3.126	26	3.073	51	3.101	76	3.086
2	3.140	27	3.084	52	3.049	77	3.123
3	3.092	28	3.148	53	3.082	78	3.115
4	3.095	29	3.047	54	3.142	79	3.055
5	3.080	30	3.121	55	3.082	80	3.057
6	3.065	31	3.116	56	3.066	81	3.097
7	3.117	32	3.005	57	3.128	82	3.066
8	3.034	33	3.115	58	3.112	83	3.113
9	3.126	34	3.103	59	3.085	84	3.102
10	3.057	35	3.086	60	3.086	85	3.033
11	3.053	36	3.103	61	3.084	86	3.112
12	3.099	37	3.049	62	3.104	87	3.103
13	3.065	38	2.998	63	3.107	88	3.198
14	3.059	39	3.063	64	3.093	89	3.103
15	3.068	40	3.055	65	3.126	90	3.126
16	3.060	41	3.181	66	3.138	91	3.111
17	3.078	42	3.108	67	3.131	92	3.126
18	3.125	43	3.114	68	3.120	93	3.052
19	3.090	44	3.121	69	3.100	94	3.113
20	3.100	45	3.105	70	3.099	95	3.085
21	3.055	46	3.078	71	3.097	96	3.117
22	3.105	47	3.147	72	3.091	97	3.142
23	3.063	48	3.104	73	3.077	98	3.031
24	3.083	49	3.146	74	3.178	99	3.083
25	3.065	50	3.095	75	3.054	100	3.104

Table 4.14 Frequency Distribution for the Data in Table 4.13

Mass Interval	Frequency (as %)	Mass Interval	Frequency (as %)
2.991–3.009	2	3.104–3.123	19
3.010–3.028	0	3.124–3.142	12
3.029–3.047	4	3.143–3.161	3
3.048–3.066	19	3.162–3.180	1
3.067–3.085	15	3.181–3.199	2
3.086–3.104	23		

Figure 4.10 The blue bars show a histogram for the data in [Table 4.13](#). The height of a bar corresponds to the percentage of pennies within the mass intervals shown in [Table 4.14](#). Superimposed on the histogram is a normal distribution curve assuming that μ and σ^2 for the population are equivalent to \bar{X} and s^2 for the sample. The total area of the histogram's bars and the area under the normal distribution curve are equal.



is normally distributed. It is easy to imagine that the histogram will more closely approximate a normal distribution if we include additional pennies in our sample.

We will not offer a formal proof that the sample of pennies in [Table 4.13](#) and the population of all circulating U. S. pennies are normally distributed. The evidence we have seen, however, strongly suggests that this is true. Although we can not claim that the results for all analytical experiments are normally distributed, in most cases the data we collect in the laboratory are, in fact, drawn from a normally distributed population. According to the **CENTRAL LIMIT THEOREM**, when a system is subject to a variety of indeterminate errors, the results approximate a normal distribution.⁶ As the number of sources of indeterminate error increases, the results more closely approximate a normal distribution. The central limit theorem holds true even if the individual sources of indeterminate error are not normally distributed. The chief limitation to the central limit theorem is that the sources of indeterminate error must be independent and of similar magnitude so that no one source of error dominates the final distribution.

An additional feature of the central limit theorem is that a distribution of means for samples drawn from a population with any distribution will closely approximate a normal distribution if the size of the samples is large enough. [Figure 4.11](#) shows the distribution for two samples of 10 000 drawn from a uniform distribution in which every value between 0 and 1 occurs with an equal frequency. For samples of size $n = 1$, the resulting distribution closely approximates the population's uniform distribution. The distribution of the means for samples of size $n = 10$, however, closely approximates a normal distribution.

You might reasonably ask whether this aspect of the central limit theorem is important as it is unlikely that we will complete 10 000 analyses, each of which is the average of 10 individual trials. This is deceiving. When we acquire a sample for analysis—a sample of soil, for example—it consists of many individual particles, each of which is an individual sample of the soil. Our analysis of the gross sample, therefore, is the mean for this large number of individual soil particles. Because of this, the central limit theorem is relevant.

6 Mark, H.; Workman, J. *Spectroscopy* **1988**, *3*, 44–48.

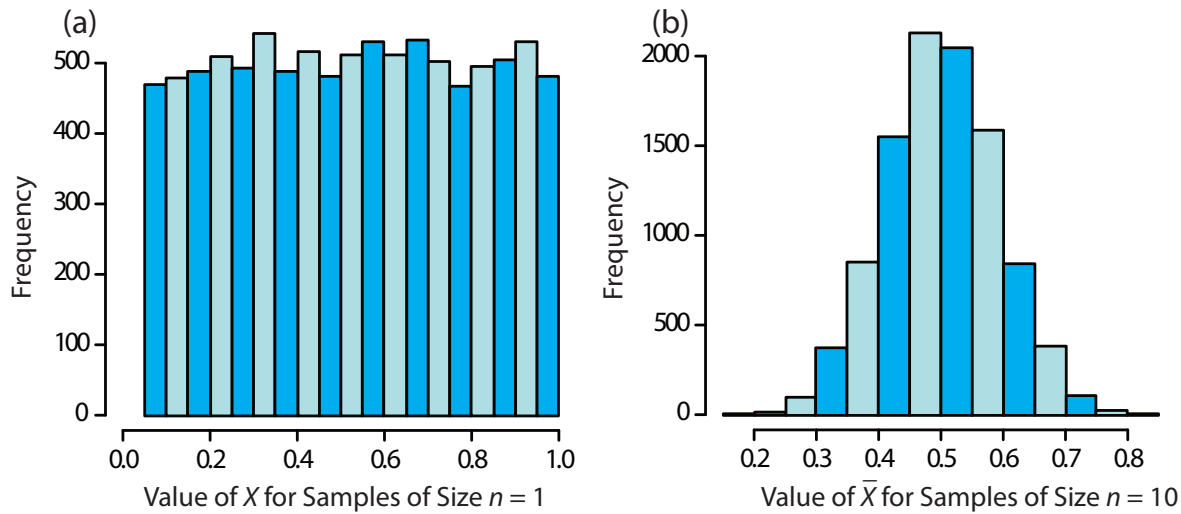


Figure 4.11 Histograms for (a) 10 000 samples of size $n = 1$ drawn from a uniform distribution with a minimum value of 0 and a maximum value of 1, and (b) the means for 10 000 samples of size $n = 10$ drawn from the same uniform distribution. For (a) the mean of the 10 000 samples is 0.5042, and for (b) the mean of the 10 000 samples is 0.5006. Note that for (a) the distribution closely approximates a uniform distribution in which every possible result is equally likely, and that for (b) the distribution closely approximates a normal distribution.

DEGREES OF FREEDOM

In reading to this point, did you notice the differences between the equations for the standard deviation or variance of a population and the standard deviation or variance of a sample? If not, here are the two equations:

$$\sigma^2 = \frac{\sum_i (X_i - \mu)^2}{n}$$

$$s^2 = \frac{\sum_i (X_i - \bar{X})^2}{n - 1}$$

Both equations measure the variance around the mean, using μ for a population and \bar{X} for a sample. Although the equations use different measures for the mean, the intention is the same for both the sample and the population. A more interesting difference is between the denominators of the two equations. In calculating the population's variance we divide the numerator by the population's size, n . For the sample's variance we divide by $n - 1$, where n is the size of the sample. Why do we make this distinction?

A variance is the average squared deviation of individual results from the mean. In calculating an average we divide by the number of independent measurements, also known as the **DEGREES OF FREEDOM**, contributing to the calculation. For the population's variance, the degrees of freedom is equal to the total number of members, n , in the population. In measuring

Here is another way to think about degrees of freedom. We analyze samples to make predictions about the underlying population. When our sample consists of n measurements we cannot make more than n independent predictions about the population. Each time we estimate a parameter, such as the population's mean, we lose a degree of freedom. If there are n degrees of freedom for calculating the sample's mean, then there are $n-1$ degrees of freedom remaining for calculating the sample's variance.

every member of the population we have complete information about the population.

When calculating the sample's variance, however, we first replace μ with \bar{X} , which we also calculate from the same data. If there are n members in the sample, we can deduce the value of the n^{th} member from the remaining $n-1$ members. For example, if $n=5$ and we know that the first four samples are 1, 2, 3 and 4, and that the mean is 3, then the fifth member of the sample must be

$$X_5 = (\bar{X} \times n) - X_1 - X_2 - X_3 - X_4 = (3 \times 5) - 1 - 2 - 3 - 4 = 5$$

Using $n-1$ in place of n when calculating the sample's variance ensures that s^2 is an unbiased estimator of σ^2 .

4D.5 Confidence Intervals for Samples

Earlier we introduced the confidence interval as a way to report the most probable value for a population's mean, μ ,

$$\mu = \bar{X} \pm \frac{z\sigma}{\sqrt{n}} \quad 4.11$$

where \bar{X} is the mean for a sample of size n , and σ is the population's standard deviation. For most analyses we do not know the population's standard deviation. We can still calculate a confidence interval, however, if we make two modifications to equation 4.11.

The first modification is straightforward—we replace the population's standard deviation, σ , with the sample's standard deviation, s . The second modification is less obvious. The values of z in [Table 4.12](#) are for a normal distribution, which is a function of σ^2 , not s^2 . Although the sample's variance, s^2 , provides an unbiased estimate for the population's variance, σ^2 , the value of s^2 for any sample may differ significantly from σ^2 . To account for the uncertainty in estimating σ^2 , we replace the variable z in equation 4.11 with the variable t , where t is defined such that $t \geq z$ at all confidence levels.

$$\mu = \bar{X} \pm \frac{ts}{\sqrt{n}} \quad 4.12$$

Values for t at the 95% confidence level are shown in [Table 4.15](#). Note that t becomes smaller as the number of degrees of freedom increases, approaching z as n approaches infinity. The larger the sample, the more closely its confidence interval approaches the confidence interval given by equation 4.11. [Appendix 4](#) provides additional values of t for other confidence levels.

Table 4.15 Values of t for a 95% Confidence Interval

Degrees of Freedom	t	Degrees of Freedom	t
1	12.706	12	2.179
2	4.303	14	2.145
3	3.181	16	2.120
4	2.776	18	2.101
5	2.571	20	2.086
6	2.447	30	2.042
7	2.365	40	2.021
8	2.306	60	2.000
9	2.262	100	1.984
10	2.228	∞	1.960

Example 4.15

What are the 95% confidence intervals for the two samples of pennies in [Table 4.11](#)?

SOLUTION

The mean and standard deviation for first experiment are, respectively, 3.117 g and 0.051 g. Because the sample consists of seven measurements, there are six degrees of freedom. The value of t from [Table 4.15](#), is 2.447. Substituting into [equation 4.12](#) gives

$$\mu = 3.117 \text{ g} \pm \frac{2.447 \times 0.051 \text{ g}}{\sqrt{7}} = 3.117 \text{ g} \pm 0.047 \text{ g}$$

For the second experiment the mean and standard deviation are 3.081 g and 0.073 g, respectively, with four degrees of freedom. The 95% confidence interval is

$$\mu = 3.081 \text{ g} \pm \frac{2.776 \times 0.037 \text{ g}}{\sqrt{5}} = 3.081 \text{ g} \pm 0.046 \text{ g}$$

Based on the first experiment, there is a 95% probability that the population's mean is between 3.070 to 3.164 g. For the second experiment, the 95% confidence interval spans 3.035 g–3.127 g. The two confidence intervals are not identical, but the mean for each experiment is contained within the other experiment's confidence interval. There also is an appreciable overlap of the two confidence intervals. Both of these observations are consistent with samples drawn from the same population.

Our comparison of these two confidence intervals is rather vague and unsatisfying. We will return to this point in the next section, when we consider a statistical approach to comparing the results of experiments.

Practice Exercise 4.7

What is the 95% confidence interval for the sample of 100 pennies in [Table 4.13](#)? The mean and the standard deviation for this sample are 3.095 g and 0.0346 g, respectively. Compare your result to the confidence intervals for the samples of pennies in [Table 4.11](#).

Click [here](#) when to review your answer to this exercise.

4D.6 A Cautionary Statement

There is a temptation when analyzing data to plug numbers into an equation, carry out the calculation, and report the result. This is never a good idea, and you should develop the habit of constantly reviewing and evaluating your data. For example, if an analysis on five samples gives an analyte's mean concentration as 0.67 ppm with a standard deviation of 0.64 ppm, then the 95% confidence interval is

$$\mu = 0.67 \text{ ppm} \pm \frac{2.776 \times 0.64 \text{ ppm}}{\sqrt{5}} = 0.67 \text{ ppm} \pm 0.79 \text{ ppm}$$

This confidence interval suggests that the analyte's true concentration lies within the range of -0.12 ppm to 1.46 ppm. Including a negative concentration within the confidence interval should lead you to reevaluate your data or conclusions. A closer examination of your data may convince you that the standard deviation is larger than expected, making the confidence interval too broad, or you may conclude that the analyte's concentration is too small to detect accurately.

Here is a second example of why you should closely examine your data. The results for samples drawn from a normally distributed population must be random. If the results for a sequence of samples show a regular pattern or trend, then the underlying population may not be normally distributed, or there may be a time-dependent determinate error. For example, if we randomly select 20 pennies and find that the mass of each penny is larger than that for the preceding penny, we might suspect that our balance is drifting out of calibration.

4E Statistical Analysis of Data

A confidence interval is a useful way to report the result of an analysis because it sets limits on the expected result. In the absence of determinate error, a confidence interval indicates the range of values in which we expect to find the population's expected mean. When we report a 95% confidence interval for the mass of a penny as $3.117 \text{ g} \pm 0.047 \text{ g}$, for example, we are claiming that there is only a 5% probability that the expected mass of penny is less than 3.070 g or more than 3.164 g.

We will return to the topic of detection limits near the end of the chapter.

Because a confidence interval is a statement of probability, it allows us to answer questions such as “Are the results for a newly developed method for determining cholesterol in blood significantly different from those obtained using a standard method?” or “Is there a significant variation in the composition of rainwater collected at different sites downwind from a coal-burning utility plant?”. In this section we introduce a general approach to the statistical analysis of data. Specific statistical tests are presented in Section 4F.

4E.1 Significance Testing

Let’s consider the following problem. To determine if a medication is effective in lowering blood glucose concentrations, we collect two sets of blood samples from a patient. We collect one set of samples immediately before administering the medication, and collect the second set of samples several hours later. After analyzing the samples, we report their respective means and variances. How do we decide if the medication was successful in lowering the patient’s concentration of blood glucose?

One way to answer this question is to construct normal distribution curves for each sample, and to compare them to each other. Three possible outcomes are shown in Figure 4.12. In Figure 4.12a, there is a complete separation of the normal distribution curves, strongly suggesting that the samples are significantly different. In Figure 4.12b, the normal distributions for the two samples almost completely overlap each other, suggesting that any difference between the samples is insignificant. Figure 4.12c, however, presents a dilemma. Although the means for the two samples appear to be different, there is sufficient overlap of the normal distributions that a significant number of possible outcomes could belong to either distribution. In this case the best we can do is to make a statement about the probability that the samples are significantly different.

The process by which we determine the probability that there is a significant difference between two samples is called significance testing or hypothesis testing. Before discussing specific examples we will first establish a general approach to conducting and interpreting significance tests.

4E.2 Constructing a Significance Test

The purpose of a **SIGNIFICANCE TEST** is to determine whether the difference between two or more values is too large to be explained by indeterminate error. The first step in constructing a significance test is to state the problem as a yes or no question, such as “Is this medication effective at lowering a patient’s blood glucose levels?”. A null hypothesis and an alternative hypothesis provide answers to the question. The **NULL HYPOTHESIS**, H_0 , is that indeterminate error is sufficient to explain any differences in our data. The **ALTERNATIVE HYPOTHESIS**, H_A , is that the differences are too great to be explained by random error and, therefore, must be determinate. We test

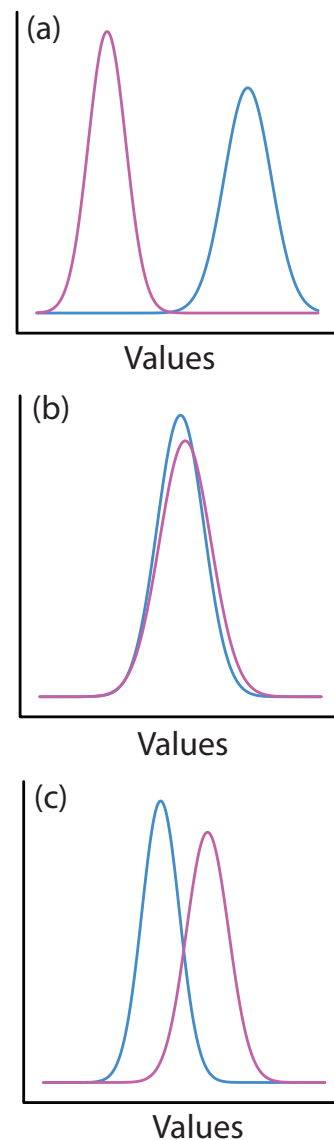


Figure 4.12 Three examples showing possible relationships between the normal distribution curves for two samples. In (a) the curves are completely separate, suggesting that the samples are significantly different from each other. In (b) the two curves are almost identical, suggesting that the samples are indistinguishable. The partial overlap of the curves in (c) means that the best we can do is to indicate the probability that there is a difference between the samples.

the null hypothesis, which we either retain or reject. If we reject the null hypothesis, then we must accept the alternative hypothesis, concluding that the difference is significant and that it cannot be explained by random error.

Failing to reject a null hypothesis is not the same as accepting it. We retain a null hypothesis because there is insufficient evidence to prove it incorrect. It is impossible to prove that a null hypothesis is true. This is an important point that is easy to forget. To appreciate this point let's return to our sample of 100 pennies in [Table 4.13](#). After looking at the data you might propose the following null and alternative hypotheses.

H_0 : The mass of any U.S. penny in circulation is in the range of 2.900g–3.200 g.

H_A : A U.S. penny in circulation may have a mass less than 2.900 g or a mass of more than 3.200 g.

To test the null hypothesis you reach into your pocket, retrieve a penny, and determine its mass. If the penny's mass is 2.512 g then you reject the null hypothesis, and accept the alternative hypothesis. Suppose that the penny's mass is 3.162 g. Although this result increases your confidence in the null hypothesis, it does not prove it is correct because the next penny you pull from your pocket might weigh less than 2.900 g or more than 3.200 g.

After stating the null and alternative hypotheses, the second step is to choose a confidence level for the analysis. The confidence level defines the probability that we will reject the null hypothesis when it is, in fact, true. We can express this as our confidence in correctly rejecting the null hypothesis (e.g. 95%), or as the probability that we are incorrectly rejecting the null hypothesis. For the latter, the confidence level is given as α , where

$$\alpha = 1 - \frac{\text{confidence level (\%)}}{100}$$

For a 95% confidence level, α is 0.05.

The third step is to calculate an appropriate test statistic and to compare it to a critical value. The test statistic's critical value defines a breakpoint between values that lead us to reject or to retain the null hypothesis. How we calculate the test statistic depends on what we are comparing, a topic we cover in section 4F. The last step is to either retain the null hypothesis, or to reject it and accept the alternative hypothesis.

4E.3 One-Tailed and Two-Tailed Significance Tests

Suppose we want to evaluate the accuracy of a new analytical method. We might use the method to analyze a Standard Reference Material containing a known concentration of analyte, μ . We analyze the standard several times, obtaining an mean value, \bar{X} , for the analyte's concentration. Our null hypothesis is that there is no difference between \bar{X} and μ

The four steps for a statistical analysis of data:

1. Pose a question, and state the null hypothesis and the alternative hypothesis.
3. Choose a confidence level for the statistical analysis.
3. Calculate an appropriate test statistic and compare it to a critical value.
4. Either retain the null hypothesis, or reject it and accept the alternative hypothesis.

In this textbook we use α to represent the probability of incorrectly rejecting the null hypothesis. In other textbooks this probability is given as p (often read as "p-value"). Although the symbols differ, the meaning is the same.

$$H_0 : \bar{X} = \mu$$

If we conduct the significance test at $\alpha = 0.05$, then we retain the null hypothesis if a 95% confidence interval around \bar{X} contains μ . If the alternative hypothesis is

$$H_A : \bar{X} \neq \mu$$

then we reject the null hypothesis and accept the alternative hypothesis if μ lies in the shaded areas at either end of the sample's probability distribution curve (Figure 4.13a). Each of the shaded areas accounts for 2.5% of the area under the probability distribution curve. This is a **TWO-TAILED SIGNIFICANCE TEST** because we reject the null hypothesis for values of μ at either extreme of the sample's probability distribution curve.

We also can write the alternative hypothesis in two additional ways

$$H_A : \bar{X} > \mu$$

$$H_A : \bar{X} < \mu$$

rejecting the null hypothesis if μ falls within the shaded areas shown in Figure 4.13b or Figure 4.13c, respectively. In each case the shaded area represents 5% of the area under the probability distribution curve. These are examples of a **ONE-TAILED SIGNIFICANCE TEST**.

For a fixed confidence level, a two-tailed significance test is always a more conservative test because rejecting the null hypothesis requires a larger difference between the parameters we are comparing. In most situations we have no particular reason to expect that one parameter must be larger (or smaller) than the other parameter. This is the case, for example, in evaluating the accuracy of a new analytical method. A two-tailed significance test, therefore, is usually the appropriate choice.

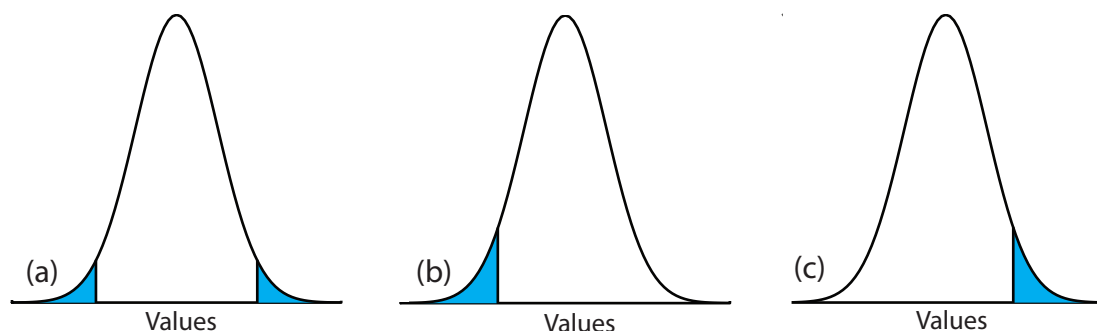


Figure 4.13 Examples of a (a) two-tailed, and a (b, c) a one-tailed, significance test of \bar{X} and μ . The normal distribution curves are drawn using the sample's mean and standard deviation. For $\alpha = 0.05$, the blue areas account for 5% of the area under the curve. If the value of μ is within the blue areas, then we reject the null hypothesis and accept the alternative hypothesis. We retain the null hypothesis if the value of μ is within the unshaded area of the curve.

We reserve a one-tailed significance test for a situation where we are specifically interested in whether one parameter is larger (or smaller) than the other parameter. For example, a one-tailed significance test is appropriate if we are evaluating a medication's ability to lower blood glucose levels. In this case we are interested only in whether the result after administering the medication is less than the result before beginning treatment. If the patient's blood glucose level is greater after administering the medication, then we know the answer—the medication did not work—without conducting a statistical analysis.

4E.4 Errors in Significance Testing

Because a significance test relies on probability, its interpretation is naturally subject to error. In a significance test, α defines the probability of rejecting a null hypothesis that is true. When we conduct a significance test at $\alpha = 0.05$, there is a 5% probability that we will incorrectly reject the null hypothesis. This is known as a **TYPE I ERROR**, and its risk is always equivalent to α . Type 1 errors in two-tailed and one-tailed significance tests correspond to the shaded areas under the probability distribution curves in [Figure 4.13](#).

A second type of error occurs when we retain a null hypothesis even though it is false. This is as a **TYPE 2 ERROR**, and its probability of occurrence is β . Unfortunately, in most cases we cannot calculate or estimate the value for β . The probability of a type 2 error, however, is inversely proportional to the probability of a type 1 error.

Minimizing a type 1 error by decreasing α increases the likelihood of a type 2 error. When we choose a value for α we are making a compromise between these two types of error. Most of the examples in this text use a 95% confidence level ($\alpha = 0.05$) because this provides a reasonable compromise between type 1 and type 2 errors. It is not unusual, however, to use more stringent (e.g. $\alpha = 0.01$) or more lenient (e.g. $\alpha = 0.10$) confidence levels.

4F Statistical Methods for Normal Distributions

The most common distribution for our results is a normal distribution. Because the area between any two limits of a normal distribution is well defined, constructing and evaluating significance tests is straightforward.

4F.1 Comparing \bar{X} to μ

One approach for validating a new analytical method is to analyze a sample containing a known amount of analyte, μ . To judge the method's accuracy we analyze several portions of the sample, determine the average amount of analyte in the sample, \bar{X} , and use a significance test to compare it to μ . Our null hypothesis, $H_0 : \bar{X} = \mu$, is that any difference between \bar{X} and μ is the result of indeterminate errors affecting the determination of \bar{X} . The

alternative hypothesis, $H_A: \bar{X} \neq \mu$, is that the difference between \bar{X} and μ is too large to be explained by indeterminate error.

The test statistic is t_{exp} , which we substitute into the confidence interval for μ (equation 4.12).

$$\mu = \bar{X} \pm \frac{t_{\text{exp}} s}{\sqrt{n}} \quad 4.14$$

Rearranging this equation and solving for t_{exp}

$$t_{\text{exp}} = \frac{|\mu - \bar{X}| \sqrt{n}}{s} \quad 4.15$$

gives the value of t_{exp} when μ is at either the right edge or the left edge of the sample's confidence interval (Figure 4.14a).

To determine if we should retain or reject the null hypothesis, we compare the value of t_{exp} to a critical value, $t(\alpha, \nu)$, where α is the confidence level and ν is the degrees of freedom for the sample. The critical value $t(\alpha, \nu)$ defines the largest confidence interval resulting from indeterminate errors. If $t_{\text{exp}} > t(\alpha, \nu)$, then our sample's confidence interval is too large to be explained by indeterminate errors (Figure 4.14b). In this case, we reject the null hypothesis and accept the alternative hypothesis. If $t_{\text{exp}} \leq t(\alpha, \nu)$, then the confidence interval for our sample can be explained by indeterminate error, and we retain the null hypothesis (Figure 4.14c).

Example 4.16 provides a typical application of this significance test, which is known as a **t-TEST** of \bar{X} to μ .

Values for $t(\alpha, \nu)$ are in [Appendix 4](#).

Another name for the t -test is Student's t -test. Student was the pen name for William Gossett (1876-1927) who developed the t -test while working as a statistician for the Guinness Brewery in Dublin, Ireland. He published under the name Student because the brewery did not want its competitors to know they were using statistics to help improve the quality of their products.

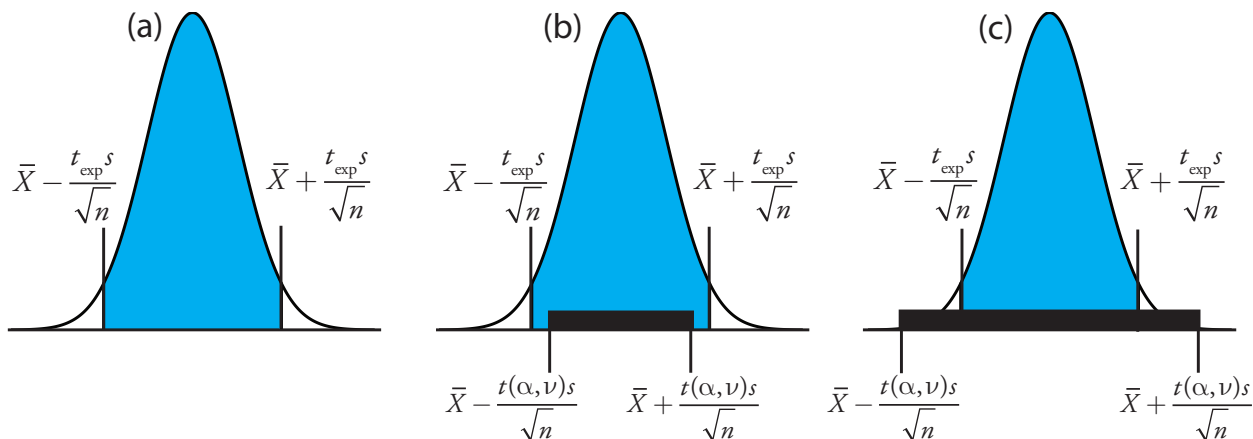


Figure 4.14 Relationship between confidence intervals and the result of a significance test. (a) The shaded area under the normal distribution curve shows the confidence interval for the sample based on t_{exp} . Based on the sample, we expect μ to fall within the shaded area. The solid bars in (b) and (c) show the confidence intervals for μ that can be explained by indeterminate error given the choice of α and the available degrees of freedom, ν . For (b) we must reject the null hypothesis because there are portions of the sample's confidence interval that lie outside the confidence interval due to indeterminate error. In the case of (c) we retain the null hypothesis because the confidence interval due to indeterminate error completely encompasses the sample's confidence interval.

Example 4.16

Before determining the amount of Na_2CO_3 in a sample, you decide to check your procedure by analyzing a sample known to be 98.76% w/w Na_2CO_3 . Five replicate determinations of the %w/w Na_2CO_3 in the standard gave the following results.

98.71% 98.59% 98.62% 98.44% 98.58%

Using $\alpha = 0.05$, is there any evidence that the analysis is giving inaccurate results?

SOLUTION

The mean and standard deviation for the five trials are

$$\bar{X} = 98.59 \quad s = 0.0973$$

Because there is no reason to believe that the results for the standard must be larger (or smaller) than μ , a two-tailed t -test is appropriate. The null hypothesis and alternative hypothesis are

$$H_0 : \bar{X} = \mu \quad H_A : \bar{X} \neq \mu$$

The test statistic, t_{exp} , is

$$t_{\text{exp}} = \frac{|\mu - \bar{X}| \sqrt{n}}{s} = \frac{|98.76 - 98.59| \sqrt{5}}{0.0973} = 3.91$$

The critical value for $t(0.05, 4)$ from [Appendix 4](#) is 2.78. Since t_{exp} is greater than $t(0.05, 4)$ we reject the null hypothesis and accept the alternative hypothesis. At the 95% confidence level the difference between \bar{X} and μ is too large to be explained by indeterminate sources of error, suggesting that a determinate source of error is affecting the analysis.

There is another way to interpret the result of this t -test. Knowing that t_{exp} is 3.91 and that there are 4 degrees of freedom, we use [Appendix 4](#) to estimate the α value corresponding to a $t(\alpha, 4)$ of 3.91. From [Appendix 4](#), $t(0.02, 4)$ is 3.75 and $t(0.01, 4)$ is 4.60. Although we can reject the null hypothesis at the 98% confidence level, we cannot reject it at the 99% confidence level.

For a discussion of the advantages of this approach, see J. A. C. Sterne and G. D. Smith "Sifting the evidence—what's wrong with significance tests?" [BMJ](#) **2001**, *322*, 226–231.

Practice Exercise 4.8

To evaluate the accuracy of a new analytical method, an analyst determines the purity of a standard for which μ is 100.0%, obtaining the following results.

99.28% 103.93% 99.43% 99.84% 97.60% 96.70% 98.02%

Is there any evidence at $\alpha = 0.05$ that there is a determinate error affecting the results?

Click [here](#) to review your answer to this exercise.

Earlier we made the point that you need to exercise caution when interpreting the results of a statistical analysis. We will keep returning to this point because it is an important one. Having determined that a result is

inaccurate, as we did in [Example 4.16](#), the next step is to identify and to correct the error. Before expending time and money on this, however, you should first critically examine your data. For example, the smaller the value of s , the larger the value of t_{exp} . If the standard deviation for your analysis is unrealistically small, the probability of a type 2 error increases. Including a few additional replicate analyses of the standard and reevaluating the t -test may strengthen your evidence for a determinate error, or it may show that there is no evidence for a determinate error.

4F.2 Comparing s^2 to σ^2

If we regularly analyze a particular sample, we may be able to establish the expected variance, σ^2 , for the analysis. This often is the case, for example, in clinical labs that routinely analyze hundreds of blood samples each day. A few replicate analyses of a single sample gives a sample variance, s^2 , whose value may or may not differ significantly from σ^2 .

We can use an **F-TEST** to evaluate whether a difference between s^2 and σ^2 is significant. The null hypothesis is $H_0 : s^2 = \sigma^2$ and the alternative hypothesis is $H_A : s^2 \neq \sigma^2$. The test statistic for evaluating the null hypothesis is F_{exp} , which is given as either

$$F_{\text{exp}} = \frac{s^2}{\sigma^2} \quad \text{or} \quad F_{\text{exp}} = \frac{\sigma^2}{s^2} \quad 4.16$$

$$(s^2 > \sigma^2) \quad (s^2 < \sigma^2)$$

depending on whether s^2 is larger or smaller than σ^2 . This way of defining F_{exp} ensures that its value is always greater than or equal to one.

If the null hypothesis is true, then F_{exp} should equal one. Because of indeterminate errors, however, F_{exp} usually is greater than one. A critical value, $F(\alpha, \nu_{\text{num}}, \nu_{\text{den}})$, gives the largest value of F_{exp} that we can attribute to indeterminate error. It is chosen for a specified significance level, α , and for the degrees of freedom for the variance in the numerator, ν_{num} , and the variance in the denominator, ν_{den} . The degrees of freedom for s^2 is $n-1$, where n is the number of replicates used to determine the sample's variance, and the degrees of freedom for σ^2 is ∞ . Critical values of F for $\alpha = 0.05$ are listed in [Appendix 5](#) for both one-tailed and two-tailed F -tests.

Example 4.17

A manufacturer's process for analyzing aspirin tablets has a known variance of 25. A sample of 10 aspirin tablets is selected and analyzed for the amount of aspirin, yielding the following results in mg aspirin/tablet.

254 249 252 252 249 249 250 247 251 252

Determine whether there is any evidence of a significant difference between that the sample's variance the expected variance at $\alpha=0.05$.

SOLUTION

The variance for the sample of 10 tablets is 4.3. The null hypothesis and alternative hypotheses are

$$H_0 : s^2 = \sigma^2 \quad H_A : s^2 \neq \sigma^2$$

The value for F_{exp} is

$$F_{\text{exp}} = \frac{\sigma^2}{s^2} = \frac{25}{4.3} = 5.8$$

The critical value for $F(0.05, \infty, 9)$ from [Appendix 5](#) is 3.333. Since F_{exp} is greater than $F(0.05, \infty, 9)$, we reject the null hypothesis and accept the alternative hypothesis that there is a significant difference between the sample's variance and the expected variance. One explanation for the difference might be that the aspirin tablets were not selected randomly.

4F.3 Comparing Two Sample Variances

We can extend the F -test to compare the variances for two samples, A and B, by rewriting [equation 4.16](#) as

$$F_{\text{exp}} = \frac{s_A^2}{s_B^2}$$

defining A and B so that the value of F_{exp} is greater than or equal to 1.

Example 4.18

[Table 4.11](#) shows results for two experiments to determine the mass of a circulating U.S. penny. Determine whether there is a difference in the precisions of these analyses at $\alpha = 0.05$.

SOLUTION

The variances for the two experiments are 0.00259 for the first experiment (A) and 0.00138 for the second experiment (B). The null and alternative hypotheses are

$$H_0 : s_A^2 = s_B^2 \quad H_A : s_A^2 \neq s_B^2$$

and the value of F_{exp} is

$$F_{\text{exp}} = \frac{s_A^2}{s_B^2} = \frac{0.00259}{0.00138} = 1.88$$

From [Appendix 5](#), the critical value for $F(0.05, 6, 4)$ is 9.197. Because $F_{\text{exp}} < F(0.05, 6, 4)$, we retain the null hypothesis. There is no evidence at $\alpha = 0.05$ to suggest that the difference in precisions is significant.

Practice Exercise 4.9

To compare two production lots of aspirin tablets, you collect samples from each and analyze them, obtaining the following results (in mg aspirin/tablet).

Lot 1: 256 248 245 245 244 248 261

Lot 2: 241 258 241 244 256 254

Is there any evidence at $\alpha = 0.05$ that there is a significant difference in the variance between the results for these two samples?

Click [here](#) to review your answer to this exercise.

4F.4 Comparing Two Sample Means

Three factors influence the result of an analysis: the method, the sample, and the analyst. We can study the influence of these factors by conducting experiments in which we change one of the factors while holding the others constant. For example, to compare two analytical methods we can have the same analyst apply each method to the same sample, and then examine the resulting means. In a similar fashion, we can design experiments to compare analysts or to compare samples.

Before we consider the significance tests for comparing the means of two samples, we need to make a distinction between unpaired data and paired data. This is a critical distinction and learning to distinguish between the two types of data is important. Here are two simple examples that highlight the difference between **UNPAIRED DATA** and **PAIRED DATA**. In each example the goal is to compare two balances by weighing pennies.

- Example 1: Collect 10 pennies and weigh each penny on each balance. This is an example of paired data because we use the same 10 pennies to evaluate each balance.
- Example 2: Collect 10 pennies and divide them into two groups of five pennies each. Weigh the pennies in the first group on one balance and weigh the second group of pennies on the other balance. Note that no penny is weighed on both balances. This is an example of unpaired data because we evaluate each balance using a different sample of pennies.

In both examples the samples of pennies are from the same population. The difference is how we sample the population. We will learn why this distinction is important when we review the significance test for paired data; first, however, we present the significance test for unpaired data.

UNPAIRED DATA

Consider two analyses, A and B with means of \bar{X}_A and \bar{X}_B , and standard deviations of s_A and s_B . The confidence intervals for μ_A and for μ_B are

It also is possible to design experiments in which we vary more than one of these factors. We will return to this point in [Chapter 14](#).

One simple test for determining whether data are paired or unpaired is to look at the size of each sample. If the samples are of different size, then the data must be unpaired. The converse is not true. If two samples are of equal size, they may be paired or unpaired.

$$\mu_A = \bar{X}_A \pm \frac{ts_A}{\sqrt{n_A}} \quad 4.17$$

$$\mu_B = \bar{X}_B \pm \frac{ts_B}{\sqrt{n_B}} \quad 4.18$$

where n_A and n_B are the sample sizes for A and B. Our null hypothesis, $H_0 : \mu_A = \mu_B$, is that any difference between μ_A and μ_B is the result of indeterminate errors affecting the analyses. The alternative hypothesis, $H_A : \mu_A \neq \mu_B$, is that the difference between μ_A and μ_B means is too large to be explained by indeterminate error.

To derive an equation for t_{exp} , we assume that μ_A equals μ_B , and combine equations 4.17 and 4.18.

$$\bar{X}_A \pm \frac{t_{\text{exp}} s_A}{\sqrt{n_A}} = \bar{X}_B \pm \frac{t_{\text{exp}} s_B}{\sqrt{n_B}}$$

Solving for $|\bar{X}_A - \bar{X}_B|$ and using a propagation of uncertainty, gives

$$|\bar{X}_A - \bar{X}_B| = t_{\text{exp}} \times \sqrt{\frac{s_A^2}{n_A} + \frac{s_B^2}{n_B}} \quad 4.19$$

Finally, we solve for t_{exp}

$$t_{\text{exp}} = \frac{|\bar{X}_A - \bar{X}_B|}{\sqrt{\frac{s_A^2}{n_A} + \frac{s_B^2}{n_B}}} \quad 4.20$$

and compare it to a critical value, $t(\alpha, \nu)$, where α is the probability of a type 1 error, and ν is the degrees of freedom.

Thus far our development of this t -test is similar to that for comparing \bar{X} to μ , and yet we do not have enough information to evaluate the t -test. Do you see the problem? With two independent sets of data it is unclear how many degrees of freedom we have.

Suppose that the variances s_A^2 and s_B^2 provide estimates of the same σ^2 . In this case we can replace s_A^2 and s_B^2 with a pooled variance, $(s_{\text{pool}})^2$, that provides a better estimate for the variance. Thus, equation 4.20 becomes

$$t_{\text{exp}} = \frac{|\bar{X}_A - \bar{X}_B|}{s_{\text{pool}} \sqrt{\frac{1}{n_A} + \frac{1}{n_B}}} = \frac{|\bar{X}_A - \bar{X}_B|}{s_{\text{pool}}} \times \sqrt{\frac{n_A n_B}{n_A + n_B}} \quad 4.21$$

where s_{pool} , the pooled standard deviation, is

[Problem 9](#) asks you to use a propagation of uncertainty to show that equation 4.19 is correct.

So how do you determine if it is okay to pool the variances? Use an F -test.

$$s_{\text{pool}} = \sqrt{\frac{(n_A - 1)s_A^2 + (n_B - 1)s_B^2}{n_A + n_B - 2}} \quad 4.22$$

The denominator of equation 4.22 shows us that the degrees of freedom for a pooled standard deviation is $n_A + n_B - 2$, which also is the degrees of freedom for the t -test.

If s_A^2 and s_B^2 are significantly different we must calculate t_{exp} using equation 4.20. In this case, we find the degrees of freedom using the following imposing equation.

$$v = \frac{\left[\frac{s_A^2}{n_A} + \frac{s_B^2}{n_B} \right]^2}{\frac{\left(\frac{s_A^2}{n_A} \right)^2}{n_A + 1} + \frac{\left(\frac{s_B^2}{n_B} \right)^2}{n_B + 1}} - 2 \quad 4.23$$

Since the degrees of freedom must be an integer, we round to the nearest integer the value of v obtained using equation 4.23.

Regardless of whether we calculate t_{exp} using [equation 4.20](#) or [equation 4.21](#), we reject the null hypothesis if t_{exp} is greater than $t(\alpha, v)$, and retained the null hypothesis if t_{exp} is less than or equal to $t(\alpha, v)$.

Example 4.19

[Tables 4.11](#) provides results for two experiments to determine the mass of a circulating U.S. penny. Determine whether there is a difference in the means of these analyses at $\alpha=0.05$.

SOLUTION

First we must determine whether we can pool the variances. This is done using an F -test. We did this analysis in [Example 4.18](#), finding no evidence of a significant difference. The pooled standard deviation is

$$s_{\text{pool}} = \sqrt{\frac{(7-1)(0.00259)^2 + (5-1)(0.00138)^2}{7+5-2}} = 0.0459$$

with 10 degrees of freedom. To compare the means the null hypothesis and alternative hypotheses are

$$H_0 : \mu_A = \mu_B \quad H_A : \mu_A \neq \mu_B$$

Because we are using the pooled standard deviation, we calculate t_{exp} using [equation 4.21](#).

$$t_{\text{exp}} = \frac{|3.117 - 3.081|}{0.0459} \times \sqrt{\frac{7 \times 5}{7 + 5}} = 1.34$$

The critical value for $t(0.05, 10)$, from [Appendix 4](#), is 2.23. Because t_{exp} is less than $t(0.05, 10)$ we retain the null hypothesis. For $\alpha = 0.05$ there is no evidence that the two sets of pennies are significantly different.

Example 4.20

One method for determining the %w/w Na_2CO_3 in soda ash is an acid–base titration. When two analysts analyze the same sample of soda ash they obtain the results shown here.

Analyst A	Analyst B
86.82	81.01
87.04	86.15
86.93	81.73
87.01	83.19
86.20	80.27
87.00	83.94

Determine whether the difference in the mean values is significant at $\alpha = 0.05$.

SOLUTION

We begin by summarizing the mean and standard deviation for each analyst.

$$\begin{aligned} \bar{X}_A &= 86.83\% & \bar{X}_B &= 82.71\% \\ s_A &= 0.32 & s_B &= 2.16 \end{aligned}$$

To determine whether we can use a pooled standard deviation, we first complete an F -test of the following null and alternative hypotheses.

$$H_0 : s_A^2 = s_B^2 \quad H_A : s_A^2 \neq s_B^2$$

Calculating F_{exp} , we obtain a value of

$$F_{\text{exp}} = \frac{(2.16)^2}{(0.32)^2} = 45.6$$

Because F_{exp} is larger than the critical value of 7.15 for $F(0.05, 5, 5)$ from [Appendix 5](#), we reject the null hypothesis and accept the alternative hypothesis that there is a significant difference between the variances. As a result, we cannot calculate a pooled standard deviation.

To compare the means for the two analysts we use the following null and alternative hypotheses.

$$H_0 : \mu_A = \mu_B \quad H_A : \mu_A \neq \mu_B$$

Because we cannot pool the standard deviations, we calculate t_{exp} using [equation 4.20](#) instead of [equation 4.21](#)

$$t_{\text{exp}} = \frac{|86.83 - 82.71|}{\sqrt{\frac{(0.32)^2}{6} + \frac{(2.16)^2}{6}}} = 4.62$$

and calculate the degrees of freedom using [equation 4.23](#).

$$\nu = \frac{\left[\frac{(0.32)^2}{6} + \frac{(2.16)^2}{6} \right]^2}{\frac{\left(\frac{(0.32)^2}{6} \right)^2}{6+1} + \frac{\left(\frac{(2.16)^2}{6} \right)^2}{6+1}} - 2 = 5.3 \approx 5$$

From [Appendix 4](#), the critical value for $t(0.05,5)$ is 2.57. Because t_{exp} is greater than $t(0.05,5)$ we reject the null hypothesis and accept the alternative hypothesis that the means for the two analysts are significantly different at $\alpha = 0.05$.

Practice Exercise 4.10

To compare two production lots of aspirin tablets, you collect samples from each and analyze them, obtaining the following results (in mg aspirin/tablet).

Lot 1: 256 248 245 245 244 248 261

Lot 2: 241 258 241 244 256 254

Is there any evidence at $\alpha = 0.05$ that there is a significant difference in the variance between the results for these two samples? This is the same data from [Practice Exercise 4.9](#).

Click [here](#) to review your answer to this exercise.

PAIRED DATA

Suppose we are evaluating a new method for monitoring blood glucose concentrations in patients. An important part of evaluating a new method is to compare it to an established method. What is the best way to gather data for this study? Because the variation in the blood glucose levels amongst patients is large we may be unable to detect a small, but significant

Typical blood glucose levels for most non-diabetic individuals ranges between 80–120 mg/dL (4.4–6.7 mM), rising to as high as 140 mg/dL (7.8 mM) shortly after eating. Higher levels are common for individuals who are pre-diabetic or diabetic.

difference between the methods if we use different patients to gather data for each method. Using paired data, in which we analyze each patient's blood using both methods, prevents a large variance within a population from adversely affecting a t -test of means.

When using paired data we first calculate the difference, d_i , between the paired values for each sample. Using these difference values, we then calculate the average difference, \bar{d} , and the standard deviation of the differences, s_d . The null hypothesis, $H_0 : \bar{d} = 0$, is that there is no difference between the two samples, and the alternative hypothesis, $H_A : \bar{d} \neq 0$, is that the difference between the two samples is significant.

The test statistic, t_{exp} , is derived from a confidence interval around \bar{d}

$$t_{\text{exp}} = \frac{|\bar{d}| \sqrt{n}}{s_d}$$

where n is the number of paired samples. As is true for other forms of the t -test, we compare t_{exp} to $t(\alpha, \nu)$, where the degrees of freedom, ν , is $n - 1$. If t_{exp} is greater than $t(\alpha, \nu)$, then we reject the null hypothesis and accept the alternative hypothesis. We retain the null hypothesis if t_{exp} is less than or equal to $t(\alpha, \nu)$. This is known as a **PAIRED t -TEST**.

Example 4.21

Marecek et. al. developed a new electrochemical method for rapidly determining the concentration of the antibiotic monensin in fermentation vats.⁷ The standard method for the analysis, a test for microbiological activity, is both difficult and time consuming. Samples were collected from the fermentation vats at various times during production and analyzed for the concentration of monensin using both methods. The results, in parts per thousand (ppt), are reported in the following table.

Sample	Microbiological	Electrochemical
1	129.5	132.3
2	89.6	91.0
3	76.6	73.6
4	52.2	58.2
5	110.8	104.2
6	50.4	49.9
7	72.4	82.1
8	141.4	154.1
9	75.0	73.4
10	34.1	38.1
11	60.3	60.1

⁷ Marecek, V.; Janchenova, H.; Brezina, M.; Betti, M. *Anal. Chim. Acta* **1991**, *244*, 15–19.

Is there a significant difference between the methods at $\alpha = 0.05$?

SOLUTION

Acquiring samples over an extended period of time introduces a substantial time-dependent change in the concentration of monensin. Because the variation in concentration between samples is so large, we use paired t -test with the following null and alternative hypotheses.

$$H_0 : \bar{d} = 0 \quad H_A : \bar{d} \neq 0$$

Defining the difference between the methods as

$$d_i = (X_{\text{elect}})_i - (X_{\text{micro}})_i$$

we can calculate the following differences for the samples.

Sample	1	2	3	4	5	6	7	8	9	10	11
d_i	2.8	1.4	-3.0	6.0	-6.6	-0.5	9.7	12.7	-1.6	4.0	-0.2

The mean and standard deviation for the differences are, respectively, 2.25 and 5.63. The value of t_{exp} is

$$t_{\text{exp}} = \frac{|2.25|\sqrt{11}}{5.63} = 1.33$$

which is smaller than the critical value of 2.23 for $t(0.05,10)$ from [Appendix 4](#). We retain the null hypothesis and find no evidence for a significant difference in the methods at $\alpha = 0.05$.

Practice Exercise 4.11

Suppose you are studying the distribution of zinc in a lake and want to know if there is a significant difference between the concentration of Zn^{2+} at the sediment-water interface and its concentration at the air-water interface. You collect samples from six locations—near the lake's center, near its drainage outlet, etc.—obtaining the results (in mg/L) shown in the table. Using the data in the table shown to the right, determine if there is a significant difference between the concentration of Zn^{2+} at the two interfaces at $\alpha = 0.05$.

Location	Air-Water Interface	Sediment-Water Interface
1	0.430	0.415
2	0.266	0.238
3	0.457	0.390
4	0.531	0.410
5	0.707	0.605
6	0.716	0.609

Complete this analysis treating the data as (a) unpaired, and (b) paired. Briefly comment on your results.

Click [here](#) to review your answers to this exercise.

One important requirement for a paired t -test is that determinate and indeterminate errors affecting the analysis must be independent of the ana-

lyte's concentration. If this is not the case, then a sample with an unusually high concentration of analyte will have an unusually large d_i . Including this sample in the calculation of \bar{d} and s_d leads to a biased estimate of the expected mean and standard deviation. This is rarely a problem for samples spanning a limited range of analyte concentrations, such as those in [Example 4.21](#) or [Practice Exercise 4.11](#). When paired data span a wide range of concentrations, however, the magnitude of the determinate and indeterminate sources of error may not be independent of the analyte's concentration. In such cases a paired t -test may give misleading results since the paired data with the largest absolute determinate and indeterminate errors will dominate \bar{d} . In this situation a regression analysis, which is the subject of the next chapter, is more appropriate method for comparing the data.

4F.5 Outliers

Earlier in the chapter we examined several data sets consisting of the mass of a circulating United States penny. Table 4.16 provides one more data set. Do you notice anything unusual in this data? Of the 112 pennies included in [Table 4.11](#) and [Table 4.13](#), no penny weighed less than 3 g. In Table 4.16, however, the mass of one penny is less than 3 g. We might ask whether this penny's mass is so different from the other pennies that it is in error.

Data that are not consistent with the remaining data are called outliers. An **OUTLIER** might exist for many reasons: the outlier might be from a different population (Is this a Canadian penny?); the outlier might be a contaminated or otherwise altered sample (Is the penny damaged?); or the outlier may result from an error in the analysis (Did we forget to tare the balance?). Regardless of its source, the presence of an outlier compromises any meaningful analysis of our data. There are many significance tests for identifying potential outliers, three of which we present here.

DIXON'S Q-TEST

One of the most common significance tests for outliers is **DIXON'S Q-TEST**. The null hypothesis is that there are no outliers, and the alternative hypothesis is that there is an outlier. The Q -test compares the gap between the suspected outlier and its nearest numerical neighbor to the range of the entire data set ([Figure 4.15](#)). The test statistic, Q_{exp} , is

$$Q_{\text{exp}} = \frac{\text{gap}}{\text{range}} = \frac{|\text{outlier's value} - \text{nearest value}|}{\text{largest value} - \text{smallest value}}$$

Table 4.16 Mass (g) for Additional Sample of Circulating U. S. Pennies

3.067	2.514	3.094
3.049	3.048	3.109
3.039	3.079	3.102

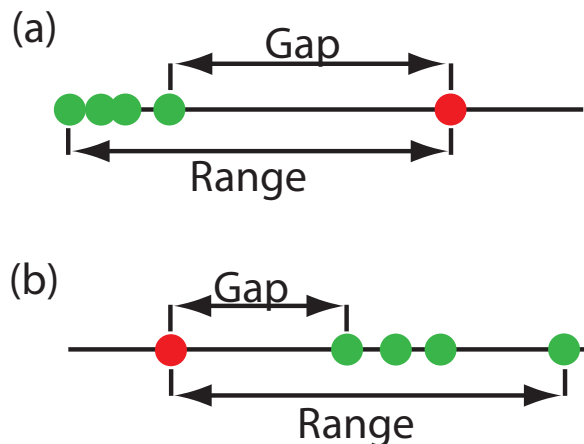


Figure 4.15 Dotplots showing the distribution of two data sets containing a possible outlier. In (a) the possible outlier's value is larger than the remaining data, and in (b) the possible outlier's value is smaller than the remaining data.

This equation is appropriate for evaluating a single outlier. Other forms of Dixon's Q -test allow its extension to detecting multiple outliers.⁸

The value of Q_{exp} is compared to a critical value, $Q(\alpha, n)$, where α is the probability of rejecting a valid data point (a type 1 error) and n is the total number of data points. To protect against rejecting a valid data point, we usually apply the more conservative two-tailed Q -test, even though the possible outlier is the smallest or the largest value in the data set. If Q_{exp} is greater than $Q(\alpha, n)$, then we reject the null hypothesis and may exclude the outlier. We retain the possible outlier when Q_{exp} is less than or equal to $Q(\alpha, n)$. Table 4.17 provides values for $Q(0.05, n)$ for a sample containing 3–10 values. A more extensive table is in [Appendix 6](#). Values for $Q(\alpha, n)$ assume an underlying normal distribution.

Table 4.17 Dixon's Q -Test

n	$Q(0.05, n)$
3	0.970
4	0.829
5	0.710
6	0.625
7	0.568
8	0.526
9	0.493
10	0.466

GRUBB'S TEST

Although Dixon's Q -test is a common method for evaluating outliers, it is no longer favored by the International Standards Organization (ISO), which now recommends **GRUBB'S TEST**.⁹ There are several versions of Grubb's test depending on the number of potential outliers. Here we will consider the case where there is a single suspected outlier.

The test statistic for Grubb's test, G_{exp} , is the distance between the sample's mean, \bar{X} , and the potential outlier, X_{out} , in terms of the sample's standard deviation, s .

$$G_{\text{exp}} = \frac{|X_{\text{out}} - \bar{X}|}{s}$$

We compare the value of G_{exp} to a critical value $G(\alpha, n)$, where α is the probability of rejecting a valid data point and n is the number of data points in the sample. If G_{exp} is greater than $G(\alpha, n)$, we may reject the data point as an

⁸ Rorabacher, D. B. *Anal. Chem.* **1991**, *63*, 139–146.

⁹ International Standards ISO Guide 5752-2 "Accuracy (trueness and precision) of measurement methods and results—Part 2: basic methods for the determination of repeatability and reproducibility of a standard measurement method," 1994.

Table 4.18 Grubb's Test

n	$G(0.05, n)$
3	1.115
4	1.481
5	1.715
6	1.887
7	2.020
8	2.126
9	2.215
10	2.290

outlier, otherwise we retain the data point as part of the sample. Table 4.18 provides values for $G(0.05, n)$ for a sample containing 3–10 values. A more extensive table is in [Appendix 7](#). Values for $G(\alpha, n)$ assume an underlying normal distribution.

CHAUVENET'S CRITERION

Our final method for identifying outliers is **CHAUVENET'S CRITERION**. Unlike Dixon's Q-Test and Grubb's test, you can apply this method to any distribution as long as you know how to calculate the probability for a particular outcome. Chauvenet's criterion states that we can reject a data point if the probability of obtaining the data point's value is less than $(2n)^{-1}$, where n is the size of the sample. For example, if $n = 10$, a result with a probability of less than $(2 \times 10)^{-1}$, or 0.05, is considered an outlier.

To calculate a potential outlier's probability we first calculate its standardized deviation, z

$$z = \frac{|X_{\text{out}} - \bar{X}|}{s}$$

where X_{out} is the potential outlier, \bar{X} is the sample's mean and s is the sample's standard deviation. Note that this equation is identical to the equation for G_{exp} in the Grubb's test. For a normal distribution, you can find the probability of obtaining a value of z using the probability table in [Appendix 3](#).

Example 4.22

[Table 4.16](#) contains the masses for nine circulating United States pennies. One of the values, 2.514 g, appears to be an outlier. Determine if this penny is an outlier using the Q-test, Grubb's test, and Chauvenet's criterion. For the Q-test and Grubb's test, let $\alpha = 0.05$.

SOLUTION

For the Q-test the value for Q_{exp} is

$$Q_{\text{exp}} = \frac{|2.514 - 3.039|}{3.109 - 2.514} = 0.882$$

From [Table 4.17](#), the critical value for $Q(0.05, 9)$ is 0.493. Because Q_{exp} is greater than $Q(0.05, 9)$, we can assume that penny weighing 2.514 g is an outlier.

For Grubb's test we first need the mean and the standard deviation, which are 3.011 g and 0.188 g, respectively. The value for G_{exp} is

$$G_{\text{exp}} = \frac{|2.514 - 3.011|}{0.188} = 2.64$$

Using [Table 4.18](#), we find that the critical value for $G(0.05,9)$ is 2.215. Because G_{exp} is greater than $G(0.05,9)$, we can assume that the penny weighing 2.514 g is an outlier.

For Chauvenet's criterion, the critical probability is $(2 \times 9)^{-1}$, or 0.0556. The value of z is the same as G_{exp} , or 2.64. Using [Appendix 3](#), the probability for $z = 2.64$ is 0.00415. Because the probability of obtaining a mass of 0.2514 g is less than the critical probability, we can assume that the penny weighing 2.514 g is an outlier.

You should exercise caution when using a significance test for outliers because there is a chance you will reject a valid result. In addition, you should avoid rejecting an outlier if it leads to a precision that is unreasonably better than that expected based on a propagation of uncertainty. Given these two concerns it is not surprising that some statisticians caution against the removal of outliers.¹⁰

On the other hand, testing for outliers can provide useful information if you try to understand the source of the suspected outlier. For example, the outlier in [Table 4.16](#) represents a significant change in the mass of a penny (an approximately 17% decrease in mass), which is the result of a change in the composition of the U.S. penny. In 1982 the composition of a U.S. penny was changed from a brass alloy consisting of 95% w/w Cu and 5% w/w Zn, to a zinc core covered with copper.¹¹ The pennies in [Table 4.16](#), therefore, were drawn from different populations.

4G Detection Limits

The International Union of Pure and Applied Chemistry (IUPAC) defines a method's **DETECTION LIMIT** as the smallest concentration or absolute amount of analyte that has a signal significantly larger than the signal from a suitable blank.¹² Although our interest is in the amount of analyte, in this section we will define the detection limit in terms of the analyte's signal. Knowing the signal you can calculate the analyte's concentration, C_A , or the moles of analyte, n_A , using the equations

$$S_A = k_A C_A \quad \text{or} \quad S_A = k_A n_A$$

where k is the method's sensitivity.

Let's translate the IUPAC definition of the detection limit into a mathematical form by letting S_{mb} represent the average signal for a method blank, and letting σ_{mb} represent the method blank's standard deviation. The null hypothesis is that the analyte is not present in the sample, and the alterna-

You also can adopt a more stringent requirement for rejecting data. When using the Grubb's test, for example, the ISO 5752 guidelines suggest retaining a value if the probability for rejecting it is greater than $\alpha = 0.05$, and flagging a value as a "straggler" if the probability for rejecting it is between $\alpha = 0.05$ and 0.01. A "straggler" is retained unless there is compelling reason for its rejection. The guidelines recommend using $\alpha = 0.01$ as the minimum criterion for rejecting a data point.

See [Chapter 3](#) for a review of these equations.

¹⁰ Deming, W. E. *Statistical Analysis of Data*; Wiley: New York, 1943 (republished by Dover: New York, 1961); p. 171.

¹¹ Richardson, T. H. J. *Chem. Educ.* **1991**, *68*, 310–311.

¹² IUPAC Compendium of Chemical Technology, Electronic Version, <http://goldbook.iupac.org/D01629.html>

If σ_{mb} is not known, we can replace it with s_{mb} ; equation 4.24 then becomes

$$(S_A)_{DL} = S_{mb} + \frac{ts_{mb}}{\sqrt{n}}$$

You can make similar adjustments to other equations in this section.

See, for example, Kirchner, C. J. "Estimation of Detection Limits for Environmental Analytical Procedures," in Currie, L. A. (ed) *Detection in Analytical Chemistry: Importance, Theory, and Practice*; American Chemical Society: Washington, D. C., 1988.

tive hypothesis is that the analyte is present in the sample. To detect the analyte, its signal must exceed S_{mb} by a suitable amount; thus,

$$(S_A)_{DL} = S_{mb} + z\sigma_{mb} \quad 4.24$$

where $(S_A)_{DL}$ is the analyte's detection limit.

The value we choose for z depends on our tolerance for reporting the analyte's concentration even though it is absent from the sample (a type 1 error). Typically, z is set to three, which, from [Appendix 3](#), corresponds to a probability, α , of 0.00135. As shown in Figure 4.16a, there is only a 0.135% probability of detecting the analyte in a sample that actually is analyte-free.

A detection limit also is subject to a type 2 error in which we fail to find evidence for the analyte even though it is present in the sample. Consider, for example, the situation shown in Figure 4.16b where the signal for a sample containing the analyte is exactly equal to $(S_A)_{DL}$. In this case the probability of a type 2 error is 50% because half of the signals arising from such samples are below the detection limit. We will correctly detect the analyte at the IUPAC detection limit only half the time. The IUPAC definition for the detection limit indicates the smallest signal for which we can say, at a significance level of α , that an analyte is present in the sample. Failing to detect the analyte does not imply that it is not present in the sample.

The detection limit is often represented, particularly when discussing public policy issues, as a distinct line separating detectable concentrations

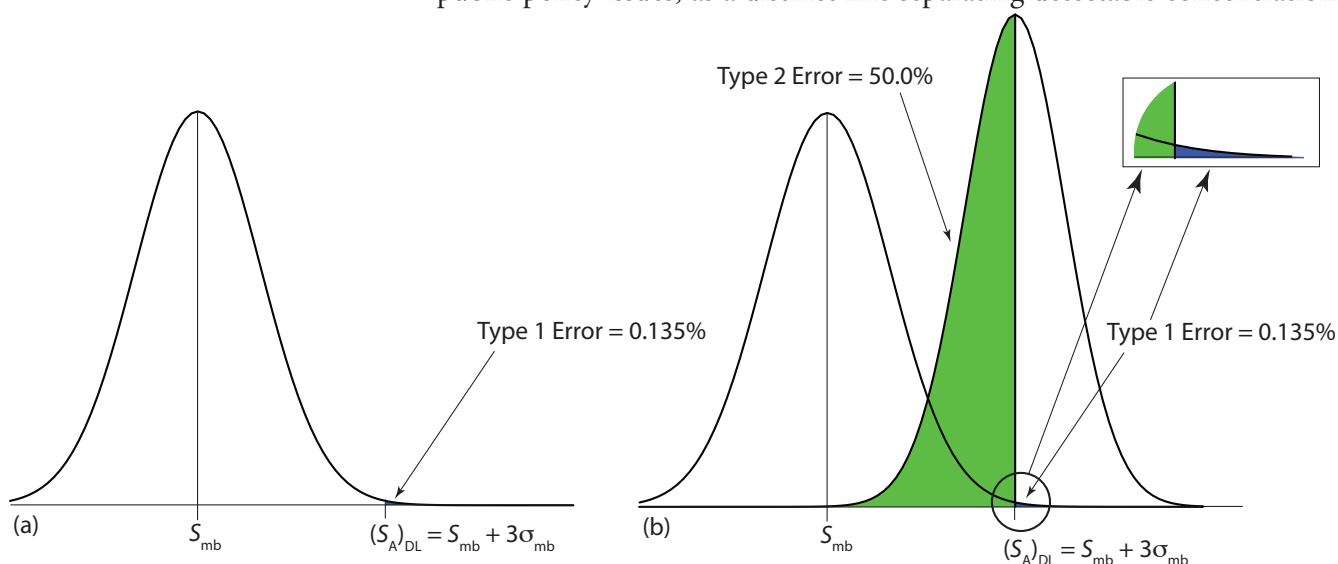


Figure 4.16 Normal distribution curves showing the probability of type 1 and type 2 errors for the IUPAC detection limit. (a) The normal distribution curve for the method blank, with $S_{mb} = 0$ and $\sigma_{mb} = 1$. The minimum detectable signal for the analyte, $(S_A)_{DL}$, has a type 1 error of 0.135%. (b) The normal distribution curve for the analyte at its detection limit, $(S_A)_{DL} = 3$, is superimposed on the normal distribution curve for the method blank. The standard deviation for the analyte's signal, σ_A , is 0.8. The area in green represents the probability of a type 2 error, which is 50%. The inset shows, in blue, the probability of a type 1 error, which is 0.135%.

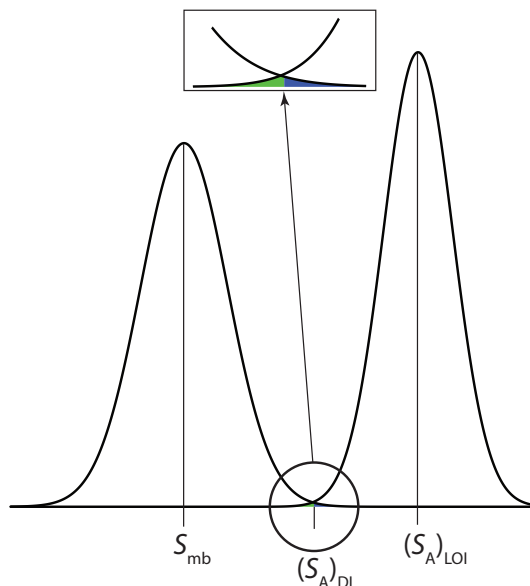


Figure 4.17 Normal distribution curves for a method blank and for a sample at the limit of identification: $S_{mb} = 0$; $\sigma_{mb} = 1$; $\sigma_A = 0.8$; and $(S_A)_{LOI} = 0 + 3 \times 1 + 3 \times 0.8 = 5.4$. The inset shows that the probability of a **type 1 error** (0.135%) is the same as the probability of a **type 2 error** (0.135%).

of analytes that concentrations that cannot be detected. This use of a detection limit is incorrect.¹³ As suggested by [Figure 4.16](#), for concentrations of analyte near the detection limit there is a high probability of failing to detect the analyte.

An alternative expression for the detection limit, the **LIMIT OF IDENTIFICATION**, minimizes both type 1 and type 2 errors.¹⁴ The analyte's signal at the limit of identification, $(S_A)_{LOI}$, includes an additional term, $z\sigma_A$, to account for the distribution of the analyte's signal.

$$(S_A)_{LOI} = (S_A)_{DL} + z\sigma_A = S_{mb} + z\sigma_{mb} + z\sigma_A$$

As shown in [Figure 4.17](#), the limit of identification provides an equal probability for type 1 and type 2 errors at the detection limit. When the analyte's concentration is at its limit of identification, there is only a 0.135% probability that its signal will be indistinguishable from that of the method blank.

The ability to detect the analyte with confidence is not the same as the ability to report with confidence its concentration, or to distinguish between its concentration in two samples. For this reason the American Chemical Society's Committee on Environmental Analytical Chemistry recommends the **LIMIT OF QUANTITATION**, $(S_A)_{LOQ}$.¹⁵

$$(S_A)_{LOQ} = S_{mb} + 10\sigma_{mb}$$

¹³ Rogers, L. B. J. *Chem. Educ.* **1986**, *63*, 3–6.

¹⁴ Long, G. L.; Winefordner, J. D. *Anal. Chem.* **1983**, *55*, 712A–724A.

¹⁵ "Guidelines for Data Acquisition and Data Quality Evaluation in Environmental Chemistry," *Anal. Chem.* **1980**, *52*, 2242–2249.

4H Using Excel and R to Analyze Data

Although the calculations in this chapter are relatively straightforward, it can be tedious to work problems using nothing more than a calculator. Both Excel and R include functions for descriptive statistics, for finding probabilities for different distributions, and for carrying out significance tests. In addition, R provides useful functions for visualizing your data.

4H.1 Excel

Excel provides two methods for working with data: built-in functions for individual statistical parameters and a package of data analysis tools in the Analysis ToolPak. The ToolPak is not a standard part of Excel's installation. To see if you have access to the Analysis ToolPak on your computer, select **Tools** from the menu bar and look for the **Data Analysis...** option. If you do not see **Data Analysis...**, select **Add-ins...** from the **Tools** menu. Check the box for the **Analysis ToolPak** and click on **OK** to install them.

DESCRIPTIVE STATISTICS

Let's use Excel to provide a statistical summary of the data in [Table 4.1](#). Enter the data into a spreadsheet, as shown in Figure 4.18. Select **Data Analysis...** from the **Tools** menu, which opens a window entitled "*Data Analysis*." Scroll through the window, select **Descriptive Statistics** from the available options, and click **OK**. Place the cursor in the box for the "*Input Range*" and then click and drag over the cells B1:B8. Check the box for "*Labels in the first row*." Select the radio button for "*Output range*," place the cursor in the box and click on an empty cell; this is where Excel will place the results. Check the boxes for "*Summary statistics*" and for the "*Confidence level for the mean*." Accept the default value of 95% for the confidence level. Clicking **OK** generates the information shown in Figure 4.19.

Once you install the Analysis ToolPak, it will continue to load each time you launch Excel.

	A	B
1		mass (g)
2		3.080
3		3.094
4		3.107
5		3.056
6		3.112
7		3.174
8		3.198

Figure 4.18 Portion of a spreadsheet containing data from [Table 4.1](#).

Figure 4.19 Output from Excel's Descriptive Statistics command in the Analysis ToolPak. Note that Excel does not adjust for significant figures. The mode is the most common result, which is not relevant here. Kurtosis is a measure of the "peakedness" of the data's distribution, and is zero for a normal distribution. Skewness is a measure of the symmetry of the data's distribution and is zero for a normal distribution. For a small sample size—such as the seven samples in this data set—skewness and kurtosis are not particularly useful. You may consult the textbooks listed in the Additional Resources for more information about kurtosis and skewness.

<i>mass (g)</i>	
Mean	3.11728571
Standard Error	0.01924369
Median	3.107
Mode	#N/A
Standard Deviation	0.05091403
Sample Variance	0.00259224
Kurtosis	-0.59879248
Skewness	0.72905145
Range	0.142
Minimum	3.056
Maximum	3.198
Sum	21.821
Count	7
Confidence Level(95.0%)	0.04708762

Table 4.19 Excel Functions for Descriptive Statistics

Parameter	Excel Function
mean	=average(number1,number2,...)
median	=median(number1,number2,...)
sample standard deviation	=stdev(number1,number2,...)
population standard deviation	=stdevp(number1,number2,...)
sample variance	=var(number1,number2,...)
population variance	=varp(number1,number2,...)
range	=max((number1,number2,...)–min(number1,number2,...))

The **Descriptive Statistics** command provides a table of values for a sample. If your interest is in a statistical summary for a population, or if you do not want a summary of all descriptive statistics, you will need to use Excel's built-in functions (Table 4.19). To use a function, click on an empty cell, enter the formula, and press Return or Enter. To find, for example, the population variance for the data in [Figure 4.18](#), place the cursor in an empty cell and enter the formula

$$=varp(b2:b8)$$

The contents of the cell are replaced with Excel's exact calculation of the population's variance (0.002 221 918).

PROBABILITY DISTRIBUTIONS

In [Example 4.11](#) we showed that 91.10% of a manufacturer's analgesic tablets contain between 243 and 262 mg of aspirin. We obtained this result by calculating the deviation, z , of each limit from the population's expected mean, μ , of 250 mg in terms of the population's expected standard deviation, σ , of 5 mg. After calculating values for z , we used the table in [Appendix 3](#) to find the area under the normal distribution curve between the two limits.

We can complete this calculation in Excel using the built-in **normdist** function. The function's general format is

$$=normdist(x, \mu, \sigma, TRUE)$$

where x is the limit of interest. The function returns the probability of obtaining a result of less than x from a normal distribution with a mean of μ and a standard deviation of σ (Figure 4.20). To solve [Example 4.11](#) using Excel enter the following formulas into separate cells

$$=normdist(243, 250, 5, TRUE)$$

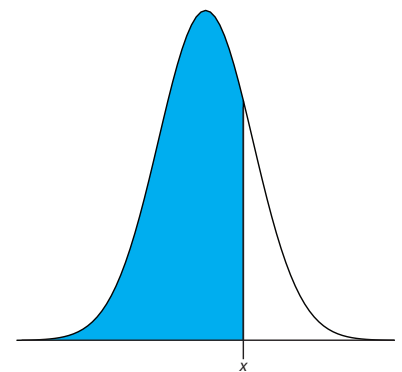
$$=normdist(262, 250, 5, TRUE)$$


Figure 4.20 Shown in blue is the area returned by the function

$$=normdist(x, \mu, \sigma, TRUE)$$

obtaining results of 0.080756659 and 0.991802464. Subtract the smaller value from the larger value and adjust to the correct number of significant figures to arrive at a probability of 0.9910, or 99.10%.

Excel also includes a function for binomial distributions. The function's format is

$$=\text{binomdist}(X, N, p, \text{T/F})$$

where X is the number of times a particular outcome occurs in N trials, and p is the probability of X occurring in one trial. Setting the function's last term to TRUE gives the total probability for any result up to X and setting it to FALSE to give the probability for X . Using [Example 4.10](#) to test this function, we find that the probability of finding no atoms of ^{13}C atoms in a molecule of cholesterol, $\text{C}_{27}\text{H}_{44}\text{O}$ using the formula

$$=\text{binomdist}(0, 27, 0.0111, \text{FALSE})$$

which returns a value of 0.740 as an answer, after adjusting the significant figures. Using the formula

$$=\text{binomdist}(2, 27, 0.0111, \text{TRUE})$$

we find that 99.7% of cholesterol molecules contain two or fewer atoms of ^{13}C .

SIGNIFICANCE TESTS

Excel's Analysis ToolPak includes tools to help you complete the following significance tests covered in this chapter:

- an F -test of variances
- an unpaired t -test of sample means assuming equal variances
- an unpaired t -test of sample means assuming unequal variances
- a paired t -test for of sample means

Let's use the ToolPak to complete a t -test on the data in [Table 4.11](#), which contains results for two experiments to determine the mass of a circulating U. S. penny. Enter the data from [Table 4.11](#) into a spreadsheet as shown in [Figure 4.21](#). Because the data in this case are unpaired, we will use Excel to complete an unpaired t -test. Before we can complete a t -test we must use an F -test to determine whether the variances for the two data sets are equal or unequal. Our null hypothesis is that the variances are equal, $s_{\text{Set 1}}^2 = s_{\text{Set 2}}^2$, and our alternative hypothesis is that the variances are not equal, $s_{\text{Set 1}}^2 \neq s_{\text{Set 2}}^2$.

To complete the F -test select **Data Analysis...** from the **Tools** menu, which opens a window entitled "*Data Analysis.*" Scroll through the window, select **F -Test Two Sample Variance** from the available options, and click **OK**. Place the cursor in the box for the "*Variable 1 range*" and then click and drag over the cells B1:B8. Next, place the cursor in the box for "*Variable 2 range*" and then click and drag over the cells B1:B6. Check the box

	A	B	C
1		Set 1	Set 2
2		3.080	3.052
3		3.094	3.141
4		3.107	3.083
5		3.056	3.083
6		3.112	3.048
7		3.174	
8		3.198	

Figure 4.21 Portion of a spreadsheet containing the data in [Table 4.11](#).

F-Test Two-Sample for Variances		
	<i>Data Set 1</i>	<i>Data Set 2</i>
Mean	3.11728571	3.0814
Variance	0.00259224	0.0013843
Observations	7	5
df	6	4
F	1.87259849	
P(F<=f) one-tail	0.28305251	
F Critical one-tail	9.19731108	

Figure 4.22 Output from Excel's F -test in the Analysis ToolPak. Note that results are for a one-tailed F -test. The value for "P(F<=f) one-tail" is the probability of incorrectly rejecting the null hypothesis of equal variances, and the value for "F Critical one-tail" is equivalent to a one-tailed $F(0.025, 6, 4)$. For a two-tailed F -test, the probability of incorrectly rejecting the null hypothesis is $2 \times P(F \leq f)$, or 0.566, and F Critical is for $F(0.05, 6, 4)$. *Note: Excel assumes that the variance for variable 1 is greater than the variance for variable 2; thus, you must assign variable 1 to the data set with the larger of the two variances in order to correctly interpret the F -test.*

for "Labels." In the box for "Alpha" enter your value for α . Excel's F -test is a one-tailed test, so if you wish to complete a two-tailed test, as we do in this example, divide your α value by 2. We want our F -test to use an α of 0.05, so we enter 0.025 in the box for "Alpha." Select the radio button for "Output range," place the cursor in the box and click on an empty cell; this is where Excel will place the results. Clicking **OK** generates the information shown in Figure 4.22. Because F_{exp} , which is 1.87, is less than $F(0.05, 6, 4)$, which is 9.20, we retain the null hypothesis and have no evidence of a difference between the variances at an α of 0.05.

Having found no evidence suggesting unequal variances, we now complete an unpaired t -test assuming equal variances. Our null hypothesis is that there is no difference between the means, $\bar{X}_{\text{Set 1}} = \bar{X}_{\text{Set 2}}$, and our alternative hypothesis is that there is a difference between the means, $\bar{X}_{\text{Set 1}} \neq \bar{X}_{\text{Set 2}}$. To complete the t -test select **Data Analysis...** from the **Tools** menu, which opens a window entitled "Data Analysis." Scroll through the window, select **t -Test Two Sample Assuming Equal Variances** from the available options, and click **OK**. Place the cursor in the box for the "Variable 1 range" and then click and drag over the cells B1:B8. Next, place the cursor in the box for "Variable 2 range" and then click and drag over the cells B1:B6. In the box for "Hypothesized mean difference," enter a value of 0. Check the box for "Labels." In the box for "Alpha" enter your value for α . Select the radio button for "Output range," place the cursor in the box and click on an empty cell; this is where Excel will place the results. Clicking **OK** generates the information shown in Figure 4.23. Because t_{exp} , which is 1.33, is less than $t(0.05, 10)$, which is 2.23, we retain the null hypothesis and have no evidence of a difference between the means at an α of 0.05.

The other significance tests in Excel work in the same format. The following practice exercise provides you with an opportunity to test yourself.

See [Example 4.18](#) for our earlier solution to this problem.

See [Example 4.19](#) for our earlier solution to this problem.

t-Test: Two-Sample Assuming Equal Variances		
	Data Set 1	Data Set 2
Mean	3.11728571	3.0814
Variance	0.00259224	0.0013843
Observations	7	5
Pooled Variance	0.00210906	
Hypothesized Mean Difference	0	
df	10	
t Stat	1.33450508	
P(T<=t) one-tail	0.10581382	
t Critical one-tail	1.8124611	
P(T<=t) two-tail	0.21162765	
t Critical two-tail	2.22813884	

Figure 4.23 Output from Excel's t -test assuming equal variances in the Analysis ToolPak. The absolute value of "t Stat" is equivalent to t_{exp} (note: because Excel subtracts the mean for variable 2 from the mean for variable 1, t Stat may be positive or negative). The values of "P(T<=t) one-tail" and of "P(T<=t) two-tail" are the probabilities of incorrectly rejecting the null hypothesis for a one-tailed or for a two-tailed t -test. The values for "t Critical one-tail" and for "t Critical two tail" are $t(0.05, 10)$ for a one-tailed and two-tailed t -test, respectively.

Practice Exercise 4.12

Rework [Example 4.20](#) and [Example 4.21](#) using Excel's Analysis ToolPak.

Click [here](#) to review your answers to this exercise.

4H.2 R

R is a programming environment that provides powerful capabilities for analyzing data. There are many functions built into R's standard installation and additional packages of functions are available from the R web site (www.r-project.org). Commands in R are not available from pull down menus. Instead, you interact with R by typing in commands.

DESCRIPTIVE STATISTICS

Let's use R to provide a statistical summary of the data in Table 4.1. To do this we first need to create an object containing the data, which we do by typing in the following command.

```
> penny1=c(3.080, 3.094, 3.107, 3.056, 3.112, 3.174, 3.198)
```

[Table 4.20](#) lists the commands in R for calculating basic descriptive statistics. As is true for Excel, R does not include stand alone commands for all statistics of interest, but we can calculate them using other commands. Using a command is easy—simply enter the appropriate code ; for example, to find the sample's variance enter the appropriate command at the prompt.

```
> var(penny1)
[1] 0.002221918
```

In R, the symbol '>' is a prompt indicating that the program is waiting for you to enter a command. When you press 'Return' or 'Enter,' R executes the command.

Table 4.20 R Functions for Descriptive Statistics

Parameter	R Function
mean	mean(object)
median	median(object)
sample standard deviation	sd(object)
population standard deviation	sd(object)*((length(object)-1)/length(object))^0.5
sample variance	var(object)
population variance	var(object)*((length(object)-1)/length(object))
range	max(object)-min(object)

PROBABILITY DISTRIBUTIONS

In [Example 4.11](#) we showed that 91.10% of a manufacturer's analgesic tablets contain between 243 and 262 mg of aspirin. We obtained this result by calculating the deviation, z , of each limit from the population's expected mean, μ , of 250 mg in terms of the population's expected standard deviation, σ , of 5 mg. After calculating values for z , we used the table in [Appendix 3](#) to find the area under the normal distribution curve between the two limits.

We can complete this calculation in R using the function **pnorm**. The function's general format is

$$\text{pnorm}(x, \mu, \sigma)$$

where x is the limit of interest, μ is the distribution's expected mean and σ is the distribution's expected standard deviation. The function returns the probability of obtaining a result of less than x (Figure 4.24). Here is the output of an R session for solving [Example 4.11](#).

```
> pnorm(243,250,5)
[1] 0.08075666
> pnorm(262,250,5)
[1] 0.9918025
```

Subtracting the smaller value from the larger value and adjusting to the correct number of significant figures gives the probability as 0.9910, or 99.10%.

R also includes functions for binomial distributions. To find the probability of obtaining a particular outcome, X , in N trials we use the **dbinom** function.

$$\text{dbinom}(X, N, p)$$

where p is the probability of X occurring in one trial. Using [Example 4.10](#) to test this function, we find that the probability of finding no atoms of ^{13}C atoms in a molecule of cholesterol, $\text{C}_{27}\text{H}_{44}\text{O}$ is

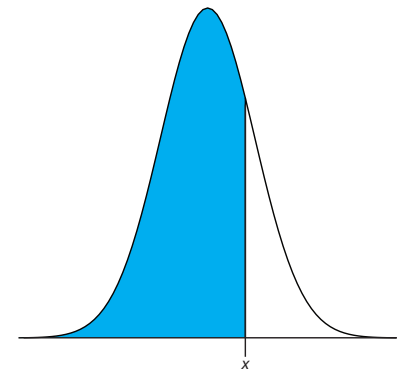


Figure 4.24 Shown in blue is the area returned by the function

$$\text{pnorm}(x, \mu, \sigma)$$

```
> dbinom(0,27,0.0111)
```

```
[1] 0.7397997
```

0.740 after adjusting the significant figures. To find the probability of obtaining any outcome up to a maximum value of X , we use the **pbinom** function.

$$\text{pbinom}(X, N, p)$$

To find the percentage of cholesterol molecules containing 0, 1, or 2 atoms of ^{13}C , we enter

```
> pbinom(2,27,0.0111)
```

```
[1] 0.9967226
```

and find that the answer is 99.7% of cholesterol molecules.

SIGNIFICANCE TESTS

R includes commands to help you complete the following significance tests covered in this chapter:

- an F -test of variances
- an unpaired t -test of sample means assuming equal variances
- an unpaired t -test of sample means assuming unequal variances
- a paired t -test for of sample means
- Dixon's Q -test for outliers
- Grubb's test for outliers

Let's use R to complete a t -test on the data in [Table 4.11](#), which contains results for two experiments to determine the mass of a circulating U. S. penny. To do this, enter the data from [Table 4.11](#) into two objects.

```
> penny1=c(3.080, 3.094, 3.107, 3.056, 3.112, 3.174, 3.198)
```

```
> penny2=c(3.052, 3.141, 3.083, 3.083, 3.048)
```

Because the data in this case are unpaired, we will use R to complete an unpaired t -test. Before we can complete a t -test we must use an F -test to determine whether the variances for the two data sets are equal or unequal. Our null hypothesis is that the variances are equal, $s_{\text{Set 1}}^2 = s_{\text{Set 2}}^2$, and our alternative hypothesis is that the variances are not equal, $s_{\text{Set 1}}^2 \neq s_{\text{Set 2}}^2$.

The command for a two-tailed F -test in R, which is our choice for this problem, is

$$\text{var.test}(X, Y)$$

where X and Y are the objects containing the data sets. [Figure 4.25](#) shows the output from an R session to solve this problem.

R does not provide the critical value for $F(0.05, 6, 4)$. Instead it reports the 95% confidence interval for F_{exp} . Because this confidence interval of 0.204 to 11.661 includes the expected value for F of 1.00, we retain the null hypothesis and have no evidence for a difference between the variances.

For a one-tailed F -test the command is one of the following

```
var.test(X, Y, alternative = "greater")
```

```
var.test(X, Y, alternative = "less")
```

where "greater" is used when the alternative hypothesis is $s_x^2 > s_y^2$, and "less" is used when the alternative hypothesis is

$$s_x^2 < s_y^2.$$

```

> var.test(penny1, penny2)

F test to compare two variances

data: penny1 and penny2

F = 1.8726, num df = 6, denom df = 4, p-value = 0.5661
alternative hypothesis: true ratio of variances is not equal to 1
95 percent confidence interval:
 0.2036028 11.6609726
sample estimates:
ratio of variances
 1.872598

```

R calculates F_{exp} as $(s_X)^2/(s_Y)^2$. If we use the command

```
var.test(penny2, penny1)
```

the output will give R as 0.534 and the 95% confidence interval as 0.0858 to 4.912. Because the expected value for F_{exp} of 1.00 falls within the confidence interval, we retain the null hypothesis of equal variances.

Figure 4.25 Output of an R session for an F -test of variances. The p -value of 0.5661 is the probability of incorrectly rejecting the null hypothesis that the variances are equal (*note: R identifies the value α as a p -value*). The 95% confidence interval is the range of values for F_{exp} that can be explained by random error. If this range includes the expected value for F , in this case 1.00, then there is insufficient evidence to reject the null hypothesis. Note that R does not adjust for significant figures.

R also provides the probability of incorrectly rejecting the null hypothesis, which in this case is 0.5661.

Having found no evidence suggesting unequal variances, we now complete an unpaired t -test assuming equal variances. Our null hypothesis is that there is no difference between the means, $\bar{X}_{\text{Set 1}} = \bar{X}_{\text{Set 2}}$, and our alternative hypothesis is that there is a difference between the means, $\bar{X}_{\text{Set 1}} \neq \bar{X}_{\text{Set 2}}$. In R there is a single command for all two-sample t -tests. The basic syntax for a two-tailed unpaired t -test with unequal variances is

```
t.test(X, Y, mu = 0, paired = FALSE, var.equal = FALSE)
```

where X and Y are the objects containing the data sets. You can change the underlined terms to alter the nature of the t -test. Replacing “var.equal = FALSE” to “var.equal = TRUE” makes this a two-tailed t -test with equal variances, and replacing “paired = FALSE” with “paired = TRUE” makes this a paired t -test. The term “mu = 0” is the expected difference between the means, which for a null hypothesis of $\bar{X}_{\text{Set 1}} = \bar{X}_{\text{Set 2}}$ is 0. You can, of course, change this to suit your needs. The underlined terms are default values; if you omit them, then R assumes that you intend an unpaired two-tailed t -test of the null hypothesis that $X = Y$ with unequal variances. [Figure 4.26](#) shows the output of an R session for this problem.

The p -value of 0.2116 means that there is a 21.16% probability of incorrectly rejecting the null hypothesis. The 95% confidence interval of -0.024 to 0.0958, which is for the difference between the sample means, includes the expected value of zero. Both ways of looking at the results of the t -test provide no evidence for rejecting the null hypothesis; thus, we retain the null hypothesis and find no evidence for a difference between the two samples.

To complete a one-sided t -test, include the command

```
alternative = “greater”
```

or

```
alternative = “less”
```

A one-sided paired t -test that the difference between two samples is greater than 0 becomes

```
t.test(X, Y, paired = TRUE, alternative = “greater”)
```

```
> t.test(penny1, penny2, var.equal=TRUE)
Two Sample t-test
data: penny1 and penny2
t = 1.3345, df = 10, p-value = 0.2116
alternative hypothesis: true difference in means is not equal to 0
95 percent confidence interval:
-0.02403040 0.09580182
sample estimates:
mean of x mean of y
3.117286 3.081400
```

Figure 4.26 Output of an R session for an unpaired t -test with equal variances. The p -value of 0.2116 is the probability of incorrectly rejecting the null hypothesis that the means are equal (*note: R identifies the value α as a p -value*). The 95% confidence interval is the range of values for the difference between the means that can be explained by random error. If this range includes the expected value for the difference, in this case zero, then there is insufficient evidence to reject the null hypothesis. Note that R does not adjust for significant figures.

Practice Exercise 4.13

Rework [Example 4.20](#) and [Example 4.21](#) using R.

Click [here](#) to review your answers to this exercise.

Unlike Excel, R also includes functions for evaluating outliers. These functions are not part of R's standard installation. To install them enter the following command within R (*note: you will need an internet connection to download the package of functions*).

```
> install.packages("outliers")
```

After installing the package, you will need to load the functions into R using the following command (*note: you will need to do this step each time you begin a new R session as the package does not automatically load when you start R*).

```
> library("outliers")
```

Let's use this package to find the outlier in [Table 4.16](#) using both Dixon's Q -test and Grubb's test. The commands for these tests are

```
dixon.test(X, type = 10, two.sided = TRUE)
```

```
grubbs.test(X, type = 10, two.sided = TRUE)
```

where X is the object containing the data, "type = 10" specifies that we are looking for one outlier, and "two.sided = TRUE" indicates that we are using the more conservative two-tailed test. Both tests have other variants that allow the testing of outliers on both ends of the data set ("type = 11") or for more than one outlier ("type = 20"), but we will not consider these. [Figure 4.27](#) shows the output of a session for this problem. For both tests the very small p -value indicates that we can treat as an outlier the penny with a mass of 2.514 g.

You need to install a package once, but you need to load the package each time you plan to use it. There are ways to configure R so that it automatically loads certain packages; see *An Introduction to R* for more information (click [here](#) to view a PDF version of this document).


```
> penny3=c(3.067,3.049, 3.039, 2.514, 3.048, 3.079, 3.094, 3.109, 3.102)
```

```
> dixon.test(penny3, type=10, two.sided=TRUE)
```

Dixon test for outliers

```
data: penny3
```

```
Q = 0.8824, p-value < 2.2e-16
```

```
alternative hypothesis: lowest value 2.514 is an outlier
```

```
> grubbs.test(penny3, type=10, two.sided=TRUE)
```

Grubbs test for one outlier

```
data: penny3
```

```
G = 2.6430, U = 0.0177, p-value = 1.938e-06
```

```
alternative hypothesis: lowest value 2.514 is an outlier
```

Figure 4.27 Output of an R session for Dixon’s Q -test and Grubb’s test for outliers. The p -values for both tests show that we can treat as an outlier the penny with a mass of 2.514 g.

VISUALIZING DATA

One of the more useful features of R is the ability to visualize your data. Visualizing your data is important because it provides you with an intuitive feel for your data that can help you in applying and evaluating statistical tests. It is tempting to believe that a statistical analysis is foolproof, particularly if the probability for incorrectly rejecting the null hypothesis is small. Looking at a visual display of your data, however, can help you determine whether your data is normally distributed—a requirement for most of the significance tests in this chapter—and can help you identify potential outliers. There are many useful ways to look at your data, four of which we consider here.

To plot data in R will use the package “lattice,” which you will need to load using the following command.

```
> library("lattice")
```

To demonstrate the types of plots we can generate, we will use the object “penny,” which contains the masses of the 100 pennies in [Table 4.13](#).

Our first display is a histogram. To construct the histogram we use mass to divide the pennies into bins and plot the number of pennies or the percent of pennies in each bin on the y -axis as a function of mass on the x -axis. [Figure 4.28a](#) shows the result of entering

```
> histogram(penny, type = "percent", xlab = "Mass (g)",
ylab = "Percent of Pennies", main = "Histogram of Data in Table
4.13")
```

Visualizing data is important, a point we will return to in [Chapter 5](#) when we consider the mathematical modeling of data.

You do not need to use the command `install.package` this time because `lattice` was automatically installed on your computer when you downloaded R.

You can download the file “Penny.Rdata” from the textbook’s [web site](#).

To create a histogram showing the number of pennies in each bin, change “percent” to “count.”

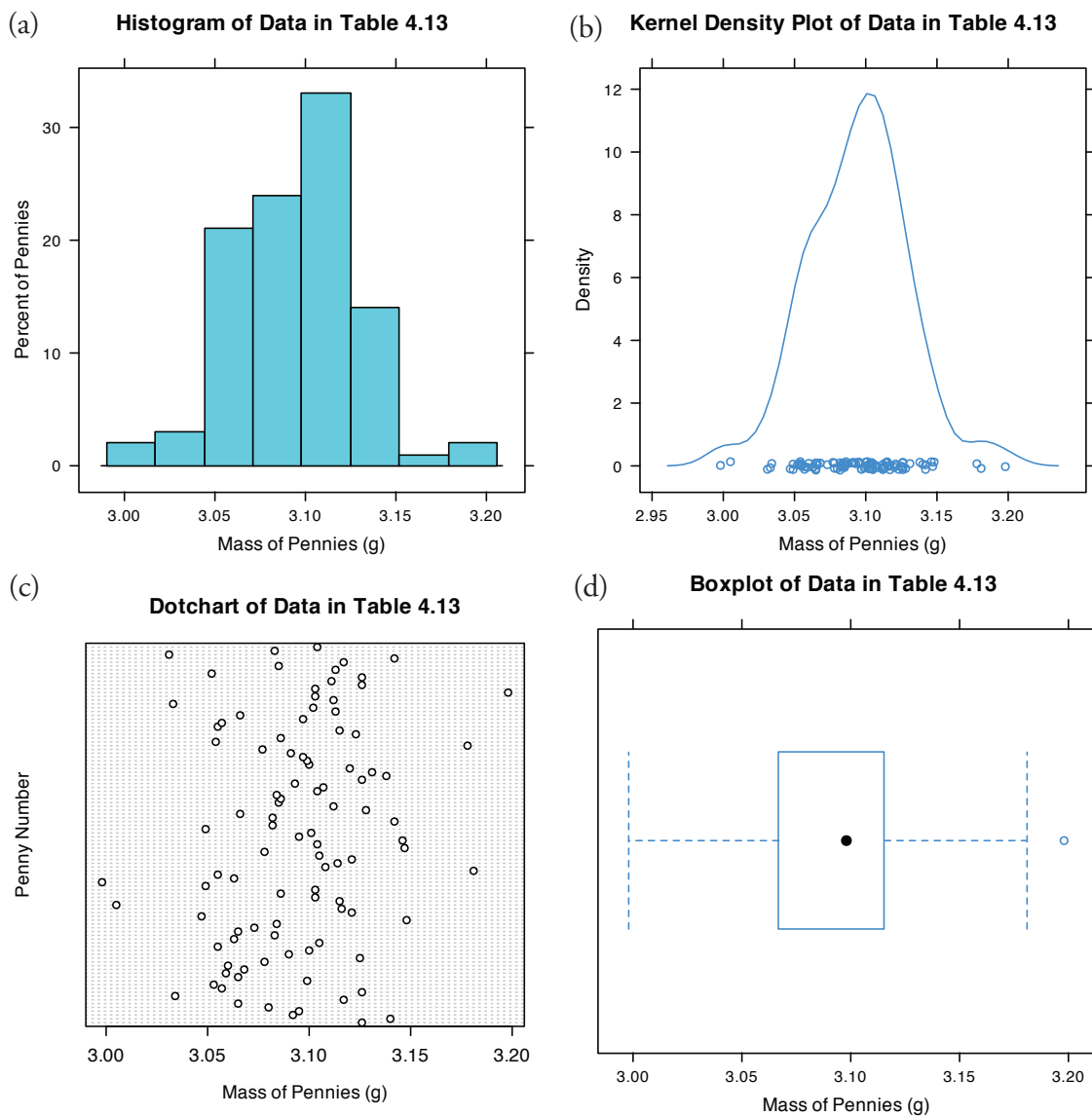


Figure 4.28 Four different ways to plot the data in [Table 4.13](#): (a) histogram; (b) kernel density plot showing smoothed distribution and individual data points; (c) dot chart; and (d) box plot.

A histogram allows us to visualize the data's distribution. In this example the data appear to follow a normal distribution, although the largest bin does not include the mean of 3.095 g and the distribution is not perfectly symmetric. One limitation of a histogram is that its appearance depends on how we choose to bin the data. Increasing the number of bins and centering the bins around the data's mean gives a histogram that more closely approximates a normal distribution ([Figure 4.10](#)).

An alternative to the histogram is a **KERNEL DENSITY PLOT**, which is basically a smoothed histogram. In this plot each value in the data set is replaced with a normal distribution curve whose width is a function of the data set's standard deviation and size. The resulting curve is a summation

of the individual distributions. [Figure 4.28b](#) shows the result of entering the command

```
> densityplot(penny, xlab = "Mass of Pennies (g)", main = "Kernel
Density Plot of Data in Table 4.13")
```

The circles at the bottom of the plot show the mass of each penny in the data set. This display provides a more convincing picture that the data in [Table 4.13](#) are normally distributed, although we can see evidence of a small clustering of pennies with a mass of approximately 3.06 g.

We analyze samples to characterize the parent population. To reach a meaningful conclusion about a population, the samples must be representative of the population. One important requirement is that the samples must be random. A **DOT CHART** provides a simple visual display that allows us look for non-random trends. [Figure 4.28c](#) shows the result of entering

```
> dotchart(penny, xlab = "Mass of Pennies (g)", ylab = "Penny
Number", main = "Dotchart of Data in Table 4.13")
```

In this plot the masses of the 100 pennies are arranged along the y -axis in the order of sampling. If we see a pattern in the data along the y -axis, such as a trend toward smaller masses as we move from the first penny to the last penny, then we have clear evidence of non-random sampling. Because our data do not show a pattern, we have more confidence in the quality of our data.

The last plot we will consider is a **BOX PLOT**, which is a useful way to identify potential outliers without making any assumptions about the data's distribution. A box plot contains four pieces of information about a data set: the median, the middle 50% of the data, the smallest value and the largest value within a set distance of the middle 50% of the data, and possible outliers. [Figure 4.28d](#) shows the result of entering

```
> bwplot(penny, xlab = "Mass of Pennies (g)", main = "Boxplot of
Data in Table 4.13")
```

The black dot (\bullet) is the data set's median. The rectangular box shows the range of masses for the middle 50% of the pennies. This also is known as the interquartile range, or IQR. The dashed lines, which are called "whiskers," extend to the smallest value and the largest value that are within $\pm 1.5 \times \text{IQR}$ of the rectangular box. Potential outliers are shown as open circles (\circ). For normally distributed data the median will be near the center of the box and the whiskers will be equidistant from the box. As is often true in statistics, the converse is not true—finding that a boxplot is perfectly symmetric does not prove that the data are normally distributed.

The box plot in [Figure 4.28d](#) is consistent with the histogram ([Figure 4.28a](#)) and the kernel density plot ([Figure 4.28b](#)). Together, the three plots provide evidence that the data in [Table 4.13](#) are normally distributed. The potential outlier, whose mass of 3.198 g, is not sufficiently far away from the upper whisker to be of concern, particularly as the size of the data set

Note that the dispersion of points along the x -axis is not uniform, with more points occurring near the center of the x -axis than at either end. This pattern is as expected for a normal distribution.

To find the interquartile range you first find the median, which divides the data in half. The median of each half provides the limits for the box. The IQR is the median of the upper half of the data minus the median for the lower half of the data. For the data in [Table 4.13](#) the median is 3.098. The median for the lower half of the data is 3.068 and the median for the upper half of the data is 3.115. The IQR is $3.115 - 3.068 = 0.047$. You can use the command "summary(penny)" in R to obtain these values.

The lower "whisker" extend to the first data point with a mass larger than

$$3.068 - 1.5 \times \text{IQR} = 3.068 - 1.5 \times 0.047 = 2.9975$$

which for this data is 2.998 g. The upper "whisker" extends to the last data point with a mass smaller than

$$3.115 + 1.5 \times \text{IQR} = 3.115 + 1.5 \times 0.047 = 3.1855$$

which for this data is 3.181 g.

($n = 100$) is so large. A Grubb's test on the potential outlier does not provide evidence for treating it as an outlier.

Practice Exercise 4.14

Use R to create a data set consisting of 100 values from a uniform distribution by entering the command

```
> data = runif(100, min = 0, max = 100)
```

A uniform distribution is one in which every value between the minimum and the maximum is equally probable. Examine the data set by creating a histogram, a kernel density plot, a dot chart, and a box plot. Briefly comment on what the plots tell you about the your sample and its parent population.

Click [here](#) to review your answer to this exercise.

As you review this chapter, try to define a key term in your own words. Check your answer by clicking on the key term, which will take you to the page where it was first introduced. Clicking on the **KEY TERM** there, will bring you back to this page so that you can continue with another key term.

4I Key Terms

alternative hypothesis	bias	binomial distribution
box plot	central limit theorem	Chauvenet's criterion
confidence interval	constant determinate error	degrees of freedom
detection limit	determinate error	Dixon's Q -test
dot chart	error	F -test
Grubb's test	histogram	indeterminate error
kernel density plot	limit of identification	limit of quantitation
mean	median	measurement error
method error	normal distribution	null hypothesis
one-tailed significance test	outlier	paired data
paired t -test	personal error	population
probability distribution	propagation of uncertainty	proportional determinate error
range	repeatability	reproducibility
sample	sampling error	significance test
standard deviation	standard error of the mean	Standard Reference Material
tolerance	t -test	two-tailed significance test
type 1 error	type 2 error	uncertainty
unpaired data	variance	

4J Chapter Summary

The data we collect are characterized by their central tendency (where the values cluster), and their spread (the variation of individual values around the central value). We report our data's central tendency by stating the mean or median, and our data's spread using the range, standard deviation or variance. Our collection of data is subject to errors, including determinate errors that affect the data's accuracy, and indeterminate errors affecting its

precision. A propagation of uncertainty allows us to estimate how these determinate and indeterminate errors will affect our results.

When we analyze a sample several times the distribution of the results is described by a probability distribution, two examples of which are the binomial distribution and the normal distribution. Knowing the type of distribution allows us to determine the probability of obtaining a particular range of results. For a normal distribution we express this range as a confidence interval.

A statistical analysis allows us to determine whether our results are significantly different from known values, or from values obtained by other analysts, by other methods of analysis, or for other samples. We can use a t -test to compare mean values and an F -test to compare precisions. To compare two sets of data you must first determine whether the data is paired or unpaired. For unpaired data you must also decide if the standard deviations can be pooled. A decision about whether to retain an outlying value can be made using Dixon's Q -test, Grubb's test, or Chauvenet's criterion. You should be sure to exercise caution when deciding to reject an outlier.

Finally, the detection limit is a statistical statement about the smallest amount of analyte that we can detect with confidence. A detection limit is not exact since its value depends on how willing we are to falsely report the analyte's presence or absence in a sample. When reporting a detection limit you should clearly indicate how you arrived at its value.

4K Problems

- The following masses were recorded for 12 different U.S. quarters (all given in grams):

5.683	5.549	5.548	5.552
5.620	5.536	5.539	5.684
5.551	5.552	5.554	5.632

Report the mean, median, range, standard deviation and variance for this data.

- A determination of acetaminophen in 10 separate tablets of Excedrin Extra Strength Pain Reliever gives the following results (in mg).¹⁶

224.3	240.4	246.3	239.4	253.1
261.7	229.4	255.5	235.5	249.7

- Report the mean, median, range, standard deviation and variance for this data.
- Assuming that \bar{X} and s^2 are good approximations for μ and σ^2 , and that the population is normally distributed, what per-

Many of the problems that follow require access to statistical tables. For your convenience, here are hyperlinks to the appendices containing these tables.

[Appendix 3: Single-Sided Normal Distribution](#)

[Appendix 4: Critical Values for the \$t\$ -Test](#)

[Appendix 5: Critical Values for the \$F\$ -Test](#)

[Appendix 6: Critical Values for Dixon's \$Q\$ -Test](#)

[Appendix 7: Critical Values for Grubb's Test](#)

¹⁶ Simonian, M. H.; Dinh, S.; Fray, L. A. *Spectroscopy* **1993**, 8(6), 37–47.

centage of tablets contain more than the standard amount of 250 mg acetaminophen per tablet?

3. Salem and Galan developed a new method for determining the amount of morphine hydrochloride in tablets.¹⁷ An analysis of tablets with different nominal dosages gave the following results (in mg/tablet).

100-mg tablets	60-mg tablets	30-mg tablets	10-mg tablets
99.17	54.21	28.51	9.06
94.31	55.62	26.25	8.83
95.92	57.40	25.92	9.08
94.55	57.51	28.62	
93.83	52.59	24.93	

Many of the problems that follow require access to statistical tables. For your convenience, here are hyperlinks to the appendices containing these tables.

[Appendix 3: Single-Sided Normal Distribution](#)

[Appendix 4: Critical Values for the *t*-Test](#)

[Appendix 5: Critical Values for the *F*-Test](#)

[Appendix 6: Critical Values for Dixon's *Q*-Test](#)

[Appendix 7: Critical Values for Grubb's Test](#)

(a) For each dosage, calculate the mean and standard deviation for the mg of morphine hydrochloride per tablet. (b) For each dosage level, assuming that \bar{X} and s^2 are good approximations for μ and σ^2 , and that the population is normally distributed, what percentage of tablets contain more than the nominal amount of morphine hydrochloride per tablet?

4. Daskalakis and co-workers evaluated several procedures for digesting oyster and mussel tissue prior to analyzing them for silver.¹⁸ To evaluate the procedures they spiked samples with known amounts of silver and analyzed the samples to determine the amount of silver, reporting results as the percentage of added silver found in the analysis. A procedure was judged acceptable if the spike recoveries fell within the range 100±15%. The spike recoveries for one method are shown here.

106%	108%	92%	99%
101%	93%	93%	104%

Assuming a normal distribution for the spike recoveries, what is the probability that any single spike recovery will be within the accepted range?

5. The formula weight (*FW*) of a gas can be determined using the following form of the ideal gas law

$$FW = \frac{gRT}{PV}$$

where *g* is the mass in grams, *R* is the gas constant, *T* is the temperature in Kelvin, *P* is the pressure in atmospheres, and *V* is the volume in liters.

¹⁷ Salem, I. I.; Galan, A. C. *Anal. Chim. Acta* 1993, 283, 334–337.

¹⁸ Daskalakis, K. D.; O'Connor, T. P.; Crecelius, E. A. *Environ. Sci. Technol.* 1997, 31, 2303–2306.

See Chapter 15 to learn more about using a spike recovery to evaluate an analytical method.

In a typical analysis the following data are obtained (with estimated uncertainties in parentheses)

$$g = 0.118 \text{ g } (\pm 0.002 \text{ g})$$

$$R = 0.082056 \text{ L atm mol}^{-1} \text{ K}^{-1} (\pm 0.000001 \text{ L atm mol}^{-1} \text{ K}^{-1})$$

$$T = 298.2 \text{ K } (\pm 0.1 \text{ K})$$

$$P = 0.724 \text{ atm } (\pm 0.005 \text{ atm})$$

$$V = 0.250 \text{ L } (\pm 0.005 \text{ L})$$

- (a) What is the compound's formula weight and its estimated uncertainty? (b) To which variable(s) should you direct your attention if you wish to improve the uncertainty in the compound's molecular weight?
- To prepare a standard solution of Mn^{2+} a 0.250 g sample of Mn is dissolved in 10 mL of concentrated HNO_3 (measured with a graduated cylinder). The resulting solution is quantitatively transferred to a 100-mL volumetric flask and diluted to volume with distilled water. A 10 mL aliquot of the solution is pipeted into a 500-mL volumetric flask and diluted to volume. (a) Express the concentration of Mn in mg/L, and estimate its uncertainty using a propagation of uncertainty. (b) Can you improve the concentration's uncertainty by using a pipet to measure the HNO_3 , instead of a graduated cylinder?
 - The mass of a hygroscopic compound is measured using the technique of weighing by difference. In this technique the compound is placed in a sealed container and weighed. A portion of the compound is removed, and the container and the remaining material are reweighed. The difference between the two masses gives the sample's mass. A solution of a hygroscopic compound with a gram formula weight of 121.34 g/mol (± 0.01 g/mol) was prepared in the following manner. A sample of the compound and its container has a mass of 23.5811 grams. A portion of the compound was transferred to a 100-mL volumetric flask and diluted to volume. The mass of the compound and container after the transfer is 22.1559 grams. Calculate the compound's molarity and estimate its uncertainty by a propagation of uncertainty.
 - Show using a propagation of uncertainty that the standard error of the mean for n determinations is s/\sqrt{n} .
 - Beginning with [equation 4.17](#) and [equation 4.18](#), use a propagation of uncertainty to derive [equation 4.19](#).
 - What is the smallest mass that we can measure on an analytical balance that has a tolerance of ± 0.1 mg, if the relative error must be less than 0.1%?

Many of the problems that follow require access to statistical tables. For your convenience, here are hyperlinks to the appendices containing these tables.

[Appendix 3: Single-Sided Normal Distribution](#)

[Appendix 4: Critical Values for the \$t\$ -Test](#)

[Appendix 5: Critical Values for the \$F\$ -Test](#)

[Appendix 6: Critical Values for Dixon's \$Q\$ -Test](#)

[Appendix 7: Critical Values for Grubb's Test](#)

11. Which of the following is the best way to dispense 100.0 mL of a reagent: (a) use a 50-mL pipet twice; (b) use a 25-mL pipet four times; or (c) use a 10-mL pipet ten times?
12. You can dilute a solution by a factor of 200 using readily available pipets (1-mL to 100-mL) and volumetric flasks (10-mL to 1000-mL) in either one step, two steps, or three steps. Limiting yourself to the glassware in [Table 4.2](#), determine the proper combination of glassware to accomplish each dilution, and rank them in order of their most probable uncertainties.
13. Explain why changing all values in a data set by a constant amount will change \bar{X} but will have no effect on s .
14. Obtain a sample of a metal from your instructor and determine its density by one or both of the following methods:

Method A: Determine the sample's mass with a balance. Calculate the sample's volume using appropriate linear dimensions.

Method B: Determine the sample's mass with a balance. Calculate the sample's volume by measuring the amount of water that it displaces. This can be done by adding water to a graduated cylinder, reading the volume, adding the sample, and reading the new volume. The difference in volumes is equal to the sample's volume.

Determine the density at least 5 times. (a) Report the mean, the standard deviation, and the 95% confidence interval for your results. (b) Find the accepted value for the metal's density and determine the absolute and relative error for your determination of the metal's density. (c) Use a propagation of uncertainty to determine the uncertainty for your method of analysis. Is the result of this calculation consistent with your experimental results? If not, suggest some possible reasons for this disagreement.

15. How many carbon atoms must a molecule have if the mean number of ^{13}C atoms per molecule is 1.00? What percentage of such molecules will have no atoms of ^{13}C ?
16. In Example 4.10 we determined the probability that a molecule of cholesterol, $\text{C}_{27}\text{H}_{44}\text{O}$, had no atoms of ^{13}C . (a) Calculate the probability that a molecule of cholesterol, has 1 atom of ^{13}C . (b) What is the probability that a molecule of cholesterol will have two or more atoms of ^{13}C ?
17. Berglund and Wichardt investigated the quantitative determination of Cr in high-alloy steels using a potentiometric titration of Cr(VI) ¹⁹.

¹⁹ Berglund, B.; Wichardt, C. *Anal. Chim. Acta* **1990**, *236*, 399–410.

Many of the problems that follow require access to statistical tables. For your convenience, here are hyperlinks to the appendices containing these tables.

[Appendix 3: Single-Sided Normal Distribution](#)

[Appendix 4: Critical Values for the \$t\$ -Test](#)

[Appendix 5: Critical Values for the \$F\$ -Test](#)

[Appendix 6: Critical Values for Dixon's \$Q\$ -Test](#)

[Appendix 7: Critical Values for Grubb's Test](#)

Before the titration, samples of the steel were dissolved in acid and the chromium oxidized to Cr(VI) using peroxydisulfate. Shown here are the results (as %w/w Cr) for the analysis of a reference steel.

16.968	16.922	16.840	16.883
16.887	16.977	16.857	16.728

Calculate the mean, the standard deviation, and the 95% confidence interval about the mean. What does this confidence interval mean?

18. Ketkar and co-workers developed an analytical method for determining trace levels of atmospheric gases.²⁰ An analysis of a sample containing 40.0 parts per thousand (ppt) 2-chloroethylsulfide yielded the following results

43.3	34.8	31.9
37.8	34.4	31.9
42.1	33.6	35.3

(a) Determine whether there is a significant difference between the experimental mean and the expected value at $\alpha = 0.05$. (b) As part of this study a reagent blank was analyzed 12 times, giving a mean of 0.16 ppt and a standard deviation of 1.20 ppt. What are the IUPAC detection limit, the limit of identification, and limit of quantitation for this method assuming $\alpha = 0.05$?

19. To test a spectrophotometer's accuracy a solution of 60.06 ppm $K_2Cr_2O_7$ in 5.0 mM H_2SO_4 is prepared and analyzed. This solution has an expected absorbance of 0.640 at 350.0 nm in a 1.0-cm cell when using 5.0 mM H_2SO_4 as a reagent blank. Several aliquots of the solution produce the following absorbance values.

0.639	0.638	0.640	0.639	0.640	0.639	0.638
-------	-------	-------	-------	-------	-------	-------

Determine whether there is a significant difference between the experimental mean and the expected value at $\alpha = 0.01$.

20. Monna and co-workers used radioactive isotopes to date sediments from lakes and estuaries.²¹ To verify this method they analyzed a ^{208}Po standard known to have an activity of 77.5 decays/min, obtaining the following results.

77.09	75.37	72.42	76.84	77.84	76.69
78.03	74.96	77.54	76.09	81.12	75.75

Determine whether there is a significant difference between the mean and the expected value at $\alpha = 0.05$.

Many of the problems that follow require access to statistical tables. For your convenience, here are hyperlinks to the appendices containing these tables.

[Appendix 3: Single-Sided Normal Distribution](#)

[Appendix 4: Critical Values for the \$t\$ -Test](#)

[Appendix 5: Critical Values for the \$F\$ -Test](#)

[Appendix 6: Critical Values for Dixon's \$Q\$ -Test](#)

[Appendix 7: Critical Values for Grubb's Test](#)

20 Ketkar, S. N.; Dulak, J. G.; Dheandhanou, S.; Fite, W. L. *Anal. Chim. Acta* **1996**, *330*, 267–270.

21 Monna, F.; Mathieu, D.; Marques, A. N.; Lancelot, J.; Bernat, M. *Anal. Chim. Acta* **1996**, *330*, 107–116.

21. A 2.6540-g sample of an iron ore, known to be 53.51% w/w Fe, is dissolved in a small portion of concentrated HCl and diluted to volume in a 250-mL volumetric flask. A spectrophotometric determination of the concentration of Fe in this solution yields results of 5840, 5770, 5650, and 5660 ppm. Determine whether there is a significant difference between the experimental mean and the expected value at $\alpha = 0.05$.
22. Horvat and co-workers used atomic absorption spectroscopy to determine the concentration of Hg in coal fly ash.²² Of particular interest to the authors was developing an appropriate procedure for digesting samples and releasing the Hg for analysis. As part of their study they tested several reagents for digesting samples. Results obtained using HNO₃ and using a 1 + 3 mixture of HNO₃ and HCl are shown here. All concentrations are given as ng Hg/g sample.

HNO ₃	161	165	160	167	166	
1+3 HNO ₃ -HCl	159	145	140	147	143	156

Determine whether there is a significant difference between these methods at $\alpha = 0.05$.

Many of the problems that follow require access to statistical tables. For your convenience, here are hyperlinks to the appendices containing these tables.

[Appendix 3: Single-Sided Normal Distribution](#)

[Appendix 4: Critical Values for the *t*-Test](#)

[Appendix 5: Critical Values for the *F*-Test](#)

[Appendix 6: Critical Values for Dixon's *Q*-Test](#)

[Appendix 7: Critical Values for Grubb's Test](#)

23. Lord Rayleigh, John William Strutt (1842-1919), was one of the most well known scientists of the late nineteenth and early twentieth centuries, publishing over 440 papers and receiving the Nobel Prize in 1904 for the discovery of argon. An important turning point in Rayleigh's discovery of Ar was his experimental measurements of the density of N₂. Rayleigh approached this experiment in two ways: first by taking atmospheric air and removing all O₂ and H₂; and second, by chemically producing N₂ by decomposing nitrogen containing compounds (NO, N₂O, and NH₄NO₃) and again removing all O₂ and H₂. Following are his results for the density of N₂, published in *Proc. Roy. Soc.* **1894**, LV, 340 (publication 210) (all values are for grams of gas at an equivalent volume, pressure, and temperature).²³

Atmospheric	2.310 17	2.309 86	2.310 10	2.310 01
Origin:	2.310 24	2.310 10	2.310 28	
Chemical	2.301 43	2.298 90	2.298 16	2.301 82
Origin:	2.298 69	2.299 40	2.298 49	2.298 89

Explain why this data led Rayleigh to look for, and discover Ar.

24. Gács and Ferraroli reported a method for monitoring the concentration of SO₂ in air.²⁴ They compared their method to the standard method by analyzing urban air samples collected from a single location. Samples were collected by drawing air through a collection solution for 6 min.

²² Horvat, M.; Lupsina, V.; Pihlar, B. *Anal. Chim. Acta* **1991**, 243, 71–79.

²³ Larsen, R. D. *J. Chem. Educ.* **1990**, 67, 925–928.

²⁴ Gács, I.; Ferraroli, R. *Anal. Chim. Acta* **1992**, 269, 177–185.

Shown here is a summary of their results with SO₂ concentrations reported in $\mu\text{L}/\text{m}^3$.

standard	21.62	22.20	24.27	23.54
method:	24.25	23.09	21.02	
new	21.54	20.51	22.31	21.30
method:	24.62	25.72	21.54	

Using an appropriate statistical test determine whether there is any significant difference between the standard method and the new method at $\alpha = 0.05$.

25. One way to check the accuracy of a spectrophotometer is to measure absorbencies for a series of standard dichromate solutions obtained from the National Institute of Standards and Technology. Absorbencies are measured at 257 nm and compared to the accepted values. The results obtained when testing a newly purchased spectrophotometer are shown here. Determine if the tested spectrophotometer is accurate at $\alpha = 0.05$.

Standard	Measured Absorbance	Expected Absorbance
1	0.2872	0.2871
2	0.5773	0.5760
3	0.8674	0.8677
4	1.1623	1.1608
5	1.4559	1.4565

Many of the problems that follow require access to statistical tables. For your convenience, here are hyperlinks to the appendices containing these tables.

[Appendix 3: Single-Sided Normal Distribution](#)

[Appendix 4: Critical Values for the *t*-Test](#)

[Appendix 5: Critical Values for the *F*-Test](#)

[Appendix 6: Critical Values for Dixon's *Q*-Test](#)

[Appendix 7: Critical Values for Grubb's Test](#)

26. Maskarinec and co-workers investigated the stability of volatile organics in environmental water samples.²⁵ Of particular interest was establishing proper conditions for maintaining the sample's integrity between its collection and analysis. Two preservatives were investigated—ascorbic acid and sodium bisulfate—and maximum holding times were determined for a number of volatile organics and water matrices. The following table shows results (in days) for the holding time of nine organic compounds in surface water.

	Ascorbic Acid	Sodium Bisulfate
methylene chloride	77	62
carbon disulfide	23	54
trichloroethane	52	51
benzene	62	42
1,1,2-trichloroethane	57	53
1,1,2,2-tetrachlorethane	33	85
tetrachloroethene	41	63

²⁵ Maxkarinec, M. P.; Johnson, L. H.; Holladay, S. K.; Moody, R. L.; Bayne, C. K.; Jenkins, R. A. *Environ. Sci. Technol.* **1990**, *24*, 1665–1670.

toluene	32	94
chlorobenzene	36	86

Determine whether there is a significant difference in the effectiveness of the two preservatives at $\alpha = 0.10$.

27. Using X-ray diffraction, Karstang and Kvalheim reported a new method for determining the weight percent of kalonite in complex clay minerals using X-ray diffraction.²⁶ To test the method, nine samples containing known amounts of kalonite were prepared and analyzed. The results (as % w/w kalonite) are shown here.

Actual:	5.0	10.0	20.0	40.0	50.0	60.0	80.0	90.0	95.0
Found:	6.8	11.7	19.8	40.5	53.6	61.7	78.9	91.7	94.7

Evaluate the accuracy of the method at $\alpha = 0.05$.

28. Mizutani, Yabuki and Asai developed an electrochemical method for analyzing *l*-malate.²⁷ As part of their study they analyzed a series of beverages using both their method and a standard spectrophotometric procedure based on a clinical kit purchased from Boehringer Scientific. The following table summarizes their results. All values are in ppm.

Sample	Electrode	Spectrophotometric
Apple juice 1	34.0	33.4
Apple juice 2	22.6	28.4
Apple juice 3	29.7	29.5
Apple juice 4	24.9	24.8
Grape juice 1	17.8	18.3
Grape juice 2	14.8	15.4
Mixed fruit juice 1	8.6	8.5
Mixed fruit juice 2	31.4	31.9
White wine 1	10.8	11.5
White wine 2	17.3	17.6
White wine 3	15.7	15.4
White wine 4	18.4	18.3

Determine whether there is a significant difference between the methods at $\alpha = 0.05$.

29. Alexiev and colleagues describe an improved photometric method for determining Fe^{3+} based on its ability to catalyze the oxidation of sulphanic acid by KIO_4 .²⁸ As part of their study the concentration of Fe^{3+}

Many of the problems that follow require access to statistical tables. For your convenience, here are hyperlinks to the appendices containing these tables.

[Appendix 3: Single-Sided Normal Distribution](#)

[Appendix 4: Critical Values for the *t*-Test](#)

[Appendix 5: Critical Values for the *F*-Test](#)

[Appendix 6: Critical Values for Dixon's *Q*-Test](#)

[Appendix 7: Critical Values for Grubb's Test](#)

²⁶ Karstang, T. V.; Kvalheim, O. M. *Anal. Chem.* **1991**, *63*, 767–772.

²⁷ Mizutani, F.; Yabuki, S.; Asai, M. *Anal. Chim. Acta* **1991**, *245*, 145–150.

²⁸ Alexiev, A.; Rubino, S.; Deyanova, M.; Stoyanova, A.; Sicilia, D.; Perez Bendito, D. *Anal. Chim. Acta*, **1994**, *295*, 211–219.

in human serum samples was determined by the improved method and the standard method. The results, with concentrations in $\mu\text{mol/L}$, are shown in the following table.

Sample	Improved Method	Standard Method
1	8.25	8.06
2	9.75	8.84
3	9.75	8.36
4	9.75	8.73
5	10.75	13.13
6	11.25	13.65
7	13.88	13.85
8	14.25	13.53

Determine whether there is a significant difference between the two methods at $\alpha = 0.05$.

30. Ten laboratories were asked to determine an analyte's concentration of in three standard test samples. Following are the results, in $\mu\text{g/mL}$.²⁹

Laboratory	Sample 1	Sample 2	Sample 3
1	22.6	13.6	16.0
2	23.0	14.2	15.9
3	21.5	13.9	16.9
4	21.9	13.9	16.9
5	21.3	13.5	16.7
6	22.1	13.5	17.4
7	23.1	13.9	17.5
8	21.7	13.5	16.8
9	22.2	12.9	17.2
10	21.7	13.8	16.7

Determine if there are any potential outliers in Sample 1, Sample 2 or Sample 3 at a significance level of $\alpha = 0.05$. Use all three methods—Dixon's Q -test, Grubb's test, and Chauvenet's criterion—and compare the results to each other.

31. When copper metal and powdered sulfur are placed in a crucible and ignited, the product is a sulfide with an empirical formula of Cu_xS . The value of x can be determined by weighing the Cu and S before ignition, and finding the mass of Cu_xS when the reaction is complete (any excess sulfur leaves as SO_2). The following table shows the Cu/S ratios from 62 such experiments.

Many of the problems that follow require access to statistical tables. For your convenience, here are hyperlinks to the appendices containing these tables.

[Appendix 3: Single-Sided Normal Distribution](#)

[Appendix 4: Critical Values for the \$t\$ -Test](#)

[Appendix 5: Critical Values for the \$F\$ -Test](#)

[Appendix 6: Critical Values for Dixon's \$Q\$ -Test](#)

[Appendix 7: Critical Values for Grubb's Test](#)

²⁹ Data adapted from Steiner, E. H. "Planning and Analysis of Results of Collaborative Tests," in *Statistical Manual of the Association of Official Analytical Chemists*, Association of Official Analytical Chemists: Washington, D. C., 1975.

1.764	1.838	1.865	1.866	1.872	1.877
1.890	1.891	1.891	1.897	1.899	1.900
1.906	1.908	1.910	1.911	1.916	1.919
1.920	1.922	1.927	1.931	1.935	1.936
1.936	1.937	1.939	1.939	1.940	1.941
1.941	1.942	1.943	1.948	1.953	1.955
1.957	1.957	1.957	1.959	1.962	1.963
1.963	1.963	1.966	1.968	1.969	1.973
1.975	1.976	1.977	1.981	1.981	1.988
1.993	1.993	1.995	1.995	1.995	2.017
2.029	2.042				

(a) Calculate the mean and standard deviation for this data. (b) Construct a histogram for this data. From a visual inspection of your histogram, does the data appear to be normally distributed? (c) In a normally distributed population 68.26% of all members lie within the range $\mu \pm 1\sigma$. What percentage of the data lies within the range $\pm 1s$? Does this support your answer to the previous question? (d) Assuming that \bar{X} and s^2 are good approximations for μ and σ^2 , what percentage of all experimentally determined Cu/S ratios will be greater than 2? How does this compare with the experimental data? Does this support your conclusion about whether the data is normally distributed? (e) It has been reported that this method of preparing copper sulfide results in a non-stoichiometric compound with a Cu/S ratio of less than 2. Determine if the mean value for this data is significantly less than 2 at a significance level of $\alpha = 0.01$.

Many of the problems that follow require access to statistical tables. For your convenience, here are hyperlinks to the appendices containing these tables.

[Appendix 3: Single-Sided Normal Distribution](#)

[Appendix 4: Critical Values for the \$t\$ -Test](#)

[Appendix 5: Critical Values for the \$F\$ -Test](#)

[Appendix 6: Critical Values for Dixon's \$Q\$ -Test](#)

[Appendix 7: Critical Values for Grubb's Test](#)

32. Real-time quantitative PCR is an analytical method for determining trace amounts of DNA. During the analysis, each cycle doubles the amount of DNA. A probe species that fluoresces in the presence of DNA is added to the reaction mixture and the increase in fluorescence is monitored during the cycling. The cycle threshold, C_t , is the cycle when the fluorescence exceeds a threshold value. The data in the following table shows C_t values for three samples using real-time quantitative PCR.³⁰ Each sample was analyzed 18 times.

Sample X		Sample Y		Sample Z	
24.24	25.14	24.41	28.06	22.97	23.43
23.97	24.57	27.21	27.77	22.93	23.66
24.44	24.49	27.02	28.74	22.95	28.79
24.79	24.68	26.81	28.35	23.12	23.77

³⁰ Burns, M. J.; Nixon, G. J.; Foy, C. A.; Harris, N. *BMC Biotechnol.* **2005**, 5:31 ([open access publication](#)).

23.92	24.45	26.64	28.80	23.59	23.98
24.53	24.48	27.63	27.99	23.37	23.56
24.95	24.30	28.42	28.21	24.17	22.80
24.76	24.60	25.16	28.00	23.48	23.29
25.18	24.57	28.53	28.21	23.80	23.86

Examine this data statistically and write a brief report on your conclusions. Issues you may wish to address include the presence of outliers in the samples, a summary of the descriptive statistics for each sample, and any evidence for a difference between the samples.

Many of the problems that follow require access to statistical tables. For your convenience, here are hyperlinks to the appendices containing these tables.

[Appendix 3: Single-Sided Normal Distribution](#)

[Appendix 4: Critical Values for the \$t\$ -Test](#)

[Appendix 5: Critical Values for the \$F\$ -Test](#)

[Appendix 6: Critical Values for Dixon's \$Q\$ -Test](#)

[Appendix 7: Critical Values for Grubb's Test](#)

4L Solutions to Practice Exercises

Practice Exercise 4.1

Mean: To find the mean we sum up the individual measurements and divide by the number of measurements. The sum of the 10 concentrations is 1405. Dividing the sum by 10, gives the mean as 140.5, or 1.40×10^2 mmol/L.

Median: To find the mean we arrange the 10 measurements from the smallest concentration to the largest concentration; thus

118 132 137 140 141 143 143 145 149 157

The median for a data set with 10 members is the average of the fifth and sixth values; thus, the median is $(141 + 143)/2$, or 141 mmol/L.

Range: The range is the difference between the largest value and the smallest value; thus, the range is $157 - 118 = 39$ mmol/L.

Standard Deviation: To calculate the standard deviation we first calculate the difference between each measurement and the mean value (140.5), square the resulting differences, and add them together. The differences are

-0.5 2.5 0.5 -3.5 -8.5 16.5 2.5 8.5 -22.5 4.5

and the squared differences are

0.25 6.25 0.25 12.25 72.25 272.25 6.25 72.25 506.25 20.25

The total sum of squares, which is the numerator of equation 4.1, is 968.50. The standard deviation is

$$s = \sqrt{\frac{968.50}{10-1}} = 10.37 \approx 10.4$$

Variance: The variance is the square of the standard deviation, or 108.

Click [here](#) to return to the chapter.

Practice Exercise 4.2

The first step is to determine the concentration of Cu^{2+} in the final solution. The mass of copper is

$$74.2991 \text{ g} - 73.3216 \text{ g} = 0.9775 \text{ g Cu}$$

The 10 mL of HNO_3 used to dissolve the copper does not factor into our calculation. The concentration of Cu^{2+} is

$$\frac{0.9775 \text{ g Cu}}{0.5000 \text{ L}} \times \frac{1.000 \text{ mL}}{250.0 \text{ mL}} \times \frac{10^3 \text{ mg}}{\text{g}} = 7.820 \text{ mg Cu}^{2+} / \text{L}$$

Having found the concentration of Cu^{2+} we continue on to complete the propagation of uncertainty. The absolute uncertainty in the mass of Cu wire is

$$u_{\text{g Cu}} = \sqrt{(0.0001)^2 + (0.0001)^2} = 0.00014 \text{ g}$$

The relative uncertainty in the concentration of Cu^{2+} is

$$\frac{u_{\text{mg/L}}}{7.820 \text{ mg/L}} = \sqrt{\left(\frac{0.00014}{0.9775}\right)^2 + \left(\frac{0.20}{500.0}\right)^2 + \left(\frac{0.006}{1.000}\right)^2 + \left(\frac{0.12}{250.0}\right)^2} = 0.00603$$

Solving for $u_{\text{mg/L}}$ gives the uncertainty as 0.0472. The concentration and uncertainty for Cu^{2+} is $7.820 \text{ mg/L} \pm 0.047 \text{ mg/L}$.

Click [here](#) to return to the chapter.

Practice Exercise 4.3

The first step is to calculate the absorbance, which is

$$A = -\log \frac{P}{P_0} = -\log \frac{1.50 \times 10^2}{3.80 \times 10^2} = -\log(0.3947) = 0.4037 \approx 0.404$$

Having found the absorbance we continue on to complete the propagation of uncertainty. First, we find the uncertainty for the ratio P/P_0 .

$$\frac{u_{P/P_0}}{P/P_0} = \sqrt{\left(\frac{15}{3.80 \times 10^2}\right)^2 + \left(\frac{15}{1.50 \times 10^2}\right)^2} = 1.075 \times 10^{-2}$$

Finally, from [Table 4.10](#) the uncertainty in the absorbance is

$$u_A = 0.4343 \times \frac{u_{P/P_0}}{P/P_0} = (0.4343) \times (1.075 \times 10^{-2}) = 4.669 \times 10^{-3}$$

The absorbance and uncertainty is 0.404 ± 0.005 absorbance units.

Click [here](#) to return to the chapter.

Practice Exercise 4.4

An uncertainty of 0.8% is a relative uncertainty in the concentration of 0.008; thus

$$0.008 = \sqrt{\left(\frac{0.028}{23.41}\right)^2 + \left(\frac{u_{k_A}}{0.186}\right)^2}$$

Squaring both sides of the equation gives

$$6.4 \times 10^{-5} = \left(\frac{0.028}{23.41}\right)^2 + \left(\frac{u_{k_A}}{0.186}\right)^2$$

$$6.257 \times 10^{-5} = \left(\frac{u_{k_A}}{0.186}\right)^2$$

Solving for u_{k_A} gives its value as 1.47×10^{-3} , or $\pm 0.0015 \text{ ppm}^{-1}$.

Click [here](#) to return to the chapter.

Practice Exercise 4.5

To find the percentage of tablets containing less than 245 mg of aspirin we calculate the deviation, z ,

$$z = \frac{245 - 250}{5} = -1.00$$

and look up the corresponding probability in Appendix 3A, obtaining a value of 15.87%. To find the percentage of tablets containing less than 240 mg of aspirin we find that

$$z = \frac{240 - 250}{5} = -2.00$$

which corresponds to 2.28%. The percentage of tablets containing between 240 and 245 mg of aspirin is $15.87\% - 2.28\% = 13.59\%$.

Click [here](#) to return to the chapter.

Practice Exercise 4.6

The mean is 249.9 mg aspirin/tablet for this sample of seven tablets. For a 95% confidence interval the value of z is 1.96. The confidence interval is

$$249.9 \pm \frac{1.96 \times 5}{\sqrt{7}} = 249.9 \pm 3.7 \approx 250 \text{ mg} \pm 4 \text{ mg}$$

Click [here](#) to return to the chapter.

Practice Exercise 4.7

With 100 pennies, we have 99 degrees of freedom for the mean. Although Table 4.15 does not include a value for $t(0.05, 99)$, we can approximate its value using the values for $t(0.05, 60)$ and $t(0.05, 100)$ and assuming a linear change in its value.

$$t(0.05, 99) = t(0.05, 60) - \frac{39}{40} \{t(0.05, 60) - t(0.05, 100)\}$$

$$t(0.05, 99) = 2.000 - \frac{39}{40} \{2.000 - 1.984\} = 1.9844$$

The 95% confidence interval for the pennies is

$$3.095 \pm \frac{1.9844 \times 0.0346}{\sqrt{100}} = 3.095 \text{ g} \pm 0.007 \text{ g}$$

From [Example 4.15](#), the 95% confidence intervals for the two samples in Table 4.11 are $3.117 \text{ g} \pm 0.047 \text{ g}$ and $3.081 \text{ g} \pm 0.046 \text{ g}$. As expected, the confidence interval for the sample of 100 pennies is much smaller than that for the two smaller samples of pennies. Note, as well, that the confidence interval for the larger sample fits within the confidence intervals for the two smaller samples.

Click [here](#) to return to the chapter.

Practice Exercise 4.8

The null hypothesis is $H_0 : \bar{X} = \mu$ and the alternative hypothesis is $H_A : \bar{X} \neq \mu$. The mean and standard deviation for the data are 99.26% and 2.35%, respectively. The value for t_{exp} is

$$t_{\text{exp}} = \frac{|100.0 - 99.26| \sqrt{7}}{2.35} = 0.833$$

and the critical value for $t(0.05, 6)$ is 0.836. Because t_{exp} is less than $t(0.05, 6)$ we retain the null hypothesis and have no evidence for a significant difference between \bar{X} and μ .

Click [here](#) to return to the chapter.

Practice Exercise 4.9

The standard deviations for Lot 1 is 6.451 mg, and 7.849 mg for Lot 2. The null and alternative hypotheses are

$$H_0 : s_{\text{Lot 1}}^2 = s_{\text{Lot 2}}^2 \quad H_A : s_{\text{Lot 1}}^2 \neq s_{\text{Lot 2}}^2$$

and the value of F_{exp} is

$$F_{\text{exp}} = \frac{(7.849)^2}{(6.451)^2} = 1.480$$

The critical value for $F(0.05, 5, 6)$ is 5.988. Because $F_{\text{exp}} < F(0.05, 5, 6)$, we retain the null hypothesis. There is no evidence at $\alpha = 0.05$ to suggest that the difference in the variances is significant.

Click [here](#) to return to the chapter.

Practice Exercise 4.10

To compare the means for the two lots, we will use an unpaired t-test of the null hypothesis $H_0 : \bar{X}_{\text{Lot 1}} = \bar{X}_{\text{Lot 2}}$ and the alternative hypothesis $H_A : \bar{X}_{\text{Lot 1}} \neq \bar{X}_{\text{Lot 2}}$. Because there is no evidence suggesting a difference in the variances (see [Practice Exercise 4.9](#)) we pool the standard deviations, obtaining an s_{pool} of

$$s_{\text{pool}} = \sqrt{\frac{(7-1)(6.451)^2 + (6-1)(7.849)^2}{7+6-2}} = 7.121$$

The means for the two samples are 249.57 mg for Lot 1 and 249.00 mg for Lot 2. The value for t_{exp} is

$$t_{\text{exp}} = \frac{|249.57 - 249.00|}{7.121} \times \sqrt{\frac{7 \times 6}{7+6}} = 0.1439$$

The critical value for $t(0.05, 11)$ is 2.204. Because t_{exp} is less than $t(0.05, 11)$, we retain the null hypothesis and find no evidence at $\alpha = 0.05$ for a significant difference between the means for the two lots of aspirin tablets.

Click [here](#) to return to the chapter.

Practice Exercise 4.11

Treating as Unpaired Data: The mean and standard deviation for the concentration of Zn^{2+} at the air-water interface are 0.5178 mg/L and 0.1732 mg/L respectively, and the values for the sediment-water interface are 0.4445 mg/L and 0.1418 mg/L. An F -test of the variances gives an F_{exp} of 1.493 and an $F(0.05, 5, 5)$ of 7.146. Because F_{exp} is smaller than $F(0.05, 5, 5)$ we have no evidence at $\alpha = 0.05$ to suggest that the difference in variances is significant. Pooling the standard deviations gives an s_{pool} of 0.1582

mg/L. An unpaired t -test gives t_{exp} as 0.8025. Because t_{exp} is smaller than $t(0.05, 11)$, which is 2.204, we have no evidence that there is a difference in the concentration of Zn^{2+} between the two interfaces.

Treating as Paired Data: To treat as paired data we need to calculate the difference, d_i , between the concentration of Zn^{2+} at the air-water interface and at the sediment-water interface for each location.

$$d_i = \left([\text{Zn}^{2+}]_{\text{air-water}} \right)_i - \left([\text{Zn}^{2+}]_{\text{sed-water}} \right)_i$$

Location	1	2	3	4	5	6
d_i (mg/L)	0.015	0.028	0.067	0.121	0.102	0.107

The mean difference is 0.07333 mg/L with a standard deviation of 0.0441 mg/L. The null hypothesis and alternative hypothesis are

$$H_0 : \bar{d} = 0 \quad H_A : \bar{d} \neq 0$$

and the value of t_{exp} is

$$t_{\text{exp}} = \frac{|0.07333| \sqrt{6}}{0.04410} = 4.073$$

Because t_{exp} is greater than $t(0.05, 5)$, which is 2.571, we reject the null hypothesis and accept the alternative hypothesis that there is a significant difference in the concentration of Zn^{2+} between the air-water interface and the sediment-water interface.

The difference in the concentration of Zn^{2+} between locations is much larger than the difference in the concentration of Zn^{2+} between the interfaces. Because our interest is in studying differences between the interfaces, the larger standard deviation when treating the data as unpaired increases the probability of incorrectly retaining the null hypothesis, a type 2 error.

Click [here](#) to return to the chapter.

Practice Exercise 4.12

You will find small differences between the values given here for t_{exp} and F_{exp} , and for those values shown with the worked solutions in the chapter. These differences arise because Excel does not round off the results of intermediate calculations.

The two snapshots of Excel spreadsheets shown in [Figure 4.29](#) provide solutions to these two examples.

Click [here](#) to return to the chapter.

Example 4.20	Analyst A	Analyst B	Example 4.21	Microbiological	Electrochemical
	86.82	81.01		129.5	132.3
	87.04	86.15		89.6	91.0
	86.93	81.73		76.6	73.6
	87.01	83.19		52.2	58.2
	86.20	80.27		110.8	104.2
	87.00	83.94		50.4	49.9
				72.4	82.1
				141.4	154.1
				75.0	73.4
				34.1	38.1
				60.3	60.1

F-Test Two-Sample for Variances		
	Analyst B	Analyst A
Mean	82.715	86.8333333
Variance	4.67615	0.10246667
Observations	6	6
df	5	5
F	45.6358165	
P(F<=f) one-tail	0.0003574	
F Critical one-tail	5.05032906	

t-Test: Two-Sample Assuming Unequal Variances		
	Analyst A	Analyst B
Mean	86.8333333	82.715
Variance	0.10246667	4.67615
Observations	6	6
Hypothesized Mean Difference	0	
df	5	
t Stat	4.6147271	
P(T<=t) one-tail	0.00288143	
t Critical one-tail	2.01504837	
P(T<=t) two-tail	0.00576286	
t Critical two-tail	2.57058183	

t-Test: Paired Two Sample for Means		
	Microbiological	Electrochemical
Mean	81.11818182	83.36363636
Variance	1148.547636	1243.008545
Observations	11	11
Pearson Correlation	0.987510302	
Hypothesized Mean Difference	0	
df	10	
t Stat	-1.322463865	
P(T<=t) one-tail	0.107730346	
t Critical one-tail	1.812461102	
P(T<=t) two-tail	0.215460691	
t Critical two-tail	2.228138842	

Figure 4.29 Excel's output for the data in Practice Exercise 4.12.

Practice Exercise 4.13

Shown here are copies of R sessions for each problem. You will find small differences between the values given here for t_{exp} and F_{exp} , and for those values shown with the worked solutions in the chapter. These differences arise because R does not round off the results of intermediate calculations.

Example 4.20

```
> AnalystA=c(86.82, 87.04, 86.93, 87.01, 86.20, 87.00)
> AnalystB=c(81.01, 86.15, 81.73, 83.19, 80.27, 83.94)
> var.test(AnalystB, AnalystA)
```

F test to compare two variances

data: AnalystB and AnalystA

F = 45.6358, num df = 5, denom df = 5, p-value = 0.0007148

alternative hypothesis: true ratio of variances is not equal to 1

95 percent confidence interval:

6.385863 326.130970

sample estimates:

ratio of variances

45.63582

```
> t.test(AnalystA, AnalystB, var.equal=FALSE)
```

Welch Two Sample t-test

```

data: AnalystA and AnalystB
t = 4.6147, df = 5.219, p-value = 0.005177
alternative hypothesis: true difference in means is not equal to 0
95 percent confidence interval:
 1.852919 6.383748
sample estimates:
mean of x mean of y
86.83333 82.71500

```

Example 4.21

```

> micro=c(129.5, 89.6, 76.6, 52.2, 110.8, 50.4, 72.4, 141.4, 75.0, 34.1,
60.3)
> elect=c(132.3, 91.0, 73.6, 58.2, 104.2, 49.9, 82.1, 154.1, 73.4, 38.1,
60.1)
> t.test(micro,elect,paired=TRUE)

```

Paired t-test

```

data: micro and elect
t = -1.3225, df = 10, p-value = 0.2155
alternative hypothesis: true difference in means is not equal to 0
95 percent confidence interval:
-6.028684 1.537775
sample estimates:
mean of the differences
-2.245455

```

Click [here](#) to return to the chapter.

Practice Exercise 4.14

Because we are selecting a random sample of 100 members from a uniform distribution, you will see subtle differences between your plots and the plots shown as part of this answer. Here is a record of my R session and the resulting plots.

```

> data=runif(100, min=0, max=0)
> data
[1] 18.928795 80.423589 39.399693 23.757624 30.088554
[6] 76.622174 36.487084 62.186771 81.115515 15.726404
[11] 85.765317 53.994179 7.919424 10.125832 93.153308
[16] 38.079322 70.268597 49.879331 73.115203 99.329723
[21] 48.203305 33.093579 73.410984 75.128703 98.682127
[26] 11.433861 53.337359 81.705906 95.444703 96.843476

```

```

[31] 68.251721 40.567993 32.761695 74.635385 70.914957
[36] 96.054750 28.448719 88.580214 95.059215 20.316015
[41]  9.828515 44.172774 99.648405 85.593858 82.745774
[46] 54.963426 65.563743 87.820985 17.791443 26.417481
[51] 72.832037  5.518637 58.231329 10.213343 40.581266
[56]  6.584000 81.261052 48.534478 51.830513 17.214508
[61] 31.232099 60.545307 19.197450 60.485374 50.414960
[66] 88.908862 68.939084 92.515781 72.414388 83.195206
[71] 74.783176 10.643619 41.775788 20.464247 14.547841
[76] 89.887518 56.217573 77.606742 26.956787 29.641171
[81] 97.624246 46.406271 15.906540 23.007485 17.715668
[86] 84.652814 29.379712  4.093279 46.213753 57.963604
[91] 91.160366 34.278918 88.352789 93.004412 31.055807
[96] 47.822329 24.052306 95.498610 21.089686  2.629948

```

```

> histogram(data, type="percent")
> densityplot(data)
> dotchart(data)
> bwplot(data)

```

Figure 4.30 shows the four plots. The histogram divides the data into eight bins, each containing between 10 and 15 members. As we expect for a uniform distribution, the histogram's overall pattern suggests that each outcome is equally probable. In interpreting the kernel density plot it is important to remember that it treats each data point as if it is from a normally distributed population (even though, in this case, the underlying population is uniform). Although the plot appears to suggest that there are two normally distributed populations, the individual results shown at the bottom of the plot provide further evidence for a uniform distribution. The dot chart shows no trend along the y -axis, indicating that the individual members of this sample were drawn randomly from the population. The distribution along the x -axis also shows no pattern, as expected for a uniform distribution. Finally, the box plot shows no evidence of outliers.

Click [here](#) to return to the chapter.

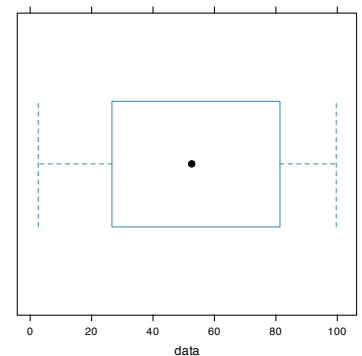
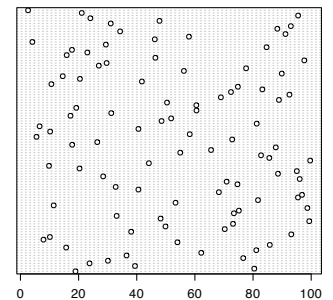
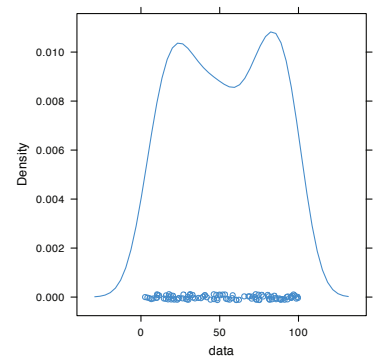
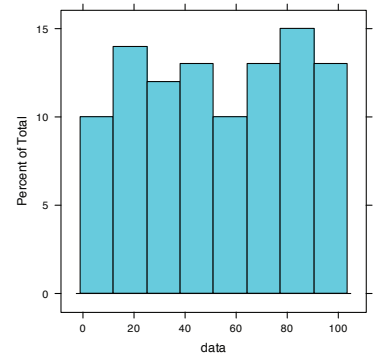


Figure 4.30 Plots generated using R to solve Practice Exercise 4.13.

Chapter 5

Standardizing Analytical Methods

Chapter Overview

- 5A Analytical Standards
- 5B Calibrating the Signal (S_{total})
- 5C Determining the Sensitivity (k_A)
- 5D Linear Regression and Calibration Curves
- 5E Compensating for the Reagent Blank (S_{reag})
- 5F Using Excel and R for a Regression Analysis
- 5G Key Terms
- 5H Chapter Summary
- 5I Problems
- 5J Solutions to Practice Exercises

The American Chemical Society's Committee on Environmental Improvement defines standardization as the process of determining the relationship between the signal and the amount of analyte in a sample.¹ In Chapter 3 we defined this relationship as

$$S_{\text{total}} = k_A n_A + S_{\text{reag}} \quad \text{or} \quad S_{\text{total}} = k_A C_A + S_{\text{reag}}$$

where S_{total} is the signal, n_A is the moles of analyte, C_A is the analyte's concentration, k_A is the method's sensitivity for the analyte, and S_{reag} is the contribution to S_{total} from sources other than the sample. To standardize a method we must determine values for k_A and S_{reag} . Strategies for accomplishing this are the subject of this chapter.

¹ ACS Committee on Environmental Improvement "Guidelines for Data Acquisition and Data Quality Evaluation in Environmental Chemistry," *Anal. Chem.* **1980**, *52*, 2242–2249.

5A Analytical Standards

To standardize an analytical method we use standards containing known amounts of analyte. The accuracy of a standardization, therefore, depends on the quality of the reagents and glassware used to prepare these standards. For example, in an acid–base titration the stoichiometry of the acid–base reaction defines the relationship between the moles of analyte and the moles of titrant. In turn, the moles of titrant is the product of the titrant’s concentration and the volume of titrant needed to reach the equivalence point. The accuracy of a titrimetric analysis, therefore, can be no better than the accuracy to which we know the titrant’s concentration.

5A.1 Primary and Secondary Standards

We divide analytical standards into two categories: primary standards and secondary standards. A **PRIMARY STANDARD** is a reagent for which we can dispense an accurately known amount of analyte. For example, a 0.1250-g sample of $\text{K}_2\text{Cr}_2\text{O}_7$ contains 4.249×10^{-4} moles of $\text{K}_2\text{Cr}_2\text{O}_7$. If we place this sample in a 250-mL volumetric flask and dilute to volume, the concentration of the resulting solution is 1.700×10^{-3} M. A primary standard must have a known stoichiometry, a known purity (or assay), and it must be stable during long-term storage. Because of the difficulty in establishing the degree of hydration, even after drying, a hydrated reagent usually is not a primary standard.

Reagents that do not meet these criteria are **SECONDARY STANDARDS**. The concentration of a secondary standard must be determined relative to a primary standard. Lists of acceptable primary standards are available.² [Appendix 8](#) provides examples of some common primary standards.

5A.2 Other Reagents

Preparing a standard often requires additional reagents that are not primary standards or secondary standards. Preparing a standard solution, for example, requires a suitable solvent, and additional reagents may be needed to adjust the standard’s matrix. These solvents and reagents are potential sources of additional analyte, which, if not accounted for, produce a determinate error in the standardization. If available, **REAGENT GRADE** chemicals conforming to standards set by the American Chemical Society should be used.³ The label on the bottle of a reagent grade chemical ([Figure 5.1](#)) lists either the limits for specific impurities, or provides an assay for the impurities. We can improve the quality of a reagent grade chemical by purifying it, or by conducting a more accurate assay. As discussed later in the chapter, we

See Chapter 9 for a thorough discussion of titrimetric methods of analysis.

The base NaOH is an example of a secondary standard. Commercially available NaOH contains impurities of NaCl, Na_2CO_3 , and Na_2SO_4 , and readily absorbs H_2O from the atmosphere. To determine the concentration of NaOH in a solution, it is titrated against a primary standard weak acid, such as potassium hydrogen phthalate, $\text{KHC}_8\text{H}_4\text{O}_4$.

2 (a) Smith, B. W.; Parsons, M. L. *J. Chem. Educ.* **1973**, *50*, 679–681; (b) Moody, J. R.; Greenburg, P. R.; Pratt, K. W.; Rains, T. C. *Anal. Chem.* **1988**, *60*, 1203A–1218A.

3 Committee on Analytical Reagents, *Reagent Chemicals*, 8th ed., American Chemical Society: Washington, D. C., 1993.

can correct for contributions to S_{total} from reagents used in an analysis by including an appropriate blank determination in the analytical procedure.

5A.3 Preparing Standard Solutions

It is often necessary to prepare a series of standards, each with a different concentration of analyte. We can prepare these standards in two ways. If the range of concentrations is limited to one or two orders of magnitude, then each solution is best prepared by transferring a known mass or volume of the pure standard to a volumetric flask and diluting to volume.

When working with larger ranges of concentration, particularly those extending over more than three orders of magnitude, standards are best prepared by a **SERIAL DILUTION** from a single stock solution. In a serial dilution we prepare the most concentrated standard and then dilute a portion of it to prepare the next most concentrated standard. Next, we dilute a portion of the second standard to prepare a third standard, continuing this process until all we have prepared all of our standards. Serial dilutions must be prepared with extra care because an error in preparing one standard is passed on to all succeeding standards.

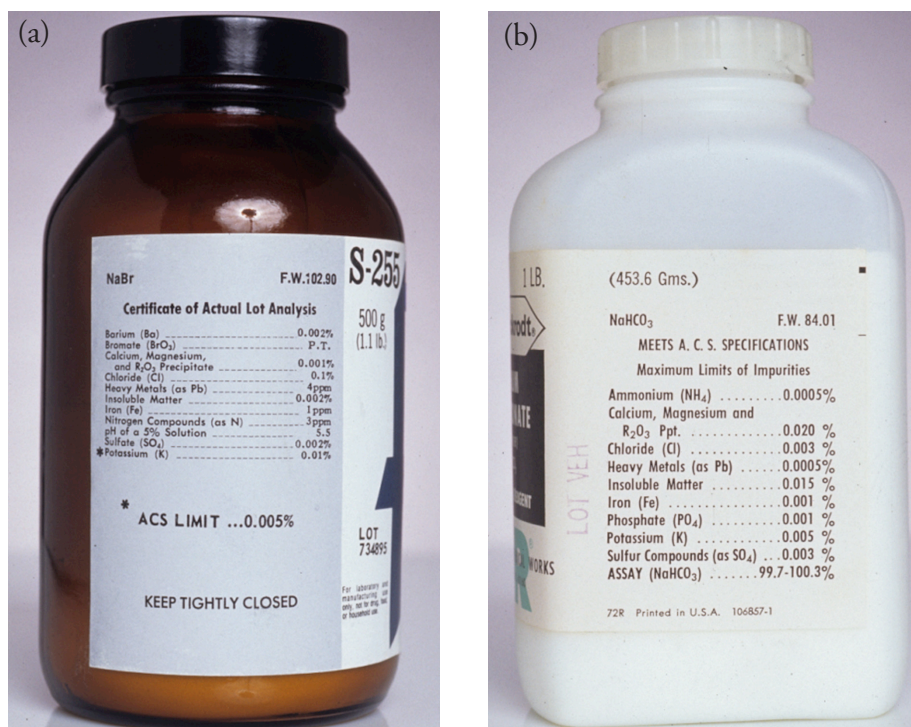


Figure 5.1 Examples of typical packaging labels for reagent grade chemicals. Label (a) provides the manufacturer's assay for the reagent, NaBr. Note that potassium is flagged with an asterisk (*) because its assay exceeds the limits established by the American Chemical Society (ACS). Label (b) does not provide an assay for impurities, but indicates that the reagent meets ACS specifications. An assay for the reagent, NaHCO₃ is provided.

5B Calibrating the Signal (S_{total})

The accuracy of our determination of k_A and S_{reag} depends on how accurately we can measure the signal, S_{total} . We measure signals using equipment, such as glassware and balances, and instrumentation, such as spectrophotometers and pH meters. To minimize determinate errors affecting the signal, we first calibrate our equipment and instrumentation. We accomplish the calibration by measuring S_{total} for a standard with a known response of S_{std} , adjusting S_{total} until

$$S_{\text{total}} = S_{\text{std}}$$

Here are two examples of how we calibrate signals. Other examples are provided in later chapters focusing on specific analytical methods.

When the signal is a measurement of mass, we determine S_{total} using an analytical balance. To calibrate the balance's signal we use a reference weight that meets standards established by a governing agency, such as the National Institute for Standards and Technology or the American Society for Testing and Materials. An electronic balance often includes an internal calibration weight for routine calibrations, as well as programs for calibrating with external weights. In either case, the balance automatically adjusts S_{total} to match S_{std} .

We also must calibrate our instruments. For example, we can evaluate a spectrophotometer's accuracy by measuring the absorbance of a carefully prepared solution of 60.06 mg/L $\text{K}_2\text{Cr}_2\text{O}_7$ in 0.0050 M H_2SO_4 , using 0.0050 M H_2SO_4 as a reagent blank.⁴ An absorbance of 0.640 ± 0.010 absorbance units at a wavelength of 350.0 nm indicates that the spectrometer's signal is properly calibrated. Be sure to read and carefully follow the calibration instructions provided with any instrument you use.

5C Determining the Sensitivity (k_A)

To standardize an analytical method we also must determine the value of k_A in equation 5.1 or equation 5.2.

$$S_{\text{total}} = k_A n_A + S_{\text{reag}} \quad 5.1$$

$$S_{\text{total}} = k_A C_A + S_{\text{reag}} \quad 5.2$$

In principle, it should be possible to derive the value of k_A for any analytical method by considering the chemical and physical processes generating the signal. Unfortunately, such calculations are not feasible when we lack a sufficiently developed theoretical model of the physical processes, or are not useful because of nonideal chemical behavior. In such situations we must determine the value of k_A by analyzing one or more standard solutions, each containing a known amount of analyte. In this section we consider

⁴ Ebel, S. *Fresenius J. Anal. Chem.* **1992**, 342, 769.

See [Section 2D.1](#) to review how an electronic balance works. Calibrating a balance is important, but it does not eliminate all sources of determinate error in measuring mass. See [Appendix 9](#) for a discussion of correcting for the buoyancy of air.

several approaches for determining the value of k_A . For simplicity we will assume that S_{reag} has been accounted for by a proper reagent blank, allowing us to replace S_{total} in [equation 5.1](#) and [equation 5.2](#) with the analyte's signal, S_A .

$$S_A = k_A n_A \quad 5.3$$

$$S_A = k_A C_A \quad 5.4$$

5C.1 Single-Point versus Multiple-Point Standardizations

The simplest way to determine the value of k_A in [equation 5.4](#) is by a **SINGLE-POINT STANDARDIZATION** in which we measure the signal for a standard, S_{std} , containing a known concentration of analyte, C_{std} . Substituting these values into [equation 5.4](#)

$$k_A = \frac{S_{\text{std}}}{C_{\text{std}}} \quad 5.5$$

gives the value for k_A . Having determined the value for k_A , we can calculate the concentration of analyte in any sample by measuring its signal, S_{samp} , and calculating C_A using [equation 5.6](#).

$$C_A = \frac{S_{\text{samp}}}{k_A} \quad 5.6$$

A single-point standardization is the least desirable method for standardizing a method. There are at least two reasons for this. First, any error in our determination of k_A carries over into our calculation of C_A . Second, our experimental value for k_A is for a single concentration of analyte. Extending this value of k_A to other concentrations of analyte requires us to assume a linear relationship between the signal and the analyte's concentration, an assumption that often is not true.⁵ [Figure 5.2](#) shows how assuming a constant value of k_A may lead to a determinate error in the analyte's concentration. Despite these limitations, single-point standardizations find routine use when the expected range for the analyte's concentrations is small. Under these conditions it is often safe to assume that k_A is constant (although you should verify this assumption experimentally). This is the case, for example, in clinical labs where many automated analyzers use only a single standard.

The preferred approach to standardizing a method is to prepare a series of standards, each containing the analyte at a different concentration. Standards are chosen such that they bracket the expected range for the analyte's concentration. A **MULTIPLE-POINT STANDARDIZATION** should include at least three standards, although more are preferable. A plot of S_{std} versus

Equation 5.3 and [equation 5.4](#) are essentially identical, differing only in whether we choose to express the amount of analyte in moles or as a concentration. For the remainder of this chapter we will limit our treatment to [equation 5.4](#). You can extend this treatment to [equation 5.3](#) by replacing C_A with n_A .

Linear regression, which also is known as the method of least squares, is one such algorithm. Its use is covered in [Section 5D](#).

5 Cardone, M. J.; Palmero, P. J.; Sybrandt, L. B. *Anal. Chem.* **1980**, *52*, 1187–1191.

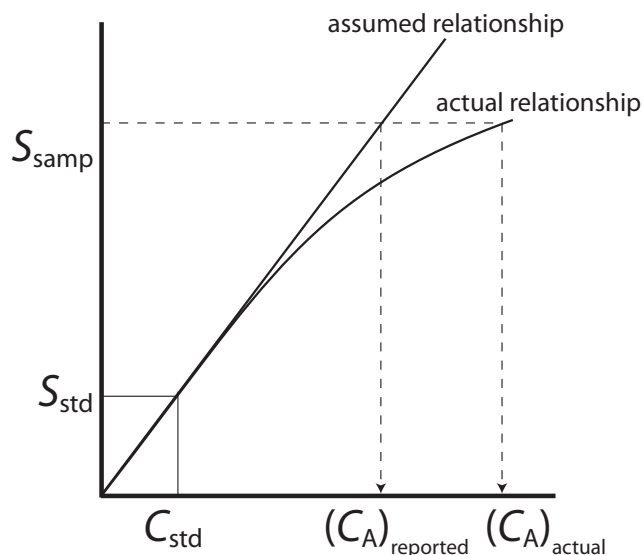


Figure 5.2 Example showing how a single-point standardization leads to a determinate error in an analyte’s reported concentration if we incorrectly assume that the value of k_A is constant.

C_{std} is known as a calibration curve. The exact standardization, or calibration relationship is determined by an appropriate curve-fitting algorithm.

There are at least two advantages to a multiple-point standardization. First, although a determinate error in one standard introduces a determinate error into the analysis, its effect is minimized by the remaining standards. Second, by measuring the signal for several concentrations of analyte we no longer must assume that the value of k_A is independent of the analyte’s concentration. Constructing a calibration curve similar to the “actual relationship” in Figure 5.2, is possible.

5C.2 External Standards

The most common method of standardization uses one or more **EXTERNAL STANDARDS**, each containing a known concentration of analyte. We call them “external” because we prepare and analyze the standards separate from the samples.

SINGLE EXTERNAL STANDARD

A quantitative determination using a single external standard was described at the beginning of this section, with k_A given by [equation 5.5](#). After determining the value of k_A , the concentration of analyte, C_A , is calculated using [equation 5.6](#).

Example 5.1

A spectrophotometric method for the quantitative analysis of Pb^{2+} in blood yields an S_{std} of 0.474 for a single standard whose concentration of lead is 1.75 ppb. What is the concentration of Pb^{2+} in a sample of blood for which S_{samp} is 0.361?



Appending the adjective “external” to the noun “standard” might strike you as odd at this point, as it seems reasonable to assume that standards and samples must be analyzed separately. As you will soon learn, however, we can add standards to our samples and analyze them simultaneously.

SOLUTION

[Equation 5.5](#) allows us to calculate the value of k_A for this method using the data for the standard.

$$k_A = \frac{S_{\text{std}}}{C_{\text{std}}} = \frac{0.474}{1.75 \text{ ppb}} = 0.2709 \text{ ppb}^{-1}$$

Having determined the value of k_A , the concentration of Pb^{2+} in the sample of blood is calculated using [equation 5.6](#).

$$C_A = \frac{S_{\text{samp}}}{k_A} = \frac{0.361}{0.2709 \text{ ppb}^{-1}} = 1.33 \text{ ppb}$$

MULTIPLE EXTERNAL STANDARDS

Figure 5.3 shows a typical multiple-point external standardization. The volumetric flask on the left is a reagent blank and the remaining volumetric flasks contain increasing concentrations of Cu^{2+} . Shown below the volumetric flasks is the resulting calibration curve. Because this is the most common method of standardization the resulting relationship is called a **NORMAL CALIBRATION CURVE**.

When a calibration curve is a straight-line, as it is in Figure 5.3, the slope of the line gives the value of k_A . This is the most desirable situation since the method's sensitivity remains constant throughout the analyte's concentration range. When the calibration curve is not a straight-line, the

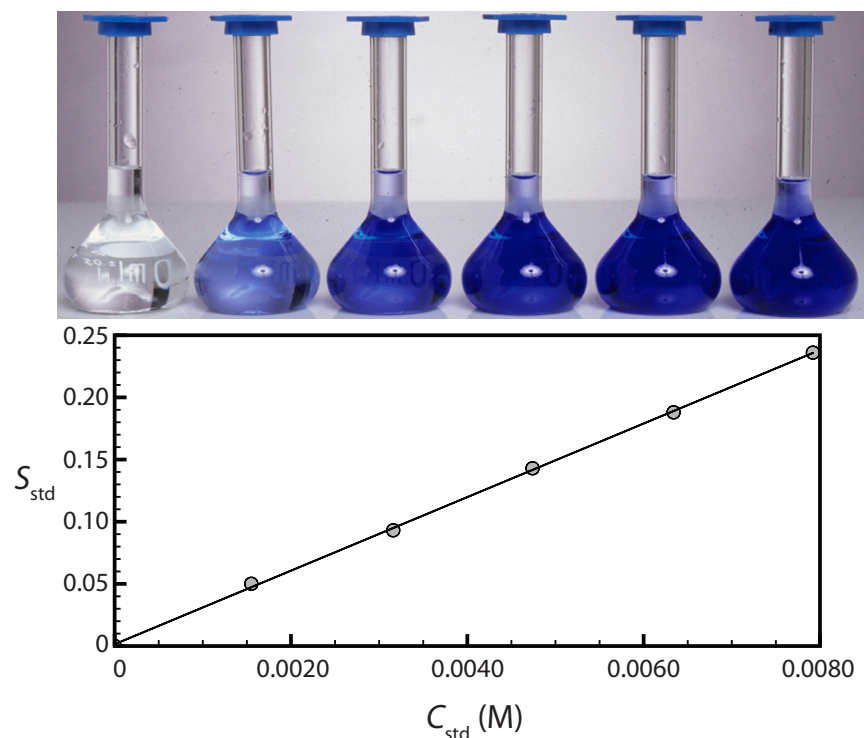


Figure 5.3 Shown at the top is a reagent blank (far left) and a set of five external standards for Cu^{2+} with concentrations increasing from left to right. Shown below the external standards is the resulting normal calibration curve. The absorbance of each standard, S_{std} , is shown by the filled circles.

method's sensitivity is a function of the analyte's concentration. In [Figure 5.2](#), for example, the value of k_A is greatest when the analyte's concentration is small and decreases continuously for higher concentrations of analyte. The value of k_A at any point along the calibration curve in [Figure 5.2](#) is given by the slope at that point. In either case, the calibration curve provides a means for relating S_{samp} to the analyte's concentration.

Example 5.2

A second spectrophotometric method for the quantitative analysis of Pb^{2+} in blood has a normal calibration curve for which

$$S_{\text{std}} = (0.296 \text{ ppb}^{-1}) \times C_{\text{std}} + 0.003$$

What is the concentration of Pb^{2+} in a sample of blood if S_{samp} is 0.397?

SOLUTION

To determine the concentration of Pb^{2+} in the sample of blood we replace S_{std} in the calibration equation with S_{samp} and solve for C_A .

$$C_A = \frac{S_{\text{samp}} - 0.003}{0.296 \text{ ppb}^{-1}} = \frac{0.397 - 0.003}{0.296 \text{ ppb}^{-1}} = 1.33 \text{ ppb}$$

It is worth noting that the calibration equation in this problem includes an extra term that does not appear in [equation 5.6](#). Ideally we expect the calibration curve to have a signal of zero when C_A is zero. This is the purpose of using a reagent blank to correct the measured signal. The extra term of +0.003 in our calibration equation results from the uncertainty in measuring the signal for the reagent blank and the standards.

Practice Exercise 5.1

[Figure 5.3](#) shows a normal calibration curve for the quantitative analysis of Cu^{2+} . The equation for the calibration curve is

$$S_{\text{std}} = 29.59 \text{ M}^{-1} \times C_{\text{std}} + 0.0015$$

What is the concentration of Cu^{2+} in a sample whose absorbance, S_{samp} , is 0.114? Compare your answer to a one-point standardization where a standard of $3.16 \times 10^{-3} \text{ M Cu}^{2+}$ gives a signal of 0.0931.

Click [here](#) to review your answer to this exercise.

An external standardization allows us to analyze a series of samples using a single calibration curve. This is an important advantage when we have many samples to analyze. Not surprisingly, many of the most common quantitative analytical methods use an external standardization.

There is a serious limitation, however, to an external standardization. When we determine the value of k_A using [equation 5.5](#), the analyte is pres-

The one-point standardization in this exercise uses data from the third volumetric flask in [Figure 5.3](#).

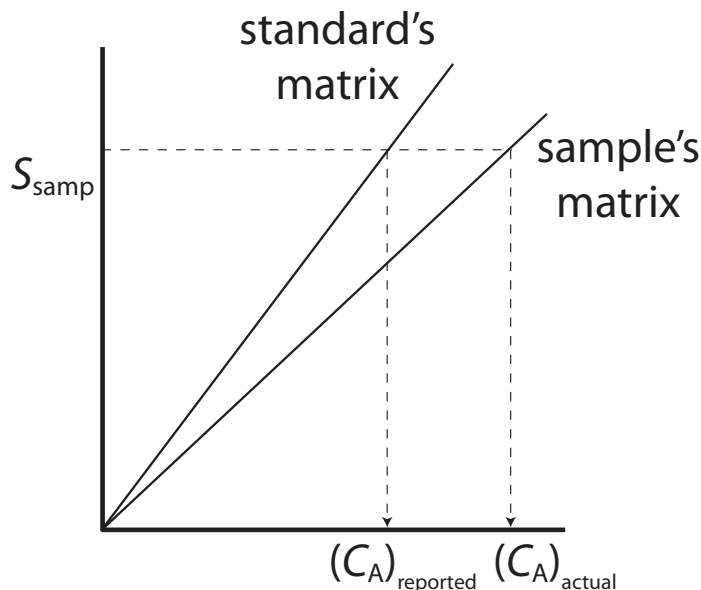


Figure 5.4 Calibration curves for an analyte in the standard's matrix and in the sample's matrix. If the matrix affects the value of k_A , as is the case here, then we introduce a determinate error into our analysis if we use a normal calibration curve.

ent in the external standard's matrix, which usually is a much simpler matrix than that of our samples. When using an external standardization we assume that the matrix does not affect the value of k_A . If this is not true, then we introduce a proportional determinate error into our analysis. This is not the case in Figure 5.4, for instance, where we show calibration curves for the analyte in the sample's matrix and in the standard's matrix. In this example, a calibration curve using external standards results in a negative determinate error. If we expect that matrix effects are important, then we try to match the standard's matrix to that of the sample. This is known as **MATRIX MATCHING**. If we are unsure of the sample's matrix, then we must show that matrix effects are negligible, or use an alternative method of standardization. Both approaches are discussed in the following section.

The matrix for the external standards in Figure 5.3, for example, is dilute ammonia, which is added because the $\text{Cu}(\text{NH}_3)_4^{2+}$ complex absorbs more strongly than Cu^{2+} . If we fail to add the same amount of ammonia to our samples, then we will introduce a proportional determinate error into our analysis.

5C.3 Standard Additions

We can avoid the complication of matching the matrix of the standards to the matrix of the sample by conducting the standardization in the sample. This is known as the **METHOD OF STANDARD ADDITIONS**.

SINGLE STANDARD ADDITION

The simplest version of a standard addition is shown in Figure 5.5. First we add a portion of the sample, V_o , to a volumetric flask, dilute it to volume, V_f and measure its signal, S_{samp} . Next, we add a second identical portion of sample to an equivalent volumetric flask along with a spike, V_{std} , of an external standard whose concentration is C_{std} . After diluting the spiked sample to the same final volume, we measure its signal, S_{spike} . The following two equations relate S_{samp} and S_{spike} to the concentration of analyte, C_A , in the original sample.

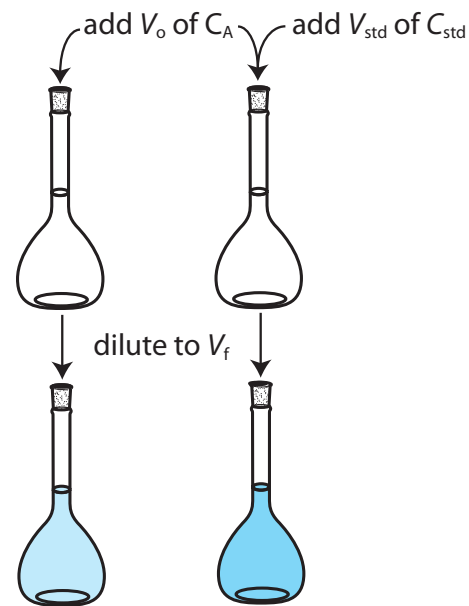


Figure 5.5 Illustration showing the method of standard additions. The volumetric flask on the left contains a portion of the sample, V_o , and the volumetric flask on the right contains an identical portion of the sample and a spike, V_{std} , of a standard solution of the analyte. Both flasks are diluted to the same final volume, V_f . The concentration of analyte in each flask is shown at the bottom of the figure where C_A is the analyte's concentration in the original sample and C_{std} is the concentration of analyte in the external standard.

Concentration
of Analyte

$$C_A \times \frac{V_o}{V_f}$$

$$C_A \times \frac{V_o}{V_f} + C_{std} \times \frac{V_{std}}{V_f}$$

The ratios V_o/V_f and V_{std}/V_f account for the dilution of the sample and the standard, respectively.

$$S_{\text{samp}} = k_A C_A \frac{V_o}{V_f} \quad 5.7$$

$$S_{\text{spike}} = k_A \left(C_A \frac{V_o}{V_f} + C_{std} \frac{V_{std}}{V_f} \right) \quad 5.8$$

As long as V_{std} is small relative to V_o , the effect of the standard's matrix on the sample's matrix is insignificant. Under these conditions the value of k_A is the same in equation 5.7 and equation 5.8. Solving both equations for k_A and equating gives

$$\frac{S_{\text{samp}}}{C_A \frac{V_o}{V_f}} = \frac{S_{\text{spike}}}{C_A \frac{V_o}{V_f} + C_{std} \frac{V_{std}}{V_f}} \quad 5.9$$

which we can solve for the concentration of analyte, C_A , in the original sample.

Example 5.3

A third spectrophotometric method for the quantitative analysis of Pb^{2+} in blood yields an S_{samp} of 0.193 when a 1.00 mL sample of blood is diluted to 5.00 mL. A second 1.00 mL sample of blood is spiked with 1.00 μL of a 1560-ppb Pb^{2+} external standard and diluted to 5.00 mL, yielding an

S_{spike} of 0.419. What is the concentration of Pb^{2+} in the original sample of blood?

SOLUTION

We begin by making appropriate substitutions into [equation 5.9](#) and solving for C_A . Note that all volumes must be in the same units; thus, we first convert V_{std} from 1.00 μL to 1.00×10^{-3} mL.

$$C_A \frac{0.193}{5.00 \text{ mL}} = \frac{0.419}{C_A \frac{1.00 \text{ mL}}{5.00 \text{ mL}} + 1560 \text{ ppb} \frac{1.00 \times 10^{-3} \text{ mL}}{5.00 \text{ mL}}}$$

$$\frac{0.193}{0.200C_A} = \frac{0.419}{0.200C_A + 0.3120 \text{ ppb}}$$

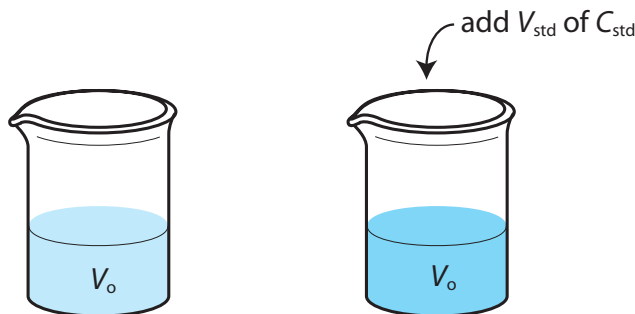
$$0.0386C_A + 0.0602 \text{ ppb} = 0.0838C_A$$

$$0.0452C_A = 0.0602 \text{ ppb}$$

$$C_A = 1.33 \text{ ppb}$$

The concentration of Pb^{2+} in the original sample of blood is 1.33 ppb.

It also is possible to make a standard addition directly to the sample, measuring the signal both before and after the spike (Figure 5.6). In this case the final volume after the standard addition is $V_o + V_{\text{std}}$ and [equation 5.7](#), [equation 5.8](#), and [equation 5.9](#) become



Concentration
of Analyte

$$C_A \quad C_A \frac{V_o}{V_o + V_{\text{std}}} + C_{\text{std}} \frac{V_{\text{std}}}{V_o + V_{\text{std}}}$$

Figure 5.6 Illustration showing an alternative form of the method of standard additions. In this case we add a spike of the external standard directly to the sample without any further adjust in the volume.

$$S_{\text{samp}} = k_A C_A$$

$$S_{\text{spike}} = k_A \left(C_A \frac{V_o}{V_o + V_{\text{std}}} + C_{\text{std}} \frac{V_{\text{std}}}{V_o + V_{\text{std}}} \right) \quad 5.10$$

$$\frac{S_{\text{samp}}}{C_A} = \frac{S_{\text{spike}}}{C_A \frac{V_o}{V_o + V_{\text{std}}} + C_{\text{std}} \frac{V_{\text{std}}}{V_o + V_{\text{std}}}} \quad 5.11$$

Example 5.4

A fourth spectrophotometric method for the quantitative analysis of Pb^{2+} in blood yields an S_{samp} of 0.712 for a 5.00 mL sample of blood. After spiking the blood sample with 5.00 μL of a 1560-ppb Pb^{2+} external standard, an S_{spike} of 1.546 is measured. What is the concentration of Pb^{2+} in the original sample of blood.

SOLUTION

To determine the concentration of Pb^{2+} in the original sample of blood, we make appropriate substitutions into equation 5.11 and solve for C_A .

$$\begin{aligned} V_o + V_{\text{std}} &= 5.00 \text{ mL} + 5.00 \times 10^{-3} \text{ mL} \\ &= 5.005 \text{ mL} \end{aligned}$$

$$\frac{0.712}{C_A} = \frac{1.546}{C_A \frac{5.00 \text{ mL}}{5.005 \text{ mL}} + 1560 \text{ ppb} \frac{5.00 \times 10^{-3} \text{ mL}}{5.005 \text{ mL}}}$$

$$\frac{0.712}{C_A} = \frac{1.546}{0.9990C_A + 1.558 \text{ ppb}}$$

$$0.7113C_A + 1.109 \text{ ppb} = 1.546C_A$$

$$C_A = 1.33 \text{ ppb}$$

The concentration of Pb^{2+} in the original sample of blood is 1.33 ppb.

MULTIPLE STANDARD ADDITIONS

We can adapt the single-point standard addition into a multiple-point standard addition by preparing a series of samples containing increasing amounts of the external standard. [Figure 5.7](#) shows two ways to plot a standard addition calibration curve based on [equation 5.8](#). In [Figure 5.7a](#) we plot S_{spike} against the volume of the spikes, V_{std} . If k_A is constant, then the calibration curve is a straight-line. It is easy to show that the x -intercept is equivalent to $-C_A V_o / C_{\text{std}}$.

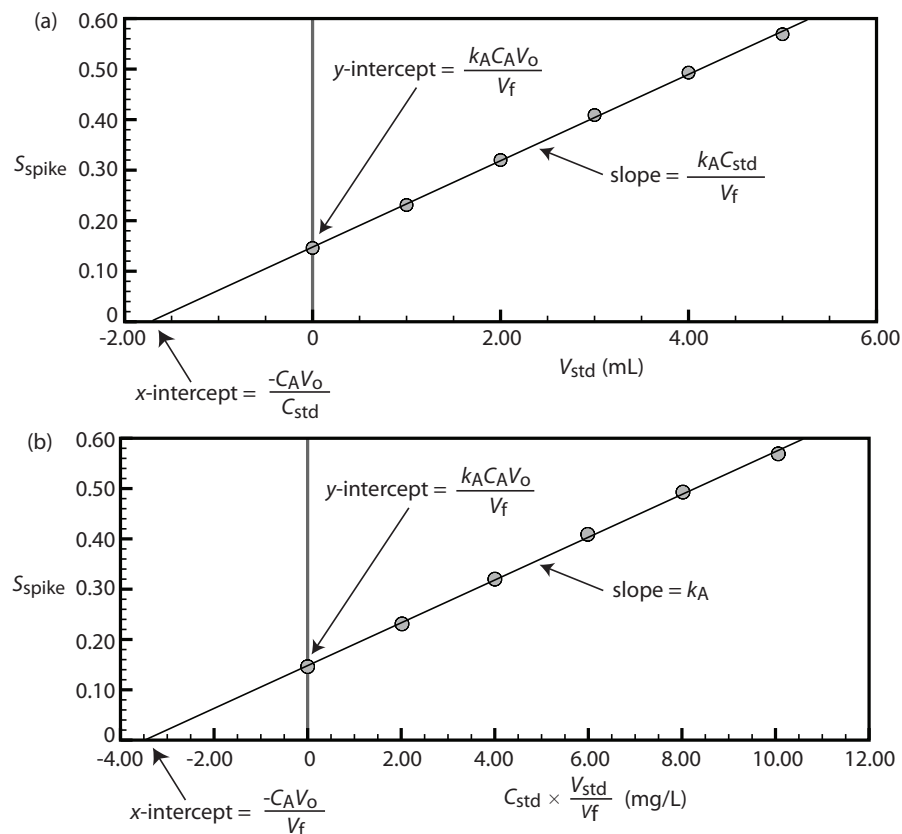


Figure 5.7 Shown at the top is a set of six standard additions for the determination of Mn^{2+} . The flask on the left is a 25.00 mL sample diluted to 50.00 mL. The remaining flasks contain 25.00 mL of sample and, from left to right, 1.00, 2.00, 3.00, 4.00, and 5.00 mL of an external standard of 100.6 mg/L Mn^{2+} . Shown below are two ways to plot the standard additions calibration curve. The absorbance for each standard addition, S_{spike} , is shown by the filled circles.

Example 5.5

Beginning with [equation 5.8](#) show that the equations in Figure 5.7a for the slope, the y -intercept, and the x -intercept are correct.

SOLUTION

We begin by rewriting [equation 5.8](#) as

$$S_{\text{spike}} = \frac{k_A C_A V_o}{V_f} + \frac{k_A C_{\text{std}}}{V_f} \times V_{\text{std}}$$

which is in the form of the equation for a straight-line

$$Y = y\text{-intercept} + \text{slope} \times X$$

where Y is S_{spike} and X is V_{std} . The slope of the line, therefore, is $k_A C_{\text{std}}/V_f$ and the y -intercept is $k_A C_A V_o/V_f$. The x -intercept is the value of X when Y is zero, or

$$0 = \frac{k_A C_A V_o}{V_f} + \frac{k_A C_{\text{std}}}{V_f} \times x\text{-intercept}$$

$$x\text{-intercept} = -\frac{k_A C_A V_o / V_f}{k_A C_{\text{std}} / V_f} = -\frac{C_A V_o}{C_{\text{std}}}$$

Practice Exercise 5.2

Beginning with [equation 5.8](#) show that the equations in [Figure 5.7b](#) for the slope, the y -intercept, and the x -intercept are correct.

Click [here](#) to review your answer to this exercise.

Because we know the volume of the original sample, V_o , and the concentration of the external standard, C_{std} , we can calculate the analyte's concentrations from the x -intercept of a multiple-point standard additions.

Example 5.6

A fifth spectrophotometric method for the quantitative analysis of Pb^{2+} in blood uses a multiple-point standard addition based on [equation 5.8](#). The original blood sample has a volume of 1.00 mL and the standard used for spiking the sample has a concentration of 1560 ppb Pb^{2+} . All samples were diluted to 5.00 mL before measuring the signal. A calibration curve of S_{spike} versus V_{std} has the following equation

$$S_{\text{spike}} = 0.266 + 312 \text{ mL}^{-1} \times V_{\text{std}}$$

What is the concentration of Pb^{2+} in the original sample of blood.

SOLUTION

To find the x -intercept we set S_{spike} equal to zero.

$$0 = 0.266 + 312 \text{ mL}^{-1} \times V_{\text{std}}$$

Solving for V_{std} , we obtain a value of -8.526×10^{-4} mL for the x -intercept. Substituting the x -intercept's value into the equation from [Figure 5.7a](#)

$$-8.526 \times 10^{-4} \text{ mL} = -\frac{C_A V_o}{C_{\text{std}}} = -\frac{C_A \times 1.00 \text{ mL}}{1560 \text{ ppb}}$$

and solving for C_A gives the concentration of Pb^{2+} in the blood sample as 1.33 ppb.

Practice Exercise 5.3

Figure 5.7 shows a standard additions calibration curve for the quantitative analysis of Mn^{2+} . Each solution contains 25.00 mL of the original sample and either 0, 1.00, 2.00, 3.00, 4.00, or 5.00 mL of a 100.6 mg/L external standard of Mn^{2+} . All standard addition samples were diluted to 50.00 mL before reading the absorbance. The equation for the calibration curve in Figure 5.7a is

$$S_{\text{std}} = 0.0854 \times V_{\text{std}} + 0.1478$$

What is the concentration of Mn^{2+} in this sample? Compare your answer to the data in Figure 5.7b, for which the calibration curve is

$$S_{\text{std}} = 0.0425 \times C_{\text{std}}(V_{\text{std}}/V_{\text{f}}) + 0.1478$$

Click [here](#) to review your answer to this exercise.

Since we construct a standard additions calibration curve in the sample, we can not use the calibration equation for other samples. Each sample, therefore, requires its own standard additions calibration curve. This is a serious drawback if you have many samples. For example, suppose you need to analyze 10 samples using a three-point calibration curve. For a normal calibration curve you need to analyze only 13 solutions (three standards and ten samples). If you use the method of standard additions, however, you must analyze 30 solutions (each of the ten samples must be analyzed three times, once before spiking and after each of two spikes).

USING A STANDARD ADDITION TO IDENTIFY MATRIX EFFECTS

We can use the method of standard additions to validate an external standardization when matrix matching is not feasible. First, we prepare a normal calibration curve of S_{std} versus C_{std} and determine the value of k_{A} from its slope. Next, we prepare a standard additions calibration curve using equation 5.8, plotting the data as shown in Figure 5.7b. The slope of this standard additions calibration curve provides an independent determination of k_{A} . If there is no significant difference between the two values of k_{A} , then we can ignore the difference between the sample's matrix and that of the external standards. When the values of k_{A} are significantly different, then using a normal calibration curve introduces a proportional determinate error.

5C.4 Internal Standards

To successfully use an external standardization or the method of standard additions, we must be able to treat identically all samples and standards. When this is not possible, the accuracy and precision of our standardization may suffer. For example, if our analyte is in a volatile solvent, then its concentration increases when we lose solvent to evaporation. Suppose we

have a sample and a standard with identical concentrations of analyte and identical signals. If both experience the same proportional loss of solvent then their respective concentrations of analyte and signals continue to be identical. In effect, we can ignore evaporation if the samples and standards experience an equivalent loss of solvent. If an identical standard and sample lose different amounts of solvent, however, then their respective concentrations and signals will no longer be equal. In this case a simple external standardization or standard addition is not possible.

We can still complete a standardization if we reference the analyte's signal to a signal from another species that we add to all samples and standards. The species, which we call an **INTERNAL STANDARD**, must be different than the analyte.

Because the analyte and the internal standard in any sample or standard receive the same treatment, the ratio of their signals is unaffected by any lack of reproducibility in the procedure. If a solution contains an analyte of concentration C_A , and an internal standard of concentration, C_{IS} , then the signals due to the analyte, S_A , and the internal standard, S_{IS} , are

$$S_A = k_A C_A$$

$$S_{IS} = k_{IS} C_{IS}$$

where k_A and k_{IS} are the sensitivities for the analyte and internal standard. Taking the ratio of the two signals gives the fundamental equation for an internal standardization.

$$\frac{S_A}{S_{IS}} = \frac{k_A C_A}{k_{IS} C_{IS}} = K \times \frac{C_A}{C_{IS}} \quad 5.12$$

Because K is a ratio of the analyte's sensitivity and the internal standard's sensitivity, it is not necessary to independently determine values for either k_A or k_{IS} .

SINGLE INTERNAL STANDARD

In a single-point internal standardization, we prepare a single standard containing the analyte and the internal standard, and use it to determine the value of K in equation 5.12.

$$K = \left(\frac{C_{IS}}{C_A} \right)_{\text{std}} \times \left(\frac{S_A}{S_{IS}} \right)_{\text{std}} \quad 5.13$$

Having standardized the method, the analyte's concentration is given by

$$C_A = \frac{C_{IS}}{K} \times \left(\frac{S_A}{S_{IS}} \right)_{\text{samp}}$$

Example 5.7

A sixth spectrophotometric method for the quantitative analysis of Pb^{2+} in blood uses Cu^{2+} as an internal standard. A standard containing 1.75 ppb Pb^{2+} and 2.25 ppb Cu^{2+} yields a ratio of $(S_A/S_{IS})_{\text{std}}$ of 2.37. A sample of blood is spiked with the same concentration of Cu^{2+} , giving a signal ratio, $(S_A/S_{IS})_{\text{samp}}$, of 1.80. Determine the concentration of Pb^{2+} in the sample of blood.

SOLUTION

Equation 5.13 allows us to calculate the value of K using the data for the standard

$$K = \left(\frac{C_{\text{IS}}}{C_A} \right)_{\text{std}} \times \left(\frac{S_A}{S_{\text{IS}}} \right)_{\text{std}} = \frac{2.25 \text{ ppb Cu}}{1.75 \text{ ppb Pb}^{2+}} \times 2.37 = 3.05 \frac{\text{ppb Cu}^{2+}}{\text{ppb Pb}^{2+}}$$

The concentration of Pb^{2+} , therefore, is

$$C_A = \frac{C_{\text{IS}}}{K} \times \left(\frac{S_A}{S_{\text{IS}}} \right)_{\text{samp}} = \frac{2.25 \text{ ppb Cu}^{2+}}{3.05 \frac{\text{ppb Cu}^{2+}}{\text{ppb Pb}^{2+}}} \times 1.80 = 1.33 \text{ ppb Cu}^{2+}$$

MULTIPLE INTERNAL STANDARDS

A single-point internal standardization has the same limitations as a single-point normal calibration. To construct an internal standard calibration curve we prepare a series of standards, each containing the same concentration of internal standard and a different concentrations of analyte. Under these conditions a calibration curve of $(S_A/S_{\text{IS}})_{\text{std}}$ versus C_A is linear with a slope of K/C_{IS} .

Although the usual practice is to prepare the standards so that each contains an identical amount of the internal standard, this is not a requirement.

Example 5.8

A seventh spectrophotometric method for the quantitative analysis of Pb^{2+} in blood gives a linear internal standards calibration curve for which

$$\left(\frac{S_A}{S_{\text{IS}}} \right)_{\text{std}} = (2.11 \text{ ppb}^{-1}) \times C_A - 0.006$$

What is the ppb Pb^{2+} in a sample of blood if $(S_A/S_{\text{IS}})_{\text{samp}}$ is 2.80?

SOLUTION

To determine the concentration of Pb^{2+} in the sample of blood we replace $(S_A/S_{\text{IS}})_{\text{std}}$ in the calibration equation with $(S_A/S_{\text{IS}})_{\text{samp}}$ and solve for C_A .

$$C_A = \frac{\left(\frac{S_A}{S_{IS}}\right)_{\text{samp}} + 0.006}{2.11 \text{ ppb}^{-1}} = \frac{2.80 + 0.006}{2.11 \text{ ppb}^{-1}} = 1.33 \text{ ppb}$$

The concentration of Pb^{2+} in the sample of blood is 1.33 ppb.

In some circumstances it is not possible to prepare the standards so that each contains the same concentration of internal standard. This is the case, for example, when preparing samples by mass instead of volume. We can still prepare a calibration curve, however, by plotting $(S_A/S_{IS})_{\text{std}}$ versus C_A/C_{IS} , giving a linear calibration curve with a slope of K .

5D Linear Regression and Calibration Curves

In a single-point external standardization we determine the value of k_A by measuring the signal for a single standard containing a known concentration of analyte. Using this value of k_A and the signal for our sample, we then calculate the concentration of analyte in our sample (see [Example 5.1](#)). With only a single determination of k_A , a quantitative analysis using a single-point external standardization is straightforward.

A multiple-point standardization presents a more difficult problem. Consider the data in Table 5.1 for a multiple-point external standardization. What is our best estimate of the relationship between S_{std} and C_{std} ? It is tempting to treat this data as five separate single-point standardizations, determining k_A for each standard, and reporting the mean value. Despite its simplicity, this is not an appropriate way to treat a multiple-point standardization.

So why is it inappropriate to calculate an average value for k_A as done in Table 5.1? In a single-point standardization we assume that our reagent blank (the first row in Table 5.1) corrects for all constant sources of determinate error. If this is not the case, then the value of k_A from a single-point standardization has a determinate error. [Table 5.2](#) demonstrates how an

Table 5.1 Data for a Hypothetical Multiple-Point External Standardization

C_{std} (arbitrary units)	S_{std} (arbitrary units)	$k_A = S_{\text{std}}/C_{\text{std}}$
0.000	0.00	—
0.100	12.36	123.6
0.200	24.83	124.2
0.300	35.91	119.7
0.400	48.79	122.0
0.500	60.42	122.8
mean value for $k_A =$		122.5

Table 5.2 Effect of a Constant Determinate Error on the Value of k_A From a Single-Point Standardization

C_{std}	S_{std} (without constant error)	$k_A = S_{\text{std}}/C_{\text{std}}$ (actual)	$(S_{\text{std}})_e$ (with constant error)	$k_A = (S_{\text{std}})_e/C_{\text{std}}$ (apparent)	
1.00	1.00	1.00	1.50	1.50	
2.00	2.00	1.00	2.50	1.25	
3.00	3.00	1.00	3.50	1.17	
4.00	4.00	1.00	4.50	1.13	
5.00	5.00	1.00	5.50	1.10	
mean k_A (true) =		1.00	mean k_A (apparent) =		1.23

uncorrected constant error affects our determination of k_A . The first three columns show the concentration of analyte in the standards, C_{std} , the signal without any source of constant error, S_{std} , and the actual value of k_A for five standards. As we expect, the value of k_A is the same for each standard. In the fourth column we add a constant determinate error of +0.50 to the signals, $(S_{\text{std}})_e$. The last column contains the corresponding apparent values of k_A . Note that we obtain a different value of k_A for each standard and that all of the apparent k_A values are greater than the true value.

How do we find the best estimate for the relationship between the signal and the concentration of analyte in a multiple-point standardization? Figure 5.8 shows the data in [Table 5.1](#) plotted as a normal calibration curve. Although the data certainly appear to fall along a straight line, the actual calibration curve is not intuitively obvious. The process of mathematically determining the best equation for the calibration curve is called linear regression.

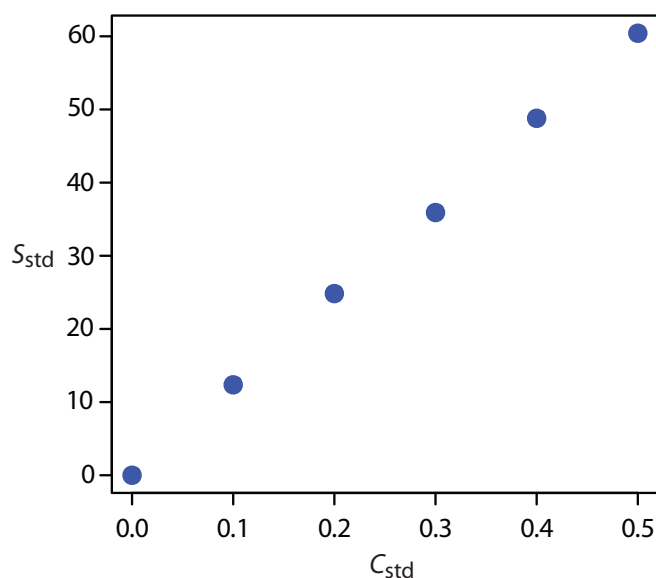


Figure 5.8 Normal calibration curve for the hypothetical multiple-point external standardization in [Table 5.1](#).

5D.1 Linear Regression of Straight Line Calibration Curves

When a calibration curve is a straight-line, we represent it using the following mathematical equation

$$y = \beta_0 + \beta_1 x \quad 5.14$$

where y is the signal, S_{std} , and x is the analyte's concentration, C_{std} . The constants β_0 and β_1 are, respectively, the calibration curve's expected y -intercept and its expected slope. Because of uncertainty in our measurements, the best we can do is to estimate values for β_0 and β_1 , which we represent as b_0 and b_1 . The goal of a **LINEAR REGRESSION** analysis is to determine the best estimates for b_0 and b_1 . How we do this depends on the uncertainty in our measurements.

5D.2 Unweighted Linear Regression with Errors in y

The most common approach to completing a linear regression for equation 5.14 makes three assumptions:

- (1) that any difference between our experimental data and the calculated regression line is the result of indeterminate errors affecting y ,
- (2) that indeterminate errors affecting y are normally distributed, and
- (3) that the indeterminate errors in y are independent of the value of x .

Because we assume that the indeterminate errors are the same for all standards, each standard contributes equally in estimating the slope and the y -intercept. For this reason the result is considered an **UNWEIGHTED LINEAR REGRESSION**.

The second assumption is generally true because of the central limit theorem, which we considered in [Chapter 4](#). The validity of the two remaining assumptions is less obvious and you should evaluate them before accepting the results of a linear regression. In particular the first assumption is always suspect since there will certainly be some indeterminate errors affecting the values of x . When preparing a calibration curve, however, it is not unusual for the uncertainty in the signal, S_{std} , to be significantly larger than that for the concentration of analyte in the standards C_{std} . In such circumstances the first assumption is usually reasonable.

HOW A LINEAR REGRESSION WORKS

To understand the logic of an linear regression consider the example shown in [Figure 5.9](#), which shows three data points and two possible straight-lines that might reasonably explain the data. How do we decide how well these straight-lines fits the data, and how do we determine the best straight-line?

Let's focus on the solid line in [Figure 5.9](#). The equation for this line is

$$\hat{y} = b_0 + b_1 x \quad 5.15$$

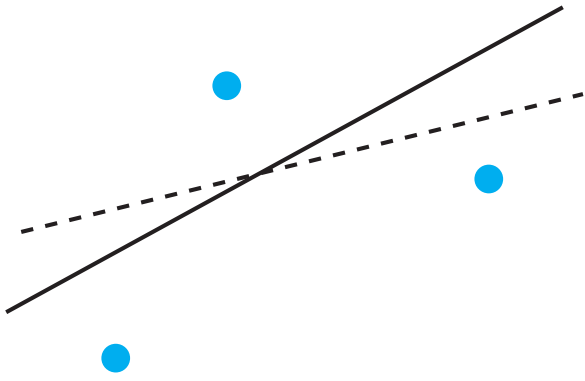


Figure 5.9 Illustration showing three data points and two possible straight-lines that might explain the data. The goal of a linear regression is to find the mathematical model, in this case a straight-line, that best explains the data.

where b_0 and b_1 are our estimates for the y -intercept and the slope, and \hat{y} is our prediction for the experimental value of y for any value of x . Because we assume that all uncertainty is the result of indeterminate errors affecting y , the difference between y and \hat{y} for each data point is the **RESIDUAL ERROR**, r , in the our mathematical model for a particular value of x .

$$r_i = (y_i - \hat{y}_i)$$

Figure 5.10 shows the residual errors for the three data points. The smaller the total residual error, R , which we define as

$$R = \sum_i (y_i - \hat{y}_i)^2 \quad 5.16$$

the better the fit between the straight-line and the data. In a linear regression analysis, we seek values of b_0 and b_1 that give the smallest total residual error.

If you are reading this aloud, you pronounce \hat{y} as y-hat.

The reason for squaring the individual residual errors is to prevent positive residual error from canceling out negative residual errors. You have seen this before in the equations for the sample and population standard deviations. You also can see from this equation why a linear regression is sometimes called the method of least squares.

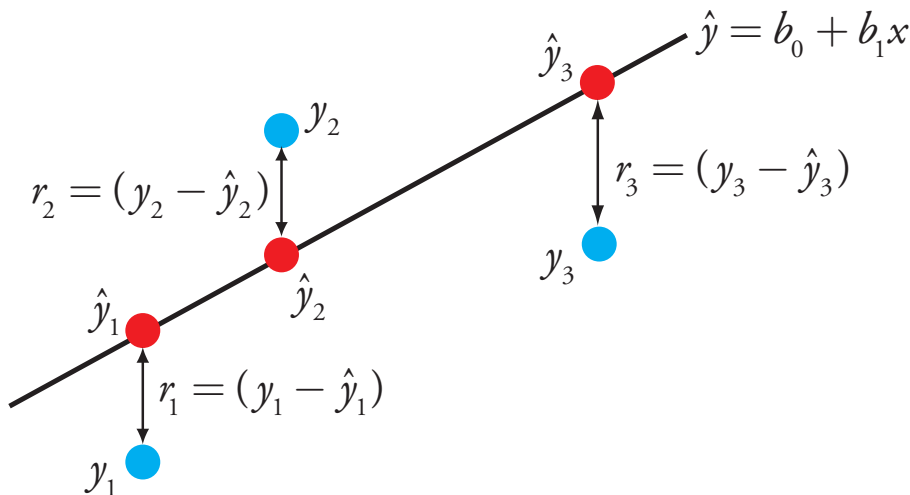


Figure 5.10 Illustration showing the evaluation of a linear regression in which we assume that all uncertainty is the result of indeterminate errors affecting y . The points in blue, y_i , are the original data and the points in red, \hat{y}_i , are the predicted values from the regression equation, $\hat{y} = b_0 + b_1x$. The smaller the total residual error (equation 5.16), the better the fit of the straight-line to the data.

FINDING THE SLOPE AND Y-INTERCEPT

Although we will not formally develop the mathematical equations for a linear regression analysis, you can find the derivations in many standard statistical texts.⁶ The resulting equation for the slope, b_1 , is

$$b_1 = \frac{n \sum_i x_i y_i - \sum_i x_i \sum_i y_i}{n \sum_i x_i^2 - \sum_i x_i^2} \quad 5.17$$

and the equation for the y -intercept, b_0 , is

$$b_0 = \frac{\sum_i y_i - b_1 \sum_i x_i}{n} \quad 5.18$$

Although equation 5.17 and equation 5.18 appear formidable, it is only necessary to evaluate the following four summations

$$\sum_i x_i \quad \sum_i y_i \quad \sum_i x_i y_i \quad \sum_i x_i^2$$

Many calculators, spreadsheets, and other statistical software packages are capable of performing a linear regression analysis based on this model. To save time and to avoid tedious calculations, learn how to use one of these tools. For illustrative purposes the necessary calculations are shown in detail in the following example.

Example 5.9

Using the data from [Table 5.1](#), determine the relationship between S_{std} and C_{std} using an unweighted linear regression.

SOLUTION

We begin by setting up a table to help us organize the calculation.

x_i	y_i	$x_i y_i$	x_i^2
0.000	0.00	0.000	0.000
0.100	12.36	1.236	0.010
0.200	24.83	4.966	0.040
0.300	35.91	10.773	0.090
0.400	48.79	19.516	0.160
0.500	60.42	30.210	0.250

Adding the values in each column gives

$$\sum_i x_i = 1.500 \quad \sum_i y_i = 182.31 \quad \sum_i x_i y_i = 66.701 \quad \sum_i x_i^2 = 0.550$$

⁶ See, for example, Draper, N. R.; Smith, H. *Applied Regression Analysis*, 3rd ed.; Wiley: New York, 1998.

See [Section 5F](#) in this chapter for details on completing a linear regression analysis using Excel and R.

Equations 5.17 and 5.18 are written in terms of the general variables x and y . As you work through this example, remember that x corresponds to C_{std} and that y corresponds to S_{std} .

Substituting these values into [equation 5.17](#) and [equation 5.18](#), we find that the slope and the y -intercept are

$$b_1 = \frac{(6 \times 66.701) - (1.500 \times 182.31)}{(6 \times 0.550) - (1.500)^2} = 120.706 \approx 120.71$$

$$b_0 = \frac{182.31 - (120.706 \times 1.500)}{6} = 0.209 \approx 0.21$$

The relationship between the signal and the analyte, therefore, is

$$S_{\text{std}} = 120.71 \times C_{\text{std}} + 0.21$$

For now we keep two decimal places to match the number of decimal places in the signal. The resulting calibration curve is shown in Figure 5.11.

UNCERTAINTY IN THE REGRESSION ANALYSIS

As shown in Figure 5.11, because of indeterminate error affecting our signal, the regression line may not pass through the exact center of each data point. The cumulative deviation of our data from the regression line—that is, the total residual error—is proportional to the uncertainty in the regression. We call this uncertainty the **STANDARD DEVIATION ABOUT THE REGRESSION**, s_r , which is equal to

$$s_r = \sqrt{\frac{\sum_i (y_i - \hat{y}_i)^2}{n - 2}} \quad 5.19$$

Did you notice the similarity between the standard deviation about the regression (equation 5.19) and the standard deviation for a sample ([equation 4.1](#))?

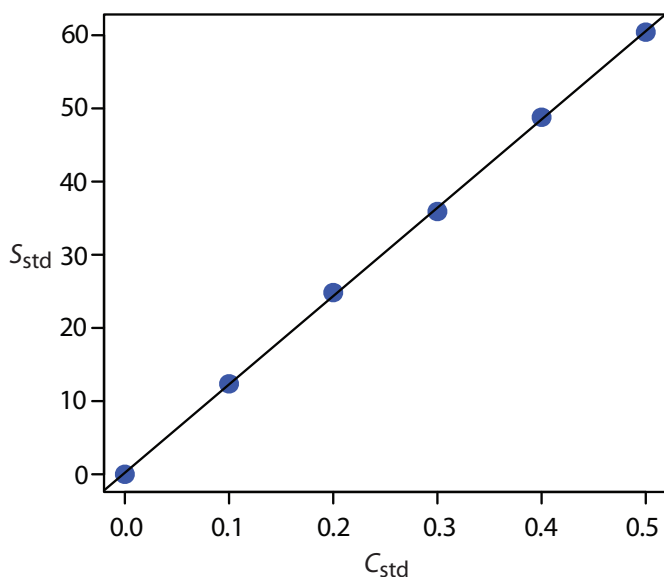


Figure 5.11 Calibration curve for the data in [Table 5.1](#) and [Example 5.9](#).

where y_i is the i_{th} experimental value, and \hat{y}_i is the corresponding value predicted by the regression line in [equation 5.15](#). Note that the denominator of [equation 5.19](#) indicates that our regression analysis has $n-2$ degrees of freedom—we lose two degree of freedom because we use two parameters, the slope and the y -intercept, to calculate \hat{y}_i .

A more useful representation of the uncertainty in our regression is to consider the effect of indeterminate errors on the slope, b_1 , and the y -intercept, b_0 , which we express as standard deviations.

$$s_{b_1} = \sqrt{\frac{ns_r^2}{n\sum_i x_i^2 - \sum_i x_i^2}} = \sqrt{\frac{s_r^2}{\sum_i (x_i - \bar{x})^2}} \quad 5.20$$

$$s_{b_0} = \sqrt{\frac{s_r^2 \sum_i x_i^2}{n\sum_i x_i^2 - \sum_i x_i^2}} = \sqrt{\frac{s_r^2 \sum_i x_i^2}{n\sum_i (x_i - \bar{x})^2}} \quad 5.21$$

We use these standard deviations to establish confidence intervals for the expected slope, β_1 , and the expected y -intercept, β_0

$$\beta_1 = b_1 \pm ts_{b_1} \quad 5.22$$

$$\beta_0 = b_0 \pm ts_{b_0} \quad 5.23$$

where we select t for a significance level of α and for $n-2$ degrees of freedom. Note that [equation 5.22](#) and [equation 5.23](#) do not contain a factor of $(\sqrt{n})^{-1}$ because the confidence interval is based on a single regression line.

Again, many calculators, spreadsheets, and computer software packages provide the standard deviations and confidence intervals for the slope and y -intercept. [Example 5.10](#) illustrates the calculations.

Example 5.10

Calculate the 95% confidence intervals for the slope and y -intercept from [Example 5.9](#).

SOLUTION

We begin by calculating the standard deviation about the regression. To do this we must calculate the predicted signals, \hat{y}_i , using the slope and y -intercept from [Example 5.9](#), and the squares of the residual error, $(y_i - \hat{y}_i)^2$. Using the last standard as an example, we find that the predicted signal is

$$\hat{y}_6 = b_0 + b_1 x_6 = 0.209 + (120.706 \times 0.500) = 60.562$$

and that the square of the residual error is

You might contrast this with [equation 4.12](#) for the confidence interval around a sample's mean value.

As you work through this example, remember that x corresponds to C_{std} , and that y corresponds to S_{std} .

$$(y_i - \hat{y}_i)^2 = (60.42 - 60.562)^2 = 0.2016 \approx 0.202$$

The following table displays the results for all six solutions.

x_i	y_i	\hat{y}_i	$(y_i - \hat{y}_i)^2$
0.000	0.00	0.209	0.0437
0.100	12.36	12.280	0.0064
0.200	24.83	24.350	0.2304
0.300	35.91	36.421	0.2611
0.400	48.79	48.491	0.0894
0.500	60.42	60.562	0.0202

Adding together the data in the last column gives the numerator of [equation 5.19](#) as 0.6512. The standard deviation about the regression, therefore, is

$$s_r = \sqrt{\frac{0.6512}{6-2}} = 0.4035$$

Next we calculate the standard deviations for the slope and the y -intercept using [equation 5.20](#) and [equation 5.21](#). The values for the summation terms are from in [Example 5.9](#).

$$s_{b_1} = \sqrt{\frac{ns_r^2}{n\sum_i x_i^2 - \sum_i x_i^2}} = \sqrt{\frac{6 \times (0.4035)^2}{(6 \times 0.550) - (1.550)^2}} = 0.965$$

$$s_{b_0} = \sqrt{\frac{s_r^2 \sum_i x_i^2}{n\sum_i x_i^2 - \sum_i x_i^2}} = \sqrt{\frac{(0.4035)^2 \times 0.550}{(6 \times 0.550) - (1.550)^2}}$$

Finally, the 95% confidence intervals ($\alpha = 0.05$, 4 degrees of freedom) for the slope and y -intercept are

$$\beta_1 = b_1 \pm t_{s_{b_1}} = 120.706 \pm (2.78 \times 0.965) = 120.7 \pm 2.7$$

$$\beta_0 = b_0 \pm t_{s_{b_0}} = 0.209 \pm (2.78 \times 0.292) = 0.2 \pm 0.8$$

You can find values for t in [Appendix 4](#).

The standard deviation about the regression, s_r , suggests that the signal, S_{std} , is precise to one decimal place. For this reason we report the slope and the y -intercept to a single decimal place.

MINIMIZING UNCERTAINTY IN CALIBRATION CURVES

To minimize the uncertainty in a calibration curve's slope and y -intercept, you should evenly space your standards over a wide range of analyte concentrations. A close examination of [equation 5.20](#) and [equation 5.21](#) will help you appreciate why this is true. The denominators of both equations include the term $\sum (x_i - \bar{x})^2$. The larger the value of this term—which you accomplish by increasing the range of x around its mean value—the smaller the standard deviations in the slope and the y -intercept. Furthermore, to minimize the uncertainty in the y -intercept, it also helps to decrease the value of the term $\sum x_i$ in [equation 5.21](#), which you accomplish by including standards for lower concentrations of the analyte.

OBTAINING THE ANALYTE'S CONCENTRATION FROM A REGRESSION EQUATION

Once we have our regression equation, it is easy to determine the concentration of analyte in a sample. When using a normal calibration curve, for example, we measure the signal for our sample, S_{samp} , and calculate the analyte's concentration, C_A , using the regression equation.

$$C_A = \frac{S_{\text{samp}} - b_0}{b_1} \quad 5.24$$

What is less obvious is how to report a confidence interval for C_A that expresses the uncertainty in our analysis. To calculate a confidence interval we need to know the standard deviation in the analyte's concentration, s_{C_A} , which is given by the following equation

Equation 5.25 is written in terms of a calibration experiment. A more general form of the equation, written in terms of x and y , is given here.

$$s_x = \frac{s_r}{b_1} \sqrt{\frac{1}{m} + \frac{1}{n} + \frac{(\bar{y} - \bar{y})^2}{(b_1)^2 \sum_i (x_i - \bar{x})^2}}$$

A close examination of [equation 5.25](#) should convince you that the uncertainty in C_A is smallest when the sample's average signal, \bar{S}_{samp} , is equal to the average signal for the standards, \bar{S}_{std} . When practical, you should plan your calibration curve so that S_{samp} falls in the middle of the calibration curve.

$$s_{C_A} = \frac{s_r}{b_1} \sqrt{\frac{1}{m} + \frac{1}{n} + \frac{(\bar{S}_{\text{samp}} - \bar{S}_{\text{std}})^2}{(b_1)^2 \sum_i (C_{\text{std}_i} - \bar{C}_{\text{std}})^2}} \quad 5.25$$

where m is the number of replicate used to establish the sample's average signal (\bar{S}_{samp}), n is the number of calibration standards, \bar{S}_{std} is the average signal for the calibration standards, and C_{std_i} and \bar{C}_{std} are the individual and mean concentrations for the calibration standards.⁷ Knowing the value of s_{C_A} , the confidence interval for the analyte's concentration is

$$\mu_{C_A} = C_A \pm t s_{C_A}$$

where μ_{C_A} is the expected value of C_A in the absence of determinate errors, and with the value of t based on the desired level of confidence and $n-2$ degrees of freedom.

⁷ (a) Miller, J. N. *Analyst* **1991**, *116*, 3–14; (b) Sharaf, M. A.; Illman, D. L.; Kowalski, B. R. *Chemometrics*, Wiley-Interscience: New York, 1986, pp. 126–127; (c) Analytical Methods Committee "Uncertainties in concentrations estimated from calibration experiments," AMC Technical Brief, March 2006 (http://www.rsc.org/images/Brief22_tcm18-51117.pdf)

Example 5.11

Three replicate analyses for a sample containing an unknown concentration of analyte, yield values for S_{samp} of 29.32, 29.16 and 29.51. Using the results from [Example 5.9](#) and [Example 5.10](#), determine the analyte's concentration, C_A , and its 95% confidence interval.

SOLUTION

The average signal, \bar{S}_{samp} , is 29.33, which, using [equation 5.24](#) and the slope and the y-intercept from [Example 5.9](#), gives the analyte's concentration as

$$C_A = \frac{\bar{S}_{\text{samp}} - b_0}{b_1} = \frac{29.33 - 0.209}{120.706} = 0.241$$

To calculate the standard deviation for the analyte's concentration we must determine the values for \bar{S}_{std} and $\sum(C_{\text{std}_i} - \bar{C}_{\text{std}})^2$. The former is just the average signal for the calibration standards, which, using the data in [Table 5.1](#), is 30.385. Calculating $\sum(C_{\text{std}_i} - \bar{C}_{\text{std}})^2$ looks formidable, but we can simplify its calculation by recognizing that this sum of squares term is the numerator in a standard deviation equation; thus,

$$\sum(C_{\text{std}_i} - \bar{C}_{\text{std}})^2 = (s_{C_{\text{std}}})^2 \times (n - 1)$$

where $s_{C_{\text{std}}}$ is the standard deviation for the concentration of analyte in the calibration standards. Using the data in [Table 5.1](#) we find that $s_{C_{\text{std}}}$ is 0.1871 and

$$\sum(C_{\text{std}_i} - \bar{C}_{\text{std}})^2 = (0.1871)^2 \times (6 - 1) = 0.175$$

Substituting known values into [equation 5.25](#) gives

$$s_{C_A} = \frac{0.4035}{120.706} \sqrt{\frac{1}{3} + \frac{1}{6} + \frac{(29.33 - 30.385)^2}{(120.706)^2 \times 0.175}} = 0.0024$$

Finally, the 95% confidence interval for 4 degrees of freedom is

$$\mu_{C_A} = C_A \pm ts_{C_A} = 0.241 \pm (2.78 \times 0.0024) = 0.241 \pm 0.007$$

You can find values for t in [Appendix 4](#).

[Figure 5.12](#) shows the calibration curve with curves showing the 95% confidence interval for C_A .

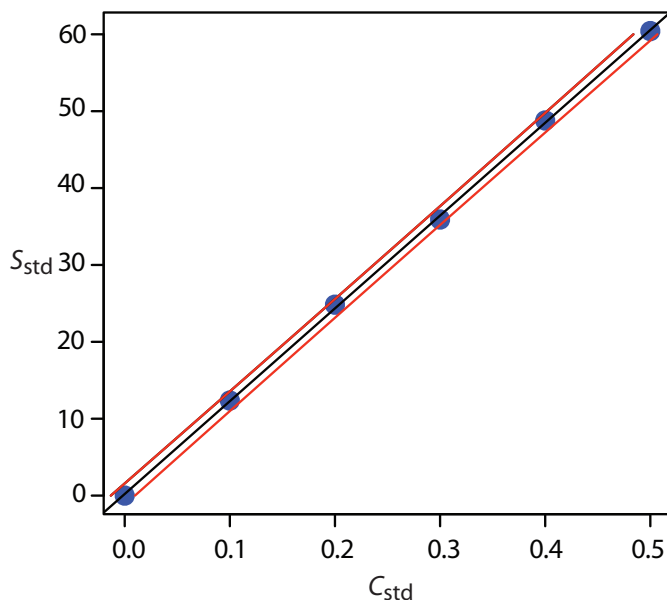


Figure 5.12 Example of a normal calibration curve with a superimposed confidence interval for the analyte's concentration. The points in blue are the original data from [Table 5.1](#). The black line is the normal calibration curve as determined in [Example 5.9](#). The red lines show the 95% confidence interval for C_A assuming a single determination of S_{samp} .

Practice Exercise 5.4

[Figure 5.3](#) shows a normal calibration curve for the quantitative analysis of Cu^{2+} . The data for the calibration curve are shown here.

$[\text{Cu}^{2+}]$ (M)	Absorbance
0	0
1.55×10^{-3}	0.050
3.16×10^{-3}	0.093
4.74×10^{-3}	0.143
6.34×10^{-3}	0.188
7.92×10^{-3}	0.236

Complete a linear regression analysis for this calibration data, reporting the calibration equation and the 95% confidence interval for the slope and the y -intercept. If three replicate samples give an S_{samp} of 0.114, what is the concentration of analyte in the sample and its 95% confidence interval?

Click [here](#) to review your answer to this exercise.

In a standard addition we determine the analyte's concentration by extrapolating the calibration curve to the x -intercept. In this case the value of C_A is

$$C_A = x\text{-intercept} = \frac{-b_0}{b_1}$$

and the standard deviation in C_A is

$$s_{C_A} = \frac{s_r}{b_1} \sqrt{\frac{1}{n} + \frac{(\bar{S}_{\text{std}})^2}{(b_1)^2 \sum_i (C_{\text{std}_i} - \bar{C}_{\text{std}})^2}}$$

where n is the number of standard additions (including the sample with no added standard), and \bar{S}_{std} is the average signal for the n standards. Because we determine the analyte's concentration by extrapolation, rather than by interpolation, s_{C_A} for the method of standard additions generally is larger than for a normal calibration curve.

EVALUATING A LINEAR REGRESSION MODEL

You should never accept the result of a linear regression analysis without evaluating the validity of your model. Perhaps the simplest way to evaluate a regression analysis is to examine the residual errors. As we saw earlier, the residual error for a single calibration standard, r_i , is

$$r_i = (y_i - \hat{y}_i)$$

If your regression model is valid, then the residual errors should be randomly distributed about an average residual error of zero, with no apparent trend toward either smaller or larger residual errors (Figure 5.13a). Trends such as those shown in Figure 5.13b and Figure 5.13c provide evidence that at least one of the model's assumptions is incorrect. For example, a trend toward larger residual errors at higher concentrations, as shown in Figure 5.13b, suggests that the indeterminate errors affecting the signal are not independent of the analyte's concentration. In Figure 5.13c, the residual

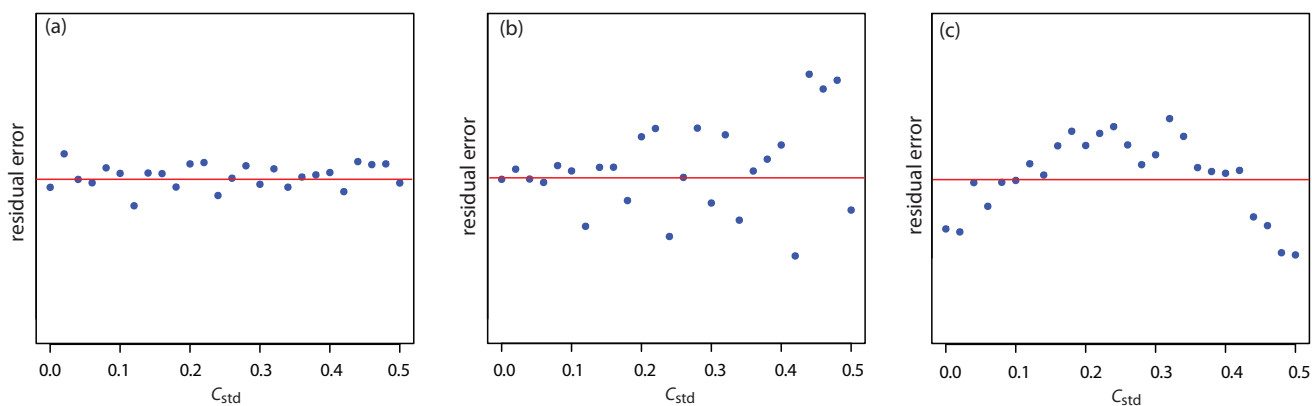


Figure 5.13 Plot of the residual error in the signal, S_{std} , as a function of the concentration of analyte, C_{std} for an unweighted straight-line regression model. The red line shows a residual error of zero. The distribution of the residual error in (a) indicates that the unweighted linear regression model is appropriate. The increase in the residual errors in (b) for higher concentrations of analyte, suggest that a weighted straight-line regression is more appropriate. For (c), the curved pattern to the residuals suggests that a straight-line model is inappropriate; linear regression using a quadratic model might produce a better fit.

Practice Exercise 5.5

Using your results from [Practice Exercise 5.4](#), construct a residual plot and explain its significance.

Click [here](#) to review your answer to this exercise.

errors are not random, suggesting that the data can not be modeled with a straight-line relationship. Regression methods for these two cases are discussed in the following sections.

5D.3 Weighted Linear Regression with Errors in y

Our treatment of linear regression to this point assumes that indeterminate errors affecting y are independent of the value of x . If this assumption is false, as is the case for the data in [Figure 5.13b](#), then we must include the variance for each value of y into our determination of the y -intercept, b_0 , and the slope, b_1 ; thus

$$b_0 = \frac{\sum_i w_i y_i - b_1 \sum_i w_i x_i}{n} \quad 5.26$$

$$b_1 = \frac{n \sum_i w_i x_i y_i - \sum_i w_i x_i \sum_i w_i y_i}{n \sum_i w_i x_i^2 - \sum_i w_i x_i} \quad 5.27$$

where w_i is a weighting factor that accounts for the variance in y_i

$$w_i = \frac{n(s_{y_i})^{-2}}{\sum_i (s_{y_i})^{-2}} \quad 5.28$$

and s_{y_i} is the standard deviation for y_i . In a **WEIGHTED LINEAR REGRESSION**, each xy -pair's contribution to the regression line is inversely proportional to the precision of y_i —that is, the more precise the value of y , the greater its contribution to the regression.

Example 5.12

Shown here are data for an external standardization in which s_{std} is the standard deviation for three replicate determination of the signal.

C_{std} (arbitrary units)	S_{std} (arbitrary units)	s_{std}
0.000	0.00	0.02
0.100	12.36	0.02
0.200	24.83	0.07



This is the same data used in [Example 5.9](#) with additional information about the standard deviations in the signal.

0.300	35.91	0.13
0.400	48.79	0.22
0.500	60.42	0.33

As you work through this example, remember that x corresponds to C_{std} , and that y corresponds to S_{std} .

Determine the calibration curve's equation using a weighted linear regression.

SOLUTION

We begin by setting up a table to aid in calculating the weighting factors.

x_i	y_i	s_{y_i}	$(s_{y_i})^{-2}$	w_i
0.000	0.00	0.02	2500.00	2.8339
0.100	12.36	0.02	2500.00	2.8339
0.200	24.83	0.07	204.08	0.2313
0.300	35.91	0.13	59.17	0.0671
0.400	48.79	0.22	20.66	0.0234
0.500	60.42	0.33	9.18	0.0104

As a check on your calculations, the sum of the individual weights must equal the number of calibration standards, n . The sum of the entries in the last column is 6.0000, so all is well.

Adding together the values in the fourth column gives

$$\sum_i (s_{y_i})^{-2} = 5293.09$$

which we use to calculate the individual weights in the last column. After calculating the individual weights, we use a second table to aid in calculating the four summation terms in [equation 5.26](#) and [equation 5.27](#).

x_i	y_i	w_i	$w_i x_i$	$w_i y_i$	$w_i x_i^2$	$w_i x_i y_i$
0.000	0.00	2.8339	0.0000	0.0000	0.0000	0.0000
0.100	12.36	2.8339	0.2834	35.0270	0.0283	3.5027
0.200	24.83	0.2313	0.0463	5.7432	0.0093	1.1486
0.300	35.91	0.0671	0.0201	2.4096	0.0060	0.7229
0.400	48.79	0.0234	0.0094	1.1417	0.0037	0.4567
0.500	60.42	0.0104	0.0052	0.6284	0.0026	0.3142

Adding the values in the last four columns gives

$$\begin{aligned} \sum_i w_i x_i &= 0.3644 & \sum_i w_i y_i &= 44.9499 \\ \sum_i w_i x_i^2 &= 0.0499 & \sum_i w_i x_i y_i &= 6.1451 \end{aligned}$$

Substituting these values into the [equation 5.26](#) and [equation 5.27](#) gives the estimated slope and estimated y -intercept as

$$b_1 = \frac{(6 \times 6.1451) - (0.3644 \times 44.9499)}{(6 \times 0.0499) - (0.3644)^2} = 122.985$$

$$b_0 = \frac{44.9499 - (122.985 \times 0.3644)}{6} = 0.0224$$

The calibration equation is

$$S_{\text{std}} = 122.98 \times C_{\text{std}} + 0.02$$

Figure 5.14 shows the calibration curve for the weighted regression and the calibration curve for the unweighted regression in [Example 5.9](#). Although the two calibration curves are very similar, there are slight differences in the slope and in the y -intercept. Most notably, the y -intercept for the weighted linear regression is closer to the expected value of zero. Because the standard deviation for the signal, S_{std} , is smaller for smaller concentrations of analyte, C_{std} , a weighted linear regression gives more emphasis to these standards, allowing for a better estimate of the y -intercept.

Equations for calculating confidence intervals for the slope, the y -intercept, and the concentration of analyte when using a weighted linear regression are not as easy to define as for an unweighted linear regression.⁸ The confidence interval for the analyte's concentration, however, is at its

⁸ Bonate, P. J. *Anal. Chem.* **1993**, *65*, 1367–1372.

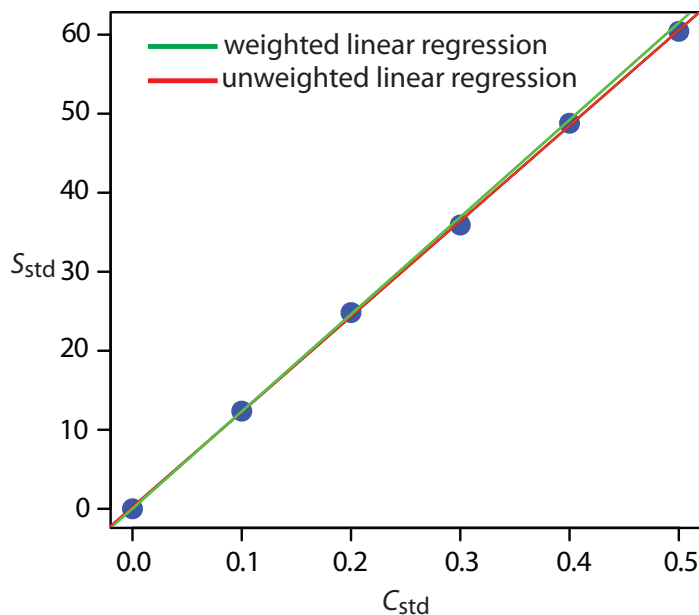


Figure 5.14 A comparison of unweighted and weighted normal calibration curves. See [Example 5.9](#) for details of the unweighted linear regression and [Example 5.12](#) for details of the weighted linear regression.

optimum value when the analyte's signal is near the weighted centroid, y_c , of the calibration curve.

$$y_c = \frac{1}{n} \sum_i w_i x_i$$

5D.4 Weighted Linear Regression with Errors in Both x and y

If we remove our assumption that the indeterminate errors affecting a calibration curve exist only in the signal (y), then we also must factor into the regression model the indeterminate errors affecting the analyte's concentration in the calibration standards (x). The solution for the resulting regression line is computationally more involved than that for either the unweighted or weighted regression lines.⁹ Although we will not consider the details in this textbook, you should be aware that neglecting the presence of indeterminate errors in x can bias the results of a linear regression.

See [Figure 5.2](#) for an example of a calibration curve that deviates from a straight-line for higher concentrations of analyte.

5D.5 Curvilinear and Multivariate Regression

A straight-line regression model, despite its apparent complexity, is the simplest functional relationship between two variables. What do we do if our calibration curve is curvilinear—that is, if it is a curved-line instead of a straight-line? One approach is to try transforming the data into a straight-line. Logarithms, exponentials, reciprocals, square roots, and trigonometric functions have been used in this way. A plot of $\log(y)$ versus x is a typical example. Such transformations are not without complications. Perhaps the most obvious complication is that data with a uniform variance in y will not maintain that uniform variance after the transformation.

Another approach to developing a linear regression model is to fit a polynomial equation to the data, such as $y = a + bx + cx^2$. You can use linear regression to calculate the parameters a , b , and c , although the equations are different than those for the linear regression of a straight line.¹⁰ If you cannot fit your data using a single polynomial equation, it may be possible to fit separate polynomial equations to short segments of the calibration curve. The result is a single continuous calibration curve known as a spline function.

The regression models in this chapter apply only to functions containing a single independent variable, such as a signal that depends upon the analyte's concentration. In the presence of an interferent, however, the signal may depend on the concentrations of both the analyte and the interferent

It is worth noting that in mathematics, the term “linear” does not mean a straight-line. A linear function may contain many additive terms, but each term can have one and only one adjustable parameter. The function

$$y = ax + bx^2$$

is linear, but the function

$$y = ax^b$$

is nonlinear. This is why you can use linear regression to fit a polynomial equation to your data.

Sometimes it is possible to transform a nonlinear function. For example, taking the log of both sides of the nonlinear function shown above gives a linear function.

$$\log(y) = \log(a) + b\log(x)$$

9 See, for example, Analytical Methods Committee, “Fitting a linear functional relationship to data with error on both variable,” AMC Technical Brief, March, 2002 (http://www.rsc.org/im-ages/brief10_tcm18-25920.pdf).

10 For details about curvilinear regression, see (a) Sharaf, M. A.; Illman, D. L.; Kowalski, B. R. *Chemometrics*, Wiley-Interscience: New York, 1986; (b) Deming, S. N.; Morgan, S. L. *Experimental Design: A Chemometric Approach*, Elsevier: Amsterdam, 1987.

Check out the [Additional Resources](#) at the end of the textbook for more information about linear regression with errors in both variables, curvilinear regression, and multivariate regression.

$$S = k_A C_A + k_I C_I + S_{\text{reag}}$$

where k_I is the interferent's sensitivity and C_I is the interferent's concentration. Multivariate calibration curves can be prepared using standards that contain known amounts of both the analyte and the interferent, and modeled using multivariate regression.¹¹

5E Blank Corrections

Thus far in our discussion of strategies for standardizing analytical methods, we have assumed the use of a suitable reagent blank to correct for signals arising from sources other than the analyte. We did not, however ask an important question—"What constitutes an appropriate reagent blank?" Surprisingly, the answer is not immediately obvious.

In one study, approximately 200 analytical chemists were asked to evaluate a data set consisting of a normal calibration curve, a separate analyte-free blank, and three samples of different size but drawn from the same source.¹² The first two columns in Table 5.3 shows a series of external standards and their corresponding signals. The normal calibration curve for the data is

$$S_{\text{std}} = 0.0750 \times W_{\text{std}} + 0.1250$$

where the y -intercept of 0.1250 is the calibration blank. A separate reagent blank gives the signal for an analyte-free sample.

In working up this data, the analytical chemists used at least four different approaches for correcting signals: (a) ignoring both the calibration blank, CB, and the reagent blank, RB, which clearly is incorrect; (b) using the calibration blank only; (c) using the reagent blank only; and (d) using both the calibration blank and the reagent blank. [Table 5.4](#) shows the equa-

11 Beebe, K. R.; Kowalski, B. R. *Anal. Chem.* **1987**, *59*, 1007A–1017A.

12 Cardone, M. J. *Anal. Chem.* **1986**, *58*, 433–438.

Table 5.3 Data Used to Study the Blank in an Analytical Method

W_{std}	S_{std}	Sample Number	W_{samp}	S_{samp}
1.6667	0.2500	1	62.4746	0.8000
5.0000	0.5000	2	82.7915	1.0000
8.3333	0.7500	3	103.1085	1.2000
11.6667	0.8413			
18.1600	1.4870		reagent blank	0.1000
19.9333	1.6200			

$$\text{Calibration equation: } S_{\text{std}} = 0.0750 \times W_{\text{std}} + 0.1250$$

W_{std} : weight of analyte used to prepare the external standard; diluted to volume, V .

W_{samp} : weight of sample used to prepare sample; diluted to volume, V .

Table 5.4 Equations and Resulting Concentrations of Analyte for Different Approaches to Correcting for the Blank

Approach for Correcting Signal	Equation	Concentration of Analyte in...		
		Sample 1	Sample 2	Sample 3
ignore calibration and reagent blank	$C_A = \frac{W_A}{W_{\text{samp}}} = \frac{S_{\text{samp}}}{k_A W_{\text{samp}}}$	0.1707	0.1610	0.1552
use calibration blank only	$C_A = \frac{W_A}{W_{\text{samp}}} = \frac{S_{\text{samp}} - \text{CB}}{k_A W_{\text{samp}}}$	0.1441	0.1409	0.1390
use reagent blank only	$C_A = \frac{W_A}{W_{\text{samp}}} = \frac{S_{\text{samp}} - \text{RB}}{k_A W_{\text{samp}}}$	0.1494	0.1449	0.1422
use both calibration and reagent blank	$C_A = \frac{W_A}{W_{\text{samp}}} = \frac{S_{\text{samp}} - \text{CB} - \text{RB}}{k_A W_{\text{samp}}}$	0.1227	0.1248	0.1261
use total Youden blank	$C_A = \frac{W_A}{W_{\text{samp}}} = \frac{S_{\text{samp}} - \text{TYB}}{k_A W_{\text{samp}}}$	0.1313	0.1313	0.1313

C_A = concentration of analyte; W_A = weight of analyte; W_{samp} = weight of sample; k_A = slope of calibration curve (0.075—see [Table 5.3](#)); CB = calibration blank (0.125—see [Table 5.3](#)); RB = reagent blank (0.100—see [Table 5.3](#)); TYB = total Youden blank (0.185—see text)

tions for calculating the analyte's concentration using each approach, along with the resulting concentration for the analyte in each sample.

That all four methods give a different result for the analyte's concentration underscores the importance of choosing a proper blank, but does not tell us which blank is correct. Because all four methods fail to predict the same concentration of analyte for each sample, none of these blank corrections properly accounts for an underlying constant source of determinate error.

To correct for a constant method error, a blank must account for signals from any reagents and solvents used in the analysis, as well as any bias resulting from interactions between the analyte and the sample's matrix. Both the calibration blank and the reagent blank compensate for signals from reagents and solvents. Any difference in their values is due to indeterminate errors in preparing and analyzing the standards.

Unfortunately, neither a calibration blank nor a reagent blank can correct for a bias resulting from an interaction between the analyte and the sample's matrix. To be effective, the blank must include both the sample's matrix and the analyte and, consequently, must be determined using the sample itself. One approach is to measure the signal for samples of different size, and to determine the regression line for a plot of S_{samp} versus the

Because we are considering a matrix effect of sorts, you might think that the method of standard additions is one way to overcome this problem. Although the method of standard additions can compensate for proportional determinate errors, it cannot correct for a constant determinate error; see Ellison, S. L. R.; Thompson, M. T. "Standard additions: myth and reality," *Analyst*, **2008**, *133*, 992–997.

amount of sample. The resulting y -intercept gives the signal in the absence of sample, and is known as the **TOTAL YOUTEN BLANK**.¹³ This is the true blank correction. The regression line for the three samples in [Table 5.3](#) is

$$S_{\text{samp}} = 0.009844 \times W_{\text{samp}} + 0.185$$

giving a true blank correction of 0.185. As shown by the last row of [Table 5.4](#), using this value to correct S_{samp} gives identical values for the concentration of analyte in all three samples.

The use of the total Youden blank is not common in analytical work, with most chemists relying on a calibration blank when using a calibration curve, and a reagent blank when using a single-point standardization. As long we can ignore any constant bias due to interactions between the analyte and the sample's matrix, which is often the case, the accuracy of an analytical method will not suffer. It is a good idea, however, to check for constant sources of error before relying on either a calibration blank or a reagent blank.

5F Using Excel and R for a Regression Analysis

Although the calculations in this chapter are relatively straightforward—consisting, as they do, mostly of summations—it can be quite tedious to work through problems using nothing more than a calculator. Both Excel and R include functions for completing a linear regression analysis and for visually evaluating the resulting model.

5F.1 Excel

Let's use Excel to fit the following straight-line model to the data in [Example 5.9](#).

$$y = \beta_0 + \beta_1 x$$

Enter the data into a spreadsheet, as shown in [Figure 5.15](#). Depending upon your needs, there are many ways that you can use Excel to complete a linear regression analysis. We will consider three approaches here.

USE EXCEL'S BUILT-IN FUNCTIONS

If all you need are values for the slope, β_1 , and the y -intercept, β_0 , you can use the following functions:

$$=\text{intercept}(\textit{known_y's}, \textit{known_x's})$$

$$=\text{slope}(\textit{known_y's}, \textit{known_x's})$$

where *known_y's* is the range of cells containing the signals (y), and *known_x's* is the range of cells containing the concentrations (x). For example, clicking on an empty cell and entering

	A	B
1	Cstd	Sstd
2	0.000	0.00
3	0.100	12.36
4	0.200	24.83
5	0.300	35.91
6	0.400	48.79
7	0.500	60.42

Figure 5.15 Portion of a spreadsheet containing data from [Example 5.9](#) (Cstd = C_{std} ; Sstd = S_{std}).

¹³ Cardone, M. J. *Anal. Chem.* **1986**, *58*, 438–445.

=slope(B2:B7, A2:A7)

returns Excel's exact calculation for the slope (120.7057143).

USE EXCEL'S DATA ANALYSIS TOOLS

To obtain the slope and the y -intercept, along with additional statistical details, you can use the data analysis tools in the Analysis ToolPak. The ToolPak is not a standard part of Excel's installation. To see if you have access to the Analysis ToolPak on your computer, select **Tools** from the menu bar and look for the **Data Analysis...** option. If you do not see **Data Analysis...**, select **Add-ins...** from the **Tools** menu. Check the box for the **Analysis ToolPak** and click on **OK** to install them.

Select **Data Analysis...** from the **Tools** menu, which opens the *Data Analysis* window. Scroll through the window, select **Regression** from the available options, and press **OK**. Place the cursor in the box for *Input Y range* and then click and drag over cells B1:B7. Place the cursor in the box for *Input X range* and click and drag over cells A1:A7. Because cells A1 and B1 contain labels, check the box for *Labels*. Select the radio button for *Output range* and click on any empty cell; this is where Excel will place the results. Clicking **OK** generates the information shown in Figure 5.16.

There are three parts to Excel's summary of a regression analysis. At the top of Figure 5.16 is a table of *Regression Statistics*. The *standard error* is the standard deviation about the regression, s_r . Also of interest is the value for *Multiple R*, which is the model's correlation coefficient, r , a term with which you may already be familiar. The correlation coefficient is a measure of the extent to which the regression model explains the variation in y . Values of r range from -1 to $+1$. The closer the correlation coefficient is to ± 1 , the better the model is at explaining the data. A correlation coefficient of 0 means that there is no relationship between x and y . In developing the calculations for linear regression, we did not consider the correlation coefficient. There

Once you install the Analysis ToolPak, it will continue to load each time you launch Excel.

Including labels is a good idea. Excel's summary output uses the x -axis label to identify the slope.

SUMMARY OUTPUT

<i>Regression Statistics</i>	
Multiple R	0.99987244
R Square	0.9997449
Adjusted R Square	0.99968113
Standard Error	0.40329713
Observations	6

ANOVA

	<i>df</i>	<i>SS</i>	<i>MS</i>	<i>F</i>	<i>Significance F</i>
Regression	1	2549.727156	2549.72716	15676.296	2.4405E-08
Residual	4	0.650594286	0.16264857		
Total	5	2550.37775			

	<i>Coefficients</i>	<i>Standard Error</i>	<i>t Stat</i>	<i>P-value</i>	<i>Lower 95%</i>	<i>Upper 95%</i>	<i>Lower 95.0%</i>	<i>Upper 95.0%</i>
Intercept	0.20857143	0.29188503	0.71456706	0.51436267	-0.60183133	1.01897419	-0.60183133	1.01897419
Cstd	120.705714	0.964064525	125.205016	2.4405E-08	118.029042	123.382387	118.029042	123.382387

Figure 5.16 Output from Excel's Regression command in the Analysis ToolPak. See the text for a discussion of how to interpret the information in these tables.

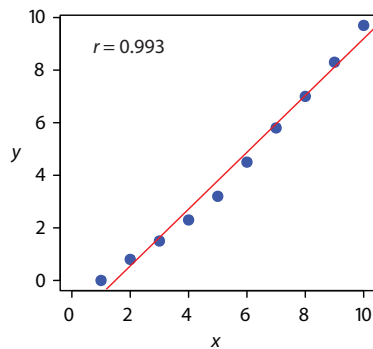


Figure 5.17 Example of fitting a straight-line to curvilinear data.

See [Section 4F.2](#) and [Section 4F.3](#) for a review of the *F*-test.

is a reason for this. For most straight-line calibration curves the correlation coefficient will be very close to +1, typically 0.99 or better. There is a tendency, however, to put too much faith in the correlation coefficient's significance, and to assume that an r greater than 0.99 means the linear regression model is appropriate. Figure 5.17 provides a counterexample. Although the regression line has a correlation coefficient of 0.993, the data clearly shows evidence of being curvilinear. The take-home lesson here is: don't fall in love with the correlation coefficient!

The second table in [Figure 5.16](#) is entitled *ANOVA*, which stands for *analysis of variance*. We will take a closer look at ANOVA in Chapter 14. For now, it is sufficient to understand that this part of Excel's summary provides information on whether the linear regression model explains a significant portion of the variation in the values of y . The value for F is the result of an F -test of the following null and alternative hypotheses.

H_0 : regression model does not explain the variation in y

H_A : regression model does explain the variation in y

The value in the column for *Significance F* is the probability for retaining the null hypothesis. In this example, the probability is $2.5 \times 10^{-6}\%$, suggesting that there is strong evidence for accepting the regression model. As is the case with the correlation coefficient, a small value for the probability is a likely outcome for any calibration curve, even when the model is inappropriate. The probability for retaining the null hypothesis for the data in Figure 5.17, for example, is $9.0 \times 10^{-7}\%$.

The third table in [Figure 5.16](#) provides a summary of the model itself. The values for the model's coefficients—the slope, β_1 , and the y -intercept, β_0 —are identified as *intercept* and with your label for the x -axis data, which in this example is *Cstd*. The standard deviations for the coefficients, s_{b_0} and s_{b_1} , are in the column labeled *Standard error*. The column *t Stat* and the column *P-value* are for the following t -tests.

slope $H_0: \beta_1 = 0, H_A: \beta_1 \neq 0$

y -intercept $H_0: \beta_0 = 0, H_A: \beta_0 \neq 0$

The results of these t -tests provide convincing evidence that the slope is not zero, but no evidence that the y -intercept significantly differs from zero. Also shown are the 95% confidence intervals for the slope and the y -intercept (*lower 95%* and *upper 95%*).

PROGRAM THE FORMULAS YOURSELF

A third approach to completing a regression analysis is to program a spreadsheet using Excel's built-in formula for a summation

=sum(*first cell:last cell*)

and its ability to parse mathematical equations. The resulting spreadsheet is shown in [Figure 5.18](#).

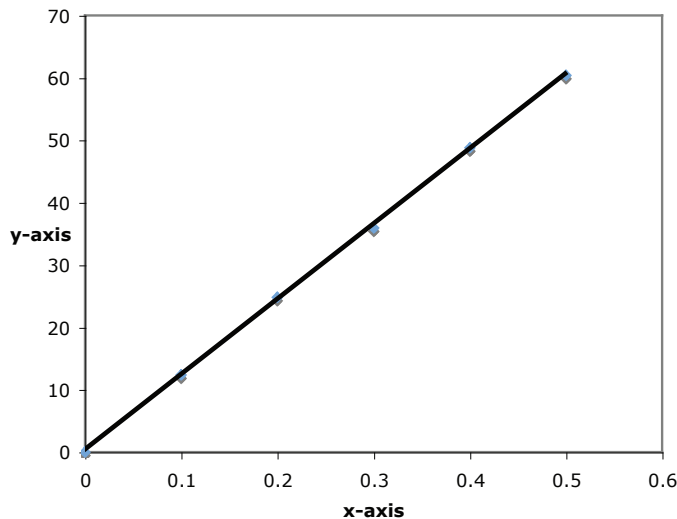
See [Section 4F.1](#) for a review of the t -test.

	A	B	C	D	E	F
1	x	y	xy	x ²	n =	6
2	0.000	0.00	=A2*B2	=A2^2	slope =	=(F1*C8 - A8*B8)/(F1*D8-A8^2)
3	0.100	12.36	=A3*B3	=A3^2	y-int =	=(B8-F2*A8)/F1
4	0.200	24.83	=A4*B4	=A4^2		
5	0.300	35.91	=A5*B5	=A5^2		
6	0.400	48.79	=A6*B6	=A6^2		
7	0.500	60.42	=A7*B7	=A7^2		
8						
9	=sum(A2:A7)	=sum(B2:B7)	=sum(C2:C7)	=sum(D2:D7)	<--sums	

Figure 5.18 Spreadsheet showing the formulas for calculating the slope and the y-intercept for the data in [Example 5.9](#). The cells with the shading contain formulas that you must enter. Enter the formulas in cells C3 to C7, and cells D3 to D7. Next, enter the formulas for cells A9 to D9. Finally, enter the formulas in cells F2 and F3. When you enter a formula, Excel replaces it with the resulting calculation. The values in these cells should agree with the results in [Example 5.9](#). You can simplify the entering of formulas by copying and pasting. For example, enter the formula in cell C2. Select **Edit: Copy**, click and drag your cursor over cells C3 to C7, and select **Edit: Paste**. Excel automatically updates the cell referencing.

USING EXCEL TO VISUALIZE THE REGRESSION MODEL

You can use Excel to examine your data and the regression line. Begin by plotting the data. Organize your data in two columns, placing the x values in the left-most column. Click and drag over the data and select **Insert: Chart...** from the main menu. This launches Excel's *Chart Wizard*. Select **xy-chart**, choosing the option without lines connecting the points. Click on **Next** and work your way through the screens, tailoring the plot to meet your needs. To add a regression line to the chart, click on the chart and select **Chart: Add Trendline...** from the main menu. Pick the straight-line model and click **OK** to add the line to your chart. By default, Excel displays the regression line from your first point to your last point. Figure 5.19 shows the result for the data in [Figure 5.15](#).



Excel's default options for xy -charts do not make for particularly attractive scientific figures. For example, Excel automatically adds grid lines parallel to the x -axis, which is a common practice in business charts. You can deselect them using the *Grid lines* tab in the *Chart Wizard*. Excel also defaults to a gray background. To remove this, just double-click on the chart's background and select *none* in the resulting pop-up window.

Figure 5.19 Example of an Excel scatterplot showing the data and a regression line.

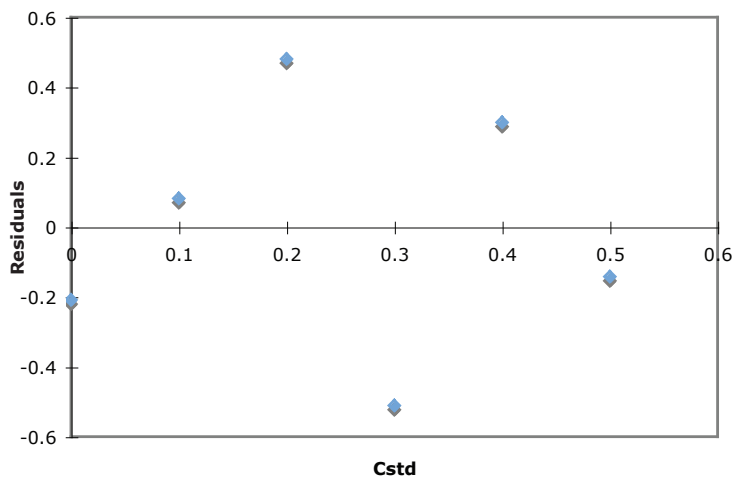


Figure 5.20 Example of Excel's plot of a regression model's residual errors.

Excel also will create a plot of the regression model's residual errors. To create the plot, build the regression model using the Analysis ToolPak, as described [earlier](#). Clicking on the option for *Residual plots* creates the plot shown in Figure 5.20.

LIMITATIONS TO USING EXCEL FOR A REGRESSION ANALYSIS

Excel's biggest limitation for a regression analysis is that it does not provide a function for calculating the uncertainty when predicting values of x . In terms of this chapter, Excel can not calculate the uncertainty for the analyte's concentration, C_A , given the signal for a sample, S_{sample} . Another limitation is that Excel does not include a built-in function for a weighted linear regression. You can, however, program a spreadsheet to handle these calculations.

Practice Exercise 5.6

Use Excel to complete the regression analysis in [Practice Exercise 5.4](#).

Click [here](#) to review your answer to this exercise.

5F.2 R

Let's use Excel to fit the following straight-line model to the data in [Example 5.9](#).

$$y = \beta_0 + \beta_1 x$$

ENTERING DATA AND CREATING THE REGRESSION MODEL

To begin, create objects containing the concentration of the standards and their corresponding signals.

```
> conc = c(0, 0.1, 0.2, 0.3, 0.4, 0.5)
```

```
> signal = c(0, 12.36, 24.83, 35.91, 48.79, 60.42)
```

The command for creating a straight-line linear regression model is

$$\text{lm}(y \sim x)$$

where y and x are the objects containing our data. To access the results of the regression analysis, we assign them to an object using the following command

```
> model = lm(signal ~ conc)
```

where *model* is the name we assign to the object.

You can choose any name for the object containing the results of the regression analysis.

EVALUATING THE LINEAR REGRESSION MODEL

To evaluate the results of a linear regression we need to examine the data and the regression line, and to review a statistical summary of the model. To examine our data and the regression line, we use the **plot** command, which takes the following general form

```
plot(x, y, optional arguments to control style)
```

where x and y are objects containing our data, and the **abline** command

```
abline(object, optional arguments to control style)
```

where *object* is the object containing the results of the linear regression. Entering the commands

```
> plot(conc, signal, pch = 19, col = "blue", cex = 2)
> abline(model, col = "red")
```

creates the plot shown in Figure 5.21.

To review a statistical summary of the regression model, we use the **summary** command.

```
> summary(model)
```

The resulting output, shown in [Figure 5.22](#), contains three sections.

The first section of R's summary of the regression model lists the residual errors. To examine a plot of the residual errors, use the command

```
> plot(model, which=1)
```

The name **abline** comes from the following common form for writing the equation of a straight-line.

$$y = a + bx$$

The reason for including the argument *which=1* is not immediately obvious. When you use R's *plot* command on an object created by the *lm* command, the default is to create four charts summarizing the model's suitability. The first of these charts is the residual plot; thus, *which=1* limits the output to this plot.

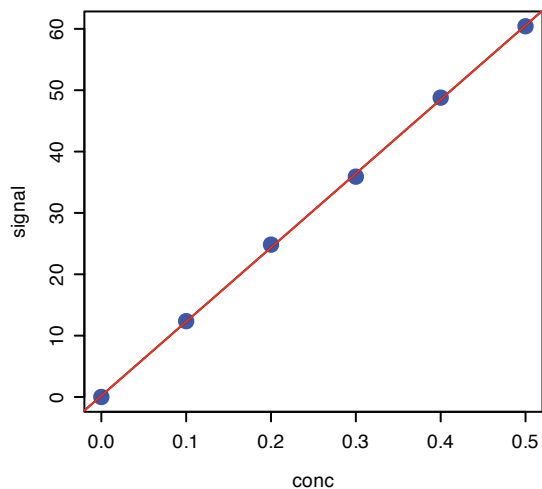


Figure 5.21 Example of a regression plot in R showing the data and the regression line. You can customize your plot by adjusting the plot command's optional arguments. The argument *pch* controls the symbol used for plotting points, the argument *col* allows you to select a color for the points or the line, and the argument *cex* sets the size for the points. You can use the command

```
help(plot)
```

to learn more about the options for plotting data in R.

```

> model=lm(signal~conc)
> summary(model)

Call:
lm(formula = signal ~ conc)

Residuals:
    1     2     3     4     5     6 
-0.20857  0.08086  0.48029 -0.51029  0.29914 -0.14143 

Coefficients:
            Estimate Std. Error t value Pr(>|t|)
(Intercept)  0.2086   0.2919   0.715   0.514
conc       120.7057   0.9641  125.205 2.44e-08 ***
---
Signif. codes:  0 '***' 0.001 '**' 0.01 '*' 0.05 '.' 0.1 ' ' 1

Residual standard error: 0.4033 on 4 degrees of freedom
Multiple R-Squared: 0.9997, Adjusted R-squared: 0.9997
F-statistic: 1.568e+04 on 1 and 4 DF, p-value: 2.441e-08

```

Figure 5.22 The summary of R's regression analysis. See the text for a discussion of how to interpret the information in the output's three sections.

which produces the result shown in Figure 5.23. Note that R plots the residuals against the predicted (fitted) values of y instead of against the known values of x . The choice of how to plot the residuals is not critical, as you can see by comparing Figure 5.23 to [Figure 5.20](#). The line in Figure 5.23 is a smoothed fit of the residuals.

The second section of Figure 5.22 provides the model's coefficients—the slope, β_1 , and the y -intercept, β_0 —along with their respective standard deviations (*Std. Error*). The column *t value* and the column $Pr(>|t|)$ are for the following t -tests.

$$\text{slope } H_0: \beta_1 = 0, H_A: \beta_1 \neq 0$$

$$y\text{-intercept } H_0: \beta_0 = 0, H_A: \beta_0 \neq 0$$

See [Section 4F.1](#) for a review of the t -test.

The results of these t -tests provide convincing evidence that the slope is not zero, but no evidence that the y -intercept significantly differs from zero.

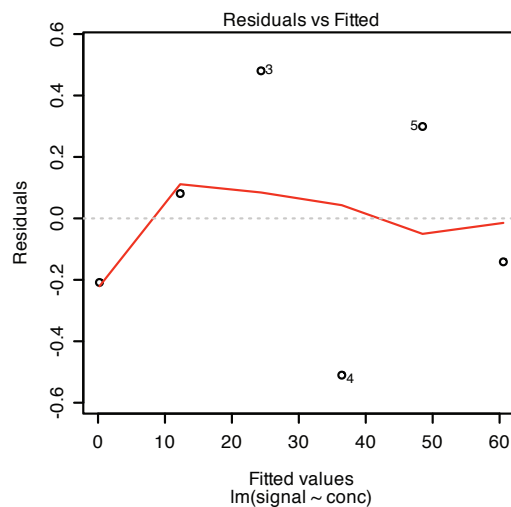


Figure 5.23 Example showing R's plot of a regression model's residual error.

The last section of the regression summary provides the standard deviation about the regression (*residual standard error*), the square of the correlation coefficient (*multiple R-squared*), and the result of an *F*-test on the model's ability to explain the variation in the *y* values. For a discussion of the correlation coefficient and the *F*-test of a regression model, as well as their limitations, refer to the section on using [Excel's data analysis tools](#).

See [Section 4F.2](#) and [Section 4F.3](#) for a review of the *F*-test.

PREDICTING THE UNCERTAINTY IN C_A GIVEN S_{SAMP}

Unlike Excel, R includes a command for predicting the uncertainty in an analyte's concentration, C_A , given the signal for a sample, S_{SAMP} . This command is not part of R's standard installation. To use the command you need to install the "chemCal" package by entering the following command (*note: you will need an internet connection to download the package*).

```
> install.packages("chemCal")
```

After installing the package, you will need to load the functions into R using the following command. (*note: you will need to do this step each time you begin a new R session as the package does not automatically load when you start R*).

```
> library("chemCal")
```

The command for predicting the uncertainty in C_A is **inverse.predict**, which takes the following form for an unweighted linear regression

```
inverse.predict(object, newdata, alpha = value)
```

where *object* is the object containing the regression model's results, *newdata* is an object containing values for S_{SAMP} , and *value* is the numerical value for the significance level. Let's use this command to complete [Example 5.11](#). First, we create an object containing the values of S_{SAMP}

```
> sample = c(29.32, 29.16, 29.51)
```

and then we complete the computation using the following command

```
> inverse.predict(model, sample, alpha = 0.05)
```

producing the result shown in [Figure 5.24](#). The analyte's concentration, C_A , is given by the value *\$Prediction*, and its standard deviation, s_{C_A} , is shown as *\$`Standard Error`*. The value for *\$Confidence* is the confidence interval, $\pm ts_{C_A}$, for the analyte's concentration, and *\$`Confidence Limits`* provides the lower limit and upper limit for the confidence interval for C_A .

USING R FOR A WEIGHTED LINEAR REGRESSION

R's command for an unweighted linear regression also allows for a weighted linear regression by including an additional argument, *weights*, whose value is an object containing the weights.

```
lm(y ~ x, weights = object)
```

You need to install a package once, but you need to load the package each time you plan to use it. There are ways to configure R so that it automatically loads certain packages; see *An Introduction to R* for more information (click [here](#) to view a PDF version of this document).

```
> inverse.predict(model, sample, alpha = 0.05)
$Prediction
[1] 0.2412597

$`Standard Error`
[1] 0.002363588

$Confidence
[1] 0.006562373

$`Confidence Limits`
[1] 0.2346974 0.2478221
```

Figure 5.24 Output from R's command for predicting the analyte's concentration, C_A , from the sample's signal, S_{sample} .

You may have noticed that this way of defining weights is different than that shown in [equation 5.28](#). In deriving equations for a weighted linear regression, you can choose to normalize the sum of the weights to equal the number of points, or you can choose not to—the algorithm in R does not normalize the weights.

Let's use this command to complete [Example 5.12](#). First, we need to create an object containing the weights, which in R are the reciprocals of the standard deviations in y , $(s_{y_i})^{-2}$. Using the data from [Example 5.12](#), we enter

```
> syi=c(0.02, 0.02, 0.07, 0.13, 0.22, 0.33)
> w=1/syi^2
```

to create the object containing the weights. The commands

```
> modelw = lm(signal ~ conc, weights = w)
> summary(modelw)
```

generate the output shown in [Figure 5.25](#). Any difference between the results shown here and the results shown in [Example 5.12](#) are the result of round-off errors in our earlier calculations.

Practice Exercise 5.7

Use Excel to complete the regression analysis in [Practice Exercise 5.4](#).

Click [here](#) to review your answer to this exercise.

```
> modelw=lm(signal~conc, weights = w)
> summary(modelw)

Call:
lm(formula = signal ~ conc, weights = w)

Residuals:
    1     2     3     4     5     6 
-2.223  2.571  3.676 -7.129 -1.413 -2.864 

Coefficients:
            Estimate Std. Error t value Pr(>|t|)
(Intercept)  0.04446   0.08542    0.52   0.63
conc       122.64111   0.93590  131.04  2.03e-08 ***
---
Signif. codes:  0 '***' 0.001 '**' 0.01 '*' 0.05 '.' 0.1 ' ' 1

Residual standard error: 4.639 on 4 degrees of freedom
Multiple R-Squared: 0.9998, Adjusted R-squared: 0.9997
F-statistic: 1.717e+04 on 1 and 4 DF, p-value: 2.034e-08
```

Figure 5.25 The summary of R's regression analysis for a weighted linear regression. The types of information shown here is identical to that for the unweighted linear regression in [Figure 5.22](#).

5G Key Terms

external standard	internal standard	linear regression
matrix matching	method of standard additions	multiple-point standardization
normal calibration curve	primary standard	reagent grade
residual error	secondary standard	serial dilution
single-point standardization	standard deviation about the regression	total Youden blank
unweighted linear regression	weighted linear regression	

As you review this chapter, try to define a key term in your own words. Check your answer by clicking on the key term, which will take you to the page where it was first introduced. Clicking on the **KEY TERM** there, will bring you back to this page so that you can continue with another key term.

5H Chapter Summary

In a quantitative analysis we measure a signal, S_{total} , and calculate the amount of analyte, n_A or C_A , using one of the following equations.

$$S_{\text{total}} = k_A n_A + S_{\text{reag}}$$

$$S_{\text{total}} = k_A C_A + S_{\text{reag}}$$

To obtain an accurate result we must eliminate determinate errors affecting the signal, S_{total} , the method's sensitivity, k_A , and the signal due to the reagents, S_{reag} .

To ensure that we accurately measure S_{total} , we calibrate our equipment and instruments. To calibrate a balance, for example, we use a standard weight of known mass. The manufacturer of an instrument usually suggests appropriate calibration standards and calibration methods.

To standardize an analytical method we determine its sensitivity. There are several standardization strategies, including external standards, the method of standard addition and internal standards. The most common strategy is a multiple-point external standardization, resulting in a normal calibration curve. We use the method of standard additions, in which known amounts of analyte are added to the sample, when the sample's matrix complicates the analysis. When it is difficult to reproducibly handle samples and standards, we may choose to add an internal standard.

Single-point standardizations are common, but are subject to greater uncertainty. Whenever possible, a multiple-point standardization is preferred, with results displayed as a calibration curve. A linear regression analysis can provide an equation for the standardization.

A reagent blank corrects for any contribution to the signal from the reagents used in the analysis. The most common reagent blank is one in which an analyte-free sample is taken through the analysis. When a simple reagent blank does not compensate for all constant sources of determinate error, other types of blanks, such as the total Youden blank, can be used.

51 Problems

1. Describe how you would use a serial dilution to prepare 100 mL each of a series of standards with concentrations of 1.00×10^{-5} , 1.00×10^{-4} , 1.00×10^{-3} , and 1.00×10^{-2} M from a 0.100 M stock solution. Calculate the uncertainty for each solution using a propagation of uncertainty, and compare to the uncertainty if you were to prepare each solution by a single dilution of the stock solution. You will find tolerances for different types of volumetric glassware and digital pipets in [Table 4.2](#) and [Table 4.3](#). Assume that the uncertainty in the stock solution's molarity is ± 0.002 .
2. Three replicate determinations of S_{total} for a standard solution that is 10.0 ppm in analyte give values of 0.163, 0.157, and 0.161 (arbitrary units). The signal for the reagent blank is 0.002. Calculate the concentration of analyte in a sample with a signal of 0.118.
3. A 10.00-g sample containing an analyte is transferred to a 250-mL volumetric flask and diluted to volume. When a 10.00 mL aliquot of the resulting solution is diluted to 25.00 mL it gives signal of 0.235 (arbitrary units). A second 10.00-mL portion of the solution is spiked with 10.00 mL of a 1.00-ppm standard solution of the analyte and diluted to 25.00 mL. The signal for the spiked sample is 0.502. Calculate the weight percent of analyte in the original sample.
4. A 50.00 mL sample containing an analyte gives a signal of 11.5 (arbitrary units). A second 50 mL aliquot of the sample, which is spiked with 1.00 mL of a 10.0-ppm standard solution of the analyte, gives a signal of 23.1. What is the analyte's concentration in the original sample?
5. An appropriate standard additions calibration curve based on equation 5.10 places $S_{\text{spike}} \times (V_o + V_{\text{std}})$ on the y -axis and $C_{\text{std}} \times V_{\text{std}}$ on the x -axis. Clearly explain why you can not plot S_{spike} on the y -axis and $C_{\text{std}} \times [V_{\text{std}} / (V_o + V_{\text{std}})]$ on the x -axis. In addition, derive equations for the slope and y -intercept, and explain how you can determine the amount of analyte in a sample from the calibration curve.
6. A standard sample contains 10.0 mg/L of analyte and 15.0 mg/L of internal standard. Analysis of the sample gives signals for the analyte and internal standard of 0.155 and 0.233 (arbitrary units), respectively. Sufficient internal standard is added to a sample to make its concentration 15.0 mg/L. Analysis of the sample yields signals for the analyte and internal standard of 0.274 and 0.198, respectively. Report the analyte's concentration in the sample.

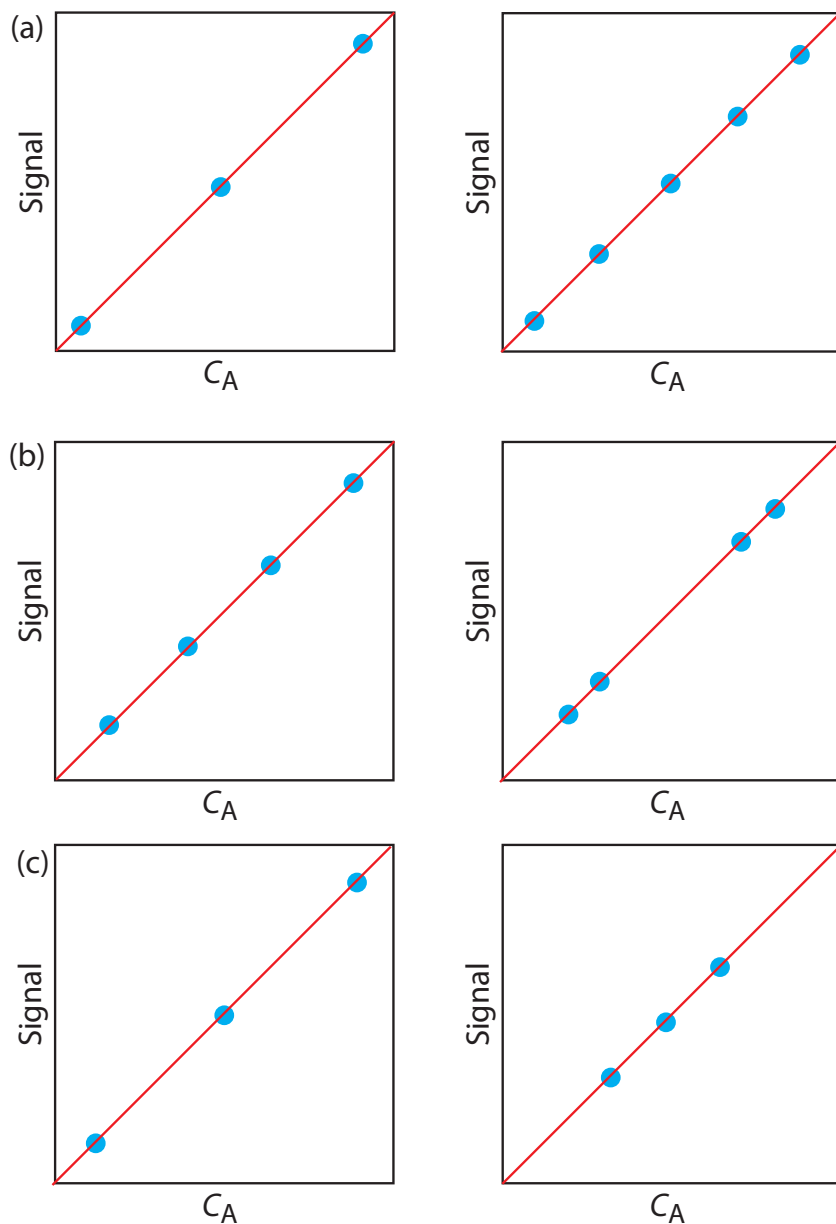


Figure 5.26 Calibration curves to accompany Problem 7.

7. For each of the pair of calibration curves shown in Figure 5.26, select the calibration curve using the more appropriate set of standards. Briefly explain the reasons for your selections. The scales for the x -axis and y -axis are the same for each pair.
8. The following data are for a series of external standards of Cd^{2+} buffered to a pH of 4.6.¹⁴

$[\text{Cd}^{2+}]$ (nM)	15.4	30.4	44.9	59.0	72.7	86.0
S_{total} (nA)	4.8	11.4	18.2	25.6	32.3	37.7

¹⁴ Wojciechowski, M.; Balcerzak, J. *Anal. Chim. Acta* **1991**, *249*, 433–445.

- (a) Use a linear regression to determine the standardization relationship and report confidence intervals for the slope and the y -intercept.
- (b) Construct a plot of the residuals and comment on their significance.

At a pH of 3.7 the following data were recorded for the same set of external standards.

$[\text{Cd}^{2+}]$ (nM)	15.4	30.4	44.9	59.0	72.7	86.0
S_{total} (nA)	15.0	42.7	58.5	77.0	101	118

- (c) How much more or less sensitive is this method at the lower pH?
- (d) A single sample is buffered to a pH of 3.7 and analyzed for cadmium, yielding a signal of 66.3. Report the concentration of Cd^{2+} in the sample and its 95% confidence interval.
9. To determine the concentration of analyte in a sample, a standard additions was performed. A 5.00-mL portion of sample was analyzed and then successive 0.10-mL spikes of a 600.0-mg/L standard of the analyte were added, analyzing after each spike. The following table shows the results of this analysis.

V_{spike} (mL)	0.00	0.10	0.20	0.30
S_{total} (arbitrary units)	0.119	0.231	0.339	0.442

Construct an appropriate standard additions calibration curve and use a linear regression analysis to determine the concentration of analyte in the original sample and its 95% confidence interval.

10. Troost and Olavsesn investigated the application of an internal standardization to the quantitative analysis of polynuclear aromatic hydrocarbons.¹⁵ The following results were obtained for the analysis of phenanthrene using isotopically labeled phenanthrene as an internal standard. Each solution was analyzed twice.

C_A/C_{IS}	0.50	1.25	2.00	3.00	4.00
S_A/S_{IS}	0.514	0.993	1.486	2.044	2.342
	0.522	1.024	1.471	20.80	2.550

- (a) Determine the standardization relationship using a linear regression, and report confidence intervals for the slope and the y -intercept. Average the replicate signals for each standard before completing the linear regression analysis.
- (b) Based on your results explain why the authors concluded that the internal standardization was inappropriate.

¹⁵ Troost, J. R.; Olavsesn, E. Y. *Anal. Chem.* **1996**, *68*, 708–711.

11. In Chapter 4 we used a paired t -test to compare two analytical methods used to independently analyze a series of samples of variable composition. An alternative approach is to plot the results for one method versus the results for the other method. If the two methods yield identical results, then the plot should have an expected slope, β_1 , of 1.00 and an expected y -intercept, β_0 , of 0.0. We can use a t -test to compare the slope and the y -intercept from a linear regression to the expected values. The appropriate test statistic for the y -intercept is found by rearranging [equation 5.23](#).

$$t_{\text{exp}} = \frac{|\beta_0 - b_0|}{s_{b_0}} = \frac{|b_0|}{s_{b_0}}$$

Rearranging [equation 5.22](#) gives the test statistic for the slope.

$$t_{\text{exp}} = \frac{|\beta_1 - b_1|}{s_{b_1}} = \frac{|1.00 - b_1|}{s_{b_1}}$$

Reevaluate the data in [problem 25](#) from Chapter 4 using the same significance level as in the original problem.

12. Consider the following three data sets, each containing value of y for the same values of x .

	Data Set 1	Data Set 2	Data Set 3
x	y_1	y_2	y_3
10.00	8.04	9.14	7.46
8.00	6.95	8.14	6.77
13.00	7.58	8.74	12.74
9.00	8.81	8.77	7.11
11.00	8.33	9.26	7.81
14.00	9.96	8.10	8.84
6.00	7.24	6.13	6.08
4.00	4.26	3.10	5.39
12.00	10.84	9.13	8.15
7.00	4.82	7.26	6.42
5.00	5.68	4.74	5.73

- (a) An unweighted linear regression analysis for the three data sets gives nearly identical results. To three significant figures, each data set has a slope of 0.500 and a y -intercept of 3.00. The standard deviations in the slope and the y -intercept are 0.118 and 1.125 for each

Although this is a common approach for comparing two analytical methods, it does violate one of the requirements for an unweighted linear regression—that indeterminate errors affect y only. Because indeterminate errors affect both analytical methods, the result of unweighted linear regression is biased. More specifically, the regression underestimates the slope, b_1 , and overestimates the y -intercept, b_0 . We can minimize the effect of this bias by placing the more precise analytical method on the x -axis, by using more samples to increase the degrees of freedom, and by using samples that uniformly cover the range of concentrations.

For more information, see Miller, J. C.; Miller, J. N. *Statistics for Analytical Chemistry*, 3rd ed. Ellis Horwood PTR Prentice-Hall: New York, 1993. Alternative approaches are found in Hartman, C.; Smeyers-Verbeke, J.; Penninckx, W.; Massart, D. L. *Anal. Chim. Acta* **1997**, *338*, 19–40, and Zwanziger, H. W.; Sârbu, C. *Anal. Chem.* **1998**, *70*, 1277–1280.

- data set. All three standard deviations about the regression are 1.24, and all three data regression lines have a correlation coefficients of 0.816. Based on these results for a linear regression analysis, comment on the similarity of the data sets.
- Complete a linear regression analysis for each data set and verify that the results from part (a) are correct. Construct a residual plot for each data set. Do these plots change your conclusion from part (a)? Explain.
 - Plot each data set along with the regression line and comment on your results.
 - Data set 3 appears to contain an outlier. Remove this apparent outlier and reanalyze the data using a linear regression. Comment on your result.
 - Briefly comment on the importance of visually examining your data.
13. Franke and co-workers evaluated a standard additions method for a voltammetric determination of Tl.¹⁶ A summary of their results is tabulated in the following table.

ppm Tl added	Instrument Response (μA)						
0.000	2.53	2.50	2.70	2.63	2.70	2.80	2.52
0.387	8.42	7.96	8.54	8.18	7.70	8.34	7.98
1.851	29.65	28.70	29.05	28.30	29.20	29.95	28.95
5.734	84.8	85.6	86.0	85.2	84.2	86.4	87.8

Use a weighted linear regression to determine the standardization relationship for this data.

5J Solutions to Practice Exercises

Practice Exercise 5.1

Substituting the sample's absorbance into the calibration equation and solving for C_A give

$$S_{\text{samp}} = 0.114 = 29.59 \text{ M}^{-1} \times C_A + 0.015$$

$$C_A = 3.35 \times 10^{-3} \text{ M}$$

For the one-point standardization, we first solve for k_A

¹⁶ Franke, J. P.; de Zeeuw, R. A.; Hakkert, R. *Anal. Chem.* **1978**, *50*, 1374–1380.

$$k_A = \frac{S_{\text{std}}}{C_{\text{std}}} = \frac{0.0931}{3.16 \times 10^{-3} \text{ M}} = 29.46 \text{ M}^{-1}$$

and then use this value of k_A to solve for C_A .

$$C_A = \frac{S_{\text{samp}}}{k_A} = \frac{0.114}{29.46 \text{ M}^{-1}} = 3.87 \times 10^{-3} \text{ M}$$

When using multiple standards, the indeterminate errors affecting the signal for one standard are partially compensated for by the indeterminate errors affecting the other standards. The standard selected for the one-point standardization has a signal that is smaller than that predicted by the regression equation, which underestimates k_A and overestimates C_A .

Click [here](#) to return to the chapter.

Practice Exercise 5.2

We begin with [equation 5.8](#)

$$S_{\text{spike}} = k_A \left(C_A \frac{V_o}{V_f} + C_{\text{std}} \frac{V_{\text{std}}}{V_f} \right)$$

rewriting it as

$$0 = \frac{k_A C_A V_o}{V_f} + k_A \times \left\{ C_{\text{std}} \frac{V_{\text{std}}}{V_f} \right\}$$

which is in the form of the linear equation

$$Y = y\text{-intercept} + \text{slope} \times X$$

where Y is S_{spike} and X is $C_{\text{std}} \times V_{\text{std}}/V_f$. The slope of the line, therefore, is k_A , and the y -intercept is $k_A C_A V_o/V_f$. The x -intercept is the value of X when Y is zero, or

$$0 = \frac{k_A C_A V_o}{V_f} + k_A \times \{x\text{-intercept}\}$$

$$x\text{-intercept} = -\frac{k_A C_A V_o / V_f}{k_A} = -\frac{C_A V_o}{V_f}$$

Click [here](#) to return to the chapter.

Practice Exercise 5.3

Using the calibration equation from [Figure 5.7a](#), we find that the x -intercept is

$$\text{x-intercept} = -\frac{0.1478}{0.0854 \text{ mL}^{-1}} = -1.731 \text{ mL}$$

Plugging this into the equation for the x -intercept and solving for C_A gives the concentration of Mn^{2+} as

$$\text{x-intercept} = -3.478 \text{ mL} = -\frac{C_A \times 25.00 \text{ mL}}{100.6 \text{ mg/L}} = 6.96 \text{ mg/L}$$

For [Figure 7b](#), the x -intercept is

$$\text{x-intercept} = -\frac{0.1478}{0.0425 \text{ mL}^{-1}} = -3.478 \text{ mL}$$

and the concentration of Mn^{2+} is

$$\text{x-intercept} = -3.478 \text{ mL} = -\frac{C_A \times 25.00 \text{ mL}}{50.00 \text{ L}} = 6.96 \text{ mg/L}$$

Click [here](#) to return to the chapter.

Practice Exercise 5.4

We begin by setting up a table to help us organize the calculation.

x_i	y_i	$x_i y_i$	x_i^2
0.000	0.00	0.000	0.000
1.55×10^{-3}	0.050	7.750×10^{-5}	2.403×10^{-6}
3.16×10^{-3}	0.093	2.939×10^{-4}	9.986×10^{-6}
4.74×10^{-3}	0.143	6.778×10^{-4}	2.247×10^{-5}
6.34×10^{-3}	0.188	1.192×10^{-3}	4.020×10^{-5}
7.92×10^{-3}	0.236	1.869×10^{-3}	6.273×10^{-5}

Adding the values in each column gives

$$\sum_i x_i = 2.371 \times 10^{-2} \quad \sum_i y_i = 0.710$$

$$\sum_i x_i y_i = 4.110 \times 10^{-3} \quad \sum_i x_i^2 = 1.278 \times 10^{-4}$$

Substituting these values into [equation 5.17](#) and [equation 5.18](#), we find that the slope and the y -intercept are

$$b_1 = \frac{6 \times (4.110 \times 10^{-3}) - (2.371 \times 10^{-2}) \times (0.710)}{(6 \times 1.378 \times 10^{-4}) - (2.371 \times 10^{-2})^2} = 29.57$$

$$b_0 = \frac{0.710 - 29.57 \times (2.371 \times 10^{-2})}{6} = 0.0015$$

The regression equation is

$$S_{\text{std}} = 29.57 \times C_{\text{std}} + 0.0015$$

To calculate the 95% confidence intervals, we first need to determine the standard deviation about the regression. The following table will help us organize the calculation.

x_i	y_i	\hat{y}_i	$(y_i - \hat{y}_i)^2$
0.000	0.00	0.0015	2.250×10^{-6}
1.55×10^{-3}	0.050	0.0473	7.110×10^{-6}
3.16×10^{-3}	0.093	0.0949	3.768×10^{-6}
4.74×10^{-3}	0.143	0.1417	1.791×10^{-6}
6.34×10^{-3}	0.188	0.1890	9.483×10^{-7}
7.92×10^{-3}	0.236	0.2357	9.339×10^{-8}

Adding together the data in the last column gives the numerator of [equation 5.19](#) as 1.596×10^{-5} . The standard deviation about the regression, therefore, is

$$s_r = \sqrt{\frac{1.596 \times 10^{-6}}{6 - 2}} = 1.997 \times 10^{-3}$$

Next, we need to calculate the standard deviations for the slope and the y -intercept using [equation 5.20](#) and [equation 5.21](#).

$$s_{b_1} = \sqrt{\frac{6 \times (1.997 \times 10^{-3})^2}{6 \times (1.378 \times 10^{-4}) - (2.371 \times 10^{-2})^2}} = 0.3007$$

$$s_{b_0} = \sqrt{\frac{(1.997 \times 10^{-3})^2 \times (1.378 \times 10^{-4})}{6 \times (1.378 \times 10^{-4}) - (2.371 \times 10^{-2})^2}} = 1.441 \times 10^{-3}$$

The 95% confidence intervals are

$$\beta_1 = b_1 \pm t_{b_1} = 29.57 \pm (2.78 \times 0.3007) = 29.57 \text{ M}^{-1} \pm 0.85 \text{ M}^{-1}$$

$$\beta_0 = b_0 \pm t_{b_0} = 0.0015 \pm \{2.78 \times (1.441 \times 10^{-3})\} = 0.0015 \pm 0.0040$$

With an average S_{samp} of 0.114, the concentration of analyte, C_A , is

$$C_A = \frac{S_{\text{samp}} - b_0}{b_1} = \frac{0.114 - 0.0015}{29.57 \text{ M}^{-1}} = 3.80 \times 10^{-3} \text{ M}$$

The standard deviation in C_A is

$$s_{C_A} = \frac{1.997 \times 10^{-3}}{29.57} \sqrt{\frac{1}{3} + \frac{1}{6} + \frac{(0.114 - 0.1183)^2}{(29.57)^2 \times (4.408 \times 10^{-5})}} = 4.778 \times 10^{-5}$$

and the 95% confidence interval is

$$\begin{aligned} \mu_{C_A} &= C_A \pm t_{s_{C_A}} = 3.80 \times 10^{-3} \pm \{2.78 \times (4.778 \times 10^{-5})\} \\ &= 3.80 \times 10^{-3} \text{ M} \pm 0.13 \times 10^{-3} \text{ M} \end{aligned}$$

Click [here](#) to return to the chapter.

Practice Exercise 5.5

To create a residual plot, we need to calculate the residual error for each standard. The following table contains the relevant information.

x_i	y_i	\hat{y}_i	$y_i - \hat{y}_i$
0.000	0.00	0.0015	-0.0015
1.55×10^{-3}	0.050	0.0473	0.0027
3.16×10^{-3}	0.093	0.0949	-0.0019
4.74×10^{-3}	0.143	0.1417	0.0013
6.34×10^{-3}	0.188	0.1890	-0.0010
7.92×10^{-3}	0.236	0.2357	0.0003

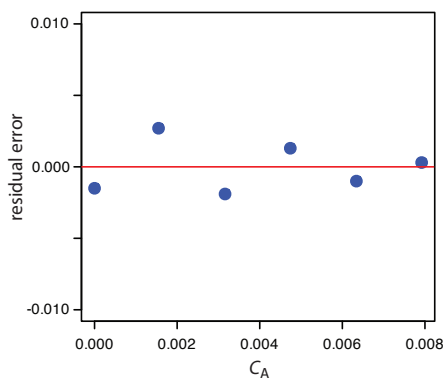


Figure 5.27 Plot of the residual errors for the data in Practice Exercise 5.5.

Figure 5.27 shows a plot of the resulting residual errors is shown here. The residual errors appear random and do not show any significant dependence on the analyte's concentration. Taken together, these observations suggest that our regression model is appropriate.

Click [here](#) to return to the chapter

Practice Exercise 5.6

Begin by entering the data into an Excel spreadsheet, following the format shown in [Figure 5.15](#). Because Excel's Data Analysis tools provide most of the information we need, we will use it here. The resulting output, which is shown in [Figure 5.28](#), contains the slope and the y-intercept, along with their respective 95% confidence intervals. Excel does not provide a function for calculating the uncertainty in the analyte's concentration, C_A , given the signal for a sample, S_{sample} . You must complete these calculations by hand. With an S_{sample} of 0.114, C_A

$$C_A = \frac{S_{\text{sample}} - b_0}{b_1} = \frac{0.114 - 0.0014}{29.59 \text{ M}^{-1}} = 3.80 \times 10^{-3} \text{ M}$$

SUMMARY OUTPUT

<i>Regression Statistics</i>	
Multiple R	0.99979366
R Square	0.99958737
Adjusted R Sq	0.99948421
Standard Error	0.00199602
Observations	6

ANOVA					
	<i>df</i>	<i>SS</i>	<i>MS</i>	<i>F</i>	<i>Significance F</i>
Regression	1	0.0386054	0.0386054	9689.9103	6.3858E-08
Residual	4	1.5936E-05	3.9841E-06		
Total	5	0.03862133			

	<i>Coefficients</i>	<i>Standard Error</i>	<i>t Stat</i>	<i>P-value</i>	<i>Lower 95%</i>	<i>Upper 95%</i>	<i>Lower 95.0%</i>	<i>Upper 95.0%</i>
Intercept	0.00139272	0.00144059	0.96677158	0.38840479	-0.00260699	0.00539242	-0.00260699	0.00539242
Cstd	29.5927329	0.30062507	98.437342	6.3858E-08	28.7580639	30.4274019	28.7580639	30.4274019

Figure 5.28 Excel's summary of the regression results for [Practice Exercise 5.6](#).

The standard deviation in C_A is

$$s_{C_A} = \frac{1.996 \times 10^{-3}}{29.59} \sqrt{\frac{1}{3} + \frac{1}{6} + \frac{(0.114 - 0.1183)^2}{(29.59)^2 \times (4.408 \times 10^{-5})}} = 4.772 \times 10^{-5}$$

and the 95% confidence interval is

$$\begin{aligned} \mu_{C_A} &= C_A \pm t_{s_{C_A}} = 3.80 \times 10^{-3} \pm \{2.78 \times (4.772 \times 10^{-5})\} \\ &= 3.80 \times 10^{-3} \text{ M} \pm 0.13 \times 10^{-3} \text{ M} \end{aligned}$$

Click [here](#) to return to the chapter

Practice Exercise 5.7

[Figure 5.29](#) shows an R session for this problem, including loading the *chemCal* package, creating objects to hold the values for C_{std} , S_{std} , and *Ssamp*. Note that for *Ssamp*, we do not have the actual values for the three replicate measurements. In place of the actual measurements, we just enter the average signal three times. This is okay because the calculation depends on the average signal and the number of replicates, and not on the individual measurements.

Click [here](#) to return to the chapter

```

> library("chemCal")
> conc=c(0, 1.55e-3, 3.16e-3, 4.74e-3, 6.34e-3, 7.92e-3)
> signal=c(0, 0.050, 0.093, 0.143, 0.188, 0.236)
> model=lm(signal~conc)
> summary(model)

Call:
lm(formula = signal ~ conc)

Residuals:
    1      2      3      4      5      6
-0.0013927  0.0027385 -0.0019058  0.0013377 -0.0010106  0.0002328

Coefficients:
            Estimate Std. Error t value Pr(>|t|)
(Intercept)  0.001393  0.001441   0.967   0.388
conc        29.592733  0.300625  98.437 6.39e-08 ***
---
Signif. codes:  0 '***' 0.001 '**' 0.01 '*' 0.05 '.' 0.1 ' ' 1

Residual standard error: 0.001996 on 4 degrees of freedom
Multiple R-Squared: 0.9996, Adjusted R-squared: 0.9995
F-statistic: 9690 on 1 and 4 DF, p-value: 6.386e-08

> samp=c(0.114, 0.114, 0.114)
> inverse.predict(model,samp,alpha=0.05)
$Prediction
[1] 0.003805234

$`Standard Error`
[1] 4.771723e-05

$Confidence
[1] 0.0001324843

$`Confidence Limits`
[1] 0.003672750 0.003937719

```

Figure 5.29 R session for completing [Practice Exercise 5.7](#).

Chapter 6

Equilibrium Chemistry

Chapter Overview

- 6A Reversible Reactions and Chemical Equilibria
- 6B Thermodynamics and Equilibrium Chemistry
- 6C Manipulating Equilibrium Constants
- 6D Equilibrium Constants for Chemical Reactions
- 6E Le Châtelier's Principle
- 6F Ladder Diagrams
- 6G Solving Equilibrium Problems
- 6H Buffer Solutions
- 6I Activity Effects
- 6J Using Excel and R to Solve Equilibrium Problems
- 6K Three Final Thoughts About Equilibrium Chemistry
- 6L Key Terms
- 6M Chapter Summary
- 6N Problems
- 6O Solutions to Practice Exercises

Regardless of the problem on which an analytical chemist is working, its solution requires a knowledge of chemistry and the ability to apply that knowledge. For example, an analytical chemist studying the effect of pollution on spruce trees needs to know, or know where to find, the chemical differences between *p*-hydroxybenzoic acid and *p*-hydroxyacetophenone, two common phenols found in the needles of spruce trees.

Your ability to “think as a chemist” is a product of your experience in the classroom and in the laboratory. The material in this text assumes your familiarity with topics from earlier courses. Because of its importance to analytical chemistry, this chapter provides a review of equilibrium chemistry. Much of the material in this chapter should be familiar to you, although some topics—ladder diagrams and activity, for example—afford you with new ways to look at equilibrium chemistry.

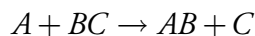
Napoleon's expedition to Egypt was the first to include a significant scientific presence. The Commission of Sciences and Arts, which included Claude Berthollet, began with 151 members, and operated in Egypt for three years. In addition to Berthollet's work, other results included a publication on mirages, and detailed catalogs of plant and animal life, mineralogy, and archeology. For a review of the Commission's contributions, see Gillispie, C. G. "Scientific Aspects of the French Egyptian Expedition, 1798-1801," *Proc. Am. Phil. Soc.* **1989**, *133*, 447-474.

Natron is another name for the mineral sodium carbonate, $\text{Na}_2\text{CO}_3 \cdot 10\text{H}_2\text{O}$. In nature, it usually contains impurities of NaHCO_3 , and NaCl . In ancient Egypt, natron was mined and used for a variety of purposes, including as a cleaning agent and in mummification.

6A Reversible Reactions and Chemical Equilibria

In 1798, the chemist Claude Berthollet accompanied Napoleon's military expedition to Egypt. While visiting the Natron Lakes, a series of salt water lakes carved from limestone, Berthollet made an observation that led him to an important discovery. When exploring the lake's shore Berthollet found deposits of Na_2CO_3 , a result he found surprising. Why did Berthollet find this result surprising and how did it contribute to an important discovery? Answering these questions provides an example of chemical reasoning and introduces us to the topic of this chapter.

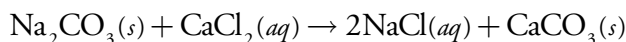
At the end of the 18th century, chemical reactivity was explained in terms of elective affinities.¹ If, for example, substance A reacts with substance BC to form AB



then A and B were said to have an elective affinity for each other. With elective affinity as the driving force for chemical reactivity, reactions were understood to proceed to completion and to proceed in one direction. Once formed, the compound AB could not revert to A and BC.

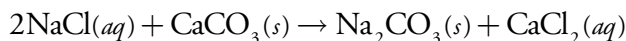


From his experience in the laboratory, Berthollet knew that adding solid Na_2CO_3 to a solution of CaCl_2 produces a precipitate of CaCO_3 .

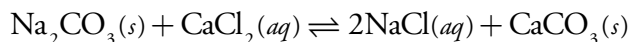


Understanding this, Berthollet was surprised to find solid Na_2CO_3 forming on the edges of the lake, particularly since the deposits formed only when the lake's salt water was in contact with limestone, CaCO_3 . Where the lake was in contact with clay soils, there was little or no Na_2CO_3 .

Berthollet's important insight was recognizing that the chemistry leading to the formation of Na_2CO_3 is the reverse of that seen in the laboratory.



Using this insight Berthollet reasoned that the reaction is reversible, and that the relative amounts of NaCl , CaCO_3 , Na_2CO_3 , and CaCl_2 determine the direction in which the reaction occurs and the final composition of the reaction mixture. We recognize a reaction's ability to move in both directions by using a double arrow when writing the reaction.



Berthollet's reasoning that reactions are reversible was an important step in understanding chemical reactivity. When we mix together solutions of Na_2CO_3 and CaCl_2 they react to produce NaCl and CaCO_3 . If during

¹ Quilez, J. *Chem. Educ. Res. Pract.* **2004**, *5*, 69-87 (<http://www.uoi.gr/cerp>).

the reaction we monitor the mass of Ca^{2+} remaining in solution and the mass of CaCO_3 that precipitates, the result looks something like Figure 6.1. At the start of the reaction the mass of Ca^{2+} decreases and the mass of CaCO_3 increases. Eventually the reaction reaches a point after which there is no further change in the amounts of these species. Such a condition is called a state of **EQUILIBRIUM**.

Although a system at equilibrium appears static on a macroscopic level, it is important to remember that the forward and reverse reactions continue to occur. A reaction at equilibrium exists in a **STEADY-STATE**, in which the rate at which a species forms equals the rate at which it is consumed.

6B Thermodynamics and Equilibrium Chemistry

Thermodynamics is the study of thermal, electrical, chemical, and mechanical forms of energy. The study of thermodynamics crosses many disciplines, including physics, engineering, and chemistry. Of the various branches of thermodynamics, the most important to chemistry is the study of the change in energy during a chemical reaction.

Consider, for example, the general equilibrium reaction shown in equation 6.1, involving the species A, B, C, and D, with stoichiometric coefficients a , b , c , and d .



By convention, we identify species on the left side of the equilibrium arrow as reactants, and those on the right side of the equilibrium arrow as products. As Berthollet discovered, writing a reaction in this fashion does not guarantee that the reaction of A and B to produce C and D is favorable. Depending on initial conditions, the reaction may move to the left, move to the right, or be in a state of equilibrium. Understanding the factors that determine the reaction's final, equilibrium position is one of the goals of chemical thermodynamics.

The direction of a reaction is that which lowers the overall free energy. At a constant temperature and pressure, typical of many bench-top chemical reactions, a reaction's free energy is given by the **GIBB'S FREE ENERGY** function

$$\Delta G = \Delta H - T\Delta S \quad 6.2$$

where T is the temperature in kelvin, and ΔG , ΔH , and ΔS are the differences in the Gibb's free energy, the enthalpy, and the entropy between the products and the reactants.

ENTHALPY is a measure of the flow of energy, as heat, during a chemical reaction. Reactions releasing heat have a negative ΔH and are called exothermic. Endothermic reactions absorb heat from their surroundings and have a positive ΔH . **ENTROPY** is a measure of energy that is unavailable for useful, chemical work. The entropy of an individual species is always posi-

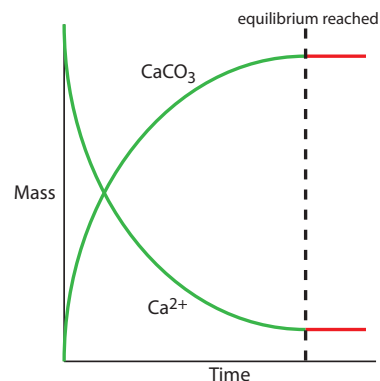


Figure 6.1 Graph showing how the masses of Ca^{2+} and CaCO_3 change as a function of time during the precipitation of CaCO_3 . The dashed line indicates when the reaction reaches equilibrium. Prior to equilibrium the masses of Ca^{2+} and CaCO_3 are **changing**; after reaching equilibrium, their masses remain **constant**.

For obvious reasons, we call the double arrow, \rightleftharpoons , an equilibrium arrow.

For many students, entropy is the most difficult topic in thermodynamics to understand. For a rich resource on entropy, visit the following web site: <http://www.entropysite.com/>.

Equation 6.2 shows that the sign of ΔG depends on the signs of ΔH and ΔS , and the temperature, T . The following table summarizes the possibilities.

ΔH	ΔS	ΔG
-	+	$\Delta G < 0$ at all temperatures
-	-	$\Delta G < 0$ at low temperatures
+	+	$\Delta G < 0$ at high temperatures
+	-	$\Delta G > 0$ at all temperatures

tive and tends to be larger for gases than for solids, and for more complex molecules than for simpler molecules. Reactions producing a large number of simple, gaseous products usually have a positive ΔS .

The sign of ΔG indicates the direction in which a reaction moves to reach its equilibrium position. A reaction is thermodynamically favorable when its enthalpy, ΔH , decreases and its entropy, ΔS , increases. Substituting the inequalities $\Delta H < 0$ and $\Delta S > 0$ into equation 6.2 shows that a reaction is thermodynamically favorable when ΔG is negative. When ΔG is positive the reaction is unfavorable as written (although the reverse reaction is favorable). A reaction at equilibrium has a ΔG of zero.

As a reaction moves from its initial, non-equilibrium condition to its equilibrium position, the value of ΔG approaches zero. At the same time, the chemical species in the reaction experience a change in their concentrations. The Gibb's free energy, therefore, must be a function of the concentrations of reactants and products.

As shown in equation 6.3, we can split the Gibb's free energy into two terms.

$$\Delta G = \Delta G^\circ + RT \ln Q \quad 6.3$$

The first term, ΔG° , is the change in Gibb's free energy when each species in the reaction is in its **STANDARD STATE**, which we define as follows: gases with partial pressures of 1 atm, solutes with concentrations of 1 mol/L, and pure solids and pure liquids. The second term, which includes the reaction quotient, Q , accounts for non-standard state pressures or concentrations. For reaction 6.1 the reaction quotient is

$$Q = \frac{[C]^c [D]^d}{[A]^a [B]^b} \quad 6.4$$

where the terms in brackets are the concentrations of the reactants and products. Note that we define the reaction quotient with the products are in the numerator and the reactants are in the denominator. In addition, we raise the concentration of each species to a power equivalent to its stoichiometry in the balanced chemical reaction. For a gas, we use partial pressure in place of concentration. Pure solids and pure liquids do not appear in the reaction quotient.

At equilibrium the Gibb's free energy is zero, and equation 6.3 simplifies to

$$\Delta G^\circ = -RT \ln K$$

where K is an **EQUILIBRIUM CONSTANT** that defines the reaction's equilibrium position. The equilibrium constant is just the numerical value of the reaction quotient, Q , when substituting equilibrium concentrations into equation 6.4.

Although not shown here, each concentration term in equation 6.4 is divided by the corresponding standard state concentration; thus, the term $[C]^c$ really means

$$\left\{ \frac{[C]}{[C]^\circ} \right\}^c$$

where $[C]^\circ$ is the standard state concentration for C. There are two important consequences of this: (1) the value of Q is unitless; and (2) the ratio has a value of 1 for a pure solid or a pure liquid. This is the reason that pure solids and pure liquids do not appear in the reaction quotient.

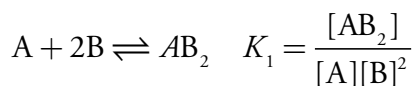
$$K = \frac{[C]_{\text{eq}}^c [D]_{\text{eq}}^d}{[A]_{\text{eq}}^a [B]_{\text{eq}}^b} \quad 6.5$$

Here we include the subscript “eq” to indicate a concentration at equilibrium. Although we usually will omit the “eq” when writing equilibrium constant expressions, it is important to remember that the value of K is determined by equilibrium concentrations.

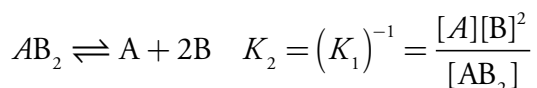
As written, equation 6.5 is a limiting law that applies only to infinitely dilute solutions where the chemical behavior of one species is unaffected by the presence of other species. Strictly speaking, equation 6.5 should be written in terms of activities instead of concentrations. We will return to this point in [Section 6I](#). For now, we will stick with concentrations as this convention is already familiar to you.

6C Manipulating Equilibrium Constants

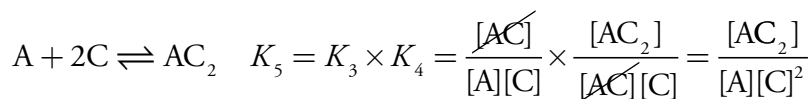
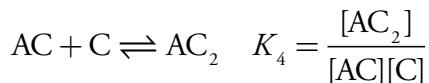
We will take advantage of two useful relationships when working with equilibrium constants. First, if we reverse a reaction's direction, the equilibrium constant for the new reaction is simply the inverse of that for the original reaction. For example, the equilibrium constant for the reaction



is the inverse of that for the reaction

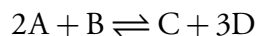


Second, if we add together two reactions to obtain a new reaction, the equilibrium constant for the new reaction is the product of the equilibrium constants for the original reactions.



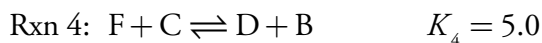

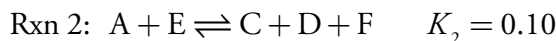

Example 6.1

Calculate the equilibrium constant for the reaction

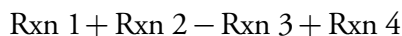


given the following information



**SOLUTION**

The overall reaction is equivalent to

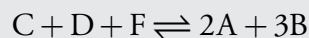


Subtracting a reaction is equivalent to adding the reverse reaction; thus, the overall equilibrium constant is

$$K = \frac{K_1 \times K_2 \times K_4}{K_3} = \frac{0.40 \times 0.10 \times 5.0}{2.0} = 0.10$$

Practice Exercise 6.1

Calculate the equilibrium constant for the reaction



using the equilibrium constants from Example 6.1.

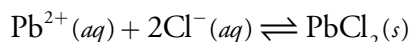
Click [here](#) to review your answer to this exercise.

6D Equilibrium Constants for Chemical Reactions

Several types of chemical reactions are important in analytical chemistry, either in preparing a sample for analysis or during the analysis. The most significant of these are: precipitation reactions, acid–base reactions, complexation reactions, and oxidation–reduction reactions. In this section we review these reactions and their equilibrium constant expressions.

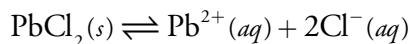
6D.1 Precipitation Reactions

In a precipitation reaction, two or more soluble species combine to form an insoluble **PRECIPITATE**. The most common precipitation reaction is a metathesis reaction, in which two soluble ionic compounds exchange parts. For example, if we add a solution of lead nitrate, $\text{Pb}(\text{NO}_3)_2$, to a solution of potassium chloride, KCl , the result is a precipitate of lead chloride, PbCl_2 . We usually write a precipitation reaction as a net ionic equation, showing only the precipitate and those ions forming the precipitate. Thus, the precipitation reaction for PbCl_2 is



Another common name for an oxidation–reduction reaction is a **REDOX REACTION**, where “red” is short for reduction and “ox” is short for oxidation.

When writing an equilibrium constant for a precipitation reaction, we focus on the precipitate's solubility. Thus, for PbCl_2 , the solubility reaction is



and its equilibrium constant, which we call the **SOLUBILITY PRODUCT**, K_{sp} , is

$$K_{\text{sp}} = [\text{Pb}^{2+}][\text{Cl}^{-}]^2 = 1.7 \times 10^{-5} \quad 6.6$$

Even though it does not appear in the K_{sp} expression, it is important to remember that equation 6.6 is valid only if $\text{PbCl}_2(s)$ is present and in equilibrium with Pb^{2+} and Cl^{-} . You will find values for selected solubility products in [Appendix 10](#).

6D.2 Acid–Base Reactions

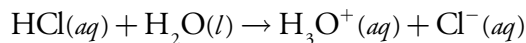
A useful definition of acids and bases is that independently introduced in 1923 by Johannes Brønsted and Thomas Lowry. In the Brønsted–Lowry definition, an **ACID** is a proton donor and a **BASE** is a proton acceptor. Note the connection in these definitions—defining a base as a proton acceptor implies that there is an acid available to donate the proton. For example, in reaction 6.7 acetic acid, CH_3COOH , donates a proton to ammonia, NH_3 , which serves as the base.



When an acid and a base react, the products are a new acid and a new base. For example, the acetate ion, $\text{CH}_3\text{COO}^{-}$, in reaction 6.7 is a base that can accept a proton from the acidic ammonium ion, NH_4^{+} , forming acetic acid and ammonia. We call the acetate ion the conjugate base of acetic acid, and the ammonium ion is the conjugate acid of ammonia.

STRONG AND WEAK ACIDS

The reaction of an acid with its solvent (typically water) is an acid dissociation reaction. We divide acids into two categories—strong and weak—based on their ability to donate a proton to the solvent. A strong acid, such as HCl , almost completely transfers its proton to the solvent, which acts as the base.

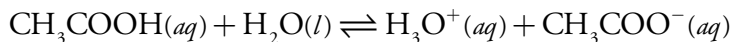


We use a single arrow (\rightarrow) in place of the equilibrium arrow (\rightleftharpoons) because we treat HCl as if it completely dissociates in aqueous solutions. In water, the common strong acids are hydrochloric acid (HCl), hydroiodic acid (HI), hydrobromic acid (HBr), nitric acid (HNO_3), perchloric acid (HClO_4), and the first proton of sulfuric acid (H_2SO_4).

In a different solvent, HCl may not be a strong acid. For example, HCl does not act as a strong acid in methanol. In this case we use the equilibrium arrow when writing the acid–base reaction.



A weak acid, of which aqueous acetic acid is one example, does not completely donate its acidic proton to the solvent. Instead, most of the acid remains undissociated, with only a small fraction present as the conjugate base.

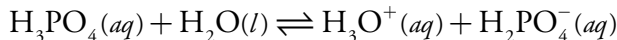


The equilibrium constant for this reaction is an **ACID DISSOCIATION CONSTANT**, K_a , which we write as

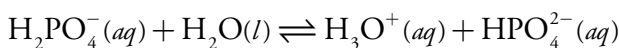
$$K_a = \frac{[\text{CH}_3\text{COO}^-][\text{H}_3\text{O}^+]}{[\text{CH}_3\text{COOH}]} = 1.75 \times 10^{-5}$$

The magnitude of K_a provides information about a weak acid's relative strength, with a smaller K_a corresponding to a weaker acid. The ammonium ion, NH_4^+ , for example, with a K_a of 5.702×10^{-10} , is a weaker acid than acetic acid.

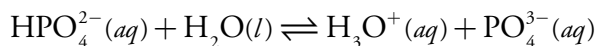
MONOPROTIC weak acids, such as acetic acid, have only a single acidic proton and a single acid dissociation constant. Other acids, such as phosphoric acid, have more than one acidic proton, each characterized by an acid dissociation constant. We call such acids **POLYPROTIC** weak acids. Phosphoric acid, for example, has three acid dissociation reactions and three acid dissociation constants.



$$K_{a1} = \frac{[\text{H}_2\text{PO}_4^-][\text{H}_3\text{O}^+]}{[\text{H}_3\text{PO}_4]} = 7.11 \times 10^{-3}$$



$$K_{a2} = \frac{[\text{HPO}_4^{2-}][\text{H}_3\text{O}^+]}{[\text{H}_2\text{PO}_4^-]} = 6.32 \times 10^{-8}$$



$$K_{a3} = \frac{[\text{PO}_4^{3-}][\text{H}_3\text{O}^+]}{[\text{HPO}_4^{2-}]} = 4.5 \times 10^{-13}$$

The decrease in the acid dissociation constants from K_{a1} to K_{a3} tells us that each successive proton is harder to remove. Consequently, H_3PO_4 is a stronger acid than H_2PO_4^- , and H_2PO_4^- is a stronger acid than HPO_4^{2-} .

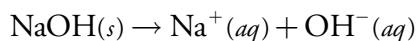
Earlier we noted that we omit pure solids and pure liquids from equilibrium constant expressions. Because the solvent, H_2O , is not pure, you might wonder why we have not included it in acetic acid's K_a expression. Recall that we divide each term in the equilibrium constant expression by its standard state value. Because the concentration of H_2O is so large—it is approximately 55.5 mol/L—its concentration as a pure liquid and as a solvent are virtually identical. The ratio

$$\frac{[\text{H}_2\text{O}]}{[\text{H}_2\text{O}]^0}$$

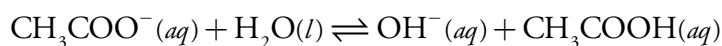
is essentially 1.00.

STRONG AND WEAK BASES

The most common example of a strong base is an alkali metal hydroxide, such as sodium hydroxide, NaOH, which completely dissociates to produce hydroxide ion.



A weak base, such as the acetate ion, CH_3COO^- , only partially accepts a proton from the solvent, and is characterized by a **BASE DISSOCIATION CONSTANT**, K_b . For example, the base dissociation reaction and the base dissociation constant for the acetate ion are

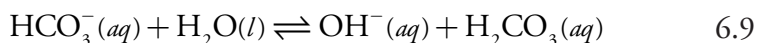
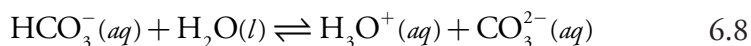


$$K_b = \frac{[\text{CH}_3\text{COOH}][\text{OH}^-]}{[\text{CH}_3\text{COO}^-]} = 5.71 \times 10^{-10}$$

A polyprotic weak base, like a polyprotic acid, has more than one base dissociation reaction and more than one base dissociation constant.

AMPHIPROTIC SPECIES

Some species can behave as either a weak acid or as a weak base. For example, the following two reactions show the chemical reactivity of the bicarbonate ion, HCO_3^- , in water.



A species that is both a proton donor and a proton acceptor is called **AMPHIPROTIC**. Whether an amphiprotic species behaves as an acid or as a base depends on the equilibrium constants for the competing reactions. For bicarbonate, the acid dissociation constant for reaction 6.8

$$K_{a2} = \frac{[\text{CO}_3^{2-}][\text{H}_3\text{O}^+]}{[\text{HCO}_3^-]} = 4.69 \times 10^{-11}$$

is smaller than the base dissociation constant for reaction 6.9.

$$K_{b2} = \frac{[\text{H}_2\text{CO}_3][\text{OH}^-]}{[\text{HCO}_3^-]} = 2.25 \times 10^{-8}$$

Because bicarbonate is a stronger base than it is an acid, we expect an aqueous solution of HCO_3^- to be basic.

DISSOCIATION OF WATER

Water is an amphiprotic solvent because it can serve as an acid or as a base. An interesting feature of an amphiprotic solvent is that it is capable of reacting with itself in an acid–base reaction.



We identify the equilibrium constant for this reaction as water's dissociation constant, K_w ,

$$K_w = [\text{H}_3\text{O}^+][\text{OH}^-] = 1.00 \times 10^{-14} \quad 6.11$$

which has a value of 1.0000×10^{-14} at a temperature of 24°C . The value of K_w varies substantially with temperature. For example, at 20°C K_w is 6.809×10^{-15} , while at 30°C K_w is 1.469×10^{-14} . At 25°C , K_w is 1.008×10^{-14} , which is sufficiently close to 1.00×10^{-14} that we can use the latter value with negligible error.

An important consequence of equation 6.11 is that the concentration of H_3O^+ and the concentration of OH^- are related. If we know $[\text{H}_3\text{O}^+]$ for a solution, then we can calculate $[\text{OH}^-]$ using equation 6.11.

Example 6.2

What is the $[\text{OH}^-]$ if the $[\text{H}_3\text{O}^+]$ is $6.12 \times 10^{-5} \text{ M}$?

SOLUTION

$$[\text{OH}^-] = \frac{K_w}{[\text{H}_3\text{O}^+]} = \frac{1.00 \times 10^{-14}}{6.12 \times 10^{-5}} = 1.63 \times 10^{-10}$$

THE pH SCALE

Equation 6.11 allows us to develop a **pH SCALE** that indicates a solution's acidity. When the concentrations of H_3O^+ and OH^- are equal a solution is neither acidic nor basic; that is, the solution is neutral. Letting

$$[\text{H}_3\text{O}^+] = [\text{OH}^-]$$

substituting into equation 6.11

$$K_w = [\text{H}_3\text{O}^+]^2 = 1.00 \times 10^{-14}$$

and solving for $[\text{H}_3\text{O}^+]$ gives

$$[\text{H}_3\text{O}^+] = \sqrt{1.00 \times 10^{-14}} = 1.00 \times 10^{-7}$$

$$\text{pH} = -\log[\text{H}_3\text{O}^+]$$

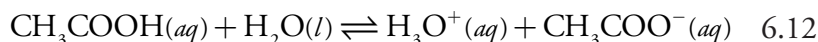
A neutral solution has a hydronium ion concentration of 1.00×10^{-7} M and a pH of 7.00. For a solution to be acidic the concentration of H_3O^+ must be greater than that for OH^- , which means that

$$[\text{H}_3\text{O}^+] > 1.00 \times 10^{-7} \text{ M}$$

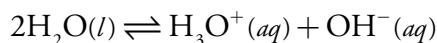
The pH of an acidic solution, therefore, must be less than 7.00. A basic solution, on the other hand, has a pH greater than 7.00. Figure 6.2 shows the pH scale and pH values for some representative solutions.

TABULATING VALUES FOR K_a AND K_b

A useful observation about acids and bases is that the strength of a base is inversely proportional to the strength of its conjugate acid. Consider, for example, the dissociation reactions of acetic acid and acetate.



Adding together these two reactions gives the reaction



for which the equilibrium constant is K_w . Because adding together two reactions is equivalent to multiplying their respective equilibrium constants, we may express K_w as the product of K_a for CH_3COOH and K_b for CH_3COO^- .

$$K_w = K_{a,\text{CH}_3\text{COOH}} \times K_{b,\text{CH}_3\text{COO}^-}$$

For any weak acid, HA, and its conjugate weak base, A^- , we can generalize this to the following equation.

$$K_w = K_{a,\text{HA}} \times K_{b,\text{A}^-} \quad 6.14$$

The relationship between K_a and K_b for a conjugate acid–base pair simplifies our tabulation of acid and base dissociation constants. [Appendix 11](#) includes acid dissociation constants for a variety of weak acids. To find the value of K_b for a weak base, use equation 6.14 and the K_a value for its corresponding weak acid.

Example 6.3

Using [Appendix 11](#), calculate values for the following equilibrium constants.

- K_b for pyridine, $\text{C}_5\text{H}_5\text{N}$
- K_b for dihydrogen phosphate, H_2PO_4^-

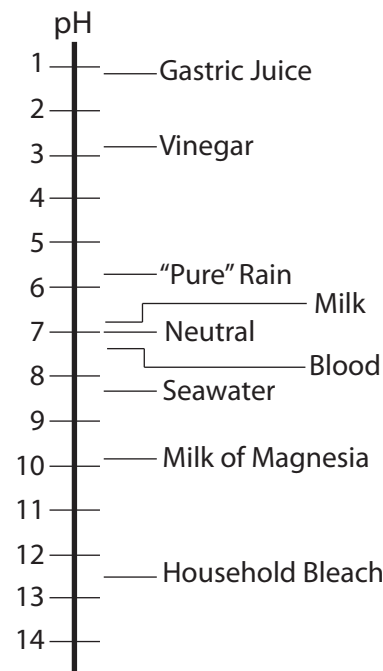


Figure 6.2 Scale showing the pH value for representative solutions. Milk of Magnesia is a saturated solution of $\text{Mg}(\text{OH})_2$.

A common mistake when using equation 6.14 is to forget that it applies only to a conjugate acid–base pair.

When finding the K_b value for polyprotic weak base, you must be careful to choose the correct K_a value. Remember that equation 6.14 applies only to a conjugate acid–base pair. The conjugate acid of H_2PO_4^- is H_3PO_4 , not HPO_4^{2-} .

SOLUTION

$$(a) K_{b, \text{C}_5\text{H}_5\text{N}} = \frac{K_w}{K_{a, \text{C}_5\text{H}_5\text{NH}^+}} = \frac{1.00 \times 10^{-14}}{5.90 \times 10^{-6}} = 1.69 \times 10^{-9}$$

$$(b) K_{b, \text{H}_2\text{PO}_4^-} = \frac{K_w}{K_{a, \text{H}_3\text{PO}_4}} = \frac{1.00 \times 10^{-14}}{7.11 \times 10^{-3}} = 1.41 \times 10^{-12}$$

Practice Exercise 6.2

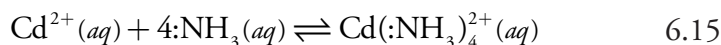
Using [Appendix 11](#), calculate the K_b values for hydrogen oxalate, HC_2O_4^- , and oxalate, $\text{C}_2\text{O}_4^{2-}$.

Click [here](#) to review your answer to this exercise.

6D.3 Complexation Reactions

A more general definition of acids and bases was proposed in 1923 by G. N. Lewis. The Brønsted-Lowry definition of acids and bases focuses on an acid's proton-donating ability and a base's proton-accepting ability. Lewis theory, on the other hand, uses the breaking and forming of covalent bonds to describe acid–base characteristics. In this treatment, an acid is an electron pair acceptor and a base is an electron pair donor. Although we can apply Lewis theory to the treatment of acid–base reactions, it is more useful for treating complexation reactions between metal ions and ligands.

The following reaction between the metal ion Cd^{2+} and the **LIGAND** NH_3 is typical of a complexation reaction.



The product of this reaction is a **METAL-LIGAND COMPLEX**. In writing this reaction we show ammonia as $:\text{NH}_3$, using a pair of dots to emphasize the pair of electrons it donates to Cd^{2+} . In subsequent reactions we will omit this notation.

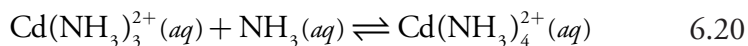
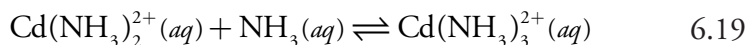
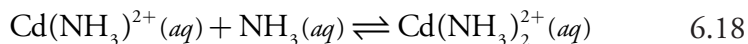
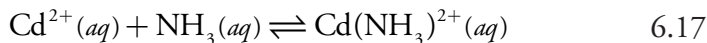
METAL-LIGAND FORMATION CONSTANTS

We characterize the formation of a metal–ligand complex by a **FORMATION CONSTANT**, K_f . The complexation reaction between Cd^{2+} and NH_3 , for example, has the following equilibrium constant.

$$K_f = \frac{[\text{Cd}(\text{NH}_3)_4^{2+}]}{[\text{Cd}^{2+}][\text{NH}_3]^4} = 5.5 \times 10^7 \quad 6.16$$

The reverse of reaction 6.15 is a dissociation reaction, which we characterize by a **DISSOCIATION CONSTANT**, K_d , that is the reciprocal of K_f .

Many complexation reactions occur in a stepwise fashion. For example, the reaction between Cd^{2+} and NH_3 involves four successive reactions.



To avoid ambiguity, we divide formation constants into two categories. **STEPWISE FORMATION CONSTANTS**, which we designate as K_i for the i th step, describe the successive addition of one ligand to the metal–ligand complex from the previous step. Thus, the equilibrium constants for reactions 6.17–6.20 are, respectively, K_1 , K_2 , K_3 , and K_4 . Overall, or **CUMULATIVE FORMATION CONSTANTS**, which we designate as β_i , describe the addition of i ligands to the free metal ion. The equilibrium constant in [equation 6.16](#) is correctly identified as β_4 , where

$$\beta_4 = K_1 \times K_2 \times K_3 \times K_4$$

In general

$$\beta_i = K_1 \times K_2 \times \cdots \times K_i$$

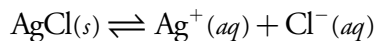
Stepwise and overall formation constants for selected metal–ligand complexes are in [Appendix 12](#).

METAL-LIGAND COMPLEXATION AND SOLUBILITY

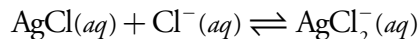
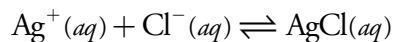
A formation constant characterizes the addition of one or more ligands to a free metal ion. To find the equilibrium constant for a complexation reaction involving a solid, we combine appropriate K_{sp} and K_f expressions. For example, the solubility of AgCl increases in the presence of excess chloride as the result of the following complexation reaction.



We can write this reaction as the sum of three other reactions with known equilibrium constants—the solubility of AgCl, described by its K_{sp}



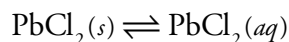
and the stepwise formation of AgCl_2^- , described by K_1 and K_2 .



The equilibrium constant for reaction 6.21, therefore, is $K_{\text{sp}} \times K_1 \times K_2$.

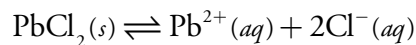
Example 6.4

Determine the value of the equilibrium constant for the reaction

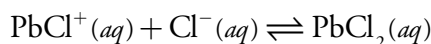
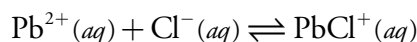


SOLUTION

We can write this reaction as the sum of three other reactions. The first of these reactions is the solubility of $\text{PbCl}_2(s)$, described by its K_{sp} reaction.



The remaining two reactions are the stepwise formation of $\text{PbCl}_2(aq)$, described by K_1 and K_2 .

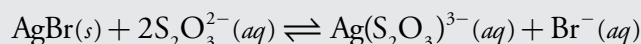


Using values for K_{sp} , K_1 , and K_2 from [Appendix 10](#) and [Appendix 12](#), we find that the equilibrium constant is

$$K = K_{\text{sp}} \times K_1 \times K_2 = (1.7 \times 10^{-5}) \times 38.9 \times 1.62 = 1.1 \times 10^{-3}$$

Practice Exercise 6.3

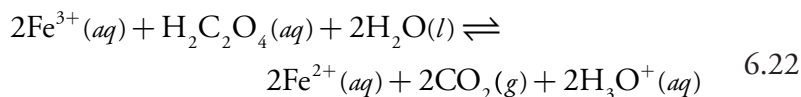
What is the equilibrium constant for the following reaction? You will find appropriate equilibrium constants in [Appendix 10](#) and [Appendix 11](#).



Click [here](#) to review your answer to this exercise.

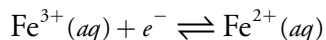
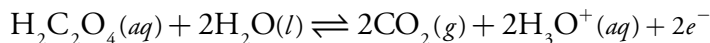
6D.4 Oxidation–Reduction (Redox) Reactions

An oxidation–reduction reaction occurs when electrons move from one reactant to another reactant. As a result of this electron transfer, these reactants undergo a change in oxidation state. Those reactants that experience an increase in oxidation state undergo **OXIDATION**, and those experiencing a decrease in oxidation state undergo **REDUCTION**. For example, in the following redox reaction between Fe^{3+} and oxalic acid, $\text{H}_2\text{C}_2\text{O}_4$, iron is reduced because its oxidation state changes from +3 to +2.



Oxalic acid, on the other hand, undergoes oxidation because the oxidation state for carbon increases from +3 in $\text{H}_2\text{C}_2\text{O}_4$ to +4 in CO_2 .

We can divide a redox reaction, such as [reaction 6.22](#), into separate **HALF-REACTIONS** that show the oxidation and the reduction processes.



It is important to remember, however, that an oxidation reaction and a reduction reaction occur as a pair. We formalize this relationship by identifying as a **REDUCING AGENT** the reactant undergoing oxidation, because it provides the electrons for the reduction half-reaction. Conversely, the reactant undergoing reduction is an **OXIDIZING AGENT**. In [reaction 6.22](#), Fe^{3+} is the oxidizing agent and $\text{H}_2\text{C}_2\text{O}_4$ is the reducing agent.

The products of a redox reaction also have redox properties. For example, the Fe^{2+} in [reaction 6.22](#) can be oxidized to Fe^{3+} , while CO_2 can be reduced to $\text{H}_2\text{C}_2\text{O}_4$. Borrowing some terminology from acid–base chemistry, Fe^{2+} is the conjugate reducing agent of the oxidizing agent Fe^{3+} , and CO_2 is the conjugate oxidizing agent of the reducing agent $\text{H}_2\text{C}_2\text{O}_4$.

THERMODYNAMICS OF REDOX REACTIONS

Unlike precipitation reactions, acid–base reactions, and complexation reactions, we rarely express the equilibrium position of a redox reaction using an equilibrium constant. Because a redox reaction involves a transfer of electrons from a reducing agent to an oxidizing agent, it is convenient to consider the reaction's thermodynamics in terms of the electron.

For a reaction in which one mole of a reactant undergoes oxidation or reduction, the net transfer of charge, Q , in coulombs is

$$Q = nF$$

where n is the moles of electrons per mole of reactant, and F is Faraday's constant (96,485 C/mol). The free energy, ΔG , to move this charge, Q , over a change in **POTENTIAL**, E , is

$$\Delta G = EQ$$

The change in free energy (in kJ/mole) for a redox reaction, therefore, is

$$\Delta G = -nFE \tag{6.23}$$

where ΔG has units of kJ/mol. The minus sign in equation 6.23 is the result of a difference in the conventions for assigning a reaction's favorable direction. In thermodynamics, a reaction is favored when ΔG is negative, but a redox reaction is favored when E is positive. Substituting equation 6.23 into [equation 6.3](#)

$$-nFE = -nFE^\circ + RT \ln Q$$

and dividing by $-nF$, leads to the well-known **NERNST EQUATION**

$$E = E^\circ - \frac{RT}{nF} \ln Q$$

where E° is the potential under standard-state conditions. Substituting appropriate values for R and F , assuming a temperature of 25°C (298 K), and switching from \ln to \log gives the potential in volts as

$$\ln(x) = 2.303\log(x)$$

$$E = E^\circ - \frac{0.05916}{n} \log Q \quad 6.24$$

STANDARD POTENTIALS

A redox reaction's **STANDARD POTENTIAL**, E° , provides an alternative way of expressing its equilibrium constant and, therefore, its equilibrium position. Because a reaction at equilibrium has a ΔG of zero, the potential, E , also must be zero at equilibrium. Substituting these values into equation 6.24 and rearranging provides a relationship between E° and K .

A standard potential is the potential when all species are in their standard states. You may recall that we define standard state conditions as: all gases have partial pressures of 1 atm, all solutes have concentrations of 1 mol/L, and all solids and liquids are pure.

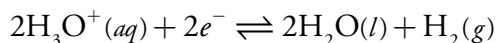
$$E^\circ = \frac{0.05916}{n} \log K \quad 6.25$$

We generally do not tabulate standard potentials for redox reactions. Instead, we calculate E° using the standard potentials for the corresponding oxidation half-reaction and reduction half-reaction. By convention, standard potentials are provided for reduction half-reactions. The standard potential for a redox reaction, E° , is

$$E^\circ = E^\circ_{\text{red}} - E^\circ_{\text{ox}}$$

where E°_{red} and E°_{ox} are the standard reduction potentials for the reduction half-reaction and the oxidation half-reaction.

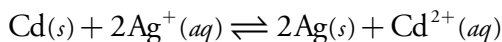
Because we cannot measure the potential for a single half-reaction, we arbitrarily assign a standard reduction potential of zero to a reference half-reaction and report all other reduction potentials relative to this reference. The reference half-reaction is



[Appendix 13](#) contains a list of selected standard reduction potentials. The more positive the standard reduction potential, the more favorable the reduction reaction under standard state conditions. Thus, under standard state conditions the reduction of Cu^{2+} to Cu ($E^\circ = +0.3419\text{ V}$) is more favorable than the reduction of Zn^{2+} to Zn ($E^\circ = -0.7618\text{ V}$).

Example 6.5

Calculate (a) the standard potential, (b) the equilibrium constant, and (c) the potential when $[\text{Ag}^+] = 0.020\text{ M}$ and $[\text{Cd}^{2+}] = 0.050\text{ M}$, for the following reaction at 25°C .

**SOLUTION**

- (a) In this reaction Cd is undergoing oxidation and Ag^+ is undergoing reduction. The standard cell potential, therefore, is

$$E^\circ = E^\circ_{\text{Ag}^+/\text{Ag}} - E^\circ_{\text{Cd}^{2+}/\text{Cd}} = 0.7996 - (-0.4030) = 1.2026 \text{ V}$$

- (b) To calculate the equilibrium constant we substitute appropriate values into [equation 6.25](#).

$$E^\circ = 1.2026 \text{ V} = \frac{0.05916 \text{ V}}{2} \log K$$

Solving for K gives the equilibrium constant as

$$\begin{aligned} \log K &= 40.6558 \\ K &= 4.527 \times 10^{40} \end{aligned}$$

- (c) To calculate the potential when $[\text{Ag}^+]$ is 0.020 M and $[\text{Cd}^{2+}]$ is 0.050 M, we use the appropriate relationship for the reaction quotient, Q , in [equation 6.24](#).

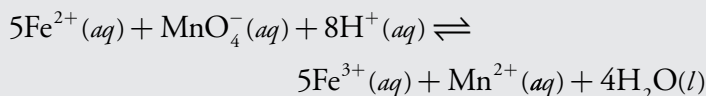
$$E = E^\circ - \frac{0.05916 \text{ V}}{n} \log \frac{[\text{Cd}^{2+}]}{[\text{Ag}^+]^2}$$

$$E = 1.2026 \text{ V} - \frac{0.05916 \text{ V}}{2} \log \frac{(0.050)}{(0.020)^2}$$

$$E = 1.14 \text{ V}$$

Practice Exercise 6.4

For the following reaction at 25 °C



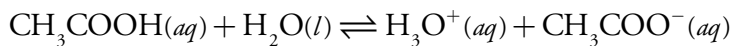
calculate (a) the standard potential, (b) the equilibrium constant, and (c) the potential under these conditions: $[\text{Fe}^{2+}] = 0.50 \text{ M}$, $[\text{Fe}^{3+}] = 0.10 \text{ M}$, $[\text{MnO}_4^-] = 0.025 \text{ M}$, $[\text{Mn}^{2+}] = 0.015 \text{ M}$, and a pH of 7.00. See [Appendix 13](#) for standard state reduction potentials.

Click [here](#) to review your answer to this exercise.

When writing precipitation, acid–base, and metal–ligand complexation reactions, we represent acidity as H_3O^+ . Redox reactions are more commonly written using H^+ instead of H_3O^+ . For the reaction in Practice Exercise 6.4, we could replace H^+ with H_3O^+ and increase the stoichiometric coefficient for H_2O from 4 to 12.

6E Le Châtelier's Principle

At a temperature of 25 °C, acetic acid's dissociation reaction



has an equilibrium constant of

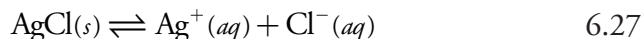
$$K_a = \frac{[\text{CH}_3\text{COO}^-][\text{H}_3\text{O}^+]}{[\text{CH}_3\text{COOH}]} = 1.75 \times 10^{-5} \quad 6.26$$

Because equation 6.26 has three variables— $[\text{CH}_3\text{COOH}]$, $[\text{CH}_3\text{COO}^-]$, and $[\text{H}_3\text{O}^+]$ —it does not have a unique mathematical solution. Nevertheless, although two solutions of acetic acid may have different values for $[\text{CH}_3\text{COOH}]$, $[\text{CH}_3\text{COO}^-]$, and $[\text{H}_3\text{O}^+]$, each solution must have the same value of K_a .

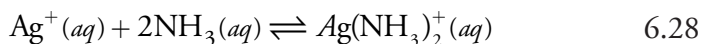
If we add sodium acetate to a solution of acetic acid, the concentration of CH_3COO^- increases, suggesting an apparent increase in the value of K_a . Because K_a must remain constant, the concentration of all three species in equation 6.26 must change to restore K_a to its original value. In this case, a partial reaction of CH_3COO^- and H_3O^+ decreases their concentrations, producing additional CH_3COOH and reestablishing the equilibrium.

The observation that a system at equilibrium responds to an external stress by reequilibrating in a manner that diminishes the stress, is formalized as **LE CHÂTELIER'S PRINCIPLE**. One of the most common stresses to a system at equilibrium is to change the concentration of a reactant or product. We already have seen, in the case of adding sodium acetate to acetic acid, that if we add a product to a reaction at equilibrium the system responds by converting some of the products into reactants. Adding a reactant has the opposite effect, resulting in the conversion of reactants to products.

When we add sodium acetate to a solution of acetic acid, we are directly applying the stress to the system. It is also possible to indirectly apply a concentration stress. Consider, for example, the solubility of AgCl .



The effect on the solubility of AgCl of adding AgNO_3 is obvious, but what is the effect of adding a ligand that forms a stable, soluble complex with Ag^+ ? Ammonia, for example, reacts with Ag^+ as shown here



Adding ammonia decreases the concentration of Ag^+ as the $\text{Ag}(\text{NH}_3)_2^+$ complex forms. In turn, decreasing the concentration of Ag^+ increases the solubility of AgCl as reaction 6.27 reestablishes its equilibrium position. Adding together reaction 6.27 and reaction 6.28 clarifies the effect of ammonia on the solubility of AgCl , by showing ammonia as a reactant.



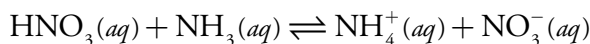
So what is the effect on the solubility of AgCl of adding AgNO_3 ? Adding AgNO_3 increases the concentration of Ag^+ in solution. To reestablish equilibrium, some of the Ag^+ and Cl^- react to form additional AgCl ; thus, the solubility of AgCl decreases. The solubility product, K_{sp} , of course, remains unchanged.

Example 6.6

What happens to the solubility of AgCl if we add HNO₃ to the equilibrium solution defined by [reaction 6.29](#)?

SOLUTION

Nitric acid is a strong acid, which reacts with ammonia as shown here



Adding nitric acid lowers the concentration of ammonia. Decreasing ammonia's concentration causes [reaction 6.29](#) to move from products to reactants, decreasing the solubility of AgCl.

Increasing or decreasing the partial pressure of a gas is the same as increasing or decreasing its concentration. Because the concentration of a gas depends on its partial pressure, and not on the total pressure of the system, adding or removing an inert gas has no effect on a reaction's equilibrium position.

Most reactions involve reactants and products dispersed in a solvent. If we change the amount of solvent by diluting or concentrating the solution, then the concentrations of all reactants and products either decrease or increase. The effect of simultaneously changing the concentrations of all reactants and products is not as intuitively obvious as when changing the concentration of a single reactant or product. As an example, let's consider how diluting a solution affects the equilibrium position for the formation of the aqueous silver-amine complex ([reaction 6.28](#)). The equilibrium constant for this reaction is

$$\beta_2 = \frac{[\text{Ag}(\text{NH}_3)_2^+]_{\text{eq}}}{[\text{Ag}^+]_{\text{eq}}[\text{NH}_3]_{\text{eq}}^2} \quad 6.30$$

where we include the subscript "eq" for clarification. If we dilute a portion of this solution with an equal volume of water, each of the concentration terms in equation 6.30 is cut in half. The reaction quotient, Q , becomes

$$Q = \frac{0.5[\text{Ag}(\text{NH}_3)_2^+]_{\text{eq}}}{0.5[\text{Ag}^+]_{\text{eq}}(0.5)^2[\text{NH}_3]_{\text{eq}}^2} = \frac{0.5}{(0.5)^3} \times \frac{[\text{Ag}(\text{NH}_3)_2^+]_{\text{eq}}}{[\text{Ag}^+]_{\text{eq}}[\text{NH}_3]_{\text{eq}}^2} = 4\beta_2$$

Because Q is greater than β_2 , equilibrium is reestablished by shifting the reaction to the left, decreasing the concentration of $\text{Ag}(\text{NH}_3)_2^+$. Note that the new equilibrium position lies toward the side of the equilibrium reaction having the greatest number of solute particles (one Ag^+ ion and two molecules of NH_3 versus a single metal-ligand complex). If we concentrate the solution of $\text{Ag}(\text{NH}_3)_2^+$ by evaporating some of the solvent, equilibrium is reestablished in the opposite direction. This is a general conclusion that we can apply to any reaction. Increasing volume always favors the direc-

The relationship between pressure and concentration can be deduced using the ideal gas law. Starting with $PV = nRT$, we solve for the molar concentration

$$\text{molar concentration} = \frac{n}{V} = \frac{P}{RT}$$

Of course, this assumes that the gas is behaving ideally, which usually is a reasonable assumption under normal laboratory conditions.

tion producing the greatest number of particles, and decreasing volume always favors the direction producing the fewest particles. If the number of particles is the same on both sides of the reaction, then the equilibrium position is unaffected by a change in volume.

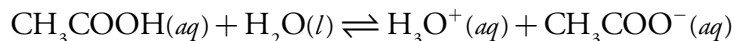
6F Ladder Diagrams

When developing or evaluating an analytical method, we often need to understand how the chemistry taking place affects our results. Suppose we wish to isolate Ag^+ by precipitating it as AgCl . If we also need to control pH, then we must use a reagent that will not adversely affect the solubility of AgCl . It is a mistake to add NH_3 to the reaction mixture, for example, because it increases the solubility of AgCl ([reaction 6.29](#)).

In this section we introduce the **LADDER DIAGRAM** as a simple graphical tool for evaluating the equilibrium chemistry.² Using ladder diagrams we will be able to determine what reactions occur when combining several reagents, estimate the approximate composition of a system at equilibrium, and evaluate how a change to solution conditions might affect an analytical method.

6F.1 Ladder Diagrams for Acid–Base Equilibria

Let's use acetic acid, CH_3COOH , to illustrate the process of drawing and interpreting an acid–base ladder diagram. Before drawing the diagram, however, let's consider the equilibrium reaction in more detail. The equilibrium constant expression for acetic acid's dissociation reaction



is

$$K_a = \frac{[\text{CH}_3\text{COO}^-][\text{H}_3\text{O}^+]}{[\text{CH}_3\text{COOH}]} = 1.75 \times 10^{-5}$$

Taking the logarithm of each term in this equation, and multiplying through by -1 gives

$$-\log K_a = -\log[\text{H}_3\text{O}^+] - \log \frac{[\text{CH}_3\text{COO}^-]}{[\text{CH}_3\text{COOH}]} = 4.76$$

Replacing the negative log terms with p-functions and rearranging the equation, leaves us with the result shown here.

² Although not specifically on the topic of ladder diagrams as developed in this section, the following sources provide appropriate background information: (a) Runo, J. R.; Peters, D. G. *J. Chem. Educ.* **1993**, *70*, 708–713; (b) Vale, J.; Fernández-Pereira, C.; Alcalde, M. *J. Chem. Educ.* **1993**, *70*, 790–795; (c) Fernández-Pereira, C.; Vale, J. *Chem. Educator* **1996**, *6*, 1–18; (d) Fernández-Pereira, C.; Vale, J.; Alcalde, M. *Chem. Educator* **2003**, *8*, 15–21; (e) Fernández-Pereira, C.; Alcalde, M.; Villegas, R.; Vale, J. *J. Chem. Educ.* **2007**, *84*, 520–525.

One of the primary sources of determinate errors in many analytical methods is failing to account for potential chemical interferences.

Ladder diagrams are a great tool for helping you to think intuitively about analytical chemistry. We will make frequent use of them in the chapters to follow.

$$\text{pH} = \text{p}K_a + \log \frac{[\text{CH}_3\text{COO}^-]}{[\text{CH}_3\text{COOH}]} = 4.76 \quad 6.31$$

Equation 6.31 tells us a great deal about the relationship between pH and the relative amounts of acetic acid and acetate at equilibrium. If the concentrations of CH_3COOH and CH_3COO^- are equal, then equation 6.31 reduces to

$$\text{pH} = \text{p}K_a + \log(1) = \text{p}K_a = 4.76$$

If the concentration of CH_3COO^- is greater than that of CH_3COOH , then the log term in equation 6.31 is positive and

$$\text{pH} > \text{p}K_a \quad \text{or} \quad \text{pH} > 4.76$$

This is a reasonable result because we expect the concentration of the conjugate base, CH_3COO^- , to increase as the pH increases. Similar reasoning shows that the concentration of CH_3COOH exceeds that of CH_3COO^- when

$$\text{pH} < \text{p}K_a \quad \text{or} \quad \text{pH} < 4.76$$

Now we are ready to construct acetic acid's ladder diagram (Figure 6.3). First, we draw a vertical arrow representing the solution's pH, with smaller (more acidic) pH levels at the bottom and larger (more basic) pH levels at the top. Second, we draw a horizontal line at a pH equal to acetic acid's $\text{p}K_a$ value. This line, or step on the ladder, divides the pH axis into regions where either CH_3COOH or CH_3COO^- is the predominate species. This completes the ladder diagram.

Using the ladder diagram, it is easy to identify the predominate form of acetic acid at any pH. At a pH of 3.5, for example, acetic acid exists primarily as CH_3COOH . If we add sufficient base to the solution such that the pH increases to 6.5, the predominate form of acetic acid is CH_3COO^- .

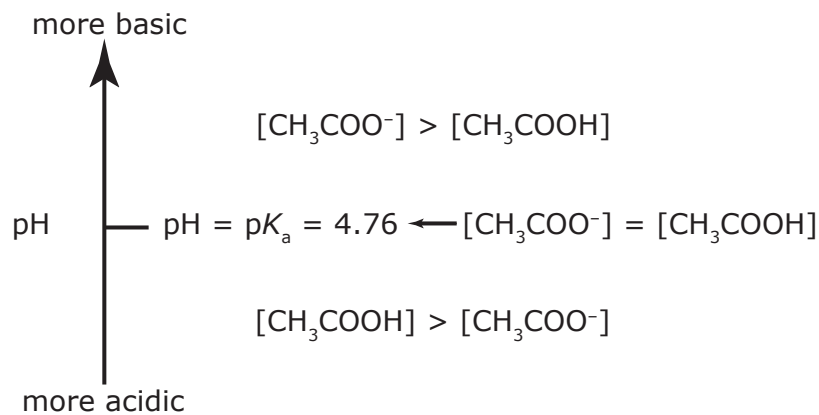


Figure 6.3 Acid–base ladder diagram for acetic acid showing the relative concentrations of CH_3COOH and CH_3COO^- . A simpler version of this ladder diagram dispenses with the equalities and shows only the predominate species in each region.

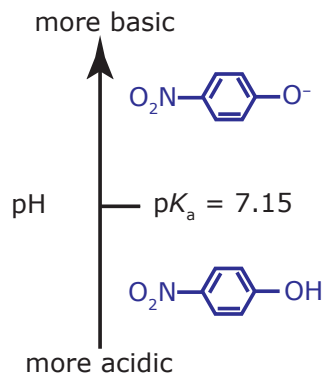


Figure 6.4 Acid–base ladder diagram for *p*-nitrophenolate.

Example 6.7

Draw a ladder diagram for the weak base *p*-nitrophenolate and identify its predominate form at a pH of 6.00.

SOLUTION

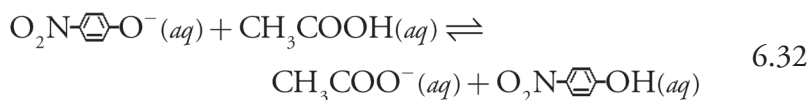
To draw a ladder diagram for a weak base, we simply draw the ladder diagram for its conjugate weak acid. From [Appendix 12](#), the pK_a for *p*-nitrophenol is 7.15. The resulting ladder diagram is shown in Figure 6.4. At a pH of 6.00, *p*-nitrophenolate is present primarily in its weak acid form.

Practice Exercise 6.5

Draw a ladder diagram for carbonic acid, H_2CO_3 . Because H_2CO_3 is a diprotic weak acid, your ladder diagram will have two steps. What is the predominate form of carbonic acid when the pH is 7.00? Relevant equilibrium constants are in [Appendix 11](#).

Click [here](#) to review your answer to this exercise.

Ladder diagrams are particularly useful for evaluating the reactivity between a weak acid and a weak base. Figure 6.5 shows a single ladder diagram for acetic acid/acetate and *p*-nitrophenol/*p*-nitrophenolate. An acid and a base can not co-exist if their respective areas of predominance do not overlap. If we mix together solutions of acetic acid and sodium *p*-nitrophenolate, the reaction



occurs because the areas of predominance for acetic acid and *p*-nitrophenolate do not overlap. The solution's final composition depends on which spe-

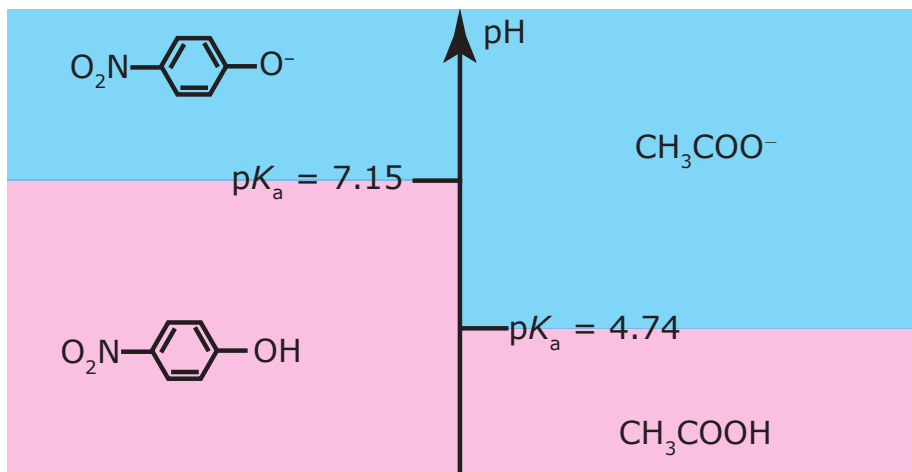


Figure 6.5 Acid–base ladder diagram showing the areas of predominance for acetic acid/acetate and for *p*-nitrophenol/*p*-nitrophenolate. The areas in blue shading show the pH range where the weak bases are the predominate species; the weak acid forms are the predominate species in the areas shown in pink shading.

cies is the limiting reagent. The following example shows how we can use the ladder diagram in [Figure 6.5](#) to evaluate the result of mixing together solutions of acetic acid and *p*-nitrophenolate.

Example 6.8

Predict the approximate pH and the final composition of mixing together 0.090 moles of acetic acid and 0.040 moles of *p*-nitrophenolate.

SOLUTION

The ladder diagram in [Figure 6.5](#) indicates that the reaction between acetic acid and *p*-nitrophenolate is favorable. Because acetic acid is in excess, we assume that the reaction of *p*-nitrophenolate to *p*-nitrophenol is complete. At equilibrium essentially no *p*-nitrophenolate remains and there are 0.040 mol of *p*-nitrophenol. Converting *p*-nitrophenolate to *p*-nitrophenol consumes 0.040 moles of acetic acid; thus

$$\text{moles CH}_3\text{COOH} = 0.090 - 0.040 = 0.050 \text{ mol}$$

$$\text{moles CH}_3\text{COO}^- = 0.040 \text{ mol}$$

According to the ladder diagram, the pH is 4.76 when there are equal amounts of CH_3COOH and CH_3COO^- . Because we have slightly more CH_3COOH than CH_3COO^- , the pH is slightly less than 4.76.

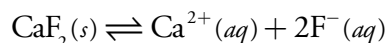
Practice Exercise 6.6

Using [Figure 6.5](#), predict the approximate pH and the composition of a solution formed by mixing together 0.090 moles of *p*-nitrophenolate and 0.040 moles of acetic acid.

Click [here](#) to review your answer to this exercise.

If the areas of predominance for an acid and a base overlap, then practically no reaction occurs. For example, if we mix together solutions of CH_3COO^- and *p*-nitrophenol, there is no significant change in the moles of either reagent. Furthermore, the pH of the mixture must be between 4.76 and 7.15, with the exact pH depending upon the relative amounts of CH_3COO^- and *p*-nitrophenol.

We also can use an acid–base ladder diagram to evaluate the effect of pH on other equilibria. For example, the solubility of CaF_2



is affected by pH because F^- is a weak base. Using Le Châtelier's principle, converting F^- to HF increases the solubility of CaF_2 . To minimize the solubility of CaF_2 we need to maintain the solution's pH so that F^- is the predominate species. The ladder diagram for HF ([Figure 6.6](#)) shows us that maintaining a pH of more than 3.17 minimizes solubility losses.

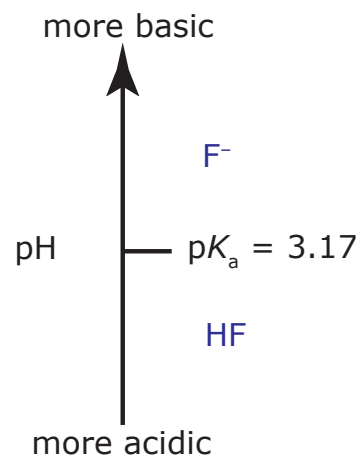


Figure 6.6 Acid–base ladder diagram for HF. To minimize the solubility of CaF_2 , we need to keep the pH above 3.17, with more basic pH levels leading to smaller solubility losses. See [Chapter 8](#) for a more detailed discussion.

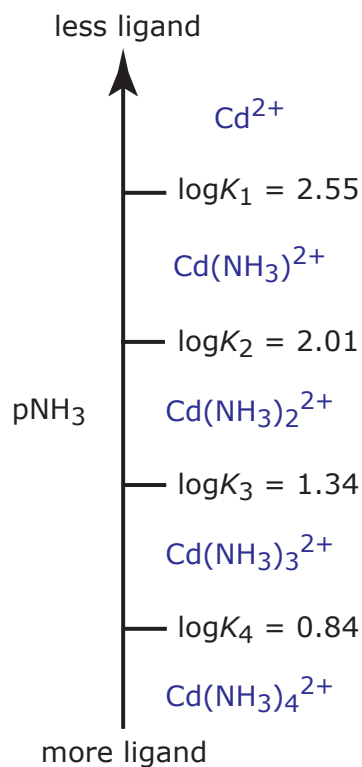
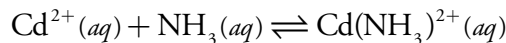


Figure 6.7 Metal–ligand ladder diagram for Cd^{2+} – NH_3 complexation reactions. Note that higher-order complexes form when pNH_3 is smaller (which corresponds to larger concentrations of NH_3).

6F.2 Ladder Diagrams for Complexation Equilibria

We can apply the same principles for constructing and interpreting acid–base ladder diagrams to equilibria involving metal–ligand complexes. For a complexation reaction we define the ladder diagram’s scale using the concentration of uncomplexed, or free ligand, pL . Using the formation of $\text{Cd}(\text{NH}_3)^{2+}$ as an example



we can easily show that $\log K_1$ is the dividing line between the areas of predominance for Cd^{2+} and $\text{Cd}(\text{NH}_3)^{2+}$.

$$K_1 = \frac{[\text{Cd}(\text{NH}_3)^{2+}]}{[\text{Cd}^{2+}][\text{NH}_3]} = 3.55 \times 10^2$$

$$\log K_1 = \log \frac{[\text{Cd}(\text{NH}_3)^{2+}]}{[\text{Cd}^{2+}]} - \log[\text{NH}_3] = 2.55$$

$$\log K_1 = \log \frac{[\text{Cd}(\text{NH}_3)^{2+}]}{[\text{Cd}^{2+}]} + \text{pNH}_3 = 2.55$$

$$\text{pNH}_3 = \log K_1 + \log \frac{[\text{Cd}^{2+}]}{[\text{Cd}(\text{NH}_3)^{2+}]} = 2.55$$

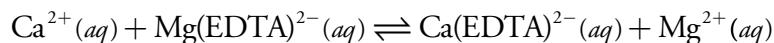
Thus, Cd^{2+} is the predominate species when pNH_3 is greater than 2.55 (a concentration of NH_3 smaller than 2.82×10^{-3} M) and for pNH_3 values less than 2.55, $\text{Cd}(\text{NH}_3)^{2+}$ is the predominate species. Figure 6.7 shows a complete metal–ligand ladder diagram for Cd^{2+} and NH_3 .

Example 6.9

Draw a single ladder diagram for the $\text{Ca}(\text{EDTA})^{2-}$ and $\text{Mg}(\text{EDTA})^{2-}$ metal–ligand complexes. Using your ladder diagram, predict the result of adding 0.080 moles of Ca^{2+} to 0.060 moles of $\text{Mg}(\text{EDTA})^{2-}$. EDTA is an abbreviation for the ligand ethylenediaminetetraacetic acid.

SOLUTION

Figure 6.8 shows the ladder diagram for this system of metal–ligand complexes. Because the predominance regions for Ca^{2+} and $\text{Mg}(\text{EDTA})^{2-}$ do not overlap, the reaction



takes place. Because Ca^{2+} is the excess reagent, the composition of the final solution is approximately

$$\text{moles Ca}^{2+} = 0.080 - 0.060 = 0.020 \text{ mol}$$

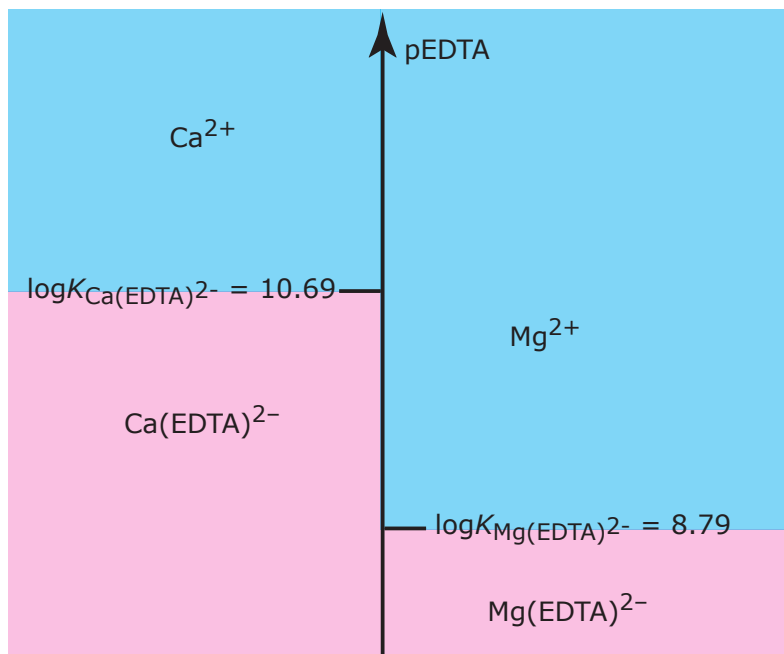
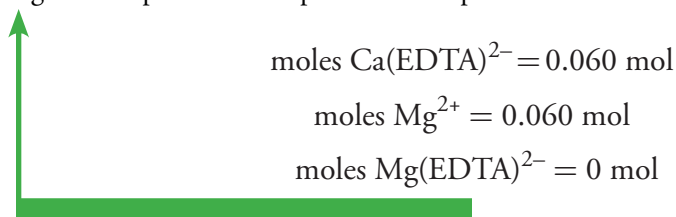
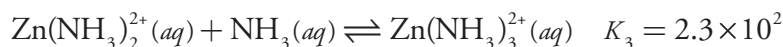
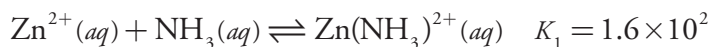


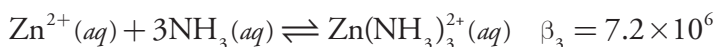
Figure 6.8 Metal–ligand ladder diagram for $\text{Ca}(\text{EDTA})^{2-}$ and for $\text{Mg}(\text{EDTA})^{2-}$. The areas with blue shading shows the pEDTA range where the free metal ions are the predominate species; the metal–ligand complexes are the predominate species in the areas shown with pink shading.



The metal–ligand ladder diagram in [Figure 6.7](#) uses stepwise formation constants. We can also construct ladder diagrams using cumulative formation constants. The first three stepwise formation constants for the reaction of Zn^{2+} with NH_3



show that the formation of $\text{Zn}(\text{NH}_3)_3^{2+}$ is more favorable than the formation of $\text{Zn}(\text{NH}_3)^{2+}$ or $\text{Zn}(\text{NH}_3)_2^{2+}$. For this reason, the equilibrium is best represented by the cumulative formation reaction shown here.



To see how we incorporate this cumulative formation constant into a ladder diagram, we begin with the reaction's equilibrium constant expression.

Because K_3 is greater than K_2 , which is greater than K_1 , the formation of the metal–ligand complex $\text{Zn}(\text{NH}_3)_3^{2+}$ is more favorable than the formation of the other metal ligand complexes. For this reason, at lower values of pNH_3 the concentration of $\text{Zn}(\text{NH}_3)_3^{2+}$ is larger than that for $\text{Zn}(\text{NH}_3)_2^{2+}$ and $\text{Zn}(\text{NH}_3)^{2+}$. The value of β_3 is

$$\beta_3 = K_1 \times K_2 \times K_3$$

$$\beta_3 = \frac{[\text{Zn}(\text{NH}_3)_3^{2+}]}{[\text{Zn}^{2+}][\text{NH}_3]^3}$$

Taking the log of each side gives

$$\log \beta_3 = \log \frac{[\text{Zn}(\text{NH}_3)_3^{2+}]}{[\text{Zn}^{2+}]} - 3 \log [\text{NH}_3]$$

or

$$\text{pNH}_3 = \frac{1}{3} \log \beta_3 + \frac{1}{3} \log \frac{[\text{Zn}]}{[\text{Zn}(\text{NH}_3)_3^{2+}]}$$

When the concentrations of Zn^{2+} and $\text{Zn}(\text{NH}_3)_3^{2+}$ are equal, then

$$\text{pNH}_3 = \frac{1}{3} \log \beta_3 = 2.29$$

In general, for the metal–ligand complex ML_n , the step for a cumulative formation constant is

$$\text{pL} = \frac{1}{n} \log \beta_n$$

Figure 6.9 shows the complete ladder diagram for the Zn^{2+} – NH_3 system.

6F.3 Ladder Diagram for Oxidation/Reduction Equilibria

We also can construct ladder diagrams to help evaluate redox equilibria. Figure 6.10 shows a typical ladder diagram for two half-reactions in which the scale is the potential, E . The Nernst equation defines the areas of predominance. Using the $\text{Fe}^{3+}/\text{Fe}^{2+}$ half-reaction as an example, we write

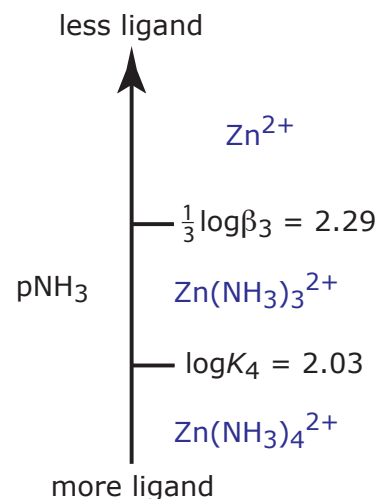
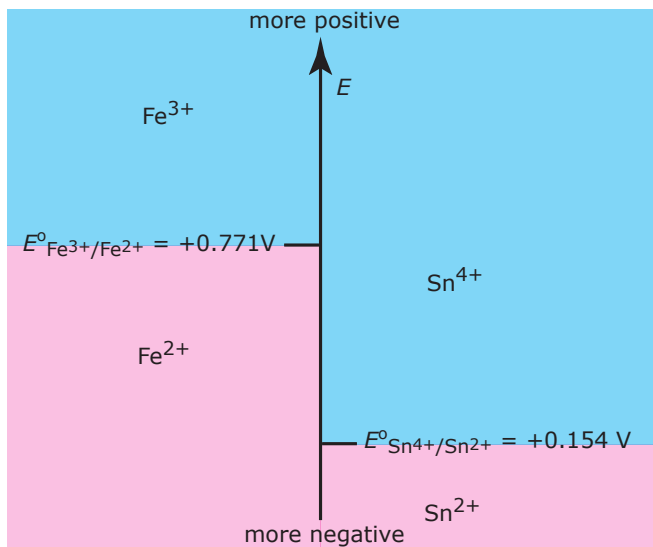


Figure 6.9 Ladder diagram for Zn^{2+} – NH_3 metal–ligand complexation reactions showing both a step based on a cumulative formation constant, and a step based on a stepwise formation constant.

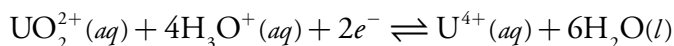
Figure 6.10 Redox ladder diagram for $\text{Fe}^{3+}/\text{Fe}^{2+}$ and for $\text{Sn}^{4+}/\text{Sn}^{2+}$. The areas with blue shading show the potential range where the oxidized forms are the predominate species; the reduced forms are the predominate species in the areas shown with pink shading. Note that a more positive potential favors the oxidized form.



$$E = E^\circ - \frac{RT}{nF} \ln \frac{[\text{Fe}^{2+}]}{[\text{Fe}^{3+}]} = +0.771 - 0.05916 \log \frac{[\text{Fe}^{2+}]}{[\text{Fe}^{3+}]}$$

At potentials more positive than the standard state potential, the predominate species is Fe^{3+} , whereas Fe^{2+} predominates at potentials more negative than E° . When coupled with the step for the $\text{Sn}^{4+}/\text{Sn}^{2+}$ half-reaction we see that Sn^{2+} is a useful reducing agent for Fe^{3+} . If Sn^{2+} is in excess, the potential of the resulting solution is near +0.151 V.

Because the steps on a redox ladder diagram are standard state potentials, complications arise if solutes other than the oxidizing agent and reducing agent are present at non-standard state concentrations. For example, the potential for the half-reaction



depends on the solution's pH. To define areas of predominance in this case we begin with the Nernst equation

$$E = +0.327 - \frac{0.05916}{2} \log \frac{[\text{U}^{4+}]}{[\text{UO}_2^{2+}][\text{H}_3\text{O}^+]^4}$$

and factor out the concentration of H_3O^+ .

$$E = +0.327 + \frac{0.05916}{2} \log[\text{H}_3\text{O}^+]^4 - \frac{0.05916}{2} \log \frac{[\text{U}^{4+}]}{[\text{UO}_2^{2+}]}$$

From this equation we see that the area of predominance for UO_2^{2+} and U^{4+} is defined by a step whose potential is

$$E = +0.327 + \frac{0.05916}{2} \log[\text{H}_3\text{O}^+]^4 = +0.327 - 0.1183\text{pH}$$

Figure 6.11 shows how pH affects the step for the $\text{UO}_2^{2+}/\text{U}^{4+}$ half-reaction.

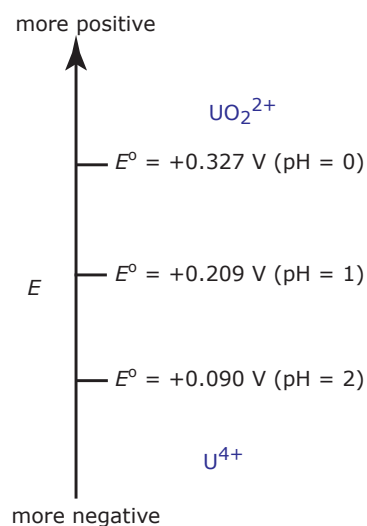


Figure 6.11 Redox ladder diagram for the $\text{UO}_2^{2+}/\text{U}^{4+}$ half-reaction showing the effect of pH on the step.

6G Solving Equilibrium Problems

Ladder diagrams are a useful tool for evaluating chemical reactivity, usually providing a reasonable approximation of a chemical system's composition at equilibrium. If we need a more exact quantitative description of the equilibrium condition, then a ladder diagram is insufficient. In this case we need to find an algebraic solution. In this section we will learn how to set-up and solve equilibrium problems. We will start with a simple problem and work toward more complex problems.

When we first add solid $\text{Pb}(\text{IO}_3)_2$ to water, the concentrations of Pb^{2+} and IO_3^- are zero and the reaction quotient, Q , is

$$Q = [\text{Pb}^{2+}][\text{IO}_3^-]^2 = 0$$

As the solid dissolves, the concentrations of these ions increase, but Q remains smaller than K_{sp} . We reach equilibrium and “satisfy the solubility product” when

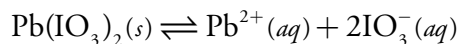
$$Q = K_{\text{sp}}$$

Because a solid, such as $\text{Pb}(\text{IO}_3)_2$, does not appear in the solubility product expression, we do not need to keep track of its concentration. Remember, however, that the K_{sp} value applies only if there is some $\text{Pb}(\text{IO}_3)_2$ present at equilibrium.

6G.1 A Simple Problem—Solubility of $\text{Pb}(\text{IO}_3)_2$

If we place an insoluble compound such as $\text{Pb}(\text{IO}_3)_2$ in deionized water, the solid dissolves until the concentrations of Pb^{2+} and IO_3^- satisfy the solubility product for $\text{Pb}(\text{IO}_3)_2$. At equilibrium the solution is saturated with $\text{Pb}(\text{IO}_3)_2$, which simply means that no more solid can dissolve. How do we determine the equilibrium concentrations of Pb^{2+} and IO_3^- , and what is the molar solubility of $\text{Pb}(\text{IO}_3)_2$ in this saturated solution?

We begin by writing the equilibrium reaction and the solubility product expression for $\text{Pb}(\text{IO}_3)_2$.



$$K_{\text{sp}} = [\text{Pb}^{2+}][\text{IO}_3^-]^2 = 2.5 \times 10^{-13} \quad 6.33$$

As $\text{Pb}(\text{IO}_3)_2$ dissolves, two IO_3^- ions are produced for each ion of Pb^{2+} . If we assume that the change in the molar concentration of Pb^{2+} at equilibrium is x , then the change in the molar concentration of IO_3^- is $2x$. The following table helps us keep track of the initial concentrations, the change in concentrations, and the equilibrium concentrations of Pb^{2+} and IO_3^- .

Concentrations	$\text{Pb}(\text{IO}_3)_2(s)$	\rightleftharpoons	$\text{Pb}^{2+}(aq)$	+	$2\text{IO}_3^-(aq)$
Initial	solid		0		0
Change	solid		+ x		+ $2x$
Equilibrium	solid		x		$2x$

Substituting the equilibrium concentrations into equation 6.33 and solving gives

$$\begin{aligned} (x)(2x)^2 &= 4x^3 = 2.5 \times 10^{-13} \\ x &= 3.97 \times 10^{-5} \end{aligned}$$

Substituting this value of x back into the equilibrium concentration expressions for Pb^{2+} and IO_3^- gives their concentrations as

$$[\text{Pb}^{2+}] = x = 4.0 \times 10^{-5} \text{ M}$$

$$[\text{IO}_3^-] = 2x = 7.9 \times 10^{-5} \text{ M}$$

We can express a compound's solubility in two ways: molar solubility (mol/L) or mass solubility (g/L). Be sure to express your answer clearly.

Because one mole of $\text{Pb}(\text{IO}_3)_2$ contains one mole of Pb^{2+} , the molar solubility of $\text{Pb}(\text{IO}_3)_2$ is equal to the concentration of Pb^{2+} , or $4.0 \times 10^{-5} \text{ M}$.

Practice Exercise 6.7

Calculate the molar solubility and the mass solubility for Hg_2Cl_2 , given the following solubility reaction and K_{sp} value.



Click [here](#) to review your answer to this exercise.

6G.2 A More Complex Problem—The Common Ion Effect

Calculating the solubility of $\text{Pb}(\text{IO}_3)_2$ in deionized water is a straightforward problem since the solid's dissolution is the only source of Pb^{2+} and IO_3^- . But what if we add $\text{Pb}(\text{IO}_3)_2$ to a solution of 0.10 M $\text{Pb}(\text{NO}_3)_2$, which provides a second source of Pb^{2+} ? Before we set-up and solve this problem algebraically, think about the system's chemistry and decide whether the solubility of $\text{Pb}(\text{IO}_3)_2$ will increase, decrease or remain the same.

We begin by setting up a table to help us keep track of the concentrations of Pb^{2+} and IO_3^- as this system moves toward and reaches equilibrium.

Concentrations	$\text{Pb}(\text{IO}_3)_2(s)$	\rightleftharpoons	$\text{Pb}^{2+}(aq)$	+	$2\text{IO}_3^-(aq)$
Initial	solid		0.10		0
Change	solid		+x		+2x
Equilibrium	solid		0.10 + x		2x

Substituting the equilibrium concentrations into [equation 6.33](#)

$$(0.10 + x)(2x)^2 = 2.5 \times 10^{-13}$$

and multiplying out the terms on the equation's left side leaves us with

$$4x^3 + 0.40x^2 = 2.5 \times 10^{-13} \quad 6.34$$

This is a more difficult equation to solve than that for the solubility of $\text{Pb}(\text{IO}_3)_2$ in deionized water, and its solution is not immediately obvious. We can find a rigorous solution to equation 6.34 using available computer software packages and spreadsheets, some of which are described in Section 6.J.

How might we solve equation 6.34 if we do not have access to a computer? One approach is to use our understanding of chemistry to simplify the problem. From Le Châtelier's principle we know that a large initial concentration of Pb^{2+} significantly decreases the solubility of $\text{Pb}(\text{IO}_3)_2$. One reasonable assumption is that the equilibrium concentration of Pb^{2+} is very close to its initial concentration. If this assumption is correct, then the following approximation is reasonable

$$[\text{Pb}^{2+}] = 0.10 + x \approx 0.10 \text{ M}$$

Substituting our approximation into [equation 6.33](#) and solving for x gives

$$(0.1)(2x)^2 = 2.5 \times 10^{-13}$$

$$0.4x^2 = 2.5 \times 10^{-13}$$

$$x = 7.91 \times 10^{-7}$$

Before accepting this answer, we must verify that our approximation is reasonable. The difference between the calculated concentration of Pb^{2+} , $0.10 + x$ M, and our assumption that it is 0.10 M is 7.9×10^{-7} , or $7.9 \times 10^{-4}\%$ of

Beginning a problem by thinking about the likely answer is a good habit to develop. Knowing what answers are reasonable will help you spot errors in your calculations and give you more confidence that your solution to a problem is correct.

Because the solution already contains a source of Pb^{2+} , we can use Le Châtelier's principle to predict that the solubility of $\text{Pb}(\text{IO}_3)_2$ is smaller than that in our previous problem.

There are several approaches to solving cubic equations, but none are computationally easy.

$$\begin{aligned} \% \text{error} &= \frac{(0.10 + x) - 0.10}{0.10} \times 100 \\ &= \frac{7.91 \times 10^{-7}}{0.10} \times 100 \\ &= 7.91 \times 10^{-4} \% \end{aligned}$$

the assumed concentration. This is a negligible error. Accepting the result of our calculation, we find that the equilibrium concentrations of Pb^{2+} and IO_3^- are

$$[\text{Pb}^{2+}] = 0.10 + x \approx 0.10 \text{ M}$$

$$[\text{IO}_3^-] = 2x = 1.6 \times 10^{-6} \text{ M}$$

The molar solubility of $\text{Pb}(\text{IO}_3)_2$ is equal to the additional concentration of Pb^{2+} in solution, or $7.9 \times 10^{-4} \text{ mol/L}$. As expected, $\text{Pb}(\text{IO}_3)_2$ is less soluble in the presence of a solution that already contains one of its ions. This is known as the **COMMON ION EFFECT**.

As outlined in the following example, if an approximation leads to an unacceptably large error we can extend the process of making and evaluating approximations.

Example 6.10

Calculate the solubility of $\text{Pb}(\text{IO}_3)_2$ in $1.0 \times 10^{-4} \text{ M Pb}(\text{NO}_3)_2$.

SOLUTION

Letting x equal the change in the concentration of Pb^{2+} , the equilibrium concentrations of Pb^{2+} and IO_3^- are

$$[\text{Pb}^{2+}] = 1.0 \times 10^{-4} + x \quad [\text{IO}_3^-] = 2x$$

Substituting these concentrations into [equation 6.33](#) leaves us with

$$(1.0 \times 10^{-4} + x)(2x)^2 = 2.5 \times 10^{-13}$$

To solve this equation for x , we make the following assumption

$$[\text{Pb}^{2+}] = 1.0 \times 10^{-4} + x \approx 1.0 \times 10^{-4} \text{ M}$$

obtaining a value for x of 2.50×10^{-4} . Substituting back, gives the calculated concentration of Pb^{2+} at equilibrium as

$$[\text{Pb}^{2+}] = 1.0 \times 10^{-4} + 2.50 \times 10^{-5} = 1.25 \times 10^{-4} \text{ M}$$

a value that differs by 25% from our assumption that the equilibrium concentration is $1.0 \times 10^{-4} \text{ M}$. This error seems unreasonably large. Rather than shouting in frustration, we make a new assumption. Our first assumption—that the concentration of Pb^{2+} is $1.0 \times 10^{-4} \text{ M}$ —was too small. The calculated concentration of $1.25 \times 10^{-4} \text{ M}$, therefore, is probably a bit too large. For our second approximation, let's assume that

$$[\text{Pb}^{2+}] = 1.0 \times 10^{-4} + x \approx 1.25 \times 10^{-4}$$

Substituting into [equation 6.33](#) and solving for x gives its value as 2.24×10^{-5} . The resulting concentration of Pb^{2+} is



$$[\text{Pb}^{2+}] = 1.0 \times 10^{-4} + 2.24 \times 10^{-5} = 1.22 \times 10^{-4} \text{ M}$$

which differs from our assumption of $1.25 \times 10^{-4} \text{ M}$ by 2.4%. Because the original concentration of Pb^{2+} is given to two significant figures, this is a more reasonable error. Our final solution, to two significant figures, is

$$[\text{Pb}^{2+}] = 1.2 \times 10^{-4} \text{ M} \quad [\text{IO}_3^-] = 4.5 \times 10^{-5} \text{ M}$$

and the molar solubility of $\text{Pb}(\text{IO}_3)_2$ is $2.2 \times 10^{-5} \text{ mol/L}$. This iterative approach to solving an equation is known as the **METHOD OF SUCCESSIVE APPROXIMATIONS**.

Practice Exercise 6.8

Calculate the molar solubility for Hg_2Cl_2 in 0.10 M NaCl and compare your answer to its molar solubility in deionized water (see [Practice Exercise 6.7](#)).

Click [here](#) to review your answer to this exercise.

6G.3 A Systematic Approach to Solving Equilibrium Problems

Calculating the solubility of $\text{Pb}(\text{IO}_3)_2$ in a solution of $\text{Pb}(\text{NO}_3)_2$ is more complicated than calculating its solubility in deionized water. The calculation, however, is still relatively easy to organize, and the simplifying assumption fairly obvious. This problem is reasonably straightforward because it involves only one equilibrium reaction and one equilibrium constant.

Determining the equilibrium composition of a system with multiple equilibrium reactions is more complicated. In this section we introduce a systematic approach to setting-up and solving equilibrium problems. As shown in Table 6.1, this approach involves four steps.

Table 6.1 Systematic Approach to Solving Equilibrium Problems

- Step 1: Write all relevant equilibrium reactions and equilibrium constant expressions.
- Step 2: Count the unique species appearing in the equilibrium constant expressions; these are your unknowns. You have enough information to solve the problem if the number of unknowns equals the number of equilibrium constant expressions. If not, add a mass balance equation and/or a charge balance equation. Continue adding equations until the number of equations equals the number of unknowns.
- Step 3: Combine your equations and solve for one unknown. Whenever possible, simplify the algebra by making appropriate assumptions. If you make an assumption, set a limit for its error. This decision influences your evaluation of the assumption.
- Step 4: Check your assumptions. If any assumption proves invalid, return to the previous step and continue solving. The problem is complete when you have an answer that does not violate any of your assumptions.

In addition to equilibrium constant expressions, two other equations are important to the systematic approach for solving equilibrium problems. The first of these is a **MASS BALANCE EQUATION**, which is simply a statement that matter is conserved during a chemical reaction. In a solution of a acetic acid, for example, the combined concentrations of the conjugate weak acid, CH_3COOH , and the conjugate weak base, CH_3COO^- , must equal acetic acid's initial concentration, $C_{\text{CH}_3\text{COOH}}$.

$$C_{\text{CH}_3\text{COOH}} = [\text{CH}_3\text{COOH}] + [\text{CH}_3\text{COO}^-]$$

The second equation is a **CHARGE BALANCE EQUATION**, which requires that total charge from the cations equal the total charge from the anions. Mathematically, the charge balance equation is

$$\sum_i |(z^+)_i| [C^{z^+}]_i = \sum_j |(z^-)_j| [A^{z^-}]_j$$

where $[C^{z^+}]_i$ and $[A^{z^-}]_j$ are, respectively, the concentrations of the i th cation and the j th anion, and $|(z^+)_i|$ and $|(z^-)_j|$ are the absolute values of the i th cation's charge and the j th anion's charge. Every ion in solution, even if it does not appear in an equilibrium reaction, must appear in the charge balance equation. For example, the charge balance equation for an aqueous solution of $\text{Ca}(\text{NO}_3)_2$ is

$$2 \times [\text{Ca}^{2+}] + [\text{H}_3\text{O}^+] = [\text{OH}^-] + [\text{NO}_3^-]$$

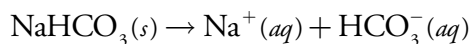
Note that we multiply the concentration of Ca^{2+} by two, and that we include the concentrations of H_3O^+ and OH^- .

Example 6.11

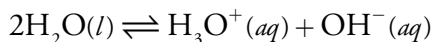
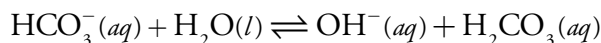
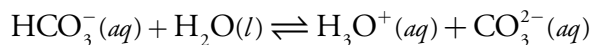
Write mass balance equations and a charge balance equation for a 0.10 M solution of NaHCO_3 .

SOLUTION

It is easier to keep track of the species in solution if we write down the reactions controlling the solution's composition. These reactions are the dissolution of a soluble salt



and the acid–base dissociation reactions of HCO_3^- and H_2O



You may recall from [Chapter 2](#) that this is the difference between a formal concentration and a molar concentration. The variable C represents a formal concentration.

We use absolute values because we are balancing the concentration of charge and concentrations cannot be negative.

There are situations where it is impossible to write a charge balance equation because we do not have enough information about the solution's composition. For example, suppose we fix a solution's pH using a buffer. If the buffer's composition is not specified, then a charge balance equation can not be written.

The mass balance equations are

$$0.10 \text{ M} = [\text{H}_2\text{CO}_3] + [\text{HCO}_3^-] + [\text{CO}_3^{2-}]$$

$$0.10 \text{ M} = [\text{Na}^+]$$

and the charge balance equation is

$$[\text{Na}^+] + [\text{H}_3\text{O}^+] = [\text{OH}^-] + [\text{HCO}_3^-] + 2 \times [\text{CO}_3^{2-}]$$

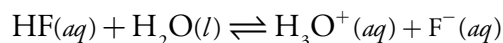
Practice Exercise 6.9

Write appropriate mass balance and charge balance equations for a solution containing 0.10 M KH_2PO_4 and 0.050 M Na_2HPO_4 .

Click [here](#) to review your answer to this exercise.

6G.4 pH of a Monoprotic Weak Acid

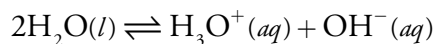
To illustrate the systematic approach to solving equilibrium problems, let's calculate the pH of 1.0 M HF. Two equilibrium reactions affect the pH. The first, and most obvious, is the acid dissociation reaction for HF



for which the equilibrium constant expression is

$$K_a = \frac{[\text{H}_3\text{O}^+][\text{F}^-]}{[\text{HF}]} = 6.8 \times 10^{-4} \quad 6.35$$

The second equilibrium reaction is the dissociation of water, which is an obvious yet easily neglected reaction



$$K_w = [\text{H}_3\text{O}^+][\text{OH}^-] = 1.00 \times 10^{-14} \quad 6.36$$

Counting unknowns, we find four: $[\text{HF}]$, $[\text{F}^-]$, $[\text{H}_3\text{O}^+]$, and $[\text{OH}^-]$. To solve this problem we need two additional equations. These equations are a mass balance equation on hydrofluoric acid

$$C_{\text{HF}} = [\text{HF}] + [\text{F}^-] \quad 6.37$$

and a charge balance equation

$$[\text{H}_3\text{O}^+] = [\text{OH}^-] + [\text{F}^-] \quad 6.38$$

With four equations and four unknowns, we are ready to solve the problem. Before doing so, let's simplify the algebra by making two assumptions.

Step 1: Write all relevant equilibrium reactions and equilibrium constant expressions.

Step 2: Count the unique species appearing in the equilibrium constant expressions; these are your unknowns. You have enough information to solve the problem if the number of unknowns equals the number of equilibrium constant expressions. If not, add a mass balance equation and/or a charge balance equation. Continue adding equations until the number of equations equals the number of unknowns.

Step 3: Combine your equations and solve for one unknown. Whenever possible, simplify the algebra by making appropriate assumptions. If you make an assumption, set a limit for its error. This decision influences your evaluation the assumption.

Assumption One. Because HF is a weak acid, the solution must be acidic. For an acidic solution it is reasonable to assume that

$$[\text{H}_3\text{O}^+] \gg [\text{OH}^-]$$

which simplifies the charge balance equation to

$$[\text{H}_3\text{O}^+] = [\text{F}^-] \quad 6.39$$

Assumption Two. Because HF is a weak acid, very little dissociation occurs. Most of the HF remains in its conjugate weak acid form and it is reasonable to assume that

$$[\text{HF}] \gg [\text{F}^-]$$

which simplifies the mass balance equation to

$$C_{\text{HF}} = [\text{HF}] \quad 6.40$$

For this exercise let's accept an assumption if it introduces an error of less than $\pm 5\%$.

Substituting equation 6.39 and equation 6.40 into [equation 6.35](#), and solving for the concentration of H_3O^+ gives us

$$K_a = \frac{[\text{H}_3\text{O}^+][\text{H}_3\text{O}^+]}{C_{\text{HF}}} = \frac{[\text{H}_3\text{O}^+]^2}{C_{\text{HF}}} = 6.8 \times 10^{-4}$$

$$[\text{H}_3\text{O}^+] = \sqrt{K_a C_{\text{HF}}} = \sqrt{(6.8 \times 10^{-4})(1.0)} = 2.6 \times 10^{-2}$$

Before accepting this answer, we must verify our assumptions. The first assumption is that $[\text{OH}^-]$ is significantly smaller than $[\text{H}_3\text{O}^+]$. Using [equation 6.36](#), we find that

$$[\text{OH}^-] = \frac{K_w}{[\text{H}_3\text{O}^+]} = \frac{1.00 \times 10^{-14}}{2.6 \times 10^{-2}} = 3.8 \times 10^{-13}$$

Clearly this assumption is acceptable. The second assumption is that $[\text{F}^-]$ is significantly smaller than $[\text{HF}]$. From equation 6.39 we have

$$[\text{F}^-] = 2.6 \times 10^{-2} \text{ M}$$

Because $[\text{F}^-]$ is 2.60% of C_{HF} , this assumption is also acceptable. Given that $[\text{H}_3\text{O}^+]$ is $2.6 \times 10^{-2} \text{ M}$, the pH of 1.0 M HF is 1.59.

How does the calculation change if we limit an assumption's error to less than $\pm 1\%$? In this case we can no longer assume that $[\text{HF}] \gg [\text{F}^-]$ and we cannot simplify the mass balance equation. Solving the mass balance equation for $[\text{HF}]$

$$[\text{HF}] = C_{\text{HF}} - [\text{F}^-] = C_{\text{HF}} - [\text{H}_3\text{O}^+]$$

and substituting into the K_a expression along with equation 6.39 gives

Step 4: Check your assumptions. If any assumption proves invalid, return to the previous step and continue solving. The problem is complete when you have an answer that does not violate any of your assumptions.

$$K_a = \frac{[\text{H}_3\text{O}^+]^2}{C_{\text{HF}} - [\text{H}_3\text{O}^+]}$$

Rearranging this equation leaves us with a quadratic equation

$$[\text{H}_3\text{O}^+]^2 + K_a[\text{H}_3\text{O}^+] - K_a C_{\text{HF}} = 0$$

which we solve using the quadratic formula

$$x = \frac{-b \pm \sqrt{b^2 - 4ac}}{2a}$$

where a , b , and c are the coefficients in the quadratic equation

$$ax^2 + bx + c = 0$$

Solving a quadratic equation gives two roots, only one of which has chemical significance. For our problem, the equation's roots are

$$x = \frac{-6.8 \times 10^{-4} \pm \sqrt{(6.8 \times 10^{-4})^2 - (4)(1)(6.8 \times 10^{-4})}}{(2)(1)}$$

$$x = \frac{-6.8 \times 10^{-4} \pm 5.22 \times 10^{-2}}{2}$$

$$x = 2.57 \times 10^{-2} \text{ or } -2.63 \times 10^{-2}$$

Only the positive root is chemically significant because the negative root gives a negative concentration for H_3O^+ . Thus, $[\text{H}_3\text{O}^+]$ is 2.6×10^{-2} M and the pH is 1.59.

You can extend this approach to calculating the pH of a monoprotic weak base by replacing K_a with K_b , replacing C_{HF} with the weak base's concentration, and solving for $[\text{OH}^-]$ in place of $[\text{H}_3\text{O}^+]$.

Practice Exercise 6.10

Calculate the pH of 0.050 M NH_3 . State any assumptions you make in solving the problem, limiting the error for any assumption to $\pm 5\%$. The K_b value for NH_3 is 1.75×10^{-5} .

Click [here](#) to review your answer to this exercise.

6G.5 pH of a Polyprotic Acid or Base

A more challenging problem is to find the pH of a solution containing a polyprotic weak acid or one of its conjugate species. As an example, consider the amino acid alanine, whose structure is shown in Figure 6.12. The ladder diagram in [Figure 6.13](#) shows alanine's three acid–base forms and their respective areas of predominance. For simplicity, we identify these species as H_2L^+ , HL , and L^- .

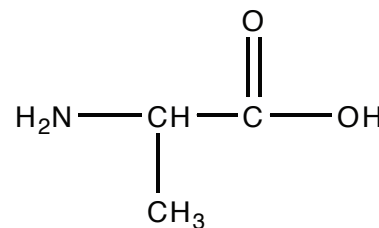


Figure 6.12 Structure of the amino acid alanine, which has pK_a values of 2.348 and 9.867.

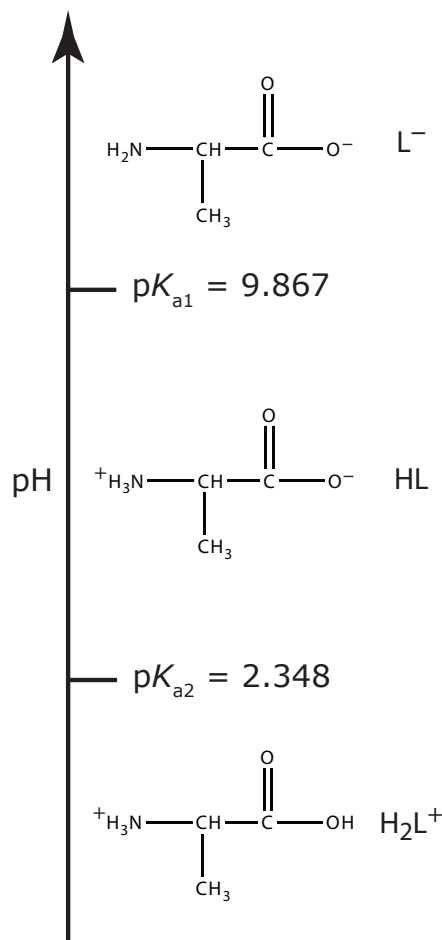


Figure 6.13 Ladder diagram for alanine.

pH OF 0.10 M ALANINE HYDROCHLORIDE (H_2L^+)

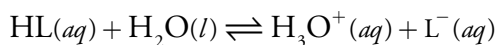
Alanine hydrochloride is a salt of the diprotic weak acid H_2L^+ and Cl^- . Because H_2L^+ has two acid dissociation reactions, a complete systematic solution to this problem is more complicated than that for a monoprotic weak acid. The ladder diagram in Figure 6.13 helps us simplify the problem. Because the areas of predominance for H_2L^+ and L^- are so far apart, we can assume that a solution of H_2L^+ is not likely to contain significant amounts of L^- . As a result, we can treat H_2L^+ as though it is a monoprotic weak acid. Calculating the pH of 0.10 M alanine hydrochloride, which is 1.72, is left to the reader as an exercise.

pH OF 0.10 M SODIUM ALANINATE (L^-)

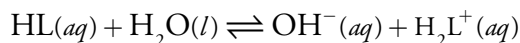
The alaninate ion is a diprotic weak base. Because L^- has two base dissociation reactions, a complete systematic solution to this problem is more complicated than that for a monoprotic weak base. Once again, the ladder diagram in Figure 6.13 helps us simplify the problem. Because the areas of predominance for H_2L^+ and L^- are so far apart, we can assume that a solution of L^- is not likely to contain significant amounts of H_2L^+ . As a result, we can treat L^- as though it is a monoprotic weak base. Calculating the pH of 0.10 M sodium alaninate, which is 11.42, is left to the reader as an exercise.

pH OF 0.1 M ALANINE (HL)

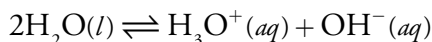
Finding the pH of a solution of alanine is more complicated than our previous two examples because we cannot ignore the presence of both H_2L^+ and L^- . To calculate the solution's pH we must consider alanine's acid dissociation reaction



and its base dissociation reaction



As always, we must also consider the dissociation of water



This leaves us with five unknowns— $[H_2L^+]$, $[HL]$, $[L^-]$, $[H_3O^+]$, and $[OH^-]$ —for which we need five equations. These equations are K_{a2} and K_{b2} for alanine

$$K_{a2} = \frac{[H_3O^+][L^-]}{[HL]}$$

$$K_{b2} = \frac{K_w}{K_{a1}} = \frac{[\text{OH}^-][\text{H}_2\text{L}^+]}{[\text{HL}]}$$

the K_w equation

$$K_w = [\text{H}_3\text{O}^+][\text{OH}^-]$$

a mass balance equation for alanine

$$C_{\text{HL}} = [\text{H}_2\text{L}^+] + [\text{HL}] + [\text{L}^-]$$

and a charge balance equation

$$[\text{H}_2\text{L}^+] + [\text{H}_3\text{O}^+] = [\text{OH}^-] + [\text{L}^-]$$

Because HL is a weak acid and a weak base, it seems reasonable to assume that

$$[\text{HL}] \gg [\text{H}_2\text{L}^+] + [\text{L}^-]$$

which allows us to simplify the mass balance equation to

$$C_{\text{HL}} = [\text{HL}]$$

Next we solve K_{b2} for $[\text{H}_2\text{L}^+]$

$$[\text{H}_2\text{L}^+] = \frac{K_w [\text{HL}]}{K_{a1} [\text{OH}^-]} = \frac{[\text{H}_3\text{O}^+][\text{HL}]}{K_{a1}} = \frac{C_{\text{HL}} [\text{H}_3\text{O}^+]}{K_{a1}}$$

and K_{a2} for $[\text{L}^-]$

$$[\text{L}^-] = \frac{K_{a2} [\text{HL}]}{[\text{H}_3\text{O}^+]} = \frac{K_{a2} C_{\text{HL}}}{[\text{H}_3\text{O}^+]}$$

Substituting these equations for $[\text{H}_2\text{L}^+]$ and $[\text{L}^-]$, along with the equation for K_w , into the charge balance equation give us

$$\frac{C_{\text{HL}} [\text{H}_3\text{O}^+]}{K_{a1}} + [\text{H}_3\text{O}^+] = \frac{K_w}{[\text{H}_3\text{O}^+]} + \frac{K_{a2} C_{\text{HL}}}{[\text{H}_3\text{O}^+]}$$

which we simplify to

$$[\text{H}_3\text{O}^+] \frac{C_{\text{HL}}}{K_{a1}} + 1 = \frac{1}{[\text{H}_3\text{O}^+]} (K_w + K_{a2} C_{\text{HL}})$$

$$[\text{H}_3\text{O}^+]^2 = \frac{(K_{a2} C_{\text{HL}} + K_w)}{\frac{C_{\text{HL}}}{K_{a1}} + 1} = \frac{K_{a1} (K_{a2} C_{\text{HL}} + K_w)}{(C_{\text{HL}} + K_{a1})}$$

$$[\text{H}_3\text{O}^+] = \sqrt{\frac{K_{\text{a}1}K_{\text{a}2}C_{\text{HL}} + K_{\text{a}1}K_{\text{w}}}{C_{\text{HL}} + K_{\text{a}1}}}$$

We can further simplify this equation if $K_{\text{a}1}K_{\text{w}} \ll K_{\text{a}1}K_{\text{a}2}C_{\text{HL}}$, and if $K_{\text{a}1} \ll C_{\text{HL}}$, leaving us with

$$[\text{H}_3\text{O}^+] = \sqrt{K_{\text{a}1}K_{\text{a}2}}$$

For a solution of 0.10 M alanine the $[\text{H}_3\text{O}^+]$ is

$$[\text{H}_3\text{O}^+] = \sqrt{(4.487 \times 10^{-3})(1.358 \times 10^{-10})} = 7.807 \times 10^{-7} \text{ M}$$

or a pH of 6.11.

Practice Exercise 6.11

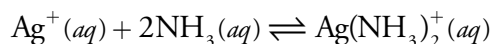
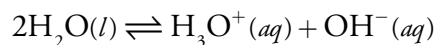
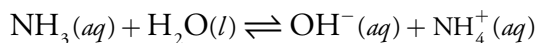
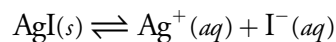
Verify that each assumption in our solution for the pH of 0.10 M alanine is reasonable, using $\pm 5\%$ as the limit for the acceptable error.

Click [here](#) to review your answer to this exercise.

6G.6 Effect of Complexation on Solubility

One method for increasing a precipitate's solubility is to add a ligand that forms soluble complexes with one of the precipitate's ions. For example, the solubility of AgI increases in the presence of NH_3 due to the formation of the soluble $\text{Ag}(\text{NH}_3)_2^+$ complex. As a final illustration of the systematic approach to solving equilibrium problems, let's calculate the molar solubility of AgI in 0.10 M NH_3 .

We begin by writing the relevant equilibrium reactions, which includes the solubility of AgI, the acid–base chemistry of NH_3 and H_2O , and the metal–ligand complexation chemistry between Ag^+ and NH_3 .



This leaves us with seven unknowns— $[\text{Ag}^+]$, $[\text{I}^-]$, $[\text{NH}_3]$, $[\text{NH}_4^+]$, $[\text{OH}^-]$, $[\text{H}_3\text{O}^+]$, and $[\text{Ag}(\text{NH}_3)_2^+]$ —and a need for seven equations. Four of the equations we need to solve this problem are the equilibrium constant expressions

$$K_{\text{sp}} = [\text{Ag}^+][\text{I}^-] = 8.3 \times 10^{-17} \quad 6.41$$

$$K_b = \frac{[\text{NH}_4^+][\text{OH}^-]}{[\text{NH}_3]} = 1.75 \times 10^{-5} \quad 6.42$$

$$K_w = [\text{H}_3\text{O}^+][\text{OH}^-] = 1.00 \times 10^{-14} \quad 6.43$$

$$\beta_2 = \frac{[\text{Ag}(\text{NH}_3)_2^+]}{[\text{Ag}^+][\text{NH}_3]^2} = 1.7 \times 10^7 \quad 6.44$$

We still need three additional equations. The first of these equation is a mass balance for NH_3 .

$$C_{\text{NH}_3} = [\text{NH}_3] + [\text{NH}_4^+] + 2 \times [\text{Ag}(\text{NH}_3)_2^+] \quad 6.45$$

In writing this mass balance equation we multiply the concentration of $\text{Ag}(\text{NH}_3)_2^+$ by two since there are two moles of NH_3 per mole of $\text{Ag}(\text{NH}_3)_2^+$. The second additional equation is a mass balance between iodide and silver. Because AgI is the only source of I^- and Ag^+ , each iodide in solution must have an associated silver ion, which may be Ag^+ or $\text{Ag}(\text{NH}_3)_2^+$; thus

$$[\text{I}^-] = [\text{Ag}^+] + [\text{Ag}(\text{NH}_3)_2^+] \quad 6.46$$

Finally, we include a charge balance equation.

$$[\text{Ag}^+] + [\text{Ag}(\text{NH}_3)_2^+] + [\text{NH}_4^+] + [\text{H}_3\text{O}^+] = [\text{OH}^-] + [\text{I}^-] \quad 6.47$$

Although the problem looks challenging, three assumptions greatly simplify the algebra.

Assumption One. Because the formation of the $\text{Ag}(\text{NH}_3)_2^+$ complex is so favorable (β_2 is 1.7×10^7), there is very little free Ag^+ and it is reasonable to assume that

$$[\text{Ag}^+] \ll [\text{Ag}(\text{NH}_3)_2^+]$$

Assumptions Two. Because NH_3 is a weak base we may reasonably assume that most uncomplexed ammonia remains as NH_3 ; thus

$$[\text{NH}_4^+] \ll [\text{NH}_3]$$

Assumption Three. Because K_{sp} for AgI is significantly smaller than β_2 for $\text{Ag}(\text{NH}_3)_2^+$, the solubility of AgI is probably small enough that very little ammonia is needed for metal–ligand complexation; thus

$$[\text{Ag}(\text{NH}_3)_2^+] \ll [\text{NH}_3]$$

As we use these assumptions to simplify the algebra, let's set $\pm 5\%$ as the limit for error.

Assumption two and assumption three suggest that the concentration of NH_3 is much larger than the concentrations of either NH_4^+ or $\text{Ag}(\text{NH}_3)_2^+$, allowing us to simplify the mass balance equation for NH_3 to

$$C_{\text{NH}_3} = [\text{NH}_3] \quad 6.48$$

Finally, using assumption one, which suggests that the concentration of $\text{Ag}(\text{NH}_3)_2^+$ is much larger than the concentration of Ag^+ , we simplify the mass balance equation for I^- to

$$[\text{I}^-] = [\text{Ag}(\text{NH}_3)_2^+] \quad 6.49$$

Now we are ready to combine equations and solve the problem. We begin by solving [equation 6.41](#) for $[\text{Ag}^+]$ and substitute it into β_2 ([equation 6.44](#)), leaving us with

$$\beta_2 = \frac{[\text{Ag}(\text{NH}_3)_2^+][\text{I}^-]}{K_{\text{sp}}[\text{NH}_3]^2} \quad 6.50$$

Next we substitute equation 6.48 and equation 6.49 into equation 6.50, obtaining

$$\beta_2 = \frac{[\text{I}^-]^2}{K_{\text{sp}}(C_{\text{NH}_3})^2} \quad 6.51$$

Solving equation 6.51 for $[\text{I}^-]$ gives

$$[\text{I}^-] = C_{\text{NH}_3} \sqrt{\beta_2 K_{\text{sp}}} = (0.10) \sqrt{(1.7 \times 10^7)(8.3 \times 10^{-17})} = 3.76 \times 10^{-6} \text{ M}$$

Because one mole of AgI produces one mole of I^- , the molar solubility of AgI is the same as the $[\text{I}^-]$, or $3.8 \times 10^{-6} \text{ mol/L}$.

Before accepting this answer we need to check our assumptions. Substituting $[\text{I}^-]$ into [equation 6.41](#), we find that the concentration of Ag^+ is

$$[\text{Ag}^+] = \frac{K_{\text{sp}}}{[\text{I}^-]} = \frac{8.3 \times 10^{-17}}{3.76 \times 10^{-6}} = 2.2 \times 10^{-11} \text{ M}$$

Substituting the concentrations of I^- and Ag^+ into the mass balance equation for iodide ([equation 6.46](#)), gives the concentration of $\text{Ag}(\text{NH}_3)_2^+$ as

$$[\text{Ag}(\text{NH}_3)_2^+] = [\text{I}^-] - [\text{Ag}^+] = 3.76 \times 10^{-6} - 2.2 \times 10^{-11} = 3.8 \times 10^{-6} \text{ M}$$

Our first assumption that $[\text{Ag}^+]$ is significantly smaller than the $[\text{Ag}(\text{NH}_3)_2^+]$ is reasonable.

Substituting the concentrations of Ag^+ and $\text{Ag}(\text{NH}_3)_2^+$ into [equation 6.44](#) and solving for $[\text{NH}_3]$, gives

$$[\text{NH}_3] = \sqrt{\frac{[\text{Ag}(\text{NH}_3)_2^+]}{[\text{Ag}^+]\beta_2}} = \sqrt{\frac{3.8 \times 10^{-6}}{(2.2 \times 10^{-11})(1.7 \times 10^7)}} = 0.10 \text{ M}$$

From the mass balance equation for NH_3 ([equation 6.44](#)) we see that $[\text{NH}_4^+]$ is negligible, verifying our second assumption that $[\text{NH}_4^+]$ is sig-

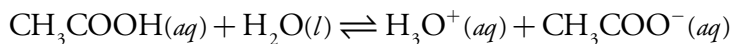
Did you notice that our solution to this problem did not make use of [equation 6.47](#), the charge balance equation? The reason for this is that we did not try to solve for the concentration of all seven species. If we need to know the complete equilibrium composition of the reaction mixture, then we would need to incorporate the charge balance equation into our solution.

nificantly smaller than $[\text{NH}_3]$. Our third assumption that $[\text{Ag}(\text{NH}_3)_2^+]$ is significantly smaller than $[\text{NH}_3]$ also is reasonable.

6H Buffer Solutions

Adding as little as 0.1 mL of concentrated HCl to a liter of H_2O shifts the pH from 7.0 to 3.0. Adding the same amount of HCl to a liter of a solution that is 0.1 M in acetic acid and 0.1 M in sodium acetate, however, results in a negligible change in pH. Why do these two solutions respond so differently to the addition of HCl?

A mixture of acetic acid and sodium acetate is one example of an acid–base **BUFFER**. To understand how this buffer works to limit the change in pH, we need to consider its acid dissociation reaction



and its corresponding acid dissociation constant

$$K_a = \frac{[\text{CH}_3\text{COO}^-][\text{H}_3\text{O}^+]}{[\text{CH}_3\text{COOH}]} = 1.75 \times 10^{-5} \quad 6.52$$

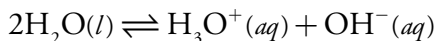
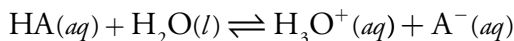
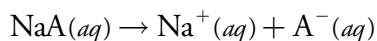
Taking the negative log of the terms in equation 6.52 and solving for pH leaves us with the result shown here.

$$\text{pH} = \text{p}K_a + \log \frac{[\text{CH}_3\text{COO}^-]}{[\text{CH}_3\text{COOH}]} = 4.76 + \log \frac{[\text{CH}_3\text{COO}^-]}{[\text{CH}_3\text{COOH}]} \quad 6.53$$

Buffering occurs because of the logarithmic relationship between pH and the ratio of the concentrations of acetate and acetic acid. Here is an example to illustrate this point. If the concentrations of acetic acid and acetate are equal, the buffer's pH is 4.76. If we convert 10% of the acetate to acetic acid, by adding a strong acid, the ratio $[\text{CH}_3\text{COO}^-]/[\text{CH}_3\text{COOH}]$ changes from 1.00 to 0.818, and the pH decreases from 4.76 to 4.67—a decrease of only 0.09 pH units.

6H.1 Systematic Solution to Buffer Problems

Equation 6.53 is written in terms of the equilibrium concentrations of CH_3COOH and CH_3COO^- . A more useful relationship relates a buffer's pH to the initial concentrations of the weak acid and the weak base. We can derive a general buffer equation by considering the following reactions for a weak acid, HA, and the salt of its conjugate weak base, NaA.



Because the concentrations of Na^+ , A^- , HA , H_3O^+ , and OH^- are unknown, we need five equations to uniquely define the solution's composition. Two of these equations are the equilibrium constant expressions for HA and H_2O .

$$K_a = \frac{[\text{H}_3\text{O}^+][\text{A}^-]}{[\text{HA}]} \quad 6.54$$

$$K_w = [\text{H}_3\text{O}^+][\text{OH}^-]$$

The remaining three equations are mass balance equations for HA and for Na^+

$$C_{\text{HA}} + C_{\text{NaA}} = [\text{HA}] + [\text{A}^-] \quad 6.55$$

$$C_{\text{NaA}} = [\text{Na}^+] \quad 6.56$$

and a charge balance equation

$$[\text{H}_3\text{O}^+] + [\text{Na}^+] = [\text{OH}^-] + [\text{A}^-] \quad 6.57$$

Substituting equation 6.56 into equation 6.57 and solving for $[\text{A}^-]$ gives

$$[\text{A}^-] = C_{\text{NaA}} - [\text{OH}^-] + [\text{H}_3\text{O}^+] \quad 6.58$$

Next, we substitute equation 6.58 into equation 6.55, which gives the concentration of HA as

$$[\text{HA}] = C_{\text{HA}} + [\text{OH}^-] - [\text{H}_3\text{O}^+] \quad 6.59$$

Finally, substituting equations 6.58 and 6.59 into equation 6.54 and solving for pH gives a general equation for a buffer's pH .

$$\text{pH} = \text{p}K_a + \log \frac{C_{\text{NaA}} - [\text{OH}^-] + [\text{H}_3\text{O}^+]}{C_{\text{HA}} + [\text{OH}^-] - [\text{H}_3\text{O}^+]}$$

If the initial concentrations of the weak acid, C_{HA} , and the weak base, C_{NaA} are greater than $[\text{H}_3\text{O}^+]$ and $[\text{OH}^-]$, then we can simplify the general equation to the **HENDERSON–HASSELBALCH EQUATION**.

$$\text{pH} = \text{p}K_a + \log \frac{C_{\text{NaA}}}{C_{\text{HA}}} \quad 6.60$$

As outlined below, the Henderson–Hasselbalch equation provides a simple way to calculate the pH of a buffer, and to determine the change in pH upon adding a strong acid or strong base.

Lawrence Henderson (1878-1942) first developed a relationship between $[\text{H}_3\text{O}^+]$, $[\text{HA}]$, and $[\text{A}^-]$ while studying the buffering of blood. Kurt Hasselbalch (1874-1962) modified Henderson's equation by transforming it to the logarithmic form shown in equation 6.60.

The assumptions leading to equation 6.60 produce a minimal error in pH ($< \pm 5\%$) for larger concentrations of HA and A^- , for concentrations of HA and A^- that are similar in magnitude, and for weak acid's with $\text{p}K_a$ values closer to 7. For most problems in this textbook, equation 6.60 provides acceptable results. Be sure, however, to test your assumptions.

For a discussion of the Henderson–Hasselbalch equation, including the error inherent in equation 6.60, see Po, H. N.; Senozan, N. M. "The Henderson–Hasselbalch Equation: Its History and Limitations," *J. Chem. Educ.* **2001**, 78, 1499–1503.

Example 6.12

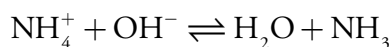
Calculate the pH of a buffer that is 0.020 M in NH_3 and 0.030 M in NH_4Cl . What is the pH after adding 1.0 mL of 0.10 M NaOH to 0.10 L of this buffer?

SOLUTION

The acid dissociation constant for NH_4^+ is 5.70×10^{-10} , or a $\text{p}K_a$ of 9.24. Substituting the initial concentrations of NH_3 and NH_4Cl into equation 6.60 and solving, we find that the buffer's pH is

$$\text{pH} = 9.24 + \log \frac{0.020}{0.030} = 9.06$$

Adding NaOH converts a portion of the NH_4^+ to NH_3 as a result of the following reaction



Because this reaction's equilibrium constant is so large (it is 5.7×10^4), we may treat the reaction as if it goes to completion. The new concentrations of NH_4^+ and NH_3 are

$$\begin{aligned} C_{\text{NH}_4^+} &= \frac{\text{mol NH}_4^+ - \text{mol OH}^-}{V_{\text{total}}} \\ &= \frac{(0.030 \text{ M})(0.10 \text{ L}) - (0.10 \text{ M})(1.0 \times 10^{-3} \text{ L})}{0.10 \text{ L} + 1.0 \times 10^{-3} \text{ L}} = 0.029 \text{ M} \end{aligned}$$

$$\begin{aligned} C_{\text{NH}_3} &= \frac{\text{mol NH}_3 + \text{mol OH}^-}{V_{\text{total}}} \\ &= \frac{(0.020 \text{ M})(0.10 \text{ L}) + (0.10 \text{ M})(1.0 \times 10^{-3} \text{ L})}{0.10 \text{ L} + 1.0 \times 10^{-3} \text{ L}} = 0.021 \text{ M} \end{aligned}$$

Substituting these concentrations into the equation 6.60 gives a pH of

$$\text{pH} = 9.24 + \log \frac{0.021}{0.029} = 9.10$$

With a pH of 9.06, the concentration of H_3O^+ is 8.71×10^{-10} and the concentration of OH^- is 1.15×10^{-5} . Because both of these concentrations are much smaller than either C_{NH_3} or $C_{\text{NH}_4\text{Cl}}$, the approximations leading to equation 6.60 are reasonable.

Note that adding NaOH increases the pH from 9.06 to 9.10. As we expect, adding a base makes the pH more basic. Checking to see that the pH changes in the right direction is one way to catch a calculation error.

Practice Exercise 6.12

Calculate the pH of a buffer that is 0.10 M in KH_2PO_4 and 0.050 M in Na_2HPO_4 . What is the pH after adding 5.0 mL of 0.20 M HCl to 0.10 L of this buffer. Use [Appendix 11](#) to find the appropriate K_a value.

Click [here](#) to review your answer to this exercise

We can use a multiprotic weak acid to prepare buffers at as many different pH's as there are acidic protons, with the Henderson–Hasselbalch equation applying in each case. For example, using malonic acid ($pK_{a1} = 2.85$ and $pK_{a2} = 5.70$) we can prepare buffers with pH values of

$$\text{pH} = 2.85 + \log \frac{C_{\text{HM}^-}}{C_{\text{H}_2\text{M}}}$$

$$\text{pH} = 5.70 + \log \frac{C_{\text{M}^{2-}}}{C_{\text{HM}^-}}$$

where H_2M , HM^- and M^{2-} are malonic acid's different acid–base forms.

Although our treatment of buffers relies on acid–base chemistry, we can extend the use of buffers to equilibria involving complexation or redox reactions. For example, the Nernst equation for a solution containing Fe^{2+} and Fe^{3+} is similar in form to the Henderson-Hasselbalch equation.

$$E = E_{\text{Fe}^{3+}/\text{Fe}^{2+}}^\circ - 0.05916 \log \frac{[\text{Fe}^{2+}]}{[\text{Fe}^{3+}]}$$

A solution containing similar concentrations of Fe^{2+} and Fe^{3+} is buffered to a potential near the standard state reduction potential for Fe^{3+} . We call such solutions redox buffers. Adding a strong oxidizing agent or a strong reducing agent to a redox buffer results in a small change in potential.

6H.2 Representing Buffer Solutions with Ladder Diagrams

A ladder diagram provides a simple graphical description of a solution's predominate species as a function of solution conditions. It also provides a convenient way to show the range of solution conditions over which a buffer is effective. For example, an acid–base buffer exists when the concentrations of the weak acid and its conjugate weak base are similar. For convenience, let's assume that an acid–base buffer exists when

$$\frac{1}{10} \leq \frac{[\text{CH}_3\text{COO}^-]}{[\text{CH}_3\text{COOH}]} \leq \frac{10}{1}$$

Substituting these ratios into the Henderson–Hasselbalch equation

$$\text{pH} = pK_a + \log \frac{1}{10} = pK_a - 1$$

$$\text{pH} = pK_a + \log \frac{10}{1} = pK_a + 1$$

shows that an acid–base buffer works over a pH range of $pK_a \pm 1$.

Using the same approach, it is easy to show that a metal–ligand complexation buffer for ML_n exists when

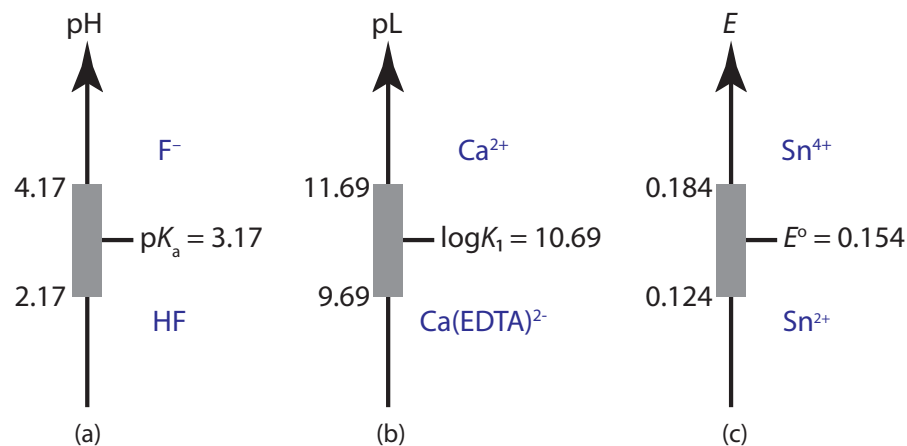


Figure 6.14 Ladder diagrams showing buffer regions for (a) an acid–base buffer for HF and F^- ; (b) a metal–ligand complexation buffer for Ca^{2+} and $Ca(EDTA)^{2-}$; and (c) an oxidation–reduction (redox) buffer for Sn^{4+} and Sn^{2+} .

$$pL = \log K_n \pm 1 \quad \text{or} \quad pL = \frac{1}{n} \log \beta_n \pm \frac{1}{n} \quad pL = -\log[L]$$

where K_n or β_n is the relevant stepwise or overall formation constant. For an oxidizing agent and its conjugate reducing agent, a redox buffer exists when

$$E = E^\circ \pm \frac{1}{n} \times \frac{RT}{F} = E^\circ \pm \frac{0.05916}{n} \quad (\text{at } 25^\circ\text{C})$$

Ladder diagrams showing buffer regions for several equilibria are shown in Figure 6.14.

6H.3 Preparing Buffers

BUFFER CAPACITY is the ability of a buffer to resist a change in pH when adding a strong acid or a strong base. A buffer's capacity to resist a change in pH is a function of the concentrations of the weak acid and the weak base, as well as their relative proportions. The importance of the weak acid's concentration and the weak base's concentration is obvious. The more moles of weak acid and weak base a buffer has, the more strong base or strong acid it can neutralize without significantly changing its pH.

The relative proportions of a weak acid and a weak base also affects how much the pH changes when adding a strong acid or a strong base. Buffers that are equimolar in weak acid and weak base require a greater amount of strong acid or strong base to bring about a one unit change in pH. Consequently, a buffer is most effective against the addition of strong acids or strong bases when its pH is near the weak acid's pK_a value.

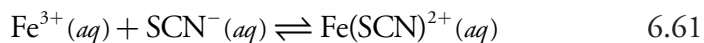
Although higher concentrations of buffering agents provide greater buffer capacity, there are reasons for using smaller concentrations, including the formation of unwanted precipitates and the tolerance of cells for high concentrations of dissolved salts.

A good “rule of thumb” when choosing a buffer is to select one whose reagents have a pK_a value close to your desired pH.

Buffer solutions are often prepared using standard “recipes” found in the chemical literature.³ In addition, there are computer programs and on-line calculators to aid in preparing buffers.⁴ Perhaps the simplest way to make a buffer, however, is to prepare a solution containing an appropriate conjugate weak acid and weak base and measure its pH. You can then adjust the pH to the desired value by adding small portions of either a strong acid or a strong base.

6I Activity Effects

Careful measurements on the metal–ligand complex $\text{Fe}(\text{SCN})^{2+}$ suggest that its stability decreases in the presence of inert ions.⁵ We can demonstrate this by adding an inert salt to an equilibrium mixture of Fe^{3+} and SCN^- . Figure 6.15a shows the result of mixing together equal volumes of 1.0 mM FeCl_3 and 1.5 mM KSCN , both of which are colorless. The solution’s reddish–orange color is due to the formation of $\text{Fe}(\text{SCN})^{2+}$.



Adding 10 g of KNO_3 to the solution and stirring to dissolve the solid, produces the result shown in Figure 6.15b. The solution’s lighter color suggests that adding KNO_3 shifts reaction 6.61 to the left, decreasing the concentration of $\text{Fe}(\text{SCN})^{2+}$ and increasing the concentrations of Fe^{3+} and SCN^- . The result is a decrease in the complex’s formation constant, K_1 .

$$K_1 = \frac{[\text{Fe}(\text{SCN})^{2+}]}{[\text{Fe}^{3+}][\text{SCN}^-]} \quad 6.62$$

- 3 See, for example, (a) Bower, V. E.; Bates, R. G. *J. Res. Natl. Bur. Stand. (U. S.)* **1955**, *55*, 197–200; (b) Bates, R. G. *Ann. N. Y. Acad. Sci.* **1961**, *92*, 341–356; (c) Bates, R. G. *Determination of pH*, 2nd ed.; Wiley-Interscience: New York, 1973.
- 4 (a) Lambert, W. J. *J. Chem. Educ.* 1990, *67*, 150–153; (b) <http://www.bioinformatics.org/JaMBW/5/4/index.html>.
- 5 Lister, M. W.; Rivington, D. E. *Can. J. Chem.* **1995**, *33*, 1572–1590.




Figure 6.15 The effect of an inert salt on a reaction’s equilibrium position is shown by the solutions in these two beakers. The beaker on the left contains equal volumes of 1.0 mM FeCl_3 and 1.5 mM KSCN . The solution’s color is due to the formation of the metal–ligand complex $\text{Fe}(\text{SCN})^{2+}$. Adding 10 g of KNO_3 to the beaker on the left produces the result shown on the right. The lighter color suggests that there is less $\text{Fe}(\text{SCN})^{2+}$ as a result of the equilibrium in reaction 6.61 shifting to the left.

The 1mM FeCl_3 also contains a few drops of concentrated HNO_3 to prevent the precipitation of $\text{Fe}(\text{OH})_3$.

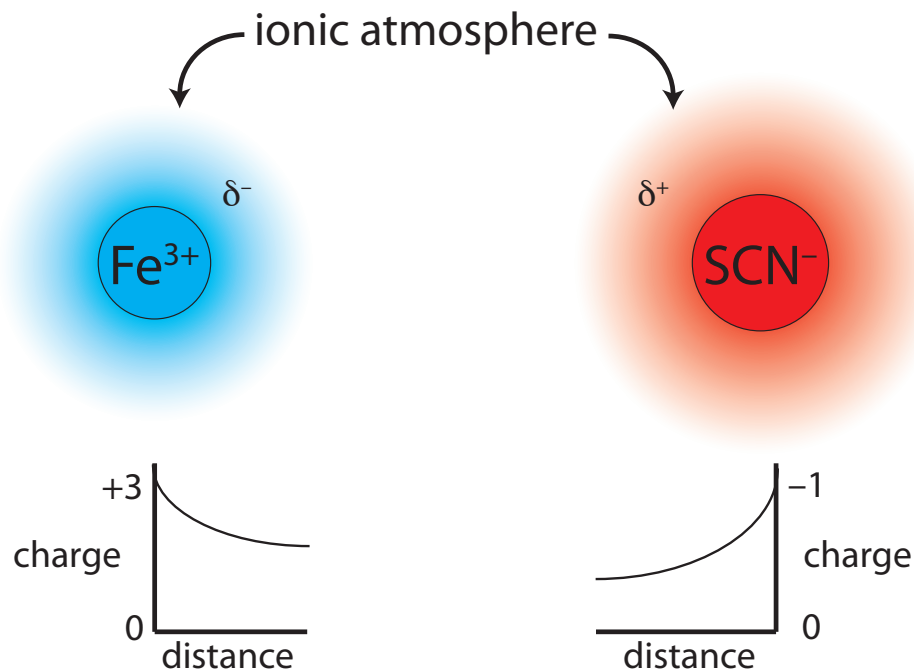


Figure 6.16 Ions of Fe^{3+} and SCN^- are surrounded by ionic atmospheres with net charges of δ^- and δ^+ . Because of these ionic atmospheres, each ion's apparent charge at the edge of its ionic atmosphere is less than the ion's actual charge.

Why should adding an inert electrolyte affect a reaction's equilibrium position? We can explain the effect of KNO_3 on the formation of $\text{Fe}(\text{SCN})^{2+}$ by considering the reaction on a microscopic scale. The solution in [Figure 6.15b](#) contains a variety of cations and anions— Fe^{3+} , SCN^- , K^+ , NO_3^- , H_3O^+ , and OH^- . Although the solution is homogeneous, on average, there are slightly more anions in regions near Fe^{3+} ions, and slightly more cations in regions near SCN^- ions. As shown in [Figure 6.16](#), each Fe^{3+} ion and SCN^- ion is surrounded by an ionic atmosphere of opposite charge (δ^- and δ^+) that partially screen the ions from each other. Because each ion's apparent charge at the edge of its ionic atmosphere is less than its actual charge, the force of attraction between the two ions is smaller. As a result, the formation of the $\text{Fe}(\text{SCN})^{2+}$ is slightly less favorable and the formation constant in equation 6.62 is slightly smaller. Higher concentrations of KNO_3 increase δ^- and δ^+ , resulting in even smaller values for the formation constant.

IONIC STRENGTH

To factor the concentration of ions into the formation constant for $\text{Fe}(\text{SCN})^{2+}$, we need a way to express that concentration in a meaningful way. Because both an ion's concentration and its charge are important, we define the solution's **IONIC STRENGTH**, μ as

$$\mu = \frac{1}{2} \sum_i c_i z_i^2$$

where c_i and z_i are the concentration and charge of the i th ion.

In calculating the ionic strengths of these solutions we are ignoring the presence of H_3O^+ and OH^- , and, in the case of Na_2SO_4 , the presence of HSO_4^- from the base dissociation reaction of SO_4^{2-} .

In the case of 0.10 M NaCl, the concentrations of H_3O^+ and OH^- are 1.0×10^{-7} , which is significantly smaller than the concentrations of Na^+ and Cl^- .

Because SO_4^{2-} is a very weak base ($K_b = 1.0 \times 10^{-12}$), the solution is only slightly basic (pH = 7.5), and the concentrations of H_3O^+ , OH^- , and HSO_4^- are negligible.

Although we can ignore the presence of H_3O^+ , OH^- , and HSO_4^- when calculating the ionic strength of these two solutions, be aware that an equilibrium reaction may well generate ions that affect the solution's ionic strength.

Example 6.13

Calculate the ionic strength for a solution of 0.10 M NaCl. Repeat the calculation for a solution of 0.10 M Na_2SO_4 .

SOLUTION

The ionic strength for 0.10 M NaCl is

$$\begin{aligned} &= \frac{1}{2} \{ [\text{Na}^+] \times (+1)^2 + [\text{Cl}^-] \times (-1)^2 \} \\ &= \frac{1}{2} \{ (0.10) \times (+1)^2 + (0.10) \times (-1)^2 \} \\ &= 0.10 \text{ M} \end{aligned}$$

For 0.10 M Na_2SO_4 the ionic strength is

$$\begin{aligned} &= \frac{1}{2} \{ [\text{Na}^+] \times (+1)^2 + [\text{SO}_4^{2-}] \times (-2)^2 \} \\ &= \frac{1}{2} \{ (0.10) \times (+1)^2 + (0.20) \times (-2)^2 \} \\ &= 0.30 \text{ M} \end{aligned}$$

Note that the unit for ionic strength is molarity, but that a salt's ionic strength need not match its molar concentration. For a 1:1 salt, such as NaCl, ionic strength and molar concentration are identical. The ionic strength of a 2:1 electrolyte, such as Na_2SO_4 , is three times larger than the electrolyte's molar concentration.

ACTIVITY AND ACTIVITY COEFFICIENTS

[Figure 6.15](#) shows that adding KNO_3 to a mixture of Fe^{3+} and SCN^- decreases the formation constant for $\text{Fe}(\text{SCN})^{2+}$. This creates a contradiction. Earlier in this chapter we showed that there is a relationship between a reaction's standard-state free energy, ΔG° , and its equilibrium constant, K .

$$\Delta G^\circ = -RT \ln K$$

Because a reaction has only one standard-state, its equilibrium constant must be independent of solution conditions. Although ionic strength affects the *apparent* formation constant for $\text{Fe}(\text{SCN})^{2+}$, [reaction 6.61](#) must have an underlying *thermodynamic* formation constant that is independent of ionic strength.

The apparent formation constant for $\text{Fe}(\text{SCN})^{2+}$, as shown in [equation 6.62](#), is a function of concentrations. In place of concentrations, we define the true thermodynamic equilibrium constant using activities. The **ACTIVITY** of species A, a_A , is the product of its concentration, $[A]$, and a solution-dependent activity coefficient, γ_A .

$$a_A = [A]\gamma_A$$

The true thermodynamic formation constant for $\text{Fe}(\text{SCN})^{2+}$, therefore, is

$$K_1 = \frac{a_{\text{Fe}(\text{SCN})^{2+}}}{a_{\text{Fe}^{3+}} a_{\text{SCN}^-}} = \frac{[\text{Fe}(\text{SCN})^{2+}]\gamma_{\text{Fe}(\text{SCN})^{2+}}}{[\text{Fe}^{3+}]\gamma_{\text{Fe}^{3+}} [\text{SCN}^-]\gamma_{\text{SCN}^-}}$$

Unless otherwise specified, the equilibrium constants in the appendices are thermodynamic equilibrium constants.

The **ACTIVITY COEFFICIENT** for a species corrects for any deviation between its physical concentration and its ideal value. For a gas, a pure solid, a pure liquid, or a non-ionic solute, the activity coefficient is approximately one under most reasonable experimental conditions. For reactions involving only these species, the difference between activity and concentration is negligible. The activity coefficient for an ion, however, depends on the solution's ionic strength, the ion's charge, and the ion's size. It is possible to calculate activity coefficients using the **EXTENDED DEBYE-HÜCKEL EQUATION**

$$\log \gamma_A = \frac{-0.51 \times z_A^2 \times \sqrt{\mu}}{1 + 3.3 \times \alpha_A \times \sqrt{\mu}} \quad 6.63$$

where z_A is the ion's charge, α_A is the effective diameter of the hydrated ion in nanometers (Table 6.2), μ is the solution's ionic strength, and 0.51 and 3.3 are constants appropriate for an aqueous solution at 25 °C. An ion's effective hydrated radius is the radius of the ion plus those water molecules closely bound to the ion. The effective radius is greater for smaller, more highly charged ions than it is for larger, less highly charged ions.

Table 6.2 Effective Diameters (a) for Selected Ions

Ion	Effective Diameter (nm)
H_3O^+	0.9
Li^+	0.6
Na^+ , IO_3^- , HSO_3^- , HCO_3^- , H_2PO_4^-	0.45
OH^- , F^- , SCN^- , HS^- , ClO_3^- , ClO_4^- , MnO_4^-	0.35
K^+ , Cl^- , Br^- , I^- , CN^- , NO_2^- , NO_3^-	0.3
Cs^+ , Tl^+ , Ag^+ , NH_4^+	0.25
Mg^{2+} , Be^{2+}	0.8
Ca^{2+} , Cu^{2+} , Zn^{2+} , Sn^{2+} , Mn^{2+} , Fe^{2+} , Ni^{2+} , Co^{2+}	0.6
Sr^{2+} , Ba^{2+} , Cd^{2+} , Hg^{2+} , S^{2-}	0.5
Pb^{2+} , CO_3^{2-} , SO_3^{2-}	0.45
Hg_2^{2+} , SO_4^{2-} , $\text{S}_2\text{O}_3^{2-}$, CrO_4^{2-} , HPO_4^{2-}	0.40
Al^{3+} , Fe^{3+} , Cr^{3+}	0.9
PO_4^{3-} , $\text{Fe}(\text{CN})_6^{3-}$	0.4
Zr^{4+} , Ce^{4+} , Sn^{4+}	1.1
$\text{Fe}(\text{CN})_6^{4-}$	0.5

Source: Kielland, *J. J. Am. Chem. Soc.* **1937**, 59, 1675–1678.

For a gas the proper terms are fugacity and fugacity coefficient, instead of activity and activity coefficient.

Several features of [equation 6.63](#) deserve mention. First, as the ionic strength approaches zero an ion's activity coefficient approaches a value of one. In a solution where $\mu=0$, an ion's activity and its concentration are identical. We can take advantage of this fact to determine a reaction's thermodynamic equilibrium constant by measuring the apparent equilibrium constant for several increasingly smaller ionic strengths and extrapolating back to an ionic strength of zero. Second, an activity coefficient is smaller, and the effect of activity is more important, for an ion with a higher charge and a smaller effective radius. Finally, the extended Debye-Hückel equation provides a reasonable value for an ion's activity coefficient when the ionic strength is less than 0.1. Modifications to [equation 6.63](#) extend the calculation of activity coefficients to higher ionic strengths.⁶

INCLUDING ACTIVITY COEFFICIENTS WHEN SOLVING EQUILIBRIUM PROBLEMS

Earlier in this chapter we calculated the solubility of $\text{Pb}(\text{IO}_3)_2$ in deionized water, obtaining a result of 4.0×10^{-5} mol/L. Because the only significant source of ions is from the solubility reaction, the ionic strength is very low and we can assume that $\gamma \approx 1$ for both Pb^{2+} and IO_3^- . In calculating the solubility of $\text{Pb}(\text{IO}_3)_2$ in deionized water, we do not need to account for ionic strength.

But what if we need to know the solubility of $\text{Pb}(\text{IO}_3)_2$ in a solution containing other, inert ions? In this case we need to include activity coefficients in our calculation.

Example 6.14

Calculate the solubility of $\text{Pb}(\text{IO}_3)_2$ in a matrix of 0.020 M $\text{Mg}(\text{NO}_3)_2$.

SOLUTION

We begin by calculating the solution's ionic strength. Since $\text{Pb}(\text{IO}_3)_2$ is only sparingly soluble, we will assume that we can ignore its contribution to the ionic strength; thus

$$= \frac{1}{2} \left\{ (0.020 \text{ M})(+2)^2 + (0.040 \text{ M})(-1)^2 \right\} = 0.060 \text{ M}$$

Next, we use [equation 6.63](#) to calculate the activity coefficients for Pb^{2+} and IO_3^- .

$$\log \gamma_{\text{Pb}^{2+}} = \frac{-0.51 \times (+2)^2 \times \sqrt{0.060}}{1 + 3.3 \times 0.45 \times \sqrt{0.060}} = -0.366$$

$$\gamma_{\text{Pb}^{2+}} = 0.431$$

As is true for any assumption, we will need to verify that it does not introduce too much error into our calculation.

⁶ Davies, C. W. *Ion Association*, Butterworth: London, 1962.

$$\log \gamma_{\text{IO}_3^-} = \frac{-0.51 \times (-1)^2 \times \sqrt{0.060}}{1 + 3.3 \times 0.45 \times \sqrt{0.060}} = -0.0916$$

$$\gamma_{\text{IO}_3^-} = 0.810$$

Defining the equilibrium concentrations of Pb^{2+} and IO_3^- in terms of the variable x

Concentrations	$\text{Pb}(\text{IO}_3)_2(s)$	\rightleftharpoons	$\text{Pb}^{2+}(aq)$	+	$2\text{IO}_3^-(aq)$
Initial	solid		0		0
Change	solid		$+x$		$+2x$
Equilibrium	solid		x		$2x$

and substituting into the thermodynamic solubility product for $\text{Pb}(\text{IO}_3)_2$ leaves us with

$$K_{\text{sp}} = a_{\text{Pb}^{2+}} a_{\text{IO}_3^-}^2 = \gamma_{\text{Pb}^{2+}} [\text{Pb}^{2+}] \gamma_{\text{IO}_3^-}^2 [\text{IO}_3^-]^2 = 2.5 \times 10^{-13}$$

$$K_{\text{sp}} = (0.431)(x)(0.810)^2(2x)^2 = 2.5 \times 10^{-13}$$

$$K_{\text{sp}} = 1.131x^3 = 2.5 \times 10^{-13}$$

Solving for x gives 6.0×10^{-5} , or a molar solubility of 6.0×10^{-5} mol/L. Ignoring activity, as we did in our earlier calculation, gives the molar solubility as 4.0×10^{-5} mol/L. Failing to account for activity in this case underestimates the molar solubility of $\text{Pb}(\text{IO}_3)_2$ by 33%.

As this example shows, failing to correct for the effect of ionic strength can lead to a significant error in an equilibrium calculation. Nevertheless, it is not unusual to ignore activities and to assume that the equilibrium constant is expressed in terms of concentrations. There is a practical reason for this—in an analysis we rarely know the exact composition, much less the ionic strength of aqueous samples or of solid samples brought into solution. Equilibrium calculations are a useful guide when developing an analytical method; however, only by completing an analysis and evaluating the results can we judge whether our theory matches reality. In the end, our work in the laboratory is the most critical step in developing a reliable analytical method.

Practice Exercise 6.13

Calculate the molar solubility of Hg_2Cl_2 in 0.10 M NaCl, taking into account the effect of ionic strength. Compare your answer to that from [Practice Exercise 6.8](#) in which you ignored the effect of ionic strength.

Click [here](#) to review your answer to this exercise.

The solution's equilibrium composition is

$$[\text{Pb}^{2+}] = 6.0 \times 10^{-5} \text{ M}$$

$$[\text{IO}_3^-] = 1.2 \times 10^{-4} \text{ M}$$

$$[\text{Mg}^{2+}] = 0.020 \text{ M}$$

$$[\text{NO}_3^-] = 0.040 \text{ M}$$

Because the concentrations of Pb^{2+} and IO_3^- are much smaller than the concentrations of Mg^{2+} and NO_3^- , our decision to ignore the contribution of Pb^{2+} and IO_3^- to the ionic strength is reasonable.

How do we handle the calculation if we can not ignore the concentrations of Pb^{2+} and IO_3^- ? One approach is to use the method of successive approximations. First, we recalculate the ionic strength using the concentrations of all ions, including Pb^{2+} and IO_3^- . Next, we recalculate the activity coefficients for Pb^{2+} and IO_3^- , and then recalculate the molar solubility. We continue this cycle until two successive calculations yield the same molar solubility within an acceptable margin of error.

This is a good place to revisit the meaning of pH. In [Chapter 2](#) we defined pH as

$$\text{pH} = -\log[\text{H}_3\text{O}^+]$$

Now we see that the correct definition is

$$\text{pH} = -\log a_{\text{H}_3\text{O}^+} = -\log \gamma_{\text{H}_3\text{O}^+} [\text{H}_3\text{O}^+]$$

Failing to account for the effect of ionic strength can lead to a significant error in the reported concentration of H_3O^+ . For example, if the pH of a solution is 7.00 and the activity coefficient for H_3O^+ is 0.90, then the concentration of H_3O^+ is 1.11×10^{-7} M, not 1.00×10^{-7} M, an error of +11%. Fortunately, in developing and carrying out analytical methods, we are more interested in controlling pH than in calculating $[\text{H}_3\text{O}^+]$. As a result, the difference between the two definitions of pH is rarely a significant concern.

6J Using Excel and R to Solve Equilibrium Problems

In solving equilibrium problems we typically make one or more assumptions to simplify the algebra. These assumptions are important because they allow us to reduce the problem to an equation in x that we can solve by simply taking a square-root, a cube-root, or by using the quadratic equation. Without these assumptions, most equilibrium problems result in a cubic equation (or a higher-order equation) that is harder to solve. Both Excel and R are useful tools for solving such equations.

6J.1 Excel

Excel offers a useful tool—the Solver function—for finding a polynomial equation's chemically significant root. In addition, it is easy to solve a system of simultaneous equations by constructing a spreadsheet that allows you to test and evaluate multiple solutions. Let's work through two examples.

EXAMPLE 1: SOLUBILITY OF $\text{Pb}(\text{IO}_3)_2$ IN 0.10 M $\text{Pb}(\text{NO}_3)_2$

In our earlier treatment of this problem we arrived at the following cubic equation

$$4x^3 + 0.40x^2 = 2.5 \times 10^{-13}$$

where x is the equilibrium concentration of Pb^{2+} . Although there are several approaches for solving cubic equations, none are computationally easy. One approach is to iterate in on the answer by finding two values of x , one of which leads to a result larger than 2.5×10^{-13} and one of which gives a result smaller than 2.5×10^{-13} . Having established boundaries for the value of x , we then shift the upper limit and the lower limit until the precision of our answer is satisfactory. Without going into details, this is how Excel's Solver function works.

To solve this problem, we first rewrite the cubic equation so that its right-side equals zero.

$$4x^3 + 0.40x^2 - 2.5 \times 10^{-13} = 0$$

Next, we set up the spreadsheet shown in Figure 6.17a, placing the formula for the cubic equation in cell B2, and entering our initial guess for x in

Figure 6.17 Spreadsheet demonstrating the use of Excel's Solver function to find the root of a cubic equation. The spreadsheet in (a) shows the cubic equation in cell B2 and the initial guess for the value of x in cell B1; Excel replaces the formula with its equivalent value. The spreadsheet in (b) shows the results of running Excel's Solver function.

(a)

	A	B
1	x =	0
2	function	= 4*b1^3 + 0.4*b1^2 - 2.5e-13

(b)

	A	B
1	x =	7.90565E-07
2	function	-5.71156E-19

cell B1. We expect x to be small—because $\text{Pb}(\text{IO}_3)_2$ is not very soluble—so setting our initial guess to 0 seems reasonable. Finally, we access the Solver function by selecting **Solver...** from the **Tools** menu, which opens the *Solver Parameters* window.

To define the problem, place the cursor in the box for *Set Target Cell* and then click on cell B2. Select the *Value of:* radio button and enter 0 in the box. Place the cursor in the box for *By Changing Cells:* and click on cell B1. Together, these actions instruct the Solver function to change the value of x , which is in cell B1, until the cubic equation in cell B2 equals zero.

Before we actually solve the function, we need to consider whether there are any limitations for an acceptable result. For example, we know that x cannot be smaller than 0 because a negative concentration is not possible. We also want to ensure that the solution's precision is acceptable. Click on the button labeled **Options...** to open the *Solver Options* window. Checking the option for *Assume Non-Negative* forces the Solver to maintain a positive value for the contents of cell B1, meeting one of our criteria. Setting the precision takes a bit more thought. The Solver function uses the precision to decide when to stop its search, doing so when

$$|\text{expected value} - \text{calculated value}| \times 100 \leq \text{precision} (\%)$$

where *expected value* is the target cell's desired value (0 in this case), *calculated value* is the function's current value (cell B1 in this case), and *precision* is the value we enter in the box for *Precision*. Because our initial guess of $x=0$ gives a calculated result of 2.5×10^{-13} , accepting the Solver's default precision of 1×10^{-6} stops the search after one cycle. To be safe, set the precision to 1×10^{-18} . Click **OK** and then **Solve**. When the Solver function finds a solution, the results appear in your spreadsheet (see [Figure 6.17b](#)). Click **OK** to keep the result, or **Cancel** to return to the original values. Note that the answer here agrees with our earlier result of 7.91×10^{-7} M for the solubility of $\text{Pb}(\text{IO}_3)_2$.

Be sure to evaluate the reasonableness of Solver's answer. If necessary, repeat the process using a smaller value for the precision.

EXAMPLE 2: pH OF 1.0 M HF

In developing our solution to this problem we began by identifying four unknowns and writing out the following four equations.

$$K_a = \frac{[\text{H}_3\text{O}^+][\text{F}^-]}{[\text{HF}]} = 6.8 \times 10^{-4}$$

$$K_w = [\text{H}_3\text{O}^+][\text{OH}^-] = 1.00 \times 10^{-14}$$

$$C_{\text{HF}} = [\text{HF}] + [\text{F}^-]$$

$$[\text{H}_3\text{O}^+] = [\text{OH}^-] + [\text{F}^-]$$

From this point, we made two assumptions, simplifying the problem to one that was easy to solve.

$$[\text{H}_3\text{O}^+] = \sqrt{K_a C_{\text{HF}}} = \sqrt{(6.8 \times 10^{-4})(1.0)} = 2.6 \times 10^{-2}$$

Although we did not note this at the time, without making assumptions the solution to our problem is a cubic equation

$$\begin{aligned} [\text{H}_3\text{O}^+]^3 + K_a [\text{H}_3\text{O}^+]^2 \\ - (K_a C_{\text{HA}} + K_w) [\text{H}_3\text{O}^+] - K_a K_w = 0 \end{aligned} \quad 6.64$$

that we can solve using Excel's Solver function. Of course, this assumes that we successfully complete the derivation!

Another option is to use Excel to solve the equations simultaneously by iterating in on values for $[\text{HF}]$, $[\text{F}^-]$, $[\text{H}_3\text{O}^+]$, and $[\text{OH}^-]$. [Figure 6.18a](#) shows a spreadsheet for this purpose. The cells in the first row contain our initial guesses for the equilibrium pH. Using the ladder diagram in [Figure 6.14](#), choosing pH values between 1 and 3 seems reasonable. You can add additional columns if you wish to include more pH values. The formulas in rows 2–5 use the definition of pH to calculate $[\text{H}_3\text{O}^+]$, K_w to calculate $[\text{OH}^-]$, the charge balance equation to calculate $[\text{F}^-]$, and K_a to calculate $[\text{HF}]$. To evaluate the initial guesses, we use the mass balance expression for HF, rewriting it as

$$[\text{HF}] + [\text{F}^-] - C_{\text{HF}} = [\text{HF}] + [\text{F}^-] - 1.0 = 0$$

and entering it in the last row. This cell gives the calculation's error

[Figure 6.18b](#) shows the actual values for the spreadsheet in [Figure 6.18a](#). The negative value in cells B6 and C6 means that the combined concentrations of HF and F^- are too small, and the positive value in cell D6 means that the combined concentrations are too large. The actual pH, therefore, must lie between 2.00 and 1.00. Using these pH values as new limits for the spreadsheet's first row, we continue to narrow the range for the actual pH. [Figure 6.18c](#) shows a final set of guesses, with the actual pH falling between 1.59 and 1.58. Because the error for 1.59 is smaller than that for 1.58, we will accept a pH of 1.59 as the answer. Note that this is an agreement with our earlier result.

Practice Exercise 6.14

Using Excel, calculate the solubility of AgI in 0.10 M NH_3 without making any assumptions. See our [earlier treatment of this problem](#) for the relevant equilibrium reactions and constants.

Click [here](#) to review your answer to this exercise.

You also can solve this set of simultaneous equations using Excel's Solver function. To do so, create the spreadsheet in [Figure 6.18a](#), but omit all columns other than A and B. Select **Solver...** from the **Tools** menu and define the problem by using B6 for *Set Target Cell* and setting its desired value to 0, and selecting B1 for *By Changing Cells*. You may need to play with the Solver's options to find a suitable solution to the problem, and it is wise to try several different initial guesses.

The Solver function works well for relatively simple problems, such as finding the pH of 1.0 M HF. As problems become more complex—such as solving an equilibrium problem with lots of unknowns—the Solver function becomes less reliable in finding a solution.

	A	B	C	D
1	pH =	3.00	2.00	1.00
2	[H ₃ O ⁺] =	= 10 ^{-b1}	= 10 ^{-c1}	= 10 ^{-d1}
3	[OH ⁻] =	= 1e-14/b2	= 1e-14/c2	= 1e-14/d2
4	[F ⁻] =	= b2 - b3	= c2 - c3	= d2 - d3
5	[HF] =	= (b2 * b4)/6.8e-4	= (c2 * c4)/6.8e-4	= (d2 * d4)/6.8e-4
6	error	= b5 + b4 - 1	= c5 + c4 - 1	= d5 + d4 - 1

(a)

	A	B	C	D
1	pH =	3.00	2.00	1.00
2	[H ₃ O ⁺] =	1.00E-03	1.00E-02	1.00E-1
3	[OH ⁻] =	1.00E-11	1.00E-12	1.00E-13
4	[F ⁻] =	1.00E-03	1.00E-02	1.00E-01
5	[HF] =	0.001470588	0.147058824	14.70588235
6	error	-9.98E-01	-8.43E-01	1.38E+01

(b)

	A	B	C	D
1	pH =	1.59	1.58	1.57
2	[H ₃ O ⁺] =	2.57E-02	2.63E-02	2.69E-02
3	[OH ⁻] =	3.89E-13	3.80E-13	3.72E-13
4	[F ⁻] =	2.57E-02	2.63E-02	2.69E-02
5	[HF] =	0.971608012	1.017398487	1.065347
6	error	-2.69E-03	4.37E-02	9.23E-02

(c)

Figure 6.18 Spreadsheet demonstrating the use of Excel to solve a set of simultaneous equations. The spreadsheet in (a) shows the initial guess for [H₃O⁺] in the first row, and the formulas that you must enter in rows 2–6. Enter the formulas in cells B2–B6 and then copy and paste them into the appropriate cells in the remaining columns. As shown in (b), Excel replaces the formulas with their equivalent values. The spreadsheet in (c) shows the results after our final iteration. See the text for further details.

6J.2 R

R has a simple command—**uniroot**—for finding the chemically significant root of a polynomial equation. In addition, it is easy to write a function to solve a set of simultaneous equations by iterating in on a solution. Let's work through two examples.

EXAMPLE 1: SOLUBILITY OF Pb(IO₃)₂ IN 0.10 M Pb(NO₃)₂

In our earlier treatment of this problem we arrived at the following cubic equation

$$4x^3 + 0.40x^2 = 2.5 \times 10^{-13}$$

where x is the equilibrium concentration of Pb^{2+} . Although there are several approaches for solving cubic equations, none are computationally easy. One approach to solving the problem is to iterate in on the answer by finding two values of x , one of which leads to a result larger than 2.5×10^{-13} and one of which gives a result smaller than 2.5×10^{-13} . Having established boundaries for the value of x , we then shift the upper limit and the lower limit until the precision of our answer is satisfactory. Without going into details, this is how the **uniroot** command works.

The general form of the **uniroot** command is

$$\text{uniroot}(\text{function}, \text{lower}, \text{upper}, \text{tol})$$

where *function* is an object containing the equation whose root we are seeking, *lower* and *upper* are boundaries for the root, and *tol* is the desired accuracy for the root. To create an object containing the equation, we must rewrite it so that its right-side equals zero.

$$4x^3 + 0.40x^2 - 2.5 \times 10^{-13} = 0$$

Next, we enter the following code, which defines our cubic equation as a function with the name *eqn*.

$$> \text{eqn} = \text{function}(x) \ 4*x^3 + 0.4*x^2 - 2.5e-13$$

Because our equation is a function, the **uniroot** command can send a value of x to *eqn* and receive back the equation's corresponding value. Finally, we use the **uniroot** command to find the root.

$$> \text{uniroot}(\text{eqn}, \text{lower} = 0, \text{upper} = 0.1, \text{tol} = 1e-18)$$

We expect x to be small—because $\text{Pb}(\text{IO}_3)_2$ is not very soluble—so setting the lower limit to 0 is a reasonable choice. The choice for the upper limit is less critical. To ensure that the solution has sufficient precision, the tolerance should be smaller than the expected root. Figure 6.19 shows the resulting output. The value *\$root* is the equation's root, which is in good agreement with our earlier result of 7.91×10^{-7} for the molar solubility of $\text{Pb}(\text{IO}_3)_2$. The other results are the equation's value for the root, the number of iterations needed to find the root, and the root's estimated precision.

EXAMPLE 2: pH OF 1.0 M HF

In developing our solution to this problem we began by identifying four unknowns and writing out the following four equations.

$$K_a = \frac{[\text{H}_3\text{O}^+][\text{F}^-]}{[\text{HF}]} = 6.8 \times 10^{-4}$$

$$K_w = [\text{H}_3\text{O}^+][\text{OH}^-] = 1.00 \times 10^{-14}$$

$$C_{\text{HF}} = [\text{HF}] + [\text{F}^-]$$

For example, entering

```
> eqn(2)
```

passes the value $x = 2$ to the function and returns an answer of 33.6.

```
$root
[1] 7.905663e-07

$f.root
[1] 0

$iter
[1] 46

$estim.prec
[1] 1.827271e-12
```

Figure 6.19 The summary of R's output from the **uniroot** command. See the text for a discussion of how to interpret the results.

$$[\text{H}_3\text{O}^+] = [\text{OH}^-] + [\text{F}^-]$$

From this point, we made two assumptions, simplifying the problem to one that was easy to solve.

$$[\text{H}_3\text{O}^+] = \sqrt{K_a C_{\text{HF}}} = \sqrt{(6.8 \times 10^{-4})(1.0)} = 2.6 \times 10^{-2}$$

Although we did not note this at the time, without making assumptions the solution to our problem is a cubic equation

$$[\text{H}_3\text{O}^+]^3 + K_a [\text{H}_3\text{O}^+]^2 - (K_a C_{\text{HA}} + K_w) [\text{H}_3\text{O}^+] - K_a K_w = 0$$

that we can solve using the **uniroot** command. Of course, this assumes that we successfully complete the derivation!

Another option is to use write a function to solve simultaneously the four equations for the variables [HF], [F⁻], [H₃O⁺], and [OH⁻]. Here is the code for this function, which we will call *eval*.

```
> eval = function(pH){
+ h3o = 10^-pH
+ oh = 1e-14/h3o
+ hf = (h3o*f)/6.8e-4
+ error = hf + f - 1
+ output = data.frame(pH, error)
+ print(output)
+ }
```

Let's examine more closely how this function works. The function accepts a guess for the pH and uses the definition of pH to calculate [H₃O⁺], K_w to calculate [OH⁻], the charge balance equation to calculate [F⁻], and K_a to calculate [HF]. The function then evaluates the solution using the mass balance expression for HF, rewriting it as

$$[\text{HF}] + [\text{F}^-] - C_{\text{HF}} = [\text{HF}] + [\text{F}^-] - 1.0 = 0$$

The function then gathers together the initial guess for the pH and the error and prints them as a table.

The beauty of this function is that the object we pass to it, *pH*, can contain many values, allowing us to easily search for a solution. Because HF is an acid, we know that the solution must be acidic. This sets a lower limit of 7 for the pH. We also know that the pH of 1.0 M HF can be no larger than 1.0 M as this would be the upper limit if HF was a strong acid. For our first pass, let's enter the following code

```
> pH = c(7, 6, 5, 4, 3, 2, 1)
> func(pH)
```

The open { tells R that we intend to enter our function over several lines. When we press enter at the end of a line, R changes its prompt from > to +, indicating that we are continuing to enter the same command. The close } on the last line indicates that we are done entering the function.

The command **data.frame** combines two or more objects into a table.

You can adapt this function to other problems by changing the variable you pass to the function and the equations you include within the function.

(a)	pH	error	(b)	pH	error	(c)	pH	error
1	7	-1.0000000	1	2.0	-0.84294118	1	1.60	-0.047002688
2	6	-0.9999990	2	1.9	-0.75433822	2	1.59	-0.002688030
3	5	-0.9999899	3	1.8	-0.61475600	3	1.58	0.043701167
4	4	-0.9998853	4	1.7	-0.39459566	4	1.57	0.092262348
5	3	-0.9975294	5	1.6	-0.04700269	5	1.56	0.143097544
6	2	-0.8429412	6	1.5	0.50221101	6	1.55	0.196313586
7	1	13.8058824	7	1.4	1.37053600	7	1.54	0.252022331
8	0	1470.5882353	8	1.3	2.74406936	8	1.53	0.310340901
			9	1.2	4.91761295	9	1.52	0.371391928
			10	1.1	8.35821730	10	1.51	0.435303816
			11	1.0	13.80588235	11	1.50	0.502211012

Figure 6.20 The output of three iterations to find the pH for a solution of 1.0 M HF. The results are for pH values between (a) 7 and 0, (b) 2.0 and 1.0, and (c) 1.60 M and 1.50. The columns labeled “error” show an evaluation of the mass balance equation for HF, with positive values indicating that the pH is too low and negative values indicating that the pH is too high.

which varies the pH within these limits. The result, which is shown in Figure 6.20a, indicates that the pH must be less than 2 and greater than 1 because it is in this interval that the error changes sign.

For our second pass, we explore pH values between 2.0 and 1.0 to further narrow down the problem’s solution.

```
> pH = c(2.0, 1.9, 1.8, 1.7, 1.6, 1.5, 1.4, 1.3, 1.2, 1.1, 1.0)
> func(pH)
```

The result in Figure 6.20b show that the pH must be less than 1.6 and greater than 1.5. A third pass between these limits gives the result shown in Figure 6.20c, which is consistent with our earlier result of a pH 1.59.

Practice Exercise 6.15

Using R, calculate the solubility of AgI in 0.10 M NH_3 without making any assumptions. See our [earlier treatment of this problem](#) for the relevant equilibrium reactions and constants

Click [here](#) to review your answer to this exercise.

6K Some Final Thoughts on Equilibrium Calculations

In this chapter we have developed several tools for evaluating the composition of a system at equilibrium. These tools differ in how accurately they allow us to answer questions involving equilibrium chemistry. They also differ in their ease of use. An important part of having several tools available to you is knowing when to use them. If you need to know whether a reaction is favorable, or to estimate the pH of a solution, then a ladder diagram will meet your needs. On the other hand, if you require a more

accurate estimate of a compound's solubility, then a rigorous calculation that includes activity coefficients is necessary.

A critical part of solving an equilibrium problem is knowing what equilibrium reactions to include. The importance of including all relevant reactions is obvious, and at first glance this does not appear to be a significant problem—it is, however, a potential source of significant errors. The tables of equilibrium constants in this textbook, although extensive, are a small subset of all known equilibrium constants, making it easy to overlook an important equilibrium reaction. Commercial and freeware computational programs with extensive databases are available for equilibrium modeling. Two excellent freeware programs are [Visual Minteq](#) (Windows only) and [ChemEQL](#) (Windows, Mac, Linux, and Solaris). These programs also include the ability to account for ionic strength.

Finally, a consideration of equilibrium chemistry can only help us decide if a reaction is favorable. It does not, however, guarantee that the reaction occurs. How fast a reaction approaches its equilibrium position does not depend on the equilibrium constant. The rate of a chemical reaction is a kinetic, not a thermodynamic, phenomenon. We will consider kinetic effects and their application in analytical chemistry in Chapter 13.

6L Key Terms

acid	acid dissociation constant	activity
activity coefficient	amphiprotic	base
base dissociation constant	buffer	buffer capacity
charge balance equation	common ion effect	cumulative formation constant
dissociation constant	enthalpy	entropy
equilibrium	equilibrium constant	extended Debye-Hückel equation
formation constant	Gibb's free energy	half-reaction
Henderson–Hasselbalch equation	ionic strength	ladder diagram
Le Châtelier's principle	ligand	mass balance equation
metal–ligand complex	method of successive approximations	monoprotic
Nernst equation	oxidation	oxidizing agent
pH scale	polyprotic	potential
precipitate	redox reaction	reducing agent
reduction	standard-state	standard potential
steady state	stepwise formation constant	solubility product

As you review this chapter, try to define a key term in your own words. Check your answer by clicking on the key term, which will take you to the page where it was first introduced. Clicking on the **KEY TERM** there, will bring you back to this page so that you can continue with another key term.

6M Chapter Summary

Analytical chemistry is more than a collection of techniques; it is the application of chemistry to the analysis of samples. As we will see in later chapters, almost all analytical methods use chemical reactivity to accomplish one or more of the following: dissolve the sample, separate analytes from interferents, transform the analyte to a more useful form, or provide a signal. Equilibrium chemistry and thermodynamics provide us with a means for predicting which reactions are likely to be favorable.

The most important types of reactions are precipitation reactions, acid–base reactions, metal–ligand complexation reactions, and redox reactions. In a precipitation reaction two or more soluble species combine to produce an insoluble product called a precipitate, which we characterize using a solubility product.

An acid–base reaction occurs when an acid donates a proton to a base. The reaction's equilibrium position is described using either an acid dissociation constant, K_a , or a base dissociation constant, K_b . The product of K_a and K_b for an acid and its conjugate base is the dissociation constant for water, K_w .

When a ligand donates one or more pairs of electron to a metal ion, the result is a metal–ligand complex. Two types of equilibrium constants are used to describe metal–ligand complexation—stepwise formation constants and overall formation constants. There are two stepwise formation constants for the metal–ligand complex ML_2 , each describing the addition of one ligand; thus, K_1 represents the addition of the first ligand to M, and K_2 represents the addition of the second ligand to ML. Alternatively, we can use a cumulative, or overall formation constant, β_2 , for the metal–ligand complex ML_2 , in which both ligands are added to M.

In a redox reaction, one of the reactants undergoes oxidation and another reactant undergoes reduction. Instead of using an equilibrium constants to characterize a redox reactions, we use the potential, positive values of which indicate a favorable reaction. The Nernst equation relates this potential to the concentrations of reactants and products.

Le Châtelier's principle provides a means for predicting how a system at equilibrium responds to a change in conditions. If we apply a stress to a system at equilibrium—by adding a reactant or product, by adding a reagent that reacts with one of the reactants or products, or by changing the volume—the system responds by moving in the direction that relieves the stress.

You should be able to describe a system at equilibrium both qualitatively and quantitatively. You can develop a rigorous solution to an equilibrium problem by combining equilibrium constant expressions with appropriate mass balance and charge balance equations. Using this systematic approach, you can solve some quite complicated equilibrium problems. If a less rigor-

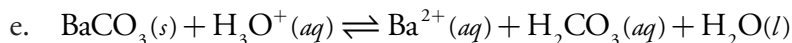
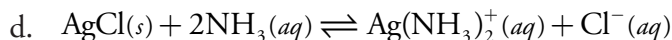
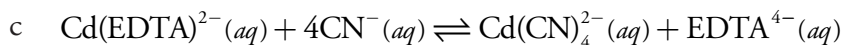
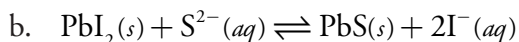
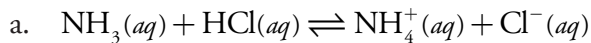
ous answer is acceptable, then a ladder diagram may help you estimate the equilibrium system's composition.

Solutions containing relatively similar amounts of a weak acid and its conjugate base experience only a small change in pH upon adding a small amount of a strong acid or a strong base. We call these solutions buffers. A buffer can also be formed using a metal and its metal–ligand complex, or an oxidizing agent and its conjugate reducing agent. Both the systematic approach to solving equilibrium problems and ladder diagrams are useful tools for characterizing buffers.

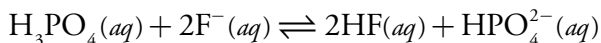
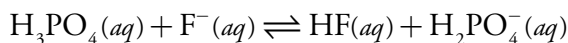
A quantitative solution to an equilibrium problem may give an answer that does not agree with experimental results if we do not consider the effect of ionic strength. The true, thermodynamic equilibrium constant is a function of activities, a , not concentrations. A species' activity is related to its molar concentration by an activity coefficient, γ . Activity coefficients can be calculated using the extended Debye–Hückel equation, making possible a more rigorous treatment of equilibria.

6N Problems

1. Write equilibrium constant expressions for the following reactions. What is the value for each reaction's equilibrium constant?

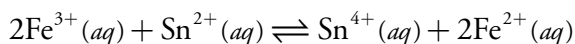


2. Using a ladder diagram, explain why the first reaction is favorable and the second reaction is unfavorable.



Determine the equilibrium constant for these reactions and verify that they are consistent with your ladder diagram.

3. Calculate the potential for the following redox reaction for a solution in which $[\text{Fe}^{3+}] = 0.050 \text{ M}$, $[\text{Fe}^{2+}] = 0.030 \text{ M}$, $[\text{Sn}^{2+}] = 0.015 \text{ M}$ and $[\text{Sn}^{4+}] = 0.020 \text{ M}$.



Most of the problems that follow require one or more equilibrium constants or standard state potentials. For your convenience, here are hyperlinks to the appendices containing these constants

[Appendix 10: Solubility Products](#)

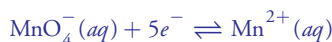
[Appendix 11: Acid Dissociation Constants](#)

[Appendix 12: Metal-Ligand Formation Constants](#)

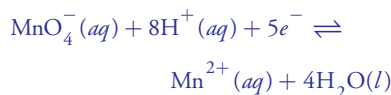
[Appendix 13: Standard State Reduction Potentials](#)

These redox reactions in this problem are not balanced. You will need to balance the reactions before calculating their standard state potentials. Although you may recall how to do this from another course, there is a much easier approach that you can use here. Identify the oxidizing agent and the reducing agent and divide the reaction into two unbalanced half-reactions. Using [Appendix 13](#), find the appropriate balanced half-reactions. Add the two half-reactions together and simplify the stoichiometry to arrive at the balanced redox reaction.

As an example, in (a) the oxidizing agent is MnO_4^- and its unbalanced half-reaction is



The corresponding balanced half-reaction from [Appendix 13](#) is



Most of the problems that follow require one or more equilibrium constants or standard state potentials. For your convenience, here are hyperlinks to the appendices containing these constants

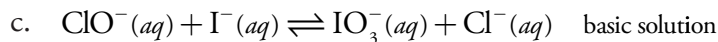
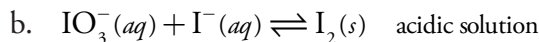
[Appendix 10: Solubility Products](#)

[Appendix 11: Acid Dissociation Constants](#)

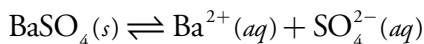
[Appendix 12: Metal-Ligand Formation Constants](#)

[Appendix 13: Standard State Reduction Potentials](#)

4. Calculate the standard state potential and the equilibrium constant for each of the following redox reactions. Assume that $[\text{H}_3\text{O}^+]$ is 1.0 M for acidic solutions, and that $[\text{OH}^-]$ is 1.0 M for basic solutions.



5. One analytical method for determining the concentration of sulfur is to oxidize it to SO_4^{2-} and then precipitate it as BaSO_4 by adding BaCl_2 . The mass of the resulting precipitate is proportional to the amount of sulfur in the original sample. The accuracy of this method depends on the solubility of BaSO_4 , the reaction for which is shown here.

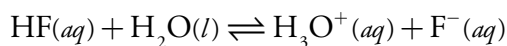
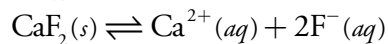


How do the following affect the solubility of BaSO_4 and, therefore, the accuracy of the analytical method?

- decreasing the solution's pH
 - adding more BaCl_2
 - increasing the volume of the solution by adding H_2O
6. Write a charge balance equation and mass balance equations for the following solutions. Some solutions may have more than one mass balance equation.
- 0.10 M NaCl
 - 0.10 M HCl
 - 0.10 M HF
 - 0.10 M NaH_2PO_4
 - MgCO₃ (saturated solution)
 - 0.10 M $\text{Ag}(\text{CN})_2^-$
 - 0.10 M HCl and 0.050 M NaNO₂
7. Using the systematic approach to equilibrium problems, calculate the pH of the following solutions. Be sure to state and justify any assumptions you make in solving the problems.
- 0.050 M HClO₄
 - 1.00×10^{-7} M HCl
 - 0.025 M HClO
 - 0.010 M HCOOH
 - 0.050 M Ba(OH)₂
 - 0.010 M C₅H₅N

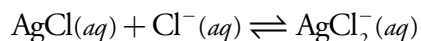
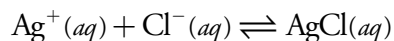
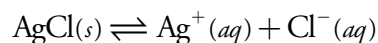
8. Construct ladder diagrams for the following diprotic weak acids (H_2L) and estimate the pH of 0.10 M solutions of H_2L , HL^- and L^{2-} .
- maleic acid
 - malonic acid
 - succinic acid
9. Using the systematic approach to solving equilibrium problems, calculate the pH of the diprotic weak acid in problem 8. Be sure to state and justify any assumptions you make in solving the problems.
10. Ignoring activity effects, calculate the concentration of Hg_2^{2+} in the following solutions. Be sure to state and justify any assumption you make in solving the problems.
- a saturated solution of Hg_2Br_2
 - 0.025 M $Hg_2(NO_3)_2$ saturated with Hg_2Br_2
 - 0.050 M NaBr saturated with Hg_2Br_2

11. The solubility of CaF_2 is controlled by the following two reactions



Calculate the solubility of CaF_2 in a solution buffered to a pH of 7.00. Use a ladder diagram to help simplify the calculations. How would your approach to this problem change if the pH is buffered to 2.00? What is the solubility of CaF_2 at this pH? Be sure to state and justify any assumptions you make in solving the problems.

12. Calculate the solubility of $Mg(OH)_2$ in a solution buffered to a pH of 7.00. How does this compare to its solubility in unbuffered deionized water? Be sure to state and justify any assumptions you make in solving the problem.
13. Calculate the solubility of Ag_3PO_4 in a solution buffered to a pH of 7.00. Be sure to state and justify any assumptions you make in solving the problem.
14. Determine the equilibrium composition of saturated solution of $AgCl$. Assume that the solubility of $AgCl$ is influenced by the following reactions.



Be sure to state and justify any assumptions you make in solving the problem.

Most of the problems that follow require one or more equilibrium constants or standard state potentials. For your convenience, here are hyperlinks to the appendices containing these constants

[Appendix 10: Solubility Products](#)

[Appendix 11: Acid Dissociation Constants](#)

[Appendix 12: Metal-Ligand Formation Constants](#)

[Appendix 13: Standard State Reduction Potentials](#)

15. Calculate the ionic strength of the following solutions
 - a. 0.050 M NaCl
 - b. 0.025 M CuCl₂
 - c. 0.10 M Na₂SO₄
16. Repeat the calculations in problem 10, this time correcting for the effect of ionic strength. Be sure to state and justify any assumptions you make in solving the problems.
17. Over what pH range do you expect Ca₃(PO₄)₂ to have its minimum solubility?
18. Construct ladder diagrams for the following systems, each consisting of two or three equilibria. Using your ladder diagrams, what reactions are likely to occur in each system?
 - a. HF and H₃PO₄
 - b. Ag(CN)₂⁻, Ni(CN)₄²⁻ and Fe(CN)₆³⁻
 - c. Cr₂O₇²⁻/Cr³⁺ and Fe³⁺/Fe²⁺

Most of the problems that follow require one or more equilibrium constants or standard state potentials. For your convenience, here are hyperlinks to the appendices containing these constants

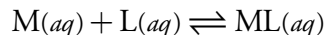
[Appendix 10: Solubility Products](#)

[Appendix 11: Acid Dissociation Constants](#)

[Appendix 12: Metal-Ligand Formation Constants](#)

[Appendix 13: Standard State Reduction Potentials](#)

19. Calculate the pH of the following acid–base buffers. Be sure to state and justify any assumptions you make in solving the problems.
 - a. 100 mL of 0.025 M formic acid and 0.015 M sodium formate
 - b. 50.00 mL of 0.12 M NH₃ and 5.30 mL of 1.0 M HCl
 - c. 5.00 g of Na₂CO₃ and 5.00 g of NaHCO₃ diluted to 100 mL
20. Calculate the pH of the buffers in problem 19 after adding 5.0 mL of 0.10 M HCl. Be sure to state and justify any assumptions you make in solving the problems.
21. Calculate the pH of the buffers in problem 19 after adding 5.0 mL of 0.10 M NaOH. Be sure to state and justify any assumptions you make in solving the problems.
22. Consider the following hypothetical complexation reaction between a metal, M, and a ligand, L



with a formation constant of 1.5×10^8 . Derive an equation, similar to the Henderson–Hasselbalch equation, relating pM to the concentrations of L and ML. What is the pM for a solution containing 0.010 mol of M and 0.020 mol of L? What is pM be if you add 0.002 mol of M to this solution? Be sure to state and justify any assumptions you make in solving the problem.

23. A redox buffer contains an oxidizing agent and its conjugate reducing agent. Calculate the potential of a solution containing 0.010 mol of Fe³⁺ and 0.015 mol of Fe²⁺. What is the potential if you add sufficient

oxidizing agent to convert 0.002 mol of Fe^{2+} to Fe^{3+} ? Be sure to state and justify any assumptions you make in solving the problem.

24. Use either Excel or R to solve the following problems. For these problems, make no simplifying assumptions.
- the solubility of CaF_2 in deionized water
 - the solubility of AgCl in deionized water (see Problem 14 for the relevant equilibria)
 - the pH of 0.10 M fumaric acid
25. Beginning with the relevant equilibrium reactions, derive equation 6.64 for the rigorous solution to the pH of 0.1 M HF.

Most of the problems that follow require one or more equilibrium constants or standard state potentials. For your convenience, here are hyperlinks to the appendices containing these constants

[Appendix 10: Solubility Products](#)

[Appendix 11: Acid Dissociation Constants](#)

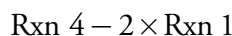
[Appendix 12: Metal-Ligand Formation Constants](#)

[Appendix 13: Standard State Reduction Potentials](#)

60 Solutions to Practice Exercises

Practice Exercise 6.1

The overall reaction is equivalent to



Subtracting a reaction is equivalent to adding the reverse reaction; thus, the overall equilibrium constant is

$$K = \frac{K_4}{(K_1)^2} = \frac{5.0}{(0.40)^2} = 31.25 \approx 31$$

Click [here](#) to return to the chapter.

Practice Exercise 6.2

The K_b for hydrogen oxalate is

$$K_{b,\text{HC}_2\text{O}_4^-} = \frac{K_w}{K_{a,\text{H}_2\text{C}_2\text{O}_4}} = \frac{1.00 \times 10^{-14}}{5.60 \times 10^{-2}} = 1.79 \times 10^{-13}$$

and the K_b for oxalate is

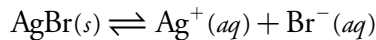
$$K_{b,\text{C}_2\text{O}_4^{2-}} = \frac{K_w}{K_{a,\text{HC}_2\text{O}_4^-}} = \frac{1.00 \times 10^{-14}}{5.42 \times 10^{-5}} = 1.85 \times 10^{-10}$$

As we expect, the K_b value for $\text{C}_2\text{O}_4^{2-}$ is larger than that for HC_2O_4^- .

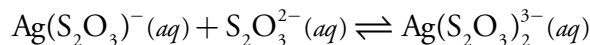
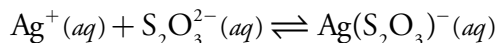
Click [here](#) to return to the chapter.

Practice Exercise 6.3

We can write the reaction as a sum of three other reactions. The first reaction is the solubility of $\text{AgCl}(s)$, which we characterize by its K_{sp} .



The remaining two reactions are the stepwise formation of $\text{Ag}(\text{S}_2\text{O}_3)_2^{3-}$, which we characterize by K_1 and K_2 .



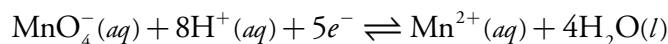
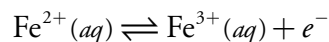
Using values for K_{sp} , K_1 , and K_2 from [Appendix 10](#) and [Appendix 11](#), we find that the equilibrium constant for our reaction is

$$K = K_{\text{sp}} \times K_1 \times K_2 = (5.0 \times 10^{-13})(6.6 \times 10^8)(7.1 \times 10^4) = 23$$

Click [here](#) to return to the chapter.

Practice Exercise 6.4

The two half-reactions are the oxidation of Fe^{2+} and the reduction of MnO_4^- .



From [Appendix 13](#), the standard state reduction potentials for these half-reactions are

$$E^\circ_{\text{Fe}^{3+}/\text{Fe}^{2+}} = 0.771 \text{ V} \quad E^\circ_{\text{MnO}_4^-/\text{Mn}^{2+}} = 1.51 \text{ V}$$

(a) The standard state potential for the reaction is

$$E^\circ = E^\circ_{\text{MnO}_4^-/\text{Mn}^{2+}} - E^\circ_{\text{Fe}^{3+}/\text{Fe}^{2+}} = 1.51 \text{ V} - 0.771 \text{ V} = 0.74 \text{ V}$$

(b) To calculate the equilibrium constant we substitute appropriate values into [equation 6.25](#).

$$E^\circ = 0.74 \text{ V} = \frac{0.05916}{5} \log K$$

Solving for K gives its value as

$$\log K = 62.5 \quad K = 3.2 \times 10^{62}$$

(c) To calculate the potential under these non-standard state conditions, we make appropriate substitutions into the Nernst equation.

$$E = E^\circ - \frac{RT}{nF} \ln \frac{[\text{Mn}^{2+}][\text{Fe}^{3+}]^5}{[\text{MnO}_4^-][\text{Fe}^{2+}]^5[\text{H}^+]^8}$$

$$E = 0.74 - \frac{0.05916}{5} \log \frac{(0.015)(0.10)^5}{(0.025)(0.50)^5 (1 \times 10^{-7})^8}$$

$$E = 0.74 - \frac{0.05916}{5} \log \frac{(0.015)(0.10)^5}{(0.025)(0.50)^5 (1 \times 10^{-7})^8} = 0.12 \text{ V}$$

Click [here](#) to return to the chapter.

Practice Exercise 6.5

From [Appendix 11](#), the pK_a values for H_2CO_3 are 6.352 and 10.329. The ladder diagram for H_2CO_3 is shown to the side. The predominate form at a pH of 7.00 is HCO_3^- .

Click [here](#) to return to the chapter.

Practice Exercise 6.6

The ladder diagram in [Figure 6.5](#) indicates that the reaction between acetic acid and *p*-nitrophenolate is favorable. Because *p*-nitrophenolate is in excess, we assume that the reaction of acetic acid to acetate is complete. At equilibrium essentially no acetic acid remains and there are 0.040 moles of acetate. Converting acetic acid to acetate consumes 0.040 moles of *p*-nitrophenolate; thus

$$\text{moles } p\text{-nitrophenolate} = 0.090 - 0.040 = 0.050 \text{ mol}$$

$$\text{moles } p\text{-nitrophenol} = 0.040 \text{ mol}$$

According to the ladder diagram for this system, the pH is 7.15 when there are equal concentrations of *p*-nitrophenol and *p*-nitrophenolate. Because we have slightly more *p*-nitrophenolate than we have *p*-nitrophenol, the pH is slightly greater than 7.15.

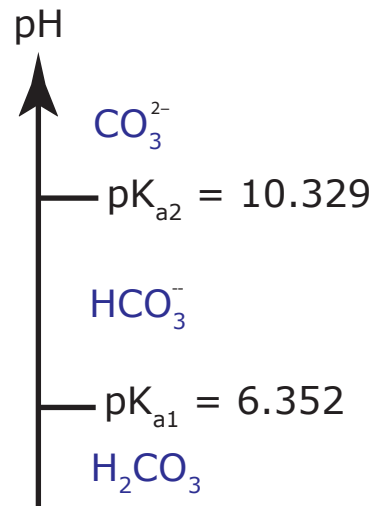
Click [here](#) to return to the chapter.

Practice Exercise 6.7

As Hg_2Cl_2 dissolves, two Cl^- are produced for each ion of Hg_2^{2+} . If we assume that x is the change in the molar concentration of Hg_2^{2+} , then the change in the molar concentration of Cl^- is $2x$. The following table helps us keep track of our solution to this problem.

Concentrations	$\text{Hg}_2\text{Cl}_2(s)$	\rightleftharpoons	$\text{Hg}_2^{2+}(aq)$	+	$2\text{Cl}^-(aq)$
Initial	solid		0		0
Change	solid		$+x$		$+2x$
Equilibrium	solid		x		$2x$

Substituting the equilibrium concentrations into the K_{sp} expression for Hg_2Cl_2 gives



$$K_{\text{sp}} = [\text{Hg}_2^{2+}][\text{Cl}^-]^2 = (x)(2x)^2 = 4x^3 = 1.2 \times 10^{-18}$$

$$x = 6.69 \times 10^{-7}$$

Substituting x back into the equilibrium expressions for Hg_2^{2+} and Cl^- gives their concentrations as

$$[\text{Hg}_2^{2+}] = x = 6.7 \times 10^{-7} \text{ M} \quad [\text{Cl}^-] = 2x = 1.3 \times 10^{-6} \text{ M}$$

The molar solubility is equal to $[\text{Hg}_2^{2+}]$, or 6.7×10^{-7} mol/L.

Click [here](#) to return to the chapter.

Practice Exercise 6.8

We begin by setting up a table to help us keep track of the concentrations of Hg_2^{2+} and Cl^- as this system moves toward and reaches equilibrium.

Concentrations	$\text{Hg}_2\text{Cl}_2(s)$	\rightleftharpoons	$\text{Hg}_2^{2+}(aq)$	+	$2\text{Cl}^-(aq)$
Initial	solid		0		0.10
Change	solid		$+x$		$+2x$
Equilibrium	solid		x		$0.10 + 2x$

Substituting the equilibrium concentrations into the K_{sp} expression for Hg_2Cl_2 leaves us with a difficult to solve cubic equation.

$$K_{\text{sp}} = [\text{Hg}_2^{2+}][\text{Cl}^-]^2 = (x)(0.10)^2 = 4x^3 + 0.40x^2 + 0.10x$$

Let's make an assumption to simplify this problem. Because we expect the value of x to be small, let's assume that

$$[\text{Cl}^-] = 0.10 + x \approx 0.10 \text{ M}$$

This simplifies our problems to

$$K_{\text{sp}} = [\text{Hg}_2^{2+}][\text{Cl}^-]^2 = (x)(0.10)^2 = 0.010x = 1.2 \times 10^{-18}$$

which gives the value of x as

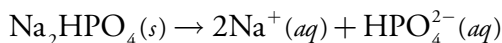
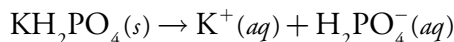
$$x = 1.2 \times 10^{-16} \text{ M}$$

The difference between the actual concentration of Cl^- , which is $(0.10 + x)$ M, and our assumption that it is 0.10 M introduces an error of $1.2 \times 10^{-14}\%$. This is a negligible error. The molar solubility of Hg_2Cl_2 is the same as the concentration of Hg_2^{2+} , or 1.2×10^{-16} M. As expected, the molar solubility in 0.10 M NaCl is less than 6.7×10^{-7} mol/L, which is its solubility in water (see [solution](#) to [Practice Exercise 6.7](#)).

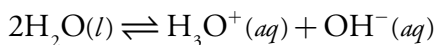
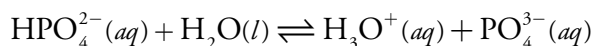
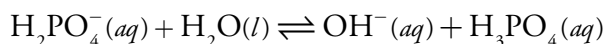
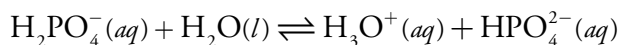
Click [here](#) to return to the chapter.

Practice Exercise 6.9

To help us in determining what ions are in solution, let's write down all the reaction leading to the preparation of the solutions and the equilibria within the solutions. These reactions are the dissolution of two soluble salts



and the acid–base dissociation reactions for H_2PO_4^- , HPO_4^{2-} , and H_2O .



Note that we did not include the base dissociation reaction for HPO_4^{2-} because we already have accounted for its product, H_2PO_4^- , in another reaction. The mass balance equations for K^+ and Na^+ are straightforward

$$[\text{K}^+] = 0.10 \text{ M} \quad [\text{Na}^+] = 0.10 \text{ M}$$

but the mass balance equation for the phosphate takes a little bit of thought. Both H_2PO_4^- and HPO_4^{2-} produce the same ions in solution. We can, therefore, imagine that the solution initially contains 0.15 M KH_2PO_4 , which gives the following mass balance equation.

$$0.15 \text{ M} = [\text{H}_3\text{PO}_4] + [\text{H}_2\text{PO}_4^-] + [\text{HPO}_4^{2-}] + [\text{PO}_4^{3-}]$$

The charge balance equation is

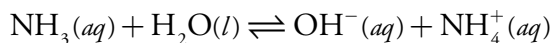
$$[\text{H}_3\text{O}^+] + [\text{K}^+] + [\text{Na}^+] =$$

$$[\text{H}_2\text{PO}_4^-] + 2 \times [\text{HPO}_4^{2-}] + 3 \times [\text{PO}_4^{3-}] + [\text{OH}^-]$$

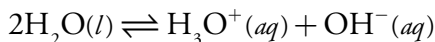
Click [here](#) to return to the chapter.

Practice Exercise 6.10

In determining the pH of 0.050 M NH_3 , we need to consider two equilibrium reactions—the base dissociation reaction for NH_3



and water's dissociation reaction.



These two reactions contain four species whose concentrations we need to consider: NH_3 , NH_4^+ , H_3O^+ , and OH^- . We need four equations to solve the problem—these equations are the K_b equation for NH_3

$$K_b = \frac{[\text{OH}^-][\text{NH}_4^+]}{[\text{NH}_3]} = 1.75 \times 10^{-5}$$

the K_w equation for H_2O

$$K_w = [\text{H}_3\text{O}^+][\text{OH}^-] = 1.00 \times 10^{-14}$$

a mass balance on ammonia

$$C_{\text{NH}_3} = 0.050 \text{ M} = [\text{NH}_3] + [\text{NH}_4^+]$$

and a charge balance equation

$$[\text{H}_3\text{O}^+] + [\text{NH}_4^+] = [\text{OH}^-]$$

To solve this problem, we will make two assumptions. Because NH_3 is a base, our first assumption is

$$[\text{OH}^-] \gg [\text{H}_3\text{O}^+]$$

which simplifies the charge balance equation to

$$[\text{NH}_4^+] = [\text{OH}^-]$$

Because NH_3 is a weak base, our second assumption is

$$[\text{NH}_3] \gg [\text{NH}_4^+]$$

which simplifies the mass balance equation to

$$C_{\text{NH}_3} = 0.050 \text{ M} = [\text{NH}_3]$$

Substituting the simplified charge balance equation and mass balance equation into the K_b equation leave us with

$$K_b = \frac{[\text{OH}^-][\text{OH}^-]}{C_{\text{NH}_3}} = \frac{[\text{OH}^-]^2}{C_{\text{NH}_3}} = 1.75 \times 10^{-5}$$

$$[\text{OH}^-] = \sqrt{K_b C_{\text{NH}_3}} = \sqrt{(1.75 \times 10^{-5})(0.050)} = 9.35 \times 10^{-4}$$

Before accepting this answer, we must verify our two assumptions. The first assumption is that the concentration of OH^- is significantly greater than the concentration of H_3O^+ . Using K_w , we find that

$$[\text{H}_3\text{O}^+] = \frac{K_w}{[\text{OH}^-]} = \frac{1.00 \times 10^{-14}}{9.35 \times 10^{-4}} = 1.07 \times 10^{-11}$$

Clearly this assumption is acceptable. Our second assumption is that the concentration of NH_3 is scientifically greater than the concentration of NH_4^+ . Using our simplified charge balance equation, we find that

$$[\text{NH}_4^+] = [\text{OH}^-] = 9.35 \times 10^{-4}$$

Because the concentration of NH_4^+ is 1.9% of C_{NH_3} , our second assumption also is reasonable. Given that $[\text{H}_3\text{O}^+]$ is 1.07×10^{-11} , the pH is 10.97.

Click [here](#) to return to the chapter.

Practice Exercise 6.11

In solving for the pH of 0.10 M alanine, we made the following three assumptions.

$$\text{Assumption One: } [\text{HL}] \gg [\text{H}_2\text{L}^+] + [\text{L}^-]$$

$$\text{Assumption Two: } K_{\text{a1}}K_{\text{w}} \ll K_{\text{a1}}K_{\text{a2}}C_{\text{HL}}$$

$$\text{Assumption Three: } K_{\text{a1}} \ll C_{\text{HL}}$$

The second and third assumptions are easy to check. The value for K_{a1} (4.487×10^{-3}) is 0.45% of C_{HL} (0.10), and $K_{\text{a1}} \times K_{\text{w}}$ (4.487×10^{-17}) is 0.074% of $K_{\text{a1}} \times K_{\text{a2}} \times C_{\text{HL}}$ (6.093×10^{-14}). Each assumption introduces an error of less than $\pm 5\%$.

To test the first assumption, we need to calculate the concentrations of H_2L^+ and L^- , which we accomplish using the equations for K_{a1} and K_{a2} .

$$[\text{H}_2\text{L}^+] = \frac{[\text{H}_3\text{O}^+][\text{HL}]}{K_{\text{a1}}} = \frac{(7.807 \times 10^{-7})(0.10)}{4.487 \times 10^{-3}} = 1.74 \times 10^{-5}$$

$$[\text{L}^-] = \frac{K_{\text{a2}}[\text{HL}]}{[\text{H}_3\text{O}^+]} = \frac{(1.358 \times 10^{-10})(0.10)}{7.807 \times 10^{-7}} = 1.74 \times 10^{-5}$$

Because these concentrations are less than $\pm 5\%$ of C_{HL} , the first assumption also is acceptable.

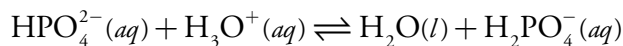
Click [here](#) to return to the chapter.

Practice Exercise 6.12

The acid dissociation constant for H_2PO_4^- is 6.32×10^{-8} , or a $\text{p}K_{\text{a}}$ of 7.199. Substituting the initial concentrations of H_2PO_4^- and HPO_4^{2-} into equation 6.60 and solving gives the buffer's pH as

$$\text{pH} = 7.199 + \log \frac{[\text{HPO}_4^{2-}]}{[\text{H}_2\text{PO}_4^-]} = 7.199 + \log \frac{0.050}{0.10} = 6.898 \approx 6.90$$

Adding HCl converts a portion of HPO_4^{2-} to H_2PO_4^- as a result of the following reaction



Because this reaction's equilibrium constant is so large (it is 1.59×10^7), we may treat the reaction as if it goes to completion. The new concentrations of H_2PO_4^- and HPO_4^{2-} are

$$\begin{aligned} C_{\text{H}_2\text{PO}_4^-} &= \frac{\text{mol H}_2\text{PO}_4^- + \text{mol HCl}}{V_{\text{total}}} \\ &= \frac{(0.10 \text{ M})(0.10 \text{ L}) + (0.20 \text{ M})(5.0 \times 10^{-3} \text{ L})}{0.10 \text{ L} + 5.0 \times 10^{-3} \text{ L}} = 0.105 \text{ M} \end{aligned}$$

$$\begin{aligned} C_{\text{HPO}_4^{2-}} &= \frac{\text{mol HPO}_4^{2-} - \text{mol HCl}}{V_{\text{total}}} \\ &= \frac{(0.05 \text{ M})(0.10 \text{ L}) - (0.20 \text{ M})(5.0 \times 10^{-3} \text{ L})}{0.10 \text{ L} + 5.0 \times 10^{-3} \text{ L}} = 0.0381 \text{ M} \end{aligned}$$

Substituting these concentrations into equation 6.60 gives a pH of

$$\text{pH} = 7.199 + \log \frac{[\text{HPO}_4^{2-}]}{[\text{H}_2\text{PO}_4^-]} = 7.199 + \log \frac{0.0381}{0.105} = 6.759 \approx 6.76$$

As we expect, adding HCl decreases the buffer's pH by a small amount, dropping from 6.90 to 6.76.

Click [here](#) to return to the chapter.

Practice Exercise 6.13

We begin by calculating the solution's ionic strength. Because NaCl is a 1:1 ionic salt, the ionic strength is the same as the concentration of NaCl; thus $\mu = 0.10 \text{ M}$. This assumes, of course, that we can ignore the contributions of Hg_2^{2+} and Cl^- from the solubility of Hg_2Cl_2 .

Next we use [equation 6.63](#) to calculate the activity coefficients for Hg_2^{2+} and Cl^- .

$$\log \gamma_{\text{Hg}_2^{2+}} = \frac{-0.51 \times (+2)^2 \times \sqrt{0.10}}{1 + 3.3 \times 0.40 \times \sqrt{0.10}} = -0.455$$

$$\gamma_{\text{Hg}_2^{2+}} = 0.351$$

$$\log \gamma_{\text{Cl}^-} = \frac{-0.51 \times (-1)^2 \times \sqrt{0.10}}{1 + 3.3 \times 0.3 \times \sqrt{0.10}} = -0.12$$

$$\gamma_{\text{Cl}^-} = 0.75$$

Defining the equilibrium concentrations of Hg_2^{2+} and Cl^- in terms of the variable x

Concentrations	$\text{Hg}_2\text{Cl}_2(s)$	\rightleftharpoons	$\text{Hg}_2^{2+}(aq)$	$+ 2\text{Cl}^-(aq)$
Initial	solid		0	0.10
Change	solid		$+x$	$+2x$
Equilibrium	solid		x	$0.10 + 2x$

and substituting into the thermodynamic solubility product for Hg_2Cl_2 , leave us with

$$K_{\text{sp}} = a_{\text{Hg}_2^{2+}} a_{\text{Cl}^-}^2 = \gamma_{\text{Hg}_2^{2+}} [\text{Hg}_2^{2+}] \gamma_{\text{Cl}^-}^2 [\text{Cl}^-]^2 = 1.2 \times 10^{-18}$$

$$1.2 \times 10^{-18} = (0.351)(x)(0.75)^2(0.10 + x)^2$$

Because the value of x is likely to be small, let's simplify this equation to

$$1.2 \times 10^{-18} = (0.351)(x)(0.75)^2(0.10)^2$$

Solving for x gives its value as 6.1×10^{-16} . Because x is the concentration of Hg_2^{2+} and $2x$ is the concentration of Cl^- , our decision to ignore their contributions to the ionic strength is reasonable. The molar solubility of Hg_2Cl_2 in 0.10 M NaCl is 6.1×10^{-16} mol/L. In [Practice Exercise 6.8](#), where we ignored ionic strength, we determined that the molar solubility of Hg_2Cl_2 is 1.2×10^{-16} mol/L, a result that is $5 \times$ smaller than its actual value.

Click [here](#) to return to the chapter.

Practice Exercise 6.14

To solve this problem, let's set up the following spreadsheet

	A	B
1	pI =	3
2	[I ⁻] =	= 10 ^{-b1}
3	[Ag ⁺] =	= 8.3e-17/b2
4	[Ag(NH ₃) ₂ ⁺] =	= b2 - b3
5	[NH ₃] =	= (b4/(b3*1.7e7)) ^{0.5}
6	[NH ₄ ⁺] =	= 0.10 - b5-2*b4
7	[OH ⁻] =	= 1.75e-5*b5/b6
8	[H ₃ O ⁺] =	= 1.00e-14/b7
9	error	= b3 + b4 + b6 + b8 - b2 - b7

copying the contents of cells B1-B9 into several additional columns. See our earlier treatment of this problem for the relevant equilibrium reactions and equilibrium constants. The initial guess for pI in cell B1 gives the concentration of I⁻ in cell B2. Cells B3–B8 calculate the remaining concentrations, using the K_{sp} to obtain [Ag⁺], using the mass balance on iodide and silver to obtain [Ag(NH₃)₂⁺], using β_2 to calculate [NH₃], using the mass balance on ammonia to find [NH₄⁺], using K_b to calculate

$[\text{OH}^-]$, and using K_w to calculate $[\text{H}_3\text{O}^+]$. The system's charge balance equation provides a means for determining the calculation's error.

$$[\text{Ag}^+] + [\text{Ag}(\text{NH}_3)_2^+] + [\text{NH}_4^+] + [\text{H}_3\text{O}^+] - [\text{I}^-] - [\text{OH}^-] = 0$$

The largest possible value for pI—corresponding to the smallest concentration of I^- and the lowest possible solubility—occurs for a simple, saturated solution of AgI. When $[\text{Ag}^+] = [\text{I}^-]$, the concentration of iodide is

$$[\text{I}^-] = \sqrt{K_{\text{sp}}} = \sqrt{8.3 \times 10^{-17}} = 9.1 \times 10^{-9} \text{ M}$$

corresponding to a pI of 8.04. Entering initial guesses for pI of 4, 5, 6, 7, and 8 shows that the error changes sign between a pI of 5 and 6. Continuing in this way to narrow down the range for pI, we find that the error function is closest to zero at a pI of 5.42. The concentration of I^- at equilibrium, and the molar solubility of AgI, is 3.8×10^{-6} mol/L, which agrees with our earlier solution to this problem.

Click [here](#) to return to the chapter

Practice Exercise 6.15

To solve this problem, let's use the following function

```
> eval = function(pI){
+ I = 10^-pI
+ Ag = 8.3e-17/I
+ AgNH3 = Ag - I
+ NH3 = (AgNH3/(1.7e7*Ag))^0.5
+ NH4 = 0.10 - NH3 - 2*AgNH3
+ OH = 1.75e-5*NH3/NH4
+ H3O = 1e-14/OH
+ error = Ag + AgNH3 + NH4 + H3O - OH - I
+ output = data.frame(pI, error)
+ print(output)
+ }
```

The function accepts an initial guess for pI and calculates the concentrations of species in solution using the definition of pI to calculate $[\text{I}^-]$, using the K_{sp} to obtain $[\text{Ag}^+]$, using the mass balance on iodide and silver to obtain $[\text{Ag}(\text{NH}_3)_2^+]$, using β_2 to calculate $[\text{NH}_3]$, using the mass balance on ammonia to find $[\text{NH}_4^+]$, using K_b to calculate $[\text{OH}^-]$, and using K_w to calculate $[\text{H}_3\text{O}^+]$. The system's charge balance equation provides a means for determining the calculation's error.

$$[\text{Ag}^+] + [\text{Ag}(\text{NH}_3)_2^+] + [\text{NH}_4^+] + [\text{H}_3\text{O}^+] - [\text{I}^-] - [\text{OH}^-] = 0$$

The largest possible value for pI—corresponding to the smallest concentration of I^- and the lowest possible solubility—occurs for a simple, saturated solution of AgI. When $[\text{Ag}^+] = [\text{I}^-]$, the concentration of iodide is

$$[\text{I}^-] = \sqrt{K_{\text{sp}}} = \sqrt{8.3 \times 10^{-17}} = 9.1 \times 10^{-9} \text{ M}$$

corresponding to a pI of 8.04. The following session shows the function in action.

```
> pI=c(4, 5, 6, 7, 8)
> eval(pI)
  pI    error
1 4 -2.56235615
2 5 -0.16620930
3 6  0.07337101
4 7  0.09734824
5 8  0.09989073
> pI=c(5.1, 5.2, 5.3, 5.4, 5.5, 5.6, 5.7, 5.8, 5.9, 6.0)
> eval(pI)
  pI    error
1 5.1 -0.11144658
2 5.2 -0.06794105
3 5.3 -0.03336475
4 5.4 -0.00568116
5 5.5  0.01571549
6 5.6  0.03308929
7 5.7  0.04685937
8 5.8  0.05779214
9 5.9  0.06647475
10 6.0  0.07337101
> pI=c(5.40, 5.41, 5.42, 5.43, 5.44, 5.45, 5.46, 5.47, 5.48, 5.49, 5.50)
> eval(pI)
  pI    error
1 5.40 -0.0056811605
2 5.41 -0.0030715484
3 5.42  0.0002310369
4 5.43 -0.0005134898
5 5.44  0.0028281878
6 5.45  0.0052370980
7 5.46  0.0074758181
8 5.47  0.0096260370
9 5.48  0.0117105498
10 5.49  0.0137387291
11 5.50  0.0157154889
```

The error function is closest to zero at a pI of 5.42. The concentration of I^- at equilibrium, and the molar solubility of AgI , is $3.8 \times 10^{-6} \text{ mol/L}$, which agrees with our earlier solution to this problem.

Click [here](#) to return to the chapter

Chapter 7

Collecting and Preparing Samples

Chapter Overview

- 7A The Importance of Sampling
- 7B Designing a Sampling Plan
- 7C Implementing the Sampling Plan
- 7D Separating The Analyte From Interferents
- 7E General Theory of Separation Efficiency
- 7F Classifying Separation Techniques
- 7G Liquid–Liquid Extractions
- 7H Separation Versus Preconcentration
- 7I Key Terms
- 7J Chapter Summary
- 7K Problems
- 7L Solutions to Practice Exercises

When we use an analytical method to solve a problem, there is no guarantee that our results will be accurate or precise. In designing an analytical method we consider potential sources of determinate error and indeterminate error, and take appropriate steps to minimize their effect, such as including reagent blanks and calibrating instruments. Why might a carefully designed analytical method give poor results? One possibility is that we may have failed to account for errors associated with the sample. If we collect the wrong sample, or if we lose analyte while preparing the sample for analysis, then we introduce a determinate source of error. If we fail to collect enough samples, or if we collect samples of the wrong size, then our precision may suffer. In this chapter we consider how collecting samples and preparing them for analysis affects the accuracy and precision of our results.

NaBr		F.W.102.90
Certificate of Actual Lot Analysis		
Barium (Ba)	-----	0.002%
Bromate (BrO ₃)	-----	P.T.
Calcium, Magnesium, and R ₂ O ₃ Precipitate	-----	0.001%
Chloride (Cl)	-----	0.1%
Heavy Metals (as Pb)	-----	4ppm
Insoluble Matter	-----	0.002%
Iron (Fe)	-----	1ppm
Nitrogen Compounds (as N)	-----	3ppm
pH of a 5% Solution	-----	5.5
Sulfate (SO ₄)	-----	0.002%
*Potassium (K)	-----	0.01%
* ACS LIMIT ...0.005%		

Figure 7.1 Certificate of analysis for a production lot of NaBr. The result for iron meets the ACS specifications, but the result for potassium does not.

Equation 7.1 should be familiar to you. See [Chapter 4](#) to review confidence intervals and see [Appendix 4](#) for values of t .

For a review of the propagation of uncertainty, see [Chapter 4C](#) and [Appendix 2](#).

Although equation 7.1 is written in terms of a standard deviation, s , a propagation of uncertainty is written in terms of variances, s^2 . In this section, and those that follow, we will use both standard deviations and variances to discuss sampling uncertainty.

7A The Importance of Sampling

When a manufacturer lists a chemical as ACS Reagent Grade, they must demonstrate that it conforms to specifications set by the American Chemical Society (ACS). For example, the ACS specifications for NaBr require that the concentration of iron be ≤ 5 ppm. To verify that a production lot meets this standard, the manufacturer collects and analyzes several samples, reporting the average result on the product's label (Figure 7.1).

If the individual samples do not accurately represent the population from which they are drawn—what we call the **TARGET POPULATION**—then even a careful analysis must yield an inaccurate result. Extrapolating this result from a sample to its target population introduces a determinate sampling error. To minimize this determinate sampling error, we must collect the right sample.

Even if we collect the right sample, indeterminate sampling errors may limit the usefulness of our analysis. Equation 7.1 shows that a confidence interval about the mean, \bar{X} , is proportional to the standard deviation, s , of the analysis

$$\mu = \bar{X} \pm \frac{ts}{\sqrt{n}} \quad 7.1$$

where n is the number of samples and t is a statistical factor that accounts for the probability that the confidence interval contains the true value, μ .

Each step of an analysis contributes random error that affects the overall standard deviation. For convenience, let's divide an analysis into two steps—collecting the samples and analyzing the samples—each characterized by a standard deviation. Using a propagation of uncertainty, the relationship between the overall variance, s^2 , and the variances due to sampling, s_{samp}^2 , and the analytical method, s_{meth}^2 , is

$$s^2 = s_{\text{samp}}^2 + s_{\text{meth}}^2 \quad 7.2$$

Equation 7.2 shows that the overall variance for an analysis may be limited by either the analytical method or the collecting of samples. Unfortunately, analysts often try to minimize the overall variance by improving only the method's precision. This is a futile effort, however, if the standard deviation for sampling is more than three times greater than that for the method.¹ [Figure 7.2](#) shows how the ratio $s_{\text{samp}}/s_{\text{meth}}$ affects the method's contribution to the overall variance. As shown by the dashed line, if the sample's standard deviation is $3\times$ the method's standard deviation, then indeterminate method errors explain only 10% of the overall variance. If indeterminate sampling errors are significant, decreasing s_{meth} provides only a nominal change in the overall precision.

1 Youden, Y. J. *J. Assoc. Off. Anal. Chem.* **1981**, 50, 1007–1013.

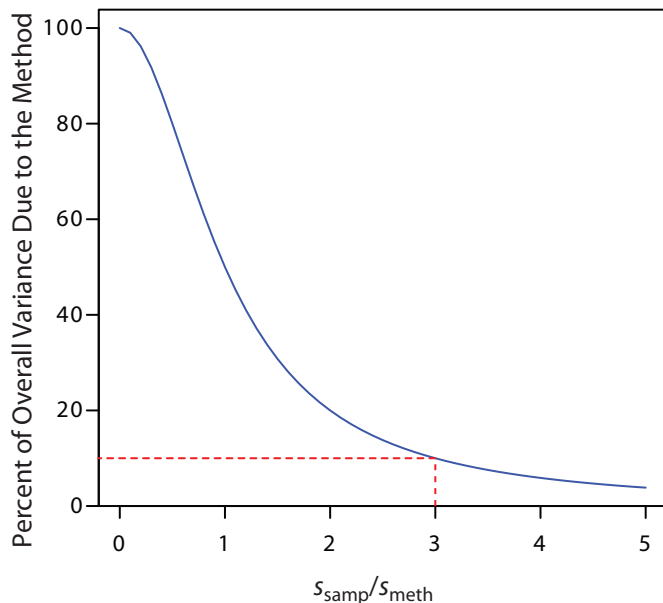


Figure 7.2 The blue curve shows the method's contribution to the overall variance, s^2 , as a function of the relative magnitude of the standard deviation in sampling, s_{samp} , and the method's standard deviation, s_{meth} . The dashed red line shows that the method accounts for only 10% of the overall variance when $s_{\text{samp}} = 3 \times s_{\text{meth}}$. Understanding the relative importance of potential sources of indeterminate error is important when considering how to improve the overall precision of the analysis.

Example 7.1

A quantitative analysis gives a mean concentration of 12.6 ppm for an analyte. The method's standard deviation is 1.1 ppm and the standard deviation for sampling is 2.1 ppm. (a) What is the overall variance for the analysis? (b) By how much does the overall variance change if we improve s_{meth} by 10% to 0.99 ppm? (c) By how much does the overall variance change if we improve s_{samp} by 10% to 1.89 ppm?

SOLUTION

(a) The overall variance is

$$s^2 = s_{\text{samp}}^2 + s_{\text{meth}}^2 = (2.1 \text{ ppm})^2 + (1.1 \text{ ppm})^2 = 5.6 \text{ ppm}^2$$

(b) Improving the method's standard deviation changes the overall variance to

$$s^2 = (2.1 \text{ ppm})^2 + (0.99 \text{ ppm})^2 = 5.4 \text{ ppm}^2$$

Improving the method's standard deviation by 10% improves the overall variance by approximately 4%.

(c) Changing the standard deviation for sampling

$$s^2 = (1.9 \text{ ppm})^2 + (1.1 \text{ ppm})^2 = 4.8 \text{ ppm}^2$$

improves the overall variance by almost 15%. As expected, because s_{samp} is larger than s_{meth} , we obtain a bigger improvement in the overall variance when we focus our attention on sampling problems.

Practice Exercise 7.1

Suppose you wish to reduce the overall variance in Example 7.1 to 5.0 ppm^2 . If you focus on the method, by what percentage do you need to reduce s_{meth} ? If you focus on the sampling, by what percentage do you need to reduce s_{samp} ?

Click [here](#) to review your answer to this exercise

To determine which step has the greatest effect on the overall variance, we need to measure both s_{samp} and s_{meth} . The analysis of replicate samples

There are several ways to minimize the standard deviation for sampling. Here are two examples. One approach is to use a standard reference material (SRM) that has been carefully prepared to minimize indeterminate sampling errors. When the sample is homogeneous—as is the case, for example, with aqueous samples—a useful approach is to conduct replicate analyses on a single sample.

provides an estimate of the overall variance. To determine the method's variance we analyze samples under conditions where we may assume that the sampling variance is negligible. The sampling variance is determined by difference.

Example 7.2

The following data were collected as part of a study to determine the effect of sampling variance on the analysis of drug-animal feed formulations.²

% Drug (w/w)			% Drug (w/w)		
0.0114	0.0099	0.0105	0.0105	0.0109	0.0107
0.0102	0.0106	0.0087	0.0103	0.0103	0.0104
0.0100	0.0095	0.0098	0.0101	0.0101	0.0103
0.0105	0.0095	0.0097			

The data on the left were obtained under conditions where both s_{samp} and s_{meth} contribute to the overall variance. The data on the right were obtained under conditions where s_{samp} is known to be insignificant. Determine the overall variance, and the standard deviations due to sampling and the analytical method. To which factor—sampling or the method—should you turn your attention if you want to improve the precision of the analysis?

SOLUTION

Using the data on the left, the overall variance, s^2 , is 4.71×10^{-7} . To find the method's contribution to the overall variance, s_{meth}^2 , we use the data on the right, obtaining a value of 7.00×10^{-8} . The variance due to sampling, s_{samp}^2 , is

$$s_{\text{samp}}^2 = s^2 - s_{\text{meth}}^2 = 4.71 \times 10^{-7} - 7.00 \times 10^{-8} = 4.01 \times 10^{-7}$$

Converting variances to standard deviations gives s_{samp} as 6.32×10^{-4} and s_{meth} as 2.65×10^{-4} . Because s_{samp} is more than twice as large as s_{meth} , improving the precision of the sampling process has the greatest impact on the overall precision.

2 Fricke, G. H.; Mischler, P. G.; Staffieri, F. P.; Houmyer, C. L. *Anal. Chem.* **1987**, *59*, 1213–1217.

Practice Exercise 7.2

A polymer's density provides a measure of its crystallinity. The standard deviation for the determination of density using a single sample of a polymer is $1.96 \times 10^{-3} \text{ g/cm}^3$. The standard deviation when using different samples of the polymer is $3.65 \times 10^{-2} \text{ g/cm}^3$. Determine the standard deviations due to sampling and the analytical method.

Click [here](#) to review your answer to this exercise.

See Chapter 4 for a review of how to calculate the variance.

7B Designing A Sampling Plan

A **SAMPLING PLAN** must support the goals of an analysis. For example, a material scientist interested in characterizing a metal's surface chemistry is more likely to choose a freshly exposed surface, created by cleaving the sample under vacuum, than a surface previously exposed to the atmosphere. In a qualitative analysis, a sample does not need to be identical to the original substance, provided that there is sufficient analyte to ensure its detection. In fact, if the goal of an analysis is to identify a trace-level component, it may be desirable to discriminate against major components when collecting samples.

For a quantitative analysis, the sample's composition must accurately represent the target population, a requirement that necessitates a careful sampling plan. Among the issues to consider are these five questions.

1. From where within the target population should we collect samples?
2. What type of samples should we collect?
3. What is the minimum amount of sample for each analysis?
4. How many samples should we analyze?
5. How can we minimize the overall variance for the analysis?

7B.1 Where to Sample the Target Population

A sampling error occurs whenever a sample's composition is not identical to its target population. If the target population is **HOMOGENEOUS**, then we can collect individual samples without giving consideration to where to sample. Unfortunately, in most situations the target population is **HETEROGENEOUS**. Due to settling, a medication available as an oral suspension may have a higher concentration of its active ingredients at the bottom of the container. The composition of a clinical sample, such as blood or urine, may depend on when it is collected. A patient's blood glucose level, for instance, changes in response to eating and exercise. Other target populations show both a spatial and a temporal heterogeneity. The concentration of dissolved O₂ in a lake is heterogeneous due both to the changing seasons and to point sources of pollution.

If the analyte's distribution within the target population is a concern, then our sampling plan must take this into account. When feasible, homogenizing the target population is a simple solution—in most cases, however, this is impracticable. Additionally, homogenization destroys information about the analyte's spatial or temporal distribution within the target population, information that may be of importance.

RANDOM SAMPLING

The ideal sampling plan provides an unbiased estimate of the target population's properties. A **RANDOM SAMPLING** is the easiest way to satisfy this

For an interesting discussion of the importance of a sampling plan, see Buger, J. et al. "Do Scientists and Fishermen Collect the Same Size Fish? Possible Implications for Exposure Assessment," *Environ. Res.* **2006**, *101*, 34–41.

The composition of a homogeneous target population is the same regardless of where we sample, when we sample, or the size of our sample. For a heterogeneous target population, the composition is not the same at different locations, at different times, or for different sample sizes.

requirement.³ Despite its apparent simplicity, a truly random sample is difficult to collect. Haphazard sampling, in which samples are collected without a sampling plan, is not random and may reflect an analyst's unintentional biases.

Here is a simple method for ensuring that we collect random samples. First, we divide the target population into equal units and assign a unique number to each unit. Then, we use a random number table to select the units to sample. Example 7.3 provides an illustrative example.

[Appendix 14](#) provides a random number table that you can use for designing sampling plans.

Example 7.3

To analyze a polymer's tensile strength, individual samples of the polymer are held between two clamps and stretched. In evaluating a production lot, the manufacturer's sampling plan calls for collecting ten $1\text{ cm} \times 1\text{ cm}$ samples from a $100\text{ cm} \times 100\text{ cm}$ polymer sheet. Explain how we can use a random number table to ensure that our samples are random.

SOLUTION

As shown by the grid, we divide the polymer sheet into 10 000 $1\text{ cm} \times 1\text{ cm}$ squares, each identified by its row number and its column number, with numbers running from 0 to 99.

For example, the blue square is in row 98 and column 1. To select ten squares at random, we enter the random number table in [Appendix 14](#) at an arbitrary point, and let the entry's last four digits represent the row and the column for the first sample. We then move through the table in a predetermined fashion, selecting random numbers until we have 10 samples. For our first sample, let's use the

second entry in the third column, which is 76831. The first sample, therefore, is row 68 and column 31. If we proceed by moving down the third column, then the 10 samples are as follows:

Sample	Number	Row	Column	Sample	Number	Row	Column
1	76831	68	31	6	41701	17	01
2	66558	65	58	7	38605	86	05
3	33266	32	66	8	64516	45	16
4	12032	20	32	9	13015	30	15
5	14063	40	63	10	12138	21	38

In collecting a random sample we make no assumptions about the target population, making this the least biased approach to sampling. On the

other hand, a random sample often requires more time and expense than other sampling strategies because we need a greater number of samples to ensure that we adequately sample the target population.⁴

JUDGMENTAL SAMPLING

The opposite of random sampling is selective, or **JUDGMENTAL SAMPLING** in which we use prior information about the target population to help guide our selection of samples. Judgmental sampling is more biased than random sampling, but requires fewer samples. Judgmental sampling is useful if we wish to limit the number of independent variables influencing our results. For example, if we are studying the bioaccumulation of PCB's in fish, we may choose to exclude fish that are too small or that appear diseased.

SYSTEMATIC SAMPLING

Random sampling and judgmental sampling represent extremes in bias and in the number of samples needed to characterize the target population. **SYSTEMATIC SAMPLING** falls in between these extremes. In systematic sampling we sample the target population at regular intervals in space or time. Figure 7.3 shows an aerial photo of the Great Salt Lake in Utah. A railroad line divides the lake into two sections with different chemical compositions. To compare the lake's two sections—and to evaluate spatial variations within each section—we use a two-dimensional grid to define sampling locations.

⁴ Borgman, L. E.; Quimby, W. F. in Keith, L. H., ed. *Principles of Environmental Sampling*. American Chemical Society: Washington, D. C., 1988, 25–43.

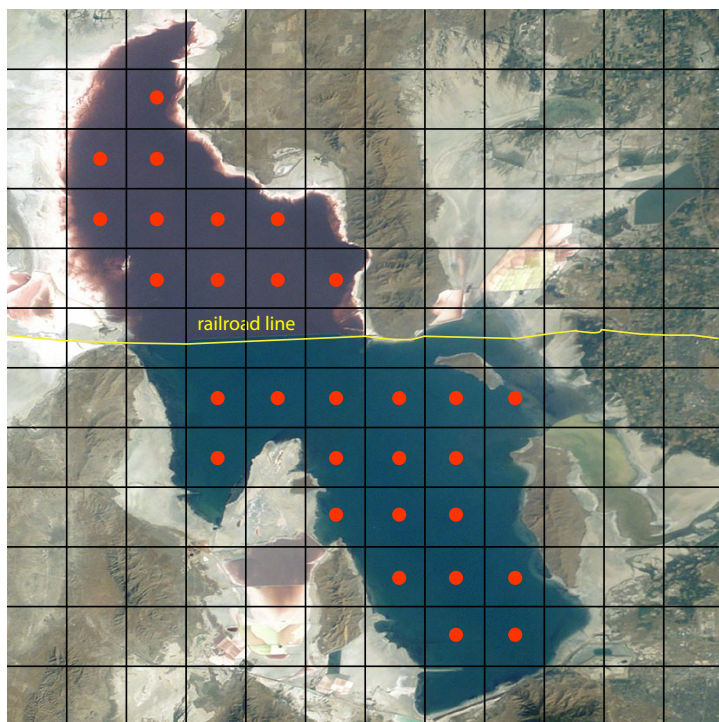


Figure 7.3 Aerial photo of the Great Salt Lake in Utah, taken from the International Space Station at a distance of approximately 380 km. The railroad line divides the lake into two sections that differ in chemical composition. Superimposing a two-dimensional grid divides each section of the lake into sampling units. The red dots at the center of each unit represent sampling sites. Photo courtesy of the Image Science and Analysis Laboratory, NASA Johnson Space Center, [Photo Number ISS007-E-13002](http://eol.jsc.nasa.gov) (eol.jsc.nasa.gov).

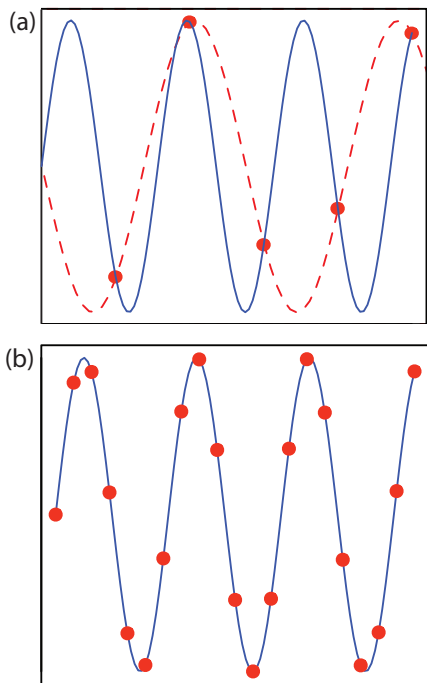


Figure 7.4 Effect of sampling frequency when monitoring a periodic signal. Individual samples are shown by the red dots (•). In (a) the sampling frequency is approximately 1.5 samples per period. The dashed red line shows the apparent signal based on five samples and the solid blue line shows the true signal. In (b) a sampling frequency of approximately 5 samples per period accurately reproduces the true signal.

When a population's heterogeneity is time-dependent, as is common in clinical studies, samples are drawn at regular intervals in time.

If a target population's properties have a periodic trend, a systematic sampling will lead to a significant bias if our sampling frequency is too small. This is a common problem when sampling electronic signals where the problem is known as aliasing. Consider, for example, a signal consisting of a simple sign wave. Figure 7.4a shows how an insufficient sampling frequency underestimates the signal's true frequency. The apparent signal, shown by the dashed red line passing through the five data points, is significantly different from the true signal shown by the solid blue line.

According to the **NYQUIST THEOREM**, to accurately determine a periodic signal's true frequency, we must sample the signal at least twice during each cycle or period. If we collect samples at an interval of Δt , the highest frequency we can accurately monitor is $(2\Delta t)^{-1}$. For example, if our sampling rate is 1 sample/hr, the highest frequency we can monitor is $(2 \times 1 \text{ hr})^{-1}$ or 0.5 hr^{-1} , corresponding to a period of less than 2 hr. If our signal's period is less than 2 hours (a frequency of more than 0.5 hr^{-1}), then we must use a faster sampling rate. Ideally, the sampling rate should be at least 3–4 times greater than the highest frequency signal of interest. If our signal has a period of one hour, we should collect a new sample every 15–20 minutes.

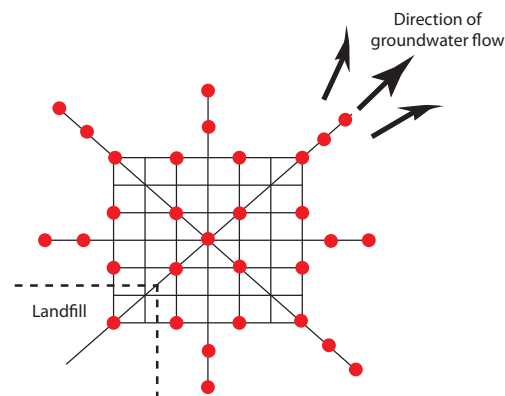
SYSTEMATIC–JUDGMENTAL SAMPLING

Combinations of the three primary approaches to sampling are also possible.⁵ One such combination is **SYSTEMATIC–JUDGMENTAL SAMPLING**, in which we use prior knowledge about a system to guide a systematic sampling plan. For example, when monitoring waste leaching from a landfill, we expect the plume to move in the same direction as the flow of groundwater—this helps focus our sampling, saving money and time. The systematic–judgmental sampling plan in Figure 7.5 includes a rectangular grid for most of the samples and linear transects to explore the plume's limits.⁶

5 Keith, L. H. *Environ. Sci. Technol.* **1990**, *24*, 610–617.

6 Flatman, G. T.; Englund, E. J.; Yfantis, A. A. in Keith, L. H., ed. *Principles of Environmental Sampling*, American Chemical Society: Washington, D. C., 1988, 73–84.

Figure 7.5 Systematic–judgmental sampling plan for monitoring the leaching of pollutants from a landfill. The sampling sites, shown as red dots (•), are on a systematic grid straddling the direction of the groundwater's flow. Sampling along linear transects helps establish the plume's limits.



STRATIFIED SAMPLING

Another combination of the three primary approaches to sampling is judgmental–random, or **STRATIFIED SAMPLING**. Many target populations consist of distinct units, or strata. For example, suppose we are studying particulate Pb in urban air. Because particulates come in a range of sizes—some visible and some microscopic—and from many sources—road dust, diesel soot, and fly ash to name a few—we can subdivide the target population by size or source. If we choose a random sampling plan, then we collect samples without considering the different strata. For a stratified sampling, we divide the target population into strata and collect random samples from within each stratum. After analyzing the samples from each stratum, we pool their respective means to give an overall mean for the target population. The advantage of stratified sampling is that individual strata usually are more homogeneous than the target population. The overall sampling variance for stratified sampling is always at least as good, and often better than that obtained by simple random sampling.

CONVENIENCE SAMPLING

One additional method of sampling deserves brief mention. In **CONVENIENCE SAMPLING** we select sample sites using criteria other than minimizing sampling error and sampling variance. In a survey of rural groundwater quality, for example, we can choose to drill wells at randomly selected sites or we can make use of existing wells, which is usually the preferred choice. In this case cost, expedience, and accessibility are more important than ensuring a random sample.

7B.2 What Type of Sample to Collect

After determining where to collect samples, the next step in designing a sampling plan is to decide what type of sample to collect. There are three common methods for obtaining samples: grab sampling, composite sampling, and in situ sampling.

The most common type of sample is a **GRAB SAMPLE**, in which we collect a portion of the target population at a specific time and/or location, providing a “snapshot” of the target population. If our target population is homogeneous, a series of random grab samples allows us to establish its properties. For a heterogeneous target population, systematic grab sampling allows us to characterize how its properties change over time and/or space.

A **COMPOSITE SAMPLE** is a set of grab samples that we combine into a single sample before analysis. Because information is lost when we combine individual samples, we normally analyze grab sample separately. In some situations, however, there are advantages to working with a composite sample.

One situation where composite sampling is appropriate is when our interest is in the target population’s average composition over time or space.

For example, wastewater treatment plants must monitor and report the average daily composition of the treated water they release to the environment. The analyst can collect and analyze individual grab samples using a systematic sampling plan, reporting the average result, or she can combine the grab samples into a single composite sample. Analyzing a single composite sample instead of many individual grab samples, saves time and money.

Composite sampling is also useful when a single sample can not supply sufficient material for the analysis. For example, analytical methods for determining PCB's in fish often require as much as 50 g of tissue, an amount that may be difficult to obtain from a single fish. By combining and homogenizing tissue samples from several fish, it is easy to obtain the necessary 50-g sample.

A significant disadvantage of grab samples and composite samples is that we cannot use them to continuously monitor a time-dependent change in the target population. **IN SITU SAMPLING**, in which we insert an analytical sensor into the target population, allows us to continuously monitor the target population without removing individual grab samples. For example, we can monitor the pH of a solution moving through an industrial production line by immersing a pH electrode in the solution's flow.

Example 7.4

A study of the possible relationship between traffic density and the concentrations of lead, cadmium, and zinc in roadside soils, made use of the following sampling plan.⁷ Samples of surface soil (0–10 cm) were collected at perpendicular distances of 1, 5, 10, 20, and 30 m from the roadway. At each distance, 10 samples were taken from different locations and mixed to form a single sample. What type of sampling plan is this? Explain why this is an appropriate sampling plan.

SOLUTION

This is an example of a systematic–judgemental sampling plan using composite samples. These are good choices given the goals of the study. Automobile emissions release particulates containing elevated concentrations of lead, cadmium, and zinc—this study was conducted in Uganda where leaded gasoline is still in use—which settle out on the surrounding roadside soils as “dry rain.” Sampling in areas near roadways, and sampling at fixed distances from the roadway provides sufficient data for the study, while limiting the total number of samples. Combining samples from the same distance into a single, composite sample has the advantage of decreasing sampling uncertainty. Because variations in metal concentrations perpendicular to the roadway is not of interest, the composite samples do not result in a loss of information.

7 Nabulo, G.; Oryem-Origa, H.; Diamond, M. *Environ. Res.* **2006**, *101*, 42–52.

7B.3 How Much Sample to Collect

To minimize sampling errors, samples must be of an appropriate size. If a sample is too small, its composition may differ substantially from that of the target population, introducing a sampling error. Samples that are too large, however, require more time and money to collect and analyze, without providing a significant improvement in the sampling error.

Let's assume that our target population is a homogeneous mixture of two types of particles. Particles of type A contain a fixed concentration of analyte, and particles without analyte are of type B. Samples from this target population follow a binomial distribution. If we collect a sample containing n particles, the expected number of particles containing analyte, n_A , is

$$n_A = np$$

where p is the probability of selecting a particle of type A. The standard deviation for sampling is

$$s_{\text{ samp}} = \sqrt{np(1-p)} \quad 7.3$$

To calculate the relative standard deviation for sampling, $s_{\text{ samp}}^{\text{rel}}$, we divide equation 7.3 by n_A , obtaining

$$s_{\text{ samp}}^{\text{rel}} = \frac{\sqrt{np(1-p)}}{np}$$

Solving for n allows us to calculate the number of particles providing the desired relative sampling variance.

$$n = \frac{1-p}{p} \times \frac{1}{(s_{\text{ samp}}^{\text{rel}})^2} \quad 7.4$$

Example 7.5

Suppose we are analyzing a soil where the particles containing analyte represent only $1 \times 10^{-7}\%$ of the population. How many particles must we collect to give a percent relative standard deviation for sampling of 1%?

SOLUTION

Since the particles of interest account for $1 \times 10^{-7}\%$ of all particles, the probability, p , of selecting one of these particles is only 1×10^{-9} . Substituting into equation 7.4 gives

$$n = \frac{1 - (1 \times 10^{-9})}{1 \times 10^{-9}} \times \frac{1}{(0.01)^2} = 1 \times 10^{13}$$

To obtain a relative standard deviation for sampling of 1%, we need to collect 1×10^{13} particles.

For a review of the binomial distribution, see [Chapter 4](#).

A sample containing 10^{13} particles may be fairly large. Suppose this is equivalent to a mass of 80 g. Working with a sample this large clearly is not practical. Does this mean we must work with a smaller sample and accept a larger relative standard deviation for sampling? Fortunately the answer is no. An important feature of [equation 7.4](#) is that the relative standard deviation for sampling is a function of the number of particles, not the combined mass of the particles. If we crush and grind the particles to make them smaller, then a sample containing 10^{13} particles will have a smaller mass. If we assume that a particle is spherical, then its mass is proportional to the cube of its radius.

$$\text{mass} \propto r^3$$

Decreasing a particle's radius by a factor of 2, for example, decreases its mass by a factor of 2^3 , or 8.

Example 7.6

Assume that a sample of 10^{13} particles from [Example 7.5](#) weighs 80 g and that the particles are spherical. By how much must we reduce a particle's radius if we wish to work with 0.6-g samples?

SOLUTION

To reduce the sample's mass from 80 g to 0.6 g, we must change its mass by a factor of

$$\frac{80}{0.6} = 133 \times$$

To accomplish this we must decrease a particle's radius by a factor of

$$r^3 = 133 \times$$

$$r = 5.1 \times$$

Decreasing the radius by a factor of approximately 5 allows us to decrease the sample's mass from 80 g to 0.6 g.

Treating a population as though it contains only two types of particles is a useful exercise because it shows us that we can improve the relative standard deviation for sampling by collecting more particles. Of course, a real population contains more than two types of particles, with the analyte present at several levels of concentration. Nevertheless, many well-mixed populations, in which the population's composition is homogeneous on the scale at which we sample, approximate binomial sampling statistics. Under these conditions the following relationship between the mass of a random grab sample, m , and the percent relative standard deviation for sampling, R , is often valid

$$mR^2 = K_s \quad 7.5$$

Problem 8 in the end of chapter problems asks you to derive equation 7.5.

where K_s is a sampling constant equal to the mass of a sample producing a percent relative standard deviation for sampling of $\pm 1\%$.⁸

Example 7.7

The following data were obtained in a preliminary determination of the amount of inorganic ash in a breakfast cereal.

Mass of Cereal (g)	0.9956	0.9981	1.0036	0.9994	1.0067
% w/w Ash	1.34	1.29	1.32	1.26	1.28

What is the value of K_s and what size samples are needed to give a percent relative standard deviation for sampling of $\pm 2.0\%$. Predict the percent relative standard deviation and the absolute standard deviation if we collect 5.00-g samples.

SOLUTION

To determine the sampling constant, K_s , we need to know the average mass of the cereal samples and the relative standard deviation for the amount of ash. The average mass of the cereal samples is 1.0007 g. The average % w/w ash and its absolute standard deviation are, respectively, 1.298% w/w and 0.03194% w/w. The percent relative standard deviation, R , therefore, is

$$R = \frac{s_{\text{amp}}}{\bar{X}} \times 100 = \frac{0.03194\% \text{ w/w}}{1.298\% \text{ w/w}} \times 100 = 2.46\%$$

Solving for K_s gives its value as

$$K_s = mR^2 = (1.0007 \text{ g})(2.46)^2 = 6.06 \text{ g}$$

To obtain a percent relative standard deviation of $\pm 2\%$, samples need to have a mass of at least

$$m = \frac{K_s}{R^2} = \frac{6.06 \text{ g}}{(2.0)^2} = 1.5 \text{ g}$$

If we use 5.00-g samples, then the expected percent relative standard deviation is

$$R = \sqrt{\frac{K_s}{m}} = \sqrt{\frac{6.06 \text{ g}}{5.00 \text{ g}}} = 1.10\%$$

and the expected absolute standard deviation is

$$s_{\text{amp}} = \frac{R\bar{X}}{100} = \frac{(1.10)(1.298\% \text{ w/w})}{100} = 0.0143\% \text{ w/w}$$

⁸ Ingamells, C. O.; Switzer, P. *Talanta* **1973**, *20*, 547–568.

Practice Exercise 7.3

Olaquinox is a synthetic growth promoter in medicated feeds for pigs. In an analysis of a production lot of feed, five samples with nominal masses of 0.95 g were collected and analyzed, with the results shown in the following table.

mass (g)	0.9530	0.9728	0.9660	0.9402	0.9576
mg olaquinox/kg feed	23.0	23.8	21.0	26.5	21.4

What is the value of K_s and what size samples are needed to obtain a percent relative deviation for sampling of 5.0%? By how much do you need to reduce the average particle size if samples must weigh no more than 1 g?

Click [here](#) to review your answer to this exercise.

7B.4 How Many Samples to Collect

In the previous section we considered how much sample we need to minimize the standard deviation due to sampling. Another important consideration is the number of samples to collect. If our samples are normally distributed, then the confidence interval for the sampling error is

$$\mu = \bar{X} \pm \frac{t s_{\text{samp}}}{\sqrt{n_{\text{samp}}}} \quad 7.6$$

where n_{samp} is the number of samples and s_{samp} is the standard deviation for sampling. Rearranging equation 7.6 and substituting e for the quantity $\bar{X} - \mu$, gives the number of samples as

$$n_{\text{samp}} = \frac{t^2 s_{\text{samp}}^2}{e^2} \quad 7.7$$

Because the value of t depends on n_{samp} , the solution to equation 7.7 is found iteratively.

Example 7.8

In [Example 7.7](#) we determined that we need 1.5-g samples to establish an s_{samp} of $\pm 2.0\%$ for the amount of inorganic ash in cereal. How many 1.5-g samples do we need to obtain a percent relative sampling error of $\pm 0.80\%$ at the 95% confidence level?

SOLUTION

Because the value of t depends on the number of samples—a result we have yet to calculate—we begin by letting $n_{\text{samp}} = \infty$ and using $t(0.05, \infty)$ for t . From [Appendix 4](#), the value for $t(0.05, \infty)$ is 1.960. Substituting known values into equation 7.7 gives the number of samples as

When we use equation 7.7, the standard deviation for sampling, s_{samp} , and the error, e , must be expressed in the same way. Because s_{samp} is given as a percent relative standard deviation, the error, e , is given as a percent relative error. When you use equation 7.7, be sure to check that you are expressing s_{samp} and e in the same way.

$$n_{\text{samp}} = \frac{(1.960)^2(2.0)^2}{(0.80)^2} = 24.0 \approx 24$$

Letting $n_{\text{samp}} = 24$, the value of $t(0.05, 23)$ from [Appendix 4](#) is 2.073. Recalculating n_{samp} gives

$$n_{\text{samp}} = \frac{(2.073)^2(2.0)^2}{(0.80)^2} = 26.9 \approx 27$$

When $n_{\text{samp}} = 27$, the value of $t(0.05, 26)$ from [Appendix 4](#) is 2.060. Recalculating n_{samp} gives

$$n_{\text{samp}} = \frac{(2.060)^2(2.0)^2}{(0.80)^2} = 26.52 \approx 27$$

Because two successive calculations give the same value for n_{samp} , we have an iterative solution to the problem. We need 27 samples to achieve a percent relative sampling error of $\pm 0.80\%$ at the 95% confidence level.

With 24 samples, the degrees of freedom for t is 23.

Practice Exercise 7.4

Assuming that the percent relative standard deviation for sampling in the determination of olaquinox in medicated feed is 5.0% (see [Practice Exercise 7.3](#)), how many samples do we need to analyze to obtain a percent relative sampling error of $\pm 2.5\%$ at $\alpha = 0.05$?

Click [here](#) to review your answer to this exercise.

[Equation 7.7](#) provides an estimate for the smallest number of samples that will produce the desired sampling error. The actual sampling error may be substantially larger if s_{samp} for the samples we collect during the subsequent analysis is greater than s_{samp} used to calculate n_{samp} . This is not an uncommon problem. For a target population with a relative sampling variance of 50 and a desired relative sampling error of $\pm 5\%$, [equation 7.7](#) predicts that 10 samples are sufficient. In a simulation using 1000 samples of size 10, however, only 57% of the trials resulted in a sampling error of less than $\pm 5\%$.⁹ Increasing the number of samples to 17 was sufficient to ensure that the desired sampling error was achieved 95% of the time.

7B.5 Minimizing the Overall Variance

A final consideration when developing a sampling plan is to minimize the overall variance for the analysis. [Equation 7.2](#) shows that the overall variance is a function of the variance due to the method, s_{meth}^2 , and the variance due to sampling, s_{samp}^2 . As we have seen, we can improve the sampling variance by collecting more samples of the proper size. Increasing the number

For an interesting discussion of why the number of samples is important, see Kaplan, D.; Lacetera, N.; Kaplan, C. "Sample Size and Precision in NIH Peer Review," [Plos One](#), 2008, 3(7), 1–3. When reviewing grants, individual reviewers report a score between 1.0 and 5.0 (two significant figure). NIH reports the average score to three significant figures, implying that differences of 0.01 are significant. If the individual scores have a standard deviation of 0.1, then a difference of 0.01 is significant at $\alpha = 0.05$ only if there are 384 reviews. The authors conclude that NIH review panels are too small to provide a statistically meaningful separation between proposals receiving similar scores.

⁹ Blackwood, L. G. *Environ. Sci. Technol.* **1991**, 25, 1366–1367.

of times we analyze each sample improves the method's variance. If s_{samp}^2 is significantly greater than s_{meth}^2 , we can ignore the method's contribution to the overall variance and use [equation 7.7](#) to estimate the number of samples to analyze. Analyzing any sample more than once will not improve the overall variance, because the method's variance is insignificant.

If s_{meth}^2 is significantly greater than s_{samp}^2 , then we need to collect and analyze only one sample. The number of replicate analyses, n_{rep} , needed to minimize the error due to the method is given by an equation similar to [equation 7.7](#).

$$n_{\text{rep}} = \frac{t^2 s_{\text{meth}}^2}{e^2}$$

Unfortunately, the simple situations described above are often the exception. For many analyses, both the sampling variance and the method variance are significant, and both multiple samples and replicate analyses of each sample are necessary. The overall error in this case is

$$e = t \sqrt{\frac{s_{\text{samp}}^2}{n_{\text{samp}}} + \frac{s_{\text{meth}}^2}{n_{\text{samp}} n_{\text{rep}}}} \quad 7.8$$

Equation 7.8 does not have a unique solution as different combinations of n_{samp} and n_{rep} give the same overall error. How many samples we collect and how many times we analyze each sample is determined by other concerns, such as the cost of collecting and analyzing samples, and the amount of available sample.

Example 7.9

An analytical method has a percent relative sampling variance of 0.40% and a percent relative method variance of 0.070%. Evaluate the percent relative error ($\alpha = 0.05$) if you collect 5 samples, analyzing each twice, and if you collect 2 samples, analyzing each 5 times.

SOLUTION

Both sampling strategies require a total of 10 analyses. From [Appendix 4](#) we find that the value of $t(0.05, 9)$ is 2.262. Using equation 7.8, the relative error for the first sampling strategy is

$$e = 2.262 \sqrt{\frac{0.40}{5} + \frac{0.070}{5 \times 2}} = 0.67\%$$

and that for the second sampling strategy is

$$e = 2.262 \sqrt{\frac{0.40}{2} + \frac{0.070}{2 \times 5}} = 1.0\%$$

Because the method variance is smaller than the sampling variance, we obtain a smaller relative error if we collect more samples, analyzing each fewer times.

Practice Exercise 7.5

An analytical method has a percent relative sampling variance of 0.10% and a percent relative method variance of 0.20%. The cost of collecting a sample is \$20 and the cost of analyzing a sample is \$50. Propose a sampling strategy that provides a maximum percent relative error of $\pm 0.50\%$ ($\alpha = 0.05$) and a maximum cost of \$700.

Click [here](#) to review your answer to this exercise.

7C Implementing the Sampling Plan

Implementing a sampling plan normally involves three steps: physically removing the sample from its target population, preserving the sample, and preparing the sample for analysis. Except for in situ sampling, we analyze a sample after removing it from its target population. Because sampling exposes the target population to potential contamination, the sampling device must be inert and clean.

After removing a sample from its target population, there is a danger that it will undergo a chemical or physical change before we can complete its analysis. This is a serious problem because the sample's properties no longer are representative of the target population. To prevent this problem, we often preserve samples before transporting them to the laboratory for analysis. Even when analyzing samples in the field, preservation may still be necessary.

The initial sample is called the primary or **GROSS SAMPLE**, and may be a single increment drawn from the target population, or a composite of several increments. In many cases we cannot analyze the gross sample without first reducing the sample's particle size, converting the sample into a more readily analyzable form, or improving its homogeneity.

7C.1 Solutions

Typical examples of solution samples include those drawn from containers of commercial solvents; beverages, such as milk or fruit juice; natural waters, including lakes, streams, seawater and rain; bodily fluids, such as blood and urine; and, suspensions; such as those found in many oral medications. Let's use the sampling of natural waters and wastewaters as a case study in how to sample solutions.

SAMPLE COLLECTION

The chemical composition of a surface water—such as a stream, river, lake, estuary, or ocean—is influenced by flow rate and depth. Rapidly flow-

Although you may never work with the specific samples highlighted in this section, the case studies presented here may help you in envisioning potential problems associated with your samples.




Figure 7.6 A Niskin sampling bottle for collecting water samples from lakes and oceans. After lowering the bottle to the desired depth, a weight is sent down the winch line, tripping a spring that closes the bottle. Source: [NOAA](http://noaa.gov) (photolib.noaa.gov).

ing shallow streams and rivers, and shallow (<5 m) lakes are usually well mixed, and show little stratification with depth. To collect a grab sample we submerge a capped bottle below the surface, remove the cap and allow the bottle to fill completely, and replace the cap. Collecting a sample this way avoids the air–water interface, which may be enriched with heavy metals or contaminated with oil.¹⁰

Slowly moving streams and rivers, lakes deeper than five meters, estuaries, and oceans may show substantial stratification. Grab samples from near the surface are collected as described earlier, and samples at greater depths are collected using a sample bottle lowered to the desired depth (Figure 7.6).

Wells for sampling groundwater are purged before collecting samples because the chemical composition of water in the well-casing may be significantly different from that of the groundwater. These differences may result from contaminants introduced while drilling the well, or by a change in the groundwater's redox potential following its exposure to atmospheric oxygen. In general, a well is purged by pumping out a volume of water equivalent to several well-casing volumes, or until the water's temperature, pH, or specific conductance is constant. A municipal water supply, such as a residence or a business, is purged before sampling because the chemical composition of water standing in a pipe may differ significantly from the treated water supply. Samples are collected at faucets after flushing the pipes for 2–3 minutes.

Samples from municipal wastewater treatment plants and industrial discharges often are collected as a 24-hour composite. An automatic sampler periodically removes an individual grab sample, adding it to those collected previously. The volume of each sample and the frequency of sampling may be constant, or may vary in response to changes in flow rate.

Sample containers for collecting natural waters and wastewaters are made from glass or plastic. Kimax and Pyrex brand borosilicate glass have the advantage of being easy to sterilize, easy to clean, and inert to all solutions except those that are strongly alkaline. The disadvantages of glass containers are cost, weight, and the ease of breakage. Plastic containers are made from a variety of polymers, including polyethylene, polypropylene, polycarbonate, polyvinyl chloride, and Teflon. Plastic containers are lightweight, durable, and, except for those manufactured from Teflon, inexpensive. In most cases glass or plastic bottles may be used interchangeably, although polyethylene bottles are generally preferred because of their lower cost. Glass containers are always used when collecting samples for the analysis of pesticides, oil and grease, and organics because these species often interact with plastic surfaces. Because glass surfaces easily adsorb metal ions, plastic bottles are preferred when collecting samples for the analysis of trace metals.

¹⁰ Duce, R. A.; Quinn, J. G. Olney, C. E.; Piotrowicz, S. R.; Ray, S. J.; Wade, T. L. *Science* **1972**, *176*, 161–163.

Table 7.1 Preservation Methods and Maximum Holding Times for Selected Analytes in Natural Waters and Wastewaters

Analyte	Preservation Method	Maximum Holding Time
ammonia	cool to 4°C; add H ₂ SO ₄ to pH < 2	28 days
chloride	none required	28 days
metals—Cr(VI)	cool to 4°C	24 hours
metals—Hg	HNO ₃ to pH < 2	28 days
metals—all others	HNO ₃ to pH < 2	6 months
nitrate	none required	48 hours
organochlorine pesticides	1 mL of 10 mg/mL HgCl ₂ or immediate extraction with a suitable non-aqueous solvent	7 days without extraction 40 days with extraction
pH	none required	analyze immediately

In most cases the sample bottle has a wide mouth, making it easy to fill and remove the sample. A narrow-mouth sample bottle is used if exposing the sample to the container's cap or to the outside environment is a problem. Unless exposure to plastic is a problem, caps for sample bottles are manufactured from polyethylene. When polyethylene must be avoided, the container cap includes an inert interior liner of neoprene or Teflon.

SAMPLE PRESERVATION AND PREPARATION

After removing a sample from its target population, its chemical composition may change as a result of chemical, biological, or physical processes. To prevent a change in composition, samples are preserved by controlling the solution's pH and temperature, by limiting its exposure to light or to the atmosphere, or by adding a chemical preservative. After preserving a sample, it may be safely stored for later analysis. The maximum holding time between preservation and analysis depends on the analyte's stability and the effectiveness of sample preservation. Table 7.1 provides a list of representative methods for preserving samples and maximum holding times for several analytes of importance in the analysis of natural waters and wastewaters.

Most solution samples do not need additional preparation before analysis. This is the case for samples of natural waters and wastewaters. Solution samples with particularly complex matrices—blood and milk are two examples—may need additional processing to separate the analytes from interferences, a topic covered later in this chapter.

7C.2 Gases

Typical examples of gaseous samples include automobile exhaust, emissions from industrial smokestacks, atmospheric gases, and compressed gases. Also

Here our concern is only with the need to prepare the gross sample by converting it into a form suitable for analysis. Analytical methods may include additional sample preparation steps, such as concentrating or diluting the analyte, or adjusting the analyte's chemical form. We will consider these forms of sample preparation in later chapters focusing on specific analytical methods.

included in this category are aerosol particulates—the fine solid particles and liquid droplets that form smoke and smog. Let's use the sampling of urban air as a case study in how to sample gases.

SAMPLE COLLECTION

One approach for collecting a sample of urban air is to fill a stainless steel canister or a Tedlar/Teflon bag. A pump pulls the air into the container and, after purging, the container is sealed. This method has the advantage of simplicity and of collecting a representative sample. Disadvantages include the tendency for some analytes to adsorb to the container's walls, the presence of analytes at concentrations too low to detect with accuracy and precision, and the presence of reactive analytes, such as ozone and nitrogen oxides, that may react with the container or that may otherwise alter the sample's chemical composition during storage. When using a stainless steel canister, cryogenic cooling, which changes the sample from a gaseous state to a liquid state, may limit some of these disadvantages.

Most urban air samples are collected using a trap containing a solid sorbent or by filtering. Solid sorbents are used for volatile gases (vapor pressures more than 10^{-6} atm) and semi-volatile gases (vapor pressures between 10^{-6} atm and 10^{-12} atm). Filtration is used to collect aerosol particulates. Trapping and filtering allows for sampling larger volumes of gas—an important concern for an analyte with a small concentration—and stabilizes the sample between its collection and its analysis.

In solid sorbent sampling, a pump pulls the urban air through a canister packed with sorbent particles. Typically 2–100 L of air are sampled when collecting volatile compounds, and 2–500 m³ when collecting semi-volatile gases. A variety of inorganic, organic polymer, and carbon sorbents have been used. Inorganic sorbents, such as silica gel, alumina, magnesium aluminum silicate, and molecular sieves, are efficient collectors for polar compounds. Their efficiency for collecting water, however, limits their sorption capacity for many organic compounds.

Organic polymeric sorbents include polymeric resins of 2,4-diphenyl-*p*-phenylene oxide or styrene-divinylbenzene for volatile compounds, and polyurethane foam for semi-volatile compounds. These materials have a low affinity for water, and are efficient collectors for all but the most highly volatile organic compounds, and some lower molecular weight alcohols and ketones. The adsorbing ability of carbon sorbents is superior to that of organic polymer resins, which makes them useful for highly volatile organic compounds that can not be collected by polymeric resins. The adsorbing ability of carbon sorbents may be a disadvantage, however, since the sorbed compounds may be difficult to desorb.

Non-volatile compounds are normally present either as solid particulates, or are bound to solid particulates. Samples are collected by pulling large volumes of urban air through a filtering unit, collecting the particulates on glass fiber filters.

1 m³ is equivalent to 10³ L.

The short term exposure of humans, animals, and plants to atmospheric pollutants is more severe than that for pollutants in other matrices. Because the composition of atmospheric gases can vary significantly over a time, the continuous monitoring of atmospheric gases such as O₃, CO, SO₂, NH₃, H₂O₂, and NO₂ by in situ sampling is important.¹¹

SAMPLE PRESERVATION AND PREPARATION

After collecting a gross sample of urban air, there is generally little need for sample preservation or preparation. The chemical composition of a gas sample is usually stable when it is collected using a solid sorbent, a filter, or by cryogenic cooling. When using a solid sorbent, gaseous compounds are released for analysis by thermal desorption or by extracting with a suitable solvent. If the sorbent is selective for a single analyte, the increase in the sorbent's mass can be used to determine the amount of analyte in the sample.

7C.3 Solids

Typical examples of solid samples include large particulates, such as those found in ores; smaller particulates, such as soils and sediments; tablets, pellets, and capsules used for dispensing pharmaceutical products and animal feeds; sheet materials, such as polymers and rolled metals; and tissue samples from biological specimens. Solids are usually heterogeneous and samples must be collected carefully if they are to be representative of the target population. Let's use the sampling of sediments, soils, and ores as a case study in how to sample solids.

SAMPLE COLLECTION

Sediments from the bottom of streams, rivers, lakes, estuaries, and oceans are collected with a bottom grab sampler, or with a corer. A bottom grab sampler (Figure 7.7) is equipped with a pair of jaws that close when they contact the sediment, scooping up sediment in the process. Its principal advantages are ease of use and the ability to collect a large sample. Disadvantages include the tendency to lose finer grain sediment particles as water flows out of the sampler, and the loss of spatial information—both laterally and with depth—due to mixing of the sample.

An alternative method for collecting sediments is a cylindrical coring device (Figure 7.8). The corer is dropped into the sediment, collecting a column of sediment and the water in contact with the sediment. With the possible exception of sediment at the surface, which may experience mixing, samples collected with a corer maintain their vertical profile, preserving information about how the sediment's composition changes with depth.

Collecting soil samples at depths of up to 30 cm is easily accomplished with a scoop or shovel, although the sampling variance is generally high. A



Figure 7.7 Bottom grab sampler being prepared for deployment. Source: [NOAA](http://www.noaa.gov) (photolib.noaa.gov).

¹¹ Tanner, R. L. in Keith, L. H., ed. *Principles of Environmental Sampling*, American Chemical Society: Washington, D. C., 1988, 275–286.

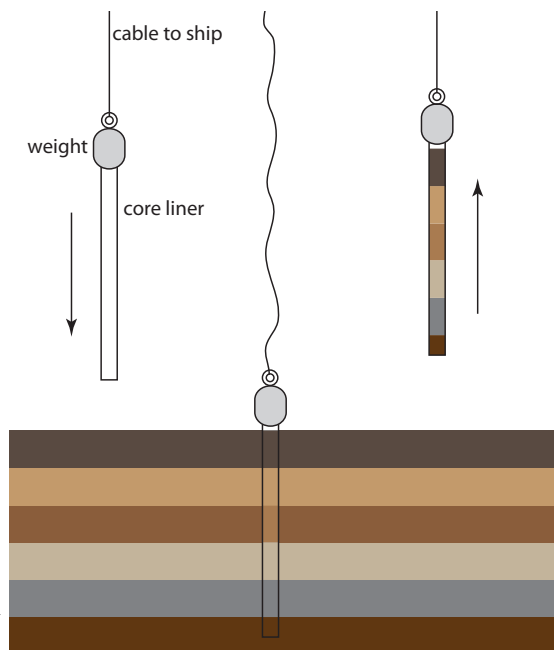


Figure 7.8 Schematic diagram of a gravity corer in operation. The corer's weight is sufficient to penetrate into the sediment to a depth of approximately 2 m. Flexible metal leaves on the bottom of the corer are pushed aside by the sediment, allowing it to enter the corer. The leaves bend back and hold the core sample in place as it is hauled back to the surface.

better tool for collecting soil samples near the surface is a soil punch, which is a thin-walled steel tube that retains a core sample after it is pushed into the soil and removed. Soil samples from depths greater than 30 cm are collected by digging a trench and collecting lateral samples with a soil punch. Alternatively, an auger may be used to drill a hole to the desired depth and the sample collected with a soil punch.

For particulate materials, particle size often determines the sampling method. Larger particulate solids, such as ores, are sampled using a riffle (Figure 7.9), which is a trough containing an even number of compartments. Because adjoining compartments empty onto opposite sides of the

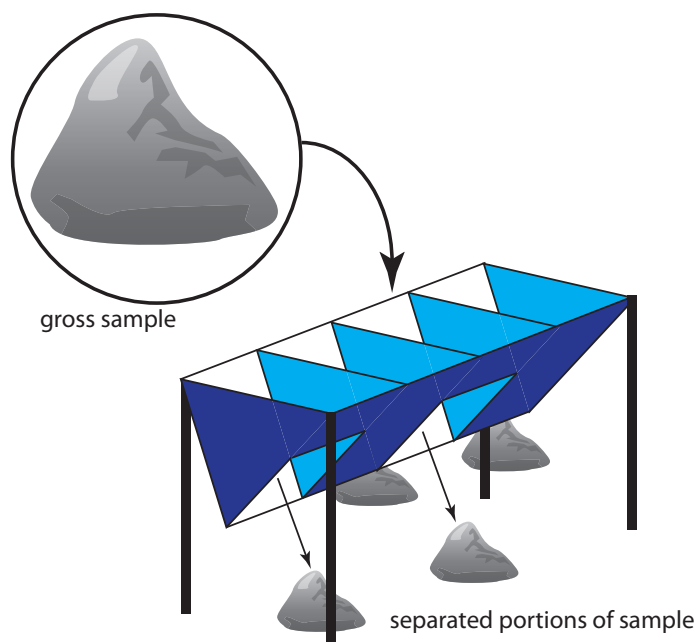


Figure 7.9 Example of a four-unit riffle. Passing the gross sample, shown within the circle, through the riffle divides it into four piles, two on each side. Combining the piles from one side of the riffle provides a new sample, which may be passed through the riffle again or kept as the final sample. The piles from the other side of the riffle are discarded.

riffle, dumping a gross sample into the riffle divides it in half. By repeatedly passing half of the separated material back through the riffle, a sample of any desired size may be collected.

A sample thief (Figure 7.10) is used for sampling smaller particulate materials, such as powders. A typical sample thief consists of two tubes that are nested together. Each tube has one or more slots aligned down the sample thief's length. Before inserting the sample thief into the material being sampled, the slots are closed by rotating the inner tube. When the sample thief is in place, rotating the inner tube opens the slots, which fill with individual samples. The inner tube is then rotated to the closed position and the sample thief withdrawn.

SAMPLE PRESERVATION

Without preservation, a solid sample may undergo a change in composition due to the loss of volatile material, biodegradation, and chemical reactivity (particularly redox reactions). Storing samples at lower temperatures makes them less prone to biodegradation and to the loss of volatile material, but fracturing of solids and phase separations may present problems. To minimize the loss of volatiles, the sample container is filled completely, eliminating a headspace where gases collect. Samples that have not been exposed to O_2 are particularly susceptible to oxidation reactions. For example, the contact of air with anaerobic sediments must be prevented.

SAMPLE PREPARATION

Unlike gases and liquids, which generally require little sample preparation, a solid sample usually needs some processing before analysis. There are two reasons for this. First, as discussed in [section 7B.3](#), the standard deviation for sampling, s_{samp} , is a function of the number of particles in the sample, not the combined mass of the particles. For a heterogeneous material consisting of large particulates, the gross sample may be too large to analyze. For example, a Ni-bearing ore with an average particle size of 5 mm may require a sample weighing one ton to obtain a reasonable s_{samp} . Reducing the sample's average particle size allows us to collect the same number of particles with a smaller, more manageable mass. Second, many analytical techniques require that the analyte be in solution.

REDUCING PARTICLE SIZE

A reduction in particle size is accomplished by a combination of crushing and grinding the gross sample. The resulting particulates are then thoroughly mixed and divided into **SUBSAMPLES** of smaller mass. This process seldom occurs in a single step. Instead, subsamples are cycled through the process several times until a final **LABORATORY SAMPLE** is obtained.

Crushing and grinding uses mechanical force to break larger particles into smaller particles. A variety of tools are used depending on the particle's

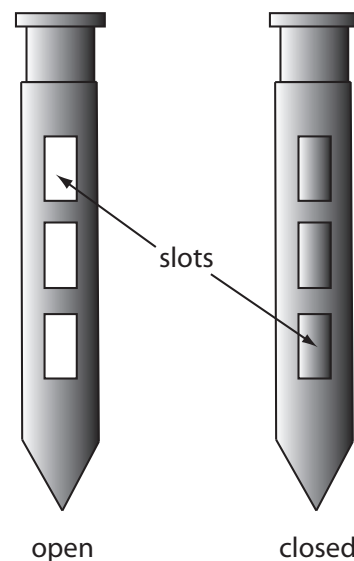


Figure 7.10 Sample thief showing its open and closed positions.

size and hardness. Large particles are crushed using jaw crushers capable of reducing particles to diameters of a few millimeters. Ball mills, disk mills, and mortars and pestles are used to further reduce particle size.

A significant change in the gross sample's composition may occur during crushing and grinding. Decreasing particle size increases the available surface area, which increases the risk of losing volatile components. This problem is made worse by the frictional heat that accompanies crushing and grinding. Increasing the surface area also exposes interior portions of the sample to the atmosphere where oxidation may alter the gross sample's composition. Other problems include contamination from the materials used to crush and grind the sample, and differences in the ease with which particles are reduced in size. For example, softer particles are easier to reduce in size and may be lost as dust before the remaining sample is processed. This is a particular problem if the analyte's distribution between different types of particles is not uniform.

The gross sample is reduced to a uniform particle size by intermittently passing it through a sieve. Those particles not passing through the sieve receive additional processing until the entire sample is of uniform size. The resulting material is mixed thoroughly to ensure homogeneity and a subsample obtained with a riffle, or by **CONING AND QUARTERING**. As shown in Figure 7.11, the gross sample is piled into a cone, flattened, and divided into four quarters. After discarding two diagonally opposed quarters, the remaining material is cycled through the process of coning and quartering until a suitable laboratory sample remains.

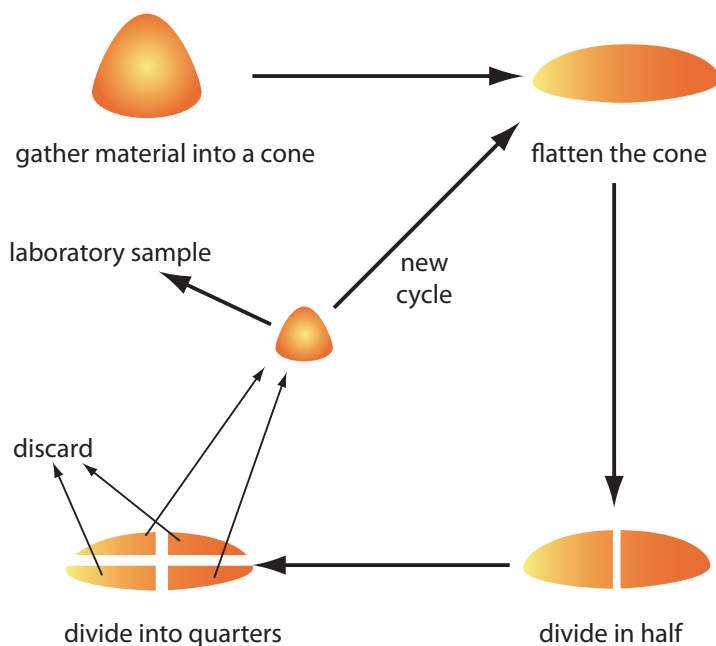


Figure 7.11 Illustration showing the method of coning and quartering for reducing sample size. After gathering the gross sample into a cone, the cone is flattened, divided in half, and then divided into quarters. Two opposing quarters are combined to form the laboratory sample, or the subsample is sent back through another cycle. The two remaining quarters are discarded.

BRINGING SOLID SAMPLES INTO SOLUTION

If you are fortunate, your sample will easily dissolve in a suitable solvent, requiring no more effort than gently swirling and heating. Distilled water is usually the solvent of choice for inorganic salts, but organic solvents, such as methanol, chloroform, and toluene are useful for organic materials.

When a sample is difficult to dissolve, the next step is to try digesting it with an acid or a base. Table 7.2 lists several common acids and bases, and summarizes their use. Digestions are carried out in an open container, usually a beaker, using a hot-plate as a source of heat. The main advantage of an open-vessel digestion is cost because it requires no special equipment. Volatile reaction products, however, are lost, resulting in a determinate error if they include the analyte.

Many digestions are now carried out in a closed container using microwave radiation as the source of energy. Vessels for microwave digestion are manufactured using Teflon (or some other fluoropolymer) or fused silica. Both materials are thermally stable, chemically resistant, transparent to microwave radiation, and capable of withstanding elevated pressures. A typical microwave digestion vessel, as shown in [Figure 7.12](#), consists of an insulated vessel body and a cap with a pressure relief valve. The vessels are placed in a microwave oven (typically 6–14 vessels can be accommodated) and microwave energy is controlled by monitoring the temperature or pressure within one of the vessels.

Table 7.2 Acids and Bases Used for Digesting Samples

Solution	Uses and Properties
HCl (37% w/w)	<ul style="list-style-type: none"> dissolves metals more easily reduced than H₂ ($E^{\circ} < 0$) dissolves insoluble carbonate, sulfides, phosphates, fluorides, sulfates, and many oxides
HNO ₃ (70% w/w)	<ul style="list-style-type: none"> strong oxidizing agent dissolves most common metals except Al, Au, Pt, and Cr decomposes organics and biological samples (wet ashing)
H ₂ SO ₄ (98% w/w)	<ul style="list-style-type: none"> dissolves many metals and alloys decomposes organics by oxidation and dehydration
HF (50% w/w)	<ul style="list-style-type: none"> dissolves silicates by forming volatile SiF₄
HClO ₄ (70% w/w)	<ul style="list-style-type: none"> hot, concentrated solutions are strong oxidizing agents dissolves many metals and alloys decomposes organics (<i>Caution: reactions with organics often are explosive; use only in a specially equipped hood with a blast shield and after prior decomposition with HNO₃</i>)
HCl:HNO ₃ (3:1 v/v)	<ul style="list-style-type: none"> also known as aqua regia dissolves Au and Pt
NaOH	<ul style="list-style-type: none"> dissolves Al and amphoteric oxides of Sn, Pb, Zn, and Cr




Figure 7.12 Microwave digestion unit. (a) View of the unit's interior showing the carousel holding the digestion vessels. (b) Close-up of a Teflon digestion vessel, which is encased in a thermal sleeve. The pressure relief valve, which is part of the vessel's cap, contains a membrane that ruptures if the internal pressure becomes too high.

A microwave digestion has several important advantages over an open-vessel digestion, including higher temperatures (200–300 °C) and pressures (40–100 bar). As a result, digestions requiring several hours in an open-vessel may need no more than 30 minutes when using a microwave digestion. In addition, a closed container prevents the loss of volatile gases. Disadvantages include the inability to add reagents during the digestion, limitations on the sample's size (typically < 1 g), and safety concerns due to the high pressures and corrosive reagents.

Inorganic samples that resist decomposition by digesting with acids or bases often can be brought into solution by fusing with a large excess of an alkali metal salt, called a flux. After mixing the sample and the flux in a crucible, they are heated to a molten state and allowed to cool slowly to room temperature. The melt usually dissolves readily in distilled water or dilute acid. Table 7.3 summarizes several common fluxes and their uses. Fusion works when other methods of decomposition do not because of the high temperature and the flux's high concentration in the molten liquid.

Table 7.3 Common Fluxes for Decomposing Inorganic Samples

Flux	Melting Temperature (°C)	Crucible	Typical Samples
Na_2CO_3	851	Pt	silicates, oxides, phosphates, sulfides
$\text{Li}_2\text{B}_4\text{O}_7$	930	Pt, graphite	aluminosilicates, carbonates
LiBO_2	845	Pt, graphite	aluminosilicates, carbonates
NaOH	318	Au, Ag	silicates, silicon carbide
KOH	380	Au, Ag	silicates, silicon carbide
Na_2O_2	—	Ni	silicates, chromium steels, Pt alloys
$\text{K}_2\text{S}_2\text{O}_7$	300	Ni, porcelain	oxides
B_2O_3	577	Pt	silicates, oxides

Disadvantages include contamination from the flux and the crucible, and the loss of volatile materials.

Finally, we can decompose organic materials by dry ashing. In this method the sample is placed in a suitable crucible and heated over a flame or in a furnace. The carbon present in the sample oxidizes to CO_2 , and hydrogen, sulfur, and nitrogen leave as H_2O , SO_2 , and N_2 . These gases can be trapped and weighed to determine their concentration in the organic material. Often the goal of dry ashing is to remove the organic material, leaving behind an inorganic residue, or ash, that can be further analyzed.

7D Separating the Analyte from Interferents

When an analytical method is selective for the analyte, analyzing samples is a relatively simple task. For example, a quantitative analysis for glucose in honey is relatively easy to accomplish if the method is selective for glucose, even in the presence of other reducing sugars, such as fructose. Unfortunately, few analytical methods are selective toward a single species.

In the absence of interferents, the relationship between the sample's signal, S_{sample} , and the concentration of analyte, C_A , is

$$S_{\text{sample}} = k_A C_A \quad 7.9$$

where k_A is the analyte's sensitivity. If an interferent, is present, then equation 7.9 becomes

$$S_{\text{sample}} = k_A C_A + k_I C_I \quad 7.10$$

where k_I and C_I are, respectively, the interferent's sensitivity and concentration. A method's selectivity for the analyte is determined by the relative difference in its sensitivity toward the analyte and the interferent. If k_A is greater than k_I , then the method is more selective for the analyte. The method is more selective for the interferent if k_I is greater than k_A .

Even if a method is more selective for an interferent, we can use it to determine C_A if the interferent's contribution to S_{sample} is insignificant. The **SELECTIVITY COEFFICIENT**, $K_{A,I}$, which we introduced in [Chapter 3](#), provides a way to characterize a method's selectivity.

$$K_{A,I} = \frac{k_I}{k_A} \quad 7.11$$

Solving equation 7.11 for k_I , substituting into equation 7.10, and simplifying, gives

$$S_{\text{sample}} = k_A (C_A + K_{A,I} \times C_I) \quad 7.12$$

An interferent, therefore, does not pose a problem as long as the product of its concentration and its selectivity coefficient is significantly smaller than the analyte's concentration.

In equation 7.9, and the equations that follow, you can replace the analyte's concentration, C_A , with the moles of analyte, n_A when working with methods, such as gravimetry, that respond to the absolute amount of analyte in a sample. In this case the interferent also is expressed in terms of moles.

$$K_{A,I} \times C_I \ll C_A$$

If we cannot ignore an interferent's contribution to the signal, then we must begin our analysis by separating the analyte and the interferent.

7E General Theory of Separation Efficiency

The goal of an analytical separation is to remove either the analyte or the interferent from the sample's matrix. To achieve this separation there must be at least one significant difference between the analyte's and the interferent's chemical or physical properties. A significant difference in properties, however, may not be enough. A separation that completely removes the interferent may also remove a small amount of analyte. Altering the separation to minimize the analyte's loss may prevent us from completely removing the interferent.

Two factors limit a separation's efficiency—failing to recover all the analyte and failing to remove all the interferent. We define the analyte's **RECOVERY**, R_A , as

$$R_A = \frac{C_A}{(C_A)_o} \quad 7.13$$

where C_A is the concentration of analyte remaining after the separation, and $(C_A)_o$ is the analyte's initial concentration. A recovery of 1.00 means that no analyte is lost during the separation. The interferent's recovery, R_I , is defined in the same manner

$$R_I = \frac{C_I}{(C_I)_o} \quad 7.14$$

where C_I is the concentration of interferent remaining after the separation, and $(C_I)_o$ is the interferent's initial concentration. We define the extent of the separation using a separation factor, $S_{I,A}$.¹²

$$S_{I,A} = \frac{R_I}{R_A} \quad 7.15$$

In general, $S_{I,A}$ should be approximately 10^{-7} for the quantitative analysis of a trace analyte in the presence of a macro interferent, and 10^{-3} when the analyte and interferent are present in approximately equal amounts.

Example 7.10

An analytical method for determining Cu in industrial plating baths gives poor results in the presence of Zn. To evaluate a method for separating the analyte from the interferent, samples containing known concentra-

The meaning of trace and macro, as well as other terms for describing the concentrations of analytes and interferents, is presented in [Chapter 2](#).

12 (a) Sandell, E. B. *Colorimetric Determination of Trace Metals*, Interscience Publishers: New York, 1950, pp. 19–20; (b) Sandell, E. B. *Anal. Chem.* **1968**, *40*, 834–835.

tions of Cu or Zn are prepared and analyzed. When a sample containing 128.6 ppm Cu is taken through the separation, the concentration of Cu remaining is 127.2 ppm. Taking a 134.9 ppm solution of Zn through the separation leaves behind a concentration of 4.3 ppm Zn. Calculate the recoveries for Cu and Zn, and the separation factor.

SOLUTION

Using [equation 7.13](#) and [equation 7.14](#), the recoveries for the analyte and interferent are

$$R_{\text{Cu}} = \frac{127.2 \text{ ppm}}{128.6 \text{ ppm}} = 0.9891, \text{ or } 98.91\%$$

$$R_{\text{Zn}} = \frac{4.3 \text{ ppm}}{134.9 \text{ ppm}} = 0.032, \text{ or } 3.2\%$$

and the **SEPARATION FACTOR** is

$$S_{\text{Zn,Cu}} = \frac{R_{\text{Zn}}}{R_{\text{Cu}}} = \frac{0.032}{0.9891} = 0.032$$

Recoveries and separation factors are useful for evaluating a separation's potential effectiveness. They do not, however, provide a direct indication of the error that results from failing to remove all the interferent or from failing to completely recover the analyte. The relative error due to the separation, E , is

$$E = \frac{S_{\text{sample}} - S_{\text{sample}}^*}{S_{\text{sample}}^*} \quad 7.16$$

where S_{sample}^* is the sample's signal for an ideal separation in which we completely recover the analyte.

$$S_{\text{sample}}^* = k_A (C_A)_o \quad 7.17$$

Substituting [equation 7.12](#) and equation 7.17 into equation 7.16, and rearranging

$$E = \frac{k_A (C_A + K_{A,I} \times C_I) - k_A (C_A)_o}{k_A (C_A)_o}$$

$$E = \frac{C_A + K_{A,I} \times C_I - (C_A)_o}{(C_A)_o}$$

$$E = \frac{C_A}{(C_A)_o} - \frac{(C_A)_o}{(C_A)_o} + \frac{K_{A,I} \times C_I}{(C_A)_o}$$

leaves us with

$$E = (R_A - 1) + \frac{K_{A,I} \times C_I}{(C_A)_o} \quad 7.18$$

A more useful equation is obtained by solving [equation 7.14](#) for C_I and substituting into equation 7.18.

$$E = (R_A - 1) + \frac{K_{A,I} \times (C_I)_o}{(C_A)_o} \times R_I \quad 7.19$$

The first term of equation 7.19 accounts for the analyte's incomplete recovery, and the second term accounts for failing to remove all the interferent.

Example 7.11

Following the separation outlined in [Example 7.10](#), an analysis is carried out to determine the concentration of Cu in an industrial plating bath. Analysis of standard solutions containing either Cu or Zn give the following linear calibrations.

$$S_{\text{Cu}} = 1250 \text{ ppm}^{-1} \times C_{\text{Cu}}$$

$$S_{\text{Zn}} = 2310 \text{ ppm}^{-1} \times C_{\text{Zn}}$$

(a) What is the relative error if we analyze samples without removing the Zn? Assume that the initial concentration ratio, Cu:Zn, is 7:1. (b) What is the relative error if we first complete the separation, obtaining the recoveries from [Example 7.10](#)? (c) What is the maximum acceptable recovery for Zn if the recovery for Cu is 1.00 and the error due to the separation must be no greater than 0.10%?

SOLUTION

(a) If we complete the analysis without separating Cu and Zn, then R_{Cu} and R_{Zn} are exactly 1 and equation 7.19 simplifies to

$$E = \frac{K_{\text{Cu,Zn}} \times (C_{\text{Zn}})_o}{(C_{\text{Cu}})_o}$$

Using [equation 7.11](#), we find that the selectivity coefficient is

$$K_{\text{Cu,Zn}} = \frac{k_{\text{Zn}}}{k_{\text{Cu}}} = \frac{2310 \text{ ppm}^{-1}}{1250 \text{ ppm}^{-1}} = 1.85$$

Given the initial concentration ratio, Cu:Zn, of 7:1, the relative error if we do not attempt a separation of Cu and Zn is

$$E = \frac{1.85 \times 1}{7} = 0.264, \text{ or } 26.4\%$$

- (b) To calculate the relative error we substitute the recoveries from [Example 7.10](#) into [equation 7.19](#), obtaining

$$E = (0.9891 - 1) + \frac{1.85 \times 1}{7} \times 0.032$$

$$E = -0.0109 + 0.0085 = -0.0024$$

or -0.24% . Note that the negative determinate error due to the analyte's incomplete recovery is partially offset by a positive determinate error from failing to remove all the interferent.

- (c) To determine the maximum recovery for Zn, we make appropriate substitutions into [equation 7.19](#)

$$E = 0.0010 = (1 - 1) + \frac{1.85 \times 1}{7} \times R_{\text{Zn}}$$

and solve for R_{Zn} , obtaining a recovery of 0.0038, or 0.38%. Thus, we must remove at least

$$100.00\% - 0.38\% = 99.62\%$$

of the Zn to obtain an error of 0.10% when R_{Cu} is exactly 1.

7F Classifying Separation Techniques

We can separate an analyte and an interferent if there is a significant difference in at least one of their chemical or physical properties. Table 7.4 provides a partial list of separation techniques, classified by the chemical or physical property being exploited.

Table 7.4 Classification of Separation Techniques

Basis of Separation	Separation Technique
size	filtration dialysis size-exclusion chromatography
mass or density	centrifugation
complex formation	masking
change in physical state	distillation sublimation recrystallization
change in chemical state	precipitation electrodeposition volatilization
partitioning between phases	extraction chromatography

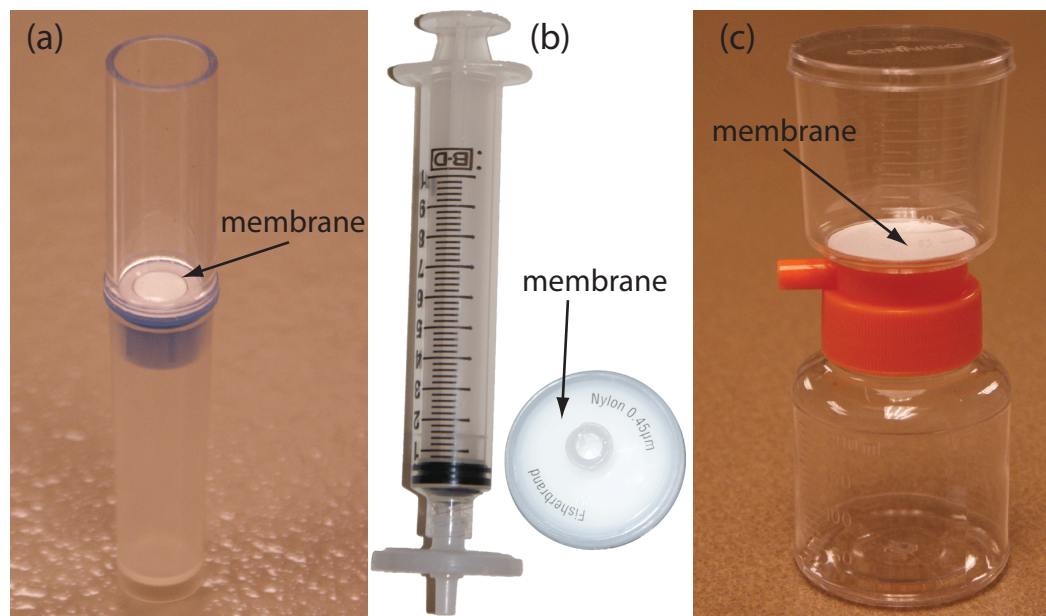


Figure 7.13 Three types of membrane filters for separating analytes from interferents. (a) A centrifugal filter for concentrating and desalting macromolecular solutions. The membrane has a nominal molecular weight cut-off of 1×10^6 g/mol. The sample is placed in the upper reservoir and the unit is placed in a centrifuge. Upon spinning the unit at $2000 \times g$ – $5000 \times g$, the filtrate collects in the bottom reservoir and the retentate remains in the upper reservoir. (b) A $0.45 \mu\text{m}$ membrane syringe filter. The photo on the right shows the membrane filter in its casing. In the photo on the left, the filter is attached to a syringe. Samples are placed in the syringe and pushed through the filter. The filtrate is collected in a test tube or other suitable container. (c) A disposable filter system with a $0.22 \mu\text{m}$ cellulose acetate membrane filter. The sample is added to the upper unit and vacuum suction is used to draw the filtrate through the membrane and into the lower unit. To store the filtrate, the top half of the unit is removed and a cap placed on the lower unit. The filter unit shown here has a capacity of 150 mL.

7F.1 Separations Based on Size

Size is the simplest physical property we can exploit in a separation. To accomplish the separation we use a porous medium through which only the analyte or the interferent can pass. Examples of size-based separations include filtration, dialysis, and size-exclusion.

In a **FILTRATION** we separate a particulate interferent from dissolved analytes using a filter whose pore size retains the interferent. The solution passing through the filter is called the **FILTRATE**, and the material retained by the filter is the **RETENTATE**. Gravity filtration and suction filtration using filter paper are techniques with which you should already be familiar. Membrane filters, available in a variety of micrometer pores sizes, are the method of choice for particulates that are too small to be retained by filter paper. Figure 7.13 provides information about three types of membrane filters.

DIALYSIS is another example of a separation technique that uses size to separate the analyte and the interferent. A dialysis membrane is usually constructed from cellulose and fashioned into tubing, bags, or cassettes. [Figure 7.14](#) shows an example of a commercially available dialysis cassette. The sample is injected into the dialysis membrane, which is sealed tightly

For applications of gravity filtration and suction filtration in gravimetric methods of analysis, see [Chapter 8](#).



Figure 7.14 Example of a dialysis cassette. The dialysis membrane in this unit has a molecular weight cut-off of 10 000 g/mol. Two sheets of the membrane are separated by a gasket and held in place by the plastic frame. Four ports, one of which is labeled, provide a means for injecting the sample between the dialysis membranes. The cassette is inverted and submerged in a beaker containing the external solution, which is stirred using a stir bar. A foam buoy, used as a stand in the photo, serves as a float so that the unit remains suspended above the stir bar. The external solution is usually replaced several times during dialysis. When dialysis is complete, the solution remaining in the cassette is removed through an injection port.

by a gasket, and the unit is placed in a container filled with a solution whose composition is different from the sample. If the concentration of a particular species is different on the membrane's two sides, the resulting concentration gradient provides a driving force for its diffusion across the membrane. While small species freely pass through the membrane, larger species are unable to pass. Dialysis is frequently used to purify proteins, hormones, and enzymes. During kidney dialysis, metabolic waste products, such as urea, uric acid, and creatinine, are removed from blood by passing it over a dialysis membrane.

SIZE-EXCLUSION CHROMATOGRAPHY is a third example of a separation technique that uses size as a means for effecting a separation. In this technique a column is packed with small, approximately 10- μm , porous polymer beads of cross-linked dextrin or polyacrylamide. The pore size of the particles is controlled by the degree of cross-linking, with more cross-linking producing smaller pore sizes. The sample is placed into a stream of solvent that is pumped through the column at a fixed flow rate. Those species too large to enter the pores pass through the column at the same rate as the solvent. Species entering into the pores take longer to pass through the column, with smaller species needing more time to pass through the column. Size-exclusion chromatography is widely used in the analysis of polymers, and in biochemistry, where it is used for the separation of proteins.

A more detailed treatment of size-exclusion chromatography, which also is called gel permeation chromatography, is in [Chapter 12](#).

7F.2 Separations Based on Mass or Density

If the analyte and the interferent differ in mass or density, then a separation using **CENTRIFUGATION** may be possible. The sample is placed in a centrifuge tube and spun at a high angular velocity, measured in revolutions per minute (rpm). The sample's constituents experience a centrifugal force that pulls them toward the bottom of the centrifuge tube. The species experiencing the greatest centrifugal force has the fastest sedimentation rate, and

Table 7.5 Conditions for Separating Selected Cellular Components by Centrifugation

Components	Centrifugal Force ($\times g$)	Time (min)
eukaryotic cells	1000	5
cell membranes, nuclei	4000	10
mitochondria, bacterial cells	15 000	20
lysosomes, bacterial membranes	30 000	30
ribosomes	100 000	180

Source: Adapted from Zubay, G. *Biochemistry*, 2nd ed. Macmillan: New York, 1988, p.120.

is the first to reach the bottom of the centrifuge tube. If two species have equal density, their separation is based on mass, with the heavier species having the greater sedimentation rate. If the species are of equal mass, then the species with the largest density has the greatest sedimentation rate.

Centrifugation is an important separation technique in biochemistry. Table 7.5, for example, lists conditions for separating selected cellular components. We can separate lysosomes from other cellular components by several differential centrifugations, in which we divide the sample into a solid residue and a supernatant solution. After destroying the cells, the solution is centrifuged at $15\,000 \times g$ (a centrifugal force that is 15 000 times that of the earth's gravitational force) for 20 minutes, leaving a solid residue of cell membranes and mitochondria. The supernatant, which contains the lysosomes, is isolated by decanting it from the residue and centrifuged at $30\,000 \times g$ for 30 minutes, leaving a solid residue of lysosomes. Figure 7.15 shows a typical centrifuge capable of produce the centrifugal forces needed for biochemical separations.

An alternative approach to differential centrifugation is **DENSITY GRADIENT CENTRIFUGATION**. To prepare a sucrose density gradient, for example, a solution with a smaller concentration of sucrose—and, thus, of lower density—is gently layered upon a solution with a higher concentration of



Figure 7.15 Bench-top centrifuge capable of reaching speeds up to 14 000 rpm and centrifugal forces of $20\,800 \times g$. This particular centrifuge is refrigerated, allowing samples to be cooled to temperatures as low as -4°C .

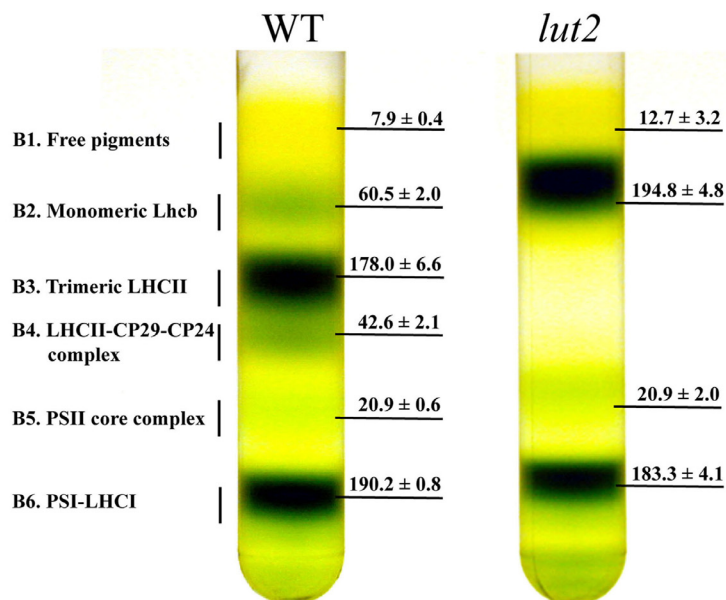


Figure 7.16 Example of a sucrose density gradient centrifugation of thylakoid membranes from wild type (WT) and *lut2* plants. The thylakoid membranes were extracted from the plant's leaves and separated by centrifuging in a 0.1–1 M sucrose gradient for 22 h at $280\,000 \times g$ at 4°C . Six bands and their chlorophyll contents are shown. Adapted from [Dall'Osto, L.; Lico, C.; Alric, J.; Giuliano, G.; Havaux, M.; Bassi, R. *BMC Plant Biology* 2006, 6:32.](#)

sucrose. Repeating this process several times, fills the centrifuge tube with a multi-layer density gradient. The sample is placed on top of the density gradient and centrifuged using a force greater than $150\,000 \times g$. During centrifugation, each of the sample's components moves through the gradient until it reaches a position where its density matches the surrounding sucrose solution. Each component is isolated as a separate band positioned where its density is equal to that of the local density within the gradient. Figure 7.16 provides an example of a typical sucrose density centrifugation for separating plant thylakoid membranes.

7F.3 Separations Based on Complexation Reactions (Masking)

One widely used technique for preventing an interference is to bind the interferent in a strong, soluble complex that prevents it from interfering in the analyte's determination. This process is known as **MASKING**. As shown in [Table 7.6](#), a wide variety of ions and molecules are useful **MASKING AGENTS**, and, as a result, selectivity is usually not a problem.

Technically, masking is not a separation technique because we do not physically separate the analyte and the interferent. We do, however, chemically isolate the interferent from the analyte, resulting in a pseudo-separation.

Example 7.12

Using [Table 7.6](#), suggest a masking agent for an analysis of aluminum in the presence of iron.

SOLUTION

A suitable masking agent must form a complex with the interferent, but not with the analyte. Oxalate, for example, is not a suitable masking agent

Table 7.6 Selected Inorganic and Organic Masking Agents for Metal Ions

Masking Agent	Elements Whose Ions Can Be Masked
CN ⁻	Ag, Au, Cd, Co, Cu, Fe, Hg, Mn, Ni, Pd, Pt, Zn
SCN ⁻	Ag, Cd, Co, Cu, Fe, Ni, Pd, Pt, Zn
NH ₃	Ag, Co, Ni, Cu, Zn
F ⁻	Al, Co, Cr, Mg, Mn, Sn, Zn
S ₂ O ₃ ²⁻	Au, Ce, Co, Cu, Fe, Hg, Mn, Pb, Pd, Pt, Sb, Sn, Zn
tartrate	Al, Ba, Bi, Ca, Ce, Co, Cr, Cu, Fe, Hg, Mn, Pb, Pd, Pt, Sb, Sn, Zn
oxalate	Al, Fe, Mg, Mn
thioglycolic acid	Cu, Fe, Sn

Source: Meites, L. *Handbook of Analytical Chemistry*, McGraw-Hill: New York, 1963.

because it binds both Al and Fe. Thioglycolic acid, on the other hand, is a selective masking agent for Fe in the presence of Al. Other acceptable masking agents are cyanide (CN⁻) thiocyanate (SCN⁻), and thiosulfate (S₂O₃²⁻).

Practice Exercise 7.6

Using Table 7.6, suggest a masking agent for the analysis of Fe in the presence of Al.

Click [here](#) to review your answer to this exercise.

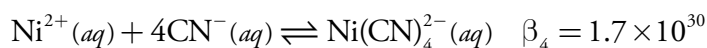
As shown in Example 7.13, we can judge a masking agent's effectiveness by considering the relevant equilibrium constants.

Example 7.13

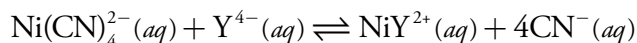
Show that CN⁻ is an appropriate masking agent for Ni²⁺ in a method where nickel's complexation with EDTA is an interference.

SOLUTION

The relevant reactions and formation constants are



where Y⁴⁻ is an abbreviation for EDTA. Cyanide is an appropriate masking agent because the formation constant for the Ni(CN)₄²⁻ is greater than that for the Ni-EDTA complex. In fact, the equilibrium constant for the reaction in which EDTA displaces the masking agent



You will find the formation constants for these reactions in [Appendix 12](#).

$$K = \frac{K_1}{\beta_4} = \frac{4.2 \times 10^{18}}{1.7 \times 10^{30}} = 2.5 \times 10^{-12}$$

is very small, indicating that $\text{Ni}(\text{CN})_4^{2-}$ is relatively inert in the presence of EDTA.

Practice Exercise 7.7

Use the formation constants in [Appendix 12](#) to show that 1,10-phenanthroline is a suitable masking agent for Fe^{2+} in the presence of Fe^{3+} . Use a ladder diagram to define any limitations on using 1,10-phenanthroline as a masking agent. See [Chapter 6](#) for a review of ladder diagrams.

Click [here](#) to review your answer to this exercise.

7F.4 Separations Based on a Change of State

Because an analyte and its interferent are usually in the same phase, we can achieve a separation if one of them undergoes a change in its physical state or its chemical state.

CHANGES IN PHYSICAL STATE

When the analyte and the interferent are miscible liquids, a **DISTILLATION** may be possible if their boiling points are significantly different. Figure 7.17 shows the progress of a distillation as a plot of temperature versus the mixture's vapor-phase and liquid-phase composition. The initial mixture (point A), contains more interferent than analyte. When this solution is brought to its boiling point, the vapor phase in equilibrium with the liquid phase is enriched in analyte (point B). The horizontal line connecting points A and B represents this vaporization equilibrium. Condensing the vapor phase at point B, by lowering the temperature, creates a new liquid phase whose composition is identical to that of the vapor phase (point C). The vertical line connecting points B and C represents this condensation

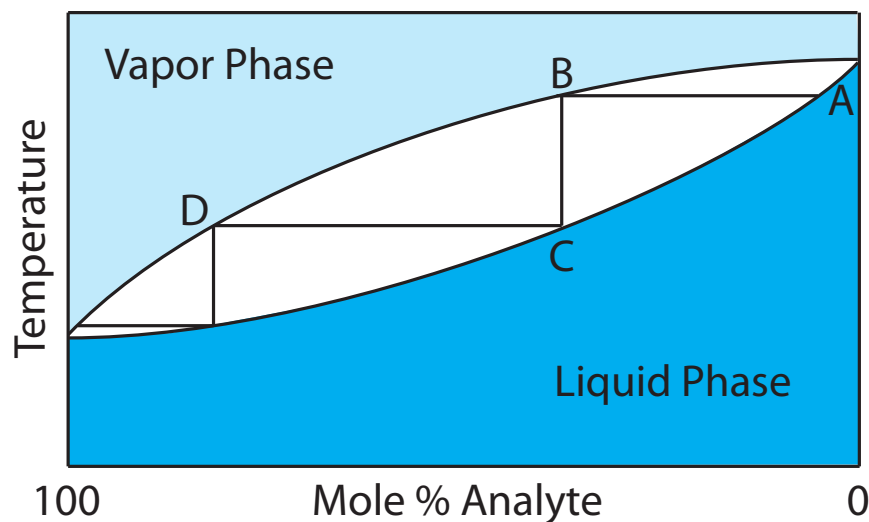


Figure 7.17 Boiling point versus composition diagram for a near-ideal solution consisting of a low-boiling analyte and a high-boiling interferent. The horizontal lines represent vaporization equilibria and the vertical lines represent condensation equilibria. See the text for additional details.

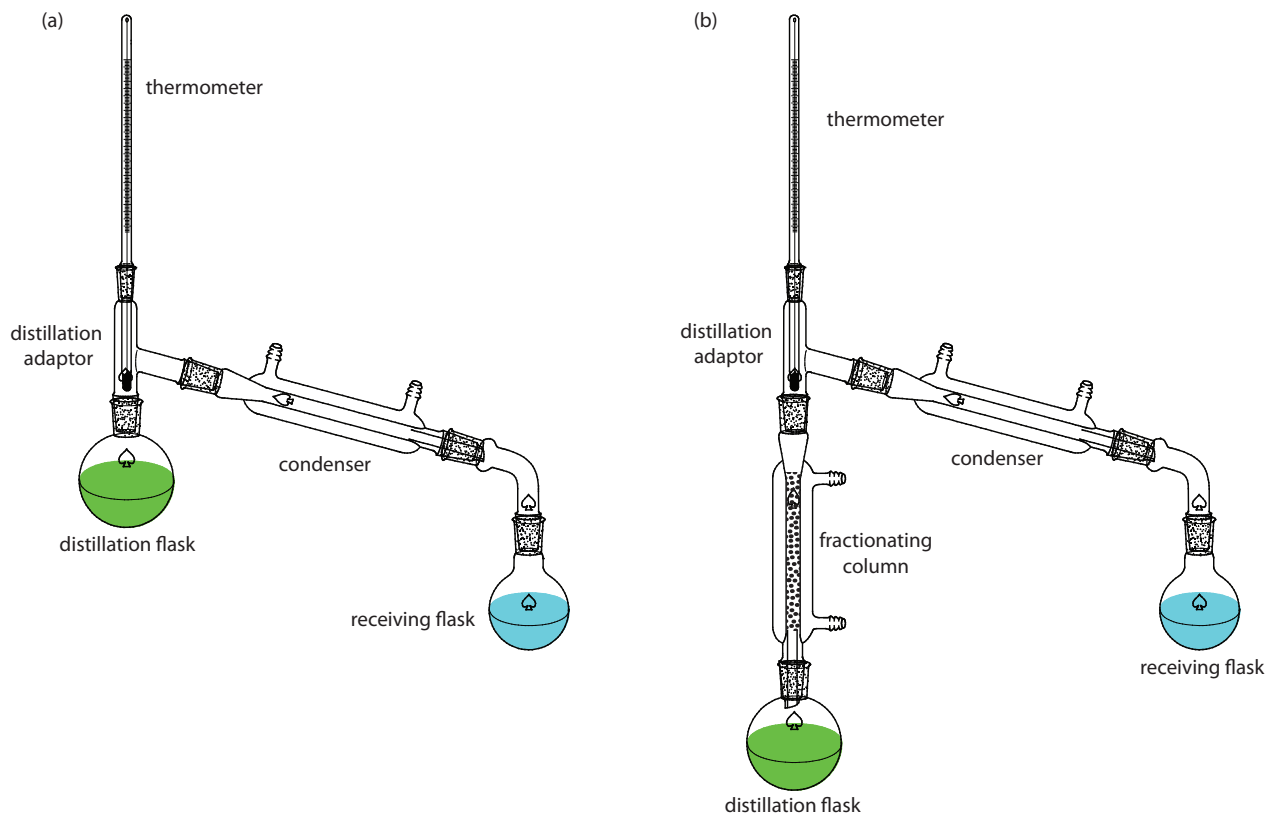


Figure 7.18 Typical experimental set-up for (a) a simple distillation, and (b) a fractional distillation.

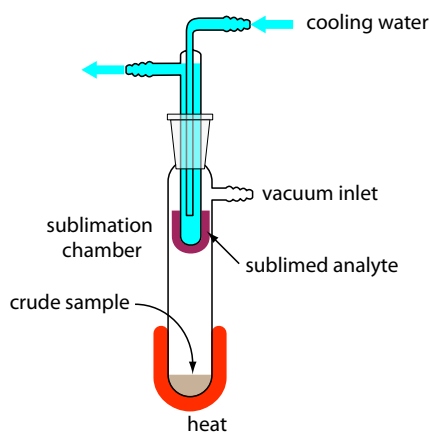


Figure 7.19 Typical experimental set-up for a sublimation. The sample is placed in the sublimation chamber, which may be evacuated. Heating the sample causes the analyte to vaporize and sublime onto a cooled probe. Modified from [Slashme](#) (commons.wikipedia.org).

equilibrium. The liquid phase at point C has a lower boiling point than the original mixture, and is in equilibrium with the vapor phase at point D. This process of repeated vaporization and condensation gradually separates the analyte and interferent.

Two experimental set-ups for distillations are shown in Figure 7.18. The simple distillation apparatus shown in Figure 7.18a does not produce a very efficient separation, and is useful only for separating a volatile analyte (or interferent) from a non-volatile interferent (or analyte), or for an analyte and interferent whose boiling points differ by more than 150°C . A more efficient separation is achieved by a fractional distillation (Figure 7.18b). Packing the distillation column with a high surface area material, such as a steel sponge or glass beads, provides more opportunity for the repeated process of vaporization and condensation necessary to effect a complete separation.

When the sample is a solid, **SUBLIMATION** may provide a useful separation of the analyte and the interferent. The sample is heated at a temperature and pressure below the analyte's triple point, allowing it to vaporize without passing through the liquid state. Condensing the vapor recovers the purified analyte (Figure 7.19). A useful analytical example of sublimation is the isolation of amino acids from fossil mollusk shells and deep-sea sediments.¹³

¹³ Glavin, D. P.; Bada, J. L. *Anal. Chem.* **1998**, *70*, 3119–3122.

RECRYSTALLIZATION is another method for purifying a solid. A solvent is chosen in which the analyte's solubility is significant when the solvent is hot, and minimal when the solvent is cold. The interferents must be less soluble in the hot solvent than the analyte, or present in much smaller amounts. After heating a portion of the solvent in an Erlenmeyer flask, small amounts of the sample are added until undissolved sample is visible. Additional hot solvent is added until the sample redissolves, or until only insoluble impurities remain. This process of adding sample and solvent is repeated until the entire sample has been added to the Erlenmeyer flask. Any insoluble impurities are removed by filtering the hot solution. The solution is allowed to cool slowly, promoting the growth of large, pure crystals, and then cooled in an ice bath to minimize solubility losses. The purified sample is isolated by filtration and rinsed to remove any soluble impurities. Finally, the sample is dried to remove any remaining traces of the solvent. Further purification, if necessary, can be accomplished by additional recrystallizations.

CHANGES IN CHEMICAL STATE

Distillation, sublimation, and recrystallization use a change in physical state as a means of separation. Chemical reactivity also can be a useful tool for separating analytes and interferents. For example, we can separate SiO_2 from a sample by reacting it with HF to form SiF_4 . Because SiF_4 is volatile, it is easy to remove by evaporation. If we wish to collect the reaction's volatile product, then a distillation is possible. For example, we can isolate the NH_4^+ in a sample by making the solution basic and converting it to NH_3 . The ammonia is then removed by distillation. Table 7.7 provides additional examples of this approach for isolating inorganic ions.

Another reaction for separating analytes and interferents is precipitation. Two important examples of using a precipitation reaction in a separation are the pH-dependent solubility of metal oxides and hydroxides, and the solubility of metal sulfides.

Table 7.7 Examples of Using a Chemical Reaction and a Distillation to Separate an Inorganic Analyte From Interferents

Analyte	Treatment	Isolated Species
CO_3^{2-}	$\text{CO}_3^{2-}(aq) + 2\text{H}_3\text{O}^+(aq) \rightarrow \text{CO}_2(g) + 3\text{H}_2\text{O}(l)$	CO_2
NH_4^+	$\text{NH}_4^+(aq) + \text{OH}^-(aq) \rightarrow \text{NH}_3(g) + \text{H}_2\text{O}(l)$	NH_3
SO_3^{2-}	$\text{SO}_3^{2-}(aq) + 2\text{H}_3\text{O}^+(aq) \rightarrow \text{SO}_2(g) + 3\text{H}_2\text{O}(l)$	SO_2
S^{2-}	$\text{S}^{2-}(aq) + 2\text{H}_3\text{O}^+(aq) \rightarrow \text{H}_2\text{S}(g) + 2\text{H}_2\text{O}(l)$	H_2S

Separations based on the pH-dependent solubility of oxides and hydroxides usually use strong acids, strong bases, or an $\text{NH}_3/\text{NH}_4\text{Cl}$ buffer. Most metal oxides and hydroxides are soluble in hot concentrated HNO_3 , although a few oxides, such as WO_3 , SiO_2 , and SnO_2 remain insoluble even under these harsh conditions. In determining the amount of Cu in brass, for example, we can avoid an interference from Sn by dissolving the sample with a strong acid and filtering to remove the solid residue of SnO_2 .

Most metals form a hydroxide precipitate in the presence of concentrated NaOH. Those metals forming amphoteric hydroxides, however, do not precipitate because they react to form higher-order hydroxo-complexes. For example, Zn^{2+} and Al^{3+} do not precipitate in concentrated NaOH because they form the soluble complexes $\text{Zn}(\text{OH})_3^-$ and $\text{Al}(\text{OH})_4^-$. The solubility of Al^{3+} in concentrated NaOH allows us to isolate aluminum from impure samples of bauxite, an ore of Al_2O_3 . After crushing the ore, we place it in a solution of concentrated NaOH, dissolving the Al_2O_3 and forming $\text{Al}(\text{OH})_4^-$. Other oxides in the ore, such as Fe_2O_3 and SiO_2 , remain insoluble. After filtering, we recover the aluminum as a precipitate of $\text{Al}(\text{OH})_3$ by neutralizing some of the OH^- with acid.

The pH of an $\text{NH}_3/\text{NH}_4\text{Cl}$ buffer ($\text{p}K_a = 9.26$) is sufficient to precipitate most metals as the hydroxide. The alkaline earths and alkaline metals, however, do not precipitate at this pH. In addition, metal ions that form soluble complexes with NH_3 , such as Cu^{2+} , Zn^{2+} , Ni^{2+} , and Co^{2+} also do not precipitate under these conditions.

The use of S^{2-} as a precipitating reagent is one of the earliest examples of a separation technique. In Fresenius's 1881 text *A System of Instruction in Quantitative Chemical Analysis*, sulfide is frequently used to separate metal ions from the remainder of the sample's matrix.¹⁴ Sulfide is a useful reagent for separating metal ions for two reasons: (1) most metal ions, except for the alkaline earths and alkaline metals, form insoluble sulfides; and (2) these metal sulfides show a substantial variation in solubility. Because the concentration of S^{2-} is pH-dependent, we can control which metal precipitates by adjusting the pH. For example, in Fresenius's gravimetric procedure for determining Ni in ore samples (see [Figure 1.1](#) in Chapter 1 for a schematic diagram of this procedure), sulfide is used three times as a means of separating Co^{2+} and Ni^{2+} from Cu^{2+} and, to a lesser extent, from Pb^{2+} .

7F.5 Separations Based on a Partitioning Between Phases

The most important group of separation techniques uses a selective partitioning of the analyte or interferent between two immiscible phases. If we bring a phase containing a solute, S, into contact with a second phase, the solute partitions itself between the two phases, as shown by the following equilibrium reaction.

¹⁴ Fresenius, C. R. *A System of Instruction in Quantitative Chemical Analysis*, John Wiley and Sons: New York, 1881.



The equilibrium constant for reaction 7.20

$$K_D = \frac{[S_{\text{phase 2}}]}{[S_{\text{phase 1}}]}$$

is called the distribution constant or **PARTITION COEFFICIENT**. If K_D is sufficiently large, then the solute moves from phase 1 to phase 2. The solute remains in phase 1 if the partition coefficient is sufficiently small. When we bring a phase containing two solutes into contact with a second phase, if K_D is favorable for only one of the solutes a separation of the solutes is possible. The physical states of the phases are identified when describing the separation process, with the phase containing the sample listed first. For example, if the sample is in a liquid phase and the second phase is a solid, then the separation involves liquid–solid partitioning.

EXTRACTION BETWEEN TWO PHASES

We call the process of moving a species from one phase to another phase an **EXTRACTION**. Simple extractions are particularly useful for separations where only one component has a favorable partition coefficient. Several important separation techniques are based on a simple extraction, including liquid–liquid, liquid–solid, solid–liquid, and gas–solid extractions.

LIQUID–LIQUID EXTRACTIONS

A liquid–liquid extraction is usually accomplished with a separatory funnel (Figure 7.20). After placing the two liquids in the separatory funnel, we shake the funnel to increase the surface area between the phases. When the

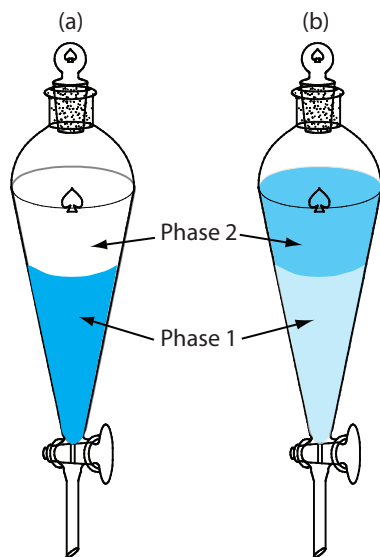


Figure 7.20 Example of a liquid–liquid extraction using a separatory funnel. (a) Before the extraction, 100% of the analyte is in phase 1. (b) After the extraction, most of the analyte is in phase 2, although some analyte remains in phase 1. Although one liquid–liquid extraction can result in the complete transfer of analyte, a single extraction usually is not sufficient. See [Section 7G](#) for a discussion of extraction efficiency and multiple extractions.

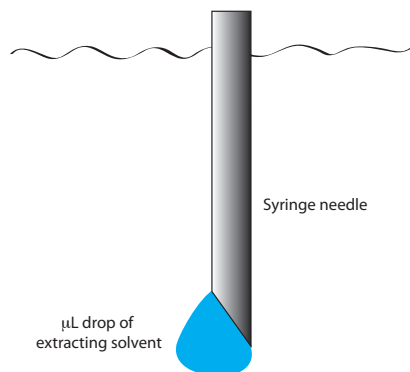


Figure 7.21 Schematic of a liquid–liquid microextraction showing a syringe needle with a μL drop of the extracting solvent.

extraction is complete, we allow the liquids to separate. The stopcock at the bottom of the separatory funnel allows us to remove the two phases.

We also can carry out a liquid–liquid extraction without a separatory funnel by adding the extracting solvent to the sample container. Pesticides in water, for example, are preserved in the field by extracting them into a small volume of hexane. Liquid–liquid microextractions, in which the extracting phase is a 1- μL drop suspended from a microsyringe (Figure 7.21), also have been described.¹⁵ Because of its importance, a more thorough discussion of liquid–liquid extraction is in [section 7G](#).

SOLID PHASE EXTRACTIONS

In a solid phase extraction of a liquid sample, we pass the sample through a cartridge containing a solid adsorbent, several examples of which are shown in Figure 7.22. The choice of adsorbent is determined by the species we wish to separate. Table 7.8 provides several representative examples of solid adsorbents and their applications.

As an example, let's examine a procedure for isolating the sedatives secobarbital and phenobarbital from serum samples using a C-18 solid adsorbent.¹⁶ Before adding the sample, the solid phase cartridge is rinsed with 6 mL each of methanol and water. Next, a 500- μL sample of serum is pulled through the cartridge, with the sedatives and matrix interferences retained by a liquid–solid extraction ([Figure 7.23a](#)). Washing the cartridge with distilled water removes any interferences ([Figure 7.23b](#)). Finally, we elute the sedatives using 500 μL of acetone ([Figure 7.23c](#)). In comparison to a liquid–liquid extraction, a solid phase extraction has the advantage of being easier, faster, and requiring less solvent.

¹⁵ Jeannot, M. A.; Cantwell, F. F. *Anal. Chem.* **1997**, *69*, 235–239.

¹⁶ Alltech Associates *Extract-Clean SPE Sample Preparation Guide*, Bulletin 83.

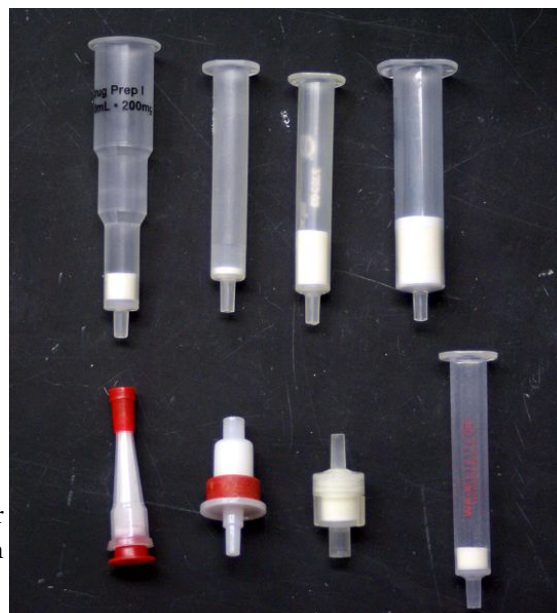
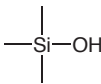
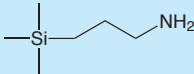
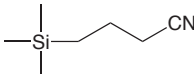
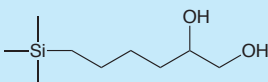


Figure 7.22 Selection of solid phase extraction cartridges for liquid samples. The solid adsorbent is the white material in each cartridge. Source: [Jeff Dahl](#) (commons.wikipedia.org).

Table 7.8 Representative Adsorbents for the Solid Phase Extraction of Liquid Samples

Adsorbent	Structure	Properties and Uses
silica		<ul style="list-style-type: none"> retains low to moderate polarity species from organic matrices fat soluble vitamins, steroids
aminopropyl		<ul style="list-style-type: none"> retains polar compounds carbohydrates, organic acids
cyanopropyl		<ul style="list-style-type: none"> retains wide variety of species from aqueous and organic matrices pesticides, hydrophobic peptides
diol		<ul style="list-style-type: none"> retains wide variety of species from aqueous and organic matrices proteins, peptides, fungicides
octadecyl (C-18)	$-\text{C}_{18}\text{H}_{37}$	<ul style="list-style-type: none"> retains hydrophobic species from aqueous matrices caffeine, sedatives, polyaromatic hydrocarbons, carbohydrates, pesticides
octyl (C-8)	$-\text{C}_8\text{H}_{17}$	<ul style="list-style-type: none"> similar to C-18

CONTINUOUS EXTRACTIONS

An extraction is possible even if the analyte has an unfavorable partition coefficient, provided that the sample's other components have significantly smaller partition coefficients. Because the analyte's partition coefficient is unfavorable, a single extraction will not recover all the analyte. Instead we continuously pass the extracting phase through the sample until a quantitative extraction is achieved.

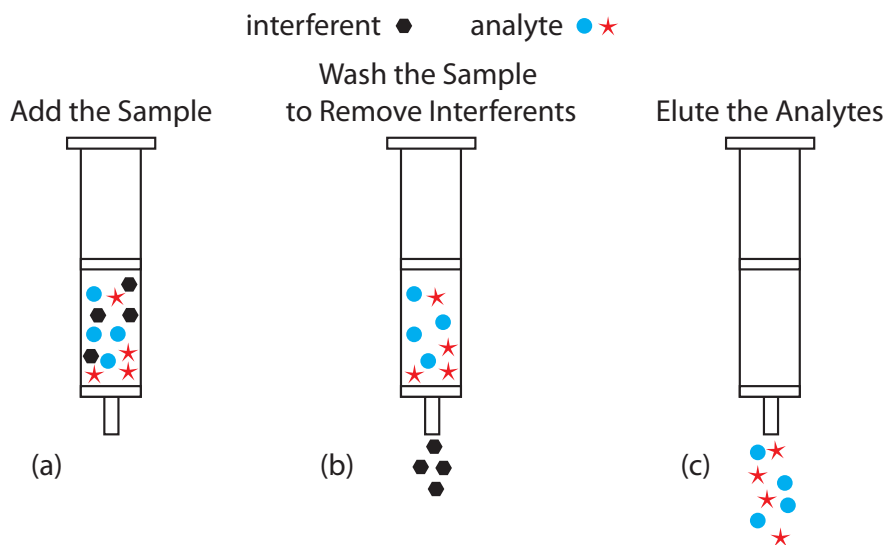


Figure 7.23 Steps in a typical solid phase extraction. After preconditioning the solid phase cartridge with solvent, (a) the sample is added to the cartridge, (b) the sample is washed to remove interferents, and (c) the analytes eluted.

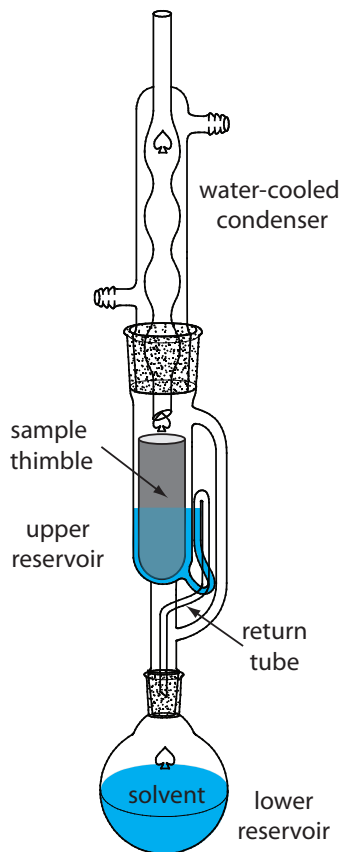


Figure 7.24 Soxhlet extractor. See text for details.

A continuous extraction of a solid sample is carried out using a **SOXHLET EXTRACTOR** (Figure 7.24). The extracting solvent is placed in the lower reservoir and heated to its boiling point. Solvent in the vapor phase moves upwards through the tube on the far right side of the apparatus, reaching the condenser where it condenses back to the liquid state. The solvent then passes through the sample, which is held in a porous cellulose filter thimble, collecting in the upper reservoir. When the solvent in the upper reservoir reaches the return tube's upper bend, the solvent and extracted analyte are siphoned back to the lower reservoir. Over time the analyte's concentration in the lower reservoir increases.

Microwave-assisted extractions have replaced Soxhlet extractions in some applications.¹⁷ The process is the same as that described [earlier](#) for a microwave digestion. After placing the sample and the solvent in a sealed digestion vessel, a microwave oven is used to heat the mixture. Using a sealed digestion vessel allows the extraction to take place at a higher temperature and pressure, reducing the amount of time needed for a quantitative extraction. In a Soxhlet extraction the temperature is limited by the solvent's boiling point at atmospheric pressure. When acetone is the solvent, for example, a Soxhlet extraction is limited to 56°C, but a microwave extraction can reach 150°C.

Two other continuous extractions deserve mention. Volatile organic compounds (VOCs) can be quantitatively removed from liquid samples by a liquid–gas extraction. As shown in Figure 7.25, an inert purging gas, such as He, is passed through the sample. The purge gas removes the VOCs, which are swept to a primary trap where they collect on a solid adsorbent. A second trap provides a means for checking to see if the primary trap's capacity is exceeded. When the extraction is complete, the VOCs are re-

¹⁷ Renoe, B. W. *Am. Lab* August 1994, 34–40.

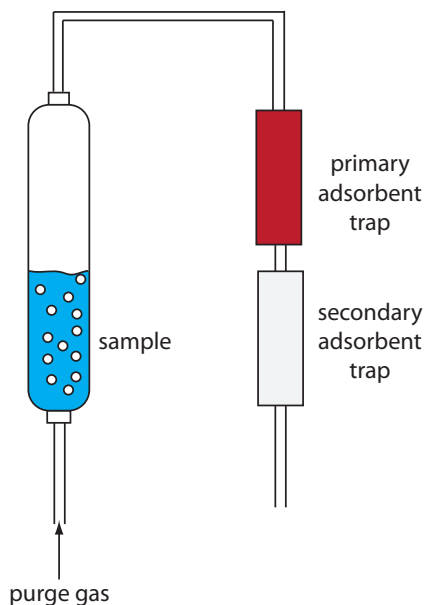


Figure 7.25 Schematic diagram of a purge-and-trap system for extracting volatile analytes. The purge gas releases the analytes, which subsequently collect in the primary adsorbent trap. The secondary adsorption trap is monitored for evidence of the analyte's breakthrough.

moved from the primary trap by rapidly heating the tube while flushing with He. This technique is known as a **PURGE-AND-TRAP**. Because the analyte's recovery may not be reproducible, an internal standard is necessary for quantitative work.

Continuous extractions also can be accomplished using supercritical fluids.¹⁸ If we heat a substance above its critical temperature and pressure, it forms a **SUPERCRITICAL FLUID** whose properties are between those of a gas and a liquid. A supercritical fluid is a better solvent than a gas, which makes it a better reagent for extractions. In addition, a supercritical fluid's viscosity is significantly less than that of a liquid, making it easier to push it through a particulate sample. One example of a supercritical fluid extraction is the determination of total petroleum hydrocarbons (TPHs) in soils, sediments, and sludges using supercritical CO₂.¹⁹ An approximately 3-g sample is placed in a 10-mL stainless steel cartridge and supercritical CO₂ at a pressure of 340 atm and a temperature of 80 °C is passed through the cartridge for 30 minutes at flow rate of 1–2 mL/min. To collect the TPHs, the effluent from the cartridge is passed through 3 mL of tetrachloroethylene at room temperature. At this temperature the CO₂ reverts to the gas phase and is released to the atmosphere.

CHROMATOGRAPHIC SEPARATIONS

In an extraction, the sample is one phase and we extract the analyte or the interferent into a second phase. We also can separate the analyte and interferents by continuously passing one sample-free phase, called the mobile phase, over a second sample-free phase that remains fixed or stationary. The sample is injected into the mobile phase and the sample's components partition themselves between the mobile phase and the stationary phase. Those components with larger partition coefficients are more likely to move into the stationary phase, taking a longer time to pass through the system. This is the basis of all chromatographic separations. Chromatography provides both a separation of analytes and interferents, and a means for performing a qualitative or quantitative analysis for the analyte. For this reason a more thorough treatment of chromatography is found in Chapter 12.

7G Liquid–Liquid Extractions

A liquid–liquid extraction is an important separation technique for environmental, clinical, and industrial laboratories. A standard environmental analytical method illustrates the importance of liquid–liquid extractions. Municipal water departments routinely monitor public water supplies for trihalomethanes (CHCl₃, CHBrCl₂, CHBr₂Cl, and CHBr₃) because they are known or suspected carcinogens. Before their analysis by gas chroma-

The Environmental Protection Agency (EPA) also publishes two additional methods for trihalomethanes. Method 501.1 and Method 501.3 use a purge-and-trap to collect the trihalomethanes prior to a gas chromatographic analysis with a halide-specific detector (Method 501.1) or a mass spectrometer as the detector (Method 501.3). You will find more details about gas chromatography, including detectors, in Chapter 12.

18 McNally, M. E. *Anal. Chem.* **1995**, *67*, 308A–315A.

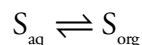
19 "TPH Extraction by SFE," ISCO, Inc. Lincoln, NE, Revised Nov. 1992.

tography, trihalomethanes are separated from their aqueous matrix by extracting with pentane.²⁰

In a simple liquid–liquid extraction the solute partitions between two immiscible phases. One phase usually is aqueous and the other phase is an organic solvent, such as the pentane used in extracting trihalomethanes from water. Because the phases are immiscible they form two layers, with the denser phase on the bottom. The solute is initially present in one of the two phases; after the extraction it is present in both phases. **EXTRACTION EFFICIENCY**—that is, the percentage of solute moving from one phase to the other—is determined by the equilibrium constant for the solute’s partitioning between the phases and any other reactions involving the solute. Examples of other reactions affecting extraction efficiency include acid–base reactions and complexation reactions.

7G.1 Partition Coefficients and Distribution Ratios

As we learned earlier in this chapter, a solute’s partitioning between two phases is described by a partition coefficient, K_D . If we extract a solute from an aqueous phase into an organic phase



then the partition coefficient is

$$K_D = \frac{[S_{\text{org}}]}{[S_{\text{aq}}]}$$

A large value for K_D indicates that the solute’s extraction into the organic phase is favorable.

To evaluate an extraction’s efficiency we must consider the solute’s total concentration in each phase. We define the **DISTRIBUTION RATIO**, D , as the ratio of the solute’s total concentration in each phase.

$$D = \frac{[S_{\text{org}}]_{\text{total}}}{[S_{\text{aq}}]_{\text{total}}}$$

The partition coefficient and the distribution ratio are identical if the solute has only one chemical form in each phase. If the solute exists in more than one chemical form in either phase, then K_D and D usually have different values. For example, if the solute exists in two forms in the aqueous phase, A and B, only one of which, A, partitions between the two phases, then

$$D = \frac{[S_{\text{org}}]_A}{[S_{\text{aq}}]_A + [S_{\text{aq}}]_B} \leq K_D = \frac{[S_{\text{org}}]_A}{[S_{\text{aq}}]_A}$$

²⁰ “The Analysis of Trihalomethanes in Drinking Water by Liquid Extraction,” EPA Method 501.2 (EPA 500-Series, November 1979).

This distinction between K_D and D is important. The partition coefficient is an equilibrium constant and has a fixed value for the solute's partitioning between the two phases. The distribution ratio's value, however, changes with solution conditions if the relative amounts of A and B change. If we know the equilibrium reactions taking place within each phase and between the phases, we can derive an algebraic relationship between K_D and D .

7G.2 Liquid–Liquid Extraction With No Secondary Reactions

In a simple liquid–liquid extraction, the only reaction affecting extraction efficiency is the solute's partitioning between the two phases (Figure 7.26). In this case the distribution ratio and the partition coefficient are equal.

$$D = \frac{[S_{\text{org}}]_{\text{total}}}{[S_{\text{aq}}]_{\text{total}}} = K_D = \frac{[S_{\text{org}}]}{[S_{\text{aq}}]} \quad 7.21$$

Let's assume that the solute is initially present in the aqueous phase and that we are extracting it into the organic phase. A conservation of mass requires that the moles of solute initially present in the aqueous phase equal the combined moles of solute in the aqueous phase and the organic phase after the extraction.

$$(\text{moles } S_{\text{aq}})_0 = (\text{moles } S_{\text{aq}})_1 + (\text{moles } S_{\text{org}})_1 \quad 7.22$$

where the subscripts indicate the extraction number. After the extraction, the solute's concentration in the aqueous phase is

$$[S_{\text{aq}}]_1 = \frac{(\text{moles } S_{\text{aq}})_1}{V_{\text{aq}}} \quad 7.23$$

and its concentration in the organic phase is

$$[S_{\text{org}}]_1 = \frac{(\text{moles } S_{\text{org}})_1}{V_{\text{org}}} \quad 7.24$$

where V_{aq} and V_{org} are the volumes of the aqueous phase and the organic phase. Solving equation 7.22 for $(\text{moles } S_{\text{org}})_1$ and substituting into equation 7.24 leave us with

$$[S_{\text{org}}]_1 = \frac{(\text{moles } S_{\text{aq}})_0 - (\text{moles } S_{\text{aq}})_1}{V_{\text{org}}} \quad 7.25$$

Substituting equation 7.23 and equation 7.25 into equation 7.21 gives

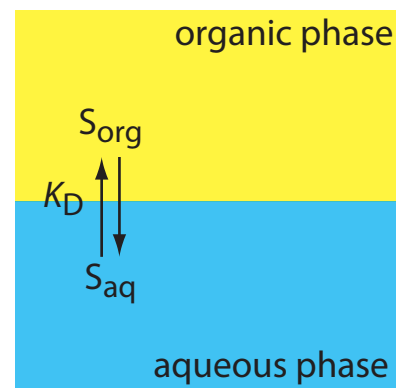


Figure 7.26 Scheme for a simple liquid–liquid extraction in which the solute's partitioning depends only on the K_D equilibrium.

The subscript 0 represents the system before the extraction and the subscript 1 represents the system after the first extraction.

$$D = \frac{\frac{(\text{moles } S_{\text{aq}})_0 - (\text{moles } S_{\text{aq}})_1}{V_{\text{org}}}}{\frac{(\text{moles } S_{\text{aq}})_1}{V_{\text{aq}}}} = \frac{(\text{moles } S_{\text{aq}})_0 \times V_{\text{aq}} - (\text{moles } S_{\text{aq}})_1 \times V_{\text{aq}}}{(\text{moles } S_{\text{aq}})_1 \times V_{\text{org}}}$$

Rearranging, and solving for the fraction of solute remaining in the aqueous phase after one extraction, $(q_{\text{aq}})_1$, gives

$$(q_{\text{aq}})_1 = \frac{(\text{moles } S_{\text{aq}})_1}{(\text{moles } S_{\text{aq}})_0} = \frac{V_{\text{aq}}}{DV_{\text{org}} + V_{\text{aq}}} \quad 7.26$$

The fraction present in the organic phase after one extraction, $(q_{\text{org}})_1$, is

$$(q_{\text{org}})_1 = \frac{(\text{moles } S_{\text{org}})_1}{(\text{moles } S_{\text{org}})_0} = 1 - (q_{\text{aq}})_1 = \frac{DV_{\text{org}}}{DV_{\text{org}} + V_{\text{aq}}}$$

Example 7.14 shows how we can use equation 7.26 to calculate the efficiency of a simple liquid-liquid extraction.

Example 7.14

A solute has a K_D between water and chloroform of 5.00. Suppose we extract a 50.00-mL sample of a 0.050 M aqueous solution of the solute with 15.00 mL of chloroform. (a) What is the separation's extraction efficiency? (b) What volume of chloroform must we use to extract 99.9% of the solute?

SOLUTION

For a simple liquid-liquid extraction the distribution ratio, D , and the partition coefficient, K_D , are identical.

- (a) The fraction of solute remaining in the aqueous phase after the extraction is given by equation 7.26.

$$(q_{\text{aq}})_1 = \frac{V_{\text{aq}}}{DV_{\text{org}} + V_{\text{aq}}} = \frac{50.00 \text{ mL}}{(5.00)(15.00 \text{ mL}) + 50.00 \text{ mL}} = 0.400$$

The fraction of solute in the organic phase is $1 - 0.400$, or 0.600. Extraction efficiency is the percentage of solute moving into the extracting phase. The extraction efficiency, therefore, is 60.0%.

- (b) To extract 99.9% of the solute $(q_{\text{aq}})_1$ must be 0.001. Solving equation 7.26 for V_{org} , and making appropriate substitutions for $(q_{\text{aq}})_1$ and V_{aq} gives

$$V_{\text{org}} = \frac{V_{\text{aq}} - (q_{\text{aq}})_1 V_{\text{aq}}}{(q_{\text{aq}})_1 D} = \frac{50.00 \text{ mL} - (0.001)(50.00 \text{ mL})}{(0.001)(5.00)} = 9990 \text{ mL}$$

This is large volume of chloroform. Clearly, a single extraction is not reasonable under these conditions.

In [Example 7.14](#), a single extraction provides an extraction efficiency of only 60%. If we carry out a second extraction, the fraction of solute remaining in the aqueous phase, $(q_{\text{aq}})_2$, is

$$(q_{\text{aq}})_2 = \frac{(\text{moles } S_{\text{aq}})_2}{(\text{moles } S_{\text{aq}})_1} = \frac{V_{\text{aq}}}{DV_{\text{org}} + V_{\text{aq}}}$$

If V_{aq} and V_{org} are the same for both extractions, then the cumulative fraction of solute remaining in the aqueous layer after two extractions, $(Q_{\text{aq}})_2$, is

$$(Q_{\text{aq}})_2 = \frac{(\text{moles } S_{\text{aq}})_2}{(\text{moles } S_{\text{aq}})_0} = (q_{\text{aq}})_1 \times (q_{\text{aq}})_2 = \left(\frac{V_{\text{aq}}}{DV_{\text{org}} + V_{\text{aq}}} \right)^2$$

In general, for a series of n identical extractions, the fraction of analyte remaining in the aqueous phase after the last extraction is

$$(Q_{\text{aq}})_n = \left(\frac{V_{\text{aq}}}{DV_{\text{org}} + V_{\text{aq}}} \right)^n \quad 7.27$$

Example 7.15

For the extraction described in [Example 7.14](#), determine (a) the extraction efficiency for two extractions and for three extractions; and (b) the number of extractions required to ensure that we extract 99.9% of the solute.

SOLUTION

- (a) The fraction of solute remaining in the aqueous phase after two extractions and three extractions is

$$(Q_{\text{aq}})_2 = \left(\frac{50.00 \text{ mL}}{(5.00)(15.00 \text{ mL}) + 50.00 \text{ mL}} \right)^2 = 0.160$$

$$(Q_{\text{aq}})_3 = \left(\frac{50.00 \text{ mL}}{(5.00)(15.00 \text{ mL}) + 50.00 \text{ mL}} \right)^3 = 0.0640$$

The extraction efficiencies are 84.0% with two extractions and 93.6% with three extractions.

- (b) To determine the minimum number of extractions for an efficiency of 99.9%, we set $(Q_{\text{aq}})_n$ to 0.001 and solve for n in equation 7.27.

$$0.001 = \left(\frac{50.00 \text{ mL}}{(5.00)(15.00 \text{ mL}) + 50.00 \text{ mL}} \right)^n = (0.400)^n$$

Taking the log of both sides and solving for n

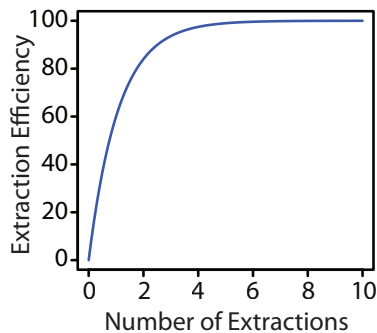


Figure 7.27 Plot of extraction efficiency versus the number of extractions for the liquid–liquid extraction in [Example 7.15](#).

$$\log(0.001) = n \log(0.400)$$

$$n = 7.54$$

we find that a minimum of 8 extractions is necessary.

The last two examples provide us with an important observation—for any extraction efficiency, we need less solvent if we complete several extractions using smaller portions of solvent instead of one extraction using a larger volume of solvent. For the conditions in [Example 7.14](#) and [Example 7.15](#), an extraction efficiency of 99.9% requires one extraction with 9990 mL of chloroform, or 120 mL when using eight 15-mL portions of chloroform. Although extraction efficiency increases dramatically with the first few multiple extractions, the effect quickly diminishes as we increase the number of extractions (Figure 7.27). In most cases there is little improvement in extraction efficiency after five or six extractions. For the conditions in [Example 7.15](#), we reach an extraction efficiency of 99% after five extractions and need three additional extractions to obtain the extra 0.9% increase in extraction efficiency.

Practice Exercise 7.8

To plan a liquid–liquid extraction we need to know the solute’s distribution ratio between the two phases. One approach is to carry out the extraction on a solution containing a known amount of solute. After extracting the solution, we isolate the organic phase and allow it to evaporate, leaving behind the solute. In one such experiment, 1.235 g of a solute with a molar mass of 117.3 g/mol is dissolved in 10.00 mL of water. After extracting with 5.00 mL of toluene, 0.889 g of the solute is recovered in the organic phase. (a) What is the solute’s distribution ratio between water and toluene? (b) If we extract 20.00 mL of an aqueous solution containing the solute with 10.00 mL of toluene, what is the extraction efficiency? (c) How many extractions will we need to recover 99.9% of the solute?

Click [here](#) to review your answer to this exercise.

7G.3 Liquid–Liquid Extractions Involving Acid–Base Equilibria

As shown by [equation 7.21](#), in a simple liquid–liquid extraction the distribution ratio and the partition coefficient are identical. As a result, the distribution ratio does not depend on the composition of the aqueous phase or the organic phase. Changing the pH of the aqueous phase, for example, will not affect the solute’s extraction efficiency.

If the solute participates in an additional equilibrium reaction within a phase, then the distribution ratio and the partition coefficient may not be the same. For example, [Figure 7.28](#) shows the equilibrium reactions affecting the extraction of the weak acid, HA, by an organic phase in which

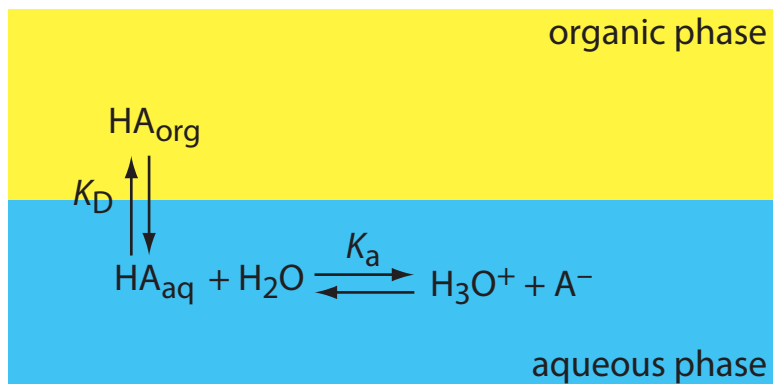


Figure 7.28 Scheme for a liquid–liquid extraction of the weak acid, HA. Although the weak acid is soluble in both phases, its conjugate weak base, A^- , is soluble only in the aqueous phase. The K_a reaction, which is called a **SECONDARY EQUILIBRIUM REACTION**, affects the extraction efficiency because it controls the relative abundance of HA in solution.

ionic species are not soluble. In this case the partition coefficient and the distribution ratio are

$$K_D = \frac{[HA_{org}]}{[HA_{aq}]} \quad 7.28$$

$$D = \frac{[HA_{org}]_{total}}{[HA_{aq}]_{total}} = \frac{[HA_{org}]}{[HA_{aq}] + [A_{aq}^-]} \quad 7.29$$

Because the position of an acid–base equilibrium depends on the pH, the distribution ratio is pH-dependent. To derive an equation for D that shows this dependency, we begin with the acid dissociation constant for HA.

$$K_a = \frac{[H_3O_{aq}^+][A_{aq}^-]}{[HA_{aq}]} \quad 7.30$$

Solving equation 7.30 for the concentration of A^-

$$[A_{aq}^-] = \frac{K_a \times [HA_{aq}]}{[H_3O_{aq}^+]}$$

and substituting into equation 7.29 gives

$$D = \frac{[HA_{org}]}{[HA_{aq}] + \frac{K_a \times [HA_{aq}]}{[H_3O_{aq}^+]}}$$

Factoring $[HA_{aq}]$ from the denominator, replacing $[HA_{org}]/[HA_{aq}]$ with K_D (equation 7.28), and simplifying leaves us with a relationship between the distribution ratio, D , and the pH of the aqueous solution.

$$D = \frac{K_D[\text{H}_3\text{O}^+]}{[\text{H}_3\text{O}^+] + K_a} \quad 7.31$$

Example 7.16

An acidic solute, HA, has a K_a of 1.00×10^{-5} and a K_D between water and hexane of 3.00. Calculate the extraction efficiency if we extract a 50.00 mL sample of a 0.025 M aqueous solution of HA, buffered to a pH of 3.00, with 50.00 mL of hexane. Repeat for pH levels of 5.00 and 7.00.

SOLUTION

When the pH is 3.00, $[\text{H}_3\text{O}^+]$ is 1.0×10^{-3} and the distribution ratio is

$$D = \frac{(3.00)(1.0 \times 10^{-3})}{1.0 \times 10^{-3} + 1.0 \times 10^{-5}} = 2.97$$

The fraction of solute remaining in the aqueous phase is

$$(Q_{\text{aq}})_1 = \frac{50.00 \text{ mL}}{(2.97)(50.00 \text{ mL}) + 50.00 \text{ mL}} = 0.252$$

The extraction efficiency, therefore, is almost 75%. The same calculation at a pH of 5.00 gives the extraction efficiency as 60%. At a pH of 7.00 the extraction efficiency is only 3%.

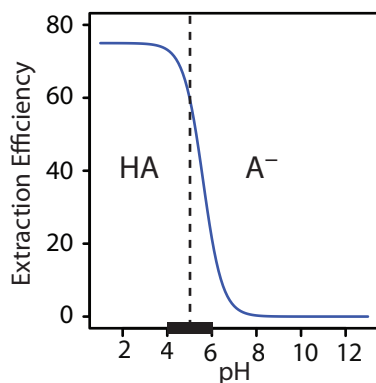
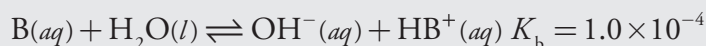


Figure 7.29 Plot of extraction efficiency versus pH of the aqueous phase for the extraction of the weak acid HA in Example 7.16. A ladder diagram for HA is superimposed along the x -axis, dividing the pH scale into regions where HA and A^- are the predominate aqueous phase species. The greatest change in extraction efficiency occurs as the pH moves through HA's buffer region.

The extraction efficiency in Example 7.16 is greater at more acidic pH levels because HA is the solute's predominate form in the aqueous phase. At a more basic pH, where A^- is the solute's predominate form, the extraction efficiency is smaller. A graph of extraction efficiency versus pH is shown in Figure 7.29. Note that extraction efficiency is essentially independent of pH for pHs more acidic than the weak acid's $\text{p}K_a$, and that it is essentially zero for pHs more basic than the $\text{p}K_a$. The greatest change in extraction efficiency occurs at pHs where both HA and A^- are predominate species. The ladder diagram for HA along the graph's x -axis helps illustrate this effect.

Practice Exercise 7.9

The liquid–liquid extraction of the weak base B is governed by the following equilibrium reactions:



Derive an equation for the distribution ratio, D , and calculate the extraction efficiency if 25.0 mL of a 0.025 M solution of B, buffered to a pH of 9.00, is extracted with 50.0 mL of the organic solvent.

Click [here](#) to review your answer to this exercise.

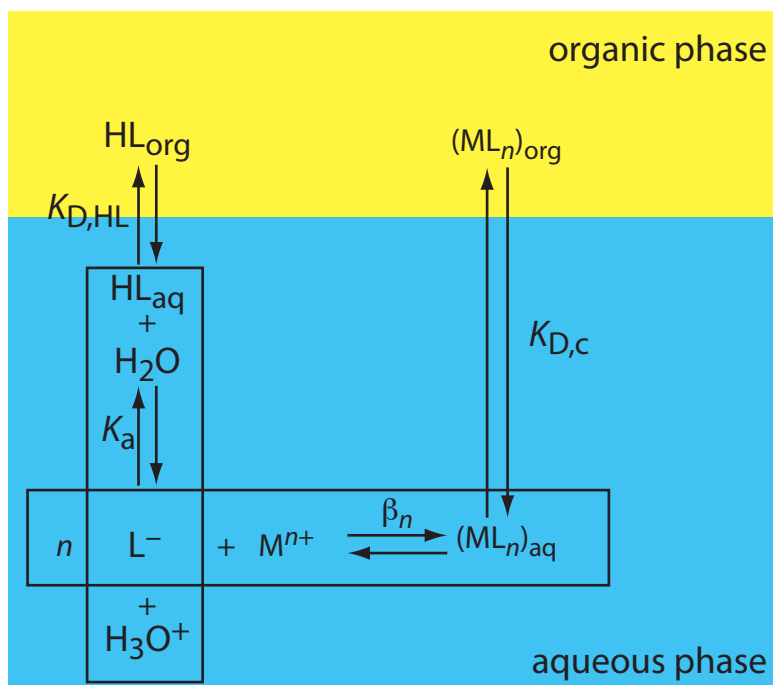


Figure 7.30 Scheme for the liquid–liquid extraction of a metal ion, M^{n+} , by the ligand L^{-} . The ligand initially is present in the organic phase as HL. Four equilibrium reactions are needed to explain the extraction efficiency.

7G.4 Liquid–Liquid Extraction of a Metal–Ligand Complex

One important application of liquid–liquid extractions is the selective extraction of metal ions using a ligand. Unfortunately, many ligands are not very soluble in water or undergo hydrolysis or oxidation in aqueous solutions. For these reasons the ligand is added to the organic solvent instead of the aqueous phase. Figure 7.30 shows the relevant equilibria (and equilibrium constants) for the extraction of M^{n+} by the ligand HL, including the ligand's extraction into the aqueous phase ($K_{D,HL}$), the ligand's acid dissociation reaction (K_a), the formation of the metal–ligand complex (β_n), and the complex's extraction into the organic phase ($K_{D,c}$).

If the ligand's concentration is much greater than the metal ion's concentration, then the distribution ratio is

$$D = \frac{\beta_n K_{D,c} (K_a)^n (C_{HL})^n}{(K_{D,HL})^n [H_3O^+]^n + \beta_n (K_a)^n (C_{HL})^n} \quad 7.32$$

where C_{HL} is the ligand's initial concentration in the organic phase. As shown in Example 7.17, the extraction efficiency for metal ions shows a marked pH dependency.

[Problem 32](#) in the end-of-chapter problems asks you to derive equation 7.32.

Example 7.17

A liquid–liquid extraction of the divalent metal ion, M^{2+} , uses the scheme outlined in Figure 7.30. The partition coefficients for the ligand, $K_{D,HL}$, and for the metal–ligand complex, $K_{D,c}$, are 1.0×10^4 and 7.0×10^4 , respectively. The ligand's acid dissociation constant, K_a , is 5.0×10^{-5} , and the formation constant for the metal–ligand complex, β_2 , is 2.5×10^{16} .

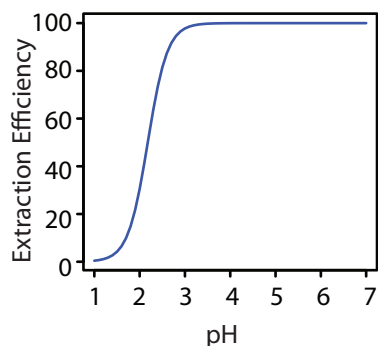
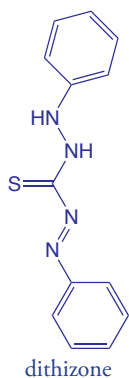


Figure 7.31 Plot of extraction efficiency versus pH for the extraction of the metal ion, M^{2+} , in [Example 7.17](#).



Calculate the extraction efficiency if we extract 100.0 mL of a 1.0×10^{-6} M aqueous solution of M^{2+} , buffered to a pH of 1.00, with 10.00 mL of an organic solvent that is 0.1 mM in the chelating agent. Repeat the calculation at a pH of 3.00.

SOLUTION

When the pH is 1.00 the distribution ratio is

$$D = \frac{(2.5 \times 10^6)(7.0 \times 10^4)(5.0 \times 10^{-5})^2(1.0 \times 10^{-4})^2}{(1.0 \times 10^4)^2(0.10)^2 + (2.5 \times 10^6)(5.0 \times 10^{-5})^2(1.0 \times 10^{-4})^2}$$

$$D = 0.0438$$

and the fraction of metal ion remaining in the aqueous phase is

$$(Q_{\text{aq}})_1 = \frac{100.0 \text{ mL}}{(0.0438)(10.00 \text{ mL}) + 100.0 \text{ mL}} = 0.996$$

At a pH of 1.00, we extract only 0.40% of the metal into the organic phase. Changing the pH to 3.00, however, increases the extraction efficiency to 97.8%. Figure 7.31 shows how the pH of the aqueous phase affects the extraction efficiency for M^{2+} .

One advantage of using a ligand to extract a metal ion is the high degree of selectivity that it brings to a liquid–liquid extraction. As seen in Figure 7.31, a divalent metal ion's extraction efficiency increases from approximately 0% to 100% over a range of 2 pH units. Because a ligand's ability to form a metal–ligand complex varies substantially from metal ion to metal ion, significant selectivity is possible by carefully controlling pH. [Table 7.9](#) shows the minimum pH for extracting 99% of a metal ion from an aqueous solution using an equal volume of 4 mM dithizone in CCl_4 .

Example 7.18

Using [Table 7.9](#), explain how you can separate the metal ions in an aqueous mixture of Cu^{2+} , Cd^{2+} and Ni^{2+} by extracting with an equal volume of dithizone in CCl_4 .

SOLUTION

From [Table 7.9](#), a quantitative separation of Cu^{2+} from Cd^{2+} and Ni^{2+} is possible if we acidify the aqueous phase to a pH of less than 1. This pH is greater than the minimum pH for extracting Cu^{2+} and significantly smaller than the minimum pH for extracting either Cd^{2+} or Ni^{2+} . After the extraction is complete, buffering the aqueous phase to 4.0 allows us to extract the Cd^{2+} leaving the Ni^{2+} in the aqueous phase.

Table 7.9 Minimum pH for Extracting 99% of an Aqueous Metal Ion Using 4.0 mM Dithizone in CCl_4 ($V_{\text{aq}} = V_{\text{org}}$)

Metal Ion	Minimum pH
Hg^{2+}	-8.7
Ag^+	-1.7
Cu^{2+}	-0.8
Bi^{3+}	0.9
Zn^{2+}	2.3
Cd^{2+}	3.6
Co^{2+}	3.6
Pb^{2+}	4.1
Ni^{2+}	6.0
Tl^+	8.7

Source: Kolthoff, I. M.; Sandell, E. B.; Meehan, E. J.; Bruckenstein, S. *Quantitative Chemical Analysis*, Macmillan: New York, 1969, p. 353.

7H Separation Versus Preconcentration

Two common analytical problems are: (1) matrix components that interfere with an analyte's analysis; and (2) an analyte with a concentration that is too small to analyze accurately. We have seen that we can use a separation to solve the first problem. Interestingly, we often can use a separation to solve the second problem as well. For a separation in which we recover the analyte in a new phase, it may be possible to increase the analyte's concentration. This step in an analytical procedure is known as a **PRECONCENTRATION**.

An example from the analysis of water samples illustrate how we can simultaneously accomplish a separation and a preconcentration. In the gas chromatographic analysis for organophosphorous pesticides in environmental waters, the analytes in a 1000-mL sample may be separated from their aqueous matrix by a solid-phase extraction using 15 mL of ethyl acetate.²¹ After the extraction, the analytes in the ethyl acetate have a concentration that is 67 times greater than that in the original sample (assuming the extraction is 100% efficient).

$$\frac{1000 \text{ mL}}{15 \text{ mL}} \approx 67 \times$$

7I Key Terms

centrifugation	composite sample	coning and quartering
convenience sampling	density gradient centrifugation	dialysis
distillation	distribution ratio	extraction
extraction efficiency	filtrate	filtration

As you review this chapter, try to define a key term in your own words. Check your answer by clicking on the key term, which will take you to the page where it was first introduced. Clicking on the **KEY TERM** there, will bring you back to this page so that you can continue with another key term.

21 Aguilar, C.; Borrul, F.; Marcé, R. M. *LC•GC* **1996**, *14*, 1048–1054.

grab sample	gross sample	heterogeneous
homogeneous	in situ sampling	judgmental sampling
laboratory sample	masking	masking agents
Nyquist theorem	partition coefficient	preconcentration
purge-and-trap	random sampling	recovery
recrystallization	retentate	sampling plan
secondary equilibrium reaction	selectivity coefficient	separation factor
size exclusion chromatography	Soxhlet extractor	stratified sampling
sublimation	subsamples	supercritical fluid
systematic–judgmental sampling	systematic sampling	target population

7J Chapter Summary

An analysis requires a sample. How we acquire that sample is critical. The samples we collect must accurately represent their target population, and our sampling plan must provide a sufficient number of samples of appropriate size so that the uncertainty in sampling does not limit the precision of our analysis.

A complete sampling plan requires several considerations, including: the type of sample (random, judgmental, systematic, systematic–judgmental, stratified, or convenience); whether to collect grab samples, composite samples, or in situ samples; whether the population is homogeneous or heterogeneous; the appropriate size for each sample; and, the number of samples to collect.

Removing a sample from its population may induce a change in its composition due to a chemical or physical process. For this reason, we collect samples in inert containers and we often preserve them at the time of collection.

When an analytical method's selectivity is insufficient, we may need to separate the analyte from potential interferents. Such separations can take advantage of physical properties—such as size, mass or density—or chemical properties. Important examples of chemical separations include masking, distillation, and extractions.

7K Problems

1. Because of the risk of lead poisoning, the exposure of children to lead-based paint is a significant public health concern. The first step in the quantitative analysis of lead in dried paint chips is to dissolve the sample. Corl has evaluated several dissolution techniques.²² In this study, samples of paint were collected and pulverized with a Pyrex mortar and pestle. Replicate portions of the powdered paint were then taken for

²² Corl, W. E. *Spectroscopy* **1991**, 6(8), 40–43.

analysis. The following table shows results for a paint sample and for a standard reference material. Both samples and standards were digested with HNO_3 on a hot plate.

Replicate	% w/w Pb in Sample	% w/w Pb in Standard
1	5.09	11.48
2	6.29	11.62
3	6.64	11.47
4	4.63	11.86

- (a) Determine the overall variance, the variance due to the method and the variance due to sampling. (b) What percentage of the overall variance is due to sampling? (c) How might you decrease the variance due to sampling?
- To analyze a shipment of 100 barrels of an organic solvent, you plan to collect and analyze single samples from ten barrels using a random sampling. From which barrels should you collect samples if the first barrel is given by the 12th entry in the random number table in Appendix 14, with subsequent barrels given by every third entry? Assume that entries in the random number table are arranged by rows.
 - The concentration of dissolved O_2 in a lake shows a daily cycle from the effect of photosynthesis, and a yearly cycle due to seasonal changes in temperature. Suggest an appropriate systematic sampling plan for monitoring the daily change in dissolved O_2 . Suggest an appropriate systematic sampling plan for monitoring the yearly change in dissolved O_2 .
 - The data in the following table were collected during a preliminary study of the pH of an industrial wastewater stream.

Time (h)	pH	Time (h)	pH
0.5	4.4	9.0	5.7
1.0	4.8	9.5	5.5
1.5	5.2	10.0	6.5
2.0	5.2	10.5	6.0
2.5	5.6	11.0	5.8
3.0	5.4	11.5	6.0
3.5	5.4	12.0	5.6
4.0	4.4	12.5	5.6
4.5	4.8	13.0	5.4
5.0	4.8	13.5	4.9

Time (h)	pH	Time (h)	pH
5.5	4.2	14.0	5.2
6.0	4.2	14.5	4.4
6.5	3.8	15.0	4.0
7.0	4.0	15.5	4.5
7.5	4.0	16.0	4.0
8.0	3.9	16.5	5.0
8.5	4.7	17.0	5.0

Construct a graph of pH as a function of time and suggest an appropriate sampling frequency for a long-term monitoring program.

- You have been asked to monitor the daily fluctuations in atmospheric ozone in the downtown area of a city to determine if there is relationship between daily traffic patterns and ozone levels. (a) Which of the following sampling plan will you use: random, systematic, judgmental, systematic–judgmental, or stratified? (b) Do you plan to collect and analyze a series of grab samples, or will you form a single composite sample? (c) Will your answers to these questions change if your goal is to determine if the average daily ozone level exceeds a threshold value? If your answer is yes, then what is your new sampling strategy?
- The distinction between a homogeneous population and a heterogeneous population is important when you are developing a sampling plan. (a) Define homogeneous and heterogeneous. (b) If you collect and analyze a single sample, can you determine if the population is homogeneous or heterogeneous?
- The sampling of a heterogeneous population is particularly challenging. Explain why you can minimize the sampling variance for a heterogeneous population by increasing the number of samples, but not by increasing the mass of individual samples.
- Beginning with equation 7.4, derive equation 7.5. Assume that the particles are spherical with a radius of r and a density of d .
- The sampling constant for the radioisotope ^{24}Na in homogenized human liver has been reported as approximately 35 g.²³ (a) What is the expected relative standard deviation for sampling if you analyze 1.0-g samples? (b) How many 1.0-g samples must you analyze to obtain a maximum sampling error of $\pm 5\%$ at the 95% confidence level?

²³ Kratochvil, B.; Taylor, J. K. *Anal. Chem.* **1981**, *53*, 924A–938A.

10. Engels and Ingamells reported the following results for the % w/w K_2O in a mixture of amphibolite and orthoclase.²⁴

0.247	0.300	0.236	0.258	0.304	0.330
0.247	0.275	0.212	0.311	0.258	0.187

Each of the 12 samples had a nominal weight of 0.1 g. Determine the approximate value for K_s and the mass of sample needed to achieve a percent relative standard deviation of 2%.

11. The following data has been reported for the determination of KH_2PO_4 in a mixture of KH_2PO_4 and $NaCl$.²⁵

Nominal Mass (g)	Actual Mass (g)	% w/w KH_2PO_4
0.10	0.1039	0.085
	0.1015	1.078
	0.1012	0.413
	0.1010	1.248
	0.1060	0.654
	0.0997	0.507
0.25	0.2515	0.847
	0.2465	0.598
	0.2770	0.431
	0.2460	0.842
	0.2485	0.964
	0.2590	1.178
0.50	0.5084	1.009
	0.4954	0.947
	0.5286	0.618
	0.5232	0.744
	0.4965	0.572
	0.4995	0.709
1.00	1.027	0.696
	0.987	0.843
	0.991	0.535
	0.998	0.750
	0.997	0.711
	1.001	0.639

²⁴ Engels, J. C.; Ingamells, C. O. *Geochim. Cosmochim. Acta* **1970**, *34*, 1007–1017.

²⁵ Guy, R. D.; Ramaley, L.; Wentzell, P. D. *J. Chem. Educ.* **1998**, *75*, 1028–1033.

Nominal Mass (g)	Actual Mass (g)	% w/w KH_2PO_4
2.50	2.496	0.766
	2.504	0.769
	2.496	0.682
	2.496	0.609
	2.557	0.589
	2.509	0.617

- (a) Prepare a graph of % w/w KH_2PO_4 versus the actual sample mass and discuss how this graph is consistent with your understanding of the factors affecting sampling variance. (b) For each nominal mass, calculate the percent relative standard deviation for the analysis. The value of K_s for this analysis has been estimated as 350. For each nominal mass, use this K_s to determine the percent relative standard deviation due to sampling. Considering these calculations, what is your conclusion about the importance of indeterminate sampling errors for this analysis? (c) For each nominal mass, convert the percent relative standard deviation to an absolute standard deviation. Plot points on your graph corresponding to ± 1 absolute standard deviations about the overall average % w/w KH_2PO_4 . Draw smooth curves through these two sets of points. Considering these curves, does the sample appear to be homogeneous on the scale at which it is sampled?
12. In this problem you will collect and analyze data in a simulation of the sampling process. Obtain a pack of M&M's (or other similar candy). Collect a sample of five candies and count the number that are red (or any other color of your choice). Report the result of your analysis as % red. Return the candies to the bag, mix thoroughly, and repeat the analysis for a total of 20 determinations. Calculate the mean and the standard deviation for your data. Remove all candies from the bag and determine the true % red for the population. Sampling in this exercise should follow binomial statistics. Calculate the expected mean value and the expected standard deviation, and compare to your experimental results.
13. Determine the error ($\alpha = 0.05$) for the following situations. In each case assume that the variance for a single determination is 0.0025 and that the variance for collecting a single sample is 0.050. (a) Nine samples are collected, each analyzed once. (b) One sample is collected and analyzed nine times. (c) Three samples are collected, each analyzed three times.
14. Which of the sampling schemes in problem 13 is best if you wish to limit the overall error to less than ± 0.25 , and the cost of collecting a single sample is 1 (arbitrary units), and the cost of analyzing a single

sample is 10? Which is the best sampling scheme if the cost of collecting a single sample is 7, and the cost of analyzing a single sample is 3?

15. Maw, Witry, and Emond evaluated a microwave digestion method for Hg against the standard open-vessel digestion method.²⁶ The standard method requires a 2-h digestion and is operator-intensive. The microwave digestion is complete in approximately 0.5 h and requires little monitoring by the operator. Samples of baghouse dust from air-pollution-control equipment were collected from a hazardous waste incinerator and digested in triplicate before determining the concentration of Hg in ppm. Results are summarized in the following tables.

ppm Hg Following Microwave Digestion			
Sample	Replicate 1	Replicate 2	Replicate 3
1	7.12	7.66	7.17
2	16.1	15.7	15.6
3	4.89	4.62	4.28
4	9.64	9.03	8.44
5	6.76	7.22	7.50
6	6.19	6.61	7.61
7	9.44	9.56	10.7
8	30.8	29.0	26.2

ppm Hg Following Standard Digestion			
Sample	Replicate 1	Replicate 2	Replicate 3
1	5.50	5.54	5.40
2	13.1	12.8	13.0
3	5.39	5.12	5.36
4	6.59	6.52	7.20
5	6.20	6.03	5.77
6	6.25	5.65	5.61
7	15.0	13.9	14.0
8	20.4	16.1	20.0

Does the microwave digestion method yields acceptable results in comparison to the standard digestion method?

16. Simpson, Apte, and Batley investigated methods for preserving water samples collected from anoxic (O_2 -poor) environments that contain high concentrations of dissolved sulfide.²⁷ They found that preserving water samples with HNO_3 (a common method for preserving aerobic samples) gave significant negative determinate errors when analyzing

²⁶ Maw, R.; Witry, L.; Emond, T. *Spectroscopy* **1994**, *9*, 39–41.

²⁷ Simpson, S. L.; Apte, S. C.; Batley, G. E. *Anal. Chem.* **1998**, *70*, 4202–4205.

for Cu^{2+} . Preserving samples by first adding H_2O_2 and then adding HNO_3 , eliminated the determinate error. Explain their observations.

17. In a particular analysis the selectivity coefficient, $K_{A,I}$, is 0.816. When a standard sample with an analyte-to-interferent ratio of 5:1 is carried through the analysis, the error in determining the analyte is +6.3%. (a) Determine the apparent recovery for the analyte if $R_I = 0$. (b) Determine the apparent recovery for the interferent if $R_A = 0$.
18. The amount of Co in an ore is to be determined using a procedure for which Fe in an interferent. To evaluate the procedure's accuracy, a standard sample of ore known to have a Co/Fe ratio of 10.2:1 is analyzed. When pure samples of Co and Fe are taken through the procedure the following calibration relationships are obtained

$$S_{\text{Co}} = 0.786 \times m_{\text{Co}}$$

$$S_{\text{Fe}} = 0.669 \times m_{\text{Fe}}$$

where S is the signal and m is the mass of Co or Fe. When 278.3 mg of Co are taken through the separation step, 275.9 mg are recovered. Only 3.6 mg of Fe are recovered when a 184.9 mg sample of Fe is carried through the separation step. Calculate (a) the recoveries for Co and Fe; (b) the separation factor; (c) the error if no attempt is made to separate the Co and Fe before the analysis; (d) the error if the separation step is carried out; and (e) the maximum recovery for Fe if the recovery for Co is 1.00, and the maximum allowed error is 0.05%.

19. The amount of calcium in a sample of urine was determined by a method for which magnesium is an interferent. The selectivity coefficient, $K_{\text{Ca,Mg}}$, for the method is 0.843. When a sample with a Mg/Ca ratio of 0.50 was carried through the procedure, an error of -3.7% was obtained. The error was +5.5% when using a sample with a Mg/Ca ratio of 2.0. (a) Determine the recoveries for Ca and Mg. (b) What is the expected error for a urine sample in which the Mg/Ca ratio is 10.0?
20. Using the formation constants in Appendix 12, show that F^- is an effective masking agent for preventing a reaction between Al^{3+} and EDTA. Assume that the only significant forms of fluoride and EDTA are F^- and Y^{4-} .
21. Cyanide is frequently used as a masking agent for metal ions. Its effectiveness as a masking agent is better in more basic solutions. Explain the reason for this pH dependency.

22. Explain how an aqueous sample consisting of Cu^{2+} , Sn^{4+} , Pb^{2+} , and Zn^{2+} can be separated into its component parts by adjusting the pH of the solution.
23. A solute, S, has a distribution ratio between water and ether of 7.5. Calculate the extraction efficiency if you extract a 50.0-mL aqueous sample of S using 50.0 mL of ether as: (a) a single portion of 50.0 mL; (b) two portions, each of 25.0 mL; (c) four portions, each of 12.5 mL; and (d) five portions, each of 10.0 mL. Assume that the solute is not involved in any secondary equilibria.
24. What volume of ether is needed to extract 99.9% of the solute in problem 23 when using: (a) 1 extraction; (b) 2 extractions; (c) four extractions; and (d) five extractions.
25. What is the minimum distribution ratio if 99% of the solute in a 50.0-mL sample is to be extracted with a single 50.0-mL portion of an organic solvent? Repeat for the case where two 25.0-mL portions of the organic solvent are used.
26. A weak acid, HA, with a K_a of 1.0×10^{-5} has a partition coefficient, K_D , of 1.2×10^3 between water and an organic solvent. What restriction on the sample's pH is necessary to ensure that 99.9% of the weak acid in a 50.0-mL sample is extracted with a single 50.0-mL portion of the organic solvent?
27. For problem 26, how many extractions are needed if the sample's pH cannot be decreased below 7.0?
28. A weak base, B, with a K_b of 1.0×10^{-3} has a partition coefficient, K_D , of 5.0×10^2 between water and an organic solvent. What restriction on the sample's pH is necessary to ensure that 99.9% of the weak base is in a 50.0-mL sample is extracted with two 25.0-mL portions of the organic solvent?
29. A sample contains a weak acid analyte, HA, and a weak acid interferent, HB. The acid dissociation constants and the partition coefficients for the weak acids are as follows: $K_{a,HA} = 1.0 \times 10^{-3}$, $K_{a,HB} = 1.0 \times 10^{-7}$, $K_{D,HA} = K_{D,HB} = 5.0 \times 10^2$. (a) Calculate the extraction efficiency for HA and HB when a 50.0-mL sample, buffered to a pH of 7.0, is extracted with 50.0 mL of the organic solvent. (b) Which phase is enriched in the analyte? (c) What are the recoveries for the analyte and the interferent in this phase? (d) What is the separation factor? (e) A quantitative analysis is conducted on the phase enriched in analyte. What is the expected relative error if the selectivity coefficient, $K_{HA,HB}$, is 0.500 and the initial ratio of HB/HA is 10.0?

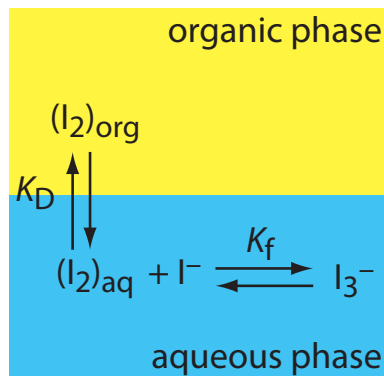


Figure 7.32 Extraction scheme for Problem 7.30.

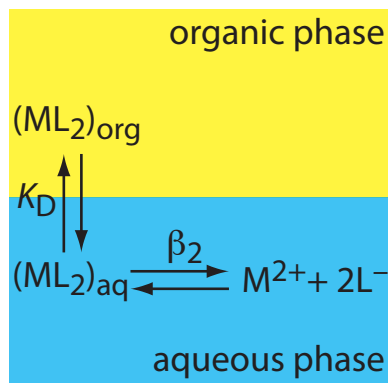


Figure 7.33 Extraction scheme for Problem 7.31.

30. The relevant equilibria for the extraction of I_2 from an aqueous solution of KI into an organic phase are shown in Figure 7.32. (a) Is the extraction efficiency for I_2 better at higher or at lower concentrations of I^- ? (b) Derive an expression for the distribution ratio for this extraction.
31. The relevant equilibria for extracting the metal-ligand complex ML_2 from an aqueous solution into an organic phase are shown in Figure 7.31. (a) Derive an expression for the distribution ratio for this extraction. (b) Calculate the extraction efficiency when a 50.0-mL aqueous sample that is 0.15 mM in M^{2+} and 0.12 M in L^- is extracted with 25.0 mL of the organic phase. Assume that K_D is 10.3 and that β_2 is 560.
32. Derive equation 7.32.
33. The following information is available for the extraction of Cu^{2+} by CCl_4 and dithizone: $K_{D,c} = 7 \times 10^4$; $\beta_2 = 5 \times 10^{22}$; $K_{a,HL} = 2 \times 10^{-5}$; $K_{D,HL} = 1.01 \times 10^4$; and $n = 2$. What is the extraction efficiency if a 100-mL sample of an aqueous solution that is 1.0×10^{-7} M Cu^{2+} and 1 M in HCl is extracted with 10 mL of CCl_4 containing 4.0×10^{-4} M dithizone (HL)?
34. Cupferron is a ligand whose strong affinity for metal ions makes it useful as a chelating agent in liquid-liquid extractions. The following table provides pH-dependent distribution ratios for the extraction of Hg^{2+} , Pb^{2+} , and Zn^{2+} from an aqueous solution to an organic solvent.

pH	Distribution Ratio for		
	Hg^{2+}	Pb^{2+}	Zn^{2+}
1	3.3	0.0	0.0
2	10.0	0.43	0.0
3	32.3	999	0.0
4	32.3	9999	0.0
5	19.0	9999	0.18
6	4.0	9999	0.33
7	1.0	9999	0.82
8	0.54	9999	1.50
9	0.15	9999	2.57
10	0.05	9999	2.57

- (a) Suppose you have a 50.0-mL sample of an aqueous solution containing Hg^{2+} , Pb^{2+} , and Zn^{2+} . Describe how you can effect a separation of these metal ions. (b) Under the conditions of your extraction for Hg^{2+} , what percent of the Hg^{2+} remains in the aqueous phase after three 50.0-mL extractions with the organic solvent? (c) Under the conditions of your extraction for Pb^{2+} , what is the minimum volume of

organic solvent needed to extract 99.5% of the Pb^{2+} in a single extraction? (d) Under the conditions of your extraction for Zn^{2+} , how many extractions are needed to remove 99.5% of the Zn^{2+} if each extraction uses 25.0 mL of organic solvent?

7L Solutions to Practice Exercises

Practice Exercise 7.1

To reduce the overall variance by improving the method's standard deviation requires that

$$s^2 = 5.00 \text{ ppm}^2 = s_{\text{samp}}^2 + s_{\text{meth}}^2 = (2.1 \text{ ppm})^2 + s_{\text{meth}}^2$$

Solving for s_{meth} gives its value as 0.768 ppm. Relative to its original value of 1.1 ppm, this is reduction of $3.0 \times 10^1\%$. To reduce the overall variance by improving the standard deviation for sampling requires that

$$s^2 = 5.00 \text{ ppm}^2 = s_{\text{samp}}^2 + s_{\text{meth}}^2 = s_{\text{samp}}^2 + (1.1 \text{ ppm})^2$$

Solving for s_{samp} gives its value as 1.95 ppm. Relative to its original value of 2.1 ppm, this is reduction of 7.1%.

Click [here](#) to return to the chapter.

Practice Exercise 7.2

The analytical method's standard deviation is $1.96 \times 10^{-3} \text{ g/cm}^3$ as this is the standard deviation for the analysis of a single sample of the polymer. The sampling variance is

$$s_{\text{samp}}^2 = s^2 - s_{\text{meth}}^2 = (3.65 \times 10^{-2})^2 - (1.96 \times 10^{-3})^2 = 1.33 \times 10^{-3}$$

Converting the variance to a standard deviation gives s_{meth} as $3.64 \times 10^{-2} \text{ g/cm}^3$.

Click [here](#) to return to the chapter.

Practice Exercise 7.3

To determine the sampling constant, K_s , we need to know the average mass of the samples and the percent relative standard deviation for the concentration of olaquinox in the feed. The average mass for the five samples is 0.95792 g. The average concentration of olaquinox in the samples is 23.14 mg/kg with a standard deviation of 2.200 mg/kg. The percent relative standard deviation, R , is

$$R = \frac{s_{\text{samp}}}{\bar{X}} \times 100 = \frac{2.200 \text{ mg/kg}}{23.14 \text{ mg/kg}} \times 100 = 9.507 \approx 9.51$$

Solving for K_s gives its value as

$$K_s = mR^2 = (0.95792 \text{ g})(9.507)^2 = 86.58 \text{ g} \approx 86.6 \text{ g}$$

To obtain a percent relative standard deviation of 5.0%, individual samples need to have a mass of at least

$$m = \frac{K_s}{R^2} = \frac{86.58 \text{ g}}{(5.0)^2} = 3.5 \text{ g}$$

To reduce the sample's mass from 3.5 g to 1 g, we must change the mass by a factor of

$$\frac{3.5 \text{ g}}{1 \text{ g}} = 3.5 \times$$

If we assume that the sample's particles are spherical, then we must reduce a particle's radius by a factor of

$$r^3 = 3.5 \times$$

$$r = 1.5 \times$$

Click [here](#) to return to the chapter.

Practice Exercise 7.4

Because the value of t depends on the number of samples—a result we have yet to calculate—we begin by letting $n_{\text{samp}} = \infty$ and using $t(0.05, \infty)$ for the value of t . From [Appendix 4](#), the value for $t(0.05, \infty)$ is 1.960. Our first estimate for n_{samp} is

$$n_{\text{samp}} = \frac{t^2 s_{\text{samp}}^2}{e^2} = \frac{(1.960)^2 (5.0)^2}{(2.5)^2} = 15.4 \approx 15$$

Letting $n_{\text{samp}} = 15$, the value of $t(0.05, 14)$ from [Appendix 4](#) is 2.145. Recalculating n_{samp} gives

$$n_{\text{samp}} = \frac{t^2 s_{\text{samp}}^2}{e^2} = \frac{(2.145)^2 (5.0)^2}{(2.5)^2} = 18.4 \approx 18$$

Letting $n_{\text{samp}} = 18$, the value of $t(0.05, 17)$ from [Appendix 4](#) is 2.103. Recalculating n_{samp} gives

$$n_{\text{samp}} = \frac{t^2 s_{\text{samp}}^2}{e^2} = \frac{(2.103)^2 (5.0)^2}{(2.5)^2} = 17.7 \approx 18$$

Because two successive calculations give the same value for n_{samp} , we need 18 samples to achieve a sampling error of $\pm 2.5\%$ at the 95% confidence interval.

Click [here](#) to return to the chapter.

Practice Exercise 7.5

If we collect a single sample (cost \$20), then we can analyze that sample 13 times (cost \$650) and stay within our budget. For this scenario, the percent relative error is

$$e = t \sqrt{\frac{s_{\text{samp}}^2}{n_{\text{samp}}} + \frac{s_{\text{meth}}^2}{n_{\text{samp}} n_{\text{rep}}}} = 2.179 \sqrt{\frac{0.10}{1} + \frac{0.20}{1 \times 13}} = 0.74$$

where $t(0.05, 12)$ is 2.179. Because this percent relative error is larger than $\pm 0.50\%$, this is not a suitable sampling strategy.

Next, we try two samples (cost \$40), analyzing each six times (cost \$600). For this scenario, the percent relative error is

$$e = t \sqrt{\frac{s_{\text{samp}}^2}{n_{\text{samp}}} + \frac{s_{\text{meth}}^2}{n_{\text{samp}} n_{\text{rep}}}} = 2.2035 \sqrt{\frac{0.10}{2} + \frac{0.20}{2 \times 6}} = 0.57$$

where $t(0.05, 11)$ is 2.2035. Because this percent relative error is larger than $\pm 0.50\%$, this also is not a suitable sampling strategy.

Next we try three samples (cost \$60), analyzing each four times (cost \$600). For this scenario, the percent relative error is

$$e = t \sqrt{\frac{s_{\text{samp}}^2}{n_{\text{samp}}} + \frac{s_{\text{meth}}^2}{n_{\text{samp}} n_{\text{rep}}}} = 2.2035 \sqrt{\frac{0.10}{3} + \frac{0.20}{3 \times 4}} = 0.49$$

where $t(0.05, 11)$ is 2.2035. Because both the total cost (\$660) and the percent relative error meet our requirements, this is a suitable sampling strategy.

There are other suitable sampling strategies that meet both goals. The strategy requiring the least expense is to collect eight samples, analyzing each once for a total cost of \$560 and a percent relative error of $\pm 0.46\%$. Collecting 10 samples and analyzing each one time, gives a percent relative error of $\pm 0.39\%$ at a cost of \$700.

Click [here](#) to return to the chapter.

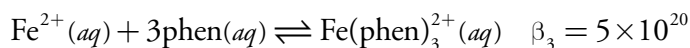
Practice Exercise 7.6

The fluoride ion, F^- , is a suitable masking agent as it binds with Al^{3+} to form the stable AlF_6^{3-} complex, leaving iron in solution.

Click [here](#) to return to the chapter.

Practice Exercise 7.7

The relevant reactions and equilibrium constants are



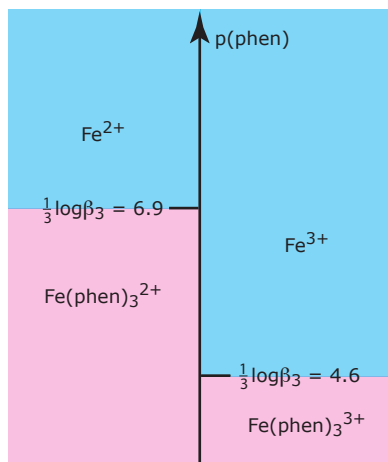
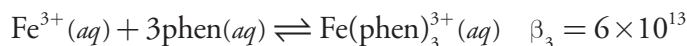


Figure 7.34 Ladder diagram for Practice Exercise 7.7.



where phen is an abbreviation for 1,10-phenanthroline. Because β_3 is larger for the complex with Fe^{2+} than it is for the complex with Fe^{3+} , 1,10-phenanthroline will bind Fe^{2+} before it binds Fe^{3+} . A ladder diagram for this system (Figure 6.34) suggests that an equilibrium $p(\text{phen})$ between 5.6 and 5.9 will fully complex Fe^{2+} without any significant formation of the $\text{Fe}(\text{phen})_3^{3+}$ complex. Adding a stoichiometrically equivalent amount of 1,10-phenanthroline to a solution of Fe^{2+} will be sufficient to mask Fe^{2+} in the presence of Fe^{3+} . Adding a large excess of 1,10-phenanthroline, however, will decrease $p(\text{phen})$ and allow the formation of both metal–ligand complexes.

Click [here](#) to return to the chapter.

Practice Exercise 7.8

(a) The solute's distribution ratio between water and toluene is

$$D = \frac{[S_{\text{org}}]}{[S_{\text{aq}}]} = \frac{0.889 \text{ g} \times \frac{1 \text{ mol}}{117.3 \text{ g}} \times \frac{1}{0.00500 \text{ L}}}{(1.235 \text{ g} - 0.889 \text{ g}) \times \frac{1 \text{ mol}}{117.3 \text{ g}} \times \frac{1}{0.01000 \text{ L}}} = 5.14$$

(b) The fraction of solute remaining in the aqueous phase after one extraction is

$$(q_{\text{aq}})_1 = \frac{V_{\text{aq}}}{DV_{\text{org}} + V_{\text{aq}}} = \frac{20.00 \text{ mL}}{(5.14)(10.00 \text{ mL}) + 20.00 \text{ mL}} = 0.280$$

The extraction efficiency, therefore, is 72.0%.

(c) To extract 99.9% of the solute requires

$$(Q_{\text{aq}})_n = 0.001 = \frac{20.00 \text{ mL}}{(5.14)(10.00 \text{ mL}) + 20.00 \text{ mL}}^n = 0.280^n$$

$$\log(0.001) = n \log(0.280)$$

$$n = 5.4$$

a minimum of six extractions.

Click [here](#) to return to the chapter.

Practice Exercise 7.9

Because the weak base exists in two forms, only one of which extracts into the organic phase, the partition coefficient, K_D , and the distribution ratio, D , are not identical.

$$K_D = \frac{[\text{B}_{\text{org}}]}{[\text{B}_{\text{aq}}]}$$

$$D = \frac{[\text{B}_{\text{org}}]_{\text{total}}}{[\text{B}_{\text{aq}}]_{\text{total}}} = \frac{[\text{B}_{\text{org}}]}{[\text{B}_{\text{aq}}] + [\text{HB}_{\text{aq}}^+]}$$

Using the K_b expression for the weak base

$$K_b = \frac{[\text{OH}_{\text{aq}}^-][\text{HB}_{\text{aq}}^+]}{[\text{B}_{\text{aq}}]}$$

we solve for the concentration of HB^+ and substitute back into the equation for D , obtaining

$$D = \frac{[\text{B}_{\text{org}}]}{[\text{B}_{\text{aq}}] + \frac{K_b \times [\text{B}_{\text{aq}}]}{[\text{OH}_{\text{aq}}^-]}} = \frac{[\text{B}_{\text{org}}]}{[\text{B}_{\text{aq}}] \left(1 + \frac{K_b}{[\text{OH}_{\text{aq}}^-]}\right)} = \frac{K_D [\text{OH}_{\text{aq}}^-]}{[\text{OH}_{\text{aq}}^-] + K_b}$$

At a pH of 9.0, the $[\text{OH}^-]$ is 1×10^{-5} M and the distribution ratio has a value of

$$D = \frac{K_D [\text{OH}_{\text{aq}}^-]}{[\text{OH}_{\text{aq}}^-] + K_b} = \frac{(5.00)(1.0 \times 10^{-5})}{1.0 \times 10^{-5} + 1.0 \times 10^{-4}} = 0.455$$

After one extraction, the fraction of B remaining in the aqueous phase is

$$(q_{\text{aq}})_1 = \frac{25.00 \text{ mL}}{(0.455)(50.00 \text{ mL}) + 25.00 \text{ mL}} = 0.524$$

The extraction efficiency, therefore, is 47.6%. At a pH of 9, most of the weak base is present as HB^+ , which explains why the overall extraction efficiency is so poor.

Click [here](#) to return to the chapter.

Chapter 8

Gravimetric Methods

Chapter Overview

- 8A Overview of Gravimetric Methods
- 8B Precipitation Gravimetry
- 8C Volatilization Gravimetry
- 8D Particulate Gravimetry
- 8E Key Terms
- 8F Chapter Summary
- 8G Problems
- 8H Solutions to Practice Exercises

Gravimetry includes all analytical methods in which the analytical signal is a measurement of mass or a change in mass. When you step on a scale after exercising you are making, in a sense, a gravimetric determination of your mass. Mass is the most fundamental of all analytical measurements, and gravimetry is unquestionably our oldest quantitative analytical technique. The publication in 1540 of Vannoccio Biringuccio's *Pirotechnia* is an early example of applying gravimetry—although not yet known by this name—to the analysis of metals and ores.¹ Although gravimetry no longer is the most important analytical method, it continues to find use in specialized applications.

¹ Smith, C. S.; Gnodi, M. T. translation of Biringuccio, V. *Pirotechnia*, MIT Press: Cambridge, MA, 1959.

8A Overview of Gravimetric Methods

Before we consider specific gravimetric methods, let's take a moment to develop a broad survey of **GRAVIMETRY**. Later, as you read through the descriptions of specific gravimetric methods, this survey will help you focus on their similarities instead of their differences. You will find that it is easier to understand a new analytical method when you can see its relationship to other similar methods.

8A.1 Using Mass as an Analytical Signal

Suppose you are to determine the total suspended solids in the water released by a sewage-treatment facility. Suspended solids are just that—solid matter that has yet to settle out of its solution matrix. The analysis is easy. After collecting a sample, you pass it through a preweighed filter that retains the suspended solids, and dry the filter and solids to remove any residual moisture. The mass of suspended solids is the difference between the filter's final mass and its original mass. We call this a **DIRECT ANALYSIS** because the analyte—the suspended solids in this example—is the species that is weighed.

What if our analyte is an aqueous ion, such as Pb^{2+} ? Because the analyte is not a solid, we cannot isolate it by filtration. We can still measure the analyte's mass directly if we first convert it into a solid form. If we suspend a pair of Pt electrodes in the sample and apply a sufficiently positive potential between them for a long enough time, we can force the following reaction to completion.



Oxidizing Pb^{2+} deposits PbO_2 on the Pt anode. If we weigh the anode before and after applying the potential, the change in its mass gives the mass of PbO_2 and, from the reaction's stoichiometry, the amount of Pb^{2+} in the sample. This is a direct analysis because PbO_2 contains the analyte.

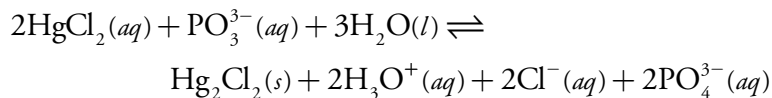
Sometimes it is easier to remove the analyte and let a change in mass serve as the analytical signal. Suppose you need to determine a food's moisture content. One approach is to heat a sample of the food to a temperature that vaporizes the water, capturing it in a preweighed absorbent trap. The change in the absorbent's mass provides a direct determination of the amount of water in the sample. An easier approach is to weigh the sample of food before and after heating, using the change in its mass as an indication of the amount of water originally present. We call this an **INDIRECT ANALYSIS** because we determine the analyte using a signal that is proportional its disappearance.

The indirect determination of a sample's moisture content is done by difference. The sample's initial mass includes the water, but its final mass does not. We can also determine an analyte indirectly without its ever being

Method 2540D in *Standard Methods for the Examination of Waters and Wastewaters*, 20th Edition (American Public Health Association, 1998) provides an approved method for determining total suspended solids. The method uses a glass-fiber filter to retain the suspended solids. After filtering the sample, the filter is dried to a constant weight at 103–105°C.

Method 925.10 in *Official Methods of Analysis*, 18th Edition (AOAC International, 2007) provides an approved method for determining the moisture content of flour. A preweighed sample is heated for one hour in a 130°C oven and transferred to a desiccator while it cools to room temperature. The loss in mass gives the amount of water in the sample.

weighed. For example, phosphite, PO_3^{3-} , reduces Hg^{2+} to Hg_2^{2+} , which in the presence of Cl^- precipitates as Hg_2Cl_2 .



If we add HgCl_2 in excess, each mole of PO_3^{3-} produces one mole of Hg_2Cl_2 . The precipitate's mass, therefore, provides an indirect measurement of the amount of PO_3^{3-} in the original sample.

8A.2 Types of Gravimetric Methods

The four examples in the previous section illustrate different ways in which the measurement of mass may serve as an analytical signal. When the signal is the mass of a precipitate, we call the method **PRECIPITATION GRAVIMETRY**. The indirect determination of PO_3^{3-} by precipitating Hg_2Cl_2 is an example, as is the direct determination of Cl^- by precipitating AgCl .

In **ELECTROGRAVIMETRY**, we deposit the analyte as a solid film on an electrode in an electrochemical cell. The deposition as PbO_2 at a Pt anode is one example of electrogravimetry. The reduction of Cu^{2+} to Cu at a Pt cathode is another example of electrogravimetry.

When we use thermal or chemical energy to remove a volatile species, we call the method **VOLATILIZATION GRAVIMETRY**. In determining the moisture content of bread, for example, we use thermal energy to vaporize the water in the sample. To determine the amount of carbon in an organic compound, we use the chemical energy of combustion to convert it to CO_2 .

Finally, in **PARTICULATE GRAVIMETRY** we determine the analyte by separating it from the sample's matrix using a filtration or an extraction. The determination of total suspended solids is one example of particulate gravimetry.

8A.3 Conservation of Mass

An accurate gravimetric analysis requires that the analytical signal—whether it is a mass or a change in mass—be proportional to the amount of analyte in our sample. For all gravimetric methods this proportionality involves a **CONSERVATION OF MASS**. If the method relies on one or more chemical reactions, then the stoichiometry of the reactions must be known. Thus, for the analysis of PO_3^{3-} described earlier, we know that each mole of Hg_2Cl_2 corresponds to a mole of PO_3^{3-} in our sample. If we remove the analyte from its matrix, then the separation must be selective for the analyte. When determining the moisture content in bread, for example, we know that the mass of H_2O in the bread is the difference between the sample's final mass and its initial mass.

We will not consider electrogravimetry in this chapter. See [Chapter 11](#) on electrochemical methods of analysis for a further discussion of electrogravimetry.

We will return to this concept of applying a conservation of mass later in the chapter when we consider specific examples of gravimetric methods.

Other examples of definitive techniques are coulometry and isotope-dilution mass spectrometry. Coulometry is discussed in [Chapter 11](#). Isotope-dilution mass spectrometry is beyond the scope of an introductory textbook; however, you will find some suggested readings in this chapter's Additional Resources.

Most precipitation gravimetric methods were developed in the nineteenth century, or earlier, often for the analysis of ores. [Figure 1.1 in Chapter 1](#), for example, illustrates a precipitation gravimetric method for the analysis of nickel in ores.

A total analysis technique is one in which the analytical signal—mass in this case—is proportional to the absolute amount of analyte in the sample. See [Chapter 3](#) for a discussion of the difference between total analysis techniques and concentration techniques.

8A.4 Why Gravimetry is Important

Except for particulate gravimetry, which is the most trivial form of gravimetry, you probably will not use gravimetry after you complete this course. Why, then, is familiarity with gravimetry still important? The answer is that gravimetry is one of only a small number of **DEFINITIVE TECHNIQUES** whose measurements require only base SI units, such as mass or the mole, and defined constants, such as Avogadro's number and the mass of ^{12}C . Ultimately, we must be able to trace the result of an analysis to a definitive technique, such as gravimetry, that we can relate to fundamental physical properties.² Although most analysts never use gravimetry to validate their results, they often verifying an analytical method by analyzing a standard reference material whose composition is traceable to a definitive technique.³

8B Precipitation Gravimetry

In precipitation gravimetry an insoluble compound forms when we add a precipitating reagent, or **PRECIPITANT**, to a solution containing our analyte. In most methods the precipitate is the product of a simple metathesis reaction between the analyte and the precipitant; however, any reaction generating a precipitate can potentially serve as a gravimetric method.

8B.1 Theory and Practice

All precipitation gravimetric analysis share two important attributes. First, the precipitate must be of low solubility, of high purity, and of known composition if its mass is to accurately reflect the analyte's mass. Second, the precipitate must be easy to separate from the reaction mixture.

SOLUBILITY CONSIDERATIONS

To provide accurate results, a precipitate's solubility must be minimal. The accuracy of a total analysis technique typically is better than $\pm 0.1\%$, which means that the precipitate must account for at least 99.9% of the analyte. Extending this requirement to 99.99% ensures that the precipitate's solubility does not limit the accuracy of a gravimetric analysis.

We can minimize solubility losses by carefully controlling the conditions under which the precipitate forms. This, in turn, requires that we account for every equilibrium reaction affecting the precipitate's solubility. For example, we can determine Ag^+ gravimetrically by adding NaCl as a precipitant, forming a precipitate of AgCl .



If this is the only reaction we consider, then we predict that the precipitate's solubility, S_{AgCl} , is given by the following equation.

² Valacárcel, M.; Ríos, A. *Analyst* **1995**, *120*, 2291–2297.

³ (a) Moody, J. R.; Epstein, M. S. *Spectrochim. Acta* **1991**, *46B*, 1571–1575; (b) Epstein, M. S. *Spectrochim. Acta* **1991**, *46B*, 1583–1591.

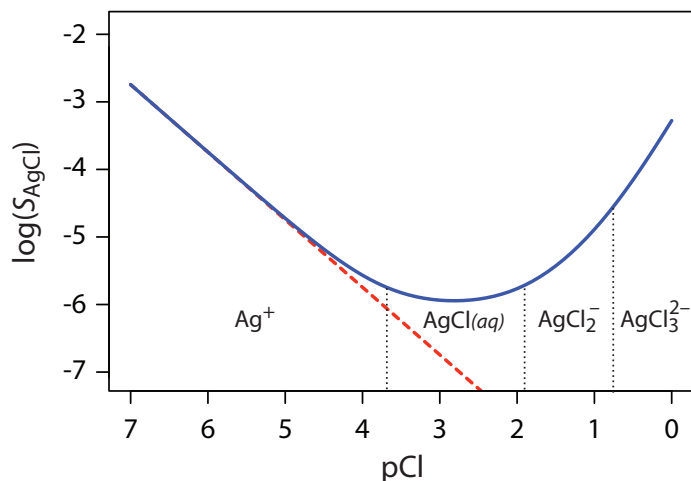
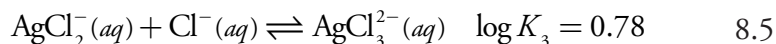
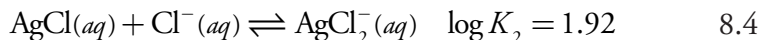
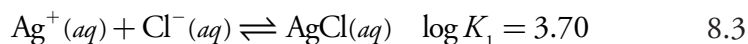


Figure 8.1 Solubility of AgCl as a function of pCl. The dashed red line shows our prediction for S_{AgCl} if we incorrectly assume that only [reaction 8.1](#) and equation 8.2 affect silver chloride's solubility. The solid blue curve is calculated using equation 8.7, which accounts for [reaction 8.1](#) and reactions 8.3–8.5. Because the solubility of AgCl spans several orders of magnitude, S_{AgCl} is displayed on the y -axis in logarithmic form.

$$S_{\text{AgCl}} = [\text{Ag}^+] = \frac{K_{\text{sp}}}{[\text{Cl}^-]} \quad 8.2$$

Equation 8.2 suggests that we can minimize solubility losses by adding a large excess of Cl^- . In fact, as shown in Figure 8.1, adding a large excess of Cl^- increases the precipitate's solubility.

To understand why the solubility of AgCl is more complicated than the relationship suggested by equation 8.2, we must recognize that Ag^+ also forms a series of soluble silver-chloro metal–ligand complexes.



The actual solubility of AgCl is the sum of the equilibrium concentrations for all soluble forms of Ag^+ , as shown by the following equation.

$$S_{\text{AgCl}} = [\text{Ag}^+] + [\text{AgCl}(aq)] + [\text{AgCl}_2^-] + [\text{AgCl}_3^{2-}] \quad 8.6$$

By substituting into equation 8.6 the equilibrium constant expressions for [reaction 8.1](#) and reactions 8.3–8.5, we can define the solubility of AgCl as

$$S_{\text{AgCl}} = \frac{K_{\text{sp}}}{[\text{Cl}^-]} + K_1 K_{\text{sp}} + K_1 K_2 K_{\text{sp}} [\text{Cl}^-] + K_1 K_2 K_3 K_{\text{sp}} [\text{Cl}^-]^2 \quad 8.7$$

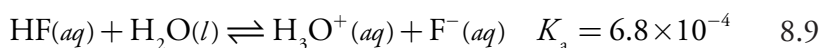
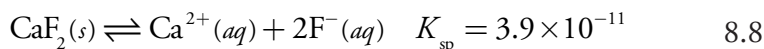
Equation 8.7 explains the solubility curve for AgCl shown in Figure 8.1. As we add NaCl to a solution of Ag^+ , the solubility of AgCl initially decreases

[Problem 1](#) in the end-of-chapter problems asks you to show that equation 8.7 is correct by completing the derivation.

The predominate silver-chloro complexes for different values of pCl are shown by the ladder diagram along the x -axis in [Figure 8.1](#). Note that the increase in solubility begins when the higher-order soluble complexes, AgCl_2^- and AgCl_3^{2-} , become the predominate species.

es because of [reaction 8.1](#). Under these conditions, the final three terms in [equation 8.7](#) are small and [equation 8.1](#) is sufficient to describe AgCl 's solubility. At higher concentrations of Cl^- , [reaction 8.4](#) and [reaction 8.5](#) increase the solubility of AgCl . Clearly the equilibrium concentration of chloride is important if we want to determine the concentration of silver by precipitating AgCl . In particular, we must avoid a large excess of chloride.

Another important parameter that may affect a precipitate's solubility is pH. For example, a hydroxide precipitates such as $\text{Fe}(\text{OH})_3$ is more soluble at lower pH levels where the concentration of OH^- is small. Because fluoride is a weak base, the solubility of calcium fluoride, S_{CaF_2} , also is pH-dependent. We can derive an equation for S_{CaF_2} by considering the following equilibrium reactions



and the following equation for the solubility of CaF_2 .

$$S_{\text{CaF}_2} = [\text{Ca}^{2+}] = \frac{1}{2} \{[\text{F}^-] + [\text{HF}]\} \quad 8.10$$

Substituting the equilibrium constant expressions for [reaction 8.8](#) and [reaction 8.9](#) into [equation 8.10](#) defines the solubility of CaF_2 in terms of the equilibrium concentration of H_3O^+ .

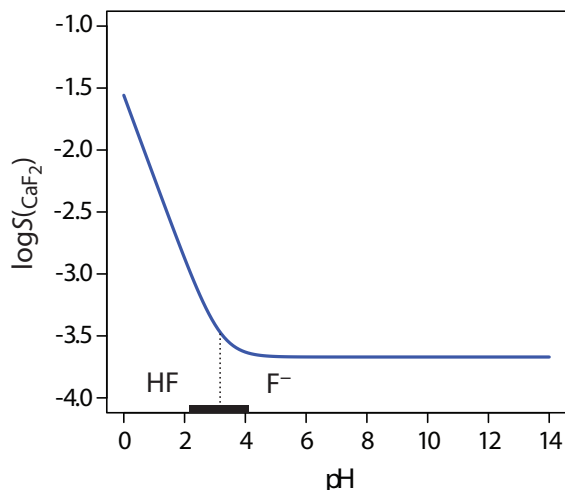
$$S_{\text{CaF}_2} = [\text{Ca}^{2+}] = \left\{ \frac{K_{\text{sp}}}{4} \left(1 + \frac{[\text{H}_3\text{O}^+]}{K_{\text{a}}} \right)^2 \right\}^{1/3} \quad 8.11$$

[Figure 8.2](#) shows how pH affects the solubility of CaF_2 . Depending on the solution's pH, the predominate form of fluoride is either HF or F^- . When the pH is greater than 4.17, the predominate species is F^- and the solubility of CaF_2 is independent of pH because only [reaction 8.8](#) occurs to an ap-

Be sure that [equation 8.10](#) makes sense to you. [Reaction 8.8](#) tells us that the dissolution of CaF_2 produces one mole of Ca^{2+} for every two moles of F^- , which explains the term of 1/2 in [equation 8.10](#). Because F^- is a weak base, we need to account for both of its chemical forms in solution, which explains why we include HF.

[Problem 4](#) in the end-of-chapter problems asks you to show that [equation 8.11](#) is correct by completing the derivation.

Figure 8.2 Solubility of CaF_2 as a function of pH. The solid blue curve is a plot of [equation 8.11](#). The predominate form of fluoride in solution is shown by the ladder diagram along the x -axis, with the black rectangle showing the region where both HF and F^- are important species. Note that the solubility of CaF_2 is independent of pH for pH levels greater than 4.17, and that its solubility increases dramatically at lower pH levels where HF is the predominate species. Because the solubility of CaF_2 spans several orders of magnitude, its solubility is shown in logarithmic form.



precipable extent. At more acidic pH levels, the solubility of CaF_2 increases because of the contribution of [reaction 8.9](#).

When solubility is a concern, it may be possible to decrease solubility by using a non-aqueous solvent. A precipitate's solubility is generally greater in an aqueous solution because of water's ability to stabilize ions through solvation. The poorer solvating ability of non-aqueous solvents, even those which are polar, leads to a smaller solubility product. For example, the K_{sp} of PbSO_4 is 2×10^{-8} in H_2O and 2.6×10^{-12} in a 50:50 mixture of H_2O and ethanol.

AVOIDING IMPURITIES

In addition to having a low solubility, the precipitate must be free from impurities. Because precipitation usually occurs in a solution that is rich in dissolved solids, the initial precipitate is often impure. We must remove these impurities before determining the precipitate's mass.

The greatest source of impurities is the result of chemical and physical interactions occurring at the precipitate's surface. A precipitate is generally crystalline—even if only on a microscopic scale—with a well-defined lattice of cations and anions. Those cations and anions at the precipitate's surface carry, respectively, a positive or a negative charge because they have incomplete coordination spheres. In a precipitate of AgCl , for example, each silver ion in the precipitate's interior is bound to six chloride ions. A silver ion at the surface, however, is bound to no more than five chloride ions and carries a partial positive charge (Figure 8.3). The presence of these partial charges makes the precipitate's surface an active site for the chemical and physical interactions that produce impurities.

One common impurity is an **INCLUSION**. A potential interfering ion whose size and charge is similar to a lattice ion, may substitute into the

Practice Exercise 8.1

You can use a ladder diagram to predict the conditions for minimizing a precipitate's solubility. Draw a ladder diagram for oxalic acid, $\text{H}_2\text{C}_2\text{O}_4$, and use it to establish a suitable range of pH values for minimizing the solubility of CaC_2O_4 . Relevant equilibrium constants may be found in the [appendices](#).

Click [here](#) to review your answer to this exercise.

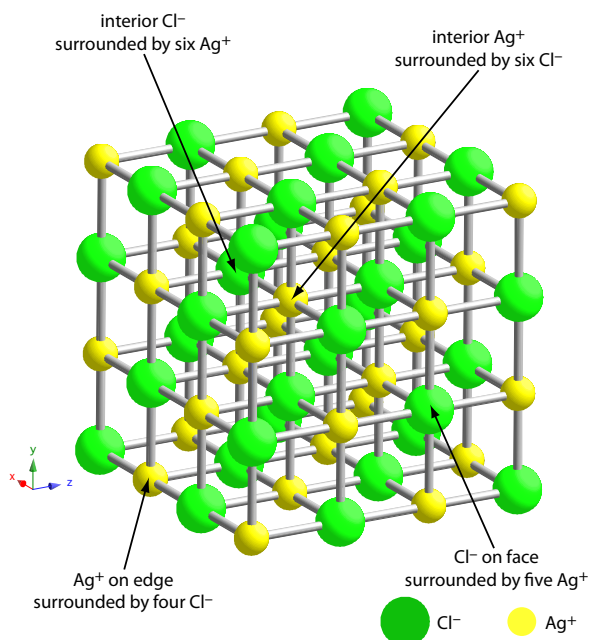


Figure 8.3 Ball-and-stick diagram showing the lattice structure of AgCl . Each silver ion in the lattice's interior binds with six chloride ions, and each chloride ion in the interior binds with six silver ions. Those ions on the lattice's surface or edges bind to fewer than six ions and carry a partial charge. A silver ion on the surface, for example, carries a partial positive charge. These charges make the surface of a precipitate an active site for chemical and physical interactions.

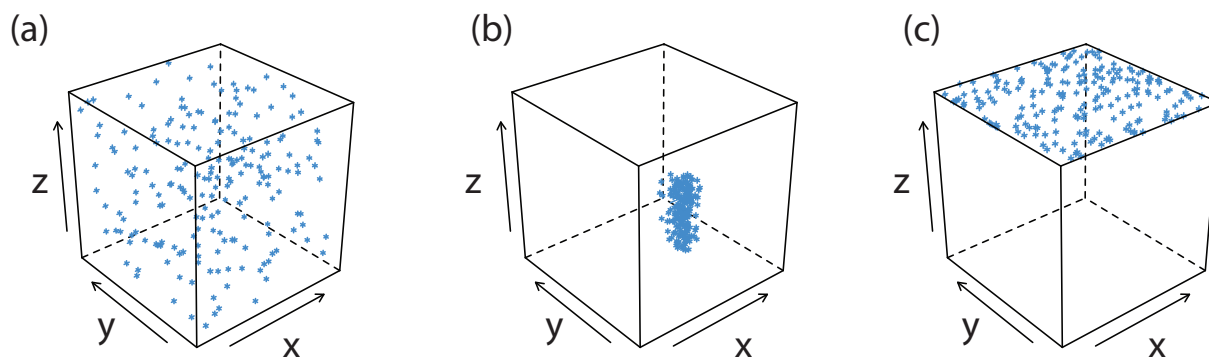


Figure 8.4 Three examples of impurities that may form during precipitation. The cubic frame represents the precipitate and the blue marks are impurities: (a) inclusions, (b) occlusions, and (c) surface adsorbates. Inclusions are randomly distributed throughout the precipitate. Occlusions are localized within the interior of the precipitate and surface adsorbates are localized on the precipitate's exterior. For ease of viewing, in (c) adsorption is shown on only one surface.

lattice structure, provided that the interferent precipitates with the same crystal structure (Figure 8.4a). The probability of forming an inclusion is greatest when the concentration of the interfering ion is substantially greater than the lattice ion's concentration. An inclusion does not decrease the amount of analyte that precipitates, provided that the precipitant is present in sufficient excess. Thus, the precipitate's mass is always larger than expected.

An inclusion is difficult to remove since it is chemically part of the precipitate's lattice. The only way to remove an inclusion is through **REPRECIPITATION**. After isolating the precipitate from its supernatant solution, we dissolve it by heating in a small portion of a suitable solvent. We then allow the solution to cool, reforming the precipitate. Because the interferent's concentration is less than that in the original solution, the amount of included material is smaller. We can repeat the process of reprecipitation until the inclusion's mass is insignificant. The loss of analyte during reprecipitation, however, can be a significant source of error.

OCLUSIONS form when interfering ions become trapped within the growing precipitate. Unlike inclusions, which are randomly dispersed within the precipitate, an occlusion is localized, either along flaws within the precipitate's lattice structure or within aggregates of individual precipitate particles (Figure 8.4b). An occlusion usually increases a precipitate's mass; however, the mass is smaller if the occlusion includes the analyte in a lower molecular weight form than that of the precipitate.

We can minimize occlusions by maintaining the precipitate in equilibrium with its supernatant solution for an extended time. This process is called a **DIGESTION**. During digestion, the dynamic nature of the solubility–precipitation equilibrium, in which the precipitate dissolves and reforms, ensures that the occlusion is reexposed to the supernatant solution. Because

Suppose that 10% of an interferent forms an inclusion during each precipitation. When we initially form the precipitate, 10% of the original interferent is present as an inclusion. After the first reprecipitation, 10% of the included interferent remains, which is 1% of the original interferent. A second reprecipitation decreases the interferent to 0.1% of the original amount.

the rates of dissolution and reprecipitation are slow, there is less opportunity for forming new occlusions.

After precipitation is complete the surface continues to attract ions from solution ([Figure 8.4c](#)). These **SURFACE ADSORBATES** comprise a third type of impurity. We can minimize surface adsorption by decreasing the precipitate's available surface area. One benefit of digesting a precipitate is that it increases the average particle size. Because the probability of a particle completely dissolving is inversely proportional to its size, during digestion larger particles increase in size at the expense of smaller particles. One consequence of forming a smaller number of larger particles is an overall decrease in the precipitate's surface area. We also can remove surface adsorbates by washing the precipitate, although the potential loss of analyte can not be ignored.

Inclusions, occlusions, and surface adsorbates are examples of **COPRECIPITATES**—otherwise soluble species that form within the precipitate containing the analyte. Another type of impurity is an interferent that forms an independent precipitate under the conditions of the analysis. For example, the precipitation of nickel dimethylglyoxime requires a slightly basic pH. Under these conditions, any Fe^{3+} in the sample precipitates as $\text{Fe}(\text{OH})_3$. In addition, because most precipitants are rarely selective toward a single analyte, there is always a risk that the precipitant will react with both the analyte and an interferent.

We can minimize the formation of additional precipitates by carefully controlling solution conditions. If an interferent forms a precipitate that is less soluble than the analyte's precipitate, we can precipitate the interferent and remove it by filtration, leaving the analyte behind in solution. Alternatively, we can mask the analyte or the interferent to prevent its precipitation.

Both of the above-mentioned approaches are illustrated in Fresenius' analytical method for determining Ni in ores containing Pb^{2+} , Cu^{2+} , and Fe^{3+} (see [Figure 1.1 in Chapter 1](#)). Dissolving the ore in the presence of H_2SO_4 selectively precipitates Pb^{2+} as PbSO_4 . Treating the supernatant with H_2S precipitates the Cu^{2+} as CuS . After removing the CuS by filtration, adding ammonia precipitates Fe^{3+} as $\text{Fe}(\text{OH})_3$. Nickel, which forms a soluble amine complex, remains in solution.

CONTROLLING PARTICLE SIZE

Size matters when it comes to forming a precipitate. Larger particles are easier to filter, and, as noted earlier, a smaller surface area means there is less opportunity for surface adsorbates to form. By carefully controlling the reaction conditions we can significantly increase a precipitate's average particle size.

Precipitation consists of two distinct events: nucleation, the initial formation of smaller stable particles of precipitate, and particle growth. Larger particles form when the rate of particle growth exceeds the rate of nucle-

In addition to forming a precipitate with Ni^{2+} , dimethylglyoxime also forms precipitates with Pd^{2+} and Pt^{2+} . These cations are potential interferents in an analysis for nickel.

A supersaturated solution is one that contains more dissolved solute than that predicted by equilibrium chemistry. The solution is inherently unstable and precipitates solute to reach its equilibrium position. How quickly this process occurs depends, in part, on the value of RSS .

ation. Understanding the conditions favoring particle growth is important when designing a gravimetric method of analysis.

We define a solute's **RELATIVE SUPERSATURATION**, RSS , as

$$RSS = \frac{Q - S}{S} \quad 8.12$$

where Q is the solute's actual concentration and S is the solute's concentration at equilibrium.⁴ The numerator of equation 8.12, $Q - S$, is a measure of the solute's supersaturation. A solution with a large, positive value of RSS has a high rate of nucleation, producing a precipitate with many small particles. When the RSS is small, precipitation is more likely to occur by particle growth than by nucleation.

Examining equation 8.12 shows that we can minimize RSS by decreasing the solute's concentration, Q , or by increasing the precipitate's solubility, S . A precipitate's solubility usually increases at higher temperatures, and adjusting pH may affect a precipitate's solubility if it contains an acidic or a basic ion. Temperature and pH, therefore, are useful ways to increase the value of S . Conducting the precipitation in a dilute solution of analyte, or adding the precipitant slowly and with vigorous stirring are ways to decrease the value of Q .

There are practical limitations to minimizing RSS . Some precipitates, such as $\text{Fe}(\text{OH})_3$ and PbS , are so insoluble that S is very small and a large RSS is unavoidable. Such solutes inevitably form small particles. In addition, conditions favoring a small RSS may lead to a relatively stable supersaturated solution that requires a long time to fully precipitate. For example, almost a month is required to form a visible precipitate of BaSO_4 under conditions in which the initial RSS is 5.⁵

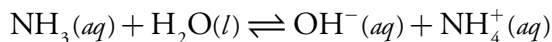
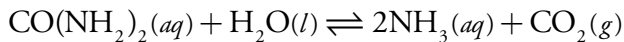
A visible precipitate takes longer to form when RSS is small both because there is a slow rate of nucleation and because there is a steady decrease in RSS as the precipitate forms. One solution to the latter problem is to generate the precipitant in situ as the product of a slow chemical reaction. This maintains the RSS at an effectively constant level. Because the precipitate forms under conditions of low RSS , initial nucleation produces a small number of particles. As additional precipitant forms, particle growth supersedes nucleation, resulting in larger precipitate particles. This process is called **HOMOGENEOUS PRECIPITATION**.⁶

Two general methods are used for homogeneous precipitation. If the precipitate's solubility is pH-dependent, then we can mix the analyte and the precipitant under conditions where precipitation does not occur, and then increase or decrease the pH by chemically generating OH^- or H_3O^+ . For example, the hydrolysis of urea is a source of OH^- .

4 Von Weimarn, P. P. *Chem. Revs.* **1925**, 2, 217–242.

5 Bassett, J.; Denney, R. C.; Jeffery, G. H. Mendham. J. *Vogel's Textbook of Quantitative Inorganic Analysis*, Longman: London, 4th Ed., 1981, p. 408.

6 Gordon, L.; Salutsky, M. L.; Willard, H. H. *Precipitation from Homogeneous Solution*, Wiley: NY, 1959.



Because the hydrolysis of urea is temperature-dependent—it is negligible at room temperature—we can use temperature to control the rate of hydrolysis and the rate of precipitate formation. Precipitates of CaC_2O_4 , for example, have been produced by this method. After dissolving the sample containing Ca^{2+} , the solution is made acidic with HCl before adding a solution of 5% w/v $(\text{NH}_4)_2\text{C}_2\text{O}_4$. Because the solution is acidic, a precipitate of CaC_2O_4 does not form. The solution is heated to approximately 50°C and urea is added. After several minutes, a precipitate of CaC_2O_4 begins to form, with precipitation reaching completion in about 30 min.

In the second method of homogeneous precipitation, the precipitant is generated by a chemical reaction. For example, Pb^{2+} is precipitated homogeneously as PbCrO_4 by using bromate, BrO_3^- , to oxidize Cr^{3+} to CrO_4^{2-} .

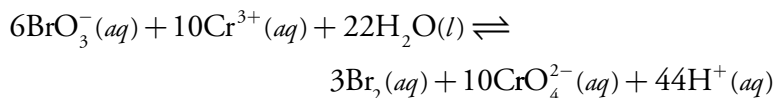


Figure 8.5 shows the result of preparing PbCrO_4 by the direct addition of KCrO_4 (Beaker A) and by homogeneous precipitation (Beaker B). Both beakers contain the same amount of PbCrO_4 . Because the direct addition of KCrO_4 leads to rapid precipitation and the formation of smaller particles, the precipitate remains less settled than the precipitate prepared homogeneously. Note, as well, the difference in the color of the two precipitates.

A homogeneous precipitation produces large particles of precipitate that are relatively free from impurities. These advantages, however, are offset by requiring more time to produce the precipitate and a tendency for the precipitate to deposit as a thin film on the container's walls. The latter problem is particularly severe for hydroxide precipitates generated using urea.

An additional method for increasing particle size deserves mention. When a precipitate's particles are electrically neutral they tend to coagulate

The effect of particle size on color is well-known to geologists, who use a streak test to help identify minerals. The color of a bulk mineral and its color when powdered are often different. Rubbing a mineral across an unglazed porcelain plate leaves behind a small streak of the powdered mineral. Bulk samples of hematite, Fe_2O_3 , are black in color, but its streak is a familiar rust-red. Crocote, the mineral PbCrO_4 , is red-orange in color; its streak is orange-yellow.




Figure 8.5 Two precipitates of PbCrO_4 . In Beaker A, combining 0.1 M $\text{Pb}(\text{NO}_3)_2$ and 0.1 M K_2CrO_4 forms the precipitate under conditions of high *RSS*. The precipitate forms rapidly and consists of very small particles. In Beaker B, heating a solution of 0.1 M $\text{Pb}(\text{NO}_3)_2$, 0.1 M $\text{Cr}(\text{NO}_3)_3$, and 0.1 M KBrO_3 slowly oxidizes Cr^{3+} to CrO_4^{2-} , precipitating PbCrO_4 under conditions of low *RSS*. The precipitate forms slowly and consists of much larger particles.

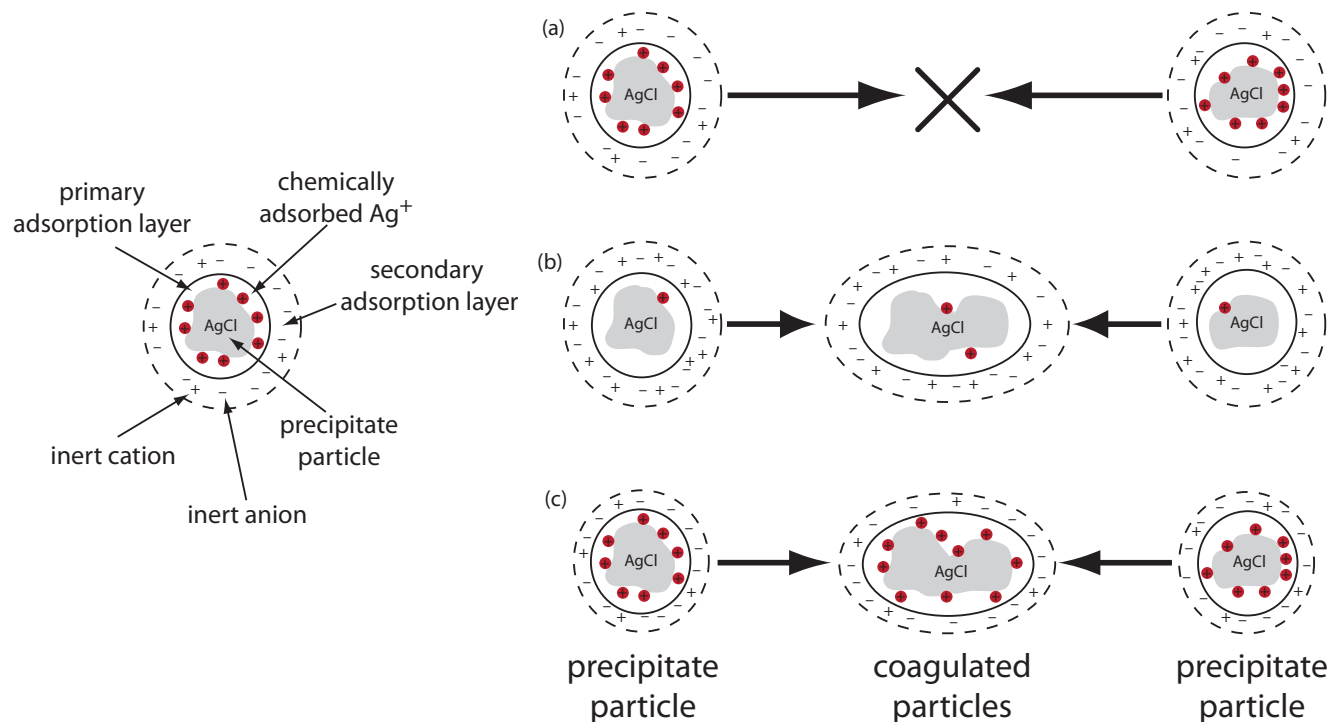


Figure 8.6 Two methods for coagulating a precipitate of AgCl. (a) Coagulation does not happen due to the electrostatic repulsion between the two positively charged particles. (b) Decreasing the charge within the primary adsorption layer, by adding additional NaCl, decreases the electrostatic repulsion, allowing the particles to coagulate. (c) Adding additional inert ions decreases the thickness of the secondary adsorption layer. Because the particles can approach each other more closely, they are able to coagulate.

into larger particles that are easier to filter. Surface adsorption of excess lattice ions, however, provides the precipitate's particles with a net positive or a net negative surface charge. Electrostatic repulsion between the particles prevents them from coagulating into larger particles.

Let's use the precipitation of AgCl from a solution of AgNO₃ using NaCl as a precipitant to illustrate this effect. Early in the precipitation, when NaCl is the limiting reagent, excess Ag⁺ ions chemically adsorb to the AgCl particles, forming a positively charged primary adsorption layer (Figure 8.6a). The solution in contact with this layer contains more inert anions, NO₃⁻ in this case, than inert cations, Na⁺, giving a secondary adsorption layer with a negative charge that balances the primary adsorption layer's positive charge. The solution outside the secondary adsorption layer remains electrically neutral. **COAGULATION** cannot occur if the secondary adsorption layer is too thick because the individual particles of AgCl are unable to approach each other closely enough.

We can induce coagulation in three ways: by decreasing the number of chemically adsorbed Ag⁺ ions, by increasing the concentration of inert ions, or by heating the solution. As we add additional NaCl, precipitating more of the excess Ag⁺, the number of chemically adsorbed silver ions decreases

and coagulation occurs (Figure 8.6b). Adding too much NaCl, however, creates a primary adsorption layer of excess Cl^- with a loss of coagulation.

A second way to induce coagulation is to add an inert electrolyte, which increases the concentration of ions in the secondary adsorption layer. With more ions available, the thickness of the secondary adsorption layer decreases. Particles of precipitate may now approach each other more closely, allowing the precipitate to coagulate. The amount of electrolyte needed to cause spontaneous coagulation is called the critical coagulation concentration.

Heating the solution and precipitate provides a third way to induce coagulation. As the temperature increases, the number of ions in the primary adsorption layer decreases, lowering the precipitate's surface charge. In addition, heating increases the particles' kinetic energy, allowing them to overcome the electrostatic repulsion that prevents coagulation at lower temperatures.

FILTERING THE PRECIPITATE

After precipitating and digesting the precipitate, we separate it from solution by filtering. The most common filtration method uses filter paper, which is classified according to its speed, its size, and its ash content on ignition. Speed, or how quickly the supernatant passes through the filter paper, is a function of the paper's pore size. A larger pore allows the supernatant to pass more quickly through the filter paper, but does not retain small particles of precipitate. Filter paper is rated as fast (retains particles larger than 20–25 μm), medium–fast (retains particles larger than 16 μm), medium (retains particles larger than 8 μm), and slow (retains particles larger than 2–3 μm). The proper choice of filtering speed is important. If the filtering speed is too fast, we may fail to retain some of the precipitate, causing a negative determinate error. On the other hand, the precipitate may clog the pores if we use a filter paper that is too slow.

Because filter paper is hygroscopic, it is not easy to dry it to a constant weight. When accuracy is important, the filter paper is removed before determining the precipitate's mass. After transferring the precipitate and filter paper to a covered crucible, we heat the crucible to a temperature that converts the paper to $\text{CO}_2(g)$ and $\text{H}_2\text{O}(g)$, a process called **IGNITION**.

Gravity filtering is accomplished by folding the filter paper into a cone and placing it in a long-stem funnel (Figure 8.7). A seal between the filter cone and the funnel is formed by dampening the paper with water or supernatant, and pressing the paper to the wall of the funnel. When properly prepared, the funnel's stem fills with the supernatant, increasing the rate of filtration.

The precipitate is transferred to the filter in several steps. The first step is to decant the majority of the **SUPERNATANT** through the filter paper without transferring the precipitate (Figure 8.8). This prevents the filter paper from clogging at the beginning of the filtration process. The precipitate is rinsed

The coagulation and decoagulation of AgCl as we add NaCl to a solution of AgNO_3 can serve as an endpoint for a titration. See Chapter 9 for additional details.

A filter paper's size is just its diameter. Filter paper comes in many sizes, including 4.25 cm, 7.0 cm, 11.0 cm, 12.5 cm, 15.0 cm, and 27.0 cm. Choose a size that fits comfortably into your funnel. For a typical 65-mm long-stem funnel, 11.0 cm and 12.5 cm filter paper are good choices.

Igniting a poor quality filter paper leaves behind a residue of inorganic ash. For quantitative work, use a low-ash filter paper. This grade of filter paper is pretreated with a mixture of HCl and HF to remove inorganic materials. Quantitative filter paper typically has an ash content of less than 0.01% w/w.

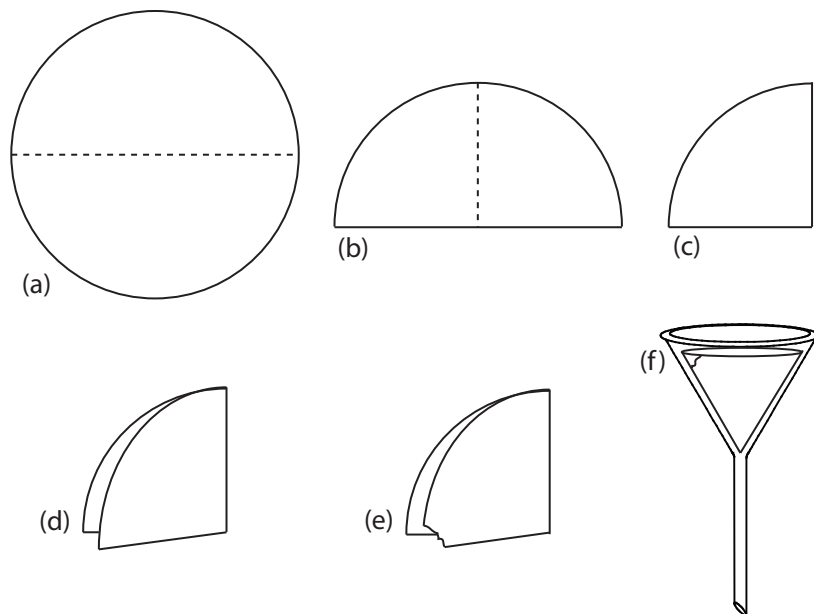


Figure 8.7 Preparing a filter paper cone. The filter paper circle in (a) is folded in half (b), and folded in half again (c). The folded filter paper is parted (d) and a small corner is torn off (e). The filter paper is opened up into a cone and placed in the funnel (f).

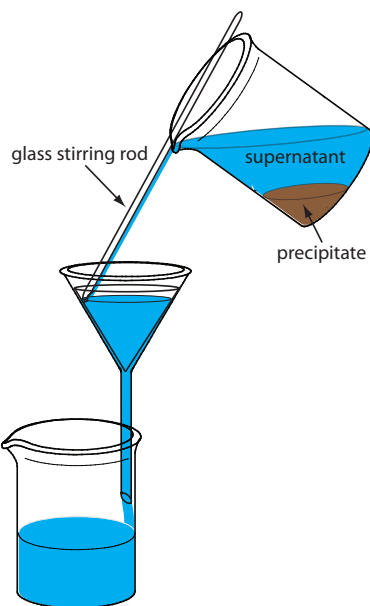


Figure 8.8 Proper procedure for transferring the supernatant to the filter paper cone.

while it remains in its beaker, with the rinsings decanted through the filter paper. Finally, the precipitate is transferred onto the filter paper using a stream of rinse solution. Any precipitate clinging to the walls of the beaker is transferred using a rubber policeman (a flexible rubber spatula attached to the end of a glass stirring rod).

An alternative method for filtering a precipitate is a filtering crucible. The most common is a fritted-glass crucible containing a porous glass disk filter. Fritted-glass crucibles are classified by their porosity: coarse (retaining particles larger than 40–60 μm), medium (retaining particles greater than 10–15 μm), and fine (retaining particles greater than 4–5.5 μm). Another type of filtering crucible is the Gooch crucible, which is a porcelain crucible with a perforated bottom. A glass fiber mat is placed in the crucible to retain the precipitate. For both types of crucibles, the precipitate is transferred in the same manner described earlier for filter paper. Instead of using gravity, the supernatant is drawn through the crucible with the assistance of suction from a vacuum aspirator or pump ([Figure 8.9](#)).

RINSING THE PRECIPITATE

Because the supernatant is rich with dissolved inert ions, we must remove any residual traces of supernatant to avoid a positive determinate error without incurring solubility losses. In many cases this simply involves the use of cold solvents or rinse solutions containing organic solvents such as ethanol. The pH of the rinse solution is critical if the precipitate contains an acidic or basic ion. When coagulation plays an important role in determining particle size, adding a volatile inert electrolyte to the rinse solution prevents the precipitate from reverting into smaller particles that might pass through the filter. This process of reverting to smaller particles is called **PEPTIZATION**. The volatile electrolyte is removed when drying the precipitate.

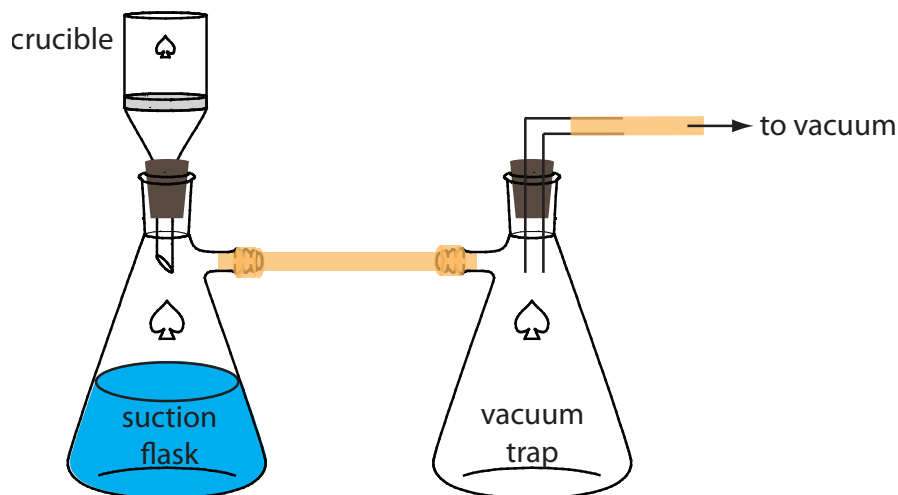


Figure 8.9 Procedure for filtering a precipitate through a filtering crucible. The trap prevents water from an aspirator from back-washing into the suction flask.

In general, we can minimize the loss of analyte by using several small portions of rinse solution instead of a single large volume. Testing the used rinse solution for the presence of impurities is another way to guard against over rinsing the precipitate. For example, if Cl^- is a residual ion in the supernatant, we can test for its presence using AgNO_3 . After collecting a small portion of the rinse solution, we add a few drops of AgNO_3 and look for the presence or absence of a precipitate of AgCl . If a precipitate forms, then we know that Cl^- is present and continue to rinse the precipitate. Additional rinsing is not needed if the AgNO_3 does not produce a precipitate.

DRYING THE PRECIPITATE

After separating the precipitate from its supernatant solution, the precipitate is dried to remove residual traces of rinse solution and any volatile impurities. The temperature and method of drying depend on the method of filtration and the precipitate's desired chemical form. Placing the precipitate in a laboratory oven and heating to a temperature of 110°C is sufficient when removing water and other easily volatilized impurities. Higher temperatures require a muffle furnace, a Bunsen burner, or a Meker burner, and are necessary if we need to thermally decompose the precipitate before weighing.

Because filter paper absorbs moisture, we must remove it before weighing the precipitate. This is accomplished by folding the filter paper over the precipitate and transferring both the filter paper and the precipitate to a porcelain or platinum crucible. Gentle heating first dries and then chars the filter paper. Once the paper begins to char, we slowly increase the temperature until all traces of the filter paper are gone and any remaining carbon is oxidized to CO_2 .

Fritted-glass crucibles can not withstand high temperatures and must be dried in an oven at temperatures below 200 °C. The glass fiber mats used in Gooch crucibles can be heated to a maximum temperature of approximately 500 °C.

COMPOSITION OF THE FINAL PRECIPITATE

For a quantitative application, the final precipitate must have a well-defined composition. Precipitates containing volatile ions or substantial amounts of hydrated water, are usually dried at a temperature that completely removes these volatile species. For example, one standard gravimetric method for the determination of magnesium involves its precipitation as $\text{MgNH}_4\text{PO}_4 \cdot 6\text{H}_2\text{O}$. Unfortunately, this precipitate is difficult to dry at lower temperatures without losing an inconsistent amount of hydrated water and ammonia. Instead, the precipitate is dried at temperatures above 1000 °C where it decomposes to magnesium pyrophosphate, $\text{Mg}_2\text{P}_2\text{O}_7$.

An additional problem is encountered if the isolated solid is nonstoichiometric. For example, precipitating Mn^{2+} as $\text{Mn}(\text{OH})_2$ and heating frequently produces a nonstoichiometric manganese oxide, MnO_x , where x varies between one and two. In this case the nonstoichiometric product is the result of forming of a mixture of oxides with different oxidation state of manganese. Other nonstoichiometric compounds form as a result of lattice defects in the crystal structure.⁷

⁷ Ward, R., ed., *Non-Stoichiometric Compounds (Ad. Chem. Ser. 39)*, American Chemical Society: Washington, D. C., 1963.

The best way to appreciate the theoretical and practical details discussed in this section is to carefully examine a typical precipitation gravimetric method. Although each method is unique, the determination of Mg^{2+} in water and wastewater by precipitating $\text{MgNH}_4\text{PO}_4 \cdot 6\text{H}_2\text{O}$ and isolating $\text{Mg}_2\text{P}_2\text{O}_7$ provides an instructive example of a typical procedure. The description here is based on Method 3500-Mg D in *Standard Methods for the Examination of Water and Wastewater*, 19th Ed., American Public Health Association: Washington, D. C., 1995. With the publication of the 20th Edition in 1998, this method is no longer listed as an approved method.

Representative Method 8.1

Determination of Mg^{2+} in Water and Wastewater

DESCRIPTION OF METHOD

Magnesium is precipitated as $\text{MgNH}_4\text{PO}_4 \cdot 6\text{H}_2\text{O}$ using $(\text{NH}_4)_2\text{HPO}_4$ as the precipitant. The precipitate's solubility in neutral solutions is relatively high (0.0065 g/100 mL in pure water at 10 °C), but it is much less soluble in the presence of dilute ammonia (0.0003 g/100 mL in 0.6 M NH_3). Because the precipitant is not selective, a preliminary separation of Mg^{2+} from potential interferents is necessary. Calcium, which is the most significant interferent, is removed by precipitating it as CaC_2O_4 . The presence of excess ammonium salts from the precipitant, or the addition of too much ammonia leads to the formation of $\text{Mg}(\text{NH}_4)_4(\text{PO}_4)_2$, which forms $\text{Mg}(\text{PO}_3)_2$ after drying. The precipitate is isolated by filtering, using a rinse solution of dilute ammonia. After filtering, the precipitate is converted to $\text{Mg}_2\text{P}_2\text{O}_7$ and weighed.

PROCEDURE

Transfer a sample containing no more than 60 mg of Mg^{2+} into a 600-mL beaker. Add 2–3 drops of methyl red indicator, and, if necessary, adjust

the volume to 150 mL. Acidify the solution with 6 M HCl and add 10 mL of 30% w/v $(\text{NH}_4)_2\text{HPO}_4$. After cooling and with constant stirring, add concentrated NH_3 dropwise until the methyl red indicator turns yellow ($\text{pH} > 6.3$). After stirring for 5 min, add 5 mL of concentrated NH_3 and continue stirring for an additional 10 min. Allow the resulting solution and precipitate to stand overnight. Isolate the precipitate by filtering through filter paper, rinsing with 5% v/v NH_3 . Dissolve the precipitate in 50 mL of 10% v/v HCl, and precipitate a second time following the same procedure. After filtering, carefully remove the filter paper by charring. Heat the precipitate at 500°C until the residue is white, and then bring the precipitate to constant weight at 1100°C .

QUESTIONS

1. Why does the procedure call for a sample containing no more than 60 mg of Mg^{2+} ?

A 60-mg portion of Mg^{2+} generates approximately 600 mg of $\text{MgNH}_4\text{PO}_4 \cdot 6\text{H}_2\text{O}$. This is a substantial amount of precipitate. A larger quantity of precipitate may be difficult to filter and difficult to adequately rinse free of impurities.

2. Why is the solution acidified with HCl before adding the precipitant?

The HCl ensures that $\text{MgNH}_4\text{PO}_4 \cdot 6\text{H}_2\text{O}$ does not immediately precipitate when adding the precipitant. Because PO_4^{3-} is a weak base, the precipitate is soluble in a strongly acidic solution. If the precipitant is added under neutral or basic conditions (high *RSS*) the resulting precipitate consists of smaller, less pure particles. Increasing the pH by adding base allows the precipitate to form under more favorable (low *RSS*) conditions.

3. Why is the acid–base indicator methyl red added to the solution?

The indicator's color change, which occurs at a pH of approximately 6.3, indicates when there is sufficient NH_3 to neutralize the HCl added at the beginning of the procedure. The amount of NH_3 is crucial to this procedure. If we add insufficient NH_3 , then the solution is too acidic, which increases the precipitate's solubility and leads to a negative determinate error. If we add too much NH_3 , the precipitate may contain traces of $\text{Mg}(\text{NH}_4)_4(\text{PO}_4)_2$, which, on drying, forms $\text{Mg}(\text{PO}_3)_2$ instead of $\text{Mg}_2\text{P}_2\text{O}_7$. This increases the mass of the ignited precipitate, giving a positive determinate error. After adding enough NH_3 to neutralize the HCl, we add the additional 5 mL of NH_3 to quantitatively precipitate $\text{MgNH}_4\text{PO}_4 \cdot 6\text{H}_2\text{O}$.

4. Explain why forming $\text{Mg}(\text{PO}_3)_2$ instead of $\text{Mg}_2\text{P}_2\text{O}_7$ increases the precipitate's mass.

Each mole of $\text{Mg}_2\text{P}_2\text{O}_7$ contains two moles of phosphorous and each mole of $\text{Mg}(\text{PO}_3)_2$ contains only one mole of phosphorous. A conservation of mass, therefore, requires that two moles of $\text{Mg}(\text{PO}_3)_2$ form in place of each mole of $\text{Mg}_2\text{P}_2\text{O}_7$. One mole of $\text{Mg}_2\text{P}_2\text{O}_7$ weighs 222.6 g. Two moles of $\text{Mg}(\text{PO}_3)_2$ weigh 364.5 g. Any replacement of $\text{Mg}_2\text{P}_2\text{O}_7$ with $\text{Mg}(\text{PO}_3)_2$ must increase the precipitate's mass.

5. What additional steps, beyond those discussed in questions 2 and 3, help improve the precipitate's purity?

Two additional steps in the procedure help in forming a precipitate that is free of impurities: digestion and reprecipitation.

6. Why is the precipitate rinsed with a solution of 5% v/v NH_3 ?

This is done for the same reason that precipitation is carried out in an ammoniacal solution; using dilute ammonia minimizes solubility losses when rinsing the precipitate.

8B.2 Quantitative Applications

Although no longer a commonly used technique, precipitation gravimetry still provides a reliable means for assessing the accuracy of other methods of analysis, or for verifying the composition of standard reference materials. In this section we review the general application of precipitation gravimetry to the analysis of inorganic and organic compounds.

INORGANIC ANALYSIS

[Table 8.1](#) provides a summary of some precipitation gravimetric methods for inorganic cations and anions. Several methods for the homogeneous generation of precipitants are shown in [Table 8.2](#). The majority of inorganic precipitants show poor selectivity for the analyte. Many organic precipitants, however, are selective for one or two inorganic ions. [Table 8.3](#) lists several common organic precipitants.

Precipitation gravimetry continues to be listed as a standard method for the determination of SO_4^{2-} in water and wastewater analysis.⁸ Precipitation is carried out using BaCl_2 in an acidic solution (adjusted with HCl to a pH of 4.5–5.0) to prevent the possible precipitation of BaCO_3 or $\text{Ba}_3(\text{PO}_4)_2$, and near the solution's boiling point. The precipitate is digested at 80–90 °C for at least two hours. Ashless filter paper pulp is added to the precipitate to aid in filtration. After filtering, the precipitate is ignited to constant weight at 800 °C. Alternatively, the precipitate is filtered through a fine porosity fritted glass crucible (without adding filter paper pulp), and dried to constant weight at 105 °C. This procedure is subject to a variety of errors, including occlusions of $\text{Ba}(\text{NO}_3)_2$, BaCl_2 , and alkali sulfates.

⁸ Method 4500- SO_4^{2-} -C and Method 4500- SO_4^{2-} -D as published in *Standard Methods for the Examination of Waters and Wastewaters*, 20th Ed., American Public Health Association: Washington, D. C., 1998.

Table 8.1 Selected Precipitation Gravimetric Methods for Inorganic Cations and Anions (Arranged by Precipitant)

Analyte	Precipitant	Precipitate Formed	Precipitate Weighed
Ba ²⁺	(NH ₄) ₂ CrO ₄	BaCrO ₄	BaCrO ₄
Pb ²⁺	K ₂ CrO ₄	PbCrO ₄	PbCrO ₄
Ag ⁺	HCl	AgCl	AgCl
Hg ₂ ²⁺	HCl	Hg ₂ Cl ₂	Hg ₂ Cl ₂
Al ³⁺	NH ₃	Al(OH) ₃	Al ₂ O ₃
Be ²⁺	NH ₃	Be(OH) ₂	BeO
Fe ³⁺	NH ₃	Fe(OH) ₃	Fe ₂ O ₃
Ca ²⁺	(NH ₄) ₂ C ₂ O ₄	CaC ₂ O ₄	CaCO ₃ or CaO
Sb ³⁺	H ₂ S	Sb ₂ S ₃	Sb ₂ S ₃
As ³⁺	H ₂ S	As ₂ S ₃	As ₂ S ₃
Hg ²⁺	H ₂ S	HgS	HgS
Ba ²⁺	H ₂ SO ₄	BaSO ₄	BaSO ₄
Pb ²⁺	H ₂ SO ₄	PbSO ₄	PbSO ₄
Sr ²⁺	H ₂ SO ₄	SrSO ₄	SrSO ₄
Be ³⁺	(NH ₄) ₂ HPO ₄	NH ₄ BePO ₄	Be ₂ P ₂ O ₇
Mg ²⁺	(NH ₄) ₂ HPO ₄	NH ₄ MgPO ₄	Mg ₂ P ₂ O ₇
Zn ²⁺	(NH ₄) ₂ HPO ₄	NH ₄ ZnPO ₄	Zn ₂ P ₂ O ₇
Sr ²⁺	KH ₂ PO ₄	SrHPO ₄	Sr ₂ P ₂ O ₇
CN ⁻	AgNO ₃	AgCN	AgCN
I ⁻	AgNO ₃	AgI	AgI
Br ⁻	AgNO ₃	AgBr	AgBr
Cl ⁻	AgNO ₃	AgCl	AgCl
ClO ₃ ⁻	FeSO ₄ /AgNO ₃	AgCl	AgCl
SCN ⁻	SO ₂ /CuSO ₄	CuSCN	CuSCN
SO ₄ ²⁻	BaCl ₂	BaSO ₄	BaSO ₄

ORGANIC ANALYSIS

Several organic functional groups or heteroatoms can be determined using precipitation gravimetric methods. [Table 8.4](#) provides a summary of several representative examples. Note that the procedure for the determination of alkoxy functional groups is an indirect analysis.

QUANTITATIVE CALCULATIONS

The stoichiometry of a precipitation reaction provides a mathematical relationship between the analyte and the precipitate. Because a precipitation gravimetric method may involve several chemical reactions before the precipitation reaction, knowing the stoichiometry of the precipitation reaction

Table 8.2 Reactions for the Homogeneous Preparation of Selected Inorganic Precipitants

Precipitant	Reaction
OH^-	$(\text{NH}_2)_2\text{CO}(aq) + 3\text{H}_2\text{O}(l) \rightleftharpoons 2\text{NH}_4^+(aq) + \text{CO}_2(g) + 2\text{OH}^-(aq)$
SO_4^{2-}	$\text{NH}_2\text{HSO}_3(aq) + 2\text{H}_2\text{O}(l) \rightleftharpoons \text{NH}_4^+(aq) + \text{H}_3\text{O}^+(aq) + \text{SO}_4^{2-}(aq)$
S^{2-}	$\text{CH}_3\text{CSNH}_2(aq) + \text{H}_2\text{O}(l) \rightleftharpoons \text{CH}_3\text{CONH}_2(aq) + \text{H}_2\text{S}(aq)$
IO_3^-	$\text{HOCH}_2\text{CH}_2\text{OH}(aq) + \text{IO}_4^-(aq) \rightleftharpoons 2\text{HCHO}(aq) + \text{H}_2\text{O}(l) + \text{IO}_3^-(aq)$
PO_4^{3-}	$(\text{CH}_3\text{O})_3\text{PO}(aq) + 3\text{H}_2\text{O}(l) \rightleftharpoons 3\text{CH}_3\text{OH}(aq) + \text{H}_3\text{PO}_4(aq)$
$\text{C}_2\text{O}_4^{2-}$	$(\text{C}_2\text{H}_5)_2\text{C}_2\text{O}_4(aq) + 2\text{H}_2\text{O}(l) \rightleftharpoons 2\text{C}_2\text{H}_5\text{OH}(aq) + \text{H}_2\text{C}_2\text{O}_4(aq)$
CO_3^{2-}	$\text{Cl}_3\text{CCOOH}(aq) + 2\text{OH}^-(aq) \rightleftharpoons \text{CHCl}_3(aq) + \text{CO}_3^{2-}(aq) + \text{H}_2\text{O}(l)$

Table 8.3 Selected Precipitation Gravimetric Methods for Inorganic Ions Using an Organic Precipitant

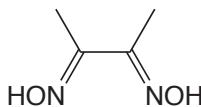
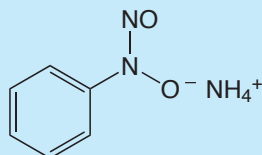
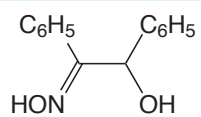
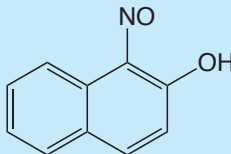
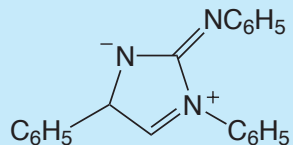
Analyte	Precipitant	Structure	Precipitate Formed	Precipitate Weighed
Ni^{2+}	dimethylglyoxime		$\text{Ni}(\text{C}_4\text{H}_7\text{O}_2\text{N}_2)_2$	$\text{Ni}(\text{C}_4\text{H}_7\text{O}_2\text{N}_2)_2$
Fe^{3+}	cupferron		$\text{Fe}(\text{C}_6\text{H}_5\text{N}_2\text{O}_2)_3$	Fe_2O_3
Cu^{2+}	cupron		$\text{CuC}_{14}\text{H}_{11}\text{O}_2\text{N}$	$\text{CuC}_{14}\text{H}_{11}\text{O}_2\text{N}$
Co^{2+}	1-nitroso-2-naphthol		$\text{Co}(\text{C}_{10}\text{H}_6\text{O}_2\text{N})_3$	Co or CoSO_4
K^+	sodium tetraphenylborate	$\text{Na}[\text{B}(\text{C}_6\text{H}_5)_4]$	$\text{K}[\text{B}(\text{C}_6\text{H}_5)_4]$	$\text{K}[\text{B}(\text{C}_6\text{H}_5)_4]$
NO_3^-	nitron		$\text{C}_{20}\text{H}_{16}\text{N}_4\text{HNO}_3$	$\text{C}_{20}\text{H}_{16}\text{N}_4\text{H}-\text{NO}_3$

Table 8.4 Selected Precipitation Gravimetric Methods for the Analysis of Organic Functional Groups and Heteroatoms

Analyte	Treatment	Precipitant	Precipitate
Organic halides R-X X = Cl, Br, I	Oxidation with HNO ₃ in the presence of Ag ⁺	AgNO ₃	AgX
Organic halides R-X X = Cl, Br, I	Combustion in O ₂ (with a Pt catalyst) in the presence of Ag ⁺	AgNO ₃	AgX
Organic sulfur	Oxidation with HNO ₃ in the presence of Ba ²⁺	BaCl ₂	BaSO ₄
Organic sulfur	Combustion in O ₂ (with Pt catalyst) with SO ₂ and SO ₃ collected in dilute H ₂ O ₂	BaCl ₂	BaSO ₄
Alkoxy groups -O-R or -COO-R R = CH ₃ or C ₂ H ₅	Reaction with HI to produce RI	AgNO ₃	AgI

may not be sufficient. Even if you do not have a complete set of balanced chemical reactions, you can deduce the mathematical relationship between the analyte and the precipitate using a conservation of mass. The following example demonstrates the application of this approach to the direct analysis of a single analyte.

Example 8.1

To determine the amount of magnetite, Fe₃O₄, in an impure ore, a 1.5419-g sample is dissolved in concentrated HCl, giving a mixture of Fe²⁺ and Fe³⁺. After adding HNO₃ to oxidize Fe²⁺ to Fe³⁺ and diluting with water, Fe³⁺ is precipitated as Fe(OH)₃ by adding NH₃. Filtering, rinsing, and igniting the precipitate provides 0.8525 g of pure Fe₂O₃. Calculate the %w/w Fe₃O₄ in the sample.

SOLUTION

A conservation of mass requires that all the iron from the ore is found in the Fe₂O₃. We know there are 2 moles of Fe per mole of Fe₂O₃ (FW = 159.69 g/mol) and 3 moles of Fe per mole of Fe₃O₄ (FW = 231.54 g/mol); thus

$$0.8525 \text{ g Fe}_2\text{O}_3 \times \frac{2 \text{ mol Fe}}{159.69 \text{ g Fe}_2\text{O}_3} \times \frac{231.54 \text{ g Fe}_3\text{O}_4}{3 \text{ mol Fe}} = 0.82405 \text{ g Fe}_3\text{O}_4$$

The % w/w s Fe₃O₄ in the sample, therefore, is

$$\frac{0.82405 \text{ g Fe}_3\text{O}_4}{1.5419 \text{ g sample}} \times 100 = 53.44\% \text{ w/w Fe}_3\text{O}_4$$

Practice Exercise 8.2

A 0.7336-g sample of an alloy containing copper and zinc is dissolved in 8 M HCl and diluted to 100 mL in a volumetric flask. In one analysis, the zinc in a 25.00-mL portion of the solution is precipitated as ZnNH_4PO_4 , and subsequently isolated as $\text{Zn}_2\text{P}_2\text{O}_7$, yielding 0.1163 g. The copper in a separate 25.00-mL portion of the solution is treated to precipitate CuSCN , yielding 0.2931 g. Calculate the %w/w Zn and the %w/w Cu in the sample.

Click [here](#) to review your answer to this exercise.

In Practice Exercise 8.2 the sample contains two analytes. Because we can selectively precipitate each analyte, finding their respective concentrations is a straightforward stoichiometric calculation. But what if we cannot precipitate the two analytes separately? To find the concentrations of both analytes, we still need to generate two precipitates, at least one of which must contain both analytes. Although this complicates the calculations, we can still use a conservation of mass to solve the problem.

Example 8.2

A 0.611-g sample of an alloy containing Al and Mg is dissolved and treated to prevent interferences by the alloy's other constituents. Aluminum and magnesium are precipitated using 8-hydroxyquinoline, providing a mixed precipitate of $\text{Al}(\text{C}_9\text{H}_6\text{NO})_3$ and $\text{Mg}(\text{C}_9\text{H}_6\text{NO})_2$ that weighs 7.815 g. Igniting the precipitate converts it to a mixture of Al_2O_3 and MgO that weighs 1.002 g. Calculate the %w/w Al and %w/w Mg in the alloy.

SOLUTION

The masses of the solids provide us with the following two equations.

$$\text{g Al}(\text{C}_9\text{H}_6\text{NO})_3 + \text{g Mg}(\text{C}_9\text{H}_6\text{NO})_2 = 7.815 \text{ g}$$

$$\text{g Al}_2\text{O}_3 + \text{g MgO} = 1.002 \text{ g}$$

With two equations and four unknowns, we need two additional equations to solve the problem. A conservation of mass requires that all the aluminum in $\text{Al}(\text{C}_9\text{H}_6\text{NO})_3$ is found in Al_2O_3 ; thus

$$\text{g Al}_2\text{O}_3 = \text{g Al}(\text{C}_9\text{H}_6\text{NO})_3 \times \frac{1 \text{ mol Al}}{459.45 \text{ g Al}(\text{C}_9\text{H}_6\text{NO})_3} \times \frac{101.96 \text{ g Al}_2\text{O}_3}{2 \text{ mol Al}_2\text{O}_3}$$

$$\text{g Al}_2\text{O}_3 = 0.11096 \times \text{g Al}(\text{C}_9\text{H}_6\text{NO})_3$$

Using the same approach, a conservation of mass for magnesium gives



$$g \text{ MgO} = g \text{ Mg}(\text{C}_9\text{H}_6\text{NO})_2 \times \frac{1 \text{ mol Mg}}{312.61 \text{ g Mg}(\text{C}_9\text{H}_6\text{NO})_2} \times \frac{40.304 \text{ g MgO}}{\text{mol Mg}}$$

$$g \text{ MgO} = 0.12893 \times g \text{ Mg}(\text{C}_9\text{H}_6\text{NO})_2$$

Substituting the equations for $g \text{ MgO}$ and $g \text{ Al}_2\text{O}_3$ into the equation for the combined weights of MgO and Al_2O_3 leaves us with two equations and two unknowns.

$$g \text{ Al}(\text{C}_9\text{H}_6\text{NO})_3 + g \text{ Mg}(\text{C}_9\text{H}_6\text{NO})_2 = 7.815 \text{ g}$$

$$0.11096 \times g \text{ Al}(\text{C}_9\text{H}_6\text{NO})_3 + 0.12893 \times g \text{ Mg}(\text{C}_9\text{H}_6\text{NO})_2 = 1.002 \text{ g}$$

Multiplying the first equation by 0.11096 and subtracting the second equation gives

$$-0.01797 \times g \text{ Mg}(\text{C}_9\text{H}_6\text{NO})_2 = -0.1348 \text{ g}$$

$$g \text{ Mg}(\text{C}_9\text{H}_6\text{NO})_2 = 7.501 \text{ g}$$

$$g \text{ Al}(\text{C}_9\text{H}_6\text{NO})_3 = 7.815 \text{ g} - 7.501 \text{ g Mg}(\text{C}_9\text{H}_6\text{NO})_2 = 0.314 \text{ g}$$

Now we can finish the problem using the approach from [Example 8.1](#). A conservation of mass requires that all the aluminum and magnesium in the sample of Dow metal is found in the precipitates of $\text{Al}(\text{C}_9\text{H}_6\text{NO})_3$ and the $\text{Mg}(\text{C}_9\text{H}_6\text{NO})_2$. For aluminum, we find that

$$0.314 \text{ g Al}(\text{C}_9\text{H}_6\text{NO})_3 \times \frac{1 \text{ mol Al}}{459.45 \text{ g Al}(\text{C}_9\text{H}_6\text{NO})_3} \times \frac{26.982 \text{ g Al}}{\text{mol Al}} = 0.01844 \text{ g Al}$$

$$\frac{0.01844 \text{ g Al}}{0.611 \text{ g sample}} \times 100 = 3.02\% \text{ w/w Al}$$

and for magnesium we have

$$7.501 \text{ g Mg}(\text{C}_9\text{H}_6\text{NO})_2 \times \frac{1 \text{ mol Mg}}{312.61 \text{ g Mg}(\text{C}_9\text{H}_6\text{NO})_2} \times \frac{24.305 \text{ g Mg}}{\text{mol Mg}} = 0.5832 \text{ g Mg}$$

$$\frac{0.5832 \text{ g Mg}}{0.611 \text{ g sample}} \times 100 = 95.5\% \text{ w/w Mg}$$

Practice Exercise 8.3

A sample of a silicate rock weighing 0.8143 g is brought into solution and treated to yield a 0.2692-g mixture of NaCl and KCl. The mixture of chloride salts is subsequently dissolved in a mixture of ethanol and water, and treated with HClO_4 , precipitating 0.5713 g of KClO_4 . What is the %w/w Na_2O in the silicate rock?

Click [here](#) to review your answer to this exercise.

The previous problems are examples of direct methods of analysis because the precipitate contains the analyte. In an indirect analysis the precipitate forms as a result of a reaction with the analyte, but the analyte is not part of the precipitate. As shown by the following example, despite the additional complexity, we can use conservation principles to organize our calculations.

Example 8.3

An impure sample of Na_3PO_3 weighing 0.1392 g is dissolved in 25 mL of water. A solution containing 50 mL of 3% w/v HgCl_2 , 20 mL of 10% w/v sodium acetate, and 5 mL of glacial acetic acid is then prepared. Adding the solution of Na_3PO_3 to the solution containing HgCl_2 , oxidizes PO_3^{3-} to PO_4^{3-} , precipitating Hg_2Cl_2 . After digesting, filtering, and rinsing the precipitate, 0.4320 g of Hg_2Cl_2 is obtained. Report the purity of the original sample as % w/w Na_3PO_3 .

SOLUTION

This is an example of an indirect analysis because the precipitate, Hg_2Cl_2 , does not contain the analyte, Na_3PO_3 . Although the stoichiometry of the reaction between Na_3PO_3 and HgCl_2 is given earlier in the chapter, let's see how we can solve the problem using conservation principles.

The reaction between Na_3PO_3 and HgCl_2 is a redox reaction in which phosphorous increases its oxidation state from +3 in Na_3PO_3 to +5 in Na_3PO_4 , and in which mercury decreases its oxidation state from +2 in HgCl_2 to +1 in Hg_2Cl_2 . A redox reaction must obey a conservation of electrons—all the electrons released by the reducing agent, Na_3PO_3 , must be accepted by the oxidizing agent, HgCl_2 . Knowing this, we write the following stoichiometric conversion factors:

$$\frac{2 \text{ mol } e^-}{\text{mol Na}_3\text{PO}_4} \text{ and } \frac{1 \text{ mol } e^-}{\text{mol HgCl}_2}$$

Now we are ready to solve the problem. First, we use a conservation of mass for mercury to convert the precipitate's mass to the moles of HgCl_2 .

Although you can write the balanced reactions for any analysis, applying conservation principles can save you a significant amount of time!

$$0.4320 \text{ g Hg}_2\text{Cl}_2 \times \frac{2 \text{ mol Hg}}{472.09 \text{ g Hg}_2\text{Cl}_2} \times \frac{1 \text{ mol HgCl}_2}{\text{mol Hg}} = 1.8302 \times 10^{-3} \text{ mol HgCl}_2$$

Next, we use the conservation of electrons to find the mass of Na_3PO_3 .

$$1.8302 \times 10^{-3} \text{ mol HgCl}_2 \times \frac{1 \text{ mol } e^-}{\text{mol HgCl}_2} \times \frac{1 \text{ mol Na}_3\text{PO}_3}{2 \text{ mol } e^-} \times \frac{147.94 \text{ g Na}_3\text{PO}_3}{\text{mol Na}_3\text{PO}_3} = 0.13538 \text{ g Na}_3\text{PO}_3$$

Finally, we calculate the %w/w Na_3PO_3 in the sample.

$$\frac{0.13538 \text{ g Na}_3\text{PO}_3}{0.1392 \text{ g sample}} \times 100 = 97.26\% \text{ w/w Na}_3\text{PO}_3$$

As you become comfortable with using conservation principles, you will see opportunities for further simplifying problems. For example, a conservation of electrons requires that the electrons released by Na_3PO_3 end up in the product, Hg_2Cl_2 , yielding the following stoichiometric conversion factor:

$$\frac{2 \text{ mol } e^-}{\text{mol Hg}_2\text{Cl}_2}$$

This conversion factor provides a direct link between the mass of Hg_2Cl_2 and the mass of Na_3PO_3 .

Practice Exercise 8.4

One approach for determining phosphate, PO_4^{3-} , is to precipitate it as ammonium phosphomolybdate, $(\text{NH}_4)_3\text{PO}_4 \cdot 12\text{MoO}_3$. After isolating the precipitate by filtration, it is dissolved in acid and the molybdate precipitated and weighed as PbMoO_3 . Suppose we know that our samples contain at least 12.5% Na_3PO_4 and we need to recover a minimum of 0.600 g of PbMoO_3 ? What is the minimum amount of sample needed for each analysis?

Click [here](#) to review your answer to this exercise.

8B.2 Qualitative Applications

A precipitation reaction is a useful method for identifying inorganic and organic analytes. Because a qualitative analysis does not require quantitative measurements, the analytical signal is simply the observation that a precipitate has formed. Although qualitative applications of precipitation gravimetry have been largely replaced by spectroscopic methods of analysis, they continue to find application in spot testing for the presence of specific analytes.⁹

Any of the precipitants listed in [Table 8.1](#), [Table 8.3](#), and [Table 8.4](#) can be used for a qualitative analysis.

8B.3 Evaluating Precipitation Gravimetry

SCALE OF OPERATION

The scale of operation for precipitation gravimetry is limited by the sensitivity of the balance and the availability of sample. To achieve an accuracy

⁹ Jungreis, E. *Spot Test Analysis*; 2nd Ed., Wiley: New York, 1997.

of $\pm 0.1\%$ using an analytical balance with a sensitivity of ± 0.1 mg, we must isolate at least 100 mg of precipitate. As a consequence, precipitation gravimetry is usually limited to major or minor analytes, in macro or meso samples (see [Figure 3.5 in Chapter 3](#)). The analysis of trace level analytes or micro samples usually requires a microanalytical balance.

ACCURACY

For a macro sample containing a major analyte, a relative error of 0.1–0.2% is routinely achieved. The principle limitations are solubility losses, impurities in the precipitate, and the loss of precipitate during handling. When it is difficult to obtain a precipitate that is free from impurities, it may be possible to determine an empirical relationship between the precipitate's mass and the mass of the analyte by an appropriate calibration.

PRECISION

The relative precision of precipitation gravimetry depends on the sample's size and the precipitate's mass. For a smaller amount of sample or precipitate, a relative precision of 1–2 ppt is routinely obtained. When working with larger amounts of sample or precipitate, the relative precision can be extended to several ppm. Few quantitative techniques can achieve this level of precision.

SENSITIVITY

For any precipitation gravimetric method we can write the following general equation relating the signal (grams of precipitate) to the absolute amount of analyte in the sample

$$\text{grams precipitate} = k \times \text{grams analyte} \quad 8.13$$

where k , the method's sensitivity, is determined by the stoichiometry between the precipitate and the analyte. Consider, for example, the determination of Fe as Fe_2O_3 . Using a conservation of mass for iron, the precipitate's mass is

$$\text{g Fe}_2\text{O}_3 = \text{g Fe} \times \frac{1 \text{ mol Fe}}{\text{AW Fe}} \times \frac{\text{FW Fe}_2\text{O}_3}{2 \text{ mol Fe}}$$

and the value of k is

$$k = \frac{1}{2} \times \frac{\text{FW Fe}_2\text{O}_3}{\text{AW Fe}} \quad 8.14$$

As we can see from equation 8.14, there are two ways to improve a method's sensitivity. The most obvious way to improve sensitivity is to increase the ratio of the precipitate's molar mass to that of the analyte. In other words, it helps to form a precipitate with the largest possible formula weight. A less obvious way to improve a method's sensitivity is indicated by the term

[Problem 8.27](#) provides an example of how to determine an analyte's concentration by establishing an empirical relationship between the analyte and the precipitate.

Equation 8.13 assumes that we have used a suitable blank to correct the signal for any contributions of the reagent to the precipitate's mass.

of 1/2 in [equation 8.14](#), which accounts for the stoichiometry between the analyte and precipitate. We can also improve sensitivity by forming a precipitate that contains fewer units of the analyte.

Practice Exercise 8.5

Suppose you wish to determine the amount of iron in a sample. Which of the following compounds—FeO, Fe₂O₃, or Fe₃O₄—provides the greatest sensitivity?

Click [here](#) to review your answer to this exercise.

SELECTIVITY

Due to the chemical nature of the precipitation process, precipitants are usually not selective for a single analyte. For example, silver is not a selective precipitant for chloride because it also forms precipitates with bromide and iodide. Interferents are often a serious problem and must be considered if accurate results are to be obtained.

TIME, COST, AND EQUIPMENT

Precipitation gravimetry is time intensive and rarely practical if you have a large number of samples to analyze. However, because much of the time invested in precipitation gravimetry does not require an analyst's immediate supervision, it may be a practical alternative when working with only a few samples. Equipment needs are few—beakers, filtering devices, ovens or burners, and balances—inexpensive, routinely available in most laboratories, and easy to maintain.

8C Volatilization Gravimetry

A second approach to gravimetry is to thermally or chemically decompose the sample and measure the resulting change in its mass. Alternatively, we can trap and weigh a volatile decomposition product. Because the release of a volatile species is an essential part of these methods, we classify them collectively as volatilization gravimetric methods of analysis.

8C.1 Theory and Practice

Whether an analysis is direct or indirect, volatilization gravimetry usually requires that we know the products of the decomposition reaction. This is rarely a problem for organic compounds, which typically decompose to form simple gases such as CO₂, H₂O, and N₂. For an inorganic compound, however, the products often depend on the decomposition temperature.

Thermogravimetry

One method for determining the products of a thermal decomposition is to monitor the sample's mass as a function of temperature, a process called

THERMOGRAVIMETRY. Figure 8.10 shows a typical thermogram in which each change in mass—each “step” in the thermogram—represents the loss of a volatile product. As shown in Example 8.4, we can use a **THERMOGRAM** to identify a compound’s decomposition reactions.

Example 8.4

The thermogram in Figure 8.10 shows the mass of a sample of calcium oxalate monohydrate, $\text{CaC}_2\text{O}_4 \cdot \text{H}_2\text{O}$, as a function of temperature. The original sample weighing 17.61 mg was heated from room temperature to 1000°C at a rate of 20°C per minute. For each step in the thermogram, identify the volatilization product and the solid residue that remains.

SOLUTION

From $100\text{--}250^\circ\text{C}$ the sample loses $17.61\text{ mg} - 15.44\text{ mg}$, or 2.17 mg , which is

$$\frac{2.17\text{ mg}}{17.61\text{ mg}} \times 100 = 12.3\%$$

of the sample’s original mass. In terms of $\text{CaC}_2\text{O}_4 \cdot \text{H}_2\text{O}$, this corresponds to a loss of

$$0.123 \times 146.11\text{ g/mol} = 18.0\text{ g/mol}$$

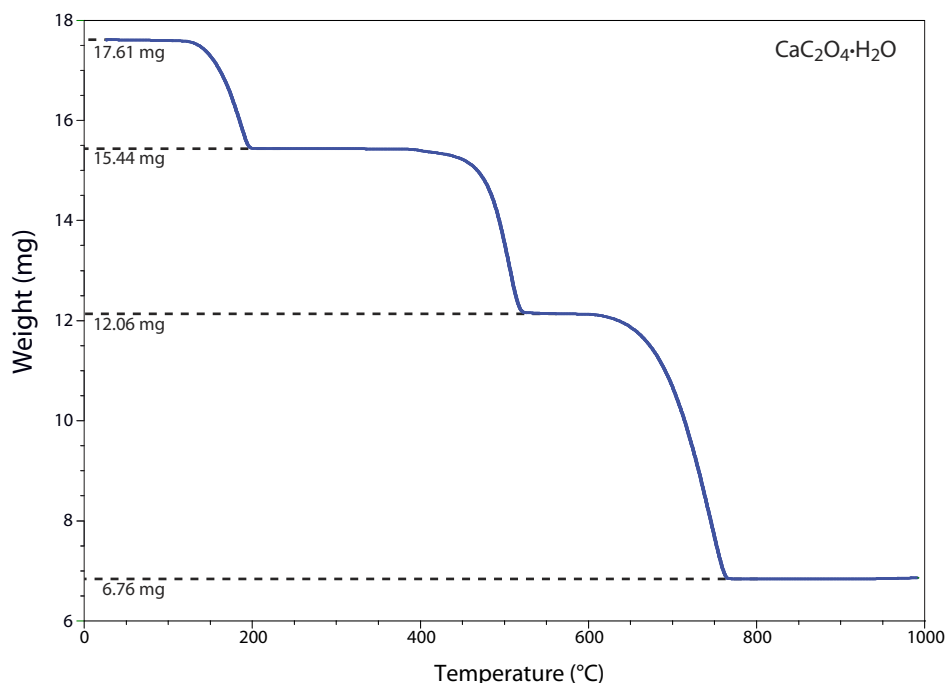


Figure 8.10 Thermogram for $\text{CaC}_2\text{O}_4 \cdot \text{H}_2\text{O}$ obtained by heating a sample from room temperature to 1000°C at a rate of $20^\circ\text{C}/\text{min}$. Each change in mass results from the loss of a volatile product. The sample’s initial mass and its mass after each loss are shown by the dotted lines. See Example 8.4 for information on interpreting this thermogram.

The product's molar mass and the temperature range for the decomposition, suggest that this is a loss of $\text{H}_2\text{O}(g)$, leaving a residue of CaC_2O_4 .

The loss of 3.38 mg from 350–550 °C is a 19.2% decrease in the sample's original mass, or a loss of

$$0.192 \times 146.11 \text{ g/mol} = 28.1 \text{ g/mol}$$

which is consistent with the loss of $\text{CO}(g)$ and a residue of CaCO_3 .

Finally, the loss of 5.30 mg from 600–800 °C is a 30.1% decrease in the sample's original mass, or a loss of

$$0.301 \times 146.11 \text{ g/mol} = 44.0 \text{ g/mol}$$

This loss in molar mass is consistent with the release of $\text{CO}_2(g)$, leaving a final residue of CaO .

Identifying the products of a thermal decomposition provides information that we can use to develop an analytical procedure. For example, the thermogram in [Figure 8.10](#) shows that we must heat a precipitate of $\text{CaC}_2\text{O}_4 \cdot \text{H}_2\text{O}$ to a temperature between 250 and 400 °C if we wish to isolate and weigh CaC_2O_4 . Alternatively, heating the sample to 1000 °C allows us to isolate and weigh CaO .

Practice Exercise 8.6

Under the same conditions as [Figure 8.10](#), the thermogram for a 22.16 mg sample of $\text{MgC}_2\text{O}_4 \cdot \text{H}_2\text{O}$ shows two steps: a loss of 3.06 mg from 100–250 °C and a loss of 12.24 mg from 350–550 °C. For each step, identify the volatilization product and the solid residue that remains. Using your results from this exercise and the results from Example 8.4, explain how you can use thermogravimetry to analyze a mixture containing $\text{CaC}_2\text{O}_4 \cdot \text{H}_2\text{O}$ and $\text{MgC}_2\text{O}_4 \cdot \text{H}_2\text{O}$. You may assume that other components in the sample are inert and thermally stable below 1000 °C.

Click [here](#) to review your answer to this exercise.

EQUIPMENT

Depending on the method of analysis, the equipment for volatilization gravimetry may be simple or complex. In the simplest experimental design, we place the sample in a crucible and decompose it at a fixed temperature using a Bunsen burner, a Meeker burner, a laboratory oven, or a muffle furnace. The sample's mass and the mass of the residue are measured using an analytical balance.

Trapping and weighing the volatile products of a thermal decomposition requires specialized equipment. The sample is placed in a closed container and heated. As decomposition occurs, a stream of an inert purge-gas sweeps the volatile products through one or more selective absorbent traps.




Figure 8.11 (a) Instrumentation for conducting a thermogravimetric analysis. The balance sits on the top of the instrument with the sample suspended below. A gas line supplies an inert gas that sweeps the volatile decomposition products out of the furnace. The heat exchanger dissipates the heat from the furnace to a reservoir of water. (b) Close-up showing the balance pan, which sits on a moving platform, the thermocouple for monitoring temperature, a hook for lowering the sample pan into the furnace, and the opening to the furnace. After placing a small portion of the sample on the balance pan, the platform rotates over the furnace and transfers the balance pan to a hook that is suspended from the balance. Once the balance pan is in place, the platform rotates back to its initial position. The balance pan and the thermocouple are then lowered into the furnace.

In a thermogravimetric analysis, the sample is placed on a small balance pan attached to one arm of an electromagnetic balance (Figure 8.11). The sample is lowered into an electric furnace and the furnace's temperature is increased at a fixed rate of few degrees per minute while continuously monitoring the sample's weight. The instrument usually includes a gas line for purging the volatile decomposition products out of the furnace, and a heat exchanger to dissipate the heat emitted by the furnace.

The best way to appreciate the theoretical and practical details discussed in this section is to carefully examine a typical volatilization gravimetric method. Although each method is unique, the determination of Si in ores and alloys by forming volatile SiF_4 provides an instructive example of a typical procedure. The description here is based on a procedure from Young, R. S. *Chemical Analysis in Extractive Metallurgy*, Griffen: London, 1971, pp. 302–304.

Representative Method 8.2

Determination of Si in Ores and Alloys

DESCRIPTION OF METHOD

Silicon is determined by dissolving the sample in acid and dehydrating to precipitate SiO_2 . Because a variety of other insoluble oxides also form, the precipitate's mass is not a direct measure of the amount of silicon in the sample. Treating the solid residue with HF results in the formation of volatile SiF_4 . The decrease in mass following the loss of SiF_4 provides an indirect measure of the amount of silicon in the original sample.

PROCEDURE

Transfer a sample of between 0.5 and 5.0 g to a platinum crucible along with an excess of Na_2CO_3 , and heat until a melt forms. After cooling,

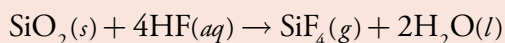
dissolve the residue in dilute HCl. Evaporate the solution to dryness on a steam bath and heat the residue, which contains SiO_2 and other solids, for one hour at 110°C . Moisten the residue with HCl and repeat the dehydration. Remove any acid soluble materials from the residue by adding 50 mL of water and 5 mL of concentrated HCl. Bring the solution to a boil and filter through #40 filter paper. Wash the residue with hot 2% v/v HCl followed by hot water. Evaporate the filtrate to dryness twice and, following the same procedure, treat to remove any acid-soluble materials. Combine the two precipitates, and dry and ignite to a constant weight at 1200°C . After cooling, add 2 drops of 50% v/v H_2SO_4 and 10 mL of HF. Remove the volatile SiF_4 by evaporating to dryness on a hot plate. Finally, bring the residue to constant weight by igniting at 1200°C .

#40 filter paper is a medium speed, ashless filter paper for filtering crystalline solids.

QUESTIONS

1. According to the procedure the sample should weigh between 0.5 and 5.0 g. How should you decide upon the amount of sample to use?

In this procedure the critical measurement is the decrease in mass following the volatilization of SiF_4 . The reaction responsible for the loss of mass is



Water and any excess HF are removed during the final ignition, and do not contribute to the change in mass. The loss in mass, therefore, is equivalent to the mass of SiO_2 present after the dehydration step. Every 0.1 g of Si in the original sample results in the loss of 0.21 g of SiO_2 .

[Problem 8.31](#) asks you to verify that this loss of mass is correct.

How much sample we use depends on what is an acceptable uncertainty when measuring mass. A 0.5-g sample that is 50% w/w in Si, for example, will lose 0.53 g. If we are using a balance that measures mass to the nearest ± 0.1 mg, then the relative uncertainty in mass is approximately $\pm 0.02\%$; this is a reasonable level of uncertainty for a gravimetric analysis. A 0.5 g sample that is only 5% w/w Si experiences a weight loss of only 0.053 g and has a relative uncertainty of $\pm 0.2\%$. In this case a larger sample is needed.

2. Why are acid-soluble materials removed before treating the dehydrated residue with HF?

Any acid-soluble materials in the sample will react with HF or H_2SO_4 . If the products of these reactions are volatile, or if they decompose at 1200°C , then the change in mass is not due solely to the volatilization of SiF_4 . As a result, we overestimate the amount of Si in our sample.

3. Why is H_2SO_4 added with the HF?

Many samples containing silicon also contain aluminum and iron, which, when dehydrating the sample, form Al_2O_3 and Fe_2O_3 . These oxides are potential interferents because they also form volatile fluorides. In the presence of H_2SO_4 , however, aluminum and iron preferentially form non-volatile sulfates. These sulfates eventually decompose back to their respective oxides when we heat the residue to 1200°C . As a result, the change in weight after treating with HF and H_2SO_4 is due only to the loss of SiF_4 .

8C.2 Quantitative Applications

Unlike precipitation gravimetry, which is rarely used as a standard method of analysis, volatilization gravimetric methods continue to play an important role in chemical analysis. Several important examples are discussed below.

INORGANIC ANALYSIS

Determining the inorganic ash content of an organic material, such as a polymer, is an example of a direct volatilization gravimetric analysis. After weighing the sample, it is placed in an appropriate crucible and the organic material carefully removed by combustion, leaving behind the inorganic ash. The crucible containing the residue is heated to a constant weight using either a burner or an oven before determining the mass of the inorganic ash.

Another example of volatilization gravimetry is the determination of dissolved solids in natural waters and wastewaters. In this method, a sample of water is transferred to a weighing dish and dried to a constant weight at either $103\text{--}105^\circ\text{C}$ or at 180°C . Samples dried at the lower temperature retain some occluded water and lose some carbonate as CO_2 . The loss of organic material, however, is minimal. At the higher temperature, the residue is free from occluded water, but the loss of carbonate is greater. In addition, some chloride, nitrate, and organic material is lost through thermal decomposition. In either case, the residue that remains after drying to a constant weight at 500°C is the amount of fixed solids in the sample, and the loss in mass provides an indirect measure of the sample's volatile solids.

Indirect analyses based on the weight of residue remaining after volatilization are commonly used in determining moisture in a variety of products, and in determining silica in waters, wastewaters, and rocks. Moisture is determined by drying a preweighed sample with an infrared lamp or a low temperature oven. The difference between the original weight and the weight after drying equals the mass of water lost.

ORGANIC ANALYSIS

The most important application of volatilization gravimetry is for the elemental analysis of organic materials. During combustion with pure O_2 , many elements, such as carbon and hydrogen, are released as gaseous combustion products, such as $CO_2(g)$ and $H_2O(g)$. Passing the combustion products through preweighed tubes containing selective absorbents and measuring the increases in mass provides a direct analysis for the mass of carbon and hydrogen in the organic material.

Alkaline metals and earths in organic materials can be determined by adding H_2SO_4 to the sample before combustion. After combustion is complete, the metal remains behind as a solid residue of metal sulfate. Silver, gold, and platinum can be determined by burning the organic sample, leaving a metallic residue of Ag, Au, or Pt. Other metals are determined by adding HNO_3 before combustion, leaving a residue of the metal oxide.

Volatilization gravimetry is also used to determine biomass in waters and wastewaters. Biomass is a water quality index that provides an indication of the total mass of organisms contained within a sample of water. A known volume of the sample is passed through a preweighed $0.45\text{-}\mu\text{m}$ membrane filter or a glass-fiber filter, and dried at 105°C for 24 h. The residue's mass provides a direct measure of biomass. If samples are known to contain a substantial amount of dissolved inorganic solids, the residue can be ignited at 500°C for one hour, volatilizing the biomass. The resulting inorganic residue is wetted with distilled water to rehydrate any clay minerals and dried to a constant weight at 105°C . The difference in mass before and after ignition provides an indirect measure of biomass.

QUANTITATIVE CALCULATIONS

For some applications, such as determining the amount of inorganic ash in a polymer, a quantitative calculation is straightforward and does not require a balanced chemical reaction. For other applications, however, the relationship between the analyte and the analytical signal depends upon the stoichiometry of any relevant reactions. Once again, a conservation of mass is useful when solving problems.

Example 8.5

A 101.3-mg sample of an organic compound containing chlorine is combusted in pure O_2 and the volatile gases collected in absorbent traps. The trap for CO_2 increases in mass by 167.6 mg and the trap for H_2O shows a 13.7-mg increase. A second sample of 121.8 mg is treated with concentrated HNO_3 producing Cl_2 , which subsequently reacts with Ag^+ , forming 262.7 mg of $AgCl$. Determine the compound's composition, as well as its empirical formula.

Instead of measuring mass, modern instruments for completing an elemental analysis use gas chromatography (Chapter 12) or infrared spectroscopy (Chapter 10) to monitor the gaseous decomposition products.

SOLUTION

A conservation of mass requires that all the carbon in the organic compound must be in the CO_2 produced during combustion; thus

$$167.6 \text{ mg CO}_2 \times \frac{1 \text{ g CO}_2}{1000 \text{ mg CO}_2} \times \frac{1 \text{ mol C}}{44.011 \text{ g CO}_2} \times \frac{12.011 \text{ g C}}{\text{mol C}} \times \frac{1000 \text{ mg C}}{\text{g C}} = 45.74 \text{ mg C}$$

$$\frac{45.74 \text{ mg C}}{101.3 \text{ mg sample}} \times 100 = 45.15\% \text{ w/w C}$$

Using the same approach for hydrogen and chlorine, we find that

$$13.7 \text{ mg H}_2\text{O} \times \frac{1 \text{ g H}_2\text{O}}{1000 \text{ mg H}_2\text{O}} \times \frac{2 \text{ mol H}}{18.015 \text{ g H}_2\text{O}} \times \frac{1.008 \text{ g H}}{\text{mol H}} \times \frac{1000 \text{ mg H}}{\text{g H}} = 1.533 \text{ mg H}$$

$$\frac{1.533 \text{ mg H}}{101.3 \text{ mg sample}} \times 100 = 1.51\% \text{ w/w H}$$

$$262.7 \text{ mg AgCl} \times \frac{1 \text{ g AgCl}}{1000 \text{ mg AgCl}} \times \frac{1 \text{ mol Cl}}{143.32 \text{ g AgCl}} \times \frac{35.453 \text{ g Cl}}{\text{mol Cl}} \times \frac{1000 \text{ mg Cl}}{\text{g Cl}} = 64.98 \text{ mg Cl}$$

$$\frac{64.98 \text{ mg Cl}}{121.8 \text{ mg sample}} \times 100 = 53.35\% \text{ w/w Cl}$$

Adding together the weight percents for C, H, and Cl gives a total of 100.01%; thus, the compound contains only these three elements. To determine the compound's empirical formula we note that a gram of sample contains 0.4515 g of C, 0.0151 g of H and 0.5335 g of Cl. Expressing each element in moles gives 0.0376 moles C, 0.0150 moles H and 0.0150 moles Cl. Hydrogen and chlorine are present in a 1:1 molar ratio. The molar ratio of C to moles of H or Cl is

$$\frac{\text{moles C}}{\text{moles H}} = \frac{\text{moles C}}{\text{moles Cl}} = \frac{0.0376}{0.0150} = 2.51 \approx 2.5$$

Thus, the simplest, or empirical formula for the compound is $\text{C}_5\text{H}_2\text{Cl}_2$.

In an indirect volatilization gravimetric analysis, the change in the sample's weight is proportional to the amount of analyte. Note that in the following example it is not necessary to apply a conservation of mass to relate the analytical signal to the analyte.

Example 8.6

A sample of slag from a blast furnace is analyzed for SiO_2 by decomposing a 0.5003-g sample with HCl, leaving a residue with a mass of 0.1414 g. After treating with HF and H_2SO_4 , and evaporating the volatile SiF_4 , a residue with a mass of 0.0183 g remains. Determine the %w/w SiO_2 in the sample.

SOLUTION

In this procedure the difference in the residue's mass before and after volatilizing SiF_4 gives the mass of SiO_2 in the sample; thus the sample contains

$$0.1414 \text{ g} - 0.0183 \text{ g} = 0.1231 \text{ g SiO}_2$$

and the %w/w SiO_2 is

$$\frac{0.1231 \text{ g SiO}_2}{0.5003 \text{ g}} \times 100 = 24.61\% \text{ w/w SiO}_2$$

Practice Exercise 8.7

Heating a 0.3317-g mixture of CaC_2O_4 and MgC_2O_4 yields a residue of 0.1794 g at 600 °C and a residue of 0.1294 g at 1000 °C. Calculate the %w/w CaC_2O_4 in the sample. You may wish to review your answer to [Practice Exercise 8.6](#) as you consider this problem.

Click [here](#) to review your answer to this exercise.

Finally, in some quantitative applications we can compare the result for a sample to a similar result obtained using a standard.

Example 8.7

A 26.23-mg sample of $\text{MgC}_2\text{O}_4 \cdot \text{H}_2\text{O}$ and inert materials is heated to constant weight at 1200 °C, leaving a residue weighing 20.98 mg. A sample of pure $\text{MgC}_2\text{O}_4 \cdot \text{H}_2\text{O}$, when treated in the same fashion, undergoes a 69.08% change in its mass. Determine the %w/w $\text{MgC}_2\text{O}_4 \cdot \text{H}_2\text{O}$ in the sample.

SOLUTION

The change in the sample's mass is 5.25 mg, which corresponds to

Alternatively, you can determine that the final product of the decomposition is MgO (see [Practice Exercise 8.6](#)) and use a conservation of mass for Mg to arrive at the same answer.

$$5.25 \text{ mg lost} \times \frac{100.0 \text{ mg MgC}_2\text{O}_4 \cdot \text{H}_2\text{O}}{69.08 \text{ mg lost}} = 7.60 \text{ mg MgC}_2\text{O}_4 \cdot \text{H}_2\text{O}$$

The %w/w MgC₂O₄•H₂O in the sample is

$$\frac{7.60 \text{ mg MgC}_2\text{O}_4 \cdot \text{H}_2\text{O}}{26.23 \text{ mg sample}} \times 100 = 29.0\% \text{ w/w MgC}_2\text{O}_4 \cdot \text{H}_2\text{O}$$

8C.3 Evaluating Volatilization Gravimetry

The scale of operation, accuracy, and precision of a gravimetric volatilization method is similar to that described in Section 8B.4 for precipitation gravimetry. The sensitivity of a direct analysis is fixed by the analyte's chemical form following combustion or volatilization. We can improve the sensitivity of an indirect analysis by choosing conditions that give the largest possible change in mass. For example, the thermogram in [Figure 8.10](#) shows us that an indirect analysis for CaC₂O₄•H₂O is more sensitive if we measure the change in mass following ignition at 1000 °C than if we ignite the sample at 300 °C.

Selectivity is not a problem for a direct analysis if we trap the analyte using a selective absorbent trap. A direct analysis based on the residue's weight following combustion or volatilization is possible if the residue only contains the analyte of interest. As noted earlier, an indirect analysis is only feasible when the change in mass results from the loss of a single volatile product containing the analyte.

Volatilization gravimetric methods are time and labor intensive. Equipment needs are few, except when combustion gases must be trapped, or for a thermogravimetric analysis, when specialized instrumentation is needed.

8D Particulate Gravimetry

Precipitation and volatilization gravimetric methods require that the analyte, or some other species in the sample, participate in a chemical reaction. In a direct precipitation gravimetric analysis, for example, we convert a soluble analyte into an insoluble form that precipitates from solution. In some situations, however, the analyte is already present as in a particulate form that is easy to separate from its liquid, gas, or solid matrix. When such a separation is possible, we can determine the analyte's mass without relying on a chemical reaction.

8D.1 Theory and Practice

There are two methods for separating a particulate analyte from its matrix. The most common method is filtration, in which we separate solid par-

A particulate is any tiny portion of matter, whether it is a speck of dust, a globule of fat, or a molecule of ammonia. For particulate gravimetry we simply need a method for collecting the particles and a balance for measuring their mass.

ticulates from their gas, liquid, or solid matrix. A second method, which is useful for gas particles, solutes, and solids, is an extraction.

FILTRATION

To separate solid particulates from their matrix we use gravity or apply suction from a vacuum pump or aspirator to pull the sample through a filter. The type of filter we use depends upon the size of the solid particles and the sample's matrix. Filters for liquid samples are constructed from a variety of materials, including cellulose fibers, glass fibers, cellulose nitrate, and polytetrafluoroethylene (PTFE). Particle retention depends on the size of the filter's pores. Cellulose fiber filter papers range in pore size from 30 μm to 2–3 μm . Glass fiber filters, manufactured using chemically inert borosilicate glass, are available with pore sizes between 2.5 μm and 0.3 μm . Membrane filters, which are made from a variety of materials, including cellulose nitrate and PTFE, are available with pore sizes from 5.0 μm to 0.1 μm .

Solid aerosol particulates are collected using either a single-stage or a multiple-stage filter. In a single-stage system, we pull the gas through a single filter, retaining particles larger than the filter's pore size. When collecting samples from a gas line, we place the filter directly in the line. Atmospheric gases are sampled with a high volume sampler that uses a vacuum pump to pull air through the filter at a rate of approximately 75 m^3/h . In either case, the filtering media for liquid samples also can be used to collect aerosol particulates. In a multiple-stage system, a series of filtering units separates and the particles in two or more size ranges.

The particulates in a solid matrix are separated by size using one or more sieves (Figure 8.12). Sieves are available in a variety of mesh sizes ranging from approximately 25 mm to 40 μm . By stacking sieves of different mesh size, we can isolate particulates into several narrow size ranges. Using the sieves in Figure 8.12, for example, we can separate a solid into particles with diameters $>1700 \mu\text{m}$, with diameters between 1700 μm and 500 μm , with diameters between 500 μm and 250 μm , and those with a diameter $<250 \mu\text{m}$.

EXTRACTION

Filtering limits particulate gravimetry to solid analytes that are easily separated from their matrix. We can extend particulate gravimetry to the analysis of gas phase analytes, solutes, and poorly filterable solids by extracting them with a suitable solvent. After the extraction, we evaporate the solvent before determining the analyte's mass. Alternatively, we can determine the analyte indirectly by measuring the change in the sample's mass after extracting the analyte. Solid-phase extractions, such as those described in [Chapter 7](#), also may be used.

For additional information, see our earlier discussion in this chapter on [filtering precipitates](#), and the discussion in [Chapter 7](#) of separations based on size.



Figure 8.12 Three sieves with, from left to right, mesh sizes of 1700 μm , 500 μm , and 250 μm . Source: [BMK](#) (commons.wikimedia.com).

For a more detailed review of extractions, see [Chapter 7](#).

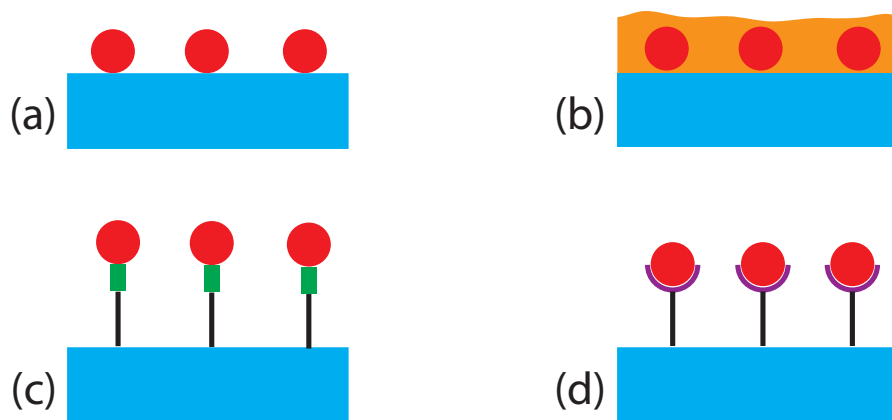


Figure 8.13 Four possible mechanisms for the solid-state extraction of an analyte: (a) adsorption onto a solid substrate; (b) absorption into a thin polymer film or chemical film coated on a solid substrate; (c) metal–ligand complexation in which the ligand is covalently bound to the solid substrate using an organic tether; and (d) antibody–antigen binding in which the receptor is covalently bound to the solid substrate using an organic tether.

Another method for extracting an analyte from its matrix is by adsorption onto a solid substrate, by absorption into a thin polymer or chemical film coated on a solid substrate, or by chemically binding to a suitable receptor that is covalently bound to a solid substrate (Figure 8.13). Adsorption, absorption, and binding occur at the interface between the solution containing the analyte and the substrate’s surface, the thin film, or the receptor. Although the amount of extracted analyte is too small to measure using a conventional balance, it can be measured using a quartz crystal microbalance.

The measurement of mass using a **QUARTZ CRYSTAL MICROBALANCE** takes advantage of the piezoelectric effect.¹⁰ The application of an alternating electrical field across a quartz crystal induces an oscillatory vibrational motion in the crystal. Every quartz crystal vibrates at a characteristic resonant frequency that depends on the crystal’s properties, including the mass per unit area of any material coated on the crystal’s surface. The change in mass following adsorption, absorption, or binding of the analyte, therefore, can be determined by monitoring the change in the quartz crystal’s characteristic resonant frequency. The exact relationship between the change in frequency and mass is determined by a calibration curve.

8D.2 Quantitative Applications

Particulate gravimetry is important in the environmental analysis of water, air, and soil samples. The analysis for suspended solids in water samples, for example, is accomplished by filtering an appropriate volume of a well-

If you own a wristwatch, there is a good chance that its operation relies on a quartz crystal. The piezoelectric properties of quartz were discovered in 1880 by Paul-Jacques Currie and Pierre Currie. Because the oscillation frequency of a quartz crystal is so precise, it quickly found use in the keeping of time. The first quartz clock was built in 1927 at the Bell Telephone labs, and Seiko introduced the first quartz wristwatches in 1969.

¹⁰ (a) Ward, M. D.; Buttry, D. A. *Science* **1990**, *249*, 1000–1007; (b) Grate, J. W.; Martin, S. J.; White, R. M. *Anal. Chem.* **1993**, *65*, 940A–948A; (c) Grate, J. W.; Martin, S. J.; White, R. M. *Anal. Chem.* **1993**, *65*, 987A–996A.

mixed sample through a glass fiber filter and drying the filter to constant weight at 103–105 °C.

The microbiological testing of water also uses particulate gravimetry. One example is the analysis for coliform bacteria in which an appropriate volume of sample is passed through a sterilized 0.45- μm membrane filter. The filter is placed on a sterilized absorbent pad saturated with a culturing medium and incubated for 22–24 hours at 35 ± 0.5 °C. Coliform bacteria are identified by the presence of individual bacterial colonies that form during the incubation period (Figure 8.14). As with qualitative applications of precipitation gravimetry, the signal in this case is a visual observation rather than a measurement of mass.

Total airborne particulates are determined using a high-volume air sampler equipped with either cellulose fiber or glass fiber filters. Samples from urban environments require approximately 1 h of sampling time, but samples from rural environments require substantially longer times.

Grain size distributions for sediments and soils are used to determine the amount of sand, silt, and clay in a sample. For example, a grain size of 2 mm serves as the boundary between gravel and sand. The grain size for the sand–silt and the silt–clay boundaries are 1/16 mm and 1/256 mm, respectively.

Several standard quantitative analytical methods for agricultural products are based on measuring the sample's mass following a selective solvent extraction. For example, the crude fat content in chocolate can be determined by extracting with ether for 16 hours in a Soxhlet extractor. After the extraction is complete, the ether is allowed to evaporate and the residue is weighed after drying at 100 °C. This analysis has also been accomplished indirectly by weighing a sample before and after extracting with supercritical CO_2 .

Quartz crystal microbalances equipped with thin film polymer films or chemical coatings have found numerous quantitative applications in environmental analysis. Methods have been reported for the analysis of a variety of gaseous pollutants, including ammonia, hydrogen sulfide, ozone, sulfur dioxide, and mercury. Biochemical particulate gravimetric sensors also have been developed. For example, a piezoelectric immunosensor has been developed that shows a high selectivity for human serum albumin, and is capable of detecting microgram quantities.¹¹

QUANTITATIVE CALCULATIONS

The result of a quantitative analysis by particulate gravimetry is just the ratio, using appropriate units, of the amount of analyte relative to the amount of sample.

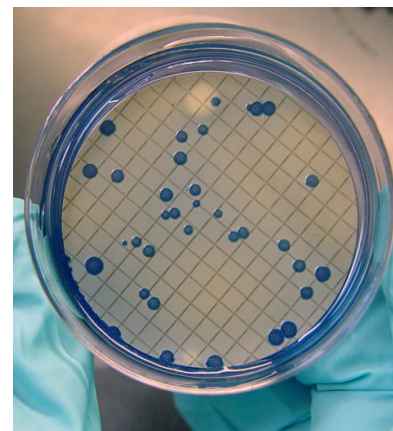


Figure 8.14 Colonies of fecal coliform bacteria from a water supply. Source: Susan Boyer. Photo courtesy of ARS–USDA (www.ars.usda.gov).

¹¹ Muratsugu, M.; Ohta, F.; Miya, Y.; Hosokawa, T.; Kurosawa, S.; Kamo, N.; Ikeda, H. *Anal. Chem.* **1993**, *65*, 2933–2937.

Example 8.8

A 200.0-mL sample of water was filtered through a pre-weighed glass fiber filter. After drying to constant weight at 105 °C, the filter was found to have increased in mass by 48.2 mg. Determine the sample's total suspended solids.

SOLUTION

A ppm is equivalent to a mg of analyte per liter of solution; thus, the total suspended solids for the sample is

$$\frac{48.2 \text{ mg solids}}{0.2000 \text{ L sample}} = 241 \text{ ppm solids}$$

8D.3 Evaluating Particulate Gravimetry

The scale of operation and detection limit for particulate gravimetry can be extended beyond that of other gravimetric methods by increasing the size of the sample taken for analysis. This is usually impracticable for other gravimetric methods because of the difficulty of manipulating a larger sample through the individual steps of the analysis. With particulate gravimetry, however, the part of the sample that is not analyte is removed when filtering or extracting. Consequently, particulate gravimetry is easily extended to the analysis of trace-level analytes.

Except for methods relying on a quartz crystal microbalance, particulate gravimetry uses the same balances as other gravimetric methods, and is capable of achieving similar levels of accuracy and precision. Since particulate gravimetry is defined in terms of the mass of the particle itself, the sensitivity of the analysis is given by the balance's sensitivity. Selectivity, on the other hand, is determined either by the filter's pore size, or by the properties of the extracting phase. Because it requires a single step, particulate gravimetric methods based on filtration generally require less time, labor and capital than other gravimetric methods.

8E Key Terms

As you review this chapter, try to define a key term in your own words. Check your answer by clicking on the key term, which will take you to the page where it was first introduced. Clicking on the **KEY TERM** there, will bring you back to this page so that you can continue with another key term.

coagulation	conservation of mass	coprecipitate
definitive technique	digestion	direct analysis
electrogravimetry	gravimetry	homogeneous precipitation
ignition	inclusion	indirect analysis
occlusion	particulate gravimetry	peptization
precipitant	precipitation gravimetry	quartz crystal microbalance
relative supersaturation	reprecipitation	supernatant
surface adsorbate	thermogram	thermogravimetry
volatilization gravimetry		

8F Chapter Summary

In a gravimetric analysis, a measurement of mass or a change in mass provides quantitative information about the analyte. The most common form of gravimetry uses a precipitation reaction to generate a product whose mass is proportional to the amount of analyte. In many cases the precipitate includes the analyte; however, an indirect analysis in which the analyte causes the precipitation of another compound also is possible. Precipitation gravimetric procedures must be carefully controlled to produce precipitates that are easy to filter, free from impurities, and of known stoichiometry.

In volatilization gravimetry, thermal or chemical energy decomposes the sample containing the analyte. The mass of residue remaining after decomposition, the mass of volatile products collected with a suitable trap, or a change in mass due to the loss of volatile material are all gravimetric measurements.

When the analyte is already present in a particulate form that is easy to separate from its matrix, then a particulate gravimetric analysis may be feasible. Examples include the determination of dissolved solids and the determination of fat in foods.

8G Problems

- Starting with the equilibrium constant expressions for [reaction 8.1](#), and [reactions 8.3–8.5](#), verify that [equation 8.7](#) is correct.
- [Equation 8.7](#) explains how the solubility of AgCl varies as a function of the equilibrium concentration of Cl^- . Derive a similar equation that describes the solubility of AgCl as a function of the equilibrium concentration of Ag^+ . Graph the resulting solubility function and compare it to that shown in [Figure 8.1](#).
- Construct a solubility diagram for $\text{Zn}(\text{OH})_2$ that takes into account the following soluble zinc-hydroxide complexes: $\text{Zn}(\text{OH})^+$, $\text{Zn}(\text{OH})_3^-$, and $\text{Zn}(\text{OH})_4^{2-}$. What is the optimum pH for quantitatively precipitating $\text{Zn}(\text{OH})_2$? For your solubility diagram, plot $\log(S)$ on the y -axis and pH on the x -axis. See the [appendices](#) for relevant equilibrium constants.
- Starting with [equation 8.10](#), verify that [equation 8.11](#) is correct.
- For each of the following precipitates, use a ladder diagram to identify the pH range where the precipitates has its lowest solubility? See the [appendices](#) for relevant equilibrium constants.
 - CaC_2O_4
 - PbCrO_4
 - BaSO_4
 - SrCO_3
 - ZnS

6. Mixing solutions of 1.5 M KNO_3 and 1.5 M HClO_4 produces a white precipitate of KClO_4 . If permanganate ions are present, an inclusion of KMnO_4 is possible. Impure precipitates of KClO_4 are purple if an inclusion of KMnO_4 is present. Shown below are descriptions of two experiments in which KClO_4 is precipitated in the presence of MnO_4^- . Explain why the experiments lead to the different results shown in Figure 8.15.




Figure 8.15 Results for the experiments in Problem 8.6. (a) Experiment 1; (b) Experiment 2.

Experiment 1. Place 1 mL of 1.5 M KNO_3 in a test tube, add 3 drops of 0.1 M KMnO_4 , and swirl to mix. Add 1 mL of 1.5 M HClO_4 dropwise, agitating the solution between drops. Destroy the excess KMnO_4 by adding 0.1 M NaHSO_3 dropwise. The resulting precipitate of KClO_4 has an intense purple color.

Experiment 2. Place 1 mL of 1.5 M HClO_4 in a test tube, add 3 drops of 0.1 M KMnO_4 , and swirl to mix. Add 1 mL of 1.5 M KNO_3 dropwise, agitating the solution between drops. Destroy the excess KMnO_4 by adding 0.1 M NaHSO_3 dropwise. The resulting precipitate of KClO_4 has a pale purple in color.

7. Mixing solutions of $\text{Ba}(\text{SCN})_2$ and MgSO_4 produces a precipitate of BaSO_4 . Shown below are the descriptions and results for three experiments using different concentrations of $\text{Ba}(\text{SCN})_2$ and MgSO_4 . Explain why these experiments produce different results.

Experiment 1. When equal volumes of 3.5 M $\text{Ba}(\text{SCN})_2$ and 3.5 M MgSO_4 are mixed, a gelatinous precipitate immediately forms.

Experiment 2. When equal volumes of 1.5 M $\text{Ba}(\text{SCN})_2$ and 1.5 M MgSO_4 are mixed, a curdy precipitate immediately forms. Individual particles of BaSO_4 can be seen as points under a magnification of $1500\times$ (a particle size less than $0.2\ \mu\text{m}$).

Experiment 3. When equal volumes of 0.5 mM $\text{Ba}(\text{SCN})_2$ and 0.5 mM MgSO_4 are mixed, the complete precipitation of BaSO_4 requires 2–3 h. Individual crystals of BaSO_4 obtain lengths of approximately $5\ \mu\text{m}$.

8. Aluminum is determined gravimetrically by precipitating $\text{Al}(\text{OH})_3$ and isolating Al_2O_3 . A sample containing approximately 0.1 grams of Al is dissolved in 200 mL of H_2O , and 5 grams of NH_4Cl and a few drops of methyl red indicator are added (methyl red is red at pH levels below 4 and yellow at pH levels above 6). The solution is heated to boiling and 1:1 NH_3 is added dropwise till the indicator turns yellow, precipitating $\text{Al}(\text{OH})_3$. The precipitate is held at the solution's boiling point for several minutes before filtering and rinsing with a hot solution of 2% w/v NH_4NO_3 . The precipitate is then ignited at $1000\text{--}1100^\circ\text{C}$, forming Al_2O_3 .

- (a) Cite two ways in which this procedure encourages the formation of larger particles of precipitate.
- (b) The ignition step must be carried out carefully to ensure the quantitative conversion of $\text{Al}(\text{OH})_3$ to Al_2O_3 . What is the effect of an incomplete conversion on the %w/w Al?
- (c) What is the purpose of adding NH_4Cl and methyl red indicator?
- (d) An alternative procedure involves isolating and weighing the precipitate as the 8-hydroxyquinolate, $\text{Al}(\text{C}_9\text{H}_6\text{ON})_3$. Why might this be a more advantageous form of Al for a gravimetric analysis? Are there any disadvantages?
9. Calcium is determined gravimetrically by precipitating $\text{CaC}_2\text{O}_4 \cdot \text{H}_2\text{O}$ and isolating CaCO_3 . After dissolving a sample in 10 mL of water and 15 mL of 6 M HCl, the resulting solution is heated to boiling and a warm solution of excess ammonium oxalate is added. The solution is maintained at 80°C and 6 M NH_3 is added dropwise, with stirring, until the solution is faintly alkaline. The resulting precipitate and solution are removed from the heat and allowed to stand for at least one hour. After testing the solution for completeness of precipitation, the sample is filtered, rinsed with 0.1% w/v ammonium oxalate, and dried at $100\text{--}120^\circ\text{C}$ for 1 hour. The precipitate is transferred to a muffle furnace where it is converted to CaCO_3 by drying at $500 \pm 25^\circ\text{C}$ until constant weight.
- (a) Why is the precipitate of $\text{CaC}_2\text{O}_4 \cdot \text{H}_2\text{O}$ converted to CaCO_3 ?
- (b) In the final step, if the sample is heated at too high of a temperature some CaCO_3 may be converted to CaO . What effect would this have on the reported %w/w Ca?
- (c) Why is the precipitant, $(\text{NH}_4)_2\text{C}_2\text{O}_4$, added to a hot, acidic solution instead of a cold, alkaline solution?
10. Iron is determined gravimetrically by precipitating as $\text{Fe}(\text{OH})_3$ and igniting to Fe_2O_3 . After dissolving a sample in 50 mL of H_2O and 10 mL of 6 M HCl, any Fe^{2+} is converted Fe^{3+} by oxidizing with 1–2 mL of concentrated HNO_3 . The sample is heated to remove the oxides of nitrogen and the solution is diluted to 200 mL. After bringing the solution to a boil, $\text{Fe}(\text{OH})_3$ is precipitated by slowly adding 1:1 NH_3 until the odor of NH_3 is detected. The solution is boiled for an additional minute and the precipitate is allowed to settle. The precipitate is then filtered and rinsed with several portions of hot 1% w/v NH_4NO_3 until no Cl^- is found in the wash water. Finally, the precipitate is ignited to constant weight at $500\text{--}550^\circ\text{C}$ and weighed as Fe_2O_3 .

- (a) If ignition is not carried out under oxidizing conditions (plenty of O_2 present), the final product may contain Fe_3O_4 . What effect would this have on the reported %w/w Fe?
- (b) The precipitate is washed with a dilute solution of NH_4NO_3 . Why is NH_4NO_3 added to the wash water?
- (c) Why does the procedure call for adding NH_3 until the odor of ammonia is detected?
- (d) Describe how you might test the filtrate for Cl^- .

11. Sinha and Shome described a gravimetric method for molybdenum in which it is precipitated as $MoO_2(C_{13}H_{10}NO_2)_2$ using *n*-benzoylphenylhydroxylamine, $C_{13}H_{11}NO_2$, as a precipitant.¹² The precipitate is weighed after igniting to MoO_3 . As part of their study, the authors determined the optimum conditions for the analysis. Samples containing 0.0770 g of Mo were taken through the procedure while varying the temperature, the amount of precipitant added, and the pH of the solution. The solution volume was held constant at 300 mL for all experiments. A summary of their results are shown in the following table.

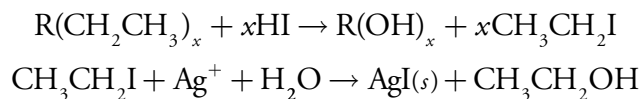
Temperature (°C)	Mass (g) of precipitant	Volume (mL) of 10 M HCl	Mass (g) of MoO_3
30	0.20	0.9	0.0675
30	0.30	0.9	0.1014
30	0.35	0.9	0.1140
30	0.42	0.9	0.1155
30	0.42	0.3	0.1150
30	0.42	18.0	0.1152
30	0.42	48.0	0.1160
30	0.42	75.0	0.1159
50	0.42	0.9	0.1156
75	0.42	0.9	0.1158
80	0.42	0.9	0.1129

Considering these results, discuss the optimum conditions for determining Mo by this method. Express your results for the precipitant as the minimum %w/v in excess, needed to ensure a quantitative precipitation.

12. A sample of an impure iron ore is approximately 55% w/w Fe. The amount of Fe in the sample is to be determined gravimetrically by isolating it as Fe_2O_3 . What mass of sample do you need to ensure that you isolate at least 1 g of Fe_2O_3 ?

¹² Sinha, S. K.; Shome, S. C. *Anal. Chim. Acta* **1960**, *24*, 33–36.

13. The concentration of arsenic in an insecticide is determined gravimetrically by precipitating $\text{MgNH}_4\text{AsO}_4$ and isolating $\text{Mg}_2\text{As}_2\text{O}_7$. Determine the %w/w As_2O_3 in a 1.627-g sample of insecticide if it yields 106.5 mg of $\text{Mg}_2\text{As}_2\text{O}_7$.
14. After preparing a sample of alum, $\text{K}_2\text{SO}_4 \cdot \text{Al}_2(\text{SO}_4)_3 \cdot 24\text{H}_2\text{O}$, a student determined its purity by dissolving a 1.2391-g sample and precipitating the aluminum as $\text{Al}(\text{OH})_3$. After filtering, rinsing, and igniting, 0.1357 g of Al_2O_3 is obtained. What is the purity of the alum preparation?
15. To determine the amount of iron in a dietary supplement, a random sample of 15 tablets weighing a total of 20.505 g was ground into a fine powder. A 3.116-g sample was dissolved and treated to precipitate the iron as $\text{Fe}(\text{OH})_3$. The precipitate was collected, rinsed, and ignited to a constant weight as Fe_2O_3 , yielding 0.355 g. Report the iron content of the dietary supplement as g $\text{FeSO}_4 \cdot 7\text{H}_2\text{O}$ per tablet.
16. A 1.4639-g sample of limestone was analyzed for Fe, Ca, and Mg. The iron was determined as Fe_2O_3 yielding 0.0357 g. Calcium was isolated as CaSO_4 , yielding a precipitate of 1.4058 g, and Mg was isolated as 0.0672 g of $\text{Mg}_2\text{As}_2\text{O}_7$. Report the amount of Fe, Ca, and Mg in the limestone sample as %w/w Fe_2O_3 , %w/w CaO, and %w/w MgO.
17. The number of ethoxy groups ($\text{CH}_3\text{CH}_2\text{O}-$) in an organic compound is determined by the following two reactions.



A 36.92-mg sample of an organic compound with an approximate molecular weight of 176 was treated in this fashion, yielding 0.1478 g of AgI. How many ethoxy groups are there in each molecule of the compound?

18. A 516.7-mg sample containing a mixture of K_2SO_4 and $(\text{NH}_4)_2\text{SO}_4$ was dissolved in water and treated with BaCl_2 , precipitating the SO_4^{2-} as BaSO_4 . The resulting precipitate was isolated by filtration, rinsed free of impurities, and dried to a constant weight, yielding 863.5 mg of BaSO_4 . What is the %w/w K_2SO_4 in the sample?
19. The amount of iron and manganese in an alloy can be determined by precipitating the metals with 8-hydroxyquinoline, $\text{C}_9\text{H}_7\text{NO}$. After weighing the mixed precipitate, the precipitate is dissolved and the amount of 8-hydroxyquinoline determined by another method. In a typical analysis a 127.3-mg sample of an alloy containing iron, manga-

nese, and other metals was dissolved in acid and treated with appropriate masking agents to prevent an interference from other metals. The iron and manganese were precipitated and isolated as $\text{Fe}(\text{C}_9\text{H}_6\text{NO})_3$ and $\text{Mn}(\text{C}_9\text{H}_6\text{NO})_2$, yielding a total mass of 867.8 mg. The amount of 8-hydroxyquinolate in the mixed precipitate was determined to be 5.276 mmol. Calculate the %w/w Fe and %w/w Mn in the alloy.

20. A 0.8612-g sample of a mixture of NaBr, NaI, and NaNO_3 was analyzed by adding AgNO_3 and precipitating a 1.0186-g mixture of AgBr and AgI. The precipitate was then heated in a stream of Cl_2 , converting it to 0.7125 g of AgCl. Calculate the %w/w NaNO_3 in the sample.

20. The earliest determinations of elemental atomic weights were accomplished gravimetrically. In determining the atomic weight of manganese, a carefully purified sample of MnBr_2 weighing 7.16539 g was dissolved and the Br^- precipitated as AgBr, yielding 12.53112 g. What is the atomic weight for Mn if the atomic weights for Ag and Br are taken to be 107.868 and 79.904, respectively?

22. While working as a laboratory assistant you prepared 0.4 M solutions of AgNO_3 , $\text{Pb}(\text{NO}_3)_2$, BaCl_2 , KI and Na_2SO_4 . Unfortunately, you became distracted and forgot to label the solutions before leaving the laboratory. Realizing your error, you label the solutions A–E and perform all possible binary mixings of the five solutions, obtaining the results shown in Figure 8.16 (key: NP means no precipitate formed, W means a white precipitate formed, and Y means a yellow precipitate formed). Identify solutions A–E.

	A	B	C	D	E
A		NP	Y	NP	W
B			Y	W	W
C				NP	NP
D					W

Figure 8.16 Results of the binary mixing of solutions A–E for Problem 8.22.

23. A solid sample has approximately equal amounts of two or more of the following soluble salts: AgNO_3 , ZnCl_2 , K_2CO_3 , MgSO_4 , $\text{Ba}(\text{C}_2\text{H}_3\text{O}_2)_2$, and NH_4NO_3 . A sample of the solid, sufficient to give at least 0.04 moles of any single salt, was added to 100 mL of water, yielding a white precipitate and a clear solution. The precipitate was collected and rinsed with water. When a portion of the precipitate was placed in dilute HNO_3 it completely dissolved, leaving a colorless solution. A second portion of the precipitate was placed in dilute HCl, yielding a precipitate and a clear solution. Finally, the filtrate from the original precipitate was treated with excess NH_3 , yielding a white precipitate. Identify the salts that must be present in the sample, the salts that must be absent and the salts for which there is insufficient information to make this determination.¹³

24. Two methods have been proposed for the analysis of sulfur in impure samples of pyrite, FeS_2 . Sulfur can be determined in a direct analysis by

¹³ Adapted from Sorum, C. H.; Lagowski, J. J. *Introduction to Semimicro Qualitative Analysis*, Prentice-Hall: Englewood Cliffs, N. J., 5th Ed., 1977, p. 285.

oxidizing it to SO_4^{2-} and precipitating it as BaSO_4 . An indirect analysis is possible if the iron is precipitated as $\text{Fe}(\text{OH})_3$ and isolated as Fe_2O_3 . Which of these methods will provide a more sensitive determination for sulfur? What other factors should you consider in choosing between these methods?

25. A sample of impure pyrite known to be approximately 90–95% w/w FeS_2 is to be analyzed by oxidizing the sulfur to SO_4^{2-} and precipitating it as BaSO_4 . How many grams of the sample must you take to form at least 1 g of BaSO_4 ?
26. A series of samples containing any possible combination of KCl , NaCl , and NH_4Cl is to be analyzed by adding AgNO_3 and precipitating AgCl . What is the minimum volume of 5% w/v AgNO_3 necessary to completely precipitate the chloride in any 0.5-g sample?
27. If a precipitate of known stoichiometry does not form, a gravimetric analysis is still feasible if we can establish experimentally the mole ratio between the analyte and the precipitate. Consider, for example, the precipitation gravimetric analysis of Pb as PbCrO_4 .¹⁴
 - (a) For each gram of Pb , how many grams of PbCrO_4 should form?
 - (b) In a study of this procedure, Grote found that 1.568 g of PbCrO_4 formed for each gram of Pb . What is the apparent stoichiometry between Pb and PbCrO_4 ?
 - (c) Does failing to account for the actual stoichiometry lead to a positive determinate error or a negative determinate error?
28. Determine the uncertainty for the gravimetric analysis described in [Example 8.1](#). The expected accuracy for a gravimetric method is 0.1–0.2%. What additional sources of error might account for the difference between your estimated uncertainty and the expected accuracy?
29. A 38.63-mg sample of potassium ozonide, KO_3 , was heated to 70 °C for 1 h, undergoing a weight loss of 7.10 mg. A 29.6-mg sample of impure KO_3 experiences a 4.86-mg weight loss when treated under similar condition. What is the %w/w KO_3 in the sample?
30. The water content of an 875.4-mg sample of cheese was determined with a moisture analyzer. What is the %w/w H_2O in the cheese if the final mass was found to be 545.8 mg?
31. [Representative Method 8.2](#) describes a procedure for determining Si in ores and alloys. In this analysis a weight loss of 0.21 g corresponds to 0.1 g of Si . Show that this relationship is correct.

¹⁴ Grote, F. Z. *Anal. Chem.* **1941**, *122*, 395–398.

32. The iron in an organometallic compound was determined by treating a 0.4873-g sample with HNO_3 and heating to volatilize the organic material. After ignition, the residue of Fe_2O_3 weighed 0.2091 g.
- What is the %w/w Fe in this compound?
 - The carbon and hydrogen in a second sample of the compound were determined by a combustion analysis. When a 0.5123-g sample was carried through the analysis, 1.2119 g of CO_2 and 0.2482 g of H_2O were collected. What are the %w/w C and %w/w H in this compound and what is the compound's empirical formula?
33. A polymer's ash content is determined by placing a weighed sample in a Pt crucible that has been previously brought to a constant weight. The polymer is melted under gentle heating from a Bunsen burner until the volatile vapor ignites. The polymer is allowed to burn until only a non-combustible residue remains. The residue is brought to constant weight at 800°C in a muffle furnace. The following data were collected during the analysis of two samples of a polymer resin.

Polymer A	g crucible	g crucible + polymer	g crucible + ash
replicate 1	19.1458	21.2287	19.7717
replicate 2	15.9193	17.9522	16.5310
replicate 3	15.6992	17.6660	16.2909

Polymer B	g crucible	g crucible + polymer	g crucible + ash
replicate 1	19.1457	21.0693	19.7187
replicate 2	15.6991	12.8273	16.3327
replicate 3	15.9196	17.9037	16.5110

- For each polymer, determine the mean and the standard deviation for the %w/w ash.
 - Is there any evidence at $\alpha = 0.05$ for a significant difference between the two polymers? See the [appendices](#) for statistical tables.
34. In the presence of water vapor the surface of zirconia, ZrO_2 , chemically adsorbs H_2O , forming surface hydroxyls, ZrOH (additional water is physically adsorbed as H_2O). When heated above 200°C , the surface hydroxyls convert to $\text{H}_2\text{O}(g)$, releasing one molecule of water for every two surface hydroxyls. Below 200°C only physically absorbed water is lost. Nawrocki, et al. used thermogravimetry to determine the density of surface hydroxyls on a sample of zirconia that was heated to 700°C and cooled in a desiccator containing humid N_2 .¹⁵ Heating the sample from 200°C to 900°C released 0.006 g of H_2O for every gram of dehydroxylated ZrO_2 . Given that the zirconia had a surface area of $33 \text{ m}^2/\text{g}$

¹⁵ Nawrocki, J.; Carr, P. W.; Annen, M. J.; Froelicher, S. *Anal. Chim. Acta* **1996**, *327*, 261–266.

and that one molecule of H_2O forms two surface hydroxyls, calculate the density of surface hydroxyls in $\mu\text{mol}/\text{m}^2$.

35. The concentration of airborne particulates in an industrial workplace was determined by pulling the air through a single-stage air sampler equipped with a glass-fiber filter. The air was sampled for 20 min at a rate of $75 \text{ m}^3/\text{h}$. At the end of the sampling period, the filter's mass was found to have increased by 345.2 mg. What is the concentration of particulates in the air sample in mg/m^3 and mg/L ?
36. The fat content of potato chips is determined indirectly by weighing a sample before and after extracting the fat with supercritical CO_2 . The following data were obtained for the analysis of potato chips.¹⁶

Sample Number	Initial Mass (g)	Final Mass (g)
1	1.1661	0.9253
2	1.1723	0.9252
3	1.2525	0.9850
4	1.2280	0.9562
5	1.2837	1.0119

- (a) Determine the mean and standard deviation for the %w/w fat.
- (b) This sample of potato chips is known to have a fat content of 22.7% w/w. Is there any evidence for a determinate error at $\alpha = 0.05$? See the [appendices](#) for statistical tables.
37. Delumyea and McCleary reported results for the %w/w organic material in sediment samples collected at different depths from a cove on the St. Johns River in Jacksonville, FL.¹⁷ After collecting a sediment core, they sectioned it into 2-cm increments. Each increment was treated using the following procedure:
- (a) The sediment was placed in 50 mL of deionized water and the resulting slurry filtered through preweighed filter paper;
- (b) The filter paper and the sediment were placed in a preweighed evaporating dish and dried to a constant weight in an oven at 110°C ;
- (c) The evaporating dish containing the filter paper and the sediment were transferred to a muffle furnace where the filter paper and any organic material in the sample were removed by ashing;
- (d) Finally, the inorganic residue remaining after ashing was weighed.

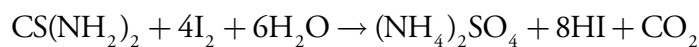
Using the following data, determine the %w/w organic material as a function of the average depth for each increment.

¹⁶ *Fat Determination by SFE*, ISCO, Inc. Lincoln, NE.

¹⁷ Delumyea, R. D.; McCleary, D. L. *J. Chem. Educ.* **1993**, *70*, 172–173.

Depth (cm)	Mass (g) of...		Mass (g) of Filter Paper, Dish, and Sediment...	
	Filter Paper	Dish	After Drying	After Ashing
0–2	1.590	43.21	52.10	49.49
2–4	1.745	40.62	48.83	46.00
4–6	1.619	41.23	52.86	47.84
6–8	1.611	42.10	50.59	47.13
8–10	1.658	43.62	51.88	47.53
10–12	1.628	43.24	49.45	45.31
12–14	1.633	43.08	47.92	44.20
14–16	1.630	43.96	58.31	55.53
16–18	1.636	43.36	54.37	52.75

38. Yao, et al. recently described a method for the quantitative analysis of thiourea based on its reaction with I_2 .¹⁸



The procedure calls for placing a 100- μ L aqueous sample containing thiourea in a 60-mL separatory funnel and adding 10 mL of a pH 7 buffer and 10 mL of 12 μ M I_2 in CCl_4 . The contents of the separatory funnel are shaken and the organic and aqueous layers allowed to separate. The organic layer, which contains the excess I_2 , is transferred to the surface of a piezoelectric crystal on which a thin layer of Au has been deposited. After allowing the I_2 to adsorb to the Au, the CCl_4 is removed and the crystal's frequency shift, Δf , measured. The following data is reported for a series of thiourea standards.

[thiourea] (M)	Δf (Hz)	[thiourea] (M)	Δf (Hz)
3.00×10^{-7}	74.6	1.50×10^{-6}	327
5.00×10^{-7}	120	2.50×10^{-6}	543
7.00×10^{-7}	159	3.50×10^{-6}	789
9.00×10^{-7}	205	5.00×10^{-6}	1089

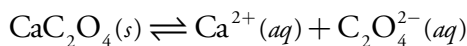
- (a) Characterize this method with respect to the scale of operation shown in Figure 3.5 of Chapter 3.
- (b) Using a regression analysis, determine the relationship between the crystal's frequency shift and the concentration of thiourea.
- (c) If a sample containing an unknown amount of thiourea gives a Δf of 176 Hz, what is the molar concentration of thiourea in the sample?

- (d) What is the 95% confidence interval for the concentration of thio-urea in this sample assuming one replicate? See the [appendices](#) for statistical tables.

8H Solutions to Practice Exercises

Practice Exercise 8.1

The solubility reaction for CaC_2O_4 is



To minimize solubility, the pH needs to be basic enough that oxalate, $\text{C}_2\text{O}_4^{2-}$, does not react to form HC_2O_4^- or $\text{H}_2\text{C}_2\text{O}_4$. The ladder diagram for oxalic acid, including approximate buffer ranges, is shown in Figure 8.17. Maintaining a pH greater than 5.3 ensures that $\text{C}_2\text{O}_4^{2-}$ is the only important form of oxalic acid in solution, minimizing the solubility of CaC_2O_4 .

Click [here](#) to return to the chapter.

Practice Exercise 8.2

A conservation of mass requires that all the zinc in the alloy is found in the final product, $\text{Zn}_2\text{P}_2\text{O}_7$. We know that there are 2 moles of Zn per mole of $\text{Zn}_2\text{P}_2\text{O}_7$; thus

$$0.1163 \text{ g Zn}_2\text{P}_2\text{O}_7 \times \frac{2 \text{ mol Zn}}{304.72 \text{ g Zn}_2\text{P}_2\text{O}_7} \times \frac{65.39 \text{ g Zn}}{\text{mol Zn}} = 4.991 \times 10^{-2} \text{ g Zn}$$

This is the mass of Zn in 25% of the sample (a 25.00 mL portion of the 100.0 mL total volume). The %w/w Zn, therefore, is

$$\frac{4.991 \times 10^{-2} \text{ g Zn} \times 4}{0.7336 \text{ g sample}} \times 100 = 27.22\% \text{ w/w Zn}$$

For copper, we find that

$$0.1163 \text{ g CuSCN} \times \frac{1 \text{ mol Cu}}{121.64 \text{ g CuSCN}} \times \frac{63.55 \text{ g Cu}}{\text{mol Cu}} = 0.1249 \text{ g Cu}$$

$$\frac{0.1249 \text{ g Cu} \times 4}{0.7336 \text{ g sample}} \times 100 = 67.88\% \text{ w/w Cu}$$

Click [here](#) to return to the chapter.

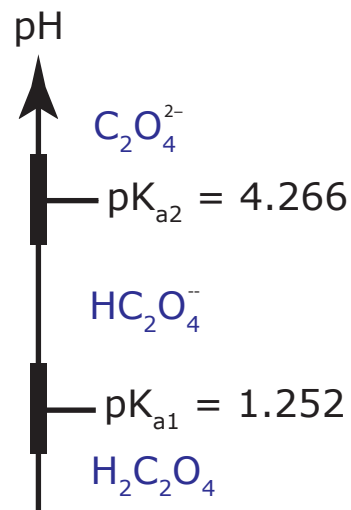


Figure 8.17 pH ladder diagram for oxalic acid, $\text{H}_2\text{C}_2\text{O}_4$.

Practice Exercise 8.3

The masses of the solids provide us with the following equations

$$g \text{ NaCl} + g \text{ KCl} = 0.2692 \text{ g}$$

$$(g \text{ KClO}_4)_{\text{NaCl}} + (g \text{ KClO}_4)_{\text{KCl}} = 0.5713 \text{ g}$$

where $(g \text{ KClO}_4)_{\text{NaCl}}$ and $(g \text{ KClO}_4)_{\text{KCl}}$ are the masses of KClO_4 from the reaction of HClO_4 with NaCl and KCl . With two equations and four unknowns, we need two additional equations to solve the problem. A conservation of mass requires that all the chlorine in NaCl is found in the $(\text{KClO}_4)_{\text{NaCl}}$; thus

$$(g \text{ KClO}_4)_{\text{NaCl}} = g \text{ NaCl} \times \frac{1 \text{ mol Cl}}{58.44 \text{ g NaCl}} \times \frac{138.55 \text{ g KClO}_4}{\text{mol Cl}}$$

$$(g \text{ KClO}_4)_{\text{NaCl}} = 2.3708 \times g \text{ NaCl}$$

Using the same approach for KCl gives

$$(g \text{ KClO}_4)_{\text{KCl}} = g \text{ KCl} \times \frac{1 \text{ mol Cl}}{74.55 \text{ g KCl}} \times \frac{138.55 \text{ g KClO}_4}{\text{mol Cl}}$$

$$(g \text{ KClO}_4)_{\text{KCl}} = 1.8584 \times g \text{ KCl}$$

Substituting the equations for $(g \text{ KClO}_4)_{\text{NaCl}}$ and $(g \text{ KClO}_4)_{\text{KCl}}$ into the equation for their combined masses leaves us with two equations and two unknowns.

$$g \text{ NaCl} + g \text{ KCl} = 0.2692 \text{ g}$$

$$2.3708 \times g \text{ NaCl} + 1.8584 \times g \text{ KCl} = 0.5713 \text{ g}$$

Multiplying the first equation by 1.8584 and subtracting the second equation gives

$$-0.5124 \times g \text{ NaCl} = -0.07102 \text{ g}$$

$$g \text{ NaCl} = 0.1386 \text{ g}$$

To report the %w/w Na_2O in the sample, we use a conservation of mass on sodium.

$$0.1386 \text{ g NaCl} \times \frac{1 \text{ mol Na}}{58.44 \text{ g NaCl}} \times \frac{61.98 \text{ g Na}_2\text{O}}{2 \text{ mol Na}} = 0.07350 \text{ g Na}_2\text{O}$$

$$\frac{0.07350 \text{ g Na}_2\text{O}}{0.8143 \text{ g sample}} \times 100 = 9.026\% \text{ w/w Na}_2\text{O}$$

Click [here](#) to return to the chapter.

Practice Exercise 8.4

To find the mass of $(\text{NH}_4)_3\text{PO}_4 \cdot 12\text{MoO}_3$ producing 0.600 g of PbMoO_3 , we first use a conservation of mass for molybdenum; thus

$$0.600 \text{ g PbMoO}_3 \times \frac{1 \text{ mol Mo}}{351.14 \text{ g PbMoO}_3} \times \frac{1876.38 \text{ g } (\text{NH}_4)_3\text{PO}_4 \cdot 12\text{MoO}_3}{12 \text{ mol Mo}} = 0.2672 \text{ g } (\text{NH}_4)_3\text{PO}_4 \cdot 12\text{MoO}_3$$

Next, to convert this mass of $(\text{NH}_4)_3\text{PO}_4 \cdot 12\text{MoO}_3$ to a mass of Na_3PO_4 , we use a conservation of mass on PO_4^{3-} .

$$0.2672 \text{ g } (\text{NH}_4)_3\text{PO}_4 \cdot 12\text{MoO}_3 \times \frac{1 \text{ mol PO}_4^{3-}}{1876.38 \text{ g } (\text{NH}_4)_3\text{PO}_4 \cdot 12\text{MoO}_3} \times \frac{163.94 \text{ g Na}_3\text{PO}_4}{\text{mol PO}_4^{3-}} = 0.02335 \text{ g Na}_3\text{PO}_4$$

Finally, we convert this mass of Na_3PO_4 to the corresponding mass of sample.

$$0.02335 \text{ g Na}_3\text{PO}_4 \times \frac{100 \text{ g sample}}{12.5 \text{ g Na}_3\text{PO}_4} = 0.187 \text{ g sample}$$

A sample of 0.187 g is sufficient to guarantee 0.600 g of PbMoO_3 . If a sample contains more than 12.5% Na_3PO_4 , then a 0.187-g sample will produce more than 0.600 g of PbMoO_3 .

Click [here](#) to return to the chapter.

Practice Exercise 8.5

To determine which form has the greatest sensitivity, we use a conservation of mass for iron to find the relationship between the precipitate's mass and the mass of iron.

$$\text{g FeO} = \text{g Fe} \times \frac{1 \text{ mol Fe}}{55.85 \text{ g Fe}} \times \frac{71.85 \text{ g FeO}}{\text{mol Fe}} = 1.286 \times \text{g Fe}$$

$$\text{g Fe}_2\text{O}_3 = \text{g Fe} \times \frac{1 \text{ mol Fe}}{55.85 \text{ g Fe}} \times \frac{159.70 \text{ g Fe}_2\text{O}_3}{2 \text{ mol Fe}} = 1.430 \times \text{g Fe}$$

$$\text{g Fe}_3\text{O}_4 = \text{g Fe} \times \frac{1 \text{ mol Fe}}{55.85 \text{ g Fe}} \times \frac{231.55 \text{ g Fe}_3\text{O}_4}{3 \text{ mol Fe}} = 1.382 \times \text{g Fe}$$

Of the three choices, the greatest sensitivity is obtained with Fe_2O_3 because it provides the largest value for k .

Click [here](#) to return to the chapter.

Practice Exercise 8.6

From 100–250 °C the sample loses 13.8% of its mass, or a loss of

$$0.138 \times 130.35 \text{ g/mol} = 18.0 \text{ g/mol}$$

consistent with the loss of $\text{H}_2\text{O}(g)$, leaving a residue of MgC_2O_4 . From 350–550 °C the sample loses 55.23% of its original mass, or a loss of

$$0.5523 \times 130.35 \text{ g/mol} = 71.99 \text{ g/mol}$$

This weight loss is consistent with the simultaneous loss of $\text{CO}(g)$ and $\text{CO}_2(g)$, leaving a residue of MgO .

We can analyze the mixture by heating a portion of the sample to 300 °C, 600 °C, and 1000 °C, recording the mass at each temperature. The loss of mass between 600 °C and 1000 °C, Δm_2 , is due to the loss of $\text{CO}_2(g)$ from the decomposition of CaCO_3 to CaO , and is proportional to the mass of $\text{CaC}_2\text{O}_4 \cdot \text{H}_2\text{O}$ in the sample.

$$\text{g CaC}_2\text{O}_4 \cdot \text{H}_2\text{O} = \Delta m_2 \times \frac{1 \text{ mol CO}_2}{44.01 \text{ g CO}_2} \times \frac{146.11 \text{ g CaC}_2\text{O}_4 \cdot \text{H}_2\text{O}}{\text{mol CO}_2}$$

The change in mass between 300 °C and 600 °C, Δm_1 , is due to the loss of $\text{CO}(g)$ from $\text{CaC}_2\text{O}_4 \cdot \text{H}_2\text{O}$ and the loss of $\text{CO}(g)$ and $\text{CO}_2(g)$ from $\text{MgC}_2\text{O}_4 \cdot \text{H}_2\text{O}$. Because we already know the amount of $\text{CaC}_2\text{O}_4 \cdot \text{H}_2\text{O}$ in the sample, we can calculate its contribution to Δm_1 .

$$(\Delta m_1)_{\text{Ca}} = \text{g CaC}_2\text{O}_4 \cdot \text{H}_2\text{O} \times \frac{1 \text{ mol CO}}{146.11 \text{ g CaC}_2\text{O}_4 \cdot \text{H}_2\text{O}} \times \frac{28.01 \text{ g CO}}{\text{mol CO}}$$

The change in mass due to the decomposition of $\text{MgC}_2\text{O}_4 \cdot \text{H}_2\text{O}$

$$(\Delta m_1)_{\text{Mg}} = (\Delta m_1) - (\Delta m_1)_{\text{Ca}}$$

provides the mass of $\text{MgC}_2\text{O}_4 \cdot \text{H}_2\text{O}$ in the sample.

$$\text{g MgC}_2\text{O}_4 \cdot \text{H}_2\text{O} = (\Delta m_1)_{\text{Mg}} \times \frac{1 \text{ mol (CO + CO}_2)}{130.35 \text{ g MgC}_2\text{O}_4 \cdot \text{H}_2\text{O}} \times \frac{78.02 \text{ g (CO + CO}_2)}{1 \text{ mol (CO + CO}_2)}$$

Click [here](#) to return to the chapter.

Practice Exercise 8.7

In [Practice Exercise 8.6](#) we developed an [equation](#) for the mass of $\text{CaC}_2\text{O}_4 \cdot \text{H}_2\text{O}$ in a mixture of $\text{CaC}_2\text{O}_4 \cdot \text{H}_2\text{O}$, $\text{MgC}_2\text{O}_4 \cdot \text{H}_2\text{O}$, and inert materials. Adapting this equation to a sample containing CaC_2O_4 , CaC_2O_4 , and inert materials is easy; thus

$$\text{g CaC}_2\text{O}_4 = (0.1794 \text{ g} - 0.1294 \text{ g}) \times \frac{1 \text{ mol CO}_2}{44.01 \text{ g CO}_2} \times \frac{128.10 \text{ g CaC}_2\text{O}_4}{\text{mol CO}_2} = 0.1455 \text{ g CaC}_2\text{O}_4$$

The %w/w CaC_2O_4 in the sample is

$$\frac{0.1455 \text{ g CaC}_2\text{O}_4}{0.3317 \text{ g sample}} \times 100 = 43.86\% \text{ w/w CaC}_2\text{O}_4$$

Click [here](#) to return to the chapter.

Chapter 9

Titrimetric Methods

Chapter Overview

- Section 9A Overview of Titrimetry
- Section 9B Acid–Base Titrations
- Section 9C Complexation Titrations
- Section 9D Redox Titrations
- Section 9E Precipitation Titrations
- Section 9F Key Terms
- Section 9G Chapter Summary
- Section 9H Problems
- Section 9I Solutions to Practice Exercises

Titrimetry, in which volume serves as the analytical signal, made its first appearance as an analytical method in the early eighteenth century. Titrimetric methods were not well received by the analytical chemists of that era because they could not duplicate the accuracy and precision of a gravimetric analysis. Not surprisingly, few standard texts from the 1700s and 1800s include titrimetric methods of analysis.

Precipitation gravimetry developed as an analytical method without a general theory of precipitation. An empirical relationship between a precipitate's mass and the mass of analyte—what analytical chemists call a gravimetric factor—was determined experimentally by taking a known mass of analyte through the procedure. Today, we recognize this as an early example of an external standardization. Gravimetric factors were not calculated using the stoichiometry of a precipitation reaction because chemical formulas and atomic weights were not yet available! Unlike gravimetry, the development and acceptance of titrimetry required a deeper understanding of stoichiometry, of thermodynamics, and of chemical equilibria. By the 1900s, the accuracy and precision of titrimetric methods were comparable to that of gravimetric methods, establishing titrimetry as an accepted analytical technique.

We are deliberately avoiding the term analyte at this point in our introduction to titrimetry. Although in most titrations the analyte is the titrand, there are circumstances where the analyte is the titrant. When discussing specific methods, we will use the term analyte where appropriate.

9A Overview of Titrimetry

In **TITRIMETRY** we add a reagent, called the **TITRANT**, to a solution containing another reagent, called the **TITRAND**, and allow them to react. The type of reaction provides us with a simple way to divide titrimetry into the following four categories: acid–base titrations, in which an acidic or basic titrant reacts with a titrand that is a base or an acid; complexometric titrations based on metal–ligand complexation; redox titrations, in which the titrant is an oxidizing or reducing agent; and precipitation titrations, in which the titrand and titrant form a precipitate.

Despite the difference in chemistry, all titrations share several common features. Before we consider individual titrimetric methods in greater detail, let's take a moment to consider some of these similarities. As you work through this chapter, this overview will help you focus on similarities between different titrimetric methods. You will find it easier to understand a new analytical method when you can see its relationship to other similar methods.

9A.1 Equivalence Points and End points

If a titration is to be accurate we must combine stoichiometrically equivalent amount of titrant and titrand. We call this stoichiometric mixture the **EQUIVALENCE POINT**. Unlike precipitation gravimetry, where we add the precipitant in excess, an accurate titration requires that we know the exact volume of titrant at the equivalence point, V_{eq} . The product of the titrant's equivalence point volume and its molarity, M_{T} , is equal to the moles of titrant reacting with the titrand.

$$\text{moles of titrant} = M_{\text{T}} \times V_{\text{eq}}$$

If we know the stoichiometry of the titration reaction, then we can calculate the moles of titrand.

Unfortunately, for most titrations there is no obvious sign when we reach the equivalence point. Instead, we stop adding titrant when at an **END POINT** of our choosing. Often this end point is a change in the color of a substance, called an **INDICATOR**, that we add to the titrand's solution. The difference between the end point volume and the equivalence point volume is a determinate **TITRATION ERROR**. If the end point and the equivalence point volumes coincide closely, then the titration error is insignificant and it is safely ignored. Clearly, selecting an appropriate end point is critically important.

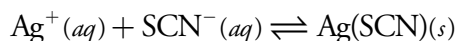
9A.2 Volume as a Signal

Almost any chemical reaction can serve as a titrimetric method provided it meets the following four conditions. The first condition is that we must know the stoichiometry between the titrant and the titrand. If this is not

Instead of measuring the titrant's volume, we may choose to measure its mass. Although we generally can measure mass more precisely than we can measure volume, the simplicity of a volumetric titration makes it the more popular choice.

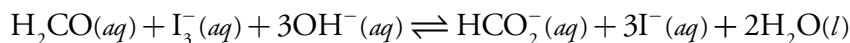
the case, then we cannot convert the moles of titrant consumed in reaching the end point to the moles of titrand in our sample. Second, the titration reaction must effectively proceed to completion; that is, the stoichiometric mixing of the titrant and the titrand must result in their reaction. Third, the titration reaction must occur rapidly. If we add the titrant faster than it can react with the titrand, then the end point and the equivalence point will differ significantly. Finally, there must be a suitable method for accurately determining the end point. These are significant limitations and, for this reason, there are several common titration strategies.

A simple example of a titration is an analysis for Ag^+ using thiocyanate, SCN^- , as a titrant.

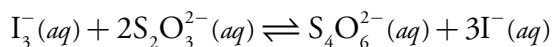


This reaction occurs quickly and with a known stoichiometry, satisfying two of our requirements. To indicate the titration's end point, we add a small amount of Fe^{3+} to the analyte's solution before beginning the titration. When the reaction between Ag^+ and SCN^- is complete, formation of the red-colored $\text{Fe}(\text{SCN})^{2+}$ complex signals the end point. This is an example of a **DIRECT TITRATION** since the titrant reacts directly with the analyte.

If the titration's reaction is too slow, if a suitable indicator is not available, or if there is no useful direct titration reaction, then an indirect analysis may be possible. Suppose you wish to determine the concentration of formaldehyde, H_2CO , in an aqueous solution. The oxidation of H_2CO by I_3^-

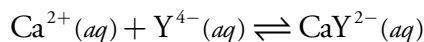


is a useful reaction, but it is too slow for a titration. If we add a known excess of I_3^- and allow its reaction with H_2CO to go to completion, we can titrate the unreacted I_3^- with thiosulfate, $\text{S}_2\text{O}_3^{2-}$.

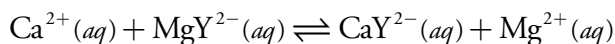


The difference between the initial amount of I_3^- and the amount in excess gives us the amount of I_3^- reacting with the formaldehyde. This is an example of a **BACK TITRATION**.

Calcium ion plays an important role in many environmental systems. A direct analysis for Ca^{2+} might take advantage of its reaction with the ligand ethylenediaminetetraacetic acid (EDTA), which we represent here as Y^{4-} .



Unfortunately, for most samples this titration does not have a useful indicator. Instead, we react the Ca^{2+} with an excess of MgY^{2-}



Depending on how we are detecting the endpoint, we may stop the titration too early or too late. If the end point is a function of the titrant's concentration, then adding the titrant too quickly leads to an early end point. On the other hand, if the end point is a function of the titrant's concentration, then the end point exceeds the equivalence point.

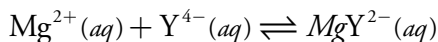
This is an example of a precipitation titration. You will find more information about precipitation titrations in [Section 9E](#).

This is an example of a redox titration. You will find more information about redox titrations in [Section 9D](#).

MgY^{2-} is the Mg^{2+} -EDTA metal-ligand complex. You can prepare a solution of MgY^{2-} by combining equimolar solutions of Mg^{2+} and EDTA.

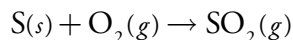
This is an example of a complexation titration. You will find more information about complexation titrations in [Section 9C](#).

releasing an amount of Mg^{2+} equivalent to the amount of Ca^{2+} in the sample. Because the titration of Mg^{2+} with EDTA

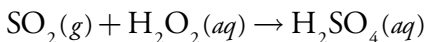


has a suitable end point, we can complete the analysis. The amount of EDTA used in the titration provides an indirect measure of the amount of Ca^{2+} in the original sample. Because the species we are titrating was displaced by the analyte, we call this a **DISPLACEMENT TITRATION**.

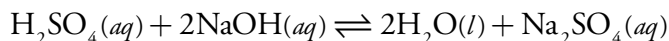
If a suitable reaction involving the analyte does not exist it may be possible to generate a species that we can titrate. For example, we can determine the sulfur content of coal by using a combustion reaction to convert sulfur to sulfur dioxide



and then convert the SO_2 to sulfuric acid, H_2SO_4 , by bubbling it through an aqueous solution of hydrogen peroxide, H_2O_2 .



Titration of H_2SO_4 with NaOH



provides an indirect determination of sulfur.

9A.3 Titration Curves

To find a titration's end point, we need to monitor some property of the reaction that has a well-defined value at the equivalence point. For example, the equivalence point for a titration of HCl with NaOH occurs at a pH of 7.0. A simple method for finding the equivalence point is to continuously monitor the titration mixture's pH using a pH electrode, stopping the titration when we reach a pH of 7.0. Alternatively, we can add an indicator to the titrand's solution that changes color at a pH of 7.0.

Suppose the only available indicator changes color at an end point pH of 6.8. Is the difference between the end point and the equivalence point small enough that we can safely ignore the titration error? To answer this question we need to know how the pH changes during the titration.

A **TITRATION CURVE** provides us with a visual picture of how a property of the titration reaction changes as we add the titrant to the titrand. The titration curve in [Figure 9.1](#), for example, was obtained by suspending a pH electrode in a solution of 0.100 M HCl (the titrand) and monitoring the pH while adding 0.100 M NaOH (the titrant). A close examination of this titration curve should convince you that an end point pH of 6.8 produces a negligible titration error. Selecting a pH of 11.6 as the end point, however, produces an unacceptably large titration error.

This is an example of an acid–base titration. You will find more information about acid–base titrations in [Section 9B](#).

Why a pH of 7.0 is the equivalence point for this titration is a topic we will cover in [Section 9B](#).

For the titration curve in [Figure 9.1](#), the volume of titrant to reach a pH of 6.8 is 24.99995 mL, a titration error of $-2.00 \times 10^{-4}\%$. Typically, we can only read the volume to the nearest ± 0.01 mL, which means this uncertainty is too small to affect our results.

The volume of titrant to reach a pH of 11.6 is 27.07 mL, or a titration error of +8.28%. This is a significant error.

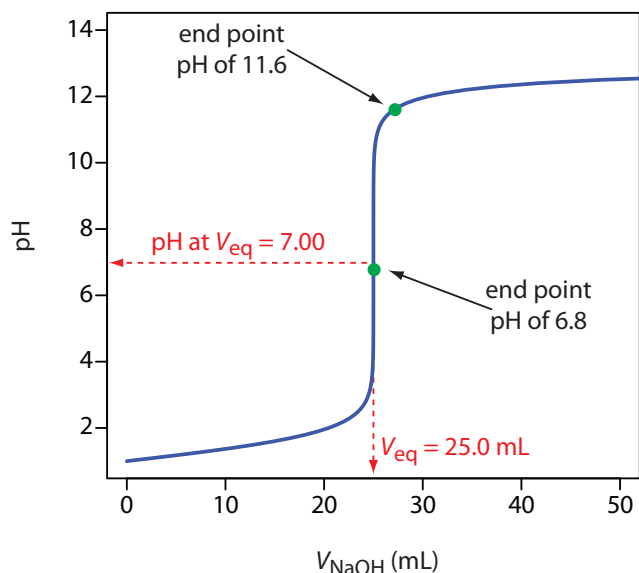


Figure 9.1 Typical acid–base titration curve showing how the titrand’s pH changes with the addition of titrant. The titrand is a 25.0 mL solution of 0.100 M HCl and the titrant is 0.100 M NaOH. The titration curve is the solid blue line, and the equivalence point volume (25.0 mL) and pH (7.00) are shown by the dashed red lines. The green dots show two end points. The end point at a pH of 6.8 has a small titration error, and the end point at a pH of 11.6 has a larger titration error.

The titration curve in Figure 9.1 is not unique to an acid–base titration. Any titration curve that follows the change in concentration of a species in the titration reaction (plotted logarithmically) as a function of the titrant’s volume has the same general sigmoidal shape. Several additional examples are shown in Figure 9.2.

The titrand’s or the titrant’s concentration is not the only property we can use when recording a titration curve. Other parameters, such as the temperature or absorbance of the titrand’s solution, may provide a useful end point signal. Many acid–base titration reactions, for example, are exothermic. As the titrant and titrand react the temperature of the titrand’s solution steadily increases. Once we reach the equivalence point, further additions of titrant do not produce as exothermic a response. [Figure 9.3](#) shows a typical **THERMOMETRIC TITRATION CURVE** with the intersection of the two linear segments indicating the equivalence point.

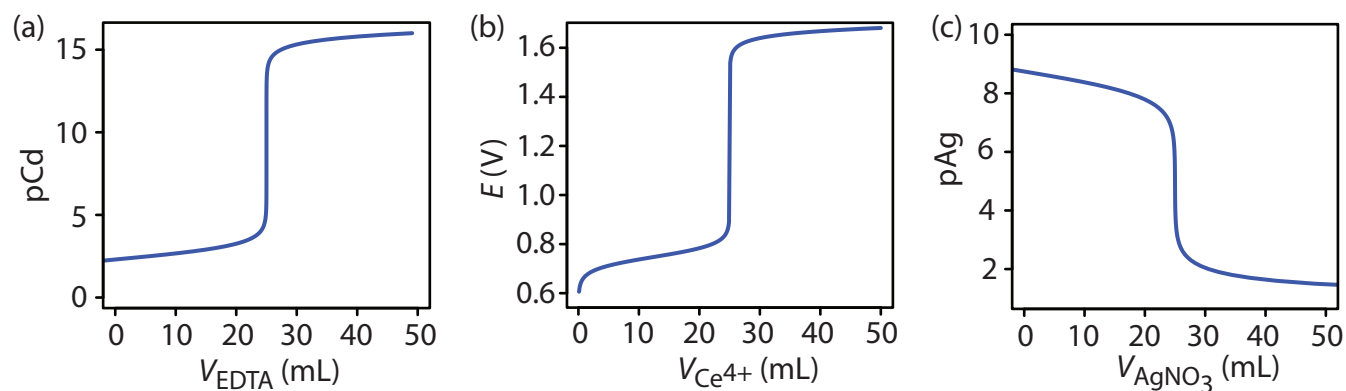


Figure 9.2 Additional examples of titration curves. (a) Complexation titration of 25.0 mL of 1.0 mM Cd^{2+} with 1.0 mM EDTA at a pH of 10. The y -axis displays the titrand’s equilibrium concentration as pCd. (b) Redox titration of 25.0 mL of 0.050 M Fe^{2+} with 0.050 M Ce^{4+} in 1 M HClO_4 . The y -axis displays the titration mixture’s electrochemical potential, E , which, through the Nernst equation is a logarithmic function of concentrations. (c) Precipitation titration of 25.0 mL of 0.10 M NaCl with 0.10 M AgNO_3 . The y -axis displays the titrant’s equilibrium concentration as pAg.

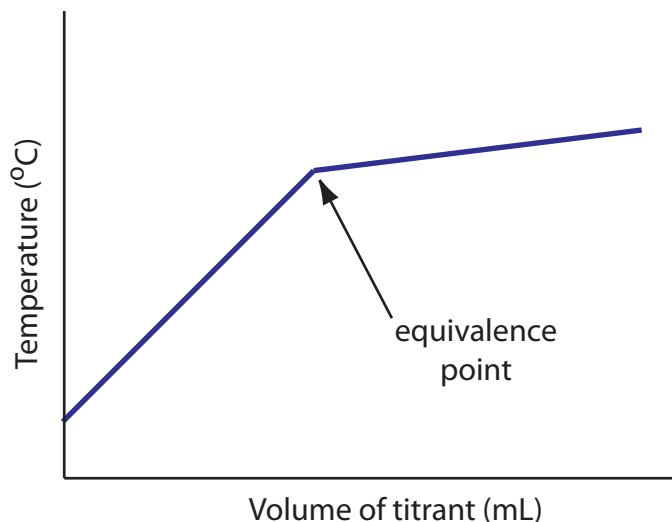


Figure 9.3 Example of a thermometric titration curve showing the location of the equivalence point.

9A.4 The Buret

The only essential equipment for an acid–base titration is a means for delivering the titrant to the titrand’s solution. The most common method for delivering titrant is a **BURET** (Figure 9.4). A buret is a long, narrow tube with graduated markings, equipped with a stopcock for dispensing the titrant. The buret’s small internal diameter provides a better defined meniscus, making it easier to read the titrant’s volume precisely. Burets are available in a variety of sizes and tolerances (Table 9.1), with the choice of buret determined by the needs of the analysis. You can improve a buret’s accuracy by calibrating it over several intermediate ranges of volumes using the method described in Chapter 5 for calibrating pipets. Calibrating a buret corrects for variations in the buret’s internal diameter.

A titration can be automated by using a pump to deliver the titrant at a constant flow rate (Figure 9.5). Automated titrations offer the additional advantage of using a microcomputer for data storage and analysis.

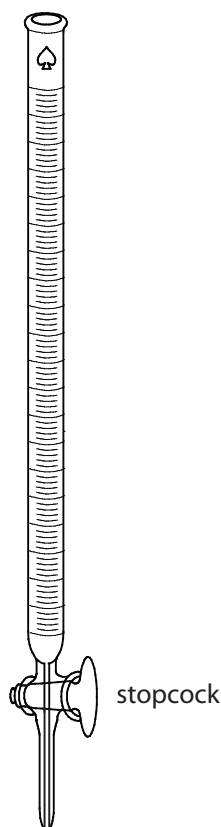


Figure 9.4 Typical volumetric buret. The stopcock is in the open position, allowing the titrant to flow into the titrand’s solution. Rotating the stopcock controls the titrant’s flow rate.

Table 9.1 Specifications for Volumetric Burets

Volume (mL)	Class	Subdivision (mL)	Tolerance (mL)
5	A	0.01	± 0.01
	B	0.01	± 0.01
10	A	0.02	± 0.02
	B	0.02	± 0.04
25	A	0.1	± 0.03
	B	0.1	± 0.06
50	A	0.1	± 0.05
	B	0.1	± 0.10
100	A	0.2	± 0.10
	B	0.2	± 0.20




Figure 9.5 Typical instrumentation for an automated acid–base titration showing the titrant, the pump, and the titrand. The pH electrode in the titrand’s solution is used to monitor the titration’s progress. You can see the titration curve in the lower-left quadrant of the computer’s display. Modified from: [Datamax](#) (commons.wikipedia.org).

9B Acid–Base Titrations

Before 1800, most **ACID–BASE TITRATIONS** used H_2SO_4 , HCl , or HNO_3 as acidic titrants, and K_2CO_3 or Na_2CO_3 as basic titrants. A titration’s end point was determined using litmus as an indicator, which is red in acidic solutions and blue in basic solutions, or by the cessation of CO_2 effervescence when neutralizing CO_3^{2-} . Early examples of acid–base titrimetry include determining the acidity or alkalinity of solutions, and determining the purity of carbonates and alkaline earth oxides.

Three limitations slowed the development of acid–base titrimetry: the lack of a strong base titrant for the analysis of weak acids, the lack of suitable indicators, and the absence of a theory of acid–base reactivity. The introduction, in 1846, of NaOH as a strong base titrant extended acid–base titrimetry to the determination of weak acids. The synthesis of organic dyes provided many new indicators. Phenolphthalein, for example, was first synthesized by Bayer in 1871 and used as an indicator for acid–base titrations in 1877.

Despite the increasing availability of indicators, the absence of a theory of acid–base reactivity made it difficult to select an indicator. The development of equilibrium theory in the late 19th century led to significant improvements in the theoretical understanding of acid–base chemistry, and, in turn, of acid–base titrimetry. Sørensen’s establishment of the pH scale in 1909 provided a rigorous means for comparing indicators. The determination of acid–base dissociation constants made it possible to calculate a theoretical titration curve, as outlined by Bjerrum in 1914. For the first

The determination of acidity and alkalinity continue to be important applications of acid–base titrimetry. We will take a closer look at these applications later in this section.

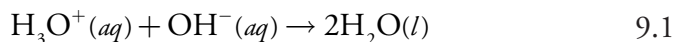
time analytical chemists had a rational method for selecting an indicator, establishing acid–base titrimetry as a useful alternative to gravimetry.

9B.1 Acid–Base Titration Curves

In the overview to this chapter we noted that a titration's end point should coincide with its equivalence point. To understand the relationship between an acid–base titration's end point and its equivalence point we must know how the pH changes during a titration. In this section we will learn how to calculate a titration curve using the equilibrium calculations from Chapter 6. We also will learn how to quickly sketch a good approximation of any acid–base titration curve using a limited number of simple calculations.

TITRATING STRONG ACIDS AND STRONG BASES

For our first titration curve, let's consider the titration of 50.0 mL of 0.100 M HCl using a titrant of 0.200 M NaOH. When a strong base and a strong acid react the only reaction of importance is



The first task in constructing the titration curve is to calculate the volume of NaOH needed to reach the equivalence point, V_{eq} . At the equivalence point we know from reaction 9.1 that

moles HCl = moles NaOH

$$M_a \times V_a = M_b \times V_b$$

where the subscript 'a' indicates the acid, HCl, and the subscript 'b' indicates the base, NaOH. The volume of NaOH needed to reach the equivalence point is

$$V_{\text{eq}} = V_b = \frac{M_a V_a}{M_b} = \frac{(0.100 \text{ M})(50.0 \text{ mL})}{0.200 \text{ M}} = 25.0 \text{ mL}$$

Before the equivalence point, HCl is present in excess and the pH is determined by the concentration of unreacted HCl. At the start of the titration the solution is 0.100 M in HCl, which, because HCl is a strong acid, means that the pH is

$$\text{pH} = -\log[\text{H}_3\text{O}^+] = -\log[\text{HCl}] = -\log(0.100) = 1.00$$

After adding 10.0 mL of NaOH the concentration of excess HCl is

$$\begin{aligned} [\text{HCl}] &= \frac{\text{initial moles HCl} - \text{moles NaOH added}}{\text{total volume}} = \frac{M_a V_a - M_b V_b}{V_a + V_b} \\ &= \frac{(0.100 \text{ M})(50.0 \text{ mL}) - (0.200 \text{ M})(10.0 \text{ mL})}{50.0 \text{ mL} + 10.0 \text{ mL}} = 0.0500 \text{ M} \end{aligned}$$

Although we have not written reaction 9.1 as an equilibrium reaction, it is at equilibrium; however, because its equilibrium constant is large—it is equal to $(K_w)^{-1}$ or 1.00×10^{14} —we can treat reaction 9.1 as though it goes to completion.

Step 1: Calculate the volume of titrant needed to reach the equivalence point.

Step 2: Calculate pH values before the equivalence point by determining the concentration of unreacted titrand.

and the pH increases to 1.30.

At the equivalence point the moles of HCl and the moles of NaOH are equal. Since neither the acid nor the base is in excess, the pH is determined by the dissociation of water.

$$K_w = 1.00 \times 10^{-14} = [\text{H}_3\text{O}^+][\text{OH}^-] = [\text{H}_3\text{O}^+]^2$$

$$[\text{H}_3\text{O}^+] = 1.00 \times 10^{-7} \text{ M}$$

Thus, the pH at the equivalence point is 7.00.

For volumes of NaOH greater than the equivalence point, the pH is determined by the concentration of excess OH^- . For example, after adding 30.0 mL of titrant the concentration of OH^- is

$$[\text{OH}^-] = \frac{\text{moles NaOH added} - \text{initial moles HCl}}{\text{total volume}} = \frac{M_b V_b - M_a V_a}{V_a + V_b}$$

$$= \frac{(0.200 \text{ M})(30.0 \text{ mL}) - (0.100 \text{ M})(50.0 \text{ mL})}{50.0 \text{ mL} + 30.0 \text{ mL}} = 0.0125 \text{ M}$$

To find the concentration of H_3O^+ we use the K_w expression

$$[\text{H}_3\text{O}^+] = \frac{K_w}{[\text{OH}^-]} = \frac{1.00 \times 10^{-14}}{0.0125 \text{ M}} = 8.00 \times 10^{-13} \text{ M}$$

giving a pH of 12.10. Table 9.2 and [Figure 9.6](#) show additional results for this titration curve. You can use this same approach to calculate the titration curve for the titration of a strong base with a strong acid, except the strong base is in excess before the equivalence point and the strong acid is in excess after the equivalence point.

Practice Exercise 9.1

Construct a titration curve for the titration of 25.0 mL of 0.125 M NaOH with 0.0625 M HCl.

Click [here](#) to review your answer to this exercise.

Step 3: The pH at the equivalence point for the titration of a strong acid with a strong base is 7.00.

Step 4: Calculate pH values after the equivalence point by determining the concentration of excess titrant.

Table 9.2 Titration of 50.0 mL of 0.100 M HCl with 0.200 M NaOH

Volume of NaOH (mL)	pH	Volume of NaOH (mL)	pH
0.00	1.00	26.0	11.42
5.00	1.14	28.0	11.89
10.0	1.30	30.0	12.10
15.0	1.51	35.0	12.37
20.0	1.85	40.0	12.52
22.0	2.08	45.0	12.62
24.0	2.57	50.0	12.70
25.0	7.00		

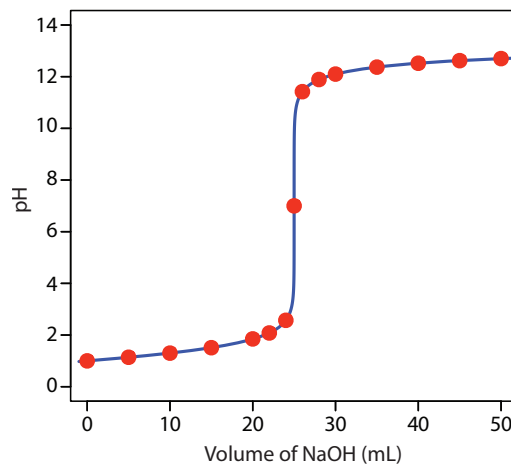


Figure 9.6 Titration curve for the titration of 50.0 mL of 0.100 M HCl with 0.200 M NaOH. The red points correspond to the data in [Table 9.2](#). The blue line shows the complete titration curve.

TITRATING A WEAK ACID WITH A STRONG BASE

Step 1: Calculate the volume of titrant needed to reach the equivalence point.

For this example, let's consider the titration of 50.0 mL of 0.100 M acetic acid, CH_3COOH , with 0.200 M NaOH. Again, we start by calculating the volume of NaOH needed to reach the equivalence point; thus

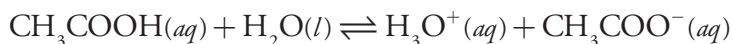
$$\text{moles CH}_3\text{COOH} = \text{moles NaOH}$$

$$M_a \times V_a = M_b \times V_b$$

$$V_{\text{eq}} = V_b = \frac{M_a V_a}{M_b} = \frac{(0.100 \text{ M})(50.0 \text{ mL})}{0.200 \text{ M}} = 25.0 \text{ mL}$$

Step 2: Before adding the titrant, the pH is determined by the titrand, which in this case is a weak acid.

Before adding NaOH the pH is that for a solution of 0.100 M acetic acid. Because acetic acid is a weak acid, we calculate the pH using the method outlined in Chapter 6.



$$K_a = \frac{[\text{H}_3\text{O}^+][\text{CH}_3\text{COO}^-]}{[\text{CH}_3\text{COOH}]} = \frac{(x)(x)}{0.100 - x} = 1.75 \times 10^{-5}$$

$$x = [\text{H}_3\text{O}^+] = 1.32 \times 10^{-3} \text{ M}$$

At the beginning of the titration the pH is 2.88.

Adding NaOH converts a portion of the acetic acid to its conjugate base, CH_3COO^- .



Any solution containing comparable amounts of a weak acid, HA, and its conjugate weak base, A^- , is a buffer. As we learned in Chapter 6, we can calculate the pH of a buffer using the Henderson–Hasselbalch equation.

Because the equilibrium constant for reaction 9.2 is quite large

$$K = K_a/K_w = 1.75 \times 10^9$$

we can treat the reaction as if it goes to completion.

$$\text{pH} = \text{p}K_a + \log \frac{[\text{A}^-]}{[\text{HA}]}$$

Before the equivalence point the concentration of unreacted acetic acid is

$$\begin{aligned} [\text{CH}_3\text{COOH}] &= \frac{\text{initial moles CH}_3\text{COOH} - \text{moles NaOH added}}{\text{total volume}} \\ &= \frac{M_a V_a - M_b V_b}{V_a + V_b} \end{aligned}$$

and the concentration of acetate is

$$[\text{CH}_3\text{COO}^-] = \frac{\text{moles NaOH added}}{\text{total volume}} = \frac{M_b V_b}{V_a + V_b}$$

For example, after adding 10.0 mL of NaOH the concentrations of CH_3COOH and CH_3COO^- are

$$\begin{aligned} [\text{CH}_3\text{COOH}] &= \frac{(0.100 \text{ M})(50.0 \text{ mL}) - (0.200 \text{ M})(10.0 \text{ mL})}{50.0 \text{ mL} + 10.0 \text{ mL}} \\ &= 0.0500 \text{ M} \end{aligned}$$

$$[\text{CH}_3\text{COO}^-] = \frac{(0.200 \text{ M})(10.0 \text{ mL})}{50.0 \text{ mL} + 10.0 \text{ mL}} = 0.0333 \text{ M}$$

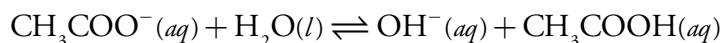
which gives us a pH of

$$\text{pH} = 4.76 + \log \frac{0.0333 \text{ M}}{0.0500 \text{ M}} = 4.58$$

At the equivalence point the moles of acetic acid initially present and the moles of NaOH added are identical. Because their reaction effectively proceeds to completion, the predominate ion in solution is CH_3COO^- , which is a weak base. To calculate the pH we first determine the concentration of CH_3COO^-

$$\begin{aligned} [\text{CH}_3\text{COO}^-] &= \frac{\text{moles NaOH added}}{\text{total volume}} \\ &= \frac{(0.200 \text{ M})(25.0 \text{ mL})}{50.0 \text{ mL} + 25.0 \text{ mL}} = 0.0667 \text{ M} \end{aligned}$$

Next, we calculate the pH of the weak base as shown earlier in Chapter 6.



Step 3: Before the equivalence point, the pH is determined by a buffer containing the titrand and its conjugate form.

Step 4: The pH at the equivalence point is determined by the titrand's conjugate form, which in this case is a weak base.

Alternatively, we can calculate acetate's concentration using the initial moles of acetic acid; thus

$$\begin{aligned} [\text{CH}_3\text{COO}^-] &= \frac{\text{initial moles CH}_3\text{COOH}}{\text{total volume}} \\ &= \frac{(0.100 \text{ M})(50.0 \text{ mL})}{50.0 \text{ mL} + 25.0 \text{ mL}} \\ &= 0.0667 \text{ M} \end{aligned}$$

$$K_b = \frac{[\text{OH}^-][\text{CH}_3\text{COOH}]}{[\text{CH}_3\text{COO}^-]} = \frac{(x)(x)}{0.0667 - x} = 5.71 \times 10^{-10}$$

$$x = [\text{OH}^-] = 6.17 \times 10^{-6} \text{ M}$$

$$[\text{H}_3\text{O}^+] = \frac{K_w}{[\text{OH}^-]} = \frac{1.00 \times 10^{-14}}{6.17 \times 10^{-6}} = 1.62 \times 10^{-9} \text{ M}$$

The pH at the equivalence point is 8.79.

After the equivalence point, the titrant is in excess and the titration mixture is a dilute solution of NaOH. We can calculate the pH using the same strategy as in the titration of a strong acid with a strong base. For example, after adding 30.0 mL of NaOH the concentration of OH^- is

$$[\text{OH}^-] = \frac{(0.200 \text{ M})(30.0 \text{ mL}) - (0.100 \text{ M})(50.0 \text{ mL})}{50.0 \text{ mL} + 30.0 \text{ mL}} = 0.0125 \text{ M}$$

$$[\text{H}_3\text{O}^+] = \frac{K_w}{[\text{OH}^-]} = \frac{1.00 \times 10^{-14}}{0.0125 \text{ M}} = 8.00 \times 10^{-13} \text{ M}$$

giving a pH of 12.10. Table 9.3 and [Figure 9.7](#) show additional results for this titration. You can use this same approach to calculate the titration curve for the titration of a weak base with a strong acid, except the initial pH is determined by the weak base, the pH at the equivalence point by its conjugate weak acid, and the pH after the equivalence point by excess strong acid.

Practice Exercise 9.2

Construct a titration curve for the titration of 25.0 mL of 0.125 M NH_3 with 0.0625 M HCl.

Click [here](#) to review your answer to this exercise.

Table 9.3 Titration of 50.0 mL of 0.100 M Acetic Acid with 0.200 M NaOH

Volume of NaOH (mL)	pH	Volume of NaOH (mL)	pH
0.00	2.88	26.0	11.42
5.00	4.16	28.0	11.89
10.0	4.58	30.0	12.10
15.0	4.94	35.0	12.37
20.0	5.36	40.0	12.52
22.0	5.63	45.0	12.62
24.0	6.14	50.0	12.70
25.0	8.79		

Step 5: Calculate pH values after the equivalence point by determining the concentration of excess titrant.

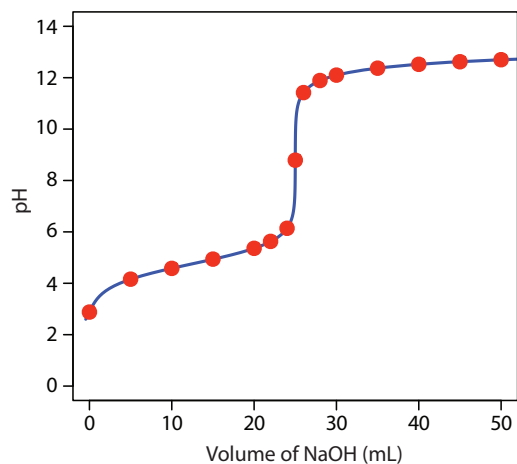


Figure 9.7 Titration curve for the titration of 50.0 mL of 0.100 M CH_3COOH with 0.200 M NaOH. The red points correspond to the data in [Table 9.3](#). The blue line shows the complete titration curve.

We can extend our approach for calculating a weak acid–strong base titration curve to reactions involving multiprotic acids or bases, and mixtures of acids or bases. As the complexity of the titration increases, however, the necessary calculations become more time consuming. Not surprisingly, a variety of algebraic¹ and computer spreadsheet² approaches have been described to aid in constructing titration curves.

SKETCHING AN ACID–BASE TITRATION CURVE

To evaluate the relationship between a titration's equivalence point and its end point, we need to construct only a reasonable approximation of the exact titration curve. In this section we demonstrate a simple method for sketching an acid–base titration curve. Our goal is to sketch the titration curve quickly, using as few calculations as possible. Let's use the titration of 50.0 mL of 0.100 M CH_3COOH with 0.200 M NaOH to illustrate our approach.

We begin by calculating the titration's equivalence point volume, which, as we determined earlier, is 25.0 mL. Next we draw our axes, placing pH on the y -axis and the titrant's volume on the x -axis. To indicate the equivalence point volume, we draw a vertical line corresponding to 25.0 mL of NaOH. [Figure 9.8a](#) shows the result of the first step in our sketch.

Before the equivalence point the titration mixture's pH is determined by a buffer of acetic acid, CH_3COOH , and acetate, CH_3COO^- . Although we can easily calculate a buffer's pH using the Henderson–Hasselbalch equation, we can avoid this calculation by making a simple assumption. You may recall from Chapter 6 that a buffer operates over a pH range extend-

This is the same example that we used in developing the calculations for a weak acid–strong base titration curve. You can review the results of that calculation in [Table 9.3](#) and [Figure 9.7](#).

¹ (a) Willis, C. J. *J. Chem. Educ.* **1981**, *58*, 659–663; (b) Nakagawa, K. *J. Chem. Educ.* **1990**, *67*, 673–676; (c) Gordus, A. A. *J. Chem. Educ.* **1991**, *68*, 759–761; (d) de Levie, R. *J. Chem. Educ.* **1993**, *70*, 209–217; (e) Chaston, S. *J. Chem. Educ.* **1993**, *70*, 878–880; (f) de Levie, R. *Anal. Chem.* **1996**, *68*, 585–590.

² (a) Currie, J. O.; Whiteley, R. V. *J. Chem. Educ.* **1991**, *68*, 923–926; (b) Breneman, G. L.; Parker, O. J. *J. Chem. Educ.* **1992**, *69*, 46–47; (c) Carter, D. R.; Frye, M. S.; Mattson, W. A. *J. Chem. Educ.* **1993**, *70*, 67–71; (d) Freiser, H. *Concepts and Calculations in Analytical Chemistry*, CRC Press: Boca Raton, 1992.

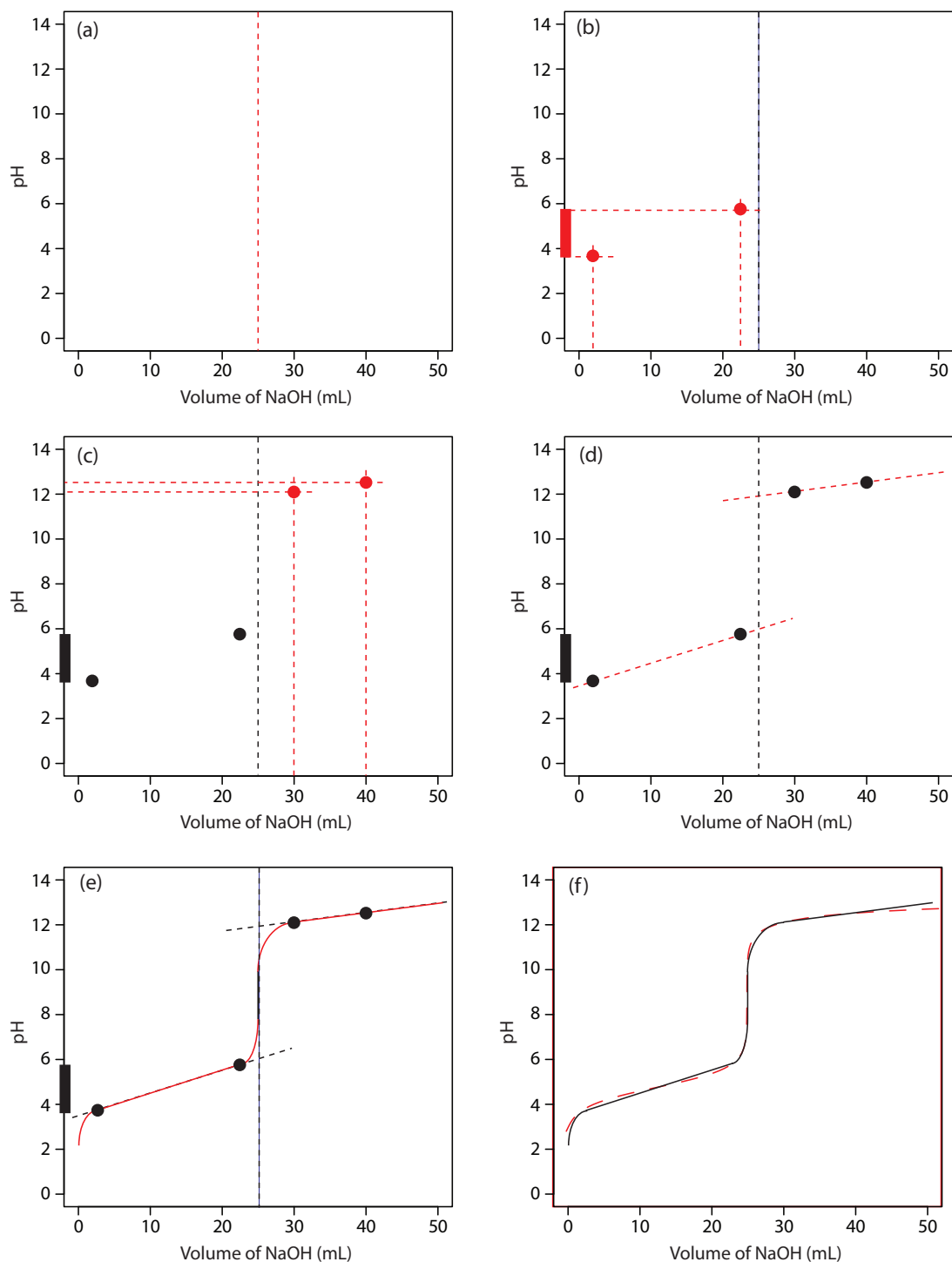


Figure 9.8 Illustrations showing the steps in sketching an approximate titration curve for the titration of 50.0 mL of 0.100 M CH_3COOH with 0.200 M NaOH : (a) locating the equivalence point volume; (b) plotting two points before the equivalence point; (c) plotting two points after the equivalence point; (d) preliminary approximation of titration curve using straight-lines; (e) final approximation of titration curve using a smooth curve; (f) comparison of approximate titration curve (solid black line) and exact titration curve (dashed red line). See the text for additional details.

ing approximately ± 1 pH unit on either side of the weak acid's pK_a value. The pH is at the lower end of this range, $pH = pK_a - 1$, when the weak acid's concentration is $10\times$ greater than that of its conjugate weak base. The buffer reaches its upper pH limit, $pH = pK_a + 1$, when the weak acid's concentration is $10\times$ smaller than that of its conjugate weak base. When titrating a weak acid or a weak base, the buffer spans a range of volumes from approximately 10% of the equivalence point volume to approximately 90% of the equivalence point volume.

[Figure 9.8b](#) shows the second step in our sketch. First, we superimpose acetic acid's ladder diagram on the y -axis, including its buffer range, using its pK_a value of 4.76. Next, we add points representing the pH at 10% of the equivalence point volume (a pH of 3.76 at 2.5 mL) and at 90% of the equivalence point volume (a pH of 5.76 at 22.5 mL).

The third step in sketching our titration curve is to add two points after the equivalence point. The pH after the equivalence point is fixed by the concentration of excess titrant, NaOH. Calculating the pH of a strong base is straightforward, as we have seen earlier. [Figure 9.8c](#) shows the pH after adding 30.0 mL and 40.0 mL of NaOH.

Next, we draw a straight line through each pair of points, extending the lines through the vertical line representing the equivalence point's volume ([Figure 9.8d](#)). Finally, we complete our sketch by drawing a smooth curve that connects the three straight-line segments ([Figure 9.8e](#)). A comparison of our sketch to the exact titration curve ([Figure 9.8f](#)) shows that they are in close agreement.

Practice Exercise 9.3

Sketch a titration curve for the titration of 25.0 mL of 0.125 M NH_3 with 0.0625 M HCl and compare to the result from [Practice Exercise 9.2](#).

Click [here](#) to review your answer to this exercise.

As shown by the following example, we can adapt this approach to acid–base titrations, including those involving polyprotic weak acids and bases, or mixtures of weak acids and bases.

Example 9.1

Sketch titration curves for the following two systems: (a) the titration of 50.0 mL of 0.050 M H_2A , a diprotic weak acid with a pK_{a1} of 3 and a pK_{a2} of 7; and (b) the titration of a 50.0 mL mixture containing 0.075 M HA, a weak acid with a pK_a of 3, and 0.025 M HB, a weak acid with a pK_a of 7. For both titrations the titrant is 0.10 M NaOH.

SOLUTION

[Figure 9.9a](#) shows the titration curve for H_2A , including the ladder diagram on the y -axis, the equivalence points at 25.0 mL and 50.0 mL, two points before each equivalence point, two points after the last equivalence

The actual values are 9.09% and 90.9%, but for our purpose, using 10% and 90% is more convenient; that is, after all, one advantage of an approximation! [Problem 9.4](#) in the end-of-chapter problems asks you to verify these percentages.

See [Table 9.3](#) for the values.

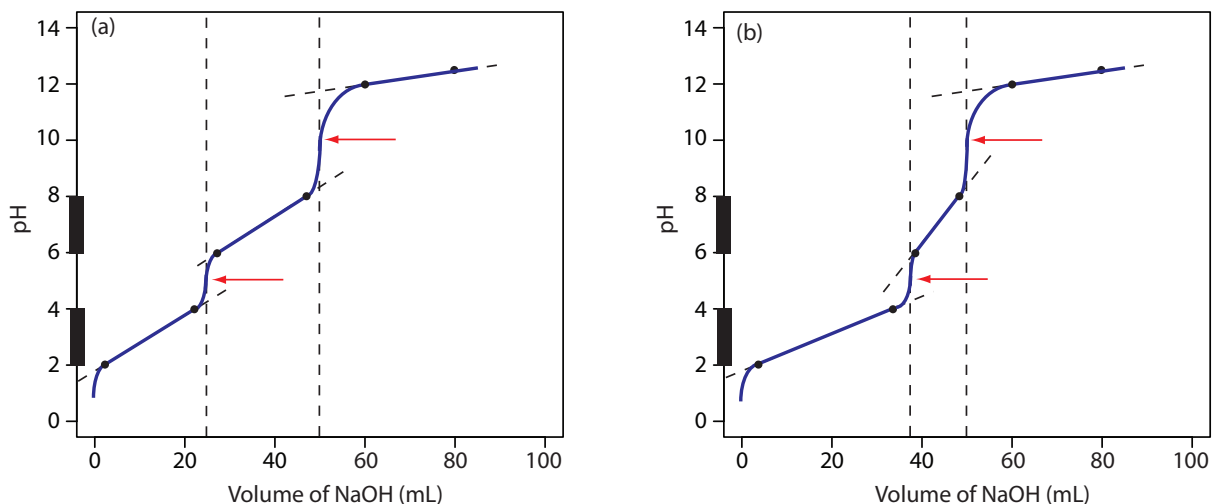


Figure 9.9 Titration curves for Example 9.1. The red arrows show the locations of the equivalence points.

point, and the straight-lines that help in sketching the final curve. Before the first equivalence point the pH is controlled by a buffer consisting of H_2A and HA^- . An $\text{HA}^-/\text{A}^{2-}$ buffer controls the pH between the two equivalence points. After the second equivalence point the pH reflects the concentration of excess NaOH.

Figure 9.9b shows the titration curve for the mixture of HA and HB. Again, there are two equivalence points. In this case, however, the equivalence points are not equally spaced because the concentration of HA is greater than that for HB. Since HA is the stronger of the two weak acids it reacts first; thus, the pH before the first equivalence point is controlled by a buffer consisting of HA and A^- . Between the two equivalence points the pH reflects the titration of HB and is determined by a buffer consisting of HB and B^- . After the second equivalence point excess NaOH is responsible for the pH.

Practice Exercise 9.4

Sketch the titration curve for 50.0 mL of 0.050 M H_2A , a diprotic weak acid with a $\text{p}K_{\text{a}1}$ of 3 and a $\text{p}K_{\text{a}2}$ of 4, using 0.100 M NaOH as the titrant. The fact that $\text{p}K_{\text{a}2}$ falls within the buffer range of $\text{p}K_{\text{a}1}$ presents a challenge that you will need to consider.

Click [here](#) to review your answer to this exercise.

9B.2 Selecting and Evaluating the End point

Earlier we made an important distinction between a titration's end point and its equivalence point. The difference between these two terms is important and deserves repeating. An equivalence point, which occurs when we react stoichiometrically equal amounts of the analyte and the titrant, is a theoretical not an experimental value. A titration's end point is an experimental result, representing our best estimate of the equivalence point. Any

difference between an equivalence point and its corresponding end point is a source of determinate error. It is even possible that an equivalence point does not have a useful end point.

WHERE IS THE EQUIVALENCE POINT?

Earlier we learned how to calculate the pH at the equivalence point for the titration of a strong acid with a strong base, and for the titration of a weak acid with a strong base. We also learned to quickly sketch a titration curve with only a minimum of calculations. Can we also locate the equivalence point without performing any calculations. The answer, as you might guess, is often yes!

For most acid–base titrations the inflection point, the point on a titration curve having the greatest slope, very nearly coincides with the equivalence point.³ The red arrows in [Figure 9.9](#), for example, indicate the equivalence points for the titration curves from [Example 9.1](#). An inflection point actually precedes its corresponding equivalence point by a small amount, with the error approaching 0.1% for weak acids or weak bases with dissociation constants smaller than 10^{-9} , or for very dilute solutions.

The principal limitation to using an inflection point to locate the equivalence point is that the inflection point must be present. For some titrations the inflection point may be missing or difficult to find. [Figure 9.10](#), for example, demonstrates the affect of a weak acid's dissociation constant, K_a , on the shape of titration curve. An inflection point is visible, even if barely so, for acid dissociation constants larger than 10^{-9} , but is missing when K_a is 10^{-11} .

An inflection point also may be missing or difficult to detect if the analyte is a multiprotic weak acid or weak base with successive dissociation constants that are similar in magnitude. To appreciate why this is true let's consider the titration of a diprotic weak acid, H_2A , with NaOH. During the titration the following two reactions occur.

3 Meites, L.; Goldman, J. A. *Anal. Chim. Acta* **1963**, 29, 472–479.

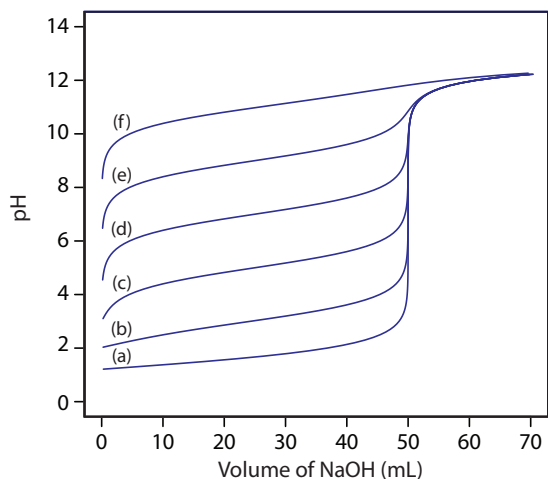


Figure 9.10 Weak acid–strong base titration curves for the titration of 50.0 mL of 0.100 M HA with 0.100 M NaOH. The pK_a values for HA are (a) 1, (b) 3, (c) 5, (d) 7, (e) 9, and (f) 11.

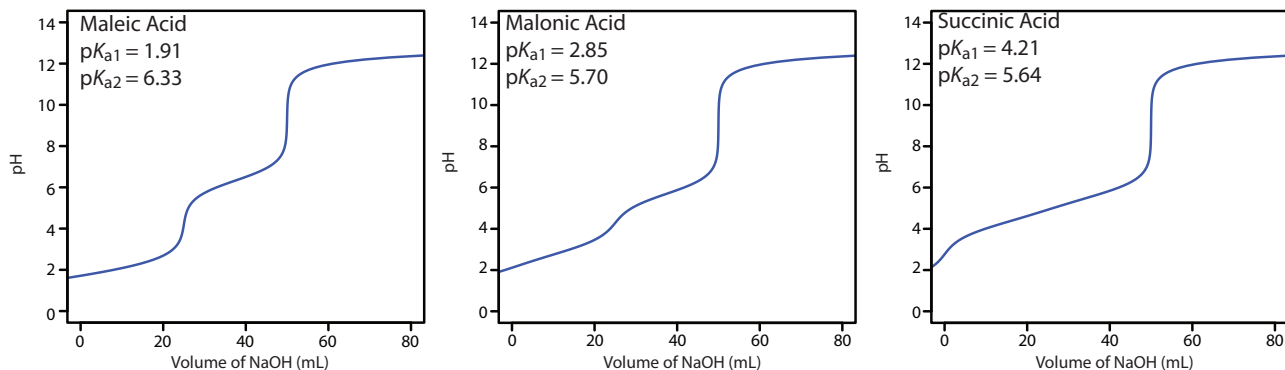
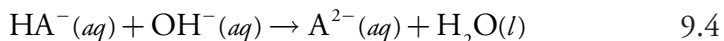
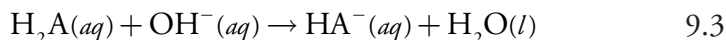


Figure 9.11 Titration curves for the diprotic weak acids maleic acid, malonic acid, and succinic acid. Each titration curve is for 50.0 mL of 0.0500 M weak acid using 0.100 M NaOH. Although each titration curve has equivalence points at 25.0 mL and 50.0 mL of NaOH, the titration curve for succinic acid shows only one inflection point.



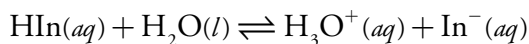
To see two distinct inflection points, reaction 9.3 must be essentially complete before reaction 9.4 begins.

Figure 9.11 shows titration curves for three diprotic weak acids. The titration curve for maleic acid, for which K_{a1} is approximately $20,000 \times$ larger than K_{a2} , has two distinct inflection points. Malonic acid, on the other hand, has acid dissociation constants that differ by a factor of approximately 690. Although malonic acid's titration curve shows two inflection points, the first is not as distinct as that for maleic acid. Finally, the titration curve for succinic acid, for which the two K_a values differ by a factor of only 27, has only a single inflection point corresponding to the neutralization of $\text{HC}_4\text{H}_4\text{O}_4^-$ to $\text{C}_4\text{H}_4\text{O}_4^{2-}$. In general, we can detect separate inflection points when successive acid dissociation constants differ by a factor of at least 500 (a $\Delta\text{p}K_a$ of at least 2.7).

FINDING THE END POINT WITH AN INDICATOR

One interesting group of weak acids and weak bases are organic dyes. Because an organic dye has at least one highly colored conjugate acid–base species, its titration results in a change in both pH and color. We can use this change in color to indicate the end point of a titration, provided that it occurs at or near the titration's equivalence point.

Let's use an indicator, HIn , to illustrate how an acid–base indicator works. Because the indicator's acid and base forms have different colors—the weak acid, HIn , is yellow and the weak base, In^- , is red—the color of a solution containing the indicator depends on their relative concentrations. The indicator's acid dissociation reaction



has an equilibrium constant of

$$K_a = \frac{[\text{H}_3\text{O}^+][\text{In}^-]}{[\text{HIn}]} \quad 9.5$$

Taking the negative log of each side of equation 9.5, and rearranging to solve for pH leaves with a equation

$$\text{pH} = \text{p}K_a + \log \frac{[\text{In}^-]}{[\text{HIn}]} \quad 9.6$$

relating the solution's pH to the relative concentrations of HIn and In^- .

If we can detect HIn and In^- with equal ease, then the transition from yellow to red (or from red to yellow) reaches its midpoint, which is orange, when their concentrations are equal, or when the pH is equal to the indicator's $\text{p}K_a$. If the indicator's $\text{p}K_a$ and the pH at the equivalence point are identical, then titrating until the indicator turns orange is a suitable end point. Unfortunately, we rarely know the exact pH at the equivalence point. In addition, determining when the concentrations of HIn and In^- are equal may be difficult if the indicator's change in color is subtle.

We can establish the range of pHs over which the average analyst observes a change in the indicator's color by making the following assumptions—the indicator's color is yellow if the concentration of HIn is $10\times$ greater than that of In^- , and its color is red if the concentration of HIn is $10\times$ smaller than that of In^- . Substituting these inequalities into equation 9.6

$$\text{pH} = \text{p}K_a + \log \frac{1}{10} = \text{p}K_a - 1$$

$$\text{pH} = \text{p}K_a + \log \frac{10}{1} = \text{p}K_a + 1$$

shows that the indicator changes color over a pH range extending ± 1 unit on either side of its $\text{p}K_a$. As shown in Figure 9.12, the indicator is yellow when the pH is less than $\text{p}K_a - 1$, and it is red for pHs greater than $\text{p}K_a + 1$.

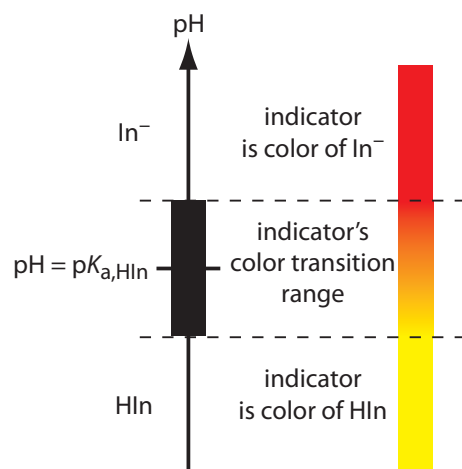


Figure 9.12 Diagram showing the relationship between pH and an indicator's color. The ladder diagram defines pH values where HIn and In^- are the predominate species. The indicator changes color when the pH is between $\text{p}K_a - 1$ and $\text{p}K_a + 1$.

You may wonder why an indicator's pH range, such as that for phenolphthalein, is not equally distributed around its pK_a value. The explanation is simple. [Figure 9.12](#) presents an idealized view of an indicator in which our sensitivity to the indicator's two colors is equal. For some indicators only the weak acid or the weak base is colored. For other indicators both the weak acid and the weak base are colored, but one form is easier to see. In either case, the indicator's pH range is skewed in the direction of the indicator's less colored form. Thus, phenolphthalein's pH range is skewed in the direction of its colorless form, shifting the pH range to values lower than those suggested by [Figure 9.12](#).

Table 9.4 Properties of Selected Acid–Base Indicators

Indicator	Acid Color	Base Color	pH Range	pK_a
cresol red	red	yellow	0.2–1.8	–
thymol blue	red	yellow	1.2–2.8	1.7
bromophenol blue	yellow	blue	3.0–4.6	4.1
methyl orange	red	yellow	3.1–4.4	3.7
Congo red	blue	red	3.0–5.0	–
bromocresol green	yellow	blue	3.8–5.4	4.7
methyl red	red	yellow	4.2–6.3	5.0
bromocresol purple	yellow	purple	5.2–6.8	6.1
litmus	red	blue	5.0–8.0	–
bromothymol blue	yellow	blue	6.0–7.6	7.1
phenol red	yellow	blue	6.8–8.4	7.8
cresol red	yellow	red	7.2–8.8	8.2
thymol blue	yellow	red	8.0–9.6	8.9
phenolphthalein	colorless	red	8.3–10.0	9.6
alizarin yellow R	yellow	orange–red	10.1–12.0	–

For pHs between $pK_a - 1$ and $pK_a + 1$ the indicator's color passes through various shades of orange. The properties of several common acid–base indicators are shown in Table 9.4.

The relatively broad range of pHs over which an indicator changes color places additional limitations on its feasibility for signaling a titration's end point. To minimize a determinate titration error, an indicator's entire pH range must fall within the rapid change in pH at the equivalence point. For example, in [Figure 9.13](#) we see that phenolphthalein is an appropriate indicator for the titration of 50.0 mL of 0.050 M acetic acid with 0.10 M NaOH. Bromothymol blue, on the other hand, is an inappropriate indicator because its change in color begins before the initial sharp rise in pH, and, as a result, spans a relatively large range of volumes. The early change in color increases the probability of obtaining inaccurate results, while the range of possible end point volumes increases the probability of obtaining imprecise results.

Practice Exercise 9.5

Suggest a suitable indicator for the titration of 25.0 mL of 0.125 M NH_3 with 0.0625 M NaOH. You constructed a titration curve for this titration in [Practice Exercise 9.2](#) and [Practice Exercise 9.3](#).

Click [here](#) to review your answer to this exercise.

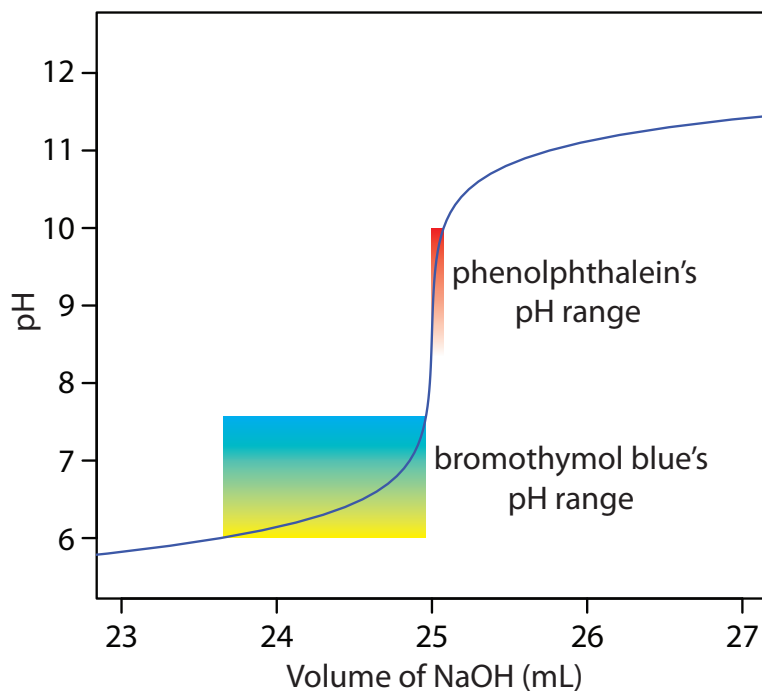


Figure 9.13 Portion of the titration curve for 50.0 mL of 0.050 M CH_3COOH with 0.10 M NaOH, highlighting the region containing the equivalence point. The end point transitions for the indicators phenolphthalein and bromothymol blue are superimposed on the titration curve.

FINDING THE END POINT BY MONITORING pH

An alternative approach for locating a titration's end point is to continuously monitor the titration's progress using a sensor whose signal is a function of the analyte's concentration. The result is a plot of the entire titration curve, which we can use to locate the end point with a minimal error.

The obvious sensor for monitoring an acid–base titration is a pH electrode and the result is a **POTENTIOMETRIC TITRATION CURVE**. For example, [Figure 9.14a](#) shows a small portion of the potentiometric titration curve for the titration of 50.0 mL of 0.050 M CH_3COOH with 0.10 M NaOH, focusing on the region containing the equivalence point. The simplest method for finding the end point is to locate the titration curve's inflection point, as shown by the arrow. This is also the least accurate method, particularly if the titration curve has a shallow slope at the equivalence point.

Another method for locating the end point is to plot the titration curve's first derivative, which gives the titration curve's slope at each point along the x -axis. Examine [Figure 9.14a](#) and consider how the titration curve's slope changes as we approach, reach, and pass the equivalence point. Because the slope reaches its maximum value at the inflection point, the first derivative shows a spike at the equivalence point ([Figure 9.14b](#)).

The second derivative of a titration curve may be more useful than the first derivative because the equivalence point intersects the volume axis. [Figure 9.14c](#) shows the resulting titration curve.

Derivative methods are particularly useful when titrating a sample that contains more than one analyte. If we rely on indicators to locate the end points, then we usually must complete separate titrations for each analyte. If we record the titration curve, however, then a single titration is sufficient.

See [Chapter 11](#) for more details about pH electrodes.

Suppose we have the following three points on our titration curve:

volume (mL)	pH
23.65	6.00
23.91	6.10
24.13	6.20

Mathematically, we can approximate the first derivative as $\Delta\text{pH}/\Delta V$, where ΔpH is the change in pH between successive additions of titrant. Using the first two points, the first derivative is

$$\frac{\Delta\text{pH}}{\Delta V} = \frac{6.10 - 6.00}{23.91 - 23.65} = 0.385$$

which we assign to the average of the two volumes, or 23.78 mL. For the second and third points, the first derivative is 0.455 and the average volume is 24.02 mL.

volume (mL)	$\Delta\text{pH}/\Delta V$
23.78	0.385
24.02	0.455

We can approximate the second derivative as $\Delta(\Delta\text{pH}/\Delta V)/\Delta V$, or $\Delta^2\text{pH}/\Delta V^2$. Using the two points from our calculation of the first derivative, the second derivative is

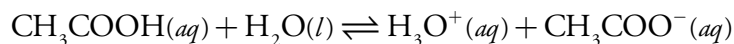
$$\frac{\Delta^2\text{pH}}{\Delta V^2} = \frac{0.455 - 0.385}{23.78 - 24.02} = 0.292$$

Note that calculating the first derivative comes at the expense of losing one piece of information (three points become two points), and calculating the second derivative comes at the expense of losing two pieces of information.

The precision with which we can locate the end point also makes derivative methods attractive for an analyte with a poorly defined normal titration curve.

Derivative methods work well only if we record sufficient data during the rapid increase in pH near the equivalence point. This is usually not a problem if we use an automatic titrator, such as that seen earlier in [Figure 9.5](#). Because the pH changes so rapidly near the equivalence point—a change of several pH units with the addition of several drops of titrant is not unusual—a manual titration does not provide enough data for a useful derivative titration curve. A manual titration does contain an abundance of data during the more gently rising portions of the titration curve before and after the equivalence point. This data also contains information about the titration curve's equivalence point.

Consider again the titration of acetic acid, CH_3COOH , with NaOH . At any point during the titration acetic acid is in equilibrium with H_3O^+ and CH_3COO^-



for which the equilibrium constant is

$$K_a = \frac{[\text{H}_3\text{O}^+][\text{CH}_3\text{COO}^-]}{[\text{CH}_3\text{COOH}]}$$

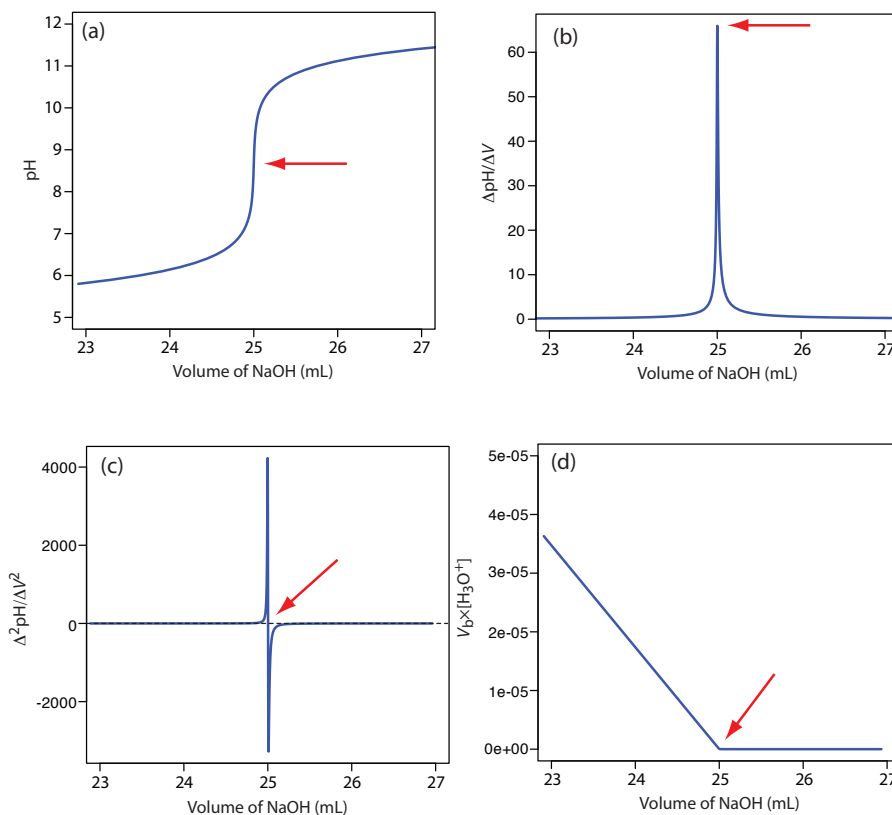


Figure 9.14 Titration curves for the titration of 50.0 mL of 0.050 M CH_3COOH with 0.10 M NaOH : (a) normal titration curve; (b) first derivative titration curve; (c) second derivative titration curve; (d) Gran plot. The red arrow shows the location of the titration's end point.

Before the equivalence point the concentrations of CH_3COOH and CH_3COO^- are

$$[\text{CH}_3\text{COOH}] = \frac{\text{initial moles CH}_3\text{COOH} - \text{moles NaOH added}}{\text{total volume}}$$

$$= \frac{M_a V_a - M_b V_b}{V_a + V_b}$$

$$[\text{CH}_3\text{COO}^-] = \frac{\text{moles NaOH added}}{\text{total volume}} = \frac{M_b V_b}{V_a + V_b}$$

Substituting these equations into the K_a expression and rearranging leaves us with

$$K_a = \frac{[\text{H}_3\text{O}^+](M_b V_b)}{M_a V_a - M_b V_b}$$

$$K_a M_a V_a - K_a M_b V_b = [\text{H}_3\text{O}^+](M_b V_b)$$

$$\frac{K_a M_a V_a}{M_b} - K_a V_b = [\text{H}_3\text{O}^+] \times V_b$$

Finally, recognizing that the equivalence point volume is

$$V_{\text{eq}} = \frac{M_a V_a}{M_b}$$

leaves us with the following equation.

$$[\text{H}_3\text{O}^+] \times V_b = K_a V_{\text{eq}} - K_a V_b$$

For volumes of titrant before the equivalence point, a plot of $V_b \times [\text{H}_3\text{O}^+]$ versus V_b is a straight-line with an x -intercept of V_{eq} and a slope of $-K_a$. [Figure 9.14d](#) shows a typical result. This method of data analysis, which converts a portion of a titration curve into a straight-line, is a **GRAN PLOT**.

FINDING THE END POINT BY MONITORING TEMPERATURE

The reaction between an acid and a base is exothermic. Heat generated by the reaction is absorbed by the titrand, increasing its temperature. Monitoring the titrand's temperature as we add the titrant provides us with another method for recording a titration curve and identifying the titration's end point ([Figure 9.15](#)).

Before adding titrant, any change in the titrand's temperature is the result of warming or cooling as it equilibrates with the surroundings. Adding titrant initiates the exothermic acid-base reaction, increasing the titrand's temperature. This part of a thermometric titration curve is called the titra-

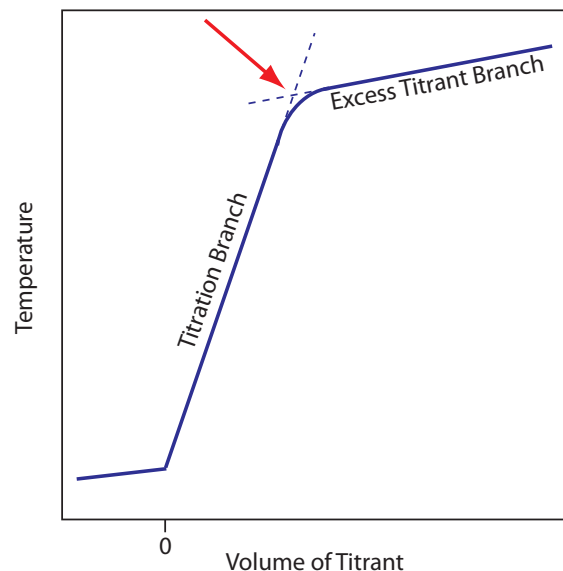


Figure 9.15 Typical thermometric titration curve. The endpoint, shown by the red arrow, is found by extrapolating the titration branch and the excess titration branch.

tion branch. The temperature continues to rise with each addition of titrant until we reach the equivalence point. After the equivalence point, any change in temperature is due to the titrant's enthalpy of dilution, and the difference between the temperatures of the titrant and titrand. Ideally, the equivalence point is a distinct intersection of the titration branch and the excess titrant branch. As shown in Figure 9.15, however, a thermometric titration curve usually shows curvature near the equivalence point due to an incomplete neutralization reaction, or to the excessive dilution of the titrand and the titrant during the titration. The latter problem is minimized by using a titrant that is 10–100 times more concentrated than the analyte, although this results in a very small end point volume and a larger relative error. If necessary, the end point is found by extrapolation.

Although not a particularly common method for monitoring acid–base titrations, a thermometric titration has one distinct advantage over the direct or indirect monitoring of pH. As discussed earlier, the use of an indicator or the monitoring of pH is limited by the magnitude of the relevant equilibrium constants. For example, titrating boric acid, H_3BO_3 , with NaOH does not provide a sharp end point when monitoring pH because, boric acid's K_a of 5.8×10^{-10} is too small (Figure 9.16a). Because boric acid's enthalpy of neutralization is fairly large, -42.7 kJ/mole, however, its thermometric titration curve provides a useful endpoint (Figure 9.16b).

9B.3 Titrations in Nonaqueous Solvents

Thus far we have assumed that the titrant and the titrand are aqueous solutions. Although water is the most common solvent in acid–base titrimetry, switching to a nonaqueous solvent can improve a titration's feasibility.

For an amphoteric solvent, SH , the autoprotolysis constant, K_s , relates the concentration of its protonated form, SH_2^+ , to that of its deprotonated form, S^-

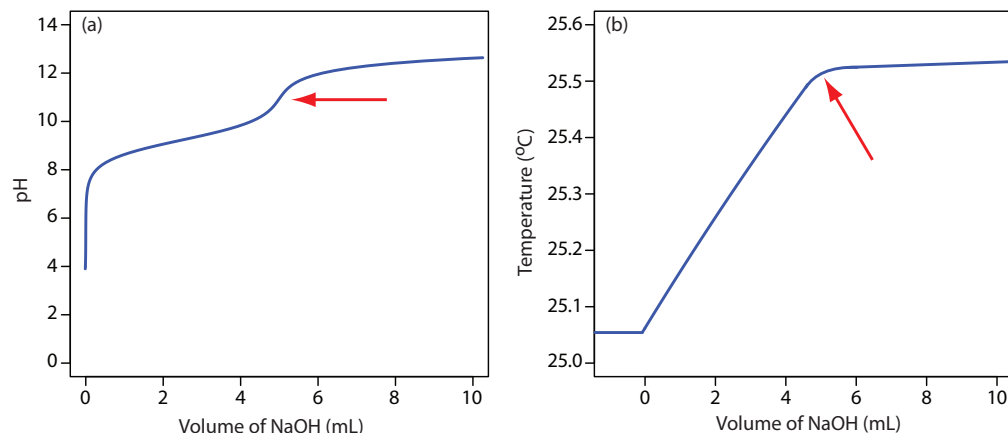
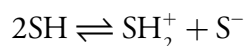


Figure 9.16 Titration curves for the titration of 50.0 mL of 0.050 M H_3BO_3 with 0.50 M NaOH obtained by monitoring (a) pH, and (b) temperature. The red arrows show the end points for the titrations.



$$K_s = [\text{SH}_2^+][\text{S}^-]$$

and the solvent's pH and pOH are

$$\text{pH} = -\log[\text{SH}_2^+]$$

$$\text{pOH} = -\log[\text{S}^-]$$

The most important limitation imposed by K_s is the change in pH during a titration. To understand why this is true, let's consider the titration of 50.0 mL of 1.0×10^{-4} M HCl using 1.0×10^{-4} M NaOH. Before the equivalence point, the pH is determined by the untitrated strong acid. For example, when the volume of NaOH is 90% of V_{eq} , the concentration of H_3O^+ is

$$\begin{aligned} [\text{H}_3\text{O}^+] &= \frac{M_a V_a - M_b V_b}{V_a + V_b} \\ &= \frac{(1.0 \times 10^{-4} \text{ M})(50.0 \text{ mL}) - (1.0 \times 10^{-4} \text{ M})(45.0 \text{ mL})}{50.0 \text{ mL} + 45.0 \text{ mL}} \\ &= 5.3 \times 10^{-6} \text{ M} \end{aligned}$$

and the pH is 5.3. When the volume of NaOH is 110% of V_{eq} , the concentration of OH^- is

$$\begin{aligned} [\text{OH}^-] &= \frac{M_b V_b - M_a V_a}{V_a + V_b} \\ &= \frac{(1.0 \times 10^{-4} \text{ M})(55.0 \text{ mL}) - (1.0 \times 10^{-4} \text{ M})(50.0 \text{ mL})}{50.0 \text{ mL} + 55.0 \text{ mL}} \\ &= 4.8 \times 10^{-6} \text{ M} \end{aligned}$$

You should recognize that K_w is just specific form of K_s when the solvent is water.

The titration's equivalence point requires 50.0 mL of NaOH; thus, 90% of V_{eq} is 45.0 mL of NaOH.

The titration's equivalence point requires 50.0 mL of NaOH; thus, 110% of V_{eq} is 55.0 mL of NaOH.

and the pOH is 5.3. The titrand's pH is

$$\text{pH} = \text{p}K_w - \text{pOH} = 14 - 5.3 = 8.7$$

and the change in the titrand's pH as the titration goes from 90% to 110% of V_{eq} is

$$\Delta\text{pH} = 8.7 - 5.3 = 3.4$$

If we carry out the same titration in a nonaqueous solvent with a K_s of 1.0×10^{-20} , the pH after adding 45.0 mL of NaOH is still 5.3. However, the pH after adding 55.0 mL of NaOH is

$$\text{pH} = \text{p}K_s - \text{pOH} = 20 - 5.3 = 14.7$$

In this case the change in pH

$$\Delta\text{pH} = 14.7 - 5.3 = 9.4$$

is significantly greater than that obtained when the titration is carried out in water. Figure 9.17 shows the titration curves in both the aqueous and the nonaqueous solvents.

Another parameter affecting the feasibility of an acid–base titration is the titrand's dissociation constant. Here, too, the solvent plays an important role. The strength of an acid or a base is a relative measure of the ease transferring a proton from the acid to the solvent, or from the solvent to the base. For example, HF, with a K_a of 6.8×10^{-4} , is a better proton donor than CH_3COOH , for which K_a is 1.75×10^{-5} .

The strongest acid that can exist in water is the hydronium ion, H_3O^+ . HCl and HNO_3 are strong acids because they are better proton donors than H_3O^+ and essentially donate all their protons to H_2O , **LEVELING** their acid

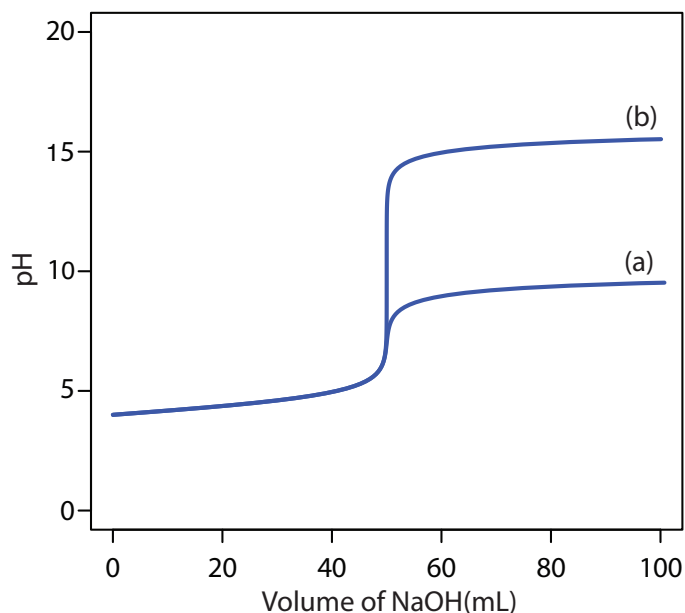
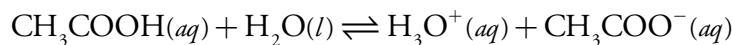


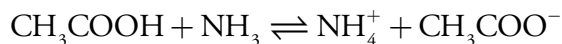
Figure 9.17 Titration curves for 50.0 mL of 1.0×10^{-4} M HCl using 1.0×10^{-4} M NaOH in (a) water, $K_w = 1.0 \times 10^{-14}$, and (b) a nonaqueous solvent, $K_s = 1.0 \times 10^{-20}$.

strength to that of H_3O^+ . In a different solvent HCl and HNO_3 may not behave as strong acids.

If we place acetic acid in water the dissociation reaction



does not proceed to a significant extent because CH_3COO^- is a stronger base than H_2O , and H_3O^+ is a stronger acid than CH_3COOH . If we place acetic acid in a solvent, such as ammonia, that is a stronger base than water, then the reaction



proceeds to a greater extent. In fact, both HCl and CH_3COOH are strong acids in ammonia.

All other things being equal, the strength of a weak acid increases if we place it in a solvent that is more basic than water, and the strength of a weak base increases if we place it in a solvent that is more acidic than water. In some cases, however, the opposite effect is observed. For example, the $\text{p}K_b$ for NH_3 is 4.75 in water and it is 6.40 in the more acidic glacial acetic acid. In contradiction to our expectations, NH_3 is a weaker base in the more acidic solvent. A full description of the solvent's effect on the $\text{p}K_a$ of weak acid or the $\text{p}K_b$ of a weak base is beyond the scope of this text. You should be aware, however, that a titration that is not feasible in water may be feasible in a different solvent.

Representative Method 9.1

Determination of Protein in Bread

DESCRIPTION OF THE METHOD

This method is based on a determination of %w/w nitrogen using the Kjeldahl method. The protein in a sample of bread is oxidized to NH_4^+ using hot concentrated H_2SO_4 . After making the solution alkaline, which converts the NH_4^+ to NH_3 , the ammonia is distilled into a flask containing a known amount of HCl. The amount of unreacted HCl is determined by a back titration with standard strong base titrant. Because different cereal proteins contain similar amounts of nitrogen, multiplying the experimentally determined %w/w N by a factor of 5.7 gives the %w/w protein in the sample (on average there are 5.7 g protein for every gram of nitrogen).

PROCEDURE

Transfer a 2.0-g sample of bread, which has previously been air-dried and ground into a powder, to a suitable digestion flask, along with 0.7 g of a HgO catalyst, 10 g of K_2SO_4 , and 25 mL of concentrated H_2SO_4 . Bring the solution to a boil. Continue boiling until the solution turns clear and then boil for at least an additional 30 minutes. After cooling the solution

The best way to appreciate the theoretical and practical details discussed in this section is to carefully examine a typical acid–base titrimetric method. Although each method is unique, the following description of the determination of protein in bread provides an instructive example of a typical procedure. The description here is based on Method 13.86 as published in *Official Methods of Analysis*, 8th Ed., Association of Official Agricultural Chemists: Washington, D. C., 1955.

below room temperature, remove the Hg^{2+} catalyst by adding 200 mL of H_2O and 25 mL of 4% w/v K_2S . Add a few Zn granules to serve as boiling stones and 25 g of NaOH. Quickly connect the flask to a distillation apparatus and distill the NH_3 into a collecting flask containing a known amount of standardized HCl. The tip of the condenser must be placed below the surface of the strong acid. After the distillation is complete, titrate the excess strong acid with a standard solution of NaOH using methyl red as an indicator (Figure 9.18).

QUESTIONS

1. Oxidizing the protein converts all of its nitrogen to NH_4^+ . Why is the amount of nitrogen not determined by titrating the NH_4^+ with a strong base?

There are two reasons for not directly titrating the ammonium ion. First, because NH_4^+ is a very weak acid (its K_a is 5.6×10^{-10}), its titration with NaOH yields a poorly defined end point. Second, even if the end point can be determined with acceptable accuracy and precision, the solution also contains a substantial larger concentration of unreacted H_2SO_4 . The presence of two acids that differ greatly in concentration makes for a difficult analysis. If the titrant's concentration is similar to that of H_2SO_4 , then the equivalence point volume for the titration of NH_4^+ is too small to measure reliably. On the other hand, if the titrant's concentration is similar to that of NH_4^+ , the volume needed to neutralize the H_2SO_4 is unreasonably large.

2. Ammonia is a volatile compound as evidenced by the strong smell of even dilute solutions. This volatility is a potential source of determinate error. Is this determinate error negative or positive?

Any loss of NH_3 is loss of nitrogen and, therefore, a loss of protein. The result is a negative determinate error.

3. Discuss the steps in this procedure that minimize this determinate error.

Three specific steps minimize the loss of ammonia: (1) the solution is cooled below room temperature before adding NaOH; (2) after add-




Figure 9.18 Methyl red's endpoint for the titration of a strong acid with a strong base; the indicator is: (a) red prior to the end point; (b) orange at the end point; and (c) yellow after the end point.

ing NaOH, the digestion flask is quickly connected to the distillation apparatus; and (3) the condenser's tip is placed below the surface of the HCl to ensure that the NH_3 reacts with the HCl before it can be lost through volatilization.

4. How does K_2S remove Hg^{2+} , and why is its removal important?

Adding sulfide precipitates Hg^{2+} as HgS . This is important because NH_3 forms stable complexes with many metal ions, including Hg^{2+} . Any NH_3 that reacts with Hg^{2+} is not collected during distillation, providing another source of determinate error.

9B.4 QUANTITATIVE APPLICATIONS

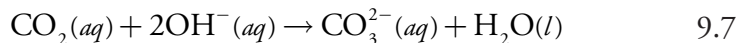
Although many quantitative applications of acid–base titrimetry have been replaced by other analytical methods, a few important applications continue to be relevant. In this section we review the general application of acid–base titrimetry to the analysis of inorganic and organic compounds, with an emphasis on applications in environmental and clinical analysis. First, however, we discuss the selection and standardization of acidic and basic titrants.

SELECTING AND STANDARDIZING A TITRANT

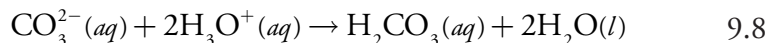
The most common strong acid titrants are HCl, HClO_4 , and H_2SO_4 . Solutions of these titrants are usually prepared by diluting a commercially available concentrated stock solution. Because the concentrations of concentrated acids are known only approximately, the titrant's concentration is determined by standardizing against one of the primary standard weak bases listed in [Table 9.5](#).

The most common strong base titrant is NaOH. Sodium hydroxide is available both as an impure solid and as an approximately 50% w/v solution. Solutions of NaOH may be standardized against any of the primary weak acid standards listed in [Table 9.5](#).

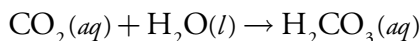
Using NaOH as a titrant is complicated by potential contamination from the following reaction between CO_2 and OH^- .



During the titration, NaOH reacts with both the titrand and CO_2 , increasing the volume of NaOH needed to reach the titration's end point. This is not a problem if end point pH is less than 6. Below this pH the CO_3^{2-} from reaction 9.7 reacts with H_3O^+ to form carbonic acid.



Combining reaction 9.7 and reaction 9.8 gives an overall reaction that does not include OH^- .



The nominal concentrations of the concentrated stock solutions are 12.1 M HCl, 11.7 M HClO_4 , and 18.0 M H_2SO_4 .

Any solution in contact with the atmosphere contains a small amount of $\text{CO}_2(aq)$ from the equilibrium

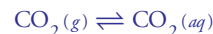
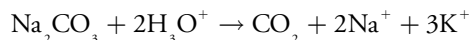


Table 9.5 Selected Primary Standards for Standardizing Strong Acid and Strong Base Titrants

Standardization of Acidic Titrants		
Primary Standard	Titration Reaction	Comment
Na_2CO_3	$\text{Na}_2\text{CO}_3 + 2\text{H}_3\text{O}^+ \rightarrow \text{H}_2\text{CO}_3 + 2\text{Na}^+ + 2\text{H}_2\text{O}$	a
$(\text{HOCH}_2)_3\text{CNH}_2$	$(\text{HOCH}_2)_3\text{CNH}_2 + \text{H}_3\text{O}^+ \rightarrow (\text{HOCH}_2)_3\text{CNH}_3^+ + \text{H}_2\text{O}$	b
$\text{Na}_2\text{B}_4\text{O}_7$	$\text{Na}_2\text{B}_4\text{O}_7 + 2\text{H}_3\text{O}^+ + 3\text{H}_2\text{O} \rightarrow 2\text{Na}^+ + 4\text{H}_3\text{BO}_3$	
Standardization of Basic Titrants		
Primary Standard	Titration Reaction	Comment
$\text{KHC}_8\text{H}_4\text{O}_4$	$\text{KHC}_8\text{H}_4\text{O}_4 + \text{OH}^- \rightarrow \text{K}^+ + \text{C}_8\text{H}_4\text{O}_4^- + \text{H}_2\text{O}$	c
$\text{C}_6\text{H}_5\text{COOH}$	$\text{C}_6\text{H}_5\text{COOH} + \text{OH}^- \rightarrow \text{C}_6\text{H}_5\text{COO}^- + \text{H}_2\text{O}$	d
$\text{KH}(\text{IO}_3)_2$	$\text{KH}(\text{IO}_3)_2 + \text{OH}^- \rightarrow \text{K}^+ + 2\text{IO}_3^- + \text{H}_2\text{O}$	

^a The end point for this titration is improved by titrating to the second equivalence point, boiling the solution to expel CO_2 , and retitrating to the second equivalence point. The reaction in this case is



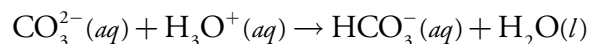
^b *Tris*-(hydroxymethyl)aminomethane often goes by the shorter name of TRIS or THAM.

^c Potassium hydrogen phthalate often goes by the shorter name of KHP.

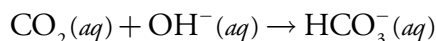
^d Because it is not very soluble in water, dissolve benzoic acid in a small amount of ethanol before diluting with water.

Under these conditions the presence of CO_2 does not affect the quantity of OH^- used in the titration and is not a source of determinate error.

If the end point pH is between 6 and 10, however, the neutralization of CO_3^{2-} requires one proton



and the net reaction between CO_2 and OH^- is



Under these conditions some OH^- is consumed in neutralizing CO_2 , resulting in a determinate error. We can avoid the determinate error if we use the same end point pH in both the standardization of NaOH and the analysis of our analyte, although this often is not practical.

Solid NaOH is always contaminated with carbonate due to its contact with the atmosphere, and can not be used to prepare a carbonate-free solution of NaOH. Solutions of carbonate-free NaOH can be prepared from 50% w/v NaOH because Na_2CO_3 is insoluble in concentrated NaOH.

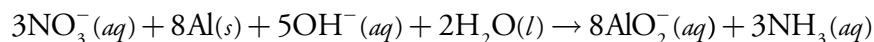
When CO_2 is absorbed, Na_2CO_3 precipitates and settles to the bottom of the container, allowing access to the carbonate-free NaOH . When preparing a solution of NaOH , be sure to use water that is free from dissolved CO_2 . Briefly boiling the water expels CO_2 , and after cooling, it may be used to prepare carbonate-free solutions of NaOH . A solution of carbonate-free NaOH is relatively stable if we limit its contact with the atmosphere. Standard solutions of sodium hydroxide should not be stored in glass bottles as NaOH reacts with glass to form silicate; instead, store such solutions in polyethylene bottles.

INORGANIC ANALYSIS

Acid–base titrimetry is a standard method for the quantitative analysis of many inorganic acids and bases. A standard solution of NaOH can be used to determine the concentration of inorganic acids, such as H_3PO_4 or H_3AsO_4 , and inorganic bases, such as Na_2CO_3 can be analyzed using a standard solution of HCl .

An inorganic acid or base that is too weak to be analyzed by an aqueous acid–base titration can be analyzed by adjusting the solvent, or by an indirect analysis. For example, when analyzing boric acid, H_3BO_3 , by titrating with NaOH , accuracy is limited by boric acid's small acid dissociation constant of 5.8×10^{-10} . Boric acid's K_a value increases to 1.5×10^{-4} in the presence of mannitol, because it forms a complex with the borate ion. The result is a sharper end point and a more accurate titration. Similarly, the analysis of ammonium salts is limited by the small acid dissociation constant of 5.7×10^{-10} for NH_4^+ . In this case, we can convert NH_4^+ to NH_3 by neutralizing with strong base. The NH_3 , for which K_b is 1.58×10^{-5} , is then removed by distillation and titrated with HCl .

We can analyze a neutral inorganic analyte if we can first convert it into an acid or base. For example, we can determine the concentration of NO_3^- by reducing it to NH_3 in a strongly alkaline solution using Devarda's alloy, a mixture of 50% w/w Cu , 45% w/w Al , and 5% w/w Zn .



The NH_3 is removed by distillation and titrated with HCl . Alternatively, we can titrate NO_3^- as a weak base by placing it in an acidic nonaqueous solvent such as anhydrous acetic acid and using HClO_4 as a titrant.

Acid–base titrimetry continues to be listed as a standard method for the determination of alkalinity, acidity, and free CO_2 in waters and wastewaters. **ALKALINITY** is a measure of a sample's capacity to neutralize acids. The most important sources of alkalinity are OH^- , HCO_3^- , and CO_3^{2-} , although other weak bases, such as phosphate, may contribute to the overall alkalinity. Total alkalinity is determined by titrating to a fixed end point pH of 4.5 (or to the bromocresol green end point) using a standard solution of HCl or H_2SO_4 . Results are reported as mg CaCO_3/L .

Figure 9.16a shows a typical result for the titration of H_3BO_3 with NaOH .

Although a variety of strong bases and weak bases may contribute to a sample's alkalinity, a single titration cannot distinguish between the possible sources. Reporting the total alkalinity as if CaCO_3 is the only source provides a means for comparing the acid-neutralizing capacities of different samples.

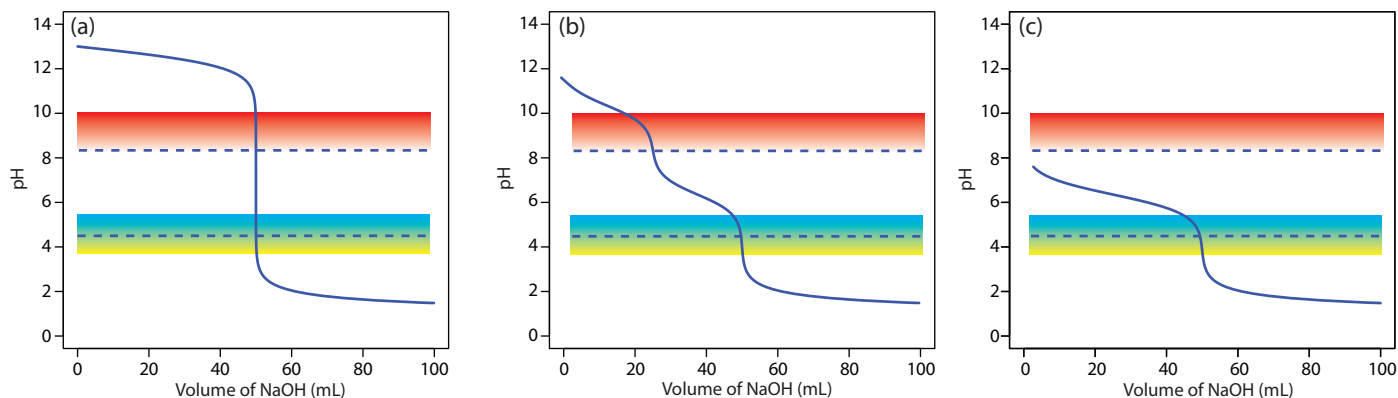


Figure 9.19 Titration curves for 50.0 mL of (a) 0.10 M NaOH, (b) 0.050 M Na₂CO₃, and (c) 0.10 M NaHCO₃ using 0.10 M HCl. The dashed lines indicate the fixed pH end points of 8.3 and 4.5. The color gradients show the phenolphthalein (red → colorless) and bromocresol green (blue → green) endpoints. When titrating to the phenolphthalein endpoint, the titration continues until the last trace of red is lost.

When the sources of alkalinity are limited to OH⁻, HCO₃⁻, and CO₃²⁻, separate titrations to a pH of 4.5 (or the bromocresol green end point) and a pH of 8.3 (or the phenolphthalein end point) allow us to determine which species are present and their respective concentrations. Titration curves for OH⁻, HCO₃⁻, and CO₃²⁻ are shown in Figure 9.19. For a solution containing only OH⁻ alkalinity, the volumes of strong acid needed to reach the two end points are identical (Figure 9.19a). When the only source of alkalinity is CO₃²⁻, the volume of strong acid needed to reach the end point at a pH of 4.5 is exactly twice that needed to reach the end point at a pH of 8.3 (Figure 9.19b). If a solution contains only HCO₃⁻ alkalinity, the volume of strong acid needed to reach the end point at a pH of 8.3 is zero, but that for the pH 4.5 end point is greater than zero (Figure 9.19c).

Mixtures of OH⁻ and CO₃²⁻, or of HCO₃⁻ and CO₃²⁻ also are possible. Consider, for example, a mixture of OH⁻ and CO₃²⁻. The volume of strong acid to titrate OH⁻ is the same whether we titrate to a pH of 8.3 or a pH of 4.5. Titrating CO₃²⁻ to a pH of 4.5, however, requires twice as much strong acid as titrating to a pH of 8.3. Consequently, when titrating a mixture of these two ions, the volume of strong acid to reach a pH of 4.5 is less than twice that to reach a pH of 8.3. For a mixture of HCO₃⁻ and CO₃²⁻ the volume of strong acid to reach a pH of 4.5 is more than twice that to reach a pH of 8.3. [Table 9.6](#) summarizes the relationship between the sources of alkalinity and the volumes of titrant needed to reach the two end points.

ACIDITY is a measure of a water sample's capacity for neutralizing base, and is conveniently divided into strong acid and weak acid acidity. Strong acid acidity, from inorganic acids such as HCl, HNO₃, and H₂SO₄, is common in industrial effluents and acid mine drainage. Weak acid acidity is usually dominated by the formation of H₂CO₃ from dissolved CO₂, but also includes contributions from hydrolyzable metal ions such as Fe³⁺, Al³⁺,

Solutions containing OH⁻ and HCO₃⁻ alkalities are unstable with respect to the formation of CO₃²⁻. [Problem 9.15](#) in the end of chapter problems asks you to explain why this is true.

Table 9.6 Relationship Between End Point Volumes and Sources of Alkalinity

Source of Alkalinity	Relationship Between End Point Volumes
OH^-	$V_{\text{pH } 4.5} = V_{\text{pH } 8.3}$
CO_3^{2-}	$V_{\text{pH } 4.5} = 2 \times V_{\text{pH } 8.3}$
HCO_3^-	$V_{\text{pH } 4.5} > 0; V_{\text{pH } 8.3} = 0$
OH^- and CO_3^{2-}	$V_{\text{pH } 4.5} < 2 \times V_{\text{pH } 8.3}$
CO_3^{2-} and HCO_3^-	$V_{\text{pH } 4.5} > 2 \times V_{\text{pH } 8.3}$

and Mn^{2+} . In addition, weak acid acidity may include a contribution from organic acids.

Acidity is determined by titrating with a standard solution of NaOH to fixed pH of 3.7 (or the bromothymol blue end point) and a fixed pH 8.3 (or the phenolphthalein end point). Titrating to a pH of 3.7 provides a measure of strong acid acidity, and titrating to a pH of 8.3 provides a measure of total acidity. Weak acid acidity is the difference between the total and strong acid acidities. Results are expressed as the amount of CaCO_3 that can be neutralized by the sample's acidity. An alternative approach for determining strong acid and weak acid acidity is to obtain a potentiometric titration curve and use a Gran plot to determine the two equivalence points. This approach has been used, for example, to determine the forms of acidity in atmospheric aerosols.⁴

Water in contact with either the atmosphere, or with carbonate-bearing sediments contains free CO_2 that exists in equilibrium with $\text{CO}_2(g)$ and aqueous H_2CO_3 , HCO_3^- , and CO_3^{2-} . The concentration of free CO_2 is determined by titrating with a standard solution of NaOH to the phenolphthalein end point, or to a pH of 8.3, with results reported as mg CO_2/L . This analysis is essentially the same as that for the determination of total acidity, and can only be applied to water samples that do not contain strong acid acidity.

ORGANIC ANALYSIS

Acid–base titrimetry continues to have a small, but important role for the analysis of organic compounds in pharmaceutical, biochemical, agricultural, and environmental laboratories. Perhaps the most widely employed acid–base titration is the **KJELDAHL ANALYSIS** for organic nitrogen. Examples of analytes determined by a Kjeldahl analysis include caffeine and saccharin in pharmaceutical products, proteins in foods, and the analysis of nitrogen in fertilizers, sludges, and sediments. Any nitrogen present in a -3 oxidation state is quantitatively oxidized to NH_4^+ . Because some aromatic heterocyclic compounds, such as pyridine, are difficult to oxidize, a catalyst is used to ensure a quantitative oxidation. Nitrogen in other oxidation states, such

As is the case with alkalinity, acidity is reported as mg CaCO_3/L .

Free CO_2 is the same thing as $\text{CO}_2(aq)$.

See [Representative Method 9.1](#) for one application of a Kjeldahl analysis.

⁴ Ferek, R. J.; Lazrus, A. L.; Haagenson, P. L.; Winchester, J. W. *Environ. Sci. Technol.* **1983**, *17*, 315–324.

Table 9.7 Selected Elemental Analyses Based on an Acid–Base Titration

Element	Convert to...	Reaction Producing Titratable Acid or Base ^a	Titration Details
N	NH ₃ (g)	$\text{NH}_3(g) + \text{HCl}(aq) \rightarrow \text{NH}_4^+(aq) + \text{Cl}^-(aq)$	add HCl in excess and back titrate with NaOH
S	SO ₂ (g)	$\text{SO}_2(g) + \text{H}_2\text{O}_2(aq) \rightarrow \text{H}_2\text{SO}_4(aq)$	titrate H ₂ SO ₄ with NaOH
C	CO ₂ (g)	$\text{CO}_2(g) + \text{Ba}(\text{OH})_2(aq) \rightarrow \text{BaCO}_3(s) + \text{H}_2\text{O}(l)$	add excess Ba(OH) ₂ and back titrate with HCl
Cl	HCl (g)	—	titrate HCl with NaOH
F	SiF ₄ (g)	$3\text{SiF}_4(aq) + 2\text{H}_2\text{O}(l) \rightarrow 2\text{H}_2\text{SiF}_6(aq) + \text{SiO}_2(s)$	titrate H ₂ SiF ₆ with NaOH

^a The species that is titrated is shown in **bold**.

as nitro and azo nitrogens, may be oxidized to N₂, resulting in a negative determinate error. Including a reducing agent, such as salicylic acid, converts this nitrogen to a –3 oxidation state, eliminating this source of error. Table 9.7 provides additional examples in which an element is quantitative converted into a titratable acid or base.

Several organic functional groups are weak acids or weak bases. Carboxylic (–COOH), sulfonic (–SO₃H) and phenolic (–C₆H₅OH) functional groups are weak acids that can be successfully titrated in either aqueous or nonaqueous solvents. Sodium hydroxide is the titrant of choice for aqueous solutions. Nonaqueous titrations are often carried out in a basic solvent, such as ethylenediamine, using tetrabutylammonium hydroxide, (C₄H₉)₄NOH, as the titrant. Aliphatic and aromatic amines are weak bases that can be titrated using HCl in aqueous solution, or HClO₄ in glacial acetic acid. Other functional groups can be analyzed indirectly following a reaction that produces or consumes an acid or base. Typical examples are shown in [Table 9.8](#).

Many pharmaceutical compounds are weak acids or bases that can be analyzed by an aqueous or nonaqueous acid–base titration; examples include salicylic acid, phenobarbital, caffeine, and sulfanilamide. Amino acids and proteins can be analyzed in glacial acetic acid using HClO₄ as the titrant. For example, a procedure for determining the amount of nutritionally available protein uses an acid–base titration of lysine residues.⁵

QUANTITATIVE CALCULATIONS

The quantitative relationship between the titrand and the titrant is determined by the stoichiometry of the titration reaction. If the titrand is polyprotic, then we must know to which equivalence point we are titrating. The following example illustrates how we can use a ladder diagram to determine a titration reaction's stoichiometry.

5 (a) Molnár-Perl, I.; Pinteé-Szakács, M. *Anal. Chim. Acta* **1987**, *202*, 159–166; (b) Barbosa, J.; Bosch, E.; Cortina, J. L.; Rosés, M. *Anal. Chim. Acta* **1992**, *256*, 177–181.

Table 9.8 Selected Acid–Base Titrimetric Procedures for Organic Functional Groups Based on the Production or Consumption of Acid or Base

Functional Group	Reaction Producing Titratable Acid or Base ^a	Titration Details
ester	$\text{RCOOR}'(\text{aq}) + \text{OH}^-(\text{aq}) \rightarrow \text{RCOO}^-(\text{aq}) + \text{HOR}'(\text{aq})$	titrate OH^- with HCl
carbonyl	$\text{R}_2\text{C}=\text{O}(\text{aq}) + \text{NH}_2\text{OH}\cdot\text{HCl}(\text{aq}) \rightarrow \text{R}_2\text{C}=\text{NOH}(\text{aq}) + \text{HCl}(\text{aq}) + \text{H}_2\text{O}(\text{l})$	titrate HCl with NaOH
alcohol ^b	[1] $(\text{CH}_3\text{CO})_2\text{O} + \text{ROH} \rightarrow \text{CH}_3\text{COOR} + \text{CH}_3\text{COOH}$ [2] $(\text{CH}_3\text{CO})_2\text{O} + \text{H}_2\text{O} \rightarrow 2\text{CH}_3\text{COOH}$	titrate CH_3COOH with NaOH; a blank titration of acetic anhydride, $(\text{CH}_3\text{CO})_2\text{O}$, corrects for the contribution of reaction [2]

^a The species that is titrated is shown in **bold**.

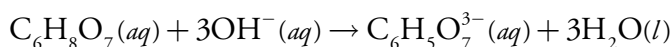
^b The acetylation reaction [1] is carried out in pyridine to prevent the hydrolysis of acetic by water. After the acetylation reaction is complete, water is added to convert any unreacted acetic anhydride to acetic acid [2].

Example 9.2

A 50.00 mL sample of a citrus drink requires 17.62 mL of 0.04166 M NaOH to reach the phenolphthalein end point. Express the sample's acidity as grams of citric acid, $\text{C}_6\text{H}_8\text{O}_7$, per 100 mL.

SOLUTION

Because citric acid is a triprotic weak acid, we must first determine if the phenolphthalein end point corresponds to the first, second, or third equivalence point. Citric acid's ladder diagram is shown in Figure 9.20a. Based on this ladder diagram, the first equivalence point is between a pH of 3.13 and a pH of 4.76, the second equivalence point is between a pH of 4.76 and a pH of 6.40, and the third equivalence point is greater than a pH of 6.40. Because phenolphthalein's end point pH is 8.3–10.0 (see [Table 9.4](#)), the titration proceeds to the third equivalence point and the titration reaction is



In reaching the equivalence point, each mole of citric acid consumes three moles of NaOH; thus

$$0.04166 \text{ M NaOH} \times 0.01762 \text{ L NaOH} = 7.3405 \times 10^{-5} \text{ moles NaOH}$$

$$\begin{aligned} 7.3405 \times 10^{-5} \text{ mol NaOH} &\times \frac{1 \text{ mol C}_6\text{H}_8\text{O}_7}{3 \text{ mol NaOH}} \\ &= 2.4468 \times 10^{-4} \text{ mol C}_6\text{H}_8\text{O}_7 \end{aligned}$$

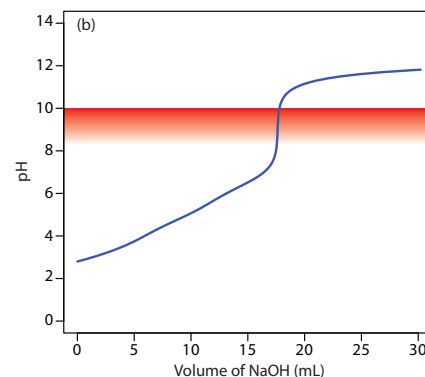
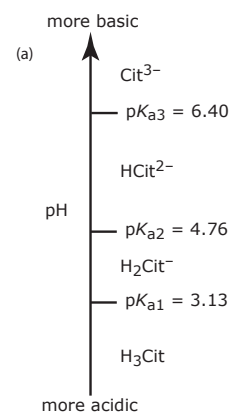


Figure 9.20 (a) Ladder diagram for citric acid; (b) Titration curve for the sample in Example 9.2 showing phenolphthalein's pH transition region.

$$2.4468 \times 10^{-4} \text{ mol C}_6\text{H}_8\text{O}_7 \times \frac{192.13 \text{ g C}_6\text{H}_8\text{O}_7}{\text{mol C}_6\text{H}_8\text{O}_7} = 0.04701 \text{ g C}_6\text{H}_8\text{O}_7$$

Because this is the amount of citric acid in a 50.00 mL sample, the concentration of citric acid in the citrus drink is 0.09402 g/100 mL. The complete titration curve is shown in [Figure 9.20b](#).

Practice Exercise 9.6

Your company recently received a shipment of salicylic acid, $\text{C}_7\text{H}_6\text{O}_3$, to be used in the production of acetylsalicylic acid (aspirin). The shipment can be accepted only if the salicylic acid is more than 99% pure. To evaluate the shipment's purity, a 0.4208-g sample is dissolved in water and titrated to the phenolphthalein end point, requiring 21.92 mL of 0.1354 M NaOH. Report the shipment's purity as %w/w $\text{C}_7\text{H}_6\text{O}_3$. Salicylic acid is a diprotic weak acid with $\text{p}K_a$ values of 2.97 and 13.74.

Click [here](#) to review your answer to this exercise.

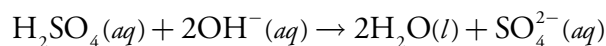
In an indirect analysis the analyte participates in one or more preliminary reactions, one of which produces or consumes acid or base. Despite the additional complexity, the calculations are straightforward.

Example 9.3

The purity of a pharmaceutical preparation of sulfanilamide, $\text{C}_6\text{H}_4\text{N}_2\text{O}_2\text{S}$, is determined by oxidizing sulfur to SO_2 and bubbling it through H_2O_2 to produce H_2SO_4 . The acid is titrated to the bromothymol blue end point with a standard solution of NaOH. Calculate the purity of the preparation given that a 0.5136-g sample requires 48.13 mL of 0.1251 M NaOH.

SOLUTION

The bromothymol blue end point has a pH range of 6.0–7.6. Sulfuric acid is a diprotic acid, with a $\text{p}K_{a2}$ of 1.99 (the first K_a value is very large and the acid dissociation reaction goes to completion, which is why H_2SO_4 is a strong acid). The titration, therefore, proceeds to the second equivalence point and the titration reaction is



Using the titration results, there are

$$0.1251 \text{ M NaOH} \times 0.04813 \text{ L NaOH} = 6.021 \times 10^{-3} \text{ mol NaOH}$$

$$6.021 \times 10^{-3} \text{ mol NaOH} \times \frac{1 \text{ mol H}_2\text{SO}_4}{2 \text{ mol NaOH}} = 3.010 \times 10^{-3} \text{ mol H}_2\text{SO}_4$$

produced by bubbling SO_2 through H_2O_2 . Because all the sulfur in H_2SO_4 comes from the sulfanilamide, we can use a conservation of mass to determine the amount of sulfanilamide in the sample.

$$3.010 \times 10^{-3} \text{ mol H}_2\text{SO}_4 \times \frac{1 \text{ mol S}}{\text{mol H}_2\text{SO}_4} \times \frac{1 \text{ mol C}_6\text{H}_4\text{N}_2\text{O}_2\text{S}}{\text{mol S}} \times \frac{168.18 \text{ g C}_6\text{H}_4\text{N}_2\text{O}_2\text{S}}{\text{mol C}_6\text{H}_4\text{N}_2\text{O}_2\text{S}} = 0.5062 \text{ g C}_6\text{H}_4\text{N}_2\text{O}_2\text{S}$$

$$\frac{0.5062 \text{ g C}_6\text{H}_4\text{N}_2\text{O}_2\text{S}}{0.5136 \text{ g sample}} \times 100 = 98.56\% \text{ w/w C}_6\text{H}_4\text{N}_2\text{O}_2\text{S}$$

Practice Exercise 9.7

The concentration of NO_2 in air can be determined by passing the sample through a solution of H_2O_2 , which oxidizes NO_2 to HNO_3 , and titrating the HNO_3 with NaOH . What is the concentration of NO_2 , in mg/L, if a 5.0 L sample of air requires 9.14 mL of 0.01012 M NaOH to reach the methyl red end point

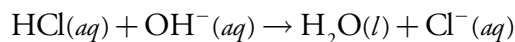
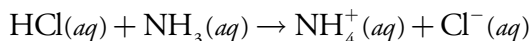
Click [here](#) to review your answer to this exercise.

Example 9.4

The amount of protein in a sample of cheese is determined by a Kjeldahl analysis for nitrogen. After digesting a 0.9814-g sample of cheese, the nitrogen is oxidized to NH_4^+ , converted to NH_3 with NaOH , and distilled into a collection flask containing 50.00 mL of 0.1047 M HCl . The excess HCl is back titrated with 0.1183 M NaOH , requiring 22.84 mL to reach the bromothymol blue end point. Report the %w/w protein in the cheese assuming that there are 6.38 grams of protein for every gram of nitrogen in most dairy products.

SOLUTION

The HCl in the collection flask reacts with two bases



The collection flask originally contains

$$0.1047 \text{ M HCl} \times 0.05000 \text{ L HCl} = 5.235 \times 10^{-3} \text{ mol HCl}$$

of which

For a back titration we must consider two acid–base reactions. Again, the calculations are straightforward.

$$0.1183 \text{ M NaOH} \times 0.02284 \text{ L NaOH} \times$$

$$\frac{1 \text{ mol HCl}}{\text{mol NaOH}} = 2.702 \times 10^{-3} \text{ mol HCl}$$

react with NaOH. The difference between the total moles of HCl and the moles of HCl reacting with NaOH

$$5.235 \times 10^{-3} \text{ mol HCl} - 2.702 \times 10^{-3} \text{ mol HCl} = 2.533 \times 10^{-3} \text{ mol HCl}$$

is the moles of HCl reacting with NH_3 . Because all the nitrogen in NH_3 comes from the sample of cheese, we use a conservation of mass to determine the grams of nitrogen in the sample.

$$2.533 \times 10^{-3} \text{ mol HCl} \times \frac{1 \text{ mol NH}_3}{\text{mol HCl}} \times \frac{14.01 \text{ g N}}{\text{mol NH}_3} = 0.03549 \text{ g N}$$

The mass of protein, therefore, is

$$0.03549 \text{ g N} \times \frac{6.38 \text{ g protein}}{\text{g N}} = 0.2264 \text{ g protein}$$

and the % w/w protein is

$$\frac{0.2264 \text{ g protein}}{0.9814 \text{ g sample}} \times 100 = 23.1\% \text{ w/w protein}$$

Practice Exercise 9.8

Limestone consists mainly of CaCO_3 , with traces of iron oxides and other metal oxides. To determine the purity of a limestone, a 0.5413-g sample is dissolved using 10.00 mL of 1.396 M HCl. After heating to expel CO_2 , the excess HCl was titrated to the phenolphthalein end point, requiring 39.96 mL of 0.1004 M NaOH. Report the sample's purity as %w/w CaCO_3 .

Click [here](#) to review your answer to this exercise.

Earlier we noted that we can use an acid–base titration to analyze a mixture of acids or bases by titrating to more than one equivalence point. The concentration of each analyte is determined by accounting for its contribution to each equivalence point.

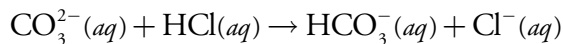
Example 9.5

The alkalinity of natural waters is usually controlled by OH^- , HCO_3^- , and CO_3^{2-} , which may be present singularly or in combination. Titrating a 100.0-mL sample to a pH of 8.3 requires 18.67 mL of a 0.02812 M HCl. A second 100.0-mL aliquot requires 48.12 mL of the same titrant to reach

a pH of 4.5. Identify the sources of alkalinity and their concentrations in milligrams per liter.

SOLUTION

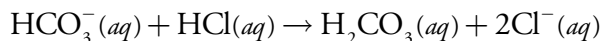
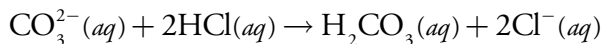
Because the volume of titrant to reach a pH of 4.5 is more than twice that needed to reach a pH of 8.3, we know, from [Table 9.6](#), that the sample's alkalinity is controlled by CO_3^{2-} and HCO_3^- . Titrating to a pH of 8.3 neutralizes CO_3^{2-} to HCO_3^-



but there is no reaction between the titrant and HCO_3^- (see [Figure 9.19](#)). The concentration of CO_3^{2-} in the sample, therefore, is

$$\begin{aligned} &0.02812 \text{ M HCl} \times 0.01867 \text{ L HCl} \times \\ &\quad \frac{1 \text{ mol CO}_3^{2-}}{\text{mol HCl}} = 5.250 \times 10^{-4} \text{ mol CO}_3^{2-} \\ &\frac{5.250 \times 10^{-4} \text{ mol CO}_3^{2-}}{0.1000 \text{ L}} \times \frac{60.01 \text{ g CO}_3^{2-}}{\text{mol CO}_3^{2-}} \times \frac{1000 \text{ mg}}{\text{g}} = 315.1 \text{ mg/L} \end{aligned}$$

Titrating to a pH of 4.5 neutralizes CO_3^{2-} to H_2CO_3 , and HCO_3^- to H_2CO_3 (see [Figures 9.19](#)).



Because we know how many moles of CO_3^{2-} are in the sample, we can calculate the volume of HCl it consumes.

$$\begin{aligned} &5.250 \times 10^{-4} \text{ mol CO}_3^{2-} \times \frac{2 \text{ mol HCl}}{\text{mol CO}_3^{2-}} \times \\ &\quad \frac{1 \text{ L HCl}}{0.02812 \text{ mol HCl}} \times \frac{1000 \text{ mL}}{\text{L}} = 37.34 \text{ mL} \end{aligned}$$

This leaves 48.12 mL - 37.34 mL, or 10.78 mL of HCl to react with HCO_3^- . The amount of HCO_3^- in the sample is

$$\begin{aligned} &0.02812 \text{ M HCl} \times 0.01078 \text{ L HCl} \times \\ &\quad \frac{1 \text{ mol HCO}_3^-}{\text{mol HCl}} = 3.031 \times 10^{-4} \text{ mol HCO}_3^- \\ &\frac{3.031 \times 10^{-4} \text{ mol HCO}_3^-}{0.1000 \text{ L}} \times \frac{61.02 \text{ g HCO}_3^-}{\text{mol HCO}_3^-} \times \frac{1000 \text{ mg}}{\text{g}} = 185.0 \text{ mg/L} \end{aligned}$$

Practice Exercise 9.9

Samples containing the monoprotic weak acids 2-methylanilinium chloride ($C_7H_{10}NCl$, $pK_a = 4.447$) and 3-nitrophenol ($C_6H_5NO_3$, $pK_a = 8.39$) can be analyzed by titrating with NaOH. A 2.006-g sample requires 19.65 mL of 0.200 M NaOH to reach the bromocresol purple end point and 48.41 mL of 0.200 M NaOH to reach the phenolphthalein end point. Report the %w/w of each compound in the sample.

Click [here](#) to review your answer to this exercise.

9B.5 Qualitative Applications

[Example 9.5](#) shows how we can use an acid–base titration to assign the forms of alkalinity in waters. We can easily extend this approach to other systems. For example, by titrating with either a strong acid or a strong base to the methyl orange and phenolphthalein end points we can determine the composition of solutions containing one or two of the following species: H_3PO_4 , $H_2PO_4^-$, HPO_4^{2-} , PO_4^{3-} , HCl, and NaOH. As outlined in Table 9.9, each species or mixture of species has a unique relationship between the volumes of titrant needed to reach these two end points.

9B.6 Characterization Applications

An acid–base titration can be used to characterize the chemical and physical properties of matter. Two useful characterization applications are the

Table 9.9 Relationship Between End Point Volumes for Mixtures of Phosphate Species with HCl and NaOH

Solution Composition	Relationship Between End Point Volumes with Strong Base Titrant ^a	Relationship Between End Point Volumes With Strong Acid Titrant ^a
H_3PO_4	$V_{PH} = 2 \times V_{MO}$	— ^b
$H_2PO_4^-$	$V_{PH} > 0$; $V_{MO} = 0$	—
HPO_4^{2-}	—	$V_{MO} > 0$; $V_{PH} = 0$
PO_4^{3-}	—	$V_{MO} = 2 \times V_{PH}$
HCl	$V_{PH} = V_{MO}$	—
NaOH	—	$V_{MO} = V_{PH}$
HCl and H_3PO_4	$V_{PH} < 2 \times V_{MO}$	—
H_3PO_4 and $H_2PO_4^-$	$V_{PH} > 2 \times V_{MO}$	—
$H_2PO_4^-$ and HPO_4^{2-}	$V_{PH} > 0$; $V_{MO} = 0$	$V_{MO} > 0$; $V_{PH} = 0$
HPO_4^{2-} and PO_4^{3-}	—	$V_{MO} > 2 \times V_{PH}$
PO_4^{3-} and NaOH	—	$V_{MO} < 2 \times V_{PH}$

^a V_{PH} and V_{MO} are, respectively, the volume of titrant at the phenolphthalein and methyl orange end points.

^b When no information is provided, the volume of titrant to each end point is zero.

determination of a compound's equivalent weight and its acid or its base dissociation constant.

EQUIVALENT WEIGHTS

Suppose we titrate a sample containing an impure weak acid to a well-defined end point using a monoprotic strong base as the titrant. If we assume that the titration involves the transfer of n protons, then the moles of titrant needed to reach the end point is

$$\text{moles titrant} = \frac{n \text{ moles titrant}}{\text{moles analyte}} \times \text{moles analyte}$$

If we know the analyte's identity, we can use this equation to determine the amount of analyte in the sample

$$\text{grams analyte} = \text{moles titrant} \times \frac{1 \text{ mole analyte}}{n \text{ moles titrant}} \times \text{FW analyte}$$

where FW is the analyte's formula weight.

But what if we do not know the analyte's identity? If we can titrate a pure sample of the analyte, we can obtain some useful information that may help in establishing its identity. Because we do not know the number of protons being titrated, we let $n = 1$ and replace the analyte's formula weight with its equivalent weight (EW)

$$\text{grams analyte} = \text{moles titrant} \times \frac{1 \text{ equivalent analyte}}{1 \text{ moles titrant}} \times \text{EW analyte}$$

where

$$\text{FW} = n \times \text{EW}$$

Example 9.6

A 0.2521-g sample of an unknown weak acid is titrated with 0.1005 M NaOH, requiring 42.68 mL to reach the phenolphthalein end point. Determine the compound's equivalent weight. Which of the following compounds is most likely to be the unknown weak acid?

ascorbic acid	$\text{C}_8\text{H}_8\text{O}_6$	FW = 176.1	monoprotic
malonic acid	$\text{C}_3\text{H}_4\text{O}_4$	FW = 104.1	diprotic
succinic acid	$\text{C}_4\text{H}_6\text{O}_4$	FW = 118.1	diprotic
citric acid	$\text{C}_6\text{H}_8\text{O}_7$	FW = 192.1	triprotic

SOLUTION

The moles of NaOH needed to reach the end point is

$$0.1005 \text{ M NaOH} \times 0.04268 \text{ L NaOH} = 4.289 \times 10^{-3} \text{ mol NaOH}$$

which gives the analyte's equivalent weight as

$$EW = \frac{\text{g analyte}}{\text{equiv. analyte}} = \frac{0.2521 \text{ g}}{4.289 \times 10^{-3} \text{ equiv.}} = 58.78 \text{ g/equivalent}$$

The possible formula weights for the weak acid are

$$n = 1: \text{FW} = \text{EW} = 58.78 \text{ g/equivalent}$$

$$n = 2: \text{FW} = 2 \times \text{EW} = 117.6 \text{ g/equivalent}$$

$$n = 3: \text{FW} = 3 \times \text{EW} = 176.3 \text{ g/equivalent}$$

If the analyte is a monoprotic weak acid, then its formula weight is 58.78 g/mol, eliminating ascorbic acid as a possibility. If it is a diprotic weak acid, then the analyte's formula weight is either 58.78 g/mol or 117.6 g/mol, depending on whether the titration is to the first or second equivalence point. Succinic acid, with a formula weight of 118.1 g/mole is a possibility, but malonic acid is not. If the analyte is a triprotic weak acid, then its formula weight is 58.78 g/mol, 117.6 g/mol, or 176.3 g/mol. None of these values is close to the formula weight for citric acid, eliminating it as a possibility. Only succinic acid provides a possible match.

Practice Exercise 9.10

Figure 9.21 shows the potentiometric titration curve for the titration of a 0.500-g sample an unknown weak acid. The titrant is 0.1032 M NaOH. What is the weak acid's equivalent weight?

Click [here](#) to review your answer to this exercise.

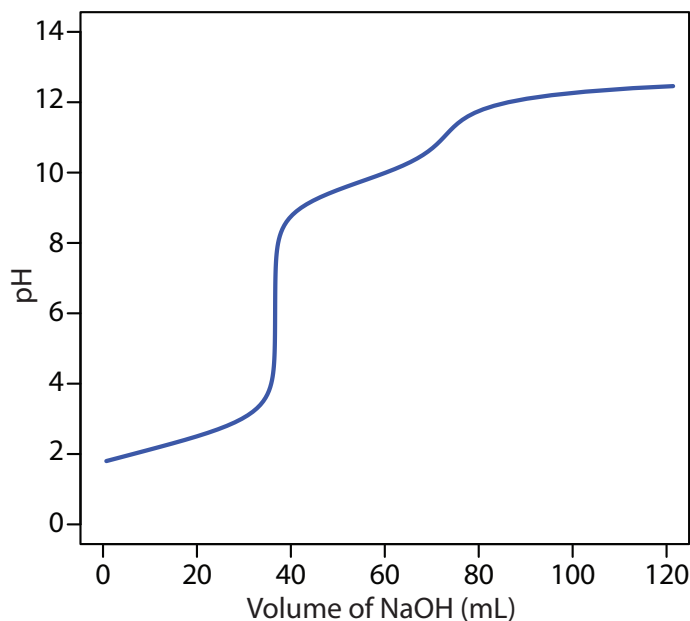


Figure 9.21 Titration curve for Practice Exercise 9.10.

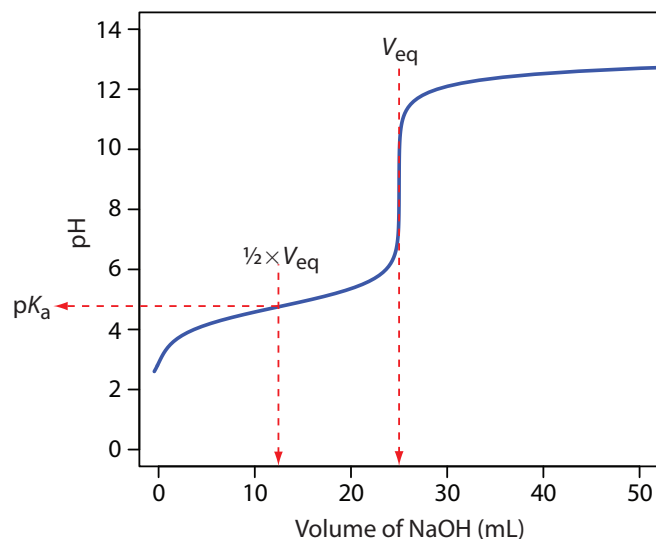


Figure 9.22 Estimating acetic acid's pK_a using its potentiometric titration curve.

EQUILIBRIUM CONSTANTS

Another application of acid–base titrimetry is the determination of equilibrium constants. Consider, for example, a solution of acetic acid, CH_3COOH , for which the dissociation constant is

$$K_a = \frac{[\text{H}_3\text{O}^+][\text{CH}_3\text{COO}^-]}{[\text{CH}_3\text{COOH}]}$$

When the concentrations of CH_3COOH and CH_3COO^- are equal, the K_a expression reduces to $K_a = [\text{H}_3\text{O}^+]$, or $\text{pH} = \text{p}K_a$. If we titrate a solution of acetic acid with NaOH , the pH equals the $\text{p}K_a$ when the volume of NaOH is approximately $\frac{1}{2}V_{\text{eq}}$. As shown in Figure 9.22, a potentiometric titration curve provides a reasonable estimate of acetic acid's $\text{p}K_a$.

This method provides a reasonable estimate of a weak acid's $\text{p}K_a$ if the acid is neither too strong nor too weak. These limitations are easily to appreciate if we consider two limiting cases. For the first case let's assume that the weak acid, HA , is more than 50% dissociated before the titration begins (a relatively large K_a value). The concentration of HA before the equivalence point is always less than the concentration of A^- , and there is no point on the titration curve where $[\text{HA}] = [\text{A}^-]$. At the other extreme, if the acid is too weak, less than 50% of the weak acid reacts with the titrant at the equivalence point. In this case the concentration of HA before the equivalence point is always greater than that of A^- . Determining the $\text{p}K_a$ by the half-equivalence point method overestimates its value if the acid is too strong and underestimates its value if the acid is too weak.

Practice Exercise 9.11

Use the potentiometric titration curve in [Figure 9.21](#) to estimate the $\text{p}K_a$ values for the weak acid in [Practice Exercise 9.10](#).

Click [here](#) to review your answer to this exercise.

A second approach for determining a weak acid's pK_a is to use a Gran plot. For example, earlier in this chapter we derived the following equation for the titration of a weak acid with a strong base.

$$[H_3O^+] \times V_b = K_a V_{eq} - K_a V_b$$

A plot of $[H_3O^+] \times V_b$ versus V_b , for volumes less than the equivalence point, yields a straight line with a slope of $-K_a$. Other linearizations have been developed which use the entire titration curve, or that require no assumptions.⁶ This approach to determining acidity constants has been used to study the acid–base properties of humic acids, which are naturally occurring, large molecular weight organic acids with multiple acidic sites. In one study a humic acid was found to have six titratable sites, three of which were identified as carboxylic acids, two of which were believed to be secondary or tertiary amines, and one of which was identified as a phenolic group.⁷

9B.7 Evaluation of Acid–Base Titrimetry

SCALE OF OPERATION

In an acid–base titration the volume of titrant needed to reach the equivalence point is proportional to the moles of titrand. Because the pH of the titrand or the titrant is a function of its concentration, however, the change in pH at the equivalence point—and thus the feasibility of an acid–base titration—depends on their respective concentrations. Figure 9.23, for example, shows a series of titration curves for the titration of several concentrations of HCl with equimolar solutions NaOH. For titrand and titrant concentrations smaller than 10^{-3} M, the change in pH at the end point may be too small to provide accurate and precise results.

- 6 (a) Gonzalez, A. G.; Asuero, A. G. *Anal. Chim. Acta* **1992**, 256, 29–33; (b) Papanastasiou, G.; Ziogas, I.; Kokkindis, G. *Anal. Chim. Acta* **1993**, 277, 119–135.
7 Alexio, L. M.; Godinho, O. E. S.; da Costa, W. F. *Anal. Chim. Acta* **1992**, 257, 35–39.

Acid–base titrimetry is an example of a total analysis technique in which the signal is proportional to the absolute amount of analyte. See [Chapter 3](#) for a discussion of the difference between total analysis techniques and concentration techniques.

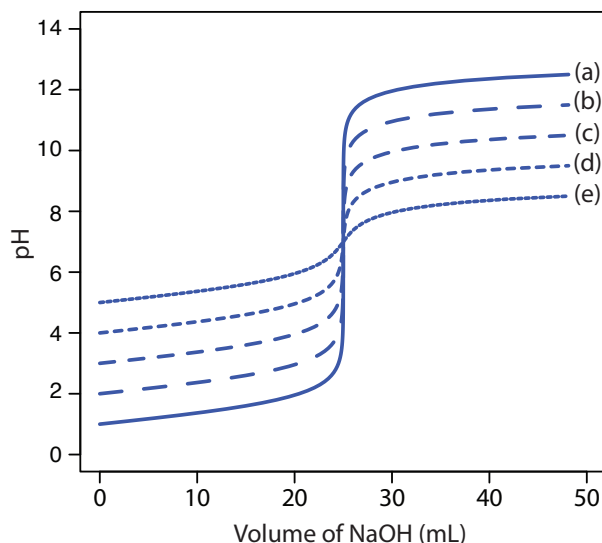


Figure 9.23 Titration curves for 25.0 mL of (a) 10^{-1} M HCl, (b) 10^{-2} M HCl, (c) 10^{-3} M HCl, (d) 10^{-4} M HCl, and (e) 10^{-5} M HCl. In each case the titrant is an equimolar solution of NaOH.

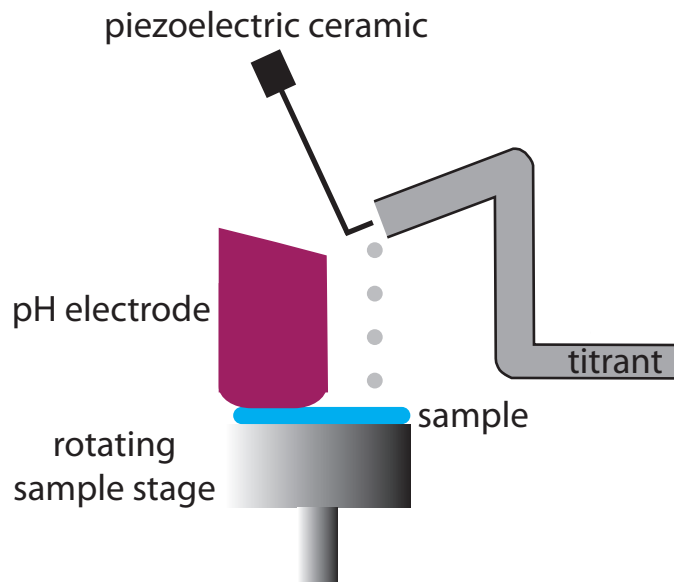


Figure 9.24 Experimental design for a microdroplet titration apparatus.

A minimum concentration of 10^{-3} M places limits on the smallest amount of analyte that we can successfully analyze. For example, suppose our analyte has a formula weight of 120 g/mol. To successfully monitor the titration's end point using an indicator or with a pH probe, the titrand needs an initial volume of approximately 25 mL. If we assume that the analyte's formula weight is 120 g/mol, then each sample must contain at least 3 mg of analyte. For this reason, acid–base titrations are generally limited to major and minor analytes (see Figure 3.6 in Chapter 3). We can extend the analysis of gases to trace analytes by pulling a large volume of the gas through a suitable collection solution.

One goal of analytical chemistry is to extend analyses to smaller samples. Here we describe two interesting approaches to titrating μL and pL samples. In one experimental design (Figure 9.24), samples of 20–100 μL were held by capillary action between a flat-surface pH electrode and a stainless steel sample stage.⁸ The titrant was added by using the oscillations of a piezoelectric ceramic device to move an angled glass rod in and out of a tube connected to a reservoir containing the titrant. Each time the glass tube was withdrawn an approximately 2 nL microdroplet of titrant was released. The microdroplets were allowed to fall onto the sample, with mixing accomplished by spinning the sample stage at 120 rpm. A total of 450 microdroplets, with a combined volume of 0.81–0.84 μL , was dispensed between each pH measurement. In this fashion a titration curve was constructed. This method was used to titrate solutions of 0.1 M HCl and 0.1 M CH_3COOH with 0.1 M NaOH. Absolute errors ranged from a minimum of +0.1% to a maximum of –4.1%, with relative standard deviations from 0.15% to 4.7%. Sample as small as 20 μL were successfully titrated.

8 Steele, A.; Hieftje, G. M. *Anal. Chem.* **1984**, *56*, 2884–2888.

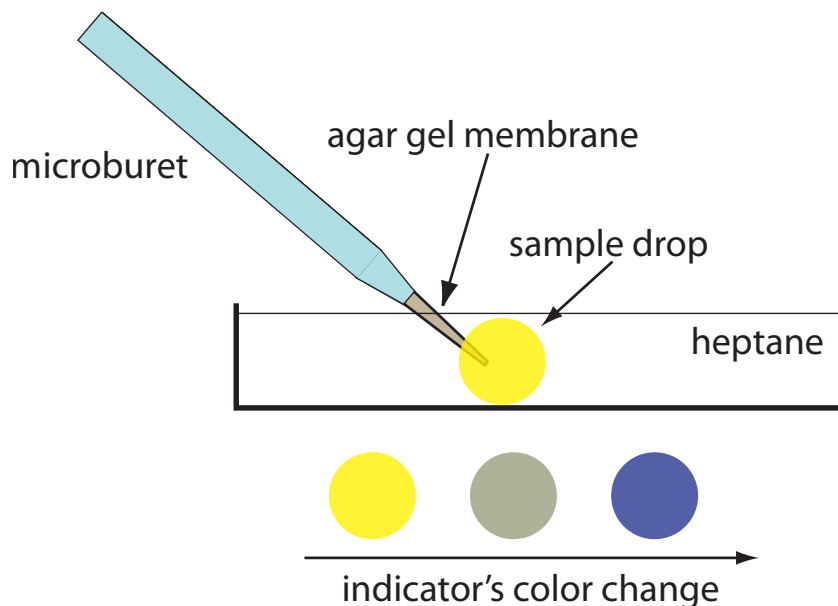


Figure 9.25 Experimental set-up for a diffusional microtitration. The indicator is a mixture of bromothymol blue and bromocresol purple.

Another approach carries out the acid–base titration in a single drop of solution.⁹ The titrant is delivered using a microburet fashioned from a glass capillary micropipet (Figure 9.25). The microburet has a 1–2 μm tip filled with an agar gel membrane. The tip of the microburet is placed within a drop of the sample solution, which is suspended in heptane, and the titrant is allowed to diffuse into the sample. The titration's progress is monitored using an acid–base indicator, and the time needed to reach the end point is measured. The rate of the titrant's diffusion from the microburet is determined by a prior calibration. Once calibrated the end point time can be converted to an end point volume. Samples usually consisted of picoliter volumes (10^{-12} liters), with the smallest sample being 0.7 pL. The precision of the titrations was usually about 2%.

Titrations conducted with microliter or picoliter sample volumes require a smaller absolute amount of analyte. For example, diffusional titrations have been successfully conducted on as little as 29 femtomoles (10^{-15} moles) of nitric acid. Nevertheless, the analyte must still be present in the sample at a major or minor level for the titration to be performed accurately and precisely.

ACCURACY

When working with a macro–major or a macro–minor sample, an acid–base titration can achieve a relative error of 0.1–0.2%. The principal limitation to accuracy is the difference between the end point and the equivalence point.

See [Figure 3.5](#) in Chapter 3 to review the characteristics of macro–major and macro–minor samples.

⁹ (a) Gratzl, M.; Yi, C. *Anal. Chem.* **1993**, *65*, 2085–2088; (b) Yi, C.; Gratzl, M. *Anal. Chem.* **1994**, *66*, 1976–1982; (c) Hui, K. Y.; Gratzl, M. *Anal. Chem.* **1997**, *69*, 695–698; (d) Yi, C.; Huang, D.; Gratzl, M. *Anal. Chem.* **1996**, *68*, 1580–1584; (e) Xie, H.; Gratzl, M. *Anal. Chem.* **1996**, *68*, 3665–3669.

PRECISION

An acid–base titration's relative precision depends primarily on the precision with which we can measure the end point volume and the precision in detecting the end point. Under optimum conditions, an acid–base titration has a relative precision of 0.1–0.2%. We can improve the relative precision by using the largest possible buret and ensuring that we use most of its capacity in reaching the end point. A smaller volume buret is a better choice when using costly reagents, when waste disposal is a concern, or when the titration must be completed quickly to avoid competing chemical reactions. Automatic titrators are particularly useful for titrations requiring small volumes of titrant because they provide significantly better precision (typically about $\pm 0.05\%$ of the buret's volume).

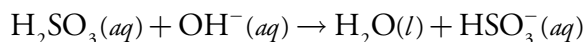
The precision of detecting the end point depends on how it is measured and the slope of the titration curve at the end point. With an indicator the precision of the end point signal is usually ± 0.03 – 0.10 mL. Potentiometric end points usually are more precise.

SENSITIVITY

For an acid–base titration we can write the following general analytical equation relating the titrant's volume to the absolute amount of titrand

$$\text{volume of titrant} = k \times \text{moles of titrand}$$

where k , the sensitivity, is determined by the stoichiometry between the titrand and the titrant. Consider, for example, the determination of sulfurous acid, H_2SO_3 , by titrating with NaOH to the first equivalence point



At the equivalence point the relationship between the moles of NaOH and the moles of H_2SO_3 is

$$\text{mol NaOH} = \text{mol H}_2\text{SO}_3$$

Substituting the titrant's molarity and volume for the moles of NaOH and rearranging

$$M_{\text{NaOH}} \times V_{\text{NaOH}} = \text{mol H}_2\text{SO}_3$$

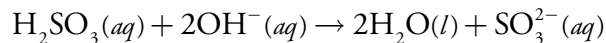
$$V_{\text{NaOH}} = \frac{1}{M_{\text{NaOH}}} \times \text{mol H}_2\text{SO}_3$$

we find that k is

$$k = \frac{1}{M_{\text{NaOH}}}$$

There are two ways in which we can improve a titration's sensitivity. The first, and most obvious, is to decrease the titrant's concentration because it is inversely proportional to the sensitivity, k .

The second approach, which only applies if the titrand is multiprotic, is to titrate to a later equivalence point. If we titrate H_2SO_3 to the second equivalence point



then each mole of H_2SO_3 consumes two moles of NaOH

$$\text{mol NaOH} = 2 \times \text{mol H}_2\text{SO}_3$$

and the sensitivity becomes

$$k = \frac{2}{M_{\text{NaOH}}}$$

In practice, however, any improvement in sensitivity is offset by a decrease in the end point's precision if the larger volume of titrant requires us to refill the buret. Consequently, standard acid–base titrimetric procedures are written to ensure that titrations require 60–100% of the buret's volume.

SELECTIVITY

Acid–base titrants are not selective. A strong base titrant, for example, reacts with all acids in a sample, regardless of their individual strengths. If the titrand contains an analyte and an interferent, then selectivity depends on their relative acid strengths. Two limiting situations must be considered.

If the analyte is a stronger acid than the interferent, then the titrant will react with the analyte before it begins reacting with the interferent. The feasibility of the analysis depends on whether the titrant's reaction with the interferent affects the accurate location of the analyte's equivalence point. If the acid dissociation constants are substantially different, the end point for the analyte can be accurately determined. Conversely, if the acid dissociation constants for the analyte and interferent are similar, then an accurate end point for the analyte may not be found. In the latter case a quantitative analysis for the analyte is not possible.

In the second limiting situation the analyte is a weaker acid than the interferent. In this case the volume of titrant needed to reach the analyte's equivalence point is determined by the concentration of both the analyte and the interferent. To account for the interferent's contribution to the end point, an end point for the interferent must be present. Again, if the acid dissociation constants for the analyte and interferent are significantly different, then the analyte's determination is possible. If the acid dissociation constants are similar, however, there is only a single equivalence point

and the analyte's and interferent's contributions to the equivalence point volume can not be separated.

TIME, COST, AND EQUIPMENT

Acid–base titrations require less time than most gravimetric procedures, but more time than many instrumental methods of analysis, particularly when analyzing many samples. With an automatic titrator, however, concerns about analysis time are less significant. When performing a titration manually our equipment needs—a buret and, perhaps, a pH meter—are few in number, inexpensive, routinely available, and easy to maintain. Automatic titrators are available for between \$3000 and \$10 000.

9C Complexation Titrations

The earliest examples of metal–ligand **COMPLEXATION TITRATIONS** are Liebig's determinations, in the 1850s, of cyanide and chloride using, respectively, Ag^+ and Hg^{2+} as the titrant. Practical analytical applications of complexation titrimetry were slow to develop because many metals and ligands form a series of metal–ligand complexes. Liebig's titration of CN^- with Ag^+ was successful because they form a single, stable complex of $\text{Ag}(\text{CN})_2^-$, giving a single, easily identified end point. Other metal–ligand complexes, such as CdI_4^{2-} , are not analytically useful because they form a series of metal–ligand complexes (CdI^+ , $\text{CdI}_2(\text{aq})$, CdI_3^- and CdI_4^{2-}) that produce a sequence of poorly defined end points.

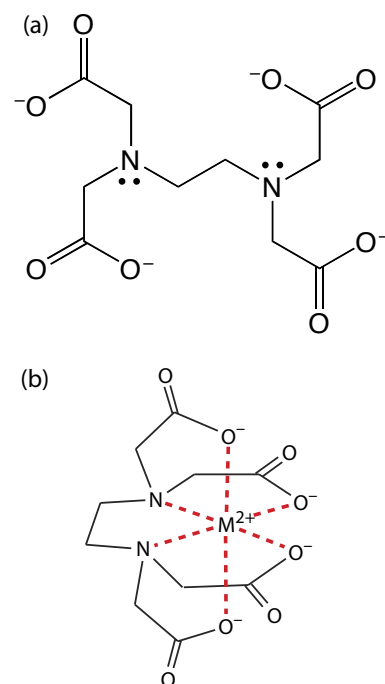
In 1945, Schwarzenbach introduced aminocarboxylic acids as multidentate ligands. The most widely used of these new ligands—ethylenediaminetetraacetic acid, or EDTA—forms strong 1:1 complexes with many metal ions. The availability of a ligand that gives a single, easily identified end point made complexation titrimetry a practical analytical method.

9C.1 Chemistry and Properties of EDTA

Ethylenediaminetetraacetic acid, or EDTA, is an aminocarboxylic acid. EDTA, which is shown in Figure 9.26a in its fully deprotonated form, is a Lewis acid with six binding sites—four negatively charged carboxylate groups and two tertiary amino groups—that can donate six pairs of electrons to a metal ion. The resulting metal–ligand complex, in which EDTA forms a cage-like structure around the metal ion (Figure 9.26b), is very stable. The actual number of coordination sites depends on the size of the metal ion, however, all metal–EDTA complexes have a 1:1 stoichiometry.

Figure 9.26 Structures of (a) EDTA, in its fully deprotonated form, and (b) in a six-coordinate metal–EDTA complex with a divalent metal ion.

Recall that an acid–base titration curve for a diprotic weak acid has a single end point if its two K_a values are not sufficiently different. See [Figure 9.11](#) for an example.



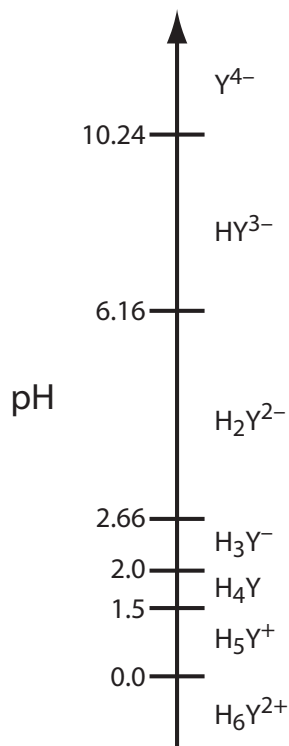


Figure 9.27 Ladder diagram for EDTA.

METAL–EDTA FORMATION CONSTANTS

To illustrate the formation of a metal–EDTA complex, let's consider the reaction between Cd^{2+} and EDTA



where Y^{4-} is a shorthand notation for the fully deprotonated form of EDTA shown in [Figure 9.26a](#). Because the reaction's formation constant

$$K_f = \frac{[\text{CdY}^{2-}]}{[\text{Cd}^{2+}][\text{Y}^{4-}]} = 2.9 \times 10^{16} \quad 9.10$$

is large, its equilibrium position lies far to the right. Formation constants for other metal–EDTA complexes are found in [Appendix 12](#).

EDTA IS A WEAK ACID

In addition to its properties as a ligand, EDTA is also a weak acid. The fully protonated form of EDTA, H_6Y^{2+} , is a hexaprotic weak acid with successive $\text{p}K_a$ values of

$$\begin{array}{lll} \text{p}K_{a1} = 0.0 & \text{p}K_{a2} = 1.5 & \text{p}K_{a3} = 2.0 \\ \text{p}K_{a4} = 2.66 & \text{p}K_{a5} = 6.16 & \text{p}K_{a6} = 10.24 \end{array}$$

The first four values are for the carboxylic acid protons and the last two values are for the ammonium protons. [Figure 9.27](#) shows a ladder diagram for EDTA. The specific form of EDTA in reaction 9.9 is the predominate species only at pH levels greater than 10.17.

CONDITIONAL METAL–LIGAND FORMATION CONSTANTS

The formation constant for CdY^{2-} in equation 9.10 assumes that EDTA is present as Y^{4-} . Because EDTA has many forms, when we prepare a solution of EDTA we know its total concentration, C_{EDTA} , not the concentration of a specific form, such as Y^{4-} . To use equation 9.10, we need to rewrite it in terms of C_{EDTA} .

At any pH a mass balance on EDTA requires that its total concentration equal the combined concentrations of each of its forms.

$$C_{\text{EDTA}} = [\text{H}_6\text{Y}^{2+}] + [\text{H}_5\text{Y}^+] + [\text{H}_4\text{Y}] + [\text{H}_3\text{Y}^-] + [\text{H}_2\text{Y}^{2-}] + [\text{HY}^{3-}] + [\text{Y}^{4-}]$$

To correct the formation constant for EDTA's acid–base properties we need to calculate the fraction, $\alpha_{\text{Y}^{4-}}$, of EDTA present as Y^{4-} .

$$\alpha_{\text{Y}^{4-}} = \frac{[\text{Y}^{4-}]}{C_{\text{EDTA}}} \quad 9.11$$

Table 9.10 Values of $\alpha_{Y^{4-}}$ for Selected pH Levels

pH	$\alpha_{Y^{4-}}$	pH	$\alpha_{Y^{4-}}$
1	1.9×10^{-18}	8	5.6×10^{-3}
2	3.4×10^{-14}	9	5.4×10^{-2}
3	2.6×10^{-11}	10	0.37
4	3.8×10^{-9}	11	0.85
5	3.7×10^{-7}	12	0.98
6	2.4×10^{-5}	13	1.00
7	5.0×10^{-4}	14	1.00

Table 9.10 provides values of $\alpha_{Y^{4-}}$ for selected pH levels. Solving [equation 9.11](#) for $[Y^{4-}]$ and substituting into [equation 9.10](#) for the CdY^{2-} formation constant

$$K_f = \frac{[CdY^{2-}]}{[Cd^{2+}]\alpha_{Y^{4-}}C_{EDTA}}$$

and rearranging gives

$$K_f' = K_f \times \alpha_{Y^{4-}} = \frac{[CdY^{2-}]}{[Cd^{2+}]C_{EDTA}} \quad 9.12$$

where K_f' is a pH-dependent **CONDITIONAL FORMATION CONSTANT**. As shown in Table 9.11, the conditional formation constant for CdY^{2-} becomes smaller and the complex becomes less stable at more acidic pHs.

EDTA COMPETES WITH OTHER LIGANDS

To maintain a constant pH during a complexation titration we usually add a buffering agent. If one of the buffer's components is a ligand that binds Cd^{2+} , then EDTA must compete with the ligand for Cd^{2+} . For example, an

[Problem 9.42](#) from the end of chapter problems asks you to verify the values in Table 9.10 by deriving an equation for $\alpha_{Y^{4-}}$.

Table 9.11 Conditional Formation Constants for CdY^{2-}

pH	K_f'	pH	K_f'
1	5.5×10^{-2}	8	1.6×10^{14}
2	1.0×10^3	9	1.6×10^{15}
3	7.7×10^5	10	1.1×10^{16}
4	1.1×10^8	11	2.5×10^{16}
5	1.1×10^{10}	12	2.9×10^{16}
6	6.8×10^{11}	13	2.9×10^{16}
7	1.5×10^{13}	14	2.9×10^{16}

$\text{NH}_4^+/\text{NH}_3$ buffer includes NH_3 , which forms several stable $\text{Cd}^{2+}\text{-NH}_3$ complexes. Because EDTA forms a stronger complex with Cd^{2+} it will displace NH_3 , but the stability of the $\text{Cd}^{2+}\text{-EDTA}$ complex decreases.

We can account for the effect of an **AUXILIARY COMPLEXING AGENT**, such as NH_3 , in the same way we accounted for the effect of pH. Before adding EDTA, the mass balance on Cd^{2+} , C_{Cd} , is

$$C_{\text{Cd}} = [\text{Cd}^{2+}] + [\text{Cd}(\text{NH}_3)^{2+}] + [\text{Cd}(\text{NH}_3)_2^{2+}] + [\text{Cd}(\text{NH}_3)_3^{2+}] + [\text{Cd}(\text{NH}_3)_4^{2+}]$$

and the fraction of uncomplexed Cd^{2+} , $\alpha_{\text{Cd}^{2+}}$, is

$$\alpha_{\text{Cd}^{2+}} = \frac{[\text{Cd}^{2+}]}{C_{\text{Cd}}} \quad 9.13$$

Solving equation 9.13 for $[\text{Cd}^{2+}]$ and substituting into [equation 9.12](#) gives

$$K_f' = K_f \times \alpha_{\text{Y}^{4-}} = \frac{[\text{CdY}^{2-}]}{\alpha_{\text{Cd}^{2+}} C_{\text{Cd}} C_{\text{EDTA}}}$$

Because the concentration of NH_3 in a buffer is essentially constant, we can rewrite this equation

$$K_f'' = K_f \times \alpha_{\text{Y}^{4-}} \times \alpha_{\text{Cd}^{2+}} = \frac{[\text{CdY}^{2-}]}{C_{\text{Cd}} C_{\text{EDTA}}} \quad 9.14$$

to give a conditional formation constant, K_f'' , that accounts for both pH and the auxiliary complexing agent's concentration. Table 9.12 provides values of $\alpha_{\text{M}^{2+}}$ for several metal ion when NH_3 is the complexing agent.

9C.2 Complexometric EDTA Titration Curves

Now that we know something about EDTA's chemical properties, we are ready to evaluate its usefulness as a titrant. To do so we need to know the

Table 9.12 Values of $\alpha_{\text{M}^{2+}}$ for Selected Concentrations of Ammonia

$[\text{NH}_3]$ (M)	$\alpha_{\text{Ca}^{2+}}$	$\alpha_{\text{Cd}^{2+}}$	$\alpha_{\text{Co}^{2+}}$	$\alpha_{\text{Cu}^{2+}}$	$\alpha_{\text{Mg}^{2+}}$	$\alpha_{\text{Ni}^{2+}}$	$\alpha_{\text{Zn}^{2+}}$
1	5.50×10^{-1}	6.09×10^{-8}	1.00×10^{-6}	3.79×10^{-14}	1.76×10^{-1}	9.20×10^{-10}	3.95×10^{-10}
0.5	7.36×10^{-1}	1.05×10^{-6}	2.22×10^{-5}	6.86×10^{-13}	4.13×10^{-1}	3.44×10^{-8}	6.27×10^{-9}
0.1	9.39×10^{-1}	3.51×10^{-4}	6.64×10^{-3}	4.63×10^{-10}	8.48×10^{-1}	5.12×10^{-5}	3.68×10^{-6}
0.05	9.69×10^{-1}	2.72×10^{-3}	3.54×10^{-2}	7.17×10^{-9}	9.22×10^{-1}	6.37×10^{-4}	5.45×10^{-5}
0.01	9.94×10^{-1}	8.81×10^{-2}	3.55×10^{-1}	3.22×10^{-6}	9.84×10^{-1}	4.32×10^{-2}	1.82×10^{-2}
0.005	9.97×10^{-1}	2.27×10^{-1}	5.68×10^{-1}	3.62×10^{-5}	9.92×10^{-1}	1.36×10^{-1}	1.27×10^{-1}
0.001	9.99×10^{-1}	6.09×10^{-1}	8.84×10^{-1}	4.15×10^{-3}	9.98×10^{-1}	5.76×10^{-1}	7.48×10^{-1}

The value of $\alpha_{\text{Cd}^{2+}}$ depends on the concentration of NH_3 . Contrast this with $\alpha_{\text{Y}^{4-}}$, which depends on pH.

shape of a complexometric EDTA titration curve. In [section 9B](#) we learned that an acid–base titration curve shows how the titrand’s pH changes as we add titrant. The analogous result for a complexation titration shows the change in pM, where M is the metal ion, as a function of the volume of EDTA. In this section we will learn how to calculate a titration curve using the equilibrium calculations from Chapter 6. We also will learn how to quickly sketch a good approximation of any complexation titration curve using a limited number of simple calculations.

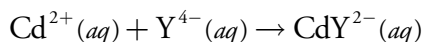
CALCULATING THE TITRATION CURVE

Let’s calculate the titration curve for 50.0 mL of 5.00×10^{-3} M Cd^{2+} using a titrant of 0.0100 M EDTA. Furthermore, let’s assume that the titrand is buffered to a pH of 10 with a buffer that is 0.0100 M in NH_3 .

Because the pH is 10, some of the EDTA is present in forms other than Y^{4-} . In addition, EDTA must compete with NH_3 for the Cd^{2+} . To evaluate the titration curve, therefore, we first need to calculate the conditional formation constant for CdY^{2-} . From [Table 9.10](#) and [Table 9.11](#) we find that $\alpha_{\text{Y}^{4-}}$ is 0.35 at a pH of 10, and that $\alpha_{\text{Cd}^{2+}}$ is 0.0881 when the concentration of NH_3 is 0.0100 M. Using these values, the conditional formation constant is

$$K_f'' = K_f \times \alpha_{\text{Y}^{4-}} \times \alpha_{\text{Cd}^{2+}} = (2.9 \times 10^{16})(0.37)(0.0881) = 9.5 \times 10^{14}$$

Because K_f'' is so large, we can treat the titration reaction



as if it proceeds to completion.

The next task in calculating the titration curve is to determine the volume of EDTA needed to reach the equivalence point. At the equivalence point we know that

$$\begin{aligned} \text{moles EDTA} &= \text{moles Cd}^{2+} \\ M_{\text{EDTA}} \times V_{\text{EDTA}} &= M_{\text{Cd}} \times V_{\text{Cd}} \end{aligned}$$

Substituting in known values, we find that it requires

$$V_{\text{eq}} = V_{\text{EDTA}} = \frac{M_{\text{Cd}} V_{\text{Cd}}}{M_{\text{EDTA}}} = \frac{(5.00 \times 10^{-3} \text{ M})(50.0 \text{ mL})}{0.0100 \text{ M}} = 25.0 \text{ mL}$$

of EDTA to reach the equivalence point.

Before the equivalence point, Cd^{2+} is present in excess and pCd is determined by the concentration of unreacted Cd^{2+} . Because not all the unreacted Cd^{2+} is free—some is complexed with NH_3 —we must account for the presence of NH_3 . For example, after adding 5.0 mL of EDTA, the total concentration of Cd^{2+} is

Step 1: Calculate the conditional formation constant for the metal–EDTA complex.

Step 2: Calculate the volume of EDTA needed to reach the equivalence point.

Step 3: Calculate pM values before the equivalence point by determining the concentration of unreacted metal ions.

$$C_{\text{Cd}} = \frac{\text{initial moles Cd}^{2+} - \text{moles EDTA added}}{\text{total volume}} = \frac{M_{\text{Cd}}V_{\text{Cd}} - M_{\text{EDTA}}V_{\text{EDTA}}}{V_{\text{Cd}} + V_{\text{EDTA}}}$$

$$= \frac{(5.00 \times 10^{-3} \text{ M})(50.0 \text{ mL}) - (0.0100 \text{ M})(5.0 \text{ mL})}{50.0 \text{ mL} + 5.0 \text{ mL}} = 3.64 \times 10^{-3} \text{ M}$$

To calculate the concentration of free Cd^{2+} we use [equation 9.13](#)

$$[\text{Cd}^{2+}] = \alpha_{\text{Cd}^{2+}} \times C_{\text{Cd}} = (0.0881)(3.64 \times 10^{-4} \text{ M}) = 3.21 \times 10^{-4} \text{ M}$$

which gives a pCd of

$$\text{pCd} = -\log[\text{Cd}^{2+}] = -\log(3.21 \times 10^{-4}) = 3.49$$

At the equivalence point all the Cd^{2+} initially in the titrand is now present as CdY^{2-} . The concentration of Cd^{2+} , therefore, is determined by the dissociation of the CdY^{2-} complex. First, we calculate the concentration of CdY^{2-} .

$$[\text{CdY}^{2-}] = \frac{\text{initial moles Cd}^{2+}}{\text{total volume}} = \frac{M_{\text{Cd}}V_{\text{Cd}}}{V_{\text{Cd}} + V_{\text{EDTA}}}$$

$$= \frac{(5.00 \times 10^{-3} \text{ M})(50.0 \text{ mL})}{50.0 \text{ mL} + 25.0 \text{ mL}} = 3.33 \times 10^{-3} \text{ M}$$

Next, we solve for the concentration of Cd^{2+} in equilibrium with CdY^{2-} .

$$K_f'' = \frac{[\text{CdY}^{2-}]}{C_{\text{Cd}}C_{\text{EDTA}}} = \frac{3.33 \times 10^{-3} - x}{(x)(x)} = 9.5 \times 10^{14}$$

$$x = C_{\text{Cd}} = 1.9 \times 10^{-9} \text{ M}$$

Once again, to find the concentration of uncomplexed Cd^{2+} we must account for the presence of NH_3 ; thus

$$[\text{Cd}^{2+}] = \alpha_{\text{Cd}^{2+}} \times C_{\text{Cd}} = (0.0881)(1.9 \times 10^{-9} \text{ M}) = 1.70 \times 10^{-10} \text{ M}$$

and pCd is 9.77 at the equivalence point.

After the equivalence point, EDTA is in excess and the concentration of Cd^{2+} is determined by the dissociation of the CdY^{2-} complex. First, we calculate the concentrations of CdY^{2-} and of unreacted EDTA. For example, after adding 30.0 mL of EDTA

$$[\text{CdY}^{2-}] = \frac{\text{initial moles Cd}^{2+}}{\text{total volume}} = \frac{M_{\text{Cd}}V_{\text{Cd}}}{V_{\text{Cd}} + V_{\text{EDTA}}}$$

$$= \frac{(5.00 \times 10^{-3} \text{ M})(50.0 \text{ mL})}{50.0 \text{ mL} + 30.0 \text{ mL}} = 3.13 \times 10^{-3} \text{ M}$$

Step 4: Calculate pM at the equivalence point using the conditional formation constant.

At the equivalence point the initial moles of Cd^{2+} and the moles of EDTA added are equal. The total concentrations of Cd^{2+} , C_{Cd} , and the total concentration of EDTA, C_{EDTA} , are equal.

Step 5: Calculate pM after the equivalence point using the conditional formation constant.

$$\begin{aligned}
 C_{\text{EDTA}} &= \frac{M_{\text{EDTA}} V_{\text{EDTA}} - M_{\text{Cd}} V_{\text{Cd}}}{V_{\text{Cd}} + V_{\text{EDTA}}} \\
 &= \frac{(0.0100 \text{ M})(30.0 \text{ mL}) - (5.00 \times 10^{-3} \text{ M})(50.0 \text{ mL})}{50.0 \text{ mL} + 30.0 \text{ mL}} \\
 &= 6.25 \times 10^{-4} \text{ M}
 \end{aligned}$$

Substituting into [equation 9.14](#) and solving for $[\text{Cd}^{2+}]$ gives

$$\frac{[\text{CdY}^{2-}]}{C_{\text{Cd}} C_{\text{EDTA}}} = \frac{3.13 \times 10^{-3} \text{ M}}{C_{\text{Cd}} (6.25 \times 10^{-4} \text{ M})} = 9.5 \times 10^{14}$$

$$C_{\text{Cd}} = 5.4 \times 10^{-15} \text{ M}$$

$$[\text{Cd}^{2+}] = \alpha_{\text{Cd}^{2+}} \times C_{\text{Cd}} = (0.0881)(5.4 \times 10^{-15} \text{ M}) = 4.8 \times 10^{-16} \text{ M}$$

a pCd of 15.32. Table 9.13 and Figure 9.28 show additional results for this titration.

Table 9.13 Titration of 50.0 mL of $5.00 \times 10^{-3} \text{ M Cd}^{2+}$ with 0.0100 M EDTA at a pH of 10 and in the Presence of 0.0100 M NH_3

Volume of EDTA (mL)	pCd	Volume of EDTA (mL)	pCd
0.00	3.36	27.0	14.95
5.00	3.49	30.0	15.33
10.0	3.66	35.0	15.61
15.0	3.87	40.0	15.76
20.0	4.20	45.0	15.86
23.0	4.62	50.0	15.94
25.0	9.77		

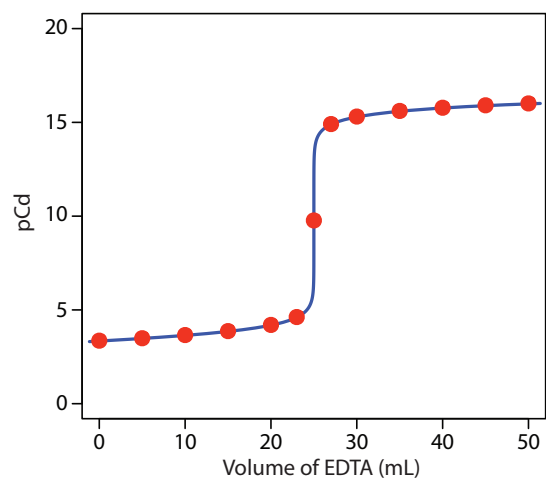


Figure 9.28 Titration curve for the titration of 50.0 mL of $5.00 \times 10^{-3} \text{ M Cd}^{2+}$ with 0.0100 M EDTA at a pH of 10 and in the presence of 0.0100 M NH_3 . The red points correspond to the data in Table 9.13. The blue line shows the complete titration curve.

After the equilibrium point we know the equilibrium concentrations of CdY^{2-} and EDTA. We can solve for the equilibrium concentration of C_{Cd} using K_f'' and then calculate $[\text{Cd}^{2+}]$ using $\alpha_{\text{Cd}^{2+}}$. Because we use the same conditional formation constant, K_f'' , for all calculations, this is the approach shown here.

There is a second method for calculating $[\text{Cd}^{2+}]$ after the equivalence point. Because the calculation uses only $[\text{CdY}^{2-}]$ and C_{EDTA} , we can use K_f' instead of K_f'' ; thus

$$\frac{[\text{CdY}^{2-}]}{[\text{Cd}^{2+}] C_{\text{EDTA}}} = \alpha_{\text{Y}^{4-}} \times K_f$$

$$\frac{3.13 \times 10^{-3} \text{ M}}{[\text{Cd}^{2+}] (6.25 \times 10^{-4} \text{ M})} = (0.37)(2.9 \times 10^{16})$$

Solving gives $[\text{Cd}^{2+}] = 4.7 \times 10^{-16} \text{ M}$ and a pCd of 15.33. We will use this approach when learning how to sketch a complexometric titration curve.

Practice Exercise 9.12

Calculate titration curves for the titration of 50.0 mL of 5.00×10^{-3} M Cd^{2+} with 0.0100 M EDTA (a) at a pH of 10 and (b) at a pH of 7. Neither titration includes an auxiliary complexing agent. Compare your results with [Figure 9.28](#) and comment on the effect of pH and of NH_3 on the titration of Cd^{2+} with EDTA.

Click [here](#) to review your answer to this exercise.

SKETCHING AN EDTA TITRATION CURVE

To evaluate the relationship between a titration's equivalence point and its end point, we need to construct only a reasonable approximation of the exact titration curve. In this section we demonstrate a simple method for sketching a complexation titration curve. Our goal is to sketch the titration curve quickly, using as few calculations as possible. Let's use the titration of 50.0 mL of 5.00×10^{-3} M Cd^{2+} with 0.0100 M EDTA in the presence of 0.0100 M NH_3 to illustrate our approach.

We begin by calculating the titration's equivalence point volume, which, as we determined earlier, is 25.0 mL. Next, we draw our axes, placing pCd on the y -axis and the titrant's volume on the x -axis. To indicate the equivalence point's volume, we draw a vertical line corresponding to 25.0 mL of EDTA. [Figure 9.29a](#) shows the result of the first step in our sketch.

Before the equivalence point, Cd^{2+} is present in excess and pCd is determined by the concentration of unreacted Cd^{2+} . Because not all the unreacted Cd^{2+} is free—some is complexed with NH_3 —we must account for the presence of NH_3 . The calculations are straightforward, as we saw earlier. [Figure 9.29b](#) shows the pCd after adding 5.00 mL and 10.0 mL of EDTA.

The third step in sketching our titration curve is to add two points after the equivalence point. Here the concentration of Cd^{2+} is controlled by the dissociation of the Cd^{2+} -EDTA complex. Beginning with the conditional formation constant

$$K_f' = \frac{[\text{CdY}^{2-}]}{[\text{Cd}^{2+}]C_{\text{EDTA}}} = \alpha_{\text{Y}^{4-}} \times K_f = (0.37)(2.9 \times 10^{16}) = 1.1 \times 10^{16}$$

we take the log of each side and rearrange, arriving at

$$\log K_f' = -\log[\text{Cd}^{2+}] + \log \frac{[\text{CdY}^{2-}]}{C_{\text{EDTA}}}$$

$$\text{pCd} = \log K_f' + \log \frac{C_{\text{EDTA}}}{[\text{CdY}^{2-}]}$$

This is the same example that we used in developing the calculations for a complexation titration curve. You can review the results of that calculation in [Table 9.13](#) and [Figure 9.28](#).

See [Table 9.13](#) for the values.

See the [side bar comment](#) on the previous page for an explanation of why we are ignoring the effect of NH_3 on the concentration of Cd^{2+} .

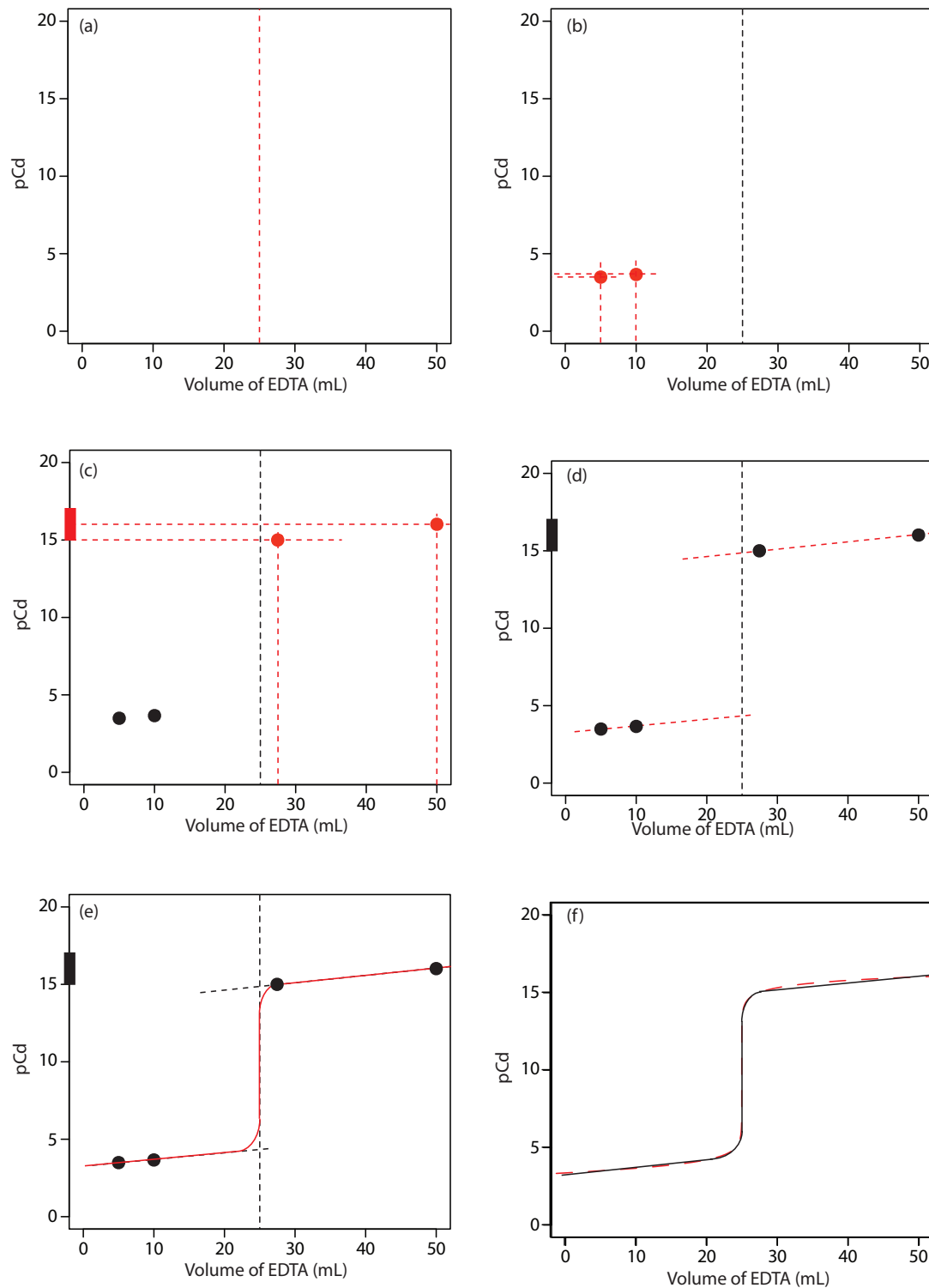


Figure 9.29 Illustrations showing the steps in sketching an approximate titration curve for the titration of 50.0 mL of $5.00 \times 10^{-3} \text{ M Cd}^{2+}$ with 0.0100 M EDTA in the presence of 0.0100 M NH_3 : (a) locating the equivalence point volume; (b) plotting two points before the equivalence point; (c) plotting two points after the equivalence point; (d) preliminary approximation of titration curve using straight-lines; (e) final approximation of titration curve using a smooth curve; (f) comparison of approximate titration curve (solid black line) and exact titration curve (dashed red line). See the text for additional details.

Note that after the equivalence point, the titrand's solution is a metal–ligand complexation buffer, with pCd determined by C_{EDTA} and $[\text{CdY}^{2-}]$. The buffer is at its lower limit of $\text{pCd} = \log K_f' - 1$ when

$$\frac{C_{\text{EDTA}}}{[\text{CdY}^{2-}]} = \frac{\text{moles EDTA added} - \text{initial moles Cd}^{2+}}{\text{initial moles Cd}^{2+}} = \frac{1}{10}$$

Making appropriate substitutions and solving, we find that

$$\frac{M_{\text{EDTA}} V_{\text{EDTA}} - M_{\text{Cd}} V_{\text{Cd}}}{M_{\text{Cd}} V_{\text{Cd}}} = \frac{1}{10}$$

$$M_{\text{EDTA}} V_{\text{EDTA}} - M_{\text{Cd}} V_{\text{Cd}} = 0.1 \times M_{\text{Cd}} V_{\text{Cd}}$$

$$V_{\text{EDTA}} = \frac{1.1 \times M_{\text{Cd}} V_{\text{Cd}}}{M_{\text{EDTA}}} = 1.1 \times V_{\text{eq}}$$

Our derivation here is general and applies to any complexation titration using EDTA as a titrant.

Thus, when the titration reaches 110% of the equivalence point volume, pCd is $\log K_f' - 1$. A similar calculation should convince you that $\text{pCd} = \log K_f'$ when the volume of EDTA is $2 \times V_{\text{eq}}$.

Figure 9.29c shows the third step in our sketch. First, we add a ladder diagram for the CdY^{2-} complex, including its buffer range, using its $\log K_f'$ value of 16.04. Next, we add points representing pCd at 110% of V_{eq} (a pCd of 15.04 at 27.5 mL) and at 200% of V_{eq} (a pCd of 16.04 at 50.0 mL).

Next, we draw a straight line through each pair of points, extending the line through the vertical line representing the equivalence point's volume (Figure 9.29d). Finally, we complete our sketch by drawing a smooth curve that connects the three straight-line segments (Figure 9.29e). A comparison of our sketch to the exact titration curve (Figure 9.29f) shows that they are in close agreement.

Practice Exercise 9.13

Sketch titration curves for the titration of 50.0 mL of $5.00 \times 10^{-3} \text{ M Cd}^{2+}$ with 0.0100 M EDTA (a) at a pH of 10 and (b) at a pH of 7. Compare your sketches to the calculated titration curves from [Practice Exercise 9.12](#).

Click [here](#) to review your answer to this exercise.

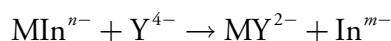
9C.3 Selecting and Evaluating the End point

The equivalence point of a complexation titration occurs when we react stoichiometrically equivalent amounts of titrand and titrant. As is the case with acid–base titrations, we estimate the equivalence point of a complexation titration using an experimental end point. A variety of methods are

available for locating the end point, including indicators and sensors that respond to a change in the solution conditions.

FINDING THE END POINT WITH AN INDICATOR

Most indicators for complexation titrations are organic dyes—known as **METALLOCHROMIC INDICATORS**—that form stable complexes with metal ions. The indicator, In^{m-} , is added to the titrand's solution where it forms a stable complex with the metal ion, MIn^{n-} . As we add EDTA it reacts first with free metal ions, and then displaces the indicator from MIn^{n-} .



If MIn^{n-} and In^{m-} have different colors, then the change in color signals the end point.

The accuracy of an indicator's end point depends on the strength of the metal–indicator complex relative to that of the metal–EDTA complex. If the metal–indicator complex is too strong, the change in color occurs after the equivalence point. If the metal–indicator complex is too weak, however, the end point occurs before we reach the equivalence point.

Most metallochromic indicators also are weak acids. One consequence of this is that the conditional formation constant for the metal–indicator complex depends on the titrand's pH. This provides some control over an indicator's titration error because we can adjust the strength of a metal–indicator complex by adjusted the pH at which we carry out the titration. Unfortunately, because the indicator is a weak acid, the color of the uncomplexed indicator also changes with pH. [Figure 9.30](#), for example, shows the color of the indicator calmagite as a function of pH and pMg, where H_2In^- , HIn^{2-} , and In^{3-} are different forms of the uncomplexed indicator, and MgIn^- is the Mg^{2+} –calmagite complex. Because the color of calmagite's metal–indicator complex is red, it use as a metallochromic indicator has a practical pH range of approximately 8.5–11 where the uncomplexed indicator, HIn^{2-} , has a blue color.

Table 9.14 provides examples of metallochromic indicators and the metal ions and pH conditions for which they are useful. Even if a suitable indicator does not exist, it is often possible to complete an EDTA titration

[Figure 9.30](#) is essentially a two-variable ladder diagram. The solid lines are equivalent to a step on a conventional ladder diagram, indicating conditions where two (or three) species are equal in concentration.

Table 9.14 Selected Metallochromic Indicators

Indicator	pH Range	Metal Ions ^a
calmagite	8.5–11	Ba, <i>Ca</i> , Mg, Zn
eriochrome Black T	7.5–10.5	Ba, <i>Ca</i> , Mg, Zn
eriochrome Blue Black R	8–12	<i>Ca</i> , Mg, Zn, Cu
murexide	6–13	<i>Ca</i> , Ni, Cu
PAN	2–11	Cd, Cu, Zn
salicylic acid	2–3	Fe

^a metal ions in *italic* font have poor end points

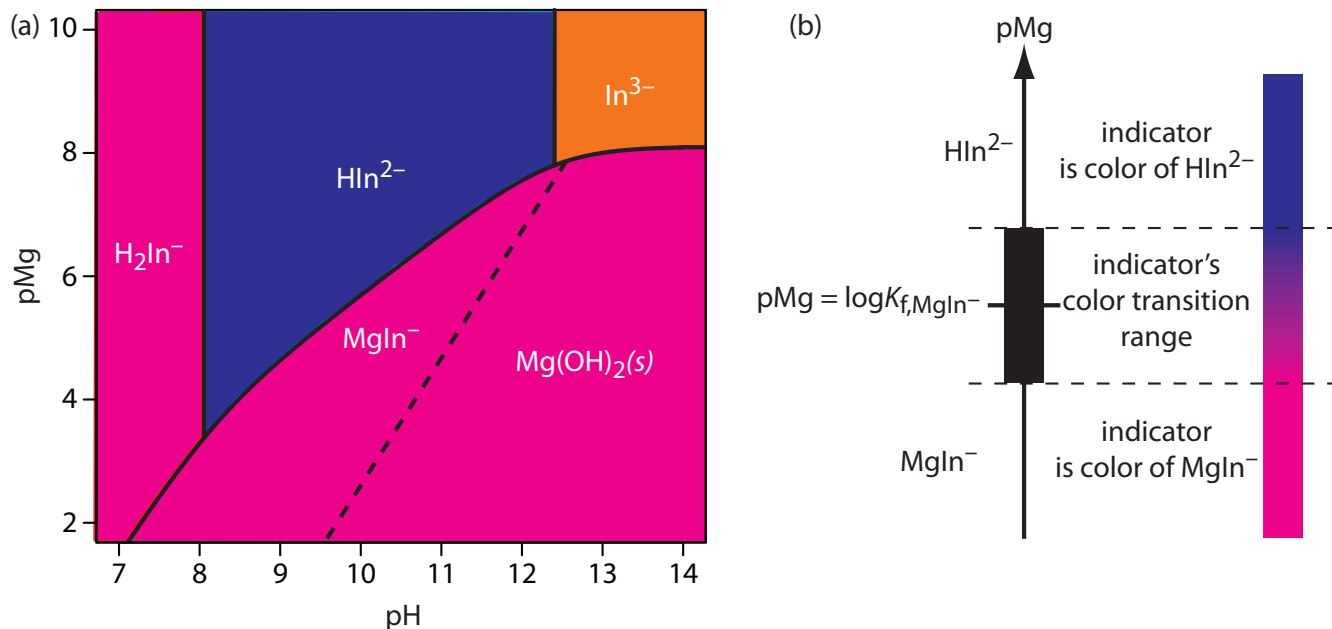


Figure 9.30 (a) Predominance diagram for the metallochromic indicator calmagite showing the most important form and color of calmagite as a function of pH and pMg, where H_2In^- , HIn^{2-} , and In^{3-} are uncomplexed forms of calmagite, and MgIn^- is its complex with Mg^{2+} . Conditions to the right of the dashed line, where Mg^{2+} precipitates as $\text{Mg}(\text{OH})_2$, are not analytically useful for a complexation titration. A red to blue end point is possible if we maintain the titrand's pH in the range 8.5–11. (b) Diagram showing the relationship between the concentration of Mg^{2+} (as pMg) and the indicator's color. The ladder diagram defines pMg values where MgIn^- and HIn^- are predominate species. The indicator changes color when pMg is between $\log K_f - 1$ and $\log K_f + 1$.

by introducing a small amount of a secondary metal–EDTA complex, if the secondary metal ion forms a stronger complex with the indicator and a weaker complex with EDTA than the analyte. For example, calmagite gives poor end points when titrating Ca^{2+} with EDTA. Adding a small amount of Mg^{2+} –EDTA to the titrand gives a sharper end point. Because Ca^{2+} forms a stronger complex with EDTA, it displaces Mg^{2+} , which then forms the red-colored Mg^{2+} –calmagite complex. At the titration's end point, EDTA displaces Mg^{2+} from the Mg^{2+} –calmagite complex, signaling the end point by the presence of the uncomplexed indicator's blue form.

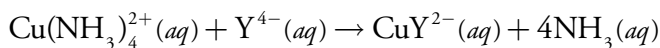
FINDING THE END POINT BY MONITORING ABSORBANCE

An important limitation when using an indicator is that we must be able to see the indicator's change in color at the end point. This may be difficult if the solution is already colored. For example, when titrating Cu^{2+} with EDTA, ammonia is used to adjust the titrand's pH. The intensely colored $\text{Cu}(\text{NH}_3)_4^{2+}$ complex obscures the indicator's color, making an accurate determination of the end point difficult. Other absorbing species present within the sample matrix may also interfere. This is often a problem when analyzing clinical samples, such as blood, or environmental samples, such as natural waters.

Two other methods for finding the end point of a complexation titration are a thermometric titration, in which we monitor the titrand's temperature as we add the titrant, and a potentiometric titration in which we use an ion selective electrode to monitor the metal ion's concentration as we add the titrant. The experimental approach is essentially identical to that described earlier for an acid–base titration, to which you may refer.

See [Chapter 11](#) for more details about ion selective electrodes.

If at least one species in a complexation titration absorbs electromagnetic radiation, we can identify the end point by monitoring the titrand's absorbance at a carefully selected wavelength. For example, we can identify the end point for a titration of Cu^{2+} with EDTA, in the presence of NH_3 by monitoring the titrand's absorbance at a wavelength of 745 nm, where the $\text{Cu}(\text{NH}_3)_4^{2+}$ complex absorbs strongly. At the beginning of the titration the absorbance is at a maximum. As we add EDTA, however, the reaction



decreases the concentration of $\text{Cu}(\text{NH}_3)_4^{2+}$ and decreases the absorbance until we reach the equivalence point. After the equivalence point the absorbance remains essentially unchanged. The resulting **SPECTROPHOTOMETRIC TITRATION CURVE** is shown in Figure 9.31a. Note that the titration curve's y -axis is not the actual absorbance, A , but a corrected absorbance, A_{corr}

$$A_{\text{corr}} = A \times \frac{V_{\text{EDTA}} + V_{\text{Cu}}}{V_{\text{Cu}}}$$

where V_{EDTA} and V_{Cu} are, respectively, the volumes of EDTA and Cu. Correcting the absorbance for the titrand's dilution ensures that the spectrophotometric titration curve consists of linear segments that we can extrapolate to find the end point. Other common spectrophotometric titration curves are shown in Figures 9.31b-f.

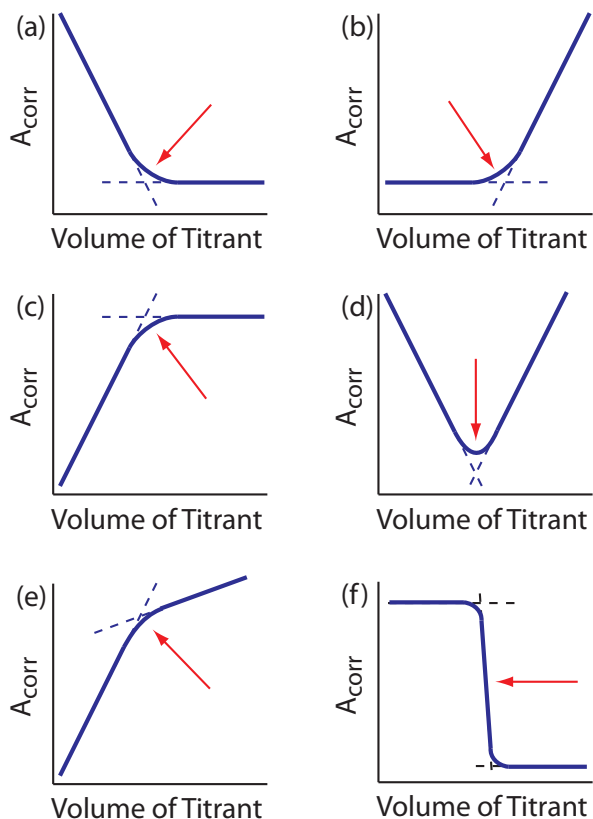


Figure 9.31 Examples of spectrophotometric titration curves: (a) only the titrand absorbs; (b) only the titrant absorbs; (c) only the product of the titration reaction absorbs; (d) both the titrand and the titrant absorb; (e) both the titration reaction's product and the titrant absorb; (f) only the indicator absorbs. The red arrows indicate the end points for each titration curve.

The best way to appreciate the theoretical and practical details discussed in this section is to carefully examine a typical complexation titrimetric method. Although each method is unique, the following description of the determination of the hardness of water provides an instructive example of a typical procedure. The description here is based on Method 2340C as published in *Standard Methods for the Examination of Water and Wastewater*, 20th Ed., American Public Health Association: Washington, D. C., 1998.

Representative Method 9.2

Determination of Hardness of Water and Wastewater

DESCRIPTION OF THE METHOD

The operational definition of water hardness is the total concentration of cations in a sample capable of forming insoluble complexes with soap. Although most divalent and trivalent metal ions contribute to hardness, the most important are Ca^{2+} and Mg^{2+} . Hardness is determined by titrating with EDTA at a buffered pH of 10. Calmagite is used as an indicator. Hardness is reported as mg CaCO_3/L .

PROCEDURE

Select a volume of sample requiring less than 15 mL of titrant to keep the analysis time under 5 minutes and, if necessary, dilute the sample to 50 mL with distilled water. Adjust the sample's pH by adding 1–2 mL of a pH 10 buffer containing a small amount of Mg^{2+} -EDTA. Add 1–2 drops of indicator and titrate with a standard solution of EDTA until the red-to-blue end point is reached (Figure 9.32).

QUESTIONS

1. Why is the sample buffered to a pH of 10? What problems might you expect at a higher pH or a lower pH?

Of the cations contributing to hardness, Mg^{2+} forms the weakest complex with EDTA and is the last cation to be titrated. Calmagite is a useful indicator because it gives a distinct end point when titrating Mg^{2+} . Because of calmagite's acid–base properties, the range of pMg values over which the indicator changes color is pH–dependent (Figure 9.30). Figure 9.33 shows the titration curve for a 50-mL solution of 10^{-3} M Mg^{2+} with 10^{-2} M EDTA at pHs of 9, 10, and 11. Superimposed on each titration curve is the range of conditions for which the average analyst will observe the end point. At a pH of 9 an early end point is possible, leading to a negative determinate error. A




Figure 9.32 End point for the titration of hardness with EDTA using calmagite as an indicator; the indicator is: (a) red prior to the end point due to the presence of the Mg^{2+} -indicator complex; (b) purple at the titration's end point; and (c) blue after the end point due to the presence of uncomplexed indicator.

late end point and a positive determinate error are possible if we use a pH of 11.

- Why is a small amount of the Mg^{2+} -EDTA complex added to the buffer?

The titration's end point is signaled by the indicator calmagite. The indicator's end point with Mg^{2+} is distinct, but its change in color when titrating Ca^{2+} does not provide a good end point. If the sample does not contain any Mg^{2+} as a source of hardness, then the titration's end point is poorly defined, leading to inaccurate and imprecise results.

Adding a small amount of Mg^{2+} -EDTA to the buffer ensures that the titrand includes at least some Mg^{2+} . Because Ca^{2+} forms a stronger complex with EDTA, it displaces Mg^{2+} from the Mg^{2+} -EDTA complex, freeing the Mg^{2+} to bind with the indicator. This displacement is stoichiometric, so the total concentration of hardness cations remains unchanged. The displacement by EDTA of Mg^{2+} from the Mg^{2+} -indicator complex signals the titration's end point.

- Why does the procedure specify that the titration take no longer than 5 minutes?

A time limitation suggests that there is a kinetically controlled interference, possibly arising from a competing chemical reaction. In this case the interference is the possible precipitation of CaCO_3 at a pH of 10.

9C.4 Quantitative Applications

Although many quantitative applications of complexation titrimetry have been replaced by other analytical methods, a few important applications continue to be relevant. In the section we review the general application of complexation titrimetry with an emphasis on applications from the analysis of water and wastewater. First, however, we discuss the selection and standardization of complexation titrants.

SELECTION AND STANDARDIZATION OF TITRANTS

EDTA is a versatile titrant that can be used to analyze virtually all metal ions. Although EDTA is the usual titrant when the titrand is a metal ion, it cannot be used to titrate anions. In the later case, Ag^+ or Hg^{2+} are suitable titrants.

Solutions of EDTA are prepared from its soluble disodium salt, $\text{Na}_2\text{H}_2\text{Y}\cdot 2\text{H}_2\text{O}$ and standardized by titrating against a solution made from the primary standard CaCO_3 . Solutions of Ag^+ and Hg^{2+} are prepared using AgNO_3 and $\text{Hg}(\text{NO}_3)_2$, both of which are secondary standards. Standardization is accomplished by titrating against a solution prepared from primary standard grade NaCl .

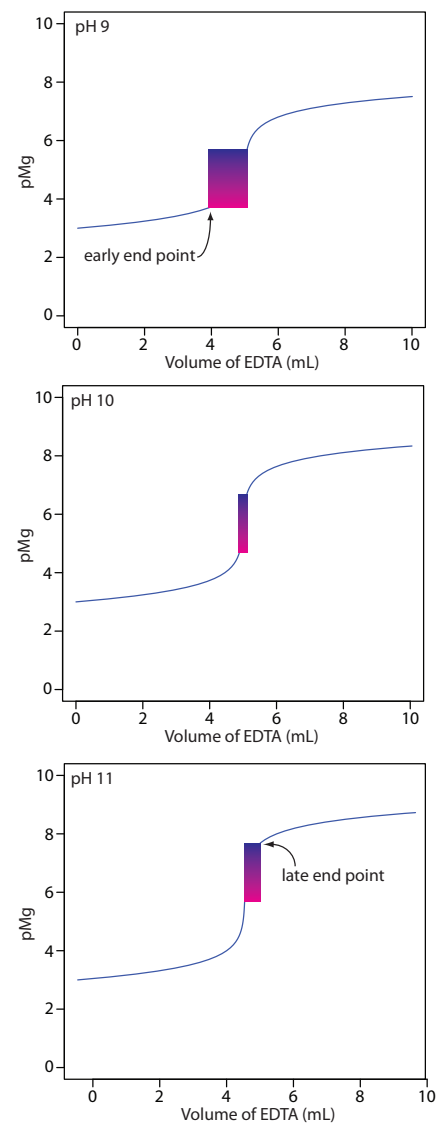


Figure 9.33 Titration curves for 50 mL of 10^{-3} M Mg^{2+} with 10^{-3} M EDTA at pHs 9, 10, and 11 using calmagite as an indicator. The range of pMg and volume of EDTA over which the indicator changes color is shown for each titration curve.

INORGANIC ANALYSIS

Complexation titrimetry continues to be listed as a standard method for the determination of hardness, Ca^{2+} , CN^- , and Cl^- in waters and wastewaters. The evaluation of hardness was described earlier in [Representative Method 9.2](#). The determination of Ca^{2+} is complicated by the presence of Mg^{2+} , which also reacts with EDTA. To prevent an interference the pH is adjusted to 12–13, precipitating Mg^{2+} as $\text{Mg}(\text{OH})_2$. Titrating with EDTA using murexide or Eriochrome Blue Black R as the indicator gives the concentration of Ca^{2+} .

Cyanide is determined at concentrations greater than 1 mg/L by making the sample alkaline with NaOH and titrating with a standard solution of AgNO_3 , forming the soluble $\text{Ag}(\text{CN})_2^-$ complex. The end point is determined using *p*-dimethylaminobenzalrhodamine as an indicator, with the solution turning from a yellow to a salmon color in the presence of excess Ag^+ .

Chloride is determined by titrating with $\text{Hg}(\text{NO}_3)_2$, forming $\text{HgCl}_2(\text{aq})$. The sample is acidified to a pH of 2.3–3.8 and diphenylcarbazone, which forms a colored complex with excess Hg^{2+} , serves as the indicator. A pH indicator—xylene cyanol FF—is added to ensure that the pH is within the desired range. The initial solution is a greenish blue, and the titration is carried out to a purple end point.

QUANTITATIVE CALCULATIONS

The quantitative relationship between the titrand and the titrant is determined by the stoichiometry of the titration reaction. For a titration using EDTA, the stoichiometry is always 1:1.

Example 9.7

The concentration of a solution of EDTA was determined by standardizing against a solution of Ca^{2+} prepared using a primary standard of CaCO_3 . A 0.4071-g sample of CaCO_3 was transferred to a 500-mL volumetric flask, dissolved using a minimum of 6 M HCl, and diluted to volume. After transferring a 50.00-mL portion of this solution to a 250-mL Erlenmeyer flask, the pH was adjusted by adding 5 mL of a pH 10 $\text{NH}_3\text{--NH}_4\text{Cl}$ buffer containing a small amount of Mg^{2+} –EDTA. After adding calmagite as an indicator, the solution was titrated with the EDTA, requiring 42.63 mL to reach the end point. Report the molar concentration of EDTA in the titrant.

SOLUTION

The primary standard of Ca^{2+} has a concentration of

$$\frac{0.4071 \text{ g CaCO}_3}{0.5000 \text{ L}} \times \frac{1 \text{ mol Ca}^{2+}}{100.09 \text{ g CaCO}_3} = 8.135 \times 10^{-3} \text{ M Ca}^{2+}$$

Note that in this example, the analyte is the titrant.

The moles of Ca^{2+} in the titrand is

$$8.135 \times 10^{-3} \text{ M Ca}^{2+} \times 0.05000 \text{ L Ca}^{2+} = 4.068 \times 10^{-4} \text{ mol Ca}^{2+}$$

which means that 4.068×10^{-4} moles of EDTA are used in the titration.

The molarity of EDTA in the titrant is

$$\frac{4.068 \times 10^{-4} \text{ mol EDTA}}{0.04263 \text{ L EDTA}} = 9.543 \times 10^{-3} \text{ M EDTA}$$

Practice Exercise 9.14

A 100.0-mL sample is analyzed for hardness using the procedure outlined in [Representative Method 9.2](#), requiring 23.63 mL of 0.0109 M EDTA. Report the sample's hardness as mg CaCO_3/L .

Click [here](#) to review your answer to this exercise.

As shown in the following example, we can easily extend this calculation to complexation reactions using other titrants.

Example 9.8

The concentration of Cl^- in a 100.0-mL sample of water from a freshwater aquifer was tested for the encroachment of sea water by titrating with 0.0516 M $\text{Hg}(\text{NO}_3)_2$. The sample was acidified and titrated to the diphenylcarbazone end point, requiring 6.18 mL of the titrant. Report the concentration of Cl^- , in mg/L, in the aquifer.

SOLUTION

The reaction between Cl^- and Hg^{2+} produces a metal–ligand complex of $\text{HgCl}_2(\text{aq})$. Each mole of Hg^{2+} reacts with 2 moles of Cl^- ; thus

$$\begin{aligned} & \frac{0.0516 \text{ mol Hg}(\text{NO}_3)_2}{\text{L}} \times 0.00618 \text{ L Hg}(\text{NO}_3)_2 \\ & \times \frac{2 \text{ mol Cl}^-}{\text{mol Hg}(\text{NO}_3)_2} \times \frac{35.453 \text{ g Cl}^-}{\text{mol Cl}^-} = 0.0226 \text{ g Cl}^- \end{aligned}$$

are in the sample. The concentration of Cl^- in the sample is

$$\frac{0.0226 \text{ g Cl}^-}{0.1000 \text{ L}} \times \frac{1000 \text{ mg}}{\text{g}} = 226 \text{ mg/L}$$

Practice Exercise 9.15

A 0.4482-g sample of impure NaCN is titrated with 0.1018 M AgNO_3 , requiring 39.68 mL to reach the end point. Report the purity of the sample as %w/w NaCN.

Click [here](#) to review your answer to this exercise.

Finally, complex titrations involving multiple analytes or back titrations are possible.

Example 9.9

An alloy of chromel containing Ni, Fe, and Cr was analyzed by a complexation titration using EDTA as the titrant. A 0.7176-g sample of the alloy was dissolved in HNO_3 and diluted to 250 mL in a volumetric flask. A 50.00-mL aliquot of the sample, treated with pyrophosphate to mask the Fe and Cr, required 26.14 mL of 0.05831 M EDTA to reach the murexide end point. A second 50.00-mL aliquot was treated with hexamethylenetetramine to mask the Cr. Titrating with 0.05831 M EDTA required 35.43 mL to reach the murexide end point. Finally, a third 50.00-mL aliquot was treated with 50.00 mL of 0.05831 M EDTA, and back titrated to the murexide end point with 6.21 mL of 0.06316 M Cu^{2+} . Report the weight percents of Ni, Fe, and Cr in the alloy.

SOLUTION

The stoichiometry between EDTA and each metal ion is 1:1. For each of the three titrations, therefore, we can easily equate the moles of EDTA to the moles of metal ions that are titrated.

Titration 1: moles Ni = moles EDTA

Titration 2: moles Ni + moles Fe = moles EDTA

Titration 3: moles Ni + moles Fe + moles Cr + moles Cu = moles EDTA

We can use the first titration to determine the moles of Ni in our 50.00-mL portion of the dissolved alloy. The titration uses

$$\frac{0.05831 \text{ mol EDTA}}{\text{L}} \times 0.02614 \text{ L EDTA} = 1.524 \times 10^{-3} \text{ mol EDTA}$$

which means the sample contains 1.524×10^{-3} mol Ni.

Having determined the moles of EDTA reacting with Ni, we can use the second titration to determine the amount of Fe in the sample. The second titration uses

$$\frac{0.05831 \text{ mol EDTA}}{\text{L}} \times 0.03543 \text{ L EDTA} = 2.066 \times 10^{-3} \text{ mol EDTA}$$

of which 1.524×10^{-3} mol are used to titrate Ni. This leaves 5.42×10^{-4} mol of EDTA to react with Fe; thus, the sample contains 5.42×10^{-4} mol of Fe.

Finally, we can use the third titration to determine the amount of Cr in the alloy. The third titration uses

$$\frac{0.05831 \text{ mol EDTA}}{\text{L}} \times 0.05000 \text{ L EDTA} = 2.916 \times 10^{-3} \text{ mol EDTA}$$

of which 1.524×10^{-3} mol are used to titrate Ni and 5.42×10^{-4} mol are used to titrate Fe. This leaves 8.50×10^{-4} mol of EDTA to react with Cu and Cr. The amount of EDTA reacting with Cu is

$$\frac{0.06316 \text{ mol Cu}^{2+}}{\text{L}} \times 0.00621 \text{ L Cu}^{2+} \times \frac{1 \text{ mol EDTA}}{\text{mol Cu}^{2+}} = 3.92 \times 10^{-4} \text{ mol EDTA}$$

leaving 4.58×10^{-4} mol of EDTA to react with Cr. The sample, therefore, contains 4.58×10^{-4} mol of Cr.

Having determined the moles of Ni, Fe, and Cr in a 50.00-mL portion of the dissolved alloy, we can calculate the %w/w of each analyte in the alloy.

$$\frac{1.524 \times 10^{-3} \text{ mol Ni}}{50.00 \text{ mL}} \times 250.0 \text{ mL} \times \frac{58.69 \text{ g Ni}}{\text{mol Ni}} = 0.4472 \text{ g Ni}$$

$$\frac{0.4472 \text{ g Ni}}{0.7176 \text{ g sample}} \times 100 = 62.32\% \text{ w/w Ni}$$

$$\frac{5.42 \times 10^{-4} \text{ mol Fe}}{50.00 \text{ mL}} \times 250.0 \text{ mL} \times \frac{55.847 \text{ g Fe}}{\text{mol Fe}} = 0.151 \text{ g Fe}$$

$$\frac{0.151 \text{ g Fe}}{0.7176 \text{ g sample}} \times 100 = 21.0\% \text{ w/w Fe}$$

$$\frac{4.58 \times 10^{-4} \text{ mol Cr}}{50.00 \text{ mL}} \times 250.0 \text{ mL} \times \frac{51.996 \text{ g Cr}}{\text{mol Cr}} = 0.119 \text{ g Cr}$$

$$\frac{0.119 \text{ g Cr}}{0.7176 \text{ g sample}} \times 100 = 16.6\% \text{ w/w Fe}$$

Practice Exercise 9.16

A indirect complexation titration with EDTA can be used to determine the concentration of sulfate, SO_4^{2-} , in a sample. A 0.1557-g sample is dissolved in water, any sulfate present is precipitated as BaSO_4 by adding $\text{Ba}(\text{NO}_3)_2$. After filtering and rinsing the precipitate, it is dissolved in 25.00 mL of 0.02011 M EDTA. The excess EDTA is then titrated with 0.01113 M Mg^{2+} , requiring 4.23 mL to reach the end point. Calculate the %w/w Na_2SO_4 in the sample.

Click [here](#) to review your answer to this exercise.

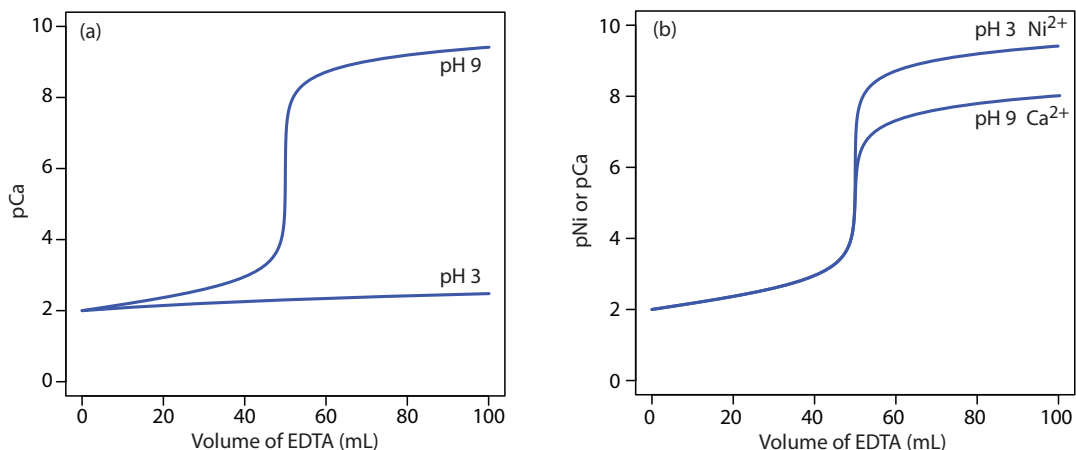


Figure 9.34 Titration curves illustrating how we can use the titrand's pH to control EDTA's selectivity. (a) Titration of 50.0 mL of 0.010 M Ca^{2+} at a pH of 3 and a pH of 9 using 0.010 M EDTA. At a pH of 3 the CaY^{2-} complex is too weak to successfully titrate. (b) Titration of a 50.0 mL mixture of 0.010 M Ca^{2+} and 0.010 M Ni^{2+} at a pH of 3 and a pH of 9 using 0.010 M EDTA. At a pH of 3 EDTA reacts only with Ni^{2+} . When the titration is complete, raising the pH to 9 allows for the titration of Ca^{2+} .

9C.5 Evaluation of Complexation Titrimetry

The scale of operations, accuracy, precision, sensitivity, time, and cost of a complexation titration are similar to those described earlier for acid–base titrations. Complexation titrations, however, are more selective. Although EDTA forms strong complexes with most metal ion, by carefully controlling the titrand's pH we can analyze samples containing two or more analytes. The reason we can use pH to provide selectivity is shown in Figure 9.34a. A titration of Ca^{2+} at a pH of 9 gives a distinct break in the titration curve because the conditional formation constant for CaY^{2-} of 2.6×10^9 is large enough to ensure that the reaction of Ca^{2+} and EDTA goes to completion. At a pH of 3, however, the conditional formation constant of 1.23 is so small that very little Ca^{2+} reacts with the EDTA.

Suppose we need to analyze a mixture of Ni^{2+} and Ca^{2+} . Both analytes react with EDTA, but their conditional formation constants differ significantly. If we adjust the pH to 3 we can titrate Ni^{2+} with EDTA without titrating Ca^{2+} (Figure 9.34b). When the titration is complete, we adjust the titrand's pH to 9 and titrate the Ca^{2+} with EDTA.

A spectrophotometric titration is a particularly useful approach for analyzing a mixture of analytes. For example, as shown in Figure 9.35, we can determine the concentration of a two metal ions if there is a difference between the absorbance of the two metal–ligand complexes.

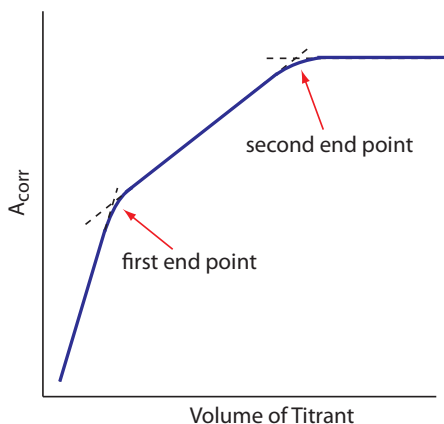


Figure 9.35 Spectrophotometric titration curve for the complexation titration of a mixture of two analytes. The red arrows indicate the end points for each analyte.

9D Redox Titrations

Analytical titrations using redox reactions were introduced shortly after the development of acid–base titrimetry. The earliest **REDOX TITRATION** took advantage of the oxidizing power of chlorine. In 1787, Claude Berthollet

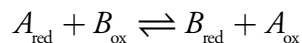
introduced a method for the quantitative analysis of chlorine water (a mixture of Cl_2 , HCl , and HOCl) based on its ability to oxidize indigo, a dye that is colorless in its oxidized state. In 1814, Joseph Gay-Lussac developed a similar method for determining chlorine in bleaching powder. In both methods the end point is a change in color. Before the equivalence point the solution is colorless due to the oxidation of indigo. After the equivalence point, however, unreacted indigo imparts a permanent color to the solution.

The number of redox titrimetric methods increased in the mid-1800s with the introduction of MnO_4^- , $\text{Cr}_2\text{O}_7^{2-}$, and I_2 as oxidizing titrants, and of Fe^{2+} and $\text{S}_2\text{O}_3^{2-}$ as reducing titrants. Even with the availability of these new titrants, redox titrimetry was slow to develop due to the lack of suitable indicators. A titrant can serve as its own indicator if its oxidized and reduced forms differ significantly in color. For example, the intensely purple MnO_4^- ion serves as its own indicator since its reduced form, Mn^{2+} , is almost colorless. Other titrants require a separate indicator. The first such indicator, diphenylamine, was introduced in the 1920s. Other redox indicators soon followed, increasing the applicability of redox titrimetry.

9D.1 Redox Titration Curves

To evaluate a redox titration we need to know the shape of its titration curve. In an acid–base titration or a complexation titration, the titration curve shows how the concentration of H_3O^+ (as pH) or M^{n+} (as pM) changes as we add titrant. For a redox titration it is convenient to monitor the titration reaction's potential instead of the concentration of one species.

You may recall from Chapter 6 that the Nernst equation relates a solution's potential to the concentrations of reactants and products participating in the redox reaction. Consider, for example, a titration in which a titrand in a reduced state, A_{red} , reacts with a titrant in an oxidized state, B_{ox} .



where A_{ox} is the titrand's oxidized form, and B_{red} is the titrant's reduced form. The reaction's potential, E_{rxn} , is the difference between the reduction potentials for each half-reaction.

$$E_{\text{rxn}} = E_{B_{\text{ox}}/B_{\text{red}}} - E_{A_{\text{ox}}/A_{\text{red}}}$$

After each addition of titrant the reaction between the titrand and the titrant reaches a state of equilibrium. Because the potential at equilibrium is zero, the titrand's and the titrant's reduction potentials are identical.

$$E_{B_{\text{ox}}/B_{\text{red}}} = E_{A_{\text{ox}}/A_{\text{red}}}$$

This is an important observation because we can use either half-reaction to monitor the titration's progress.

Before the equivalence point the titration mixture consists of appreciable quantities of the titrand's oxidized and reduced forms. The concentration of unreacted titrant, however, is very small. The potential, therefore, is easier to calculate if we use the Nernst equation for the titrand's half-reaction

$$E_{\text{rxn}} = E_{A_{\text{ox}}/A_{\text{red}}}^{\circ} - \frac{RT}{nF} \ln \frac{[A_{\text{red}}]}{[A_{\text{ox}}]}$$

Although the Nernst equation is written in terms of the half-reaction's standard state potential, a matrix-dependent **FORMAL POTENTIAL** often is used in its place. See [Appendix 13](#) for the standard state potentials and formal potentials for selected half-reactions.

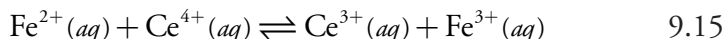
After the equivalence point it is easier to calculate the potential using the Nernst equation for the titrant's half-reaction.

$$E_{\text{rxn}} = E_{B_{\text{ox}}/B_{\text{red}}}^{\circ} - \frac{RT}{nF} \ln \frac{[B_{\text{red}}]}{[B_{\text{ox}}]}$$

CALCULATING THE TITRATION CURVE

In 1 M HClO₄, the formal potential for the reduction of Fe³⁺ to Fe²⁺ is +0.767 V, and the formal potential for the reduction of Ce⁴⁺ to Ce³⁺ is +1.70 V.

Let's calculate the titration curve for the titration of 50.0 mL of 0.100 M Fe²⁺ with 0.100 M Ce⁴⁺ in a matrix of 1 M HClO₄. The reaction in this case is



Because the equilibrium constant for reaction 9.15 is very large—it is approximately 6×10^{15} —we may assume that the analyte and titrant react completely.

Step 1: Calculate the volume of titrant needed to reach the equivalence point.

The first task is to calculate the volume of Ce⁴⁺ needed to reach the titration's equivalence point. From the reaction's stoichiometry we know that

$$\text{moles Fe}^{2+} = \text{moles Ce}^{4+}$$

$$M_{\text{Fe}} \times V_{\text{Fe}} = M_{\text{Ce}} \times V_{\text{Ce}}$$

Solving for the volume of Ce⁴⁺ gives the equivalence point volume as

$$V_{\text{eq}} = V_{\text{Ce}} = \frac{M_{\text{Fe}} V_{\text{Fe}}}{M_{\text{Ce}}} = \frac{(0.100 \text{ M})(50.0 \text{ mL})}{(0.100 \text{ M})} = 50.0 \text{ mL}$$

Step 2: Calculate the potential before the equivalence point by determining the concentrations of the titrand's oxidized and reduced forms, and using the Nernst equation for the titrand's reduction half-reaction.

Before the equivalence point, the concentration of unreacted Fe²⁺ and the concentration of Fe³⁺ are easy to calculate. For this reason we find the potential using the Nernst equation for the Fe³⁺/Fe²⁺ half-reaction.

$$E = E_{\text{Fe}^{3+}/\text{Fe}^{2+}}^{\circ} - \frac{RT}{nF} \log \frac{[\text{Fe}^{2+}]}{[\text{Fe}^{3+}]} = 9.16$$

$$+0.767\text{V} - 0.05916 \log \frac{[\text{Fe}^{2+}]}{[\text{Fe}^{3+}]}$$

For example, the concentrations of Fe²⁺ and Fe³⁺ after adding 10.0 mL of titrant are

$$[\text{Fe}^{2+}] = \frac{\text{initial moles Fe}^{2+} - \text{moles Ce}^{4+} \text{ added}}{\text{total volume}} = \frac{M_{\text{Fe}} V_{\text{Fe}} - M_{\text{Ce}} V_{\text{Ce}}}{V_{\text{Fe}} + V_{\text{Ce}}}$$

$$= \frac{(0.100 \text{ M})(50.0 \text{ mL}) - (0.100 \text{ M})(10.0 \text{ mL})}{50.0 \text{ mL} + 10.0 \text{ mL}} = 6.67 \times 10^{-2} \text{ M}$$

$$[\text{Fe}^{3+}] = \frac{\text{moles Ce}^{4+} \text{ added}}{\text{total volume}} = \frac{M_{\text{Ce}} V_{\text{Ce}}}{V_{\text{Fe}} + V_{\text{Ce}}}$$

$$= \frac{(0.100 \text{ M})(10.0 \text{ mL})}{50.0 \text{ mL} + 10.0 \text{ mL}} = 1.67 \times 10^{-2} \text{ M}$$

Substituting these concentrations into [equation 9.16](#) gives a potential of

$$E = +0.767 \text{ V} - 0.05916 \log \frac{6.67 \times 10^{-2} \text{ M}}{1.67 \times 10^{-2} \text{ M}} = +0.731 \text{ V}$$

After the equivalence point, the concentration of Ce^{3+} and the concentration of excess Ce^{4+} are easy to calculate. For this reason we find the potential using the Nernst equation for the $\text{Ce}^{4+}/\text{Ce}^{3+}$ half-reaction.

$$E = E_{\text{Ce}^{4+}/\text{Ce}^{3+}}^{\circ} - \frac{RT}{nF} \log \frac{[\text{Ce}^{3+}]}{[\text{Ce}^{4+}]} =$$

$$+1.70 \text{ V} - 0.05916 \log \frac{[\text{Ce}^{3+}]}{[\text{Ce}^{4+}]} \quad 9.17$$

For example, after adding 60.0 mL of titrant, the concentrations of Ce^{3+} and Ce^{4+} are

$$[\text{Ce}^{3+}] = \frac{\text{initial moles Fe}^{2+}}{\text{total volume}} = \frac{M_{\text{Fe}} V_{\text{Fe}}}{V_{\text{Fe}} + V_{\text{Ce}}}$$

$$= \frac{(0.100 \text{ M})(50.0 \text{ mL})}{50.0 \text{ mL} + 60.0 \text{ mL}} = 4.55 \times 10^{-3} \text{ M}$$

$$[\text{Ce}^{4+}] = \frac{\text{moles Ce}^{4+} \text{ added} - \text{initial moles Fe}^{2+}}{\text{total volume}} = \frac{M_{\text{Ce}} V_{\text{Ce}} - M_{\text{Fe}} V_{\text{Fe}}}{V_{\text{Fe}} + V_{\text{Ce}}}$$

$$= \frac{(0.100 \text{ M})(60.0 \text{ mL}) - (0.100 \text{ M})(50.0 \text{ mL})}{50.0 \text{ mL} + 60.0 \text{ mL}} = 9.09 \times 10^{-3} \text{ M}$$

Substituting these concentrations into [equation 9.17](#) gives a potential of

$$E = +1.70 \text{ V} - 0.05916 \log \frac{4.55 \times 10^{-3} \text{ M}}{9.09 \times 10^{-3} \text{ M}} = +1.66 \text{ V}$$

At the titration's equivalence point, the potential, E_{eq} , in [equation 9.16](#) and [equation 9.17](#) are identical. Adding the equations together to gives

Step 3: Calculate the potential after the equivalence point by determining the concentrations of the titrant's oxidized and reduced forms, and using the Nernst equation for the titrant's reduction half-reaction.

Step 4: Calculate the potential at the equivalence point.

Table 9.15 Data for the Titration of 50.0 mL of 0.100 M Fe^{2+} with 0.100 M Ce^{4+}

Volume of Ce^{4+} (mL)	E (V)	Volume Ce^{4+} (mL)	E (V)
10.0	0.731	60.0	1.66
20.0	0.757	70.0	1.68
30.0	0.777	80.0	1.69
40.0	0.803	90.0	1.69
50.0	1.23	100.0	1.70

$$2E_{\text{eq}} = E_{\text{Fe}^{3+}/\text{Fe}^{2+}}^{\circ} + E_{\text{Ce}^{4+}/\text{Ce}^{3+}}^{\circ} - 0.05916 \log \frac{[\text{Fe}^{2+}][\text{Ce}^{3+}]}{[\text{Fe}^{3+}][\text{Ce}^{4+}]}$$

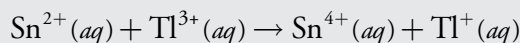
Because $[\text{Fe}^{2+}] = [\text{Ce}^{4+}]$ and $[\text{Ce}^{3+}] = [\text{Fe}^{3+}]$ at the equivalence point, the log term has a value of zero and the equivalence point's potential is

$$E_{\text{eq}} = \frac{E_{\text{Fe}^{3+}/\text{Fe}^{2+}}^{\circ} + E_{\text{Ce}^{4+}/\text{Ce}^{3+}}^{\circ}}{2} = \frac{0.767 \text{ V} + 1.70 \text{ V}}{2} = 1.23 \text{ V}$$

Additional results for this titration curve are shown in Table 9.15 and Figure 9.36.

Practice Exercise 9.17

Calculate the titration curve for the titration of 50.0 mL of 0.0500 M Sn^{2+} with 0.100 M Tl^{3+} . Both the titrand and the titrant are 1.0 M in HCl. The titration reaction is



Click [here](#) to review your answer to this exercise.

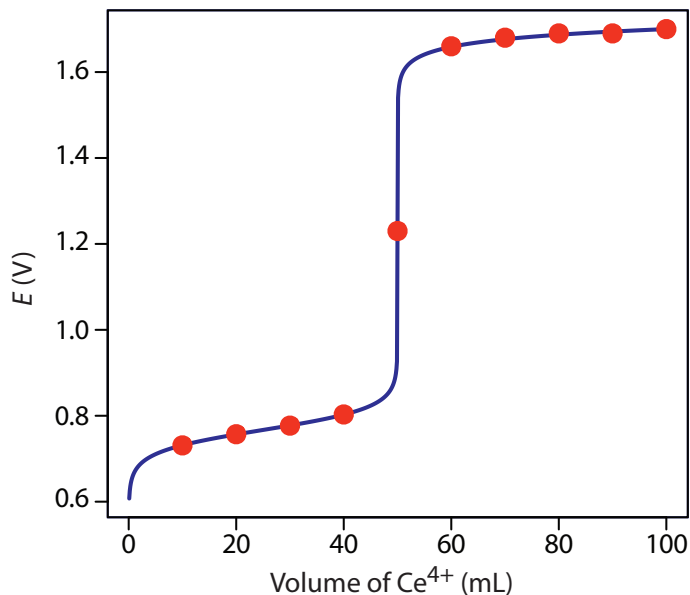


Figure 9.36 Titration curve for the titration of 50.0 mL of 0.100 M Fe^{2+} with 0.100 M Ce^{4+} . The red points correspond to the data in Table 9.15. The blue line shows the complete titration curve.

SKETCHING A REDOX TITRATION CURVE

To evaluate the relationship between a titration's equivalence point and its end point we need to construct only a reasonable approximation of the exact titration curve. In this section we demonstrate a simple method for sketching a redox titration curve. Our goal is to sketch the titration curve quickly, using as few calculations as possible. Let's use the titration of 50.0 mL of 0.100 M Fe^{2+} with 0.100 M Ce^{4+} in a matrix of 1 M HClO_4 .

We begin by calculating the titration's equivalence point volume, which, as we determined earlier, is 50.0 mL. Next, we draw our axes, placing the potential, E , on the y -axis and the titrant's volume on the x -axis. To indicate the equivalence point's volume, we draw a vertical line corresponding to 50.0 mL of Ce^{4+} . [Figure 9.37a](#) shows the result of the first step in our sketch.

Before the equivalence point, the potential is determined by a redox buffer of Fe^{2+} and Fe^{3+} . Although we can easily calculate the potential using the Nernst equation, we can avoid this calculation by making a simple assumption. You may recall from Chapter 6 that a redox buffer operates over a range of potentials that extends approximately $\pm(0.05916/n)$ unit on either side of $E_{\text{Fe}^{3+}/\text{Fe}^{2+}}^{\circ}$. The potential is at the buffer's lower limit

$$E = E_{\text{Fe}^{3+}/\text{Fe}^{2+}}^{\circ} - 0.05916$$

when the concentration of Fe^{2+} is $10\times$ greater than that of Fe^{3+} . The buffer reaches its upper potential

$$E = E_{\text{Fe}^{3+}/\text{Fe}^{2+}}^{\circ} + 0.05916$$

when the concentration of Fe^{2+} is $10\times$ smaller than that of Fe^{3+} . The redox buffer spans a range of volumes from approximately 10% of the equivalence point volume to approximately 90% of the equivalence point volume.

[Figure 9.37b](#) shows the second step in our sketch. First, we superimpose a ladder diagram for Fe^{2+} on the y -axis, using its $E_{\text{Fe}^{3+}/\text{Fe}^{2+}}^{\circ}$ value of 0.767 V and including the buffer's range of potentials. Next, we add points representing the pH at 10% of the equivalence point volume (a potential of 0.708 V at 5.0 mL) and at 90% of the equivalence point volume (a potential of 0.826 V at 45.0 mL).

The third step in sketching our titration curve is to add two points after the equivalence point. Here the potential is controlled by a redox buffer of Ce^{3+} and Ce^{4+} . The redox buffer is at its lower limit of $E = E_{\text{Ce}^{4+}/\text{Ce}^{3+}}^{\circ} - 0.05916$ when the titrant reaches 110% of the equivalence point volume and the potential is $E_{\text{Ce}^{4+}/\text{Ce}^{3+}}^{\circ}$ when the volume of Ce^{4+} is $2\times V_{\text{eq}}$.

[Figure 9.37c](#) shows the third step in our sketch. First, we add a ladder diagram for Ce^{4+} , including its buffer range, using its $E_{\text{Ce}^{4+}/\text{Ce}^{3+}}^{\circ}$ value of 1.70 V. Next, we add points representing the potential at 110% of V_{eq} (a value of 1.66 V at 55.0 mL) and at 200% of V_{eq} (a value of 1.70 V at 100.0 mL).

This is the same example that we used in developing the calculations for a redox titration curve. You can review the results of that calculation in [Table 9.15](#) and [Figure 9.36](#).

We used a similar approach when sketching the acid–base titration curve for the titration of acetic acid with NaOH.

We used a similar approach when sketching the complexation titration curve for the titration of Mg^{2+} with EDTA.

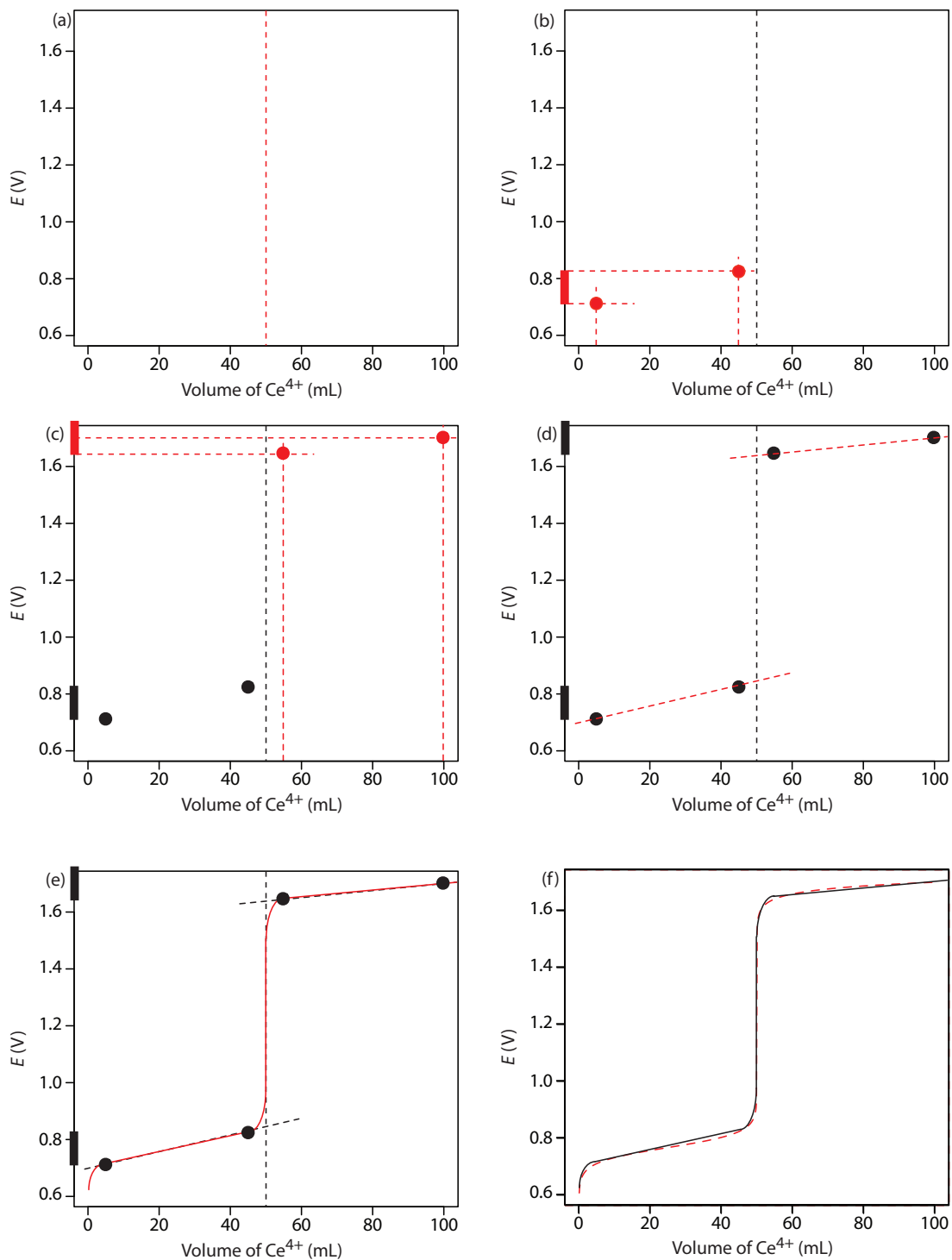
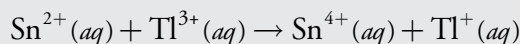


Figure 9.37 Illustrations showing the steps in sketching an approximate titration curve for the titration of 50.0 mL of 0.100 M Fe^{2+} with 0.100 M Ce^{4+} in 1 M HClO_4 : (a) locating the equivalence point volume; (b) plotting two points before the equivalence point; (c) plotting two points after the equivalence point; (d) preliminary approximation of titration curve using straight-lines; (e) final approximation of titration curve using a smooth curve; (f) comparison of approximate titration curve (solid black line) and exact titration curve (dashed red line). See the text for additional details.

Next, we draw a straight line through each pair of points, extending the line through the vertical line representing the equivalence point's volume (Figure 9.37d). Finally, we complete our sketch by drawing a smooth curve that connects the three straight-line segments (Figure 9.37e). A comparison of our sketch to the exact titration curve (Figure 9.37f) shows that they are in close agreement.

Practice Exercise 9.18

Sketch the titration curve for the titration of 50.0 mL of 0.0500 M Sn^{4+} with 0.100 M Tl^+ . Both the titrand and the titrant are 1.0 M in HCl. The titration reaction is



Compare your sketch to your calculated titration curve from [Practice Exercise 9.17](#).

Click [here](#) to review your answer to this exercise.

9D.2 Selecting and Evaluating the End point

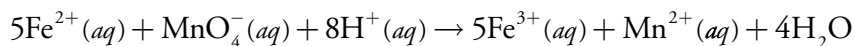
A redox titration's equivalence point occurs when we react stoichiometrically equivalent amounts of titrand and titrant. As is the case with acid–base and complexation titrations, we estimate the equivalence point of a complexation titration using an experimental end point. A variety of methods are available for locating the end point, including indicators and sensors that respond to a change in the solution conditions.

WHERE IS THE EQUIVALENCE POINT?

For an acid–base titration or a complexometric titration the equivalence point is almost identical to the inflection point on the steeping rising part of the titration curve. If you look back at [Figure 9.7](#) and [Figure 9.28](#), you will see that the inflection point is in the middle of this steep rise in the titration curve, which makes it relatively easy to find the equivalence point when you sketch these titration curves. We call this a **SYMMETRIC EQUIVALENCE POINT**. If the stoichiometry of a redox titration is symmetric—one mole of titrant reacts with each mole of titrand—then the equivalence point is symmetric. If the titration reaction's stoichiometry is not 1:1, then the equivalence point is closer to the top or to bottom of the titration curve's sharp rise. In this case we have an **ASYMMETRIC EQUIVALENCE POINT**.

Example 9.10

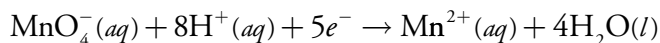
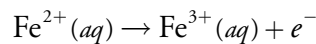
Derive a general equation for the equivalence point's potential when titrating Fe^{2+} with MnO_4^- .



We often use H^+ instead of H_3O^+ when writing a redox reaction.

SOLUTION

The half-reactions for Fe^{2+} and MnO_4^- are



for which the Nernst equations are

$$E = E_{\text{Fe}^{3+}/\text{Fe}^{2+}}^{\circ} - 0.05916 \log \frac{[\text{Fe}^{2+}]}{[\text{Fe}^{3+}]}$$

$$E = E_{\text{MnO}_4^-/\text{Mn}^{2+}}^{\circ} - \frac{0.05916}{5} \log \frac{[\text{Mn}^{2+}]}{[\text{MnO}_4^-][\text{H}^+]^8}$$

Before adding these two equations together we must multiply the second equation by 5 so that we can combine the log terms; thus

$$6E = E_{\text{Fe}^{3+}/\text{Fe}^{2+}}^{\circ} + 5E_{\text{MnO}_4^-/\text{Mn}^{2+}}^{\circ} - 0.05916 \log \frac{[\text{Fe}^{2+}][\text{Mn}^{2+}]}{[\text{Fe}^{3+}][\text{MnO}_4^-][\text{H}^+]^8}$$

At the equivalence point we know that

$$[\text{Fe}^{2+}] = 5[\text{MnO}_4^-]$$

$$[\text{Fe}^{3+}] = 5[\text{Mn}^{2+}]$$

Substituting these equalities into the previous equation and rearranging gives us a general equation for the potential at the equivalence point.

$$6E_{\text{eq}} = E_{\text{Fe}^{3+}/\text{Fe}^{2+}}^{\circ} + 5E_{\text{MnO}_4^-/\text{Mn}^{2+}}^{\circ} - 0.05916 \log \frac{5[\text{MnO}_4^-][\text{Mn}^{2+}]}{5[\text{Mn}^{2+}][\text{MnO}_4^-][\text{H}^+]^8}$$

$$E_{\text{eq}} = \frac{E_{\text{Fe}^{3+}/\text{Fe}^{2+}}^{\circ} + 5E_{\text{MnO}_4^-/\text{Mn}^{2+}}^{\circ}}{6} - \frac{0.05916}{6} \log \frac{1}{[\text{H}^+]^8}$$

$$E_{\text{eq}} = \frac{E_{\text{Fe}^{3+}/\text{Fe}^{2+}}^{\circ} + 5E_{\text{MnO}_4^-/\text{Mn}^{2+}}^{\circ}}{6} + \frac{0.05916 \times 8}{6} \log[\text{H}^+]$$

$$E_{\text{eq}} = \frac{E_{\text{Fe}^{3+}/\text{Fe}^{2+}}^{\circ} + 5E_{\text{MnO}_4^-/\text{Mn}^{2+}}^{\circ}}{6} - 0.07888 \text{pH}$$

Our equation for the equivalence point has two terms. The first term is a weighted average of the titrand's and the titrant's standard state potentials, in which the weighting factors are the number of electrons in their respective half-reactions. The second term shows that E_{eq} for this titration

Instead of standard state potentials, you can use formal potentials.

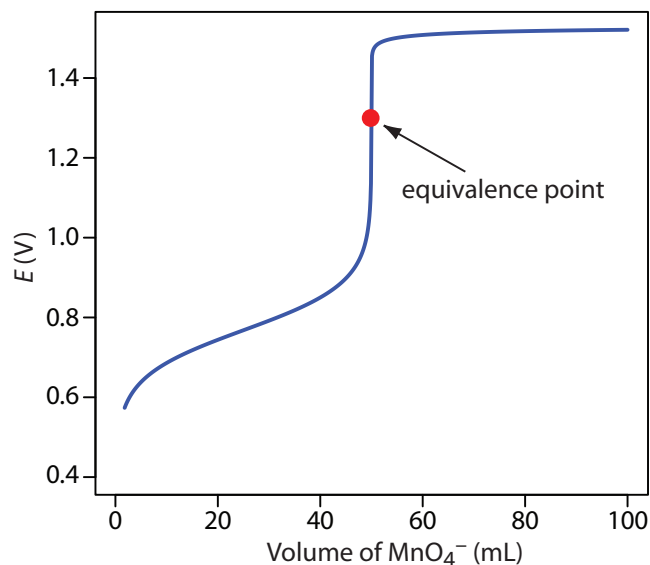


Figure 9.38 Titration curve for the titration of 50.0 mL of 0.100 M Fe^{2+} with 0.0200 M MnO_4^- at a fixed pH of 1 (using H_2SO_4). The equivalence point is shown by the red dot.

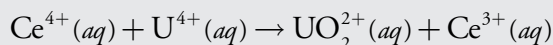
is pH-dependent. At a pH of 1 (in H_2SO_4), for example, the equivalence point has a potential of

$$E_{\text{eq}} = \frac{0.768 + 5 \times 1.51}{6} - 0.07888 \times 1 = 1.31 \text{ V}$$

Figure 9.38 shows a typical titration curve for titration of Fe^{2+} with MnO_4^- . Note that the titration's equivalence point is asymmetrical.

Practice Exercise 9.19

Derive a general equation for the equivalence point's potential for the titration of U^{4+} with Ce^{4+} . The unbalanced reaction is



What is the equivalence point's potential if the pH is 1?

Click [here](#) to review your answer to this exercise.

FINDING THE END POINT WITH AN INDICATOR

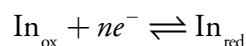
Three types of indicators are used to signal a redox titration's end point. The oxidized and reduced forms of some titrants, such as MnO_4^- , have different colors. A solution of MnO_4^- is intensely purple. In an acidic solution, however, permanganate's reduced form, Mn^{2+} , is nearly colorless. When using MnO_4^- as a titrant, the titrand's solution remains colorless until the equivalence point. The first drop of excess MnO_4^- produces a permanent tinge of purple, signaling the end point.

Some indicators form a colored compound with a specific oxidized or reduced form of the titrant or the titrand. Starch, for example, forms a dark blue complex with I_3^- . We can use this distinct color to signal the presence of excess I_3^- as a titrant—a change in color from colorless to blue—or the

completion of a reaction consuming I_3^- as the titrand—a change in color from blue to colorless. Another example of a specific indicator is thiocyanate, SCN^- , which forms a soluble red-colored complex of $Fe(SCN)^{2+}$ with Fe^{3+} .

The most important class of indicators are substances that do not participate in the redox titration, but whose oxidized and reduced forms differ in color. When we add a **REDOX INDICATOR** to the titrand, the indicator imparts a color that depends on the solution's potential. As the solution's potential changes with the addition of titrant, the indicator changes oxidation state and changes color, signaling the end point.

To understand the relationship between potential and an indicator's color, consider its reduction half-reaction

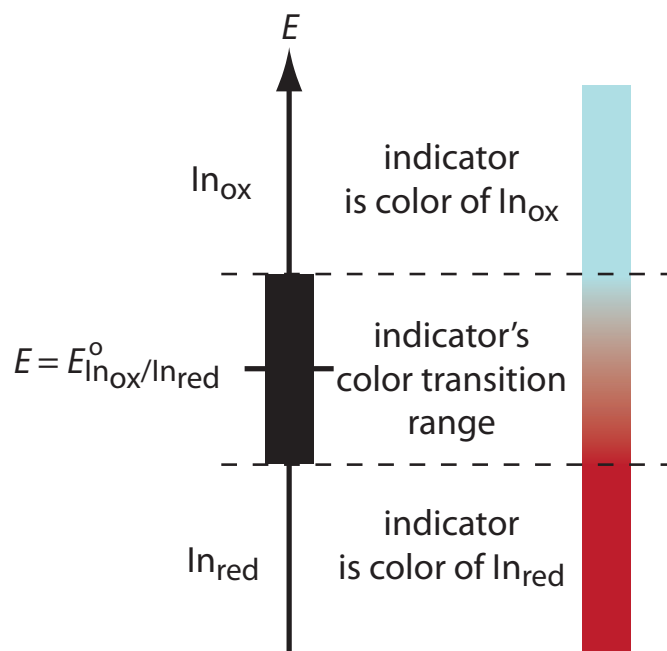


where In_{ox} and In_{red} are, respectively, the indicator's oxidized and reduced forms. The Nernst equation for this half-reaction is

$$E = E_{In_{ox}/In_{red}}^{\circ} - \frac{0.05916}{n} \log \frac{[In_{red}]}{[In_{ox}]}$$

As shown in Figure 9.39, if we assume that the indicator's color changes from that of In_{ox} to that of In_{red} when the ratio $[In_{red}]/[In_{ox}]$ changes from 0.1 to 10, then the end point occurs when the solution's potential is within the range

$$E = E_{In_{ox}/In_{red}}^{\circ} \pm \frac{0.05916}{n}$$



For simplicity, In_{ox} and In_{red} are shown without specific charges. Because there is a change in oxidation state, In_{ox} and In_{red} cannot both be neutral.

This is the same approach we took in considering acid–base indicators and complexation indicators.

Figure 9.39 Diagram showing the relationship between E and an indicator's color. The ladder diagram defines potentials where In_{red} and In_{ox} are the predominate species. The indicator changes color when E is within the range

$$E = E_{In_{ox}/In_{red}}^{\circ} \pm \frac{0.05916}{n}$$

Table 9.16 Selected Examples of Redox Indicators

Indicator	Color of In _{ox}	Color of In _{red}	$E^{\circ}_{\text{In}_{\text{ox}}/\text{In}_{\text{red}}}$
indigo tetrasulfate	blue	colorless	0.36
methylene blue	blue	colorless	0.53
diphenylamine	violet	colorless	0.75
diphenylamine sulfonic acid	red-violet	colorless	0.85
tris(2,2'-bipyridine)iron	pale blue	red	1.120
ferroin	pale blue	red	1.147
tris(5-nitro-1,10-phenanthroline)iron	pale blue	red-violet	1.25

A partial list of redox indicators is shown in Table 9.16. Examples of appropriate and inappropriate indicators for the titration of Fe^{2+} with Ce^{4+} are shown in Figure 9.40.

OTHER METHODS FOR FINDING THE END POINT

Another method for locating a redox titration's end point is a potentiometric titration in which we monitor the change in potential while adding the titrant to the titrand. The end point is found by visually examining the titration curve. The simplest experimental design for a potentiometric titration consists of a Pt indicator electrode whose potential is governed by the titrand's or titrant's redox half-reaction, and a reference electrode that has a fixed potential. A further discussion of potentiometry is found in Chapter 11. Other methods for locating the titration's end point include thermometric titrations and spectrophotometric titrations.

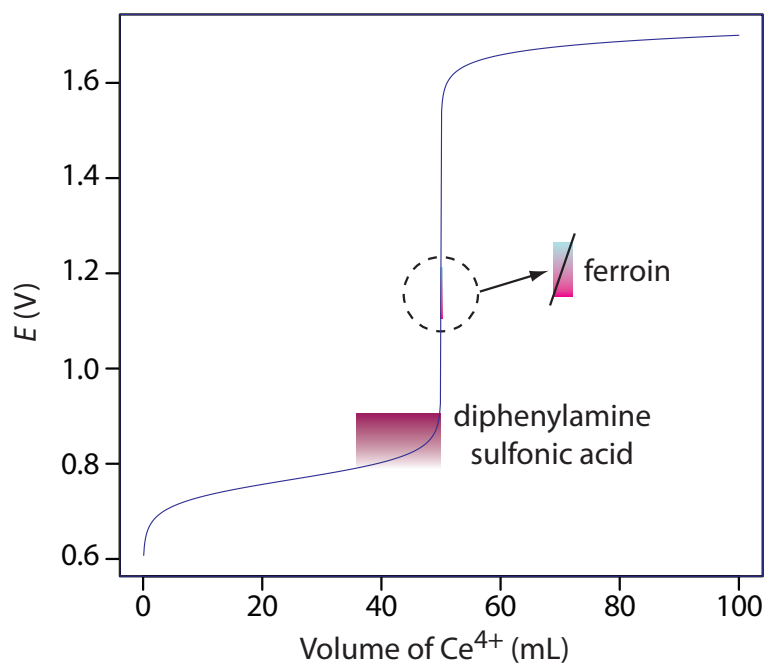


Figure 9.40 Titration curve for the titration of 50.0 mL of 0.100 M Fe^{2+} with 0.100 M Ce^{4+} . The end point transitions for the indicators diphenylamine sulfonic acid and ferroin are superimposed on the titration curve. Because the transition for ferroin is too small to see on the scale of the x-axis—it requires only 1–2 drops of titrant—the color change is expanded to the right.

The best way to appreciate the theoretical and practical details discussed in this section is to carefully examine a typical redox titrimetric method. Although each method is unique, the following description of the determination of the total chlorine residual in water provides an instructive example of a typical procedure. The description here is based on Method 4500-Cl B as published in *Standard Methods for the Examination of Water and Wastewater*, 20th Ed., American Public Health Association: Washington, D. C., 1998.

Representative Method 9.3

Determination of Total Chlorine Residual

DESCRIPTION OF THE METHOD

The chlorination of public water supplies produces several chlorine-containing species, the combined concentration of which is called the total chlorine residual. Chlorine may be present in a variety of states, including the free residual chlorine, consisting of Cl_2 , HOCl and OCl^- , and the combined chlorine residual, consisting of NH_2Cl , NHCl_2 , and NCl_3 . The total chlorine residual is determined by using the oxidizing power of chlorine to convert I^- to I_3^- . The amount of I_3^- formed is then determined by titrating with $\text{Na}_2\text{S}_2\text{O}_3$ using starch as an indicator. Regardless of its form, the total chlorine residual is reported as if Cl_2 is the only source of chlorine, and is reported as mg Cl/L.

PROCEDURE

Select a volume of sample requiring less than 20 mL of $\text{Na}_2\text{S}_2\text{O}_3$ to reach the end point. Using glacial acetic acid, acidify the sample to a pH of 3–4, and add about 1 gram of KI. Titrate with $\text{Na}_2\text{S}_2\text{O}_3$ until the yellow color of I_3^- begins to disappear. Add 1 mL of a starch indicator solution and continue titrating until the blue color of the starch– I_3^- complex disappears (Figure 9.41). Use a blank titration to correct the volume of titrant needed to reach the end point for reagent impurities.

QUESTIONS


1. Is this an example of a direct or an indirect analysis?

This is an indirect analysis because the chlorine-containing species do not react with the titrant. Instead, the total chlorine residual oxidizes I^- to I_3^- , and the amount of I_3^- is determined by titrating with $\text{Na}_2\text{S}_2\text{O}_3$.

2. Why does the procedure rely on an indirect analysis instead of directly titrating the chlorine-containing species using KI as a titrant?

Because the total chlorine residual consists of six different species, a titration with I^- does not have a single, well-defined equivalence

Figure 9.41 Endpoint for the determination of the total chlorine residual. (a) Acidifying the sample and adding KI forms a brown solution of I_3^- . (b) Titrating with $\text{Na}_2\text{S}_2\text{O}_3$ converts I_3^- to I^- with the solution fading to a pale yellow color as we approach the end point. (c) Adding starch forms the deep purple starch– I_3^- complex. (d) As the titration continues, the end point is a sharp transition from a purple to a colorless solution. The change in color from (c) to (d) typically takes 1–2 drops of titrant.



point. By converting the chlorine residual to an equivalent amount of I_3^- , the indirect titration with $Na_2S_2O_3$ has a single, useful equivalence point.

Even if the total chlorine residual is from a single species, such as HOCl, a direct titration with KI is impractical. Because the product of the titration, I_3^- , imparts a yellow color, the titrand's color would change with each addition of titrant, making it difficult to find a suitable indicator.

- Both oxidizing and reducing agents can interfere with this analysis. Explain the effect of each type of interferent has on the total chlorine residual.

An interferent that is an oxidizing agent converts additional I^- to I_3^- . Because this extra I_3^- requires an additional volume of $Na_2S_2O_3$ to reach the end point, we overestimate the total chlorine residual. If the interferent is a reducing agent, it reduces back to I^- some of the I_3^- produced by the reaction between the total chlorine residual and iodide. As a result, we underestimate the total chlorine residual.

9D.3 Quantitative Applications

Although many quantitative applications of redox titrimetry have been replaced by other analytical methods, a few important applications continue to be relevant. In this section we review the general application of redox titrimetry with an emphasis on environmental, pharmaceutical, and industrial applications. We begin, however, with a brief discussion of selecting and characterizing redox titrants, and methods for controlling the titrand's oxidation state.

ADJUSTING THE TITRAND'S OXIDATION STATE

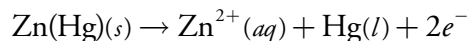
If a redox titration is to be used in a quantitative analysis, the titrand must initially be present in a single oxidation state. For example, iron can be determined by a redox titration in which Ce^{4+} oxidizes Fe^{2+} to Fe^{3+} . Depending on the sample and the method of sample preparation, iron may initially be present in both the +2 and +3 oxidation states. Before titrating, we must reduce any Fe^{3+} to Fe^{2+} . This type of pretreatment can be accomplished using an auxiliary reducing agent or oxidizing agent.

A metal that is easy to oxidize—such as Zn, Al, and Ag—can serve as an **AUXILIARY REDUCING AGENT**. The metal, as a coiled wire or powder, is added to the sample where it reduces the titrand. Because any unreacted auxiliary reducing agent will react with the titrant, it must be removed before beginning the titration. This can be accomplished by simply removing the coiled wire, or by filtering.

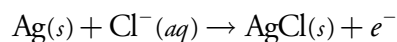
An alternative method for using an auxiliary reducing agent is to immobilize it in a column. To prepare a reduction column an aqueous slurry

of the finally divided metal is packed in a glass tube equipped with a porous plug at the bottom. The sample is placed at the top of the column and moves through the column under the influence of gravity or vacuum suction. The length of the reduction column and the flow rate are selected to ensure the analyte's complete reduction.

Two common reduction columns are used. In the **JONES REDUCTOR** the column is filled with amalgamated zinc, Zn(Hg), prepared by briefly placing Zn granules in a solution of HgCl₂. Oxidation of zinc



provides the electrons for reducing the titrand. In the **WALDEN REDUCTOR** the column is filled with granular Ag metal. The solution containing the titrand is acidified with HCl and passed through the column where the oxidation of silver



provides the necessary electrons for reducing the titrand. Table 9.17 provides a summary of several applications of reduction columns.

Several reagents are commonly used as **AUXILIARY OXIDIZING AGENTS**, including ammonium peroxydisulfate, (NH₄)₂S₂O₈, and hydrogen peroxide, H₂O₂. Peroxydisulfate is a powerful oxidizing agent

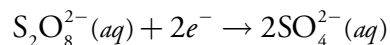
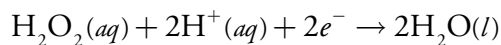


Table 9.17 Examples of Reactions For Reducing a Titrand's Oxidation State Using a Reduction Column

Oxidized Titrand	Walden Reductor	Jones Reductor
Cr ³⁺	—	$\text{Cr}^{3+}(aq) + e^{-} \rightarrow \text{Cr}^{2+}(aq)$
Cu ²⁺	$\text{Cu}^{2+}(aq) + e^{-} \rightarrow \text{Cu}^{+}(aq)$	$\text{Cu}^{2+}(aq) + 2e^{-} \rightarrow \text{Cu}(s)$
Fe ³⁺	$\text{Fe}^{3+}(aq) + e^{-} \rightarrow \text{Fe}^{2+}(aq)$	$\text{Fe}^{3+}(aq) + e^{-} \rightarrow \text{Fe}^{2+}(aq)$
TiO ²⁺	—	$\text{TiO}^{2+}(aq) + 2\text{H}^{+}(aq) + e^{-} \rightarrow \text{Ti}^{3+}(aq) + \text{H}_2\text{O}(l)$
MoO ₂ ²⁺	$\text{MoO}_2^{2+}(aq) + e^{-} \rightarrow \text{MoO}_2^{+}(aq)$	$\text{MoO}_2^{2+}(aq) + 4\text{H}^{+}(aq) + 3e^{-} \rightarrow \text{Mo}^{3+}(aq) + 2\text{H}_2\text{O}(l)$
VO ₂ ⁺	$\text{VO}_2^{+}(aq) + 2\text{H}^{+}(aq) + e^{-} \rightarrow \text{VO}^{2+}(aq) + \text{H}_2\text{O}(l)$	$\text{VO}_2^{+}(aq) + 4\text{H}^{+}(aq) + 3e^{-} \rightarrow \text{V}^{2+}(aq) + 2\text{H}_2\text{O}(l)$

capable of oxidizing Mn^{2+} to MnO_4^- , Cr^{3+} to $\text{Cr}_2\text{O}_7^{2-}$, and Ce^{3+} to Ce^{4+} . Excess peroxydisulfate is easily destroyed by briefly boiling the solution. The reduction of hydrogen peroxide in acidic solution

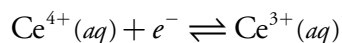
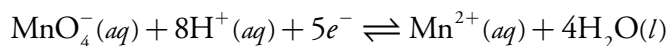


provides another method for oxidizing a titrand. Excess H_2O_2 is destroyed by briefly boiling the solution.

SELECTING AND STANDARDIZING A TITRANT

If it is to be used quantitatively, the titrant's concentration must remain stable during the analysis. Because a titrant in a reduced state is susceptible to air oxidation, most redox titrations use an oxidizing agent as the titrant. There are several common oxidizing titrants, including MnO_4^- , Ce^{4+} , $\text{Cr}_2\text{O}_7^{2-}$, and I_3^- . Which titrant is used often depends on how easy it is to oxidize the titrand. A titrand that is a weak reducing agent needs a strong oxidizing titrant if the titration reaction is to have a suitable end point.

The two strongest oxidizing titrants are MnO_4^- and Ce^{4+} , for which the reduction half-reactions are



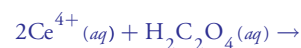
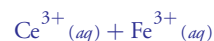
Solutions of Ce^{4+} usually are prepared from the primary standard cerium ammonium nitrate, $\text{Ce}(\text{NO}_3)_4 \cdot 2\text{NH}_4\text{NO}_3$, in 1 M H_2SO_4 . When prepared using a reagent grade material, such as $\text{Ce}(\text{OH})_4$, the solution is standardized against a primary standard reducing agent such as $\text{Na}_2\text{C}_2\text{O}_4$ or Fe^{2+} (prepared using iron wire) using ferroin as an indicator. Despite its availability as a primary standard and its ease of preparation, Ce^{4+} is not as frequently used as MnO_4^- because it is more expensive.

Solutions of MnO_4^- are prepared from KMnO_4 , which is not available as a primary standard. Aqueous solutions of permanganate are thermodynamically unstable due to its ability to oxidize water.

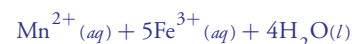
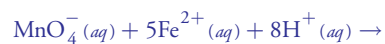


This reaction is catalyzed by the presence of MnO_2 , Mn^{2+} , heat, light, and the presence of acids and bases. A moderately stable solution of permanganate can be prepared by boiling it for an hour and filtering through a sintered glass filter to remove any solid MnO_2 that precipitates. Standardization is accomplished against a primary standard reducing agent such as $\text{Na}_2\text{C}_2\text{O}_4$ or Fe^{2+} (prepared using iron wire), with the pink color of excess MnO_4^- signaling the end point. A solution of MnO_4^- prepared in this fashion is stable for 1–2 weeks, although the standardization should be rechecked periodically.

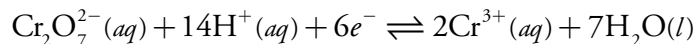
The standardization reactions are



The standardization reactions are

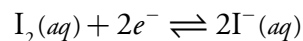


Potassium dichromate is a relatively strong oxidizing agent whose principal advantages are its availability as a primary standard and the long term stability of its solutions. It is not, however, as strong an oxidizing agent as MnO_4^- or Ce^{4+} , which makes it less useful when the titrand is a weak reducing agent. Its reduction half-reaction is

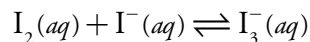


Although a solution of $\text{Cr}_2\text{O}_7^{2-}$ is orange and a solution of Cr^{3+} is green, neither color is intense enough to serve as a useful indicator. Diphenylamine sulfonic acid, whose oxidized form is red-violet and reduced form is colorless, gives a very distinct end point signal with $\text{Cr}_2\text{O}_7^{2-}$.

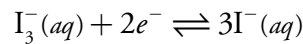
Iodine is another important oxidizing titrant. Because it is a weaker oxidizing agent than MnO_4^- , Ce^{4+} , and $\text{Cr}_2\text{O}_7^{2-}$, it is useful only when the titrand is a stronger reducing agent. This apparent limitation, however, makes I_2 a more selective titrant for the analysis of a strong reducing agent in the presence of a weaker reducing agent. The reduction half-reaction for I_2 is



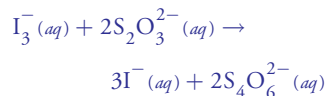
Because iodine is not very soluble in water, solutions are prepared by adding an excess of I^- . The complexation reaction



increases the solubility of I_2 by forming the more soluble triiodide ion, I_3^- . Even though iodine is present as I_3^- instead of I_2 , the number of electrons in the reduction half-reaction is unaffected.

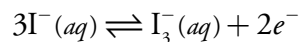


The standardization reaction is



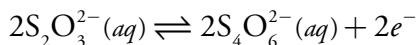
Solutions of I_3^- are normally standardized against $\text{Na}_2\text{S}_2\text{O}_3$ using starch as a specific indicator for I_3^- .

An oxidizing titrant such as MnO_4^- , Ce^{4+} , $\text{Cr}_2\text{O}_7^{2-}$, and I_3^- , is used when the titrand is in a reduced state. If the titrand is in an oxidized state, we can first reduce it with an auxiliary reducing agent and then complete the titration using an oxidizing titrant. Alternatively, we can titrate it using a reducing titrant. Iodide is a relatively strong reducing agent that could serve as a reducing titrant except that a solution of I^- is susceptible to the air-oxidation of I^- to I_3^- .

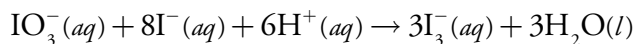


Instead, adding an excess of KI reduces the titrand, releasing a stoichiometric amount of I_3^- . The amount of I_3^- produced is then determined by a back titration using thiosulfate, $\text{S}_2\text{O}_3^{2-}$, as a reducing titrant.

A freshly prepared solution of KI is clear, but after a few days it may show a faint yellow coloring due to the presence of I_3^- .



Solutions of $\text{S}_2\text{O}_3^{2-}$ are prepared using $\text{Na}_2\text{S}_2\text{O}_3 \cdot 5\text{H}_2\text{O}$, and must be standardized before use. Standardization is accomplished by dissolving a carefully weighed portion of the primary standard KIO_3 in an acidic solution containing an excess of KI . The reaction between IO_3^- and I^-



liberates a stoichiometric amount of I_3^- . By titrating this I_3^- with thiosulfate, using starch as a visual indicator, we can determine the concentration of $\text{S}_2\text{O}_3^{2-}$ in the titrant.

Although thiosulfate is one of the few reducing titrants that is not readily oxidized by contact with air, it is subject to a slow decomposition to bisulfite and elemental sulfur. If used over a period of several weeks, a solution of thiosulfate should be restandardized periodically. Several forms of bacteria are able to metabolize thiosulfate, which also can lead to a change in its concentration. This problem can be minimized by adding a preservative such as HgI_2 to the solution.

Another useful reducing titrant is ferrous ammonium sulfate, $\text{Fe}(\text{NH}_4)_2(\text{SO}_4)_2 \cdot 6\text{H}_2\text{O}$, in which iron is present in the +2 oxidation state. A solution of Fe^{2+} is susceptible to air-oxidation, but when prepared in 0.5 M H_2SO_4 it remains stable for as long as a month. Periodic restandardization with $\text{K}_2\text{Cr}_2\text{O}_7$ is advisable. The titrant can be used to directly titrate the titrand by oxidizing Fe^{2+} to Fe^{3+} . Alternatively, ferrous ammonium sulfate is added to the titrand in excess and the quantity of Fe^{3+} produced determined by back titrating with a standard solution of Ce^{4+} or $\text{Cr}_2\text{O}_7^{2-}$.

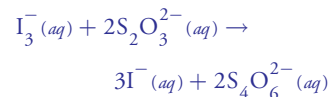
INORGANIC ANALYSIS

One of the most important applications of redox titrimetry is evaluating the chlorination of public water supplies. [Representative Method 9.3](#), for example, describes an approach for determining the total chlorine residual by using the oxidizing power of chlorine to oxidize I^- to I_3^- . The amount of I_3^- is determined by back titrating with $\text{S}_2\text{O}_3^{2-}$.

The efficiency of chlorination depends on the form of the chlorinating species. There are two contributions to the total chlorine residual—the free chlorine residual and the combined chlorine residual. The free chlorine residual includes forms of chlorine that are available for disinfecting the water supply. Examples of species contributing to the free chlorine residual include Cl_2 , HOCl and OCl^- . The combined chlorine residual includes those species in which chlorine is in its reduced form and, therefore, no longer capable of providing disinfection. Species contributing to the combined chlorine residual are NH_2Cl , NHCl_2 and NCl_3 .

When a sample of iodide-free chlorinated water is mixed with an excess of the indicator *N,N*-diethyl-*p*-phenylenediamine (DPD), the free chlorine

The standardization titration is



which is the same reaction used to standardize solutions of I_3^- . This approach to standardizing solutions of $\text{S}_2\text{O}_3^{2-}$ is similar to the determination of the total chlorine residual outlined in [Representative Method 9.3](#).

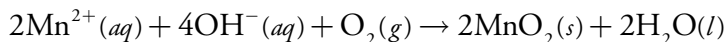
oxidizes a stoichiometric portion of DPD to its red-colored form. The oxidized DPD is then back titrated to its colorless form using ferrous ammonium sulfate as the titrant. The volume of titrant is proportional to the free residual chlorine.

Having determined the free chlorine residual in the water sample, a small amount of KI is added, catalyzing the reduction monochloramine, NH_2Cl , and oxidizing a portion of the DPD back to its red-colored form. Titrating the oxidized DPD with ferrous ammonium sulfate yields the amount of NH_2Cl in the sample. The amount of dichloramine and trichloramine are determined in a similar fashion.

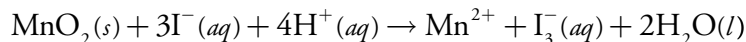
The methods described above for determining the total, free, or combined chlorine residual also are used to establish a water supply's chlorine demand. Chlorine demand is defined as the quantity of chlorine needed to completely react with any substance that can be oxidized by chlorine, while also maintaining the desired chlorine residual. It is determined by adding progressively greater amounts of chlorine to a set of samples drawn from the water supply and determining the total, free, or combined chlorine residual.

Another important example of redox titrimetry, which finds applications in both public health and environmental analyses is the determination of dissolved oxygen. In natural waters, such as lakes and rivers, the level of dissolved O_2 is important for two reasons: it is the most readily available oxidant for the biological oxidation of inorganic and organic pollutants; and it is necessary for the support of aquatic life. In a wastewater treatment plant dissolved O_2 is essential for the aerobic oxidation of waste materials. If the concentration of dissolved O_2 falls below a critical value, aerobic bacteria are replaced by anaerobic bacteria, and the oxidation of organic waste produces undesirable gases, such as CH_4 and H_2S .

One standard method for determining the dissolved O_2 content of natural waters and wastewaters is the Winkler method. A sample of water is collected without exposing it to the atmosphere, which might change the concentration of dissolved O_2 . The sample is first treated with a solution of MnSO_4 , and then with a solution of NaOH and KI . Under these alkaline conditions the dissolved oxygen oxidizes Mn^{2+} to MnO_2 .



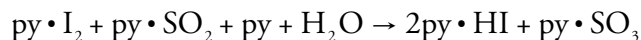
After the reaction is complete, the solution is acidified with H_2SO_4 . Under the now acidic conditions I^{-} is oxidized to I_3^{-} by MnO_2 .



The amount of I_3^{-} formed is determined by titrating with $\text{S}_2\text{O}_3^{2-}$ using starch as an indicator. The Winkler method is subject to a variety of interferences, and several modifications to the original procedure have been proposed. For example, NO_2^{-} interferes because it can reduce I_3^{-} to I^{-} un-

der acidic conditions. This interference is eliminated by adding sodium azide, NaN_3 , reducing NO_2^- to N_2 . Other reducing agents, such as Fe^{2+} , are eliminated by pretreating the sample with KMnO_4 , and destroying the excess permanganate with $\text{K}_2\text{C}_2\text{O}_4$.

Another important example of redox titrimetry is the determination of water in nonaqueous solvents. The titrant for this analysis is known as the Karl Fischer reagent and consists of a mixture of iodine, sulfur dioxide, pyridine, and methanol. Because the concentration of pyridine is sufficiently large, I_2 and SO_2 react with pyridine (py) to form the complexes $\text{py}\cdot\text{I}_2$ and $\text{py}\cdot\text{SO}_2$. When added to a sample containing water, I_2 is reduced to I^- and SO_2 is oxidized to SO_3 .



Methanol is included to prevent the further reaction of $\text{py}\cdot\text{SO}_3$ with water. The titration's end point is signaled when the solution changes from the product's yellow color to the brown color of the Karl Fischer reagent.

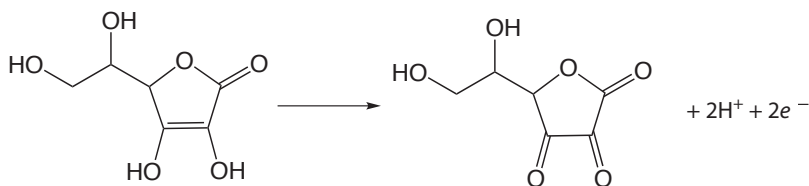
ORGANIC ANALYSIS

Redox titrimetry also is used for the analysis of organic analytes. One important example is the determination of the chemical oxygen demand (COD) of natural waters and wastewaters. The COD provides a measure of the quantity of oxygen necessary to completely oxidize all the organic matter in a sample to CO_2 and H_2O . Because no attempt is made to correct for organic matter that can not be decomposed biologically, or for slow decomposition kinetics, the COD always overestimates a sample's true oxygen demand. The determination of COD is particularly important in managing industrial wastewater treatment facilities where it is used to monitor the release of organic-rich wastes into municipal sewer systems or the environment.

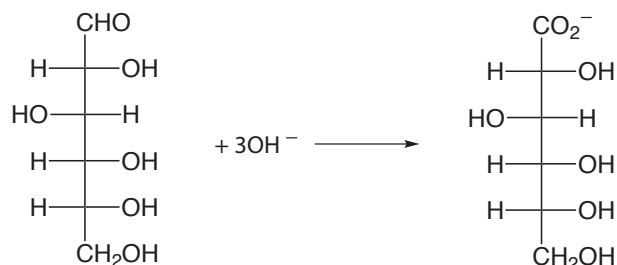
A sample's COD is determined by refluxing it in the presence of excess $\text{K}_2\text{Cr}_2\text{O}_7$, which serves as the oxidizing agent. The solution is acidified with H_2SO_4 using Ag_2SO_4 to catalyze the oxidation of low molecular weight fatty acids. Mercuric sulfate, HgSO_4 , is added to complex any chloride that is present, preventing the precipitation of the Ag^+ catalyst as AgCl . Under these conditions, the efficiency for oxidizing organic matter is 95–100%. After refluxing for two hours, the solution is cooled to room temperature and the excess $\text{Cr}_2\text{O}_7^{2-}$ is determined by back titrating using ferrous ammonium sulfate as the titrant and ferroin as the indicator. Because it is difficult to completely remove all traces of organic matter from the reagents, a blank titration must be performed. The difference in the amount of ferrous ammonium sulfate needed to titrate the sample and the blank is proportional to the COD.

Iodine has been used as an oxidizing titrant for a number of compounds of pharmaceutical interest. Earlier we noted that the reaction of $\text{S}_2\text{O}_3^{2-}$

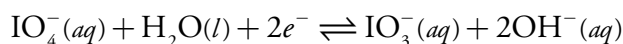
with I_3^- produces the tetrathionate ion, $S_4O_6^{2-}$. The tetrathionate ion is actually a dimer consisting of two thiosulfate ions connected through a disulfide ($-S-S-$) linkage. In the same fashion, I_3^- can be used to titrate mercaptans of the general formula RSH , forming the dimer $RSSR$ as a product. The amino acid cysteine also can be titrated with I_3^- . The product of this titration is cystine, which is a dimer of cysteine. Triiodide also can be used for the analysis of ascorbic acid (vitamin C) by oxidizing the enediol functional group to an alpha diketone



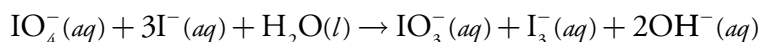
and for the analysis of reducing sugars, such as glucose, by oxidizing the aldehyde functional group to a carboxylate ion in a basic solution.



An organic compound containing a hydroxyl, a carbonyl, or an amine functional group adjacent to an hydroxyl or a carbonyl group can be oxidized using metaperiodate, IO_4^- , as an oxidizing titrant.



A two-electron oxidation cleaves the C–C bond between the two functional groups, with hydroxyl groups being oxidized to aldehydes or ketones, carbonyl functional groups being oxidized to carboxylic acids, and amines being oxidized to an aldehyde and an amine (ammonia if a primary amine). The analysis is conducted by adding a known excess of IO_4^- to the solution containing the analyte, and allowing the oxidation to take place for approximately one hour at room temperature. When the oxidation is complete, an excess of KI is added, which converts any unreacted IO_4^- to IO_3^- and I_3^- .



The I_3^- is then determined by titrating with $S_2O_3^{2-}$ using starch as an indicator.

QUANTITATIVE CALCULATIONS

The quantitative relationship between the titrand and the titrant is determined by the stoichiometry of the titration reaction. If you are unsure of the balanced reaction, you can deduce the stoichiometry by remembering that the electrons in a redox reaction must be conserved.

Example 9.11

The amount of Fe in a 0.4891-g sample of an ore was determined by titrating with $\text{K}_2\text{Cr}_2\text{O}_7$. After dissolving the sample in HCl, the iron was brought into the +2 oxidation state using a Jones reductor. Titration to the diphenylamine sulfonic acid end point required 36.92 mL of 0.02153 M $\text{K}_2\text{Cr}_2\text{O}_7$. Report the ore's iron content as %w/w Fe_2O_3 .

SOLUTION

Because we have not been provided with the titration reaction, let's use a conservation of electrons to deduce the stoichiometry. During the titration the analyte is oxidized from Fe^{2+} to Fe^{3+} , and the titrant is reduced from $\text{Cr}_2\text{O}_7^{2-}$ to Cr^{3+} . Oxidizing Fe^{2+} to Fe^{3+} requires only a single electron. Reducing $\text{Cr}_2\text{O}_7^{2-}$, in which each chromium is in the +6 oxidation state, to Cr^{3+} requires three electrons per chromium, for a total of six electrons. A conservation of electrons for the titration, therefore, requires that each mole of $\text{K}_2\text{Cr}_2\text{O}_7$ reacts with six moles of Fe^{2+} .

The moles of $\text{K}_2\text{Cr}_2\text{O}_7$ used in reaching the end point is

$$\begin{aligned} (0.02153 \text{ M } \text{K}_2\text{Cr}_2\text{O}_7) \times (0.03692 \text{ L } \text{K}_2\text{Cr}_2\text{O}_7) \\ = 7.949 \times 10^{-4} \text{ mol } \text{K}_2\text{Cr}_2\text{O}_7 \end{aligned}$$

which means that the sample contains

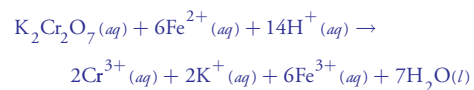
$$7.949 \times 10^{-4} \text{ mol } \text{K}_2\text{Cr}_2\text{O}_7 \times \frac{6 \text{ mol } \text{Fe}^{2+}}{\text{mol } \text{K}_2\text{Cr}_2\text{O}_7} = 4.769 \times 10^{-3} \text{ mol } \text{Fe}^{2+}$$

Thus, the %w/w Fe_2O_3 in the sample of ore is

$$\begin{aligned} 4.769 \times 10^{-3} \text{ mol } \text{Fe}^{2+} \times \frac{1 \text{ mol } \text{Fe}_2\text{O}_3}{2 \text{ mol } \text{Fe}^{2+}} \times \\ \frac{159.69 \text{ g } \text{Fe}_2\text{O}_3}{\text{mol } \text{Fe}_2\text{O}_3} = 0.3808 \text{ g } \text{Fe}_2\text{O}_3 \end{aligned}$$

$$\frac{0.3808 \text{ g } \text{Fe}_2\text{O}_3}{0.4891 \text{ g sample}} \times 100 = 77.86\% \text{ w/w } \text{Fe}_2\text{O}_3$$

Although we can deduce the stoichiometry between the titrant and the titrand without balancing the titration reaction, the balanced reaction



does provide useful information. For example, the presence of H^+ reminds us that the reaction's feasibility is pH-dependent.

Practice Exercise 9.20

The purity of a sample of sodium oxalate, $\text{Na}_2\text{C}_2\text{O}_4$, is determined by titrating with a standard solution of KMnO_4 . If a 0.5116-g sample requires 35.62 mL of 0.0400 M KMnO_4 to reach the titration's end point, what is the %w/w $\text{Na}_2\text{C}_2\text{O}_4$ in the sample.

Click [here](#) to review your answer to this exercise.

As shown in the following two examples, we can easily extend this approach to an analysis that requires an indirect analysis or a back titration.

Example 9.12

A 25.00-mL sample of a liquid bleach was diluted to 1000 mL in a volumetric flask. A 25-mL portion of the diluted sample was transferred by pipet into an Erlenmeyer flask containing an excess of KI, reducing the OCl^- to Cl^- , and producing I_3^- . The liberated I_3^- was determined by titrating with 0.09892 M $\text{Na}_2\text{S}_2\text{O}_3$, requiring 8.96 mL to reach the starch indicator end point. Report the %w/v NaOCl in the sample of bleach.

SOLUTION

To determine the stoichiometry between the analyte, NaOCl , and the titrant, $\text{Na}_2\text{S}_2\text{O}_3$, we need to consider both the reaction between OCl^- and I^- , and the titration of I_3^- with $\text{Na}_2\text{S}_2\text{O}_3$.

First, in reducing OCl^- to Cl^- , the oxidation state of chlorine changes from +1 to -1, requiring two electrons. The oxidation of three I^- to form I_3^- releases two electrons as the oxidation state of each iodine changes from -1 in I^- to $-1/3$ in I_3^- . A conservation of electrons, therefore, requires that each mole of OCl^- produces one mole of I_3^- .

Second, in the titration reaction, I_3^- is reduced to I^- and $\text{S}_2\text{O}_3^{2-}$ is oxidized to $\text{S}_4\text{O}_6^{2-}$. Reducing I_3^- to 3I^- requires two electrons as each iodine changes from an oxidation state of $-1/3$ to -1. In oxidizing $\text{S}_2\text{O}_3^{2-}$ to $\text{S}_4\text{O}_6^{2-}$, each sulfur changes its oxidation state from +2 to +2.5, releasing one electron for each $\text{S}_2\text{O}_3^{2-}$. A conservation of electrons, therefore, requires that each mole of I_3^- reacts with two moles of $\text{S}_2\text{O}_3^{2-}$.

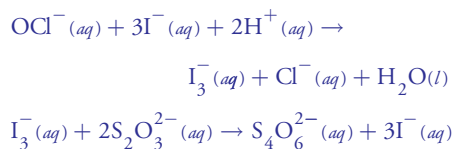
Finally, because each mole of OCl^- produces one mole of I_3^- , and each mole of I_3^- reacts with two moles of $\text{S}_2\text{O}_3^{2-}$, we know that every mole of NaOCl in the sample ultimately results in the consumption of two moles of $\text{Na}_2\text{S}_2\text{O}_3$.

The moles of $\text{Na}_2\text{S}_2\text{O}_3$ used in reaching the titration's end point is

$$\begin{aligned} & (0.09892 \text{ M Na}_2\text{S}_2\text{O}_3) \times (0.00896 \text{ L Na}_2\text{S}_2\text{O}_3) \\ & = 8.86 \times 10^{-4} \text{ mol Na}_2\text{S}_2\text{O}_3 \end{aligned}$$

which means the sample contains

The balanced reactions for this analysis are:



$$8.86 \times 10^{-4} \text{ mol Na}_2\text{S}_2\text{O}_3 \times \frac{1 \text{ mol NaOCl}}{2 \text{ mol Na}_2\text{S}_2\text{O}_3} \times \frac{74.44 \text{ g NaOCl}}{\text{mol NaOCl}} = 0.03299 \text{ g NaOCl}$$

Thus, the %w/v NaOCl in the diluted sample is

$$\frac{0.03299 \text{ g NaOCl}}{25.00 \text{ mL}} \times 100 = 1.32\% \text{ w/v NaOCl}$$

Because the bleach was diluted by a factor of 40 (25 mL to 1000 mL), the concentration of NaOCl in the bleach is 5.28% (w/v).

Example 9.13

The amount of ascorbic acid, $\text{C}_6\text{H}_8\text{O}_6$, in orange juice was determined by oxidizing the ascorbic acid to dehydroascorbic acid, $\text{C}_6\text{H}_6\text{O}_6$, with a known amount of I_3^- , and back titrating the excess I_3^- with $\text{Na}_2\text{S}_2\text{O}_3$. A 5.00-mL sample of filtered orange juice was treated with 50.00 mL of 0.01023 M I_3^- . After the oxidation was complete, 13.82 mL of 0.07203 M $\text{Na}_2\text{S}_2\text{O}_3$ was needed to reach the starch indicator end point. Report the concentration ascorbic acid in mg/100 mL.

SOLUTION

For a back titration we need to determine the stoichiometry between I_3^- and the analyte, $\text{C}_6\text{H}_8\text{O}_6$, and between I_3^- and the titrant, $\text{Na}_2\text{S}_2\text{O}_3$. The later is easy because we know from [Example 9.12](#) that each mole of I_3^- reacts with two moles of $\text{Na}_2\text{S}_2\text{O}_3$.

In oxidizing ascorbic acid to dehydroascorbic acid, the oxidation state of carbon changes from $+2/3$ in $\text{C}_6\text{H}_8\text{O}_6$ to $+1$ in $\text{C}_6\text{H}_6\text{O}_6$. Each carbon releases $1/3$ of an electron, or a total of two electrons per ascorbic acid. As we learned in [Example 9.12](#), reducing I_3^- requires two electrons; thus, a conservation of electrons requires that each mole of ascorbic acid consumes one mole of I_3^- .

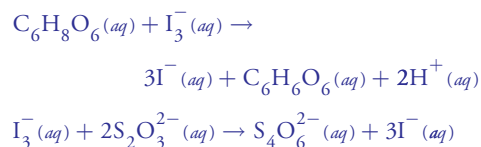
The total moles of I_3^- reacting with $\text{C}_6\text{H}_8\text{O}_6$ and with $\text{Na}_2\text{S}_2\text{O}_3$ is

$$(0.01023 \text{ M I}_3^-) \times (0.05000 \text{ L I}_3^-) = 5.115 \times 10^{-4} \text{ mol I}_3^-$$

The back titration consumes

$$0.01382 \text{ L Na}_2\text{S}_2\text{O}_3 \times \frac{0.07203 \text{ mol Na}_2\text{S}_2\text{O}_3}{\text{L Na}_2\text{S}_2\text{O}_3} \times \frac{1 \text{ mol I}_3^-}{2 \text{ mol Na}_2\text{S}_2\text{O}_3} = 4.977 \times 10^{-4} \text{ mol I}_3^-$$

The balanced reactions for this analysis are:



Subtracting the moles of I_3^- reacting with $\text{Na}_2\text{S}_2\text{O}_3$ from the total moles of I_3^- gives the moles reacting with ascorbic acid.

$$5.115 \times 10^{-4} \text{ mol I}_3^- - 4.977 \times 10^{-4} \text{ mol I}_3^- = 1.38 \times 10^{-5} \text{ mol I}_3^-$$

The grams of ascorbic acid in the 5.00-mL sample of orange juice is

$$1.38 \times 10^{-5} \text{ mol I}_3^- \times \frac{1 \text{ mol C}_6\text{H}_8\text{O}_6}{\text{mol I}_3^-} \times \frac{176.13 \text{ g C}_6\text{H}_8\text{O}_6}{\text{mol C}_6\text{H}_8\text{O}_6} = 2.43 \times 10^{-3} \text{ g C}_6\text{H}_8\text{O}_6$$

There are 2.43 mg of ascorbic acid in the 5.00-mL sample, or 48.6 mg per 100 mL of orange juice.

Practice Exercise 9.21

A quantitative analysis for ethanol, $\text{C}_2\text{H}_6\text{O}$, can be accomplished by a redox back titration. Ethanol is oxidized to acetic acid, $\text{C}_2\text{H}_4\text{O}_2$, using excess dichromate, $\text{Cr}_2\text{O}_7^{2-}$, which is reduced to Cr^{3+} . The excess dichromate is titrated with Fe^{2+} , giving Cr^{3+} and Fe^{3+} as products. In a typical analysis, a 5.00-mL sample of a brandy is diluted to 500 mL in a volumetric flask. A 10.00-mL sample is taken and the ethanol is removed by distillation and collected in 50.00 mL of an acidified solution of 0.0200 M $\text{K}_2\text{Cr}_2\text{O}_7$. A back titration of the unreacted $\text{Cr}_2\text{O}_7^{2-}$ requires 21.48 mL of 0.1014 M Fe^{2+} . Calculate the %w/v ethanol in the brandy.

Click [here](#) to review your answer to this exercise.

9D.4 Evaluation of Redox Titrimetry

The scale of operations, accuracy, precision, sensitivity, time, and cost of a redox titration are similar to those described earlier in this chapter for acid–base or a complexation titration. As with acid–base titrations, we can extend a redox titration to the analysis of a mixture of analytes if there is a significant difference in their oxidation or reduction potentials. Figure 9.42 shows an example of the titration curve for a mixture of Fe^{2+} and Sn^{2+} using Ce^{4+} as the titrant. A titration of a mixture of analytes is possible if their standard state potentials or formal potentials differ by at least 200 mV.

9E Precipitation Titrations

Thus far we have examined titrimetric methods based on acid–base, complexation, and redox reactions. A reaction in which the analyte and titrant form an insoluble precipitate also can serve as the basis for a titration. We call this type of titration a **PRECIPITATION TITRATION**.

One of the earliest precipitation titrations—developed at the end of the eighteenth century—was the analysis of K_2CO_3 and K_2SO_4 in potash.

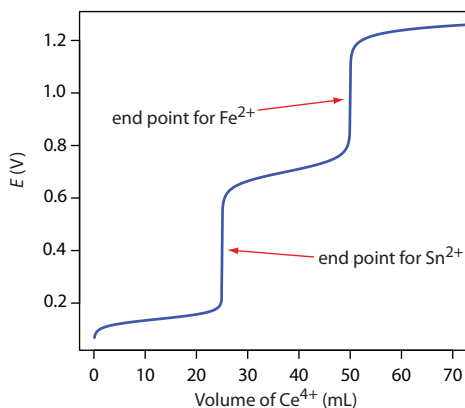


Figure 9.42 Titration curve for the titration of 50.0 mL of 0.0125 M Sn^{2+} and 0.0250 M Fe^{2+} with 0.050 M Ce^{4+} . Both the titrand and the titrant are 1M in HCl.

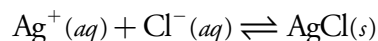
Calcium nitrate, $\text{Ca}(\text{NO}_3)_2$, was used as the titrant, forming a precipitate of CaCO_3 and CaSO_4 . The titration's end point was signaled by noting when the addition of titrant ceased to generate additional precipitate. The importance of precipitation titrimetry as an analytical method reached its zenith in the nineteenth century when several methods were developed for determining Ag^+ and halide ions.

9E.1 Titration Curves

A precipitation titration curve follows the change in either the titrand's or the titrant's concentration as a function of the titrant's volume. As we have done with other titrations, we first show how to calculate the titration curve and then demonstrate how we can quickly sketch a reasonable approximation of the titration curve.

CALCULATING THE TITRATION CURVE

Let's calculate the titration curve for the titration of 50.0 mL of 0.0500 M NaCl with 0.100 M AgNO_3 . The reaction in this case is



Because the reaction's equilibrium constant is so large

$$K = (K_{\text{sp}})^{-1} = (1.8 \times 10^{-10})^{-1} = 5.6 \times 10^9$$

we may assume that Ag^+ and Cl^- react completely.

By now you are familiar with our approach to calculating a titration curve. The first task is to calculate the volume of Ag^+ needed to reach the equivalence point. The stoichiometry of the reaction requires that

$$\begin{aligned} \text{moles Ag}^+ &= \text{moles Cl}^- \\ M_{\text{Ag}} \times V_{\text{Ag}} &= M_{\text{Cl}} \times V_{\text{Cl}} \end{aligned}$$

Solving for the volume of Ag^+

$$V_{\text{eq}} = V_{\text{Ag}} = \frac{M_{\text{Cl}} V_{\text{Cl}}}{M_{\text{Ag}}} = \frac{(0.0500 \text{ M})(50.0 \text{ mL})}{(0.100 \text{ M})} = 25.0 \text{ mL}$$

shows that we need 25.0 mL of Ag^+ to reach the equivalence point.

Before the equivalence point the titrand, Cl^- , is in excess. The concentration of unreacted Cl^- after adding 10.0 mL of Ag^+ , for example, is

$$\begin{aligned} [\text{Cl}^-] &= \frac{\text{initial moles Cl}^- - \text{moles Ag}^+ \text{ added}}{\text{total volume}} = \frac{M_{\text{Cl}} V_{\text{Cl}} - M_{\text{Ag}} V_{\text{Ag}}}{V_{\text{Cl}} + V_{\text{Ag}}} \\ &= \frac{(0.0500 \text{ M})(50.0 \text{ mL}) - (0.100 \text{ M})(10.0 \text{ mL})}{50.0 \text{ mL} + 10.0 \text{ mL}} = 2.50 \times 10^{-2} \text{ M} \end{aligned}$$

Step 1: Calculate the volume of AgNO_3 needed to reach the equivalence point.

Step 2: Calculate pCl before the equivalence point by determining the concentration of unreacted NaCl.

Table 9.18 Titration of 50.0 mL of 0.0500 M NaCl with 0.100 M AgNO₃

Volume of AgNO ₃ (mL)	pCl	Volume of AgNO ₃ (mL)	pCl
0.00	1.30	30.0	7.54
5.00	1.44	35.0	7.82
10.0	1.60	40.0	7.97
15.0	1.81	45.0	8.07
20.0	2.15	50.0	8.14
25.0	4.89		

which corresponds to a pCl of 1.60.

At the titration's equivalence point, we know that the concentrations of Ag⁺ and Cl⁻ are equal. To calculate the concentration of Cl⁻ we use the K_{sp} expression for AgCl; thus

$$K_{sp} = [\text{Ag}^+][\text{Cl}^-] = (x)(x) = 1.8 \times 10^{-10}$$

Solving for x gives $[\text{Cl}^-]$ as 1.3×10^{-5} M, or a pCl of 4.89.

After the equivalence point, the titrant is in excess. We first calculate the concentration of excess Ag⁺ and then use the K_{sp} expression to calculate the concentration of Cl⁻. For example, after adding 35.0 mL of titrant

$$\begin{aligned} [\text{Ag}^+] &= \frac{\text{moles Ag}^+ \text{ added} - \text{initial moles Cl}^-}{\text{total volume}} = \frac{M_{\text{Ag}} V_{\text{Ag}} - M_{\text{Cl}} V_{\text{Cl}}}{V_{\text{Cl}} + V_{\text{Ag}}} \\ &= \frac{(0.100 \text{ M})(35.0 \text{ mL}) - (0.0500 \text{ M})(50.0 \text{ mL})}{50.0 \text{ mL} + 35.0 \text{ mL}} = 1.18 \times 10^{-2} \text{ M} \end{aligned}$$

$$[\text{Cl}^-] = \frac{K_{sp}}{[\text{Ag}^+]} = \frac{1.8 \times 10^{-10}}{1.18 \times 10^{-2}} = 1.5 \times 10^{-8} \text{ M}$$

or a pCl of 7.81. Additional results for the titration curve are shown in Table 9.18 and Figure 9.43.

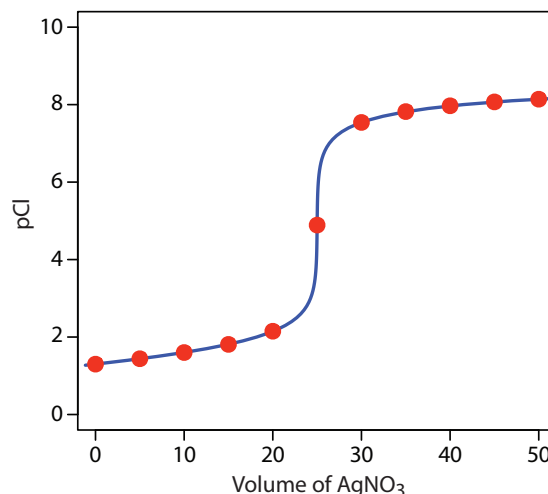


Figure 9.43 Titration curve for the titration of 50.0 mL of 0.0500 M NaCl with 0.100 M AgNO₃. The red points corresponds to the data in Table 9.18. The blue line shows the complete titration curve.

Step 3: Calculate pCl at the equivalence point using the K_{sp} for AgCl to calculate the concentration of Cl⁻.

Step 4: Calculate pCl after the equivalence point by first calculating the concentration of excess AgNO₃ and then calculating the concentration of Cl⁻ using the K_{sp} for AgCl.

Practice Exercise 9.22

When calculating a precipitation titration curve, you can choose to follow the change in the titrant's concentration or the change in the titrand's concentration. Calculate the titration curve for the titration of 50.0 mL of 0.0500 M AgNO_3 with 0.100 M NaCl as pAg versus V_{NaCl} , and as pCl versus V_{NaCl} .

Click [here](#) to review your answer to this exercise.

SKETCHING THE TITRATION CURVE

To evaluate the relationship between a titration's equivalence point and its end point we need to construct only a reasonable approximation of the exact titration curve. In this section we demonstrate a simple method for sketching a precipitation titration curve. Our goal is to sketch the titration curve quickly, using as few calculations as possible. Let's use the titration of 50.0 mL of 0.0500 M NaCl with 0.100 M AgNO_3 .

We begin by calculating the titration's equivalence point volume, which, as we determined earlier, is 25.0 mL. Next we draw our axes, placing pCl on the y -axis and the titrant's volume on the x -axis. To indicate the equivalence point's volume, we draw a vertical line corresponding to 25.0 mL of AgNO_3 . [Figure 9.44a](#) shows the result of this first step in our sketch.

Before the equivalence point, Cl^- is present in excess and pCl is determined by the concentration of unreacted Cl^- . As we learned earlier, the calculations are straightforward. [Figure 9.44b](#) shows pCl after adding 10.0 mL and 20.0 mL of AgNO_3 .

After the equivalence point, Ag^+ is in excess and the concentration of Cl^- is determined by the solubility of AgCl . Again, the calculations are straightforward. [Figure 4.43c](#) shows pCl after adding 30.0 mL and 40.0 mL of AgNO_3 .

Next, we draw a straight line through each pair of points, extending them through the vertical line representing the equivalence point's volume ([Figure 9.44d](#)). Finally, we complete our sketch by drawing a smooth curve that connects the three straight-line segments ([Figure 9.44e](#)). A comparison of our sketch to the exact titration curve ([Figure 9.44f](#)) shows that they are in close agreement.

9E.2 Selecting and Evaluating the End point

At the beginning of this section we noted that the first precipitation titration used the cessation of precipitation to signal the end point. At best, this is a cumbersome method for detecting a titration's end point. Before precipitation titrimetry became practical, better methods for identifying the end point were necessary.

This is the same example that we used in developing the calculations for a precipitation titration curve. You can review the results of that calculation in [Table 9.18](#) and [Figure 9.43](#).

See [Table 9.18](#) for the values.

See [Table 9.18](#) for the values.

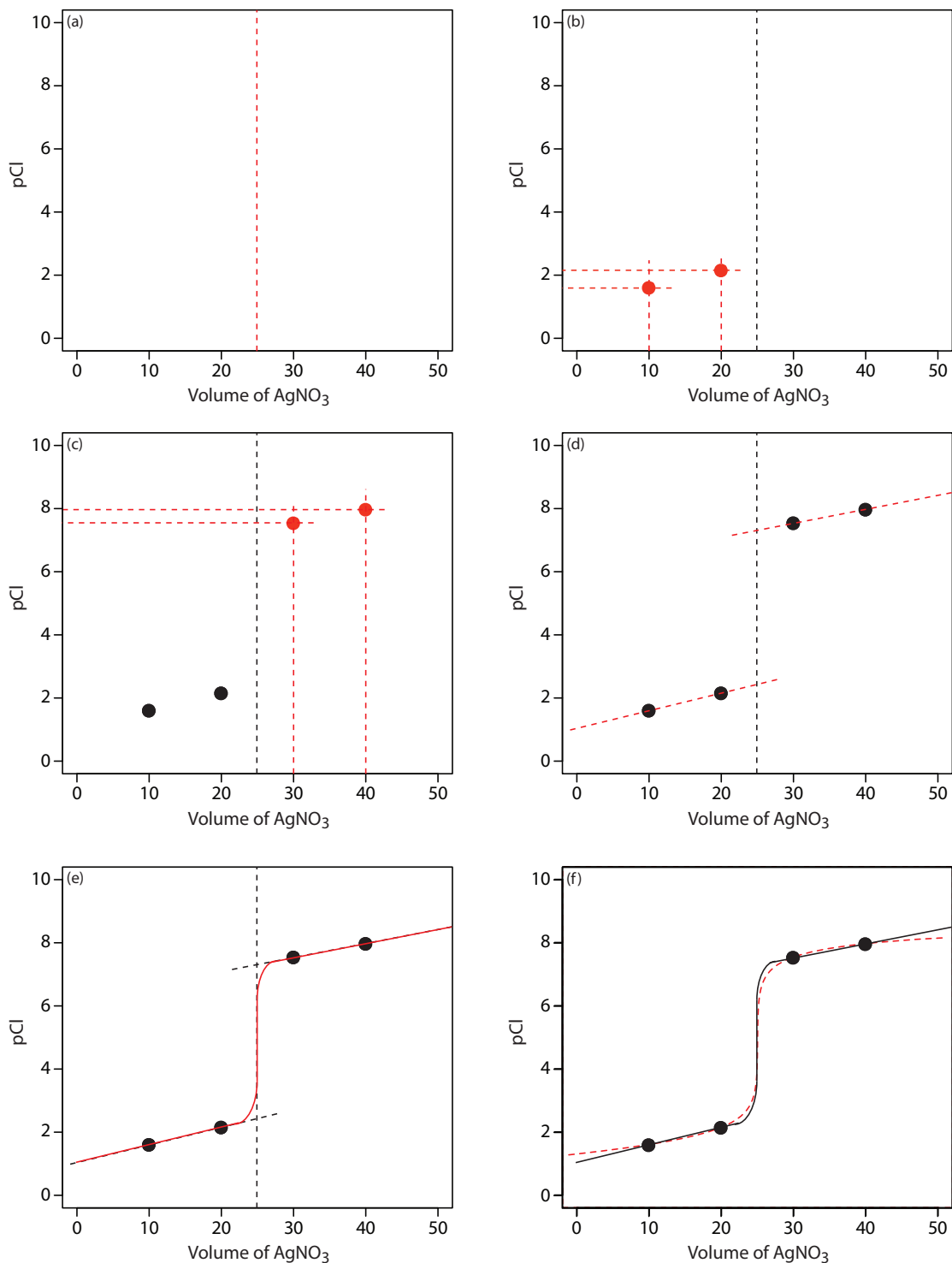


Figure 9.44 Illustrations showing the steps in sketching an approximate titration curve for the titration of 50.0 mL of 0.0500 M NaCl with 0.100 M AgNO₃: (a) locating the equivalence point volume; (b) plotting two points before the equivalence point; (c) plotting two points after the equivalence point; (d) preliminary approximation of titration curve using straight-lines; (e) final approximation of titration curve using a smooth curve; (f) comparison of approximate titration curve (solid black line) and exact titration curve (dashed red line). See the text for additional details. A better fit is possible if the two points before the equivalence point are further apart—for example, 0 mL and 20 mL—and the two points after the equivalence point are further apart.

FINDING THE END POINT WITH AN INDICATOR

There are three general types of indicators for precipitation titrations, each of which changes color at or near the titration's equivalence point. The first type of indicator is a species that forms a precipitate with the titrant. In the **MOHR METHOD** for Cl^- using Ag^+ as a titrant, for example, a small amount of K_2CrO_4 is added to the titrand's solution. The titration's end point is the formation of a reddish-brown precipitate of Ag_2CrO_4 .

Because CrO_4^{2-} imparts a yellow color to the solution, which might obscure the end point, only a small amount of K_2CrO_4 is added. As a result, the end point is always later than the equivalence point. To compensate for this positive determinate error, an analyte-free reagent blank is analyzed to determine the volume of titrant needed to affect a change in the indicator's color. Subtracting the end point for the reagent blank from the titrand's end point gives the titration's end point. Because CrO_4^{2-} is a weak base, the titrand's solution is made slightly alkaline. If the pH is too acidic, chromate is present as HCrO_4^- instead of CrO_4^{2-} , and the Ag_2CrO_4 end point is delayed. The pH also must be less than 10 to avoid the precipitation of silver hydroxide.

A second type of indicator uses a species that forms a colored complex with the titrant or the titrand. In the **VOLHARD METHOD** for Ag^+ using KSCN as the titrant, for example, a small amount of Fe^{3+} is added to the titrand's solution. The titration's end point is the formation of the reddish-colored $\text{Fe}(\text{SCN})^{2+}$ complex. The titration must be carried out in an acidic solution to prevent the precipitation of Fe^{3+} as $\text{Fe}(\text{OH})_3$.

The third type of end point uses a species that changes color when it adsorbs to the precipitate. In the **FAJANS METHOD** for Cl^- using Ag^+ as a titrant, for example, the anionic dye dichlorofluorescein is added to the titrand's solution. Before the end point, the precipitate of AgCl has a negative surface charge due to the adsorption of excess Cl^- . Because dichlorofluorescein also carries a negative charge, it is repelled by the precipitate and remains in solution where it has a greenish-yellow color. After the end point, the surface of the precipitate carries a positive surface charge due to the adsorption of excess Ag^+ . Dichlorofluorescein now adsorbs to the precipitate's surface where its color is pink. This change in the indicator's color signals the end point.

FINDING THE END POINT POTENTIOMETRICALLY

Another method for locating the end point is a potentiometric titration in which we monitor the change in the titrant's or the titrand's concentration using an ion-selective electrode. The end point is found by visually examining the titration curve. A further discussion of potentiometry is found in Chapter 11.

The Mohr method was first published in 1855 by Karl Friedrich Mohr.

The Volhard method was first published in 1874 by Jacob Volhard.

The Fajans method was first published in the 1920s by Kasimir Fajans.

Table 9.19 Representative Examples of Precipitation Titrations

Titrand	Titrant ^a	End Point ^b
AsO ₄ ³⁻	AgNO ₃ , KSCN	Volhard
Br ⁻	AgNO ₃	Mohr or Fajans
	AgNO ₃ , KSCN	Volhard
Cl ⁻	AgNO ₃	Mohr or Fajans
	AgNO ₃ , KSCN	Volhard*
CO ₃ ²⁻	AgNO ₃ , KSCN	Volhard*
C ₂ O ₄ ²⁻	AgNO ₃ , KSCN	Volhard*
CrO ₄ ²⁻	AgNO ₃ , KSCN	Volhard*
I ⁻	AgNO ₃	Fajans
	AgNO ₃ , KSCN	Volhard
PO ₄ ³⁻	AgNO ₃ , KSCN	Volhard*
S ²⁻	AgNO ₃ , KSCN	Volhard*
SCN ⁻	AgNO ₃ , KSCN	Volhard*

^a When two reagents are listed, the analysis is by a back titration. The first reagent is added in excess and the second reagent used to back titrate the excess.

^b For those Volhard methods identified with an asterisk (*) the precipitated silver salt must be removed before carrying out the back titration.

9E.3 Quantitative Applications

Although precipitation titrimetry is rarely listed as a standard method of analysis, it may still be useful as a secondary analytical method for verifying other analytical methods. Most precipitation titrations use Ag⁺ as either the titrand or the titration. A titration in which Ag⁺ is the titrant is called an **ARGENTOMETRIC TITRATION**. Table 9.19 provides a list of several typical precipitation titrations.

QUANTITATIVE CALCULATIONS

The quantitative relationship between the titrand and the titrant is determined by the stoichiometry of the titration reaction. If you are unsure of the balanced reaction, you can deduce the stoichiometry from the precipitate's formula. For example, in forming a precipitate of Ag₂CrO₄, each mole of CrO₄²⁻ reacts with two moles of Ag⁺.

Example 9.14

A mixture containing only KCl and NaBr is analyzed by the Mohr method. A 0.3172-g sample is dissolved in 50 mL of water and titrated to the Ag₂CrO₄ end point, requiring 36.85 mL of 0.1120 M AgNO₃. A blank titration requires 0.71 mL of titrant to reach the same end point. Report the %w/w KCl in the sample.

SOLUTION

To find the moles of titrant reacting with the sample, we first need to correct for the reagent blank; thus

$$V_{\text{Ag}} = 36.85 \text{ mL} - 0.71 \text{ mL} = 36.14 \text{ mL}$$

$$(0.1120 \text{ M AgNO}_3) \times (0.03614 \text{ L AgNO}_3) = 4.048 \times 10^{-3} \text{ mol AgNO}_3$$

Titration with AgNO_3 produces a precipitate of AgCl and AgBr . In forming the precipitates, each mole of KCl consumes one mole of AgNO_3 and each mole of NaBr consumes one mole of AgNO_3 ; thus

$$\text{moles KCl} + \text{moles NaBr} = 4.048 \times 10^{-3}$$

We are interested in finding the mass of KCl , so let's rewrite this equation in terms of mass. We know that

$$\begin{aligned} \text{moles KCl} &= \frac{\text{g KCl}}{74.551 \text{ g KCl/mol KCl}} \\ \text{moles NaBr} &= \frac{\text{g NaBr}}{102.89 \text{ g NaBr/mol NaBr}} \end{aligned}$$

which we substitute back into the previous equation

$$\frac{\text{g KCl}}{74.551 \text{ g KCl/mol KCl}} + \frac{\text{g NaBr}}{102.89 \text{ g NaBr/mol NaBr}} = 4.048 \times 10^{-3}$$

Because this equation has two unknowns— g KCl and g NaBr —we need another equation that includes both unknowns. A simple equation takes advantage of the fact that the sample contains only KCl and NaBr ; thus,

$$\text{g NaBr} = 0.3172 \text{ g} - \text{g KCl}$$

$$\frac{\text{g KCl}}{74.551 \text{ g KCl/mol KCl}} + \frac{0.3172 \text{ g} - \text{g KCl}}{102.89 \text{ g NaBr/mol NaBr}} = 4.048 \times 10^{-3}$$

$$1.341 \times 10^{-2}(\text{g KCl}) + 3.083 \times 10^{-3} - 9.719 \times 10^{-3}(\text{g KCl}) = 4.048 \times 10^{-3}$$

$$3.69 \times 10^{-3}(\text{g KCl}) = 9.65 \times 10^{-4}$$

The sample contains 0.262 g of KCl and the %w/w KCl in the sample is

$$\frac{0.262 \text{ g KCl}}{0.3172 \text{ g sample}} \times 100 = 82.6\% \text{ w/w KCl}$$

The analysis for I^- using the Volhard method requires a back titration. A typical calculation is shown in the following example.

Example 9.15

The %w/w I^- in a 0.6712-g sample was determined by a Volhard titration. After adding 50.00 mL of 0.05619 M AgNO_3 and allowing the precipitate to form, the remaining silver was back titrated with 0.05322 M KSCN, requiring 35.14 mL to reach the end point. Report the %w/w I^- in the sample.

SOLUTION

There are two precipitates in this analysis: AgNO_3 and I^- form a precipitate of AgI , and AgNO_3 and KSCN form a precipitate of AgSCN . Each mole of I^- consumes one mole of AgNO_3 , and each mole of KSCN consumes one mole of AgNO_3 ; thus

$$\text{moles AgNO}_3 = \text{moles I}^- + \text{moles KSCN}$$

Solving for the moles of I^- we find

$$\text{moles I}^- = \text{moles AgNO}_3 - \text{moles KSCN}$$

$$\text{moles I}^- = M_{\text{Ag}} \times V_{\text{Ag}} - M_{\text{KSCN}} \times V_{\text{KSCN}}$$

$$\begin{aligned} \text{moles I}^- &= (0.05619 \text{ M AgNO}_3) \times (0.05000 \text{ L AgNO}_3) - \\ &\quad (0.05322 \text{ M KSCN}) \times (0.03514 \text{ L KSCN}) \end{aligned}$$

that there are 9.393×10^{-4} moles of I^- in the sample. The %w/w I^- in the sample is

$$\frac{(9.393 \times 10^{-4} \text{ mol I}^-) \times 126.9 \text{ g I}^- / \text{mol I}^-}{0.6712 \text{ g sample}} \times 100 = 17.76\% \text{ w/w I}^-$$

Practice Exercise 9.23

A 1.963-g sample of an alloy is dissolved in HNO_3 and diluted to volume in a 100-mL volumetric flask. Titrating a 25.00-mL portion with 0.1078 M KSCN requires 27.19 mL to reach the end point. Calculate the %w/w Ag in the alloy.

Click [here](#) to review your answer to this exercise.

9E.4 Evaluation of Precipitation Titrimetry

The scale of operations, accuracy, precision, sensitivity, time, and cost of a precipitation titration is similar to those described elsewhere in this chapter for acid–base, complexation, and redox titrations. Precipitation titrations also can be extended to the analysis of mixtures provided that there is a sig-

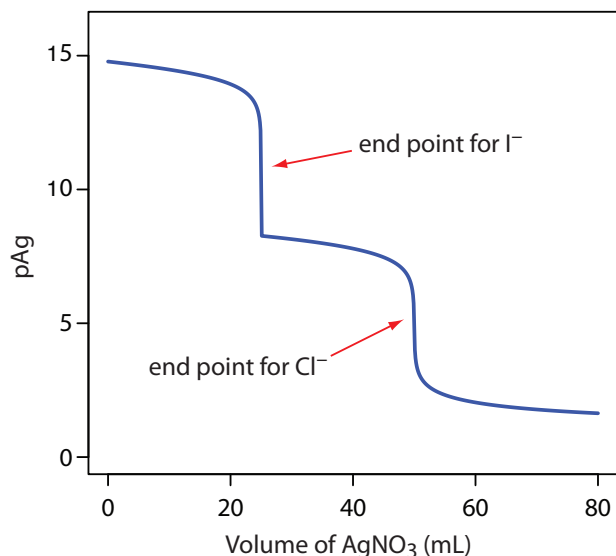


Figure 9.45 Titration curve for the titration of a 50.0 mL mixture of 0.0500 M I^- and 0.0500 M Cl^- using 0.100 M Ag^+ as a titrant. The red arrows show the end points. Note that the end point for I^- is earlier than the end point for Cl^- because AgI is less soluble than AgCl .

nificant difference in the solubilities of the precipitates. Figure 9.45 shows an example of a titration curve for a mixture of I^- and Cl^- using Ag^+ as a titrant.

9F Key Terms

acid–base titration	acidity	alkalinity
argentometric titration	asymmetric equivalence point	auxiliary complexing agent
auxiliary oxidizing agent	auxiliary reducing agent	back titration
buret	complexation titration	conditional formation constant
direct titration	displacement titration	end point
equivalence point	Fajans method	formal potential
Gran plot	indicator	Jones reductor
Kjeldahl analysis	leveling	metallochromic indicator
Mohr method	potentiometric titration	precipitation titration
redox indicator	redox titration	spectrophotometric titration
symmetric equivalence point	thermometric titration	titrand
titrant	titration curve	titration error
titrimetry	Volhard method	Walden reductor

As you review this chapter, try to define a key term in your own words. Check your answer by clicking on the key term, which will take you to the page where it was first introduced. Clicking on the **KEY TERM** there, will bring you back to this page so that you can continue with another key term.

9G Chapter Summary

In a titrimetric method of analysis, the volume of titrant reacting stoichiometrically with a titrand provides quantitative information about the amount of analyte in a sample. The volume of titrant corresponding to this stoichiometric reaction is called the equivalence point. Experimentally we determine the titration's end point using an indicator that changes color near the equivalence point. Alternatively, we can locate the end point by

continuously monitoring a property of the titrand's solution—absorbance, potential, and temperature are typical examples—that changes as the titration progresses. In either case, an accurate result requires that the end point closely match the equivalence point. Knowing the shape of a titration curve is critical to evaluating the feasibility of a titrimetric method.

Many titrations are direct, in which the analyte participates in the titration as the titrand or the titrant. Other titration strategies may be used when a direct reaction between the analyte and titrant is not feasible. In a back titration a reagent is added in excess to a solution containing the analyte. When the reaction between the reagent and the analyte is complete, the amount of excess reagent is determined by a titration. In a displacement titration the analyte displaces a reagent, usually from a complex, and the amount of displaced reagent is determined by an appropriate titration.

Titrimetric methods have been developed using acid–base, complexation, redox, and precipitation reactions. Acid–base titrations use a strong acid or a strong base as a titrant. The most common titrant for a complexation titration is EDTA. Because of their stability against air oxidation, most redox titrations use an oxidizing agent as a titrant. Titrations with reducing agents also are possible. Precipitation titrations often involve Ag^+ as either the analyte or titrant.

9H Problems

- Calculate or sketch titration curves for the following acid–base titrations.
 - 25.0 mL of 0.100 M NaOH with 0.0500 M HCl
 - 50.0 mL of 0.0500 M HCOOH with 0.100 M NaOH
 - 50.0 mL of 0.100 M NH_3 with 0.100 M HCl
 - 50.0 mL of 0.0500 M ethylenediamine with 0.100 M HCl
 - 50.0 mL of 0.0400 M citric acid with 0.120 M NaOH
 - 50.0 mL of 0.0400 M H_3PO_4 with 0.120 M NaOH
- Locate the equivalence point for each titration curve in problem 1. What is the stoichiometric relationship between the moles of acid and the moles of base at each of these equivalence points?
- Suggest an appropriate visual indicator for each of the titrations in problem 1.
- In sketching the titration curve for a weak acid we approximate the pH at 10% of the equivalence point volume as $\text{p}K_a - 1$, and the pH at 90% of the equivalence point volume as $\text{p}K_a + 1$. Show that these assumptions are reasonable.

Some of the problems that follow require one or more equilibrium constants or standard state potentials. For your convenience, here are hyperlinks to the appendices containing these constants

[Appendix 10: Solubility Products](#)

[Appendix 11: Acid Dissociation Constants](#)

[Appendix 12: Metal-Ligand Formation Constants](#)

[Appendix 13: Standard State Reduction Potentials](#)

5. Tartaric acid, $\text{H}_2\text{C}_4\text{H}_4\text{O}_6$, is a diprotic weak acid with a $\text{p}K_{\text{a}1}$ of 3.0 and a $\text{p}K_{\text{a}2}$ of 4.4. Suppose you have a sample of impure tartaric acid (purity > 80%), and that you plan to determine its purity by titrating with a solution of 0.1 M NaOH using an indicator to signal the end point. Describe how you will carry out the analysis, paying particular attention to how much sample to use, the desired pH range for the indicator, and how you will calculate the %w/w tartaric acid.
6. The following data for the titration of a monoprotic weak acid with a strong base were collected using an automatic titrator. Prepare normal, first derivative, second derivative, and Gran plot titration curves for this data, and locate the equivalence point for each.

Volume of NaOH (ml)	pH	Volume of NaOH (mL)	pH
0.25	3.0	49.95	7.8
0.86	3.2	49.97	8.0
1.63	3.4	49.98	8.2
2.72	3.6	49.99	8.4
4.29	3.8	50.00	8.7
6.54	4.0	50.01	9.1
9.67	4.2	50.02	9.4
13.79	4.4	50.04	9.6
18.83	4.6	50.06	9.8
24.47	4.8	50.10	10.0
30.15	5.0	50.16	10.2
35.33	5.2	50.25	10.4
39.62	5.4	50.40	10.6
42.91	5.6	50.63	10.8
45.28	5.8	51.01	11.0
46.91	6.0	51.61	11.2
48.01	6.2	52.58	11.4
48.72	6.4	54.15	11.6
49.19	6.6	56.73	11.8
49.48	6.8	61.11	12.0
49.67	7.0	68.83	12.2
49.79	7.2	83.54	12.4
49.78	7.4	116.14	12.6
49.92	7.6		

Some of the problems that follow require one or more equilibrium constants or standard state potentials. For your convenience, here are hyperlinks to the appendices containing these constants

[Appendix 10: Solubility Products](#)

[Appendix 11: Acid Dissociation Constants](#)

[Appendix 12: Metal-Ligand Formation Constants](#)

[Appendix 13: Standard State Reduction Potentials](#)

7. Schwartz published the following simulated data for the titration of a 1.02×10^{-4} M solution of a monoprotic weak acid ($\text{p}K_{\text{a}} = 8.16$) with

1.004×10^{-3} M NaOH.¹⁰ The simulation assumes that a 50-mL pipet is used to transfer a portion of the weak acid solution to the titration vessel. A calibration of the pipet shows that it delivers a volume of only 49.94 mL. Prepare normal, first derivative, second derivative, and Gran plot titration curves for this data, and determine the equivalence point for each. How do these equivalence points compare to the expected equivalence point? Comment on the utility of each titration curve for the analysis of very dilute solutions of very weak acids.

mL of NaOH	pH	mL of NaOH	pH
0.03	6.212	4.79	8.858
0.09	6.504	4.99	8.926
0.29	6.936	5.21	8.994
0.72	7.367	5.41	9.056
1.06	7.567	5.61	9.118
1.32	7.685	5.85	9.180
1.53	7.776	6.05	9.231
1.76	7.863	6.28	9.283
1.97	7.938	6.47	9.327
2.18	8.009	6.71	9.374
2.38	8.077	6.92	9.414
2.60	8.146	7.15	9.451
2.79	8.208	7.36	9.484
3.01	8.273	7.56	9.514
3.41	8.332	7.79	9.545
3.60	8.458	8.21	9.572
3.80	8.521	8.44	9.599
3.99	8.584	8.64	9.645
4.18	8.650	8.84	9.666
4.40	8.720	9.07	9.688
4.57	8.784	9.27	9.706

Some of the problems that follow require one or more equilibrium constants or standard state potentials. For your convenience, here are hyperlinks to the appendices containing these constants

[Appendix 10: Solubility Products](#)

[Appendix 11: Acid Dissociation Constants](#)

[Appendix 12: Metal-Ligand Formation Constants](#)

[Appendix 13: Standard State Reduction Potentials](#)

- Calculate or sketch the titration curve for a 50.0 mL solution of a 0.100 M monoprotic weak acid ($pK_a = 8$) with 0.1 M strong base in a nonaqueous solvent with $K_s = 10^{-20}$. You may assume that the change in solvent does not affect the weak acid's pK_a . Compare your titration curve to the titration curve when water is the solvent.
- The titration of a mixture of *p*-nitrophenol ($pK_a = 7.0$) and *m*-nitrophenol ($pK_a = 8.3$) can be followed spectrophotometrically. Neither acid absorbs at a wavelength of 545 nm, but their respective conjugate bases

¹⁰ Schwartz, L. M. *J. Chem. Educ.* **1992**, *69*, 879–883.

do absorb at this wavelength. The *m*-nitrophenolate ion has a greater absorbance than an equimolar solution of the *p*-nitrophenolate ion. Sketch the spectrophotometric titration curve for a 50.00-mL mixture consisting of 0.0500 M *p*-nitrophenol and 0.0500 M *m*-nitrophenol with 0.100 M NaOH. Compare your result to the expected potentiometric titration curves.

10. The quantitative analysis for aniline ($\text{C}_6\text{H}_5\text{NH}_2$, $K_b = 3.94 \times 10^{-10}$) can be carried out by an acid–base titration using glacial acetic acid as the solvent and HClO_4 as the titrant. A known volume of sample containing 3–4 mmol of aniline is transferred to a 250-mL Erlenmeyer flask and diluted to approximately 75 mL with glacial acetic acid. Two drops of a methyl violet indicator are added, and the solution is titrated with previously standardized 0.1000 M HClO_4 (prepared in glacial acetic acid using anhydrous HClO_4) until the end point is reached. Results are reported as parts per million aniline.
- Explain why this titration is conducted using glacial acetic acid as the solvent instead of water.
 - One problem with using glacial acetic acid as solvent is its relatively high coefficient of thermal expansion of 0.11%/°C. For example, 100.00 mL of glacial acetic acid at 25 °C occupies 100.22 mL at 27 °C. What is the effect on the reported concentration of aniline if the standardization of HClO_4 is conducted at a temperature that is lower than that for the analysis of the unknown?
 - The procedure calls for a sample containing 3–4 mmoles of aniline. Why is this requirement necessary?
11. Using a ladder diagram, explain why the presence of dissolved CO_2 leads to a determinate error for the standardization of NaOH if the end point's pH falls between 6–10, but no determinate error if the end point's pH is less than 6.
12. A water sample's acidity is determined by titrating to fixed end point pHs of 3.7 and 8.3, with the former providing a measure of the concentration of strong acid, and the later a measure of the combined concentrations of strong acid and weak acid. Sketch a titration curve for a mixture of 0.10 M HCl and 0.10 M H_2CO_3 with 0.20 M strong base, and use it to justify the choice of these end points.
13. Ethylenediaminetetraacetic acid, H_4Y , is a weak acid with successive acid dissociation constants of 0.010, 2.19×10^{-3} , 6.92×10^{-7} , and 5.75×10^{-11} . Figure 9.46 shows a titration curve for H_4Y with NaOH. What is the stoichiometric relationship between H_4Y and NaOH at the equivalence point marked with the red arrow?

Some of the problems that follow require one or more equilibrium constants or standard state potentials. For your convenience, here are hyperlinks to the appendices containing these constants

[Appendix 10: Solubility Products](#)

[Appendix 11: Acid Dissociation Constants](#)

[Appendix 12: Metal-Ligand Formation Constants](#)

[Appendix 13: Standard State Reduction Potentials](#)

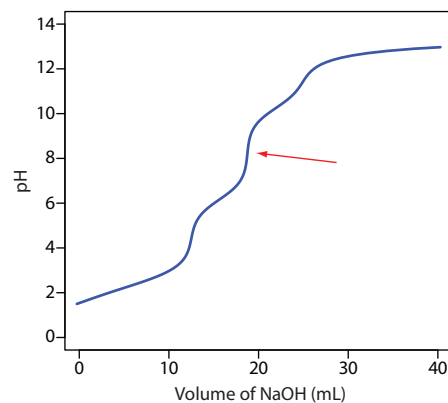


Figure 9.46 Titration curve for Problem 9.13.

14. A Gran plot method has been described for the quantitative analysis of a mixture consisting of a strong acid and a monoprotic weak acid.¹¹ A 50.00-mL mixture of HCl and CH₃COOH is transferred to an Erlenmeyer flask and titrated by using a digital pipet to add successive 1.00-mL aliquots of 0.09186 M NaOH. The progress of the titration is monitored by recording the pH after each addition of titrant. Using the two papers listed in the footnote as a reference, prepare a Gran plot for the following data, and determine the concentrations of HCl and CH₃COOH.

Volume of NaOH (ml)	pH	Volume of NaOH (mL)	pH	Volume of NaOH (ml)	pH
1.00	1.83	24.00	4.45	47.00	12.14
2.00	1.86	25.00	4.53	48.00	12.17
3.00	1.89	26.00	4.61	49.00	12.20
4.00	1.92	27.00	4.69	50.00	12.23
5.00	1.95	28.00	4.76	51.00	12.26
6.00	1.99	29.00	4.84	52.00	12.28
7.00	2.03	30.00	4.93	53.00	12.30
8.00	2.10	31.00	5.02	54.00	12.32
9.00	2.18	32.00	5.13	55.00	12.34
10.00	2.31	33.00	5.23	56.00	12.36
11.00	2.51	34.00	5.37	57.00	12.38
12.00	2.81	35.00	5.52	58.00	12.39
13.00	3.16	36.00	5.75	59.00	12.40
14.00	3.36	37.00	6.14	60.00	12.42
15.00	3.54	38.00	10.30	61.00	12.43
16.00	3.69	39.00	11.31	62.00	12.44
17.00	3.81	40.00	11.58	63.00	12.45
18.00	3.93	41.00	11.74	64.00	12.47
19.00	4.02	42.00	11.85	65.00	12.48
20.00	4.14	43.00	11.93	66.00	12.49
21.00	4.22	44.00	12.00	67.00	12.50
22.00	4.30	45.00	12.05	68.00	12.51
23.00	4.38	46.00	12.10	69.00	12.52

15. Explain why it is not possible for a sample of water to simultaneously have OH⁻ and HCO₃⁻ as sources of alkalinity.

16. For each of the following, determine the sources of alkalinity (OH⁻, HCO₃⁻, CO₃²⁻) and their respective concentrations in parts per mil-

¹¹ (a) Boiani, J. A. *J. Chem. Educ.* **1986**, *63*, 724–726; (b) Castillo, C. A.; Jaramillo, A. *J. Chem. Educ.* **1989**, *66*, 341.

Some of the problems that follow require one or more equilibrium constants or standard state potentials. For your convenience, here are hyperlinks to the appendices containing these constants

[Appendix 10: Solubility Products](#)

[Appendix 11: Acid Dissociation Constants](#)

[Appendix 12: Metal-Ligand Formation Constants](#)

[Appendix 13: Standard State Reduction Potentials](#)

lion In each case a 25.00-mL sample is titrated with 0.1198 M HCl to the bromocresol green and the phenolphthalein end points.

	Volume of HCl (mL) to the phenolphthalein end point	Volume of HCl (mL) to the bromocresol green end point
a	21.36	21.38
b	5.67	21.13
c	0.00	14.28
d	17.12	34.26
e	21.36	25.69

17. A sample may contain any of the following: HCl, NaOH, H_3PO_4 , H_2PO_4^- , HPO_4^{2-} , or PO_4^{3-} . The composition of a sample is determined by titrating a 25.00-mL portion with 0.1198 M HCl or 0.1198 M NaOH to the phenolphthalein and the methyl orange end points. For each of the following, determine which species are present in the sample, and their respective molar concentrations.

	Titrant	Phenolphthalein end point volume (mL)	methyl orange end point volume (mL)
a	HCl	11.54	35.29
b	NaOH	19.79	9.89
c	HCl	22.76	22.78
d	NaOH	39.42	17.48

18. The protein in a 1.2846-g sample of an oat cereal is determined by a Kjeldahl analysis. The sample is digested with H_2SO_4 , the resulting solution made basic with NaOH, and the NH_3 distilled into 50.00 mL of 0.09552 M HCl. The excess HCl is back titrated using 37.84 mL of 0.05992 M NaOH. Given that the proteins in grains average 17.54% w/w N, report the %w/w protein in the sample.
19. The concentration of SO_2 in air is determined by bubbling a sample of air through a trap containing H_2O_2 . Oxidation of SO_2 by H_2O_2 results in the formation of H_2SO_4 , which is then determined by titrating with NaOH. In a typical analysis, a sample of air was passed through the peroxide trap at a rate of 12.5 L/min for 60 min and required 10.08 mL of 0.0244 M NaOH to reach the phenolphthalein end point. Calculate the $\mu\text{L/L}$ SO_2 in the sample of air. The density of SO_2 at the temperature of the air sample is 2.86 mg/mL.
20. The concentration of CO_2 in air is determined by an indirect acid-base titration. A sample of air is bubbled through a solution containing an excess of $\text{Ba}(\text{OH})_2$, precipitating BaCO_3 . The excess $\text{Ba}(\text{OH})_2$ is back titrated with HCl. In a typical analysis a 3.5-L sample of air was bubbled through 50.00 mL of 0.0200 M $\text{Ba}(\text{OH})_2$. Back titrating with

Some of the problems that follow require one or more equilibrium constants or standard state potentials. For your convenience, here are hyperlinks to the appendices containing these constants

[Appendix 10: Solubility Products](#)

[Appendix 11: Acid Dissociation Constants](#)

[Appendix 12: Metal-Ligand Formation Constants](#)

[Appendix 13: Standard State Reduction Potentials](#)

0.0316 M HCl required 38.58 mL to reach the end point. Determine the ppm CO_2 in the sample of air given that the density of CO_2 at the temperature of the sample is 1.98 g/L.

21. The purity of a synthetic preparation of methylethyl ketone, $\text{C}_3\text{H}_8\text{O}$, is determined by reacting it with hydroxylamine hydrochloride, liberating HCl (see reaction in [Table 9.8](#)). In a typical analysis a 3.00-mL sample was diluted to 50.00 mL and treated with an excess of hydroxylamine hydrochloride. The liberated HCl was titrated with 0.9989 M NaOH, requiring 32.68 mL to reach the end point. Report the percent purity of the sample given that the density of methylethyl ketone is 0.805 g/mL.
22. Animal fats and vegetable oils are triesters formed from the reaction between glycerol (1,2,3-propanetriol) and three long-chain fatty acids. One of the methods used to characterize a fat or an oil is a determination of its saponification number. When treated with boiling aqueous KOH, an ester saponifies into the parent alcohol and fatty acids (as carboxylate ions). The saponification number is the number of milligrams of KOH required to saponify 1.000 gram of the fat or the oil. In a typical analysis a 2.085-g sample of butter is added to 25.00 mL of 0.5131 M KOH. After saponification is complete the excess KOH is back titrated with 10.26 mL of 0.5000 M HCl. What is the saponification number for this sample of butter?
23. A 250.0-mg sample of an organic weak acid is dissolved in an appropriate solvent and titrated with 0.0556 M NaOH, requiring 32.58 mL to reach the end point. Determine the compound's equivalent weight.
24. Figure 9.47 shows a potentiometric titration curve for a 0.4300-g sample of a purified amino acid that was dissolved in 50.00 mL of water and titrated with 0.1036 M NaOH. Identify the amino acid from the possibilities listed in the following table.

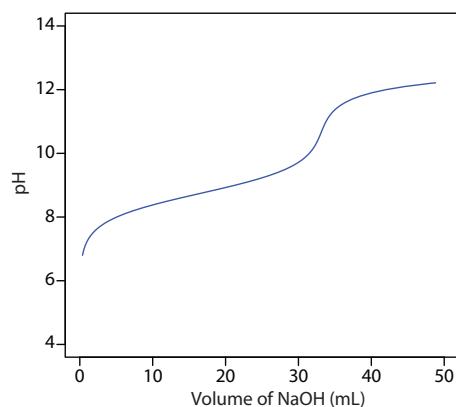


Figure 9.47 Titration curve for Problem 9.24.

amino acid	formula weight (g/mol)	K_a
alanine	89.1	1.36×10^{-10}
glycine	75.1	1.67×10^{-10}
methionine	149.2	8.9×10^{-10}
taurine	125.2	1.8×10^{-9}
asparagine	150	1.9×10^{-9}
leucine	131.2	1.79×10^{-10}
phenylalanine	166.2	4.9×10^{-10}
valine	117.2	1.91×10^{-10}

Some of the problems that follow require one or more equilibrium constants or standard state potentials. For your convenience, here are hyperlinks to the appendices containing these constants

[Appendix 10: Solubility Products](#)

[Appendix 11: Acid Dissociation Constants](#)

[Appendix 12: Metal-Ligand Formation Constants](#)

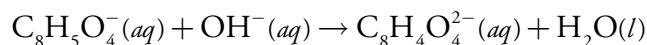
[Appendix 13: Standard State Reduction Potentials](#)

25. Using its titration curve, determine the acid dissociation constant for the weak acid in problem 9.6.
26. Where in the scale of operations do the microtitration techniques discussed in [section 9B.7](#) belong?
27. An acid–base titration may be used to determine an analyte’s gram equivalent weight, but it can not be used to determine its gram formula weight. Explain why.
28. Commercial washing soda is approximately 30–40% w/w Na_2CO_3 . One procedure for the quantitative analysis of washing soda contains the following instructions:

Transfer an approximately 4-g sample of the washing soda to a 250-mL volumetric flask. Dissolve the sample in about 100 mL of H_2O and then dilute to the mark. Using a pipet, transfer a 25-mL aliquot of this solution to a 125-mL Erlenmeyer flask, and add 25-mL of H_2O and 2 drops of bromocresol green indicator. Titrate the sample with 0.1 M HCl to the indicator’s end point.

What modifications, if any, are necessary if you want to adapt this procedure to evaluate the purity of commercial Na_2CO_3 that is >98% pure?

29. A variety of systematic and random errors are possible when standardizing a solution of NaOH against the primary weak acid standard potassium hydrogen phthalate (KHP). Identify, with justification, whether the following are systematic or random sources of error, or if they have no effect. If the error is systematic, then indicate whether the experimentally determined molarity for NaOH is too high or too low. The standardization reaction is



- (a) The balance used to weigh KHP is not properly calibrated and always reads 0.15 g too low.
- (b) The indicator for the titration changes color between a pH of 3–4.
- (c) An air bubble, which is lodged in the buret’s tip at the beginning of the analysis, dislodges during the titration.
- (d) Samples of KHP are weighed into separate Erlenmeyer flasks, but the balance is only tarred with the first flask.
- (e) The KHP is not dried before it was used.
- (f) The NaOH is not dried before it was used.

Some of the problems that follow require one or more equilibrium constants or standard state potentials. For your convenience, here are hyperlinks to the appendices containing these constants

[Appendix 10: Solubility Products](#)

[Appendix 11: Acid Dissociation Constants](#)

[Appendix 12: Metal-Ligand Formation Constants](#)

[Appendix 13: Standard State Reduction Potentials](#)

- (g) The procedure states that the sample of KHP should be dissolved in 25 mL of water, but it is accidentally dissolved in 35 mL of water.
30. The concentration of *o*-phthalic acid in an organic solvent, such as *n*-butanol, is determined by an acid–base titration using aqueous NaOH as the titrant. As the titrant is added, the *o*-phthalic acid is extracted into the aqueous solution where it reacts with the titrant. The titrant must be added slowly to allow sufficient time for the extraction to take place.
- (a) What type of error do you expect if the titration is carried out too quickly?
- (b) Propose an alternative acid–base titrimetric method that allows for a more rapid determination of the concentration of *o*-phthalic acid in *n*-butanol.
31. Calculate or sketch titration curves for 50.00 mL of 0.0500 M Mg^{2+} with 0.0500 M EDTA at a pH of 7 and 10. Locate the equivalence point for each titration curve.
32. Calculate or sketch titration curves for 25.0 mL of 0.0500 M Cu^{2+} with 0.025 M EDTA at a pH of 10, and in the presence of 10^{-3} M and 10^{-1} M NH_3 . Locate the equivalence point for each titration curve.
33. Sketch the spectrophotometric titration curve for the titration of a mixture of 5.00×10^{-3} M Bi^{3+} and 5.00×10^{-3} M Cu^{2+} with 0.0100 M EDTA. Assume that only the Cu^{2+} –EDTA complex absorbs at the selected wavelength.
34. The EDTA titration of mixtures of Ca^{2+} and Mg^{2+} can be followed thermometrically because the formation of the Ca^{2+} –EDTA complex is exothermic and the formation of the Mg^{2+} –EDTA complex is endothermic. Sketch the thermometric titration curve for a mixture of 5.00×10^{-3} M Ca^{2+} and 5.00×10^{-3} M Mg^{2+} with 0.0100 M EDTA. The heats of formation for CaY^{2-} and MgY^{2-} are, respectively, -23.9 kJ/mole and 23.0 kJ/mole.
35. EDTA is one member of a class of aminocarboxylate ligands that form very stable 1:1 complexes with metal ions. The following table provides $\log K_f$ values for the complexes of six such ligands with Ca^{2+} and Mg^{2+} . Which ligand is the best choice for the direct titration of Ca^{2+} in the presence of Mg^{2+} ?

		Mg^{2+}	Ca^{2+}
EDTA	ethylenediaminetetraacetic acid	8.7	10.7
HEDTA	N-hydroxyethylenediaminetriacetic acid	7.0	8.0

Some of the problems that follow require one or more equilibrium constants or standard state potentials. For your convenience, here are hyperlinks to the appendices containing these constants

[Appendix 10: Solubility Products](#)

[Appendix 11: Acid Dissociation Constants](#)

[Appendix 12: Metal-Ligand Formation Constants](#)

[Appendix 13: Standard State Reduction Potentials](#)

		Mg ²⁺	Ca ²⁺
EEDTA	ethyletherdiaminetetraacetic acid	8.3	10.0
DGTA	ethyleneglycol-bis(β -aminoethylether)- N,N'-tetraacetic acid	5.4	10.9
DTPA	diethylenetriaminepentaacetic acid	9.0	10.7
CyDTA	cyclohexanediarninetetraacetic acid	10.3	12.3

36. The amount of calcium in physiological fluids can be determined by a complexometric titration with EDTA. In one such analysis a 0.100-mL sample of a blood serum was made basic by adding 2 drops of NaOH and titrated with 0.00119 M EDTA, requiring 0.268 mL to reach the end point. Report the concentration of calcium in the sample as milligrams Ca per 100 mL.
37. After removing the membranes from an eggshell, the shell is dried and its mass recorded as 5.613 g. The eggshell is transferred to a 250-mL beaker and dissolved in 25 mL of 6 M HCl. After filtering, the solution containing the dissolved eggshell is diluted to 250 mL in a volumetric flask. A 10.00-mL aliquot is placed in a 125-mL Erlenmeyer flask and buffered to a pH of 10. Titrating with 0.04988 M EDTA requires 44.11 mL to reach the end point. Determine the amount of calcium in the eggshell as %w/w CaCO₃.
38. The concentration of cyanide, CN⁻, in a copper electroplating bath can be determined by a complexometric titration with Ag⁺, forming the soluble Ag(CN)₂⁻ complex. In a typical analysis a 5.00-mL sample from an electroplating bath is transferred to a 250-mL Erlenmeyer flask, and treated with 100 mL of H₂O, 5 mL of 20% w/v NaOH and 5 mL of 10% w/v KI. The sample is titrated with 0.1012 M AgNO₃, requiring 27.36 mL to reach the end point as signaled by the formation of a yellow precipitate of AgI. Report the concentration of cyanide as parts per million of NaCN.
39. Before the introduction of EDTA most complexation titrations used Ag⁺ or CN⁻ as the titrant. The analysis for Cd²⁺, for example, was accomplished indirectly by adding an excess of KCN to form Cd(CN)₄²⁻, and back titrating the excess CN⁻ with Ag⁺, forming Ag(CN)₂⁻. In one such analysis a 0.3000-g sample of an ore was dissolved and treated with 20.00 mL of 0.5000 M KCN. The excess CN⁻ required 13.98 mL of 0.1518 M AgNO₃ to reach the end point. Determine the %w/w Cd in the ore.
40. Solutions containing both Fe³⁺ and Al³⁺ can be selectively analyzed for Fe³⁺ by buffering to a pH of 2 and titrating with EDTA. The pH of the solution is then raised to 5 and an excess of EDTA added, resulting in

Some of the problems that follow require one or more equilibrium constants or standard state potentials. For your convenience, here are hyperlinks to the appendices containing these constants

[Appendix 10: Solubility Products](#)

[Appendix 11: Acid Dissociation Constants](#)

[Appendix 12: Metal-Ligand Formation Constants](#)

[Appendix 13: Standard State Reduction Potentials](#)

the formation of the Al^{3+} –EDTA complex. The excess EDTA is back-titrated using a standard solution of Fe^{3+} , providing an indirect analysis for Al^{3+} .

- (a) At a pH of 2, verify that the formation of the Fe^{3+} –EDTA complex is favorable, and that the formation of the Al^{3+} –EDTA complex is not favorable.
- (b) A 50.00-mL aliquot of a sample containing Fe^{3+} and Al^{3+} is transferred to a 250-mL Erlenmeyer flask and buffered to a pH of 2. A small amount of salicylic acid is added, forming the soluble red-colored Fe^{3+} –salicylic acid complex. The solution is titrated with 0.05002 M EDTA, requiring 24.82 mL to reach the end point as signaled by the disappearance of the Fe^{3+} –salicylic acid complex's red color. The solution is buffered to a pH of 5 and 50.00 mL of 0.05002 M EDTA is added. After ensuring that the formation of the Al^{3+} –EDTA complex is complete, the excess EDTA was back-titrated with 0.04109 M Fe^{3+} , requiring 17.84 mL to reach the end point as signaled by the reappearance of the red-colored Fe^{3+} –salicylic acid complex. Report the molar concentrations of Fe^{3+} and Al^{3+} in the sample.

Some of the problems that follow require one or more equilibrium constants or standard state potentials. For your convenience, here are hyperlinks to the appendices containing these constants

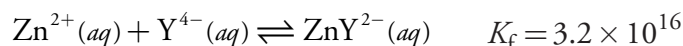
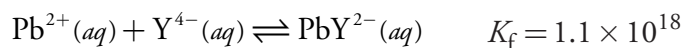
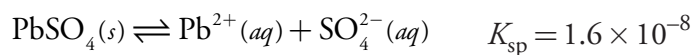
[Appendix 10: Solubility Products](#)

[Appendix 11: Acid Dissociation Constants](#)

[Appendix 12: Metal-Ligand Formation Constants](#)

[Appendix 13: Standard State Reduction Potentials](#)

41. Prada and colleagues described an indirect method for determining sulfate in natural samples, such as seawater and industrial effluents.¹² The method consists of three steps: precipitating the sulfate as PbSO_4 ; dissolving the PbSO_4 in an ammonical solution of excess EDTA to form the soluble PbY^{2-} complex; and titrating the excess EDTA with a standard solution of Mg^{2+} . The following reactions and equilibrium constants are known



- (a) Verify that a precipitate of PbSO_4 dissolves in a solution of Y^{4-} .
- (b) Sporek proposed a similar method using Zn^{2+} as a titrant and found that the accuracy was frequently poor.¹³ One explanation is that Zn^{2+} might react with the PbY^{2-} complex, forming ZnY^{2-} . Show that this might be a problem when using Zn^{2+} as a titrant, but that it is not a problem when using Mg^{2+} as a titrant. Would such a

¹² Prada, S.; Guekejian, M.; Suarez-Iha, M. E. V. *Anal. Chim. Acta* **1996**, *329*, 197–202.

¹³ Sporek, K. F. *Anal. Chem.* **1958**, *30*, 1030–1032.

displacement of Pb^{2+} by Zn^{2+} lead to the reporting of too much or too little sulfate?

- (c) In a typical analysis, a 25.00-mL sample of an industrial effluent was carried through the procedure using 50.00 mL of 0.05000 M EDTA. Titrating the excess EDTA required 12.42 mL of 0.1000 M Mg^{2+} . Report the molar concentration of SO_4^{2-} in the sample of effluent.

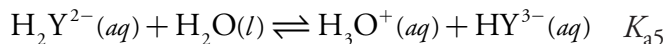
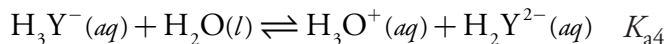
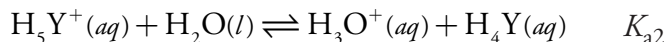
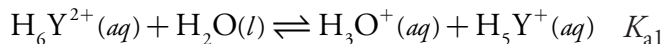
42. [Table 9.10](#) provides values for the fraction of EDTA present as Y^{4-} , $\alpha_{\text{Y}^{4-}}$. Values of $\alpha_{\text{Y}^{4-}}$ are calculated using the equation

$$\alpha_{\text{Y}^{4-}} = \frac{[\text{Y}^{4-}]}{C_{\text{EDTA}}}$$

where $[\text{Y}^{4-}]$ is the concentration of the fully deprotonated EDTA and C_{EDTA} is the total concentration of EDTA in all of its forms

$$C_{\text{EDTA}} = [\text{H}_6\text{Y}^{2+}] + [\text{H}_5\text{Y}^+] + [\text{H}_4\text{Y}] + [\text{H}_3\text{Y}^-] + [\text{H}_2\text{Y}^{2-}] + [\text{HY}^{3-}] + [\text{Y}^{4-}]$$

Using the following equilibria



show that

$$\alpha_{\text{Y}^{4-}} = \frac{K_{\text{a}1}K_{\text{a}2}K_{\text{a}3}K_{\text{a}4}K_{\text{a}5}K_{\text{a}6}}{d}$$

where

$$d = [\text{H}^+]^6 + [\text{H}^+]^5 K_{\text{a}1} + [\text{H}^+]^4 K_{\text{a}1}K_{\text{a}2} + [\text{H}^+]^3 K_{\text{a}1}K_{\text{a}2}K_{\text{a}3} + [\text{H}^+]^2 K_{\text{a}1}K_{\text{a}2}K_{\text{a}3}K_{\text{a}4} + [\text{H}^+] K_{\text{a}1}K_{\text{a}2}K_{\text{a}3}K_{\text{a}4}K_{\text{a}5} + K_{\text{a}1}K_{\text{a}2}K_{\text{a}3}K_{\text{a}4}K_{\text{a}5}K_{\text{a}6}$$

Some of the problems that follow require one or more equilibrium constants or standard state potentials. For your convenience, here are hyperlinks to the appendices containing these constants

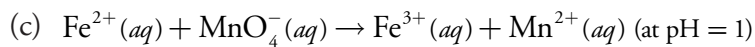
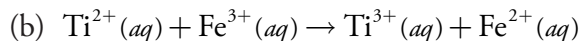
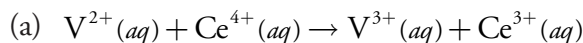
[Appendix 10: Solubility Products](#)

[Appendix 11: Acid Dissociation Constants](#)

[Appendix 12: Metal-Ligand Formation Constants](#)

[Appendix 13: Standard State Reduction Potentials](#)

43. Calculate or sketch titration curves for the following (unbalanced) redox titration reactions at 25 °C. Assume the analyte is initially present at a concentration of 0.0100 M and that a 25.0-mL sample is taken for analysis. The titrant, which is the underlined species in each reaction, is 0.0100 M.



44. What is the equivalence point for each titration in problem 43?

45. Suggest an appropriate indicator for each titration in problem 43.

46. The iron content of an ore can be determined by a redox titration using $K_2Cr_2O_7$ as the titrant. A sample of the ore is dissolved in concentrated HCl using Sn^{2+} to speed its dissolution by reducing Fe^{3+} to Fe^{2+} . After the sample is dissolved, Fe^{2+} and any excess Sn^{2+} are oxidized to Fe^{3+} and Sn^{4+} using MnO_4^- . The iron is then carefully reduced to Fe^{2+} by adding a 2–3 drop excess of Sn^{2+} . A solution of $HgCl_2$ is added and, if a white precipitate of Hg_2Cl_2 forms, the analysis is continued by titrating with $K_2Cr_2O_7$. The sample is discarded without completing the analysis if a precipitate of Hg_2Cl_2 does not form, or if a gray precipitate (due to Hg) forms.

(a) Explain why the analysis is not completed if a white precipitate of Hg_2Cl_2 forms, or if a gray precipitate forms.

(b) Is a determinate error introduced if the analyst forgets to add Sn^{2+} in the step where the iron ore is dissolved?

(c) Is a determinate error introduced if the iron is not quantitatively oxidized back to Fe^{3+} by the MnO_4^- ?

47. The amount of Cr^{3+} in an inorganic salt can be determined by a redox titration. A portion of sample containing approximately 0.25 g of Cr^{3+} is accurately weighed and dissolved in 50 mL of H_2O . The Cr^{3+} is oxidized to $Cr_2O_7^{2-}$ by adding 20 mL of 0.1 M $AgNO_3$, which serves as a catalyst, and 50 mL of 10%w/v $(NH_4)_2S_2O_8$, which serves as the oxidizing agent. After the reaction is complete the resulting solution is boiled for 20 minutes to destroy the excess $S_2O_8^{2-}$, cooled to room temperature, and diluted to 250 mL in a volumetric flask. A 50-mL portion of the resulting solution is transferred to an Erlenmeyer flask, treated with 50 mL of a standard solution of Fe^{2+} , and acidified with 200 mL of 1 M H_2SO_4 , reducing the $Cr_2O_7^{2-}$ to Cr^{3+} . The excess Fe^{2+} is then determined by a back titration with a standard solution

Some of the problems that follow require one or more equilibrium constants or standard state potentials. For your convenience, here are hyperlinks to the appendices containing these constants

[Appendix 10: Solubility Products](#)

[Appendix 11: Acid Dissociation Constants](#)

[Appendix 12: Metal-Ligand Formation Constants](#)

[Appendix 13: Standard State Reduction Potentials](#)

of $\text{K}_2\text{Cr}_2\text{O}_7$ using an appropriate indicator. The results are reported as %w/w Cr^{3+} .

- (a) There are several places in the procedure where a reagent's volume is specified (see underlined text). Which of these measurements must be made using a volumetric pipet.
 - (b) Excess peroxydisulfate, $\text{S}_2\text{O}_8^{2-}$ is destroyed by boiling the solution. What is the effect on the reported %w/w Cr^{3+} if some of the $\text{S}_2\text{O}_8^{2-}$ is not destroyed during this step?
 - (c) Solutions of Fe^{2+} undergo slow air oxidation to Fe^{3+} . What is the effect on the reported %w/w Cr^{3+} if the standard solution of Fe^{2+} is inadvertently allowed to be partially oxidized?
48. The exact concentration of H_2O_2 in a solution that is nominally 6% w/v H_2O_2 can be determined by a redox titration with MnO_4^- . A 25-mL aliquot of the sample is transferred to a 250-mL volumetric flask and diluted to volume with distilled water. A 25-mL aliquot of the diluted sample is added to an Erlenmeyer flask, diluted with 200 mL of distilled water, and acidified with 20 mL of 25% v/v H_2SO_4 . The resulting solution is titrated with a standard solution of KMnO_4 until a faint pink color persists for 30 s. The results are reported as %w/v H_2O_2 .
- (a) Many commercially available solutions of H_2O_2 contain an inorganic or organic stabilizer to prevent the autodecomposition of the peroxide to H_2O and O_2 . What effect does the presence of this stabilizer have on the reported %w/v H_2O_2 if it also reacts with MnO_4^- ?
 - (b) Laboratory distilled water often contains traces of dissolved organic material that may react with MnO_4^- . Describe a simple method to correct for this potential interference.
 - (c) What modifications to the procedure, if any, are need if the sample has a nominal concentration of 30% w/v H_2O_2 .
49. The amount of iron in a meteorite was determined by a redox titration using KMnO_4 as the titrant. A 0.4185-g sample was dissolved in acid and the liberated Fe^{3+} quantitatively reduced to Fe^{2+} using a Walden reductor. Titrating with 0.02500 M KMnO_4 requires 41.27 mL to reach the end point. Determine the %w/w Fe_2O_3 in the sample of meteorite.
50. Under basic conditions, MnO_4^- can be used as a titrant for the analysis of Mn^{2+} , with both the analyte and the titrant forming MnO_2 . In the analysis of a mineral sample for manganese, a 0.5165-g sample is dissolved and the manganese reduced to Mn^{2+} . The solution is made basic

Some of the problems that follow require one or more equilibrium constants or standard state potentials. For your convenience, here are hyperlinks to the appendices containing these constants

[Appendix 10: Solubility Products](#)

[Appendix 11: Acid Dissociation Constants](#)

[Appendix 12: Metal-Ligand Formation Constants](#)

[Appendix 13: Standard State Reduction Potentials](#)

and titrated with 0.03358 M KMnO_4 , requiring 34.88 mL to reach the end point. Calculate the %w/w Mn in the mineral sample.

51. The amount of uranium in an ore can be determined by a redox back titration. The analysis is accomplished by dissolving the ore in sulfuric acid and reducing the resulting UO_2^{2+} to U^{4+} with a Walden reductor. The resulting solution is treated with an excess of Fe^{3+} , forming Fe^{2+} and U^{6+} . The Fe^{2+} is titrated with a standard solution of $\text{K}_2\text{Cr}_2\text{O}_7$. In a typical analysis a 0.315-g sample of ore is passed through the Walden reductor and treated with 50.00 mL of 0.0125 M Fe^{3+} . Back titrating with 0.00987 M $\text{K}_2\text{Cr}_2\text{O}_7$ requires 10.52 mL. What is the %w/w U in the sample?
52. The thickness of the chromium plate on an auto fender was determined by dissolving a 30.0-cm² section in acid, and oxidizing the liberated Cr^{3+} to $\text{Cr}_2\text{O}_7^{2-}$ with peroxydisulfate. After removing the excess peroxydisulfate by boiling, 500.0 mg of $\text{Fe}(\text{NH}_4)_2(\text{SO}_4)_2 \cdot 6\text{H}_2\text{O}$ was added, reducing the $\text{Cr}_2\text{O}_7^{2-}$ to Cr^{3+} . The excess Fe^{2+} was back titrated, requiring 18.29 mL of 0.00389 M $\text{K}_2\text{Cr}_2\text{O}_7$ to reach the end point. Determine the average thickness of the chromium plate given that the density of Cr is 7.20 g/cm³.
53. The concentration of CO in air can be determined by passing a known volume of air through a tube containing I_2O_5 , forming CO_2 and I_2 . The I_2 is removed from the tube by distilling it into a solution containing an excess of KI, producing I_3^- . The I_3^- is titrated with a standard solution of $\text{Na}_2\text{S}_2\text{O}_3$. In a typical analysis a 4.79-L sample of air was sampled as described here, requiring 7.17 mL of 0.00329 M $\text{Na}_2\text{S}_2\text{O}_3$ to reach the end point. If the air has a density of 1.23×10^{-3} g/mL, determine the parts per million CO in the air.
54. The level of dissolved oxygen in a water sample can be determined by the Winkler method. In a typical analysis a 100.0-mL sample is made basic and treated with a solution of MnSO_4 , resulting in the formation of MnO_2 . An excess of KI is added and the solution is acidified, resulting in the formation of Mn^{2+} and I_2 . The liberated I_2 is titrated with a solution of 0.00870 M $\text{Na}_2\text{S}_2\text{O}_3$, requiring 8.90 mL to reach the starch indicator end point. Calculate the concentration of dissolved oxygen as parts per million O_2 .
55. The analysis for Cl^- using the Volhard method requires a back titration. A known amount of AgNO_3 is added, precipitating AgCl . The unreacted Ag^+ is determined by back titrating with KSCN . There is a complication, however, because AgCl is more soluble than AgSCN .

Some of the problems that follow require one or more equilibrium constants or standard state potentials. For your convenience, here are hyperlinks to the appendices containing these constants

[Appendix 10: Solubility Products](#)

[Appendix 11: Acid Dissociation Constants](#)

[Appendix 12: Metal-Ligand Formation Constants](#)

[Appendix 13: Standard State Reduction Potentials](#)

- (a) Why do the relative solubilities of AgCl and AgSCN lead to a titration error?
- (b) Is the resulting titration error a positive or a negative determinate error?
- (c) How might you modify the procedure to prevent this eliminate this source of determinate error?
- (d) Will this source of determinate error be of concern when using the Volhard method to determine Br⁻?
56. Voncina and co-workers suggest that a precipitation titration can be monitored by measuring pH as a function of the volume of titrant if the titrant is a weak base.¹⁴ For example, when titrating Pb²⁺ with CrO₄²⁻ the solution containing the analyte is initially acidified to a pH of 3.50 using HNO₃. Before the equivalence point the concentration of CrO₄²⁻ is controlled by the solubility product of PbCrO₄. After the equivalence point the concentration of CrO₄²⁻ is determined by the amount of excess titrant. Considering the reactions controlling the concentration of CrO₄²⁻, sketch the expected titration curve of pH versus volume of titrant.
57. Calculate or sketch the titration curve for the titration of 50.0 mL of 0.0250 M KI with 0.0500 M AgNO₃. Prepare separate titration curve using pAg and pI on the y-axis.
58. Calculate or sketch the titration curve for the titration of 25.0 mL mixture of 0.0500 M KI and 0.0500 M KSCN with 0.0500 M AgNO₃.
59. A 0.5131-g sample containing KBr is dissolved in 50 mL of distilled water. Titrating with 0.04614 M AgNO₃ requires 25.13 mL to reach the Mohr end point. A blank titration requires 0.65 mL to reach the same end point. Report the %w/w KBr in the sample.
60. A 0.1093-g sample of impure Na₂CO₃ was analyzed by the Volhard method. After adding 50.00 mL of 0.06911 M AgNO₃, the sample was back titrated with 0.05781 M KSCN, requiring 27.36 mL to reach the end point. Report the purity of the Na₂CO₃ sample.
61. A 0.1036-g sample containing only BaCl₂ and NaCl is dissolved in 50 mL of distilled water. Titrating with 0.07916 M AgNO₃ requires 19.46 mL to reach the Fajans end point. Report the %w/w BaCl₂ in the sample.

Some of the problems that follow require one or more equilibrium constants or standard state potentials. For your convenience, here are hyperlinks to the appendices containing these constants

[Appendix 10: Solubility Products](#)

[Appendix 11: Acid Dissociation Constants](#)

[Appendix 12: Metal-Ligand Formation Constants](#)

[Appendix 13: Standard State Reduction Potentials](#)

¹⁴ Vončina, D. B.; Dobčnik, D.; Gomišček, S. *Anal. Chim. Acta* **1992**, *263*, 147–153.

9I Solutions to Practice Exercises

Practice Exercise 9.1

The volume of HCl needed to reach the equivalence point is

$$V_{\text{eq}} = V_a = \frac{M_b V_b}{M_a} = \frac{(0.125 \text{ M})(25.0 \text{ mL})}{0.0625 \text{ M}} = 50.0 \text{ mL}$$

Before the equivalence point, NaOH is present in excess and the pH is determined by the concentration of unreacted OH^- . For example, after adding 10.0 mL of HCl

$$[\text{OH}^-] = \frac{(0.125 \text{ M})(25.0 \text{ mL}) - (0.0625 \text{ M})(10.0 \text{ mL})}{25.0 \text{ mL} + 10.0 \text{ mL}} = 0.0714 \text{ M}$$

$$[\text{H}_3\text{O}^+] = \frac{K_w}{[\text{OH}^-]} = \frac{1.00 \times 10^{-14}}{0.0714 \text{ M}} = 1.40 \times 10^{-13} \text{ M}$$

the pH is 12.85.

For the titration of a strong base with a strong acid the pH at the equivalence point is 7.00.

For volumes of HCl greater than the equivalence point, the pH is determined by the concentration of excess HCl. For example, after adding 70.0 mL of titrant the concentration of HCl is

$$[\text{HCl}] = \frac{(0.0625 \text{ M})(70.0 \text{ mL}) - (0.125 \text{ M})(25.0 \text{ mL})}{70.0 \text{ mL} + 25.0 \text{ mL}} = 0.0132 \text{ M}$$

giving a pH of 1.88. Some additional results are shown here.

Volume of HCl (mL)	pH	Volume of HCl (mL)	pH
0	13.10	60	2.13
10	12.85	70	1.88
20	12.62	80	1.75
30	12.36	90	1.66
40	11.98	100	1.60
50	7.00		

Click [here](#) to return to the chapter.

Practice Exercise 9.2

The volume of HCl needed to reach the equivalence point is

$$V_{\text{eq}} = V_a = \frac{M_b V_b}{M_a} = \frac{(0.125 \text{ M})(25.0 \text{ mL})}{0.0625 \text{ M}} = 50.0 \text{ mL}$$

Before adding HCl the pH is that for a solution of 0.100 M NH_3 .

$$K_b = \frac{[\text{OH}^-][\text{NH}_4^+]}{[\text{NH}_3]} = \frac{(x)(x)}{0.125 - x} = 1.75 \times 10^{-5}$$

$$x = [\text{OH}^-] = 1.47 \times 10^{-3} \text{ M}$$

The pH at the beginning of the titration, therefore, is 11.17.

Before the equivalence point the pH is determined by an $\text{NH}_3/\text{NH}_4^+$ buffer. For example, after adding 10.0 mL of HCl

$$[\text{NH}_3] = \frac{(0.125 \text{ M})(25.0 \text{ mL}) - (0.0625 \text{ M})(10.0 \text{ mL})}{25.0 \text{ mL} + 10.0 \text{ mL}} = 0.0714 \text{ M}$$

$$[\text{NH}_4^+] = \frac{(0.0625 \text{ M})(10.0 \text{ mL})}{25.0 \text{ mL} + 10.0 \text{ mL}} = 0.0179 \text{ M}$$

$$\text{pH} = 9.244 + \log \frac{0.0714 \text{ M}}{0.0179 \text{ M}} = 9.84$$

At the equivalence point the predominate ion in solution is NH_4^+ . To calculate the pH we first determine the concentration of NH_4^+

$$[\text{NH}_4^+] = \frac{(0.125 \text{ M})(25.0 \text{ mL})}{25.0 \text{ mL} + 50.0 \text{ mL}} = 0.0417 \text{ M}$$

and then calculate the pH

$$K_a = \frac{[\text{H}_3\text{O}^+][\text{NH}_3]}{[\text{NH}_4^+]} = \frac{(x)(x)}{0.0417 - x} = 5.70 \times 10^{-10}$$

$$x = [\text{H}_3\text{O}^+] = 4.88 \times 10^{-6} \text{ M}$$

obtaining a value of 5.31.

After the equivalence point, the pH is determined by the excess HCl. For example, after adding 70.0 mL of HCl

$$[\text{HCl}] = \frac{(0.0625 \text{ M})(70.0 \text{ mL}) - (0.125 \text{ M})(25.0 \text{ mL})}{25.0 \text{ mL} + 70.0 \text{ mL}} = 0.0132 \text{ M}$$

and the pH is 1.88. Some additional results are shown here.

Volume of HCl (mL)	pH	Volume of HCl (mL)	pH
0	11.17	60	2.13
10	9.84	70	1.88
20	9.42	80	1.75
30	9.07	90	1.66
40	8.64	100	1.60
50	5.31		

Click [here](#) to return to the chapter.

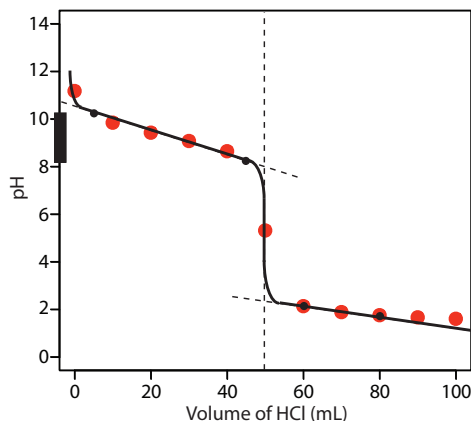


Figure 9.48 Titration curve for Practice Exercise 9.3. The black dots and curve are the approximate sketch of the titration curve. The points in red are the calculations from Practice Exercise 9.2.

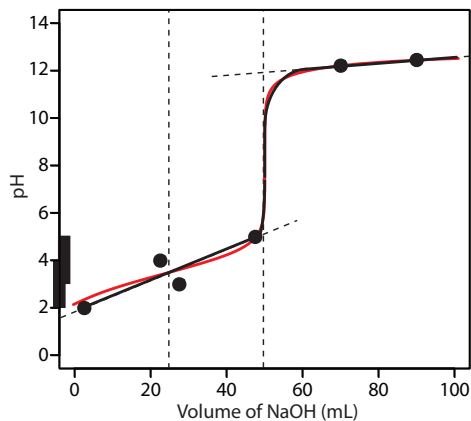


Figure 9.49 Titration curve for Practice Exercise 9.4. The black points and curve are the approximate titration curve, and the red curve is the exact titration curve.

Practice Exercise 9.3

Figure 9.48 shows a sketch of the titration curve. The two points before the equivalence point ($V_{\text{HCl}} = 5 \text{ mL}$, $\text{pH} = 10.24$ and $V_{\text{HCl}} = 45 \text{ mL}$, $\text{pH} = 8.24$) are plotted using the $\text{p}K_a$ of 9.244 for NH_4^+ . The two points after the equivalence point ($V_{\text{HCl}} = 60 \text{ mL}$, $\text{pH} = 2.13$ and $V_{\text{HCl}} = 80 \text{ mL}$, $\text{pH} = 1.75$) are from the answer to [Practice Exercise 9.2](#).

Click [here](#) to return to the chapter.

Practice Exercise 9.4

Figure 9.49 shows a sketch of the titration curve. The titration curve has two equivalence points, one at 25.0 mL ($\text{H}_2\text{A} \rightarrow \text{HA}^-$) and one at 50.0 mL ($\text{HA}^- \rightarrow \text{A}^{2-}$). In sketching the curve, we plot two points before the first equivalence point using the $\text{p}K_a$ of 3 for H_2A

$$V_{\text{HCl}} = 2.5 \text{ mL}, \text{pH} = 2 \text{ and } V_{\text{HCl}} = 22.5 \text{ mL}, \text{pH} = 4$$

two points between the equivalence points using the $\text{p}K_a$ of 5 for HA^-

$$V_{\text{HCl}} = 27.5 \text{ mL}, \text{pH} = 3, \text{ and } V_{\text{HCl}} = 47.5 \text{ mL}, \text{pH} = 5$$

and two points after the second equivalence point

$$V_{\text{HCl}} = 70 \text{ mL}, \text{pH} = 12.22 \text{ and } V_{\text{HCl}} = 90 \text{ mL}, \text{pH} = 12.46$$

Drawing a smooth curve through these points presents us with the following dilemma—the pH appears to increase as the titrant's volume approaches the first equivalence point and then appears to decrease as it passes through the first equivalence point. This is, of course, absurd; as we add NaOH the pH cannot decrease. Instead, we model the titration curve before the second equivalence point by drawing a straight line from the first point ($V_{\text{HCl}} = 2.5 \text{ mL}$, $\text{pH} = 2$) to the fourth ($V_{\text{HCl}} = 47.5 \text{ mL}$, $\text{pH} = 5$), ignoring the second and third points. The result is a reasonable approximation of the exact titration curve.

Click [here](#) to return to the chapter.

Practice Exercise 9.5

The pH at the equivalence point is 5.31 (see [Practice Exercise 9.2](#)) and the sharp part of the titration curve extends from a pH of approximately 7 to a pH of approximately 4. Of the indicators in [Table 9.4](#), methyl red is the best choice because its $\text{p}K_a$ value of 5.0 is closest to the equivalence point's pH and because the pH range of 4.2–6.3 for its change in color will not produce a significant titration error.

Click [here](#) to return to the chapter.

Practice Exercise 9.6

Because salicylic acid is a diprotic weak acid, we must first determine to which equivalence point it is being titrated. Using salicylic acid's $\text{p}K_a$

values as a guide, the pH at the first equivalence point is between a pH of 2.97 and 13.74, and the second equivalence points is at a pH greater than 13.74. From [Table 9.4](#), phenolphthalein's end point falls in the pH range 8.3–10.0. The titration, therefore, is to the first equivalence point for which the moles of NaOH equal the moles of salicylic acid; thus

$$\frac{0.1354 \text{ mol NaOH}}{\text{L}} \times 0.02192 \text{ L} = 2.968 \times 10^{-3} \text{ mol NaOH}$$

$$2.968 \times 10^{-3} \text{ mol NaOH} \times \frac{1 \text{ mol C}_7\text{H}_6\text{O}_3}{\text{mol NaOH}} \times \frac{138.12 \text{ g C}_7\text{H}_6\text{O}_3}{\text{mol C}_7\text{H}_6\text{O}_3} = 0.4099 \text{ g C}_7\text{H}_6\text{O}_3$$

$$\frac{0.4099 \text{ g C}_7\text{H}_6\text{O}_3}{0.4208 \text{ g sample}} \times 100 = 97.41\% \text{ w/w C}_7\text{H}_6\text{O}_3$$

Because the purity of the sample is less than 99%, we reject the shipment.

Click [here](#) to return to the chapter.

Practice Exercise 9.7

The moles of HNO₃ produced by pulling the air sample through the solution of H₂O₂ is

$$\frac{0.01012 \text{ mol NaOH}}{\text{L}} \times 0.00914 \text{ L} \times \frac{1 \text{ mol HNO}_3}{\text{mol NaOH}} = 9.25 \times 10^{-5} \text{ mol HNO}_3$$

A conservation of mass on nitrogen requires that each mole of NO₂ in the sample of air produces one mole of HNO₃; thus, the mass of NO₂ in the sample is

$$9.25 \times 10^{-5} \text{ mol HNO}_3 \times \frac{1 \text{ mol NO}_2}{\text{mol HNO}_3} \times \frac{46.01 \text{ g NO}_2}{\text{mol NO}_2} = 4.26 \times 10^{-3} \text{ g NO}_2$$

and the concentration of NO₂ is

$$\frac{4.26 \times 10^{-3} \text{ g NO}_2}{5 \text{ L air}} \times \frac{1000 \text{ mg}}{\text{g}} = 0.852 \text{ mg NO}_2/\text{L air}$$

Click [here](#) to return to the chapter.

Practice Exercise 9.8

The total moles of HCl used in this analysis is

$$\frac{1.396 \text{ mol NaOH}}{\text{L}} \times 0.01000 \text{ L} = 1.396 \times 10^{-2} \text{ mol HCl}$$

Of this,

$$\frac{0.1004 \text{ mol NaOH}}{\text{L}} \times 0.03996 \text{ L} \times \frac{1 \text{ mol HCl}}{\text{mol NaOH}} = 4.012 \times 10^{-3} \text{ mol HCl}$$

are consumed in the back titration with NaOH, which means that

$1.396 \times 10^{-2} \text{ mol HCl} - 4.012 \times 10^{-3} \text{ mol HCl} = 9.95 \times 10^{-3} \text{ mol HCl}$ react with the CaCO_3 . Because CO_3^{2-} is dibasic, each mole of CaCO_3 consumes two moles of HCl; thus

$$9.95 \times 10^{-3} \text{ mol HCl} \times \frac{1 \text{ mol CaCO}_3}{2 \text{ mol HCl}} \times \frac{100.09 \text{ g CaCO}_3}{\text{mol CaCO}_3} = 0.498 \text{ g CaCO}_3$$

$$\frac{0.498 \text{ g CaCO}_3}{0.5143 \text{ g sample}} \times 100 = 96.8\% \text{ w/w CaCO}_3$$

Click [here](#) to return to the chapter.

Practice Exercise 9.9

Of the two analytes, 2-methylanilinium is the stronger acid and is the first to react with the titrant. Titrating to the bromocresol purple end point, therefore, provides information about the amount of 2-methylanilinium in the sample.

$$\frac{0.200 \text{ mol NaOH}}{\text{L}} \times 0.01965 \text{ L} \times \frac{1 \text{ mol C}_7\text{H}_{10}\text{NCl}}{\text{mol NaOH}} \times \frac{143.61 \text{ g C}_7\text{H}_{10}\text{NCl}}{\text{mol C}_7\text{H}_{10}\text{NCl}} = 0.564 \text{ g C}_7\text{H}_{10}\text{NCl}$$

$$\frac{0.564 \text{ g C}_7\text{H}_{10}\text{NCl}}{2.006 \text{ g sample}} \times 100 = 28.1\% \text{ w/w C}_7\text{H}_{10}\text{NCl}$$

Titrating from the bromocresol purple end point to the phenolphthalein end point, a total of $48.41 \text{ mL} - 19.65 \text{ mL}$, or 28.76 mL , gives the amount of NaOH reacting with 3-nitrophenol. The amount of 3-nitrophenol in the sample, therefore, is

$$\frac{0.200 \text{ mol NaOH}}{\text{L}} \times 0.02876 \text{ L} \times \frac{1 \text{ mol C}_6\text{H}_5\text{NO}_3}{\text{mol NaOH}} \\ \times \frac{139.11 \text{ g C}_6\text{H}_5\text{NO}_3}{\text{mol C}_6\text{H}_5\text{NO}_3} = 0.800 \text{ g C}_6\text{H}_5\text{NO}_3$$

$$\frac{0.800 \text{ g C}_6\text{H}_5\text{NO}_3}{2.006 \text{ g sample}} \times 100 = 38.8\% \text{ w/w C}_6\text{H}_5\text{NO}_3$$

Click [here](#) to return to the chapter.

Practice Exercise 9.10

The first of the two visible end points is approximately 37 mL of NaOH. The analyte's equivalent weight, therefore, is

$$\frac{0.1032 \text{ mol NaOH}}{\text{L}} \times 0.037 \text{ L} \times \frac{1 \text{ equivalent}}{\text{mol NaOH}} = 3.8 \times 10^{-3} \text{ equivalents}$$

$$EW = \frac{0.5000 \text{ g}}{3.8 \times 10^{-3} \text{ equivalents}} = 1.3 \times 10^2 \text{ g/equivalent}$$

Click [here](#) to return to the chapter.

Practice Exercise 9.11

At $\frac{1}{2}V_{\text{eq}}$, or approximately 18.5 mL, the pH is approximately 2.2; thus, we estimate that the analyte's pK_a is 2.2.

Click here to return to the chapter.

Practice Exercise 9.12

Let's begin with the calculations at a pH of 10. At a pH of 10 some of the EDTA is present in forms other than Y^{4-} . To evaluate the titration curve, therefore, we need the conditional formation constant for CdY^{2-} , which, from [Table 9.11](#) is $K_f' = 1.1 \times 10^{16}$. Note that the conditional formation constant is larger in the absence of an auxiliary complexing agent.

The titration's equivalence point requires

$$V_{\text{eq}} = V_{\text{EDTA}} = \frac{M_{\text{Cd}} V_{\text{Cd}}}{M_{\text{EDTA}}} = \frac{(5.00 \times 10^{-3} \text{ M})(50.0 \text{ mL})}{0.0100 \text{ M}} = 25.0 \text{ mL}$$

of EDTA.

Before the equivalence point, Cd^{2+} is present in excess and $p\text{Cd}$ is determined by the concentration of unreacted Cd^{2+} . For example, after adding 5.00 mL of EDTA, the total concentration of Cd^{2+} is

$$[\text{Cd}^{2+}] = \frac{(5.00 \times 10^{-3} \text{ M})(50.0 \text{ mL}) - (0.0100 \text{ M})(5.00 \text{ mL})}{50.0 \text{ mL} + 5.00 \text{ mL}}$$

$$= 3.64 \times 10^{-3} \text{ M}$$

which gives a pCd of 2.43.

At the equivalence point all the Cd^{2+} initially in the titrand is now present as CdY^{2-} . The concentration of Cd^{2+} , therefore, is determined by the dissociation of the CdY^{2-} complex. First, we calculate the concentration of CdY^{2-} .

$$[\text{CdY}^{2-}] = \frac{(5.00 \times 10^{-3} \text{ M})(50.0 \text{ mL})}{50.0 \text{ mL} + 25.0 \text{ mL}} = 3.33 \times 10^{-3} \text{ M}$$

Next, we solve for the concentration of Cd^{2+} in equilibrium with CdY^{2-} .

$$K_f' = \frac{[\text{CdY}^{2-}]}{[\text{Cd}^{2+}]C_{\text{EDTA}}} = \frac{3.33 \times 10^{-3} - x}{(x)(x)} = 1.1 \times 10^{16}$$

Solving gives $[\text{Cd}^{2+}]$ as $5.50 \times 10^{-10} \text{ M}$, or a pCd of 9.26 at the equivalence point.

After the equivalence point, EDTA is in excess and the concentration of Cd^{2+} is determined by the dissociation of the CdY^{2-} complex. First, we calculate the concentrations of CdY^{2-} and of unreacted EDTA. For example, after adding 30.0 mL of EDTA

$$[\text{CdY}^{2-}] = \frac{(5.00 \times 10^{-3} \text{ M})(50.0 \text{ mL})}{50.0 \text{ mL} + 30.0 \text{ mL}} = 3.13 \times 10^{-3} \text{ M}$$

$$C_{\text{EDTA}} = \frac{(0.0100 \text{ M})(30.0 \text{ mL}) - (5.00 \times 10^{-3} \text{ M})(50.0 \text{ mL})}{50.0 \text{ mL} + 30.0 \text{ mL}}$$

$$= 6.25 \times 10^{-4} \text{ M}$$

Substituting into the equation for the conditional formation constant and solving for $[\text{Cd}^{2+}]$ gives

$$\frac{3.13 \times 10^{-3} \text{ M}}{[\text{Cd}^{2+}](6.25 \times 10^{-4} \text{ M})} = 1.1 \times 10^{16}$$

$[\text{Cd}^{2+}]$ as $4.55 \times 10^{-16} \text{ M}$, or a pCd of 15.34.

The calculations at a pH of 7 are identical, except the conditional formation constant for CdY^{2-} is 1.5×10^{13} instead of 1.1×10^{16} . The following table summarizes results for these two titrations as well as the results from [Table 9.13](#) for the titration of Cd^{2+} at a pH of 10 in the presence of 0.0100 M NH_3 as an auxiliary complexing agent.

Volume of EDTA (mL)	pCd at pH 10	pCd	
		at pH 10 w/ 0.0100 M NH ₃	pCd at pH 7
0	2.30	3.36	2.30
5.00	2.43	3.49	2.43
10.0	2.60	3.66	2.60
15.0	2.81	3.87	2.81
20.0	3.15	4.20	3.15
23.0	3.56	4.62	3.56
25.0	9.26	9.77	7.83
27.0	14.94	14.95	12.08
30.0	15.34	15.33	12.48
35.0	15.61	15.61	12.78
40.0	15.76	15.76	12.95
45.0	15.86	15.86	13.08
50.0	15.94	15.94	13.18

Examining these results allows us to draw several conclusions. First, in the absence of an auxiliary complexing agent the titration curve before the equivalence point is independent of pH (compare columns 2 and 4). Second, for any pH, the titration curve after the equivalence point is the same regardless of whether or not an auxiliary complexing agent is present (compare columns 2 and 3). Third, the largest change in pH through the equivalence point occurs at higher pHs and in the absence of an auxiliary complexing agent. For example, from 23.0 mL to 27.0 mL of EDTA the change in pCd is 11.38 at a pH of 10, 10.33 at a pH of 10 and in the presence of 0.0100 M NH₃, and 8.52 at a pH of 7.

Click [here](#) to return to the chapter.

Practice Exercise 9.13

Figure 9.50 shows a sketch of the titration curves. The two points before the equivalence point ($V_{\text{EDTA}} = 5$ mL, $\text{pCd} = 2.43$ and $V_{\text{EDTA}} = 15$ mL, $\text{pCd} = 2.81$) are the same for both pHs and are taken from the results of [Practice Exercise 9.12](#). The two points after the equivalence point for a pH of 7 ($V_{\text{EDTA}} = 27.5$ mL, $\text{pCd} = 12.2$ and $V_{\text{EDTA}} = 50$ mL, $\text{pCd} = 13.2$) are plotted using the $\log K_f'$ of 13.2 for CdY^{2-} . The two points after the equivalence point for a pH of 10 ($V_{\text{EDTA}} = 27.5$ mL, $\text{pCd} = 15.0$ and $V_{\text{EDTA}} = 50$ mL, $\text{pCd} = 16.0$) are plotted using the $\log K_f'$ of 16.0 for CdY^{2-} .

Click [here](#) to return to the chapter.

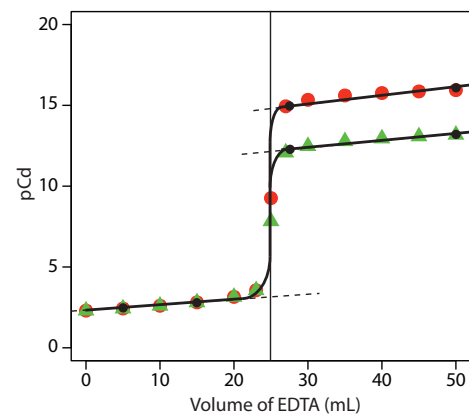


Figure 9.50 Titration curve for Practice Exercise 9.13. The black dots and curve are the approximate sketches of the two titration curves. The points in red are the calculations from Practice Exercise 9.12 for a pH of 10, and the points in green are the calculations from Practice Exercise 9.12 for a pH of 7.

Practice Exercise 9.14

In an analysis for hardness we treat the sample as if Ca^{2+} is the only metal ion reacting with EDTA. The grams of Ca^{2+} in the sample, therefore, is

$$\frac{0.0109 \text{ mol EDTA}}{\text{L}} \times 0.02363 \text{ L} \times \frac{1 \text{ mol Ca}^{2+}}{\text{mol EDTA}} = 2.58 \times 10^{-4} \text{ mol Ca}^{2+}$$

$$2.58 \times 10^{-4} \text{ mol Ca}^{2+} \times \frac{1 \text{ mol CaCO}_3}{\text{mol Ca}^{2+}} \times \frac{100.09 \text{ g CaCO}_3}{\text{mol CaCO}_3} = 0.0258 \text{ g CaCO}_3$$

and the sample's hardness is

$$\frac{0.0258 \text{ g CaCO}_3}{0.1000 \text{ L}} \times \frac{1000 \text{ mg}}{\text{g}} = 258 \text{ mg CaCO}_3/\text{L}$$

Click [here](#) to return to the chapter.

Practice Exercise 9.15

The titration of CN^- with Ag^+ produces a metal-ligand complex of $\text{Ag}(\text{CN})_2^{2-}$; thus, each mole of AgNO_3 reacts with two moles of NaCN . The grams of NaCN in the sample is

$$\frac{0.1018 \text{ mol AgNO}_3}{\text{L}} \times 0.03968 \text{ L} \times \frac{2 \text{ mol NaCN}}{\text{mol AgNO}_3} \times \frac{49.01 \text{ g NaCN}}{\text{mol NaCN}} = 0.3959 \text{ g NaCN}$$

and the purity of the sample is

$$\frac{0.3959 \text{ g NaCN}}{0.4482 \text{ g sample}} \times 100 = 88.33\% \text{ w/w NaCN}$$

Click [here](#) to return to the chapter.

Practice Exercise 9.16

The total moles of EDTA used in this analysis is

$$\frac{0.02011 \text{ mol EDTA}}{\text{L}} \times 0.02500 \text{ L} = 5.028 \times 10^{-4} \text{ mol EDTA}$$

Of this,

$$\frac{0.01113 \text{ mol Mg}^{2+}}{\text{L}} \times 0.00423 \text{ L} \times \frac{1 \text{ mol EDTA}}{\text{mol Mg}^{2+}} = 4.708 \times 10^{-5} \text{ mol EDTA}$$

are consumed in the back titration with Mg^{2+} , which means that

$$\begin{aligned} 5.028 \times 10^{-4} \text{ mol EDTA} - 4.708 \times 10^{-5} \text{ mol EDTA} \\ = 4.557 \times 10^{-4} \text{ mol EDTA} \end{aligned}$$

react with the BaSO_4 . Each mole of BaSO_4 reacts with one mole of EDTA; thus

$$\begin{aligned} 4.557 \times 10^{-4} \text{ mol EDTA} \times \frac{1 \text{ mol BaSO}_4}{\text{mol EDTA}} \times \\ \frac{1 \text{ mol Na}_2\text{SO}_4}{\text{mol BaSO}_4} \times \frac{142.04 \text{ g Na}_2\text{SO}_4}{\text{mol Na}_2\text{SO}_4} = 0.06473 \text{ g Na}_2\text{SO}_4 \end{aligned}$$

$$\frac{0.06473 \text{ g Na}_2\text{SO}_4}{0.1557 \text{ g sample}} \times 100 = 41.23\% \text{ w/w Na}_2\text{SO}_4$$

Click [here](#) to return to the chapter.

Practice Exercise 9.17

The volume of Tl^{3+} needed to reach the equivalence point is

$$V_{\text{eq}} = V_{\text{Tl}} = \frac{M_{\text{Sn}} V_{\text{Sn}}}{M_{\text{Tl}}} = \frac{(0.050 \text{ M})(50.0 \text{ mL})}{(0.100 \text{ M})} = 25.0 \text{ mL}$$

Before the equivalence point, the concentration of unreacted Sn^{2+} and the concentration of Sn^{4+} are easy to calculate. For this reason we find the potential using the Nernst equation for the $\text{Sn}^{4+}/\text{Sn}^{2+}$ half-reaction. For example, the concentrations of Sn^{2+} and Sn^{4+} after adding 10.0 mL of titrant are

$$[\text{Sn}^{2+}] = \frac{(0.050 \text{ M})(50.0 \text{ mL}) - (0.100 \text{ M})(10.0 \text{ mL})}{50.0 \text{ mL} + 10.0 \text{ mL}} = 0.0250 \text{ M}$$

$$[\text{Sn}^{4+}] = \frac{(0.100 \text{ M})(10.0 \text{ mL})}{50.0 \text{ mL} + 10.0 \text{ mL}} = 0.0167 \text{ M}$$

and the potential is

$$E = +0.139 \text{ V} - \frac{0.05916}{2} \log \frac{0.0250 \text{ M}}{0.0167 \text{ M}} = +0.134 \text{ V}$$

After the equivalence point, the concentration of Tl^+ and the concentration of excess Tl^{3+} are easy to calculate. For this reason we find the potential using the Nernst equation for the $\text{Tl}^{3+}/\text{Tl}^+$ half-reaction. For example, after adding 40.0 mL of titrant, the concentrations of Tl^+ and Tl^{3+} are

$$[\text{Tl}^+] = \frac{(0.0500 \text{ M})(50.0 \text{ mL})}{50.0 \text{ mL} + 40.0 \text{ mL}} = 0.0278 \text{ M}$$

$$[\text{Tl}^{3+}] = \frac{(0.100 \text{ M})(40.0 \text{ mL}) - (0.0500 \text{ M})(50.0 \text{ mL})}{50.0 \text{ mL} + 40.0 \text{ mL}} = 0.0167 \text{ M}$$

and the potential is

$$E = +0.77 \text{ V} - \frac{0.05916}{2} \log \frac{0.0278 \text{ M}}{0.0167 \text{ M}} = +0.76 \text{ V}$$

At the titration's equivalence point, the potential, E_{eq} , potential is

$$E_{\text{eq}} = \frac{0.139 \text{ V} + 0.77 \text{ V}}{2} = 0.45 \text{ V}$$

Some additional results are shown here.

Volume of Tl^{3+} (mL)	E (V)	Volume of Tl^{3+} (mL)	E (V)
5	0.121	30	0.75
10	0.134	35	0.75
15	0.144	40	0.76
20	0.157	45	0.76
25	0.45	50	0.76

Click [here](#) to return to the chapter.

Practice Exercise 9.18

Figure 9.51 shows a sketch of the titration curve. The two points before the equivalence point

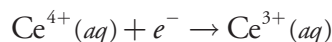
$V_{\text{Tl}} = 2.5 \text{ mL}$, $E = +0.109 \text{ V}$ and $V_{\text{Tl}} = 22.5 \text{ mL}$, $E = +0.169 \text{ V}$ are plotted using the redox buffer for $\text{Sn}^{4+}/\text{Sn}^{2+}$, which spans a potential range of $+0.139 \pm 0.5916/2$. The two points after the equivalence point

$V_{\text{Tl}} = 27.5 \text{ mL}$, $E = +0.74 \text{ V}$ and $V_{\text{EDTA}} = 50 \text{ mL}$, $E = +0.77 \text{ V}$ are plotted using the redox buffer for $\text{Tl}^{3+}/\text{Tl}^+$, which spans the potential range of $+0.139 \pm 0.5916/2$.

Click [here](#) to return to the chapter.

Practice Exercise 9.19

The two half reactions are



for which the Nernst equations are

$$E = E_{\text{Ce}^{4+}/\text{Ce}^{3+}}^{\circ} - \frac{0.05916}{1} \log \frac{[\text{Ce}^{3+}]}{[\text{Ce}^{4+}]}$$

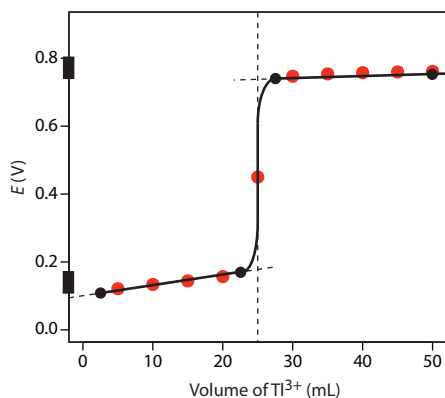


Figure 9.51 Titration curve for Practice Exercise 9.18. The black dots and curve are the approximate sketch of the titration curve. The points in red are the calculations from Practice Exercise 9.17.

$$E = E_{\text{UO}_2^{2+}/\text{U}^{4+}}^{\circ} - \frac{0.05916}{2} \log \frac{[\text{U}^{4+}]}{[\text{UO}_2^{2+}][\text{H}^+]^4}$$

Before adding these two equations together we must multiply the second equation by 2 so that we can combine the log terms; thus

$$3E = E_{\text{Ce}^{4+}/\text{Ce}^{3+}}^{\circ} + 2E_{\text{UO}_2^{2+}/\text{U}^{4+}}^{\circ} - 0.05916 \log \frac{[\text{Ce}^{3+}][\text{U}^{4+}]}{[\text{Ce}^{4+}][\text{UO}_2^{2+}][\text{H}^+]^4}$$

At the equivalence point we know that

$$[\text{Ce}^{3+}] = 2 \times [\text{UO}_2^{2+}]$$

$$[\text{Ce}^{4+}] = 2 \times [\text{U}^{4+}]$$

Substituting these equalities into the previous equation and rearranging gives us a general equation for the potential at the equivalence point.

$$3E = E_{\text{Ce}^{4+}/\text{Ce}^{3+}}^{\circ} + 2E_{\text{UO}_2^{2+}/\text{U}^{4+}}^{\circ} - 0.05916 \log \frac{2[\text{UO}_2^{2+}][\text{U}^{4+}]}{2[\text{U}^{4+}][\text{UO}_2^{2+}][\text{H}^+]^4}$$

$$E = \frac{E_{\text{Ce}^{4+}/\text{Ce}^{3+}}^{\circ} + 2E_{\text{UO}_2^{2+}/\text{U}^{4+}}^{\circ}}{3} - \frac{0.05916}{3} \log \frac{1}{[\text{H}^+]^4}$$

$$E = \frac{E_{\text{Ce}^{4+}/\text{Ce}^{3+}}^{\circ} + 2E_{\text{UO}_2^{2+}/\text{U}^{4+}}^{\circ}}{3} + \frac{0.05916 \times 4}{3} \log [\text{H}^+]$$

$$E = \frac{E_{\text{Ce}^{4+}/\text{Ce}^{3+}}^{\circ} + 2E_{\text{UO}_2^{2+}/\text{U}^{4+}}^{\circ}}{3} - 0.07888 \text{pH}$$

At a pH of 1 the equivalence point has a potential of

$$E_{\text{eq}} = \frac{1.72 + 2 \times 0.327}{3} - 0.07888 \times 1 = 0.712 \text{ V}$$

Click [here](#) to return to the chapter.

Practice Exercise 9.20

Because we have not been provided with a balanced reaction, let's use a conservation of electrons to deduce the stoichiometry. Oxidizing $\text{C}_2\text{O}_4^{2-}$, in which each carbon has a +3 oxidation state, to CO_2 , in which carbon has an oxidation state of +4, requires one electron per carbon, or a total of two electrons for each mole of $\text{C}_2\text{O}_4^{2-}$. Reducing MnO_4^- , in which each manganese is in the +7 oxidation state, to Mn^{2+} requires five electrons. A conservation of electrons for the titration, therefore, requires that two moles of KMnO_4 (10 moles of e^-) reacts with five moles of $\text{Na}_2\text{C}_2\text{O}_4$ (10 moles of e^-).

The moles of KMnO_4 used in reaching the end point is

$$(0.0400 \text{ M KMnO}_4) \times (0.03562 \text{ L KMnO}_4) \\ = 1.42 \times 10^{-3} \text{ mol KMnO}_4$$

which means that the sample contains

$$1.42 \times 10^{-3} \text{ mol KMnO}_4 \times \frac{5 \text{ mol Na}_2\text{C}_2\text{O}_4}{2 \text{ mol KMnO}_4} = 3.55 \times 10^{-3} \text{ mol Na}_2\text{C}_2\text{O}_4$$

Thus, the %w/w $\text{Na}_2\text{C}_2\text{O}_4$ in the sample of ore is

$$3.55 \times 10^{-3} \text{ mol Na}_2\text{C}_2\text{O}_4 \times \frac{134.00 \text{ g Na}_2\text{C}_2\text{O}_4}{\text{mol Na}_2\text{C}_2\text{O}_4} = 0.476 \text{ g Na}_2\text{C}_2\text{O}_4$$

$$\frac{0.476 \text{ g Na}_2\text{C}_2\text{O}_4}{0.5116 \text{ g sample}} \times 100 = 93.0\% \text{ w/w Na}_2\text{C}_2\text{O}_4$$

Click [here](#) to return to the chapter.

Practice Exercise 9.21

For a back titration we need to determine the stoichiometry between $\text{Cr}_2\text{O}_7^{2-}$ and the analyte, $\text{C}_2\text{H}_6\text{O}$, and between $\text{Cr}_2\text{O}_7^{2-}$ and the titrant, Fe^{2+} . In oxidizing ethanol to acetic acid, the oxidation state of carbon changes from -2 in $\text{C}_2\text{H}_6\text{O}$ to 0 in $\text{C}_2\text{H}_4\text{O}_2$. Each carbon releases two electrons, or a total of four electrons per $\text{C}_2\text{H}_6\text{O}$. In reducing $\text{Cr}_2\text{O}_7^{2-}$, in which each chromium has an oxidation state of $+6$, to Cr^{3+} , each chromium loses three electrons, for a total of six electrons per $\text{Cr}_2\text{O}_7^{2-}$. Oxidation of Fe^{2+} to Fe^{3+} requires one electron. A conservation of electrons requires that each mole of $\text{K}_2\text{Cr}_2\text{O}_7$ (6 moles of e^-) reacts with six moles of Fe^{2+} (6 moles of e^-), and that four moles of $\text{K}_2\text{Cr}_2\text{O}_7$ (24 moles of e^-) react with six moles of $\text{C}_2\text{H}_6\text{O}$ (24 moles of e^-).

The total moles of $\text{K}_2\text{Cr}_2\text{O}_7$ reacting with $\text{C}_2\text{H}_6\text{O}$ and with Fe^{2+} is

$$(0.0200 \text{ M K}_2\text{Cr}_2\text{O}_7) \times (0.05000 \text{ L I}^-) = 1.00 \times 10^{-3} \text{ mol K}_2\text{Cr}_2\text{O}_7$$

The back titration with Fe^{2+} consumes

$$0.02148 \text{ L Fe}^{2+} \times \frac{0.1014 \text{ mol Fe}^{2+}}{\text{L Fe}^{2+}} \times \\ \frac{1 \text{ mol K}_2\text{Cr}_2\text{O}_7}{6 \text{ mol Fe}^{2+}} = 3.63 \times 10^{-4} \text{ mol K}_2\text{Cr}_2\text{O}_7$$

Subtracting the moles of $\text{K}_2\text{Cr}_2\text{O}_7$ reacting with Fe^{2+} from the total moles of $\text{K}_2\text{Cr}_2\text{O}_7$ gives the moles reacting with the analyte.

$$1.00 \times 10^{-3} \text{ K}_2\text{Cr}_2\text{O}_7 - 3.63 \times 10^{-4} \text{ mol K}_2\text{Cr}_2\text{O}_7 \\ = 6.37 \times 10^{-4} \text{ mol K}_2\text{Cr}_2\text{O}_7$$

The grams of ethanol in the 10.00-mL sample of diluted brandy is

$$6.37 \times 10^{-4} \text{ mol K}_2\text{Cr}_2\text{O}_7 \times \frac{6 \text{ mol C}_2\text{H}_6\text{O}}{4 \text{ mol K}_2\text{Cr}_2\text{O}_7} \times \frac{46.50 \text{ g C}_2\text{H}_6\text{O}}{\text{mol C}_2\text{H}_6\text{O}} = 0.0444 \text{ g C}_2\text{H}_6\text{O}$$

The %w/v C₂H₆O in the brandy is

$$\frac{0.0444 \text{ g C}_2\text{H}_6\text{O}}{10.00 \text{ mL dilute brandy}} \times \frac{500.0 \text{ mL dilute brandy}}{5.00 \text{ mL brandy}} \times 100 = 44.4\% \text{ w/v C}_2\text{H}_6\text{O}$$

Click [here](#) to return to the chapter.

Practice Exercise 9.22

The first task is to calculate the volume of NaCl needed to reach the equivalence point; thus

$$V_{\text{eq}} = V_{\text{NaCl}} = \frac{M_{\text{Ag}} V_{\text{Ag}}}{M_{\text{NaCl}}} = \frac{(0.0500 \text{ M})(50.0 \text{ mL})}{(0.100 \text{ M})} = 25.0 \text{ mL}$$

Before the equivalence point the titrand, Ag⁺, is in excess. The concentration of unreacted Ag⁺ after adding 10.0 mL of NaCl, for example, is

$$[\text{Ag}^+] = \frac{(0.0500 \text{ M})(50.0 \text{ mL}) - (0.100 \text{ M})(10.0 \text{ mL})}{50.0 \text{ mL} + 10.0 \text{ mL}} = 2.50 \times 10^{-2} \text{ M}$$

which corresponds to a pAg of 1.60. To find the concentration of Cl⁻ we use the K_{sp} for AgCl; thus

$$[\text{Cl}^-] = \frac{K_{\text{sp}}}{[\text{Ag}^+]} = \frac{1.8 \times 10^{-10}}{2.50 \times 10^{-2}} = 7.2 \times 10^{-9} \text{ M}$$

or a pCl of 8.14.

At the titration's equivalence point, we know that the concentrations of Ag⁺ and Cl⁻ are equal. To calculate their concentrations we use the K_{sp} expression for AgCl; thus

$$K_{\text{sp}} = [\text{Ag}^+][\text{Cl}^-] = (x)(x) = 1.8 \times 10^{-10}$$

Solving for x gives a concentration of Ag⁺ and the concentration of Cl⁻ as $1.3 \times 10^{-5} \text{ M}$, or a pAg and a pCl of 4.89.

After the equivalence point, the titrant is in excess. For example, after adding 35.0 mL of titrant

$$[\text{Cl}^-] = \frac{(0.100 \text{ M})(35.0 \text{ mL}) - (0.0500 \text{ M})(50.0 \text{ mL})}{50.0 \text{ mL} + 35.0 \text{ mL}} = 1.18 \times 10^{-2} \text{ M}$$

or a pCl of 1.93. To find the concentration of Ag^+ we use the K_{sp} for AgCl; thus

$$[\text{Ag}^+] = \frac{K_{\text{sp}}}{[\text{Cl}^-]} = \frac{1.8 \times 10^{-10}}{1.18 \times 10^{-2}} = 1.5 \times 10^{-8} \text{ M}$$

or a pAg of 7.82. The following table summarizes additional results for this titration.

Volume of NaCl (mL)	pAg	pCl
0	1.30	–
5.00	1.44	8.31
10.0	1.60	8.14
15.0	1.81	7.93
20.0	2.15	7.60
25.0	4.89	4.89
30.0	7.54	2.20
35.0	7.82	1.93
40.0	7.97	1.78
45.0	8.07	1.68
50.0	8.14	1.60

Click [here](#) to return to the chapter.

Practice Exercise 9.23

The titration uses

$$\frac{0.1078 \text{ M KSCN}}{\text{L}} \times 0.02719 \text{ L} = 2.931 \times 10^{-3} \text{ mol KSCN}$$

The stoichiometry between SCN^- and Ag^+ is 1:1; thus, there are

$$2.931 \times 10^{-3} \text{ mol Ag}^+ \times \frac{107.87 \text{ g Ag}}{\text{mol Ag}} = 0.3162 \text{ g Ag}$$

in the 25.00 mL sample. Because this represents $\frac{1}{4}$ of the total solution, there are 0.3162×4 or 1.265 g Ag in the alloy. The %w/w Ag in the alloy is

$$\frac{1.265 \text{ g Ag}}{1.963 \text{ g sample}} \times 100 = 64.44\% \text{ w/w Ag}$$

Click [here](#) to return to the chapter.

Chapter 10

Spectroscopic Methods

Chapter Overview

Section 10A	Overview of Spectroscopy
Section 10B	Spectroscopy Based on Absorption
Section 10C	UV/Vis and IR Spectroscopy
Section 10D	Atomic Absorption Spectroscopy
Section 10E	Emission Spectroscopy
Section 10F	Photoluminescent Spectroscopy
Section 10G	Atomic Emission Spectroscopy
Section 10H	Spectroscopy Based on Scattering
Section 10I	Key Terms
Section 10J	Chapter Summary
Section 10K	Problems
Section 10L	Solutions to Practice Exercises

An early example of a colorimetric analysis is Nessler's method for ammonia, which was introduced in 1856. Nessler found that adding an alkaline solution of HgI_2 and KI to a dilute solution of ammonia produces a yellow to reddish brown colloid, with the colloid's color depending on the concentration of ammonia. By visually comparing the color of a sample to the colors of a series of standards, Nessler was able to determine the concentration of ammonia.

Colorimetry, in which a sample absorbs visible light, is one example of a spectroscopic method of analysis. At the end of the nineteenth century, spectroscopy was limited to the absorption, emission, and scattering of visible, ultraviolet, and infrared electromagnetic radiation. Since its introduction, spectroscopy has expanded to include other forms of electromagnetic radiation—such as X-rays, microwaves, and radio waves—and other energetic particles—such as electrons and ions.

10A Overview of Spectroscopy

The focus of this chapter is on the interaction of ultraviolet, visible, and infrared radiation with matter. Because these techniques use optical materials to disperse and focus the radiation, they often are identified as optical spectroscopies. For convenience we will use the simpler term **SPECTROSCOPY** in place of optical spectroscopy; however, you should understand that we are considering only a limited part of a much broader area of analytical techniques.

Despite the difference in instrumentation, all spectroscopic techniques share several common features. Before we consider individual examples in greater detail, let's take a moment to consider some of these similarities. As you work through the chapter, this overview will help you focus on similarities between different spectroscopic methods of analysis. You will find it easier to understand a new analytical method when you can see its relationship to other similar methods.



Figure 10.1 The Golden Gate bridge as seen through rain drops. Refraction of light by the rain drops produces the distorted images. Source: [Mila Zinkova](#) (commons.wikimedia.org).

10A.1 What is Electromagnetic Radiation

ELECTROMAGNETIC RADIATION—light—is a form of energy whose behavior is described by the properties of both waves and particles. Some properties of electromagnetic radiation, such as its refraction when it passes from one medium to another (Figure 10.1), are explained best by describing light as a wave. Other properties, such as absorption and emission, are better described by treating light as a particle. The exact nature of electromagnetic radiation remains unclear, as it has since the development of quantum mechanics in the first quarter of the 20th century.¹ Nevertheless, the dual models of wave and particle behavior provide a useful description for electromagnetic radiation.

WAVE PROPERTIES OF ELECTROMAGNETIC RADIATION

Electromagnetic radiation consists of oscillating electric and magnetic fields that propagate through space along a linear path and with a constant velocity. In a vacuum electromagnetic radiation travels at the speed of light, c , which is 2.99792×10^8 m/s. When electromagnetic radiation moves through a medium other than a vacuum its velocity, v , is less than the speed of light in a vacuum. The difference between v and c is sufficiently small (<0.1%) that the speed of light to three significant figures, 3.00×10^8 m/s, is accurate enough for most purposes.

The oscillations in the electric and magnetic fields are perpendicular to each other, and to the direction of the wave's propagation. [Figure 10.2](#) shows an example of plane-polarized electromagnetic radiation, consisting of a single oscillating electric field and a single oscillating magnetic field.

An electromagnetic wave is characterized by several fundamental properties, including its velocity, amplitude, frequency, phase angle, polariza-

¹ Home, D.; Gribbin, J. *New Scientist* 1991, 2 Nov. 30–33.

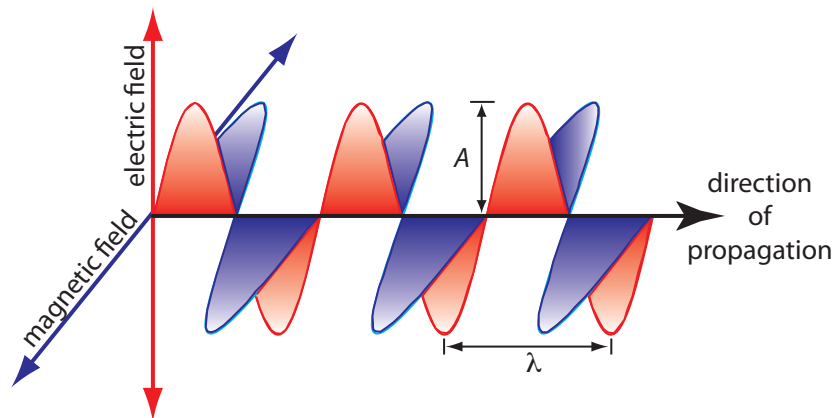


Figure 10.2 Plane-polarized electromagnetic radiation showing the oscillating electric field in red and the oscillating magnetic field in blue. The radiation's amplitude, A , and its wavelength, λ , are shown. Normally, electromagnetic radiation is unpolarized, with oscillating electric and magnetic fields present in all possible planes perpendicular to the direction of propagation.

tion, and direction of propagation.² For example, the amplitude of the oscillating electric field at any point along the propagating wave is

$$A_t = A_e \sin(2\pi\nu t + \Phi)$$

where A_t is the magnitude of the electric field at time t , A_e is the electric field's maximum **AMPLITUDE**, ν is the wave's **FREQUENCY**—the number of oscillations in the electric field per unit time—and Φ is a **PHASE ANGLE**, which accounts for the fact that A_t need not have a value of zero at $t=0$. The identical equation for the magnetic field is

$$A_t = A_m \sin(2\pi\nu t + \Phi)$$

where A_m is the magnetic field's maximum amplitude.

Other properties also are useful for characterizing the wave behavior of electromagnetic radiation. The **WAVELENGTH**, λ , is defined as the distance between successive maxima (see Figure 10.2). For ultraviolet and visible electromagnetic radiation the wavelength is usually expressed in nanometers ($1 \text{ nm} = 10^{-9} \text{ m}$), and for infrared radiation it is given in microns ($1 \mu\text{m} = 10^{-6} \text{ m}$). The relationship between wavelength and frequency is

$$\lambda = \frac{c}{\nu}$$

Another unit useful unit is the **WAVENUMBER**, $\bar{\nu}$, which is the reciprocal of wavelength

$$\bar{\nu} = \frac{1}{\lambda}$$

Wavenumbers are frequently used to characterize infrared radiation, with the units given in cm^{-1} .

When electromagnetic radiation moves between different media—for example, when it moves from air into water—its frequency, ν , remains constant. Because its velocity depends upon the medium in which it is traveling, the electromagnetic radiation's wavelength, λ , changes. If we replace the speed of light in a vacuum, c , with its speed in the medium, v , then the wavelength is

$$\lambda = \frac{v}{\nu}$$

This change in wavelength as light passes between two media explains the refraction of electromagnetic radiation shown in Figure 10.1.

² Ball, D. W. *Spectroscopy* **1994**, *9*(5), 24–25.

Example 10.1

In 1817, Josef Fraunhofer studied the spectrum of solar radiation, observing a continuous spectrum with numerous dark lines. Fraunhofer labeled the most prominent of the dark lines with letters. In 1859, Gustav Kirchhoff showed that the D line in the sun's spectrum was due to the absorption of solar radiation by sodium atoms. The wavelength of the sodium D line is 589 nm. What are the frequency and the wavenumber for this line?

SOLUTION

The frequency and wavenumber of the sodium D line are

$$\nu = \frac{c}{\lambda} = \frac{3.00 \times 10^8 \text{ m/s}}{589 \times 10^{-9} \text{ m}} = 5.09 \times 10^{14} \text{ s}^{-1}$$

$$\bar{\nu} = \frac{1}{\lambda} = \frac{1}{589 \times 10^{-9} \text{ m}} \times \frac{1 \text{ m}}{100 \text{ cm}} = 1.70 \times 10^4 \text{ cm}^{-1}$$

Practice Exercise 10.1

Another historically important series of spectral lines is the Balmer series of emission lines from hydrogen. One of the lines has a wavelength of 656.3 nm. What are the frequency and the wavenumber for this line?

Click [here](#) to review your answer to this exercise.

PARTICLE PROPERTIES OF ELECTROMAGNETIC RADIATION

When matter absorbs electromagnetic radiation it undergoes a change in energy. The interaction between matter and electromagnetic radiation is easiest to understand if we assume that radiation consists of a beam of energetic particles called photons. When a **PHOTON** is absorbed by a sample it is “destroyed,” and its energy acquired by the sample.³ The energy of a photon, in joules, is related to its frequency, wavelength, and wavenumber by the following equalities

$$E = h\nu = \frac{hc}{\lambda} = hc\bar{\nu}$$

where h is Planck's constant, which has a value of $6.626 \times 10^{-34} \text{ J}\cdot\text{s}$.

Example 10.2

What is the energy of a photon from the sodium D line at 589 nm?

SOLUTION

The photon's energy is

³ Ball, D. W. *Spectroscopy* **1994**, *9(6)* 20–21.

$$E = \frac{hc}{\lambda} = \frac{(6.626 \times 10^{-34} \text{ J} \cdot \text{s})(3.00 \times 10^8 \text{ m/s})}{589 \times 10^{-9} \text{ m}} = 3.37 \times 10^{-19} \text{ J}$$

Practice Exercise 10.2

What is the energy of a photon for the Balmer line at a wavelength of 656.3 nm?

Click [here](#) to review your answer to this exercise.

THE ELECTROMAGNETIC SPECTRUM

The frequency and wavelength of electromagnetic radiation vary over many orders of magnitude. For convenience, we divide electromagnetic radiation into different regions—the **ELECTROMAGNETIC SPECTRUM**—based on the type of atomic or molecular transition that gives rise to the absorption or emission of photons (Figure 10.3). The boundaries between the regions of the electromagnetic spectrum are not rigid, and overlap between spectral regions is possible.

10A.2 Photons as a Signal Source

In the previous section we defined several characteristic properties of electromagnetic radiation, including its energy, velocity, amplitude, frequency, phase angle, polarization, and direction of propagation. A spectroscopic measurement is possible only if the photon's interaction with the sample leads to a change in one or more of these characteristic properties.

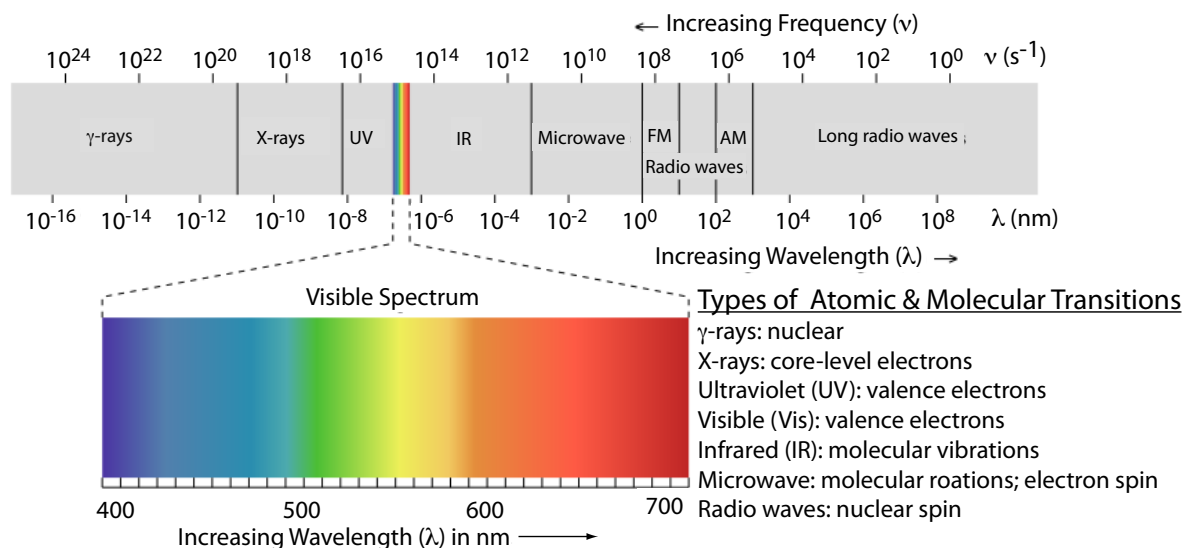


Figure 10.3 The electromagnetic spectrum showing the boundaries between different regions and the type of atomic or molecular transition responsible for the change in energy. The colored inset shows the visible spectrum. Source: modified from [Zedh](http://www.commonswikipedia.org) (www.commonswikipedia.org).

Table 10.1 Examples of Spectroscopic Techniques Involving an Exchange of Energy Between a Photon and the Sample

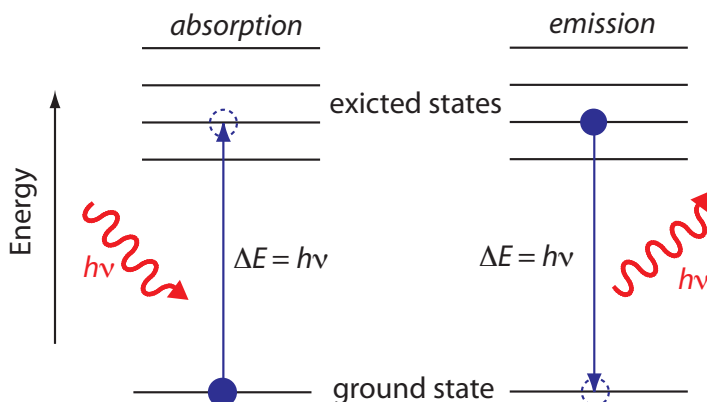
Type of Energy Transfer	Region of Electromagnetic Spectrum	Spectroscopic Technique ^a
absorption	γ -ray	Mossbauer spectroscopy
	X-ray	X-ray absorption spectroscopy
	UV/Vis	<i>UV/Vis spectroscopy</i> <i>atomic absorption spectroscopy</i>
	IR	<i>infrared spectroscopy</i> raman spectroscopy
	Microwave	microwave spectroscopy
	Radio wave	electron spin resonance spectroscopy nuclear magnetic resonance spectroscopy
emission (thermal excitation)	UV/Vis	<i>atomic emission spectroscopy</i>
photoluminescence	X-ray	X-ray fluorescence
	UV/Vis	<i>fluorescence spectroscopy</i> <i>phosphorescence spectroscopy</i> atomic fluorescence spectroscopy
	chemiluminescence	UV/Vis

^a Techniques discussed in this text are shown in *italics*.

We can divide spectroscopy into two broad classes of techniques. In one class of techniques there is a transfer of energy between the photon and the sample. Table 10.1 provides a list of several representative examples.

In absorption spectroscopy a photon is absorbed by an atom or molecule, which undergoes a transition from a lower-energy state to a higher-energy, or excited state (Figure 10.4). The type of transition depends on the photon's energy. The electromagnetic spectrum in [Figure 10.3](#), for example, shows that absorbing a photon of visible light promotes one of the atom's or molecule's valence electrons to a higher-energy level. When an molecule absorbs infrared radiation, on the other hand, one of its chemical bonds experiences a change in vibrational energy.

Figure 10.4 Simplified energy diagram showing the absorption and emission of a photon by an atom or a molecule. When a photon of energy $h\nu$ strikes the atom or molecule, absorption may occur if the difference in energy, ΔE , between the ground state and the excited state is equal to the photon's energy. An atom or molecule in an excited state may emit a photon and return to the ground state. The photon's energy, $h\nu$, equals the difference in energy, ΔE , between the two states.



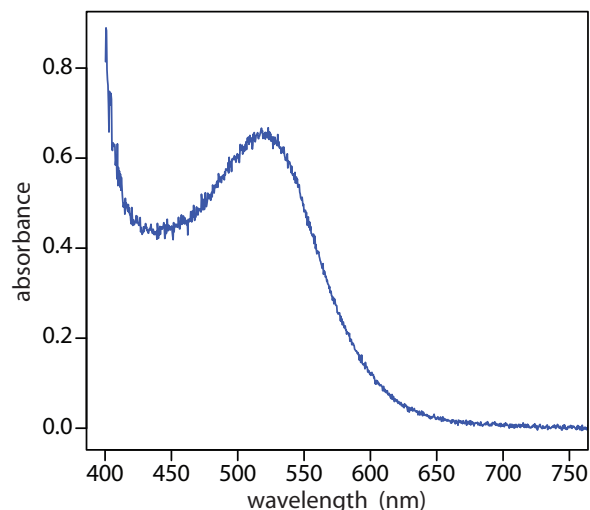


Figure 10.5 Visible absorbance spectrum for cranberry juice. The anthocyanin dyes in cranberry juice absorb visible light with blue, green, and yellow wavelengths (see [Figure 10.3](#)). As a result, the juice appears red.

When it absorbs electromagnetic radiation the number of photons passing through a sample decreases. The measurement of this decrease in photons, which we call **ABSORBANCE**, is a useful analytical signal. Note that each of the energy levels in [Figure 10.4](#) has a well-defined value because they are quantized. Absorption occurs only when the photon's energy, $h\nu$, matches the difference in energy, ΔE , between two energy levels. A plot of absorbance as a function of the photon's energy is called an **ABSORBANCE SPECTRUM**. [Figure 10.5](#), for example, shows the absorbance spectrum of cranberry juice.

When an atom or molecule in an excited state returns to a lower energy state, the excess energy often is released as a photon, a process we call **EMISSION** ([Figure 10.4](#)). There are several ways in which an atom or molecule may end up in an excited state, including thermal energy, absorption of a photon, or by a chemical reaction. Emission following the absorption of a photon is also called **PHOTOLUMINESCENCE**, and that following a chemical reaction is called **CHEMILUMINESCENCE**. A typical emission spectrum is shown in [Figure 10.6](#).

Molecules also can release energy in the form of heat. We will return to this point later in the chapter.

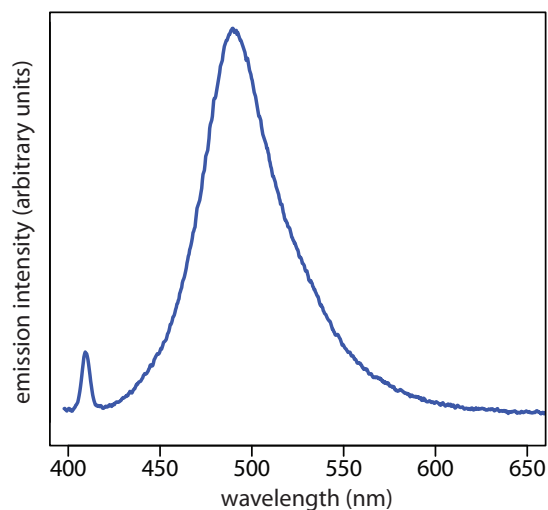


Figure 10.6 Photoluminescence spectrum of the dye coumarin 343, which is incorporated in a reverse micelle suspended in cyclohexanol. The dye's absorbance spectrum (not shown) has a broad peak around 400 nm. The sharp peak at 409 nm is from the laser source used to excite coumarin 343. The broad band centered at approximately 500 nm is the dye's emission band. Because the dye absorbs blue light, a solution of coumarin 343 appears yellow in the absence of photoluminescence. Its photoluminescent emission is blue-green. Source: data from Bridget Gourley, Department of Chemistry & Biochemistry, DePauw University).

Table 10.2 Examples of Spectroscopic Techniques That Do Not Involve an Exchange of Energy Between a Photon and the Sample

Region of Electromagnetic Spectrum	Type of Interaction	Spectroscopic Technique ^a
X-ray	diffraction	X-ray diffraction
UV/Vis	refraction	refractometry
	scattering	<i>nephelometry</i> <i>turbidimetry</i>
	dispersion	optical rotary dispersion

^a Techniques discussed in this text are shown in *italics*.

In the second broad class of spectroscopic techniques, the electromagnetic radiation undergoes a change in amplitude, phase angle, polarization, or direction of propagation as a result of its refraction, reflection, scattering, diffraction, or dispersion by the sample. Several representative spectroscopic techniques are listed in Table 10.2.

10A.3 Basic Components of Spectroscopic Instruments

The spectroscopic techniques in [Table 10.1](#) and Table 10.2 use instruments that share several common basic components, including a source of energy, a means for isolating a narrow range of wavelengths, a detector for measuring the signal, and a signal processor that displays the signal in a form convenient for the analyst. In this section we introduce these basic components. Specific instrument designs are considered in later sections.

SOURCES OF ENERGY

All forms of spectroscopy require a source of energy. In absorption and scattering spectroscopy this energy is supplied by photons. Emission and photoluminescence spectroscopy use thermal, radiant (photon), or chemical energy to promote the analyte to a suitable excited state.

Sources of Electromagnetic Radiation. A source of electromagnetic radiation must provide an output that is both intense and stable. Sources of electromagnetic radiation are classified as either continuum or line sources. A **CONTINUUM SOURCE** emits radiation over a broad range of wavelengths, with a relatively smooth variation in intensity (Figure 10.7). A **LINE SOURCE**, on the other hand, emits radiation at selected wavelengths ([Figure 10.8](#)). [Table 10.3](#) provides a list of the most common sources of electromagnetic radiation.

Sources of Thermal Energy. The most common sources of thermal energy are flames and plasmas. Flames sources use the combustion of a fuel and an oxidant to achieve temperatures of 2000–3400 K. Plasmas, which are hot, ionized gases, provide temperatures of 6000–10 000 K.

You will find a more detailed treatment of these components in the [additional resources](#) for this chapter.

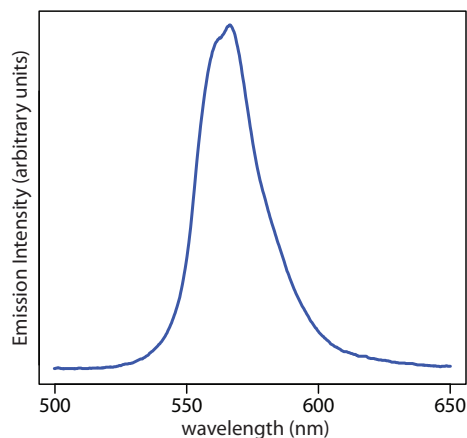


Figure 10.7 Spectrum showing the emission from a green LED, which provides continuous emission over a wavelength range of approximately 530–640 nm.

Table 10.3 Common Sources of Electromagnetic Radiation

Source	Wavelength Region	Useful for...
H ₂ and D ₂ lamp	continuum source from 160–380 nm	molecular absorption
tungsten lamp	continuum source from 320–2400 nm	molecular absorption
Xe arc lamp	continuum source from 200–1000 nm	molecular fluorescence
nernst glower	continuum source from 0.4–20 μm	molecular absorption
globalar	continuum source from 1–40 μm	molecular absorption
nichrome wire	continuum source from 0.75–20 μm	molecular absorption
hollow cathode lamp	line source in UV/Visible	atomic absorption
Hg vapor lamp	line source in UV/Visible	molecular fluorescence
laser	line source in UV/Visible/IR	atomic and molecular absorption, fluorescence, and scattering

Chemical Sources of Energy Exothermic reactions also may serve as a source of energy. In chemiluminescence the analyte is raised to a higher-energy state by means of a chemical reaction, emitting characteristic radiation when it returns to a lower-energy state. When the chemical reaction results from a biological or enzymatic reaction, the emission of radiation is called bioluminescence. Commercially available “light sticks” and the flash of light from a firefly are examples of chemiluminescence and bioluminescence.

WAVELENGTH SELECTION

In Nessler’s original colorimetric method for ammonia, described at the beginning of the chapter, the sample and several standard solutions of ammonia are placed in separate tall, flat-bottomed tubes. As shown in [Figure 10.9](#), after adding the reagents and allowing the color to develop, the analyst evaluates the color by passing natural, ambient light through the bottom of the tubes and looking down through the solutions. By matching the sample’s color to that of a standard, the analyst is able to determine the concentration of ammonia in the sample.

In [Figure 10.9](#) every wavelength of light from the source passes through the sample. If there is only one absorbing species, this is not a problem. If two components in the sample absorb different wavelengths of light, then a quantitative analysis using Nessler’s original method becomes impossible. Ideally we want to select a wavelength that only the analyte absorbs. Unfortunately, we can not isolate a single wavelength of radiation from a continuum source. As shown in [Figure 10.10](#), a wavelength selector passes a narrow band of radiation characterized by a **NOMINAL WAVELENGTH**, an **EFFECTIVE BANDWIDTH** and a maximum throughput of radiation. The effective bandwidth is defined as the width of the radiation at half of its maximum throughput.

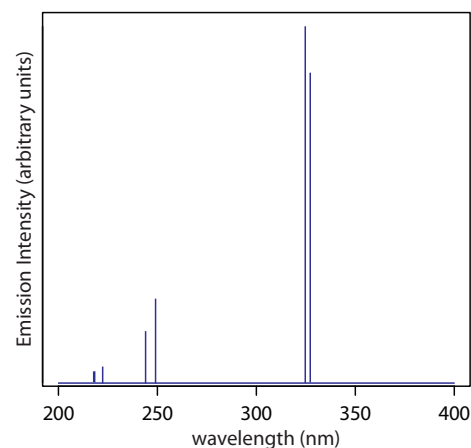


Figure 10.8 Emission spectrum from a Cu hollow cathode lamp. This spectrum consists of seven distinct emission lines (the first two differ by only 0.4 nm and are not resolved in this spectrum). Each emission line has a width of approximately 0.01 nm at ½ of its maximum intensity.

Figure 10.9 Nessler's original method for comparing the color of two solutions. Natural light passes upwards through the samples and standards and the analyst views the solutions by looking down toward the light source. The top view, shown on the right, is what the analyst sees. To determine the analyte's concentration, the analyst exchanges standards until the two colors match.

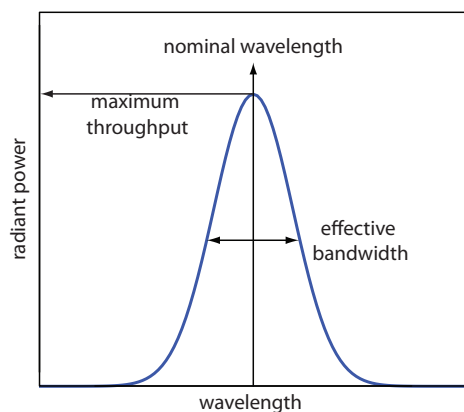
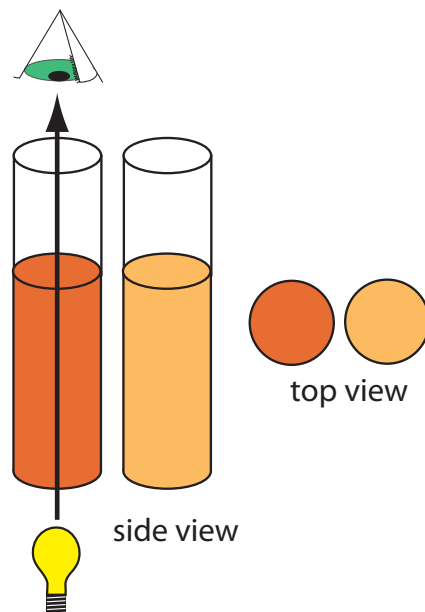


Figure 10.10 Radiation exiting a wavelength selector showing the band's nominal wavelength and its effective bandwidth.

The ideal wavelength selector has a high throughput of radiation and a narrow effective bandwidth. A high throughput is desirable because more photons pass through the wavelength selector, giving a stronger signal with less background noise. A narrow effective bandwidth provides a higher **RESOLUTION**, with spectral features separated by more than twice the effective bandwidth being resolved. As shown in [Figure 10.11](#), these two features of a wavelength selector generally are in opposition. Conditions favoring a higher throughput of radiation usually provide less resolution. Decreasing the effective bandwidth improves resolution, but at the cost of a noisier signal.⁴ For a qualitative analysis, resolution is usually more important than noise, and a smaller effective bandwidth is desirable. In a quantitative analysis less noise is usually desirable.

Wavelength Selection Using Filters. The simplest method for isolating a narrow band of radiation is to use an absorption or interference **FILTER**. Absorption filters work by selectively absorbing radiation from a narrow region of the electromagnetic spectrum. Interference filters use constructive and destructive interference to isolate a narrow range of wavelengths. A simple example of an absorption filter is a piece of colored glass. A purple filter, for example, removes the complementary color green from 500–560 nm. Commercially available absorption filters provide effective bandwidths of 30–250 nm, although the throughput may be only 10% of the source's emission intensity at the low end of this range. Interference filters are more expensive than absorption filters, but have narrower effective bandwidths, typically 10–20 nm, with maximum throughputs of at least 40%.

Wavelength Selection Using Monochromators. A filter has one significant limitation—because a filter has a fixed nominal wavelength, if you need to make measurements at two different wavelengths, then you need to use two

⁴ Jiang, S.; Parker, G. A. *Am. Lab.* **1981**, October, 38–43.

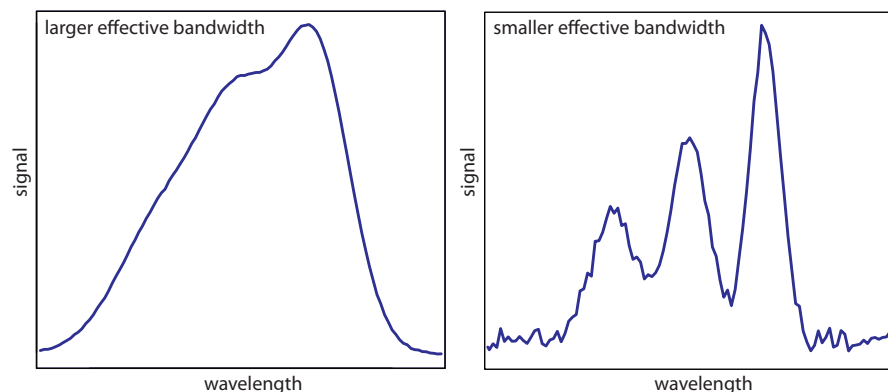


Figure 10.11 Example showing the effect of the wavelength selector's effective bandwidth on resolution and noise. The spectrum with the smaller effective bandwidth has a better resolution, allowing us to see the presence of three peaks, but at the expense of a noisier signal. The spectrum with the larger effective bandwidth has less noise, but at the expense of less resolution between the three peaks.

different filters. A **MONOCHROMATOR** is an alternative method for selecting a narrow band of radiation that also allows us to continuously adjust the band's nominal wavelength.

The construction of a typical monochromator is shown in Figure 10.12. Radiation from the source enters the monochromator through an entrance slit. The radiation is collected by a collimating mirror, which reflects a parallel beam of radiation to a diffraction grating. The diffraction grating is an optically reflecting surface with a large number of parallel grooves (see insert to Figure 10.12). The diffraction grating disperses the radiation and a second mirror focuses the radiation onto a planar surface containing an exit slit. In some monochromators a prism is used in place of the diffraction grating.

Radiation exits the monochromator and passes to the detector. As shown in Figure 10.12, a monochromator converts a **POLYCHROMATIC** source of

Polychromatic means many colored. Polychromatic radiation contains many different wavelengths of light.

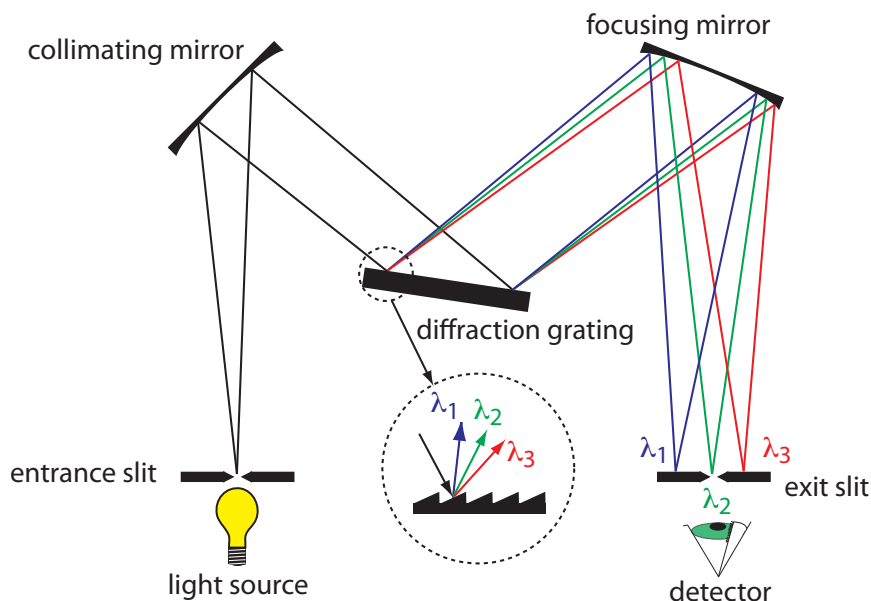


Figure 10.12 Schematic diagram of a monochromator that uses a diffraction grating to disperse the radiation.

Monochromatic means one color, or one wavelength. Although the light exiting a monochromator is not strictly of a single wavelength, its narrow effective bandwidth allows us to think of it as monochromatic.

radiation at the entrance slit to a **MONOCHROMATIC** source of finite effective bandwidth at the exit slit. The choice of which wavelength exits the monochromator is determined by rotating the diffraction grating. A narrower exit slit provides a smaller effective bandwidth and better resolution, but allows a smaller throughput of radiation.

Monochromators are classified as either fixed-wavelength or scanning. In a fixed-wavelength monochromator we select the wavelength by manually rotating the grating. Normally a fixed-wavelength monochromator is used for a quantitative analysis where measurements are made at one or two wavelengths. A scanning monochromator includes a drive mechanism that continuously rotates the grating, allowing successive wavelengths to exit from the monochromator. Scanning monochromators are used to acquire spectra, and, when operated in a fixed-wavelength mode, for a quantitative analysis.

Interferometers. An **INTERFEROMETER** provides an alternative approach for wavelength selection. Instead of filtering or dispersing the electromagnetic radiation, an interferometer allows source radiation of all wavelengths to reach the detector simultaneously (Figure 10.13). Radiation from the source is focused on a beam splitter that reflects half of the radiation to a fixed mirror and transmits the other half to a movable mirror. The radiation recombines at the beam splitter, where constructive and destructive interference determines, for each wavelength, the intensity of light reaching the detector. As the moving mirror changes position, the wavelengths of light experiencing maximum constructive interference and maximum destructive interference also changes. The signal at the detector shows intensity as a function of the moving mirror's position, expressed in units of distance or time. The result is called an **INTERFEROGRAM**, or a time domain spectrum.

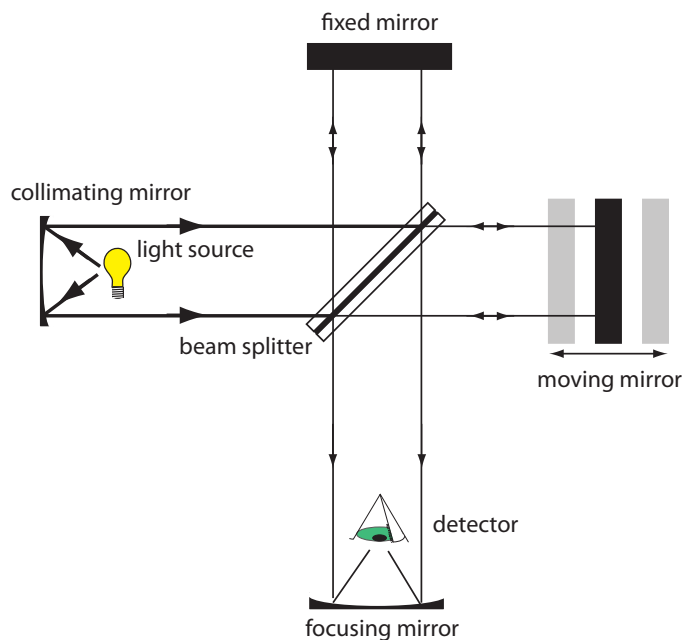


Figure 10.13 Schematic diagram of an interferometer.

The time domain spectrum is converted mathematically, by a process called a Fourier transform, to a spectrum (also called a frequency domain spectrum) showing intensity as a function of the radiation's energy.

In comparison to a monochromator, an interferometer has two significant advantages. The first advantage, which is termed **JACQUINOT'S ADVANTAGE**, is the higher throughput of source radiation. Because an interferometer does not use slits and has fewer optical components from which radiation can be scattered and lost, the throughput of radiation reaching the detector is 80–200× greater than that for a monochromator. The result is less noise. The second advantage, which is called **FELLGETT'S ADVANTAGE**, is a savings in the time needed to obtain a spectrum. Because the detector monitors all frequencies simultaneously, an entire spectrum takes approximately one second to record, as compared to 10–15 minutes with a scanning monochromator.

DETECTORS

In Nessler's original method for determining ammonia ([Figure 10.9](#)) the analyst's eye serves as the detector, matching the sample's color to that of a standard. The human eye, of course, has a poor range—responding only to visible light—nor is it particularly sensitive or accurate. Modern detectors use a sensitive **TRANSDUCER** to convert a signal consisting of photons into an easily measured electrical signal. Ideally the detector's signal, S , is a linear function of the electromagnetic radiation's power, P ,

$$S = kP + D$$

where k is the detector's sensitivity, and D is the detector's **DARK CURRENT**, or the background current when we prevent the source's radiation from reaching the detector.

There are two broad classes of spectroscopic transducers: thermal transducers and photon transducers. Table 10.4 provides several representative examples of each class of transducers.

The mathematical details of the Fourier transform are beyond the level of this textbook. You can consult the chapter's additional resources for additional information.

Transducer is a general term that refers to any device that converts a chemical or physical property into an easily measured electrical signal. The retina in your eye, for example, is a transducer that converts photons into an electrical nerve impulse.

Table 10.4 Examples of Transducers for Spectroscopy

Transducer	Class	Wavelength Range	Output Signal
phototube	photon	200–1000 nm	current
photomultiplier	photon	110–1000 nm	current
Si photodiode	photon	250–1100 nm	current
photoconductor	photon	750–6000 nm	change in resistance
photovoltaic cell	photon	400–5000 nm	current or voltage
thermocouple	thermal	0.8–40 μm	voltage
thermistor	thermal	0.8–40 μm	change in resistance
pneumatic	thermal	0.8–1000 μm	membrane displacement
pyroelectric	thermal	0.3–1000 μm	current

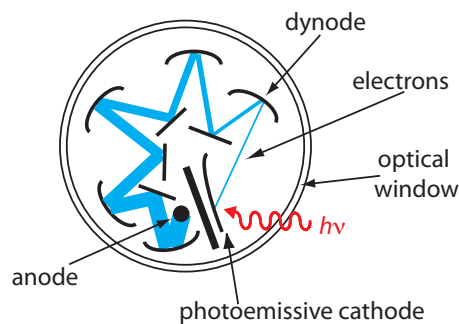


Figure 10.14 Schematic of a photomultiplier. A **photon** strikes the photoemissive cathode producing **electrons**, which accelerate toward a positively charged dynode. Collision of these electrons with the dynode generates additional electrons, which accelerate toward the next dynode. A total of 10^6 – 10^7 electrons per photon eventually reach the anode, generating an electrical current.

If the retina in your eye is a transducer, then your brain is a signal processor.

Photon Transducers. Phototubes and photomultipliers contain a photosensitive surface that absorbs radiation in the ultraviolet, visible, or near IR, producing an electrical current proportional to the number of photons reaching the transducer (Figure 10.14). Other photon detectors use a semiconductor as the photosensitive surface. When the semiconductor absorbs photons, valence electrons move to the semiconductor's conduction band, producing a measurable current. One advantage of the Si photodiode is that it is easy to miniaturize. Groups of photodiodes may be gathered together in a linear array containing from 64–4096 individual photodiodes. With a width of $25\ \mu\text{m}$ per diode, for example, a linear array of 2048 photodiodes requires only 51.2 mm of linear space. By placing a **PHOTODIODE ARRAY** along the monochromator's focal plane, it is possible to monitor simultaneously an entire range of wavelengths.

Thermal Transducers. Infrared photons do not have enough energy to produce a measurable current with a photon transducer. A thermal transducer, therefore, is used for infrared spectroscopy. The absorption of infrared photons by a thermal transducer increases its temperature, changing one or more of its characteristic properties. A pneumatic transducer, for example, is a small tube of xenon gas with an IR transparent window at one end and a flexible membrane at the other end. Photons enter the tube and are absorbed by a blackened surface, increasing the temperature of the gas. As the temperature inside the tube fluctuates, the gas expands and contracts and the flexible membrane moves in and out. Monitoring the membrane's displacement produces an electrical signal.

Signal Processors

A transducer's electrical signal is sent to a **SIGNAL PROCESSOR** where it is displayed in a form that is more convenient for the analyst. Examples of signal processors include analog or digital meters, recorders, and computers equipped with digital acquisition boards. A signal processor also is used to calibrate the detector's response, to amplify the transducer's signal, to remove noise by filtering, or to mathematically transform the signal.

10B Spectroscopy Based on Absorption

In absorption spectroscopy a beam of electromagnetic radiation passes through a sample. Much of the radiation passes through the sample without a loss in intensity. At selected wavelengths, however, the radiation's intensity is attenuated. This process of attenuation is called absorption.

10B.1 Absorbance Spectra

There are two general requirements for an analyte's absorption of electromagnetic radiation. First, there must be a mechanism by which the radiation's electric field or magnetic field interacts with the analyte. For ultra-

violet and visible radiation, absorption of a photon changes the energy of the analyte's valence electrons. A bond's vibrational energy is altered by the absorption of infrared radiation.

The second requirement is that the photon's energy, $h\nu$, must exactly equal the difference in energy, ΔE , between two of the analyte's quantized energy states. [Figure 10.4](#) shows a simplified view of a photon's absorption, which is useful because it emphasizes that the photon's energy must match the difference in energy between a lower-energy state and a higher-energy state. What is missing, however, is information about what types of energy states are involved, which transitions between energy states are likely to occur, and the appearance of the resulting spectrum.

We can use the energy level diagram in [Figure 10.15](#) to explain an absorbance spectrum. The lines labeled E_0 and E_1 represent the analyte's ground (lowest) electronic state and its first electronic excited state. Superimposed on each electronic energy level is a series of lines representing vibrational energy levels.

INFRARED SPECTRA FOR MOLECULES AND POLYATOMIC IONS

The energy of infrared radiation produces a change in a molecule's or a polyatomic ion's vibrational energy, but is not sufficient to effect a change in its electronic energy. As shown in [Figure 10.15](#), vibrational energy levels are quantized; that is, a molecule may have only certain, discrete vibrational energies. The energy for an allowed vibrational mode, E_v , is

$$E_v = v + \frac{1}{2} h\nu_0$$

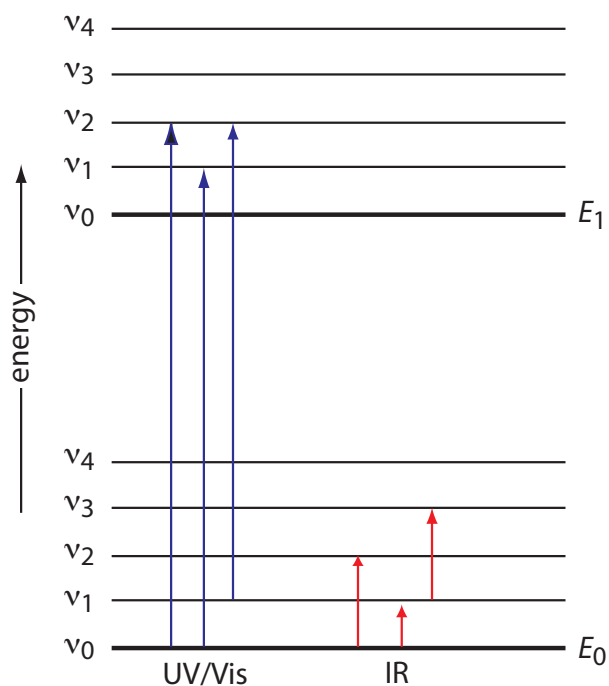


Figure 10.15 Diagram showing two electronic energy levels (E_0 and E_1), each with five vibrational energy levels (v_0 – v_4). Absorption of ultraviolet and visible radiation leads to a change in the analyte's electronic energy levels and, possibly, a change in vibrational energy as well. A change in vibrational energy without a change in electronic energy levels occurs with the absorption of infrared radiation.

[Figure 10.3](#) provides a list of the types of atomic and molecular transitions associated with different types of electromagnetic radiation.

Why does a non-linear molecule have $3N-6$ vibrational modes? Consider a molecule of methane, CH_4 . Each of the five atoms in methane can move in one of three directions (x , y , and z) for a total of $5 \times 3 = 15$ different ways in which the molecule can move. A molecule can move in three ways: it can move from one place to another, what we call translational motion; it can rotate around an axis; and its bonds can stretch and bend, what we call vibrational motion.

Because the entire molecule can move in the x , y , and z directions, three of methane's 15 different motions are translational. In addition, the molecule can rotate about its x , y , and z axes, accounting for three additional forms of motion. This leaves $15 - 3 - 3 = 9$ vibrational modes.

A linear molecule, such as CO_2 , has $3N-5$ vibrational modes because it can rotate around only two axes.

where ν is the vibrational quantum number, which has values of 0, 1, 2, ..., and ν_0 is the bond's fundamental vibrational frequency. The value of ν_0 , which is determined by the bond's strength and by the mass at each end of the bond, is a characteristic property of a bond. For example, a carbon-carbon single bond ($\text{C}-\text{C}$) absorbs infrared radiation at a lower energy than a carbon-carbon double bond ($\text{C}=\text{C}$) because a single bond is weaker than a double bond.

At room temperature most molecules are in their ground vibrational state ($\nu=0$). A transition from the ground vibrational state to the first vibrational excited state ($\nu=1$) requires absorption of a photon with an energy of $h\nu_0$. Transitions in which $\Delta\nu$ is ± 1 give rise to the fundamental absorption lines. Weaker absorption lines, called overtones, result from transitions in which $\Delta\nu$ is ± 2 or ± 3 . The number of possible normal vibrational modes for a linear molecule is $3N-5$, and for a non-linear molecule is $3N-6$, where N is the number of atoms in the molecule. Not surprisingly, infrared spectra often show a considerable number of absorption bands. Even a relatively simple molecule, such as ethanol ($\text{C}_2\text{H}_6\text{O}$), for example, has $3 \times 9 - 6$, or 21 possible normal modes of vibration, although not all of these vibrational modes give rise to an absorption. The IR spectrum for ethanol is shown in Figure 10.16.

UV/VIS SPECTRA FOR MOLECULES AND IONS

The valence electrons in organic molecules and polyatomic ions, such as CO_3^{2-} , occupy quantized sigma bonding, σ , pi bonding, π , and non-bonding, n , molecular orbitals (MOs). Unoccupied sigma antibonding, σ^* , and pi antibonding, π^* , molecular orbitals are slightly higher in energy. Because the difference in energy between the highest-energy occupied MOs and

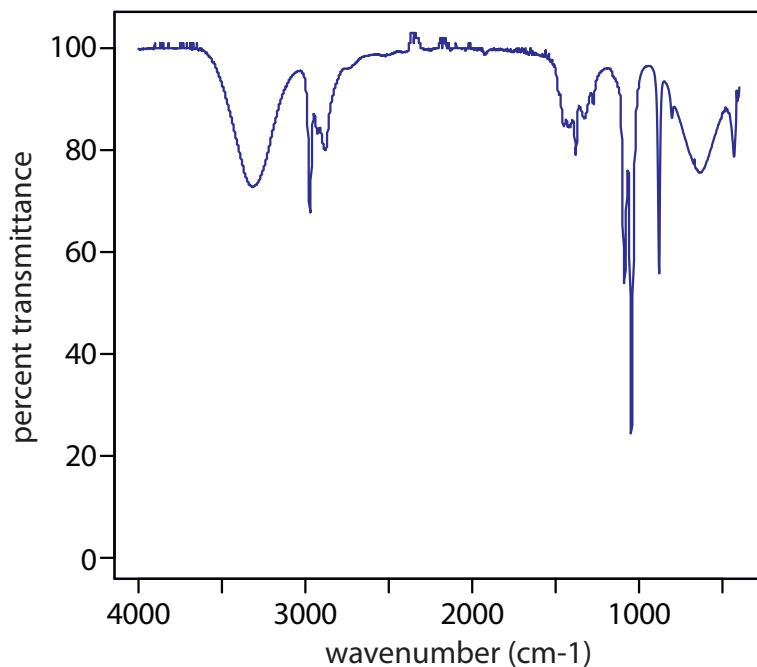


Figure 10.16 Infrared spectrum of ethanol.

Table 10.5 Electronic Transitions Involving n , σ , and π Molecular Orbitals

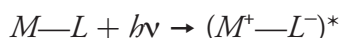
Transition	Wavelength Range	Examples
$\sigma \rightarrow \sigma^*$	<200 nm	C–C, C–H
$n \rightarrow \sigma^*$	160–260 nm	H ₂ O, CH ₃ OH, CH ₃ Cl
$\pi \rightarrow \pi^*$	200–500 nm	C=C, C=O, C=N, C≡C
$n \rightarrow \pi^*$	250–600 nm	C=O, C=N, N=N, N=O

the lowest-energy unoccupied MOs corresponds to ultraviolet and visible radiation, absorption of a photon is possible.

Four types of transitions between quantized energy levels account for most molecular UV/Vis spectra. Table 10.5 lists the approximate wavelength ranges for these transitions, as well as a partial list of bonds, functional groups, or molecules responsible for these transitions. Of these transitions, the most important are $n \rightarrow \pi^*$ and $\pi \rightarrow \pi^*$ because they involve important functional groups that are characteristic of many analytes and because the wavelengths are easily accessible. The bonds and functional groups that give rise to the absorption of ultraviolet and visible radiation are called **CHROMOPHORES**.

Many transition metal ions, such as Cu²⁺ and Co²⁺, form colorful solutions because the metal ion absorbs visible light. The transitions giving rise to this absorption are valence electrons in the metal ion's d -orbitals. For a free metal ion, the five d -orbitals are of equal energy. In the presence of a complexing ligand or solvent molecule, however, the d -orbitals split into two or more groups that differ in energy. For example, in an octahedral complex of Cu(H₂O)₆²⁺ the six water molecules perturb the d -orbitals into two groups, as shown in Figure 10.17. The resulting d – d transitions for transition metal ions are relatively weak.

A more important source of UV/Vis absorption for inorganic metal–ligand complexes is charge transfer, in which absorption of a photon produces an excited state in which there is transfer of an electron from the metal, M , to the ligand, L .



Charge-transfer absorption is important because it produces very large absorbances. One important example of a charge-transfer complex is that of *o*-phenanthroline with Fe²⁺, the UV/Vis spectrum for which is shown in Figure 10.18. Charge-transfer absorption in which an electron moves from the ligand to the metal also is possible.

Comparing the IR spectrum in Figure 10.16 to the UV/Vis spectrum in Figure 10.18 shows us that UV/Vis absorption bands are often significantly broader than those for IR absorption. We can use Figure 10.15 to explain

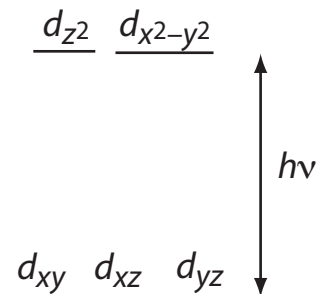


Figure 10.17 Splitting of the d -orbitals in an octahedral field.

Why is a larger absorbance desirable? An analytical method is more sensitive if a smaller concentration of analyte gives a larger signal.

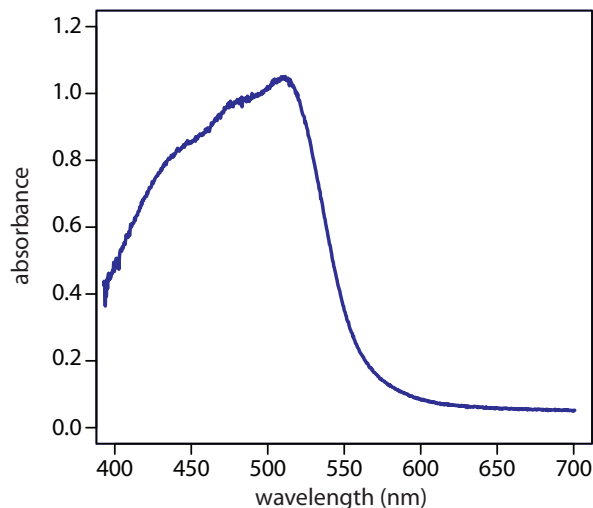


Figure 10.18 UV/Vis spectrum for the metal–ligand complex $\text{Fe}(\text{phen})_3^{2+}$, where phen is the ligand *o*-phenanthroline.

why this is true. When a species absorbs UV/Vis radiation, the transition between electronic energy levels may also include a transition between vibrational energy levels. The result is a number of closely spaced absorption bands that merge together to form a single broad absorption band.

UV/VIS SPECTRA FOR ATOMS

The valence shell energy level diagram in Figure 10.19 might strike you as odd because it shows that the $3p$ orbitals are split into two groups of slightly different energy. The reasons for this splitting are unimportant in the context of our treatment of atomic absorption. For further information about the reasons for this splitting, consult the chapter's [additional resources](#).

The energy of ultraviolet and visible electromagnetic radiation is sufficient to cause a change in an atom's valence electron configuration. Sodium, for example, has a single valence electron in its $3s$ atomic orbital. As shown in Figure 10.19, unoccupied, higher energy atomic orbitals also exist.

Absorption of a photon is accompanied by the excitation of an electron from a lower-energy atomic orbital to an orbital of higher energy. Not all possible transitions between atomic orbitals are allowed. For sodium the only allowed transitions are those in which there is a change of ± 1 in the orbital quantum number (l); thus transitions from $s \rightarrow p$ orbitals are allowed, and transitions from $s \rightarrow d$ orbitals are forbidden.

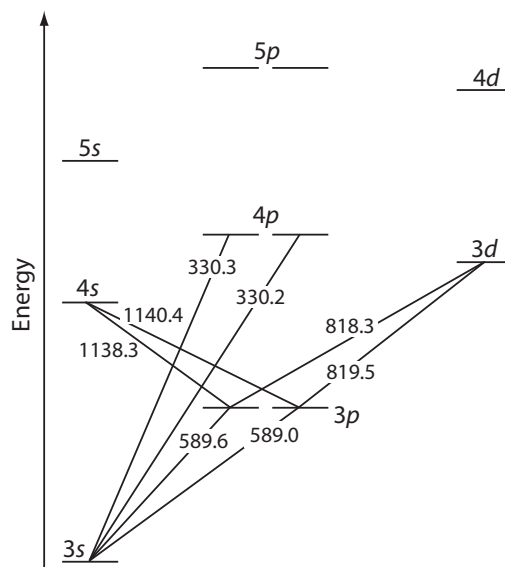


Figure 10.19 Valence shell energy level diagram for sodium. The wavelengths (in wavenumbers) corresponding to several transitions are shown.

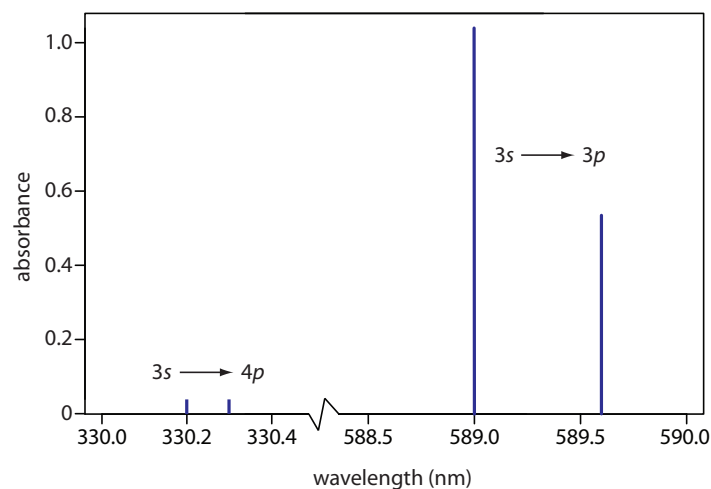


Figure 10.20 Atomic absorption spectrum for sodium. Note that the scale on the x -axis includes a break.

The atomic absorption spectrum for Na is shown in Figure 10.20, and is typical of that found for most atoms. The most obvious feature of this spectrum is that it consists of a small number of discrete absorption lines corresponding to transitions between the ground state (the $3s$ atomic orbital) and the $3p$ and $4p$ atomic orbitals. Absorption from excited states, such as the $3p \rightarrow 4s$ and the $3p \rightarrow 3d$ transitions included in Figure 10.19, are too weak to detect. Because an excited state's lifetime is short—typically an excited state atom takes 10^{-7} to 10^{-8} s to return to a lower energy state—an atom in the excited state is likely to return to the ground state before it has an opportunity to absorb a photon.

Another feature of the atomic absorption spectrum in Figure 10.20 is the narrow width of the absorption lines, which is a consequence of the fixed difference in energy between the ground and excited states. Natural line widths for atomic absorption, which are governed by the uncertainty principle, are approximately 10^{-5} nm. Other contributions to broadening increase this line width to approximately 10^{-3} nm.

10B.2 Transmittance and Absorbance

As light passes through a sample, its power decreases as some of it is absorbed. This attenuation of radiation is described quantitatively by two separate, but related terms: transmittance and absorbance. As shown in Figure 10.21a, **TRANSMITTANCE** is the ratio of the source radiation's power exiting the sample, P_T , to that incident on the sample, P_0 .

$$T = \frac{P_T}{P_0} \quad 10.1$$

Multiplying the transmittance by 100 gives the percent transmittance, % T , which varies between 100% (no absorption) and 0% (complete absorption). All methods of detecting photons—including the human eye and modern photoelectric transducers—measure the transmittance of electromagnetic radiation.

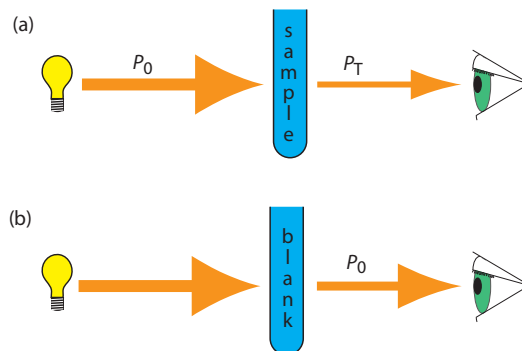


Figure 10.21 (a) Schematic diagram showing the attenuation of radiation passing through a sample; P_0 is the radiant power from the source and P_T is the radiant power transmitted by the sample. (b) Schematic diagram showing how we redefine P_0 as the radiant power transmitted by the blank. Redefining P_0 in this way corrects the transmittance in (a) for the loss of radiation due to scattering, reflection, or absorption by the sample's container and absorption by the sample's matrix.

[Equation 10.1](#) does not distinguish between different mechanisms that prevent a photon emitted by the source from reaching the detector. In addition to absorption by the analyte, several additional phenomena contribute to the attenuation of radiation, including reflection and absorption by the sample's container, absorption by other components in the sample's matrix, and the scattering of radiation. To compensate for this loss of the radiation's power, we use a method blank. As shown in Figure 10.21b, we redefine P_0 as the power exiting the method blank.

An alternative method for expressing the attenuation of electromagnetic radiation is absorbance, A , which we define as

$$A = -\log T = -\log \frac{P_T}{P_0} \quad 10.2$$

Absorbance is the more common unit for expressing the attenuation of radiation because it is a linear function of the analyte's concentration.

Example 10.3

A sample has a percent transmittance of 50%. What is its absorbance?

SOLUTION

A percent transmittance of 50.0% is the same as a transmittance of 0.500. Substituting into equation 10.2 gives

$$A = -\log T = -\log(0.500) = 0.301$$

Practice Exercise 10.3

What is the % T for a sample if its absorbance is 1.27?

Click [here](#) to review your answer to this exercise.

We will show that this is true in [Section 10B.3](#).

[Equation 10.1](#) has an important consequence for atomic absorption. As we saw in [Figure 10.20](#), atomic absorption lines are very narrow. Even with a high quality monochromator, the effective bandwidth for a continuum source is 100–1000× greater than the width of an atomic absorption line. As a result, little of the radiation from a continuum source is absorbed ($P_0 \approx P_T$), and the measured absorbance is effectively zero. For this reason, atomic absorption requires a line source instead of a continuum source.

10B.3 Absorbance and Concentration: Beer's Law

When monochromatic electromagnetic radiation passes through an infinitesimally thin layer of sample of thickness dx , it experiences a decrease in its power of dP ([Figure 10.22](#)). The fractional decrease in power is proportional to the sample's thickness and the analyte's concentration, C ; thus

$$-\frac{dP}{P} = \alpha C dx \quad 10.3$$

where P is the power incident on the thin layer of sample, and α is a proportionality constant. Integrating the left side of [equation 10.3](#) over the entire sample

$$-\int_{P_0}^{P_T} \frac{dP}{P} = \alpha C \int_0^b dx$$

$$\ln \frac{P_0}{P_T} = \alpha b C$$

converting from \ln to \log , and substituting in [equation 10.2](#), gives

$$A = abC \quad 10.4$$

where a is the analyte's **ABSORPTIVITY** with units of $\text{cm}^{-1} \text{conc}^{-1}$. If we express the concentration using molarity, then we replace a with the **MOLAR ABSORPTIVITY**, ϵ , which has units of $\text{cm}^{-1} \text{M}^{-1}$.

$$A = \epsilon b C \quad 10.5$$

The absorptivity and molar absorptivity are proportional to the probability that the analyte absorbs a photon of a given energy. As a result, values for both a and ϵ depend on the wavelength of the absorbed photon.

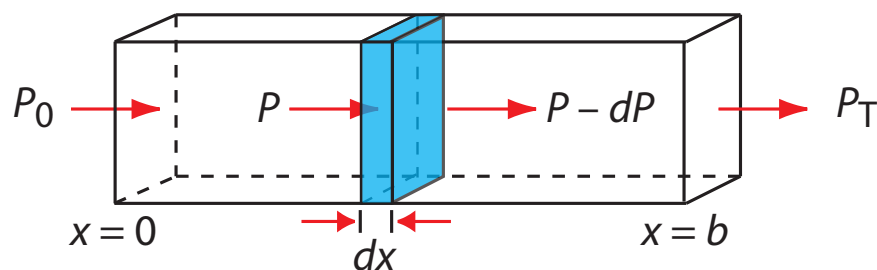


Figure 10.22 Factors used in deriving the Beer-Lambert law.

Example 10.4

A 5.00×10^{-4} M solution of an analyte is placed in a sample cell with a pathlength of 1.00 cm. When measured at a wavelength of 490 nm, the solution's absorbance is 0.338. What is the analyte's molar absorptivity at this wavelength?

SOLUTION

Solving [equation 10.5](#) for ϵ and making appropriate substitutions gives

$$\epsilon = \frac{A}{bC} = \frac{0.338}{(1.00 \text{ cm})(5.00 \times 10^{-4} \text{ M})} = 676 \text{ cm}^{-1} \text{ M}^{-1}$$

Practice Exercise 10.4

A solution of the analyte from Example 10.4 has an absorbance of 0.228 in a 1.00-cm sample cell. What is the analyte's concentration?

Click [here](#) to review your answer to this exercise.

[Equation 10.4](#) and [equation 10.5](#), which establish the linear relationship between absorbance and concentration, are known as the Beer-Lambert law, or more commonly, as **BEER'S LAW**. Calibration curves based on Beer's law are common in quantitative analyses.

10B.4 Beer's Law and Multicomponent Samples

We can extend Beer's law to a sample containing several absorbing components. If there are no interactions between the components, the individual absorbances, A_i , are additive. For a two-component mixture of analyte's X and Y, the total absorbance, A_{tot} , is

$$A_{\text{tot}} = A_X + A_Y = \epsilon_X b C_X + \epsilon_Y b C_Y$$

Generalizing, the absorbance for a mixture of n components, A_{mix} , is

$$A_{\text{mix}} = \sum_{i=1}^n A_i = \sum_{i=1}^n \epsilon_i b C_i \quad 10.6$$

10B.5 Limitations to Beer's Law

Beer's law suggests that a calibration curve is a straight line with a y -intercept of zero and a slope of ab or ϵb . In many cases a calibration curve deviates from this ideal behavior (Figure 10.23). Deviations from linearity are divided into three categories: fundamental, chemical, and instrumental.

FUNDAMENTAL LIMITATIONS TO BEER'S LAW

Beer's law is a limiting law that is valid only for low concentrations of analyte. There are two contributions to this fundamental limitation to Beer's law. At

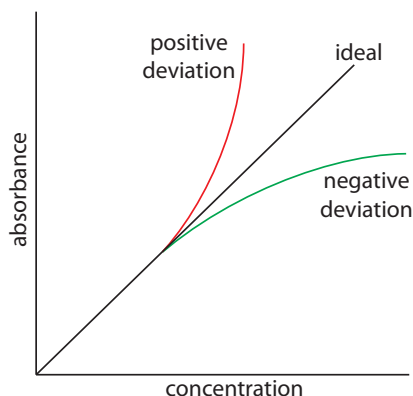
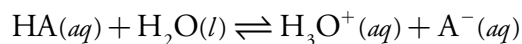


Figure 10.23 Calibration curves showing positive and negative deviations from the ideal Beer's law calibration curve, which is a straight line.

higher concentrations the individual particles of analyte no longer behave independently of each other. The resulting interaction between particles of analyte may change the analyte's absorptivity. A second contribution is that the analyte's absorptivity depends on the sample's refractive index. Because the refractive index varies with the analyte's concentration, the values of a and ϵ may change. For sufficiently low concentrations of analyte, the refractive index is essentially constant and the calibration curve is linear.

CHEMICAL LIMITATIONS TO BEER'S LAW

A chemical deviation from Beer's law may occur if the analyte is involved in an equilibrium reaction. Consider, as an example, an analysis for the weak acid, HA. To construct a Beer's law calibration curve we prepare a series of standards—each containing a known total concentration of HA—and measure each standard's absorbance at the same wavelength. Because HA is a weak acid, it is in equilibrium with its conjugate weak base, A^- .



If both HA and A^- absorb at the chosen wavelength, then Beer's law is

$$A = \epsilon_{\text{HA}} b C_{\text{HA}} + \epsilon_{\text{A}} b C_{\text{A}} \quad 10.7$$

where C_{HA} and C_{A} are the equilibrium concentrations of HA and A^- . Because the weak acid's total concentration, C_{total} , is

$$C_{\text{total}} = C_{\text{HA}} + C_{\text{A}}$$

the concentrations of HA and A^- can be written as

$$C_{\text{HA}} = \alpha_{\text{HA}} C_{\text{total}} \quad 10.8$$

$$C_{\text{A}} = (1 - \alpha_{\text{HA}}) C_{\text{total}} \quad 10.9$$

where α_{HA} is the fraction of weak acid present as HA. Substituting equation 10.8 and equation 10.9 into equation 10.7 and rearranging, gives

$$A = (\epsilon_{\text{HA}} \alpha_{\text{HA}} + \epsilon_{\text{A}} - \epsilon_{\text{A}} \alpha_{\text{HA}}) b C_{\text{total}} \quad 10.10$$

To obtain a linear Beer's law calibration curve, one of two conditions must be met. If α_{HA} and α_{A} have the same value at the chosen wavelength, then equation 10.10 simplifies to

$$A = \epsilon_{\text{A}} b C_{\text{total}}$$

Alternatively, if α_{HA} has the same value for all standards, then each term within the parentheses of equation 10.10 is constant—which we replace with k —and a linear calibration curve is obtained at any wavelength.

$$A = k b C_{\text{total}}$$

For a monoprotic weak acid, the equation for α_{HA} is

$$\alpha_{\text{HA}} = \frac{[\text{H}_3\text{O}^+]}{[\text{H}_3\text{O}^+] + K_a}$$

Problem 10.6 in the end of chapter problems asks you to explore this chemical limitation to Beer's law.

Problem 10.7 in the end of chapter problems ask you to explore the effect of polychromatic radiation on the linearity of Beer's law.

Another reason for measuring absorbance at the top of an absorbance peak is that it provides for a more sensitive analysis. Note that the green calibration curve in Figure 10.24 has a steeper slope—a greater sensitivity—than the red calibration curve.

Because HA is a weak acid, the value of α_{HA} varies with pH. To hold α_{HA} constant we buffer each standard to the same pH. Depending on the relative values of α_{HA} and α_{A} , the calibration curve has a positive or a negative deviation from Beer's law if we do not buffer the standards to the same pH.

INSTRUMENTAL LIMITATIONS TO BEER'S LAW

There are two principal instrumental limitations to Beer's law. The first limitation is that Beer's law assumes that the radiation reaching the sample is of a single wavelength—that is, that the radiation is purely monochromatic. As shown in Figure 10.10, however, even the best wavelength selector passes radiation with a small, but finite effective bandwidth. Polychromatic radiation always gives a negative deviation from Beer's law, but the effect is smaller if the value of ϵ is essentially constant over the wavelength range passed by the wavelength selector. For this reason, as shown in Figure 10.24, it is better to make absorbance measurements at the top of a broad absorption peak. In addition, the deviation from Beer's law is less serious if the source's effective bandwidth is less than one-tenth of the natural bandwidth of the absorbing species.⁵ When measurements must be made on a slope, linearity is improved by using a narrower effective bandwidth.

STRAY RADIATION is the second contribution to instrumental deviations from Beer's law. Stray radiation arises from imperfections in the wavelength selector that allow light to enter the instrument and reach the detector without passing through the sample. Stray radiation adds an additional contribution, P_{stray} , to the radiant power reaching the detector; thus

$$A = -\log \frac{P_{\text{T}} + P_{\text{stray}}}{P_0 + P_{\text{stray}}}$$

For a small concentration of analyte, P_{stray} is significantly smaller than P_0 and P_{T} , and the absorbance is unaffected by the stray radiation. At a higher concentration of analyte, however, less light passes through the sample and

5 (a) Strong, F. C., III *Anal. Chem.* **1984**, 56, 16A–34A; Gilbert, D. D. *J. Chem. Educ.* **1991**, 68, A278–A281.

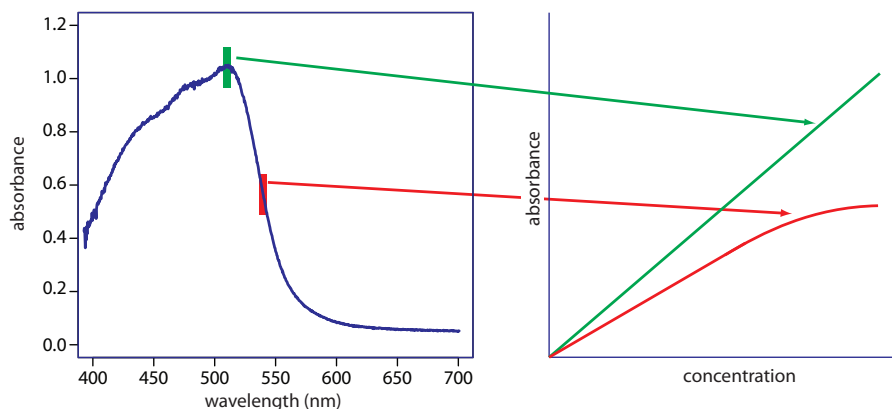


Figure 10.24 Effect of the choice of wavelength on the linearity of a Beer's law calibration curve.

P_T and P_{stray} may be similar in magnitude. This results in an absorbance that is smaller than expected, and a negative deviation from Beer's law.

[Problem 10.8](#) in the end of chapter problems ask you to explore the effect of stray radiation on the linearity of Beer's law.

10C UV/Vis and IR Spectroscopy

In [Figure 10.9](#) we examined Nessler's original method for matching the color of a sample to the color of a standard. Matching the colors was a labor intensive process for the analyst. Not surprisingly, spectroscopic methods of analysis were slow to develop. The 1930s and 1940s saw the introduction of photoelectric transducers for ultraviolet and visible radiation, and thermocouples for infrared radiation. As a result, modern instrumentation for absorption spectroscopy became routinely available in the 1940s—progress has been rapid ever since.

10C.1 Instrumentation

Frequently an analyst must select—from among several instruments of different design—the one instrument best suited for a particular analysis. In this section we examine several different instruments for molecular absorption spectroscopy, emphasizing their advantages and limitations. Methods of sample introduction are also covered in this section.

INSTRUMENT DESIGNS FOR MOLECULAR UV/VIS ABSORPTION

Filter Photometer. The simplest instrument for molecular UV/Vis absorption is a **FILTER PHOTOMETER** (Figure 10.25), which uses an absorption or interference filter to isolate a band of radiation. The filter is placed between the source and the sample to prevent the sample from decomposing when exposed to higher energy radiation. A filter photometer has a single optical path between the source and detector, and is called a **SINGLE-BEAM** instrument. The instrument is calibrated to 0% T while using a shutter to block the source radiation from the detector. After opening the shutter, the in-

The percent transmittance varies between 0% and 100%. As we learned in [Figure 10.21](#), we use a blank to determine P_0 , which corresponds to 100% T. Even in the absence of light the detector records a signal. Closing the shutter allows us to assign 0% T to this signal. Together, setting 0% T and 100% T calibrates the instrument. The amount of light passing through a sample produces a signal that is greater than or equal to that for 0% T and smaller than or equal to that for 100% T.

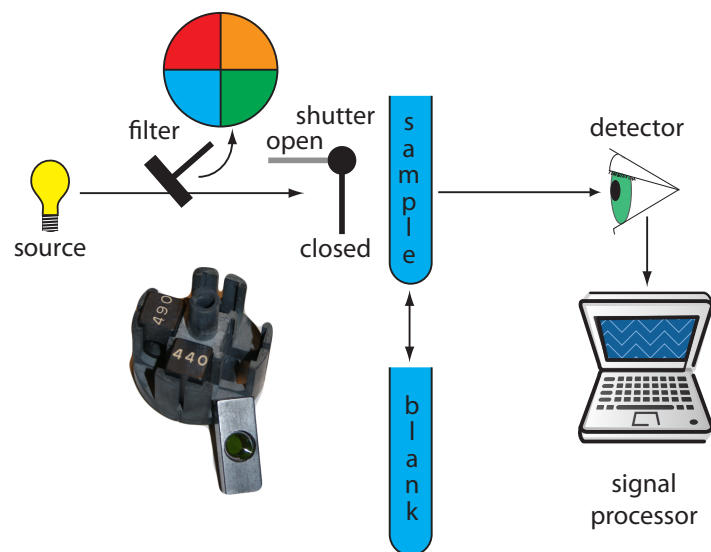


Figure 10.25 Schematic diagram of a filter photometer. The analyst either inserts a removable filter or the filters are placed in a carousel, an example of which is shown in the photographic inset. The analyst selects a filter by rotating it into place.

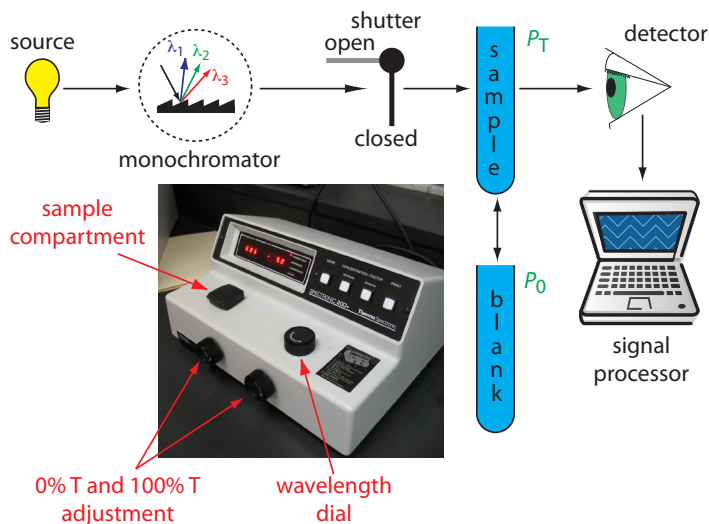


Figure 10.26 Schematic diagram of a fixed-wavelength single-beam spectrophotometer. The photographic inset shows a typical instrument. The shutter remains closed until the sample or blank is placed in the sample compartment. The analyst manually selects the wavelength by adjusting the wavelength dial. Inset photo modified from: [Adi](http://www.commons.wikimedia.org) (www.commons.wikimedia.org).

strument is calibrated to 100% T using an appropriate blank. The blank is then replaced with the sample and its transmittance measured. Because the source's incident power and the sensitivity of the detector vary with wavelength, the photometer must be recalibrated whenever the filter is changed. Photometers have the advantage of being relatively inexpensive, rugged, and easy to maintain. Another advantage of a photometer is its portability, making it easy to take into the field. Disadvantages of a photometer include the inability to record an absorption spectrum and the source's relatively large effective bandwidth, which limits the calibration curve's linearity.

Single-Beam Spectrophotometer. An instrument that uses a monochromator for wavelength selection is called a **SPECTROPHOTOMETER**. The simplest spectrophotometer is a single-beam instrument equipped with a fixed-wavelength monochromator (Figure 10.26). Single-beam spectrophotometers are calibrated and used in the same manner as a photometer. One example of a single-beam spectrophotometer is Thermo Scientific's Spectronic 20D+, which is shown in the photographic insert to Figure 10.26. The Spectronic 20D+ has a range of 340–625 nm (950 nm when using a red-sensitive detector), and a fixed effective bandwidth of 20 nm. Battery-operated, hand-held single-beam spectrophotometers are available, which are easy to transport into the field. Other single-beam spectrophotometers also are available with effective bandwidths of 2–8 nm. Fixed wavelength single-beam spectrophotometers are not practical for recording spectra because manually adjusting the wavelength and recalibrating the spectrophotometer is awkward and time-consuming. The accuracy of a single-beam spectrophotometer is limited by the stability of its source and detector over time.

Double-Beam Spectrophotometer. The limitations of fixed-wavelength, single-beam spectrophotometers are minimized by using a **DOUBLE-BEAM** spectrophotometer (Figure 10.27). A chopper controls the radiation's path,

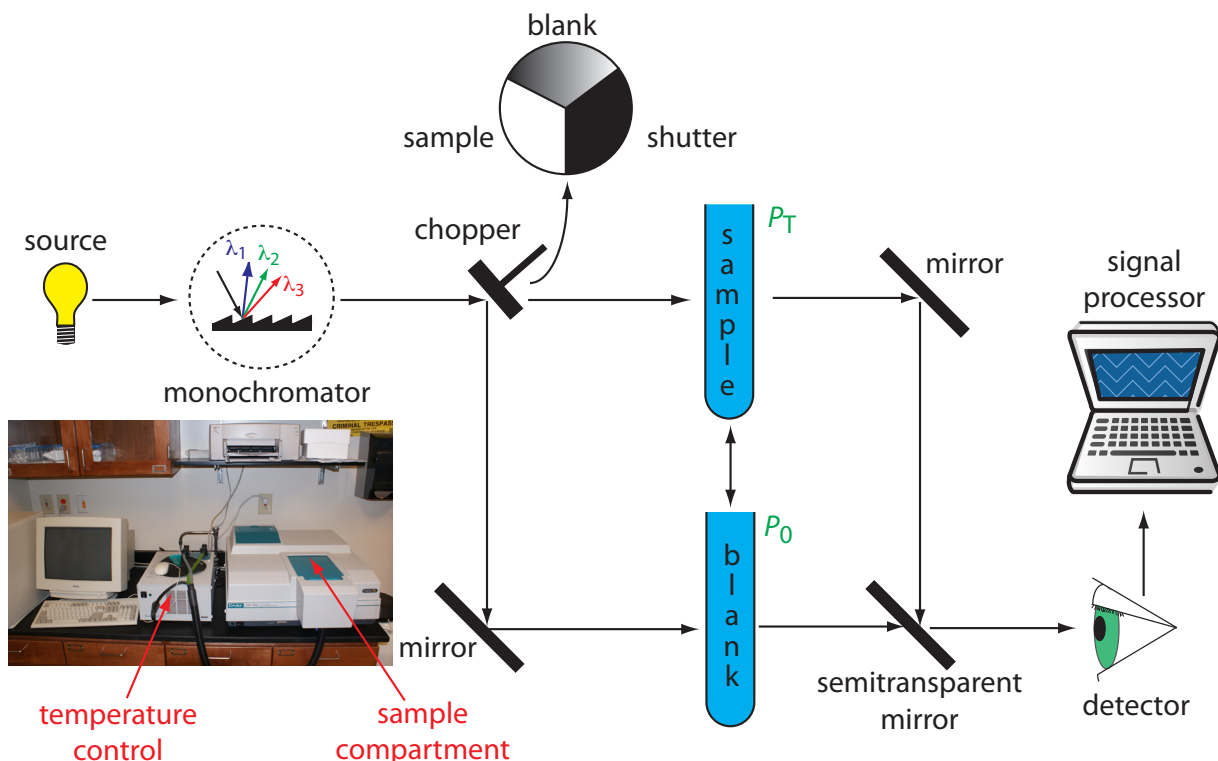


Figure 10.27 Schematic diagram of a scanning, double-beam spectrophotometer. A chopper directs the source's radiation, using a transparent window to pass radiation to the sample and a mirror to reflect radiation to the blank. The chopper's opaque surface serves as a shutter, which allows for a constant adjustment of the spectrophotometer's 0% T. The photographic insert shows a typical instrument. The unit in the middle of the photo is a temperature control unit that allows the sample to be heated or cooled.

alternating it between the sample, the blank, and a shutter. The signal processor uses the chopper's known speed of rotation to resolve the signal reaching the detector into the transmission of the blank, P_0 , and the sample, P_T . By including an opaque surface as a shutter, it is possible to continuously adjust 0% T. The effective bandwidth of a double-beam spectrophotometer is controlled by adjusting the monochromator's entrance and exit slits. Effective bandwidths of 0.2–3.0 nm are common. A scanning monochromator allows for the automated recording of spectra. Double-beam instruments are more versatile than single-beam instruments, being useful for both quantitative and qualitative analyses, but also are more expensive.

Diode Array Spectrometer. An instrument with a single detector can monitor only one wavelength at a time. If we replace a single photomultiplier with many photodiodes, we can use the resulting array of detectors to record an entire spectrum simultaneously in as little as 0.1 s. In a diode array spectrometer the source radiation passes through the sample and is dispersed by a grating (Figure 10.28). The photodiode array is situated at the grating's focal plane, with each diode recording the radiant power over a narrow range of wavelengths. Because we replace a full monochromator with just a grating, a diode array spectrometer is small and compact.

Figure 10.28 Schematic diagram of a diode array spectrophotometer. The photographic insert shows a typical instrument. Note that the 50-mL beaker provides a sense of scale.

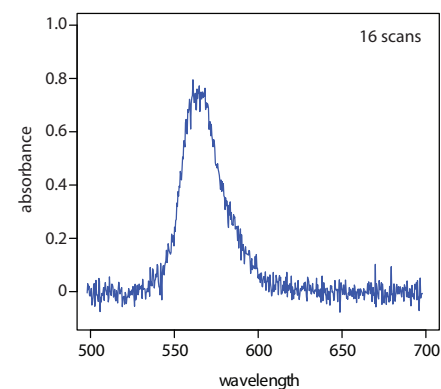
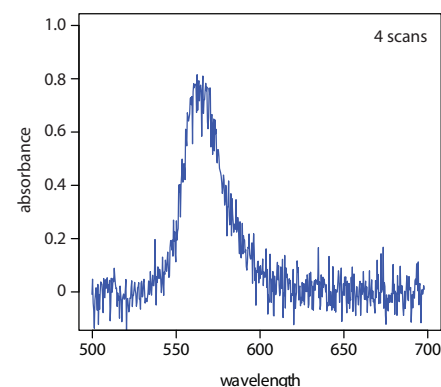
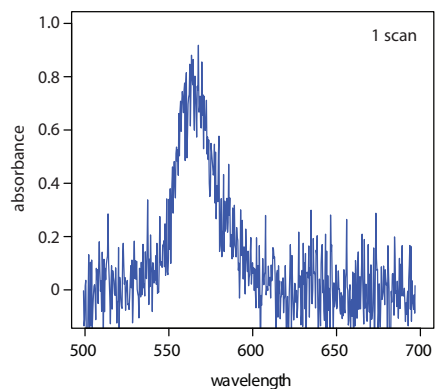
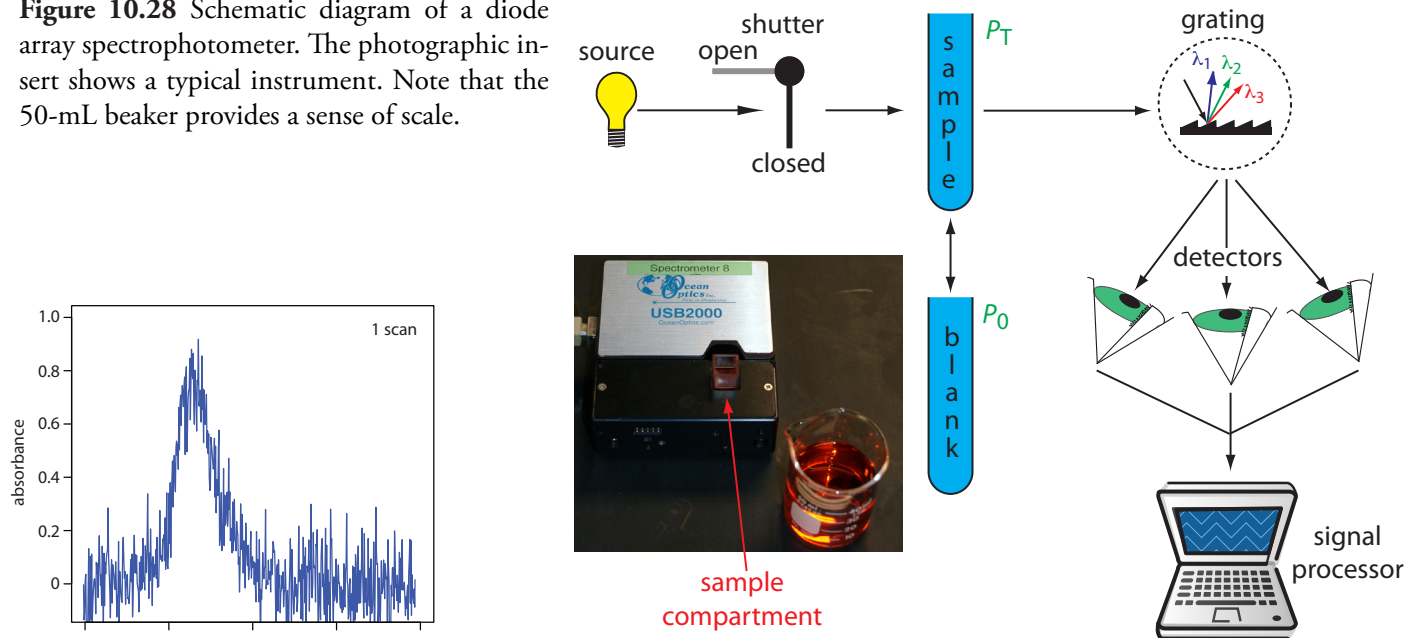


Figure 10.29 Effect of signal averaging on a spectrum's signal-to-noise ratio. From top to bottom: spectrum for a single scan; average spectrum after four scans; and average spectrum after adding 16 scans.

One advantage of a diode array spectrometer is the speed of data acquisition, which allows to collect several spectra for a single sample. Individual spectra are added and averaged to obtain the final spectrum. This **SIGNAL AVERAGING** improves a spectrum's signal-to-noise ratio. If we add together n spectra, the sum of the signal at any point, x , increases as nS_x , where S_x is the signal. The noise at any point, N_x , is a random event, which increases as $\sqrt{n}N_x$ when we add together n spectra. The **SIGNAL-TO-NOISE RATIO** (S/N) after n scans is

$$\frac{S}{N} = \frac{nS_x}{\sqrt{n}N_x} = \sqrt{n} \frac{S_x}{N_x}$$

where S_x/N_x is the signal-to-noise ratio for a single scan. The impact of signal averaging is shown in Figure 10.29. The first spectrum shows the signal for a single scan, which consists of a single, noisy peak. Signal averaging using 4 scans and 16 scans decreases the noise and improves the signal-to-noise ratio. One disadvantage of a photodiode array is that the effective bandwidth per diode is roughly an order of magnitude larger than that for a high quality monochromator.

Sample Cells. The sample compartment provides a light-tight environment that limits the addition of stray radiation. Samples are normally in the liquid or solution state, and are placed in cells constructed with UV/Vis transparent materials, such as quartz, glass, and plastic (Figure 10.30). A quartz or fused-silica cell is required when working at a wavelength <300 nm where other materials show a significant absorption. The most common pathlength is 1 cm (10 mm), although cells with shorter (as little as 0.1 cm) and longer pathlengths (up to 10 cm) are available. Longer pathlength cells



Figure 10.30 Examples of sample cells for UV/Vis spectroscopy. From left to right (with path lengths in parentheses): rectangular plastic cuvette (10.0 mm), rectangular quartz cuvette (5.000 mm), rectangular quartz cuvette (1.000 mm), cylindrical quartz cuvette (10.00 mm), cylindrical quartz cuvette (100.0 mm). Cells often are available as a matched pair, which is important when using a double-beam instrument.

are useful when analyzing a very dilute solution, or for gas samples. The highest quality cells allow the radiation to strike a flat surface at a 90° angle, minimizing the loss of radiation to reflection. A test tube is often used as a sample cell with simple, single-beam instruments, although differences in the cell's pathlength and optical properties add an additional source of error to the analysis.

If we need to monitor an analyte's concentration over time, it may not be possible to physically remove samples for analysis. This is often the case, for example, when monitoring industrial production lines or waste lines, when monitoring a patient's blood, or when monitoring environmental systems. With a **FIBER-OPTIC PROBE** we can analyze samples in situ. An example of a remote sensing fiber-optic probe is shown in Figure 10.31. The probe consists of two bundles of fiber-optic cable. One bundle transmits radiation from the source to the probe's tip, which is designed to allow the sample to flow through the sample cell. Radiation from the source passes through the solution and is reflected back by a mirror. The second bundle




Figure 10.31 Example of a fiber-optic probe. The inset photographs provide a close-up look at the probe's flow cell and the reflecting mirror

of fiber-optic cable transmits the nonabsorbed radiation to the wavelength selector. Another design replaces the flow cell shown in [Figure 10.31](#) with a membrane containing a reagent that reacts with the analyte. When the analyte diffuses across the membrane it reacts with the reagent, producing a product that absorbs UV or visible radiation. The nonabsorbed radiation from the source is reflected or scattered back to the detector. Fiber optic probes that show chemical selectivity are called optrodes.⁶

INSTRUMENT DESIGNS FOR INFRARED ABSORPTION

Filter Photometer. The simplest instrument for IR absorption spectroscopy is a filter photometer similar to that shown in [Figure 10.25](#) for UV/Vis absorption. These instruments have the advantage of portability, and typically are used as dedicated analyzers for gases such as HCN and CO.

Double-beam spectrophotometer. Infrared instruments using a monochromator for wavelength selection use double-beam optics similar to that shown in [Figure 10.27](#). Double-beam optics are preferred over single-beam optics because the sources and detectors for infrared radiation are less stable than those for UV/Vis radiation. In addition, it is easier to correct for the absorption of infrared radiation by atmospheric CO₂ and H₂O vapor when using double-beam optics. Resolutions of 1–3 cm⁻¹ are typical for most instruments.

Fourier transform spectrometer. In a Fourier transform infrared spectrometer, or FT-IR, the monochromator is replaced with an interferometer ([Figure 10.13](#)). Because an FT-IR includes only a single optical path, it is necessary to collect a separate spectrum to compensate for the absorbance of atmospheric CO₂ and H₂O vapor. This is done by collecting a background spectrum without the sample and storing the result in the instrument's computer memory. The background spectrum is removed from the sample's spectrum by ratioing the two signals. In comparison to other instrument designs, an FT-IR provides for rapid data acquisition, allowing an enhancement in signal-to-noise ratio through signal-averaging.

Sample Cells. Infrared spectroscopy is routinely used to analyze gas, liquid, and solid samples. Sample cells are made from materials, such as NaCl and KBr, that are transparent to infrared radiation. Gases are analyzed using a cell with a pathlength of approximately 10 cm. Longer pathlengths are obtained by using mirrors to pass the beam of radiation through the sample several times.

A liquid samples may be analyzed using a variety of different sample cells ([Figure 10.32](#)). For non-volatile liquids a suitable sample can be prepared by placing a drop of the liquid between two NaCl plates, forming a thin film that typically is less than 0.01 mm thick. Volatile liquids must be placed in a sealed cell to prevent their evaporation.

⁶ (a) Seitz, W. R. *Anal. Chem.* **1984**, *56*, 16A–34A; (b) Angel, S. M. *Spectroscopy* **1987**, *2*(2), 38–48.




Figure 10.32 Three examples of IR sample cells: (a) NaCl salts plates; (b) fixed pathlength (0.5 mm) sample cell with NaCl windows; (c) disposable card with a polyethylene window that is IR transparent with the exception of strong absorption bands at 2918 cm^{-1} and 2849 cm^{-1} .

The analysis of solution samples is limited by the solvent's IR absorbing properties, with CCl_4 , CS_2 , and CHCl_3 being the most common solvents. Solutions are placed in cells containing two NaCl windows separated by a Teflon spacer. By changing the Teflon spacer, pathlengths from 0.015–1.0 mm can be obtained.

Transparent solid samples can be analyzed directly by placing them in the IR beam. Most solid samples, however, are opaque, and must be dispersed in a more transparent medium before recording the IR spectrum. If a suitable solvent is available, then the solid can be analyzed by preparing a solution and analyzing as described above. When a suitable solvent is not available, solid samples may be analyzed by preparing a mull of the finely powdered sample with a suitable oil. Alternatively, the powdered sample can be mixed with KBr and pressed into an optically transparent pellet.

The analysis of an aqueous sample is complicated by the solubility of the NaCl cell window in water. One approach to obtaining infrared spectra on aqueous solutions is to use **ATTENUATED TOTAL REFLECTANCE** instead of transmission. [Figure 10.33](#) shows a diagram of a typical attenuated total reflectance (ATR) FT-IR instrument. The ATR cell consists of a high refractive index material, such as ZnSe or diamond, sandwiched between a low refractive index substrate and a lower refractive index sample. Radiation from the source enters the ATR crystal where it undergoes a series of total internal reflections before exiting the crystal. During each reflection the radiation penetrates into the sample to a depth of a few microns. The result is a selective attenuation of the radiation at those wavelengths where

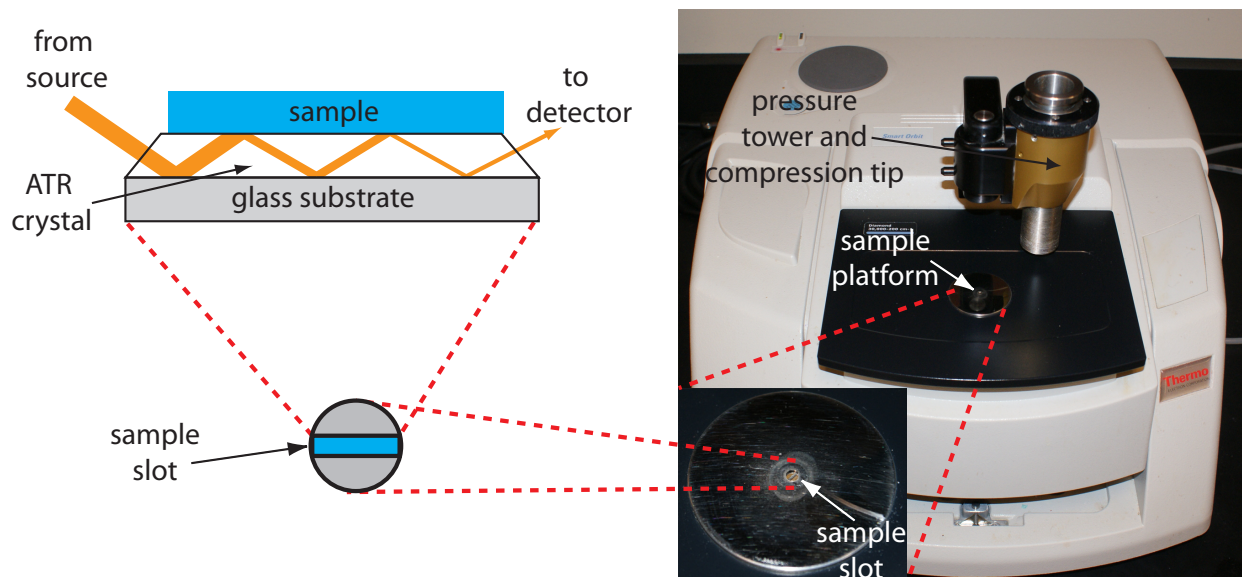


Figure 10.33 FT-IR spectrometer equipped with a diamond ATR sample cell. The inserts show a close-up photo of the sample platform, a sketch of the ATR's sample slot, and a schematic showing how the source's radiation interacts with the sample. The pressure tower is used to ensure the contact of solid samples with the ATR crystal.

the sample absorbs. ATR spectra are similar, but not identical, to those obtained by measuring the transmission of radiation.

Solid samples also can be analyzed using an ATR sample cell. After placing the solid in the sample slot, a compression tip ensures that it is in contact with the ATR crystal. Examples of solids that have been analyzed by ATR include polymers, fibers, fabrics, powders, and biological tissue samples. Another reflectance method is diffuse reflectance, in which radiation is reflected from a rough surface, such as a powder. Powdered samples are mixed with a non-absorbing material, such as powdered KBr, and the reflected light is collected and analyzed. As with ATR, the resulting spectrum is similar to that obtained by conventional transmission methods.

10C.2 Quantitative Applications

The determination of an analyte's concentration based on its absorption of ultraviolet or visible radiation is one of the most frequently encountered quantitative analytical methods. One reason for its popularity is that many organic and inorganic compounds have strong absorption bands in the UV/Vis region of the electromagnetic spectrum. In addition, if an analyte does not absorb UV/Vis radiation—or if its absorbance is too weak—we often can react it with another species that is strongly absorbing. For example, a dilute solution of Fe^{2+} does not absorb visible light. Reacting Fe^{2+} with *o*-phenanthroline, however, forms an orange-red complex of $\text{Fe}(\text{phen})_3^{2+}$ that has a strong, broad absorbance band near 500 nm. An additional advantage to UV/Vis absorption is that in most cases it is relatively easy to adjust experimental and instrumental conditions so that Beer's law is obeyed.

Further details about these, and other methods for preparing solids for infrared analysis can be found in this chapter's [additional resources](#).

[Figure 10.18](#) shows the visible spectrum for $\text{Fe}(\text{phen})_3^{2+}$.

A quantitative analysis based on the absorption of infrared radiation, although important, is less frequently encountered than those for UV/Vis absorption. One reason is the greater tendency for instrumental deviations from Beer's law when using infrared radiation. Because an infrared absorption band is relatively narrow, any deviation due to the lack of monochromatic radiation is more pronounced. In addition, infrared sources are less intense than UV/Vis sources, making stray radiation more of a problem. Differences in pathlength for samples and standards when using thin liquid films or KBr pellets are a problem, although an internal standard can be used to correct for any difference in pathlength. Finally, establishing a 100% T ($A=0$) baseline is often difficult because the optical properties of NaCl sample cells may change significantly with wavelength due to contamination and degradation. We can minimize this problem by measuring absorbance relative to a baseline established for the absorption band. Figure 10.34 shows how this is accomplished.

ENVIRONMENTAL APPLICATIONS

The analysis of waters and wastewaters often relies on the absorption of ultraviolet and visible radiation. Many of these methods are outlined in [Table 10.6](#). Several of these methods are described here in more detail.

Although the quantitative analysis of metals in waters and wastewaters is accomplished primarily by atomic absorption or atomic emission spectroscopy, many metals also can be analyzed following the formation of a colored metal–ligand complex. One advantage to these spectroscopic methods is that they are easily adapted to the analysis of samples in the field using a filter photometer. One ligand that is used in the analysis of several metals is diphenylthiocarbazone, also known as dithizone. Dithizone is not soluble in water, but when a solution of dithizone in CHCl_3 is shaken

Another approach is to use a cell with a fixed pathlength, such as that shown in [Figure 10.32b](#).

Atomic absorption is the subject of [Section 10D](#) and atomic emission is the subject of [Section 10G](#).

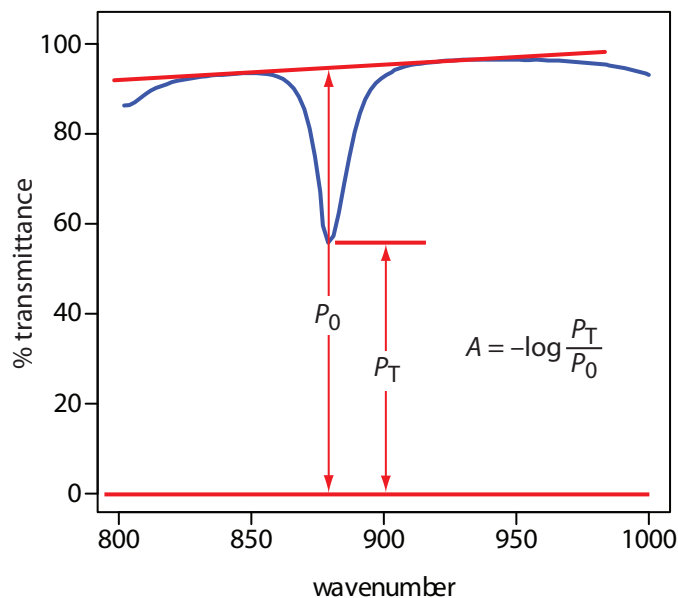
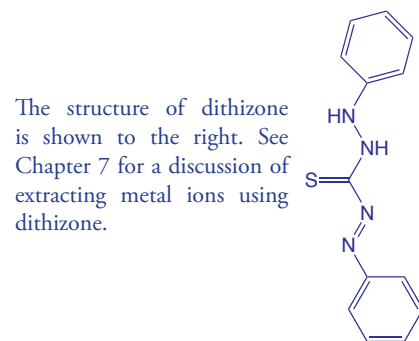


Figure 10.34 Method for determining absorbance from an IR spectrum.

Table 10.6 Examples of the Molecular UV/Vis Analysis of Waters and Wastewaters

Analyte	Method	λ (nm)
<i>Trace Metals</i>		
aluminum	react with Eriochrome cyanide R dye at pH 6; forms red to pink complex	535
arsenic	reduce to AsH ₃ using Zn and react with silver diethyldithiocarbamate; forms red complex	535
cadmium	extract into CHCl ₃ containing dithizone from a sample made basic with NaOH; forms pink to red complex	518
chromium	oxidize to Cr(VI) and react with diphenylcarbazide; forms red-violet product	540
copper	react with neocuprine in neutral to slightly acid solution and extract into CHCl ₃ /CH ₃ OH; forms yellow complex	457
iron	reduce to Fe ²⁺ and react with <i>o</i> -phenanthroline; forms orange-red complex	510
lead	extract into CHCl ₃ containing dithizone from sample made basic with NH ₃ /NH ₄ ⁺ buffer; forms cherry red complex	510
manganese	oxidize to MnO ₄ ⁻ with persulfate; forms purple solution	525
mercury	extract into CHCl ₃ containing dithizone from acidic sample; forms orange complex	492
zinc	react with zincon at pH 9; forms blue complex	620
<i>Inorganic Nonmetals</i>		
ammonia	reaction with hypochlorite and phenol using a manganous salt catalyst; forms blue indophenol as product	630
cyanide	react with chloroamine-T to form CNCl and then with a pyridine-barbituric acid; forms a red-blue dye	578
fluoride	react with red Zr-SPADNS lake; formation of ZrF ₆ ²⁻ decreases color of the red lake	570
chlorine (residual)	react with leuco crystal violet; forms blue product	592
nitrate	react with Cd to form NO ₂ ⁻ and then react with sulfanilamide and <i>N</i> -(1-naphthyl)-ethylenediamine; forms red azo dye	543
phosphate	react with ammonium molybdate and then reduce with SnCl ₂ ; forms molybdenum blue	690
<i>Organics</i>		
phenol	react with 4-aminoantipyrine and K ₃ Fe(CN) ₆ ; forms yellow antipyrine dye	460
anionic surfactant	react with cationic methylene blue dye and extract into CHCl ₃ ; forms blue ion pair	652

with an aqueous solution containing an appropriate metal ion, a colored metal–dithizonate complex forms that is soluble in CHCl_3 . The selectivity of dithizone is controlled by adjusting the sample's pH. For example, Cd^{2+} is extracted from solutions that are made strongly basic with NaOH , Pb^{2+} from solutions that are made basic with an $\text{NH}_3/\text{NH}_4^+$ buffer, and Hg^{2+} from solutions that are slightly acidic.

When chlorine is added to water the portion available for disinfection is called the chlorine residual. There are two forms of chlorine residual. The free chlorine residual includes Cl_2 , HOCl , and OCl^- . The combined chlorine residual, which forms from the reaction of NH_3 with HOCl , consists of monochloramine, NH_2Cl , dichloramine, NHCl_2 , and trichloramine, NCl_3 . Because the free chlorine residual is more efficient at disinfection, there is an interest in methods that can distinguish between the different forms of the total chlorine residual. One such method is the leuco crystal violet method. The free residual chlorine is determined by adding leuco crystal violet to the sample, which instantaneously oxidizes to give a blue colored compound that is monitored at 592 nm. Completing the analysis in less than five minutes prevents a possible interference from the combined chlorine residual. The total chlorine residual (free + combined) is determined by reacting a separate sample with iodide, which reacts with both chlorine residuals to form HOI . When the reaction is complete, leuco crystal violet is added and oxidized by HOI , giving the same blue colored product. The combined chlorine residual is determined by difference.

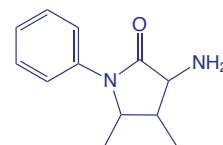
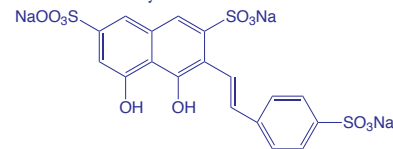
The concentration of fluoride in drinking water may be determined indirectly by its ability to form a complex with zirconium. In the presence of the dye SPADNS, solutions of zirconium form a red colored compound, called a lake, that absorbs at 570 nm. When fluoride is added, the formation of the stable ZrF_6^{2-} complex causes a portion of the lake to dissociate, decreasing the absorbance. A plot of absorbance versus the concentration of fluoride, therefore, has a negative slope.

Spectroscopic methods also are used to determine organic constituents in water. For example, the combined concentrations of phenol, and ortho- and meta- substituted phenols are determined by using steam distillation to separate the phenols from nonvolatile impurities. The distillate reacts with 4-aminoantipyrine at $\text{pH } 7.9 \pm 0.1$ in the presence of $\text{K}_3\text{Fe}(\text{CN})_6$, forming a yellow colored antipyrine dye. After extracting the dye into CHCl_3 , its absorbance is monitored at 460 nm. A calibration curve is prepared using only the unsubstituted phenol, $\text{C}_6\text{H}_5\text{OH}$. Because the molar absorptivity of substituted phenols are generally less than that for phenol, the reported concentration represents the minimum concentration of phenolic compounds.

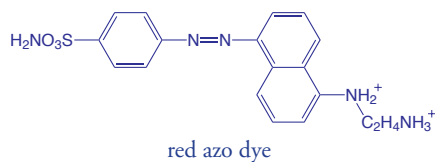
Molecular absorption also can be used for the analysis of environmentally significant airborne pollutants. In many cases the analysis is carried out by collecting the sample in water, converting the analyte to an aqueous form that can be analyzed by methods such as those described in [Table](#)

In Chapter 9 we explored how the total chlorine residual can be determined by a redox titration; see [Representative Method 9.3](#) for further details. The method described here allows us to divide the total chlorine residual into its component parts.

SPADNS, which is shown below, is an abbreviation for the sodium salt of 2-(4-sulfophenylazo)-1,8-dihydroxy-3,6-naphthalenedisulfonic acid, which is a mouthful to say.



4-aminoantipyrine



10.6. For example, the concentration of NO_2 can be determined by oxidizing NO_2 to NO_3^- . The concentration of NO_3^- is then determined by first reducing it to NO_2^- with Cd, and then reacting NO_2^- with sulfanilamide and *N*-(1-naphthyl)-ethylenediamine to form a red azo dye. Another important application is the analysis for SO_2 , which is determined by collecting the sample in an aqueous solution of HgCl_4^{2-} where it reacts to form $\text{Hg}(\text{SO}_3)_2^{2-}$. Addition of *p*-rosaniline and formaldehyde produces a purple complex that is monitored at 569 nm. Infrared absorption is useful for the analysis of organic vapors, including HCN, SO_2 , nitrobenzene, methyl mercaptan, and vinyl chloride. Frequently, these analyses are accomplished using portable, dedicated infrared photometers.

CLINICAL APPLICATIONS

The analysis of clinical samples is often complicated by the complexity of the sample matrix, which may contribute a significant background absorption at the desired wavelength. The determination of serum barbiturates provides one example of how this problem is overcome. The barbiturates are first extracted from a sample of serum with CHCl_3 and then extracted from the CHCl_3 into 0.45 M NaOH ($\text{pH} \approx 13$). The absorbance of the aqueous extract is measured at 260 nm, and includes contributions from the barbiturates as well as other components extracted from the serum sample. The pH of the sample is then lowered to approximately 10 by adding NH_4Cl and the absorbance remeasured. Because the barbiturates do not absorb at this pH, we can use the absorbance at pH 10, $A_{\text{pH } 10}$, to correct the absorbance at pH 13, $A_{\text{pH } 13}$

$$A_{\text{barb}} = A_{\text{pH } 13} - \frac{V_{\text{samp}} + V_{\text{NH}_4\text{Cl}}}{V_{\text{samp}}} \times A_{\text{pH } 10}$$

where A_{barb} is the absorbance due to the serum barbiturates, and V_{samp} and $V_{\text{NH}_4\text{Cl}}$ are the volumes of sample and NH_4Cl , respectively. [Table 10.7](#) provides a summary of several other methods for analyzing clinical samples.

INDUSTRIAL ANALYSIS

UV/Vis molecular absorption is used for the analysis of a diverse array of industrial samples including pharmaceuticals, food, paint, glass, and metals. In many cases the methods are similar to those described in [Table 10.6](#) and [Table 10.7](#). For example, the amount of iron in food can be determined by bringing the iron into solution and analyzing using the *o*-phenanthroline method listed in [Table 10.6](#).

Many pharmaceutical compounds contain chromophores that make them suitable for analysis by UV/Vis absorption. Products that have been analyzed in this fashion include antibiotics, hormones, vitamins, and analgesics. One example of the use of UV absorption is in determining the

Table 10.7 Examples of the Molecular UV/Vis Analysis of Clinical Samples

Analyte	Method	λ (nm)
total serum protein	react with NaOH and Cu^{2+} ; forms blue-violet complex	540
serum cholesterol	react with Fe^{3+} in presence of isopropanol, acetic acid, and H_2SO_4 ; forms blue-violet complex	540
uric acid	react with phosphotungstic acid; forms tungsten blue	710
serum barbiturates	extract into CHCl_3 to isolate from interferents and then extract into 0.45 M NaOH	260
glucose	react with <i>o</i> -toluidine at 100 °C; forms blue-green complex	630
protein-bound iodine	decompose protein to release iodide, which catalyzes redox reaction between Ce^{3+} and As^{3+} ; forms yellow colored Ce^{4+}	420

purity of aspirin tablets, for which the active ingredient is acetylsalicylic acid. Salicylic acid, which is produced by the hydrolysis of acetylsalicylic acid, is an undesirable impurity in aspirin tablets, and should not be present at more than 0.01% w/w. Samples can be screened for unacceptable levels of salicylic acid by monitoring the absorbance at a wavelength of 312 nm. Acetylsalicylic acid absorbs at 280 nm, but absorbs poorly at 312 nm. Conditions for preparing the sample are chosen such that an absorbance of greater than 0.02 signifies an unacceptable level of salicylic acid.

FORENSIC APPLICATIONS

UV/Vis molecular absorption is routinely used for the analysis of narcotics and for drug testing. One interesting forensic application is the determination of blood alcohol using the Breathalyzer test. In this test a 52.5-mL breath sample is bubbled through an acidified solution of $\text{K}_2\text{Cr}_2\text{O}_7$, which oxidizes ethanol to acetic acid. The concentration of ethanol in the breath sample is determined by the decrease in absorbance at 440 nm where the dichromate ion absorbs. A blood alcohol content of 0.10%, which is above the legal limit, corresponds to 0.025 mg of ethanol in the breath sample.

DEVELOPING A QUANTITATIVE METHOD FOR A SINGLE COMPONENT

In developing a quantitative analytical method, the conditions under which Beer's law is obeyed must be established. First, the most appropriate wavelength for the analysis is determined from an absorption spectrum. In most cases the best wavelength corresponds to an absorption maximum because it provides greater sensitivity and is less susceptible to instrumental limitations. Second, if an instrument with adjustable slits is being used, then an appropriate slit width needs to be chosen. The absorption spectrum also aids in selecting a slit width. Usually we set the slits to be as wide as possible because this increases the throughput of source radiation, while also being narrow enough to avoid instrumental limitations to Beer's law. Finally, a calibration curve is constructed to determine the range of concentrations for which Beer's law is valid. Additional considerations that are important

The best way to appreciate the theoretical and practical details discussed in this section is to carefully examine a typical analytical method. Although each method is unique, the following description of the determination of iron in water and wastewater provides an instructive example of a typical procedure. The description here is based on Method 3500- Fe B as published in *Standard Methods for the Examination of Water and Wastewater*, 20th Ed., American Public Health Association: Washington, D. C., 1998.

Figure 10.18 shows the visible spectrum for $\text{Fe}(\text{phen})_3^{2+}$.

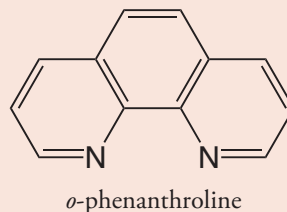
in any quantitative method are the effect of potential interferences and establishing an appropriate blank.

Representative Method 10.1

Determination of Iron in Water and Wastewater

DESCRIPTION OF METHOD

Iron in the +2 oxidation state reacts with *o*-phenanthroline to form the orange-red $\text{Fe}(\text{phen})_3^{2+}$ complex. The intensity of the complex's color is independent of solution acidity between a pH of 3 and 9. Because the complex forms more rapidly at lower pH levels, the reaction is usually carried out within a pH range of 3.0–3.5. Any iron present in the +3 oxidation state is reduced with hydroxylamine before adding *o*-phenanthroline. The most important interferences are strong oxidizing agents, polyphosphates, and metal ions such as Cu^{2+} , Zn^{2+} , Ni^{2+} , and Cd^{2+} . An interference from oxidizing agents is minimized by adding an excess of hydroxylamine, and an interference from polyphosphate is minimized by boiling the sample in the presence of acid. The absorbance of samples and standards are measured at a wavelength of 510 nm using a 1-cm cell (longer pathlength cells also may be used). Beer's law is obeyed for concentrations of within the range of 0.2–4.0 mg Fe/L.



PROCEDURE

For samples containing less than 2 mg Fe/L, directly transfer a 50-mL portion to a 125-mL Erlenmeyer flask. Samples containing more than 2 mg Fe/L must be diluted before acquiring the 50-mL portion. Add 2 mL of concentrated HCl and 1 mL of hydroxylamine to the sample. Heat the solution to boiling and continue boiling until the solution's volume is reduced to between 15 and 20 mL. After cooling to room temperature, transfer the solution to a 50-mL volumetric flask, add 10 mL of an ammonium acetate buffer, 2 mL of a 1000 ppm solution of *o*-phenanthroline, and dilute to volume. Allow 10–15 minutes for color development before measuring the absorbance, using distilled water to set 100% T. Calibration standards, including a blank, are prepared by the same procedure using a stock solution containing a known concentration of Fe^{2+} .

QUESTIONS

1. Explain why strong oxidizing agents are interferences, and why an excess of hydroxylamine prevents the interference.

A strong oxidizing agent oxidizes some Fe^{2+} to Fe^{3+} . Because $\text{Fe}(\text{phen})_3^{3+}$ does not absorb as strongly as $\text{Fe}(\text{phen})_3^{2+}$, the absorbance decreases, producing a negative determinate error. The excess hydroxylamine reacts with the oxidizing agents, removing them from the solution.

2. The color of the complex is stable between pH levels of 3 and 9. What are some possible complications at more acidic or more basic pH's?

Because *o*-phenanthroline is a weak base, its conditional formation constant for $\text{Fe}(\text{phen})_3^{2+}$ is less favorable at more acidic pH levels, where *o*-phenanthroline is protonated. The result is a decrease in absorbance and a less sensitive analytical method. When the pH is greater than 9, competition between OH^- and *o*-phenanthroline for Fe^{2+} also decreased the absorbance. In addition, if the pH is sufficiently basic there is a risk that the iron will precipitate as $\text{Fe}(\text{OH})_2$.

3. Cadmium is an interferent because it forms a precipitate with *o*-phenanthroline. What effect would the formation of precipitate have on the determination of iron?

Because *o*-phenanthroline is present in large excess (2000 μg of *o*-phenanthroline for 100 μg of Fe^{2+}), it is not likely that the interference is due to an insufficient amount of *o*-phenanthroline being available to react with the Fe^{2+} . The presence of a precipitate in the sample cell results in the scattering of radiation, which causes an apparent increase in absorbance. Because the measured absorbance increases, the reported concentration is too high.

4. Even high quality ammonium acetate contains a significant amount of iron. Why is this source of iron not a problem?

Because all samples and standards are prepared using the same volume of ammonium acetate buffer, the contribution of this source of iron is accounted for by the calibration curve's reagent blank.

In [Chapter 9](#) we saw the same effect of pH on the complexation reactions between EDTA and metal ions.

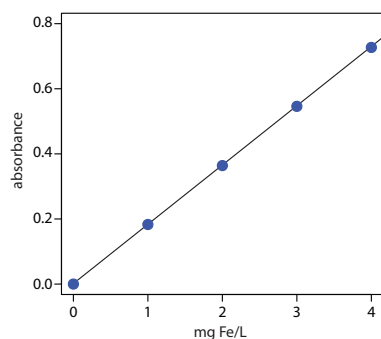
Although scattering is a problem here, it can serve as the basis of a useful analytical method. See [Section 10H](#) for further details.

QUANTITATIVE ANALYSIS FOR A SINGLE ANALYTE

To determine the concentration of a an analyte we measure its absorbance and apply Beer's law using any of the standardization methods described in Chapter 5. The most common methods are a normal calibration curve using external standards and the method of standard additions. A single point standardization is also possible, although we must first verify that Beer's law holds for the concentration of analyte in the samples and the standard.

Example 10.5

The determination of Fe in an industrial waste stream was carried out by the *o*-phenanthroline described in [Representative Method 10.1](#). Using the data in the following table, determine the mg Fe/L in the waste stream.



mg Fe/L	absorbance
0.00	0.000
1.00	0.183
2.00	0.364
3.00	0.546
4.00	0.727
sample	0.269

SOLUTION

Linear regression of absorbance versus the concentration of Fe in the standards gives a calibration curve with the following equation.

$$A = 0.0006 + 0.1817 \times (\text{mg Fe/L})$$

Substituting the sample's absorbance into the calibration expression gives the concentration of Fe in the waste stream as 1.48 mg Fe/L

Practice Exercise 10.5

The concentration of Cu^{2+} in a sample can be determined by reacting it with the ligand cuprizone and measuring its absorbance at 606 nm in a 1.00-cm cell. When a 5.00-mL sample is treated with cuprizone and diluted to 10.00 mL, the resulting solution has an absorbance of 0.118. A second 5.00-mL sample is mixed with 1.00 mL of a 20.00 mg/L standard of Cu^{2+} , treated with cuprizone and diluted to 10.00 mL, giving an absorbance of 0.162. Report the mg Cu^{2+} /L in the sample.

Click [here](#) to review your answer to this exercise.

QUANTITATIVE ANALYSIS OF MIXTURES

Suppose we need to determine the concentration of two analytes, X and Y, in a sample. If each analyte has a wavelength where the other analyte does not absorb, then we can proceed using the approach in [Example 10.5](#). Unfortunately, UV/Vis absorption bands are so broad that it frequently is not possible to find suitable wavelengths. Because Beer's law is additive the mixture's absorbance, A_{mix} , is

$$(A_{\text{mix}})_{\lambda 1} = (\epsilon_X)_{\lambda 1} b C_X + (\epsilon_Y)_{\lambda 1} b C_Y \quad 10.11$$

where $\lambda 1$ is the wavelength at which we measure the absorbance. Because equation 10.11 includes terms for the concentration of both X and Y, the absorbance at one wavelength does not provide enough information to determine either C_X or C_Y . If we measure the absorbance at a second wavelength

$$(A_{\text{mix}})_{\lambda_2} = (\epsilon_X)_{\lambda_2} b C_X + (\epsilon_Y)_{\lambda_2} b C_Y \quad 10.12$$

then C_X and C_Y can be determined by solving simultaneously equation 10.11 and equation 10.12. Of course, we also must determine the value for ϵ_X and ϵ_Y at each wavelength. For a mixture of n components, we must measure the absorbance at n different wavelengths.

Example 10.6

The concentrations of Fe^{3+} and Cu^{2+} in a mixture can be determined following their reaction with hexacyanoruthenate (II), $\text{Ru}(\text{CN})_6^{4-}$, which forms a purple-blue complex with Fe^{3+} ($\lambda_{\text{max}} = 550 \text{ nm}$) and a pale-green complex with Cu^{2+} ($\lambda_{\text{max}} = 396 \text{ nm}$).⁷ The molar absorptivities ($\text{M}^{-1} \text{cm}^{-1}$) for the metal complexes at the two wavelengths are summarized in the following table.

	ϵ_{550}	ϵ_{396}
Fe^{3+}	9970	84
Cu^{2+}	34	856

When a sample containing Fe^{3+} and Cu^{2+} is analyzed in a cell with a path-length of 1.00 cm, the absorbance at 550 nm is 0.183 and the absorbance at 396 nm is 0.109. What are the molar concentrations of Fe^{3+} and Cu^{2+} in the sample?

SOLUTION

Substituting known values into equations 10.11 and 10.12 gives

$$A_{550} = 0.183 = 9970C_{\text{Fe}} + 34C_{\text{Cu}}$$

$$A_{396} = 0.109 = 84C_{\text{Fe}} + 856C_{\text{Cu}}$$

To determine C_{Fe} and C_{Cu} we solve the first equation for C_{Cu}

$$C_{\text{Cu}} = \frac{0.183 - 9970C_{\text{Fe}}}{34}$$

and substitute the result into the second equation.

$$0.109 = 84C_{\text{Fe}} + 856 \times \frac{0.183 - 9970C_{\text{Fe}}}{34} = 4.607 - (2.51 \times 10^5)C_{\text{Fe}}$$

Solving for C_{Fe} gives the concentration of Fe^{3+} as $1.79 \times 10^{-5} \text{ M}$. Substituting this concentration back into the equation for the mixture's absorbance at 396 nm gives the concentration of Cu^{2+} as $1.26 \times 10^{-4} \text{ M}$.

Another approach is to multiply the first equation by 856/34 giving

$$4.607 = 251009C_{\text{Fe}} + 856C_{\text{Cu}}$$

Subtracting the second equation from this equation

$$4.607 = 251009C_{\text{Fe}} + 856C_{\text{Cu}}$$

$$-0.109 = 84C_{\text{Fe}} + 856C_{\text{Cu}}$$

$$4.498 = 250925C_{\text{Fe}}$$

we find that C_{Fe} is 1.79×10^{-5} . Having determined C_{Fe} we can substitute back into one of the other equations to solve for C_{Cu} , which is 1.26×10^{-4} .

7 DiTusa, M. R.; Schlit, A. A. *J. Chem. Educ.* **1985**, *62*, 541–542.

Practice Exercise 10.6

The absorbance spectra for Cr^{3+} and Co^{2+} overlap significantly. To determine the concentration of these analytes in a mixture, its absorbance was measured at 400 nm and at 505 nm, yielding values of 0.336 and 0.187, respectively. The individual molar absorptivities ($\text{M}^{-1} \text{cm}^{-1}$) are

	ϵ_{400}	ϵ_{505}
Cr^{3+}	15.2	0.533
Co^{2+}	5.60	5.07

Click [here](#) to review your answer to this exercise.

For example, in [Example 10.6](#) the molar absorptivity for Fe^{3+} at 550 nm is $119\times$ that for Cu^{2+} , and the molar absorptivity for Cu^{2+} at 396 nm is $10.2\times$ that for Fe^{3+} .

To obtain results with good accuracy and precision the two wavelengths should be selected so that $\epsilon_X > \epsilon_Y$ at one wavelength and $\epsilon_X < \epsilon_Y$ at the other wavelength. It is easy to appreciate why this is true. Because the absorbance at each wavelength is dominated by one analyte, any uncertainty in the concentration of the other analyte has less of an impact. Figure 10.35 shows that the choice of wavelengths for Practice Exercise 10.6 are reasonable. When the choice of wavelengths is not obvious, one method for locating the optimum wavelengths is to plot ϵ_X/ϵ_Y as function of wavelength, and determine the wavelengths where ϵ_X/ϵ_Y reaches maximum and minimum values.⁸

When the analyte's spectra overlap severely, such that $\epsilon_X \approx \epsilon_Y$ at all wavelength, other computational methods may provide better accuracy and precision. In a multiwavelength linear regression analysis, for example, a mixture's absorbance is compared to that for a set of standard solutions at several wavelengths.⁹ If A_{SX} and A_{SY} are the absorbance values for standard solutions of components X and Y at any wavelength, then

8 Mehra, M. C.; Rioux, J. *J. Chem. Educ.* **1982**, 59, 688–689.

9 Blanco, M.; Iturriaga, H.; Maspoch, S.; Tarin, P. *J. Chem. Educ.* **1989**, 66, 178–180.

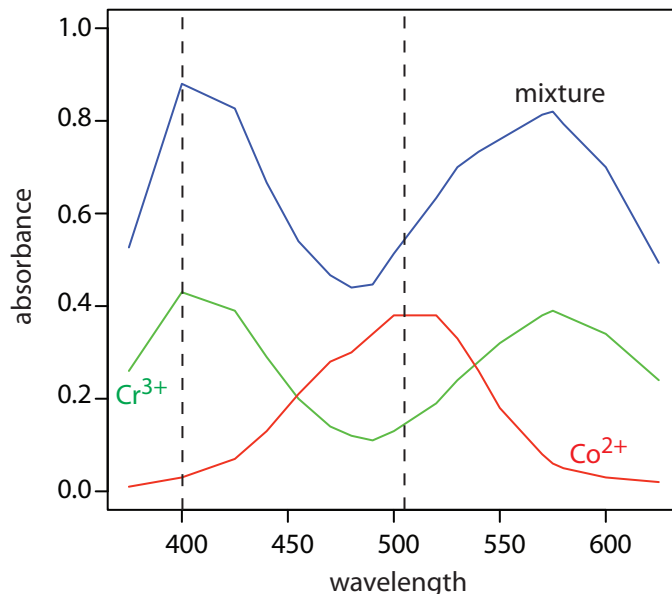


Figure 10.35 Visible absorption spectra for 0.0250 M Cr^{3+} , 0.0750 M Co^{2+} , and for a mixture of Cr^{3+} and Co^{2+} . The two wavelengths used for analyzing the mixture of Cr^{3+} and Co^{2+} are shown by the dashed lines. The data for the two standard solutions are from reference 7.

$$A_{SX} = \epsilon_X b C_{SX} \quad 10.13$$

$$A_{SY} = \epsilon_Y b C_{SY} \quad 10.14$$

where C_{SX} and C_{SY} are the known concentrations of X and Y in the standard solutions. Solving equation 10.13 and equation 10.14 for ϵ_X and ϵ_Y , substituting into [equation 10.11](#), and rearranging, gives

$$\frac{A_{\text{mix}}}{A_{SX}} = \frac{C_X}{C_{SX}} + \frac{C_Y}{C_{SY}} \times \frac{A_{SY}}{A_{SX}}$$

To determine C_X and C_Y the mixture's absorbance and the absorbances of the standard solutions are measured at several wavelengths. Graphing A_{mix}/A_{SX} versus A_{SY}/A_{SX} gives a straight line with a slope of C_Y/C_{SY} and a y -intercept of C_X/C_{SX} . This approach is particularly helpful when it is not possible to find wavelengths where $\epsilon_X > \epsilon_Y$ and $\epsilon_X < \epsilon_Y$.

The approach outlined here for a multiwavelength linear regression uses a single standard solution for each analyte. A more rigorous approach uses multiple standards for each analyte. The math behind the analysis of this data—what we call a multiple linear regression—is beyond the level of this text. For more details about multiple linear regression see Brereton, R. G. *Chemometrics: Data Analysis for the Laboratory and Chemical Plant*, Wiley: Chichester, England, 2003.

Example 10.7

[Figure 10.35](#) shows visible absorbance spectra for a standard solution of 0.0250 M Cr^{3+} , a standard solution of 0.0750 M Co^{2+} , and a mixture containing unknown concentrations of each ion. The data for these spectra are shown here.¹⁰

λ (nm)	A_{Cr}	A_{Co}	A_{mix}	λ (nm)	A_{Cr}	A_{Co}	A_{mix}
375	0.26	0.01	0.53	520	0.19	0.38	0.63
400	0.43	0.03	0.88	530	0.24	0.33	0.70
425	0.39	0.07	0.83	540	0.28	0.26	0.73
440	0.29	0.13	0.67	550	0.32	0.18	0.76
455	0.20	0.21	0.54	570	0.38	0.08	0.81
470	0.14	0.28	0.47	575	0.39	0.06	0.82
480	0.12	0.30	0.44	580	0.38	0.05	0.79
490	0.11	0.34	0.45	600	0.34	0.03	0.70
500	0.13	0.38	0.51	625	0.24	0.02	0.49

Use a multiwavelength regression analysis to determine the composition of the unknown.

SOLUTION

First we need to calculate values for A_{mix}/A_{SX} and for A_{SY}/A_{SX} . Let's define X as Co^{2+} and Y as Cr^{3+} . For example, at a wavelength of 375 nm A_{mix}/A_{SX} is 0.53/0.01, or 53 and A_{SY}/A_{SX} is 0.26/0.01, or 26. Completing the calculation for all wavelengths and graphing A_{mix}/A_{SX} versus A_{SY}/A_{SX}

10 The data for the two standards are from Brewer, S. *Solving Problems in Analytical Chemistry*, John Wiley & Sons: New York, 1980.

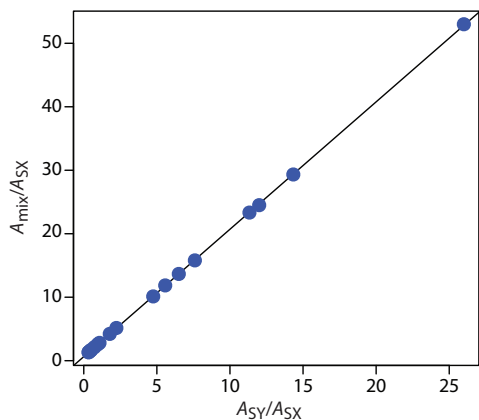


Figure 10.36 Multiwavelength linear regression analysis for the data in Example 10.7.

gives the result shown in Figure 10.36. Fitting a straight-line to the data gives a regression model of

$$\frac{A_{\text{mix}}}{A_{\text{SX}}} = 0.636 + 2.01 \times \frac{A_{\text{SY}}}{A_{\text{SX}}}$$

Using the y -intercept, the concentration of Co^{2+} is

$$\frac{C_{\text{X}}}{C_{\text{SX}}} = \frac{C_{\text{Co}}}{0.0750 \text{ M}} = 0.636$$

or $C_{\text{Co}} = 0.048 \text{ M}$, and using the slope the concentration of Cr^{3+} is

$$\frac{C_{\text{Y}}}{C_{\text{SY}}} = \frac{C_{\text{Cr}}}{0.0250 \text{ M}} = 2.01$$

or $C_{\text{Cr}} = 0.050 \text{ M}$.

There are many additional ways to analyze mixtures spectrophotometrically, including generalized standard additions, H-point standard additions, principal component regression to name a few. Consult the chapter's [additional resources](#) for further information.

Practice Exercise 10.7

A mixture of MnO_4^- and $\text{Cr}_2\text{O}_7^{2-}$, and standards of 0.10 mM KMnO_4 and of $0.10 \text{ mM K}_2\text{Cr}_2\text{O}_7$ gives the results shown in the following table. Determine the composition of the mixture. The data for this problem is from Blanco, M. C.; Iturriaga, H.; Maspoch, S.; Tarin, P. *J. Chem. Educ.* **1989**, *66*, 178–180.

λ (nm)	A_{Mn}	A_{Cr}	A_{mix}
266	0.042	0.410	0.766
288	0.082	0.283	0.571
320	0.168	0.158	0.422
350	0.125	0.318	0.672
360	0.056	0.181	0.366

Click [here](#) to review your answer to this exercise.

10C.3 Qualitative Applications

As discussed earlier in [Section 10B.1](#), ultraviolet, visible, and infrared absorption bands result from the absorption of electromagnetic radiation by specific valence electrons or bonds. The energy at which the absorption occurs, and its intensity is determined by the chemical environment of the absorbing moiety. For example, benzene has several ultraviolet absorption bands due to $\pi \rightarrow \pi^*$ transitions. The position and intensity of two of these bands, 203.5 nm ($\epsilon = 7400 \text{ M}^{-1} \text{ cm}^{-1}$) and 254 nm ($\epsilon = 204 \text{ M}^{-1} \text{ cm}^{-1}$), are sensitive to substitution. For benzoic acid, in which a carboxylic acid group replaces one of the aromatic hydrogens, the two bands shift to 230 nm ($\epsilon = 11\,600 \text{ M}^{-1} \text{ cm}^{-1}$) and 273 nm ($\epsilon = 970 \text{ M}^{-1} \text{ cm}^{-1}$). A variety of

rules have been developed to aid in correlating UV/Vis absorption bands to chemical structure. Similar correlations have been developed for infrared absorption bands. For example a carbonyl's C=O stretch is sensitive to adjacent functional groups, occurring at 1650 cm^{-1} for acids, 1700 cm^{-1} for ketones, and 1800 cm^{-1} for acid chlorides. The interpretation of UV/Vis and IR spectra receives adequate coverage elsewhere in the chemistry curriculum, notably in organic chemistry, and is not considered further in this text.

With the availability of computerized data acquisition and storage it is possible to build digital libraries of standard reference spectra. The identity of an unknown compound can often be determined by comparing its spectrum against a library of reference spectra, a process known as **SPECTRAL SEARCHING**. Comparisons are made using an algorithm that calculates the cumulative difference between the sample's spectrum and a reference spectrum. For example, one simple algorithm uses the following equation

$$D = \sum_{i=1}^n |(A_{\text{sample}})_i - (A_{\text{reference}})_i|$$

where D is the cumulative difference, A_{sample} is the sample's absorbance at wavelength or wavenumber i , $A_{\text{reference}}$ is the absorbance of the reference compound at the same wavelength or wavenumber, and n is the number of digitized points in the spectra. The cumulative difference is calculated for each reference spectrum. The reference compound with the smallest value of D provides the closest match to the unknown compound. The accuracy of spectral searching is limited by the number and type of compounds included in the library, and by the effect of the sample's matrix on the spectrum.

Another advantage of computerized data acquisition is the ability to subtract one spectrum from another. When coupled with spectral searching it may be possible, by repeatedly searching and subtracting reference spectra, to determine the identity of several components in a sample without the need of a prior separation step. An example is shown in [Figure 10.37](#) in which the composition of a two-component mixture is determined by successive searching and subtraction. Figure 10.37a shows the spectrum of the mixture. A search of the spectral library selects cocaine·HCl (Figure 10.37b) as a likely component of the mixture. Subtracting the reference spectrum for cocaine·HCl from the mixture's spectrum leaves a result (Figure 10.37c) that closely matches mannitol's reference spectrum (Figure 10.37d). Subtracting the reference spectrum for mannitol leaves only a small residual signal (Figure 10.37e).

10C.4 Characterization Applications

Molecular absorption, particularly in the UV/Vis range, has been used for a variety of different characterization studies, including determining the

IR spectra traditionally are displayed using percent transmittance, %T, along the y -axis (for example, see Figure 10.16). Because absorbance—not percent transmittance—is a linear function of concentration, spectral searching and spectral subtraction, is easier to do when displaying absorbance on the y -axis.

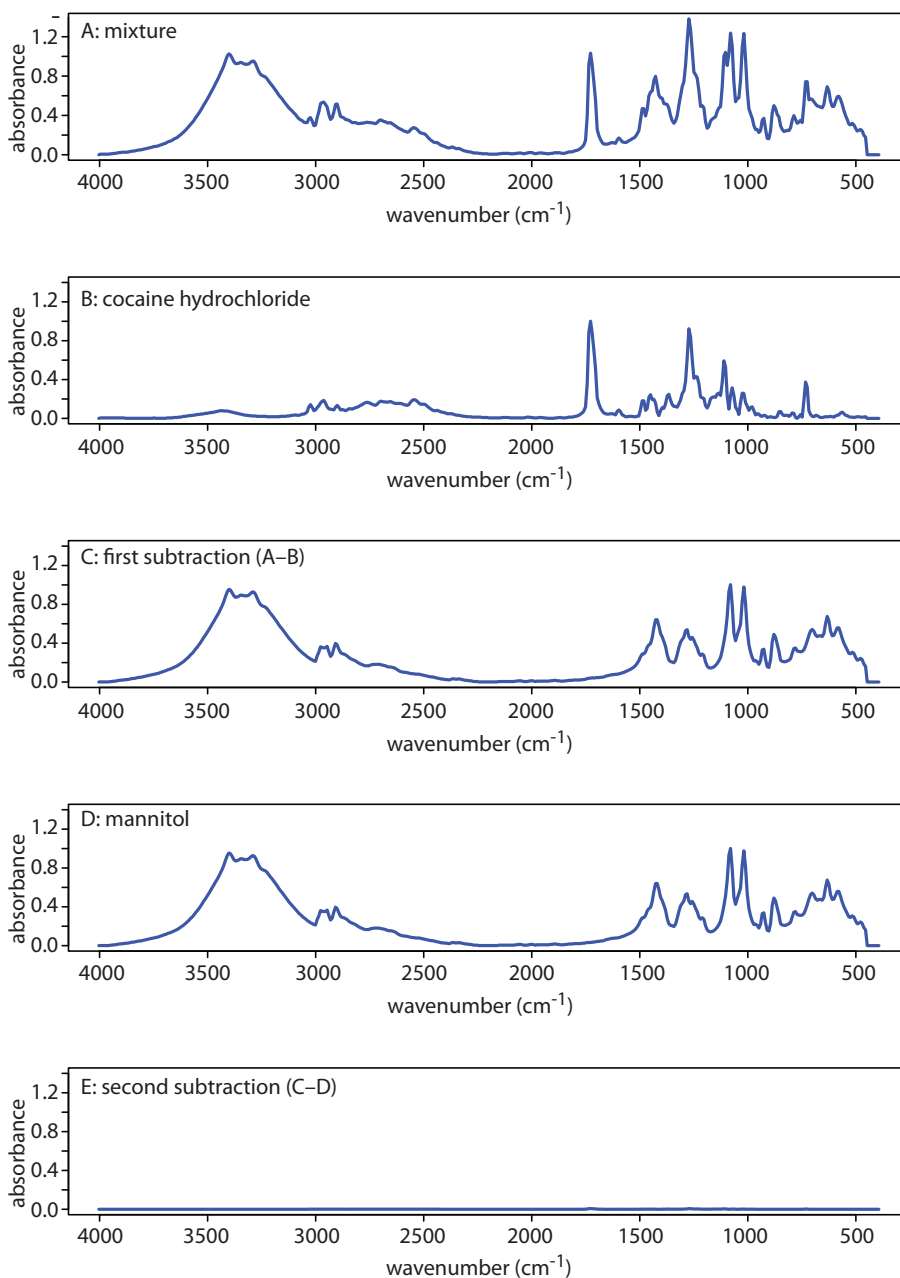
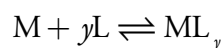


Figure 10.37 Identifying the components of a mixture by spectral searching and subtracting. (a) IR spectrum of the mixture; (b) Reference IR spectrum of cocaine · HCl; (c) Result of subtracting the spectrum of cocaine · HCl from the mixture’s spectrum; (d) Reference IR spectrum of mannitol; and (e) The residual spectrum after removing mannitol’s contribution to the mixture’s spectrum.

stoichiometry of metal–ligand complexes and determining equilibrium constants. Both of these examples are examined in this section.

STOICHIOMETRY OF A METAL-LIGAND COMPLEX

We can determine the stoichiometry of a metal–ligand complexation reaction



using one of three methods: the method of continuous variations, the mole-ratio method, and the slope-ratio method. Of these approaches, the

METHOD OF CONTINUOUS VARIATIONS, also called Job's method, is the most popular. In this method a series of solutions is prepared such that the total moles of metal and ligand, n_{total} , in each solution is the same. If $(n_{\text{M}})_i$ and $(n_{\text{L}})_i$ are, respectively, the moles of metal and ligand in solution i , then

$$n_{\text{total}} = (n_{\text{M}})_i + (n_{\text{L}})_i$$

The relative amount of ligand and metal in each solution is expressed as the mole fraction of ligand, $(X_{\text{L}})_i$, and the mole fraction of metal, $(X_{\text{M}})_i$,

$$(X_{\text{L}})_i = \frac{(n_{\text{L}})_i}{n_{\text{total}}}$$

$$(X_{\text{M}})_i = 1 - \frac{(n_{\text{L}})_i}{n_{\text{total}}} = \frac{(n_{\text{M}})_i}{n_{\text{total}}}$$

The concentration of the metal–ligand complex in any solution is determined by the limiting reagent, with the greatest concentration occurring when the metal and the ligand are mixed stoichiometrically. If we monitor the complexation reaction at a wavelength where only the metal–ligand complex absorbs, a graph of absorbance versus the mole fraction of ligand will have two linear branches—one when the ligand is the limiting reagent and a second when the metal is the limiting reagent. The intersection of these two branches represents a stoichiometric mixing of the metal and the ligand. We can use the mole fraction of ligand at the intersection to determine the value of y for the metal–ligand complex ML_y .

$$y = \frac{n_{\text{L}}}{n_{\text{M}}} = \frac{X_{\text{L}}}{X_{\text{M}}} = \frac{X_{\text{L}}}{1 - X_{\text{L}}}$$

You also can plot the data as absorbance versus the mole fraction of metal. In this case, y is equal to $(1 - X_{\text{M}})/X_{\text{M}}$.

Example 10.8

To determine the formula for the complex between Fe^{2+} and *o*-phenanthroline, a series of solutions is prepared in which the total concentration of metal and ligand is held constant at 3.15×10^{-4} M. The absorbance of each solution is measured at a wavelength of 510 nm. Using the following data, determine the formula for the complex.

X_{L}	absorbance	X_{L}	absorbance
0.000	0.000	0.600	0.693
0.100	0.116	0.700	0.809
0.200	0.231	0.800	0.693
0.300	0.347	0.900	0.347
0.400	0.462	1.000	0.000
0.500	0.578		

To prepare the solutions for this example I first prepared a solution of 3.15×10^{-4} M Fe^{2+} and a solution of 3.15×10^{-4} M *o*-phenanthroline. Because the two stock solutions are of equal concentration, diluting a portion of one solution with the other solution gives a mixture in which the combined concentration of *o*-phenanthroline and Fe^{2+} is 3.15×10^{-4} M. If each solution has the same volume, then each solution contains the same total moles of metal and ligand.

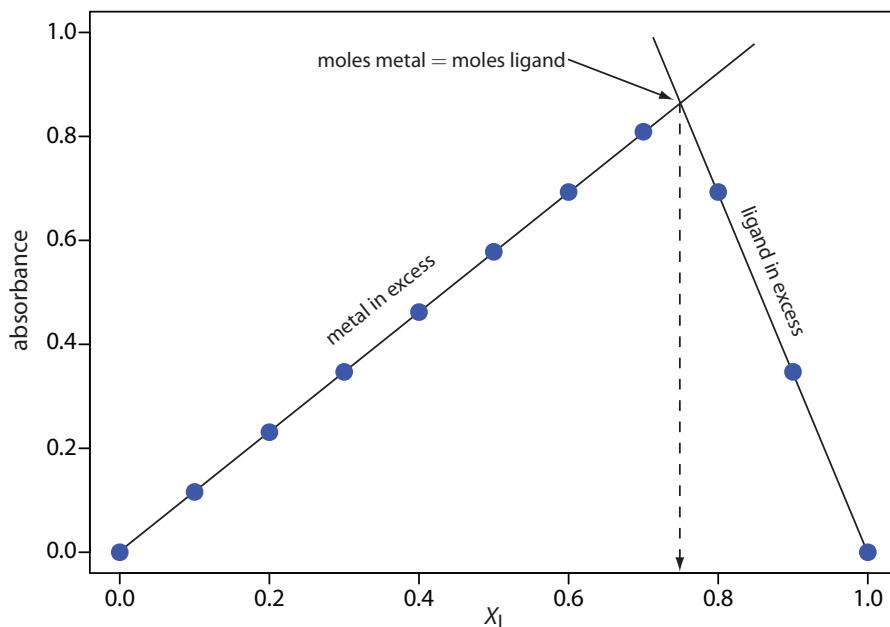


Figure 10.38 Continuous variations plot for Example 10.8. The photo shows the solutions used in gathering the data. Each solution is displayed directly below its corresponding point on the continuous variations plot.



SOLUTION

A plot of absorbance versus the mole fraction of ligand is shown in Figure 10.38. To find the maximum absorbance, we extrapolate the two linear portions of the plot. The two lines intersect at a mole fraction of ligand of 0.75. Solving for y gives

$$y = \frac{X_L}{1 - X_L} = \frac{0.75}{1 - 0.75} = 3$$

The formula for the metal–ligand complex is $\text{Fe}(o\text{-phenanthroline})_3^{2+}$.

Practice Exercise 10.8

Use the continuous variations data in the following table to determine the formula for the complex between Fe^{2+} and SCN^- . The data for this problem is adapted from Meloun, M.; Havel, J.; Högfeltdt, E. *Computation of Solution Equilibria*, Ellis Horwood: Chichester, England, 1988, p. 236.

X_L	absorbance	X_L	absorbance	X_L	absorbance	X_L	absorbance
0.0200	0.068	0.2951	0.670	0.5811	0.790	0.8923	0.325
0.0870	0.262	0.3887	0.767	0.6860	0.701	0.9787	0.071
0.1792	0.471	0.4964	0.807	0.7885	0.540		

Click [here](#) to review your answer to this exercise.

Several precautions are necessary when using the method of continuous variations. First, the metal and the ligand must form only one metal–ligand complex. To determine if this condition is true, plots of absorbance versus X_L are constructed at several different wavelengths and for several different values of n_{total} . If the maximum absorbance does not occur at the same value of X_L for each set of conditions, then more than one metal–ligand complex must be present. A second precaution is that the metal–ligand complex’s absorbance must obey Beer’s law. Third, if the metal–ligand complex’s formation constant is relatively small, a plot of absorbance versus X_L may show significant curvature. In this case it is often difficult to determine the stoichiometry by extrapolation. Finally, because the stability of a metal–ligand complex may be influenced by solution conditions, the composition of the solutions must be carefully controlled. When the ligand is a weak base, for example, the solutions must be buffered to the same pH.

In the **MOLE-RATIO METHOD** the amount of one reactant, usually the moles of metal, is held constant, while the amount of the other reactant is varied. The absorbance is monitored at a wavelength where the metal–ligand complex absorbs. A plot of absorbance as a function of the ligand-to-metal mole ratio, n_L/n_M , has two linear branches, which intersect at a mole–ratio corresponding to the complex’s formula. Figure 10.39a shows a mole-ratio plot for the formation of a 1:1 complex in which the absorbance is monitored at a wavelength where only the complex absorbs. Figure 10.39b shows a mole-ratio plot for a 1:2 complex in which all three species—the metal, the ligand, and the complex—absorb at the selected wavelength. Unlike the method of continuous variations, the mole-ratio method can be used for complexation reactions that occur in a stepwise fashion if there is a difference in the molar absorptivities of the metal–ligand complexes, and if the formation constants are sufficiently different. A typical mole-ratio plot for the step-wise formation of ML and ML_2 is shown in Figure 10.39c.

In both the method of continuous variations and the mole-ratio method we determine the complex’s stoichiometry by extrapolating absorbance data

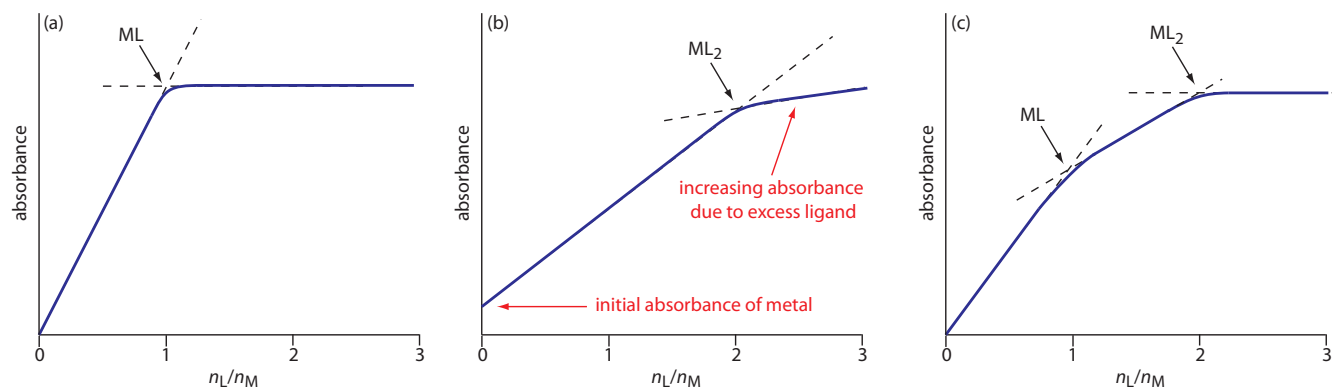


Figure 10.39 Mole-ratio plots for: (a) a 1:1 metal–ligand complex in which only the complex absorbs; (b) a 1:2 metal–ligand complex in which the metal, the ligand, and the complex absorb; and (c) the stepwise formation of a 1:1 and a 1:2 metal–ligand complex.

from conditions in which there is a linear relationship between absorbance and the relative amounts of metal and ligand. If a metal–ligand complex is very weak, a plot of absorbance versus X_L or n_L/n_M may be so curved that it is impossible to determine the stoichiometry by extrapolation. In this case the slope-ratio may be used.

In the **SLOPE-RATIO METHOD** two sets of solutions are prepared. The first set of solutions contains a constant amount of metal and a variable amount of ligand, chosen such that the total concentration of metal, C_M , is much larger than the total concentration of ligand, C_L . Under these conditions we may assume that essentially all the ligand reacts in forming the metal–ligand complex. The concentration of the complex, which has the general form M_xL_y , is

$$[M_xL_y] = \frac{C_L}{y}$$

If we monitor the absorbance at a wavelength where only M_xL_y absorbs, then

$$A = \epsilon b [M_xL_y] = \frac{\epsilon b C_L}{y}$$

and a plot of absorbance versus C_L is linear with a slope, s_L , of

$$s_L = \frac{\epsilon b}{y}$$

A second set of solutions is prepared with a fixed concentration of ligand that is much greater than a variable concentration of metal; thus

$$[M_xL_y] = \frac{C_M}{x}$$

$$A = \epsilon b [M_xL_y] = \frac{\epsilon b C_M}{x}$$

$$s_M = \frac{\epsilon b}{x}$$

A ratio of the slopes provides the relative values of x and y .

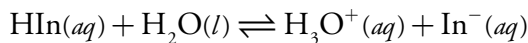
$$\frac{s_M}{s_L} = \frac{\epsilon b / x}{\epsilon b / y} = \frac{y}{x}$$

An important assumption in the slope-ratio method is that the complexation reaction continues to completion in the presence of a sufficiently large excess of metal or ligand. The slope-ratio method also is limited to

systems in which only a single complex is formed and for which Beer's law is obeyed.

DETERMINATION OF EQUILIBRIUM CONSTANTS

Another important application of molecular absorption spectroscopy is the determination of equilibrium constants. Let's consider, as a simple example, an acid–base reaction of the general form



where HIn and In^- are the conjugate weak acid and weak base forms of an acid–base indicator. The equilibrium constant for this reaction is

$$K_a = \frac{[\text{H}_3\text{O}^+][\text{In}^-]}{[\text{HIn}]}$$

To determine the equilibrium constant's value, we prepare a solution in which the reaction is in a state of equilibrium and determine the equilibrium concentration of H_3O^+ , HIn, and In^- . The concentration of H_3O^+ is easy to determine by simply measuring the solution's pH. To determine the concentration of HIn and In^- we can measure the solution's absorbance.

If both HIn and In^- absorb at the selected wavelength, then, from [equation 10.6](#), we know that

$$A = \epsilon_{\text{HIn}} b[\text{HIn}] + \epsilon_{\text{In}^-} b[\text{In}^-] \quad 10.15$$

where ϵ_{HIn} and ϵ_{In^-} are the molar absorptivities for HIn and In^- . The total concentration of indicator, C , is given by a mass balance equation

$$C = [\text{HIn}] + [\text{In}^-] \quad 10.16$$

Solving equation 10.16 for $[\text{HIn}]$ and substituting into equation 10.15 gives

$$A = \epsilon_{\text{HIn}} b(C - [\text{In}^-]) + \epsilon_{\text{In}^-} b[\text{In}^-]$$

which we simplify to

$$\begin{aligned} A &= \epsilon_{\text{HIn}} bC - \epsilon_{\text{HIn}} b[\text{In}^-] + \epsilon_{\text{In}^-} b[\text{In}^-] \\ A &= A_{\text{HIn}} + b[\text{In}^-](\epsilon_{\text{In}^-} - \epsilon_{\text{HIn}}) \end{aligned} \quad 10.17$$

where A_{HIn} , which is equal to $\epsilon_{\text{HIn}} bC$, is the absorbance when the pH is acidic enough that essentially all the indicator is present as HIn. Solving equation 10.17 for the concentration of In^- gives

$$[\text{In}^-] = \frac{A - A_{\text{HIn}}}{b(\epsilon_{\text{In}^-} - \epsilon_{\text{HIn}})} \quad 10.18$$

Proceeding in the same fashion, we can derive a similar equation for the concentration of HIn

$$[\text{HIn}] = \frac{A_{\text{In}} - A}{b(\epsilon_{\text{In}} - \epsilon_{\text{HIn}})} \quad 10.19$$

where A_{In} , which is equal to $\epsilon_{\text{In}}bC$, is the absorbance when the pH is basic enough that only In^- contributes to the absorbance. Substituting [equation 10.18](#) and equation 10.19 into the equilibrium constant expression for HIn gives

$$K_a = [\text{H}_3\text{O}^+] \frac{A - A_{\text{HIn}}}{A_{\text{In}} - A} \quad 10.20$$

We can use equation 10.20 to determine the value of K_a in one of two ways. The simplest approach is to prepare three solutions, each of which contains the same amount, C , of indicator. The pH of one solution is made sufficiently acidic such that $[\text{HIn}] \gg [\text{In}^-]$. The absorbance of this solution gives A_{HIn} . The value of A_{In} is determined by adjusting the pH of the second solution such that $[\text{In}^-] \gg [\text{HIn}]$. Finally, the pH of the third solution is adjusted to an intermediate value, and the pH and absorbance, A , recorded. The value of K_a is calculated using equation 10.20.

Example 10.9

The acidity constant for an acid–base indicator is determined by preparing three solutions, each of which has a total indicator concentration of 5.00×10^{-5} M. The first solution is made strongly acidic with HCl and has an absorbance of 0.250. The second solution was made strongly basic and has an absorbance of 1.40. The pH of the third solution is 2.91 and has an absorbance of 0.662. What is the value of K_a for the indicator?

SOLUTION

The value of K_a is determined by making appropriate substitutions into 10.20; thus

$$K_a = (1.23 \times 10^{-3}) \times \frac{0.662 - 0.250}{1.40 - 0.662} = 6.87 \times 10^{-4}$$

Practice Exercise 10.9

To determine the K_a of a merocyanine dye, the absorbance of a solution of 3.5×10^{-4} M dye was measured at a pH of 2.00, a pH of 6.00, and a pH of 12.00, yielding absorbances of 0.000, 0.225, and 0.680, respectively. What is the value of K_a for this dye? The data for this problem is adapted from Lu, H.; Rutan, S. C. *Anal. Chem.*, **1996**, 68, 1381–1386.

Click [here](#) to review your answer to this exercise.

A second approach for determining K_a is to prepare a series of solutions, each containing the same amount of indicator. Two solutions are used to determine values for A_{HIn} and A_{In^-} . Taking the log of both sides of [equation 10.20](#) and rearranging leave us with the following equation.

$$\log \frac{A - A_{\text{HIn}}}{A_{\text{In}^-} - A} = \text{pH} - \text{p}K_a \quad 10.21$$

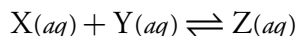
A plot of $\log[(A - A_{\text{HIn}})/(A_{\text{In}^-} - A)]$ versus pH is a straight-line with a slope of +1 and a y -intercept of $-\text{p}K_a$.

Practice Exercise 10.10

To determine the K_a of the indicator bromothymol blue, the absorbance of a series of solutions containing the same concentration of the indicator was measured at pH levels of 3.35, 3.65, 3.94, 4.30, and 4.64, yielding absorbances of 0.170, 0.287, 0.411, 0.562, and 0.670, respectively. Acidifying the first solution to a pH of 2 changes its absorbance to 0.006, and adjusting the pH of the last solution to 12 changes its absorbance to 0.818. What is the value of K_a for this day? The data for this problem is from Patterson, G. S. *J. Chem. Educ.*, **1999**, 76, 395–398.

Click [here](#) to review your answer to this exercise.

In developing these approaches for determining K_a we considered a relatively simple system in which the absorbance of HIn and In^- are easy to measure and for which it is easy to determine the concentration of H_3O^+ . In addition to acid–base reactions, we can adapt these approaches to any reaction of the general form



including metal–ligand complexation reactions and redox reactions, provided that we can determine spectrophotometrically the concentration of the product, Z, and one of the reactants, and that the concentration of the other reactant can be measured by another method. With appropriate modifications, more complicated systems, in which one or more of these parameters can not be measured, also can be treated.¹¹

10C.5 Evaluation of UV/Vis and IR Spectroscopy

SCALE OF OPERATION

Molecular UV/Vis absorption is routinely used for the analysis of trace analytes in macro and meso samples. Major and minor analytes can be determined by diluting the sample before analysis, while concentrating a sample may allow for the analysis of ultratrace analytes. The scale of operations for infrared absorption is generally poorer than that for UV/Vis absorption.

See [Figure 3.5](#) to review the meaning of macro and meso for describing samples, and the meaning of major, minor, and ultratrace for describing analytes.

¹¹ Ramette, R. W. *Chemical Equilibrium and Analysis*, Addison-Wesley: Reading, MA, 1981, Chapter 13.

ACCURACY

Under normal conditions a relative error of 1–5% is easily obtained with UV/Vis absorption. Accuracy is usually limited by the quality of the blank. Examples of the type of problems that may be encountered include the presence of particulates in a sample that scatter radiation and interferents that react with analytical reagents. In the latter case the interferent may react to form an absorbing species, giving rise to a positive determinate error. Interferents also may prevent the analyte from reacting, leading to a negative determinate error. With care, it may be possible to improve the accuracy of an analysis by as much as an order of magnitude.

PRECISION

In absorption spectroscopy, precision is limited by indeterminate errors—primarily instrumental noise—introduced when measuring absorbance. Precision is generally worse for low absorbances where $P_0 \approx P_T$, and for high absorbances when P_T approaches 0. We might expect, therefore, that precision will vary with transmittance.

We can derive an expression between precision and transmittance by applying the propagation of uncertainty as described in Chapter 4. To do so we rewrite Beer's law as

$$C = -\frac{1}{\epsilon b} \log T \quad 10.22$$

[Table 4.10](#) in Chapter 4 helps us in completing the propagation of uncertainty for equation 10.22, giving the absolute uncertainty in the concentration, s_C , as

$$s_C = -\frac{0.4343}{\epsilon b} \times \frac{s_T}{T} \quad 10.23$$

where s_T is the absolute uncertainty in the transmittance. Dividing equation 10.23 by equation 10.22 gives the relative uncertainty in concentration, s_C/C , as

$$\frac{s_C}{C} = \frac{0.4343 s_T}{T \log T}$$

If we know the absolute uncertainty in transmittance, we can determine the relative uncertainty in concentration for any transmittance.

Determining the relative uncertainty in concentration is complicated because s_T may be a function of the transmittance. As shown in [Table 10.8](#), three categories of indeterminate instrumental error have been observed.¹² A constant s_T is observed for the uncertainty associated with reading %T on a meter's analog or digital scale. Typical values are ± 0.2 – 0.3% (a k_1 of ± 0.002 – 0.003) for an analog scale, and $\pm 0.001\%$ (a k_1 of ± 0.00001) for

¹² Rothman, L. D.; Crouch, S. R.; Ingle, J. D. Jr. *Anal. Chem.* **1975**, *47*, 1226–1233.

Table 10.8 Effect of Indeterminate Errors on Relative Uncertainty in Concentration

Category	Sources of Indeterminate Error	Relative Uncertainty in Concentration
$s_T = k_1$	%T readout resolution noise in thermal detectors	$\frac{s_C}{C} = \frac{0.4343k_1}{T \log T}$
$s_T = k_2\sqrt{T^2 + T}$	noise in photon detectors	$\frac{s_C}{C} = \frac{0.4343k_2}{\log T} \sqrt{1 + \frac{1}{T}}$
$s_T = k_3T$	positioning of sample cell fluctuations in source intensity	$\frac{s_C}{C} = \frac{0.4343k_3}{\log T}$

a digital scale. A constant s_T also is observed for the thermal transducers used in infrared spectrophotometers. The effect of a constant s_T on the relative uncertainty in concentration is shown by curve A in Figure 10.40. Note that the relative uncertainty is very large for both high and low absorbances, reaching a minimum when the absorbance is 0.4343. This source of indeterminate error is important for infrared spectrophotometers and for inexpensive UV/Vis spectrophotometers. To obtain a relative uncertainty in concentration of ± 1 –2%, the absorbance must be kept within the range 0.1–1.

Values of s_T are a complex function of transmittance when indeterminate errors are dominated by the noise associated with photon detectors. Curve B in Figure 10.40 shows that the relative uncertainty in concentration is very large for low absorbances, but is less at higher absorbances. Although the relative uncertainty reaches a minimum when the absorbance is 0.963, there is little change in the relative uncertainty for absorbances within the range 0.5–2. This source of indeterminate error generally limits

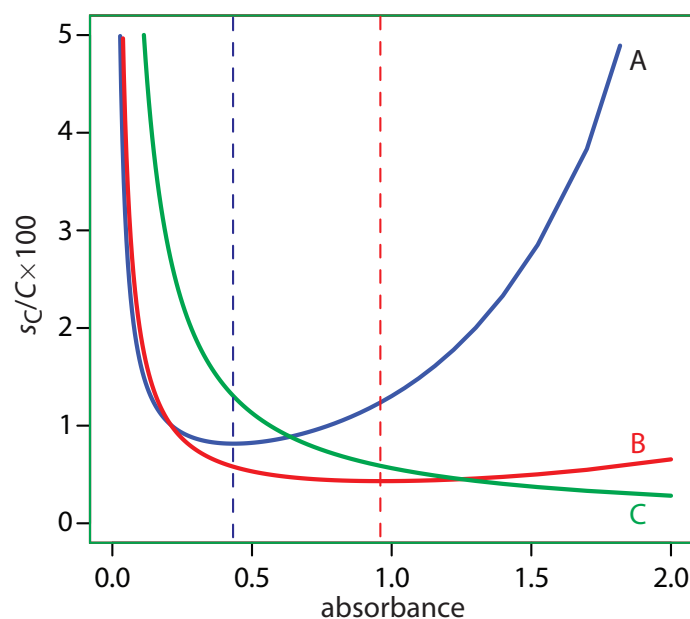


Figure 10.40 Percent relative uncertainty in concentration as a function of absorbance for the categories of indeterminate errors in Table 10.8. A: $k_1 = \pm 0.0030$; B: $k_2 = \pm 0.0030$; C: $k_3 = \pm 0.0130$. The dashed lines correspond to the minimum uncertainty for curve A (absorbance of 0.4343) and for curve B (absorbance of 0.963).

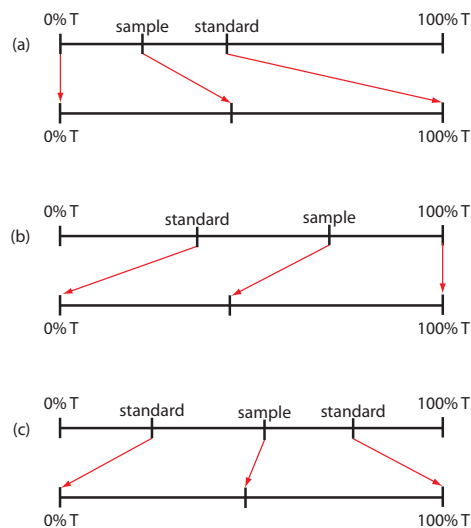


Figure 10.41 Methods for improving the precision of absorption methods: (a) high-absorbance method; (b) low-absorbance method; (c) maximum precision method.

See [Figure 10.24](#) for an example of how the choice of wavelength affects a calibration curve's sensitivity.

the precision of high quality UV/Vis spectrophotometers for mid-to-high absorbances.

Finally, the value of s_T is directly proportional to transmittance for indeterminate errors resulting from fluctuations in the source's intensity and from uncertainty in positioning the sample within the spectrometer. The latter is particularly important because the optical properties of any sample cell are not uniform. As a result, repositioning the sample cell may lead to a change in the intensity of transmitted radiation. As shown by curve C in [Figure 10.40](#), the effect is only important at low absorbances. This source of indeterminate errors is usually the limiting factor for high quality UV/Vis spectrophotometers when the absorbance is relatively small.

When the relative uncertainty in concentration is limited by the %T readout resolution, the precision of the analysis can be improved by redefining 100% T and 0% T. Normally 100% T is established using a blank and 0% T is established while preventing the source's radiation from reaching the detector. If the absorbance is too high, precision can be improved by resetting 100% T using a standard solution of the analyte whose concentration is less than that of the sample ([Figure 10.41a](#)). For a sample whose absorbance is too low, precision can be improved by redefining 0% T using a standard solution of the analyte whose concentration is greater than that of the analyte ([Figure 10.41b](#)). In this case a calibration curve is required because a linear relationship between absorbance and concentration no longer exists. Precision can be further increased by combining these two methods ([Figure 10.41c](#)). Again, a calibration curve is necessary since the relationship between absorbance and concentration is no longer linear.

SENSITIVITY

The sensitivity of a molecular absorption method, which is the slope of a Beer's law calibration curve, is the product of the analyte's absorptivity and the pathlength of the sample cell (ϵb). You can improve a method's sensitivity by selecting a wavelength where absorbance is at a maximum or by increasing the pathlength.

SELECTIVITY

Selectivity is rarely a problem in molecular absorption spectrophotometry. In many cases it is possible to find a wavelength where only the analyte absorbs. When two or more species do contribute to the measured absorbance, a multicomponent analysis is still possible, as shown in [Example 10.6](#) and [Example 10.7](#).

TIME, COST, AND EQUIPMENT

The analysis of a sample by molecular absorption spectroscopy is relatively rapid, although additional time may be required if we need to chemically convert a nonabsorbing analyte into an absorbing form. The cost of UV/

Vis instrumentation ranges from several hundred dollars for a simple filter photometer, to more than \$50,000 for a computer controlled high resolution, double-beam instrument equipped with variable slits, and operating over an extended range of wavelengths. Fourier transform infrared spectrometers can be obtained for as little as \$15,000–\$20,000, although more expensive models are available.

10D Atomic Absorption Spectroscopy

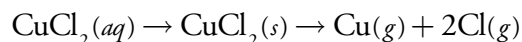
Guystav Kirchoff and Robert Bunsen first used atomic absorption spectroscopy—along with atomic emission—in 1859 and 1860 as a means for identify atoms in flames and hot gases. Although atomic emission continued to develop as an analytical technique, progress in atomic absorption languished for almost a century. Modern atomic absorption spectroscopy has its beginnings in 1955 as a result of the independent work of A. C. Walsh and C. T. J. Alkemade.¹³ Commercial instruments were in place by the early 1960s, and the importance of atomic absorption as an analytical technique was soon evident.

10D.1 Instrumentation

Atomic absorption spectrophotometers use the same single-beam or double-beam optics described earlier for molecular absorption spectrophotometers (see [Figure 10.26](#) and [Figure 10.27](#)). There is, however, an important additional need in atomic absorption spectroscopy—we must convert the analyte into free atoms. In most cases our analyte is in solution form. If our sample is a solid, then we must bring it into solution before the analysis. When analyzing a lake sediment for Cu, Zn, and Fe, for example, we bring the analytes into solution as Cu^{2+} , Zn^{2+} , and Fe^{3+} by extracting them with a suitable reagent. For this reason, only the introduction of solution samples is considered in this text.

ATOMIZATION

The process of converting an analyte to a free gaseous atom is called **ATOMIZATION**. Converting an aqueous analyte into a free atom requires that we strip away the solvent, volatilize the analytes, and, if necessary, dissociate the analyte into free atoms. Desolvating an aqueous solution of CuCl_2 , for example, leaves us with solid particulates of CuCl_2 . Converting the particulate CuCl_2 to gas phases atoms of Cu and Cl requires thermal energy.



There are two common atomization methods: flame atomization and electrothermal atomization, although a few elements are atomized using other methods.

What reagent we choose to use depends on our research goals. If we need to know the total amount of metal in the sediment, then we might use a microwave digestion using a mixture of concentrated acids, such as HNO_3 , HCl , and HF . This destroys the sediment's matrix and brings everything into solution. On the other hand, if our interest is biologically available metals, we might extract the sample under milder conditions, such as a dilute solution of HCl or CH_3COOH at room temperature.

13 (a) Walsh, A. *Anal. Chem.* **1991**, *63*, 933A–941A; (b) Koirtiyohann, S. R. *Anal. Chem.* **1991**, *63*, 1024A–1031A; (c) Slavin, W. *Anal. Chem.* **1991**, *63*, 1033A–1038A.




Figure 10.42 Flame atomization assembly with expanded views of (a) the burner head showing the burner slot where the flame is located; (b) the nebulizer's impact bead; and (c) the interior of the spray chamber. Although the unit shown here is from an older instrument, the basic components of a modern flame AA spectrometer are the same.

FLAME ATOMIZER

Figure 10.42 shows a typical flame atomization assembly with close-up views of several key components. In the unit shown here, the aqueous sample is drawn into the assembly by passing a high-pressure stream of compressed air past the end of a capillary tube immersed in the sample. When the sample exits the nebulizer it strikes a glass impact bead, converting it into a fine aerosol mist within the spray chamber. The aerosol mist is swept through the spray chamber by the combustion gases—compressed air and acetylene in this case—to the burner head where the flame's thermal energy desolvates the aerosol mist to a dry aerosol of small, solid particles. The flame's thermal energy then volatilizes the particles, producing a vapor consisting of molecular species, ionic species, and free atoms.

Burner. The slot burner in Figure 10.42a provides a long optical path-length and a stable flame. Because absorbance increases linearly with the path length, a long path length provides greater sensitivity. A stable flame minimizes uncertainty due to fluctuations in the flame.

The burner is mounted on an adjustable stage that allows the entire assembly to move horizontally and vertically. Horizontal adjustments ensure that the flame is aligned with the instrument's optical path. Vertical

Compressed air is one of the two gases whose combustion produces the flame.

adjustments adjust the height within the flame from which absorbance is monitored. This is important because two competing processes affect the concentration of free atoms in the flame. The more time the analyte spends in the flame the greater the atomization efficiency; thus, the production of free atoms increases with height. On the other hand, a longer residence time allows more opportunity for the free atoms to combine with oxygen to form a molecular oxide. For an easily oxidized metal, such as Cr, the concentration of free atoms is greatest just above the burner head. For metals, such as Ag, which are difficult to oxidize, the concentration of free atoms increases steadily with height (Figure 10.43). Other atoms show concentration profiles that maximize at a characteristic height.

Flame. The flame's temperature, which affects the efficiency of atomization, depends on the fuel–oxidant mixture, several examples of which are listed in Table 10.9. Of these, the air–acetylene and the nitrous oxide–acetylene flames are the most popular. Normally the fuel and oxidant are mixed in an approximately stoichiometric ratio; however, a fuel-rich mixture may be necessary for easily oxidized analytes.

Figure 10.44 shows a cross-section through the flame, looking down the source radiation's optical path. The primary combustion zone is usually rich in gas combustion products that emit radiation, limiting its usefulness for atomic absorption. The interzonal region generally is rich in free atoms and provides the best location for measuring atomic absorption. The hottest part of the flame is typically 2–3 cm above the primary combustion zone. As atoms approach the flame's secondary combustion zone, the decrease in temperature allows for formation of stable molecular species.

Sample Introduction. The most common means for introducing samples into a flame atomizer is a continuous aspiration in which the sample flows through the burner while we monitor the absorbance. Continuous aspiration is sample intensive, typically requiring from 2–5 mL of sample.

Flame microsampling allows us to introduce a discrete sample of fixed volume, and is useful when we have a limited amount of sample or when the sample's matrix is incompatible with the flame atomizer. For example, continuously aspirating a sample that has a high concentration of dissolved solids—sea water, for example, comes to mind—may build-up a solid deposit on the burner head that obstructs the flame and that lowers the absorbance. Flame microsampling is accomplished using a micropipet to place

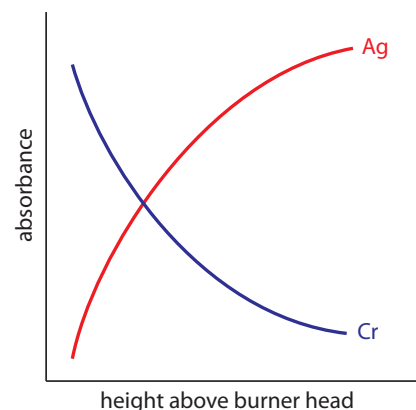


Figure 10.43 Absorbance versus height profiles for Ag and Cr in flame atomic absorption spectroscopy.

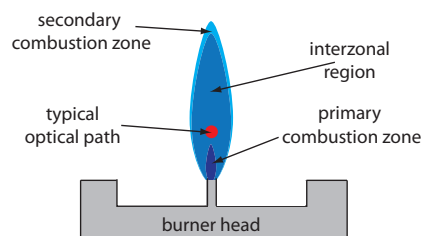


Figure 10.44 Profile of typical flame using a slot burner. The relative size of each zone depends on many factors, including the choice of fuel and oxidant, and their relative proportions.

Table 10.9 Fuels and Oxidants Used for Flame Combustion

fuel	oxidant	temperature range (°C)
natural gas	air	1700–1900
hydrogen	air	2000–2100
acetylene	air	2100–2400
acetylene	nitrous oxide	2600–2800
acetylene	oxygen	3050–3150

50–250 μL of sample in a Teflon funnel connected to the nebulizer, or by dipping the nebulizer tubing into the sample for a short time. Dip sampling is usually accomplished with an automatic sampler. The signal for flame microsampling is a transitory peak whose height or area is proportional to the amount of analyte that is injected.

Advantages and Disadvantages of Flame Atomization. The principal advantage of flame atomization is the reproducibility with which the sample is introduced into the spectrophotometer. A significant disadvantage to flame atomizers is that the efficiency of atomization may be quite poor. There are two reasons for poor atomization efficiency. First, the majority of the aerosol droplets produced during nebulization are too large to be carried to the flame by the combustion gases. Consequently, as much as 95% of the sample never reaches the flame. A second reason for poor atomization efficiency is that the large volume of combustion gases significantly dilutes the sample. Together, these contributions to the efficiency of atomization reduce sensitivity because the analyte's concentration in the flame may be a factor of 2.5×10^{-6} less than that in solution.¹⁴

This is the reason for the waste line shown at the bottom of the spray chamber in [Figure 10.42](#).

ELECTROTHERMAL ATOMIZERS

A significant improvement in sensitivity is achieved by using the resistive heating of a graphite tube in place of a flame. A typical electrothermal atomizer, also known as a **GRAPHITE FURNACE**, consists of a cylindrical graphite tube approximately 1–3 cm in length and 3–8 mm in diameter. As shown in Figure 10.45, the graphite tube is housed in a sealed assembly that has optically transparent windows at each end. A continuous stream of an inert gas is passed through the furnace, protecting the graphite tube from oxidation and removing the gaseous products produced during atomization. A power supply is used to pass a current through the graphite tube, resulting in resistive heating.

Samples of between 5–50 μL are injected into the graphite tube through a small hole at the top of the tube. Atomization is achieved in three stages. In the first stage the sample is dried to a solid residue using a current that raises the temperature of the graphite tube to about 110°C. In the second stage, which is called ashing, the temperature is increased to between

¹⁴ Ingle, J. D.; Crouch, S. R. *Spectrochemical Analysis*, Prentice-Hall: Englewood Cliffs, NJ, 1988; p. 275.

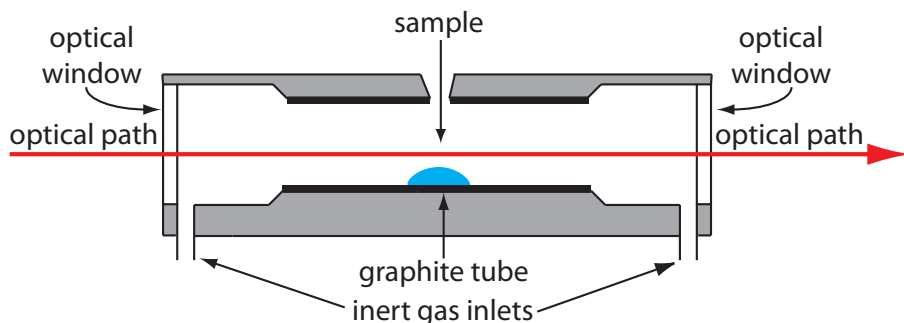


Figure 10.45 Diagram showing a cross-section of an electrothermal analyzer.

350–1200 °C. At these temperatures any organic material in the sample is converted to CO₂ and H₂O, and volatile inorganic materials are vaporized. These gases are removed by the inert gas flow. In the final stage the sample is atomized by rapidly increasing the temperature to between 2000–3000 °C. The result is a transient absorbance peak whose height or area is proportional to the absolute amount of analyte injected into the graphite tube. Together, the three stages take approximately 45–90 s, with most of this time used for drying and ashing the sample.

Electrothermal atomization provides a significant improvement in sensitivity by trapping the gaseous analyte in the small volume within the graphite tube. The analyte's concentration in the resulting vapor phase may be as much as 1000× greater than in a flame atomization.¹⁵ This improvement in sensitivity—and the resulting improvement in detection limits—is offset by a significant decrease in precision. Atomization efficiency is strongly influenced by the sample's contact with the graphite tube, which is difficult to control reproducibly.

MISCELLANEOUS ATOMIZATION METHODS

A few elements may be atomized by a chemical reaction that produces a volatile product. Elements such as As, Se, Sb, Bi, Ge, Sn, Te, and Pb, for example, form volatile hydrides when reacted with NaBH₄ in acid. An inert gas carries the volatile hydrides to either a flame or to a heated quartz observation tube situated in the optical path. Mercury is determined by the cold-vapor method in which it is reduced to elemental mercury with SnCl₂. The volatile Hg is carried by an inert gas to an unheated observation tube situated in the instrument's optical path.

10D.2 Quantitative Applications

Atomic absorption is widely used for the analysis of trace metals in a variety of sample matrices. Using Zn as an example, atomic absorption methods have been developed for its determination in samples as diverse as water and wastewater, air, blood, urine, muscle tissue, hair, milk, breakfast cereals, shampoos, alloys, industrial plating baths, gasoline, oil, sediments, and rocks.

Developing a quantitative atomic absorption method requires several considerations, including choosing a method of atomization, selecting the wavelength and slit width, preparing the sample for analysis, minimizing spectral and chemical interferences, and selecting a method of standardization. Each of these topics is considered in this section.

DEVELOPING A QUANTITATIVE METHOD

Flame or Electrothermal Atomization? The most important factor in choosing a method of atomization is the analyte's concentration. Because

¹⁵ Parsons, M. L.; Major, S.; Forster, A. R. *Appl. Spectrosc.* **1983**, *37*, 411–418.

Table 10.10 Concentration of Analyte Yielding an Absorbance of 0.20

element	Concentration (mg/L) ^a	
	flame atomization	electrothermal atomization
Ag	1.5	0.0035
Al	40	0.015
As	40 ^b	0.050
Ca	0.8	0.003
Cd	0.6	0.001
Co	2.5	0.021
Cr	2.5	0.0075
Cu	1.5	0.012
Fe	2.5	0.006
Hg	70 ^b	0.52
Mg	0.15	0.00075
Mn	1	0.003
Na	0.3	0.00023
Ni	2	0.024
Pb	5	0.080
Pt	70	0.29
Sn	50 ^b	0.023
Zn	0.3	0.00071

^a Source: Varian Cookbook, SpectraAA Software Version 4.00 Pro.

^b As: 10 mg/L by hydride vaporization; Hg: 11.5 mg/L by cold-vapor; and Sn: 18 mg/L by hydride vaporization

of its greater sensitivity, it takes less analyte to achieve a given absorbance when using electrothermal atomization. Table 10.10, which compares the amount of analyte needed to achieve an absorbance of 0.20 when using flame atomization and electrothermal atomization, is useful when selecting an atomization method. For example, flame atomization is the method of choice if our samples contain 1–10 mg Zn²⁺/L, but electrothermal atomization is the best choice for samples containing 1–10 µg Zn²⁺/L.

Selecting the Wavelength and Slit Width. The source for atomic absorption is a hollow cathode lamp consisting of a cathode and anode enclosed within a glass tube filled with a low pressure of Ne or Ar (Figure 10.46). Applying a potential across the electrodes ionizes the filler gas. The positively charged gas ions collide with the negatively charged cathode, sputtering atoms from the cathode's surface. Some of the sputtered atoms are in the excited state and emit radiation characteristic of the metal(s) from which the cathode was manufactured. By fashioning the cathode from the metallic analyte, a hollow cathode lamp provides emission lines that correspond to the analyte's absorption spectrum.

Because atomic absorption lines are narrow, we need to use a line source instead of a continuum source (compare, for example, Figure 10.18 with Figure 10.20). The effective bandwidth when using a continuum source is roughly 1000× larger than an atomic absorption line; thus, $P_T \approx P_0$, $\%T \approx 100$, and $A \approx 0$. Because a hollow cathode lamp is a line source, P_T and P_0 have different values giving a $\%T < 100$ and $A > 0$.




Figure 10.46 Photo of a typical multi-elemental hollow cathode lamp. The cathode in this lamp is fashioned from an alloy containing Co, Cr, Cu, Fe, Mn, and Ni, and is surrounded by a glass shield to isolate it from the anode. The lamp is filled with Ne gas. Also shown is the process leading to atomic emission. See the text for an explanation.

Each element in a hollow cathode lamp provides several atomic emission lines that we can use for atomic absorption. Usually the wavelength that provides the best sensitivity is the one we choose to use, although a less sensitive wavelength may be more appropriate for a larger concentration of analyte. For the Cr hollow cathode lamp in Table 10.11, for example, the best sensitivity is obtained using a wavelength of 357.9 nm.

Another consideration is the intensity of the emission line. If several emission lines meet our need for sensitivity, we may wish to use the emission line with the largest relative P_0 because there is less uncertainty in measuring P_0 and P_T . When analyzing samples containing ≈ 10 mg Cr/L, for example, the first three wavelengths in Table 10.11 provide an appropriate sensitivity. The wavelengths of 425.5 nm and 429.0 nm, however, have a greater P_0 and will provide less uncertainty in the measured absorbance.

The emission spectrum from a hollow cathode lamp includes, besides emission lines for the analyte, additional emission lines for impurities present in the metallic cathode and from the filler gas. These additional lines

Table 10.11 Atomic Emission Lines for a Cr Hollow Cathode Lamp

wavelength (nm)	slit width (nm)	mg Cr/L giving $A = 0.20$	P_0 (relative)
357.9	0.2	2.5	40
425.4	0.2	12	85
429.0	0.5	20	100
520.5	0.2	1500	15
520.8	0.2	500	20

are a source of stray radiation that leads to an instrumental deviation from Beer's law. The monochromator's slit width is set as wide as possible, improving the throughput of radiation, while, at the same time, being narrow enough to eliminate the stray radiation.

Preparing the Sample. Flame and electrothermal atomization require that the sample be in solution. Solid samples are brought into solution by dissolving in an appropriate solvent. If the sample is not soluble it may be digested, either on a hot-plate or by microwave, using HNO_3 , H_2SO_4 , or HClO_4 . Alternatively, we can extract the analyte using a Soxhlet extractor. Liquid samples may be analyzed directly or extracted if the matrix is incompatible with the method of atomization. A serum sample, for instance, is difficult to aspirate when using flame atomization and may produce an unacceptably high background absorbance when using electrothermal atomization. A liquid-liquid extraction using an organic solvent and a chelating agent is frequently used to concentrate analytes. Dilute solutions of Cd^{2+} , Co^{2+} , Cu^{2+} , Fe^{3+} , Pb^{2+} , Ni^{2+} , and Zn^{2+} , for example, can be concentrated by extracting with a solution of ammonium pyrrolidine dithiocarbamate in methyl isobutyl ketone.

Minimizing Spectral Interference. A spectral interference occurs when an analyte's absorption line overlaps with an interferent's absorption line or band. Because they are so narrow, the overlap of two atomic absorption lines is seldom a problem. On the other hand, a molecule's broad absorption band or the scattering of source radiation is a potentially serious spectral interference.

An important consideration when using a flame as an atomization source is its effect on the measured absorbance. Among the products of combustion are molecular species that exhibit broad absorption bands and particulates that scatter radiation from the source. If we fail to compensate for these spectral interference, then the intensity of transmitted radiation decreases. The result is an apparent increase in the sample's absorbance. Fortunately, absorption and scattering of radiation by the flame are corrected by analyzing a blank.

Spectral interferences also occur when components of the sample's matrix other than the analyte react to form molecular species, such as oxides and hydroxides. The resulting absorption and scattering constitutes the sample's background and may present a significant problem, particularly at wavelengths below 300 nm where the scattering of radiation becomes more important. If we know the composition of the sample's matrix, then we can prepare our samples using an identical matrix. In this case the background absorption is the same for both the samples and standards. Alternatively, if the background is due to a known matrix component, then we can add that component in excess to all samples and standards so that the contribution of the naturally occurring interferent is insignificant. Finally, many interferences due to the sample's matrix can be eliminated by increasing the

See [Chapter 7](#) to review different methods for preparing samples for analysis.

atomization temperature. For example, by switching to a higher temperature flame it may be possible to prevent the formation of interfering oxides and hydroxides.

If the identity of the matrix interference is unknown, or if it is not possible to adjust the flame or furnace conditions to eliminate the interference, then we must find another method to compensate for the background interference. Several methods have been developed to compensate for matrix interferences, and most atomic absorption spectrophotometers include one or more of these methods.

One of the most common methods for **BACKGROUND CORRECTION** is to use a continuum source, such as a D₂ lamp. Because a D₂ lamp is a continuum source, absorbance of its radiation by the analyte's narrow absorption line is negligible. Only the background, therefore, absorbs radiation from the D₂ lamp. Both the analyte and the background, on the other hand, absorb the hollow cathode's radiation. Subtracting the absorbance for the D₂ lamp from that for the hollow cathode lamp gives a corrected absorbance that compensates for the background interference. Although this method of background correction may be quite effective, it does assume that the background absorbance is constant over the range of wavelengths passed by the monochromator. If this is not true, subtracting the two absorbances may underestimate or overestimate the background.

Other methods of background correction have been developed, including Zeeman effect background correction and Smith-Hieftje background correction, both of which are included in some commercially available atomic absorption spectrophotometers. Consult the chapter's [additional resources](#) for additional information.

Minimizing Chemical Interferences. The quantitative analysis of some elements is complicated by chemical interferences occurring during atomization. The two most common chemical interferences are the formation of nonvolatile compounds containing the analyte and ionization of the analyte.

One example of the formation of nonvolatile compounds is the effect of PO₄³⁻ or Al³⁺ on the flame atomic absorption analysis of Ca²⁺. In one study, for example, adding 100 ppm Al³⁺ to a solution of 5 ppm Ca²⁺ decreased the calcium ion's absorbance from 0.50 to 0.14, while adding 500 ppm PO₄³⁻ to a similar solution of Ca²⁺ decreased the absorbance from 0.50 to 0.38. These interferences were attributed to the formation of nonvolatile particles of Ca₃(PO₄)₂ and an Al–Ca–O oxide.¹⁶

When using flame atomization, we can minimize the formation of nonvolatile compounds by increasing the flame's temperature, either by changing the fuel-to-oxidant ratio or by switching to a different combination of fuel and oxidant. Another approach is to add a releasing agent or a protecting agent to the samples. A **RELEASING AGENT** is a species that reacts with the interferent, releasing the analyte during atomization. Adding Sr²⁺ or La³⁺ to solutions of Ca²⁺, for example, minimizes the effect of PO₄³⁻ and Al³⁺ by reacting in place of the analyte. Thus, adding 2000 ppm SrCl₂ to the Ca²⁺/PO₄³⁻ and Ca²⁺/Al³⁺ mixtures described in the previous paragraph increased the absorbance to 0.48. A **PROTECTING AGENT** reacts with the analyte to form a stable volatile complex. Adding 1% w/w EDTA

¹⁶ Hosking, J. W.; Snell, N. B.; Sturman, B. T. *J. Chem. Educ.* **1977**, *54*, 128–130.

to the $\text{Ca}^{2+}/\text{PO}_4^{3-}$ solution described in the previous paragraph increased the absorbance to 0.52.

Ionization interferences occur when thermal energy from the flame or the electrothermal atomizer is sufficient to ionize the analyte



where M is the analyte. Because the absorption spectra for M and M^+ are different, the position of the equilibrium in reaction 10.24 affects absorbance at wavelengths where M absorbs. To limit ionization we add a high concentration of an **IONIZATION SUPPRESSOR**, which is simply a species that ionizes more easily than the analyte. If the concentration of the ionization suppressor is sufficient, then the increased concentration of electrons in the flame pushes reaction 10.24 to the left, preventing the analyte's ionization. Potassium and cesium are frequently used as an ionization suppressor because of their low ionization energy.

Standardizing the Method. Because Beer's law also applies to atomic absorption, we might expect atomic absorption calibration curves to be linear. In practice, however, most atomic absorption calibration curves are nonlinear, or linear for only a limited range of concentrations. Nonlinearity in atomic absorption is a consequence of instrumental limitations, including stray radiation from the hollow cathode lamp and the variation in molar absorptivity across the absorption line. Accurate quantitative work, therefore, often requires a suitable means for computing the calibration curve from a set of standards.

When possible, a quantitative analysis is best conducted using external standards. Unfortunately, matrix interferences are a frequent problem, particularly when using electrothermal atomization. For this reason the method of standard additions is often used. One limitation to this method of standardization, however, is the requirement that there be a linear relationship between absorbance and concentration.

Representative Method 10.2

Determination of Cu and Zn in Tissue Samples

DESCRIPTION OF METHOD

Copper and zinc are isolated from tissue samples by digesting the sample with HNO_3 after first removing any fatty tissue. The concentration of copper and zinc in the supernatant are determined by atomic absorption using an air-acetylene flame.

PROCEDURE

Tissue samples are obtained by a muscle needle biopsy and dried for 24–30 h at 105°C to remove all traces of moisture. The fatty tissue in the dried samples is removed by extracting overnight with anhydrous ether. After removing the ether, the sample is dried to obtain the fat-free dry

Most instruments include several different algorithms for computing the calibration curve. The instrument in my lab, for example, includes five algorithms. Three of the algorithms fit absorbance data using linear, quadratic, or cubic polynomial functions of the analyte's concentration. It also includes two algorithms that fit the concentrations of the standards to quadratic functions of the absorbance.

The best way to appreciate the theoretical and practical details discussed in this section is to carefully examine a typical analytical method. Although each method is unique, the following description of the determination of Cu and Zn in biological tissues provides an instructive example of a typical procedure. The description here is based on Bhattacharya, S. K.; Goodwin, T. G.; Crawford, A. J. *Anal. Lett.* **1984**, *17*, 1567–1593, and Crawford, A. J.; Bhattacharya, S. K. *Varian Instruments at Work*, Number AA–46, April 1985.

tissue weight (FFDT). The sample is digested at 68 °C for 20–24 h using 3 mL of 0.75 M HNO₃. After centrifuging at 2500 rpm for 10 minutes, the supernatant is transferred to a 5-mL volumetric flask. The digestion is repeated two more times, for 2–4 hours each, using 0.9-mL aliquots of 0.75 M HNO₃. These supernatants are added to the 5-mL volumetric flask, which is diluted to volume with 0.75 M HNO₃. The concentrations of Cu and Zn in the diluted supernatant are determined by flame atomic absorption spectroscopy using an air-acetylene flame and external standards. Copper is analyzed at a wavelength of 324.8 nm with a slit width of 0.5 nm, and zinc is analyzed at 213.9 nm with a slit width of 1.0 nm. Background correction using a D₂ lamp is necessary for zinc. Results are reported as μg of Cu or Zn per gram of FFDT.

QUESTIONS

1. Describe the appropriate matrix for the external standards and for the blank?

The matrix for the standards and the blank should match the matrix of the samples; thus, an appropriate matrix is 0.75 M HNO₃. Any interferences from other components of the sample matrix are minimized by background correction.

2. Why is a background correction necessary for the analysis of Zn, but not for the analysis of Cu?

Background correction compensates for background absorption and scattering due to interferences in the sample. Such interferences are most severe when using a wavelength less than 300 nm. This is the case for Zn, but not for Cu.

3. A Cu hollow cathode lamp has several emission lines. Explain why this method uses the line at 324.8 nm.

wavelength (nm)	slit width (nm)	mg Cu/L for $A = 0.20$	P_0 (relative)
217.9	0.2	15	3
218.2	0.2	15	3
222.6	0.2	60	5
244.2	0.2	400	15
249.2	0.5	200	24
324.8	0.5	1.5	100
327.4	0.5	3	87

With 1.5 mg Cu/L giving an absorbance of 0.20, the emission line at 324.8 nm has the best sensitivity. In addition, it is the most intense emission line, which decreases the uncertainty in the measured absorbance.

Example 10.10

To evaluate the method described in [Representative Method 10.2](#), a series of external standard is prepared and analyzed, providing the results shown here.¹⁷

$\mu\text{g Cu/mL}$	absorbance	$\mu\text{g Cu/mL}$	absorbance
0.000	0.000	0.500	0.033
0.100	0.006	0.600	0.039
0.200	0.013	0.700	0.046
0.300	0.020	1.000	0.066
0.400	0.026		

A bovine liver standard reference material was used to evaluate the method's accuracy. After drying and extracting the sample, a 11.23-mg FFDT tissue sample gives an absorbance of 0.023. Report the amount of copper in the sample as $\mu\text{g Cu/g FFDT}$.

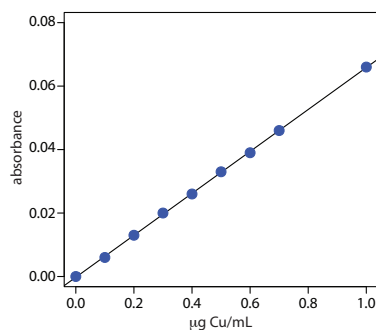
SOLUTION

Linear regression of absorbance versus the concentration of Cu in the standards gives a calibration curve with the following equation.

$$A = -0.0002 + 0.0661 \times \frac{\text{g Cu}}{\text{mL}}$$

Substituting the sample's absorbance into the calibration equation gives the concentration of copper as $0.351 \mu\text{g/mL}$. The concentration of copper in the tissue sample, therefore, is

$$\frac{0.351 \text{ g Cu}}{\text{mL}} \times 5.000 \text{ mL} = 1.755 \text{ g Cu} \\ \frac{1.755 \text{ g Cu}}{0.01123 \text{ g sample}} = 156 \text{ g Cu/g FFDT}$$



See [Figure 3.5](#) to review the meaning of macro and meso for describing samples, and the meaning of major, minor, and ultratrace for describing analytes.

10D.3 - Evaluation of Atomic Absorption Spectroscopy

SCALE OF OPERATION

Atomic absorption spectroscopy is ideally suited for the analysis of trace and ultratrace analytes, particularly when using electrothermal atomization. For minor and major analyte, sample can be diluted before the analysis. Most analyses use a macro or a meso sample. The small volume requirement for electrothermal atomization or flame microsampling, however, makes practical the analysis micro and ultramicro samples.

¹⁷ Crawford, A. J.; Bhattacharya, S. K. "Microanalysis of Copper and Zinc in Biopsy-Sized Tissue Specimens by Atomic Absorption Spectroscopy Using a Stoichiometric Air-Acetylene Flame," Varian Instruments at Work, Number AA-46, April 1985.

ACCURACY

If spectral and chemical interferences are minimized, an accuracy of 0.5–5% is routinely attainable. When the calibration curve is nonlinear, accuracy may be improved by using a pair of standards whose absorbances closely bracket the sample's absorbance and assuming that the change in absorbance is linear over this limited concentration range. Determinate errors for electrothermal atomization are often greater than that obtained with flame atomization due to more serious matrix interferences.

PRECISION

For absorbance values greater than 0.1–0.2, the relative standard deviation for atomic absorption is 0.3–1% for flame atomization and 1–5% for electrothermal atomization. The principle limitation is the variation in the concentration of free analyte atoms resulting from variations in the rate of aspiration, nebulization, and atomization when using a flame atomizer, and the consistency of injecting samples when using electrothermal atomization.

SENSITIVITY

The sensitivity of a flame atomic absorption analysis is influenced strongly by the flame's composition and by the position in the flame from which we monitor the absorbance. Normally the sensitivity of an analysis is optimized by aspirating a standard solution of the analyte and adjusting operating conditions, such as the fuel-to-oxidant ratio, the nebulizer flow rate, and the height of the burner, to give the greatest absorbance. With electrothermal atomization, sensitivity is influenced by the drying and ashing stages that precede atomization. The temperature and time used for each stage must be optimized for each type of sample.

Sensitivity is also influenced by the sample's matrix. We have already noted, for example, that sensitivity can be decreased by chemical interferences. An increase in sensitivity may be realized by adding a low molecular weight alcohol, ester, or ketone to the solution, or by using an organic solvent.

SELECTIVITY

Due to the narrow width of absorption lines, atomic absorption provides excellent selectivity. Atomic absorption can be used for the analysis of over 60 elements at concentrations at or below the level of $\mu\text{g/L}$.

TIME, COST, AND EQUIPMENT

The analysis time when using flame atomization is short, with sample throughputs of 250–350 determinations per hour when using a fully automated system. Electrothermal atomization requires substantially more time

See [Chapter 14](#) for several strategies for optimizing experiments.

per analysis, with maximum sample throughputs of 20–30 determinations per hour. The cost of a new instrument ranges from between \$10,000–\$50,000 for flame atomization, and from \$18,000–\$70,000 for electrothermal atomization. The more expensive instruments in each price range include double-beam optics, automatic samplers, and can be programmed for multielemental analysis by allowing the wavelength and hollow cathode lamp to be changed automatically.

10E Emission Spectroscopy

An analyte in an excited state possesses an energy, E_2 , that is greater than its energy when it is in a lower energy state, E_1 . When the analyte returns to its lower energy state—a process we call **RELAXATION**—the excess energy, ΔE

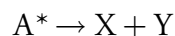
$$\Delta E = E_2 - E_1$$

must be released. [Figure 10.4](#) shows a simplified picture of this process.

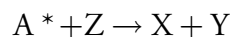
The amount of time the analyte spends in the excited state—its **LIFE-TIME**—is short, typically 10^{-5} – 10^{-9} s for electronic excited states and 10^{-15} s for vibrational excited states. Relaxation of an analyte's excited-state, A^* , occurs through several mechanisms, including collisions with other species in the sample, by photochemical reactions, and by the emission of photons. In the first process, which is called vibrational relaxation, or nonradiative relaxation, the excess energy is released as heat.



Relaxation by a photochemical reaction may involve a decomposition reaction

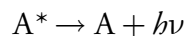


or a reaction between A^* and another species



In both cases the excess energy is used up in the chemical reaction or released as heat.

In the third mechanism, the excess energy is released as a photon of electromagnetic radiation.



The release of a photon following thermal excitation is called emission and that following the absorption of a photon is called photoluminescence. In chemiluminescence and bioluminescence, excitation results from a chemical or biochemical reaction, respectively. Spectroscopic methods based on photoluminescence are the subject of the next section and atomic emission is covered in [Section 10G](#).

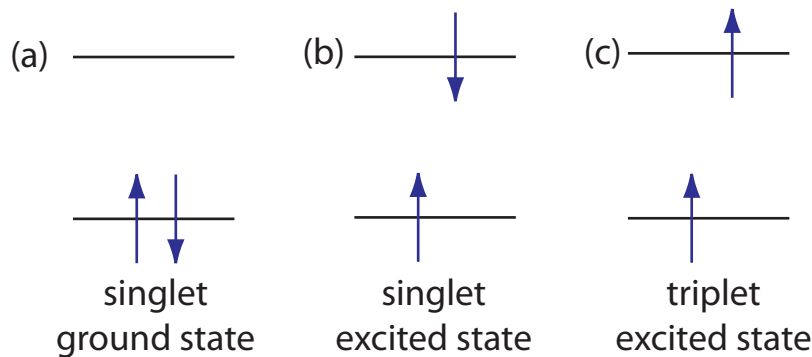


Figure 10.47 Electron configurations for (a) a singlet ground state; (b) a singlet excited state; and (c) a triplet excited state.

10F Photoluminescence Spectroscopy

Photoluminescence is divided into two categories: fluorescence and phosphorescence. A pair of electrons occupying the same electronic ground state have opposite spins and are said to be in a singlet spin state (Figure 10.47a). When an analyte absorbs an ultraviolet or visible photon, one of its valence electrons moves from the ground state to an excited state with a conservation of the electron's spin (Figure 10.47b). Emission of a photon from the **SINGLET EXCITED STATE** to the singlet ground state—or between any two energy levels with the same spin—is called **FLUORESCENCE**. The probability of fluorescence is very high and the average lifetime of an electron in the excited state is only 10^{-5} – 10^{-8} s. Fluorescence, therefore, decays rapidly once the source of excitation is removed.

In some cases an electron in a singlet excited state is transformed to a **TRIPLET EXCITED STATE** (Figure 10.47c) in which its spin is no longer paired with the ground state. Emission between a triplet excited state and a singlet ground state—or between any two energy levels that differ in their respective spin states—is called **PHOSPHORESCENCE**. Because the average lifetime for phosphorescence ranges from 10^{-4} – 10^4 s, phosphorescence may continue for some time after removing the excitation source.

The use of molecular fluorescence for qualitative analysis and semi-quantitative analysis can be traced to the early to mid 1800s, with more accurate quantitative methods appearing in the 1920s. Instrumentation for fluorescence spectroscopy using a filter or a monochromator for wavelength selection appeared in, respectively, the 1930s and 1950s. Although the discovery of phosphorescence preceded that of fluorescence by almost 200 years, qualitative and quantitative applications of molecular phosphorescence did not receive much attention until after the development of fluorescence instrumentation.

10F.1 Fluorescence and Phosphorescence Spectra

To appreciate the origin of fluorescence and phosphorescence we must consider what happens to a molecule following the absorption of a photon. Let's assume that the molecule initially occupies the lowest vibrational energy level of its electronic ground state, which is a singlet state labeled S_0 in

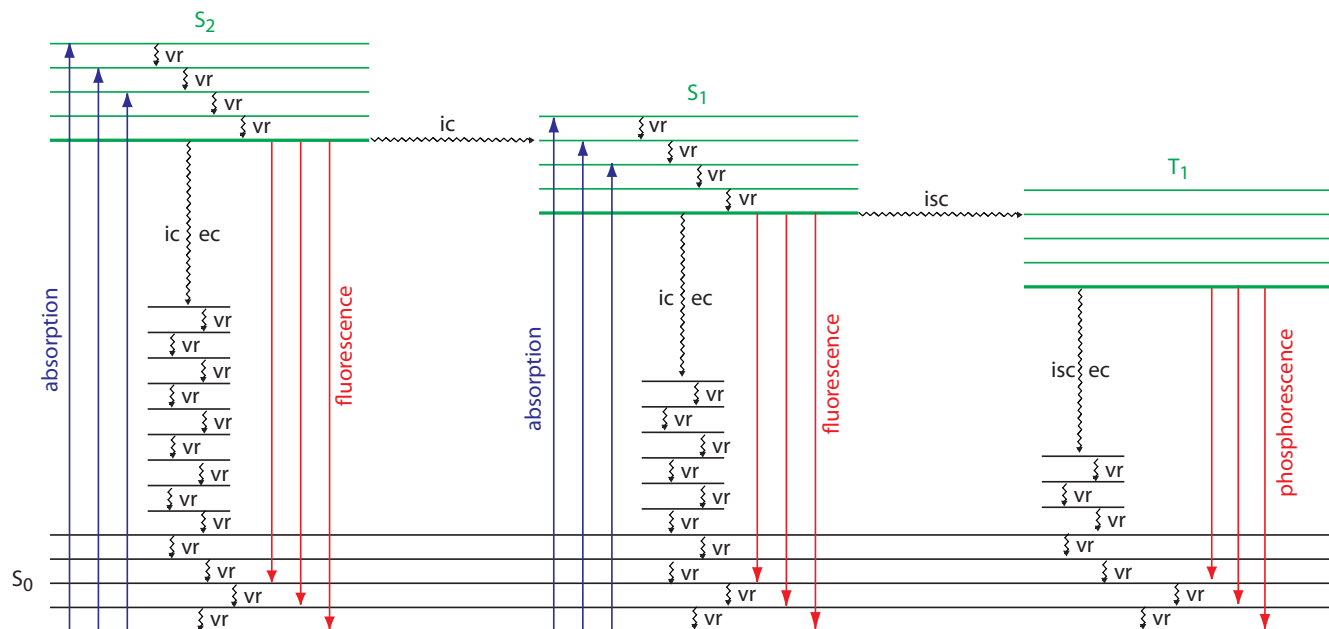


Figure 10.48 Energy level diagram for a molecule showing pathways for the deactivation of an excited state: *vr* is vibrational relaxation; *ic* is internal conversion; *ec* is external conversion; and *isc* is an intersystem crossing. The lowest vibrational energy for each electronic state is indicated by the thicker line. The electronic ground state is shown in black and the three electronic excited states are shown in green. The absorption, fluorescence, and phosphorescence of photons also are shown.

Figure 10.48. Absorption of a photon excites the molecule to one of several vibrational energy levels in the first excited electronic state, S_1 , or the second electronic excited state, S_2 , both of which are singlet states. Relaxation to the ground state occurs by a number of mechanisms, some involving the emission of photons and others occurring without emitting photons. These relaxation mechanisms are shown in Figure 10.48. The most likely relaxation pathway is the one with the shortest lifetime for the excited state.

RADIATIONLESS DEACTIVATION

When a molecule relaxes without emitting a photon we call the process **RADIATIONLESS DEACTIVATION**. One example of radiationless deactivation is **VIBRATIONAL RELAXATION**, in which a molecule in an excited vibrational energy level loses energy by moving to a lower vibrational energy level in the same electronic state. Vibrational relaxation is very rapid, with an average lifetime of $<10^{-12}$ s. Because vibrational relaxation is so efficient, a molecule in one of its excited state's higher vibrational energy levels quickly returns to the excited state's lowest vibrational energy level.

Another form of radiationless deactivation is an **INTERNAL CONVERSION** in which a molecule in the ground vibrational level of an excited state passes directly into a higher vibrational energy level of a lower energy electronic state of the same spin state. By a combination of internal conversions and vibrational relaxations, a molecule in an excited electronic state may return

to the ground electronic state without emitting a photon. A related form of radiationless deactivation is an **EXTERNAL CONVERSION** in which excess energy is transferred to the solvent or to another component of the sample's matrix.

A final form of radiationless deactivation is an **INTERSYSTEM CROSSING** in which a molecule in the ground vibrational energy level of an excited electronic state passes into a higher vibrational energy level of a lower energy electronic state with a different spin state. For example, an intersystem crossing is shown in [Figure 10.48](#) between a singlet excited state, S_1 , and a triplet excited state, T_1 .

RELAXATION BY FLUORESCENCE

Fluorescence occurs when a molecule in an excited state's lowest vibrational energy level returns to a lower energy electronic state by emitting a photon. Because molecules return to their ground state by the fastest mechanism, fluorescence is observed only if it is a more efficient means of relaxation than a combination of internal conversions and vibrational relaxations.

A quantitative expression of fluorescence efficiency is the **FLUORESCENT QUANTUM YIELD**, Φ_f , which is the fraction of excited state molecules returning to the ground state by fluorescence. Fluorescent quantum yields range from 1, when every molecule in an excited state undergoes fluorescence, to 0 when fluorescence does not occur.

The intensity of fluorescence, I_f , is proportional to the amount of radiation absorbed by the sample, $P_0 - P_T$, and the fluorescent quantum yield

$$I_f = k\Phi_f(P_0 - P_T) \quad 10.25$$

where k is a constant accounting for the efficiency of collecting and detecting the fluorescent emission. From Beer's law we know that

$$\frac{P_T}{P_0} = 10^{-\varepsilon bC} \quad 10.26$$

where C is the concentration of the fluorescing species. Solving equation 10.26 for P_T and substituting into equation 10.25 gives, after simplifying

$$I_f = k\Phi_f P_0 (1 - 10^{-\varepsilon bC}) \quad 10.27$$

When $\varepsilon bC < 0.01$, which often is the case when concentration is small, equation 10.27 simplifies to

$$I_f = 2.303k\Phi_f \varepsilon bC P_0 = k' P_0 \quad 10.28$$

where k' is a collection of constants. The intensity of fluorescent emission, therefore, increases with an increase in the quantum efficiency, the source's incident power, and the molar absorptivity and the concentration of the fluorescing species.

Fluorescence is generally observed when the molecule's lowest energy absorption is a $\pi \rightarrow \pi^*$ transition, although some $n \rightarrow \pi^*$ transitions show

Let's use [Figure 10.48](#) to illustrate how a molecule can relax back to its ground state without emitting a photon. Suppose our molecule is in the highest vibrational energy level of the second electronic excited state. After a series of vibrational relaxations brings the molecule to the lowest vibrational energy level of S_2 , it undergoes an internal conversion into a higher vibrational energy level of the first excited electronic state. Vibrational relaxations bring the molecule to the lowest vibrational energy level of S_1 . Following an internal conversion into a higher vibrational energy level of the ground state, the molecule continues to undergo vibrational relaxation until it reaches the lowest vibrational energy level of S_0 .

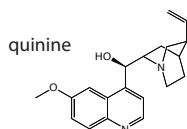


Figure 10.49 Tonic water, which contains quinine, is fluorescent when placed under a UV lamp. Source: [Splarka](https://commons.wikimedia.org/wiki/File:Canada_Dry_Tonic_Water_UV.jpg) (commons.wikimedia.org).

weak fluorescence. Most unsubstituted, nonheterocyclic aromatic compounds have favorable fluorescence quantum yields, although substitutions on the aromatic ring can significantly effect Φ_f . For example, the presence of an electron-withdrawing group, such as $-\text{NO}_2$, decreases Φ_f while adding an electron-donating group, such as $-\text{OH}$, increases Φ_f . Fluorescence also increases for aromatic ring systems and for aromatic molecules with rigid planar structures. Figure 10.49 shows the fluorescence of quinine under a UV lamp.

A molecule's fluorescent quantum yield is also influenced by external variables, such as temperature and solvent. Increasing the temperature generally decreases Φ_f because more frequent collisions between the molecule and the solvent increases external conversion. A decrease in the solvent's viscosity decreases Φ_f for similar reasons. For an analyte with acidic or basic functional groups, a change in pH may change the analyte's structure and its fluorescent properties.

As shown in [Figure 10.48](#), fluorescence may return the molecule to any of several vibrational energy levels in the ground electronic state. Fluorescence, therefore, occurs over a range of wavelengths. Because the change in energy for fluorescent emission is generally less than that for absorption, a molecule's fluorescence spectrum is shifted to higher wavelengths than its absorption spectrum.

RELAXATION BY PHOSPHORESCENCE

A molecule in a triplet electronic excited state's lowest vibrational energy level normally relaxes to the ground state by an intersystem crossing to a singlet state or by an external conversion. Phosphorescence occurs when the molecule relaxes by emitting a photon. As shown in [Figure 10.48](#), phosphorescence occurs over a range of wavelengths, all of which are at lower energies than the molecule's absorption band. The intensity of phosphorescence, I_p , is given by an equation similar to [equation 10.28](#) for fluorescence

$$I_p = 2.303k\Phi_p \varepsilon bCP_0 = k'P_0 \quad 10.29$$

where Φ_p is the **PHOSPHORESCENT QUANTUM YIELD**.

Phosphorescence is most favorable for molecules with $n \rightarrow \pi^*$ transitions, which have a higher probability for an intersystem crossing than $\pi \rightarrow \pi^*$ transitions. For example, phosphorescence is observed with aromatic molecules containing carbonyl groups or heteroatoms. Aromatic compounds containing halide atoms also have a higher efficiency for phosphorescence. In general, an increase in phosphorescence corresponds to a decrease in fluorescence.

Because the average lifetime for phosphorescence is very long, ranging from 10^{-4} – 10^4 s, the phosphorescent quantum yield is usually quite small. An improvement in Φ_p is realized by decreasing the efficiency of external conversion. This may be accomplished in several ways, including lowering the temperature, using a more viscous solvent, depositing the sample on a




Figure 10.50 An europium doped strontium silicate-aluminum oxide powder under (a) natural light, (b) a long-wave UV lamp, and (c) in total darkness. The photo taken in total darkness shows the phosphorescent emission. Source: modified from [Splarka](#) (commons.wikipedia.org).

solid substrate, or trapping the molecule in solution. Figure 10.50 shows an example of phosphorescence.

EXCITATION VERSUS EMISSION SPECTRA

Photoluminescence spectra are recorded by measuring the intensity of emitted radiation as a function of either the excitation wavelength or the emission wavelength. An **EXCITATION SPECTRUM** is obtained by monitoring emission at a fixed wavelength while varying the excitation wavelength. When corrected for variations in the source's intensity and the detector's response, a sample's excitation spectrum is nearly identical to its absorbance spectrum. The excitation spectrum provides a convenient means for selecting the best excitation wavelength for a quantitative or qualitative analysis.

In an **EMISSION SPECTRUM** a fixed wavelength is used to excite the sample and the intensity of emitted radiation is monitored as function of wavelength. Although a molecule has only a single excitation spectrum, it has two emission spectra, one for fluorescence and one for phosphorescence. Figure 10.51 shows the UV absorbance spectrum and the UV fluorescence emission spectrum for tyrosine.

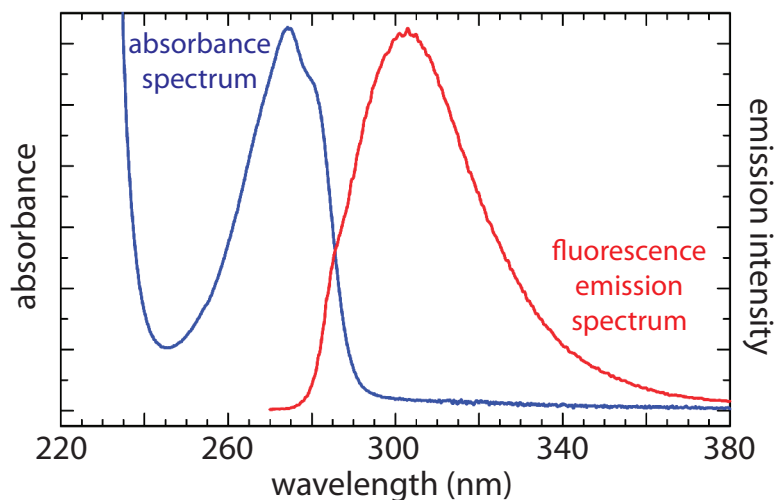


Figure 10.51 Absorbance spectrum and fluorescence emission spectrum for tyrosine in a pH 7, 0.1 M phosphate buffer. The emission spectrum uses an excitation wavelength of 260 nm. Source: modified from [Mark Somoza](#) (commons.wikipedia.org).

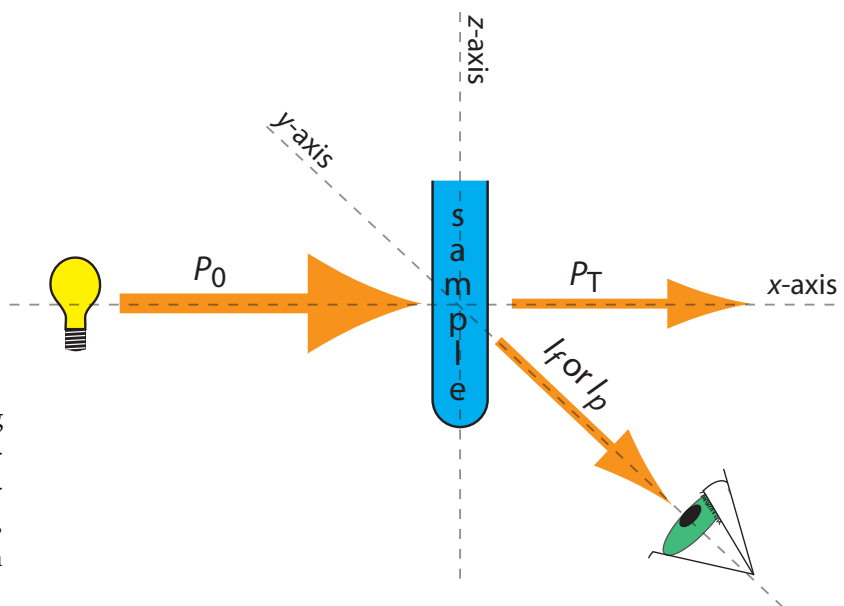


Figure 10.52 Schematic diagram showing the orientation of the source and the detector when measuring fluorescence and phosphorescence. Contrast this to [Figure 10.21](#), which shows the orientation for absorption spectroscopy.

10F.2 Instrumentation

The basic instrumental needs for monitoring fluorescence and phosphorescence—a source of radiation, a means of selecting a narrow band of radiation, and a detector—are the same as those for absorption spectroscopy. The unique demands of both techniques, however, require some modifications to the instrument designs seen earlier in [Figure 10.25](#) (filter photometer), [Figure 10.26](#) (single-beam spectrophotometer), [Figure 10.27](#) (double-beam spectrophotometer), and [Figure 10.28](#) (diode array spectrometer). The most important difference is the detector cannot be placed directly across from the source. [Figure 10.52](#) shows why this is the case. If we place the detector along the source's axis it will receive both the transmitted source radiation, P_T , and the fluorescent, I_f , or phosphorescent, I_p , radiation. Instead, we rotate the detector and place it at 90° to the source.

INSTRUMENTS FOR MEASURING FLUORESCENCE

[Figure 10.53](#) shows the basic design of an instrument for measuring fluorescence, which includes two wavelength selectors, one for selecting an excitation wavelength from the source and one for selecting the emission wavelength from the sample. In a **FLUORIMETER** the excitation and emission wavelengths are selected using absorption or interference filters. The excitation source for a fluorimeter is usually a low-pressure Hg vapor lamp that provides intense emission lines distributed throughout the ultraviolet and visible region (254, 312, 365, 405, 436, 546, 577, 691, and 773 nm). When a monochromator is used to select the excitation and emission wavelengths, the instrument is called a **SPECTROFLUORIMETER**. With a monochromator the excitation source is usually high-pressure Xe arc lamp, which has a continuous emission spectrum. Either instrumental design is

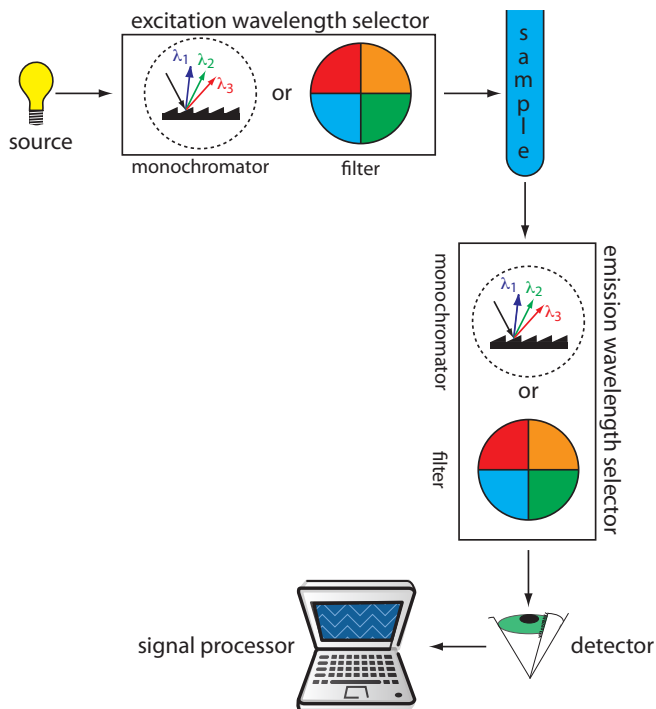


Figure 10.53 Schematic diagram for measuring fluorescence showing the placement of the wavelength selectors for excitation and emission. When a filter is used the instrument is called a fluorimeter, and when a monochromator is used the instrument is called a spectrofluorimeter.

appropriate for quantitative work, although only a spectrofluorimeter can be used to record an excitation or emission spectrum.

The sample cells for molecular fluorescence are similar to those for molecular absorption. Remote sensing with fiber optic probes also can be adapted for use with either a fluorimeter or spectrofluorimeter. An analyte that is fluorescent can be monitored directly. For analytes that are not fluorescent, a suitable fluorescent probe molecule can be incorporated into the tip of the fiber optic probe. The analyte's reaction with the probe molecule leads to an increase or decrease in fluorescence.

INSTRUMENTS FOR MEASURING PHOSPHORESCENCE

Instrumentation for molecular phosphorescence must discriminate between phosphorescence and fluorescence. Because the lifetime for fluorescence is shorter than that for phosphorescence, discrimination is easily achieved by incorporating a delay between exciting the sample and measuring phosphorescent emission. Figure 10.54 shows how two out-of-phase choppers can be used to block emission from reaching the detector when the sample is being excited, and to prevent source radiation from reaching the sample while we are measuring the phosphorescent emission.

Because phosphorescence is such a slow process, we must prevent the excited state from relaxing by external conversion. Traditionally, this has been accomplished by dissolving the sample in a suitable organic solvent, usually a mixture of ethanol, isopentane, and diethylether. The resulting solution is frozen at liquid- N_2 temperatures, forming an optically clear solid. The solid matrix minimizes external conversion due to collisions between the analyte and the solvent. External conversion also is minimized

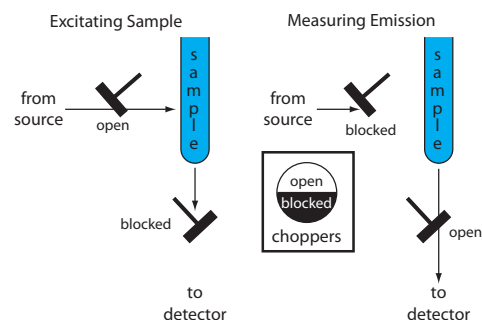


Figure 10.54 Schematic diagram showing how choppers are used to prevent fluorescent emission from interfering with the measurement of phosphorescent emission.

by immobilizing the sample on a solid substrate, making possible room temperature measurements. One approach is to place a drop of the solution containing the analyte on a small disc of filter paper. After drying the sample under a heat lamp, the sample is placed in the spectrofluorimeter for analysis. Other solid surfaces that have been used include silica gel, alumina, sodium acetate, and sucrose. This approach is particularly useful for the analysis of thin layer chromatography plates.

10F.3 Quantitative Applications

Molecular fluorescence and, to a lesser extent, phosphorescence have been used for the direct or indirect quantitative analysis of analytes in a variety of matrices. A direct quantitative analysis is possible when the analyte's fluorescent or phosphorescent quantum yield is favorable. When the analyte is not fluorescent or phosphorescent, or if the quantum yield is unfavorable, then an indirect analysis may be feasible. One approach is to react the analyte with a reagent to form a product with fluorescent or phosphorescent properties. Another approach is to measure a decrease in fluorescence or phosphorescence when the analyte is added to a solution containing a fluorescent or phosphorescent probe molecule. A decrease in emission is observed when the reaction between the analyte and the probe molecule enhances radiationless deactivation, or produces a nonemitting product. The application of fluorescence and phosphorescence to inorganic and organic analytes are considered in this section.

INORGANIC ANALYTES

Except for a few metal ions, most notably UO_2^+ , most inorganic ions are not sufficiently fluorescent for a direct analysis. Many metal ions may be determined indirectly by reacting with an organic ligand to form a fluorescent, or less commonly, a phosphorescent metal–ligand complex. One example is the reaction of Al^{3+} with the sodium salt of 2, 4, 3'-trihydroxyazobenzene-5'-sulfonic acid—also known as alizarin garnet R—which forms a fluorescent metal–ligand complex (Figure 10.55). The analysis is carried out using an excitation wavelength of 470 nm, monitoring fluorescence at 500 nm. [Table 10.12](#) provides additional examples of chelating reagents that form fluorescent metal–ligand complexes with metal ions. A few inorganic nonmetals are determined by their ability to decrease, or quench, the fluorescence of another species. One example is the analysis for F^- based on its ability to quench the fluorescence of the Al^{3+} –alizarin garnet R complex.

ORGANIC ANALYTES

As noted earlier, organic compounds containing aromatic rings generally are fluorescent and aromatic heterocycles are often phosphorescent. As shown in [Table 10.13](#), several important biochemical, pharmaceutical, and environmental compounds may be analyzed quantitatively by fluorimetry or

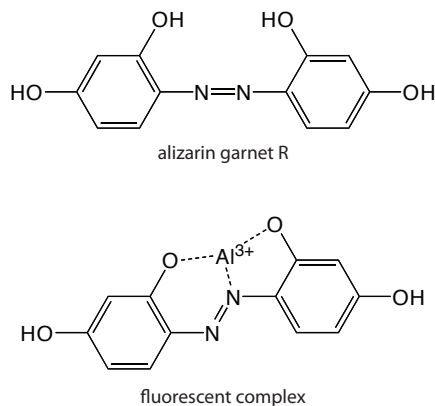


Figure 10.55 Structure of alizarin garnet R and its metal–ligand complex with Al^{3+} .

Table 10.12 Chelating Agents for the Fluorescence Analysis of Metal Ions

chelating agent	metal ions
8-hydroxyquinoline	Al ³⁺ , Be ²⁺ , Zn ²⁺ , Li ⁺ , Mg ²⁺ (and others)
flavonal	Zr ²⁺ , Sn ⁴⁺
benzoin	B ₄ O ₇ ²⁻ , Zn ²⁺
2', 3, 4', 5, 7-pentahydroxyflavone	Be ²⁺
2-(<i>o</i> -hydroxyphenyl) benzoxazole	Cd ²⁺

Table 10.13 Examples of Naturally Photoluminescent Organic Analytes

class	compounds (F = fluorescence; P = phosphorescence)
aromatic amino acids	phenylalanine (F) tyrosine (F) tryptophan (F, P)
vitamins	vitamin A (F) vitamin B2 (F) vitamin B6 (F) vitamin B12 (F) vitamin E (F) folic acid (F)
catecholamines	dopamine (F) norepinephrine (F)
pharmaceuticals and drugs	quinine (F) salicylic acid (F, P) morphine (F) barbiturates (F) LSD (F) codeine (P) caffeine (P) sulfanilamide (P)
environmental pollutants	pyrene (F) benzo[a]pyrene (F) organothiophosphorous pesticides (F) carbamate insecticides (F) DDT (P)

phosphorimetry. If an organic analyte is not naturally fluorescent or phosphorescent, it may be possible to incorporate it into a chemical reaction that produces a fluorescent or phosphorescent product. For example, the enzyme creatine phosphokinase can be determined by using it to catalyze the formation of creatine from phosphocreatine. Reacting the creatine with ninhydrin produces a fluorescent product of unknown structure.

STANDARDIZING THE METHOD

From [equation 10.28](#) and [equation 10.29](#) we know that the intensity of fluorescent or phosphorescent emission is a linear function of the analyte's concentration provided that the sample's absorbance of source radiation ($A = \epsilon bC$) is less than approximately 0.01. Calibration curves often are linear over four to six orders of magnitude for fluorescence and over two to four orders of magnitude for phosphorescence. For higher concentrations of analyte the calibration curve becomes nonlinear because the assumptions leading to [equation 10.28](#) and [equation 10.29](#) no longer apply. Nonlinearity may be observed for small concentrations of analyte due to the presence of fluorescent or phosphorescent contaminants. As discussed earlier, quantum efficiency is sensitive to temperature and sample matrix, both of which must be controlled when using external standards. In addition, emission intensity depends on the molar absorptivity of the photoluminescent species, which is sensitive to the sample matrix.

The best way to appreciate the theoretical and practical details discussed in this section is to carefully examine a typical analytical method. Although each method is unique, the following description of the determination of quinine in urine provides an instructive example of a typical procedure. The description here is based on Mule, S. J.; Hushin, P. L. *Anal. Chem.* **1971**, *43*, 708–711, and O'Reilly, J. E.; *J. Chem. Educ.* **1975**, *52*, 610–612.

[Figure 10.49](#) shows the fluorescence of the quinine in tonic water.

Representative Method 10.3

Determination of Quinine in Urine

DESCRIPTION OF METHOD

Quinine is an alkaloid used in treating malaria. It is a strongly fluorescent compound in dilute solutions of H_2SO_4 ($\Phi_f = 0.55$). Quinine's excitation spectrum has absorption bands at 250 nm and 350 nm and its emission spectrum has a single emission band at 450 nm. Quinine is rapidly excreted from the body in urine and is easily determined by measuring its fluorescence following its extraction from the urine sample.

PROCEDURE

Transfer a 2.00-mL sample of urine to a 15-mL test tube and adjust its pH to between 9 and 10 using 3.7 M NaOH. Add 4 mL of a 3:1 (v/v) mixture of chloroform and isopropanol and shake the contents of the test tube for one minute. Allow the organic and the aqueous (urine) layers to separate and transfer the organic phase to a clean test tube. Add 2.00 mL of 0.05 M H_2SO_4 to the organic phase and shake the contents for one minute. Allow the organic and the aqueous layers to separate and transfer the aqueous phase to the sample cell. Measure the fluorescent emission at 450 nm using an excitation wavelength of 350 nm. Determine the concentration of quinine in the urine sample using a calibration curve prepared with a set of external standards in 0.05 M H_2SO_4 , prepared from a 100.0 ppm solution of quinine in 0.05 M H_2SO_4 . Use distilled water as a blank.

QUESTIONS

1. Chloride ion quenches the intensity of quinine's fluorescent emission. For example, in the presence of 100 ppm NaCl (61 ppm Cl^-) quinine's emission intensity is only 83% of its emission intensity in the

absence of chloride. The presence of 1000 ppm NaCl (610 ppm Cl^-) further reduces quinine's fluorescent emission to less than 30% of its emission intensity in the absence of chloride. The concentration of chloride in urine typically ranges from 4600–6700 ppm Cl^- . Explain how this procedure prevents an interference from chloride.

The procedure uses two extractions. In the first of these extractions, quinine is separated from urine by extracting it into a mixture of chloroform and isopropanol, leaving the chloride behind in the original sample.

2. Samples of urine may contain small amounts of other fluorescent compounds, which interfere with the analysis if they are carried through the two extractions. Explain how you can modify the procedure to take this into account?

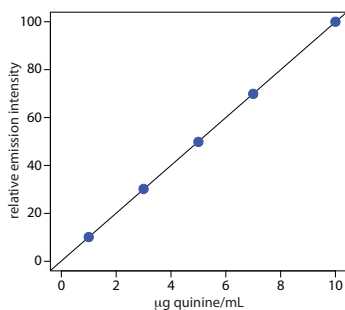
One approach is to prepare a blank using a sample of urine known to be free of quinine. Subtracting the blank's fluorescent signal from the measured fluorescence from urine samples corrects for the interfering compounds.

3. The fluorescent emission for quinine at 450 nm can be induced using an excitation frequency of either 250 nm or 350 nm. The fluorescent quantum efficiency is the same for either excitation wavelength. Quinine's absorption spectrum shows that ϵ_{250} is greater than ϵ_{350} . Given that quinine has a stronger absorbance at 250 nm, explain why its fluorescent emission intensity is greater when using 350 nm as the excitation wavelength.

From [equation 10.28](#) we know that I_f is a function of the following terms: k , Φ_f , P_0 , ϵ , b , and C . We know that Φ_f , b , and C are the same for both excitation wavelengths and that ϵ is larger for a wavelength of 250 nm; we can, therefore, ignore these terms. The greater emission intensity when using an excitation wavelength of 350 nm must be due to a larger value for P_0 or k . In fact, P_0 at 350 nm for a high-pressure Xe arc lamp is about 170% of that at 250 nm. In addition, the sensitivity of a typical photomultiplier detector (which contributes to the value of k) at 350 nm is about 140% of that at 250 nm.

Example 10.11

To evaluate the method described in [Representative Method 10.3](#), a series of external standard was prepared and analyzed, providing the results shown in the following table. All fluorescent intensities were corrected using a blank prepared from a quinine-free sample of urine. The fluorescent intensities are normalized by setting I_f for the highest concentration standard to 100.



It can take up 10–11 days for the body to completely excrete quinine.

[quinine] ($\mu\text{g/mL}$)	I_f
1.00	10.11
3.00	30.20
5.00	49.84
7.00	69.89
10.00	100.0

After ingesting 10.0 mg of quinine, a volunteer provided a urine sample 24-h later. Analysis of the urine sample gives an relative emission intensity of 28.16. Report the concentration of quinine in the sample in mg/L and the percent recovery for the ingested quinine.

SOLUTION

Linear regression of the relative emission intensity versus the concentration of quinine in the standards gives a calibration curve with the following equation.

$$I_f = 0.124 + 9.978 \times \frac{\text{g quinine}}{\text{mL}}$$

Substituting the sample's relative emission intensity into the calibration equation gives the concentration of quinine as 2.81 $\mu\text{g/mL}$. Because the volume of urine taken, 2.00 mL, is the same as the volume of 0.05 M H_2SO_4 used in extracting quinine, the concentration of quinine in the urine also is 2.81 $\mu\text{g/mL}$. The recovery of the ingested quinine is

$$\frac{\frac{2.81 \text{ g}}{\text{ml urine}} \times 2.00 \text{ mL urine} \times \frac{1 \text{ mg}}{1000 \text{ g}}}{10.0 \text{ mg quinine ingested}} \times 100 = 0.0562\%$$

10F.4 Evaluation of Photoluminescence Spectroscopy

SCALE OF OPERATION

See [Figure 3.5](#) to review the meaning of macro and meso for describing samples, and the meaning of major, minor, and ultratrace for describing analytes.

Photoluminescence spectroscopy is used for the routine analysis of trace and ultratrace analytes in macro and meso samples. Detection limits for fluorescence spectroscopy are strongly influenced by the analyte's quantum yield. For an analyte with $\Phi_f > 0.5$, a picomolar detection limit is possible when using a high quality spectrofluorimeter. For example, the detection limit for quinine sulfate, for which Φ_f is 0.55, is generally between 1 part per billion and 1 part per trillion. Detection limits for phosphorescence are somewhat higher, with typical values in the nanomolar range for low-temperature phosphorimetry, and in the micromolar range for room-temperature phosphorimetry using a solid substrate.

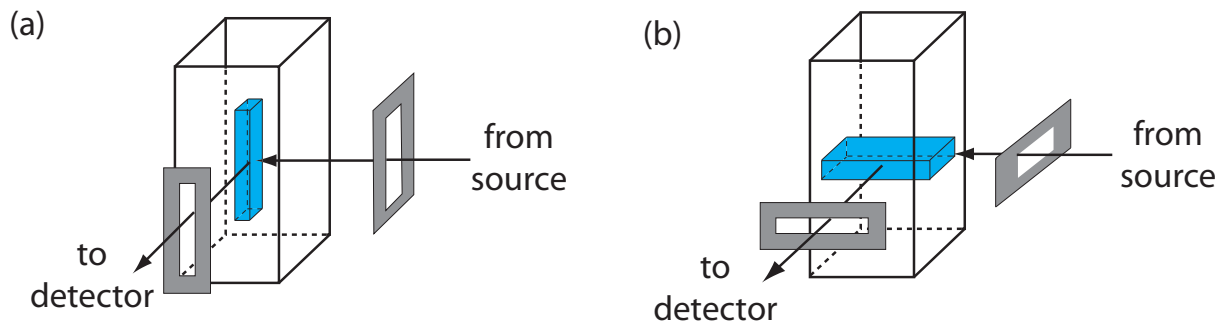


Figure 10.56 Use of slit orientation to change the volume from which fluorescence is measured: (a) vertical slit orientation; (b) horizontal slit orientation. Suppose the slit's dimensions are $0.1 \text{ mm} \times 3 \text{ mm}$. In (a) the dimensions of the **sampling volume** are $0.1 \text{ mm} \times 0.1 \text{ mm} \times 3 \text{ mm}$, or 0.03 mm^3 . For (b) the dimensions of the **sampling volume** are $0.1 \text{ mm} \times 3 \text{ mm} \times 3 \text{ mm}$, or 0.9 mm^3 , a 30-fold increase in the sampling volume.

ACCURACY

The accuracy of a fluorescence method is generally between 1–5% when spectral and chemical interferences are insignificant. Accuracy is limited by the same types of problems affecting other optical spectroscopic methods. In addition, accuracy is affected by interferences influencing the fluorescent quantum yield. The accuracy of phosphorescence is somewhat greater than that for fluorescence.

PRECISION

The relative standard deviation for fluorescence is usually between 0.5–2% when the analyte's concentration is well above its detection limit. Precision is usually limited by the stability of the excitation source. The precision for phosphorescence is often limited by reproducibility in preparing samples for analysis, with relative standard deviations of 5–10% being common.

SENSITIVITY

From [equation 10.28](#) and [equation 10.29](#) we know that the sensitivity of a fluorescent or phosphorescent method is influenced by a number of parameters. The importance of quantum yield and the effect of temperature and solution composition on Φ_f and Φ_p already have been considered. Besides quantum yield, the sensitivity of an analysis can be improved by using an excitation source that has a greater emission intensity, P_0 , at the desired wavelength, and by selecting an excitation wavelength that has a greater absorbance. Another approach for improving sensitivity is to increase the volume in the sample from which emission is monitored. Figure 10.56 shows how rotating a monochromator's slits from their usual vertical orientation to a horizontal orientation increases the sampling volume. The result can increase the emission from the sample by 5–30 \times .

SELECTIVITY

The selectivity of fluorescence and phosphorescence is superior to that of absorption spectrophotometry for two reasons: first, not every compound that absorbs radiation is fluorescent or phosphorescent; and, second, selectivity between an analyte and an interferent is possible if there is a difference in either their excitation or their emission spectra. The total emission intensity is a linear sum of that from each fluorescent or phosphorescent species. The analysis of a sample containing n components, therefore, can be accomplished by measuring the total emission intensity at n wavelengths.

TIME, COST, AND EQUIPMENT

As with other optical spectroscopic methods, fluorescent and phosphorescent methods provide a rapid means for analyzing samples and are capable of automation. Fluorimeters are relatively inexpensive, ranging from several hundred to several thousand dollars, and often are satisfactory for quantitative work. Spectrofluorimeters are more expensive, with models often exceeding \$50,000.

10G Atomic Emission Spectroscopy

The focus of this section is on the emission of ultraviolet and visible radiation following the thermal excitation of atoms. Atomic emission spectroscopy has a long history. Qualitative applications based on the color of flames were used in the smelting of ores as early as 1550 and were more fully developed around 1830 with the observation of atomic spectra generated by flame emission and spark emission.¹⁸ Quantitative applications based on the atomic emission from electric sparks were developed by Lockyer in the early 1870 and quantitative applications based on flame emission were pioneered by Lundegardh in 1930. Atomic emission based on emission from a plasma was introduced in 1964.

10G.1 Atomic Emission Spectra

Atomic emission occurs when a valence electron in a higher energy atomic orbital returns to a lower energy atomic orbital. Figure 10.57 shows a portion of the energy level diagram for sodium, which consists of a series of discrete lines at wavelengths corresponding to the difference in energy between two atomic orbitals.

The intensity of an atomic emission line, I_e , is proportional to the number of atoms, N^* , populating the excited state,

$$I_e = kN^* \quad 10.30$$

where k is a constant accounting for the efficiency of the transition. If a system of atoms is in thermal equilibrium, the population of excited state i is related to the total concentration of atoms, N , by the Boltzmann distribu-

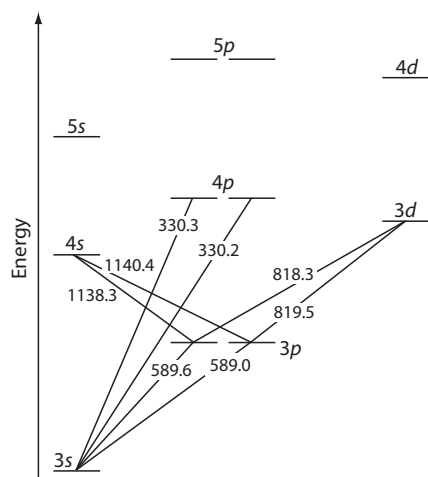


Figure 10.57 Valence shell energy level diagram for sodium. The wavelengths corresponding to several transitions are shown. Note that this is the same energy level diagram as [Figure 10.19](#).

¹⁸ Dawson, J. B. *J. Anal. At. Spectrosc.* **1991**, *6*, 93–98.

tion. For many elements at temperatures of less than 5000 K the Boltzmann distribution is approximated as

$$N^* = N \left(\frac{g_i}{g_0} \right) e^{-E_i/kT} \quad 10.31$$

where g_i and g_0 are statistical factors that account for the number of equivalent energy levels for the excited state and the ground state, E_i is the energy of the excited state relative to a ground state energy, E_0 , of 0, k is Boltzmann's constant (1.3807×10^{-23} J/K), and T is the temperature in kelvin. From equation 10.31 we expect that excited states with lower energies have larger populations and more intense emission lines. We also expect emission intensity to increase with temperature.

10G.2 Equipment

An atomic emission spectrometer is similar in design to the instrumentation for atomic absorption. In fact, it is easy to adapt most flame atomic absorption spectrometers for atomic emission by turning off the hollow cathode lamp and monitoring the difference in the emission intensity when aspirating the sample and when aspirating a blank. Many atomic emission spectrometers, however, are dedicated instruments designed to take advantage of features unique to atomic emission, including the use of plasmas, arcs, sparks, and lasers as atomization and excitation sources, and an enhanced capability for multielemental analysis.

ATOMIZATION AND EXCITATION

Atomic emission requires a means for converting a solid, liquid, or solution analyte into a free gaseous atom. The same source of thermal energy usually serves as the excitation source. The most common methods are flames and plasmas, both of which are useful for liquid or solution samples. Solid samples may be analyzed by dissolving in a solvent and using a flame or plasma atomizer.

FLAME SOURCES

Atomization and excitation in flame atomic emission is accomplished using the same nebulization and spray chamber assembly used in atomic absorption ([Figure 10.42](#)). The burner head consists of single or multiple slots, or a Meker style burner. Older atomic emission instruments often used a total consumption burner in which the sample is drawn through a capillary tube and injected directly into the flame.

PLASMA SOURCES

A **PLASMA** is a hot, partially ionized gas that contains an abundant concentration of cations and electrons. The plasmas used in atomic emission are formed by ionizing a flowing stream of argon gas, producing argon ions and

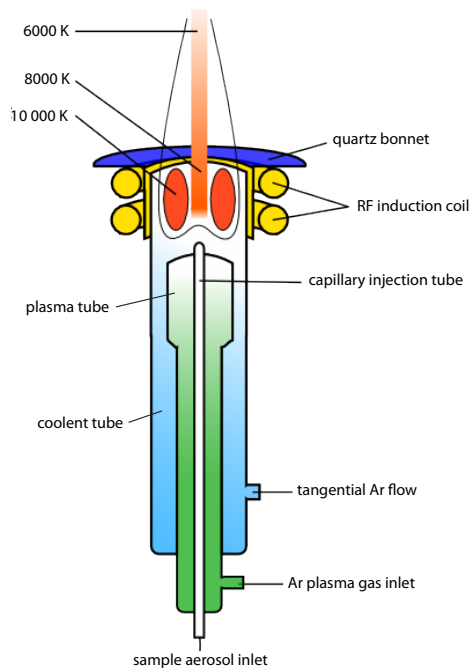


Figure 10.58 Schematic diagram of an inductively coupled plasma torch. Source: modified from [Xvlun](#) (commons.wikimedia.org).

electrons. A plasma's high temperature results from resistive heating as the electrons and argon ions move through the gas. Because plasmas operate at much higher temperatures than flames, they provide better atomization and a higher population of excited states.

A schematic diagram of the inductively coupled plasma source (ICP) is shown in Figure 10.58. The ICP torch consists of three concentric quartz tubes, surrounded at the top by a radio-frequency induction coil. The sample is mixed with a stream of Ar using a nebulizer, and is carried to the plasma through the torch's central capillary tube. Plasma formation is initiated by a spark from a Tesla coil. An alternating radio-frequency current in the induction coils creates a fluctuating magnetic field that induces the argon ions and the electrons to move in a circular path. The resulting collisions with the abundant unionized gas give rise to resistive heating, providing temperatures as high as 10 000 K at the base of the plasma, and between 6000 and 8000 K at a height of 15–20 mm above the coil, where emission is usually measured. At these high temperatures the outer quartz tube must be thermally isolated from the plasma. This is accomplished by the tangential flow of argon shown in the schematic diagram.

MULTIELEMENTAL ANALYSIS

Atomic emission spectroscopy is ideally suited for multielemental analysis because all analytes in a sample are excited simultaneously. If the instrument includes a scanning monochromator, we can program it to move rapidly to an analyte's desired wavelength, pause to record its emission intensity, and then move to the next analyte's wavelength. This sequential analysis allows for a sampling rate of 3–4 analytes per minute.

Another approach to a multielemental analysis is to use a multichannel instrument that allows us to simultaneously monitor many analytes. A simple design for a multichannel spectrometer couples a monochromator with multiple detectors that can be positioned in a semicircular array around the monochromator at positions corresponding to the wavelengths for the analytes ([Figure 10.59](#)).

10G.3 Quantitative Applications

Atomic emission is widely used for the analysis of trace metals in a variety of sample matrices. The development of a quantitative atomic emission method requires several considerations, including choosing a source for atomization and excitation, selecting a wavelength and slit width, preparing the sample for analysis, minimizing spectral and chemical interferences, and selecting a method of standardization.

CHOICE OF ATOMIZATION AND EXCITATION SOURCE

Except for the alkali metals, detection limits when using an ICP are significantly better than those obtained with flame emission ([Table 10.14](#)).

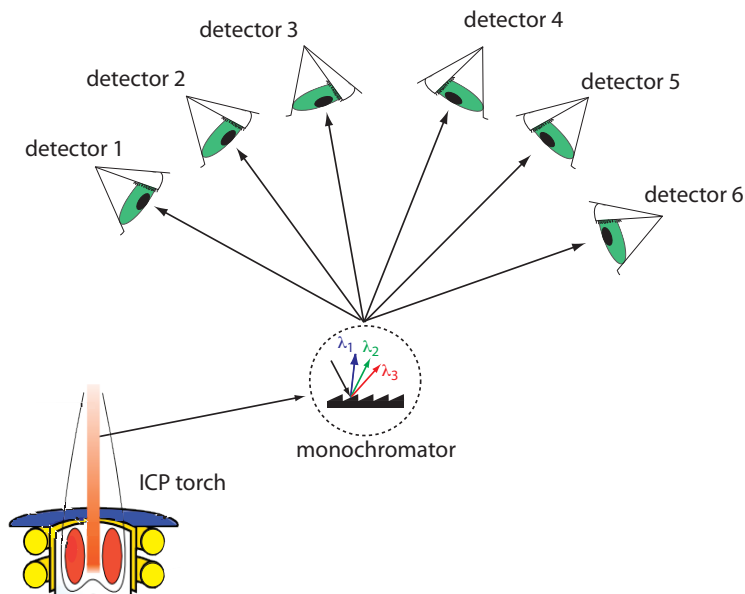


Figure 10.59 Schematic diagram of a multichannel atomic emission spectrometer for the simultaneous analysis of several elements. The ICP torch is modified from [Xvlun](#) (commons.wikipedia.org). Instruments may contain as many as 48–60 detectors.

Table 10.14 Detection Limits for Atomic Emission^a

element	detection limit in $\mu\text{g/mL}$	
	flame emission	ICP
Ag	2	0.2
Al	3	0.2
As	2000	2
Ca	0.1	0.0001
Cd	300	0.07
Co	5	0.1
Cr	1	0.08
Fe	10	0.09
Hg	150	1
K	0.01	30
Li	0.001	0.02
Mg	1	0.003
Mn	1	0.01
Na	0.01	0.1
Ni	10	0.2
Pb	0.2	1
Pt	2000	0.9
Sn	100	3
Zn	1000	0.1

^a Source: Parsons, M. L.; Major, S.; Forster, A. R.; *App. Spectrosc.* 1983, 37, 411–418.

Plasmas also are subject to fewer spectral and chemical interferences. For these reasons a plasma emission source is usually the better choice.

SELECTING THE WAVELENGTH AND SLIT WIDTH

The choice of wavelength is dictated by the need for sensitivity and the need to avoid interferences from the emission lines of other constituents in the sample. Because an analyte's atomic emission spectrum has an abundance of emission lines—particularly when using a high temperature plasma source—it is inevitable that there will be some overlap between emission lines. For example, an analysis for Ni using the atomic emission line at 349.30 nm is complicated by the atomic emission line for Fe at 349.06 nm. Narrower slit widths provide better resolution, but at the cost of less radiation reaching the detector. The easiest approach to selecting a wavelength is to record the sample's emission spectrum and look for an emission line that provides an intense signal and is resolved from other emission lines.

PREPARING THE SAMPLE

Flame and plasma sources are best suited for samples in solution and liquid form. Although a solid sample can be analyzed by directly inserting it into the flame or plasma, they usually are first brought into solution by digestion or extraction.

MINIMIZING SPECTRAL INTERFERENCES

The most important spectral interference is broad, background emission from the flame or plasma and emission bands from molecular species. This background emission is particularly severe for flames because the temperature is insufficient to break down refractory compounds, such as oxides and hydroxides. Background corrections for flame emission are made by scanning over the emission line and drawing a baseline (Figure 10.60). Because a plasma's temperature is much higher, a background interference due to molecular emission is less of a problem. Although emission from the plasma's core is strong, it is insignificant at a height of 10–30 mm above the core where measurements normally are made.

MINIMIZING CHEMICAL INTERFERENCES

Flame emission is subject to the same types of chemical interferences as atomic absorption. These interferences are minimized by adjusting the flame's composition and adding protecting agents, releasing agents, or ionization suppressors. An additional chemical interference results from **SELF-ABSORPTION**. Because the flame's temperature is greatest at its center, the concentration of analyte atoms in an excited state is greater at the flame's center than at its outer edges. If an excited state atom in the flame's center emits a photon while returning to its ground state, then a ground state atom in the cooler, outer regions of the flame may absorb the photon, decreasing

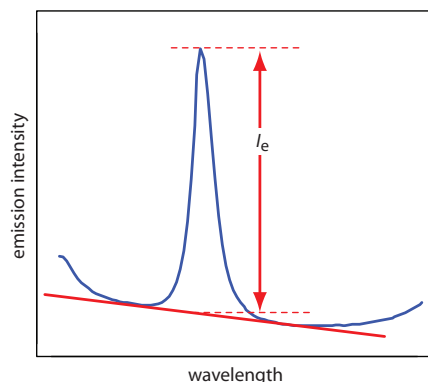


Figure 10.60 Method for correcting an analyte's emission for the flame's background emission.

the emission intensity. For higher concentrations of analyte self-absorption may invert the center of the emission band (Figure 10.61).

Chemical interferences with plasma sources generally are not significant because the plasma's higher temperature limits the formation of nonvolatile species. For example, PO_4^{3-} is a significant interferent when analyzing samples for Ca^{2+} by flame emission, but has a negligible effect when using a plasma source. In addition, the high concentration of electrons from the ionization of argon minimizes ionization interferences.

STANDARDIZING THE METHOD

From [equation 10.30](#) we know that emission intensity is proportional to the population of the analyte's excited state, N^* . If the flame or plasma is in thermal equilibrium, then the excited state population is proportional to the analyte's total population, N , through the Boltzmann distribution ([equation 10.31](#)).

A calibration curve for flame emission is usually linear over two to three orders of magnitude, with ionization limiting linearity when the analyte's concentrations is small and self-absorption limiting linearity for higher concentrations of analyte. When using a plasma, which suffers from fewer chemical interferences, the calibration curve often is linear over four to five orders of magnitude and is not affected significantly by changes in the matrix of the standards.

Emission intensity may be affected significantly by many parameters, including the temperature of the excitation source and the efficiency of atomization. An increase in temperature of 10 K, for example, produces a 4% increase in the fraction of Na atoms occupying the 3p excited state. This is potentially significant uncertainty that may limit the use of external standards. The method of internal standards can be used when variations in source parameters are difficult to control. To compensate for changes in the temperature of the excitation source, the internal standard is selected so that its emission line is close to the analyte's emission line. In addition, the internal standard should be subject to the same chemical interferences to compensate for changes in atomization efficiency. To accurately compensate for these errors the analyte and internal standard emission lines must be monitored simultaneously.

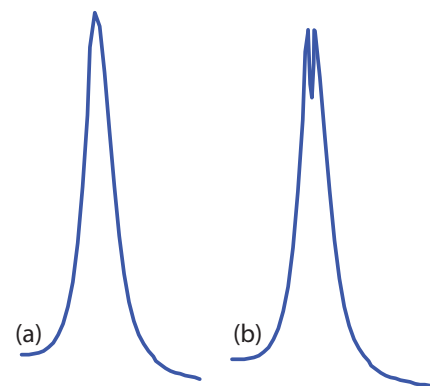


Figure 10.61 Atomic emission lines for (a) a low concentration of analyte, and (b) a high concentration of analyte showing the effect of self-absorption.

Representative Method 10.4

Determination of Sodium in a Salt Substitute

DESCRIPTION OF METHOD

Salt substitutes, which are used in place of table salt for individuals on low-sodium diets, replaces NaCl with KCl. Depending on the brand, fumaric acid, calcium hydrogen phosphate, or potassium tartrate also may be present. Although intended to be sodium-free, salt substitutes contain small amounts of NaCl as an impurity. Typically, the concentration of

The best way to appreciate the theoretical and practical details discussed in this section is to carefully examine a typical analytical method. Although each method is unique, the following description of the determination of sodium in salt substitutes provides an instructive example of a typical procedure. The description here is based on Goodney, D. E. *J. Chem. Educ.* **1982**, *59*, 875–876.

sodium in a salt substitute is about 100 $\mu\text{g/g}$. The exact concentration of sodium is easily determined by flame atomic emission. Because it is difficult to match the matrix of the standards to that of the sample, the analysis is accomplished by the method of standard additions.

PROCEDURE

A sample is prepared by placing an approximately 10-g portion of the salt substitute in 10 mL of 3 M HCl and 100 mL of distilled water. After the sample has dissolved, it is transferred to a 250-mL volumetric flask and diluted to volume with distilled water. A series of standard additions is prepared by placing 25-mL portions of the diluted sample into separate 50-mL volumetric flasks, spiking each with a known amount of an approximately 10 mg/L standard solution of Na^+ , and diluting to volume. After zeroing the instrument with an appropriate blank, the instrument is optimized at a wavelength of 589.0 nm while aspirating a standard solution of Na^+ . The emission intensity is measured for each of the standard addition samples and the concentration of sodium in the salt substitute is reported in $\mu\text{g/g}$.

QUESTIONS

1. Potassium ionizes more easily than sodium. What problem might this present if you use external standards prepared from a stock solution of 10 mg Na/L instead of using a set of standard additions?

Because potassium is present at a much higher concentration than sodium, its ionization suppresses the ionization of sodium. Normally suppressing ionization is a good thing because it increases emission intensity. In this case, however, the difference between the matrix of the standards and the sample's matrix means that the sodium in a standard experiences more ionization than an equivalent amount of sodium in a sample. The result is a determinate error.

2. One way to avoid a determinate error when using external standards is to match the matrix of the standards to that of the sample. We could, for example, prepare external standards using reagent grade KCl to match the matrix to that of the sample. Why is this not a good idea for this analysis?

Sodium is a common contaminant, which is found in many chemicals. Reagent grade KCl, for example, may contain 40–50 $\mu\text{g Na/g}$. This is a significant source of sodium, given that the salt substitute contains approximately 100 $\mu\text{g Na/g}$.

3. Suppose you decide to use an external standardization. Given the answer to the previous questions, is the result of your analysis likely to underestimate or overestimate the amount of sodium in the salt substitute?

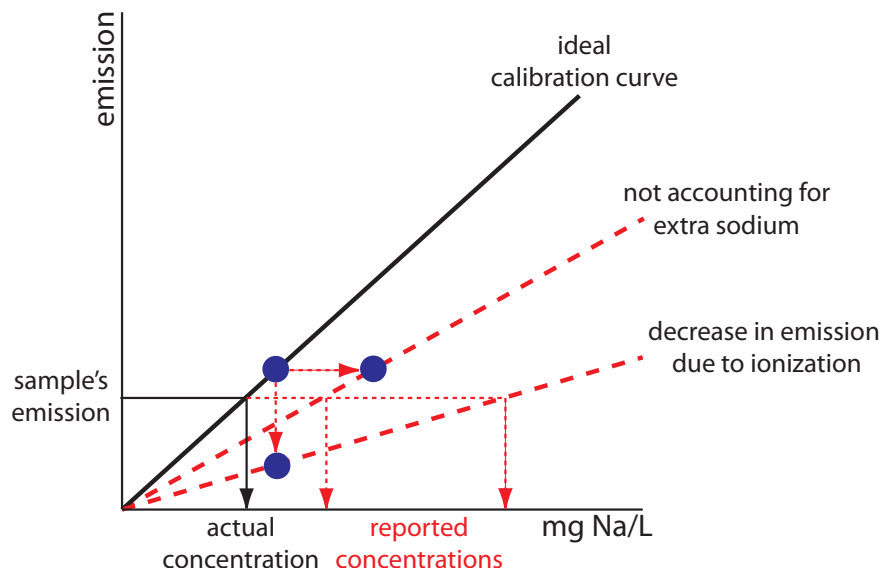


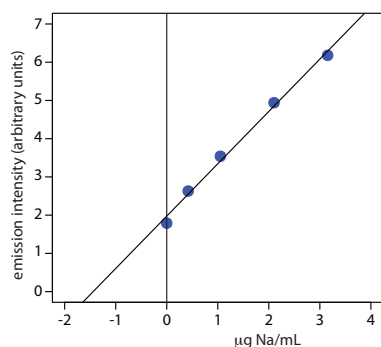
Figure 10.62 External standards calibration curves for the flame atomic emission analysis of Na in a salt substitute. The solid black line shows the ideal calibration curve assuming matrix matching of samples and standards with pure KCl. The lower of the two dashed red lines shows the effect of failing to add KCl to the external standards, which decreases emission. The other dashed red line shows the effect of using KCl that is contaminated with NaCl, which causes us to underestimate the concentration of Na in the standards. In both cases, the result is a positive determinate error in the analysis of samples.

The solid black line in Figure 10.62 shows the ideal calibration curve assuming that we match the matrix of the standards to the sample's matrix, and that we do so without adding an additional sodium. If we prepare the external standards without adding KCl, the emission for each standard decreases due to increased ionization. This is shown by the lower of the two dashed red lines. Preparing the standards by adding reagent grade KCl increases the concentration of sodium due to its contamination. Because we underestimate the actual concentration of sodium in the standards, the resulting calibration curve is shown by the other dashed red line. In both cases, the sample's emission results in our overestimating the concentration of sodium in the sample.

4. One problem with analyzing salt samples is their tendency to clog the aspirator and burner assembly. What effect does this have on the analysis?

Clogging the aspirator and burner assembly decreases the rate of aspiration, which decreases the analyte's concentration in the flame. The result is a decrease in the emission intensity and a negative determinate error.

See Section 5C.3 in Chapter 5 to review the method of standard additions.



Example 10.12

To evaluate the method described in [Representative Method 10.4](#), a series of standard additions is prepared using a 10.0077-g sample of a salt substitute. The results of a flame atomic emission analysis of the standards is shown here.¹⁹

added Na ($\mu\text{g/mL}$)	I_e (arb. units)
0.000	1.79
0.420	2.63
1.051	3.54
2.102	4.94
3.153	6.18

What is the concentration of sodium, in $\mu\text{g/g}$, in the salt substitute.

SOLUTION

Linear regression of emission intensity versus the concentration of added Na gives a standard additions calibration curve with the following equation.

$$I_e = 1.97 + 1.37 \times \frac{\text{g Na}}{\text{mL}}$$

The concentration of sodium in the sample is equal to the absolute value of the calibration curve's x -intercept. Substituting zero for the emission intensity and solving for sodium's concentration gives a result of $1.44 \mu\text{g Na/mL}$. The concentration of sodium in the salt substitute is

$$\frac{1.44 \text{ g Na}}{\text{mL}} \times \frac{50.00 \text{ mL}}{25.00 \text{ mL}} \times 250.0 \text{ mL} = 71.9 \text{ g Na/g}$$

10G.4 Evaluation of Atomic Emission Spectroscopy

SCALE OF OPERATION

The scale of operations for atomic emission is ideal for the direct analysis of trace and ultratrace analytes in macro and meso samples. With appropriate dilutions, atomic emission also can be applied to major and minor analytes.

ACCURACY

When spectral and chemical interferences are insignificant, atomic emission is capable of producing quantitative results with accuracies of between

¹⁹ Goodney, D. E. *J. Chem. Educ.* **1982**, *59*, 875–876

See [Figure 3.5](#) to review the meaning of macro and meso for describing samples, and the meaning of major, minor, and ultratrace for describing analytes.

1–5%. Accuracy frequently is limited by chemical interferences. Because the higher temperature of a plasma source gives rise to more emission lines, the accuracy of using plasma emission often is limited by stray radiation from overlapping emission lines.

PRECISION

For samples and standards in which the analyte's concentration exceeds the detection limit by at least a factor of 50, the relative standard deviation for both flame and plasma emission is about 1–5%. Perhaps the most important factor affecting precision is the stability of the flame's or the plasma's temperature. For example, in a 2500 K flame a temperature fluctuation of ± 2.5 K gives a relative standard deviation of 1% in emission intensity. Significant improvements in precision may be realized when using internal standards.

SENSITIVITY

Sensitivity is strongly influenced by the temperature of the excitation source and the composition of the sample matrix. Sensitivity is optimized by aspirating a standard solution of analyte and maximizing the emission by adjusting the flame's composition and the height from which we monitor the emission. Chemical interferences, when present, decrease the sensitivity of the analysis. The sensitivity of plasma emission is less affected by the sample matrix. In some cases a calibration curve prepared using standards in a matrix of distilled water can be used for samples with more complex matrices.

SELECTIVITY

The selectivity of atomic emission is similar to that of atomic absorption. Atomic emission has the further advantage of rapid sequential or simultaneous analysis.

TIME, COST, AND EQUIPMENT

Sample throughput with atomic emission is very rapid when using automated systems capable of multielemental analysis. For example, sampling rates of 3000 determinations per hour have been achieved using a multi-channel ICP, and 300 determinations per hour with a sequential ICP. Flame emission is often accomplished using an atomic absorption spectrometer, which typically costs between \$10,000–\$50,000. Sequential ICP's range in price from \$55,000–\$150,000, while an ICP capable of simultaneous multielemental analysis costs between \$80,000–\$200,000. Combination ICP's that are capable of both sequential and simultaneous analysis range in price from \$150,000–\$300,000. The cost of Ar, which is consumed in significant quantities, can not be overlooked when considering the expense of operating an ICP.

10H Spectroscopy Based on Scattering

The blue color of the sky during the day and the red color of the sun at sunset result from the scattering of light by small particles of dust, molecules of water, and other gases in the atmosphere. The efficiency of a photon's scattering depends on its wavelength. We see the sky as blue during the day because violet and blue light scatter to a greater extent than other, longer wavelengths of light. For the same reason, the sun appears red at sunset because red light is less efficiently scattered and is more likely to pass through the atmosphere than other wavelengths of light. The scattering of radiation has been studied since the late 1800s, with applications beginning soon thereafter. The earliest quantitative applications of scattering, which date from the early 1900s, used the elastic scattering of light by colloidal suspensions to determine the concentration of colloidal particles.

10H.1 Origin of Scattering

If we send a focused, monochromatic beam of radiation with a wavelength λ through a medium of particles with dimensions $<1.5\lambda$, the radiation scatters in all directions. For example, visible radiation of 500 nm is scattered by particles as large as 750 nm in the longest dimension. Two general categories of scattering are recognized. In elastic scattering, radiation is first absorbed by the particles and then emitted without undergoing change in the radiation's energy. When the radiation emerges with a change in energy, the scattering is said to be inelastic. Only elastic scattering is considered in this text.

Elastic scattering is divided into two types: Rayleigh, or small-particle scattering, and large-particle scattering. Rayleigh scattering occurs when the scattering particle's largest dimension is less than 5% of the radiation's wavelength. The intensity of the scattered radiation is proportional to its frequency to the fourth power, ν^4 —accounting for the greater scattering of blue light than red light—and is symmetrically distributed (Figure 10.63a). For larger particles, scattering increases in the forward direction and decreases in the backwards direction as the result of constructive and destructive interferences (Figure 10.63b).

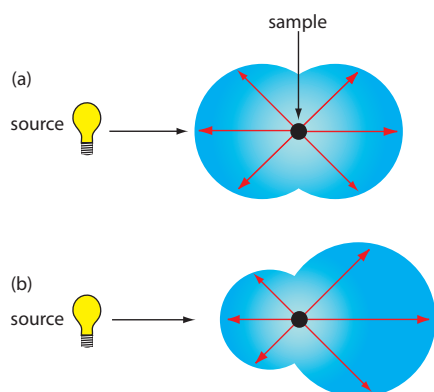


Figure 10.63 Distribution of radiation for (a) Rayleigh, or small-particle scattering, and (b) large-particle scattering.

10H.2 Turbidimetry and Nephelometry

Turbidimetry and nephelometry are two techniques based on the elastic scattering of radiation by a suspension of colloidal particles. In **TURBIDIMETRY** the detector is placed in line with the source and the decrease in the radiation's transmitted power is measured. In **NEPHELOMETRY** scattered radiation is measured at an angle of 90° to the source. The similarity of turbidimetry to absorbance and of nephelometry to fluorescence is evident in the instrumental designs shown in [Figure 10.64](#). In fact, turbidity can be measured using a UV/Vis spectrophotometer and a spectrofluorimeter is suitable for nephelometry.

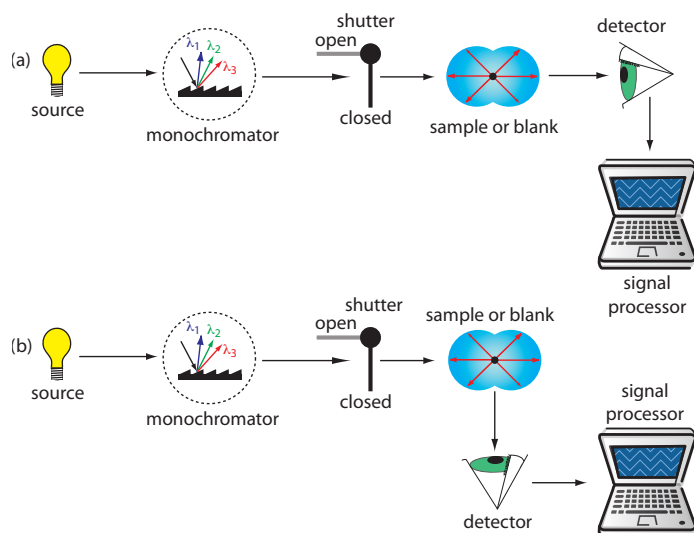


Figure 10.64 Schematic diagrams for (a) a turbidimeter, and (b) a nephelometer.

TURBIDIMETRY OR NEPHELOMETRY?

When developing a scattering method the choice of using turbidimetry or nephelometry is determined by two factors. The most important consideration is the intensity of the scattered radiation relative to the intensity of the source's radiation. If the solution contains a small concentration of scattering particles the intensity of the transmitted radiation, I_T , is approximately the same as the intensity of the source's radiation, I_0 . As we learned earlier in the section on molecular absorption, there is substantial uncertainty in determining a small difference between two intense signals. For this reason, nephelometry is a more appropriate choice for samples containing few scattering particles. Turbidimetry is a better choice when the sample contains a high concentration of scattering particles.

A second consideration in choosing between turbidimetry and nephelometry is the size of the scattering particles. For nephelometry, the intensity of scattered radiation at 90° increases when the particles are small and Rayleigh scattering is in effect. For larger particles, as shown in [Figure 10.63](#), the intensity of scattering is diminished at 90° . When using an ultraviolet or visible source of radiation, the optimum particle size is $0.1\text{--}1\ \mu\text{m}$. The size of the scattering particles is less important for turbidimetry where the signal is the relative decrease in transmitted radiation. In fact, turbidimetric measurements are still feasible even when the size of the scattering particles results in an increase in reflection and refraction, although a linear relationship between the signal and the concentration of scattering particles may no longer hold.

DETERMINING CONCENTRATION BY TURBIDIMETRY

In turbidimetry the measured transmittance, T , is the ratio of the intensity of source radiation transmitted by the sample, I_T , to the intensity of source radiation transmitted by a blank, I_0 .

$$T = \frac{I_T}{I_0}$$

The relationship between transmittance and the concentration of the scattering particles is similar to that given by Beer's law

$$-\log T = kbC \quad 10.32$$

where C is the concentration of the scattering particles in mass per unit volume (w/v), b is the pathlength, and k is a constant that depends on several factors, including the size and shape of the scattering particles and the wavelength of the source radiation. As with Beer's law, equation 10.32 may show appreciable deviations from linearity. The exact relationship is established by a calibration curve prepared using a series of standards containing known concentrations of analyte.

DETERMINING CONCENTRATION BY NEPHELOMETRY

In nephelometry the relationship between the intensity of scattered radiation, I_S , and the concentration of scattering particles is

$$I_S = k_S I_0 C \quad 10.33$$

where k_S is an empirical constant for the system and I_0 is the source radiation's intensity. The value of k_S is determined from a calibration curve prepared using a series of standards containing known concentrations of analyte.

SELECTING A WAVELENGTH FOR THE INCIDENT RADIATION

The choice of wavelength is based primarily on the need to minimize potential interferences. For turbidimetry, where the incident radiation is transmitted through the sample, a monochromator or filter allow us to avoid wavelengths that are absorbed by the sample. For nephelometry, the absorption of incident radiation is not a problem unless it induces fluorescence from the sample. With a nonfluorescent sample there is no need for wavelength selection, and a source of white light may be used as the incident radiation. For both techniques, other considerations in choosing a wavelength including the effect of wavelength on scattering intensity, the transducer's sensitivity, and the source's intensity. For example, many common photon transducers are more sensitive to radiation at 400 nm than at 600 nm.

PREPARING THE SAMPLE FOR ANALYSIS

Although equation 10.32 and equation 10.33 relate scattering to the concentration of scattering particles, the intensity of scattered radiation is also influenced by the particle's size and shape. Samples containing the same number of scattering particles may show significantly different values for $-\log T$ or I_S , depending on the average diameter of the particles. For a quan-

titative analysis, therefore, it is necessary to maintain a uniform distribution of particle sizes throughout the sample and between samples and standards.

Most turbidimetric and nephelometric methods rely on precipitation to form the scattering particles. As we learned in Chapter 8, the properties of a precipitate are determined by the conditions under which it forms. To maintain a reproducible distribution of particle sizes between samples and standards, it is necessary to control parameters such as the concentration of reagents, the order of adding reagents, the pH and temperature, the agitation or stirring rate, the ionic strength, and the time between the precipitate's initial formation and the measurement of transmittance or scattering. In many cases a surface-active agent—such as glycerol, gelatin, or dextrin—is added to stabilize the precipitate in a colloidal state and to prevent the coagulation of the particles.

APPLICATIONS

Turbidimetry and nephelometry are widely used to determine the clarity of water, beverages, and food products. For example, a nephelometric determination of the turbidity of water compares the sample's scattering to the scattering of a set of standards. The primary standard for measuring turbidity is formazin, which is an easily prepared, stable polymer suspension (Figure 10.65).²⁰ Formazin prepared by mixing a 1 g/100 mL solution of hydrazine sulfate, $N_2H_4 \cdot H_2SO_4$, with a 10 g/100 mL solution of hexamethylenetetramine produces a suspension that is defined as 4000 nephelometric turbidity units (NTU). A set of standards with NTUs between 0 and 40 is prepared and used to construct a calibration curve. This method is readily adapted to the analysis of the clarity of orange juice, beer, and maple syrup.

A number of inorganic cations and anions can be determined by precipitating them under well-defined conditions and measuring the transmittance or scattering of radiation from the precipitated particles. The trans-

²⁰ Hach, C. C.; Bryant, M. "Turbidity Standards," Technical Information Series, Booklet No. 12, Hach Company: Loveland, CO, 1995.

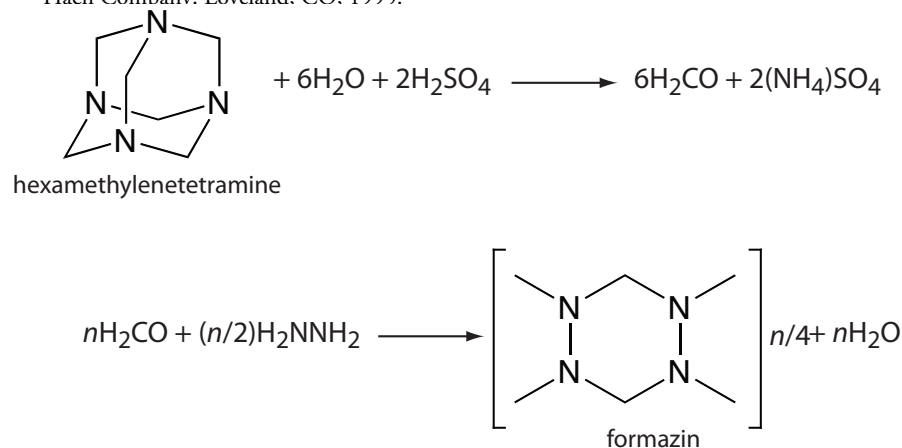


Figure 10.65 Scheme for preparing formazin for use as a turbidity standard.

Table 10.15 Examples of Analytes Determined by Turbidimetry or Nephelometry

analyte	precipitant	precipitate
Ag^+	NaCl	AgCl
Ca^{2+}	$\text{Na}_2\text{C}_2\text{O}_4$	CaC_2O_4
Cl^-	AgNO_3	AgCl
CN^-	AgNO_3	AgCN
CO_3^{2-}	BaCl_2	BaCO_3
F^-	CaCl_2	CaF_2
SO_4^{2-}	BaCl_2	BaSO_4

mittance or scattering, as given by [equation 10.32](#) or [equation 10.33](#) is proportional to the concentration of the scattering particles, which, in turn, is related by the stoichiometry of the precipitation reaction to the analyte's concentration. Examples of analytes that have been determined in this way are listed in Table 10.15.

The best way to appreciate the theoretical and practical details discussed in this section is to carefully examine a typical analytical method. Although each method is unique, the following description of the determination of sulfate in water provides an instructive example of a typical procedure. The description here is based on Method 4500-SO₄²⁻-C in *Standard Methods for the Analysis of Water and Wastewater*, American Public Health Association: Washington, D. C. 20th Ed., 1998.

Representative Method 10.5

Turbidimetric Determination of Sulfate in Water

DESCRIPTION OF METHOD

Adding BaCl_2 to an acidified sample precipitates SO_4^{2-} as BaSO_4 . The concentration of SO_4^{2-} may be determined either by turbidimetry or by nephelometry using an incident source of radiation of 420 nm. External standards containing known concentrations of SO_4^{2-} are used to standardize the method.

PROCEDURE

Transfer a 100-mL sample to a 250-mL Erlenmeyer flask along with 20.00 mL of a buffer. For samples containing >10 mg $\text{SO}_4^{2-}/\text{L}$, the buffer contains 30 g of $\text{MgCl}_2 \cdot 6\text{H}_2\text{O}$, 5 g of $\text{CH}_3\text{COONa} \cdot 3\text{H}_2\text{O}$, 1.0 g of KNO_3 , and 20 mL of glacial CH_3COOH per liter. The buffer for samples containing <10 mg $\text{SO}_4^{2-}/\text{L}$ is the same except for the addition of 0.111 g of Na_2SO_4 per L.

Place the sample and the buffer on a magnetic stirrer operated at the same speed for all samples and standards. Add a spoonful of 20–30 mesh BaCl_2 , using a measuring spoon with a capacity of 0.2–0.3 mL, to precipitate the SO_4^{2-} as BaSO_4 . Begin timing when the BaCl_2 is added and stir the suspension for 60 ± 2 s. Measure the transmittance or scattering intensity 5.0 ± 0.5 min after the end of stirring.

Prepare a calibration curve over the range 0–40 mg $\text{SO}_4^{2-}/\text{L}$ by diluting a 100-mg $\text{SO}_4^{2-}/\text{L}$ standard. Treat the standards using the procedure described above for the sample. Prepare a calibration curve and use it to determine the amount of sulfate in the sample.

QUESTIONS

1. What is the purpose of the buffer?

If the precipitate's particles are too small, I_T may be too small to measure reliably. Because rapid precipitation favors the formation of microcrystalline particles of BaSO_4 , we use conditions that favor precipitate growth over nucleation. The buffer's high ionic strength and its acidity favors precipitate growth and prevents the formation of microcrystalline BaSO_4 .

2. Why is it important to use the same stirring rate and time for the samples and standards?

How fast and how long we stir the sample after adding BaCl_2 influence the size of the precipitate's particles.

3. Many natural waters have a slight color due to the presence of humic and fulvic acids, and may contain suspended matter (Figure 10.66). Explain why these might interfere with the analysis for sulfate. For each interferent, suggest a method for minimizing its effect on the analysis.

Suspended matter in the sample contributes to the scattering, resulting in a positive determinate error. We can eliminate this interference by filtering the sample prior to its analysis. A sample that is colored may absorb some of the source's radiation, leading to a positive determinate error. We can compensate for this interference by taking a sample through the analysis without adding BaCl_2 . Because no precipitate forms, we can use the transmittance of this sample blank to correct for the interference.

4. Why is Na_2SO_4 added to the buffer for samples containing $<10 \text{ mg SO}_4^{2-}/\text{L}$?

The uncertainty in a calibration curve is smallest near its center. If a sample has a high concentration of SO_4^{2-} , we can dilute it so that its concentration falls near the middle of the calibration curve. For a sample with a small concentration of SO_4^{2-} , the buffer increases the concentration of sulfate by

$$\frac{0.111 \text{ g Na}_2\text{SO}_4}{\text{L}} \times \frac{96.06 \text{ g SO}_4^{2-}}{142.04 \text{ g Na}_2\text{SO}_4} \times \frac{1000 \text{ mg}}{\text{g}} \times \frac{20.00 \text{ mL}}{250.0 \text{ mL}} = \frac{6.00 \text{ mg SO}_4^{2-}}{\text{L}}$$

After using the calibration curve to determine the amount of sulfate in the sample, subtracting $6.00 \text{ mg SO}_4^{2-}/\text{L}$ corrects the result.



Figure 10.66 Waterfall on the River Swale in Richmond, England. The river, which flows out of the moors in the Yorkshire Dales, is brown in color as the result of organic matter that leaches from the peat found in the moors.

Example 10.13

To evaluate the method described in [Representative Method 10.5](#), a series of external standard was prepared and analyzed, providing the results shown in the following table.

mg SO ₄ ²⁻ /L	transmittance
0.00	1.00
10.00	0.646
20.00	0.417
30.00	0.269
40.00	0.174

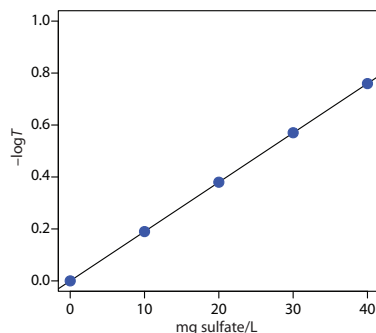
Analysis of a 100.0-mL sample of a surface water gives a transmittance of 0.538. What is the concentration of sulfate in the sample?

SOLUTION

Linear regression of $-\log T$ versus concentration of SO₄²⁻ gives a standardization equation of

$$-\log T = -1.04 \times 10^{-5} + 0.0190 \times \frac{\text{mg SO}_4^{2-}}{\text{L}}$$

Substituting the sample's transmittance into the calibration curve's equation gives the concentration of sulfate in sample as 14.2 mg SO₄²⁻/L.



As you review this chapter, try to define a key term in your own words. Check your answer by clicking on the key term, which will take you to the page where it was first introduced. Clicking on the **KEY TERM** there, will bring you back to this page so that you can continue with another key term.

10I Key Terms

absorbance	absorbance spectrum	absorptivity
amplitude	attenuated total reflectance	atomization
background correction	Beer's law	chemiluminescence
chromophore	continuum source	dark current
double-beam	effective bandwidth	electromagnetic radiation
electromagnetic spectrum	emission	emission spectrum
excitation spectrum	external conversion	Fellgett's advantage
fiber-optic probe	filter	filter photometer
fluorescence	fluorescent quantum yield	fluorimeter
frequency	graphite furnace	interferogram
interferometer	internal conversion	intersystem crossing
ionization suppressor	Jacquinet's advantage	lifetime
line source	method of continuous variations	molar absorptivity
mole-ratio method	monochromatic	monochromator
nephelometry	nominal wavelength	phase angle

phosphorescence	phosphorescent quantum yield	photodiode array
photoluminescence	photon	plasma
polychromatic	protecting agent	radiationless deactivation
relaxation	releasing agent	resolution
self-absorption	signal averaging	signal processor
signal-to-noise ratio	single-beam	singlet excited state
slope-ratio method	spectral searching	spectrofluorimeter
spectrophotometer	spectroscopy	stray radiation
transducer	transmittance	triplet excited state
turbidimetry	vibrational relaxation	wavelength
wavenumber		

10J Chapter Summary

The spectrophotometric methods of analysis covered in this chapter include those based on the absorption, emission, or scattering of electromagnetic radiation. When a molecule absorbs UV/Vis radiation it undergoes a change in its valence shell configuration. A change in vibrational energy results from the absorption of IR radiation. Experimentally we measure the fraction of radiation transmitted, T , by the sample. Instrumentation for measuring absorption requires a source of electromagnetic radiation, a means for selecting a wavelength, and a detector for measuring transmittance. Beer's law relates absorbance to both transmittance and to the concentration of the absorbing species ($A = -\log T = \epsilon bC$).

In atomic absorption we measure the absorption of radiation by gas phase atoms. Samples are atomized using thermal energy from either a flame or a graphite furnace. Because the width of an atom's absorption band is so narrow, the continuum sources common for molecular absorption can not be used. Instead, a hollow cathode lamp provides the necessary line source of radiation. Atomic absorption suffers from a number of spectral and chemical interferences. The absorption or scattering of radiation from the sample's matrix are important spectral interferences that may be minimized by background correction. Chemical interferences include the formation of nonvolatile forms of the analyte and ionization of the analyte. The former interference is minimized by using a releasing agent or a protecting agent, and an ionization suppressor helps minimize the latter interference.

When a molecule absorbs radiation it moves from a lower energy state to a higher energy state. In returning to the lower energy state the molecule may emit radiation. This process is called photoluminescence. One form of photoluminescence is fluorescence in which the analyte emits a photon without undergoing a change in its spin state. In phosphorescence, emission occurs with a change in the analyte's spin state. For low concentrations

of analyte, both fluorescent and phosphorescent emission intensities are a linear function of the analyte's concentration. Thermally excited atoms also emit radiation, forming the basis for atomic emission spectroscopy. Thermal excitation is achieved using either a flame or a plasma.

Spectroscopic measurements may also involve the scattering of light by a particulate form of the analyte. In turbidimetry, the decrease in the radiation's transmission through the sample is measured and related to the analyte's concentration through an equation similar to Beer's law. In nephelometry we measure the intensity of scattered radiation, which varies linearly with the analyte's concentration.

10K Problems

1. Provide the missing information in the following table.

wavelength (m)	frequency (s ⁻¹)	wavenumber (cm ⁻¹)	energy (J)
4.50×10^{-9}			
	1.33×10^{15}		
		3215	
			7.20×10^{-19}

2. Provide the missing information in the following table.

[analyte] (M)	absorbance	%T	molar absorptivity (M ⁻¹ cm ⁻¹)	pathlength (cm)
1.40×10^{-4}			1120	1.00
	0.563		750	1.00
2.56×10^{-4}	0.225		440	
1.55×10^{-3}	0.167			5.00
		33.3	565	1.00
4.35×10^{-3}		21.2	1550	
1.20×10^{-4}		81.3		10.00

3. A solution's transmittance is 35.0%. What is the transmittance if you dilute 25.0 mL of the solution to 50.0 mL?
4. A solution's transmittance is 85.0% when measured in a cell with a pathlength of 1.00 cm. What is the %T if you increase the pathlength to 10.00 cm?

5. The accuracy of a spectrophotometer can be evaluated by preparing a solution of 60.06 ppm $\text{K}_2\text{Cr}_2\text{O}_7$ in 0.0050 M H_2SO_4 , and measuring its absorbance at a wavelength of 350 nm in a cell with a pathlength of 1.00 cm. The absorbance should be 0.640. What is the molar absorptivity of $\text{K}_2\text{Cr}_2\text{O}_7$ at this wavelength?
6. A chemical deviation to Beer's law may occur if the concentration of an absorbing species is affected by the position of an equilibrium reaction. Consider a weak acid, HA, for which K_a is 2×10^{-5} . Construct Beer's law calibration curves of absorbance versus the total concentration of weak acid ($C_{\text{total}} = [\text{HA}] + [\text{A}^-]$), using values for C_{total} of 1×10^{-5} , 3×10^{-5} , 5×10^{-5} , 9×10^{-5} , 11×10^{-5} , and 13×10^{-5} M for the following sets of conditions:
- (a) $\epsilon_{\text{HA}} = \epsilon_{\text{A}^-} = 2000 \text{ M}^{-1} \text{ cm}^{-1}$; unbuffered solution.
- (b) $\epsilon_{\text{HA}} = 2000 \text{ M}^{-1} \text{ cm}^{-1}$ and $\epsilon_{\text{A}^-} = 500 \text{ M}^{-1} \text{ cm}^{-1}$; unbuffered solution.
- (c) $\epsilon_{\text{HA}} = 2000 \text{ M}^{-1} \text{ cm}^{-1}$ and $\epsilon_{\text{A}^-} = 500 \text{ M}^{-1} \text{ cm}^{-1}$; solution is buffered to a pH of 4.5.

Assume a constant pathlength of 1.00 cm for all samples.

7. One instrumental limitation to Beer's law is the effect of polychromatic radiation. Consider a line source that emits radiation at two wavelengths, λ' and λ'' . When treated separately, the absorbances at these wavelengths, A' and A'' , are

$$A' = -\log \frac{P_{\text{T}}'}{P_0'} = \epsilon' b C$$

$$A'' = -\log \frac{P_{\text{T}}''}{P_0''} = \epsilon'' b C$$

If both wavelengths are measured simultaneously the absorbance is

$$A = -\log \frac{(P_{\text{T}}' + P_{\text{T}}'')}{(P_0' + P_0'')}$$

- (a) Show that if the molar absorptivity at λ' and λ'' are the same ($\epsilon' = \epsilon'' = \epsilon$), the absorbance is equivalent to

$$A = \epsilon b C$$

- (b) Construct Beer's law calibration curves over the concentration range of zero to 1×10^{-4} M using $\epsilon' = 1000$ and $\epsilon'' = 1000$, and $\epsilon' = 1000$ and $\epsilon'' = 100$. Assume a value of 1.00 cm for the pathlength. Explain the difference between the two curves.

8. A second instrumental limitation to Beer's law is stray radiation. The following data were obtained using a cell with a pathlength of 1.00 cm when stray light is insignificant ($P_{\text{stray}} = 0$).

[analyte] (mM)	absorbance
0.00	0.00
2.00	0.40
4.00	0.80
6.00	1.20
8.00	1.60
10.00	2.00

Calculate the absorbance of each solution when P_{stray} is 5% of P_0 , and plot Beer's law calibration curves for both sets of data. Explain any differences between the two curves. (*Hint*: Assume that P_0 is 100).

9. In the process of performing a spectrophotometric determination of Fe, an analyst prepares a calibration curve using a single-beam spectrophotometer similar to that shown in [Figure 10.26](#). After preparing the calibration curve, the analyst drops and breaks the cuvette. The analyst acquires a new cuvette, measures the absorbance of his sample, and determines the %w/w Fe in the sample. Will the change in cuvette lead to a determinate error in the analysis? Explain.
10. The spectrophotometric methods for determining Mn in steel and for determining glucose use a chemical reaction to produce a colored species whose absorbance we can monitor. In the analysis of Mn in steel, colorless Mn^{2+} is oxidized to give the purple MnO_4^- ion. To analyze for glucose, which is colorless, we react it with a yellow colored solution of the $\text{Fe}(\text{CN})_6^{3-}$, forming the colorless $\text{Fe}(\text{CN})_6^{4-}$ ion. The directions for the analysis of Mn do not specify precise reaction conditions, and samples and standards may be treated separately. The conditions for the analysis of glucose, however, require that the samples and standards be treated simultaneously at exactly the same temperature and for exactly the same length of time. Explain why these two experimental procedures are so different.
11. One method for the analysis of Fe^{3+} , which can be used with a variety of sample matrices, is to form the highly colored Fe^{3+} -thioglycolic acid complex. The complex absorbs strongly at 535 nm. Standardizing the method is accomplished using external standards. A 10.00 ppm Fe^{3+} working standard is prepared by transferring a 10-mL aliquot of a 100.0 ppm stock solution of Fe^{3+} to a 100-mL volumetric flask and diluting to volume. Calibration standards of 1.00, 2.00, 3.00, 4.00, and 5.00 ppm are prepared by transferring appropriate amounts of the 10.0 ppm

working solution into separate 50-mL volumetric flasks, each containing 5 mL of thioglycolic acid, 2 mL of 20% w/v ammonium citrate, and 5 mL of 0.22 M NH_3 . After diluting to volume and mixing, the absorbances of the external standards are measured against an appropriate blank. Samples are prepared for analysis by taking a portion known to contain approximately 0.1 g of Fe^{3+} , dissolving in a minimum amount of HNO_3 , and diluting to volume in a 1-L volumetric flask. A 1.00-mL aliquot of this solution is transferred to a 50-mL volumetric flask, along with 5 mL of thioglycolic acid, 2 mL of 20% w/v ammonium citrate, and 5 mL of 0.22 M NH_3 and diluted to volume. The absorbance of this solution is used to determine the concentration of Fe^{3+} in the sample.

- (a) What is an appropriate blank for this procedure?
 - (b) Ammonium citrate is added to prevent the precipitation of Al^{3+} . What is the effect on the reported concentration of iron in the sample if there is a trace impurity of Fe^{3+} in the ammonium citrate?
 - (c) Why does the procedure specify that the sample contain approximately 0.1 g of Fe^{3+} ?
 - (d) Unbeknownst to the analyst, the 100-mL volumetric flask used to prepare the 10.00 ppm working standard of Fe^{3+} has a volume that is significantly smaller than 100.0 mL. What effect will this have on the reported concentration of iron in the sample?
12. A spectrophotometric method for the analysis of iron has a linear calibration curve for standards of 0.00, 5.00, 10.00, 15.00, and 20.00 mg Fe/L. An iron ore sample that is 40–60% w/w is to be analyzed by this method. An approximately 0.5-g sample is taken, dissolved in a minimum of concentrated HCl, and diluted to 1 L in a volumetric flask using distilled water. A 5.00 mL aliquot is removed with a pipet. To what volume—10, 25, 50, 100, 250, 500, or 1000 mL—should it be diluted to minimize the uncertainty in the analysis? Explain.
13. Lozano-Calero and colleagues describe a method for the quantitative analysis of phosphorous in cola beverages based on the formation of the intensely blue-colored phosphomolybdate complex, $(\text{NH}_4)_3[\text{PO}_4(\text{MoO}_3)_{12}]$.²¹ The complex is formed by adding $(\text{NH}_4)_6\text{Mo}_7\text{O}_{24}$ to the sample in the presence of a reducing agent, such as ascorbic acid. The concentration of the complex is determined spectrophotometrically at a wavelength of 830 nm, using a normal calibration curve as a method of standardization.

21 Lozano-Calero, D.; Martín-Palomeque, P.; Madueño-Loriguillo, S. *J. Chem. Educ.* **1996**, *73*, 1173–1174.

In a typical analysis, a set of standard solutions containing known amounts of phosphorous was prepared by placing appropriate volumes of a 4.00 ppm solution of P_2O_5 in a 5-mL volumetric flask, adding 2 mL of an ascorbic acid reducing solution, and diluting to volume with distilled water. Cola beverages were prepared for analysis by pouring a sample into a beaker and allowing it to stand for 24 h to expel the dissolved CO_2 . A 2.50-mL sample of the degassed sample was transferred to a 50-mL volumetric flask and diluted to volume. A 250- μ L aliquot of the diluted sample was then transferred to a 5-mL volumetric flask, treated with 2 mL of the ascorbic acid reducing solution, and diluted to volume with distilled water.

- The authors note that this method can be applied only to noncolored cola beverages. Explain why this is true.
- How might you modify this method so that it could be applied to any cola beverage?
- Why is it necessary to remove the dissolved gases?
- Suggest an appropriate blank for this method?
- The author's report a calibration curve of

$$A = -0.02 + 0.72 \times \text{ppm } P_2O_5$$

A sample of Crystal Pepsi, analyzed as described above, yields an absorbance of 0.565. What is the concentration of phosphorous, reported as ppm P, in the original sample of Crystal Pepsi?

14. EDTA forms colored complexes with a variety of metal ions that may serve as the basis for a quantitative spectrophotometric method of analysis. The molar absorptivities of the EDTA complexes of Cu^{2+} , Co^{2+} , and Ni^{2+} at three wavelengths are summarized in the following table (all values of ϵ are in $M^{-1} \text{ cm}^{-1}$).

metal	$\epsilon_{462.9}$	$\epsilon_{732.0}$	$\epsilon_{378.7}$
Co^{2+}	15.8	2.11	3.11
Cu^{2+}	2.32	95.2	7.73
Ni^{2+}	1.79	3.03	13.5

Using this information determine the following:

- The concentration of Cu^{2+} in a solution that has an absorbance of 0.338 at a wavelength of 732.0 nm.
- The concentrations of Cu^{2+} and Co^{2+} in a solution that has an absorbance of 0.453 at a wavelength of 732.0 nm and 0.107 at a wavelength of 462.9 nm.

Crystal Pepsi was a colorless, caffeine-free soda produced by PepsiCo. It was available in the United States from 1992 to 1993.

- (c) The concentrations of Cu^{2+} , Co^{2+} , and Ni^{2+} in a sample that has an absorbance of 0.423 at a wavelength of 732.0 nm, 0.184 at a wavelength of 462.9 nm, and 0.291 at a wavelength of 378.7 nm.

The pathlength, b , is 1.00 cm for all measurements.

15. The concentration of phenol in a water sample is determined by separating the phenol from non-volatile impurities by steam distillation, followed by reacting with 4-aminoantipyrine and $\text{K}_3\text{Fe}(\text{CN})_6$ at pH 7.9 to form a colored antipyrine dye. A phenol standard with a concentration of 4.00 ppm has an absorbance of 0.424 at a wavelength of 460 nm using a 1.00 cm cell. A water sample is steam distilled and a 50.00-mL aliquot of the distillate is placed in a 100-mL volumetric flask and diluted to volume with distilled water. The absorbance of this solution is found to be 0.394. What is the concentration of phenol (in parts per million) in the water sample?
16. Saito describes a quantitative spectrophotometric procedure for iron based on a solid-phase extraction using bathophenanthroline in a poly(vinyl chloride) membrane.²² In the absence of Fe^{2+} the membrane is colorless, but when immersed in a solution of Fe^{2+} and I^- , the membrane develops a red color as a result of the formation of an Fe^{2+} -bathophenanthroline complex. A calibration curve determined using a set of external standards with known concentrations of Fe^{2+} gave a standardization relationship of

$$A = (8.60 \times 10^3 \text{ M}^{-1}) \times [\text{Fe}^{2+}]$$

What is the concentration of iron, in mg Fe/L, for a sample with an absorbance of 0.100?

17. In the DPD colorimetric method for the free chlorine residual, which is reported as mg Cl_2/L , the oxidizing power of free chlorine converts the colorless amine N,N-diethyl-*p*-phenylenediamine to a colored dye that absorbs strongly over the wavelength range of 440–580 nm. Analysis of a set of calibration standards gave the following results.

mg Cl_2/L	absorbance
0.00	0.000
0.50	0.270
1.00	0.543
1.50	0.813
2.00	1.084

A sample from a public water supply is analyzed to determine the free chlorine residual, giving an absorbance of 0.113. What is the free chlorine residual for the sample in mg Cl_2/L ?

18. Lin and Brown described a quantitative method for methanol based on its effect on the visible spectrum of methylene blue.²³ In the absence of methanol, the visible spectrum for methylene blue shows two prominent absorption bands centered at approximately 610 nm and 660 nm, corresponding to the monomer and dimer, respectively. In the presence of methanol, the intensity of the dimer's absorption band decreases, while that of the monomer increases. For concentrations of methanol between 0 and 30% v/v, the ratio of the absorbance at 663 nm, A_{663} , to that at 610 nm, A_{610} , is a linear function of the amount of methanol. Using the following standardization data, determine the %v/v methanol in a sample for which A_{610} is 0.75 and A_{663} is 1.07.

%v/v methanol	A_{663}/A_{610}
0.0	1.21
5.0	1.29
10.0	1.42
15.0	1.52
20.0	1.62
25.0	1.74
30.0	1.84

19. The concentration of the barbiturate barbital in a blood sample was determined by extracting 3.00 mL of blood with 15 mL of CHCl_3 . The chloroform, which now contains the barbital, is extracted with 10.0 mL of 0.45 M NaOH (pH \approx 13). A 3.00-mL sample of the aqueous extract is placed in a 1.00-cm cell and an absorbance of 0.115 is measured. The pH of the sample in the absorption cell is then adjusted to approximately 10 by adding 0.5 mL of 16% w/v NH_4Cl , giving an absorbance of 0.023. When 3.00 mL of a standard barbital solution with a concentration of 3 mg/100 mL is taken through the same procedure, the absorbance at pH 13 is 0.295 and the absorbance at a pH of 10 is 0.002. Report the mg barbital/100 mL in the sample.
20. Jones and Thatcher developed a spectrophotometric method for analyzing analgesic tablets containing aspirin, phenacetin, and caffeine.²⁴ The sample is dissolved in CHCl_3 and extracted with an aqueous solution of NaHCO_3 to remove the aspirin. After the extraction is complete, the chloroform is transferred to a 250-mL volumetric flask and diluted to volume with CHCl_3 . A 2.00-mL portion of this solution is diluted to volume in a 200-mL volumetric flask with CHCl_3 . The absorbance of

²³ Lin, J.; Brown, C. W. *Spectroscopy* **1995**, 10(5), 48–51.

²⁴ Jones, M.; Thatcher, R. L. *Anal. Chem.* **1951**, 23, 957–960.

the final solution is measured at wavelengths of 250 nm and 275 nm, at which the absorptivities, in $\text{ppm}^{-1} \text{cm}^{-1}$, for caffeine and phenacetin are

	a_{250}	a_{275}
caffeine	0.0131	0.0485
phenacetin	0.0702	0.0159

Aspirin is determined by neutralizing the NaHCO_3 in the aqueous solution and extracting the aspirin into CHCl_3 . The combined extracts are diluted to 500 mL in a volumetric flask. A 20.00-mL portion of the solution is placed in a 100-mL volumetric flask and diluted to volume with CHCl_3 . The absorbance of this solution is measured at 277 nm, where the absorptivity of aspirin is $0.00682 \text{ ppm}^{-1} \text{cm}^{-1}$. An analgesic tablet treated by this procedure is found to have absorbances of 0.466 at 250 nm, 0.164 at 275 nm, and 0.600 at 277 nm when using a cell with a 1.00 cm pathlength. Report the milligrams of aspirin, caffeine, and phenacetin in the analgesic tablet.

21. The concentration of SO_2 in a sample of air was determined by the *p*-rosaniline method. The SO_2 was collected in a 10.00-mL solution of HgCl_4^{2-} , where it reacts to form $\text{Hg}(\text{SO}_3)_2^{2-}$, by pulling the air through the solution for 75 min at a rate of 1.6 L/min. After adding *p*-rosaniline and formaldehyde, the colored solution was diluted to 25 mL in a volumetric flask. The absorbance was measured at 569 nm in a 1-cm cell, yielding a value of 0.485. A standard sample was prepared by substituting a 1.00-mL sample of a standard solution containing the equivalent of 15.00 ppm SO_2 for the air sample. The absorbance of the standard was found to be 0.181. Report the concentration of SO_2 in the air in mg SO_2/L . The density of air is 1.18 g/liter.
22. Seaholtz and colleagues described a method for the quantitative analysis of CO in automobile exhaust based on the measurement of infrared radiation at 2170 cm^{-1} .²⁵ A calibration curve was prepared by filling a 10-cm IR gas cell with a known pressure of CO and measuring the absorbance using an FT-IR. The standardization relationship was found to be

$$A = -1.1 \times 10^{-4} + (9.9 \times 10^{-4}) \times P_{\text{CO}}$$

Samples were prepared by using a vacuum manifold to fill the gas cell. After measuring the total pressure, the absorbance of the sample at 2170 cm^{-1} was measured. Results are reported as %CO ($P_{\text{CO}}/P_{\text{total}}$). The analysis of five exhaust samples from a 1973 coupe give the following results.

25 Seaholtz, M. B.; Pence, L. E.; Moe, O. A. Jr. *J. Chem. Educ.* **1988**, *65*, 820–823.

P_{total} (torr)	absorbance
595	0.1146
354	0.0642
332	0.0591
233	0.0412
143	0.0254

Determine the %CO for each sample, and report the mean value and the 95% confidence interval.

23. [Figure 10.32](#) shows an example of a disposable IR sample card made using a thin sheet of polyethylene. To prepare an analyte for analysis, it is dissolved in a suitable solvent and a portion of the sample placed on the IR card. After the solvent evaporates, leaving the analyte behind as a thin film, the sample's IR spectrum is obtained. Because the thickness of the polyethylene film is not uniform, the primary application of IR cards is for a qualitative analysis. Zhao and Malinowski reported how an internal standardization with KSCN can be used for a quantitative IR analysis of polystyrene.²⁶ Polystyrene was monitored at 1494 cm^{-1} and KSCN at 2064 cm^{-1} . Standard solutions were prepared by placing weighed portions of polystyrene in a 10-mL volumetric flask and diluting to volume with a solution of 10 g/L KSCN in methyl isobutyl ketone. A typical set of results is shown here.

g polystyrene	0.1609	0.3290	0.4842	0.6402	0.8006
A_{1494}	0.0452	0.1138	0.1820	0.3275	0.3195
A_{2064}	0.1948	0.2274	0.2525	0.3580	0.2703

When a 0.8006-g sample of a poly(styrene/maleic anhydride) copolymer was analyzed, the following results were obtained.

replicate	A_{1494}	A_{2064}
1	0.2729	0.3582
2	0.2074	0.2820
3	0.2785	0.3642

What is the %w/w polystyrene in the copolymer? Given that the reported %w/w polystyrene is 67%, is there any evidence for a determinate error at $\alpha = 0.05$?

24. The following table lists molar absorptivities for the Arsenazo complexes of copper and barium.²⁷ Suggest appropriate wavelengths for analyzing mixtures of copper and barium using their Arsenazo complexes.

²⁶ Zhao, Z.; Malinowski, E. R. *Spectroscopy* **1996**, 11(7), 44–49.

²⁷ Grossman, O.; Turanov, A. N. *Anal. Chim. Acta* **1992**, 257, 195–202.

wavelength (nm)	ϵ_{Cu} ($\text{M}^{-1} \text{cm}^{-1}$)	ϵ_{Ba} ($\text{M}^{-1} \text{cm}^{-1}$)
595	11900	7100
600	15500	7200
607	18300	7400
611	19300	6900
614	19300	7000
620	17800	7100
626	16300	8400
635	10900	9900
641	7500	10500
645	5300	10000
650	3500	8600
655	2200	6600
658	1900	6500
665	1500	3900
670	1500	2800
680	1800	1500

25. Blanco and colleagues report several applications of multiwavelength linear regression analysis for the simultaneous determination of two-component mixtures.⁹ For each of the following, determine the molar concentration of each analyte in the mixture.

- (a) Titanium and vanadium were determined by forming complexes with H_2O_2 . Results for a mixture of Ti(IV) and V(V) and for standards of 63.1 ppm Ti(IV) and 96.4 ppm V(V) are listed in the following table.

wavelength (nm)	absorbance		
	Ti(V) standard	V(V) standard	mixture
390	0.895	0.326	0.651
430	0.884	0.497	0.743
450	0.694	0.528	0.665
470	0.481	0.512	0.547
510	0.173	0.374	0.314

- (b) Copper and zinc were determined by forming colored complexes with 2-pyridyl-azo-resorcinol (PAR). The absorbances for PAR, a mixture of Cu^{2+} and Zn^{2+} , and standards of 1.00 ppm Cu^{2+} and 1.00 ppm Zn^{2+} are listed in the following table. Note that you must correct the absorbances for the metal for the contribution from PAR.

wavelength (nm)	PAR	absorbance		
		Cu standard	Zn standard	mixture
480	0.211	0.698	0.971	0.656
496	0.137	0.732	1.018	0.668
510	0.100	0.732	0.891	0.627
526	0.072	0.602	0.672	0.498
540	0.056	0.387	0.306	0.290

26. The stoichiometry of a metal–ligand complex, ML_n , was determined by the method of continuous variations. A series of solutions was prepared in which the combined concentrations of M and L were held constant at 5.15×10^{-4} M. The absorbances of these solutions were measured at a wavelength where only the metal–ligand complex absorbs. Using the following data, determine the formula of the metal–ligand complex.

mole fraction M	mole fraction L	absorbance
1.0	0.0	0.001
0.9	0.1	0.126
0.8	0.2	0.260
0.7	0.3	0.389
0.6	0.4	0.515
0.5	0.5	0.642
0.4	0.6	0.775
0.3	0.7	0.771
0.2	0.8	0.513
0.1	0.9	0.253
0.0	1.0	0.000

27. The stoichiometry of a metal–ligand complex, ML_n , was determined by the mole-ratio method. A series of solutions was prepared in which the concentration of metal was held constant at 3.65×10^{-4} M, and the ligand's concentration was varied from 1×10^{-4} M to 1×10^{-3} M. Using the following data, determine the stoichiometry of the metal–ligand complex.

[ligand] (M)	absorbance
1.0×10^{-4}	0.122
2.0×10^{-4}	0.251
3.0×10^{-4}	0.376
4.0×10^{-4}	0.496
5.0×10^{-4}	0.625
6.0×10^{-4}	0.752

7.0×10^{-4}	0.873
8.0×10^{-4}	0.937
9.0×10^{-4}	0.962
1.0×10^{-3}	1.002

28. The stoichiometry of a metal–ligand complex, ML_n , was determined by the slope-ratio method. Two sets of solutions were prepared. For the first set of solutions the concentration of the metal was held constant at 0.010 M and the concentration of the ligand was varied. When the absorbance of these solutions was measured at a wavelength where only the metal–ligand complex absorbs, the following data were obtained.

[ligand] (M)	absorbance
1.0×10^{-5}	0.012
2.0×10^{-5}	0.029
3.0×10^{-5}	0.042
4.0×10^{-5}	0.055
5.0×10^{-5}	0.069

For the second set of solutions the concentration of the ligand was held constant at 0.010 M, and the concentration of the metal was varied, yielding the following absorbances.

[metal] (M)	absorbance
1.0×10^{-5}	0.040
2.0×10^{-5}	0.085
3.0×10^{-5}	0.125
4.0×10^{-5}	0.162
5.0×10^{-5}	0.206

Using this data, determine the stoichiometry of the metal–ligand complex.

29. Kawakami and Igarashi developed a spectrophotometric method for nitrite based on its reaction with 5, 10, 15, 20-tetrakis(4-aminophenyl) porphyrine (TAPP). As part of their study they investigated the stoichiometry of the reaction between TAPP and NO_2^- . The following data are derived from a figure in their paper.²⁸

[TAPP] (M)	$[\text{NO}_2^-]$ (M)	absorbance
8.0×10^{-7}	1.6×10^{-7}	0.227
8.0×10^{-7}	3.2×10^{-7}	0.192

28 Kawakami, T.; Igarashi, S. *Anal. Chim. Acta* **1996**, *33*, 175–180.

8.0×10^{-7}	4.8×10^{-7}	0.158
8.0×10^{-7}	8.0×10^{-7}	0.126
8.0×10^{-7}	1.6×10^{-6}	0.065
8.0×10^{-7}	2.4×10^{-6}	0.047
8.0×10^{-7}	3.2×10^{-6}	0.042
8.0×10^{-7}	4.0×10^{-6}	0.042

What is the stoichiometry of the reaction?

30. The equilibrium constant for an acid–base indicator is determined by preparing three solutions, each of which has a total indicator concentration of 1.35×10^{-5} M. The pH of the first solution is adjusted until it is acidic enough to ensure that only the acid form of the indicator is present, yielding an absorbance of 0.673. The absorbance of the second solution, whose pH is adjusted to give only the base form of the indicator, is 0.118. The pH of the third solution is adjusted to 4.17 and has an absorbance of 0.439. What is the acidity constant for the acid–base indicator?
31. The acidity constant for an organic weak acid was determined by measuring its absorbance as a function of pH while maintaining a constant total concentration of the acid. Using the data in the following table, determine the acidity constant for the organic weak acid.

pH	absorbance
1.53	0.010
2.20	0.010
3.66	0.035
4.11	0.072
4.35	0.103
4.75	0.169
4.88	0.193
5.09	0.227
5.69	0.288
7.20	0.317
7.78	0.317

32. Suppose you need to prepare a set of calibration standards for the spectrophotometric analysis of an analyte that has a molar absorptivity of $1138 \text{ M}^{-1} \text{ cm}^{-1}$ at a wavelength of 625 nm. To maintain an acceptable precision for the analysis, the %T for the standards should be between 15% and 85%.

- (a) What is the concentration of the most concentrated and the least concentrated standard you should prepare, assuming a 1.00-cm sample cell.
- (b) Explain how you will analyze samples with concentrations that are 10 μM , 0.1 mM, and 1.0 mM in the analyte.
33. When using a spectrophotometer whose precision is limited by the uncertainty of reading %T, the analysis of highly absorbing solutions can lead to an unacceptable level of indeterminate errors. Consider the analysis of a sample for which the molar absorptivity is $1.0 \times 10^4 \text{ M}^{-1} \text{ cm}^{-1}$ and the pathlength is 1.00 cm.
- (a) What is the relative uncertainty in concentration for an analyte whose concentration is $2.0 \times 10^{-4} \text{ M}$ if s_T is ± 0.002 ?
- (b) What is the relative uncertainty in the concentration if the spectrophotometer is calibrated using a blank consisting of a $1.0 \times 10^{-4} \text{ M}$ solution of the analyte?
34. Hobbins reported the following calibration data for the flame atomic absorption analysis for phosphorous.²⁹

mg P/L	absorbance
2130	0.048
4260	0.110
6400	0.173
8530	0.230

To determine the purity of a sample of Na_2HPO_4 , a 2.469-g sample is dissolved and diluted to volume in a 100-mL volumetric flask. Analysis of the resulting solution gives an absorbance of 0.135. What is the purity of the Na_2HPO_4 ?

35. Bonert and Pohl reported results for the atomic absorption analysis of several metals in the caustic suspensions produced during the manufacture of soda by the ammonia-soda process.³⁰
- (a) The concentration of Cu was determined by acidifying a 200-mL sample of the caustic solution with 20 mL of concentrated HNO_3 , adding 1 mL of 27% w/v H_2O_2 , and boiling for 30 min. The resulting solution was diluted to 500 mL, filtered, and analyzed by flame atomic absorption using matrix matched standards. The results for a typical analysis are shown in the following table.

²⁹ Hobbins, W. B. "Direct Determination of Phosphorous in Aqueous Matrices by Atomic Absorption," Varian Instruments at Work, Number AA-19, February 1982.

³⁰ Bonert, K.; Pohl, B. "The Determination of Cd, Cr, Cu, Ni, and Pb in Concentrated $\text{CaCl}_2/\text{NaCl}$ solutions by AAS," AA Instruments at Work (Varian) Number 98, November, 1990.

solution	mg Cu/L	absorbance
blank	0.000	0.007
standard 1	0.200	0.014
standard 2	0.500	0.036
standard 3	1.000	0.072
standard 4	2.000	0.146
sample		0.027

Determine the concentration of Cu in the caustic suspension.

- (b) The determination of Cr was accomplished by acidifying a 200-mL sample of the caustic solution with 20 mL of concentrated HNO₃, adding 0.2 g of Na₂SO₃ and boiling for 30 min. The Cr was isolated from the sample by adding 20 mL of NH₃, producing a precipitate that includes the chromium as well as other oxides. The precipitate was isolated by filtration, washed, and transferred to a beaker. After acidifying with 10 mL of HNO₃, the solution was evaporated to dryness. The residue was redissolved in a combination of HNO₃ and HCl and evaporated to dryness. Finally, the residue was dissolved in 5 mL of HCl, filtered, diluted to volume in a 50-mL volumetric flask, and analyzed by atomic absorption using the method of standard additions. The atomic absorption results are summarized in the following table.

sample	mg Cr _{added} /L	absorbance
blank		0.001
sample		0.045
standard addition 1	0.200	0.083
standard addition 2	0.500	0.118
standard addition 3	1.000	0.192

Report the concentration of Cr in the caustic suspension.

36. Quigley and Vernon report results for the determination of trace metals in seawater using a graphite furnace atomic absorption spectrophotometer and the method of standard additions.³¹ The trace metals were first separated from their complex, high-salt matrix by coprecipitating with Fe³⁺. In a typical analysis a 5.00-mL portion of 2000 ppm Fe³⁺ was added to 1.00 L of seawater. The pH was adjusted to 9 using NH₄OH, and the precipitate of Fe(OH)₃ allowed to stand overnight. After isolating and rinsing the precipitate, the Fe(OH)₃ and coprecipitated metals were dissolved in 2 mL of concentrated HNO₃ and diluted to volume in a 50-mL volumetric flask. To analyze for Mn²⁺, a 1.00-mL sample of this solution was diluted to 100 mL in a volumetric flask. The following samples were injected into the graphite furnace and analyzed.

31 Quigley, M. N.; Vernon, F. J. *Chem. Educ.* **1996**, *73*, 671–673.

sample	absorbance
2.5- μL sample + 2.5 μL of 0 ppb Mn^{2+}	0.223
2.5- μL sample + 2.5 μL of 2.5 ppb Mn^{2+}	0.294
2.5- μL sample + 2.5 μL of 5.0 ppb Mn^{2+}	0.361

Report the parts per billion Mn^{2+} in the sample of seawater.

37. The concentration of Na in plant materials may be determined by flame atomic emission. The material to be analyzed is prepared by grinding, homogenizing, and drying at 103 °C. A sample of approximately 4 g is transferred to a quartz crucible and heated on a hot plate to char the organic material. The sample is heated in a muffle furnace at 550 °C for several hours. After cooling to room temperature the residue is dissolved by adding 2 mL of 1:1 HNO_3 and evaporated to dryness. The residue is redissolved in 10 mL of 1:9 HNO_3 , filtered and diluted to 50 mL in a volumetric flask. The following data were obtained during a typical analysis for the concentration of Na in a 4.0264-g sample of oat bran.

sample	mg Na/L	emission (arbitrary units)
blank	0.00	0.0
standard 1	2.00	90.3
standard 2	4.00	181
standard 3	6.00	272
standard 4	8.00	363
standard 5	10.00	448
sample		238

Determine the mg Na/L in the sample of oat bran.

38. Gluodenis describes the use of ICP atomic emission to analyze samples of brass for Pb and Ni.³² The analysis for Pb uses external standards prepared from brass samples containing known amounts of lead. Results are shown in the following table.

%w/w Pb	emission intensity
0.000	4.29×10^4
0.0100	1.87×10^5
0.0200	3.20×10^5
0.0650	1.28×10^6
0.350	6.22×10^6
0.700	1.26×10^7

32 Gluodenis, T. J. Jr. *Am. Lab.* November 1998, 245–275.

1.04	1.77×10^7
2.24	3.88×10^7
3.15	5.61×10^7
9.25	1.64×10^8

What is the %w/w Pb in a sample of brass that gives an emission intensity of 9.25×10^4 ?

The analysis for Ni uses an internal standard. Results for a typical calibration are shown in the following table.

% w/w Ni	emission intensity ratio
0.000	0.00267
0.0140	0.00154
0.0330	0.00312
0.130	0.120
0.280	0.246
0.280	0.247
0.560	0.533
1.30	1.20
4.82	4.44

What is the %w/w Ni in a sample for which the ratio of emission intensity is 1.10×10^{-3} ?

39. Yan and colleagues developed a method for the analysis of iron based on its formation of a fluorescent metal–ligand complex with the ligand 5-(4-methylphenylazo)-8-aminoquinoline.³³ In the presence of the surfactant cetyltrimethyl ammonium bromide the analysis is carried out using an excitation wavelength of 316 nm with emission monitored at 528 nm. Standardization with external standards gives the following calibration curve.

$$I_f = -0.03 + 1.594 \times \frac{\text{mg Fe}^{3+}}{\text{L}}$$

A 0.5113-g sample of dry dog food was ashed to remove organic materials, and the residue dissolved in a small amount of HCl and diluted to volume in a 50-mL volumetric flask. Analysis of the resulting solution gave a fluorescent emission intensity of 5.72. Determine the mg Fe/L in the sample of dog food.

40. A solution of 5.00×10^{-5} M 1,3-dihydroxynaphthelene in 2 M NaOH has a fluorescence intensity of 4.85 at a wavelength of 459 nm. What

33 Yan, G.; Shi, G.; Liu, Y. *Anal. Chim. Acta* **1992**, *264*, 121–124.

is the concentration of 1,3-dihydroxynaphthelene in a solution with a fluorescence intensity of 3.74 under identical conditions?

41. The following data was recorded for the phosphorescence intensity for several standard solutions of benzo[a]pyrene.

[benzo[a]pyrene] (M)	emission intensity
0	0.00
1.00×10^{-5}	0.98
3.00×10^{-5}	3.22
6.00×10^{-5}	6.25
1.00×10^{-4}	10.21

What is the concentration of benzo[a]pyrene in a sample yielding a phosphorescent emission intensity of 4.97?

42. The concentration of acetylsalicylic acid, $C_9H_8O_4$, in aspirin tablets can be determined by hydrolyzing to the salicylate ion, $C_7H_5O_2^-$, and determining the concentration of the salicylate ion spectrofluorometrically. A stock standard solution is prepared by weighing 0.0774 g of salicylic acid, $C_7H_6O_2$, into a 1-L volumetric flask and diluting to volume with distilled water. A set of calibration standards is prepared by pipeting 0, 2.00, 4.00, 6.00, 8.00, and 10.00 mL of the stock solution into separate 100-mL volumetric flasks containing 2.00 mL of 4 M NaOH and diluting to volume with distilled water. The fluorescence of the calibration standards was measured at an emission wavelength of 400 nm using an excitation wavelength of 310 nm; results are listed in the following table.

mL of stock solution	emission intensity
0.00	0.00
2.00	3.02
4.00	5.98
6.00	9.18
8.00	12.13
10.00	14.96

Several aspirin tablets are ground to a fine powder in a mortar and pestle. A 0.1013-g portion of the powder is placed in a 1-L volumetric flask and diluted to volume with distilled water. A portion of this solution is filtered to remove insoluble binders and a 10.00-mL aliquot transferred to a 100-mL volumetric flask containing 2.00 mL of 4 M NaOH. After diluting to volume the fluorescence of the resulting solution is found to be 8.69. What is the %w/w acetylsalicylic acid in the aspirin tablets?

43. Selenium (IV) in natural waters can be determined by complexing with ammonium pyrrolidine dithiocarbamate and extracting into CHCl_3 . This step serves to concentrate the Se(IV) and to separate it from Se(VI). The Se(IV) is then extracted back into an aqueous matrix using HNO_3 . After complexing with 2,3-diaminonaphthalene, the complex is extracted into cyclohexane. Fluorescence is measured at 520 nm following its excitation at 380 nm. Calibration is achieved by adding known amounts of Se(IV) to the water sample before beginning the analysis. Given the following results what is the concentration of Se(IV) in the sample.

[Se (IV)] added (nM)	emission intensity
0.00	323
2.00	597
4.00	862
6.00	1123

44. Fibrinogen is a protein that is produced by the liver and found in human plasma. Its concentration in plasma is clinically important. Many of the analytical methods used to determine the concentration of fibrinogen in plasma are based on light scattering following its precipitation. For example, da Silva and colleagues describe a method in which fibrinogen precipitates in the presence of ammonium sulfate in a guanidine hydrochloride buffer.³⁴ Light scattering is measured nephelometrically at a wavelength of 340 nm. Analysis of a set of external calibration standards gives the following calibration equation

$$I_s = -4.66 + 9907.63 \times C$$

where I_s is the intensity of scattered light and C is the concentration of fibrinogen in g/L. A 9.00-mL sample of plasma was collected from a patient and mixed with 1.00 mL of an anticoagulating agent. A 1.00-mL aliquot of this solution was then diluted to 250 mL in a volumetric flask. Analysis of the resulting solution gave a scattering intensity of 44.70. What is the concentration of fibrinogen, in gram per liter, in the plasma sample?

10L Solutions to Practice Exercises

Practice Exercise 10.1

The frequency and wavenumber for the line are

$$\nu = \frac{c}{\lambda} = \frac{3.00 \times 10^8 \text{ m/s}}{656.3 \times 10^{-9} \text{ m}} = 4.57 \times 10^{14} \text{ s}^{-1}$$

³⁴ da Silva, M. P.; Fernandez-Romero, J. M.; Luque de Castro, M. D. *Anal. Chim. Acta* **1996**, 327, 101–106.

$$\bar{\nu} = \frac{1}{\lambda} = \frac{1}{656.3 \times 10^{-9} \text{ m}} \times \frac{1 \text{ m}}{100 \text{ cm}} = 1.524 \times 10^4 \text{ cm}^{-1}$$

Click [here](#) to return to the chapter.

Practice Exercise 10.2

The photon's energy is

$$E = \frac{hc}{\lambda} = \frac{(6.626 \times 10^{-34} \text{ J} \cdot \text{s})(3.00 \times 10^8 \text{ m/s})}{656.3 \times 10^{-9} \text{ m}} = 3.03 \times 10^{-19} \text{ J}$$

Click [here](#) to return to the chapter.

Practice Exercise 10.3

To find the transmittance, T , we begin by noting that

$$A = 1.27 = -\log T$$

Solving for T

$$-1.27 = \log T$$

$$10^{-1.27} = T$$

gives a transmittance of 0.054, or a %T of 5.4%.

Click [here](#) to return to the chapter.

Practice Exercise 10.4

Making appropriate substitutions into Beer's law

$$A = 0.228 = \epsilon bC = (676 \text{ M}^{-1} \text{ cm}^{-1})(1 \text{ cm})C$$

and solving for C gives a concentration of $3.37 \times 10^{-4} \text{ M}$.

Click [here](#) to return to the chapter.

Practice Exercise 10.5

For this standard addition we can write the following equations relating absorbance to the concentration of Cu^{2+} in the sample. First, for the sample, we have

$$0.118 = \epsilon b C_{\text{Cu}}$$

and for the standard addition we have

$$0.162 = \epsilon b \left(C_{\text{Cu}} + \frac{20.00 \text{ mg Cu}}{\text{L}} \times \frac{1.00 \text{ mL}}{10.00 \text{ mL}} \right)$$

The value of ϵb is the same in both equation. Solving each equation for ϵb and equating

$$\frac{0.162}{C_{\text{Cu}} + \frac{20.00 \text{ mg Cu}}{\text{L}} \times \frac{1.00 \text{ mL}}{10.00 \text{ mL}}} = \frac{0.118}{C_{\text{Cu}}}$$

leaves us with an equation in which C_{Cu} is the only variable. Solving for C_{Cu} gives its value as

$$\frac{0.162}{C_{\text{Cu}} + 2.00 \text{ mg Cu/L}} = \frac{0.118}{C_{\text{Cu}}}$$

$$0.162C_{\text{Cu}} = 0.118C_{\text{Cu}} + 0.236 \text{ mg Cu/L}$$

$$0.044C_{\text{Cu}} = 0.236 \text{ mg Cu/L}$$

$$C_{\text{Cu}} = 5.4 \text{ mg Cu/L}$$

Click [here](#) to return to the chapter.

Practice Exercise 10.6

Substituting into [equation 10.11](#) and [equation 10.12](#) gives

$$A_{400} = 0.336 = 15.2C_{\text{Cr}} + 5.60C_{\text{Co}}$$

$$A_{505} = 0.187 = 0.533C_{\text{Cr}} + 5.07C_{\text{Co}}$$

To determine C_{Cr} and C_{Co} we solve the first equation for C_{Co}

$$C_{\text{Co}} = \frac{0.336 - 15.2C_{\text{Cr}}}{5.60}$$

and substitute the result into the second equation.

$$0.187 = 0.533C_{\text{Cr}} + 5.07 \times \frac{0.336 - 15.2C_{\text{Cr}}}{5.60} = 0.3042 - 13.23C_{\text{Cr}}$$

Solving for C_{Cr} gives the concentration of Cr^{3+} as 8.86×10^{-3} M. Substituting this concentration back into the equation for the mixture's absorbance at 400 nm gives the concentration of Co^{2+} as 3.60×10^{-2} M.

Click [here](#) to return to the chapter.

Practice Exercise 10.7

Letting X represent MnO_4^- and Y represent $\text{Cr}_2\text{O}_7^{2-}$, we plot the equation

$$\frac{A_{\text{mix}}}{A_{\text{SX}}} = \frac{C_{\text{X}}}{C_{\text{SX}}} + \frac{C_{\text{Y}}}{C_{\text{SY}}} \times \frac{A_{\text{SY}}}{A_{\text{SX}}}$$

placing $A_{\text{mix}}/A_{\text{SX}}$ on the y -axis and $A_{\text{SY}}/A_{\text{SX}}$ on the x -axis. For example, at a wavelength of 266 nm the value $A_{\text{mix}}/A_{\text{SX}}$ of is 0.766/0.042, or 18.2, and the value of $A_{\text{SY}}/A_{\text{SX}}$ is 0.410/0.042, or 9.76. Completing the calculations for all wavelengths and plotting the data gives the result shown in Figure 10.67. Fitting a straight-line to the data gives a regression model of

$$\frac{A_{\text{mix}}}{A_{\text{SX}}} = 0.8147 + 1.7839 \times \frac{A_{\text{SY}}}{A_{\text{SX}}}$$

Using the y -intercept, the concentration of MnO_4^- is

$$\frac{C_{\text{X}}}{C_{\text{SX}}} = \frac{[\text{MnO}_4^-]}{1.0 \times 10^{-4} \text{ M MnO}_4^-} = 0.8147$$

or $8.15 \times 10^{-5} \text{ M MnO}_4^-$, and using the slope, the concentration of $\text{Cr}_2\text{O}_7^{2-}$ is

$$\frac{C_{\text{Y}}}{C_{\text{SY}}} = \frac{[\text{Cr}_2\text{O}_7^{2-}]}{1.0 \times 10^{-4} \text{ M Cr}_2\text{O}_7^{2-}} = 1.7839$$

or $1.78 \times 10^{-4} \text{ M Cr}_2\text{O}_7^{2-}$.

Click [here](#) to return to the chapter.

Practice Exercise 10.8

Figure 10.68 shows a continuous variations plot for the data in this exercise. Although the individual data points show substantial curvature—enough curvature that there is little point in trying to draw linear branches for excess metal and excess ligand—the maximum absorbance clearly occurs at an X_{L} of approximately 0.5. The complex's stoichiometry, therefore, is $\text{Fe}(\text{SCN})^{2+}$.

Click [here](#) to return to the chapter.

Practice Exercise 10.9

The value of K_{a} is

$$K_{\text{a}} = (1.00 \times 10^{-6}) \times \frac{0.225 - 0.000}{0.680 - 0.225} = 4.95 \times 10^{-7}$$

Click [here](#) to return to the chapter.

Practice Exercise 10.10

To determine K_{a} we use [equation 10.21](#), plotting $\log[(A - A_{\text{HIn}})/(A_{\text{In}} - A)]$ versus pH, as shown in Figure 10.69. Fitting a straight-line to the data gives a regression model of

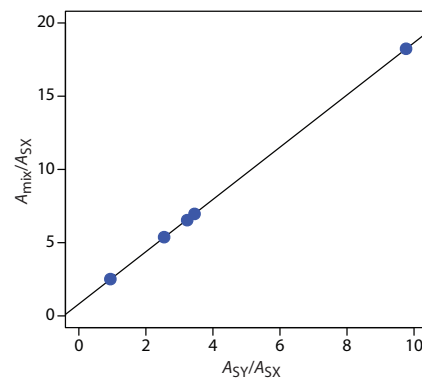


Figure 10.67 Multiwavelength linear regression analysis for the data in Practice Exercise 10.7.

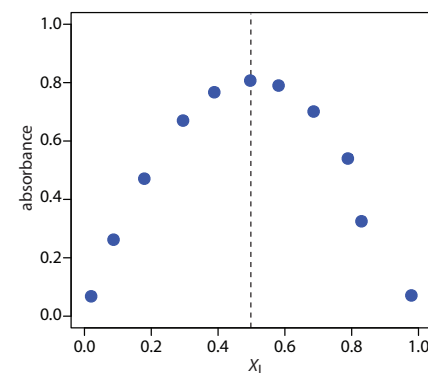


Figure 10.68 Continuous variations plot for the data in Practice Exercise 10.8.

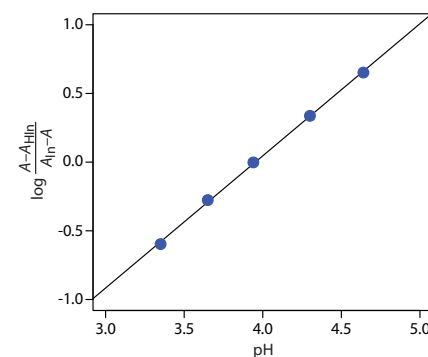


Figure 10.69 Determining the pKa of bromothymol blue using the data in Practice Exercise 10.10.

$$\log \frac{A - A_{\text{HIn}}}{A_{\text{In}} - A} = -3.80 + 0.962\text{pH}$$

The y -intercept is $-\text{p}K_{\text{a}}$; thus, the $\text{p}K_{\text{a}}$ is 3.80 and the K_{a} is 1.58×10^{-4} .

Click [here](#) to return to the chapter.

Chapter 11

Electrochemical Methods

Chapter Overview

Section 11A	Overview of Electrochemistry
Section 11B	Potentiometric Methods
Section 11C	Coulometric Methods
Section 11D	Voltammetric and Amperometric Methods
Section 11E	Key Terms
Section 11F	Chapter Summary
Section 11G	Problems
Section 11H	Solutions to Practice Exercises

In Chapter 10 we examined several spectroscopic techniques that take advantage of the interaction between electromagnetic radiation and matter. In this chapter we turn our attention to electrochemical techniques in which the potential, current, or charge in an electrochemical cell serves as the analytical signal.

Although there are only three basic electrochemical signals, there are a many possible experimental designs—too many, in fact, to cover adequately in an introductory textbook. The simplest division of electrochemical techniques is between bulk techniques, in which we measure a property of the solution in the electrochemical cell, and interfacial techniques, in which the potential, charge, or current depends on the species present at the interface between an electrode and the solution in which it sits. The measurement of a solution's conductivity, which is proportional to the total concentration of dissolved ions, is one example of a bulk electrochemical technique. A determination of pH using a pH electrode is an example of an interfacial electrochemical technique. Only interfacial electrochemical methods receive further consideration in this chapter.

11A Overview of Electrochemistry

The focus of this chapter is on analytical techniques that use a measurement of potential, charge, or current to determine an analyte's concentration or to characterize an analyte's chemical reactivity. Collectively we call this area of analytical chemistry **ELECTROCHEMISTRY** because it originated from the study of the movement of electrons in an oxidation–reduction reaction.

Despite the difference in instrumentation, all electrochemical techniques share several common features. Before we consider individual examples in greater detail, let's take a moment to consider some of these similarities. As you work through the chapter, this overview will help you focus on similarities between different electrochemical methods of analysis. You will find it easier to understand a new analytical method when you can see its relationship to other similar methods.

11A.2 Five Important Concepts

To understand electrochemistry we need to appreciate five important and interrelated concepts: (1) the electrode's potential determines the analyte's form at the electrode's surface; (2) the concentration of analyte at the electrode's surface may not be the same as its concentration in bulk solution; (3) in addition to an oxidation–reduction reaction, the analyte may participate in other reactions; (4) current is a measure of the rate of the analyte's oxidation or reduction; and (5) we cannot simultaneously control current and potential.

THE ELECTRODE'S POTENTIAL DETERMINES THE ANALYTE'S FORM

In [Chapter 6](#) we introduced the ladder diagram as a tool for predicting how a change in solution conditions affects the position of an equilibrium reaction. For an oxidation–reduction reaction, the potential determines the reaction's position. Figure 11.1, for example, shows a ladder diagram for the $\text{Fe}^{3+}/\text{Fe}^{2+}$ and the $\text{Sn}^{4+}/\text{Sn}^{2+}$ equilibria. If we place an electrode in a solution of Fe^{3+} and Sn^{4+} and adjust its potential to $+0.500\text{ V}$, Fe^{3+} reduces to Fe^{2+} , but Sn^{4+} remains unchanged.

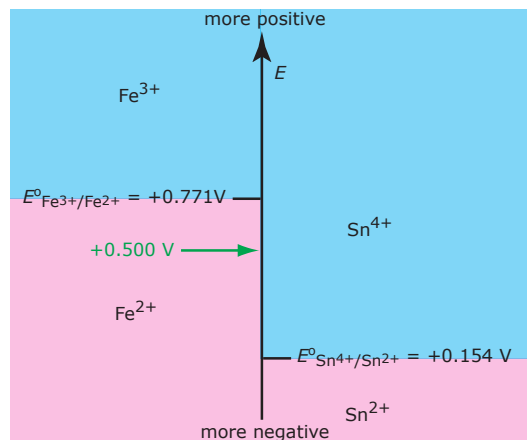


Figure 11.1 Redox ladder diagram for $\text{Fe}^{3+}/\text{Fe}^{2+}$ and for $\text{Sn}^{4+}/\text{Sn}^{2+}$ redox couples. The areas in blue show the potential range where the oxidized forms are the predominate species; the reduced forms are the predominate species in the areas shown in pink. Note that a more positive potential favors the oxidized forms. At a potential of $+0.500\text{ V}$ (green arrow) Fe^{3+} reduces to Fe^{2+} , but Sn^{4+} remains unchanged.

The material in this section—particularly the five important concepts—draws upon a vision for understanding electrochemistry outlined by Larry Faulkner in the article “Understanding Electrochemistry: Some Distinctive Concepts,” *J. Chem. Educ.* **1983**, *60*, 262–264.

See also, Kissinger, P. T.; Bott, A. W. “Electrochemistry for the Non-Electrochemist,” *Current Separations*, **2002**, *20:2*, 51–53.

You may wish to review the earlier treatment of oxidation–reduction reactions in [Section 6D.4](#) and the development of ladder diagrams for oxidation–reduction reactions in [Section 6E.3](#).

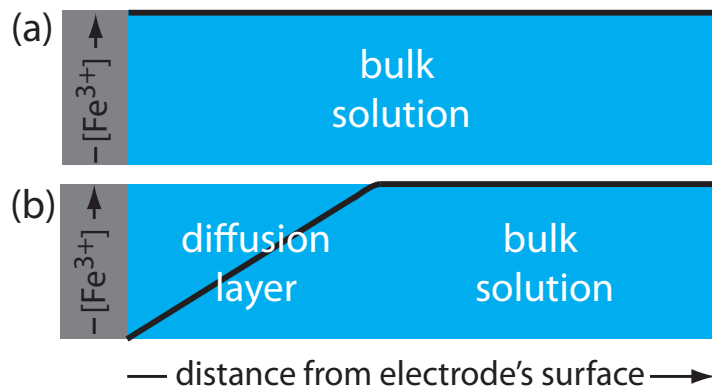


Figure 11.2 Concentration of Fe³⁺ as a function of distance from the electrode's surface at (a) E = +1.00 V and (b) E = +0.500 V. The electrode is shown in gray and the solution in blue.

INTERFACIAL CONCENTRATIONS MAY NOT EQUAL BULK CONCENTRATIONS

In Chapter 6 we introduced the [Nernst equation](#), which provides a mathematical relationship between the electrode's potential and the concentrations of an analyte's oxidized and reduced forms in solution. For example, the Nernst equation for Fe³⁺ and Fe²⁺ is

$$E = E^\circ - \frac{RT}{nF} \log \frac{[\text{Fe}^{2+}]}{[\text{Fe}^{3+}]} = E^\circ - \frac{0.05916}{1} \log \frac{[\text{Fe}^{2+}]}{[\text{Fe}^{3+}]} \quad 11.1$$

where E is the electrode's potential and E° is the standard-state reduction potential for the reaction $\text{Fe}^{3+} \rightleftharpoons \text{Fe}^{2+} + e^-$. Because it is the potential of the electrode that determines the analyte's form at the electrode's surface, the concentration terms in equation 11.1 are those at the electrode's surface, not the concentrations in bulk solution.

This distinction between surface concentrations and bulk concentrations is important. Suppose we place an electrode in a solution of Fe³⁺ and fix its potential at 1.00 V. From the ladder diagram in [Figure 11.1](#), we know that Fe³⁺ is stable at this potential and, as shown in [Figure 11.2a](#), the concentration of Fe³⁺ remains the same at all distances from the electrode's surface. If we change the electrode's potential to +0.500 V, the concentration of Fe³⁺ at the electrode's surface decreases to approximately zero. As shown in [Figure 11.2b](#), the concentration of Fe³⁺ increases as we move away from the electrode's surface until it equals the concentration of Fe³⁺ in bulk solution. The resulting concentration gradient causes additional Fe³⁺ from the bulk solution to diffuse to the electrode's surface.

We call the solution containing this concentration gradient in Fe³⁺ the diffusion layer. We will have more to say about this in [Section 11D.2](#).

THE ANALYTE MAY PARTICIPATE IN OTHER REACTIONS

[Figure 11.2](#) shows how the electrode's potential affects the concentration of Fe³⁺, and how the concentration of Fe³⁺ varies as a function of distance from the electrode's surface. The reduction of Fe³⁺ to Fe²⁺, which is governed by equation 11.1, may not be the only reaction affecting the concentration of Fe³⁺ in bulk solution or at the electrode's surface. The adsorption of Fe³⁺ at the electrode's surface or the formation of a metal–ligand complex in bulk solution, such as Fe(OH)²⁺, also affects the concentration of Fe³⁺.

CURRENT IS A MEASURE OF RATE

The reduction of Fe^{3+} to Fe^{2+} consumes an electron, which is drawn from the electrode. The oxidation of another species, perhaps the solvent, at a second electrode serves as the source of this electron. The flow of electrons between the electrodes provides a measurable current. Because the reduction of Fe^{3+} to Fe^{2+} consumes one electron, the flow of electrons between the electrodes—in other words, the current—is a measure of the rate of the reduction reaction. One important consequence of this observation is that the current is zero when the reaction $\text{Fe}^{3+} \rightleftharpoons \text{Fe}^{2+} + e^-$ is at equilibrium.

The rate of the reaction



is the change in the concentration of Fe^{3+} as a function of time.

WE CANNOT SIMULTANEOUSLY CONTROL BOTH CURRENT AND POTENTIAL

If a solution of Fe^{3+} and Fe^{2+} is at equilibrium, the current is zero and the potential is given by [equation 11.1](#). If we change the potential away from its equilibrium position, current flows as the system moves toward its new equilibrium position. Although the initial current is quite large, it decreases over time reaching zero when the reaction reaches equilibrium. The current, therefore, changes in response to the applied potential. Alternatively, we can pass a fixed current through the electrochemical cell, forcing the reduction of Fe^{3+} to Fe^{2+} . Because the concentrations of Fe^{3+} and Fe^{2+} are constantly changing, the potential, as given by [equation 11.1](#), also changes over time. In short, if we choose to control the potential, then we must accept the resulting current, and we must accept the resulting potential if we choose to control the current.

11A.2 Controlling and Measuring Current and Potential

Electrochemical measurements are made in an electrochemical cell consisting of two or more electrodes and the electronic circuitry for controlling and measuring the current and the potential. In this section we introduce the basic components of electrochemical instrumentation.

The simplest electrochemical cell uses two electrodes. The potential of one electrode is sensitive to the analyte's concentration, and is called the **WORKING ELECTRODE** or the **INDICATOR ELECTRODE**. The second electrode, which we call the **COUNTER ELECTRODE**, completes the electrical circuit and provides a reference potential against which we measure the working electrode's potential. Ideally the counter electrode's potential remains constant so that we can assign to the working electrode any change in the overall cell potential. If the counter electrode's potential is not constant, we replace it with two electrodes: a **REFERENCE ELECTRODE** whose potential remains constant and an **AUXILIARY ELECTRODE** that completes the electrical circuit.

Because we cannot simultaneously control the current and the potential, there are only three basic experimental designs: (1) we can measure the potential when the current is zero, (2) we can measure the potential while controlling the current, and (3) we can measure the current while controlling the potential. Each of these experimental designs relies on **OHM'S LAW**,

which states that a current, i , passing through an electrical circuit of resistance, R , generates a potential, E .

$$E = iR$$

Each of these experimental designs uses a different type of instrument. To help us understand how we can control and measure current and potential, *we will describe these instruments as if the analyst is operating them manually*. To do so the analyst observes a change in the current or the potential and manually adjusts the instrument's settings to maintain the desired experimental conditions. It is important to understand that modern electrochemical instruments provide an automated, electronic means for controlling and measuring current and potential, and that they do so by using very different electronic circuitry.

POTENTIOMETERS

To measure the potential of an electrochemical cell under a condition of zero current we use a **POTENTIOMETER**. Figure 11.3 shows a schematic diagram for a manual potentiometer, consisting of a power supply, an electrochemical cell with a working electrode and a counter electrode, an ammeter for measuring the current passing through the electrochemical cell, an adjustable, slide-wire resistor, and a tap key for closing the circuit through the electrochemical cell. Using Ohm's law, the current in the upper half of the circuit is

$$i_{\text{up}} = \frac{E_{\text{PS}}}{R_{ab}}$$

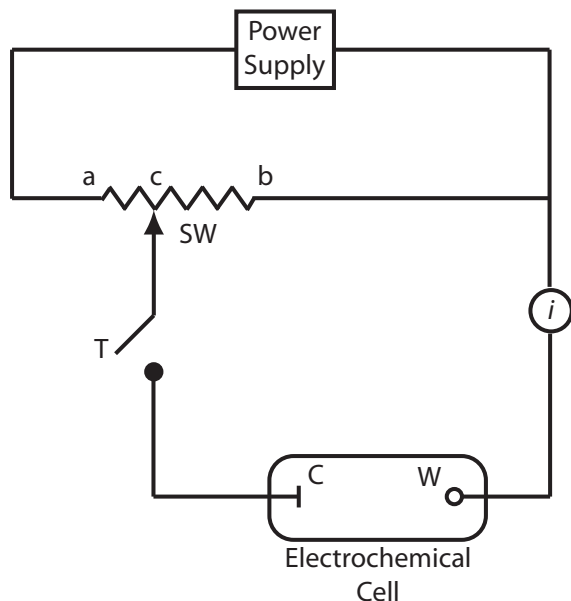


Figure 11.3 Schematic diagram of a manual potentiometer: C is the counter electrode; W is the working electrode; SW is a slide-wire resistor; T is a tap key and i is an ammeter for measuring current.

For further information about electrochemical instrumentation, see this chapter's [additional resources](#).

where E_{PS} is the power supply's potential, and R_{ab} is the resistance between points a and b of the slide-wire resistor. In a similar manner, the current in the lower half of the circuit is

$$i_{\text{low}} = \frac{E_{\text{cell}}}{R_{cb}}$$

where E_{cell} is the potential difference between the working electrode and the counter electrode, and R_{cb} is the resistance between the points c and b of the slide-wire resistor. When $i_{\text{up}} = i_{\text{low}} = 0$, no current flows through the ammeter and the potential of the electrochemical cell is

$$E_{\text{cell}} = \frac{R_{cb}}{R_{ab}} \times E_{PS} \quad 11.2$$

To determine E_{cell} we momentarily press the tap key and observe the current at the ammeter. If the current is not zero, we adjust the slide wire resistor and remeasure the current, continuing this process until the current is zero. When the current is zero, we use equation 11.2 to calculate E_{cell} .

Using the tap key to momentarily close the circuit containing the electrochemical cell, minimizes the current passing through the cell and limits the change in the composition of the electrochemical cell. For example, passing a current of 10^{-9} A through the electrochemical cell for 1 s changes the concentrations of species in the cell by approximately 10^{-14} moles. Modern potentiometers use operational amplifiers to create a high-impedance voltmeter capable of measuring the potential while drawing a current of less than 10^{-9} A.

GALVANOSTATS

A **GALVANOSTAT** allows us to control the current flowing through an electrochemical cell. A schematic diagram of a constant-current galvanostat is shown in Figure 11.4. The current flowing from the power supply through the working electrode is

$$i = \frac{E_{PS}}{R + R_{\text{cell}}}$$

where E_{PS} is the potential of the power supply, R is the resistance of the resistor, and R_{cell} is the resistance of the electrochemical cell. If $R \gg R_{\text{cell}}$, then the current between the auxiliary and working electrodes is

$$i = \frac{E_{PS}}{R} \approx \text{constant}$$

To monitor the potential of the working electrode, which changes as the composition of the electrochemical cell changes, we can include an optional reference electrode and a high-impedance potentiometer.

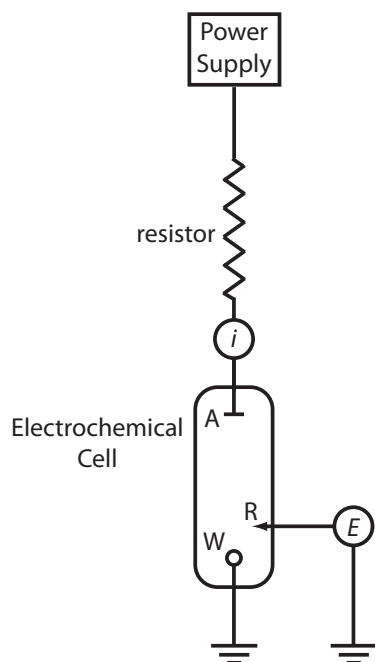


Figure 11.4 Schematic diagram of a galvanostat: A is the auxiliary electrode; W is the working electrode; R is an optional reference electrode, E is a high-impedance potentiometer, and i is an ammeter. The working electrode and the optional reference electrode are connected to a ground.

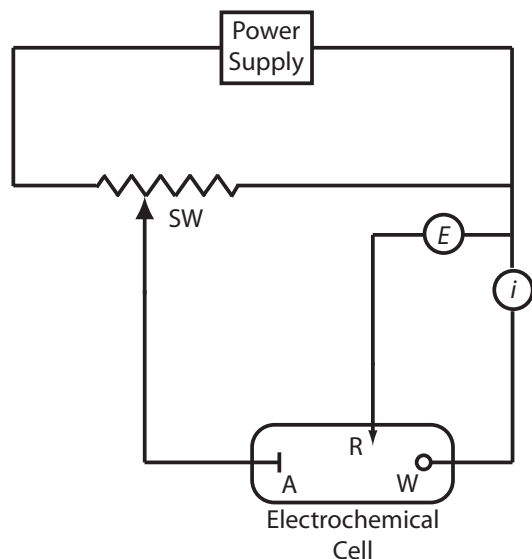


Figure 11.5 Schematic diagram for a manual potentiostat: W is the working electrode; A is the auxiliary electrode; R is the reference electrode; SW is a slide-wire resistor, E is a high-impedance potentiometer; and i is an ammeter.

POTENTIOSTATS

A **POTENTIOSTAT** allows us to control the potential of the working electrode. Figure 11.5 shows a schematic diagram for a manual potentiostat. The potential of the working electrode is measured relative to a constant-potential reference electrode that is connected to the working electrode through a high-impedance potentiometer. To set the working electrode's potential we adjust the slide wire resistor, which is connected to the auxiliary electrode. If the working electrode's potential begins to drift, we can adjust the slide wire resistor to return the potential to its initial value. The current flowing between the auxiliary electrode and the working electrode is measured with an ammeter. Modern potentiostats include waveform generators that allow us to apply a time-dependent potential profile, such as a series of potential pulses, to the working electrode.

11A.3 Interfacial Electrochemical Techniques

Because this chapter focuses on interfacial electrochemical techniques, let's classify them into several categories. [Figure 11.6](#) provides one version of a family tree highlighting the experimental conditions, the analytical signal, and the corresponding electrochemical techniques. Among the experimental conditions under our control are the potential or the current, and whether we stir the analyte's solution.

At the first level, we divide interfacial electrochemical techniques into static techniques and dynamic techniques. In a static technique we do not allow current to pass through the analyte's solution. Potentiometry, in which we measure the potential of an electrochemical cell under static conditions, is one of the most important quantitative electrochemical methods, and is discussed in detail in section 11B.

Dynamic techniques, in which we allow current to flow through the analyte's solution, comprise the largest group of interfacial electrochemical

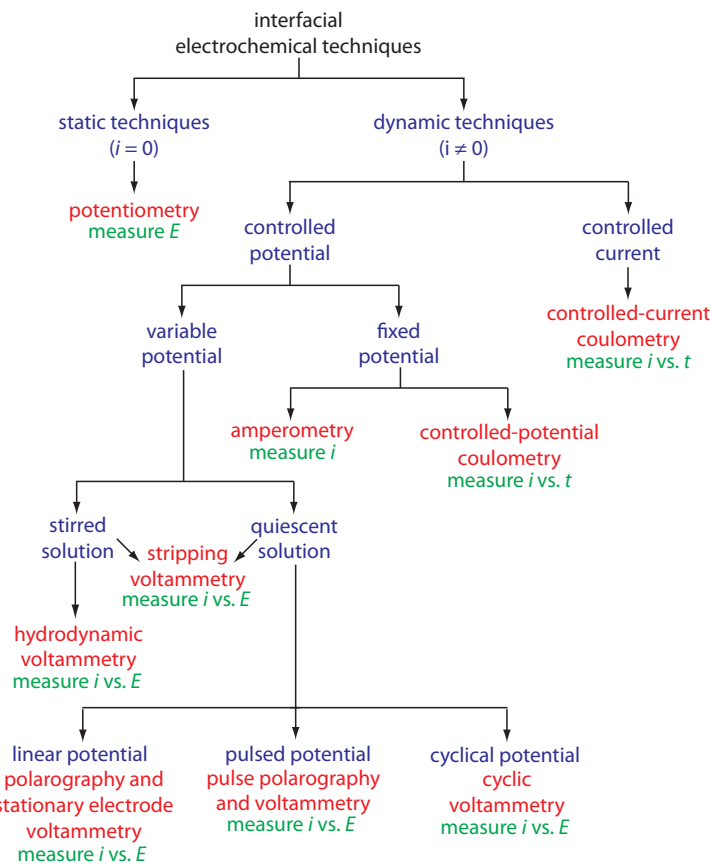


Figure 11.6 Family tree highlighting a number of interfacial electrochemical techniques. The specific techniques are shown in red, the experimental conditions are shown in blue, and the analytical signals are shown in green.

techniques. Coulometry, in which we measure current as a function of time, is covered in Section 11C. Amperometry and voltammetry, in which we measure current as a function of a fixed or variable potential, is the subject of Section 11D.

11B Potentiometric Methods

In potentiometry we measure the potential of an electrochemical cell under static conditions. Because no current—or only a negligible current—flows through the electrochemical cell, its composition remains unchanged. For this reason, potentiometry is a useful quantitative method. The first quantitative potentiometric applications appeared soon after the formulation, in 1889, of the Nernst equation, which relates an electrochemical cell's potential to the concentration of electroactive species in the cell.¹

Potentiometry initially was restricted to redox equilibria at metallic electrodes, limiting its application to a few ions. In 1906, Cremer discovered that the potential difference across a thin glass membrane is a function of pH when opposite sides of the membrane are in contact with solutions containing different concentrations of H_3O^+ . This discovery led to the development of the glass pH electrode in 1909. Other types of membranes also yield useful potentials. For example, in 1937 Kolthoff and Sanders

1 Stork, J. T. *Anal. Chem.* **1993**, *65*, 344A–351A.

showed that a pellet of AgCl can be used to determine the concentration of Ag⁺. Electrodes based on membrane potentials are called ion-selective electrodes, and their continued development extends potentiometry to a diverse array of analytes.

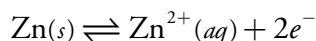
11B.1 Potentiometric Measurements

As shown in [Figure 11.3](#), we use a potentiometer to determine the difference between the potential of two electrodes. The potential of one electrode—the working or indicator electrode—responds to the analyte's activity, and the other electrode—the counter or reference electrode—has a known, fixed potential. In this section we introduce the conventions for describing potentiometric electrochemical cells, and the relationship between the measured potential and the analyte's activity.

POTENTIOMETRIC ELECTROCHEMICAL CELLS

A schematic diagram of a typical potentiometric electrochemical cell is shown in [Figure 11.7](#). The electrochemical cell consists of two half-cells, each containing an electrode immersed in a solution of ions whose activities determine the electrode's potential. A **SALT BRIDGE** containing an inert electrolyte, such as KCl, connects the two half-cells. The ends of the salt bridge are fixed with porous frits, allowing the electrolyte's ions to move freely between the half-cells and the salt bridge. This movement of ions in the salt bridge completes the electrical circuit.

By convention, we identify the electrode on the left as the **ANODE** and assign to it the oxidation reaction; thus



The electrode on the right is the **CATHODE**, where the reduction reaction occurs.

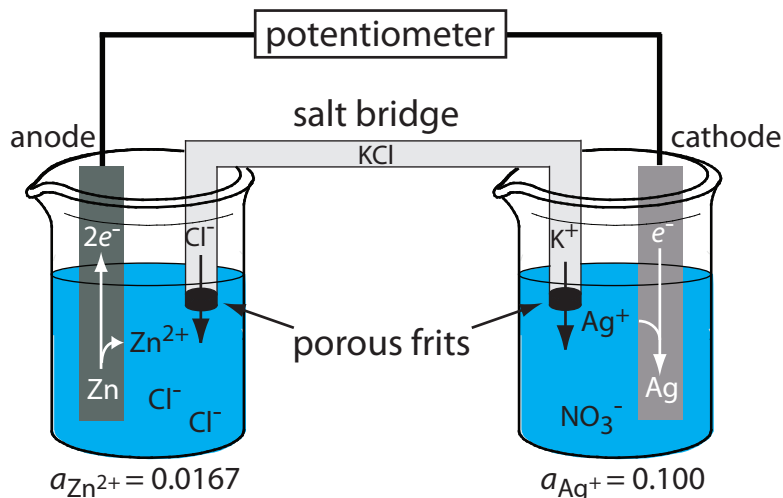
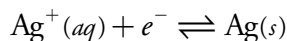


Figure 11.7 Example of a potentiometric electrochemical cell. The activities of Zn²⁺ and Ag⁺ are shown below the two half-cells.

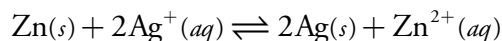
In [Chapter 6](#) we noted that the equilibrium position of a chemical reaction is a function of the activities of the reactants and products, not their concentrations. To be correct, we should write the Nernst equation, such as [equation 11.1](#), in terms of activities. So why didn't we use activities in [Chapter 9](#) when we calculated redox titration curves? There are two reasons for that choice. First, concentrations are always easier to calculate than activities. Second, in a redox titration we determine the analyte's concentration from the titration's end point, not from the potential at the end point. The only reasons for calculating a titration curve is to evaluate its feasibility and to help in selecting a useful indicator. In most cases, the error we introduce by assuming that concentration and activity are identical is too small to be a significant concern.

In potentiometry we cannot ignore the difference between activity and concentration. Later in this section we will consider how we can design a potentiometric method so that we can ignore the difference between activity and concentration.

See [Chapter 6I](#) to review our earlier discussion of activity and concentration.

The reason for separating the electrodes is to prevent the oxidation and reduction reactions from occurring at one of the electrodes. For example, if we place a strip of Zn metal in a solution of AgNO₃, the reduction of Ag⁺ to Ag occurs on the surface of the Zn at the same time as a portion of the Zn metal oxidizes to Zn²⁺. Because the transfer of electrons from Zn to Ag⁺ occurs at the electrode's surface, we can not pass them through the potentiometer.

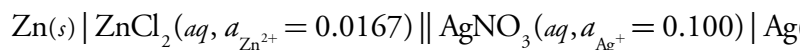
The potential of the electrochemical cell in [Figure 11.7](#) is for the reaction



We also define potentiometric electrochemical cells such that the cathode is the indicator electrode and the anode is the reference electrode.

SHORTHAND NOTATION FOR ELECTROCHEMICAL CELLS

Although [Figure 11.7](#) provides a useful picture of an electrochemical cell, it is not a convenient representation. A more useful way to describe an electrochemical cell is a shorthand notation that uses symbols to identify different phases and that lists the composition of each phase. We use a vertical slash (|) to identify a boundary between two phases where a potential develops, and a comma (,) to separate species in the same phase or to identify a boundary between two phases where no potential develops. Shorthand cell notations begin with the anode and continue to the cathode. For example, we describe the electrochemical cell in [Figure 11.7](#) using the following shorthand notation.



The double vertical slash (||) indicates the salt bridge, the contents of which we usually do not list. Note that a double vertical slash implies that there is a potential difference between the salt bridge and each half-cell.

Example 11.1

What are the anodic, cathodic, and overall reactions responsible for the potential of the electrochemical cell in [Figure 11.8](#)? Write the shorthand notation for the electrochemical cell.

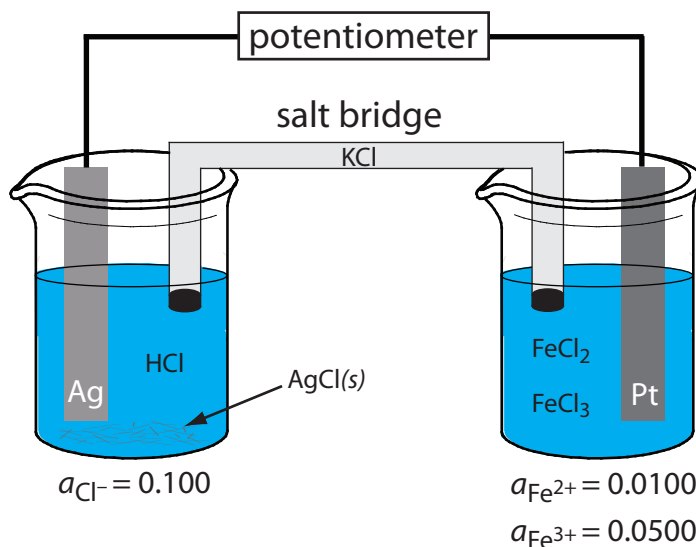
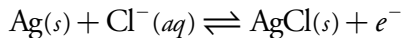


Figure 11.8 Potentiometric electrochemical cell for Example 11.1.

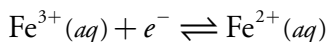
Imagine having to draw a picture of each electrochemical cell you are using!

SOLUTION

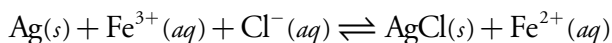
The oxidation of Ag to Ag⁺ occurs at the anode, which is the left half-cell. Because the solution contains a source of Cl⁻, the anodic reaction is



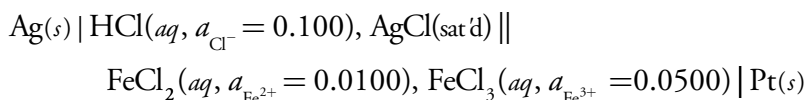
The cathodic reaction, which is the right half-cell, is the reduction of Fe³⁺ to Fe²⁺.



The overall cell reaction, therefore, is



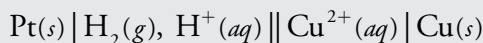
The electrochemical cell's shorthand notation is



Note that the Pt cathode is an inert electrode that carries electrons to the reduction half-reaction. The electrode itself does not undergo reduction.

Practice Exercise 11.1

Write the reactions occurring at the anode and the cathode for the potentiometric electrochemical cell with the following shorthand notation.



Click [here](#) to review your answer to this exercise.

POTENTIAL AND ACTIVITY—THE NERNST EQUATION

The potential of a potentiometric electrochemical cell is

$$E_{\text{cell}} = E_{\text{c}} - E_{\text{a}} \quad 11.3$$

where E_{c} and E_{a} are reduction potentials for the redox reactions at the cathode and the anode. The reduction potentials are given by the Nernst equation

$$E = E^{\circ} - \frac{RT}{nF} \ln Q$$

where E° is the standard-state reduction potential, R is the gas constant, T is the temperature in Kelvins, n is the number of electrons in the redox reaction, F is Faraday's constant, and Q is the reaction quotient. At a temperature of 298 K (25 °C) the Nernst equation is

See [Section 6D.4](#) for a review of the Nernst equation.

$$E = E^\circ - \frac{0.05916}{n} \log Q \quad 11.4$$

where E is given in volts.

Using equation 11.4, the potential of the anode and cathode in [Figure 11.7](#) are

$$E_a = E_{\text{Zn}^{2+}/\text{Zn}}^\circ - \frac{0.05916}{2} \log \frac{1}{a_{\text{Zn}^{2+}}}$$

$$E_c = E_{\text{Ag}^+/\text{Ag}}^\circ - \frac{0.05916}{1} \log \frac{1}{a_{\text{Ag}^+}}$$

Substituting E_c and E_a into [equation 11.3](#), along with the activities of Zn^{2+} and Ag^+ and the standard-state reduction potentials gives an E_{cell} of

$$\begin{aligned} E_{\text{cell}} &= \left(E_{\text{Ag}^+/\text{Ag}}^\circ - \frac{0.05916}{1} \log \frac{1}{a_{\text{Ag}^+}} \right) - \left(E_{\text{Zn}^{2+}/\text{Zn}}^\circ - \frac{0.05916}{2} \log \frac{1}{a_{\text{Zn}^{2+}}} \right) \\ &= \left(0.7996 \text{ V} - 0.05916 \log \frac{1}{0.100} \right) - \left(-0.7618 - \frac{0.05916}{2} \log \frac{1}{0.0167} \right) \\ &= +1.555 \text{ V} \end{aligned}$$

Even though an oxidation reaction is taking place at the anode, we define the anode's potential in terms of the corresponding reduction reaction and the standard-state reduction potential. See [Section 6D.4](#) for a review of using the Nernst equation in calculations.

You will find values for the standard-state reduction potential in [Appendix 13](#).

Example 11.2

What is the potential of the electrochemical cell shown in [Example 11.1](#)?

SOLUTION

Substituting E_c and E_a into [equation 11.3](#), along with the concentrations of Fe^{3+} , Fe^{2+} , and Cl^- and the standard-state reduction potentials gives

$$\begin{aligned} E_{\text{cell}} &= \left(E_{\text{Fe}^{3+}/\text{Fe}^{2+}}^\circ - \frac{0.05916}{1} \log \frac{a_{\text{Fe}^{2+}}}{a_{\text{Fe}^{3+}}} \right) - \left(E_{\text{AgCl}/\text{Ag}}^\circ - \frac{0.05916}{1} \log a_{\text{Cl}^-} \right) \\ &= \left(0.771 \text{ V} - 0.05916 \log \frac{0.0100}{0.0500} \right) - (0.2223 - 0.05916 \log(0.100)) \\ &= +0.531 \text{ V} \end{aligned}$$

Practice Exercise 11.2

What is the potential for the electrochemical cell in [Practice Exercise 11.1](#) if the activity of H^+ in the anodic half-cell is 0.100, the fugacity of H_2 in the anodic half-cell is 0.500, and the activity of Cu^{2+} in the cathodic half-cell is 0.0500?

Click [here](#) to review your answer to this exercise.

Fugacity is the equivalent term for the activity of a gas.

In potentiometry, we assign the reference electrode to the anodic half-cell and assign the indicator electrode to the cathodic half-cell. Thus, if the potential of the cell in [Figure 11.7](#) is +1.50 V and the activity of Zn^{2+} is 0.0167, then we can solve the following equation for a_{Ag^+}

$$\begin{aligned} +1.50\text{V} &= \left(E_{\text{Ag}^+/\text{Ag}}^\circ - \frac{0.05916}{1} \log \frac{1}{a_{\text{Ag}^+}} \right) - \\ &\quad \left(E_{\text{Zn}^{2+}/\text{Zn}}^\circ - \frac{0.05916}{2} \log \frac{1}{a_{\text{Zn}^{2+}}} \right) \\ &= \left(+0.7996\text{V} - 0.05916 \log \frac{1}{a_{\text{Ag}^+}} \right) - \\ &\quad \left(-0.7618 - \frac{0.05916}{2} \log \frac{1}{0.0167} \right) \end{aligned}$$

obtaining an activity of 0.0118.

Example 11.3

What is the activity of Fe^{3+} in an electrochemical cell similar to that in [Example 11.1](#) if the activity of Cl^- in the left-hand cell is 1.0, the activity of Fe^{2+} in the right-hand cell is 0.015, and E_{cell} is +0.546 V?

SOLUTION

Making appropriate substitutions into [equation 11.3](#)

$$\begin{aligned} +0.546\text{V} &= \left(+0.771\text{V} - 0.05916 \log \frac{0.0151}{a_{\text{Fe}^{3+}}} \right) \\ &\quad - \left(+0.2223 - 0.05916 \log(1.0) \right) \end{aligned}$$

and solving for $a_{\text{Fe}^{3+}}$ gives its activity as 0.0136.

Practice Exercise 11.3

What is the activity of Cu^{2+} in the electrochemical cell in [Practice Exercise 11.1](#) if the activity of H^+ in the anodic half-cell is 1.00 with a fugacity of 1.00 for H_2 , and an E_{cell} of +0.257 V?

Click [here](#) to review your answer to this exercise.

Despite the apparent ease of determining an analyte's activity using the Nernst equation, there are several problems with this approach. One problem is that standard-state potentials are temperature-dependent, and the values in reference tables usually are for a temperature of 25 °C. We can overcome this problem by maintaining the electrochemical cell at 25 °C or by measuring the standard-state potential at the desired temperature.

The standard-state reduction potentials in [Appendix 13](#), for example, are for 25 °C.

Another problem is that standard-state reduction potentials may show significant matrix effects. For example, the standard-state reduction potential for the $\text{Fe}^{3+}/\text{Fe}^{2+}$ redox couple is +0.735 V in 1 M HClO_4 , +0.70 V in 1 M HCl, and +0.53 V in 10 M HCl. The difference in potential for equimolar solutions of HCl and HClO_4 is the result of a difference in the activity coefficients for Fe^{3+} and Fe^{2+} in these two media. The shift toward a more negative potential with an increase in the concentration of HCl is the result of chloride's ability to form a stronger complex with Fe^{3+} than with Fe^{2+} . We can minimize this problem by replacing the standard-state potential with a matrix-dependent formal potential. Most tables of standard-state potentials, including those in [Appendix 13](#), include selected formal potentials.

A more serious problem is the presence of additional potentials in the electrochemical cell not included in [equation 11.3](#). In writing the shorthand notation for an electrochemical cell we use a double slash (||) to indicate the salt bridge, suggesting a potential exists at the interface between each end of the salt bridge and the solution in which it is immersed. The origin of this potential is discussed in the following section.

JUNCTION POTENTIALS

A **JUNCTION POTENTIAL** develops at the interface between two ionic solution if there difference in the concentration and mobility of the ions. Consider, for example, a porous membrane separating solutions of 0.1 M HCl and 0.01 M HCl (Figure 11.9a). Because the concentration of HCl on the membrane's left side is greater than that on the right side of the membrane, H^+ and Cl^- diffuse in the direction of the arrows. The mobility of H^+ , however, is greater than that for Cl^- , as shown by the difference in the lengths of their respective arrows. Because of this difference in mobility, the solution on the right side of the membrane has an excess of H^+ and a positive charge (Figure 11.9b). Simultaneously, the solution on the membrane's left

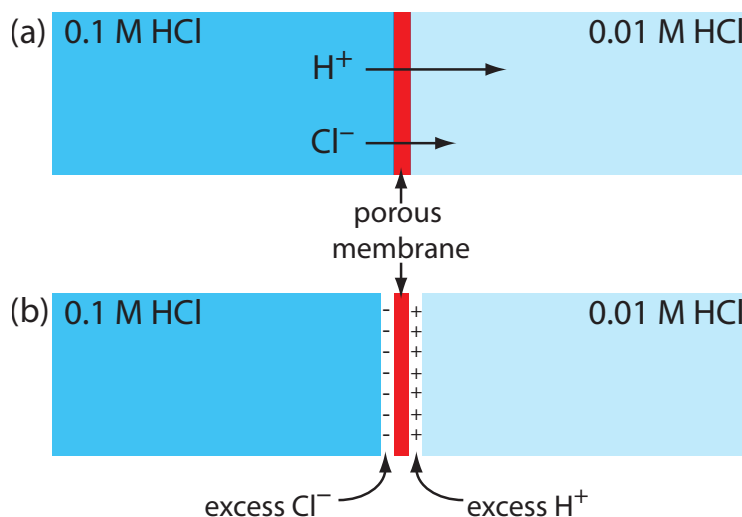


Figure 11.9 Origin of the junction potential between a solution of 0.1 M HCl and a solution of 0.01 M HCl.

side develops a negative charge because there is an excess concentration of Cl^- . We call this difference in potential across the membrane a junction potential, which we represent as E_j .

The magnitude of the junction potential depends upon the concentration of ions on the two sides of the interface, and may be as large as 30–40 mV. For example, a junction potential of 33.09 mV has been measured at the interface between solutions of 0.1 M HCl and 0.1 M NaCl.² The magnitude of a salt bridge's junction potential is minimized by using a salt, such as KCl, for which the mobilities of the cation and anion are approximately equal. We can also minimize the magnitude of the junction potential by incorporating a high concentration of the salt in the salt bridge. For this reason salt bridges are frequently constructed using solutions that are saturated with KCl. Nevertheless, a small junction potential, generally of unknown magnitude, is always present.

When we measure the potential of an electrochemical cell the junction potential also contributes to E_{cell} ; thus, we rewrite [equation 11.3](#)

$$E_{\text{cell}} = E_c - E_a + E_j$$

to include its contribution. If we do not know the junction potential's actual value—which is the usual situation—then we cannot directly calculate the analyte's concentration using the Nernst equation. Quantitative analytical work is possible, however, if we use one of the standardization methods discussed in [Chapter 5C](#).

These standardization methods are external standards, the method of standard additions, and internal standards. We will return to this point later in this section.

11B.2 Reference Electrodes

In a potentiometric electrochemical cell one half-cell provides a known reference potential and the potential of the other half-cell indicates the analyte's concentration. By convention, the reference electrode is the anode; thus, the short hand notation for a potentiometric electrochemical cell is

$$\text{reference} \parallel \text{indicator}$$

and the cell potential is

$$E_{\text{cell}} = E_{\text{ind}} - E_{\text{ref}} + E_j$$

The ideal reference electrode provides a stable, known potential so that any change in E_{cell} is attributed to analyte's effect on the potential of the indicator electrode. In addition, the ideal reference electrode should be easy to make and to use. Three common reference electrodes are discussed in this section.

² Sawyer, D. T.; Roberts, J. L., Jr. *Experimental Electrochemistry for Chemists*, Wiley-Interscience: New York, 1974, p. 22.

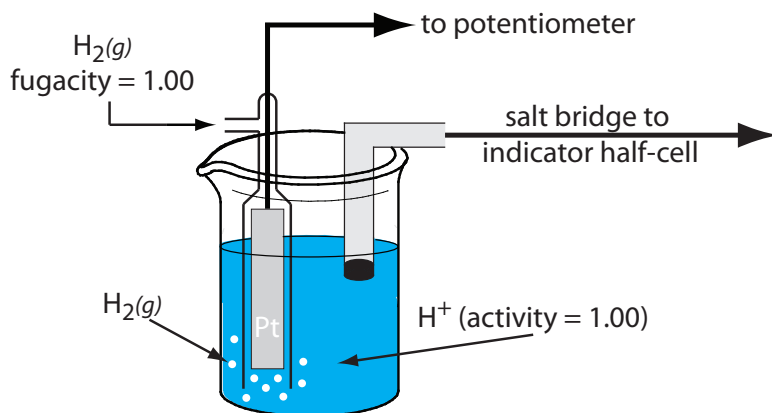
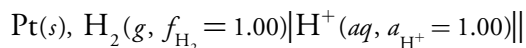


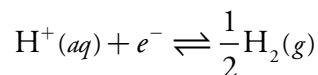
Figure 11.10 Schematic diagram showing the standard hydrogen electrode.

STANDARD HYDROGEN ELECTRODE

Although we rarely use the **STANDARD HYDROGEN ELECTRODE** (SHE) for routine analytical work, it is the reference electrode used to establish standard-state potentials for other half-reactions. The SHE consists of a Pt electrode immersed in a solution in which the activity of hydrogen ion is 1.00 and in which the fugacity of $\text{H}_2(g)$ is 1.00 (Figure 11.10). A conventional salt bridge connects the SHE to the indicator half-cell. The short hand notation for the standard hydrogen electrode is



and the standard-state potential for the reaction

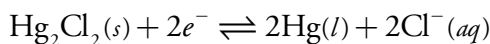


is, by definition, 0.00 V at all temperatures. Despite its importance as the fundamental reference electrode against which we measure all other potentials, the SHE is rarely used because it is difficult to prepare and inconvenient to use.

CALOMEL ELECTRODES

Calomel is the common name for the compound Hg_2Cl_2 .

Calomel reference electrodes are based on the following redox couple between Hg_2Cl_2 and Hg



for which the Nernst equation is

$$E = E_{\text{Hg}_2\text{Cl}_2/\text{Hg}}^\circ - \frac{0.05916}{2} \log(a_{\text{Cl}^-})^2 = +0.2682 \text{ V} - \frac{0.05916}{2} \log(a_{\text{Cl}^-})^2$$

The potential of a calomel electrode, therefore, is determined by the activity of Cl^- in equilibrium with Hg and Hg_2Cl_2 .

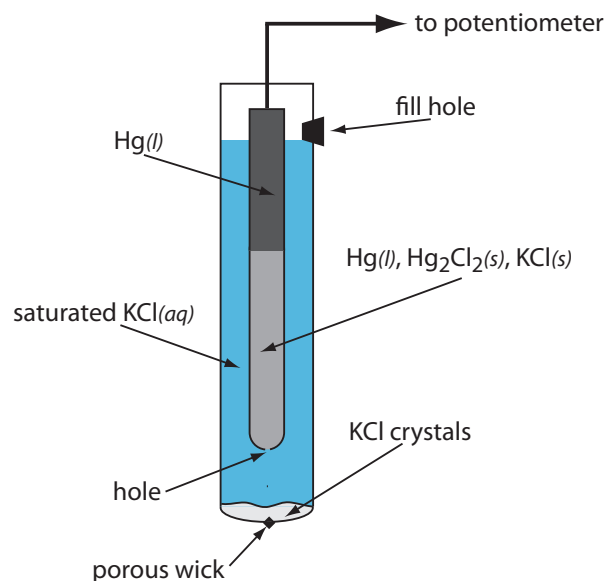
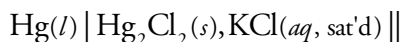


Figure 11.11 Schematic diagram showing the saturated calomel electrode.

As shown in Figure 11.11, in a **SATURATED CALOMEL ELECTRODE** (SCE) the concentration of Cl^- is determined by the solubility of KCl. The electrode consists of an inner tube packed with a paste of Hg, Hg_2Cl_2 , and KCl, situated within a second tube containing a saturated solution of KCl. A small hole connects the two tubes and a porous wick serves as a salt bridge to the solution in which the SCE is immersed. A stopper in the outer tube provides an opening for adding additional saturated KCl. The short hand notation for this cell is

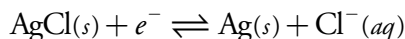


Because the concentration of Cl^- is fixed by the solubility of KCl, the potential of an SCE remains constant even if we lose some of the solution to evaporation. A significant disadvantage of the SCE is that the solubility of KCl is sensitive to a change in temperature. At higher temperatures the solubility of KCl increases and the electrode's potential decreases. For example, the potential of the SCE is +0.2444 V at 25 °C and +0.2376 V at 35 °C. The potential of a calomel electrode containing an unsaturated solution of KCl is less temperature dependent, but its potential changes if the concentration, and thus the activity of Cl^- , increases due to evaporation.

The potential of a calomel electrode is +0.280 V when the concentration of KCl is 1.00 M and +0.336 V when the concentration of KCl is 0.100 M. If the activity of Cl^- is 1.00, the potential is +0.2682 V.

SILVER/SILVER CHLORIDE ELECTRODES

Another common reference electrode is the **SILVER/SILVER CHLORIDE ELECTRODE**, which is based on the following redox couple between AgCl and Ag.



As is the case for the calomel electrode, the activity of Cl^- determines the potential of the Ag/AgCl electrode; thus

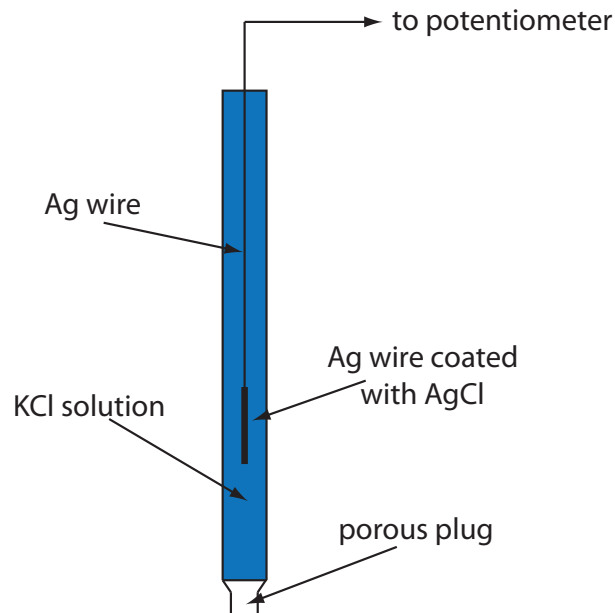


Figure 11.12 Schematic diagram showing a Ag/AgCl electrode. Because the electrode does not contain solid KCl, this is an example of an unsaturated Ag/AgCl electrode.

$$E = E_{\text{AgCl/Ag}}^{\circ} - 0.05916 \log a_{\text{Cl}^-} = +0.2223 \text{ V} - 0.05916 \log a_{\text{Cl}^-}$$

As you might expect, the potential of a Ag/AgCl electrode using a saturated solution of KCl is more sensitive to a change in temperature than an electrode using an unsaturated solution of KCl.

When prepared using a saturated solution of KCl, the potential of a Ag/AgCl electrode is +0.197 V at 25 °C. Another common Ag/AgCl electrode uses a solution of 3.5 M KCl and has a potential of +0.205 V at 25 °C.

A typical Ag/AgCl electrode is shown in Figure 11.12 and consists of a silver wire, the end of which is coated with a thin film of AgCl, immersed in a solution containing the desired concentration of KCl. A porous plug serves as the salt bridge. The electrode's short hand notation is



CONVERTING POTENTIALS BETWEEN REFERENCE ELECTRODES

The standard state reduction potentials in most tables are reported relative to the standard hydrogen electrode's potential of +0.00 V. Because we rarely use the SHE as a reference electrode, we need to be able to convert an indicator electrode's potential to its equivalent value when using a different reference electrode. As shown in the following example, this is easy to do.

Example 11.4

The potential for an $\text{Fe}^{3+}/\text{Fe}^{2+}$ half-cell is +0.750 V relative to the standard hydrogen electrode. What is its potential when using a saturated calomel electrode or a saturated silver/silver chloride electrode?

SOLUTION

When using a standard hydrogen electrode the potential of the electrochemical cell is

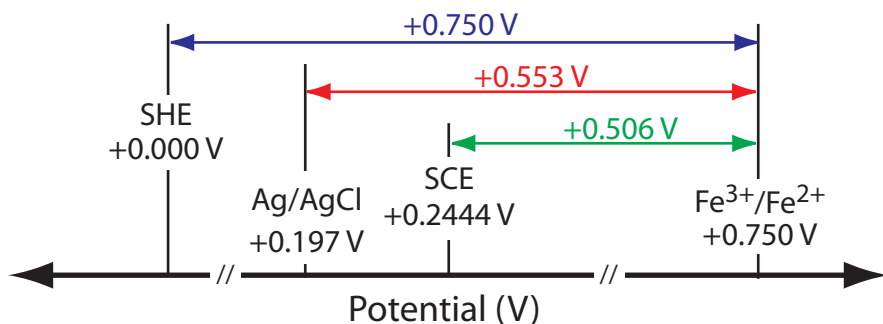


Figure 11.13 Relationship between the potential of an $\text{Fe}^{3+}/\text{Fe}^{2+}$ half-cell relative to the reference electrodes in Example 11.4. The potential relative to a standard hydrogen electrode is shown in blue, the potential relative to a saturated silver/silver chloride electrode is shown in red, and the potential relative to a saturated calomel electrode is shown in green.

$$E_{\text{cell}} = E_{\text{Fe}^{3+}/\text{Fe}^{2+}} - E_{\text{SHE}} = 0.750 \text{ V} - 0.000 \text{ V} = +0.750 \text{ V}$$

We can use the same equation to calculate the potential when using a saturated calomel electrode

$$E_{\text{cell}} = E_{\text{Fe}^{3+}/\text{Fe}^{2+}} - E_{\text{SCE}} = 0.750 \text{ V} - 0.2444 \text{ V} = +0.506 \text{ V}$$

or a saturated silver/silver chloride electrode

$$E_{\text{cell}} = E_{\text{Fe}^{3+}/\text{Fe}^{2+}} - E_{\text{Ag/AgCl}} = 0.750 \text{ V} - 0.197 \text{ V} = +0.553 \text{ V}$$

Figure 11.13 provides a pictorial representation of the relationship between these different potentials.

Practice Exercise 11.4

The potential of a $\text{UO}_2^+/\text{U}^{4+}$ half-cell is -0.0190 V relative to a saturated calomel electrode. What is its potential when using a saturated silver/silver chloride electrode or a standard hydrogen electrode?

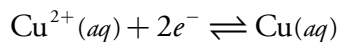
Click [here](#) to review your answer to this exercise.

11B.3 Metallic Indicator Electrodes

In potentiometry the potential of the indicator electrode is proportional to the analyte's activity. Two classes of indicator electrodes are used in potentiometry: metallic electrodes, which are the subject of this section, and ion-selective electrodes, which are covered in the next section.

ELECTRODES OF THE FIRST KIND

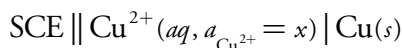
If we place a copper electrode in a solution containing Cu^{2+} , the electrode's potential due to the reaction



is determined by the activity of Cu^{2+} .

$$E = E_{\text{Cu}^{2+}/\text{Cu}}^{\circ} - \frac{0.05916}{2} \log \frac{1}{a_{\text{Cu}^{2+}}} = +0.3419 \text{ V} - \frac{0.05916}{2} \log \frac{1}{a_{\text{Cu}^{2+}}}$$

If copper is the indicator electrode in a potentiometric electrochemical cell that also includes a saturated calomel reference electrode



then we can use the cell potential to determine an unknown activity of Cu^{2+} in the indicator electrode's half-cell

$$E_{\text{cell}} = E_{\text{ind}} - E_{\text{SCE}} + E_j = \\ +0.3419 \text{ V} - \frac{0.05916}{2} \log \frac{1}{a_{\text{Cu}^{2+}}} - 0.2444 \text{ V} + E_j$$

An indicator electrode in which a metal is in contact with a solution containing its ion is called an **ELECTRODE OF THE FIRST KIND**. In general, if a metal, M, is in a solution of M^{n+} , the cell potential is

$$E_{\text{cell}} = K - \frac{0.05916}{n} \log \frac{1}{a_{\text{M}^{n+}}} = K + \frac{0.05916}{n} \log a_{\text{M}^{n+}}$$

where K is a constant that includes the standard-state potential for the M^{n+}/M redox couple, the potential of the reference electrode, and the junction potential. For a variety of reasons—including the slow kinetics of electron transfer at the metal–solution interface, the formation of metal oxides on the electrode's surface, and interfering reactions—electrodes of the first kind are limited to the following metals: Ag, Bi, Cd, Cu, Hg, Pb, Sn, Tl, and Zn.

ELECTRODES OF THE SECOND KIND

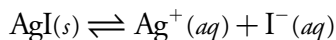
The potential of an electrode of the first kind responds to the activity of M^{n+} . We also can use this electrode to determine the activity of another species if it is in equilibrium with M^{n+} . For example, the potential of a Ag electrode in a solution of Ag^{+} is

$$E = E_{\text{Ag}^{+}/\text{Ag}}^{\circ} - 0.05916 \log \frac{1}{a_{\text{Ag}^{+}}} = \\ +0.7996 \text{ V} - 0.05916 \log \frac{1}{a_{\text{Ag}^{+}}} \quad 11.5$$

Many of these electrodes, such as Zn, cannot be used in acidic solutions because they are easily oxidized by H^{+} .



If we saturate the indicator electrode's half-cell with AgI, the solubility reaction



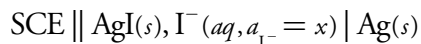
determines the concentration of Ag^+ ; thus

$$a_{\text{Ag}^+} = \frac{K_{\text{sp,AgI}}}{a_{\text{I}^-}} \quad 11.6$$

where $K_{\text{sp,AgI}}$ is the solubility product for AgI. Substituting equation 11.6 into [equation 11.5](#)

$$E_{\text{cell}} = +0.7996 \text{ V} - 0.05916 \log \frac{a_{\text{I}^-}}{K_{\text{sp,AgI}}}$$

we find that the potential of the silver electrode is a function of the activity of I^- . If we incorporate this electrode into a potentiometric electrochemical cell with a saturated calomel electrode



the cell potential is

$$E_{\text{cell}} = K - 0.05916 \log a_{\text{I}^-}$$

where K is a constant that includes the standard-state potential for the Ag^+/Ag redox couple, the solubility product for AgI, the reference electrode's potential, and the junction potential.

If an electrode of the first kind responds to the activity of an ion that is in equilibrium with M^{n+} , we call it an **ELECTRODE OF THE SECOND KIND**. Two common electrodes of the second kind are the calomel and the silver/silver chloride reference electrodes.

REDOX ELECTRODES

An electrode of the first kind or second kind develops a potential as the result of a redox reaction involving a metallic electrode. An electrode also can serve as a source of electrons or as a sink for electrons in an unrelated redox reaction, in which case we call it a **REDOX ELECTRODE**. The Pt cathode in [Figure 11.8](#) and [Example 11.1](#) is a redox electrode because its potential is determined by the activity of Fe^{2+} and Fe^{3+} in the indicator half-cell. Note that a redox electrode's potential often responds to the activity of more than one ion, which can limit its usefulness for direct potentiometry.

11B.4 Membrane Electrodes

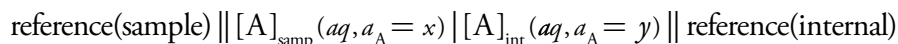
If metals are the only useful materials for constructing indicator electrodes, then there would be few useful applications of potentiometry. In 1901 Fritz

In an electrode of the second kind we link together a redox reaction and another reaction, such as a solubility reaction. You might wonder if we can link together more than two reactions. The short answer is yes. An electrode of the third kind, for example, links together a redox reaction and two other reactions. We will not consider such electrodes in this text.

Haber discovered that there is a change in potential across a glass membrane when its two sides are in solutions of different acidity. The existence of this **MEMBRANE POTENTIAL** led to the development of a whole new class of indicator electrodes called **ION-SELECTIVE ELECTRODES (ISEs)**. In addition to the glass pH electrode, ion-selective electrodes are available for a wide range of ions. It also is possible to construct a membrane electrode for a neutral analyte by using a chemical reaction to generate an ion that can be monitored with an ion-selective electrode. The development of new membrane electrodes continues to be an active area of research.

MEMBRANE POTENTIALS

Figure 11.14 shows a typical potentiometric electrochemical cell equipped with an ion-selective electrode. The short hand notation for this cell is



where the ion-selective membrane is shown by the vertical slash separating the two solutions containing analyte—the sample solution and the ion-selective electrode's internal solution. The electrochemical cell includes two reference electrodes: one immersed in the ion-selective electrode's internal solution and one in the sample. The cell potential, therefore, is

$$E_{\text{cell}} = E_{\text{ref(int)}} - E_{\text{ref(samp)}} + E_{\text{mem}} + E_j \quad 11.7$$

where E_{mem} is the potential across the membrane. Because the junction potential and the potential of the two reference electrodes are constant, any change in E_{cell} is a result of a change in the membrane's potential.

The analyte's interaction with the membrane generates a membrane potential if there is a difference in its activity on the membrane's two sides.

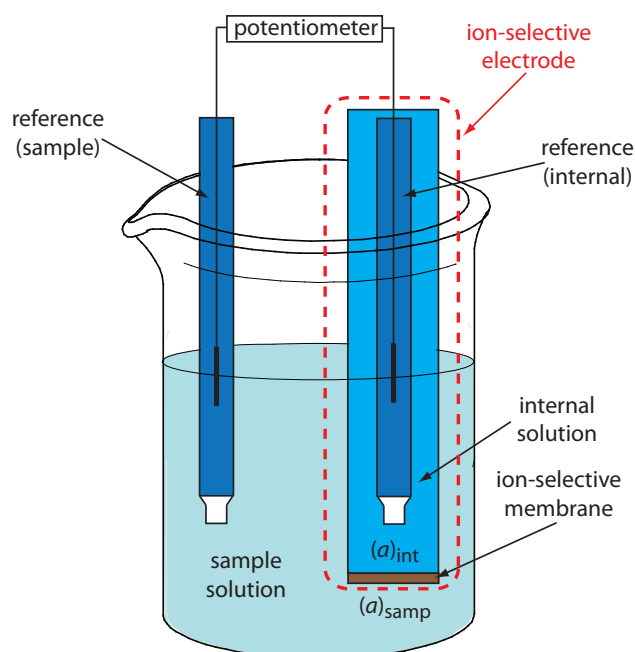


Figure 11.14 Schematic diagram showing a typical potentiometric cell with an ion-selective electrode. The ion-selective electrode's membrane separates the sample, which contains the analyte at an activity of $(a_A)_{\text{samp}}$, from an internal solution containing the analyte with an activity of $(a_A)_{\text{int}}$.

Current is carried through the membrane by the movement of either the analyte or an ion already present in the membrane's matrix. The membrane potential is given by the following Nernst-like equation

$$E_{\text{mem}} = E_{\text{asym}} - \frac{RT}{zF} \ln \frac{(a_A)_{\text{int}}}{(a_A)_{\text{samp}}} \quad 11.8$$

where $(a_A)_{\text{samp}}$ is the analyte's concentration in the sample, $(a_A)_{\text{int}}$ is the concentration of analyte in the ion-selective electrode's internal solution, and z is the analyte's charge. Ideally, E_{mem} is zero when $(a_A)_{\text{int}} = (a_A)_{\text{samp}}$. The term E_{asym} , which is an **ASYMMETRY POTENTIAL**, accounts for the fact that E_{mem} is usually not zero under these conditions.

Substituting equation 11.8 into [equation 11.7](#), assuming a temperature of 25 °C, and rearranging gives

$$E_{\text{cell}} = K + \frac{0.05916}{z} \log(a_A)_{\text{samp}} \quad 11.9$$

where K is a constant that includes the potentials of the two reference electrodes, the junction potentials, the asymmetry potential, and the analyte's activity in the internal solution. Equation 11.9 is a general equation and applies to all types of ion-selective electrodes.

SELECTIVITY OF MEMBRANES

A membrane potential results from a chemical interaction between the analyte and active sites on the membrane's surface. Because the signal depends on a chemical process, most membranes are not selective toward a single analyte. Instead, the membrane potential is proportional to the concentration of each ion that interacts with the membrane's active sites. We can rewrite equation 11.9 to include the contribution of an interferent, I, to the potential

$$E_{\text{cell}} = K + \frac{0.05916}{z_A} \log \left\{ a_A + K_{A,I} (a_I)^{z_A/z_I} \right\}$$

where z_A and z_I are the charges of the analyte and the interferent, and $K_{A,I}$ is a **SELECTIVITY COEFFICIENT** accounting for the relative response of the interferent. The selectivity coefficient is defined as

$$K_{A,I} = \frac{(a_A)_e}{(a_I)_e^{z_A/z_I}} \quad 11.10$$

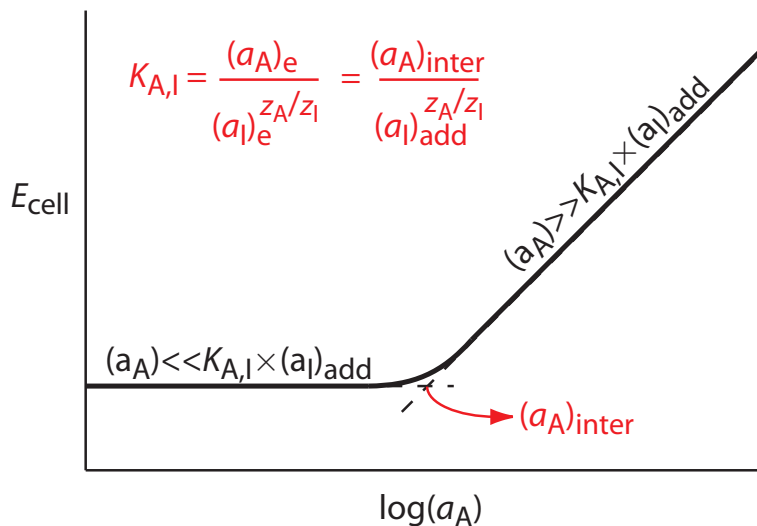
where $(a_A)_e$ and $(a_I)_e$ are the activities of analyte and interferent yielding identical cell potentials. When the selectivity coefficient is 1.00 the membrane responds equally to the analyte and the interferent. A membrane shows good selectivity for the analyte when $K_{A,I}$ is significantly less than 1.00.

For now we simply note that a difference in the analyte's activity results in a membrane potential. As we consider different types of ion-selective electrodes, we will explore more specifically the source of the membrane potential.

E_{asy} in equation 11.8 is similar to E° in [equation 11.1](#).

See [Chapter 3D.4](#) for an additional discussion of selectivity.

Figure 11.15 Diagram showing the experimental determination of an ion-selective electrode's selectivity for an analyte. The activity of analyte corresponding to the intersection of the two linear portions of the curve, $(a_A)_{\text{inter}}$, produces a cell potential identical to that of the interferent. The equation for the selectivity coefficient, $K_{A,I}$, is shown in red.



Selectivity coefficients for most commercially available ion-selective electrodes are provided by the manufacturer. If the selectivity coefficient is not known, it is easy to determine its value experimentally by preparing a series of solutions, each containing the same activity of interferent, $(a_I)_{\text{add}}$, but a different activity of analyte. As shown in Figure 11.15, a plot of cell potential versus the log of the analyte's activity has two distinct linear regions. When the analyte's activity is significantly larger than $K_{A,I} \times (a_I)_{\text{add}}$, the potential is a linear function of $\log(a_A)$, as given by [equation 11.9](#). If $K_{A,I} \times (a_I)_{\text{add}}$ is significantly larger than the analyte's activity, however, the cell potential remains constant. The activity of analyte and interferent at the intersection of these two linear regions is used to calculate $K_{A,I}$.

Example 11.5

Sokalski and co-workers described a method for preparing ion-selective electrodes with significantly improved selectivities.³ For example, a conventional Pb^{2+} ISE has a $\log K_{\text{Pb}^{2+}/\text{Mg}^{2+}}$ of -3.6 . If the potential for a solution in which the activity of Pb^{2+} is 4.1×10^{-12} is identical to that for a solution in which the activity of Mg^{2+} is 0.01025 , what is the value of $\log K_{\text{Pb}^{2+}/\text{Mg}^{2+}}$?

SOLUTION

Making appropriate substitutions into [equation 11.10](#), we find that

$$K_{\text{Pb}^{2+}/\text{Mg}^{2+}} = \frac{(a_A)_e}{(a_I)_e^{z_A/z_I}} = \frac{4.1 \times 10^{-12}}{(0.01025)^{2+/2+}} = 4.0 \times 10^{-10}$$

The value of $\log K_{\text{Pb}^{2+}/\text{Mg}^{2+}}$, therefore, is -9.40 .

Practice Exercise 11.5

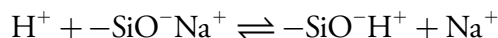
An ion-selective electrode for NO_2^- has $\log K_{A,I}$ values of -3.1 for F^- , -4.1 for SO_4^{2-} , -1.2 for I^- , and -3.3 for NO_3^- . Which ion is the most serious interferent and for what activity of this interferent is the potential equivalent to a solution in which the activity of NO_2^- is 2.75×10^{-4} ?

Click [here](#) to review your answer to this exercise.

3 Sokalski, T.; Ceresa, A.; Zwicky, T.; Pretsch, E. *J. Am. Chem. Soc.* **1997**, *119*, 11347–11348.

GLASS ION-SELECTIVE ELECTRODES

The first commercial **GLASS ELECTRODES** were manufactured using Corning 015, a glass with a composition that is approximately 22% Na₂O, 6% CaO and 72% SiO₂. When immersed in an aqueous solution for several hours, the outer approximately 10 nm of the membrane's surface becomes hydrated, resulting in the formation of negatively charged sites, —SiO[−]. Sodium ions, Na⁺, serve as counter ions. Because H⁺ binds more strongly to —SiO[−] than does Na⁺, they displace the sodium ions



giving rise to the membrane's selectivity for H⁺. The transport of charge across the membrane is carried by the Na⁺ ions. The potential of a glass electrode using Corning 015 obeys the equation

$$E_{\text{cell}} = K + 0.05916 \log a_{\text{H}^+} \quad 11.11$$

over a pH range of approximately 0.5 to 9. At more basic pH levels the glass membrane is more responsive to other cations, such as Na⁺ and K⁺.

Example 11.6

For a Corning 015 glass membrane the selectivity coefficient $K_{\text{H}^+/\text{Na}^+}$ is $\approx 10^{-11}$. What is the expected error when measuring the pH of a solution in which the activity of H⁺ is 2×10^{-13} and the activity of Na⁺ is 0.05?

SOLUTION

A solution in which the actual activity of H⁺, $(a_{\text{H}^+})_{\text{act}}$, is 2×10^{-13} has a pH of 12.7. Because the electrode responds to both H⁺ and Na⁺, the apparent activity of H⁺, $(a_{\text{H}^+})_{\text{app}}$, is

$$\begin{aligned} (a_{\text{H}^+})_{\text{app}} &= (a_{\text{H}^+})_{\text{act}} + (K_{\text{H}^+/\text{Na}^+} \times a_{\text{Na}^+}) \\ &= 2 \times 10^{-13} + (10^{-11} \times 0.05) \\ &= 7 \times 10^{-13} \text{M} \end{aligned}$$

The apparent activity of H⁺ is equivalent to a pH of 12.2, an error of −0.5 pH units.

$$\text{pH} = -\log(a_{\text{H}^+})$$

Replacing Na₂O and CaO with Li₂O and BaO extends the useful pH range of glass membrane electrodes to pH levels greater than 12.

Glass membrane pH electrodes are often available in a combination form that includes both the indicator electrode and the reference electrode. The use of a single electrode greatly simplifies the measurement of pH. An example of a typical combination electrode is shown in [Figure 11.16](#).

The observation that the Corning 015 glass membrane responds to ions other than H⁺ (see Example 11.6) led to the development of glass membranes with a greater selectivity for other cations. For example, a glass

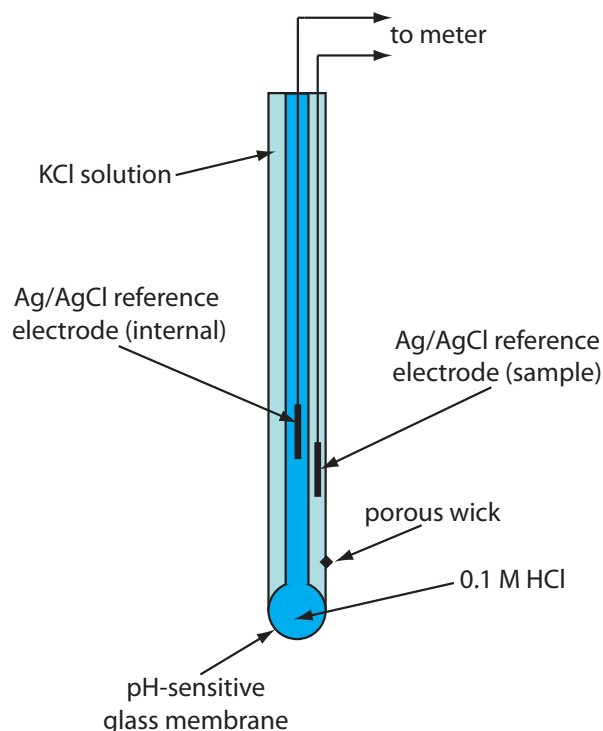


Figure 11.16 Schematic diagram showing a combination glass electrode for measuring pH. The indicator electrode consists of a pH-sensitive glass membrane and an internal Ag/AgCl reference electrode in a solution of 0.1 M HCl. The sample's reference electrode is a Ag/AgCl electrode in a solution of KCl (which may be saturated with KCl or contain a fixed concentration of KCl). A porous wick serves as a salt bridge between the sample and its reference electrode.

membrane with a composition of 11% Na₂O, 18% Al₂O₃, and 71% SiO₂ is used as an ion-selective electrode for Na⁺. Other glass ion-selective electrodes have been developed for the analysis of Li⁺, K⁺, Rb⁺, Cs⁺, NH₄⁺, Ag⁺, and Tl⁺. Table 11.1 provides several examples.

Because the typical thickness of an ion-selective electrode's glass membrane is about 50 μm, they must be handled carefully to avoid cracks or breakage. Glass electrodes usually are stored in a solution of a suitable storage buffer recommended by the manufacturer, which ensures that the membrane's outer surface is fully hydrated. If your glass electrode does dry out, you must recondition it by soaking for several hours in a solution containing the analyte. The composition of a glass membrane changes over time, affecting the electrode's performance. The average lifetime for a typical glass electrode is several years.

Table 11.1 Representative Examples of Glass Membrane Ion-Selective Electrodes for Analytes Other than H⁺

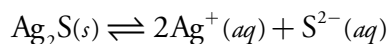
analyte	membrane composition	selectivity coefficients ^a
Na ⁺	11% Na ₂ O, 18% Al ₂ O ₃ , 71% SiO ₂	$K_{\text{Na}^+/\text{H}^+} = 1000$ $K_{\text{Na}^+/\text{K}^+} = 0.001$ $K_{\text{Na}^+/\text{Li}^+} = 0.001$
Li ⁺	15% Li ₂ O, 25% Al ₂ O ₃ , 60% SiO ₂	$K_{\text{Li}^+/\text{Na}^+} = 0.3$ $K_{\text{Li}^+/\text{K}^+} = 0.001$
K ⁺	27% Na ₂ O, 5% Al ₂ O ₃ , 68% SiO ₂	$K_{\text{K}^+/\text{Na}^+} = 0.05$

^a Selectivity coefficients are approximate; values found experimentally may vary substantially from the listed values. See Cammann, K. *Working With Ion-Selective Electrodes*, Springer-Verlag: Berlin, 1977.

SOLID-STATE ION-SELECTIVE ELECTRODES

A **SOLID-STATE ION-SELECTIVE ELECTRODE** uses a membrane consisting of either a polycrystalline inorganic salt or a single crystal of an inorganic salt. We can fashion a polycrystalline solid-state ion-selective electrode by sealing a 1–2 mm thick pellet of Ag_2S —or a mixture of Ag_2S and a second silver salt or another metal sulfide—into the end of a nonconducting plastic cylinder, filling the cylinder with an internal solution containing the analyte, and placing a reference electrode into the internal solution. Figure 11.17 shows a typical design.

The membrane potential for a Ag_2S pellet develops as the result of a difference in the extent of the solubility reaction



on the membrane's two sides, with charge carried across the membrane by Ag^+ ions. When we use the electrode to monitor the activity of Ag^+ , the cell potential is

$$E_{\text{cell}} = K + 0.05916 \log a_{\text{Ag}^+}$$

The membrane also responds to the activity of S^{2-} , with a cell potential of

$$E_{\text{cell}} = K - \frac{0.05916}{2} \log a_{\text{S}^{2-}}$$

If we combine an insoluble silver salt, such as AgCl , with the Ag_2S , then the membrane potential also responds to the concentration of Cl^- , with a cell potential of

$$E_{\text{cell}} = K - 0.05916 \log a_{\text{Cl}^-}$$

By mixing Ag_2S with CdS , CuS , or PbS , we can make an ion-selective electrode that responds to the activity of Cd^{2+} , Cu^{2+} , or Pb^{2+} . In this case the cell potential is

$$E_{\text{cell}} = K + \frac{0.05916}{2} \log a_{\text{M}^{2+}}$$

where $a_{\text{M}^{2+}}$ is the activity of the metal ion.

[Table 11.2](#) provides examples of polycrystalline, Ag_2S -based solid-state ion-selective electrodes. The selectivity of these ion-selective electrodes is determined by the relative solubility of the compounds. A Cl^- ISE using a $\text{Ag}_2\text{S}/\text{AgCl}$ membrane is more selective for Br^- ($K_{\text{Cl}^-/\text{Br}^-} = 10^2$) and for I^- ($K_{\text{Cl}^-/\text{I}^-} = 10^6$) because AgBr and AgI are less soluble than AgCl . If the activity of Br^- is sufficiently high, AgCl at the membrane/solution interface is replaced by AgBr and the electrode's response to Cl^- decreases substantially. Most of the polycrystalline ion-selective electrodes listed in [Table 11.2](#) can

The NaCl in a salt shaker is an example of polycrystalline material because it consists of many small crystals of sodium chloride. The NaCl salt plates shown in [Figure 10.32a](#), on the other hand, are an example of a single crystal of sodium chloride.

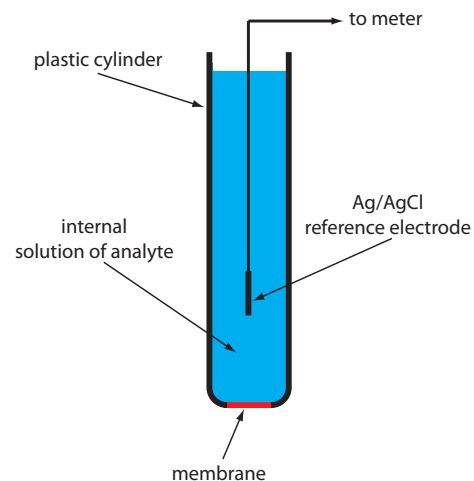


Figure 11.17 Schematic diagram of a solid-state electrode. The internal solution contains a solution of analyte of fixed activity.

be used over an extended range of pH levels. The equilibrium between S^{2-} and HS^- limits the analysis for S^{2-} to a pH range of 13–14.

The membrane of a F^- ion-selective electrode is fashioned from a single crystal of LaF_3 , which is usually doped with a small amount of EuF_2 to enhance the membrane's conductivity. Because EuF_2 provides only two

Table 11.2 Representative Examples of Polycrystalline Solid-State Ion-Selective Electrodes

analyte	membrane composition	selectivity coefficients ^a
Ag^+	Ag_2S	$K_{Ag^+/Cu^{2+}} = 10^{-6}$ $K_{Ag^+/Pb^{2+}} = 10^{-10}$ Hg^{2+} interferes
Cd^{2+}	CdS/Ag_2S	$K_{Cd^{2+}/Fe^{2+}} = 200$ $K_{Cd^{2+}/Pb^{2+}} = 6$ Ag^+ , Hg^{2+} , and Cu^{2+} must be absent
Cu^{2+}	CuS/Ag_2S	$K_{Cu^{2+}/Fe^{3+}} = 10$ $K_{Cd^{2+}/Cu^+} = 1$ Ag^+ and Hg^{2+} must be absent
Pb^{2+}	PbS/Ag_2S	$K_{Pb^{2+}/Fe^{3+}} = 1$ $K_{Pb^{2+}/Cd^{2+}} = 1$ Ag^+ , Hg^{2+} , and Cu^{2+} must be absent
Br^-	$AgBr/Ag_2S$	$K_{Br^-/I^-} = 5000$ $K_{Br^-/Cl^-} = 0.005$ $K_{Br^-/OH^-} = 10^{-5}$ S^{2-} must be absent
Cl^-	$AgCl/Ag_2S$	$K_{Cl^-/I^-} = 10^6$ $K_{Cl^-/Br^-} = 100$ $K_{Cl^-/OH^-} = 0.01$ S^{2-} must be absent
I^-	AgI/Ag_2S	$K_{I^-/S^{2-}} = 30$ $K_{I^-/Br^-} = 10^{-4}$ $K_{I^-/Cl^-} = 10^{-6}$ $K_{I^-/OH^-} = 10^{-7}$
SCN^-	$AgSCN/Ag_2S$	$K_{SCN^-/I^-} = 10^3$ $K_{SCN^-/Br^-} = 100$ $K_{SCN^-/Cl^-} = 0.1$ $K_{SCN^-/OH^-} = 0.01$ S^{2-} must be absent
S^{2-}	Ag_2S	Hg^{2+} interferes

^a Selectivity coefficients are approximate; values found experimentally may vary substantially from the listed values. See Cammann, K. *Working With Ion-Selective Electrodes*, Springer-Verlag: Berlin, 1977.

F⁻ ions—compared to the three F⁻ ions in LaF₃—each EuF₂ produces a vacancy in the crystal's lattice. Fluoride ions pass through the membrane by moving into adjacent vacancies. As shown in [Figure 11.17](#), the LaF₃ membrane is sealed into the end of a non-conducting plastic cylinder, which contains a standard solution of F⁻, typically 0.1 M NaF, and a Ag/AgCl reference electrode.

The membrane potential for a F⁻ ISE results from a difference in the solubility of LaF₃ on opposite sides of the membrane, with the potential given by

$$E_{\text{cell}} = K - 0.05916 \log a_{\text{F}^-}$$

One advantage of the F⁻ ion-selective electrode is its freedom from interference. The only significant exception is OH⁻ ($K_{\text{F}^-/\text{OH}^-} = 0.1$), which imposes a maximum pH limit for a successful analysis.

Example 11.7

What is the maximum pH that we can tolerate if we wish to analyze a solution in which the activity of F⁻ is 1×10^{-5} and if the error is to be less than 1%?

SOLUTION

In the presence of OH⁻ the cell potential is

$$E_{\text{cell}} = K - 0.05916 \log \left\{ a_{\text{F}^-} + K_{\text{F}^-/\text{OH}^-} \times a_{\text{OH}^-} \right\}$$

To achieve an error of less than 1%, the term $K_{\text{F}^-/\text{OH}^-} \times a_{\text{OH}^-}$ must be less than 1% of a_{F^-} ; thus

$$K_{\text{F}^-/\text{OH}^-} \times a_{\text{OH}^-} \leq 0.01 \times a_{\text{F}^-}$$

$$0.10 \times a_{\text{OH}^-} \leq 0.01 \times (1 \times 10^{-5})$$

Solving for a_{OH^-} gives its maximum allowable activity as 1×10^{-6} , which corresponds to a pH of less than 8.

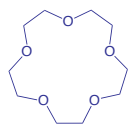
Practice Exercise 11.6

Suppose you wish to use the nitrite-selective electrode in [Practice Exercise 11.5](#) to measure the activity of NO₂⁻. If the activity of NO₂⁻ is 2.2×10^{-4} , what is the maximum pH you can tolerate if the error due to OH⁻ is to be less than 10%? The selectivity coefficient for OH⁻, $K_{\text{NO}_2^-/\text{OH}^-}$, is 630. Do you expect the electrode to have a lower pH limit? Clearly explain your answer.

Click [here](#) to review your answer to this exercise.

Poisoning simply means that the surface has been chemically modified, such as AgBr forming on the surface of a AgCl membrane.

An **IONOPHORE** is a ligand whose exterior is hydrophobic and whose interior is hydrophilic. The crown ether shown here



is one example of a neutral ionophore.

Below a pH of 4 the predominate form of fluoride in solution is HF, which does not contribute to the membrane potential. For this reason, an analysis for fluoride must be carried out at a pH greater than 4.

Unlike a glass membrane ion-selective electrodes, a solid-state ISE does not need to be conditioned before it is used, and it may be stored dry. The surface of the electrode is subject to poisoning, as described above for a Cl^- ISE in contact with an excessive concentration of Br^- . If an electrode is poisoned, it can be returned to its original condition by sanding and polishing the crystalline membrane.

LIQUID-BASED ION-SELECTIVE ELECTRODES

Another class of ion-selective electrodes uses a hydrophobic membrane containing a liquid organic complexing agent that reacts selectively with the analyte. Three types of organic complexing agents have been used: cation exchangers, anion exchangers, and neutral ionophores. A membrane potential exists if the analyte's activity is different on the two sides of the membrane. Current is carried through the membrane by the analyte.

One example of a **LIQUID-BASED ION-SELECTIVE ELECTRODE** is that for Ca^{2+} , which uses a porous plastic membrane saturated with the cation exchanger di-(*n*-decyl) phosphate. As shown in Figure 11.18, the membrane is placed at the end of a non-conducting cylindrical tube, and is in contact with two reservoirs. The outer reservoir contains di-(*n*-decyl) phosphate in di-*n*-octylphenylphosphonate, which soaks into the porous membrane. The inner reservoir contains a standard aqueous solution of Ca^{2+} and a Ag/AgCl reference electrode. Calcium ion-selective electrodes are also available in which the di-(*n*-decyl) phosphate is immobilized in a polyvinyl chloride (PVC) membrane, eliminating the need for the outer reservoir containing di-(*n*-decyl) phosphate.

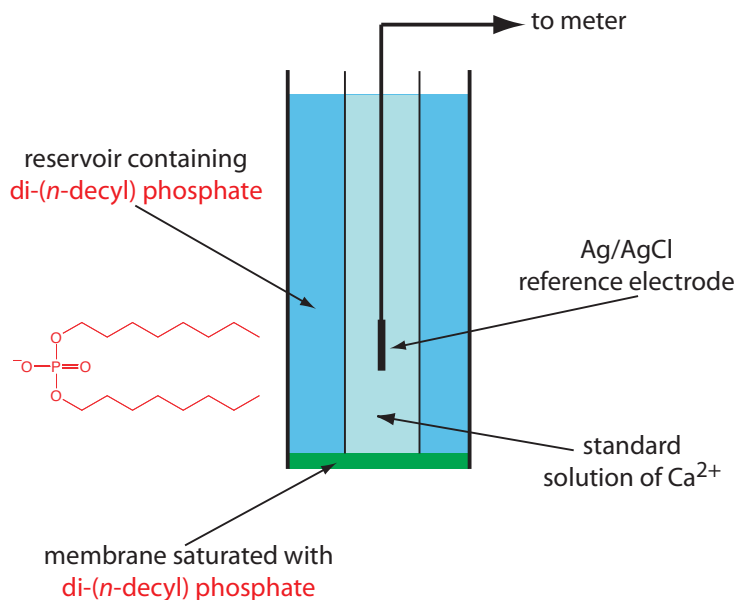


Figure 11.18 Schematic diagram showing a liquid-based ion-selective electrode for Ca^{2+} . The structure of the cation exchanger, di-(*n*-decyl) phosphate, is shown in red.

The membrane potential for the Ca^{2+} ISE develops as the result of a difference in the extent of the complexation reaction



on the two sides of the membrane, where (*mem*) indicates a species that is present in the membrane. The cell potential for the Ca^{2+} ion-selective electrode is

$$E_{\text{cell}} = K + \frac{0.05916}{2} \log a_{\text{Ca}^{2+}}$$

The selectivity of this electrode for Ca^{2+} is very good, with only Zn^{2+} showing greater selectivity.

Table 11.3 lists the properties of several liquid-based ion-selective electrodes. An electrode using a liquid reservoir can be stored in a dilute solution of analyte and needs no additional conditioning before use. The lifetime of an electrode with a PVC membrane, however, is proportional to its exposure to aqueous solutions. For this reason these electrodes are best stored by covering the membrane with a cap along with a small amount of wetted gauze to maintain a humid environment. Before using the electrode it is conditioned in a solution of analyte for 30–60 minutes.

GAS-SENSING ELECTRODES

A number of membrane electrodes respond to the concentration of a dissolved gas. The basic design of a **GAS-SENSING ELECTRODE** is shown in Figure 11.19, consisting of a thin membrane that separates the sample from an inner solution containing an ion-selective electrode. The membrane is permeable to the gaseous analyte, but impermeable to nonvolatile components in the sample's matrix. The gaseous analyte passes through the membrane where it reacts with the inner solution, producing a species whose concentration is monitored by the ion-selective electrode. For example, in a CO_2 electrode, CO_2 diffuses across the membrane where it reacts in the inner solution to produce H_3O^+ .



The change in the activity of H_3O^+ in the inner solution is monitored with a pH electrode, for which the cell potential is given by equation 11.11. To find the relationship between the activity of H_3O^+ in the inner solution and the activity CO_2 in the inner solution we rearrange the equilibrium constant expression for reaction 11.10; thus

$$a_{\text{H}_3\text{O}^+} = K_a \times \frac{a_{\text{CO}_2}}{a_{\text{HCO}_3^-}} \quad 11.13$$

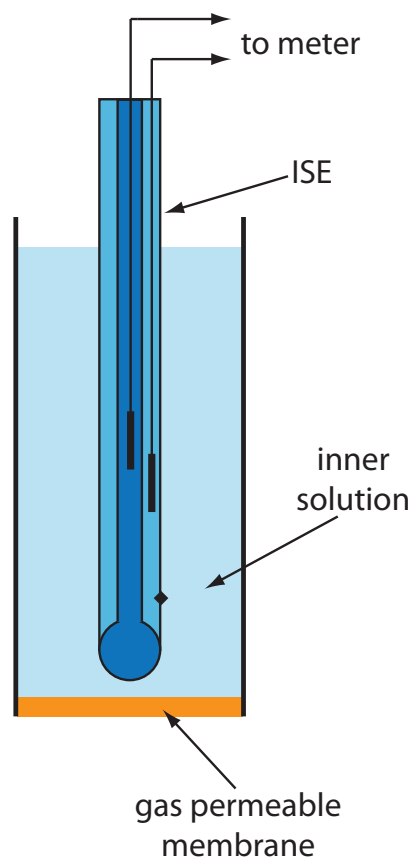


Figure 11.19 Schematic diagram of a gas-sensing membrane electrode.

Table 11.3 Representative Examples of Liquid-Based Ion-Selective Electrodes

analyte	membrane composition	selectivity coefficients ^a
Ca ²⁺	di-(<i>n</i> -decyl) phosphate in PVC	$K_{Ca^{2+}/Zn^{2+}} = 1-5$ $K_{Ca^{2+}/Al^{3+}} = 0.90$ $K_{Ca^{2+}/Mn^{2+}} = 0.38$ $K_{Ca^{2+}/Cu^{2+}} = 0.070$ $K_{Ca^{2+}/Mg^{2+}} = 0.032$
K ⁺	valinomycin in PVC	$K_{K^+/Rb^+} = 1.9$ $K_{K^+/Cs^+} = 0.38$ $K_{K^+/Li^+} = 10^{-4}$ $K_{K^+/Na^+} = 10^{-5}$
Li ⁺	ETH 149 in PVC	$K_{Li^+/H^+} = 1$ $K_{Li^+/Na^+} = 0.05$ $K_{Li^+/K^+} = 0.007$
NH ₄ ⁺	nonactin and monactin in PVC	$K_{NH_4^+/K^+} = 0.12$ $K_{NH_4^+/H^+} = 0.016$ $K_{NH_4^+/Li^+} = 0.0042$ $K_{NH_4^+/Na^+} = 0.002$
ClO ₄ ⁻	Fe(<i>o</i> -phen) ₃ ³⁺ in <i>p</i> -nitrocymene with porous membrane	$K_{ClO_4^-/OH^-} = 1$ $K_{ClO_4^-/I^-} = 0.012$ $K_{ClO_4^-/NO_3^-} = 0.0015$ $K_{ClO_4^-/Br^-} = 5.6 \times 10^{-4}$ $K_{ClO_4^-/Cl^-} = 2.2 \times 10^{-4}$
NO ₃ ⁻	tetradodecyl ammonium nitrate in PVC	$K_{NO_3^-/Cl^-} = 0.006$ $K_{NO_3^-/F^-} = 9 \times 10^{-4}$

^a Selectivity coefficients are approximate; values found experimentally may vary substantially from the listed values. See Cammann, K. *Working With Ion-Selective Electrodes*, Springer-Verlag: Berlin, 1977.

where K_a is the equilibrium constant. If the activity of HCO₃⁻ in the internal solution is sufficiently large, then its activity is not affected by the small amount of CO₂ that passes through the membrane. Substituting [equation 11.13](#) into [equation 11.11](#) gives

$$E_{\text{cell}} = K' + 0.05916 \log a_{\text{CO}_2}$$

where K' is a constant that includes the constant for the pH electrode, the equilibrium constant for [reaction 11.12](#) and the activity of HCO₃⁻ in the inner solution.

[Table 11.4](#) lists the properties of several gas-sensing electrodes. The composition of the inner solution changes with use, and both the inner solution and the membrane must be replaced periodically. Gas-sensing elec-

Table 11.4 Representative Examples of Gas-Sensing Electrodes

analyte	inner solution	reaction in inner solution	ion-selective electrode
CO ₂	10 mM NaHCO ₃ 10 mM NaCl	CO ₂ (aq) + 2H ₂ O(l) ⇌ HCO ₃ ⁻ (aq) + H ₃ O ⁺ (aq)	glass pH ISE
HCN	10 mM KAg(CN) ₂	HCN(aq) + H ₂ O(l) ⇌ CN ⁻ (aq) + H ₃ O ⁺ (aq)	Ag ₂ S solid-state ISE
HF	1 M H ₃ O ⁺	HF(aq) + H ₂ O(l) ⇌ F ⁻ (aq) + H ₃ O ⁺ (aq)	F ⁻ solid-state ISE
H ₂ S	pH 5 citrate buffer	H ₂ S(aq) + H ₂ O(l) ⇌ HS ⁻ (aq) + H ₃ O ⁺ (aq)	Ag ₂ S solid-state ISE
NH ₃	10 mM NH ₄ Cl 0.1 M KNO ₃	NH ₃ (aq) + H ₂ O(l) ⇌ NH ₄ ⁺ (aq) + OH ⁻ (aq)	glass pH ISE
NO ₂	20 mM NaNO ₂ 0.1 M KNO ₃	2NO ₂ (aq) + 3H ₂ O(l) ⇌ NO ₃ ⁻ (aq) + NO ₂ ⁻ (aq) + 2H ₃ O ⁺ (aq)	glass pH ISE
SO ₂	1 mM NaHSO ₃ pH 5	SO ₂ (aq) + 2H ₂ O(l) ⇌ HSO ₃ ⁻ (aq) + H ₃ O ⁺ (aq)	glass pH ISE

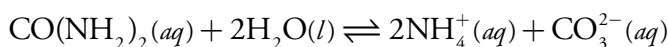
Source: Cammann, K. *Working With Ion-Selective Electrodes*, Springer-Verlag: Berlin, 1977.

trodes are stored in a solution similar to the internal solution to minimize their exposure to atmospheric gases.

POTENTIOMETRIC BIOSENSORS

The approach for developing gas-sensing electrodes can be modified to create potentiometric electrodes that respond to a biochemically important species. The most common class of potentiometric biosensors are **ENZYME ELECTRODES**, in which we trap or immobilize an enzyme at the surface of a potentiometric electrode. The analyte's reaction with the enzyme produces a product whose concentration is monitored by the potentiometric electrode. Potentiometric biosensors have also been designed around other biologically active species, including antibodies, bacterial particles, tissues, and hormone receptors.

One example of an enzyme electrode is the urea electrode, which is based on the catalytic hydrolysis of urea by urease



[Figure 11.20](#) shows one version of the urea electrode, which modifies a gas-sensing NH₃ electrode by adding a dialysis membrane that traps a pH 7.0 buffered solution of urease between the dialysis membrane and the gas permeable membrane.⁴ When immersed in the sample, urea diffuses through

An NH₃ electrode, as shown in Table 11.4, uses a gas-permeable membrane and a glass pH electrode. The NH₃ diffuses across the membrane where it changes the pH of the internal solution.

⁴ (a) Papastathopoulos, D. S.; Rechnitz, G. A. *Anal. Chim. Acta* **1975**, *79*, 17–26; (b) Riechel, T. *L. J. Chem. Educ.* **1984**, *61*, 640–642.

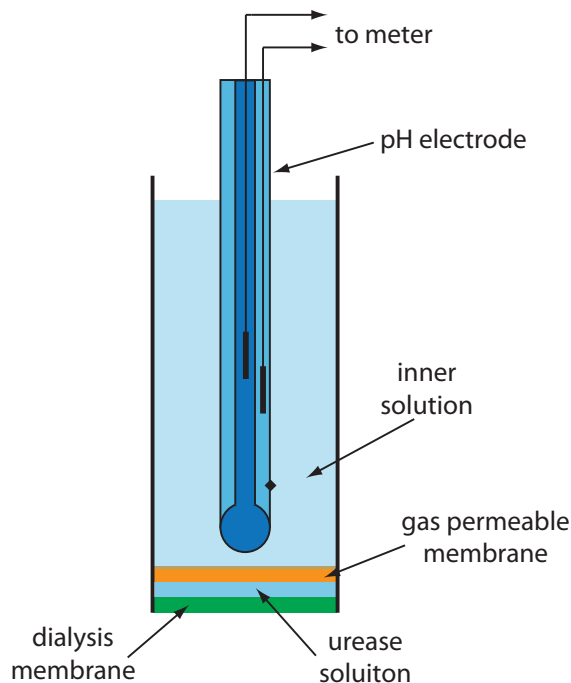
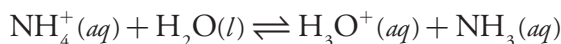


Figure 11.20 Schematic diagram showing an enzyme-based potentiometric biosensor for urea. A solution of the enzyme urease is trapped between a dialysis membrane and a gas permeable membrane. Urea diffuses across the dialysis membrane and reacts with urease, producing NH_3 that diffuses across the gas permeable membrane. The resulting change in the internal solution's pH is measured with the pH electrode.

the dialysis membrane where it reacts with the enzyme urease to form the ammonium ion, NH_4^+ , which is in equilibrium with NH_3 .



The NH_3 , in turn, diffuses through the gas permeable membrane where a pH electrode measures the resulting change in pH. The response of the electrode to the concentration of urea is given by

$$E_{\text{cell}} = K - 0.05916 \log a_{\text{urea}} \quad 11.14$$

Another version of the urea electrode ([Figure 11.21](#)) immobilizes the enzyme urease in a polymer membrane formed directly on the tip of a glass pH electrode.⁵ In this case the response of the electrode is

$$\text{pH} = K a_{\text{urea}} \quad 11.15$$

Few potentiometric biosensors are commercially available. As shown in [Figure 11.20](#) and [Figure 11.21](#), however, it is possible to convert an ion-selective electrode or a gas-sensing electrode into a biosensor. Several representative examples are described in [Table 11.5](#), and additional examples can be found in this chapter's additional resources.

11B.5 Quantitative Applications

The potentiometric determination of an analyte's concentration is one of the most common quantitative analytical techniques. Perhaps the most frequent analytical measurement is the determination of a solution's pH, a measurement we will consider in more detail later in this section. Other ar-

[Problem 11.7](#) asks you to show that equation 11.14 is correct.

[Problem 11.8](#) asks you to explain the difference between equation 11.14 and equation 11.15.

⁵ Tor, R.; Freeman, A. *Anal. Chem.* **1986**, *58*, 1042–1046.

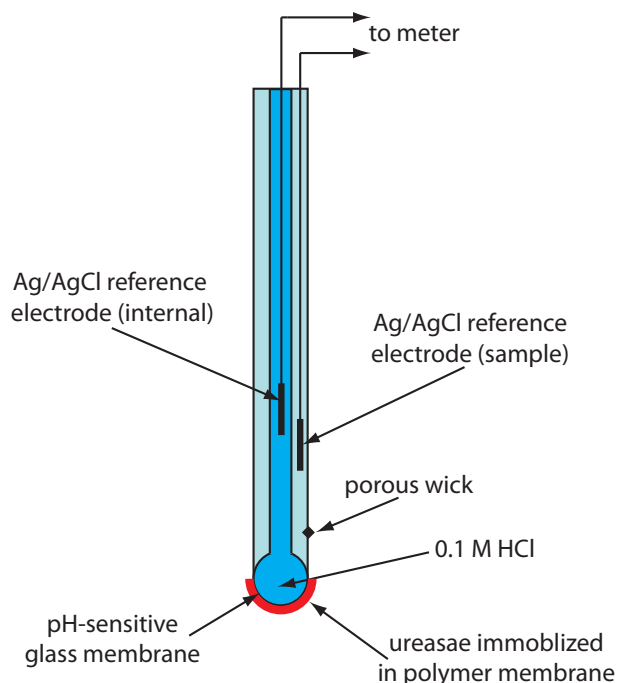


Figure 11.21 Schematic diagram of an enzyme-based potentiometric biosensor for urea in which urease is immobilized in a polymer membrane coated onto the pH-sensitive glass membrane of a pH electrode.

eas where potentiometry is important are clinical chemistry, environmental chemistry, and potentiometric titrations. Before considering representative applications, however, we need to examine more closely the relationship between cell potential and the analyte's concentration and methods for standardizing potentiometric measurements.

Table 11.5 Representative Examples of Potentiometric Biosensors^a

analyte	biologically active phase ^b	substance determined
5'-adenosinemonophosphate (5'-AMP)	AMP-deaminase (E)	NH ₃
L-arginine	arginine and urease (E)	NH ₃
asparagine	asparaginase (E)	NH ₄ ⁺
L-cysteine	<i>Proteus morgani</i> (B)	H ₂ S
L-glutamate	yellow squash (T)	CO ₂
L-glutamine	<i>Sarcina flava</i> (B)	NH ₃
oxalate	oxalate decarboxylase (E)	CO ₂
penicillin	penicillinase (E)	H ₃ O ⁺
L-phenylalanine	L-amino acid oxidase/horseradish peroxidase (E)	I ⁻
sugars	bacteria from dental plaque (B)	H ₃ O ⁺
urea	urease (E)	NH ₃ or H ₃ O ⁺

^a Source: Compiled from Cammann, K. *Working With Ion-Selective Electrodes*, Springer-Verlag: Berlin, 1977 and Lunte, C. E.; Heineman, W. R. "Electrochemical techniques in Bioanalysis," in Steckham, E. ed. *Topics in Current Chemistry*, Vol. 143, Springer-Verlag: Berlin, 1988, p.8.

^b Abbreviations: E = enzyme; B = bacterial particle; T = tissue.

ACTIVITY AND CONCENTRATION

The Nernst equation relates the cell potential to the analyte's activity. For example, the Nernst equation for a metallic electrode of the first kind is

$$E_{\text{cell}} = K + \frac{0.05916}{n} \log a_{\text{M}^{n+}} \quad 11.16$$

where $a_{\text{M}^{n+}}$ is the activity of the metal ion. When we use a potentiometric electrode, however, our goal is to determine the analyte's concentration. As we learned in Chapter 6, an ion's activity is the product of its concentration, $[\text{M}^{n+}]$, and a matrix-dependent activity coefficient, $\gamma_{\text{M}^{n+}}$.

$$a_{\text{M}^{n+}} = [\text{M}^{n+}] \gamma_{\text{M}^{n+}} \quad 11.17$$

Substituting equation 11.17 into equation 11.16 and rearranging, gives

$$E_{\text{cell}} = K + \frac{0.05916}{n} \log \gamma_{\text{M}^{n+}} + \frac{0.05916}{n} \log [\text{M}^{n+}] \quad 11.18$$

We can solve equation 11.18 for the metal ion's concentration if we know the value for its activity coefficient. Unfortunately, if we do not know the exact ionic composition of the sample's matrix—which is the usual situation—then we cannot calculate the value of $\gamma_{\text{M}^{n+}}$. There is a solution to this dilemma. If we design our system so that the standards and the samples have an identical matrix, then the value of $\gamma_{\text{M}^{n+}}$ remains constant and equation 11.18 simplifies to

$$E_{\text{cell}} = K' + \frac{0.05916}{n} \log [\text{M}^{n+}]$$

where K' includes the activity coefficient.

QUANTITATIVE ANALYSIS USING EXTERNAL STANDARDS

Before determining the concentration of analyte in a sample it is necessary to standardize the electrode. If the electrode's response obeys the Nernst equation, then we only need to determine the constant K using a single external standard. Because a small deviation from the ideal slope of $\pm RT/nF$ or $\pm RT/zF$ is not unexpected, we usually choose to use two or more external standards.

In the absence of interferents, a calibration curve of E_{cell} versus $\log a_{\text{A}}$, where A is the analyte, is a straight line. A plot of E_{cell} versus $\log [\text{A}]$, however, may show curvature at higher concentrations of analyte as a result of a matrix-dependent change in the analyte's activity coefficient. To maintain a consistent matrix we can add a high concentration of inert electrolyte to all samples and standards. If the concentration of added electrolyte is sufficient, the difference between the sample's matrix and that of the standards does not affect the ionic strength and the activity coefficient remains essentially

To review the use of external standards, see [Section 5C.2](#).

constant. The inert electrolyte that we add to the sample and standards is called a **TOTAL IONIC STRENGTH ADJUSTMENT BUFFER** (TISAB).

Example 11.8

The concentration of Ca^{2+} in a water sample is determined using the method of external standards. The ionic strength of the samples and the standards was maintained at a nearly constant level by making each solution 0.5 M in KNO_3 . The measured cell potentials for the external standards are shown in the following table.

$[\text{Ca}^{2+}]$ (M)	E_{cell} (V)
1.00×10^{-5}	-0.125
5.00×10^{-5}	-0.103
1.00×10^{-4}	-0.093
5.00×10^{-4}	-0.072
1.00×10^{-3}	-0.065
5.00×10^{-3}	-0.043
1.00×10^{-2}	-0.033

What is the concentration of Ca^{2+} in a water sample if its cell potential is found to be -0.084 V?

SOLUTION

Linear regression gives the calibration curve shown in Figure 11.22, with an equation of

$$E_{\text{cell}} = 0.027 + 0.0303 \log[\text{Ca}^{2+}]$$

Substituting the sample's cell potential gives the concentration of Ca^{2+} as 2.17×10^{-4} M. Note that the slope of the calibration curve, which is 0.0303, is slightly larger than its ideal value of $0.05916/2 = 0.02958$; this is not unusual and is one reason for using multiple standards.

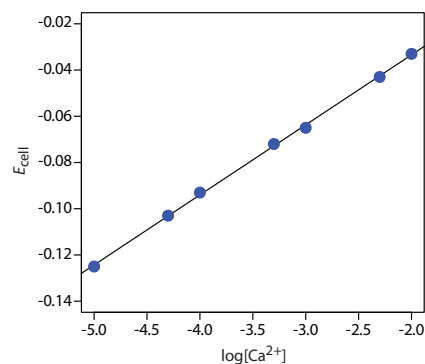


Figure 11.22 Calibration curve for the data in Example 11.8.

QUANTITATIVE ANALYSIS USING THE METHOD OF STANDARD ADDITIONS

Another approach to calibrating a potentiometric electrode is the method of standard additions. First, we transfer a sample with a volume of V_A and an analyte concentration of C_A into a beaker and measure the potential, $(E_{\text{cell}})_A$. Next, we make a standard addition by adding to the sample a small volume, V_{std} , of a standard containing a known concentration of analyte, C_{std} , and measure the potential, $(E_{\text{cell}})_{\text{std}}$. If V_{std} is significantly smaller than V_A , then we can safely ignore the change in the sample's matrix and assume that analyte's activity coefficient is constant. [Example 11.9](#) demonstrates

To review the method of standard additions, see [Section 5C.3](#).

how we can use a one-point standard addition to determine the concentration of analyte in a sample.

Example 11.9

The concentration of Ca^{2+} in a sample of sea water is determined using a Ca ion-selective electrode and a one-point standard addition. A 10.00-mL sample is transferred to a 100-mL volumetric flask and diluted to volume. A 50.00-mL aliquot of the sample is placed in a beaker with the Ca ISE and a reference electrode, and the potential is measured as -0.05290 V. After adding a 1.00-mL aliquot of a 5.00×10^{-2} M standard solution of Ca^{2+} the potential is -0.04417 V. What is the concentration of Ca^{2+} in the sample of sea water?

SOLUTION

To begin, we write the Nernst equation before and after adding the standard addition. The cell potential for the sample is

$$(E_{\text{cell}})_A = K + \frac{0.05916}{2} \log C_A$$

and that following the standard addition is

$$(E_{\text{cell}})_{\text{std}} = K + \frac{0.05916}{2} \log \left\{ \frac{V_A}{V_{\text{tot}}} C_A + \frac{V_{\text{std}}}{V_{\text{tot}}} C_{\text{std}} \right\}$$

where V_{tot} is the total volume ($V_A + V_{\text{std}}$) after the standard addition. Subtracting the first equation from the second equation gives

$$\begin{aligned} \Delta E_{\text{cell}} &= (E_{\text{cell}})_{\text{std}} - (E_{\text{cell}})_A = \\ &= \frac{0.05916}{2} \log \left\{ \frac{V_A}{V_{\text{tot}}} C_A + \frac{V_{\text{std}}}{V_{\text{tot}}} C_{\text{std}} \right\} - \frac{0.05916}{2} \log C_A \end{aligned}$$

Rearranging this equation leaves us with

$$\frac{2\Delta E_{\text{cell}}}{0.05916} = \log \left\{ \frac{V_A}{V_{\text{tot}}} + \frac{V_{\text{std}} C_{\text{std}}}{V_{\text{tot}} C_A} \right\}$$

Substituting known values for ΔE , V_A , V_{std} , V_{tot} and C_{std} ,

$$\begin{aligned} \frac{2 \times \{-0.04471 - (-0.05290)\}}{0.05916} &= \\ \log \left\{ \frac{50.00 \text{ mL}}{51.00 \text{ mL}} + \frac{(1.00 \text{ mL}) \times (5.00 \times 10^{-2} \text{ M})}{(51.00 \text{ mL}) \times C_A} \right\} & \end{aligned}$$

$$0.2951 = \log \left\{ 0.9804 + \frac{9.804 \times 10^{-4}}{C_A} \right\}$$

and taking the inverse log of both sides gives

$$1.973 = 0.9804 + \frac{9.804 \times 10^{-4}}{C_A}$$

Finally, solving for C_A gives the concentration of Ca^{2+} as 9.88×10^{-4} M. Because we diluted the original sample of seawater by a factor of 10, the concentration of Ca^{2+} in the seawater sample is 9.88×10^{-3} M.

FREE IONS VERSUS COMPLEXED IONS

Most potentiometric electrodes are selective toward the free, uncomplexed form of the analyte, and do not respond to any of the analyte's complexed forms. This selectivity provides potentiometric electrodes with a significant advantage over other quantitative methods of analysis if we need to determine the concentration of free ions. For example, calcium is present in urine both as free Ca^{2+} ions and as protein-bound Ca^{2+} ions. If we analyze a urine sample using atomic absorption spectroscopy, the signal is proportional to the total concentration of Ca^{2+} because both free and bound calcium are atomized. Analyzing urine with a Ca^{2+} ISE, however, gives a signal that is a function of only free Ca^{2+} ions because the protein-bound Ca^{2+} can not interact with the electrode's membrane.

Representative Method 11.1

Determination of Fluoride in Toothpaste

DESCRIPTION OF THE METHOD

The concentration of fluoride in toothpastes containing soluble F^- may be determined with a F^- ion-selective electrode using a calibration curve prepared with external standards. Although the F^- ISE is very selective (only OH^- with a $K_{\text{F}^-/\text{OH}^-}$ of 0.1 is a significant interferent), Fe^{3+} and Al^{3+} interfere with the analysis because they form soluble fluoride complexes that do not interact with the ion-selective electrode's membrane. This interference is minimized by reacting any Fe^{3+} and Al^{3+} with a suitable complexing agent.

PROCEDURE

Prepare 1 L of a standard solution of 1.00% w/v SnF_2 and transfer it to a plastic bottle for storage. Using this solution, prepare 100 mL each of standards containing 0.32%, 0.36%, 0.40%, 0.44% and 0.48% w/v SnF_2 , adding 400 mg of malic acid to each solution as a stabilizer. Transfer the standards to plastic bottles for storage. Prepare a total ionic strength

The best way to appreciate the theoretical and practical details discussed in this section is to carefully examine a typical analytical method. Although each method is unique, the following description of the determination of F^- in toothpaste provides an instructive example of a typical procedure. The description here is based on Kennedy, J. H. *Analytical Chemistry—Practice*, Harcourt Brace Jovanovich: San Diego, 1984, p. 117–118.

[Problem 11.14](#) provides some actual data for the determination of fluoride in toothpaste.

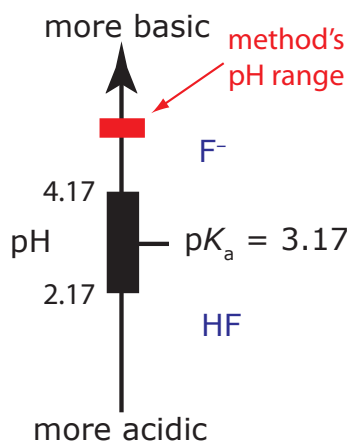


Figure 11.23 Ladder diagram for HF/F⁻. Maintaining a pH greater than 4.2 ensures that the only significant form of fluoride is F⁻.

adjustment buffer (TISAB) by mixing 500 mL of water, 57 mL of glacial acetic acid, 58 g of NaCl, and 4 g of disodium DCTA (*trans*-1,2-cyclohexanetetraacetic acid) in a 1-L beaker, stirring until dissolved. Cool the beaker in a water bath and add 5 M NaOH until the pH is between 5–5.5. Transfer the contents of the beaker to a 1-L volumetric flask and dilute to volume. Prepare each external standard by placing approximately 1 g of a fluoride-free toothpaste, 30 mL of distilled water, and 1.00 mL of standard into a 50-mL plastic beaker and mix vigorously for two min with a stir bar. Quantitatively transfer the resulting suspension to a 100-mL volumetric flask along with 50 mL of TISAB and dilute to volume with distilled water. Store the entire external standard in a 250-mL plastic beaker until you are ready to measure the potential. Prepare toothpaste samples by obtaining an approximately 1-g portion and treating in the same manner as the standards. Measure the cell potential for the external standards and the samples using a F⁻ ion-selective electrode and an appropriate reference electrode. When measuring the potential, stir solution and allow two to three minutes to reach a stable potential. Report the concentration of F⁻ in the toothpaste %w/w SnF₂.

QUESTIONS

1. The total ionic strength adjustment buffer serves several purposes in this procedure. Identify these purposes.

The composition of the TISAB has three purposes:

- (a) The high concentration of NaCl (the final solutions are approximately 1 M NaCl) ensures that the ionic strength of each external standard and each sample is essentially identical. Because the activity coefficient for fluoride is the same in all solutions, we can write the Nernst equation in terms of fluoride's concentration instead of its activity.
 - (b) The combination of glacial acetic acid and NaOH creates an acetic acid/acetate buffer of pH 5–5.5. As shown in Figure 11.23, the pH of this buffer is high enough to ensure that the predominate form of fluoride is F⁻ instead of HF. This pH also is sufficiently acidic that it avoids an interference from OH⁻ (see Example 11.8).
 - (c) DCTA is added as a complexing agent for Fe³⁺ or Al³⁺, preventing the formation of FeF₆³⁻ or AlF₆³⁻.
2. Why is a fluoride-free toothpaste added to the standard solutions?
Adding a fluoride-free toothpaste protects against any unaccounted for matrix effects that might influence the ion-selective electrode's response. This assumes, of course, that the matrices of the two toothpastes are otherwise similar.

3. The procedure specifies that the standards and the sample should be stored in plastic containers. Why is it a bad idea to store the solutions in glass containers?

The fluoride ion is capable of reacting with glass to form SiF_4 .

4. Suppose that your calibration curve has a slope of -57.98 mV for each 10-fold change in the concentration of F^- . The ideal slope from the Nernst equation is -59.16 mV per 10-fold change in concentration. What effect does this have on the quantitative analysis for fluoride in toothpaste?

No effect at all! This is why we prepare a calibration curve using multiple standards.

MEASUREMENT OF pH

With the availability of inexpensive glass pH electrodes and pH meters, the determination of pH is one of the most frequent quantitative analytical measurements. The potentiometric determination of pH, however, is not without complications, several of which we discuss in this section.

One complication is confusion over the meaning of pH.⁶ The conventional definition of pH in most general chemistry textbooks is

$$\text{pH} = -\log[\text{H}^+] \quad 11.19$$

As we now know, pH actually is a measure of the activity of H^+ .

$$\text{pH} = -\log a_{\text{H}^+} \quad 11.20$$

Equation 11.19 only approximates the true pH. If we calculate the pH of 0.1 M HCl using equation 11.19, we obtain a value of 1.00; the solution's actual pH, as defined by equation 11.20, is 1.1.⁷ The activity and the concentration of H^+ are not the same in 0.1 M HCl because the activity coefficient for H^+ is not 1.00 in this matrix. Figure 11.24 shows a more colorful demonstration of the difference between activity and concentration.

6 Kristensen, H. B.; Saloman, A.; Kokholm, G. *Anal. Chem.* **1991**, *63*, 885A–891A.

7 Hawkes, S. J. *J. Chem. Educ.* **1994**, *71*, 747–749.




Figure 11.24 A demonstration of the difference between activity and concentration using the indicator methyl green. The indicator is yellow in its acid form (beaker a: 1.0 M HCl) and is blue in its base form (beaker d: H_2O). In 10 mM HCl the indicator is in its base form (beaker b: 20 mL of 10 mM HCl with 3 drops of methyl green). Adding 20 mL of 5 M LiCl to this solution shifts the indicator's color to green (beaker c). Although the concentration of HCl has been cut in half, the activity of H^+ has increased.

Try this experiment—find several general chemistry textbooks and look up *pH* in each textbook's index. Turn to the appropriate pages and see how it is defined. Next, look up *activity* or *activity coefficient* in each textbook's index and see if these terms are indexed.

The demonstration shown here is adapted from McCarty, C. G.; Vitz, E. "pH Paradoxes: Demonstrating That It Is Not True That $\text{pH} \equiv -\log[\text{H}^+]$," *J. Chem. Educ.* **2006**, *83*, 752–757. This paper provides several additional demonstrations that illustrate the difference between concentration and activity.

A second complication in measuring pH is the uncertainty in the relationship between potential and activity. For a glass membrane electrode, the cell potential, $(E_{\text{cell}})_A$, for a solution of unknown pH is

$$(E_{\text{cell}})_A = K - \frac{RT}{F} \ln \frac{1}{a_{\text{H}^+}} = K - \frac{2.303RT}{F} \text{pH}_A \quad 11.21$$

where K includes the potential of the reference electrode, the asymmetry potential of the glass membrane, and any junction potentials in the electrochemical cell. All the contributions to K are subject to uncertainty, and may change from day to day, as well as between electrodes. For this reason, before using a pH electrode we calibrate it using a standard buffer of known pH. The cell potential for the standard, $(E_{\text{cell}})_{\text{std}}$, is

$$(E_{\text{cell}})_{\text{std}} = K - \frac{2.303RT}{F} \text{pH}_{\text{std}} \quad 11.22$$

where pH_{std} is the standard's pH. Subtracting equation 11.22 from equation 11.21 and solving for pH_A gives

$$\text{pH}_A = \text{pH}_{\text{std}} + \frac{\{(E_{\text{cell}})_A - (E_{\text{cell}})_{\text{std}}\} F}{2.303RT} \quad 11.23$$

The equations in this section assume that the pH electrode is the cathode in a potentiometric cell. In this case an increase in pH corresponds to a decrease in the cell potential. Many pH meters are designed with the pH electrode as the anode, resulting in an increase in the cell potential for higher pH values. The operational definition of pH in this case is

The difference between this equation and equation 11.23 does not affect the operation of a pH meter.

which is the operational definition of pH adopted by the International Union of Pure and Applied Chemistry.⁸

Calibrating a pH electrode presents a third complication because we need a standard with an accurately known activity for H^+ . [Table 11.6](#) provides pH values for several primary standard buffer solutions accepted by the National Institute of Standards and Technology.

To standardize a pH electrode using two buffers, choose one near a pH of 7 and one that is more acidic or basic depending on your sample's expected pH. Rinse your pH electrode in deionized water, blot it dry with a laboratory wipe, and place it in the buffer with a pH closest to 7. Swirl the pH electrode and allow it to equilibrate until you obtain a stable reading. Adjust the "Standardize" or "Calibrate" knob until the meter displays the correct pH. Rinse and dry the electrode, and place it in the second buffer. After the electrode equilibrates, adjust the "Slope" or "Temperature" knob until the meter displays the correct pH.

Some pH meters can compensate for changes in temperature. To use this feature, place a temperature probe in the sample and connect it to the pH meter. Adjust the "Temperature" knob to the solution's temperature and calibrate the pH meter using the "Calibrate" and "Slope" controls. As you are using the pH electrode, the pH meter compensates for any change in the sample's temperature by adjusting the slope of the calibration assuming a Nernstian response of $2.303RT/F$.

⁸ Covington, A. K.; Bates, R. B.; Durst, R. A. *Pure & Appl. Chem.* **1985**, *57*, 531–542.

Table 11.6 pH Values for Selected NIST Primary Standard Buffers

temp (°C)	saturated (at 25°C) $\text{KHC}_4\text{H}_4\text{O}_7$ (tartrate)	0.05 m $\text{KH}_2\text{C}_6\text{H}_5\text{O}_7$ (citrate)	0.05 m $\text{KHC}_8\text{H}_4\text{O}_4$ (phthalate)	0.025 m KH_2PO_4 , 0.025 m Na_2HPO_4	0.008695 m KH_2PO_4 , 0.03043 m Na_2HPO_4	0.01 m $\text{Na}_4\text{B}_4\text{O}_7$	0.025 m NaHCO_3 , 0.025 m Na_2CO_3
0	—	3.863	4.003	6.984	7.534	9.464	10.317
5	—	3.840	3.999	6.951	7.500	9.395	10.245
10	—	3.820	3.998	6.923	7.472	9.332	10.179
15	—	3.802	3.999	6.900	7.448	9.276	10.118
20	—	3.788	4.002	6.881	7.429	9.225	10.062
25	3.557	3.776	4.008	6.865	7.413	9.180	10.012
30	3.552	3.766	4.015	6.854	7.400	9.139	9.966
35	3.549	3.759	4.024	6.844	7.389	9.012	9.925
40	3.547	3.753	4.035	6.838	7.380	9.068	9.889
45	3.547	3.750	4.047	6.834	7.373	9.038	9.856
50	3.549	3.749	4.060	6.833	7.367	9.011	9.828

Source: Values taken from Bates, R. G. *Determination of pH: Theory and Practice*, 2nd ed. Wiley: New York, 1973. See also Buck, R. P., et. al. "Measurement of pH. Definition, Standards, and Procedures," *Pure. Appl. Chem.* **2002**, 74, 2169–2200.

CLINICAL APPLICATIONS

Because of their selectivity for analytes in complex matrices, ion-selective electrodes are important sensors for clinical samples. The most common analytes are electrolytes, such as Na^+ , K^+ , Ca^{2+} , H^+ , and Cl^- , and dissolved gases such as CO_2 . For extracellular fluids, such as blood and urine, the analysis can be made in vitro. An situ analysis, however, requires a much smaller electrode that can be inserted directly into a cell. Liquid-based membrane microelectrodes with tip diameters smaller than $1\ \mu\text{m}$ are constructed by heating and drawing out a hard-glass capillary tube with an initial diameter of approximately 1–2 mm (Figure 11.25). The microelectrode's tip is made hydrophobic by dipping into a solution of dichlorodimethyl silane, and an inner solution appropriate for the analyte and a Ag/AgCl wire reference electrode are placed within the microelectrode. The microelectrode is then dipped into a solution of the liquid complexing agent, with a small volume of the liquid complexing agent being retained within the tip by capillary action. Potentiometric microelectrodes have been developed for a number of clinically important analytes, including H^+ , K^+ , Na^+ , Ca^{2+} , Cl^- , and I^- .⁹

ENVIRONMENTAL APPLICATIONS

Although ion-selective electrodes are used in environmental analysis, their application is not as widespread as in clinical analysis. Although standard potentiometric methods are available for the analysis of CN^- , F^- , NH_3 , and NO_3^- in water and wastewater, other analytical methods generally pro-

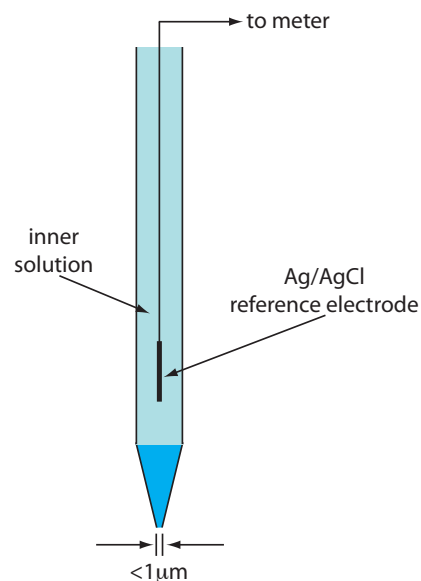


Figure 11.25 Schematic diagram of a liquid-based ion-selective microelectrode.

⁹ Bakker, E.; Pretsch, E. *Trends Anal. Chem.* **2008**, 27, 612–618.

vide better detection limits. One potential advantage of an ion-selective electrode is the ability to incorporate it into a flow cell for the continuous monitoring of wastewater streams.

POTENTIOMETRIC TITRATIONS

One method for determining the equivalence point of an acid–base titration is to use a pH electrode to monitor the change in pH during the titration. A potentiometric determination of the equivalence point is possible for acid–base, complexation, redox, and precipitation titrations, as well as for titrations in aqueous and nonaqueous solvents. Acid–base, complexation, and precipitation potentiometric titrations are usually monitored with an ion-selective electrode selective for the analyte, although an electrode selective for the titrant or a reaction product also can be used. A redox electrode, such as a Pt wire, and a reference electrode are used for potentiometric redox titrations. More details about potentiometric titrations are found in [Chapter 9](#).

11B.6 Evaluation

SCALE OF OPERATION

The working range for most ion-selective electrodes is from a maximum concentration of 0.1–1 M to a minimum concentration of 10^{-5} – 10^{-11} M.¹⁰ This broad working range extends from major analytes to ultratrace analytes, and is significantly greater than many other analytical techniques. To use a conventional ion-selective electrode we need a minimum sample volume of several mL (a macro sample). Microelectrodes, such as the one shown in [Figure 11.25](#), may be used with ultramicro samples, although the sample must be of sufficient size to be representative of the original sample.

ACCURACY

The accuracy of a potentiometric analysis is limited by the error in measuring E_{cell} . Several factors contribute to this measurement error, including the contribution to the potential from interfering ions, the finite current passing through the cell while measuring the potential, differences between the analyte's activity coefficient in the samples and the standard solutions, and junction potentials. We can limit the effect of interfering ions by including a separation step before the potentiometric analysis. Modern high impedance potentiometers minimize the amount of current passing through the electrochemical cell. Finally, we can minimize the errors due to activity coefficients and junction potentials by matching the matrix of the standards to that of the sample. Even in the best circumstances, however, we

See [Figure 3.5](#) to review the meaning of major and ultratrace analytes, and the meaning of macro and ultramicro samples.

¹⁰ (a) Bakker, E.; Pretsch, E. *Anal. Chem.* **2002**, *74*, 420A–426A; (b) Bakker, E.; Pretsch, E. *Trends Anal. Chem.* **2005**, *24*, 199–207.

may observe a difference of approximately ± 1 mV for samples with equal concentrations of analyte.

We can evaluate the effect of uncertainty on the accuracy of a potentiometric measurement by using a propagation of uncertainty. For a membrane ion-selective electrode the general expression for potential is

$$E_{\text{cell}} = K + \frac{RT}{zF} \ln[A]$$

where z is the analyte's charge. From [Table 4.10](#) in Chapter 4, the uncertainty in the cell potential, ΔE_{cell} is

$$\Delta E_{\text{cell}} = \frac{RT}{zF} \times \frac{\Delta[A]}{[A]}$$

Rearranging and multiplying through by 100 gives the percent relative error in concentration as

$$\% \text{ relative error} = \frac{\Delta[A]}{[A]} \times 100 = \frac{\Delta E_{\text{cell}}}{RT/zF} \times 100 \quad 11.24$$

The relative error in concentration, therefore, is a function of the measurement error, ΔE_{cell} , and the analyte's charge. Table 11.7 provides representative values for ions with charges of ± 1 and ± 2 at a temperature of 25°C . Accuracies of 1–5% for monovalent ions and 2–10% for divalent ions are typical. Although equation 11.24 applies to membrane electrodes, we can use it for a metallic electrode by replacing z with n .

PRECISION

Precision in potentiometry is limited by variations in temperature and the sensitivity of the potentiometer. Under most conditions—and when using a simple, general-purpose potentiometer—we can measure the potential with a repeatability of ± 0.1 mV. Using Table 11.7, this corresponds to an

Table 11.7 Relationship Between The Uncertainty in Measuring E_{cell} and the Relative Error in the Analyte's Concentration

ΔE_{cell} (\pm mV)	% relative error in concentration	
	$z = \pm 1$	$z = \pm 2$
0.1	± 0.4	± 0.8
0.5	± 1.9	± 3.9
1.0	± 3.9	± 7.8
1.5	± 5.8	± 11.1
2.0	± 7.8	± 15.6

uncertainty of $\pm 0.4\%$ for monovalent analytes and $\pm 0.8\%$ for divalent analytes. The reproducibility of potentiometric measurements is about a factor of ten poorer.

SENSITIVITY

The sensitivity of a potentiometric analysis is determined by the term RT/nF or RT/zF in the Nernst equation. Sensitivity is best for smaller values of n or z .

SELECTIVITY

As described earlier, most ion-selective electrodes respond to more than one analyte; the selectivity for the analyte, however, is often significantly greater than for the interfering ions. The manufacturer of an ion-selective usually provides an ISE's selectivity coefficients, which allows the analyst to determine whether a potentiometric analysis is feasible for a given sample.

TIME, COST, AND EQUIPMENT

In comparison to other techniques, potentiometry provides a rapid, relatively low-cost means for analyzing samples. The limiting factor when analyzing a large number of samples is the need to rinse the electrode between samples. The use of inexpensive, disposable ion-selective electrodes can increase a lab's sample throughput. [Figure 11.26](#) shows one example of a disposable ISE for Ag^+ .¹¹ Commercial instruments for measuring pH or potential are available in a variety of price ranges, and includes portable models for use in the field.

¹¹ Tymecki, L.; Zwierkowska, E.; Głab, S.; Koncki, R. *Sens. Actuators B* **2003**, *96*, 482–488.

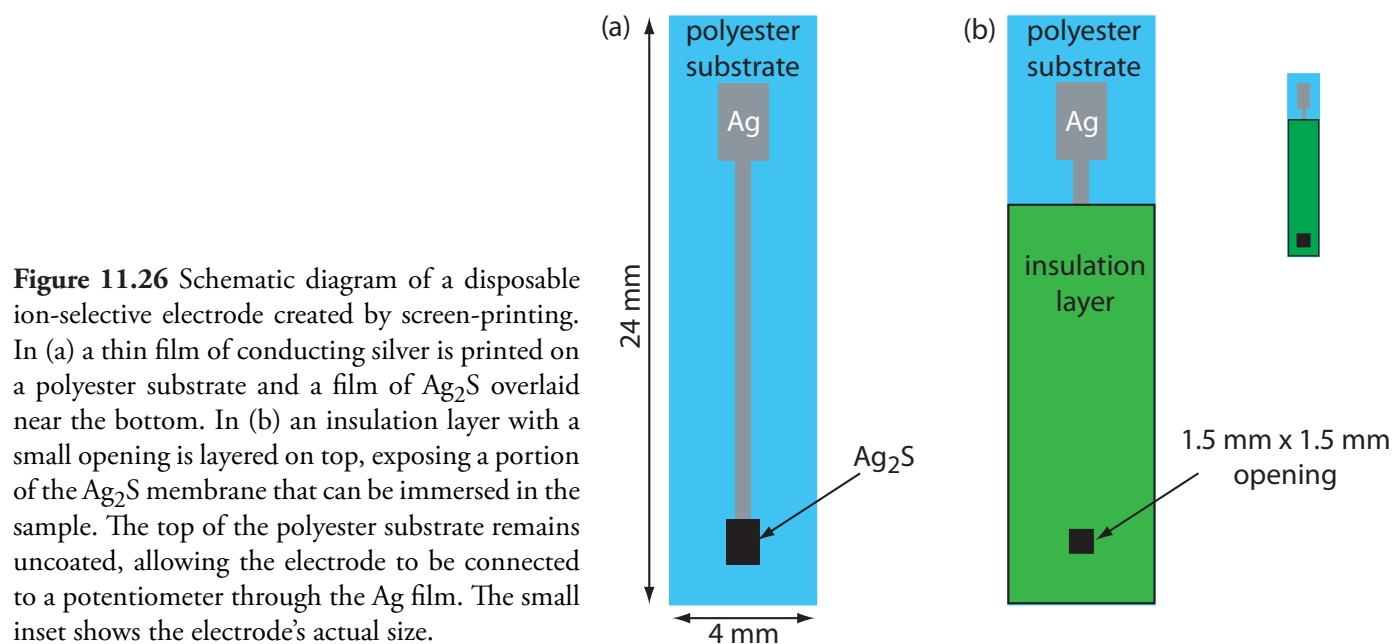


Figure 11.26 Schematic diagram of a disposable ion-selective electrode created by screen-printing. In (a) a thin film of conducting silver is printed on a polyester substrate and a film of Ag_2S overlaid near the bottom. In (b) an insulation layer with a small opening is layered on top, exposing a portion of the Ag_2S membrane that can be immersed in the sample. The top of the polyester substrate remains uncoated, allowing the electrode to be connected to a potentiometer through the Ag film. The small inset shows the electrode's actual size.

11C Coulometric Methods

In a potentiometric method of analysis we determine an analyte's concentration by measuring the potential of an electrochemical cell under static conditions. Dynamic techniques, in which current passes through the electrochemical cell, also are important electrochemical methods of analysis. In this section we consider coulometry. Voltammetry and amperometry are covered in section 11D.

COULOMETRY is based on an exhaustive electrolysis of the analyte. By exhaustive we mean that the analyte is completely oxidized or reduced at the working electrode or that it reacts completely with a reagent generated at the working electrode. There are two forms of coulometry: **CONTROLLED-POTENTIAL COULOMETRY**, in which we apply a constant potential to the electrochemical cell, and **CONTROLLED-CURRENT COULOMETRY**, in which we pass a constant current through the electrochemical cell.

During an electrolysis, the total charge, Q , in coulombs, passing through the electrochemical cell is proportional to the absolute amount of analyte by **FARADAY'S LAW**

$$Q = nFN_A \quad 11.25$$

where n is the number of electrons per mole of analyte, F is Faraday's constant (96487 C mol^{-1}), and N_A is the moles of analyte. A coulomb is equivalent to an $\text{A}\cdot\text{sec}$; thus, when passing a constant current, i , the total charge is

$$Q = it_e \quad 11.26$$

where t_e is the electrolysis time. If the current varies with time, as it does in controlled-potential coulometry, then the total charge is

$$Q = \int_0^{t_e} i(t) dt \quad 11.27$$

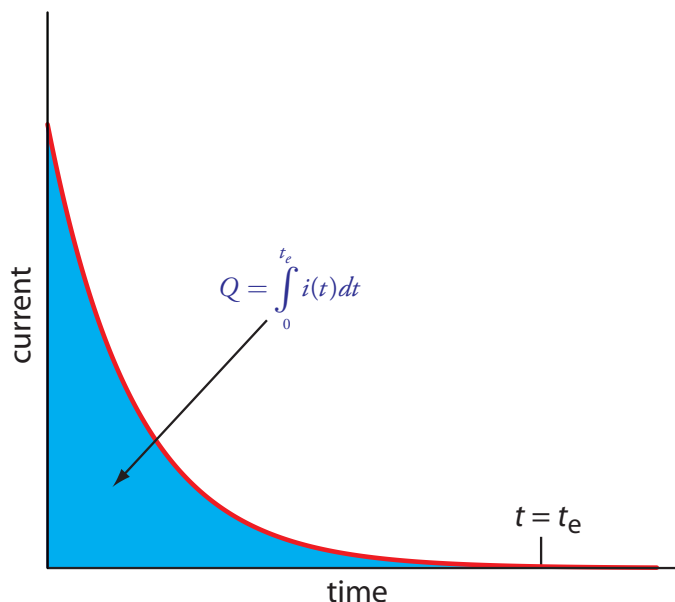
In coulometry, we monitor current as a function of time and use either equation 11.26 or equation 11.27 to calculate Q . Knowing the total charge, we then use equation 11.25 to determine the moles of analyte. To obtain an accurate value for N_A , all the current must be used to oxidize or reduce the analyte. In other words, coulometry requires 100% current efficiency—or an accurately measured current efficiency established using a standard—a factor that we must consider when designing a coulometric method of analysis.

CURRENT EFFICIENCY is the percentage of current that actually leads to the analyte's oxidation or reduction.

11C.1 Controlled-Potential Coulometry

The easiest way to ensure 100% current efficiency is to hold the working electrode at a constant potential, chosen so that the analyte reacts completely without simultaneously oxidizing or reducing an interfering species. As electrolysis progresses the analyte's concentration decreases, as does the

Figure 11.27 Current versus time for a controlled-potential coulometric analysis. The measured current is shown by the red curve. The integrated area under the curve, shown in blue, is the total charge.



current. The resulting current-versus-time profile for controlled-potential coulometry is shown in Figure 11.27. Integrating the area under the curve (equation 11.27) from $t=0$ to $t=t_e$ gives the total charge. In this section we consider the experimental parameters and instrumentation needed to develop a controlled-potential coulometric method of analysis.

SELECTING A CONSTANT POTENTIAL

To see how an appropriate potential for the working electrode is selected, let's develop a constant-potential coulometric method for Cu^{2+} based on its reduction to copper metal at a Pt working electrode.

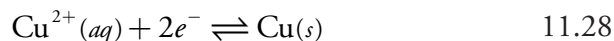


Figure 11.28 shows a ladder diagram for an aqueous solution of Cu^{2+} . From the ladder diagram we know that reaction 11.28 is favored when the working electrode's potential is more negative than $+0.342$ V versus the standard hydrogen electrode. To ensure a 100% current efficiency, however, the potential must be sufficiently more positive than $+0.000$ V so that the reduction of H_3O^+ to H_2 does not contribute significantly to the total current flowing through the electrochemical cell.

We can use the Nernst equation for reaction 11.28 to estimate the minimum potential for quantitatively reducing Cu^{2+} .

$$E = E_{\text{Cu}^{2+}/\text{Cu}}^{\circ} - \frac{0.05916}{2} \log \frac{1}{[\text{Cu}^{2+}]} \quad 11.29$$

If we define a quantitative electrolysis as one in which we reduce 99.99% of Cu^{2+} to Cu, then the concentration of Cu^{2+} at t_e is

$$[\text{Cu}^{2+}]_{t_e} = 0.0001 \times [\text{Cu}^{2+}]_0 \quad 11.30$$

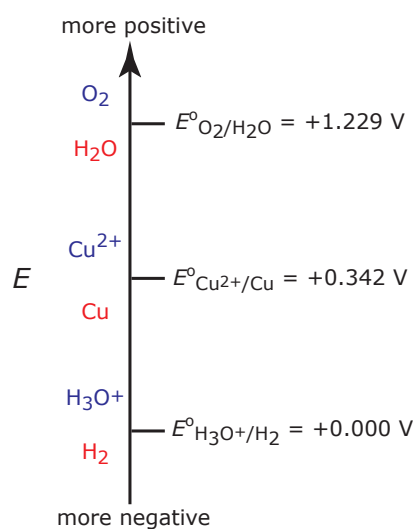


Figure 11.28 Ladder diagram for an aqueous solution of Cu^{2+} showing steps for the reductions of O_2 to H_2O , of Cu^{2+} to Cu, and of H_3O^+ to H_2 . For each step, the oxidized species is in blue and the reduced species is in red.

So why are we using the concentration of Cu^{2+} in equation 11.29 instead of its activity? In potentiometry we write the Nernst equation using activity because we use E_{cell} to determine the amount of analyte in the sample. Here we are using the Nernst equation to design the analysis. The amount of analyte is given by the total charge, not the applied potential.

where $[\text{Cu}^{2+}]_0$ is the initial concentration of Cu^{2+} in the sample. Substituting [equation 11.30](#) into [equation 11.29](#) allows us to calculate the desired potential.

$$E = E_{\text{Cu}^{2+}/\text{Cu}}^{\circ} - \frac{0.05916}{2} \log \frac{1}{0.0001 \times [\text{Cu}^{2+}]_0}$$

If the initial concentration of Cu^{2+} is 1.00×10^{-4} M, for example, then the working electrode's potential must be more negative than +0.105 V to quantitatively reduce Cu^{2+} to Cu. Note that at this potential H_3O^+ is not reduced to H_2 , maintaining 100% current efficiency.

MINIMIZING ELECTROLYSIS TIME

In controlled-potential coulometry, as shown in [Figure 11.27](#), the current decreases over time. As a result, the rate of electrolysis—recall from Section 11A that current is a measure of rate—becomes slower and an exhaustive electrolysis of the analyte may require a long time. Because time is an important consideration when choosing and designing analytical methods, we need to consider the factors affecting the analysis time.

We can approximate the change in current as a function of time in [Figure 11.27](#) by an exponential decay; thus, the current at time t is

$$i = i_0 e^{-kt} \quad 11.31$$

where i_0 is the current at $t=0$ and k is a rate constant that is directly proportional to the area of the working electrode and the rate of stirring, and that is inversely proportional to the volume of solution. For an exhaustive electrolysis in which we oxidize or reduce 99.99% of the analyte, the current at the end of the analysis, t_e , is

$$i \leq 0.0001 \times i_0 \quad 11.32$$

Substituting [equation 11.32](#) into [equation 11.31](#) and solving for t_e gives the minimum time for an exhaustive electrolysis as

$$t_e = -\frac{1}{k} \times \ln(0.0001) = \frac{9.21}{k}$$

From this equation we see that a larger value for k reduces the analysis time. For this reason we usually carry out a controlled-potential coulometric analysis in a small volume electrochemical cell, using an electrode with a large surface area, and with a high stirring rate. A quantitative electrolysis typically requires approximately 30–60 min, although shorter or longer times are possible.

INSTRUMENTATION

A three-electrode potentiostat is used to set the potential in controlled-potential coulometry. The working electrodes is usually one of two types: a

Many controlled-potential coulometric methods for Cu^{2+} use a potential that is negative relative to the standard hydrogen electrode—see, for example, Rechnitz, G. A. *Controlled-Potential Analysis*, Macmillan: New York, 1963, p.49.

Based on the ladder diagram in [Figure 11.28](#) you might expect that applying a potential <0.000 V will partially reduce H_3O^+ to H_2 , resulting in a current efficiency that is less than 100%. The reason we can use such a negative potential is that the reaction rate for the reduction of H_3O^+ to H_2 at is very slow at a Pt electrode. This results in a significant **OVERPOTENTIAL**—the need to apply a more positive or a more negative potential than predicted by thermodynamics—that shifts E° for the $\text{H}_3\text{O}^+/\text{H}_2$ redox couple to a more negative value.

[Problem 11.16](#) asks you to explain why a larger surface area, a faster stirring rate, and a smaller volume leads to a shorter analysis time.

[Figure 11.5](#) shows an example of a manual three-electrode potentiostat. Although a modern potentiostat uses very different circuitry, you can use [Figure 11.5](#) and the accompanying discussion to understand how we can use the three electrodes to set the potential and monitor the current.




Figure 11.29 Example of a cylindrical Pt-gauze electrode for controlled-potential coulometry. The electrode shown here has a diameter of 13 mm and a height of 48 mm, and is fashioned using Pt wire with a diameter of approximately 0.15 mm. The electrode's surface has 360 openings/cm² and a total surface area of approximately 40 cm².

cylindrical Pt electrode manufactured from platinum-gauze (Figure 11.29), or a Hg pool electrode. The large overpotential for the reduction of H_3O^+ at Hg makes it the electrode of choice for an analyte requiring a negative potential. For example, a potential more negative than -1 V versus the SHE is feasible at a Hg electrode—but not at a Pt electrode—even in a very acidic solution. Because mercury is easily oxidized, it is less useful if we need to maintain a potential that is positive with respect to the SHE. Platinum is the working electrode of choice when we need to apply a positive potential.

The auxiliary electrode, which is often a Pt wire, is separated by a salt bridge from the analytical solution. This is necessary to prevent the electrolysis products generated at the auxiliary electrode from reacting with the analyte and interfering in the analysis. A saturated calomel or Ag/AgCl electrode serves as the reference electrode.

The other essential instrumental need for controlled-potential coulometry is a means for determining the total charge. One method is to monitor the current as a function of time and determine the area under the curve, as shown in [Figure 11.27](#). Modern instruments use electronic integration to monitor charge as a function of time. The total charge at the end of the electrolysis is read directly from a digital readout.

ELECTROGRAVIMETRY

If the product of controlled-potential coulometry forms a deposit on the working electrode, then we can use the change in the electrode's mass as the analytical signal. For example, if we apply a potential that reduces Cu^{2+} to Cu at a Pt working electrode, the difference in the electrode's mass before and after electrolysis is a direct measurement of the amount of copper in the sample. We call an analytical technique that uses mass as a signal a gravimetric technique; thus, we call this **ELECTROGRAVIMETRY**.

11C.2 Controlled-Current Coulometry

A second approach to coulometry is to use a constant current in place of a constant potential, which produces the current-versus-time profile shown in Figure 11.30. Controlled-current coulometry has two advantages over controlled-potential coulometry. First, the analysis time is shorter because the current does not decrease over time. A typical analysis time for controlled-current coulometry is less than 10 min, compared to approximately 30–60 min for controlled-potential coulometry. Second, because the total charge is simply the product of current and time (equation 11.26), there is no need to integrate the current-time curve in Figure 11.30.

Using a constant current presents us with two important experimental problems. First, during electrolysis the analyte's concentration—and, therefore, the current due to its oxidation or reduction—continuously decreases (see Figure 11.27). To maintain a constant current we must allow the potential to change until another oxidation reaction or reduction reaction occurs at the working electrode. Unless we design the system carefully, this secondary reaction decreases the current efficiency to less than 100%. The second problem is that we need a method for determining when the analyte's electrolysis is complete. As shown in Figure 11.27, in a controlled-potential coulometric analysis we know that electrolysis is complete when the current reaches zero, or when it reaches a constant background or residual current. In a controlled-current coulometric analysis, however, current continues to flow even when the analyte's electrolysis is complete. A suitable method for determining the reaction's endpoint, t_e , is needed.

MAINTAINING CURRENT EFFICIENCY

To illustrate why a change in the working electrode's potential may result in a current efficiency $< 100\%$, let's consider the coulometric analysis for Fe^{2+} based on its oxidation to Fe^{3+} at a Pt working electrode in 1 M H_2SO_4 .

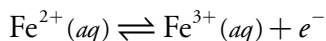
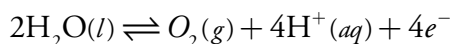


Figure 11.31 shows the ladder diagram for this system. At the beginning, the potential of the working electrode remains nearly constant at a level near its initial value. As the concentration of Fe^{2+} decreases, the working electrode's potential shifts toward more positive values until the oxidation of H_2O begins.



Because a portion of the total current comes from the oxidation of H_2O , the current efficiency for the analysis is less than 100% and we cannot use equation 11.25 to determine the amount of Fe^{2+} in the sample.

Although we cannot prevent the potential from drifting until another species undergoes oxidation, we can maintain a 100% current efficiency if

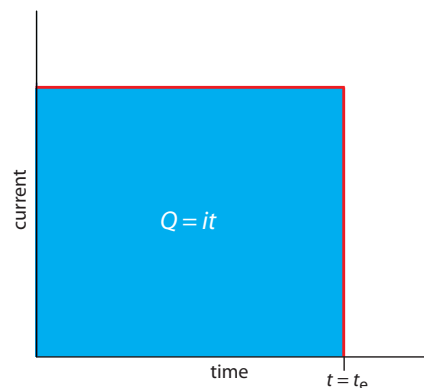


Figure 11.30 Current versus time for a controlled-current coulometric analysis. The measured current is shown by the red curve. The integrated area under the curve, shown in blue, is the total charge.

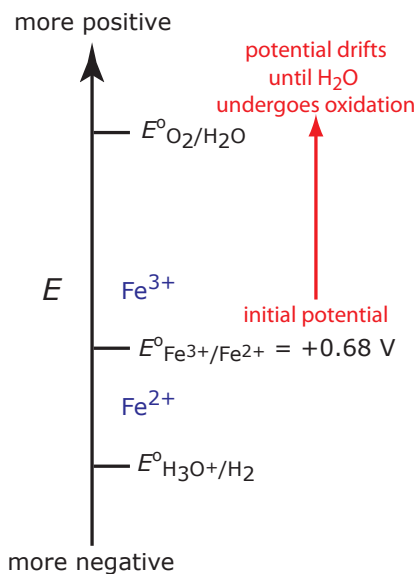


Figure 11.31 Ladder diagram for the constant-current coulometric analysis of Fe^{2+} . The red arrow and text shows how the potential drifts to more positive values, decreasing the current efficiency.

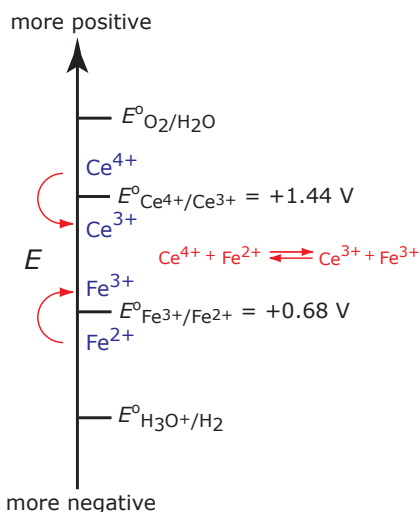


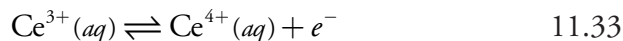
Figure 11.32 Ladder diagram for the constant-current coulometric analysis of Fe^{2+} in the presence of a Ce^{3+} mediator. As the potential drifts to more positive values, we eventually reach a potential where Ce^{3+} undergoes oxidation. Because Ce^{4+} , the product of the oxidation of Ce^{3+} , reacts with Fe^{2+} , we maintain current efficiency.

Reaction 11.34 is the same reaction we used in [Chapter 9](#) to develop our understanding of redox titrimetry.

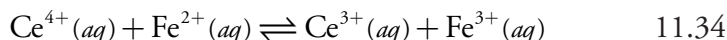
See [Figure 9.40](#) for the titration curve and for ferroin's color change.

[Figure 11.4](#) shows an example of a manual galvanostat. Although a modern galvanostat uses very different circuitry, you can use [Figure 11.4](#) and the accompanying discussion to understand how we can use the working electrode and the counter electrode to control the current. [Figure 11.4](#) includes an optional reference electrode, but its presence or absence is not important if we are not interested in monitoring the working electrode's potential.

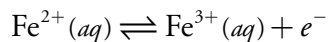
the product of that oxidation reacts both rapidly and quantitatively with the remaining Fe^{2+} . To accomplish this we can add an excess of Ce^{3+} to the analytical solution. As shown in [Figure 11.32](#), when the potential of the working electrode shifts to a more positive potential Ce^{3+} eventually begins to oxidize.



The Ce^{4+} that forms at the working electrode rapidly mixes with the solution where it reacts with any available Fe^{2+} .



Combining reaction 11.33 and reaction 11.34 shows that the net reaction is the oxidation of Fe^{2+} to Fe^{3+}



maintaining a current efficiency of 100%. A species, such as Ce^{3+} , which is used to maintain 100% current efficiency, is called a **MEDIATOR**.

ENDPOINT DETERMINATION

Adding a mediator solves the problem of maintaining 100% current efficiency, but it does not solve the problem of determining when the analyte's electrolysis is complete. Using our same example, when the oxidation of Fe^{2+} is complete current continues to flow from the oxidation of Ce^{3+} , and, eventually, the oxidation of H_2O . What we need is a signal that tells us when there is no more Fe^{2+} in solution.

For our purposes, it is convenient to treat a controlled-current coulometric analysis as a reaction between the analyte, Fe^{2+} , and the mediator, Ce^{3+} , as shown by reaction 11.34. This reaction is identical to a redox titration; thus, we can use the end points for a redox titration—visual indicators and potentiometric or conductometric measurements—to signal the end of a controlled-current coulometric analysis. For example, ferroin provides a useful visual endpoint for the Ce^{3+} mediated coulometric analysis for Fe^{2+} , changing color from red to blue when the electrolysis of Fe^{2+} is complete.

INSTRUMENTATION

Controlled-current coulometry normally is carried out using a two-electrode galvanostat, consisting of a working electrode and a counter electrode. The working electrode—often a simple Pt electrode—is also called the generator electrode since it is where the mediator reacts to generate the species that reacts with the analyte. If necessary, the counter electrode is isolated from the analytical solution by a salt bridge or porous frit to prevent its electrolysis products from reacting with the analyte. Alternatively, we can generate the oxidizing agent or the reducing agent externally, and allow it to flow into the analytical solution. [Figure 11.33](#) shows one simple method for

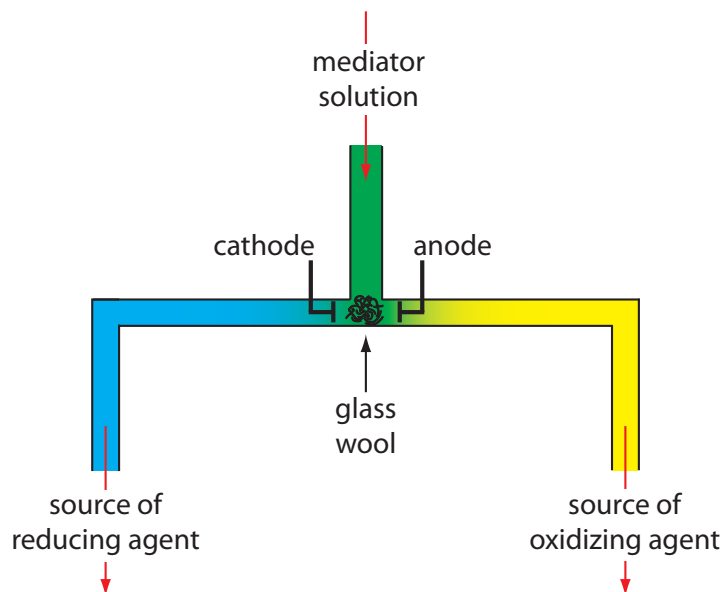


Figure 11.33 One example of a device for the external generation of oxidizing agents and reducing agents for controlled-current coulometry. A solution containing the mediator flows into a small-volume electrochemical cell. The resulting oxidation products, which form at the anode, flow to the right and may serve as an oxidizing agent. Reduction at the cathode generates a reducing agent.

accomplishing this. A solution containing the mediator flows into a small-volume electrochemical cell, with the products exiting through separate tubes. Depending upon the analyte, the oxidizing agent or the reducing reagent is selectively delivered to the analytical solution. For example, we can generate Ce^{4+} using an aqueous solution of Ce^{3+} , directing the Ce^{4+} that forms at the anode into our sample.

There are two other crucial needs for controlled-current coulometry: an accurate clock for measuring the electrolysis time, t_e , and a switch for starting and stopping the electrolysis. An analog clock can record time to the nearest ± 0.01 s, but the need to frequently stop and start the electrolysis as we approach the endpoint may result in an overall uncertainty of ± 0.1 s. A digital clock allows for a more accurate measurement of time, with an overall uncertainty of ± 1 ms being possible. The switch must control both the current and the clock, so that we can make an accurate determination of the electrolysis time.

COULOMETRIC TITRATIONS

A controlled-current coulometric method is sometimes called a **COULOMETRIC TITRATION** because of its similarity to a conventional titration. For example, in the controlled-current coulometric analysis for Fe^{2+} using a Ce^{3+} mediator, the oxidation of Fe^{2+} by Ce^{4+} (reaction 11.34) is identical to the reaction in a redox titration (reaction 9.15).

There are other similarities between controlled-current coulometry and titrimetry. If we combine equation 11.25 and equation 11.26 and solve for the moles of analyte, N_A , we obtain the following equation.

$$N_A = \frac{i}{nF} \times t_c \quad 11.35$$

For simplicity, we are assuming that the stoichiometry between the analyte and titrant is 1:1. The assumption, however, is not important and does not effect our observation of the similarity between controlled-current coulometry and a titration.

Compare [equation 11.35](#) to the relationship between the moles of analyte, N_A , and the moles of titrant, N_T , in a titration

$$N_A = N_T = M_T \times V_T$$

where M_T and V_T are the titrant's molarity and the volume of titrant at the end point. In constant-current coulometry, the current source is equivalent to the titrant and the value of that current is analogous to the titrant's molarity. Electrolysis time is analogous to the volume of titrant, and t_e is equivalent to the a titration's end point. Finally, the switch for starting and stopping the electrolysis serves the same function as a buret's stopcock.

11C.3 Quantitative Applications

Coulometry is used for the quantitative analysis of both inorganic and organic analytes. Examples of controlled-potential and controlled-current coulometric methods are discussed in the following two sections.

CONTROLLED-POTENTIAL COULOMETRY

The majority of controlled-potential coulometric analyses involve the determination of inorganic cations and anions, including trace metals and halides ions. [Table 11.8](#) summarizes several of these methods.

The ability to control selectivity by carefully adjusting the working electrode's potential makes controlled-potential coulometry particularly useful for the analysis of alloys. For example, we can determine the composition of an alloy containing Ag, Bi, Cd, and Sb by dissolving the sample and placing it in a matrix of 0.2 M H_2SO_4 along with a Pt working electrode and a Pt counter electrode. If we apply a constant potential of +0.40 V versus the SCE, Ag(I) deposits on the electrode as Ag and the other metal ions remain in solution. When electrolysis is complete, we use the total charge to determine the amount of silver in the alloy. By shifting the working electrode's potential to -0.08 V versus the SCE, we deposit Bi on the working electrode. When the coulometric analysis for bismuth is complete, we determine antimony by shifting the working electrode's potential to -0.33 V versus the SCE, depositing Sb. Finally, we determine cadmium following its electrodeposition on the working electrode at a potential of -0.80 V versus the SCE.

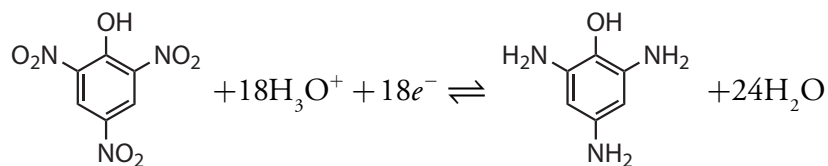
We also can use controlled-potential coulometry for the quantitative analysis of organic compounds, although the number of applications is significantly less than that for inorganic analytes. One example is the six-electron reduction of a nitro group, $-NO_2$, to a primary amine, $-NH_2$, at a mercury electrode. Solutions of picric acid—also known as 2,4,6-trinitrophenol, or TNP, a close relative of TNT—can be analyzed by reducing it to triaminophenol.

Table 11.8 Representative Controlled-Potential Coulometric Analyses for Inorganic Ions

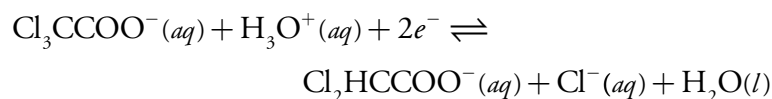
analyte	electrolytic reaction ^a	electrode
antimony	$\text{Sb(III)} + 3e^- \rightleftharpoons \text{Sb}$	Pt
arsenic	$\text{As(III)} \rightleftharpoons \text{As(V)} + 2e^-$	Pt
cadmium	$\text{Cd(II)} + 2e^- \rightleftharpoons \text{Cd}$	Pt or Hg
cobalt	$\text{Co(II)} + 2e^- \rightleftharpoons \text{Co}$	Pt or Hg
copper	$\text{Cu(II)} + 2e^- \rightleftharpoons \text{Cu}$	Pt or Hg
halides (X^-)	$\text{Ag} + X^- \rightleftharpoons \text{AgX} + e^-$	Ag
iron	$\text{Fe(II)} \rightleftharpoons \text{Fe(III)} + e^-$	Pt
lead	$\text{Pb(II)} + 2e^- \rightleftharpoons \text{Pb}$	Pt or Hg
nickel	$\text{Ni(II)} + 2e^- \rightleftharpoons \text{Ni}$	Pt or Hg
plutonium	$\text{Pu(III)} \rightleftharpoons \text{Pu(IV)} + e^-$	Pt
silver	$\text{Ag(I)} + e^- \rightleftharpoons \text{Ag}$	Pt
tin	$\text{Sn(II)} + 2e^- \rightleftharpoons \text{Sn}$	Pt
uranium	$\text{U(VI)} + 2e^- \rightleftharpoons \text{U(IV)}$	Pt or Hg
zinc	$\text{Zn(II)} + 2e^- \rightleftharpoons \text{Zn}$	Pt or Hg

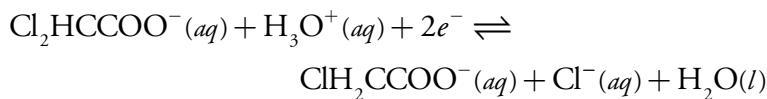
Source: Rechnitz, G. A. *Controlled-Potential Analysis*, Macmillan: New York, 1963.

^aElectrolytic reactions are written in terms of the change in the analyte's oxidation state. The actual species in solution depends on the analyte.



Another example is the successive reduction of trichloroacetate to dichloroacetate, and of dichloroacetate to monochloroacetate





We can analyze a mixture of trichloroacetate and dichloroacetate by selecting an initial potential at which only the more easily reduced trichloroacetate reacts. When its electrolysis is complete, we can reduce dichloroacetate by adjusting the potential to a more negative potential. The total charge for the first electrolysis gives the amount of trichloroacetate, and the difference in total charge between the first electrolysis and the second electrolysis gives the amount of dichloroacetate.

CONTROLLED-CURRENT COULOMETRY (COULOMETRIC TITRATIONS)

The use of a mediator makes a coulometric titration a more versatile analytical technique than controlled-potential coulometry. For example, the direct oxidation or reduction of a protein at a working electrode is difficult if the protein's active redox site lies deep within its structure. A coulometric titration of the protein is possible, however, if we use the oxidation or reduction of a mediator to produce a solution species that reacts with the protein. Table 11.9 summarizes several controlled-current coulometric methods based on a redox reaction using a mediator.

Table 11.9 Representative Examples of Coulometric Redox Titrations

mediator	electrochemically generated reagent and reaction	representative application ^a
Ag ⁺	Ag ²⁺ : Ag ⁺ ⇌ Ag ²⁺ + e ⁻	$\text{H}_2\text{C}_2\text{O}_4(aq) + 2\text{Ag}^{2+}(aq) + 2\text{H}_2\text{O}(l) \rightleftharpoons 2\text{CO}_2(g) + 2\text{Ag}^+(aq) + 2\text{H}_3\text{O}^+(aq)$
Br ⁻	Br ₂ : 2Br ⁻ ⇌ Br ₂ + 2e ⁻	$\text{H}_2\text{S}(aq) + \text{Br}_2(aq) + 2\text{H}_2\text{O}(l) \rightleftharpoons \text{S}(s) + 2\text{Br}^-(aq) + 2\text{H}_3\text{O}^+(aq)$
Ce ³⁺	Ce ⁴⁺ : Ce ³⁺ ⇌ Ce ⁴⁺ + e ⁻	$\text{Fe}(\text{CN})_6^{4-}(aq) + \text{Ce}^{4+}(aq) \rightleftharpoons \text{Fe}(\text{CN})_6^{3-}(aq) + \text{Ce}^{3+}(aq)$
Cl ⁻	Cl ₂ : 2Cl ⁻ ⇌ Cl ₂ + 2e ⁻	$\text{Ti(I)}(aq) + \text{Cl}_2(aq) \rightleftharpoons \text{Ti(III)}(aq) + 2\text{Cl}^-(aq)$
Fe ³⁺	Fe ²⁺ : Fe ³⁺ + e ⁻ ⇌ Fe ²⁺	$\text{Cr}_2\text{O}_7^{2-}(aq) + 6\text{Fe}^{2+}(aq) + 14\text{H}_3\text{O}^+(aq) \rightleftharpoons 2\text{Cr}^{3+}(aq) + 6\text{Fe}^{3+}(aq) + 21\text{H}_2\text{O}(l)$
I ⁻	I ₃ ⁻ : 3I ⁻ ⇌ I ₃ ⁻ + 2e ⁻	$2\text{S}_2\text{O}_3^{2-}(aq) + \text{I}_3^-(aq) \rightleftharpoons 2\text{S}_4\text{O}_6^{2-}(aq) + 3\text{I}^-(aq)$
Mn ²⁺	Mn ³⁺ : Mn ²⁺ ⇌ Mn ³⁺ + e ⁻	$\text{As(III)}(aq) + 2\text{Mn}^{3+}(aq) \rightleftharpoons \text{As(V)}(aq) + 2\text{Mn}^{2+}(aq)$

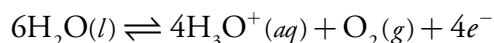
^a The analyte is the underlined species in each reaction.

Table 11.10 Representative Coulometric Titrations Using Acid–Base, Complexation, and Precipitation Reactions

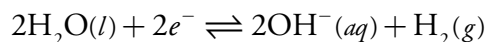
type of reaction	mediator	electrochemically generated reagent and reaction	representative application ^a
acid–base	H ₂ O	H ₃ O ⁺ : 6H ₂ O ⇌ 4H ₃ O ⁺ + O ₂ + 4e [−]	<u>OH[−](aq)</u> + H ₃ O ⁺ (aq) ⇌ 2H ₂ O(l)
	H ₂ O	OH [−] : 2H ₂ O + 2e [−] ⇌ 2OH [−] + H ₂	<u>H₃O⁺(aq)</u> + OH [−] (aq) ⇌ 2H ₂ O(l)
complexation	HgNH ₃ Y ^{2−} Y = EDTA	HY ^{3−} : HgNH ₃ Y ^{2−} + NH ₄ ⁺ + 2e [−] ⇌ HY ^{3−} + Hg + 2NH ₃	<u>Ca²⁺(aq)</u> + HY ^{3−} (aq) + H ₂ O(l) ⇌ CaY ^{2−} (aq) + H ₃ O ⁺ (aq)
precipitation	Ag	Ag ⁺ : Ag ⇌ Ag ⁺ + e [−]	<u>I[−](aq)</u> + Ag ⁺ (aq) ⇌ AgI(s)
	Hg	Hg ₂ ²⁺ : 2Hg ⇌ Hg ₂ ²⁺ + 2e [−]	<u>2Cl[−](aq)</u> + Hg ₂ ²⁺ (aq) ⇌ Hg ₂ Cl ₂ (s)
	Fe(CN) ₆ ^{3−}	Fe(CN) ₆ ^{4−} : Fe(CN) ₆ ^{3−} + e [−] ⇌ Fe(CN) ₆ ^{4−}	<u>3Zn²⁺(aq)</u> + K ⁺ (aq) + 2Fe(CN) ₆ ^{4−} (aq) ⇌ K ₂ Zn ₃ [Fe(CN) ₆] ₂ (s)

^a The analyte is the underlined species in each reaction.

For an analyte that is not easily oxidized or reduced, we can complete a coulometric titration by coupling a mediator's oxidation or reduction to an acid–base, precipitation, or complexation reaction involving the analyte. For example, if we use H₂O as a mediator, we can generate H₃O⁺ at the anode



and generate OH[−] at the cathode.



If we carry out the oxidation or reduction of H₂O using the generator cell in [Figure 11.33](#), then we can selectively dispense H₃O⁺ or OH[−] into a solution containing the analyte. The resulting reaction is identical to that in an acid–base titration. Coulometric acid–base titrations have been used for the analysis of strong and weak acids and bases, in both aqueous and nonaqueous matrices. Table 11.10 summarizes several examples of coulometric titrations involving acid–base, complexation, and precipitation reactions.

In comparison to a conventional titration, a coulometric titration has two important advantages. The first advantage is that electrochemically generating a titrant allows us to use an unstable reagent. Although we cannot easily prepare and store a solution of a highly reactive reagent, such as Ag²⁺ or Mn³⁺, we can generate them electrochemically and use them in

a coulometric titration. Second, because it is relatively easy to measure a small quantity of charge, we can use a coulometric titration to determine an analyte whose concentration is too small for a conventional titration.

QUANTITATIVE CALCULATIONS

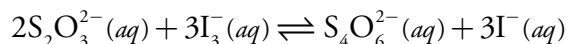
The absolute amount of analyte in a coulometric analysis is determined by applying Faraday's law ([equation 11.25](#)), with the total charge given by [equation 11.26](#) or [equation 11.27](#). Example 11.10 shows the calculations for a typical coulometric analysis.

Example 11.10

To determine the purity of a sample of $\text{Na}_2\text{S}_2\text{O}_3$, a sample is titrated coulometrically using I^- as a mediator and I_3^- as the titrant. A sample weighing 0.1342 g is transferred to a 100-mL volumetric flask and diluted to volume with distilled water. A 10.00-mL portion is transferred to an electrochemical cell along with 25 mL of 1 M KI, 75 mL of a pH 7.0 phosphate buffer, and several drops of a starch indicator solution. Electrolysis at a constant current of 36.45 mA requires 221.8 s to reach the starch indicator endpoint. Determine the sample's purity.

SOLUTION

As shown in [Table 11.9](#), the coulometric titration of $\text{S}_2\text{O}_3^{2-}$ with I_3^- is



The oxidation of $\text{S}_2\text{O}_3^{2-}$ to $\text{S}_4\text{O}_6^{2-}$ requires one electron per $\text{S}_2\text{O}_3^{2-}$ ($n = 1$). Combining [equation 11.25](#) and [equation 11.26](#), and solving for the moles and grams of $\text{Na}_2\text{S}_2\text{O}_3$ gives

$$N_A = \frac{it_e}{nF} = \frac{(0.03645 \text{ A})(221.8 \text{ s})}{\left(\frac{1 \text{ mol } e^-}{\text{mol Na}_2\text{S}_2\text{O}_3}\right)\left(\frac{96487 \text{ C}}{\text{mol } e^-}\right)} = 8.379 \times 10^{-5} \text{ mol Na}_2\text{S}_2\text{O}_3$$

$$8.379 \times 10^{-5} \text{ mol Na}_2\text{S}_2\text{O}_3 \times \frac{158.1 \text{ g Na}_2\text{S}_2\text{O}_3}{\text{mol Na}_2\text{S}_2\text{O}_3} = 0.01325 \text{ g Na}_2\text{S}_2\text{O}_3$$

This is the amount of $\text{Na}_2\text{S}_2\text{O}_3$ in a 10.00-mL portion of a 100-mL sample; thus, there are 0.1325 grams of $\text{Na}_2\text{S}_2\text{O}_3$ in the original sample. The sample's purity, therefore, is

$$\frac{0.01325 \text{ g Na}_2\text{S}_2\text{O}_3}{0.1342 \text{ g sample}} \times 100 = 98.73\% \text{ w/w Na}_2\text{S}_2\text{O}_3$$

Note that in using [equation 11.25](#) and [equation 11.26](#), it does not matter whether $\text{S}_2\text{O}_3^{2-}$ is oxidized at the working electrode or is oxidized by I_3^- .

Practice Exercise 11.7

To analyze a brass alloy, a 0.442-g sample is dissolved in acid and diluted to volume in a 500-mL volumetric flask. Electrolysis of a 10.00-mL sample at -0.3 V versus a SCE reduces Cu^{2+} to Cu, requiring a total charge of 16.11 C. Adjusting the potential to -0.6 V versus a SCE and completing the electrolysis requires 0.442 C to reduce Pb^{2+} to Pb. Report the %w/w Cu and Pb in the alloy.

Click [here](#) to review your answer to this exercise.

Representative Method 11.2

Determination of Dichromate by a Coulometric Redox Titration

DESCRIPTION OF THE METHOD

The concentration of $\text{Cr}_2\text{O}_7^{2-}$ in a sample is determined by a coulometric redox titration using Fe^{3+} as a mediator and electrogenerated Fe^{2+} as the titrant. The endpoint of the titration is determined potentiometrically.

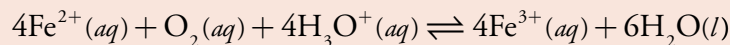
PROCEDURE

The electrochemical cell consists of a Pt working electrode and a Pt counter electrode placed in separate cells connected by a porous glass disk. Fill the counter electrode's cell with 0.2 M Na_2SO_4 , keeping the level above that of the solution in the working electrode's cell. Connect a platinum electrode and a tungsten electrode to a potentiometer so that you can measure the working electrode's potential during the analysis. Prepare a mediator solution of approximately 0.3 M $\text{NH}_4\text{Fe}(\text{SO}_4)_2$. Add 5.00 mL of sample, 2 mL of 9 M H_2SO_4 , and 10–25 mL of the mediator solution to the working electrode's cell, and add distilled water as needed to cover the electrodes. Bubble pure N_2 through the solution for 15 min to remove any O_2 that might be present. Maintain the flow of N_2 during the electrolysis, turning it off momentarily when measuring the potential. Stir the solution using a magnetic stir bar. Adjust the current to 15–50 mA and begin the titration. Periodically stop the titration and measure the potential. Construct a titration curve of potential versus time and determine the time needed to reach the equivalence point.

QUESTIONS

- Is the platinum working electrode the cathode or the anode?
Reduction of Fe^{3+} to Fe^{2+} occurs at the working electrode, making it the cathode in this electrochemical cell.
- Why is it necessary to remove dissolved oxygen by bubbling N_2 through the solution?
Any dissolved O_2 will oxidize Fe^{2+} back to Fe^{3+} , as shown by the following reaction.

The best way to appreciate the theoretical and practical details discussed in this section is to carefully examine a typical analytical method. Although each method is unique, the following description of the determination of $\text{Cr}_2\text{O}_7^{2-}$ provides an instructive example of a typical procedure. The description here is based on Bassett, J.; Denney, R. C.; Jeffery, G. H.; Mendham, J. *Vogel's Textbook of Quantitative Inorganic Analysis*, Longman: London, 1978, p. 559–560.



To maintain current efficiency, all the Fe^{2+} must react with $\text{Cr}_2\text{O}_7^{2-}$. The reaction of Fe^{2+} with O_2 means that more of the Fe^{3+} mediator is needed, increasing the time to reach the titration's endpoint. As a result, we report the presence of too much $\text{Cr}_2\text{O}_7^{2-}$.

3. What effect is there if the $\text{NH}_4\text{Fe}(\text{SO}_4)_2$ is contaminated with trace amounts of Fe^{2+} ? How can you compensate for this source of Fe^{2+} ?

There are two sources of Fe^{2+} : that generated from the mediator and that present as an impurity. Because the total amount of Fe^{2+} reacting with $\text{Cr}_2\text{O}_7^{2-}$ remains unchanged, less Fe^{2+} must be generated from the mediator. This decreases the time needed to reach the titration's end point. Because the apparent current efficiency is greater than 100%, and the reported concentration of $\text{Cr}_2\text{O}_7^{2-}$ is too small. We can remove trace amount of Fe^{2+} from the mediator solution by adding H_2O_2 and heating at 50–70 °C until the evolution of O_2 ceases, converting the Fe^{2+} to Fe^{3+} . Alternatively, we can complete a blank titration to correct for any impurities of Fe^{2+} in the mediator.

4. Why is the level of solution in the counter electrode's cell maintained above the solution level in the working electrode's cell?

This prevents the solution containing the analyte from entering the counter electrode's cell. The oxidation of H_2O at the counter electrode produces O_2 , which can react with the Fe^{2+} generated at the working electrode or the Cr^{3+} resulting from the reaction of Fe^{2+} and $\text{Cr}_2\text{O}_7^{2-}$. In either case, the result is a positive determinate error.

11C.4 Characterization Applications

One useful application of coulometry is determining the number of electrons involved in a redox reaction. To make the determination, we complete a controlled-potential coulometric analysis using a known amount of a pure compound. The total charge at the end of the electrolysis is used to determine the value of n using Faraday's law ([equation 11.25](#)).

Example 11.11

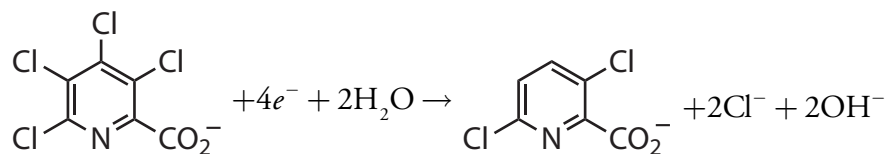
A 0.3619-g sample of tetrachloropicolinic acid, $\text{C}_6\text{HNO}_2\text{Cl}_4$, is dissolved in distilled water, transferred to a 1000-mL volumetric flask, and diluted to volume. An exhaustive controlled-potential electrolysis of a 10.00-mL portion of this solution at a spongy silver cathode requires 5.374 C of charge. What is the value of n for this reduction reaction?

SOLUTION

The 10.00-mL portion of sample contains 3.619 mg, or 1.39×10^{-5} mol of tetrachloropicolinic acid. Solving [equation 11.25](#) for n and making appropriate substitutions gives

$$n = \frac{Q}{FN_A} = \frac{5.274 \text{ C}}{(96478 \text{ C/mol } e^-)(1.39 \times 10^{-5} \text{ mol C}_6\text{HNO}_2\text{Cl}_4)} \\ = 4.01 \text{ mol } e^-/\text{mol C}_6\text{HNO}_2\text{Cl}_4$$

Thus, reducing a molecule of tetrachloropicolinic acid requires four electrons. The overall reaction, which results in the selective formation of 3,6-dichloropicolinic acid, is



11C.5 - Evaluation

SCALE OF OPERATION

A coulometric method of analysis can be used to analyze a small absolute amount of an analyte. In controlled-current coulometry, for example, the moles of analyte consumed during an exhaustive electrolysis is given by [equation 11.35](#). An electrolysis using a constant current of 100 μA for 100 s, for example, consumes only 1×10^{-7} mol of analyte if $n = 1$. For an analyte with a molecular weight of 100 g/mol, 1×10^{-7} mol of analyte corresponds to only 10 μg . The concentration of analyte in the electrochemical cell, however, must be sufficient to allow an accurate determination of the endpoint. When using a visual end point, the smallest concentration of analyte that can be determined by a coulometric titration is approximately 10^{-4} M. As is the case for a conventional titration, a coulometric titration using a visual end point is limited to major and minor analytes. A coulometric titration to a preset potentiometric endpoint is feasible even if the analyte's concentration is as small as 10^{-7} M, extending the analysis to trace analytes.¹²

See [Figure 3.5](#) to review the meaning of major, minor, and trace analytes.

ACCURACY

When using controlled-current coulometry accuracy is determined by the current efficiency, by the accuracy with which we can measure current and time, and by the accuracy of the end point. The maximum measurement errors for current and time are about $\pm 0.01\%$ and $\pm 0.1\%$, respectively. The maximum end point error for a coulometric titration is at least as good as that for a conventional titration, and is often better when using small quantities of reagents. Together, these measurement errors suggest that an accuracy of 0.1%–0.3% is feasible. The limiting factor in many analyses,

¹² Curran, D. J. "Constant-Current Coulometry," in Kissinger, P. T.; Heineman, W. R., eds., *Laboratory Techniques in Electroanalytical Chemistry*, Marcel Dekker Inc.: New York, 1984, pp. 539–568.

therefore, is current efficiency. A current efficiency of greater than 99.5% is fairly routine, and it often exceeds 99.9%.

In controlled-potential coulometry, accuracy is determined by current efficiency and by the determination of charge. If the sample is free of interferences that are easier to oxidize or reduce than the analyte, a current efficiency of greater than 99.9% is routine. When an interferent is present, it can often be eliminated by applying a potential where the exhaustive electrolysis of the interferences is possible without the simultaneous electrolysis of the analyte. Once the interferent has been removed the potential can be switched to a level where electrolysis of the analyte is feasible. The limiting factor in the accuracy of many controlled-potential coulometric methods of analysis is the determination of charge. With electronic integrators the total charge can be determined with an accuracy of better than 0.5%.

If we cannot obtain an acceptable current efficiency, an electrogravimetric analysis may be possible if the analyte—and only the analyte—forms a solid deposit on the working electrode. In this case the working electrode is weighed before beginning the electrolysis and reweighed when the electrolysis is complete. The difference in the electrode's weight gives the analyte's mass.

PRECISION

Precision is determined by the uncertainties in measuring current, time, and the endpoint in controlled-current coulometry or of charge in controlled-potential coulometry. Precisions of ± 0.1 – 0.3% are routinely obtained in coulometric titrations, and precisions of $\pm 0.5\%$ are typical for controlled-potential coulometry.

SENSITIVITY

For a coulometric method of analysis the calibration sensitivity is equivalent to nF in [equation 11.25](#). In general, a coulometric method is more sensitive if the analyte's oxidation or reduction involves a larger value of n .

SELECTIVITY

Selectivity in controlled-potential and controlled-current coulometry is improved by carefully adjusting solution conditions and by properly selecting the electrolysis potential. In controlled-potential coulometry, the potential is fixed by the potentiostat, and in controlled-current coulometry the potential is determined by the redox reaction with the mediator. In either case, the ability to control the electrolysis potential affords some measure of selectivity. By adjusting pH or adding a complexing agent, it may be possible to shift the potential at which an analyte or interferent undergoes oxidation or reduction. For example, the standard-state reduction potential for Zn^{2+} is -0.762 V versus the SHE. If we add a solution of NH_3 , forming $\text{Zn}(\text{NH}_3)_4^{2+}$, the standard state potential shifts to -1.04 V. This provides an

additional means for controlling selectivity when an analyte and interferent undergo electrolysis at similar potentials.

TIME, COST, AND EQUIPMENT

Controlled-potential coulometry is a relatively time consuming analysis, with a typical analysis requiring 30–60 min. Coulometric titrations, on the other hand, require only a few minutes, and are easily adapted for automated analysis. Commercial instrumentation for both controlled-potential and controlled-current coulometry is available, and is relatively inexpensive. Low cost potentiostats and constant-current sources are available for approximately \$1000.

11D Voltammetric Methods

In **VOLTAMMETRY** we apply a time-dependent potential to an electrochemical cell and measure the resulting current as a function of that potential. We call the resulting plot of current versus applied potential a **VOLTAMMOGRAM**, and it is the electrochemical equivalent of a spectrum in spectroscopy, providing quantitative and qualitative information about the species involved in the oxidation or reduction reaction.¹³ The earliest voltammetric technique is polarography, developed by Jaroslav Heyrovsky in the early 1920s—an achievement for which he was awarded the Nobel Prize in Chemistry in 1959. Since then, many different forms of voltammetry have been developed, a few of which are highlighted in [Figure 11.6](#). Before examining these techniques and their applications in more detail, we must first consider the basic experimental design for voltammetry and the factors influencing the shape of the resulting voltammogram.

11D.1 Voltammetric Measurements

Although early voltammetric methods used only two electrodes, a modern voltammeter makes use of a three-electrode potentiostat, such as that shown in [Figure 11.5](#). In voltammetry we apply a time-dependent potential excitation signal to the working electrode—changing its potential relative to the fixed potential of the reference electrode—and measure the current that flows between the working and auxiliary electrodes. The auxiliary electrode is generally a platinum wire, and the reference electrode is usually a SCE or a Ag/AgCl electrode.

For the working electrode we can choose among several different materials, including mercury, platinum, gold, silver, and carbon. The earliest voltammetric techniques, including polarography, used a mercury working electrode. Because mercury is a liquid, the working electrode is often a drop suspended from the end of a capillary tube. In the **HANGING MERCURY DROP ELECTRODE**, or HMDE, we extrude the drop of Hg by rotating a mi-

[Figure 11.5](#) shows an example of a manual three-electrode potentiostat. Although a modern potentiostat uses very different circuitry, you can use [Figure 11.5](#) and the accompanying discussion to understand how we can control the potential of working electrode and measure the resulting current.

Later in the chapter we will examine several different potential excitation signals, but if you want to sneak a peak, see [Figure 11.44](#), [Figure 11.45](#), [Figure 11.46](#), and [Figure 11.47](#).

¹³ Maloy, J. T. *J. Chem. Educ.* **1983**, *60*, 285–289.

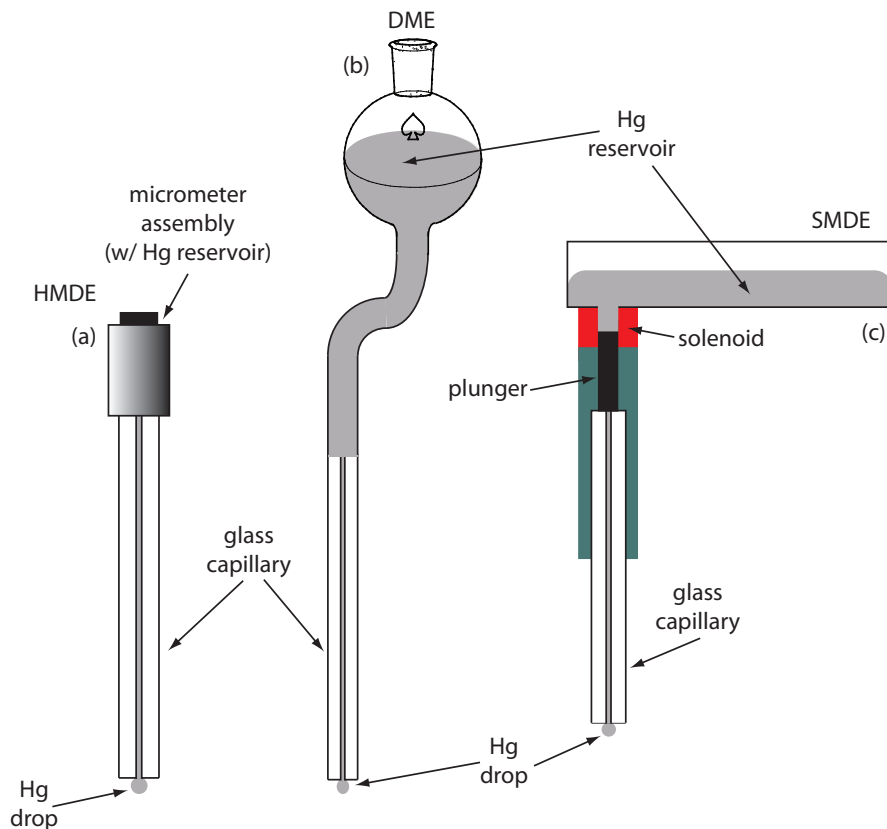


Figure 11.34 Three examples of mercury electrodes: (a) hanging mercury drop electrode, or HMDE; (b) dropping mercury electrode, or DME; and (c) static mercury drop electrode, or SMDE.

rometer screw that pushes the mercury from a reservoir through a narrow capillary tube (Figure 11.34a).

In the **DROPPING MERCURY ELECTRODE**, or DME, mercury drops form at the end of the capillary tube as a result of gravity (Figure 11.34b). Unlike the HMDE, the mercury drop of a DME grows continuously—as mercury flows from the reservoir under the influence of gravity—and has a finite lifetime of several seconds. At the end of its lifetime the mercury drop is dislodged, either manually or on its own, and replaced by a new drop.

The **STATIC MERCURY DROP ELECTRODE**, or SMDE, uses a solenoid driven plunger to control the flow of mercury (Figure 11.34c). Activation of the solenoid momentarily lifts the plunger, allowing mercury to flow through the capillary and forming a single, hanging Hg drop. Repeatedly activating the solenoid produces a series of Hg drops. In this way the SMDE may be used as either a HMDE or a DME.

There is one additional type of mercury electrode: the **MERCURY FILM ELECTRODE**. A solid electrode—typically carbon, platinum, or gold—is placed in a solution of Hg^{2+} and held at a potential where the reduction of Hg^{2+} to Hg is favorable, forming a thin mercury film on the solid electrode's surface.

Figure 11.36 shows a typical solid electrode.

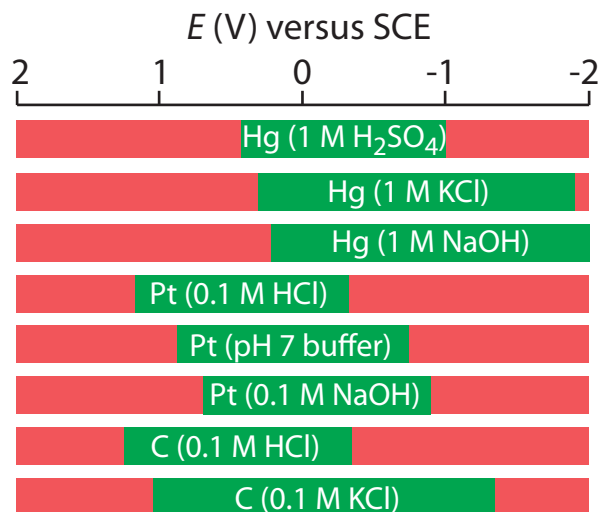


Figure 11.35 Approximate potential windows for mercury, platinum, and carbon (graphite) electrodes in acidic, neutral, and basic aqueous solvents. The useful potential windows are shown in green; potentials in red result in the oxidation or reduction of the solvent or the electrode. Compiled from Adams, R. N. *Electrochemistry at Solid Electrodes*, Marcel Dekker, Inc.: New York, 1969 and Bard, A. J.; Faulkner, L. R. *Electrochemical Methods*, John Wiley & Sons: New York, 1980.

Mercury has several advantages as a working electrode. Perhaps the most important advantage is its high overpotential for the reduction of H_3O^+ to H_2 , which makes accessible potentials as negative as -1 V versus the SCE in acidic solutions and -2 V versus the SCE in basic solutions (Figure 11.35). A species such as Zn^{2+} , which is difficult to reduce at other electrodes without simultaneously reducing H_3O^+ , is easily reduced at a mercury working electrode. Other advantages include the ability of metals to dissolve in mercury—resulting in the formation of an **AMALGAM**—and the ability to easily renew the surface of the electrode by extruding a new drop. One limitation to using mercury as a working electrode is the ease with which it is oxidized. Depending on the solvent, a mercury electrode can not be used at potentials more positive than approximately -0.3 V to $+0.4$ V versus the SCE.

Solid electrodes constructed using platinum, gold, silver, or carbon may be used over a range of potentials, including potentials that are negative and positive with respect to the SCE (Figure 11.35). For example, the potential window for a Pt electrode extends from approximately $+1.2$ V to -0.2 V versus the SCE in acidic solutions, and from $+0.7$ V to -1 V versus the SCE in basic solutions. A solid electrode can replace a mercury electrode for many voltammetric analyses that require negative potentials, and is the electrode of choice at more positive potentials. Except for the carbon paste electrode, a solid electrode is fashioned into a disk and sealed in the end of an inert support with an electrical lead (Figure 11.36). The carbon paste electrode is made by filling the cavity at the end of the inert support with a paste consisting of carbon particles and a viscous oil. Solid electrodes are not without problems, the most important of which is the ease with which the electrode's surface is altered by the adsorption of a solution species or by the formation of an oxide layer. For this reason a solid electrode needs frequent reconditioning, either by applying an appropriate potential or by polishing.

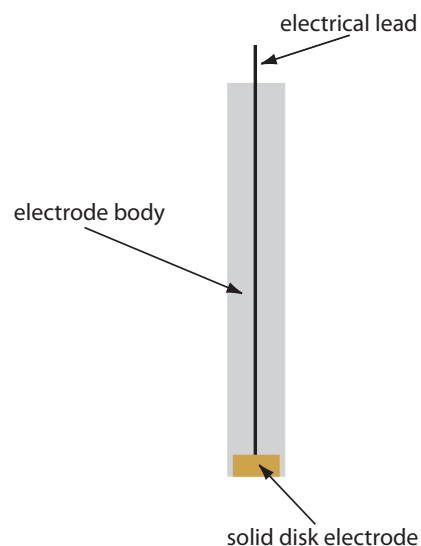


Figure 11.36 Schematic showing a solid electrode. The electrode is fashioned into a disk and sealed in the end of an inert polymer support along with an electrical lead.

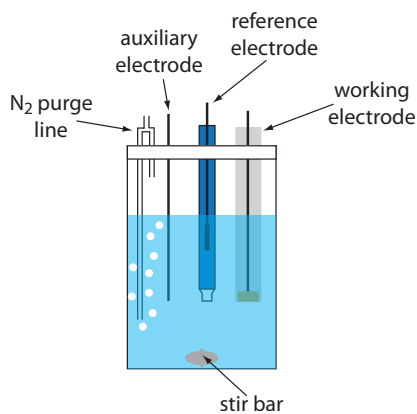


Figure 11.37 Typical electrochemical cell for voltammetry.

A typical arrangement for a voltammetric electrochemical cell is shown in Figure 11.37. In addition to the working electrode, the reference electrode, and the auxiliary electrode, the cell also includes a N_2 -purge line for removing dissolved O_2 , and an optional stir bar. Electrochemical cells are available in a variety of sizes, allowing the analysis of solution volumes ranging from more than 100 mL to as small as 50 μ L.

11D.2 Current in Voltammetry

When we oxidize an analyte at the working electrode, the resulting electrons pass through the potentiostat to the auxiliary electrode, reducing the solvent or some other component of the solution matrix. If we reduce the analyte at the working electrode, the current flows from the auxiliary electrode to the cathode. In either case, the current from redox reactions at the working electrode and the auxiliary electrodes is called a **FARADAIC CURRENT**. In this section we consider the factors affecting the magnitude of the faradaic current, as well as the sources of any non-faradaic currents.

SIGN CONVENTIONS

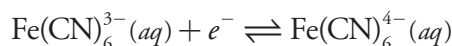
Because the reaction of interest occurs at the working electrode, we describe the faradaic current using this reaction. A faradaic current due to the analyte's reduction is a **CATHODIC CURRENT**, and its sign is positive. An **ANODIC CURRENT** is due to an oxidation reaction at the working electrode, and its sign is negative.

INFLUENCE OF APPLIED POTENTIAL ON THE FARADAIC CURRENT

As an example, let's consider the faradaic current when we reduce $Fe(CN)_6^{3-}$ to $Fe(CN)_6^{4-}$ at the working electrode. The relationship between the concentrations of $Fe(CN)_6^{3-}$, the concentration of $Fe(CN)_6^{4-}$, and the potential is given by the Nernst equation

$$E = +0.356 \text{ V} - 0.05916 \log \frac{[Fe(CN)_6^{4-}]_{x=0}}{[Fe(CN)_6^{3-}]_{x=0}}$$

where $+0.356 \text{ V}$ is the standard-state potential for the $Fe(CN)_6^{3-}/Fe(CN)_6^{4-}$ redox couple, and $x=0$ indicates that the concentrations of $Fe(CN)_6^{3-}$ and $Fe(CN)_6^{4-}$ are those at the surface of the working electrode. We use surface concentrations instead of bulk concentrations because the equilibrium position for the redox reaction



is established at the electrode's surface.

Let's assume we have a solution for which the initial concentration of $Fe(CN)_6^{3-}$ is 1.0 mM, and in which $Fe(CN)_6^{4-}$ is absent. Figure 11.38 shows the ladder diagram for this solution. If we apply a potential of $+0.530 \text{ V}$

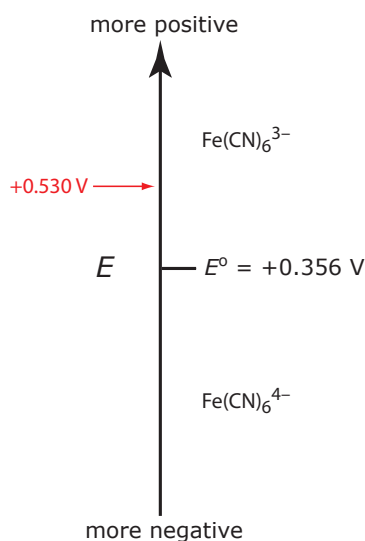


Figure 11.38 Ladder diagram for the $Fe(CN)_6^{3-}/Fe(CN)_6^{4-}$ redox half-reaction.

to the working electrode, the concentrations of $\text{Fe}(\text{CN})_6^{3-}$ and $\text{Fe}(\text{CN})_6^{4-}$ at the surface of the electrode are unaffected, and no faradaic current is observed (see [Figure 11.38](#)). If we switch the potential to +0.356 V some of the $\text{Fe}(\text{CN})_6^{3-}$ at the electrode's surface reduces to $\text{Fe}(\text{CN})_6^{4-}$ until we reach a condition where

$$[\text{Fe}(\text{CN})_6^{3-}]_{x=0} = [\text{Fe}(\text{CN})_6^{4-}]_{x=0} = 0.50 \text{ mM}$$

If this is all that happens after we apply the potential, then there would be a brief surge of faradaic current that quickly returns to zero—not the most interesting of results. Although the concentrations of $\text{Fe}(\text{CN})_6^{3-}$ and $\text{Fe}(\text{CN})_6^{4-}$ at the electrode surface are 0.50 mM, their concentrations in bulk solution remains unchanged. Because of this difference in concentration, there is a concentration gradient between the solution at the electrode's surface and the bulk solution. This concentration gradient creates a driving force that transports $\text{Fe}(\text{CN})_6^{4-}$ away from the electrode and that transports $\text{Fe}(\text{CN})_6^{3-}$ to the electrode ([Figure 11.39](#)). As the $\text{Fe}(\text{CN})_6^{3-}$ arrives at the electrode it, too, is reduced to $\text{Fe}(\text{CN})_6^{4-}$. A faradaic current continues to flow until there is no difference between the concentrations of $\text{Fe}(\text{CN})_6^{3-}$ and $\text{Fe}(\text{CN})_6^{4-}$ at the electrode and their concentrations in bulk solution.

Although the potential at the working electrode determines if a faradaic current flows, the magnitude of the current is determined by the rate of the resulting oxidation or reduction reaction. Two factors contribute to the rate of the electrochemical reaction: the rate at which the reactants and products are transported to and from the electrode—what we call **MASS TRANSPORT**—and the rate at which electrons pass between the electrode and the reactants and products in solution.

This is the first of the five important principles of electrochemistry outlined in [Section 11A](#): the electrode's potential determines the analyte's form at the electrode's surface.

This is the second of the five important principles of electrochemistry outlined in [Section 11A](#): the analyte's concentration at the electrode may not be the same as its concentration in bulk solution.

This is the fourth of the five important principles of electrochemistry outlined in [Section 11A](#): current is a measure of rate.

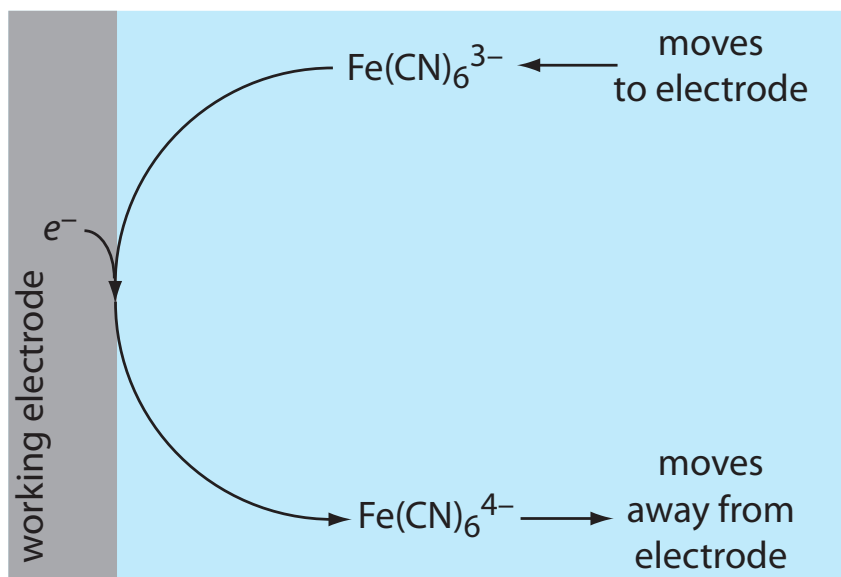


Figure 11.39 Schematic showing the transport of $\text{Fe}(\text{CN})_6^{4-}$ away from the electrode's surface and the transport of $\text{Fe}(\text{CN})_6^{3-}$ toward the electrode's surface following the reduction of $\text{Fe}(\text{CN})_6^{3-}$ to $\text{Fe}(\text{CN})_6^{4-}$.

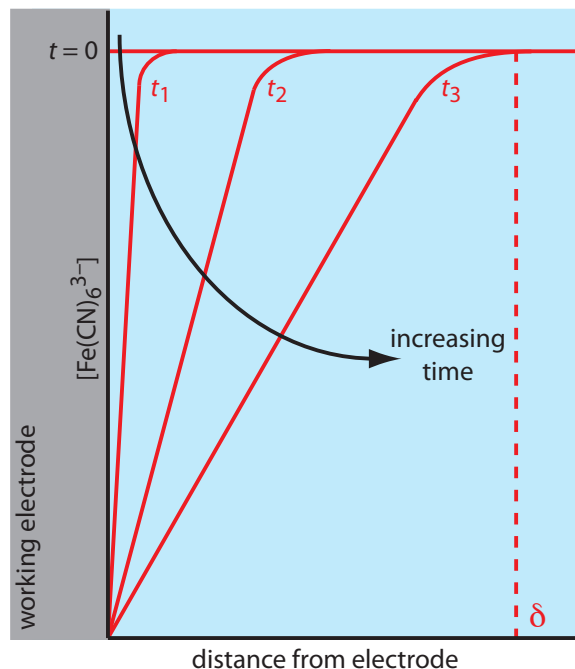


Figure 11.40 Concentration gradients (in red) for $\text{Fe}(\text{CN})_6^{3-}$ following the application of a potential that completely reduces it to $\text{Fe}(\text{CN})_6^{4-}$. Before applying the potential ($t=0$) the concentration of $\text{Fe}(\text{CN})_6^{3-}$ is the same at all distances from the electrode's surface. After applying the potential, its concentration at the electrode's surface decreases to zero and $\text{Fe}(\text{CN})_6^{3-}$ diffuses to the electrode from bulk solution. The longer we apply the potential, the greater the distance over which diffusion occurs. The dashed red line shows the extent of the diffusion layer at time t_3 . These profiles assume that convection and migration do not significantly contribute to the mass transport of $\text{Fe}(\text{CN})_6^{3-}$.

INFLUENCE OF MASS TRANSPORT ON THE FARADAIC CURRENT

There are three modes of mass transport that affect the rate at which reactants and products move toward or away from the electrode surface: diffusion, migration, and convection. **DIFFUSION** occurs whenever the concentration of an ion or molecule at the surface of the electrode is different from that in bulk solution. If we apply a potential sufficient to completely reduce $\text{Fe}(\text{CN})_6^{3-}$ at the electrode surface, the result is a concentration gradient similar to that shown in Figure 11.40. The region of solution over which diffusion occurs is the **DIFFUSION LAYER**. In the absence of other modes of mass transport, the width of the diffusion layer, δ , increases with time as the $\text{Fe}(\text{CN})_6^{3-}$ must diffuse from increasingly greater distances.

CONVECTION occurs when we mechanically mix the solution, carrying reactants toward the electrode and removing products from the electrode. The most common form of convection is stirring the solution with a stir bar. Other methods that have been used include rotating the electrode and incorporating the electrode into a flow-cell.

The final mode of mass transport is **MIGRATION**, which occurs when a charged particle in solution is attracted to or repelled from an electrode that carries a surface charge. If the electrode carries a positive charge, for example, an anion will move toward the electrode and a cation will move toward the bulk solution. Unlike diffusion and convection, migration only affects the mass transport of charged particles.

The movement of material to and from the electrode surface is a complex function of all three modes of mass transport. In the limit where diffusion is the only significant form of mass transport, the current in a voltammetric cell is equal to

$$i = \frac{nFAD(C_{\text{bulk}} - C_{x=0})}{\delta} \quad 11.36$$

where n the number of electrons in the redox reaction, F is Faraday's constant, A is the area of the electrode, D is the diffusion coefficient for the species reacting at the electrode, C_{bulk} and $C_{x=0}$ are its concentrations in bulk solution and at the electrode surface, and δ is the thickness of the diffusion layer.

For equation 11.36 to be valid, convection and migration must not interfere with the formation of a diffusion layer. We can eliminate migration by adding a high concentration of an inert supporting electrolyte. Because ions of similar charge are equally attracted to or repelled from the surface of the electrode, each has an equal probability of undergoing migration. A large excess of an inert electrolyte ensures that few reactants or products experience migration. Although it is easy to eliminate convection by not stirring the solution, there are experimental designs where we cannot avoid convection, either because we must stir the solution or because we are using electrochemical flow cell. Fortunately, as shown in Figure 11.41, the dynamics of a fluid moving past an electrode results in a small diffusion layer—typically 1–10 μm in thickness—in which the rate of mass transport by convection drops to zero.

EFFECT OF ELECTRON TRANSFER KINETICS ON THE FARADAIC CURRENT

The rate of mass transport is one factor influencing the current in voltammetry. The ease with which electrons move between the electrode and the species reacting at the electrode also affects the current. When electron

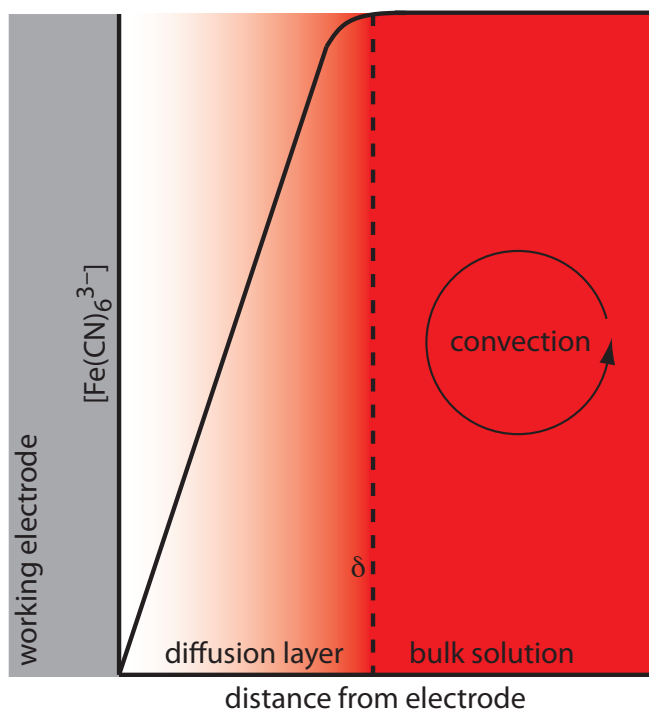


Figure 11.41 Concentration gradient for $\text{Fe}(\text{CN})_6^{3-}$ when stirring the solution. Diffusion is the only significant form of mass transport close to the electrode's surface. At distances greater than δ , convection is the only significant form of mass transport, maintaining a homogeneous solution in which the concentration of $\text{Fe}(\text{CN})_6^{3-}$ at δ is the same as its concentration in bulk solution.

transfer kinetics are fast, the redox reaction is at equilibrium. Under these conditions the redox reaction is **ELECTROCHEMICALLY REVERSIBLE** and the Nernst equation applies. If the electron transfer kinetics are sufficiently slow, the concentration of reactants and products at the electrode surface—and thus the magnitude of the faradaic current—are not what is predicted by the Nernst equation. In this case the system is **ELECTROCHEMICALLY IRREVERSIBLE**.

CHARGING CURRENTS

In addition to current resulting from redox reactions—what we call faradaic current—the current in an electrochemical cell includes other, nonfaradaic sources. Suppose the charge on an electrode is zero and that we suddenly change its potential so that the electrode's surface acquires a positive charge. Cations near the electrode's surface respond to this positive charge by migrating away from the electrode; anions, on the other hand, migrate toward the electrode. This migration of ions occurs until the electrode's positive surface charge and the negative charge of the solution near the electrode are equal. Because the movement of ions and the movement of electrons are indistinguishable, the result is a small, short-lived **NONFARADAIC CURRENT** that we call the **CHARGING CURRENT**. Every time we change the electrode's potential, a transient charging current flows.

RESIDUAL CURRENT

Even in the absence of analyte, a small, measurable current flows through an electrochemical cell. This **RESIDUAL CURRENT** has two components: a faradaic current due to the oxidation or reduction of trace impurities and the charging current. Methods for discriminating between the analyte's faradaic current and the residual current are discussed later in this chapter.

11D.3 Shape of Voltammograms

The shape of a voltammogram is determined by several experimental factors, the most important of which are how we measure the current and whether convection is included as a means of mass transport. As shown in [Figure 11.42](#), despite an abundance of different voltammetric techniques, several of which are discussed in this chapter, there are only three common shapes for voltammograms.

For the voltammogram in [Figure 11.42a](#), the current increases from a background residual current to a **LIMITING CURRENT**, i_l . Because the faradaic current is inversely proportional to δ ([equation 11.36](#)), a limiting current can only occur if the thickness of the diffusion layer remains constant because we are stirring the solution (see [Figure 11.41](#)). In the absence of convection the diffusion layer increases with time (see [Figure 11.40](#)). As shown in [Figure 11.42b](#), the resulting voltammogram has a **PEAK CURRENT** instead of a limiting current.

The migration of ions in response to the electrode's surface charge leads to the formation of a structured electrode-solution interface that we call the **ELECTRICAL DOUBLE LAYER**, or EDL. When we change an electrode's potential, the charging current is the result of a restructuring of the EDL. The exact structure of the electrical double layer is not important in the context of this text, but you can consult this chapter's additional resources for additional information.

For the voltammograms in Figures 11.42a and 11.42b, we measure the current as a function of the applied potential. We also can monitor the change in current, Δ_i , following a change in potential. The resulting voltammogram, shown in Figure 11.42c, also has a peak current.

11D.4 Quantitative and Qualitative Aspects of Voltammetry

Earlier we described a voltammogram as the electrochemical equivalent of a spectrum in spectroscopy. In this section we consider how we can extract quantitative and qualitative information from a voltammogram. For simplicity we will limit our treatment to voltammograms similar to Figure 11.42a.

DETERMINING CONCENTRATION

Let's assume that the redox reaction at the working electrode is



where O is the analyte's oxidized form and R is its reduced form. Let's also assume that only O is present in bulk solution and that we are stirring the solution. When we apply a potential causing the reduction of O to R, the current depends on the rate at which O diffuses through the fixed diffusion layer shown in Figure 11.41. Using equation 11.36, the current, i , is

$$i = K_{\text{O}}([\text{O}]_{\text{bulk}} - [\text{O}]_{x=0}) \quad 11.38$$

where K_{O} is a constant equal to $nFAD_{\text{O}}/\delta$. When we reach the limiting current, i_1 , the concentration of O at the electrode surface is zero and equation 11.38 simplifies to

$$i_1 = K_{\text{O}}[\text{O}]_{\text{bulk}} \quad 11.39$$

Equation 11.39 shows us that the limiting current is a linear function of the concentration of O in bulk solution. To determine the value of K_{O} we can use any of the standardization methods covered in Chapter 5. Equations similar to equation 11.39 can be developed for the voltammograms shown in Figure 11.42b and Figure 11.42c.

DETERMINING THE STANDARD-STATE POTENTIAL

To extract the standard-state potential from a voltammogram, we need to rewrite the Nernst equation for reaction 11.37

$$E = E_{\text{O/R}}^{\circ} - \frac{0.05916}{n} \log \frac{[\text{R}]_{x=0}}{[\text{O}]_{x=0}} \quad 11.40$$

in terms of current instead of the concentrations of O and R. We will do this in several steps. First, we substitute equation 11.39 into equation 11.38 and rearrange to give

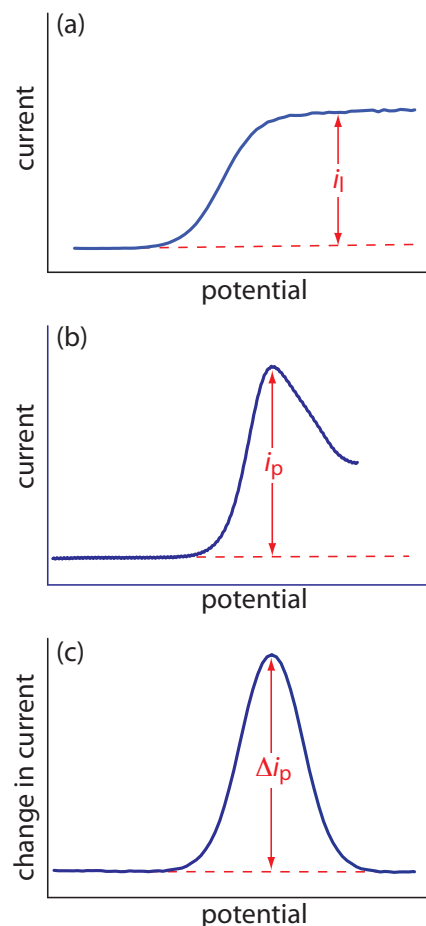


Figure 11.42 The three common shapes for voltammograms. The dashed red line shows the residual current.

$$[\text{O}]_{x=0} = \frac{i_1 - i}{K_{\text{O}}} \quad 11.41$$

Next, we derive a similar equation for $[\text{R}]_{x=0}$, by noting that

$$i = K_{\text{R}}([\text{R}]_{x=0} - [\text{R}]_{\text{bulk}})$$

Because the concentration of $[\text{R}]_{\text{bulk}}$ is zero—remember our assumption that the initial solution contains only O—we can simplify this equation

$$i = K_{\text{R}}[\text{R}]_{x=0}$$

and solve for $[\text{R}]_{x=0}$.

$$[\text{R}]_{x=0} = \frac{i}{K_{\text{R}}} \quad 11.42$$

Now we are ready to finish our derivation. Substituting equation 11.42 and equation 11.41 into [equation 11.40](#) and rearranging leaves us with

$$E = E_{\text{O/R}}^{\circ} - \frac{0.05916}{n} \log \frac{K_{\text{O}}}{K_{\text{R}}} - \frac{0.05916}{n} \log \frac{i}{i_1 - i} \quad 11.43$$

When the current, i , is half of the limiting current, i_1 ,

$$i = 0.5 \times i_1$$

we can simplify equation 11.43 to

$$E_{1/2} = E_{\text{O/R}}^{\circ} - \frac{0.05916}{n} \log \frac{K_{\text{O}}}{K_{\text{R}}} \quad 11.44$$

where $E_{1/2}$ is the half-wave potential (Figure 11.43). If K_{O} is approximately equal to K_{R} , which is often the case, then the half-wave potential is equal to the standard-state potential. Note that equation 11.44 is valid only if the redox reaction is electrochemically reversible. We also can use a voltammogram with a peak potential to determine a redox reaction's standard-state potential.

$$\begin{aligned} \log \frac{i}{i_1 - i} &= \log \frac{0.5 \times i_1}{i_1 - 0.5 \times i_1} = \\ \log \frac{0.5 \times i_1}{0.5 \times i_1} &= \log(1) = 0 \end{aligned}$$

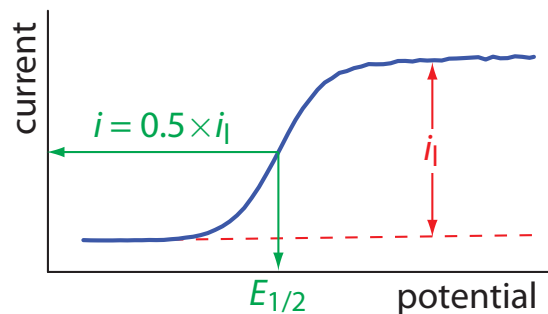


Figure 11.43 Determination of the limiting current, i_1 , and the half-wave potential, $E_{1/2}$, for the voltammogram in [Figure 11.42a](#).

11D.5 Voltammetric Techniques

In voltammetry there are three important experimental parameters under our control: how we change the potential we apply to the working electrode, when we choose to measure the current, and whether we choose to stir the solution. Not surprisingly, there are many different voltammetric techniques. In this section we consider several important examples.

POLAROGRAPHY

The first important voltammetric technique to be developed—**POLAROGRAPHY**—uses the dropping mercury electrode shown in [Figure 11.34b](#) as the working electrode. As shown in [Figure 11.44](#), the current flowing through the electrochemical cell is measured while applying a linear potential ramp.

Although polarography takes place in an unstirred solution, we obtain a limiting current instead of a peak current. When a Hg drop separates from the glass capillary and falls to the bottom of the electrochemical cell, it mixes the solution. Each new Hg drop, therefore, grows into a solution whose composition is identical to the bulk solution. The oscillations in the current are a result of the Hg drop's growth, which leads to a time-dependent change in the area of the working electrode. The limiting current—which is also called the diffusion current—is measured using either the maximum current, i_{\max} , or from the average current, i_{avg} . The relationship between the analyte's concentration, C_A , and the limiting current is given by the Ilkovic equation

$$(i_l)_{\max} = 706nD^{1/2}m^{2/3}t^{1/6}C_A = K_{\max}C_A$$

$$(i_l)_{\text{avg}} = 607nD^{1/2}m^{2/3}t^{1/6}C_A = K_{\text{avg}}C_A$$

where n is the number of electrons in the redox reaction, D is the analyte's diffusion coefficient, m is the flow rate of the Hg, t is the drop's lifetime and K_{\max} and K_{avg} are constants. The half-wave potential, $E_{1/2}$, provides qualitative information about the redox reaction.

See [Appendix 15](#) for a list of selected polarographic half-wave potentials.

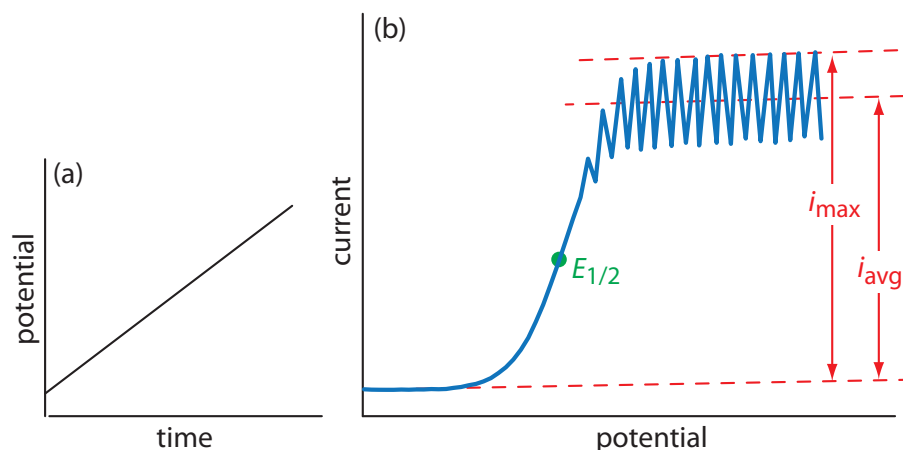


Figure 11.44 Details of normal polarography: (a) the linear potential-excitation signal, and (b) the resulting voltammogram.

Normal polarography has been replaced by various forms of **PULSE POLAROGRAPHY**, several examples of which are shown in [Figure 11.45](#).¹⁴ Normal pulse polarography ([Figure 11.45a](#)), for example, uses a series of potential pulses characterized by a cycle of time of τ , a pulse-time of t_p , a pulse potential of ΔE_p , and a change in potential per cycle of ΔE_s . Typical experimental conditions for normal pulse polarography are $\tau \approx 1$ s, $t_p \approx 50$ ms, and $\Delta E_s \approx 2$ mV. The initial value of ΔE_p is ≈ 2 mV, and it increases by ≈ 2 mV with each pulse. The current is sampled at the end of each potential pulse for approximately 17 ms before returning the potential to its initial value. The shape of the resulting voltammogram is similar to [Figure 11.44](#), but without the current oscillations. Because we apply the potential for only a small portion of the drop's lifetime, there is less time for the analyte to undergo oxidation or reduction and a smaller diffusion layer. As a result, the faradaic current in normal pulse polarography is greater than in the polarography, resulting in better sensitivity and smaller detection limits.

In differential pulse polarography ([Figure 11.45b](#)) the current is measured twice per cycle: for approximately 17 ms before applying the pulse and for approximately 17 ms at the end of the cycle. The difference in the two currents gives rise to the peak-shaped voltammogram. Typical experimental conditions for differential pulse polarography are $\tau \approx 1$ s, $t_p \approx 50$ ms, $\Delta E_p \approx 50$ mV, and $\Delta E_s \approx 2$ mV.

Other forms of pulse polarography include staircase polarography ([Figure 11.45c](#)) and square-wave polarography ([Figure 11.45d](#)). One advantage of square-wave polarography is that we can make τ very small—perhaps as small as 5 ms, compared to 1 s for other pulse polarographies—which can significantly decrease analysis time. For example, suppose we need to scan a potential range of 400 mV. If we use normal pulse polarography with a ΔE_s of 2 mV/cycle and a τ of 1 s/cycle, then we need 200 s to complete the scan. If we use square-wave polarography with a ΔE_s of 2 mV/cycle and a τ of 5 ms/cycle, we can complete the scan in 1 s. At this rate, we can acquire a complete voltammogram using a single drop of Hg!

Polarography is used extensively for the analysis of metal ions and inorganic anions, such as IO_3^- and NO_3^- . We also can use polarography to study organic compounds with easily reducible or oxidizable functional groups, such as carbonyls, carboxylic acids, and carbon-carbon double bonds.

HYDRODYNAMIC VOLTAMMETRY

In polarography we obtain a limiting current because as each drop of mercury mixes the solution as it falls to the bottom of the electrochemical cell. If we replace the DME with a solid electrode (see [Figure 11.36](#)) we can still obtain a limiting current if we mechanically stir the solution during the analysis, either using a stir bar or by rotating the electrode. We call this approach **HYDRODYNAMIC VOLTAMMETRY**.

¹⁴ Osteryoung, J. J. *Chem. Educ.* **1983**, *60*, 296–298.

The voltammogram for differential pulse polarography is approximately the first derivative of the voltammogram for normal pulse polarography. To see why this is the case, note that the change in current over a fixed change in potential, $\Delta i/\Delta E$, approximates the slope of the voltammogram for normal pulse polarography. You may recall that the first derivative of a function returns the slope of the function at each point. The first derivative of a sigmoidal function is a peak-shaped function.

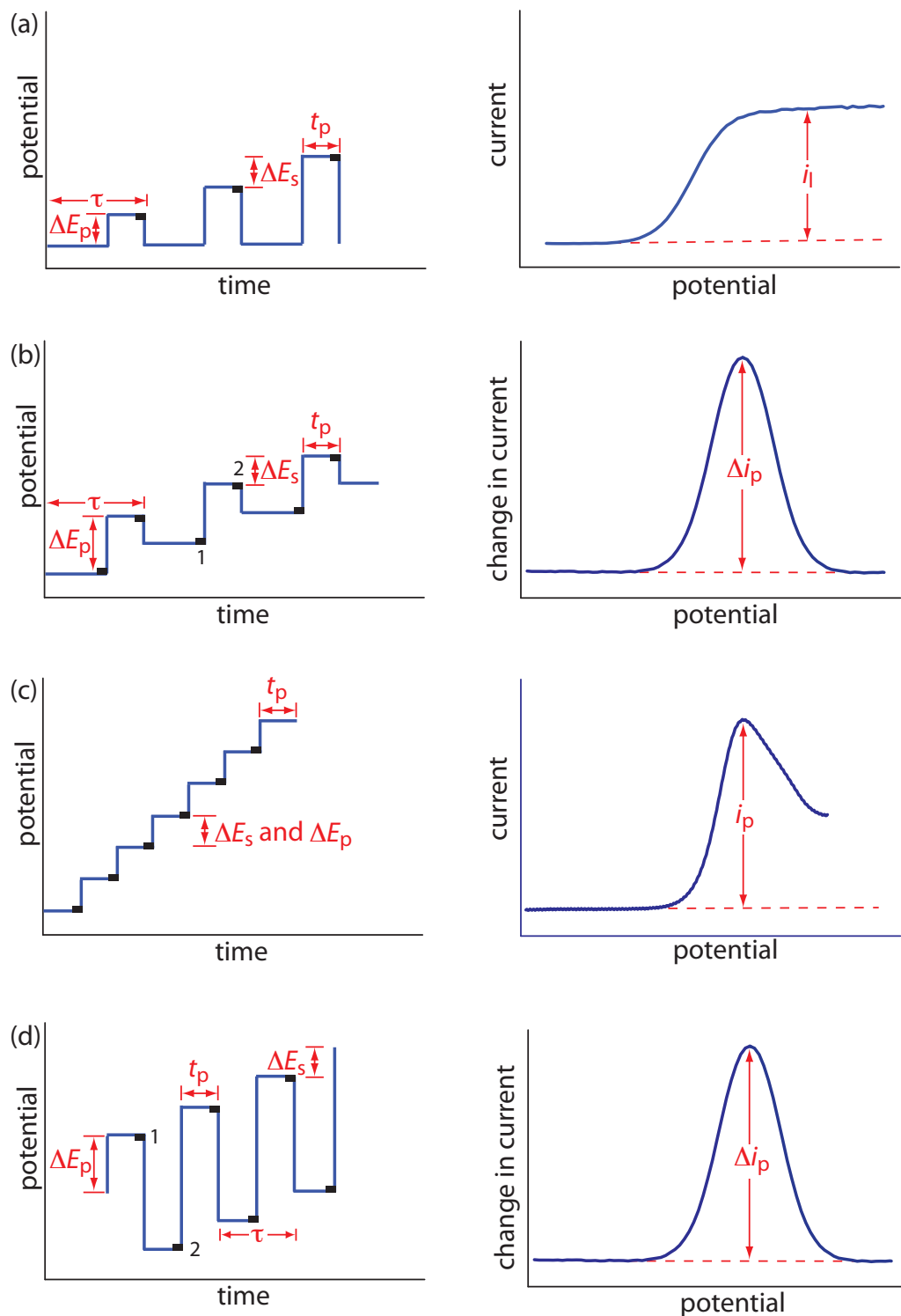


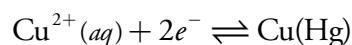
Figure 11.45 Potential-excitation signals and voltammograms for (a) normal pulse polarography, (b) differential pulse polarography, (c) staircase polarography, and (d) square-wave polarography. The current is sampled at the time intervals shown by the black rectangles. When measuring a change in current, Δi , the current at point 1 is subtracted from the current at point 2. The symbols in the diagrams are as follows: τ is the cycle time; ΔE_p is a fixed or variable pulse potential; ΔE_s is the fixed change in potential per cycle, and t_p is the pulse time.

Hydrodynamic voltammetry uses the same potential profiles as in polarography, such as a linear scan (Figure 11.44) or a differential pulse (Figure 11.45b). The resulting voltammograms are identical to those for polarography, except for the lack of current oscillations from the growth of the mercury drops. Because hydrodynamic voltammetry is not limited to Hg electrodes, it is useful for analytes that undergo oxidation or reduction at more positive potentials.

STRIPPING VOLTAMMETRY

Another important voltammetric technique is **STRIPPING VOLTAMMETRY**, which consists of three related techniques: anodic stripping voltammetry, cathodic stripping voltammetry, and adsorptive stripping voltammetry. Because anodic stripping voltammetry is the more widely used of these techniques, we will consider it in greatest detail.

Anodic stripping voltammetry consists of two steps (Figure 11.46). The first step is a controlled potential electrolysis in which we hold the working electrode—usually a hanging mercury drop or a mercury film electrode—at a cathodic potential sufficient to deposit the metal ion on the electrode. For example, when analyzing Cu^{2+} the deposition reaction is



where $\text{Cu}(\text{Hg})$ indicates that the copper is amalgamated with the mercury. This step essentially serves as a means of concentrating the analyte by trans-

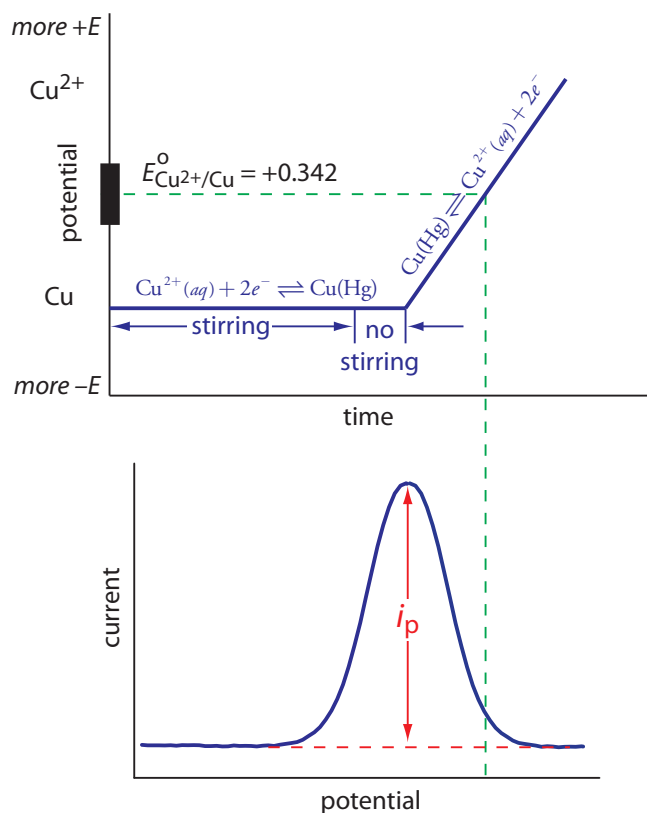


Figure 11.46 Potential-excitation signal and voltammogram for anodic stripping voltammetry at a hanging mercury drop electrode or a mercury film electrode.

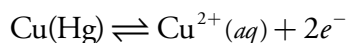
Table 11.11 Representative Examples of Analytes Determined by Stripping Voltammetry

anodic stripping voltammetry	cathodic stripping voltammetry	adsorptive stripping voltammetry
Bi^{3+}	Br^-	bilirubin
Cd^{2+}	Cl^-	codeine
Cu^{2+}	I^-	cocaine
Ga^{3+}	mercaptans (RSH)	digitoxin
In^{3+}	S^{2-}	dopamine
Pb^{2+}	SCN^-	heme
Tl^+		monensin
Sn^{2+}		testosterone
Zn^{2+}		

Source: Compiled from Peterson, W. M.; Wong, R. V. *Am. Lab.* November 1981, 116–128; Wang, J. *Am. Lab.* May 1985, 41–50.

ferring it from the larger volume of the solution to the smaller volume of the electrode. During most of the electrolysis we stir the solution to increase the rate of deposition. Near the end of the deposition time we stop the stirring—eliminating convection as a mode of mass transport—and allow the solution to become quiescent. Typical deposition times are 1–30 min are common, with analytes at lower concentrations requiring longer times.

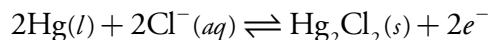
In the second step, we scan the potential anodically—that is, toward a more positive potential. When the working electrode's potential is sufficiently positive, the analyte is stripped from the electrode, returning to solution in its oxidized form.



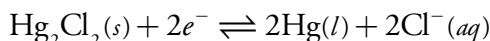
Monitoring the current during the stripping step gives the peak-shaped voltammogram, as shown in Figure 11.46. The peak current is proportional to the analyte's concentration in the solution. Because we are concentrating the analyte in the electrode, detection limits are much smaller than other electrochemical techniques. An improvement of three orders of magnitude—the equivalent of parts per billion instead of parts per million—is fairly routine.

Anodic stripping voltammetry is very sensitive to experimental conditions, which we must carefully control if our results are to be accurate and precise. Key variables include the area of the mercury film or the size of the hanging Hg drop, the deposition time, the rest time, the rate of stirring, and the scan rate during the stripping step. Anodic stripping voltammetry is particularly useful for metals that form amalgams with mercury, several examples of which are listed in Table 11.11.

The experimental design for cathodic stripping voltammetry is similar to anodic stripping voltammetry with two exceptions. First, the deposition step involves the oxidation of the Hg electrode to Hg_2^{2+} , which then reacts with the analyte to form an insoluble film at the surface of the electrode. For example, when Cl^- is the analyte the deposition step is



Second, stripping is accomplished by scanning cathodically toward a more negative potential, reducing Hg_2^{2+} back to Hg and returning the analyte to solution.



[Table 11.11](#) lists several analytes that have been analyzed successfully by cathodic stripping voltammetry.

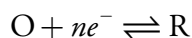
In adsorptive stripping voltammetry the deposition step occurs without electrolysis. Instead, the analyte adsorbs to the electrode's surface. During deposition we maintain the electrode at a potential that enhances adsorption. For example, we can adsorb a neutral molecule on a Hg drop if we apply a potential of -0.4 V versus the SCE, a potential where the surface charge of mercury is approximately zero. When deposition is complete, we scan the potential in an anodic or a cathodic direction depending on whether we are oxidizing or reducing the analyte. Examples of compounds that have been analyzed by adsorptive stripping voltammetry also are listed in [Table 11.11](#).

CYCLIC VOLTAMMETRY

In the voltammetric techniques we have considered to this point, we scan the potential in one direction, either to more positive potentials or to more negative potentials. In **CYCLIC VOLTAMMETRY** we complete a scan in both directions. [Figure 11.47a](#) shows a typical potential-excitation signal. In this example, we first scan the potential to more positive values, resulting in the following oxidation reaction for the species R.



When the potential reaches a predetermined switching potential, we reverse the direction of the scan toward more negative potentials. Because we generated the species O on the forward scan, during the reverse scan it is reduced back to R.



Because we carry out cyclic voltammetry in an unstirred solution, the resulting cyclic voltammogram, as shown in [Figure 11.47b](#), has peak currents instead of limiting currents. The voltammogram has separate peaks

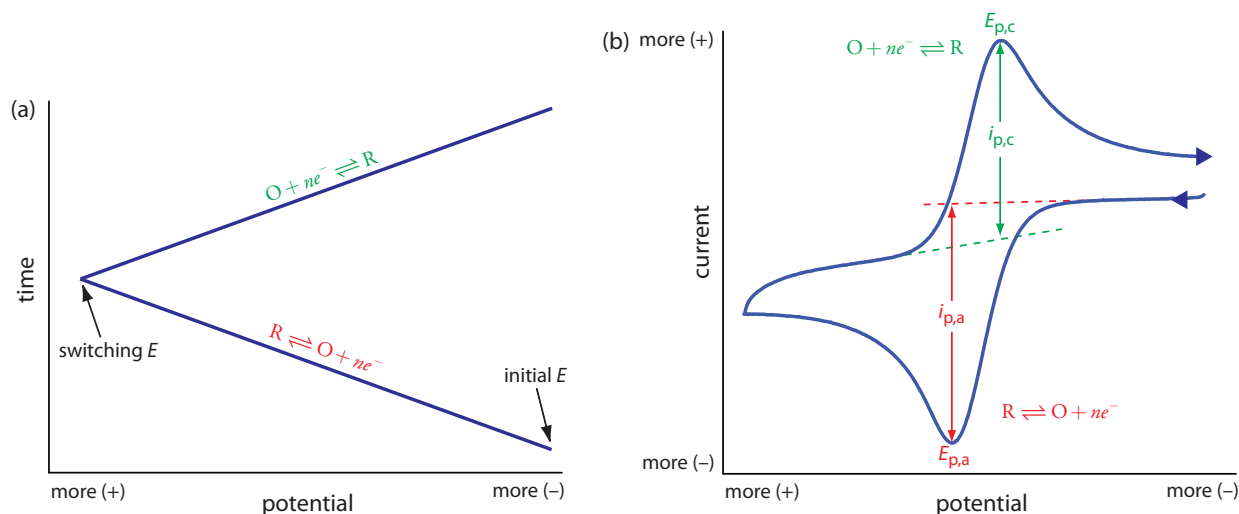


Figure 11.47 Details for cyclic voltammetry. (a) One cycle of the triangular potential-excitation signal showing the initial potential and the switching potential. A cyclic voltammetry experiment can consist of one cycle or many cycles. Although the initial potential in this example is the negative switching potential, the cycle can begin with an intermediate initial potential and cycle between two limits. (b) The resulting cyclic voltammogram showing the measurement of the peak currents and peak potentials.

for the oxidation reaction and the reduction reaction, each characterized by a peak potential and a peak current.

The peak current in cyclic voltammetry is given by the Randles-Sevcik equation

$$i_p = (2.69 \times 10^5) n^{3/2} A D^{1/2} \nu^{1/2} C = KC$$

where n is the number of electrons in the redox reaction, A is the area of the working electrode, D is the diffusion coefficient for the electroactive species, ν is the scan rate, and C is the concentration of the electroactive species at the electrode. For a well-behaved system, the anodic and cathodic peak currents are equal, and the ratio $i_{p,a}/i_{p,c}$ is 1.00. The half-wave potential, $E_{1/2}$, is midway between the anodic and cathodic peak potentials.

$$E_{1/2} = \frac{E_{p,a} + E_{p,c}}{2}$$

Scanning the potential in both directions provides us with the opportunity to explore the electrochemical behavior of species generated at the electrode. This is a distinct advantage of cyclic voltammetry over other voltammetric techniques. Figure 11.48 shows the cyclic voltammogram for the same redox couple at both a faster and a slower scan rate. At the faster scan rate we see two peaks. At the slower scan rate in Figure 11.48b, however, the peak on the reverse scan disappears. One explanation for this is that the products from the reduction of R on the forward scan have sufficient time to participate in a chemical reaction whose products are not electroactive.

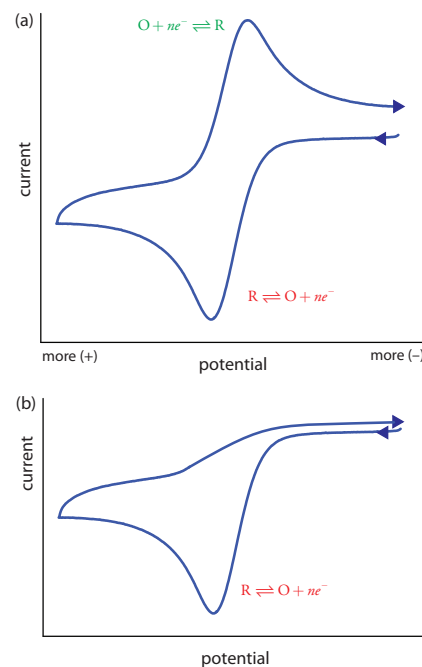


Figure 11.48 Cyclic voltammograms for R obtained at (a) a faster scan rate and (b) a slower scan rate. One of the principal uses of cyclic voltammetry is to study the chemical and electrochemical behavior of compounds. See this chapter's additional resources for further information.

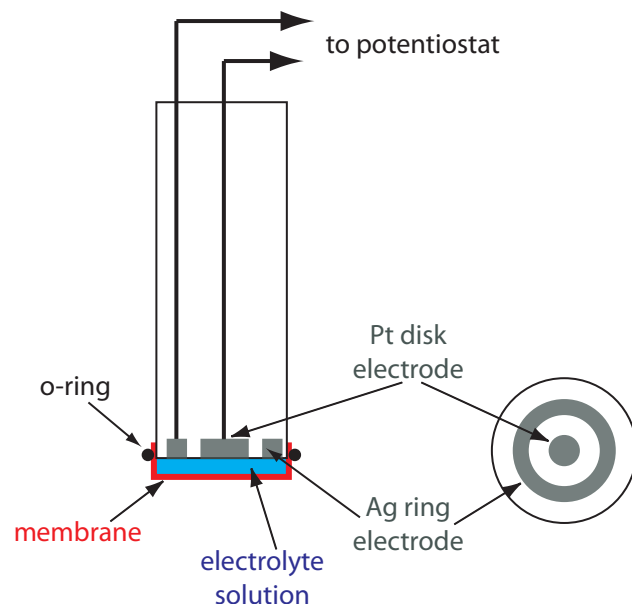


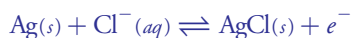
Figure 11.49 Clark amperometric sensor for determining dissolved O_2 . The diagram on the right is a cross-section through the electrode, showing the Ag ring electrode and the Pt disk electrode.

AMPEROMETRY

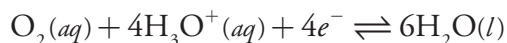
The final voltammetric technique we will consider is **AMPEROMETRY**, in which we apply a constant potential to the working electrode and measure current as a function of time. Because we do not vary the potential, amperometry does not result in a voltammogram.

One important application of amperometry is in the construction of chemical sensors. One of the first amperometric sensors was developed in 1956 by L. C. Clark to measure dissolved O_2 in blood. Figure 11.49 shows the sensor's design, which is similar to potentiometric membrane electrodes. A thin, gas-permeable membrane is stretched across the end of the sensor and is separated from the working electrode and the counter electrode by a thin solution of KCl. The working electrode is a Pt disk cathode, and a Ag ring anode serves as the counter electrode. Although several gases can diffuse across the membrane, including O_2 , N_2 , and CO_2 , only oxygen undergoes reduction at the cathode

The oxidation of the Ag anode



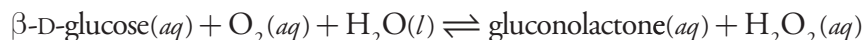
is the other half-reaction.



with its concentration at the electrode's surface quickly reaching zero. The concentration of O_2 at the membrane's inner surface is fixed by its diffusion through the membrane, creating a diffusion profile similar to that in [Figure 11.41](#). The result is a steady-state current proportional to the concentration of dissolved oxygen. Because the electrode consumes oxygen, the sample must be stirred to prevent the depletion of O_2 at the membrane's outer surface.

Another example of an amperometric sensor is the glucose sensor. In this sensor the single membrane in Figure 11.49 is replaced with three membranes. The outermost membrane is of polycarbonate, which is permeable to glucose and O_2 . The second membrane contains an immobilized

preparation of glucose oxidase that catalyzes the oxidation of glucose to gluconolactone and hydrogen peroxide.



The hydrogen peroxide diffuses through the innermost membrane of cellulose acetate where it undergoes oxidation at a Pt anode.

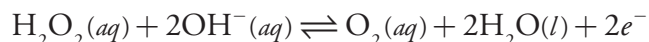


Figure 11.50 summarizes the reactions taking place in this amperometric sensor. FAD is the oxidized form of flavin adenine nucleotide—the active site of the enzyme glucose oxidase—and FADH_2 is the active site's reduced form. Note that O_2 serves a mediator, carrying electrons to the electrode.

By changing the enzyme and mediator, it is easy to extend to the amperometric sensor in Figure 11.50 to the analysis of other analytes. For example, a CO_2 sensor has been developed using an amperometric O_2 sensor with a two-layer membrane, one of which contains an immobilized preparation of autotrophic bacteria.¹⁵ As CO_2 diffuses through the membranes it is converted to O_2 by the bacteria, increasing the concentration of O_2 at the Pt cathode.

11D.6 Quantitative Applications

Voltammetry has been used for the quantitative analysis of a wide variety of samples, including environmental samples, clinical samples, pharmaceutical formulations, steels, gasoline, and oil.

SELECTING THE VOLTAMMETRIC TECHNIQUE

The choice of which voltammetric technique to use depends on the sample's characteristics, including the analyte's expected concentration and the sample's location. For example, amperometry is ideally suited for detecting analytes in flow systems, including the *in vivo* analysis of a patient's blood, or as a selective sensor for the rapid analysis of a single analyte. The portability of amperometric sensors, which are similar to potentiometric sensors, also make them ideal for field studies. Although cyclic voltammetry can be used to determine an analyte's concentration, other methods described in this chapter are better suited for quantitative work.

Pulse polarography and stripping voltammetry frequently are interchangeable. The choice of which technique to use often depends on the analyte's concentration, and the desired accuracy and precision. Detection limits for normal pulse polarography generally are on the order of 10^{-6} M to 10^{-7} M, and those for differential pulse polarography, staircase, and square wave polarography are between 10^{-7} M and 10^{-9} M. Because we concentrate the analyte in stripping voltammetry, the detection limit for many analytes is as little as 10^{-10} M to 10^{-12} M. On the other hand, the

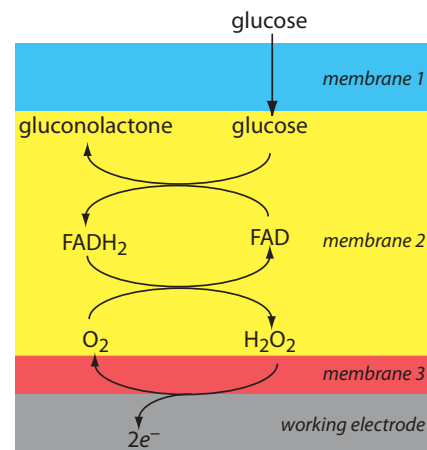


Figure 11.50 Schematic showing the reactions by which an amperometric biosensor responds to glucose.

¹⁵ Karube, I.; Nomura, Y.; Arikawa, Y. *Trends in Anal. Chem.* **1995**, *14*, 295–299.

current in stripping voltammetry is much more sensitive than pulse polarography to changes in experimental conditions, which may lead to poorer precision and accuracy. We also can use pulse polarography to analyze a wider range of inorganic and organic analytes because there is no need to first deposit the analyte at the electrode surface.

Stripping voltammetry also suffers from occasional interferences when two metals, such as Cu and Zn, combine to form an intermetallic compound in the mercury amalgam. The deposition potential for Zn^{2+} is sufficiently negative that any Cu^{2+} in the sample also deposits into the mercury drop or film, leading to the formation of intermetallic compounds such as CuZn and CuZn_2 . During the stripping step, zinc in the intermetallic compounds strips at potentials near that of copper, decreasing the current for zinc and increasing the apparent current for copper. It is often possible to overcome this problem by adding an element that forms a stronger intermetallic compound with the interfering metal. Thus, adding Ga^{3+} minimizes the interference of Cu when analyzing for Zn by forming an intermetallic compound of Cu and Ga.

CORRECTING FOR RESIDUAL CURRENT

In any quantitative analysis we must correct the analyte's signal for signals arising from other sources. The total current, i_{tot} , in voltammetry consists of two parts: the current from the analyte's oxidation or reduction, i_{a} , and a background or residual current, i_{r} .

$$i_{\text{tot}} = i_{\text{a}} + i_{\text{r}}$$

The residual current, in turn, has two sources. One source is a faradaic current from the oxidation or reduction of trace impurities in the sample, i_{int} . The other source is the charging current, i_{ch} , that accompanies a change in the working electrode's potential.

$$i_{\text{r}} = i_{\text{int}} + i_{\text{ch}}$$

We can minimize the faradaic current due to impurities by carefully preparing the sample. For example, one important impurity is dissolved O_2 , which undergoes a two-step reduction: first to H_2O_2 at a potential of -0.1 V versus the SCE, and then to H_2O at a potential of -0.9 V versus the SCE. Removing dissolved O_2 by bubbling an inert gas such as N_2 through the sample eliminates this interference. After removing the dissolved O_2 , passing a blanket of N_2 over the top of the solution prevents O_2 from reentering the solution.

There are two methods for compensating for the residual current. One method is to measure the total current at potentials where the analyte's faradaic current is zero and extrapolate it to other potentials. This is the method shown in [Figure 11.42](#). One advantage of extrapolating is that we do not need to acquire additional data. An important disadvantage is that an ex-

The cell in [Figure 11.37](#) shows a typical N_2 purge line.

trapolation assumes that the change in the residual current with potential is predictable, which may not be the case. A second, and more rigorous approach, is to obtain a voltammogram for an appropriate blank. The blank's residual current is then subtracted from the sample's total current.

ANALYSIS FOR SINGLE COMPONENTS

The analysis of a sample with a single analyte is straightforward. Any of the standardization methods discussed in Chapter 5 can be used to determine the relationship between the current and the analyte's concentration.

Example 11.12

The concentration of As(III) in water can be determined by differential pulse polarography in 1 M HCl. The initial potential is set to -0.1 V versus the SCE and is scanned toward more negative potentials at a rate of 5 mV/s. Reduction of As(III) to As(0) occurs at a potential of approximately -0.44 V versus the SCE. The peak currents for a set of standard solutions, which are corrected for the residual current, are shown in the following table.

[As(III)] (μM)	i_p (μA)
1.00	0.298
3.00	0.947
6.00	1.83
9.00	2.72

What is the concentration of As(III) in a sample of water if its peak current is 1.37 μA ?

SOLUTION

Linear regression gives the calibration curve shown in Figure 11.51, with an equation of

$$i_p (\mu\text{A}) = 0.0176 + 3.01 \times [\text{As(III)}] (\mu\text{M})$$

Substituting the sample's peak current into the regression equation gives the concentration of As(III) as 4.49×10^{-6} M.

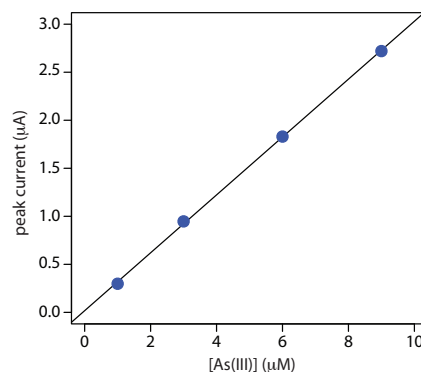


Figure 11.51 Calibration curve for the data in Example 11.12.

Practice Exercise 11.8

The concentration of copper in a sample of sea water is determined by anodic stripping voltammetry using the method of standard additions. The analysis of a 50.0 -mL sample gives a peak current of 0.886 μA . After adding a 5.00 - μL spike of 10.0 mg/L Cu^{2+} , the peak current increases to 2.52 μA . Calculate the $\mu\text{g/L}$ copper in the sample of sea water.

Click [here](#) to review your answer to this exercise.

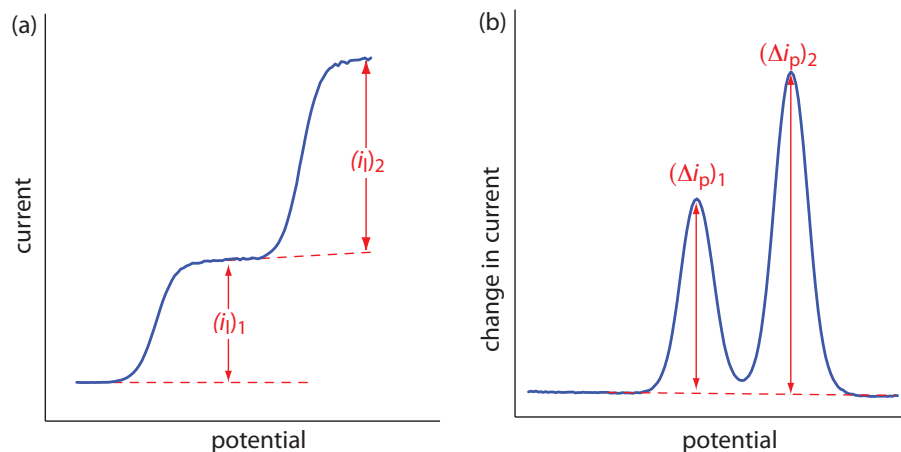


Figure 11.52 Voltammograms for a sample containing two analytes showing the measurement of (a) limiting currents, and (b) peak currents.

MULTICOMPONENT ANALYSIS

Voltammetry is a particularly attractive technique for the analysis of samples containing two or more analytes. Provided that the analytes behave independently, the voltammogram of a multicomponent mixture is a summation of each analyte's individual voltammograms. As shown in Figure 11.52, if the separation between the half-wave potentials or between the peak potentials is sufficient, we can independently determine each analyte as if it is the only analyte in the sample. The minimum separation between the half-wave potentials or peak potentials for two analytes depends on several factors, including the type of electrode and the potential-excitation signal. For normal polarography the separation must be at least ± 0.2 – 0.3 V, and differential pulse voltammetry requires a minimum separation of ± 0.04 – 0.05 V.

If the voltammograms for two analytes are not sufficiently separated, a simultaneous analysis may be possible. An example of this approach is outlined in Example 11.13.

Example 11.13

The differential pulse polarographic analysis of a mixture of indium and cadmium in 0.1 M HCl is complicated by the overlap of their respective voltammograms.¹⁶ The peak potential for indium is at -0.557 V and that for cadmium is at -0.597 V. When a 0.800 ppm indium standard is analyzed, Δi_p (in arbitrary units) is 200.5 at -0.557 V and 87.5 at -0.597 V. A standard solution of 0.793 ppm cadmium has a Δi_p of 58.5 at -0.557 V and 128.5 at -0.597 V. What is the concentration of indium and cadmium in a sample if Δi_p is 167.0 at a potential of -0.557 V and 99.5 at a potential of -0.597 V.

SOLUTION

The change in current, Δi_p , in differential pulse polarography is a linear function of the analyte's concentration

¹⁶ Lanza P. J. *Chem. Educ.* **1990**, *67*, 704–705.

All potentials are relative to a saturated Ag/AgCl reference electrode.

$$i_p = k_A C_A$$

where k_A is a constant that depends on the analyte and the applied potential, and C_A is the analyte's concentration. To determine the concentrations of indium and cadmium in the sample we must first find the value of k_A for each analyte at each potential. For simplicity we will identify the potential of -0.557 V as E_1 , and that for -0.597 V as E_2 . The values of k_A are

$$k_{\text{In},E_1} = \frac{200.5}{0.800 \text{ ppm}} = 250.6 \text{ ppm}^{-1} \quad k_{\text{In},E_2} = \frac{87.5}{0.800 \text{ ppm}} = 109.4 \text{ ppm}^{-1}$$

$$k_{\text{Cd},E_1} = \frac{58.5}{0.793 \text{ ppm}} = 73.8 \text{ ppm}^{-1} \quad k_{\text{Cd},E_2} = \frac{128.5}{0.793 \text{ ppm}} = 162.0 \text{ ppm}^{-1}$$

Next, we write simultaneous equations for the current at the two potentials.

$$i_{E_1} = 250.6 \text{ ppm}^{-1} \times C_{\text{In}} + 73.8 \text{ ppm}^{-1} \times C_{\text{Cd}} = 167.0$$

$$i_{E_2} = 109.4 \text{ ppm}^{-1} \times C_{\text{In}} + 162.0 \text{ ppm}^{-1} \times C_{\text{Cd}} = 99.5$$

Solving the simultaneous equations, which is left as an exercise, gives the concentration of indium as 0.606 ppm and the concentration of cadmium as 0.206 ppm.

ENVIRONMENTAL SAMPLES

Voltammetry is one of several important analytical techniques for the analysis of trace metals in environmental samples, including groundwater, lakes, rivers and streams, seawater, rain, and snow. Detection limits at the parts-per-billion level are routine for many trace metals using differential pulse polarography, with anodic stripping voltammetry providing parts-per-trillion detection limits for some trace metals.

One interesting environmental application of anodic stripping voltammetry is the determination of a trace metal's chemical form within a water sample. Speciation is important because a trace metal's bioavailability, toxicity, and ease of transport through the environment often depend on its chemical form. For example, a trace metal strongly bound to colloidal particles generally is not toxic because it is not available to aquatic life-forms. Unfortunately, anodic stripping voltammetry can not distinguish a trace metal's exact chemical form because closely related species, such as Pb^{2+} and PbCl^+ , produce a single stripping peak. Instead, trace metals are divided into "operationally defined" categories that have environmental significance.

Other important techniques are atomic absorption spectroscopy ([Chapter 10D](#)), atomic emission spectroscopy ([Chapter 10G](#)), and ion-exchange chromatography ([Chapter 12F](#)).

Operationally defined means that an analyte is divided into categories by the specific methods used to isolate it from the sample. There are many examples of operational definitions in the environmental literature. The distribution of trace metals in soils and sediments, for example, is often defined in terms of the reagents used to extract them; thus, you might find an operational definition for Zn^{2+} in a lake sediment as that extracted using 1.0 M sodium acetate, or that extracted using 1.0 M HCl.

Table 11.12 Operational Speciation of Soluble Trace Metals^a

method	speciation of soluble metals						
ASV	labile metals			nonlabile or bound metals			
Ion-Exchange	removed	not removed		removed		not removed	
UV Irradiation		released	not released	released	not released	released	not released
Group	I	II	III	IV	V	VI	VII

Group I free metal ions; weaker labile organic complexes and inorganic complexes

Group II stronger labile organic complexes; labile metals absorbed on organic solids

Group III stronger labile inorganic complexes; labile metals absorbed on inorganic solids

Group IV weaker nonlabile organic complexes

Group V weaker nonlabile inorganic complexes

Group VI stronger nonlabile organic complexes; nonlabile metals absorbed on organic solids

Group VII stronger nonlabile inorganic complexes; nonlabile metals absorbed on inorganic solids

^a As defined by (a) Batley, G. E.; Florence, T. M. *Anal. Lett.* **1976**, *9*, 379–388; (b) Batley, G. E.; Florence, T. M. *Talanta* **1977**, *24*, 151–158; (c) Batley, G. E.; Florence, T. M. *Anal. Chem.* **1980**, *52*, 1962–1963; (d) Florence, T. M., Batley, G. E.; *CRC Crit. Rev. Anal. Chem.* **1980**, *9*, 219–296.

Although there are many speciation schemes in the environmental literature, we will consider a speciation scheme proposed by Batley and Florence.¹⁷ This scheme, which is outlined in Table 11.12, combines anodic stripping voltammetry with ion-exchange and UV irradiation, dividing soluble trace metals into seven groups. In the first step, anodic stripping voltammetry in a pH 4.8 acetic acid buffer differentiates between labile metals and nonlabile metals. Only labile metals—those present as hydrated ions, weakly bound complexes, or weakly adsorbed on colloidal surfaces—deposit at the electrode and give rise to a signal. Total metal concentration are determined by ASV after digesting the sample in 2 M HNO₃ for 5 min, which converts all metals into an ASV-labile form.

A Chelex-100 ion-exchange resin further differentiates between strongly bound metals—usually those metals bound to inorganic and organic solids, but also those tightly bound to chelating ligands—and more loosely bound metals. Finally, UV radiation differentiates between metals bound to organic phases and inorganic phases. The analysis of seawater samples, for example, suggests that cadmium, copper, and lead are primarily present as labile organic complexes or as labile adsorbates on organic colloids (group II in Table 11.12).

Differential pulse polarography and stripping voltammetry also have been used to determine trace metals in airborne particulates, incinerator fly ash, rocks, minerals, and sediments. The trace metals, of course, are first brought into solution using a digestion or an extraction.

17 (a) Batley, G. E.; Florence, T. M. *Anal. Lett.* **1976**, *9*, 379–388; (b) Batley, G. E.; Florence, T. M. *Talanta* **1977**, *24*, 151–158; (c) Batley, G. E.; Florence, T. M. *Anal. Chem.* **1980**, *52*, 1962–1963; (d) Florence, T. M., Batley, G. E.; *CRC Crit. Rev. Anal. Chem.* **1980**, *9*, 219–296.

[Problem 11.31](#) asks you to determine the speciation of trace metals in a sample of sea water.

See [Chapter 7](#) for a discussion of digestions and extraction.

Amperometric sensors also are used to analyze environmental samples. For example, the dissolved O_2 sensor described earlier is used to determine the level of dissolved oxygen and the biochemical oxygen demand, or BOD, of waters and wastewaters. The latter test—which is a measure of the amount of oxygen required by aquatic bacteria when decomposing organic matter—is important when evaluating the efficiency of a wastewater treatment plant and for monitoring organic pollution in natural waters. A high BOD suggests that the water has a high concentration of organic matter. Decomposition of this organic matter may seriously deplete the level of dissolved oxygen in the water, adversely affecting aquatic life. Other amperometric sensors have been developed to monitor anionic surfactants in water, and CO_2 , H_2SO_4 , and NH_3 in atmospheric gases.

CLINICAL SAMPLES

Differential pulse polarography and stripping voltammetry may be used to determine the concentration of trace metals in a variety of clinical samples, including blood, urine, and tissue. The determination of lead in blood is of considerable interest due to concerns about lead poisoning. Because the concentration of lead in blood is so small, anodic stripping voltammetry frequently is the more appropriate technique. The analysis is complicated, however, by the presence of proteins that may adsorb to the mercury electrode, inhibiting either the deposition or stripping of lead. In addition, proteins may prevent the electrodeposition of lead through the formation of stable, nonlabile complexes. Digesting and ashing the blood sample minimizes this problem. Differential pulse polarography is useful for the routine quantitative analysis of drugs in biological fluids, at concentrations of less than 10^{-6} M.¹⁸ Amperometric sensors using enzyme catalysts also have many clinical uses, several examples of which are shown in Table 11.13.

¹⁸ Brooks, M. A. "Application of Electrochemistry to Pharmaceutical Analysis," Chapter 21 in Kissinger, P. T.; Heinemann, W. R., eds. *Laboratory Techniques in Electroanalytical Chemistry*,

Table 11.13 Representative Amperometric Biosensors

analyte	enzyme	species detected
choline	choline oxidase	H_2O_2
ethanol	alcohol oxidase	H_2O_2
formaldehyde	formaldehyde dehydrogenase	NADH
glucose	glucose oxidase	H_2O_2
glutamine	glutaminase, glutamate oxidase	H_2O_2
glycerol	glycerol dehydrogenase	NADH, O_2
lactate	lactate oxidase	H_2O_2
phenol	polyphenol oxidase	quinone
inorganic phosphorous	nucleoside phosphorylase	O_2

Source: Cammann, K.; Lemke, U.; Rohen, A.; Sander, J.; Wilken, H.; Winter, B. *Angew. Chem. Int. Ed. Engl.* **1991**, *30*, 516–539.

MISCELLANEOUS SAMPLES

In addition to environmental samples and clinical samples, differential pulse polarography and stripping voltammetry have been used for the analysis of trace metals in other sample, including food, steels and other alloys, gasoline, gunpowder residues, and pharmaceuticals. Voltammetry is an important technique for the quantitative analysis of organics, particularly in the pharmaceutical industry where it is used to determine the concentration of drugs and vitamins in formulations. For example, voltammetric methods have been developed for the quantitative analysis of vitamin A, niacinamide, and riboflavin. When the compound of interest is not electroactive, it often can be derivatized to an electroactive form. One example is the differential pulse polarographic determination of sulfanilamide, which is converted into an electroactive azo dye by coupling with sulfamic acid and 1-naphthol.

Marcel Dekker, Inc.: New York, 1984, pp 539–568.

The best way to appreciate the theoretical and practical details discussed in this section is to carefully examine a typical analytical method. Although each method is unique, the following description of the determination of chlorpromazine in a pharmaceutical product provides an instructive example of a typical procedure. The description here is based on a method from Pungor, E. *A Practical Guide to Instrumental Analysis*, CRC Press: Boca Raton, FL, 1995, pp. 34–37.

Representative Method 11.3

Determination of Chlorpromazine in a Pharmaceutical Product

DESCRIPTION OF METHOD

Chlorpromazine, which also is known by the trade name Thorazine, is an antipsychotic drug used in the treatment of schizophrenia. The amount of chlorpromazine in a pharmaceutical product is determined voltammetrically at a graphite working electrode in a unstirred solution, with calibration by the method of standard additions.

PROCEDURE

Add 10.00 mL of an electrolyte solution consisting of 0.01 M HCl and 0.1 M KCl to the electrochemical cell. Place a graphite working electrode, a Pt auxiliary electrode, and a SCE reference electrode in the cell, and record the voltammogram from 0.2 V to 2.0 V at a scan rate of 50 mV/s. Weigh out an appropriate amount of the pharmaceutical product and dissolve it in a small amount of the electrolyte. Transfer the solution to a 100-mL volumetric flask and dilute to volume with the electrolyte. Filter a small amount of the diluted solution and transfer 1.00 mL of the filtrate to the voltammetric cell. Mix the contents of the voltammetric cell and allow the solution to sit for 10 s before recording the voltammogram. Return the potential to 0.2 V, add 1.00 mL of a chlorpromazine standard and record the voltammogram. Report the %w/w chlorpromazine in the formulation.

QUESTIONS

1. Is chlorpromazine undergoing oxidation or reduction at the graphite working electrode?

Because we are scanning toward more positive potentials, we are oxidizing chlorpromazine.

- Why does this procedure use a graphite electrode instead of a Hg electrode?

As shown in [Figure 11.35](#), the potential window for a Hg electrode extends from approximately -0.3 V to between -1 V and -2 V, depending upon the pH. Because we are scanning the potential from 0.2 V to 2.0 V, we cannot use a Hg electrode.

- Many voltammetric procedures require that we first remove dissolved O_2 by bubbling N_2 through the solution. Why is this not necessary for this analysis?

Dissolved O_2 is a problem when we scan toward more negative potentials, because its reduction may produce a significant cathodic current. In this procedure we are scanning toward more positive potentials and generating anodic currents; thus, dissolved O_2 is not an interferent and does not need to be removed.

- What is the purpose of recording a voltammogram in the absence of chlorpromazine?

This voltammogram serves as a blank, providing a measure of residual current due to the electrolyte. Because the potential window for a graphite working electrode (see [Figure 11.35](#)) does not extend to 2.0 V, there will be a measurable anodic residual current due to the solvent's oxidation. Having measured this residual current, we can subtract it from the total current in the presence of chlorpromazine.

- Based on the description of this procedure, what is the shape of the resulting voltammogram. You may wish to review the three common shapes shown in [Figure 11.42](#).

Because the solution is unstirred, the voltammogram will have a peak current similar to that shown in [Figure 11.42b](#).

11D.7 Characterization Applications

In the previous section we learned how to use voltammetry to determine an analyte's concentration in a variety of different samples. We also can use voltammetry to characterize an analyte's properties, including verifying its electrochemical reversibility, determining the number of electrons transferred during its oxidation or reduction, and determining its equilibrium constant in a coupled chemical reaction.

ELECTROCHEMICAL REVERSIBILITY AND DETERMINATION OF n

Earlier in this chapter we derived a relationship between $E_{1/2}$ and the standard-state potential for a redox couple ([equation 11.44](#)) noting that the redox reaction must be electrochemically reversible. How can we tell if a

redox reaction is reversible by looking at its voltammogram? For a reversible redox reaction [equation 11.43](#), which we repeat here, describes the relationship between potential and current for a voltammetric experiment with a limiting current.

$$E = E_{\text{O/R}}^{\circ} - \frac{0.05916}{n} \log \frac{K_{\text{O}}}{K_{\text{R}}} - \frac{0.05916}{n} \log \frac{i}{i_1 - i}$$

If a reaction is electrochemically reversible, a plot of E versus $\log(i/i_1 - i)$ is a straight line with a slope of $-0.05916/n$. In addition, the slope should yield an integer value for n .

Example 11.14

The following data were obtained from a linear scan hydrodynamic voltammogram of a reversible reduction reaction.

E (V vs. SCE)	current (μA)
-0.358	0.37
-0.372	0.95
-0.382	1.71
-0.400	3.48
-0.410	4.20
-0.435	4.97

The limiting current was $5.15 \mu\text{A}$. Show that the reduction reaction is reversible, and determine values for n and for $E_{1/2}$.

SOLUTION

Figure 11.53 shows a plot of E_{cell} versus $\log(i/i_1 - i)$. Because the result is a straight line, we know that the reaction is electrochemically reversible under the conditions of the experiment. A linear regression analysis gives the equation for the straight line as

$$E = -0.391 \text{ V} - 0.0300 \log \frac{i}{i_1 - i}$$

From [equation 11.43](#), the slope is equivalent to $-0.05916/n$; solving for n gives a value of 1.97, or 2 electrons. From [equation 11.43](#) and [equation 11.44](#), we know that $E_{1/2}$ is the y -intercept for a plot of E_{cell} versus $\log(i/i_1 - i)$; thus, $E_{1/2}$ for the data in this example is -0.391 V versus the SCE.

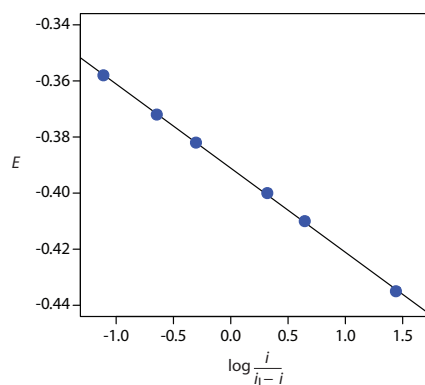


Figure 11.53 Determination of electrochemical reversibility for the data in Example 11.14.

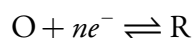
We also can use cyclic voltammetry to evaluate electrochemical reversibility by looking at the difference between the peak potentials for the anodic and the cathodic scans. For an electrochemically reversible reaction, the following equation holds true.

$$E_p = E_{p,a} - E_{p,c} = \frac{0.05916 \text{ V}}{n}$$

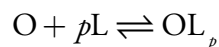
For example, for a two-electron reduction, we expect a ΔE_p of approximately 29.6 mV. For an electrochemically irreversible reaction the value of ΔE_p will be larger than expected.

DETERMINING EQUILIBRIUM CONSTANTS FOR COUPLED CHEMICAL REACTIONS

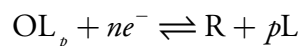
Another important application of voltammetry is determining the equilibrium constant for a solution reaction that is coupled to a redox reaction. The presence of the solution reaction affects the ease of electron transfer in the redox reaction, shifting $E_{1/2}$ to more negative or to more positive potentials. Consider, for example, the reduction of O to R



the voltammogram for which is shown in Figure 11.54. If we introduce a ligand, L, that forms a strong complex with O, then we also must consider the reaction



In the presence of the ligand, the overall redox reaction is



Because of its stability, the reduction of the OL_p complex is less favorable than the reduction of O. As shown in Figure 11.54, the resulting voltammogram shifts to a potential that is more negative than that for O. Furthermore, the shift in the voltammogram increases as we increase the ligand's concentration.

We can use this shift in the value of $E_{1/2}$ to determine both the stoichiometry and the formation constant for a metal-ligand complex. To derive

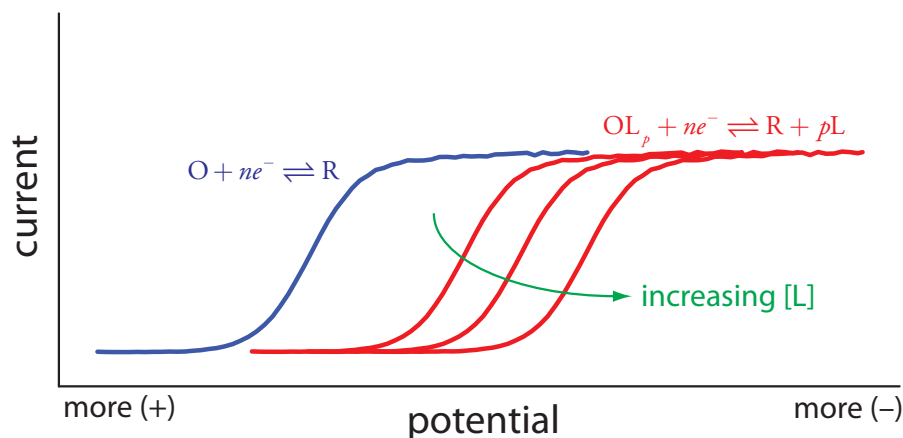


Figure 11.54 Effect of a metal-ligand complexation reaction on a voltammogram. The voltammogram in blue is for the reduction of O in the absence of ligand. Adding the ligand shifts the potentials to more negative potentials, as shown by the voltammograms in red.

a relationship between the relevant variables we begin with two equations: the Nernst equation for the reduction of O

$$E = E_{\text{O/R}}^{\circ} - \frac{0.05916}{n} \log \frac{[\text{R}]_{x=0}}{[\text{O}]_{x=0}} \quad 11.45$$

and the stability constant, β_p for the metal-ligand complex at the electrode surface.

See [Figure 3.5](#) to review the meaning of major, minor, and trace analytes.

$$\beta_p = \frac{[\text{OL}_p]_{x=0}}{[\text{O}]_{x=0}[\text{L}]_{x=0}^p} \quad 11.46$$

In the absence of ligand the half-wave potential occurs when $[\text{R}]_{x=0}$ and $[\text{O}]_{x=0}$ are equal; thus, from the Nernst equation we have

$$(E_{1/2})_{\text{nc}} = E_{\text{O/R}}^{\circ} \quad 11.47$$

where the subscript “nc” signifies that the complex is not present.

When ligand is present we must account for its effect on the concentration of O. Solving equation 11.46 for $[\text{O}]_{x=0}$ and substituting into the equation 11.45 gives

$$E = E_{\text{O/R}}^{\circ} - \frac{0.05916}{n} \log \frac{[\text{R}]_{x=0}[\text{L}]_{x=0}^p \beta_p}{[\text{OL}_p]_{x=0}} \quad 11.48$$

If the formation constant is sufficiently large, such that essentially all of O is present as the complex, then $[\text{R}]_{x=0}$ and $[\text{OL}_p]_{x=0}$ are equal at the half-wave potential, and equation 11.48 simplifies to

$$(E_{1/2})_{\text{c}} = E_{\text{O/R}}^{\circ} - \frac{0.05916}{n} \log [\text{L}]_{x=0}^p \beta_p \quad 11.49$$

where the subscript “c” indicates that the complex is present. Defining $\Delta E_{1/2}$ as

$$\Delta E_{1/2} = (E_{1/2})_{\text{c}} - (E_{1/2})_{\text{nc}} \quad 11.50$$

and substituting equation 11.47 and equation 11.49 and expanding the log term leaves us with the following equation.

$$\Delta E_{1/2} = -\frac{0.05916}{n} \log \beta_p - \frac{0.05916p}{n} \log [\text{L}] \quad 11.51$$

A plot of $\Delta E_{1/2}$ versus $\log [\text{L}]$ is a straight line, with a slope of that is a function of the metal-ligand complex's stoichiometric coefficient, p , and a y -intercept that is a function of its formation constant β_p .

Example 11.15

A voltammogram for the two-electron reduction ($n = 2$) of a metal, M, has a half-wave potential of -0.226 V versus the SCE. In the presence of an excess of ligand, L, the following half-wave potentials are recorded.

[L] (M)	$(E_{1/2})_c$ (V vs. SCE)
0.020	-0.494
0.040	-0.512
0.060	-0.523
0.080	-0.530
0.100	-0.536

Determine the stoichiometry of the metal-ligand complex and its formation constant.

SOLUTION

We begin by calculating values of $\Delta E_{1/2}$ using [equation 11.50](#), obtaining the values in the following table.

[L] (M)	$\Delta(E_{1/2})_c$ (V vs. SCE)
0.020	-0.268
0.040	-0.286
0.060	-0.297
0.080	-0.304
0.100	-0.310

Figure 11.55 shows the resulting plot of $\Delta E_{1/2}$ as a function of $\log[L]$. A linear regression analysis gives the equation for the straight line as

$$E_{1/2} = -0.370 \text{ V} - 0.0601 \log[L]$$

From [equation 11.51](#) we know that the slope is equal to $-0.05916p/n$. Using the slope and $n=2$, we solve for p obtaining a value of $2.03 \approx 2$. The complex's stoichiometry, therefore, is ML_2 . We also know, from [equation 11.51](#), that the y -intercept is equivalent to $-(0.05916p/n)\log\beta_p$. Solving for β_2 gives a formation constant of 3.5×10^{12} .

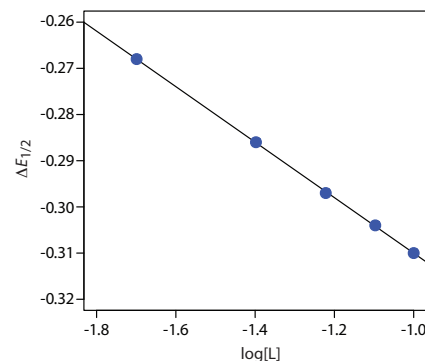


Figure 11.55 Determination of the stoichiometry and formation constant for a metal-ligand complex using the data in Example 11.15.

Practice Exercise 11.9

The voltammogram for 0.50 mM Cd^{2+} has an $E_{1/2}$ of -0.565 V versus an SCE. After making the solution 0.115 M in ethylenediamine, $E_{1/2}$ is -0.845 V, and $E_{1/2}$ is -0.873 V when the solution is 0.231 M in ethylenediamine. Determine the stoichiometry of the Cd^{2+} -ethylenediamine complex and its formation constant.

Click [here](#) to review your answer to this exercise.

The data in Practice Exercise 11.9 comes from Morinaga, K. "Polarographic Studies of Metal Complexes. V. Ethylenediamine Complexes of Cadmium, Nickel, and Zinc," *Bull. Chem. Soc. Japan* **1956**, *29*, 793–799.

As suggested by [Figure 11.48](#), cyclic voltammetry is one of the most powerful electrochemical techniques for exploring the mechanism of coupled electrochemical and chemical reactions. The treatment of this aspect of cyclic voltammetry is beyond the level of this text, although you can consult this chapter's additional resources for additional information.

11D.8 Evaluation

SCALE OF OPERATION

Detection levels at the parts-per-million level are routine. For some analytes and for some voltammetric techniques, lower detection limits are possible. Detection limits at the parts-per-billion and the part-per-trillion level are possible with stripping voltammetry. Although most analyses are carried out in conventional electrochemical cells using macro samples, the availability of microelectrodes, with diameters as small as 2 μm , allows for the analysis of samples with volumes under 50 μL . For example, the concentration of glucose in 200- μm pond snail neurons has been successfully monitored using an amperometric glucose electrode with a 2 μm tip.¹⁹

ACCURACY

The accuracy of a voltammetric analysis usually is limited by our ability to correct for residual currents, particularly those due to charging. For an analyte at the parts-per-million level, an accuracy of $\pm 1\text{--}3\%$ is routine. Accuracy decreases when analyzing samples with significantly smaller concentrations of analyte.

PRECISION

Precision is generally limited by the uncertainty in measuring the limiting current or the peak current. Under most conditions, a precision of $\pm 1\text{--}3\%$ is reasonable. One exception is the analysis of ultratrace analytes in complex matrices by stripping voltammetry, in which the precision may be as poor as $\pm 25\%$.

SENSITIVITY

In many voltammetric experiments, we can improve the sensitivity by adjusting the experimental conditions. For example, in stripping voltammetry we can improve sensitivity by increasing the deposition time, by increasing the rate of the linear potential scan, or by using a differential-pulse technique. One reason that potential pulse techniques are popular is that they provide an improvement in current relative to a linear potential scan.

SELECTIVITY

Selectivity in voltammetry is determined by the difference between half-wave potentials or peak potentials, with a minimum difference of $\pm 0.2\text{--}0.3$ V for a linear potential scan and $\pm 0.04\text{--}0.05$ V for differential pulse voltammetry. We often can improve selectivity by adjusting solution conditions. The addition of a complexing ligand, for example, can substantially shift the potential where a species is oxidized or reduced to a potential where it

See [Figure 3.5](#) to review the meaning of major, minor, and trace analytes.

¹⁹ Abe, T.; Lauw, L. L.; Ewing, A. G. *J. Am. Chem. Soc.* **1991**, *113*, 7421–7423.

no longer interferes with the determination of an analyte. Other solution parameters, such as pH, also can be used to improve selectivity.

TIME, COST, AND EQUIPMENT

Commercial instrumentation for voltammetry ranges from <\$1000 for simple instruments, to >\$20,000 for a more sophisticated instrument. In general, less expensive instrumentation is limited to linear potential scans. More expensive instruments provide for more complex potential-excitation signals using potential pulses. Except for stripping voltammetry, which needs a long deposition time, voltammetric analyses are relatively rapid.

11E Key Terms

amalgam	amperometry	anode
anodic current	asymmetry potential	auxiliary electrode
cathode	cathodic current	charging current
controlled-current coulometry	controlled-potential coulometry	convection
coulometric titrations	coulometry	counter electrode
current efficiency	cyclic voltammetry	diffusion
diffusion layer	dropping mercury electrode	electrical double layer
electrochemically irreversible	electrochemically reversible	electrode of the first kind
electrode of the second kind	electrochemistry	electrogravimetry
enzyme electrodes	faradaic current	Faraday's law
galvanostat	gas-sensing electrode	glass electrode
hanging mercury drop electrode	hydrodynamic voltammetry	indicator electrode
ionophore	ion selective electrode	junction potential
limiting current	liquid-based ion-selective electrode	mass transport
mediator	membrane potential	mercury film electrode
migration	nonfaradaic current	Ohm's law
overpotential	peak current	polarography
potentiometer	potentiostat	pulse polarography
redox electrode	reference electrode	residual current
salt bridge	saturated calomel electrode	selectivity coefficient
silver/silver chloride electrode	solid-state ion-selective electrodes	standard hydrogen electrode
static mercury drop electrode	stripping voltammetry	total ionic strength adjustment buffer
voltammetry	voltammogram	working electrode

As you review this chapter, try to define a key term in your own words. Check your answer by clicking on the key term, which will take you to the page where it was first introduced. Clicking on the **KEY TERM** there, will bring you back to this page so that you can continue with another key term.

11F Chapter Summary

In this chapter we introduced three electrochemical methods of analysis: potentiometry, coulometry, and voltammetry. In potentiometry we measure the potential of an indicator electrode without allowing any significant current to pass through the electrochemical cell. In principle we can use the Nernst equation to calculate the analyte's activity—junction potentials, however, require that we standardize the electrode.

There are two broad classes of potentiometric electrodes: metallic electrodes and membrane electrodes. The potential of a metallic electrode is the result of a redox reaction at the electrode's surface. An electrode of the first kind responds to the concentration of its cation in solution; thus, the potential of a Ag wire is determined by the activity of Ag^+ in solution. If another species is in equilibrium with the metal ion, the electrode's potential also responds to the concentration of that species. For example, the potential of a Ag wire in a solution of Cl^- responds to the concentration of Cl^- because the relative concentrations of Ag^+ and Cl^- are fixed by the solubility product for AgCl. We call this an electrode of the second kind.

The potential of a membrane electrode is determined by a difference in the composition of the solution on each side of the membrane. Electrodes using a glass membrane respond to ions that bind to negatively charged sites on the membrane's surface. A pH electrode is one example of a glass membrane electrode. Other kinds of membrane electrodes include those using insoluble crystalline solids or liquid ion-exchangers incorporated into a hydrophobic membrane. The F^- ion-selective electrode, which uses a single crystal of LaF_3 as the ion-selective membrane, is an example of a solid-state electrode. The Ca^{2+} ion-selective electrode, in which the chelating di-(*n*-decyl)phosphate is immobilized in a PVC membrane, is an example of a liquid-based ion-selective electrode.

Potentiometric electrodes can be designed to respond to molecules by using a chemical reaction that produces an ion whose concentration can be determined using a traditional ion-selective electrode. A gas-sensing electrode, for example, include a gas permeable membrane that isolates the ion-selective electrode from the gas. When the gas diffuses across the membrane it alters the composition of the inner solution, which is monitored with an ion-selective electrode. An enzyme electrodes operate in the same way.

Coulometric methods are based on Faraday's law that the total charge or current passed during an electrolysis is proportional to the amount of reactants and products in the redox reaction. If the electrolysis is 100% efficient—meaning that only the analyte is oxidized or reduced—then we can use the total charge or current to determine the amount of analyte in a sample. In controlled-potential coulometry we apply a constant potential and measure the resulting current as a function of time. In controlled-current coulometry the current is held constant and we measure the time required to completely oxidize or reduce the analyte.

In voltammetry we measure the current in an electrochemical cell as a function of the applied potential. There are several different voltammetric methods that differ in terms of the type of working electrode, how we apply the potential, and whether we include convection (stirring) as a means for transporting of material to the working electrode.

Polarography is a voltammetric technique that uses a mercury electrode and an unstirred solution. Normal polarography uses a dropping mercury electrode, or a static mercury drop electrode, and a linear potential scan. Other forms of polarography include normal pulse polarography, differential pulse polarography, staircase polarography, and square-wave polarography, all of which use a series of potential pulses.

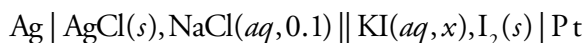
In hydrodynamic voltammetry the solution is stirred using either a magnetic stir bar or by rotating the electrode. Because the solution is stirred a dropping mercury electrode can not be used; instead we use a solid electrode. Both linear potential scans and potential pulses can be applied.

In stripping voltammetry the analyte is first deposited on the electrode, usually as the result of an oxidation or reduction reaction. The potential is then scanned, either linearly or by using potential pulses, in a direction that removes the analyte by a reduction or oxidation reaction.

Amperometry is a voltammetric method in which we apply a constant potential to the electrode and measure the resulting current. Amperometry is most often used in the construction of chemical sensors for the quantitative analysis of single analytes. One important example is the Clark O₂ electrode, which responds to the concentration of dissolved O₂ in solutions such as blood and water.

11G Problems

- Identify the anode and cathode for the following electrochemical cells, and write the oxidation or reduction reaction at each electrode.
 - $\text{Pt} \mid \text{FeCl}_2(aq, 0.015), \text{FeCl}_3(aq, 0.045) \parallel \text{AgNO}_3(aq, 0.1) \mid \text{Ag}$
 - $\text{Ag} \mid \text{AgBr}(s), \text{NaBr}(aq, 1.0) \parallel \text{CdCl}_2(aq, 0.05) \mid \text{Cd}$
 - $\text{Pb} \mid \text{PbSO}_4(s), \text{H}_2\text{SO}_4(aq, 1.5) \parallel \text{H}_2\text{SO}_4(aq, 2.0), \text{PbSO}_4(s) \mid \text{PbO}_2$
- Calculate the potential for the electrochemical cells in problem 1. The values in parentheses are the activities of the associated species.
- Calculate the activity of KI, x , in the following electrochemical cell if the potential is +0.294 V



4. What reaction prevents us from using Zn as an electrode of the first kind in acidic solutions? Which other electrodes of the first kind would you expect to behave in the same manner as Zn when immersed in an acidic solution?
5. Creager and colleagues designed a salicylate ion-selective electrode using a PVC membrane impregnated with tetraalkylammonium salicylate.²⁰ To determine the ion-selective electrode's selectivity coefficient for benzoate, they prepared a set of salicylate calibration standards in which the concentration of benzoate was held constant at 0.10 M. Using the following data, determine the value of the selectivity coefficient.

<u>[salicylate] (M)</u>	<u>potential (mV)</u>
1.0	20.2
1.0×10^{-1}	73.5
1.0×10^{-2}	126
1.0×10^{-3}	168
1.0×10^{-4}	182
1.0×10^{-5}	182
1.0×10^{-6}	177

What is the maximum acceptable concentration of benzoate if you plan to use this ion-selective electrode to analyze samples containing as little as 10^{-5} M salicylate with an accuracy of better than 1%?

6. Watanabe and co-workers described a new membrane electrode for the determination of cocaine, a weak base alkaloid with a pK_a of 8.64.²¹ The electrode's response for a fixed concentration of cocaine is independent of pH in the range of 1–8, but decreases sharply above a pH of 8. Offer an explanation for this pH dependency.
7. [Figure 11.20](#) shows a schematic diagram for an enzyme electrode that responds to urea by using a gas-sensing NH_3 electrode to measure the amount of ammonia released following the enzyme's reaction with urea. In turn, the NH_3 electrode uses a pH electrode to monitor the change in pH due to the ammonia. The response of the urea electrode is given by [equation 11.14](#). Beginning with [equation 11.11](#), which gives the potential of a pH electrode, show that [equation 11.14](#) for the urea electrode is correct.
8. Explain why the response of an NH_3 -based urea electrode ([Figure 11.20](#) and [equation 11.14](#)) is different from the response of a urea electrode in

²⁰ Creager, S. E.; Lawrence, K. D.; Tibbets, C. R. *J. Chem. Educ.* **1995**, *72*, 274–276.

²¹ Watanabe, K.; Okada, K.; Oda, H.; Furuno, K.; Gomita, Y.; Katsu, T. *Anal. Chim. Acta* **1995**, *316*, 371–375.

which the enzyme is coated on the glass membrane of a pH electrode (Figure 11.21 and equation 11.15).

9. A potentiometric electrode for HCN uses a gas-permeable membrane, a buffered internal solution of 0.01 M $\text{KAg}(\text{CN})_2$, and a Ag_2S ISE electrode that is immersed in the internal solution. Consider the equilibrium reactions taking place within the internal solution, and derive an equation relating the electrode's potential to the concentration of HCN in the sample.
10. Mifflin and associates described a membrane electrode for the quantitative analysis of penicillin in which the enzyme penicillinase is immobilized in a polyacrylamide gel coated on the glass membrane of a pH electrode.²² The following data were collected using a set of penicillin standards.

[penicillin] (M)	potential (mV)
1.0×10^{-2}	220
2.0×10^{-3}	204
1.0×10^{-3}	190
2.0×10^{-4}	153
1.0×10^{-4}	135
1.0×10^{-5}	96
1.0×10^{-6}	80

- (a) Over what range of concentrations is there a linear response?
- (b) What is calibration curve's equation for this concentration range?
- (c) What is the concentration of penicillin in a sample that yields a potential of 142 mV?
11. An ion-selective electrode can be placed in a flow cell into which we inject samples or standards. As the analyte passes through the cell, a potential spike is recorded instead of a steady-state potential. The concentration of K^+ in serum has been determined in this fashion using standards prepared in a matrix of 0.014 M NaCl .²³

$[\text{K}^+]$ (mM)	potential (arb. units)
0.1	25.5
0.2	37.2
0.4	50.8

22 Mifflin, T. E.; Andriano, K. M.; Robbins, W. B. *J. Chem. Educ.* **1984**, *61*, 638–639.

23 Meyerhoff, M. E.; Kovach, P. M. *J. Chem. Educ.* **1983**, *9*, 766–768.

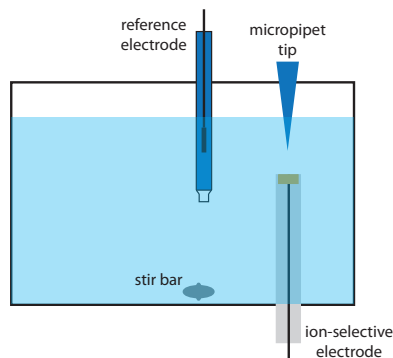


Figure 11.56 Schematic diagram for a batch injection analysis. See Problem 11.12 for more details.

0.6	58.7
0.8	64.0
1.0	66.8

A 1.00-mL sample of serum is diluted to volume in a 10-mL volumetric flask and analyzed, giving a potential of 51.1 (arbitrary units). Report the concentration of K^+ in the sample of serum.

12. Wang and Taha described an interesting application of potentiometry, which they call batch injection.²⁴ As shown in Figure 11.56, an ion-selective electrode is placed in an inverted position in a large volume tank, and a fixed volume of a sample or a standard solution is injected toward the electrode's surface using a micropipet. The response of the electrode is a spike in potential that is proportional to the analyte's concentration. The following data were collected using a pH electrode and a set of pH standards.

pH	potential (mV)
2.0	+300
3.0	+240
4.0	+168
5.0	+81
6.0	+35
8.0	-92
9.0	-168
10.0	-235
11.0	-279

Determine the pH of the following samples given the recorded peak potentials: tomato juice, 167 mV; tap water, -27 mV; coffee, 122 mV.

13. The concentration of NO_3^- in a water sample is determined by a one-point standard addition using a NO_3^- ion-selective electrode. A 25.00-mL sample is placed in a beaker and a potential of 0.102 V is measured. A 1.00-mL aliquot of a 200.0-mg/L standard solution of NO_3^- is added, after which the potential is 0.089 V. Report the mg NO_3^- /L in the water sample.
14. In 1977, when I was an undergraduate student at Knox College, my lab partner and I did an experiment to determine the concentration of

²⁴ Wang, J.; Taha, Z. *Anal. Chim. Acta* **1991**, 252, 215–221.

fluoride in tap water and the amount of fluoride in toothpaste. The data in this problem comes from my lab notebook.

- (a) To analyze tap water, we took three 25.0-mL samples and added 25.0 mL of TISAB to each. We measured the potential of each solution using a F^- ISE and an SCE reference electrode. Next, we made five 1.00-mL additions of a standard solution of 100.0 ppm F^- to each sample, and measure the potential after each addition.

mL of standard added	potential (mV)		
	sample 1	sample 2	sample 3
0.00	-79	-82	-81
1.00	-119	-119	-118
2.00	-133	-133	-133
3.00	-142	-142	-142
4.00	-149	-148	-148
5.00	-154	-153	-153

Report the parts-per-million of F^- in the tap water.

- (b) To analyze the toothpaste, we measured 0.3619 g into a 100-mL volumetric flask, added 50.0 mL of TISAB, and diluted to volume with distilled water. After ensuring that the sample was thoroughly mixed, we transferred three 20.0-mL portions into separate beakers and measured the potential of each using a F^- ISE and an SCE reference electrode. Next, we made five 1.00-mL additions of a standard solution of 100.0 ppm F^- to each sample, and measured the potential after each addition.

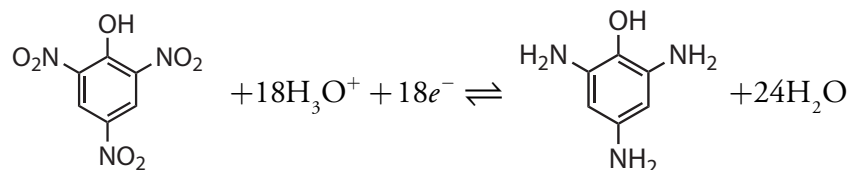
For a more thorough description of this analysis, see [Representative Method 11.1](#).

mL of standard added	potential (mV)		
	sample 1	sample 2	sample 3
0.00	-55	-54	-55
1.00	-82	-82	-83
2.00	-94	-94	-94
3.00	-102	-103	-102
4.00	-108	-108	-109
5.00	-112	-112	-113

Report the parts-per-million F^- in the toothpaste.

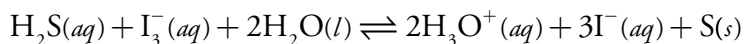
15. You are responsible for determining the amount of KI in iodized salt and decide to use an I^- ion-selective electrode. Describe how you would perform this analysis using external standards and using the method of standard additions.

16. Explain why each of the following decreases the analysis time for controlled-potential coulometry: a larger surface area for the working electrode, a smaller volume of solution, and a faster stirring rate.
17. The purity of a sample of picric acid, $C_6H_3N_3O_7$, is determined by controlled-potential coulometry, converting the picric acid to triaminophenol, $C_6H_9N_3O$.



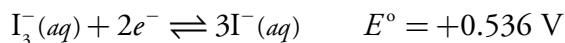
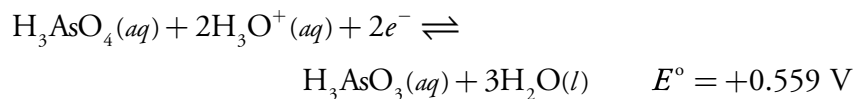
A 0.2917-g sample of picric acid is placed in a 1000-mL volumetric flask and diluted to volume. A 10.00-mL portion of this solution is transferred to a coulometric cell and sufficient water added so that the Pt cathode is immersed. The exhaustive electrolysis of the sample requires 21.67 C of charge. Report the purity of the picric acid.

18. The concentration of H_2S in the drainage from an abandoned mine can be determined by a coulometric titration using KI as a mediator and I_3^- as the titrant.



A 50.00-mL sample of water is placed in a coulometric cell, along with an excess of KI and a small amount of starch as an indicator. Electrolysis is carried out at a constant current of 84.6 mA, requiring 386 s to reach the starch end point. Report the concentration of H_2S in the sample in parts-per-million.

19. One method for the determination of H_3AsO_3 is a coulometric titration using I_3^- as a titrant. The relevant standard-state reactions and potentials are summarized here.



Explain why the coulometric titration must be carried out in a neutral solution ($\text{pH} \approx 7$) instead of in a strongly acidic solution ($\text{pH} < 0$).

20. The production of adiponitrile, $\text{NC}(\text{CH}_2)_4\text{CN}$, from acrylonitrile, $\text{CH}_2=\text{CHCN}$, is an important industrial process. A 0.594-g sample of acrylonitrile is placed in a 1-L volumetric flask and diluted to volume. An exhaustive controlled-potential electrolysis of a 1.00-mL portion of the diluted acrylonitrile requires 1.080 C of charge. What is the value of n for the reduction of acrylonitrile to adiponitrile?
21. The linear-potential scan hydrodynamic voltammogram for a mixture of Fe^{2+} and Fe^{3+} is shown in Figure 11.57, where $i_{l,a}$ and $i_{l,c}$ are the anodic and cathodic limiting currents.

(a) Show that the potential is given by

$$E = E_{\text{Fe}^{3+}/\text{Fe}^{2+}}^{\circ} - 0.05916 \log \frac{K_{\text{Fe}^{3+}}}{K_{\text{Fe}^{2+}}} - 0.05916 \log \frac{i - i_{l,a}}{i_{l,c} - i}$$

(b) What is the potential when $i = 0$ for a solution that is 0.1 mM Fe^{3+} and 0.05 mM Fe^{2+} ? You may assume that $K_{\text{Fe}^{3+}} \approx K_{\text{Fe}^{2+}}$.

22. The amount of sulfur in aromatic monomers can be determined by differential pulse polarography. Standard solutions are prepared for analysis by dissolving 1.000 mL of the purified monomer in 25.00 mL of an electrolytic solvent, adding a known amount of S, deaerating, and measuring the peak current. The following results were obtained for a set of calibration standards.

$\mu\text{g S added}$	peak current (μA)
0	0.14
28	0.70
56	1.23
112	2.41
168	3.42

Analysis of a 1.000-mL sample, treated in the same manner as the standards, gives a peak current of 1.77 μA . Report the mg S/mL in the sample.

23. The purity of a sample of $\text{K}_3\text{Fe}(\text{CN})_6$ was determined using linear-potential scan hydrodynamic voltammetry at a glassy carbon electrode. The following data were obtained for a set of external calibration standards.

$[\text{K}_3\text{Fe}(\text{CN})_6]$ (mM)	limiting current (μA)
2.0	127
4.0	252

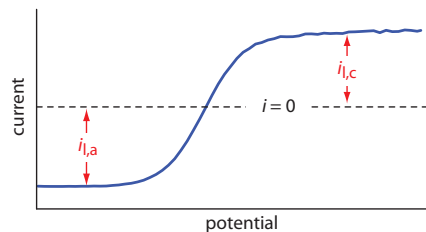


Figure 11.57 Linear-scan hydrodynamic voltammogram for a mixture of Fe^{2+} and Fe^{3+} . See Problem 11.21 for more details.

6.0	376
8.0	500
10.0	624

A sample of impure $\text{K}_3\text{Fe}(\text{CN})_6$ was prepared for analysis by diluting a 0.246-g portion to volume in a 100-mL volumetric flask. The limiting current for the sample was found to be 444 μA . Report the purity of this sample of $\text{K}_3\text{Fe}(\text{CN})_6$.

24. One method for determining whether an individual has recently fired a gun is to look for traces of antimony in the residue collected from the individual's hands. Anodic stripping voltammetry at a mercury film electrode is ideally suited for this analysis. In a typical analysis a sample is collected from a suspect with a cotton-tipped swab wetted with 5% v/v HNO_3 . After returning to the lab, the swab is placed in a vial containing 5.0 mL of 4 M HCl that is 0.02 M in hydrazine sulfate. After allowing the swab to soak overnight, a 4.0-mL portion of the solution is transferred to an electrochemical cell along with 100 μL of 0.01 M HgCl_2 . After depositing the thin film of mercury and the antimony, the stripping step gives a peak current of 0.38 μA . After adding a standard addition of 100 μL of 5.00×10^2 ppb Sb, the peak current increases to 1.14 μA . How many nanograms of Sb were collected from the suspect's hand?
25. Zinc can be used as an internal standard in the analysis of thallium by differential pulse polarography. A standard solution containing 5.00×10^{-5} M Zn^{2+} and 2.50×10^{-5} M Tl^+ gave peak currents of 5.71 μA and 3.19 μA , respectively. An 8.713-g sample of an alloy known to be free of zinc was dissolved in acid, transferred to a 500-mL volumetric flask, and diluted to volume. A 25.0-mL portion of this solution was mixed with 25.0 mL of a 5.00×10^{-4} M solution of Zn^{2+} . Analysis of this solution gave a peak current for Zn^{2+} of 12.3 μA , and for Tl^+ of 20.2 μA . Report the %w/w Tl in the alloy.
26. Differential pulse voltammetry at a carbon working electrode can be used to determine the concentrations of ascorbic acid and caffeine in drug formulations.²⁵ In a typical analysis a 0.9183-g tablet is crushed and ground into a fine powder. A 0.5630-g sample of this powder is transferred to a 100-mL volumetric flask, brought into solution, and diluted to volume. A 0.500-mL portion is then transferred to a voltammetric cell containing 20.00 mL of a suitable supporting electrolyte. The resulting voltammogram gives peak currents of 1.40 μA and 3.88 μA for ascorbic acid and caffeine, respectively. A 0.500-mL aliquot of a standard solution containing 250.0 ppm ascorbic acid and 200.0

25 Lau, O.; Luk, S.; Cheung, Y. *Analyst* **1989**, *114*, 1047–1051.

ppm caffeine is then added. A voltammogram of this solution gives peak currents of 2.80 μA and 8.02 μA for ascorbic acid and caffeine, respectively. Report the milligrams of ascorbic acid and milligrams of caffeine in the tablet.

27. Ratana-ohpas and co-workers described a stripping analysis method for determining the amount of tin in canned fruit juices.²⁶ Standards containing 50.0 ppb Sn^{4+} , 100.0 ppb Sn^{4+} , and 150.0 ppb Sn^{4+} were analyzed giving peak currents (arbitrary units) of 83.0, 171.6, and 260.2, respectively. A 2.00-mL sample of lychee juice was mixed with 20.00 mL of 1:1 HCl/ HNO_3 . A 0.500-mL portion of this mixture was added to 10 mL of 6 M HCl and the volume adjusted to 30.00 mL. Analysis of this diluted sample gave a signal of 128.2 (arbitrary units). Report the parts-per-million Sn^{4+} in the original sample of lychee juice.
28. Sittampalam and Wilson described the preparation and use of an amperometric sensor for glucose.²⁷ The sensor is calibrated by measuring the steady-state current when it is immersed in standard solutions of glucose. A typical set of calibration data is shown here.

[glucose] (mg/100 mL)	current (arb. units)
2.0	17.2
4.0	32.9
6.0	52.1
8.0	68.0
10.0	85.8

A 2.00-mL sample is diluted to 10 mL in a volumetric flask and a steady-state current of 23.6 (arbitrary units) is measured. What is the concentration of glucose in the sample in mg/100 mL?

29. Differential pulse polarography can be used to determine the concentrations of lead, thallium, and indium in a mixture. Because the peaks for lead and thallium, and for thallium and indium overlap, a simultaneous analysis is necessary. Peak currents (in arbitrary units) at -0.385 V, -0.455 V, and -0.557 V were measured for a single standard solution, and for a sample, giving the results shown in the following table.

standards		peak currents (arb. units) at		
analyte	$\mu\text{g/mL}$	-0.385 V	-0.455 V	-0.557 V
Pb^{2+}	1.0	26.1	2.9	0

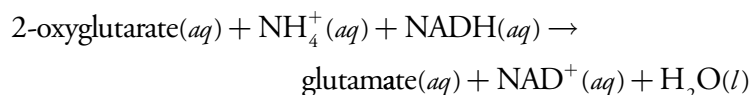
26 Ratana-ohpas, R.; Kanatharana, P.; Ratana-ohpas, W.; Kongsawasdi, W. *Anal. Chim. Acta* **1996**, 333, 115–118.

27 Sittampalam, G.; Wilson, G. S. *J. Chem. Educ.* **1982**, 59, 70–73.

Tl ⁺	2.0	7.8	23.5	3.2
In ³⁺	0.4	0	0	22.9
sample		60.6	28.8	54.1

Report the $\mu\text{g/mL}$ of Pb^{2+} , Tl^+ and In^{3+} in the sample.

30. Abass and co-workers developed an amperometric biosensor for NH_4^+ that uses the enzyme glutamate dehydrogenase to catalyze the following reaction



where NADH is the reduced form of nicotinamide adenine dinucleotide.²⁸ The biosensor actually responds to the concentration of NADH, however, the rate of the reaction depends on the concentration of NH_4^+ . If the initial concentrations of 2-oxyglutarate and NADH are the same for all samples and standards, then the signal is proportional to the concentration of NH_4^+ . As shown in the following table, the sensitivity of the method is dependent on pH.

pH	sensitivity ($\text{nA s}^{-1} \text{M}^{-1}$)
6.2	1.67×10^3
6.75	5.00×10^3
7.3	9.33×10^3
7.7	1.04×10^4
8.3	1.27×10^4
9.3	2.67×10^3

Two possible explanations for the effect of pH on the sensitivity of this analysis are the acid–base chemistry of NH_4^+ , and the acid–base chemistry of the enzyme. Given that the $\text{p}K_a$ for NH_4^+ is 9.244, explain the source of this pH-dependent sensitivity.

31. The speciation scheme for trace metals shown in [Table 11.12](#) divides them into seven operationally defined groups by collecting and analyzing two samples following each of four treatments—a total of eight samples and eight measurements. After removing insoluble particulates by filtration (treatment 1), the solution is analyzed for the concentration of ASV labile metals and for the total concentration of metals. A portion of the filtered solution is passed through an ion-exchange column (treatment 2), and the concentrations of ASV metal and of

28 Abass, A. K.; Hart, J. P.; Cowell, D. C.; Chapell, A. *Anal. Chim. Acta* **1988**, 373, 1–8.

total metal are determined. A second portion of the filtered solution is irradiated with UV light (treatment 3), and the concentrations of ASV metal and of total metal are measured. Finally, a third portion of the filtered solution is irradiated with UV light and passed through an ion-exchange column (treatment 4), and the concentrations of ASV labile metal and of total metal again are determined. The groups that are included in each measurement are summarized in the following table.

treatment	groups removed by treatment	groups contributing to ASV-labile metals	groups contributing to total metals
1	none	I, II, III	I, II, III, IV, V, VI, VII
2	I, IV, V	II, III	II, III, VI, VII
3	none	I, II, III, IV, VI	I, II, III, IV, V, VI, VII
4	I, II, IV, V, VI	III	III, VII

- (a) Explain how you can use these eight measurements to determine the concentration of metals present in each of the seven groups identified in [Table 11.12](#).
- (b) Batley and Florence report the following results for the speciation of cadmium, lead, and copper in a sample of seawater.²⁹

measurement (treatment: ASV-labile or total)	ppm Cd ²⁺	ppm Pb ²⁺	ppm Cu ²⁺
1: ASV-labile	0.24	0.39	0.26
1: total	0.28	0.50	0.40
2: ASV-labile	0.21	0.33	0.17
2: total	0.26	0.43	0.24
3: ASV-labile	0.26	0.37	0.33
3: total	0.28	0.50	0.43
4: ASV-labile	0.00	0.00	0.00
4: total	0.02	0.12	0.10

Determine the speciation of each metal in this sample of sea water.

32. The concentration of Cu²⁺ in seawater may be determined by anodic stripping voltammetry at a hanging mercury drop electrode after first releasing any copper bound to organic matter. To a 20.00-mL sample of seawater is added 1 mL of 0.05 M HNO₃ and 1 mL of 0.1% H₂O₂. The sample is irradiated with UV light for 8 hr and then diluted to volume in a 25-mL volumetric flask. Deposition of Cu²⁺ takes place at -0.3 V versus an SCE for 10 min, producing a peak current of 26.1

²⁹ Batley, G. E.; Florence, T. M. *Anal. Lett.* **1976**, *9*, 379–388.

(arbitrary units). A second 20.00-mL sample of the seawater is treated identically, except that 0.1 mL of a 5.00 μM solution of Cu^{2+} is added, producing a peak current of 38.4 (arbitrary units). Report the concentration Cu^{2+} in the seawater in mg/L.

33. Thioamide drugs can be determined by cathodic stripping analysis.³⁰ Deposition occurs at +0.05 V versus an SCE. During the stripping step the potential is scanned cathodically, and a stripping peak is observed at -0.52 V. In a typical application a 2.00-mL sample of urine was mixed with 2.00 mL of a pH 4.78 buffer. Following a 2.00 min deposition, a peak current of 0.562 μA was measured. A 0.10-mL addition of a 5.00 μM solution of the drug was added to the same solution. A peak current of 0.837 μA was recorded using the same deposition and stripping conditions. Report the drug's molar concentration in the urine sample.
34. The concentration of vanadium (V) in sea water can be determined by adsorptive stripping voltammetry after forming a complex with catechol.³¹ The catechol-V(V) complex is deposited on a hanging mercury drop electrode at a potential of -0.1 V versus a Ag/AgCl reference electrode. A cathodic potential scan gives a stripping peak that is proportional to the concentration of V(V). The following standard additions were used to analyze a sample of seawater.

$[\text{V(V)}]_{\text{added}}$ (M)	peak current (nA)
2.0×10^{-8}	24
4.0×10^{-8}	33
8.0×10^{-8}	52
1.2×10^{-7}	69
1.8×10^{-7}	97
2.8×10^{-7}	140

Determine the molar concentration of V (V) in the sample of sea water, assuming that the standard additions result in a negligible change in the sample's volume.

35. The standard-state reduction potential for Cu^{2+} to Cu is +0.342 V versus the SHE. Given that Cu^{2+} forms a very stable complex with the ligand EDTA, do you expect the standard-state reduction potential for $\text{Cu}(\text{EDTA})^{2-}$ to be greater than +0.342 V, less than +0.342 V, or equal to +0.342 V? Explain your reasoning.

³⁰ Davidson, I. E.; Smyth, W. F. *Anal. Chem.* 1977, 49, 1195–1198.

³¹ van der Berg, C. M. G.; Huang, Z. Q. *Anal. Chem.* 1984, 56, 2383–2386.

36. The polarographic half-wave potentials (versus the SCE) for Pb^{2+} and Tl^+ in 1 M HCl are, respectively, -0.44 V and -0.45 V. In an electrolyte of 1 M NaOH, however, the half-wave potentials are -0.76 V for Pb^{2+} and -0.48 V for Tl^+ . Why does the change in electrolyte have such a significant effect on the half-wave potential for Pb^{2+} , but not on the half-wave potential for Tl^+ ?
37. The following data for the reduction of Pb^{2+} was collected by normal-pulse polarography.

potential (V vs. SCE)	current (μA)
-0.345	0.16
-0.370	0.98
-0.383	2.05
-0.393	3.13
-0.409	4.62
-0.420	5.16

The limiting current was $5.67 \mu\text{A}$. Verify that the reduction reaction is reversible, and determine values for n and $E_{1/2}$. The half-wave potentials for the normal-pulse polarograms of Pb^{2+} in the presence of several different concentrations of OH^- are shown in the following table.

$[\text{OH}^-]$ (M)	$E_{1/2}$ (V vs. SCE)	$[\text{OH}^-]$ (M)	$E_{1/2}$ (V vs. SCE)
0.050	-0.646	0.150	-0.689
0.100	-0.673	0.300	-0.715

Determine the stoichiometry of the Pb-hydroxide complex and its formation constant.

38. In 1977, when I was an undergraduate student at Knox College, my lab partner and I did an experiment to study the voltammetric behavior of Cd^{2+} (in 0.1 M KNO_3) and Ni^{2+} (in 0.2 M KNO_3) at a dropping mercury electrode. The data in this problem comes from my lab notebook. All potentials are relative to an SCE reference electrode.

potential for Cd^{2+} (V)	current (μA)
-0.60	4.5
-0.58	3.4
-0.56	2.1
-0.54	0.6
-0.52	0.2

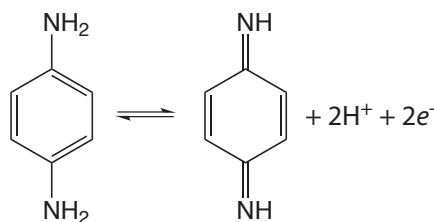
potential for Ni ²⁺ (V)	current (μA)
-1.09	1.90
-1.05	1.75
-1.03	1.50
-1.02	1.25
-1.01	1.00

The limiting currents for Cd²⁺ was 4.8 μA and that for Ni²⁺ was 2.0 μA. Evaluate the electrochemical reversibility for each metal ion and comment on your results.

39. Baldwin and co-workers report the following data from a cyclic voltammetry study of the electrochemical behavior of *p*-phenylenediamine in a pH 7 buffer.³² All potentials are measured relative to an SCE.

scan rate (mV/s)	$E_{p,a}$ (V)	$E_{p,c}$ (V)	$i_{p,a}$ (mA)	$i_{p,c}$ (mA)
2	0.148	0.104	0.34	0.30
5	0.149	0.098	0.56	0.53
10	0.152	0.095	1.00	0.94
20	0.161	0.095	1.44	1.44
50	0.167	0.082	2.12	1.81
100	0.180	0.063	2.50	2.19

The initial scan is toward more positive potentials, leading to the oxidation reaction shown here.



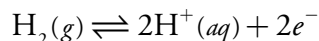
Use this data to show that the reaction is electrochemically irreversible. A reaction may show electrochemical irreversibility because of slow electron transfer kinetics or because the product of the oxidation reaction participates in a chemical reaction that produces a nonelectroactive species. Based on the data in this problem, what is the likely source of *p*-phenylenediamine's electrochemical irreversibility?

32 Baldwin, R. P.; Ravichandran, K.; Johnson, R. K. *J. Chem. Educ.* **1984**, *61*, 820–823.

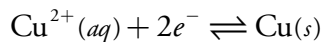
11H Solutions to Practice Exercises

Practice Exercise 11.1

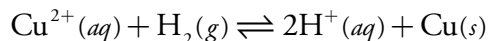
The oxidation of H_2 to H^+ occurs at the anode



and the reduction of Cu^{2+} to Cu occurs at the cathode.



The overall cell reaction, therefore, is



Click [here](#) to return to the chapter.

Practice Exercise 11.2

Making appropriate substitutions into [equation 11.3](#) and solving for E_{cell} gives its value as

$$\begin{aligned} E_{\text{cell}} &= \left(E_{\text{Cu}^{2+}/\text{Cu}}^\circ - \frac{0.05916}{2} \log \frac{1}{a_{\text{Cu}^{2+}}} \right) - \left(E_{\text{H}^+/\text{H}_2}^\circ - \frac{0.05916}{2} \log \frac{f_{\text{H}_2}}{(a_{\text{H}^+})^2} \right) \\ &= \left(0.3419 \text{ V} - \frac{0.05916}{2} \log \frac{1}{0.0500} \right) - \\ &\quad \left(0.0000 - \frac{0.05916}{2} \log \frac{0.500}{(0.100)^2} \right) \\ &= + 0.2531 \text{ V} \end{aligned}$$

Click [here](#) to return to the chapter.

Practice Exercise 11.3

Making appropriate substitutions into [equation 11.3](#)

$$\begin{aligned} + 0.257 \text{ V} &= \left(0.3419 \text{ V} - \frac{0.05916}{2} \log \frac{1}{a_{\text{Cu}^{2+}}} \right) - \\ &\quad \left(0.0000 - \frac{0.05916}{2} \log \frac{1.00}{(1.00)^2} \right) \end{aligned}$$

and solving for $a_{\text{Cu}^{2+}}$ gives its activity as 1.35×10^{-3} .

Click [here](#) to return to the chapter.

Practice Exercise 11.4

When using a saturated calomel electrode, the potential of the electrochemical cell is

$$E_{\text{cell}} = E_{\text{UO}_2^+/\text{U}^{4+}} - E_{\text{SCE}}$$

Substituting in known values

$$-0.0190 \text{ V} = E_{\text{UO}_2^+/\text{U}^{4+}} - 0.2444 \text{ V}$$

and solving for $E_{\text{UO}_2^+/\text{U}^{4+}}$ gives its value as +0.2254 V. The potential relative to the Ag/AgCl electrode is

$$E_{\text{cell}} = E_{\text{UO}_2^+/\text{U}^{4+}} - E_{\text{Ag/AgCl}} = 0.2254 \text{ V} - 0.197 \text{ V} = +0.028 \text{ V}$$

and the potential relative to the standard hydrogen electrode is

$$E_{\text{cell}} = E_{\text{UO}_2^+/\text{U}^{4+}} - E_{\text{SHE}} = 0.2254 \text{ V} - 0.0000 \text{ V} = +0.2254 \text{ V}$$

Click [here](#) to return to the chapter.

Practice Exercise 11.5

The larger the value of $K_{\text{A,I}}$ the more serious the interference. Larger values for $K_{\text{A,I}}$ correspond to more positive (less negative) values for $\log K_{\text{A,I}}$; thus, I^- , with a $K_{\text{A,I}}$ of 6.3×10^{-2} , is the most serious of these interferents. To find the activity of I^- that gives a potential equivalent to a NO_2^- activity of 2.75×10^{-4} , we note that

$$a_{\text{NO}_2^-} = K_{\text{A,I}} \times a_{\text{I}^-}$$

Making appropriate substitutions

$$2.75 \times 10^{-4} = (6.3 \times 10^{-2}) \times a_{\text{I}^-}$$

and solving for a_{I^-} gives its activity as 4.4×10^{-3} .

Click [here](#) to return to the chapter.

Practice Exercise 11.6

In the presence of OH^- the cell potential is

$$E_{\text{cell}} = K - 0.05916 \log \left\{ a_{\text{NO}_2^-} + K_{\text{NO}_2^-/\text{OH}^-} \times a_{\text{OH}^-} \right\}$$

To achieve an error of less than 10%, the term $K_{\text{NO}_2^-/\text{OH}^-} \times a_{\text{OH}^-}$ must be less than 1% of $a_{\text{NO}_2^-}$; thus

$$K_{\text{NO}_2^-/\text{OH}^-} \times a_{\text{OH}^-} \leq 0.10 \times a_{\text{NO}_2^-}$$

$$630 \times a_{\text{OH}^-} \leq 0.10 \times (2.2 \times 10^{-4})$$

Solving for a_{OH^-} gives its maximum allowable activity as 3.5×10^{-8} , which corresponds to a pH of less than 6.54.

The electrode does have a lower pH limit. Nitrite is the conjugate weak base of HNO_2 , a species to which the ISE does not respond. As shown by the ladder diagram in Figure 11.58, at a pH of 4.15 approximately 10% of nitrite is present as HNO_2 . A minimum pH of 4.5 is the usual recommendation when using a nitrite ISE. This corresponds to an $\text{NO}_2^-/\text{HNO}_2$ ratio of

$$\text{pH} = \text{p}K_a + \log \frac{[\text{NO}_2^-]}{[\text{HNO}_2]}$$

$$4.5 = 3.15 + \log \frac{[\text{NO}_2^-]}{[\text{HNO}_2]}$$

$$\frac{[\text{NO}_2^-]}{[\text{HNO}_2]} \approx 22$$

Thus, at a pH of 4.5 approximately 96% of nitrite is present as NO_2^- .

Click [here](#) to return to the chapter.

Practice Exercise 11.7

The reduction of Cu^{2+} to Cu requires two electrons per mole of Cu ($n = 2$). Using [equation 11.25](#), we calculate the moles and the grams of Cu in the portion of sample being analyzed.

$$N_{\text{Cu}} = \frac{Q}{nF} = \frac{16.11 \text{ C}}{\frac{2 \text{ mol } e^-}{\text{mol Cu}} \times \frac{96487 \text{ C}}{\text{mol } e^-}} = 8.348 \times 10^{-5} \text{ mol Cu}$$

$$8.348 \times 10^{-5} \text{ mol Cu} \times \frac{63.55 \text{ g Cu}}{\text{mol Cu}} = 5.301 \times 10^{-3} \text{ g Cu}$$

This is the Cu from a 10.00 mL portion of a 500.0 mL sample; thus, the %/w/w copper in the original sample of brass is

$$\frac{5.301 \times 10^{-3} \text{ g Cu} \times \frac{500.0 \text{ mL}}{10.00 \text{ mL}}}{0.442 \text{ g sample}} \times 100 = 60.0\% \text{ w/w Cu}$$

For lead, we follow the same process; thus

$$N_{\text{Pb}} = \frac{Q}{nF} = \frac{0.422 \text{ C}}{\frac{2 \text{ mol } e^-}{\text{mol Pb}} \times \frac{96487 \text{ C}}{\text{mol } e^-}} = 2.19 \times 10^{-6} \text{ mol Pb}$$

$$2.19 \times 10^{-6} \text{ mol Pb} \times \frac{207.2 \text{ g Pb}}{\text{mol Pb}} = 4.53 \times 10^{-4} \text{ g Pb}$$

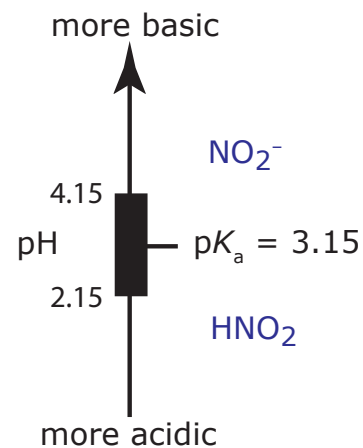


Figure 11.58 Ladder diagram for the weak base NO_2^- .

$$\frac{4.53 \times 10^{-4} \text{ g Pb} \times \frac{500.0 \text{ mL}}{10.00 \text{ mL}}}{0.442 \text{ g sample}} \times 100 = 5.12\% \text{ w/w Pb}$$

Click [here](#) to return to the chapter.

Practice Exercise 11.8

For anodic stripping voltammetry, the peak current, i_p , is a linear function of the analyte's concentration

$$i_p = KC_{\text{Cu}}$$

where K is a constant that accounts for experimental parameters such as the electrode's area, the diffusion coefficient for Cu^{2+} , the deposition time, and the rate of stirring. For the analysis of the sample before the standard addition we know that the current is

$$i_p = 0.886 \text{ A} = KC_{\text{Cu}}$$

and after the standard addition the current is

$$i_p = 2.52 \text{ } \mu\text{A} = K \left\{ C_{\text{Cu}} \times \frac{50.00 \text{ mL}}{50.005 \text{ mL}} + \frac{10.00 \text{ mg Cu}}{\text{L}} \times \frac{0.005 \text{ mL}}{50.005 \text{ mL}} \right\}$$

where 50.005 mL is the total volume after adding the 5.00 μL spike. Solving each equation for K and combining leaves us with the following equation.

$$\frac{0.886 \text{ } \mu\text{A}}{C_{\text{Cu}}} = K = \frac{2.52 \text{ A}}{C_{\text{Cu}} \times \frac{50.00 \text{ mL}}{50.005 \text{ mL}} + \frac{10.00 \text{ mg Cu}}{\text{L}} \times \frac{0.005 \text{ mL}}{50.005 \text{ mL}}}$$

Solving this equation for C_{Cu} gives its value as $5.42 \times 10^{-4} \text{ mg Cu}^{2+}/\text{L}$, or $0.542 \text{ } \mu\text{g Cu}^{2+}/\text{L}$.

Click [here](#) to return to the chapter.

Practice Exercise 11.9

From the three half-wave potentials we have a $\Delta E_{1/2}$ of -0.280 V for 0.115 M en and a $\Delta E_{1/2}$ of -0.308 V for 0.231 M en . Using [equation 11.51](#) we write the following two equations.

$$-0.280 = -\frac{0.05916}{2} \log \beta_p - \frac{0.05916 p}{2} \log(0.115)$$

$$-0.308 = -\frac{0.05916}{2} \log \beta_p - \frac{0.05916 p}{2} \log(0.231)$$

To solve for the value of p , we first subtract the second equation from the first equation

$$0.028 = -\frac{0.05916p}{2} \log(0.115) - \left\{ -\frac{0.05916p}{2} \log(0.231) \right\}$$

which eliminates the term with β_p . Next we solve this equation for p

$$0.028 = (2.778 \times 10^{-2})p - (1.882 \times 10^{-2})p$$

$$0.028 = (8.96 \times 10^{-3})p$$

obtaining a value of 3.1, or $p \approx 3$. Thus, the complex is $\text{Cd}(\text{en})_3$. To find the formation complex, β_3 , we return to [equation 11.51](#), using our value for p . Using the data for an en concentration of 0.115 M

$$-0.280 = -\frac{0.05916}{2} \log \beta_p - \frac{0.05916 \times 3}{2} \log(0.115)$$

$$-0.363 = -\frac{0.05916}{2} \log \beta_p$$

gives a value for β_3 of 1.93×10^{12} . Using the data for an en concentration of 0.231 M gives a value of 2.10×10^{12} .

For simplicity, we will use *en* as a shorthand notation for ethylenediamine.

Click [here](#) to return to the chapter.

Chapter 12

Chromatographic and Electrophoretic Methods

Chapter Overview

- Section 12A Overview of Analytical Separations
- Section 12B General Theory of Column Chromatography
- Section 12C Optimizing Chromatographic Separations
- Section 12D Gas Chromatography
- Section 12E High-Performance Liquid Chromatography
- Section 12F Other Chromatographic Techniques
- Section 12G Electrophoresis
- Section 12H Key Terms
- Section 12I Chapter Summary
- Section 12J Problems
- Section 12K Solutions to Practice Exercises

Drawing from an arsenal of analytical techniques—many of which were the subject of the preceding four chapters—analytical chemists design methods for the analysis of analytes at increasingly lower concentrations and in increasingly more complex matrices. Despite the power of these analytical techniques, they often suffer from a lack of selectivity. For this reason, many analytical procedures include a step to separate the analyte from potential interferents. Although effective, each additional step in an analytical procedure increases the analysis time and introduces uncertainty. In this chapter we consider two analytical techniques that avoid these limitations by combining the separation and analysis: chromatography and electrophoresis.

12A Overview of Analytical Separations

In Chapter 7 we examined several methods for separating an analyte from potential interferences. For example, in a liquid–liquid extraction the analyte and interference are initially present in a single liquid phase. We add a second, immiscible liquid phase and mix them thoroughly by shaking. During this process the analyte and interferences partition themselves between the two phases to different extents, effecting their separation. After allowing the phases to separate, we draw off the phase enriched in analyte. Despite the power of liquid–liquid extractions, there are significant limitations.

12A.1 Two Limitations of Liquid–Liquid Extractions

Suppose we have a sample containing an analyte in a matrix that is incompatible with our analytical method. To determine the analyte's concentration we first separate it from the matrix using a simple liquid–liquid extraction. If we have several analytes, we may need to complete a separate extraction for each analyte. For a complex mixture of analytes this quickly becomes a tedious process. This is one limitation to a liquid–liquid extraction.

A more significant limitation is that the extent of a separation depends on the distribution ratio of each species in the sample. If the analyte's distribution ratio is similar to that of another species, then their separation becomes impossible. For example, let's assume that an analyte, A, and an interference, I, have distribution ratios of, respectively, 5 and 0.5. If we use a liquid–liquid extraction with equal volumes of sample and extractant, then it is easy to show that a single extraction removes approximately 83% of the analyte and 33% of the interference. Although we can remove 99% of the analyte with three extractions, we also remove 70% of the interference. In fact, there is no practical combination of number of extractions or volumes of sample and extractant that produce an acceptable separation.

12A.2 A Better Way to Separate Mixtures

The problem with a liquid–liquid extraction is that the separation occurs in only one direction—from the sample to the extracting phase. Let's take a closer look at the liquid–liquid extraction of an analyte and an interference with distribution ratios of, respectively, 5 and 0.5. [Figure 12.1](#) shows that a single extraction using equal volumes of sample and extractant transfers 83% of the analyte and 33% of the interference to the extracting phase. If the original concentrations of A and I are identical, then their concentration ratio in the extracting phase after one extraction is

$$\frac{[A]}{[I]} = \frac{0.83}{0.33} = 2.5$$

A single extraction, therefore, enriches the analyte by a factor of $2.5\times$. After completing a second extraction (see [Figure 12.1](#)) and combining the two

From Chapter 7 we know that the distribution ratio, D , for a solute, S, is

$$D = \frac{[S]_{\text{ext}}}{[S]_{\text{samp}}}$$

where $[S]_{\text{ext}}$ is its equilibrium concentration in the extracting phase and $[S]_{\text{samp}}$ is its equilibrium concentration in the sample.

We can use the distribution ratio to calculate the fraction of S that remains in the sample, q_{samp} , after an extraction

$$q_{\text{samp}} = \frac{V_{\text{samp}}}{DV_{\text{ext}} + V_{\text{samp}}}$$

where V_{samp} is the volume of sample and V_{ext} is the volume of the extracting phase. For example, if $D = 10$, $V_{\text{samp}} = 20$, and $V_{\text{ext}} = 5$, the fraction of S remaining in the sample after the extraction is

$$q_{\text{samp}} = \frac{20}{10 \times 5 + 20} = 0.29$$

or 29%. The remaining 71% of the analyte is in the extracting phase.

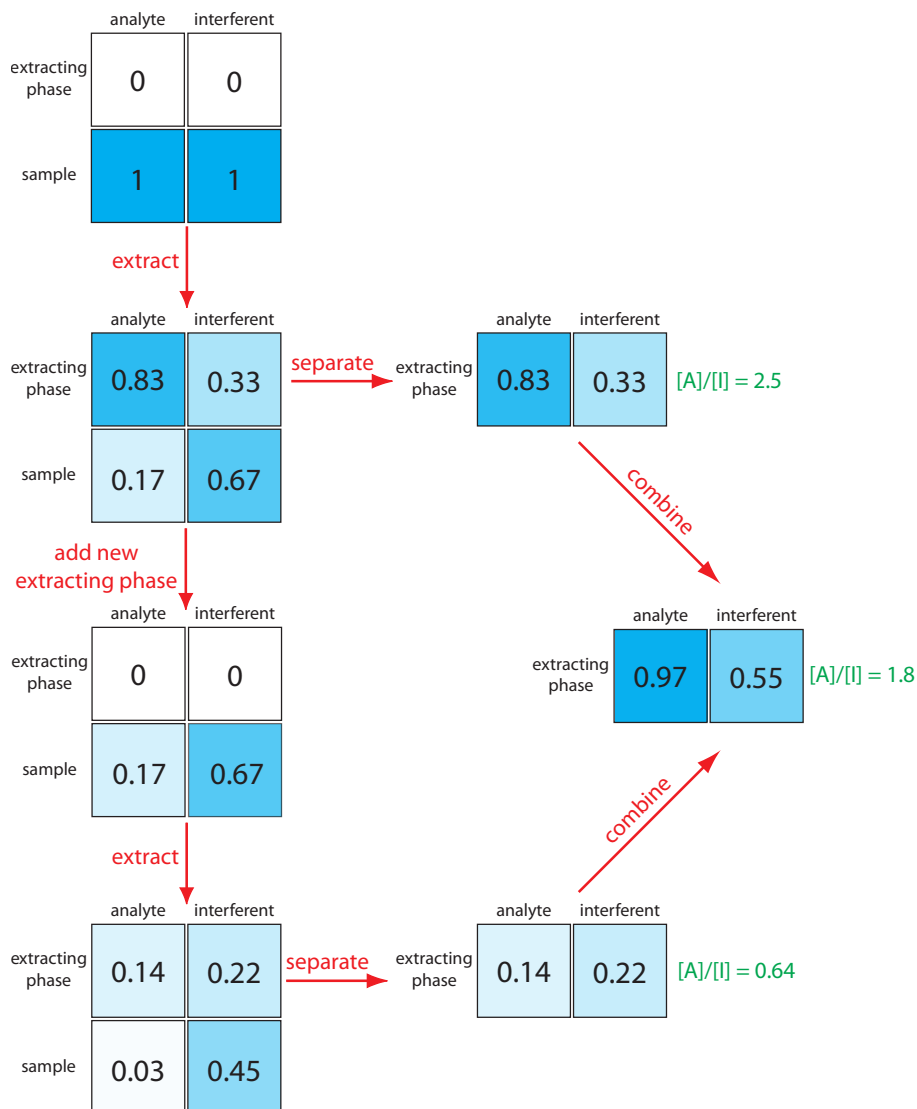


Figure 12.1 Progress of a traditional liquid–liquid extraction using two identical extractions of a single sample with fresh portions of the extractant. The numbers give the fraction of analyte and interferent in each phase assuming equal volumes of sample and extractant and distribution ratios of 5 and 0.5 for the analyte and the interferent, respectively.

extracting phases, the separation of the analyte and interferent is, surprisingly, less efficient.

$$\frac{[A]}{[I]} = \frac{0.97}{0.55} = 1.8$$

Figure 12.1 makes it clear why the second extraction results in a poorer overall separation—the second extraction actually favors the interferent!

We can improve the separation by first extracting the solutes from the sample into the extracting phase, and then extracting them back into a fresh portion of solvent that matches the sample's matrix (Figure 12.2). Because the analyte has the larger distribution ratio, more of it moves into the ex-

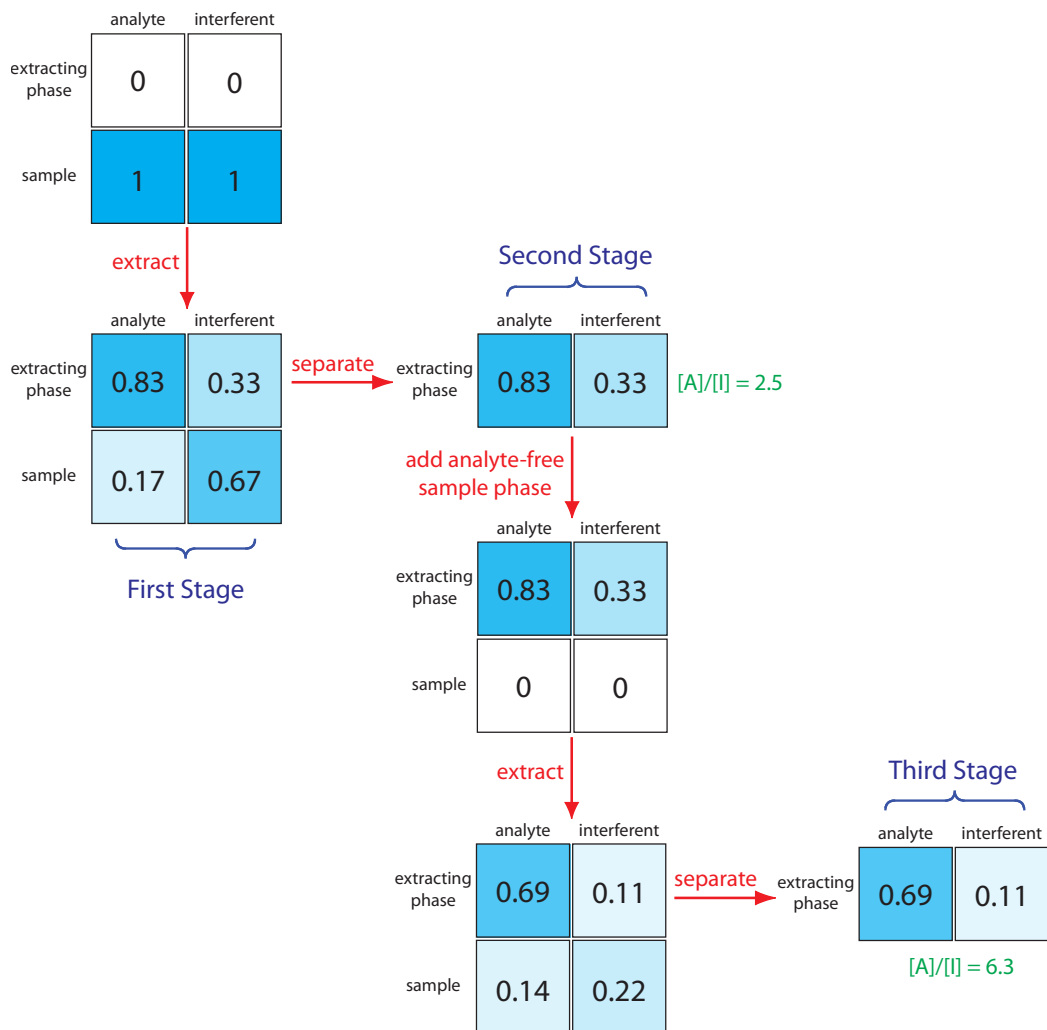


Figure 12.2 Progress of a liquid–liquid extraction in which we first extract the solutes into the extracting phase and then extract them back into an analyte-free portion of the sample’s phase. The numbers give the fraction of analyte and interferent in each phase assuming equal volumes of sample and extractant and distribution ratios of 5 and 0.5 for the analyte and interferent, respectively.

tractant during the first extraction, and less of it moves back to the sample phase during the second extraction. In this case the concentration ratio in the extracting phase after two extractions is significantly greater.

$$\frac{[A]}{[I]} = \frac{0.69}{0.11} = 6.3$$

Not shown in Figure 12.2 is that we can add a fresh portion of the extracting phase to the sample that remains after the first extraction, beginning the process anew. As the number of extractions increases, the analyte and the interferent each spread out in space over a series of stages. Because the interferent’s distribution ratio is smaller than that of the analyte, the interferent lags behind the analyte. With a sufficient number of extractions, a complete separation is possible. This process of extracting the solutes back

and forth between fresh portions of the two phases, which we call a **COUNTERCURRENT EXTRACTION**, was developed by Craig in the 1940s.¹ The same phenomenon forms the basis of modern chromatography.

12A.3 Chromatographic Separations

In **CHROMATOGRAPHY** we pass a sample-free phase, which we call the **MOBILE PHASE**, over a second sample-free **STATIONARY PHASE** that remains fixed in space (Figure 12.3). We inject or place the sample into the mobile phase. As the sample moves with the mobile phase, its components partition themselves between the mobile phase and the stationary phase. A component whose distribution ratio favors the stationary phase requires more time to pass through the system. Given sufficient time, and sufficient stationary and mobile phase, we can separate solutes even if they have similar distribution ratios.

There are many ways in which we can identify a chromatographic separation: by describing the physical state of the mobile phase and the stationary phase; by describing how we bring the stationary phase and the mobile phase into contact with each other; or by describing the chemical or physical interactions between the solute and the stationary phase. Let's briefly consider how we might use each of these classifications.

TYPES OF MOBILE PHASES AND STATIONARY PHASES

The mobile phase is a liquid or a gas, and the stationary phase is a solid or a liquid film coated on a solid substrate. We often name chromatographic techniques by listing the type of mobile phase followed by the type of stationary phase. In gas–liquid chromatography, for example, the mobile phase is a gas and the stationary phase is a liquid film coated on a solid substrate. If a technique's name includes only one phase, as in gas chromatography, it is the mobile phase.

CONTACT BETWEEN THE MOBILE PHASE AND THE STATIONARY PHASE

There are two common methods for bringing the mobile phase and the stationary phase into contact. In **COLUMN CHROMATOGRAPHY** we pack the stationary phase into a narrow column and pass the mobile phase through the column using gravity or by applying pressure. The stationary phase is a solid particle or a thin, liquid film coated on either a solid particulate packing material or on the column's walls.

In **PLANAR CHROMATOGRAPHY** the stationary phase is coated on a flat surface—typically, a glass, metal, or plastic plate. One end of the plate is placed in a reservoir containing the mobile phase, which moves through the stationary phase by capillary action. In paper chromatography, for example, paper is the stationary phase.

We can trace the history of chromatography to the turn of the century when the Russian botanist Mikhail Tswett used a column packed with calcium carbonate and a mobile phase of petroleum ether to separate colored pigments from plant extracts. As the sample moved through the column the plant's pigments separated into individual colored bands. After the pigments were adequately separated, the calcium carbonate was removed from the column, sectioned, and the pigments recovered by extraction. Tswett named the technique chromatography, combining the Greek words for “color” and “to write.”

There was little interest in Tswett's technique until Martin and Synge's pioneering development of a theory of chromatography (see [Martin, A. J. P.; Synge, R. L. M. “A New Form of Chromatogram Employing Two Liquid Phases,” *Biochem. J.* **1941**, *35*, 1358–1366](#)). Martin and Synge were awarded the 1952 Nobel Prize in Chemistry for this work.

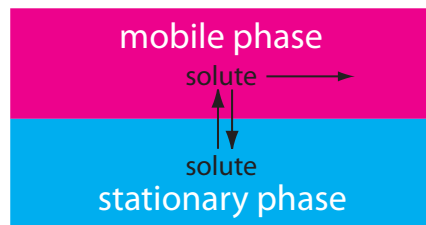


Figure 12.3 In chromatography we pass a mobile phase over a stationary phase. When we inject a sample into the mobile phase, the sample's components both move with the mobile phase and partition into the stationary phase. The solute spending the most time in the stationary phase takes the longest time to move through the system.

¹ Craig, L. C. *J. Biol. Chem.* **1944**, *155*, 519–534.

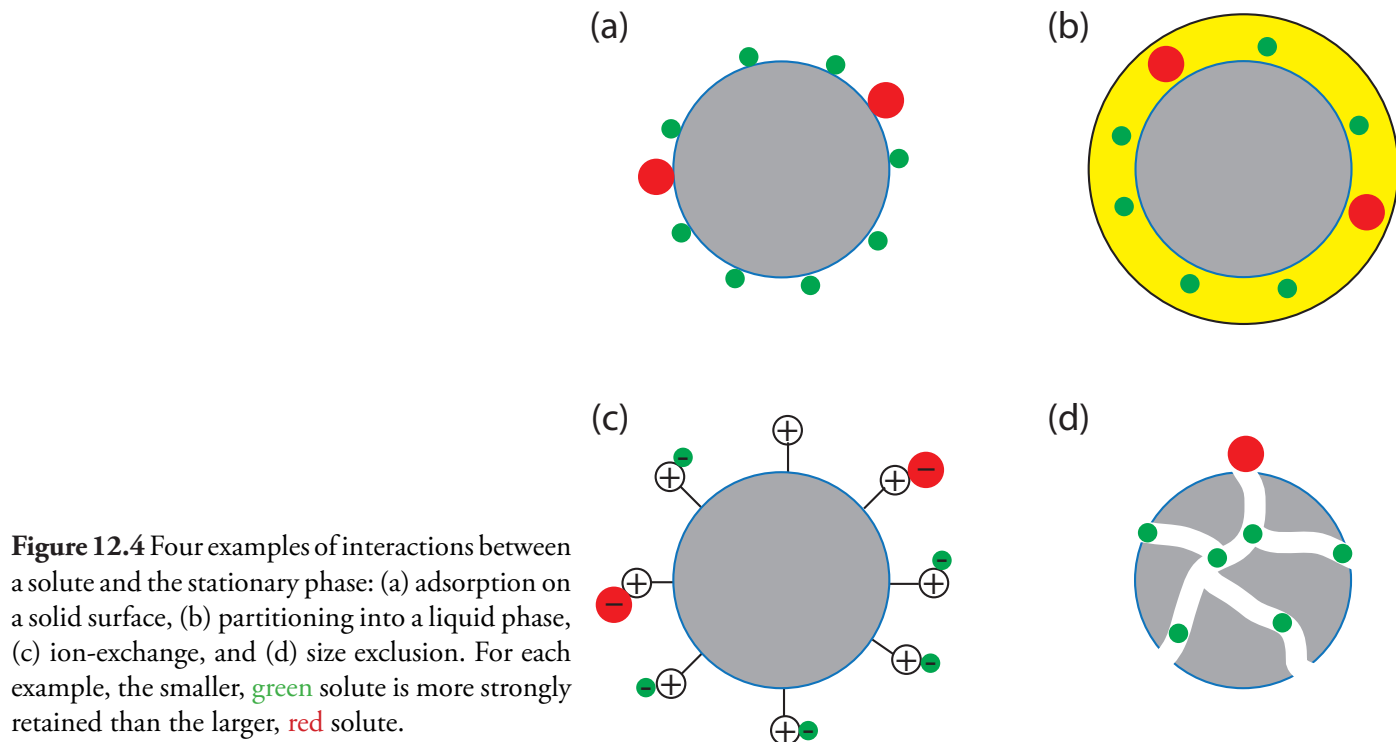


Figure 12.4 Four examples of interactions between a solute and the stationary phase: (a) adsorption on a solid surface, (b) partitioning into a liquid phase, (c) ion-exchange, and (d) size exclusion. For each example, the smaller, green solute is more strongly retained than the larger, red solute.

INTERACTION BETWEEN THE SOLUTE AND THE STATIONARY PHASE

The interaction between the solute and the stationary phase provides a third method for describing a separation (Figure 12.4). In **ADSORPTION CHROMATOGRAPHY**, solutes separate based on their ability to adsorb to a solid stationary phase. In **PARTITION CHROMATOGRAPHY**, the stationary phase is thin, liquid film on a solid support. Separation occurs because of differences in the equilibrium partitioning of solutes between the stationary phase and the mobile phase. A stationary phase consisting of a solid support with covalently attached anionic (e.g., $-\text{SO}_3^-$) or cationic (e.g., $-\text{N}(\text{CH}_3)_3^+$) functional groups is the basis for ion-exchange chromatography. Ionic solutes are attracted to the stationary phase by electrostatic forces. In size-exclusion chromatography the stationary phase is a porous particle or gel, with separation based on the size of the solutes. Larger solutes, which are unable to penetrate as deeply into the porous stationary phase, move more quickly through the column.

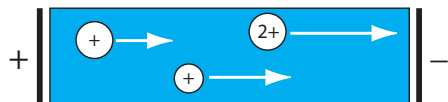


Figure 12.5 Movement of charged solutes under the influence of an applied potential. The lengths of the arrows indicate the relative speed of the solutes. In general, a larger solute moves more slowly than a smaller solute of equal charge, and a solute with a larger charge move more quickly than a solute with a smaller charge.

12A.4 Electrophoretic Separations

In chromatography, a separation occurs because there is a difference in the equilibrium partitioning of solutes between the mobile phase and the stationary phase. Equilibrium partitioning, however, is not the only basis for effecting a separation. In an electrophoretic separation, for example, charged solutes migrate under the influence of an applied potential. Separation occurs because of differences in the charges and the sizes of the solutes (Figure 12.5).

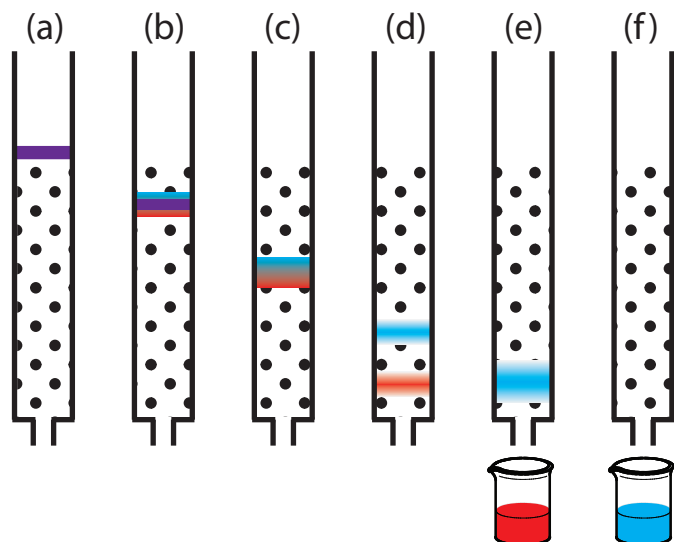


Figure 12.6 Progress of a column chromatographic separation of a two-component mixture. In (a) the sample is layered on top of the stationary phase. As mobile phase passes through the column, the sample separates into two solute bands (b–d). In (e) and (f), we collect each solute as it elutes from the column.

12B General Theory of Column Chromatography

Of the two methods for bringing the stationary phase and the mobile phases into contact, the most important is column chromatography. In this section we develop a general theory that we may apply to any form of column chromatography.

Figure 12.6 provides a simple view of a liquid–solid column chromatography experiment. The sample is introduced at the top of the column as a narrow band. Ideally, the solute’s initial concentration profile is rectangular (Figure 12.7a). As the sample moves down the column the solutes begin to separate (Figures 12.6b,c), and the individual solute bands begin to broaden and develop a Gaussian profile (Figures 12.7b,c). If the strength of each solute’s interaction with the stationary phase is sufficiently different, then the solutes separate into individual bands (Figure 12.6d and Figure 12.7d).

We can follow the progress of the separation either by collecting fractions as they elute from the column (Figure 12.6e,f), or by placing a suitable detector at the end of the column. A plot of the detector’s response as a function of elution time, or as a function of the volume of mobile phase, is known as a **CHROMATOGRAM** (Figure 12.8), and consists of a peak for each solute.

There are many possible detectors that we can use to monitor the separation. Later sections of this chapter describe some of the most popular.

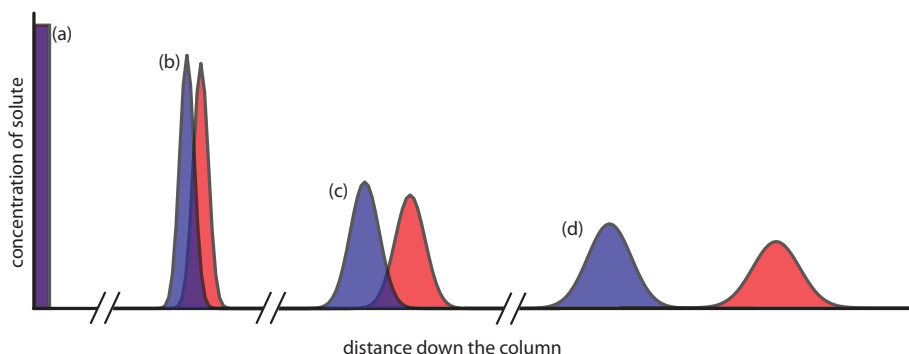
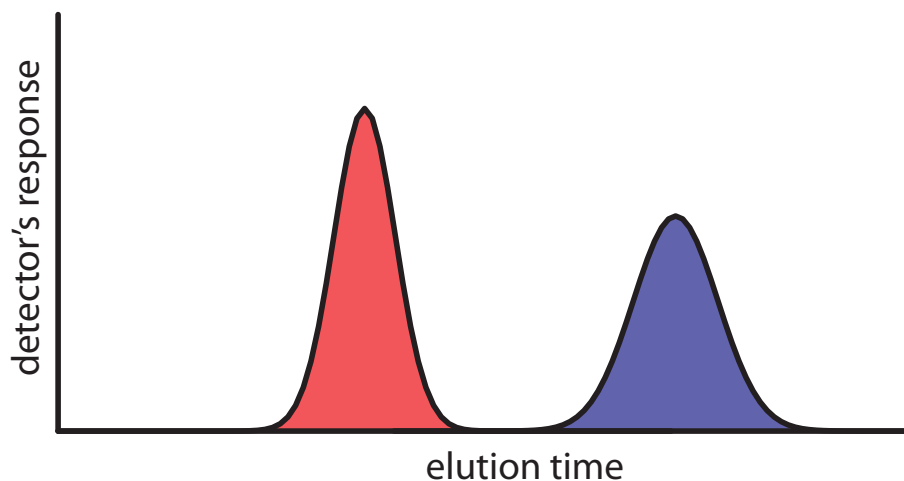


Figure 12.7 An alternative view of the separation in Figure 12.6 showing the concentration of each solute as a function of distance down the column.

Figure 12.8 Chromatogram for the separation shown in [Figure 12.6](#) and [Figure 12.7](#), showing the detector's response as a function of the elution time.



A solute's chromatographic peak may be characterized in many ways, two of which are shown in Figure 12.9. **RETENTION TIME**, t_r , is the time between the sample's injection and the maximum response for the solute's peak. Another important parameter is the **BASELINE WIDTH**, w , which, as shown in Figure 12.9, is determined by extending tangent lines from the inflection points on either side of the chromatographic peak through the baseline. Although usually we report t_r and w using units of time, we can report them using units of volume by multiplying each by the mobile phase's velocity, or in linear units by measuring distances with a ruler.

In addition to the peak for the solute, Figure 12.9 also shows a small peak that elutes shortly after injecting the sample into the mobile phase. This peak is for **NONRETAINED SOLUTES**. Because these solutes do not interact with the stationary phase, they move through the column at the same rate as the mobile phase. The time required to elute nonretained solutes is called the column's **VOID TIME**, t_m .

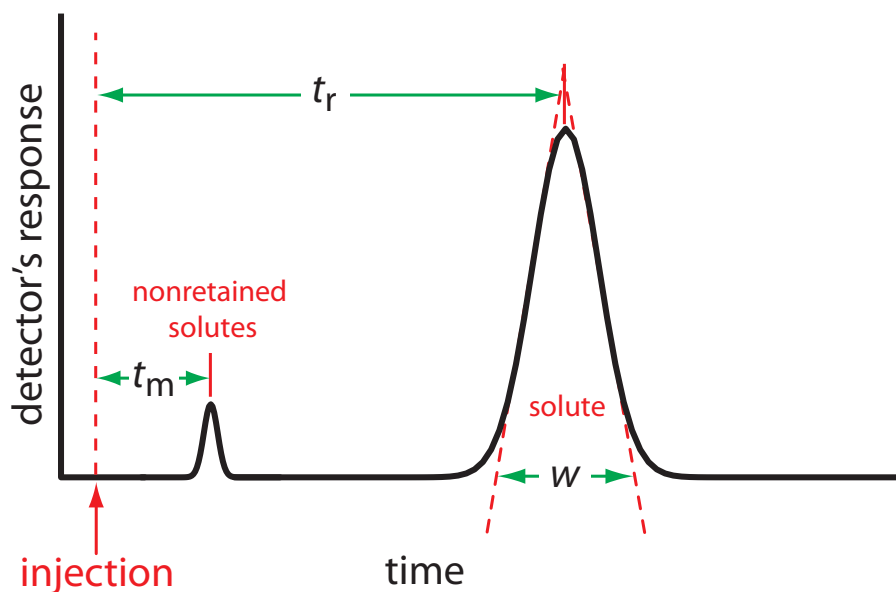


Figure 12.9 Chromatogram showing a solute's retention time, t_r , and baseline width, w , and the column's void time, t_m , for nonretained solutes.

For example, a solute's retention volume, V_r , is

$$V_r = t_r \times u$$

where u is the mobile phase's velocity through the column.

12B.1 Chromatographic Resolution

The goal of chromatography is to separate a mixture into a series of chromatographic peaks, each representing a single component of the mixture. The **RESOLUTION** between two chromatographic peaks, R_{AB} , is a quantitative measure of their separation, and is defined as

$$R_{AB} = \frac{t_{r,B} - t_{r,A}}{0.5(w_B + w_A)} = \frac{2\Delta t_r}{w_B + w_A} \quad 12.1$$

where B is the later eluting of the two solutes. As shown in Figure 12.10, the separation of two chromatographic peaks improves with an increase in R_{AB} . If the areas under the two peaks are identical—as is the case in Figure 12.10—then a resolution of 1.50 corresponds to an overlap of only 0.13% for the two elution profiles. Because resolution is a quantitative measure of a separation's success, it is a useful way to determine if a change in experimental conditions leads to a better separation.

Example 12.1

In a chromatographic analysis of lemon oil a peak for limonene has a retention time of 8.36 min with a baseline width of 0.96 min. γ -Terpinene elutes at 9.54 min with a baseline width of 0.64 min. What is the resolution between the two peaks?

SOLUTION

Using equation 12.1 we find that the resolution is

$$R_{AB} = \frac{2\Delta t_r}{w_B + w_A} = \frac{2(9.54 \text{ min} - 8.36 \text{ min})}{0.64 \text{ min} + 0.96 \text{ min}} = 1.48$$

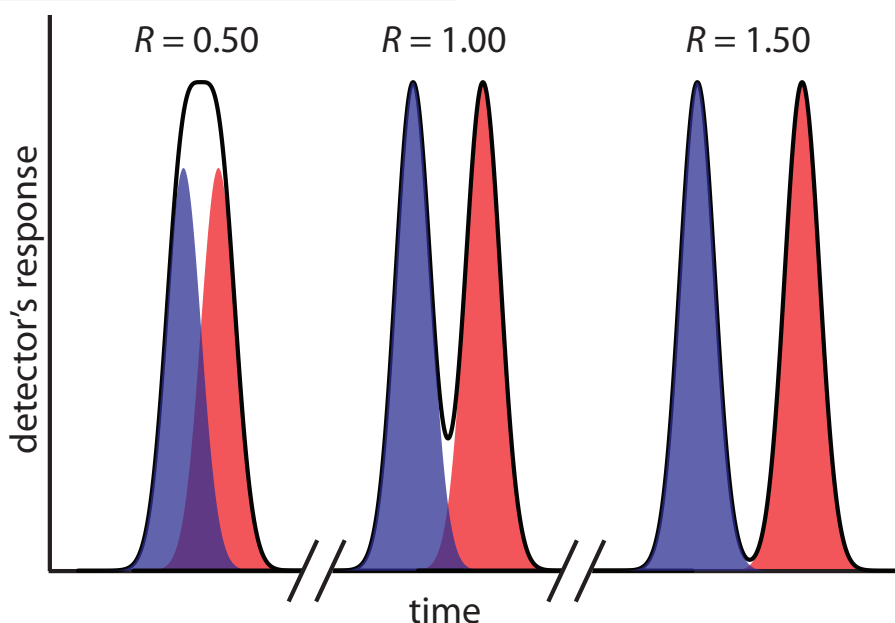


Figure 12.10 Three examples showing the relationship between resolution and the separation of a two component mixture. The blue and red peaks are the elution profiles for the two components. The chromatographic peak—which is the sum of the two elution profiles—is shown by the solid black line.

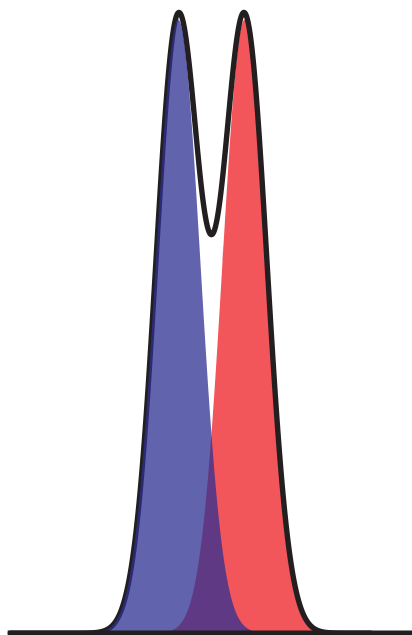


Figure 12.11 Chromatogram for Practice Exercise 12.1.

This is not a trivial assumption. In this section we are, in effect, treating the solute's equilibrium between the mobile phase and the stationary phase as if it is identical to the equilibrium in a liquid–liquid extraction. You might question whether this is a reasonable assumption.

There is an important difference between the two experiments we need to consider. In a liquid–liquid extraction, which takes place in a separatory funnel, the two phases remain in contact with each other at all times, allowing for a true equilibrium. In chromatography, however, the mobile phase is in constant motion. A solute moving into the stationary phase from the mobile phase equilibrates back into a different portion of the mobile phase; this does not describe a true equilibrium.

So, we ask again: Can we treat a solute's distribution between the mobile phase and the stationary phase as an equilibrium process? The answer is yes, if the mobile phase velocity is slow relative to the kinetics of the solute's moving back and forth between the two phase. In general, this is a reasonable assumption.

Figure 12.12 Two method for improving chromatographic resolution: (a) original chromatogram; (b) chromatogram after decreasing w_A and w_B by 4×; (c) chromatogram after increasing Δt_r by 2×.

Practice Exercise 12.1

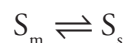
Figure 12.11 shows the separation of a two-component mixture. What is the resolution between the two components? Use a ruler to measure Δt_r , w_A , and w_B in millimeters.

Click [here](#) to review your answer to this exercise.

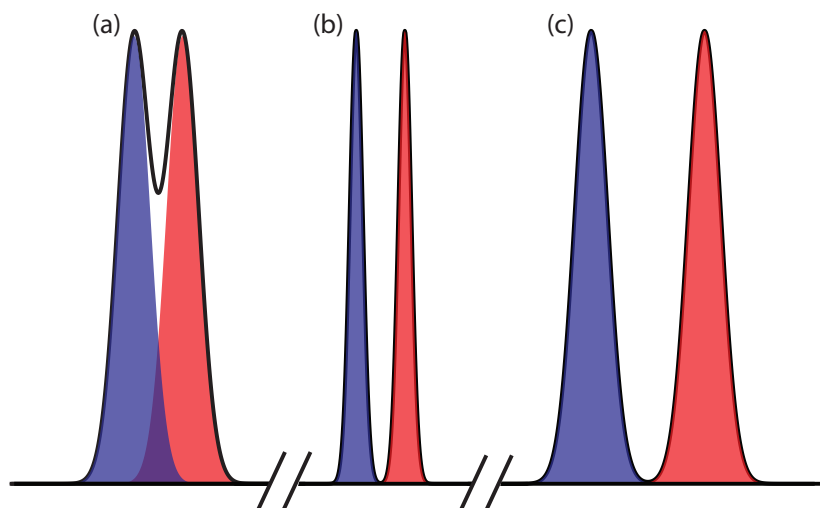
[Equation 12.1](#) suggests that we can improve resolution by increasing Δt_r , or by decreasing w_A and w_B (Figure 12.12). To increase Δt_r we can use one of two strategies. One approach is to adjust the separation conditions so that both solutes spend less time in the mobile phase—that is, we increase each *solute's retention factor*—which provides more time to effect a separation. A second approach is to increase *selectivity* by adjusting conditions so that only one solute experiences a significant change in its retention time. The baseline width of a solute's peak depends on the solutes movement within and between the mobile phase and the stationary phase, and is governed by several factors that we collectively call *column efficiency*. We will consider each of these approaches for improving resolution in more detail, but first we must define some terms.

12B.2 Solute Retention Factor

Let's assume that we can describe a solute's distribution between the mobile phase and stationary phase using the following equilibrium reaction



where S_m is the solute in the mobile phase and S_s is the solute in the stationary phase. Following the same approach that we used in [Section 7G.2](#) for liquid–liquid extractions, the equilibrium constant for this reaction is an equilibrium partition coefficient, K_D .



$$K_D = \frac{[S_s]}{[S_m]}$$

In the absence of any additional equilibrium reactions in the mobile phase or stationary phase, K_D is equivalent to the distribution ratio, D ,

$$D = \frac{[S_s]}{[S_m]} = \frac{(\text{mol } S)_s / V_s}{(\text{mol } S)_m / V_m} = K_D \quad 12.2$$

where V_s and V_m are the volumes of the stationary phase and the mobile phase, respectively.

A conservation of mass requires that the total moles of solute remain constant throughout the separation; thus, we know that the following equation is true.

$$(\text{mol } S)_{\text{total}} = (\text{mol } S)_m + (\text{mol } S)_s \quad 12.3$$

Solving equation 12.3 for the moles of solute in the stationary phase and substituting into equation 12.2 leaves us with

$$D = \frac{\{(\text{mol } S)_{\text{total}} - (\text{mol } S)_s\} / V_s}{(\text{mol } S)_m / V_m}$$

Rearranging this equation and solving for the fraction of solute in the mobile phase, f_m , gives a result

$$f_m = \frac{(\text{mol } S)_m}{(\text{mol } S)_{\text{total}}} = \frac{V_m}{DV_s + V_m} \quad 12.4$$

that is identical to [equation 7.26](#) for a liquid–liquid extraction. Because we may not know the exact volumes of the stationary phase and the mobile phase, we can simplify equation 12.4 by dividing both the numerator and the denominator by V_m ; thus

$$f_m = \frac{V_m / V_m}{DV_s / V_m + V_m / V_m} = \frac{1}{DV_s / V_m + 1} = \frac{1}{1 + k} \quad 12.5$$

where k

$$k = D \times \frac{V_s}{V_m} \quad 12.6$$

is the solute's **RETENTION FACTOR**. Note that the larger the retention factor, the more the distribution ratio favors the stationary phase, leading to a more strongly retained solute and a longer retention time.

We can determine a solute's retention factor from a chromatogram by measuring the column's void time, t_m , and the solute's retention time, t_r (see [Figure 12.9](#)). Solving equation 12.5 for k , we find that

The retention factor is also called the capacity factor, the capacity ratio, and the partition ratio, and is sometimes given the symbol k' . Keep this in mind if you are using other resources. Retention factor is the approved name from the [IUPAC Gold Book](#).

$$k = \frac{1 - f_m}{f_m} \quad 12.7$$

Earlier we defined f_m as the fraction of solute in the mobile phase. Assuming a constant mobile phase velocity, we also can define f_m as

$$f_m = \frac{\text{time spent in mobile phase}}{\text{total time spent on column}} = \frac{t_m}{t_r}$$

Substituting back into equation 12.7 and rearranging leaves us with

$$k = \frac{1 - \frac{t_m}{t_r}}{\frac{t_m}{t_r}} = \frac{t_r - t_m}{t_m} = \frac{t_r'}{t_m} \quad 12.8$$

where t_r' is the **ADJUSTED RETENTION TIME**.

Example 12.2

In a chromatographic analysis of low molecular weight acids, butyric acid elutes with a retention time of 7.63 min. The column's void time is 0.31 min. Calculate the retention factor for butyric acid.

SOLUTION

$$k_{\text{but}} = \frac{t_r - t_m}{t_m} = \frac{7.63 \text{ min} - 0.31 \text{ min}}{0.31 \text{ min}} = 23.6$$

Practice Exercise 12.2

Figure 12.13 is the chromatogram for a two-component mixture. Determine the retention factor for each solute assuming the sample was injected at time $t=0$.

Click [here](#) to review your answer to this exercise.

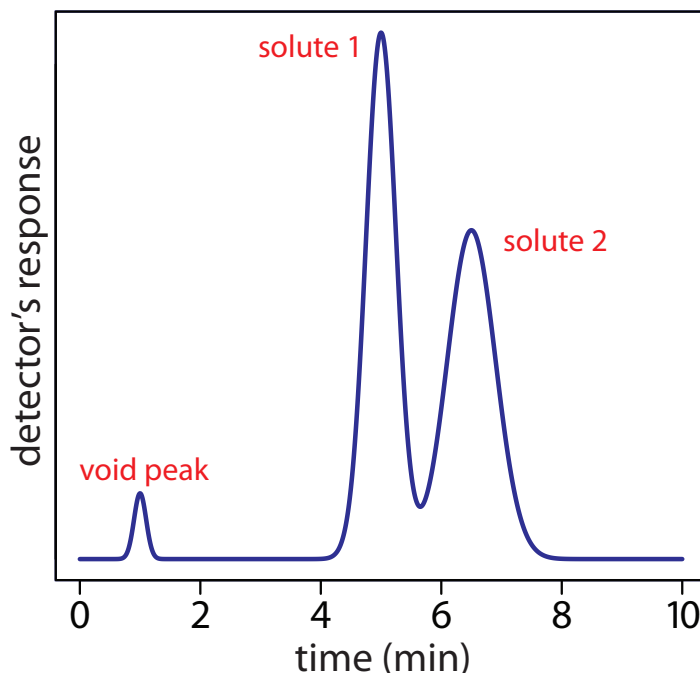


Figure 12.13 Chromatogram for Practice Exercise 12.2.

12B.3 Selectivity

Selectivity is a relative measure of the retention of two solutes, which we define using a **SELECTIVITY FACTOR**, α

$$\alpha = \frac{k_B}{k_A} = \frac{t_{r,B} - t_m}{t_{r,A} - t_m} \quad 12.9$$

where solute A always has the smaller retention time. When two solutes elute with identical retention time, $\alpha = 1.00$; for all other conditions $\alpha > 1.00$.

Example 12.3

In the chromatographic analysis for low molecular weight acids described in [Example 12.2](#), the retention time for isobutyric acid is 5.98 min. What is the selectivity factor for isobutyric acid and butyric acid?

SOLUTION

First we must calculate the retention factor for isobutyric acid. Using the void time from [Example 12.2](#).

$$k_{\text{iso}} = \frac{t_r - t_m}{t_m} = \frac{5.98 \text{ min} - 0.31 \text{ min}}{0.31 \text{ min}} = 18.3$$

The selectivity factor, therefore, is

$$\alpha = \frac{k_{\text{but}}}{k_{\text{iso}}} = \frac{23.6}{18.3} = 1.29$$

Practice Exercise 12.3

Determine the selectivity factor for the chromatogram in [Practice Exercise 12.2](#).

Click [here](#) to review your answer to this exercise.

12B.4 Column Efficiency

Suppose we inject a sample consisting of a single component. At the moment of injection the sample occupies a narrow band of finite width. As the sample passes through the column, the width of this band continually increases in a process we call **BAND BROADENING**. Column efficiency provides a quantitative measure of the extent of band broadening.

In their original theoretical model of chromatography, Martin and Synge divided the chromatographic column into discrete sections—what they called **THEORETICAL PLATES**—in which there is an equilibrium partitioning of the solute between the stationary phase and the mobile phase.² They described column efficiency in terms of the number of theoretical plates, N ,

See [Figure 12.6](#) and [Figure 12.7](#). When we inject the sample it has a uniform, or rectangular concentration profile with respect to distance down the column. As it passes through the column, the band broadens and takes on a Gaussian concentration profile.

² Martin, A. J. P.; Synge, R. L. M. *Biochem. J.* **1941**, *35*, 1358–1366.

$$N = \frac{L}{H} \quad 12.10$$

where L is the column's length and H is the height of a theoretical plate. Column efficiency improves—and chromatographic peaks become narrower—when there are more theoretical plates.

If we assume that a chromatographic peak has a Gaussian profile, then the extent of band broadening is given by the peak's variance or standard deviation. The height of a theoretical plate is the variance per unit length of the column

$$H = \frac{\sigma^2}{L} \quad 12.11$$

where the standard deviation, σ , has units of distance. Because retention times and peak widths are usually measured in seconds or minutes, it is more convenient to express the standard deviation in units of time, τ , by dividing σ by the solute's average linear velocity, \bar{v} .

The solute's average linear velocity is the distance it travels, L , divided by its retention time, t_r .

$$\tau = \frac{\sigma}{\bar{v}} = \frac{\sigma t_r}{L} \quad 12.12$$

For a Gaussian peak shape, the width at the baseline, w , is four times its standard deviation, τ .

$$w = 4\tau \quad 12.13$$

See [Figure 12.9](#) for a review of how to determine values for t_r and w .

Combining equation 12.11, equation 12.12, and equation 12.13 defines the height of a theoretical plate in terms of the easily measured chromatographic parameters t_r and w .

$$H = \frac{Lw^2}{16t_r^2} \quad 12.14$$

Combining equation 12.14 and equation 12.10 gives the number of theoretical plates.

$$N = 16 \frac{t_r^2}{w^2} \quad 12.15$$

Example 12.4

A chromatographic analysis for the chlorinated pesticide Dieldrin gives a peak with a retention time of 8.68 min and a baseline width of 0.29 min. What is the number of theoretical plates? Given that the column is 2.0 m long, what is the height of a theoretical plate in mm?

SOLUTION

Using equation 12.15, the number of theoretical plates is



$$N = 16 \frac{t_r^2}{w^2} = N = 16 \frac{(8.68 \text{ min})^2}{(0.29 \text{ min})^2} = 14\,300 \text{ plates}$$

Solving [equation 12.10](#) for H gives the average height of a theoretical plate as

$$H = \frac{L}{N} = \frac{2.0 \text{ m}}{14\,300 \text{ plates}} \times \frac{1000 \text{ mm}}{\text{m}} = 0.14 \text{ mm/plate}$$

Practice Exercise 12.4

For each solute in the chromatogram for [Practice Exercise 12.2](#), calculate the number of theoretical plates and the average height of a theoretical plate. The column is 0.5 m long.

Click [here](#) to review your answer to this exercise.

It is important to remember that a theoretical plate is an artificial construct and that a chromatographic column does not contain physical plates. In fact, the number of theoretical plates depends on both the properties of the column and the solute. As a result, the number of theoretical plates for a column may vary from solute to solute.

12B.5 Peak Capacity

One advantage of improving column efficiency is that we can separate more solutes with baseline resolution. One estimate of the number of solutes that we can separate is

$$n_c = 1 + \frac{\sqrt{N}}{4} \ln \frac{V_{\max}}{V_{\min}} \quad 12.16$$

where n_c is the column's **PEAK CAPACITY**, and V_{\min} and V_{\max} are the smallest and the largest volumes of mobile phase in which we can elute and detect a solute.³ A column with 10 000 theoretical plates, for example, can resolve no more than

$$n_c = 1 + \frac{\sqrt{10000}}{4} \ln \frac{30 \text{ mL}}{1 \text{ mL}} = 86 \text{ solutes}$$

if V_{\min} and V_{\max} are 1 mL and 30 mL, respectively. This estimate provides an upper bound on the number of solutes and may help us exclude from consideration a column that does not have enough theoretical plates to separate a complex mixture. Just because a column's theoretical peak capacity is larger than the number of solutes, however, does not mean that a separa-

The smallest volume we can use is the column's void volume. The largest volume is determined either by our patience—what is the maximum analysis time we can tolerate—or by our inability to detect solutes because there is too much band broadening.

³ Giddings, J. C. *Unified Separation Science*, Wiley-Interscience: New York, 1991.

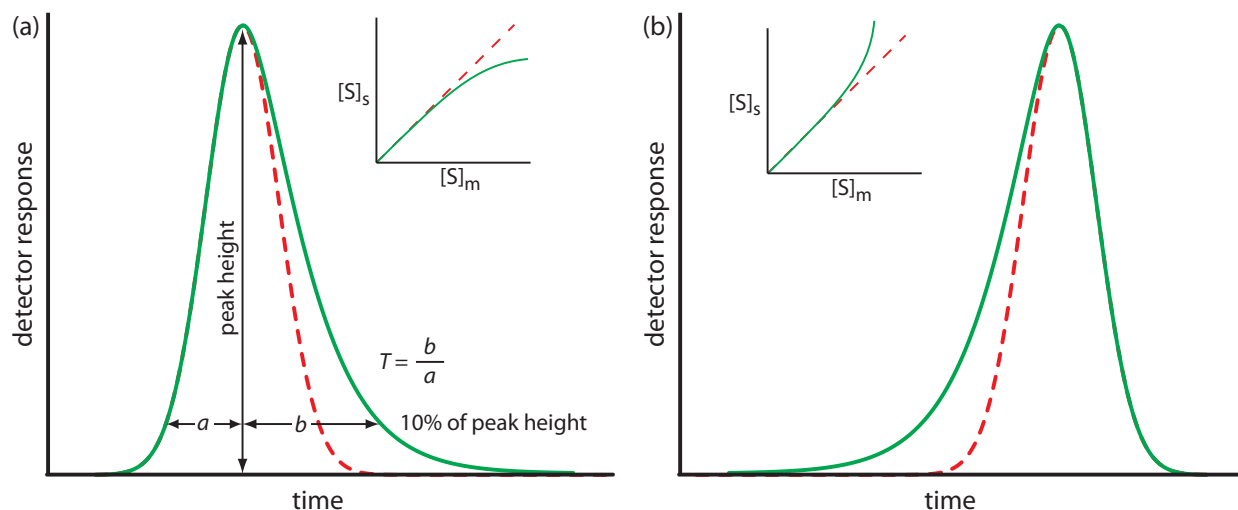


Figure 12.14 Examples of asymmetric chromatographic peaks showing (a) peak tailing and (b) peak fronting. For both (a) and (b) the green chromatogram is the asymmetric peak and the red dashed chromatogram shows the ideal, Gaussian peak shape. The insets show the relationship between the concentration of solute in the stationary phase, $[S]_s$, and its concentration in the mobile phase, $[S]_m$. The dashed red lines are for ideal behavior (K_D is constant for all conditions) and the green lines show nonideal behavior (K_D decreases or increases for higher total concentrations of solute). A quantitative measure of peak tailing, T , is shown in (a).

ration is feasible. In most situations the practical peak capacity is less than the estimated value because the retention characteristics of some solutes are so similar that a separation is impossible. Nevertheless, columns with more theoretical plates, or with a greater range of possible elution volumes, are more likely to separate a complex mixture.

12B.6 Asymmetric Peaks

Our treatment of chromatography in this section assumes that a solute elutes as a symmetrical Gaussian peak, such as that shown in [Figure 12.9](#). This ideal behavior occurs when the solute's partition coefficient, K_D

$$K_D = \frac{[S]_s}{[S]_m}$$

is the same for all concentrations of solute. If this is not the case, then the chromatographic peak has an asymmetric peak shape similar to those shown in [Figure 12.14](#). The chromatographic peak in [Figure 12.14a](#) is an example of peak **TAILING**, which occurs when some sites on the stationary phase retain the solute more strongly than other sites. [Figure 12.14b](#), which is an example of peak **FRONTING** is most often the result of overloading the column with sample.

As shown in [Figure 12.14a](#), we can report a peak's asymmetry by drawing a horizontal line at 10% of the peak's maximum height and measuring the distance from each side of the peak to a line drawn vertically through the peak's maximum. The asymmetry factor, T , is defined as

$$T = \frac{b}{a}$$

The number of theoretical plates for an asymmetric peak shape is approximately

$$N \approx \frac{41.7 \times \frac{t_r^2}{(w_{0.1})^2}}{T + 1.25} = \frac{41.7 \times \frac{t_r^2}{(a + b)^2}}{T + 1.25}$$

where $w_{0.1}$ is the width at 10% of the peak's height.⁴

Asymmetric peaks have fewer theoretical plates, and the more asymmetric the peak the smaller the number of theoretical plates. For example, the following table gives values for N for a solute eluting with a retention time of 10.0 min and a peak width of 1.00 min.

b	a	T	N
0.5	0.5	1.00	1850
0.6	0.4	1.50	1520
0.7	0.3	2.33	1160
0.8	0.2	4.00	790
0.9	0.1	9.00	410

12C Optimizing Chromatographic Separations

Now that we have defined the solute retention factor, selectivity, and column efficiency we are able to consider how they affect the resolution of two closely eluting peaks. Because the two peaks have similar retention times, it is reasonable to assume that their peak widths are nearly identical. [Equation 12.1](#), therefore, becomes

$$R_{AB} = \frac{t_{r,B} - t_{r,A}}{0.5(w_B + w_A)} \approx \frac{t_{r,B} - t_{r,A}}{0.5(2w_B)} = \frac{t_{r,B} - t_{r,A}}{w_B} \quad 12.17$$

where B is the later eluting of the two solutes. Solving [equation 12.15](#) for w_B and substituting into equation 12.17 leaves us with the following result.

$$R_{AB} = \frac{\sqrt{N}}{4} \times \frac{t_{r,B} - t_{r,A}}{t_{r,B}} \quad 12.18$$

Rearranging [equation 12.8](#) provides us with the following equations for the retention times of solutes A and B.

$$t_{r,A} = k_A t_m + t_m \qquad t_{r,B} = k_B t_m + t_m$$

After substituting these equations into equation 12.18 and simplifying, we have

$$R_{AB} = \frac{\sqrt{N}}{4} \times \frac{k_B - k_A}{1 + k_B}$$

Finally, we can eliminate solute A's retention factor by substituting in [equation 12.9](#). After rearranging, we end up with the following equation for the resolution between the chromatographic peaks for solutes A and B.

$$R_{AB} = \frac{\sqrt{N}}{4} \times \frac{\alpha - 1}{\alpha} \times \frac{k_B}{1 + k_B} \quad 12.19$$

If the number of theoretical plates is the same for all solutes—not strictly true, but not a bad assumption—then from [equation 12.15](#), the ratio t_r/w is a constant. If two solutes have similar retention times, then their peak widths must be similar.

⁴ Foley, J. P.; Dorsey, J. G. *Anal. Chem.* **1983**, *55*, 730–737.

In addition to resolution, another important factor in chromatography is the amount of time needed to elute a pair of solutes, which we can approximate using the retention time for solute B.

$$t_{r,B} = \frac{16R_{AB}^2 H}{u} \times \left(\frac{\alpha}{\alpha - 1} \right)^2 \times \frac{(1 + k_B)^3}{k_B^2} \quad 12.20$$

where u is the mobile phase's velocity.

[Equation 12.19](#) and equation 12.20 contain terms corresponding to column efficiency, selectivity, and the solute retention factor. We can vary these terms, more or less independently, to improve resolution and analysis time. The first term, which is a function of the number of theoretical plates (for [equation 12.19](#)) or the height of a theoretical plate (for equation 12.20), accounts for the effect of column efficiency. The second term is a function of α and accounts for the influence of column selectivity. Finally, the third term in both equations is a function of k_B and accounts for the effect of solute B's retention factor. A discussion of how we can use these parameters to improve resolution is the subject of the remainder of this section.

12C.1 Using the Retention factor to Optimize Resolution

One of the simplest ways to improve resolution is to adjust solute B's retention factor. If all other terms in [equation 12.19](#) remain constant, increasing k_B improves resolution. As shown by the green curve in Figure 12.15, however, the improvement is greatest if the initial value of k_B is small. Once k_B exceeds a value of approximately 10, a further increase produces only a marginal improvement in resolution. For example, if the original value of k_B is 1, increasing its value to 10 gives an 82% improvement in resolution; a further increase to 15 provides a net improvement in resolution of only 87.5%.

Any improvement in resolution by increasing the value of k_B generally comes at the cost of a longer analysis time. The red curve in Figure 12.15

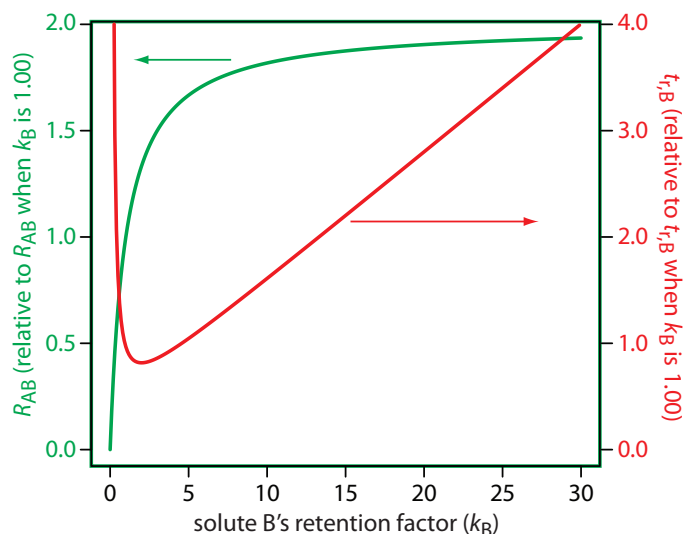


Figure 12.15 Effect of k_B on the resolution for a pair of solutes, R_{AB} , and the retention time for the later eluting solute, $t_{r,B}$. The y -axes display the resolution and retention time relative to their respective values when k_B is 1.00.

shows the relative change in solute B's retention time as a function of its retention factor. Note that the minimum retention time is for $k_B = 2$. Increasing k_B from 2 to 10, for example, approximately doubles solute B's retention time.

To increase k_B without significantly changing the selectivity, α , any change to the chromatographic conditions must result in a general, non-selective increase in the retention factor for both solutes. In gas chromatography, we can accomplish this by decreasing the column's temperature. Because a solute's vapor pressure is smaller at lower temperatures, it spends more time in the stationary phase and takes longer to elute. In liquid chromatography, the easiest way to increase a solute's retention factor is to use a mobile phase that is a weaker solvent. When the mobile phase has a lower solvent strength, solutes spend proportionally more time in the stationary phase and take longer to elute.

Adjusting the retention factor to improve the resolution between one pair of solutes may lead to unacceptably long retention times for other solutes. For example, suppose we need to analyze a four-component mixture with baseline resolution and with a run-time of less than 20 min. Our initial choice of conditions gives the chromatogram in Figure 12.16a. Although we successfully separate components 3 and 4 within 15 min, we fail to separate components 1 and 2. Adjusting the conditions to improve the resolution for the first two components by increasing $k_{B,2}$ provides a good separation of all four components, but the run-time is now too long (Figure 12.16b). This problem of finding a single set of acceptable operating conditions is known as the **GENERAL ELUTION PROBLEM**.

One solution to the general elution problem is to make incremental adjustments to the retention factor over time. Thus, we choose our initial chromatographic conditions to optimize the resolution for early eluting solutes. As the separation progresses, we adjust the chromatographic conditions to decrease k_B —and, therefore, decrease the retention time—for each of the later eluting solutes (Figure 12.16c). In gas chromatography this is accomplished by temperature programming. The column's initial temperature is selected such that the first solutes to elute are fully resolved. The temperature is then increased, either continuously or in steps, to bring off later eluting components with both an acceptable resolution and a reasonable analysis time. In liquid chromatography the same effect is obtained by increasing the solvent's eluting strength. This is known as a gradient elution. We will have more to say about each of these in later sections of this chapter.

12C.2 Using Selectivity to Optimize Resolution

A second approach to improving resolution is to adjust the selectivity, α . In fact, for $\alpha \approx 1$ it usually is not possible to improve resolution by adjusting the solute retention factor, k_B , or column efficiency, N . A change in α often has a more dramatic effect on resolution than a change in k_B . For example,

The relationship between retention factor and analysis time in Figure 12.15 works to our advantage if a separation produces an acceptable resolution with a large k_B . In this case we may be able to decrease k_B with little loss in resolution and with a significantly shorter analysis time.

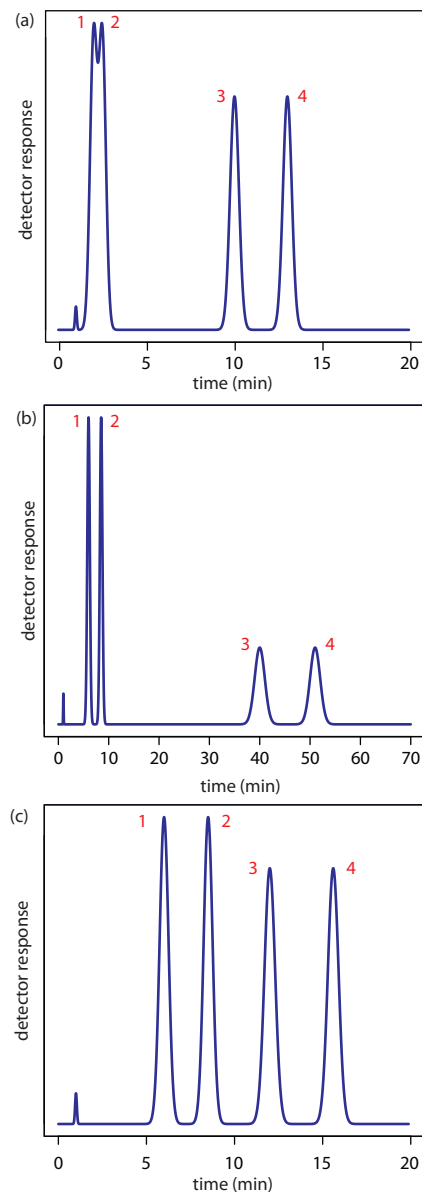


Figure 12.16 Example showing the general elution problem in chromatography. See text for details.

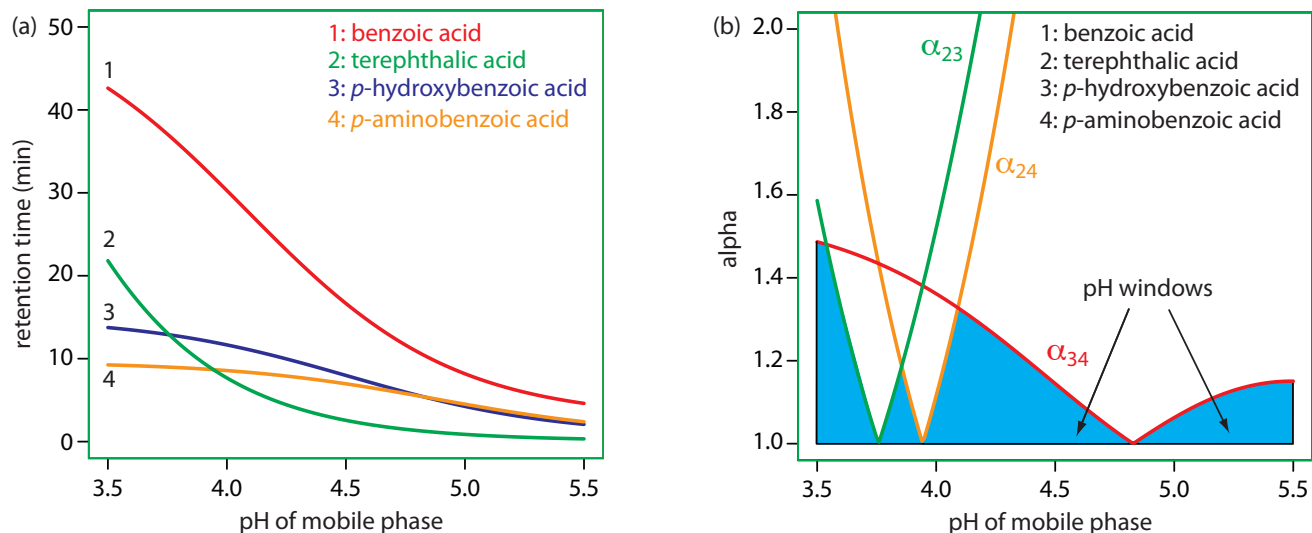
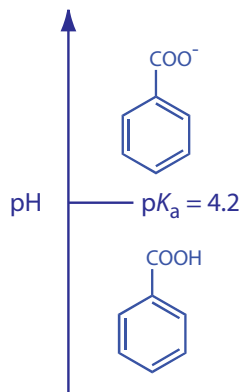


Figure 12.17 Example showing how the mobile phase pH in liquid chromatography affects selectivity: (a) retention times for four substituted benzoic acids as a function of the mobile phase's pH; (b) alpha values for three pairs of solutes that are difficult to separate. See text for details. The mobile phase is an acetic acid/sodium acetate buffer and the stationary phase is a nonpolar hydrocarbon. Data from Harvey, D. T.; Byerly, S.; Bowman, A.; Tomlin, J. "Optimization of HPLC and GC Separations Using Response Surfaces," *J. Chem. Educ.* **1991**, *68*, 162–168.

Let's use benzoic acid, C_6H_5COOH , to explain why pH can affect a solute's retention time. The separation uses an aqueous mobile phase and a nonpolar stationary phase. At lower pHs, benzoic acid is predominately in its weak acid form, C_6H_5COOH , and easily partitions into the nonpolar stationary phase. At more basic pHs, however, benzoic acid is in its weak base form, $C_6H_5COO^-$. Because it now carries a charge, its solubility in the mobile phase increases and its solubility in the nonpolar stationary phase decreases. As a result, it spends more time in the mobile phase and has a shorter retention time.



changing α from 1.1 to 1.5, while holding all other terms constant, improves resolution by 267%. In gas chromatography, we usually adjust α by changing the stationary phase, and we usually change the composition of the mobile phase in liquid chromatography.

To change α we need to selectively adjust individual solute retention factors. Figure 12.17 shows one possible approach for the liquid chromatographic separation of a mixture of substituted benzoic acids. Because the components are weak acids, their retention times vary with the pH of the mobile phase, as shown in Figure 12.17a. The intersections of these curves show pH values where two solutes co-elute. For example, at a pH of 3.8 terephthalic acid and *p*-hydroxybenzoic acid elute as a single chromatographic peak.

Figure 12.17a shows that there are many pH values where some separation is possible. To find the optimum separation, we plot α for each pair of solutes. The red, green, and orange curves in Figure 12.17b show the variation in α with pH for the three pairs of solutes that are hardest to separate (for all other pairs of solutes, $\alpha > 2$ at all pH levels). The blue shading shows windows of pH values in which at least a partial separation is possible—this figure is sometimes called a window diagram—and the highest point in each window gives the optimum pH within that range. The best overall separation is the highest point in any window, which, for this example, is a pH of 3.5. Because the analysis time at this pH is more than 40 min (see Figure 12.17a), choosing a pH between 4.1–4.4 might produce an acceptable separation with a much shorter analysis time.

Table 12.1 Minimum Number of Theoretical Plates to Achieve Desired Resolution for Selected Values of k_B and α

k_B	$R_{AB} = 1.00$		$R_{AB} = 1.25$		$R_{AB} = 1.50$	
	$\alpha = 1.05$	$\alpha = 1.10$	$\alpha = 1.05$	$\alpha = 1.10$	$\alpha = 1.05$	$\alpha = 1.10$
0.5	63500	17400	99200	27200	143000	39200
1.0	28200	7740	44100	12100	63500	17400
1.5	19600	5380	30600	8400	44100	12100
2.0	15900	4360	24800	6810	35700	9800
3.0	12500	3440	19600	5380	28200	7740
5.0	10200	2790	15900	4360	22900	6270
10.0	8540	2340	13300	3660	19200	5270

12C.3 Using Column Efficiency to Optimize Resolution

A third approach to improving resolution is to adjust the column's efficiency by increasing the number of theoretical plates, N . If we have values for k_B and α , then we can use [equation 12.19](#) to calculate the number of theoretical plates for any resolution. Table 12.1 provides some representative values. For example, if $\alpha = 1.05$ and $k_B = 2.0$, a resolution of 1.25 requires approximately 24 800 theoretical plates. If our column provides only 12 400 plates, half of what is needed, then a separation is not possible. How can we double the number of theoretical plates? The easiest way is to double the length of the column, although this also doubles the analysis time. A better approach is to cut the height of a theoretical plate, H , in half, providing the desired resolution without changing the analysis time. Even better, if we can decrease H by more than 50%, it may be possible to achieve the desired resolution with an even shorter analysis time by decreasing k_B or α .

To decrease the height of a theoretical plate we need to understand the experimental factors that affect band broadening. There are several theoretical treatments of band broadening. We will consider one approach that considers four contributions: variations in paths length, longitudinal diffusion, mass transfer in the stationary phase, and mass transfer in the mobile phase.

MULTIPLE PATHS: VARIATIONS IN PATH LENGTH

As solute molecules pass through the column they travel paths that differ in length. Because of this difference in path length, solute molecules entering the column at the same time, exit the column at different times. The result, as shown in [Figure 12.18](#), is band broadening. The contribution of **MULTIPLE PATHS** to the height of a theoretical plate, H_p , is

$$H_p = 2\lambda d_p \quad 12.21$$

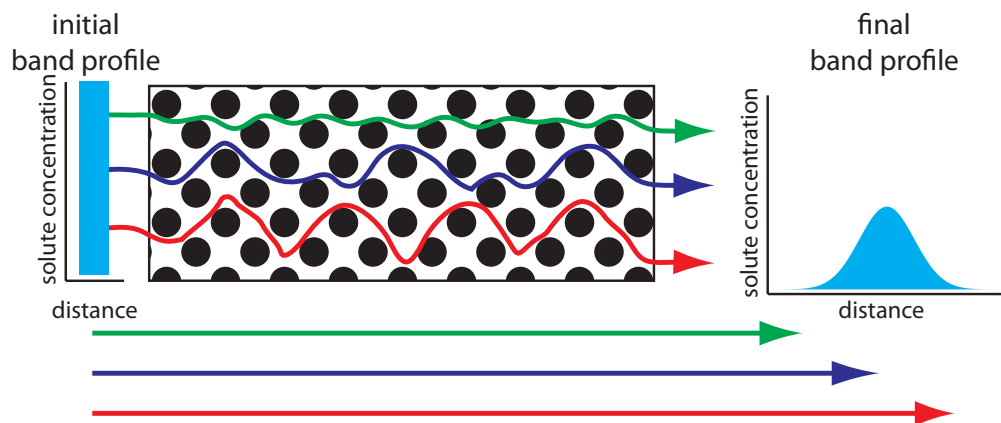


Figure 12.18 The effect of multiple paths on a solute's band broadening. The solute's initial band profile is rectangular. As this band travels through the column, individual solute molecules travel different paths, three of which are shown by the meandering colored paths (the actual lengths of these paths are shown by the straight arrows at the bottom of the figure). Most solute molecules travel paths with lengths similar to that shown in blue, with a few traveling much shorter paths (green) or much longer paths (red). As a result, the solute's band profile at the end of the column is broader and Gaussian in shape.

Inconsistent packing can produce channels through the column that allow some solute molecules to travel quickly through the column. It also can lead to pockets that can temporarily trap some solute molecules, slowing their progress through the column. A more uniform packing minimizes these two problems.

where d_p is the average diameter of the particulate packing material, and λ is a constant that accounts for the consistency of the packing. A smaller range of particle sizes and a more consistent packing produce a smaller value for λ . For a column without packing material, H_p is zero and there is no contribution to band broadening from multiple paths.

LONGITUDINAL DIFFUSION

The second contribution to band broadening is the result of the solute's **LONGITUDINAL DIFFUSION** in the mobile phase. Solute molecules are constantly in motion, diffusing from regions of higher solute concentration to regions where the concentration of solute is smaller. The result is an increase in the solute's band width (Figure 12.19). The contribution of longitudinal diffusion to the height of a theoretical plate, H_d , is

$$H_d = \frac{2\gamma D_m}{u} \quad 12.22$$

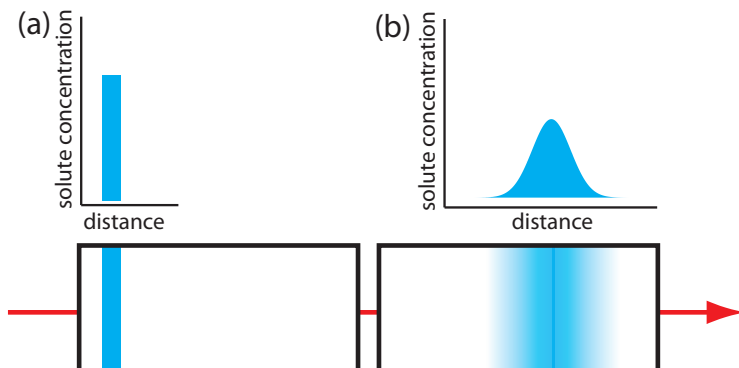


Figure 12.19 The effect of longitudinal diffusion on a solute's band broadening. Two horizontal cross-sections through the column and the corresponding concentration versus distance profiles are shown, with (a) being earlier in time. The red arrow shows the direction in which the mobile phase is moving.

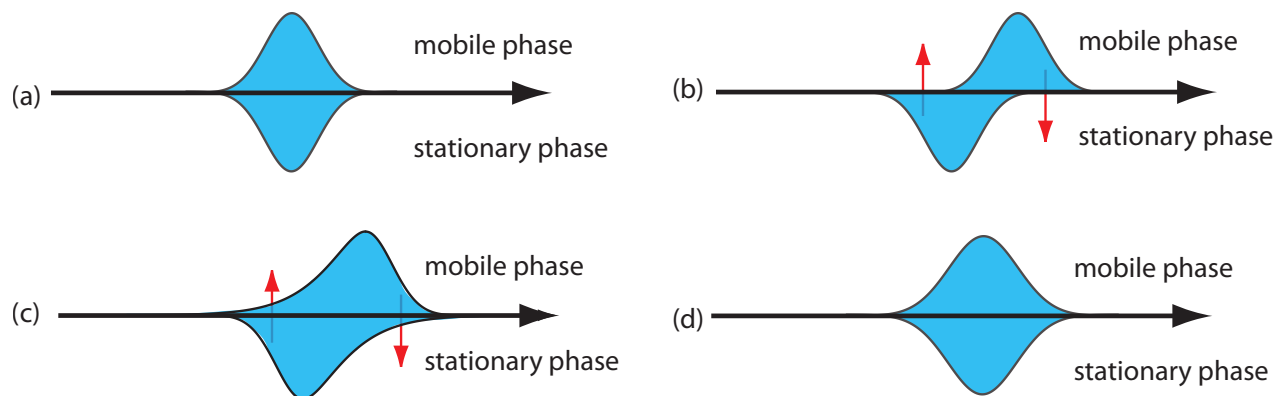


Figure 12.20 Effect of mass transfer on band broadening: (a) Ideal equilibrium Gaussian profiles for the solute in the mobile phase and in the stationary phase. (b, c) If we allow the solute's band to move a small distance down the column, an equilibrium between the two phases no longer exists. The red arrows show the movement of solute—what we call the mass transfer of solute—from the stationary phase to the mobile phase, and from the mobile phase to the stationary phase. (d) Once equilibrium is reestablished, the solute's band is now broader.

where D_m is the solute's diffusion coefficient in the mobile phase, u is the mobile phase velocity, and γ is a constant related to the efficiency of column packing. Note that the effect of H_d on band broadening is inversely proportional to the mobile phase velocity—a higher velocity provides less time for longitudinal diffusion. Because a solute's diffusion coefficient is larger in the gas phase than in a liquid phase, longitudinal diffusion is a more serious problem in gas chromatography.

MASS TRANSFER

As the solute passes through the column it moves between the mobile phase and the stationary phase. We call this movement between phases **MASS TRANSFER**. As shown in Figure 12.20, band broadening occurs if the solute's movement within the mobile phase or within the stationary phase is not fast enough to maintain an equilibrium partitioning of solute between the two phases. On average, solute molecules in the mobile phase move further down the column before passing into the stationary phase. Solute molecules in the stationary phase, on the other hand, take longer than expected to move back into the mobile phase. The contributions of mass transfer in the stationary phase, H_s , and mass transfer in the mobile phase, H_m , are given by the following equations

$$H_s = \frac{qkd_f^2}{(1+k)^2 D_s} u \quad 12.23$$

$$H_m = \frac{fn(d_p^2, d_c^2)}{D_m} u \quad 12.24$$

The abbreviation fn in equation 12.24 means "function of."

where d_f is the thickness of the stationary phase, d_c is the column's diameter, D_s and D_m are the solute's diffusion coefficient in the stationary phase and the mobile phase, k is the solute's retention factor, and q is a constant re-

lated to the column packing material. Although the exact form of H_m is not known, it is a function of particle size and column diameter. Note that the effect of H_s and H_m on band broadening is directly proportional to the mobile phase velocity—smaller velocities provide more time for mass transfer.

PUTTING IT ALL TOGETHER

The height of a theoretical plate is a summation of the contributions from each of the terms affecting band broadening.

$$H = H_p + H_d + H_s + H_m \quad 12.25$$

An alternative form of this equation is the **VAN DEEMTER EQUATION**

$$H = A + \frac{B}{u} + Cu \quad 12.26$$

which emphasizes the importance of the mobile phase's velocity. In the van Deemter equation, A accounts for the contribution of multiple paths (H_p), B/u for the contribution of longitudinal diffusion (H_d), and Cu for the combined contribution of mass transfer in the stationary phase and mobile phase (H_s and H_m).

There is some disagreement on the best equation for describing the relationship between plate height and mobile phase velocity.⁵ In addition to the van Deemter equation, other equations include

$$H = \frac{B}{u} + (C_s + C_m)u$$

where C_s and C_m are the mass transfer terms for the stationary phase and the mobile phase and

$$H = Au^{1/3} + \frac{B}{u} + Cu$$

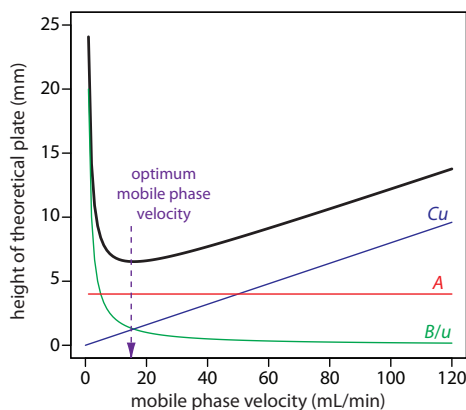


Figure 12.21 Plot showing the relationship between the height of a theoretical plate, H , and the mobile phase's velocity, u , based on the van Deemter equation.

All three equations, and others, have been used to characterize chromatographic systems, with no single equation providing the best explanation in every case.⁶

To increase the number of theoretical plates without increasing the length of the column we need to decrease one or more of the terms in equation 12.25. The easiest way to decrease H is by adjusting the velocity of the mobile phase. For smaller mobile phase velocities, column efficiency is limited by longitudinal diffusion, and at higher velocities efficiency is limited by the two mass transfer terms. As shown in Figure 12.21—which uses the van Deemter equation—the optimum mobile phase velocity is the minimum in a plot of H as a function of u .

The remaining parameters affecting the terms in equation 12.25 are **functions of the column's properties** and suggest other possible approaches

5 Hawkes, S. J. *J. Chem. Educ.* **1983**, *60*, 393–398.

6 Kennedy, R. T.; Jorgenson, J. W. *Anal. Chem.* **1989**, *61*, 1128–1135.

to improving column efficiency. For example, both H_p and H_m are a function of the size of the particles used for packing the column. Decreasing particle size, therefore, is another useful method for improving efficiency.

Perhaps the most important advancement in chromatography columns is the development of open-tubular, or **CAPILLARY COLUMNS**. These columns have very small diameters ($d_c \approx 50\text{--}500\ \mu\text{m}$) and contain no packing material ($d_p = 0$). Instead, the interior wall of a capillary column is coated with a thin film of the stationary phase. Plate height is reduced because the contribution to H from H_p (equation 12.21) disappears and the contribution from H_m (equation 12.24) becomes smaller. Because the column does not contain any solid packing material, it takes less pressure to move the mobile phase through the column, allowing for much longer columns. The combination of a longer column and a smaller height for a theoretical plate increases the number of theoretical plates by approximately $100\times$. Capillary columns are not without disadvantages. Because they are much narrower than packed columns, they require a significantly smaller amount of sample, which may be difficult to inject reproducibly. Another approach to improving resolution is to use thin films of stationary phase, which decreases the contribution to H from H_s (equation 12.23).

The smaller the particles, the more pressure is needed to push the mobile phase through the column. As a result, for any form of chromatography there is a practical limit to particle size.

12D Gas Chromatography

In **GAS CHROMATOGRAPHY** (GC) we inject the sample, which may be a gas or a liquid, into a gaseous mobile phase (often called the carrier gas). The mobile phase carries the sample through a packed or capillary column that separates the sample's components based on their ability to partition between the mobile phase and the stationary phase. Figure 12.22 shows an example of a typical gas chromatograph, which consists of several key




Figure 12.22 Example of a typical gas chromatograph with insets showing the heated injection ports—note the symbol indicating that it is hot—and the oven containing the column. This particular instrument is equipped with an autosampler for injecting samples, a capillary column, and a mass spectrometer (MS) as the detector. Note that the carrier gas is supplied by a tank of compressed gas.

components: a supply of compressed gas for the mobile phase; a heated injector, which rapidly volatilizes the components in a liquid sample; a column, which is placed within an oven whose temperature we can control during the separation; and a detector for monitoring the eluent as it comes off the column. Let's consider each of these components.

12D.1 Mobile Phase

The most common mobile phases for gas chromatography are He, Ar, and N₂, which have the advantage of being chemically inert toward both the sample and the stationary phase. The choice of carrier gas is often determined by the instrument's detector. For a packed column the mobile phase velocity is usually 25–150 mL/min. The typical flow rate for a capillary column is 1–25 mL/min.

12D.2 Chromatographic Columns

There are two broad classes of chromatographic columns: packed columns and capillary columns. In general, a packed column can handle larger samples and a capillary column can separate more complex mixtures.

PACKED COLUMNS

PACKED COLUMNS are constructed from glass, stainless steel, copper, or aluminum, and are typically 2–6 m in length with internal diameters of 2–4 mm. The column is filled with a particulate solid support, with particle diameters ranging from 37–44 μm to 250–354 μm. Figure 12.23 shows a typical example of a packed column.


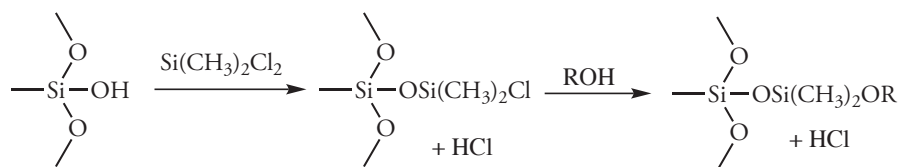


Figure 12.23 Typical example of a packed column for gas chromatography. This column is made from stainless steel and is 2 m long with an internal diameter of 3.2 mm. The packing material in this column has a particle diameter of 149–177 μm. To put this in perspective, beach sand has a typical diameter of 700 μm and the diameter of fine grained sand is 250 μm.

The most widely used particulate support is diatomaceous earth, which is composed of the silica skeletons of diatoms. These particles are very porous, with surface areas ranging from 0.5–7.5 m²/g, providing ample contact between the mobile phase and the stationary phase. When hydrolyzed, the surface of a diatomaceous earth contains silanol groups (–SiOH), which serve as active sites for absorbing solute molecules in **GAS-SOLID CHROMATOGRAPHY** (GSC).

In **GAS-LIQUID CHROMATOGRAPHY** (GLC), we coat the packing material with a liquid mobile phase. To prevent any uncoated packing material from adsorbing solutes, which degrades the quality of the separation, the surface silanols are deactivated by reacting them with dimethyldichlorosilane and rinsing with an alcohol—typically methanol—before coating the particles with stationary phase.



Other types of solid supports include glass beads and fluorocarbon polymers, which have the advantage of being more inert than diatomaceous earth.

To minimize the effect on plate height from multiple path and mass transfer, the diameter of the packing material should be as small as possible (see [equation 12.21](#) and 12.25) and loaded with a thin film of stationary phase (see [equation 12.23](#)). Compared to capillary columns, which are discussed below, a packed column can handle larger sample volumes, typically 0.1–10 μL . Column efficiencies range from several hundred to 2000 plates/m, with a typical column having 3000–10 000 theoretical plates. The column in [Figure 12.23](#), for example, has approximately 1800 plates/m, or a total of approximately 3600 theoretical plates. If we assume a $V_{\text{max}}/V_{\text{min}} \approx 50$, then it has a peak capacity of

$$n_c = 1 + \frac{\sqrt{3600}}{4} \ln(50) \approx 60$$

CAPILLARY COLUMNS

A capillary, or **OPEN TUBULAR COLUMN** is constructed from fused silica and is coated with a protective polymer coating. Columns range from 15–100 m in length with an internal diameter of approximately 150–300 μm . [Figure 12.24](#) shows a typical example of a capillary column.

Capillary columns are of three principle types. In a **WALL-COATED OPEN TUBULAR COLUMN** (WCOT) a thin layer of stationary phase, typically 0.25 μm thick, is coated on the capillary's inner wall. In a **POROUS-LAYER OPEN TUBULAR COLUMN** (PLOT), a porous solid support—alumina, silica gel, and molecular sieves are typical examples—is attached to the capillary's inner wall. A **SUPPORT-COATED OPEN TUBULAR COLUMN** (SCOT) is a PLOT column that includes a liquid stationary phase. [Figure 12.25](#) shows the differences between these types of capillary columns.

A capillary column provides a significant improvement in separation efficiency because it has more theoretical plates per meter and is longer than a packed column. For example, the capillary column in [Figure 12.24](#) has almost 4300 plates/m, or a total of 129 000 theoretical plates. If we assume a $V_{\text{max}}/V_{\text{min}} \approx 50$, then it has a peak capacity of approximately 350. On the other hand, a packed column can handle a larger sample. Because of its smaller diameter, a capillary column requires a smaller sample, typically less than 10^{-2} μL .

STATIONARY PHASES FOR GAS–LIQUID CHROMATOGRAPHY

Elution order in gas–liquid chromatography depends on two factors: the boiling point of the solutes, and the interaction between the solutes and the stationary phase. If a mixture's components have significantly different boiling points, then the choice of stationary phase is less critical. If two

You can use [equation 12.16](#) to estimate a column's peak capacity.




Figure 12.24 Typical example of a capillary column for gas chromatography. This column is 30 m long with an internal diameter of 247 μm . The interior surface of the capillary has a 0.25 μm coating of the liquid phase.

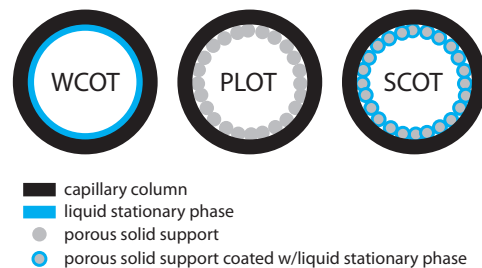


Figure 12.25 Cross-sections through the three types of capillary columns.

Table 12.2 Selected Examples of Stationary Phases for Gas–Liquid Chromatography

stationary phase	polarity	trade name	temperature limit (°C)	representative applications
squalane	nonpolar	Squalane	150	low-boiling aliphatics hydrocarbons
Apezion L	nonpolar	Apezion L	300	amides, fatty acid methyl esters, terpenoids
polydimethyl siloxane	slightly polar	SE-30	300–350	alkaloids, amino acid derivatives, drugs, pesticides, phenols, steroids
phenylmethyl polysiloxane (50% phenyl, 50% methyl)	moderately polar	OV-17	375	alkaloids, drugs, pesticides, polyaromatic hydrocarbons, polychlorinated biphenyls
trifluoropropylmethyl polysiloxane (50% trifluoropropyl, 50% methyl)	moderately polar	OV-210	275	alkaloids, amino acid derivatives, drugs, halogenated compounds, ketones
cyanopropylphenylmethyl polysiloxane (50% cyanopropyl, 50% phenylmethyl)	polar	OV-225	275	nitriles, pesticides, steroids
polyethylene glycol	polar	Carbowax 20M	225	aldehydes, esters, ethers, phenols

solutes have similar boiling points, however, then a separation is possible only if the stationary phase selectively interacts with one of the solutes. As a general rule, nonpolar solutes are more easily separated with a nonpolar stationary phase, and polar solutes are easier to separate when using a polar stationary phase.

There are several important criteria for choosing a stationary phase: it must not react chemically with the solutes, it must be thermally stable, it must have a low volatility, and it must have a polarity that is appropriate for the sample's components. Table 12.2 summarizes the properties of several popular stationary phases.

Many stationary phases have the general structure shown in Figure 12.26a. A stationary phase of polydimethyl siloxane, in which all the $-R$ groups are methyl groups, $-\text{CH}_3$, is nonpolar and often makes a good first choice for a new separation. The order of elution when using polydimethyl siloxane usually follows the boiling points of the solutes, with lower boiling solutes eluting first. Replacing some of the methyl groups with other substituents increases the stationary phase's polarity and provides greater selectivity. For example, replacing 50% of the $-\text{CH}_3$ groups with phenyl groups, $-\text{C}_6\text{H}_5$, produces a slightly polar stationary phase. Increasing polar-

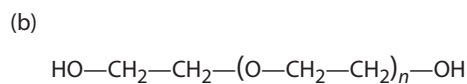
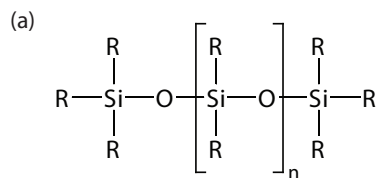


Figure 12.26 General structures of common stationary phases: (a) substituted polysiloxane; (b) polyethylene glycol.

ity is provided by substituting trifluoropropyl, $-\text{C}_3\text{H}_6\text{CF}_3$, and cyanopropyl, $-\text{C}_3\text{H}_6\text{CN}$, functional groups, or by using a stationary phase of polyethylene glycol (Figure 12.26b).

An important problem with all liquid stationary phases is their tendency to elute, or **BLEED** from the column when it is heated. The temperature limits in Table 12.2 minimize this loss of stationary phase. Capillary columns with bonded or cross-linked stationary phases provide superior stability. A bonded stationary phase is chemically attached to the capillary's silica surface. Cross-linking, which is done after the stationary phase is in the capillary column, links together separate polymer chains, providing greater stability.

Another important consideration is the thickness of the stationary phase. From equation 12.23 we know that separation efficiency improves with thinner films of stationary phase. The most common thickness is $0.25\ \mu\text{m}$, although a thicker films may be used for highly volatile solutes, such as gases, because it has a greater capacity for retaining such solutes. Thinner films are used when separating low volatility solutes, such as steroids.

A few stationary phases take advantage of chemical selectivity. The most notable are stationary phases containing chiral functional groups, which can be used for separating enantiomers.⁷

12D.3 Sample Introduction

Three considerations determine how we introduce a sample to the gas chromatograph. First, all of the sample's constituents must be volatile. Second, the analytes must be present at an appropriate concentration. Finally, the physical process of injecting the sample must not degrade the separation.

PREPARING A VOLATILE SAMPLE

Not every sample can be injected directly into a gas chromatograph. To move through the column, the sample's constituents must be volatile. A solute of low volatility may be retained by the column and continue to elute during the analysis of subsequent samples. A nonvolatile solute will condense at the top of the column, degrading the column's performance.

We can separate a sample's volatile analytes from its nonvolatile components using any of the extraction techniques described in Chapter 7. A liquid–liquid extraction of analytes from an aqueous matrix into methylene chloride or another organic solvent is a common choice. Solid-phase extractions also are used to remove a sample's nonvolatile components.

An attractive approach to isolating analytes is a **SOLID-PHASE MICROEXTRACTION** (SPME). In one approach, which is illustrated in Figure 12.27, a fused-silica fiber is placed inside a syringe needle. The fiber, which is coated with a thin film of an adsorbent, such as polydimethyl siloxane, is lowered into the sample by depressing a plunger and is exposed to the sample for

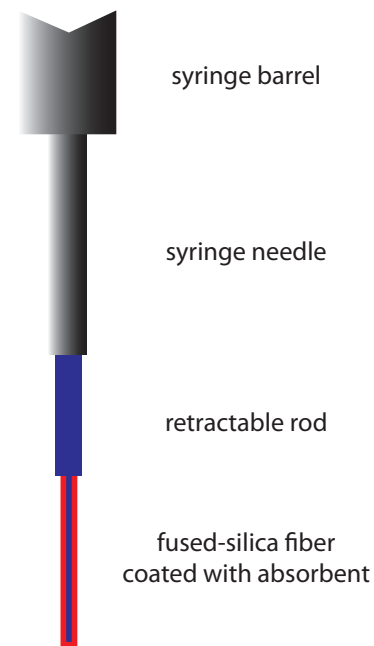


Figure 12.27 Schematic diagram of a solid-phase microextraction device.

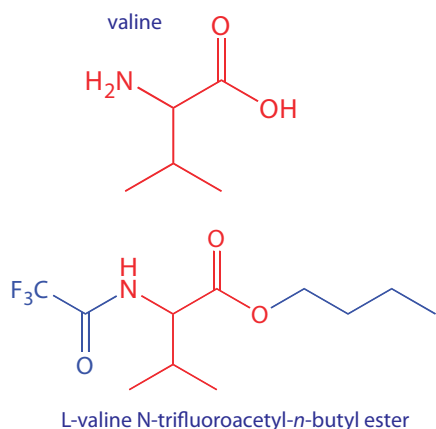
⁷ Hinshaw, J. V. *LC•GC* **1993**, *11*, 644–648.

a predetermined time. After withdrawing the fiber into the needle, it is transferred to the gas chromatograph for analysis.

Two additional methods for isolating volatile analytes are a purge-and-trap and headspace sampling. In a **PURGE-AND-TRAP** (see [Figure 7.25](#) in Chapter 7), we bubble an inert gas, such as He or N₂, through the sample, releasing—or purging—the volatile compounds. These compounds are carried by the purge gas through a trap containing an absorbent material, such as Tenax, where they are retained. Heating the trap and back-flushing with carrier gas transfers the volatile compounds to the gas chromatograph. In **HEADSPACE SAMPLING** we place the sample in a closed vial with an overlying air space. After allowing time for the volatile analytes to equilibrate between the sample and the overlying air, we use a syringe to extract a portion of the vapor phase and inject it into the gas chromatograph. Alternatively, we can sample the headspace with an SPME.

Thermal desorption is a useful method for releasing volatile analytes from solids. We place a portion of the solid in a glass-lined, stainless steel tube. After purging with carrier gas to remove any O₂ that might be present, we heat the sample. Volatile analytes are swept from the tube by an inert gas and carried to the GC. Because volatilization is not a rapid process, the volatile analytes are often concentrated at the top of the column by cooling the column inlet below room temperature, a process known as **CRYOGENIC FOCUSING**. Once the volatilization is complete, the column inlet is rapidly heated, releasing the analytes to travel through the column.

To analyze a nonvolatile analyte we must chemically convert it to a volatile form. For example, amino acids are not sufficiently volatile to analyze directly by gas chromatography. Reacting an amino acid with 1-butanol and acetyl chloride produces an esterified amino acid. Subsequent treatment with trifluoroacetic acid gives the amino acid's volatile N-trifluoroacetyl-*n*-butyl ester derivative.



ADJUSTING THE ANALYTE'S CONCENTRATION

If an analyte's concentration is too small to give an adequate signal, then it needs to be concentrated before injecting the sample into the gas chromatograph. A side benefit of many extraction methods is that they often concentrate the analytes. Volatile organic materials isolated from an aqueous sample by a purge-and-trap, for example, may be concentrated by as much as 1000×.

If an analyte is too concentrated it is easy to overload the column, resulting in peak fronting (see [Figure 12.14](#)) and a poor separation. In addition, the analyte's concentration may exceed the detector's linear response. Injecting less sample or diluting the sample with a volatile solvent, such as methylene chloride, are two possible solutions to this problem.

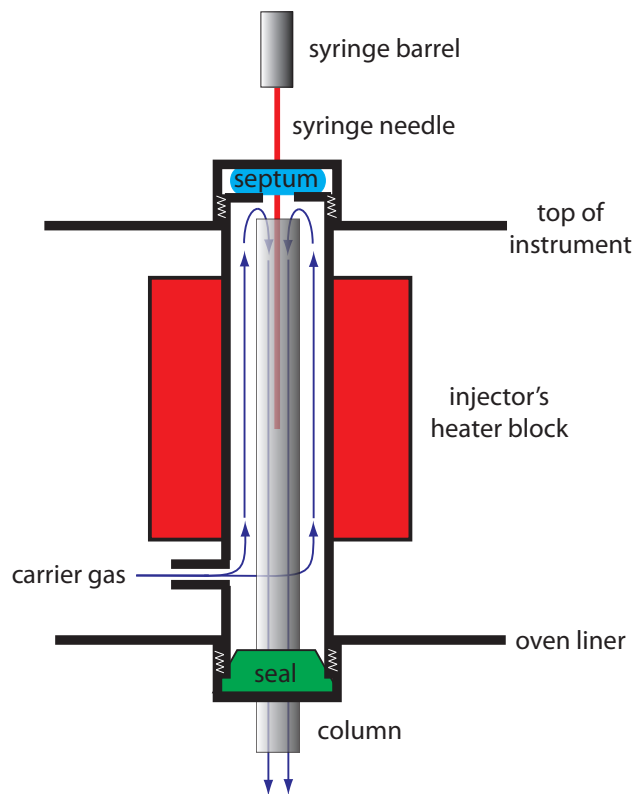


Figure 12.28 Schematic diagram showing a heated GC injector port for use with packed columns. The needle pierces a rubber septum and enters into the top of the column, which is located within a heater block.

INJECTING THE SAMPLE

In Section 12C.3 we examined several explanations for why a solute's band increases in width as it passes through the column, a process we called band broadening. We also introduce an additional source of band broadening if we fail to inject the sample into the minimum possible volume of mobile phase. There are two principal sources of this precolumn band broadening: injecting the sample into a moving stream of mobile phase and injecting a liquid sample instead of a gaseous sample. The design of a gas chromatograph's injector helps minimize these problems.

An example of a simple injection port for a packed column is shown in Figure 12.28. The top of the column fits within a heated injector block, with carrier gas entering from the bottom. The sample is injected through a rubber septum using a microliter syringe such as the one shown in Figure 12.29. Injecting the sample directly into the column minimizes band broadening by mixing the sample with the smallest possible amount of carrier gas. The injector block is heated to a temperature that is at least 50°C above the sample component with the highest boiling point, ensuring a rapid vaporization of the sample's components.

Because a capillary column's volume is significantly smaller than that for a packed column, it requires a different style of injector to avoid over-



Figure 12.29 Example of a syringe for injecting samples into a gas chromatograph. This syringe has a maximum capacity of 10 μL with graduations every 0.1 μL .

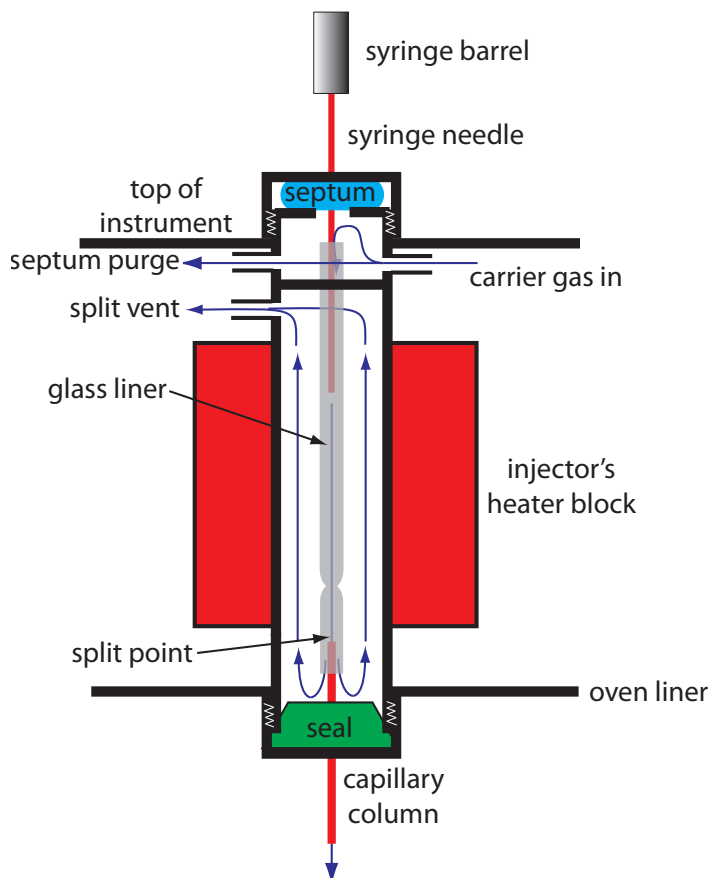


Figure 12.30 Schematic diagram showing a split/splitless injection port for use with capillary columns. The needle pierces a rubber septum and enters into a glass liner, which is located within a heater block. In a split injection the split vent is open; the split vent is closed for a splitless injection.

loading the column with sample. Figure 12.30 shows a schematic diagram of a typical split/splitless injector for use with capillary columns.

In a **SPLIT INJECTION** we inject the sample through a rubber septum using a microliter syringe. Instead of injecting the sample directly into the column, it is injected into a glass liner where it mixes with the carrier gas. At the split point, a small fraction of the carrier gas and sample enters the capillary column with the remainder exiting through the split vent. By controlling the flow rate of the carrier gas entering the injector, and the flow rates through the septum purge and the split vent, we can control what fraction of the sample enters the capillary column, typically 0.1–10%.

In a **SPLITLESS INJECTION**, which is useful for trace analysis, we close the split vent and allow all the carrier gas passing through the glass liner to enter the column—this allows virtually all the sample to enter the column. Because the flow rate through the injector is low, significant precolumn band broadening is a problem. Holding the column's temperature approximately 20–25 °C below the solvent's boiling point allows the solvent to condense at the entry to the capillary column, forming a barrier that traps the solutes. After allowing the solutes to concentrate, the column's temperature is increased and the separation begins.

For samples that decompose easily, an **ON-COLUMN INJECTION** may be necessary. In this method the sample is injected directly into the column

For example, if the carrier gas flow rate is 50 mL/min, and the flow rates for the septum purge and the split vent are 2 mL/min and 47 mL/min, respectively, then the flow rate through the column is 1 mL/min ($=50-2-46$). The ratio of sample entering the column is 1/50, or 2%.

without heating. The column temperature is then increased, volatilizing the sample with as low a temperature as is practical.

12D.4 Temperature Control

Control of the column's temperature is critical to attaining a good separation in gas chromatography. For this reason the column is placed inside a thermostated oven (see [Figure 12.22](#)). In an **ISOTHERMAL** separation we maintain the column at a constant temperature. To increase the interaction between the solutes and the stationary phase, the temperature usually is set slightly below that of the lowest-boiling solute.

One difficulty with an isothermal separation is that a temperature favoring the separation of a low-boiling solute may lead to an unacceptably long retention time for a higher-boiling solute. **TEMPERATURE PROGRAMMING** provide a solution to this problem. At the beginning of the analysis we set the column's initial temperature below that for the lowest-boiling solute. As the separation progresses, we slowly increase the temperature at either a uniform rate or in a series of steps.

You may recall that we called this the general elution problem (see [Figure 12.16](#)).

12D.5 Detectors for Gas Chromatography

The final part of a gas chromatograph is the detector. The ideal detector has several desirable features, including: a low detection limit, a linear response over a wide range of solute concentrations (which makes quantitative work easier), sensitivity for all solutes or selectivity for a specific class of solutes, and an insensitivity to a change in flow rate or temperature.

THEMAL CONDUCTIVITY DETECTOR (TCD)

One of the earliest gas chromatography detectors takes advantage of the mobile phase's thermal conductivity. As the mobile phase exits the column it passes over a tungsten-rhenium wire filament (see [Figure 12.31](#)). The filament's electrical resistance depends on its temperature, which, in turn, depends on the thermal conductivity of the mobile phase. Because of its high thermal conductivity, helium is the mobile phase of choice when using a **THEMAL CONDUCTIVITY DETECTOR** (TCD).

When a solute elutes from the column, the thermal conductivity of the mobile phase in the TCD cell decreases and the temperature of the wire

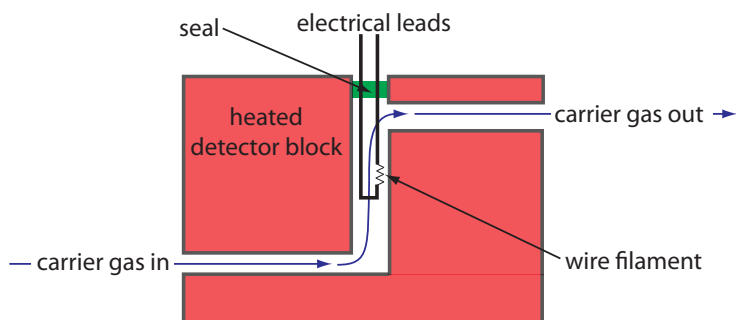


Figure 12.31 Schematic diagram showing a thermal conductivity detector. This is one cell of a matched pair. The sample cell takes the carrier gas as it elutes from the column. A source of carrier gas that bypasses the column passes through a reference cell.

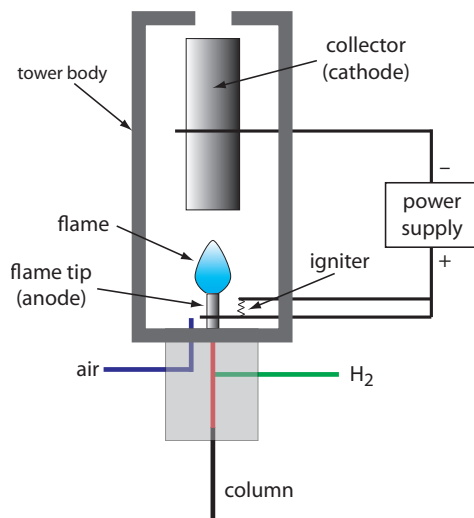


Figure 12.32 Schematic diagram showing a flame ionization detector. The eluent from the column mixes with H_2 and is burned in the presence of excess air. Combustion produces a flame containing electrons and the cation CHO^+ . Applying a potential between the flame tip and the collector, a current that is proportional to the concentration of cations in the flame.

filament, and thus its resistance, increases. A reference cell, through which only the mobile phase passes, corrects for any time-dependent variations in flow rate, pressure, or electrical power, all of which may lead to a change in the filament's resistance.

Because all solutes affect the mobile phase's thermal conductivity, the thermal conductivity detector is a universal detector. Another advantage is the TCD's linear response over a concentration range spanning 10^4 – 10^5 orders of magnitude. The detector also is non-destructive, allowing us to isolate analytes using a postdetector cold trap. One significant disadvantage of the TCD detector is its poor detection limit for most analytes.

FLAME IONIZATION DETECTOR (FID)

The combustion of an organic compound in an H_2 /air flame results in a flame containing electrons and organic cations, presumably CHO^+ . Applying a potential of approximately 300 volts across the flame creates a small current of roughly 10^{-9} to 10^{-12} amps. When amplified, this current provides a useful analytical signal. This is the basis of the popular **FLAME IONIZATION DETECTOR**, a schematic diagram of which is shown in Figure 12.32.

Most carbon atoms—except those in carbonyl and carboxylic groups—generate a signal, which makes the FID an almost universal detector for organic compounds. Most inorganic compounds and many gases, such as H_2O and CO_2 , are not detected, which makes the FID detector a useful detector for the analysis of atmospheric and aqueous environmental samples. Advantages of the FID include a detection limit that is approximately two to three orders of magnitude smaller than that for a thermal conductivity detector, and a linear response over 10^6 – 10^7 orders of magnitude in the amount of analyte injected. The sample, of course, is destroyed when using a flame ionization detector.

ELECTRON CAPTURE DETECTOR (ECD)

The **ELECTRON CAPTURE DETECTOR** is an example of a selective detector. As shown in Figure 12.33, the detector consists of a β -emitter, such as ^{63}Ni . The emitted electrons ionize the mobile phase, which is usually N_2 , generating a standing current between a pair of electrodes. When a solute with a high affinity for capturing electrons elutes from the column, the current decreases. This decrease in current serves as the signal. The ECD is highly selective toward solutes with electronegative functional groups, such as halogens and nitro groups, and is relatively insensitive to amines, alcohols, and hydrocarbons. Although its detection limit is excellent, its linear range extends over only about two orders of magnitude.

A β -particle is an electron.

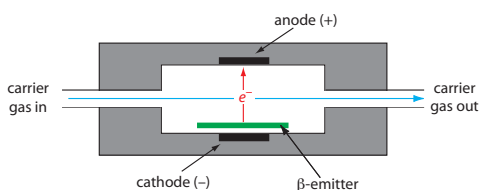


Figure 12.33 Schematic diagram showing an electron capture detector.

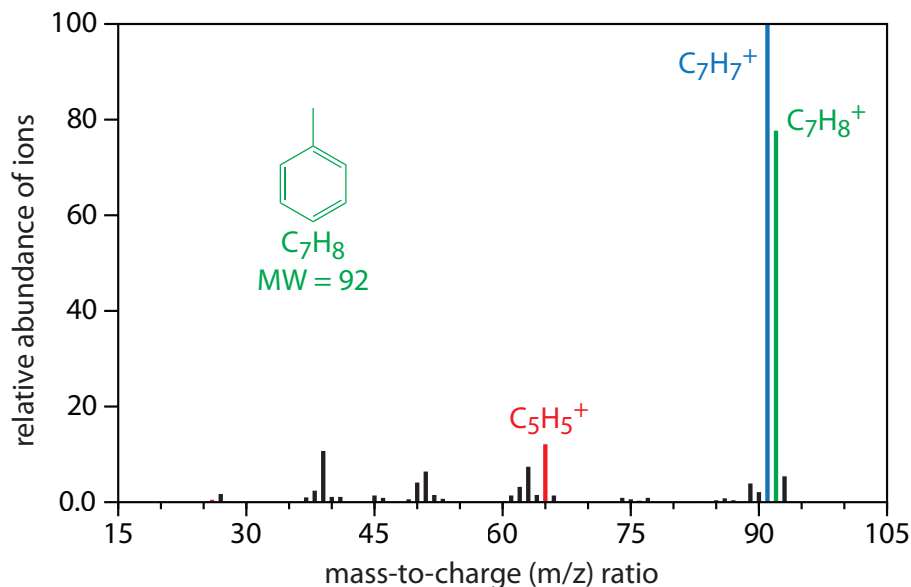


Figure 12.34 Mass spectrum for toluene highlighting the molecular ion in green ($m/z=92$), and two fragment ions in blue ($m/z=91$) and in red ($m/z=65$). A mass spectrum provides both quantitative and qualitative information: the height of any peak is proportional to the amount of toluene in the mass spectrometer and the fragmentation pattern is unique to toluene.

MASS SPECTROMETER (MS)

A **MASS SPECTROMETER** is an instrument that ionizes a gaseous molecule using enough energy that the resulting ion breaks apart into smaller ions. Because these ions have different mass-to-charge ratios, it is possible to separate them using a magnetic field or an electrical field. The resulting **MASS SPECTRUM** contains both quantitative and qualitative information about the analyte. Figure 12.34 shows a mass spectrum for toluene.

Figure 12.35 shows a block diagram of a typical gas chromatography-mass spectrometer (GC–MS) instrument. The effluent from the column enters the mass spectrometer’s ion source in a manner that eliminates the majority of the carrier gas. In the ionization chamber the remaining molecules—a mixture of carrier gas, solvent, and solutes—undergo ionization and fragmentation. The mass spectrometer’s mass analyzer separates the ions by their mass-to-charge ratio. A detector counts the ions and displays the mass spectrum.

There are several options for monitoring the chromatogram when using a mass spectrometer as the detector. The most common method is to continuously scan the entire mass spectrum and report the total signal for all ions reaching the detector during each scan. This total ion scan provides universal detection for all analytes. We can achieve some degree of selectivity by monitoring only specific mass-to-charge ratios, a process called selective-ion monitoring. A mass spectrometer provides excellent detection limits, typically 25 fg to 100 pg, with a linear range of 10^5 orders of magnitude. Because we are continuously recording the mass spectrum of the

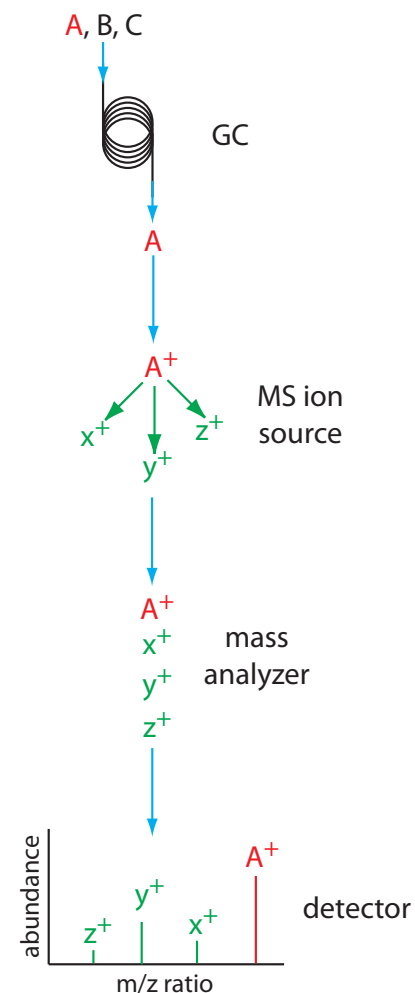


Figure 12.35 Block diagram of GC–MS. A three component mixture enters the GC. When component A elutes from the column, it enters the MS ion source and ionizes to form the parent ion and several fragment ions. The ions enter the mass analyzer, which separates them by their mass-to-charge ratio, providing the mass spectrum shown at the detector.

column's eluent, we can go back and examine the mass spectrum for any time increment. This is a distinct advantage for GC–MS because we can use the mass spectrum to help identify a mixture's components.

OTHER DETECTORS

Two additional detectors are similar in design to a flame ionization detector. In the flame photometric detector optical emission from phosphorous and sulfur provides a detector selective for compounds containing these elements. The thermionic detector responds to compounds containing nitrogen or phosphorous.

A Fourier transform infrared spectrophotometer (FT–IR) also can serve as a detector. In GC–FT–IR, effluent from the column flows through an optical cell constructed from a 10–40 cm Pyrex tube with an internal diameter of 1–3 mm. The cell's interior surface is coated with a reflecting layer of gold. Multiple reflections of the source radiation as it is transmitted through the cell increase the optical path length through the sample. As is the case with GC–MS, an FT–IR detector continuously records the column eluent's spectrum, which allows us to examine the IR spectrum for any time increment.

See [Chapter 10C](#) for a discussion of FT-IR spectroscopy and instrumentation.

12D.6 Quantitative Applications

Gas chromatography is widely used for the analysis of a diverse array of samples in environmental, clinical, pharmaceutical, biochemical, forensic, food science and petrochemical laboratories. Table 12.3 provides some representative examples of applications.

Table 12.3 Representative Applications of Gas Chromatography

area	applications
environmental analysis	green house gases (CO_2 , CH_4 , NO_x) in air pesticides in water, wastewater, and soil vehicle emissions trihalomethanes in drinking water
clinical analysis	drugs blood alcohols
forensic analysis	analysis of arson accelerants detection of explosives
consumer products	volatile organics in spices and fragrances trace organics in whiskey monomers in latex paint
petroleum and chemical industry	purity of solvents refinery gas composition of gasoline

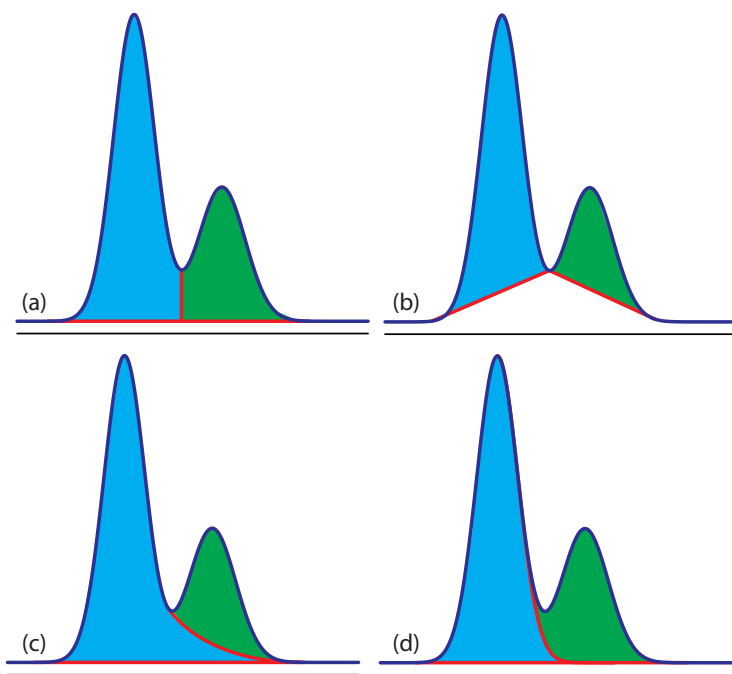


Figure 12.36 Four methods for determining the areas under two overlapping chromatographic peaks: (a) the drop method; (b) the valley method; (c) the exponential skim method; and (d) the Gaussian skim method. Other methods for determining areas also are available.

QUANTITATIVE CALCULATIONS

In a GC analysis the area under the peak is proportional to the amount of analyte injected onto the column. The peak's area is determined by integration, which usually is handled by the instrument's computer or by an electronic integrating recorder. If two peaks are fully resolved, the determination of their respective areas is straightforward. Overlapping peaks, however, require a choice between one of several options for dividing up the area shared by the two peaks (Figure 12.36). Which method to use depends on the relative size of the two peaks and their resolution. In some cases, the use of peak heights provides more accurate results.⁸

For quantitative work we need to establish a calibration curve that relates the detector's response to the concentration of analyte. If the injection volume is identical for every standard and sample, then an external standardization provides both accurate and precise results. Unfortunately, even under the best conditions the relative precision for replicate injections may differ by 5%—often it is substantially worse. For quantitative work requiring high accuracy and precision, the use of internal standards is recommended.

Before electronic integrating recorders and computers, two methods were used to find the area under a curve. One method used a manual planimeter; as you use the planimeter to trace an object's perimeter, it records the area. A second approach for finding the area is the cut-and-weigh method. The chromatogram is recorded on a piece of paper. Each peak of interest is cut out and weighed. Assuming the paper is uniform in thickness and density of fibers, the ratio of weights for two peaks is the same as the ratio of areas. Of course, this approach destroys your chromatogram.

To review the method of internal standards, see [Section 5C.4](#).

Example 12.5

Marriott and Carpenter report the following data for five replicate injections of a mixture consisting of 1% v/v methylisobutylketone and 1% v/v *p*-xylene in dichloromethane.⁹

8 (a) Bicking, M. K. L. [Chromatography Online](#), April 2006; (b) Bicking, M. K. L. [Chromatography Online](#), June 2006.

9 Marriott, P. J.; Carpenter, P. D. *J. Chem. Educ.* **1996**, *73*, 96–99.

injection	peak	peak area (arb. units)
I	1	49 075
	2	78 112
II	1	85 829
	2	135 404
III	1	84 136
	2	132 332
IV	1	71 681
	2	112 889
V	1	58 054
	2	91 287

Assume that *p*-xylene (peak 2) is the analyte, and that methylisobutylketone (peak 1) is the internal standard. Determine the 95% confidence interval for a single-point standardization, with and without using the internal standard.

SOLUTION

For a single-point external standardization we ignore the internal standard and determine the relationship between the peak area for *p*-xylene, A_2 , and the concentration, C_2 , of *p*-xylene.

$$A_2 = kC_2$$

Substituting the known concentration for *p*-xylene and the appropriate peak areas, gives the following values for the constant k .

$$78\,112 \quad 135\,404 \quad 132\,332 \quad 112\,889 \quad 91\,287$$

The average value for k is 110 000 with a standard deviation of 25 100 (a relative standard deviation of 22.8%). The 95% confidence interval is

$$\mu = \bar{X} \pm \frac{ts}{\sqrt{n}} = 111\,000 \pm \frac{(2.78)(25\,100)}{\sqrt{5}} = 111\,000 \pm 31\,200$$

For an internal standardization, the relationship between the analyte's peak area, A_2 , the peak area for the internal standard, A_1 , and their respective concentrations, C_2 and C_1 , is

$$\frac{A_2}{A_1} = k \frac{C_2}{C_1}$$

Substituting the known concentrations and the appropriate peak areas gives the following values for the constant k .

$$1.5917 \quad 1.5776 \quad 1.5728 \quad 1.5749 \quad 1.5724$$

The average value for k is 1.5779 with a standard deviation of 0.0080 (a relative standard deviation of 0.507%). The 95% confidence interval is

$$\mu = \bar{X} \pm \frac{ts}{\sqrt{n}} = 1.5779 \pm \frac{(2.78)(0.0080)}{\sqrt{5}} = 1.5779 \pm 0.0099$$

Although there is a substantial variation in the individual peak areas for this set of replicate injections, the internal standard compensates for these variations, providing a more accurate and precise calibration.

Practice Exercise 12.5

Figure 12.37 shows chromatograms for five standards and one sample. Each standard and the sample contains the same concentration of an internal standard, which is 2.50 mg/mL. For the five standards, the concentrations of analyte are 0.20 mg/mL, 0.40 mg/mL, 0.60 mg/mL, 0.80 mg/mL, and 1.00 mg/mL, respectively. Determine the concentration of analyte in the sample by (a) ignoring the internal standards and creating an external standards calibration curve, and (b) creating an internal standard calibration curve. For each approach, report the analyte's concentration and the 95% confidence interval. Use peak heights instead of peak areas.

Click [here](#) to review your answer to this exercise.

You may wish to review our earlier coverage of linear regression in [Chapter 5D](#).

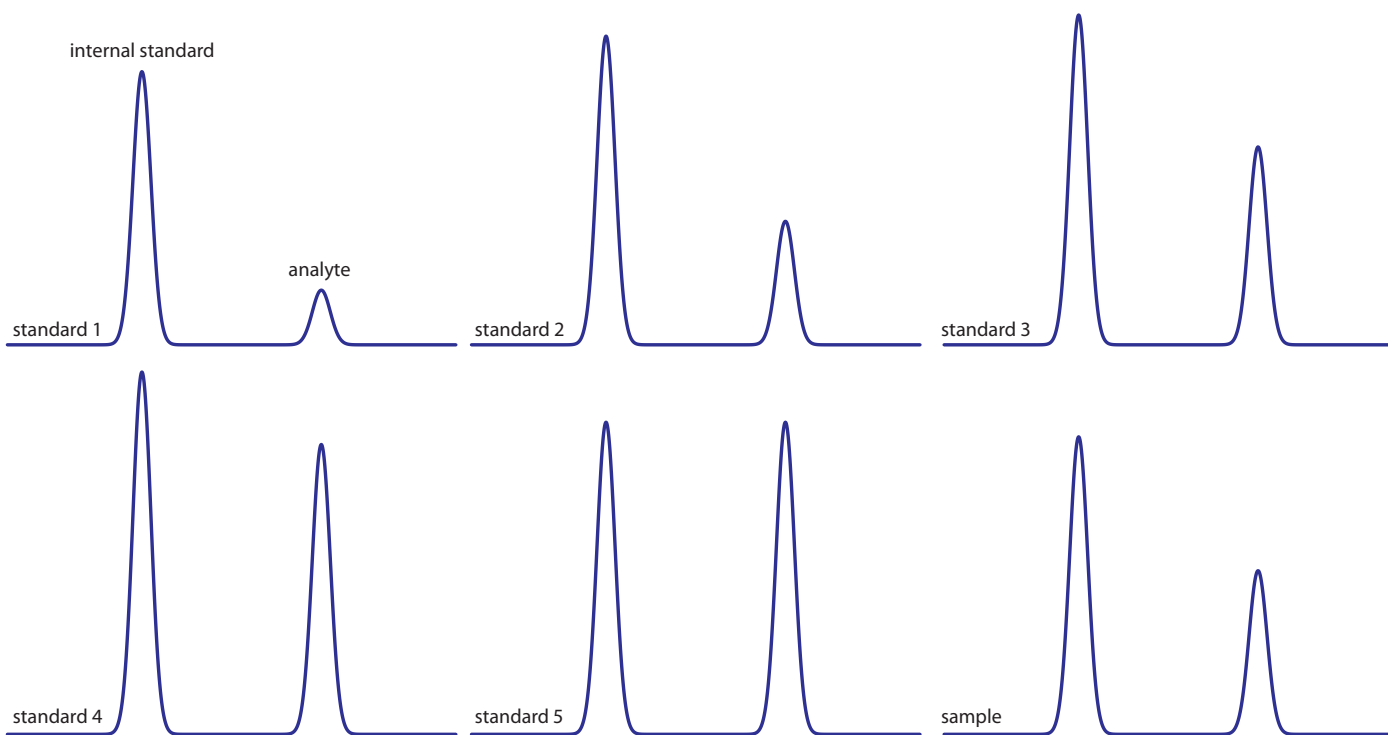


Figure 12.37 Chromatograms for Practice Exercise 12.5.

In addition to identifying the component responsible for a particular chromatographic peak, we also can use the saved spectra to evaluate peak purity. If only one component is responsible for a chromatographic peak, then the spectra should be identical throughout the peak's elution. If a spectrum at the beginning of the peak's elution is different from a spectrum taken near the end of the peak's elution, then there must be at least two components that are co-eluting.

12D.7 Qualitative Applications

In addition to a quantitative analysis, we also can use chromatography to identify the components of a mixture. As noted earlier, when using an FT-IR or a mass spectrometer as the detector we have access to the eluent's full spectrum for any retention time. By interpreting the spectrum or by searching against a library of spectra, we can identify the analyte responsible for each chromatographic peak.

When using a nonspectroscopic detector, such as a flame ionization detector, we must find another approach if we need to identify the components of a mixture. One approach is to spike the sample the suspected compound and looking for an increase in peak height. We also can compare a peak's retention time to the retention time for a known compound if we use identical operating conditions.

Because a compound's retention times on two identical columns are not likely to be the same—differences in packing efficiency, for example, will affect a solute's retention time on a packed column—a table of standard retention times is not useful. **KOVAT'S RETENTION INDEX** provides one solution to the problem of matching retention times. Under isothermal conditions, the adjusted retention times for normal alkanes increase logarithmically. Kovat defined the retention index, I , for a normal alkane as 100 times the number of carbon atoms. For example, the retention index is 400 for butane, C_4H_{10} , and 500 for pentane, C_5H_{12} . To determine the a compound's retention index, I_{cpd} , we use the following formula

$$I_{\text{cpd}} = 100 \times \frac{\log t'_{\text{r,cpd}} - \log t'_{\text{r,x}}}{\log t'_{\text{r,x+1}} - \log t'_{\text{r,x}}} + I_x \quad 12.27$$

where $t'_{\text{r,cpd}}$ is the compound's adjusted retention time, $t'_{\text{r,x}}$ and $t'_{\text{r,x+1}}$ are the adjusted retention times for the normal alkanes that elute immediately before the compound and after the compound, respectively, and I_x is the retention index for the normal alkane eluting immediately before the compound. A compound's retention index for a particular set of chromatographic conditions—stationary phase, mobile phase, column type, column length, temperature, etc.—should be reasonably consistent from day to day and between different columns and instruments.

Example 12.6

In a separation of a mixture of hydrocarbons the following adjusted retention times were measured: 2.23 min for propane, 5.71 min for isobutane, and 6.67 min for butane. What is the Kovat's retention index for each of these hydrocarbons?

Tables of Kovat's retention indices are available; see, for example, the [NIST Chemistry Webbook](#). A search for toluene returns 341 values of I for over 20 different stationary phases, and for both packed columns and capillary columns.

SOLUTION

Kovat's retention index for a normal alkane is 100 times the number of carbons; thus, for propane, $I = 300$ and for butane, $I = 400$. To find Kovat's retention index for isobutane we use [equation 12.27](#).

$$I_{\text{cpd}} = 100 \times \frac{\log(5.71) - \log(2.23)}{\log(6.67) - \log(2.23)} + 300 = 386$$

Practice Exercise 12.6

When using a column with the same stationary phase as in [Example 12.6](#), you find that the retention times for propane and butane are 4.78 min and 6.86 min, respectively. What is the expected retention time for isobutane?

Click [here](#) to review your answer to this exercise.

Representative Method 12.1**Determination of Trihalomethanes in Drinking Water****DESCRIPTION OF METHOD**

Trihalomethanes, such as chloroform, CHCl_3 , and bromoform, CHBr_3 , are found in most chlorinated waters. Because chloroform is a suspected carcinogen, the determination of trihalomethanes in public drinking water supplies is of considerable importance. In this method the trihalomethanes CHCl_3 , CHBrCl_2 , CHBr_2Cl , and CHBr_3 are isolated using a liquid-liquid extraction with pentane and determined using a gas chromatograph equipped with an electron capture detector.

PROCEDURE

Collect the sample in a 40-mL glass vial with a screw-cap lined with a TFE-faced septum. Fill the vial to overflowing, ensuring that there are no air bubbles. Add 25 mg of ascorbic acid as a reducing agent to quench the further production of trihalomethanes. Seal the vial and store the sample at 4°C for no longer than 14 days.

Prepare a standard stock solution for each trihalomethane by placing 9.8 mL of methanol in a 10-mL volumetric flask. Let the flask stand for 10 min, or until all surfaces wetted with methanol are dry. Weigh the flask to the nearest ± 0.1 mg. Using a 100- μL syringe, add 2 or more drops of trihalomethane to the volumetric flask, allowing each drop to fall directly into the methanol. Reweigh the flask before diluting to volume and mixing. Transfer the solution to a 40-mL glass vial with a TFE-lined screw-top and report the concentration in $\mu\text{g}/\text{mL}$. Store the stock solutions at -10 to -20°C and away from the light.

The best way to appreciate the theoretical and practical details discussed in this section is to carefully examine a typical analytical method. Although each method is unique, the following description of the determination of trihalomethanes in drinking water provides an instructive example of a typical procedure. The description here is based on a Method 6232B in *Standard Methods for the Examination of Water and Wastewater*, 20th Ed., American Public Health Association: Washington, DC, 1998.

TFE is tetrafluoroethylene. Teflon is a polymer formed from TFE.

Prepare a multicomponent working standard from the stock standards by making appropriate dilutions of the stock solution with methanol in a volumetric flask. Choose concentrations so that calibration standards (see below) require no more than 20 μL of working standard per 100 mL of water.

Using the multicomponent working standard, prepare at least three, but preferably 5–7 calibration standards. At least one standard must be near the detection limit and the standards must bracket the expected concentration of trihalomethanes in the samples. Using an appropriate volumetric flask, prepare the standards by injecting at least 10 μL of the working standard below the surface of the water and dilute to volume. Mix each standard gently three times only. Discard the solution in the neck of the volumetric flask and then transfer the remaining solution to a 40-mL glass vial with a TFE-lined screw-top. If the standard has a headspace, it must be analyzed within 1 hr; standards without any headspace may be held for up to 24 hr.

Prepare an internal standard by dissolving 1,2-dibromopentane in hexane. Add a sufficient amount of this solution to pentane to give a final concentration of 30 μg 1,2-dibromopentane/L.

To prepare the calibration standards and samples for analysis, open the screw top vial and remove 5 mL of the solution. Recap the vial and weigh to the nearest ± 0.1 mg. Add 2.00 mL of pentane (with the internal standard) to each vial and shake vigorously for 1 min. Allow the two phases to separate for 2 min and then use a glass pipet to transfer at least 1 mL of the pentane (the upper phase) to a 1.8-mL screw top sample vial with a TFE septum, and store at 4 $^{\circ}\text{C}$ until you are ready to inject them into the GC. After emptying, rinsing, and drying the sample's original vial, weigh it to the nearest ± 0.1 mg and calculate the sample's weight to ± 0.1 g. If the density is 1.0 g/mL, then the sample's weight is equivalent to its volume.

Inject a 1–5 μL aliquot of the pentane extracts into a GC equipped with a 2-mm ID, 2-m long glass column packed with a stationary phase of 10% squalane on a packing material of 80/100 mesh Chromosorb WAW. Operate the column at 67 $^{\circ}\text{C}$ and a flow rate of 25 mL/min.

QUESTIONS

1. A simple liquid–liquid extraction rarely extracts 100% of the analyte. How does this method account for incomplete extractions?

Because the extraction procedure for the samples and the standards are identical, the ratio of analyte between any two samples or standards is unaffected by an incomplete extraction.

2. Water samples are likely to contain trace amounts of other organic compounds, many of which will extract into pentane along with the trihalomethanes. A short, packed column, such as the one used in this

A variety of other columns can be used. Another option, for example, is a 30-m fused silica column with an internal diameter of 0.32 mm and a 1 μm coating of the stationary phase DB-1. A linear flow rate of 20 cm/s is used with the following temperature program: hold for 5 min at 35 $^{\circ}\text{C}$; increase to 70 $^{\circ}\text{C}$ at 10 $^{\circ}\text{C}/\text{min}$; increase to 200 $^{\circ}\text{C}$ at 20 $^{\circ}\text{C}$.

method, generally does not do a particularly good job of resolving chromatographic peaks. Why do we not need to worry about these other compounds?

An electron capture detector responds only to compounds, such as the trihalomethanes, that have electronegative functional groups. Because an electron capture detector will not respond to most of the potential interfering compounds, the chromatogram will have relatively few peaks other than those for the trihalomethanes and the internal standard.

3. Predict the order in which the four analytes elute from the GC column.

Retention time should follow the compound's boiling points, eluting from the lowest boiling point to the highest boiling points. The elution order is CHCl_3 (61.2°C), CHCl_2Br (90°C), CHClBr_2 (119°C), and CHBr_3 (149.1°C).

4. Although chloroform is an analyte, it also is an interferent because it is present at trace levels in the air. Any chloroform present in the laboratory air, for example, may enter the sample by diffusing through the sample vial's silicon septum. How can we determine whether samples have been contaminated in this manner?

A sample blank of trihalomethane-free water can be kept with the samples at all times. If the sample blank shows no evidence for chloroform, then we can safely assume that the samples also are free from contamination.

5. Why is it necessary to collect samples without any headspace (a layer of air overlying the liquid) in the sample vial?

Because trihalomethanes are volatile, the presence of a headspace allows for the possible loss of analyte.

6. In preparing the stock solution for each trihalomethane, the procedure specifies that we can add the two or more drops of the pure compound by dropping them into the volumetric flask containing methanol. When preparing the calibration standards, however, the working standard must be injected below the surface of the water. Explain the reason for this difference.

When preparing a stock solution, the potential loss of the volatile trihalomethane is unimportant because we determine its concentration by weight after adding it to the water. When we prepare the calibration standard, however, we must ensure that the addition of trihalomethane is quantitative.

12D.8 Evaluation

SCALE OF OPERATION

Gas chromatography is used to analyze analytes present at levels ranging from major to ultratrace components. Depending on the detector, samples with major and minor analytes may need to be diluted before analysis. The thermal conductivity and flame ionization detectors can handle larger amounts of analyte; other detectors, such as an electron capture detector or a mass spectrometer, require substantially smaller amounts of analyte. Although the injection volume for gas chromatography is quite small—typically about a microliter—the amount of available sample must be sufficient that the injection is a representative subsample. For a trace analyte, the actual amount of injected analyte is often in the picogram range. Using [Representative Method 12.1](#) as an example, a 3.0- μL injection of 1 $\mu\text{g}/\text{L}$ CHCl_3 is equivalent to 15 pg of CHCl_3 , assuming a 100% extraction efficiency.

ACCURACY

The accuracy of a gas chromatographic method varies substantially from sample to sample. For routine samples, accuracies of 1–5% are common. For analytes present at very low concentration levels, samples with complex matrices, or samples requiring significant processing before analysis, accuracy may be substantially poorer. In the analysis for trihalomethanes described in [Representative Method 12.1](#), for example, determinate errors as large as $\pm 25\%$ are possible.

PRECISION

The precision of a gas chromatographic analysis includes contributions from sampling, sample preparation, and the instrument. The relative standard deviation due to the instrument is typically 1–5%, although it can be significantly higher. The principle limitations are detector noise, which affects the determination of peak area, and the reproducibility of injection volumes. In quantitative work, the use of an internal standard compensates for any variability in injection volumes.

SENSITIVITY

In a gas chromatographic analysis, sensitivity is determined by the detector's characteristics. Of particular importance for quantitative work is the detector's linear range; that is, the range of concentrations over which a calibration curve is linear. Detectors with a wide linear range, such as the thermal conductivity detector and the flame ionization detector, can be used to analyze samples over a wide range of concentrations without ad-

See [Figure 3.5](#) to review the meaning of major, minor, and ultratrace analytes.

justing operating conditions. Other detectors, such as the electron capture detector, have a much narrower linear range.

SELECTIVITY

Because it combines separation with analysis, chromatographic methods provide excellent selectivity. By adjusting conditions it is usually possible to design a separation so that the analytes elute by themselves, even when the mixture is complex. Additional selectivity is obtained by using a detector, such as the electron capture detector, that does not respond to all compounds.

TIME, COST, AND EQUIPMENT

Analysis time can vary from several minutes for samples containing only a few constituents, to more than an hour for more complex samples. Preliminary sample preparation may substantially increase the analysis time. Instrumentation for gas chromatography ranges in price from inexpensive (a few thousand dollars) to expensive (>\$50,000). The more expensive models are equipped for capillary columns, include a variety of injection options and more sophisticated detectors, such as a mass spectrometer. Packed columns typically cost <\$200, and the cost of a capillary column is typically \$300–\$1000.

12E High-Performance Liquid Chromatography

In **HIGH-PERFORMANCE LIQUID CHROMATOGRAPHY** (HPLC) we inject the sample, which is in solution form, into a liquid mobile phase. The mobile phase carries the sample through a packed or capillary column that separates the sample's components based on their ability to partition between the mobile phase and the stationary phase. [Figure 12.38](#) shows an example of a typical HPLC instrument, which consists of several key components: reservoirs containing the mobile phase; a pump for pushing the mobile phase through the system; an injector for introducing the sample; a column; and a detector for monitoring the eluent as it comes off the column. Let's consider each of these components.

12E.1 HPLC Columns

An HPLC typically includes two columns: an analytical column responsible for the separation and a guard column. The guard column is placed before the analytical column, protecting it from contamination.

ANALYTICAL COLUMNS

The most common type of HPLC column is a stainless steel tube with an internal diameter between 2.1 mm and 4.6 mm and a length between 30 mm and 300 mm ([Figure 12.39](#)). The column is packed with 3–10 μm

A solute's retention time in HPLC is determined by its interaction with the stationary phase and the mobile phase. There are several different types of solute/stationary phase interactions, including liquid–solid adsorption, liquid–liquid partitioning, ion-exchange, and size-exclusion (see [Figure 12.4](#)). Section 12E deals exclusively with HPLC separations based on liquid–liquid partitioning. Other forms of liquid chromatography receive consideration in [Section 12F](#).



Figure 12.39 Typical packed column for HPLC. This particular column has an internal diameter of 4.6 mm and a length of 150 mm, and is packed with 5 μm particles coated with stationary phase.

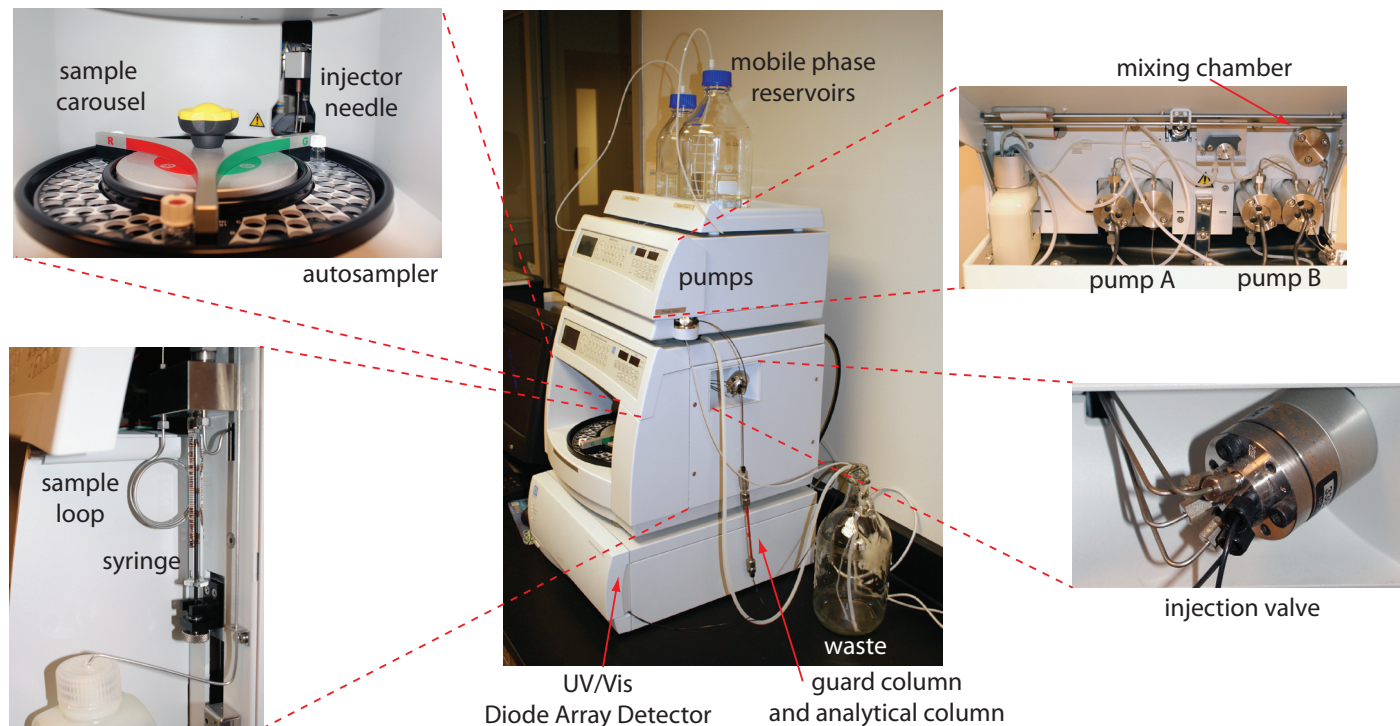


Figure 12.38 Example of a typical high-performance liquid chromatograph with insets showing the pumps that move the mobile phase through the system, and the plumbing used to inject the sample into the mobile phase. This particular instrument includes an autosampler. An instrument in which samples are injected manually does not include the features shown in the two left-most insets, and has a different style of loop injector (see [Figure 12.45](#)).

You can use [equation 12.16](#) to estimate a column's peak capacity.

porous silica particles with either an irregular or a spherical shape. Typical column efficiencies are 40 000–60 000 theoretical plates/m. Assuming a V_{\max}/V_{\min} of approximately 50, a 25-cm column with 50 000 plates/m has 12 500 theoretical plates and a peak capacity of 110.

Capillary columns use less solvent and, because the sample is diluted to a lesser extent, produce larger signals at the detector. These columns are made from fused silica capillaries with internal diameters from 44–200 μm and lengths of 50–250 mm. Capillary columns packed with 3–5 μm particles have been prepared with column efficiencies of up to 250 000 theoretical plates.¹⁰

One limitation to a packed capillary column is the back pressure that develops when trying to move the mobile phase through the small interstitial spaces between the particulate micron-sized packing material (Figure 12.40). Because the tubing and fittings that carry the mobile phase have pressure limits, a higher back pressure requires a lower flow rate and a longer analysis time. **MONOLITHIC COLUMNS**, in which the solid support is a single, porous rod, offer column efficiencies equivalent to a packed capillary column while allowing for faster flow rates. A monolithic column—which usually is similar in size to a conventional packed column, although smaller, capillary columns also are available—is prepared by forming the monolithic rod in a mold and covering it with PTFE tubing or a polymer resin.

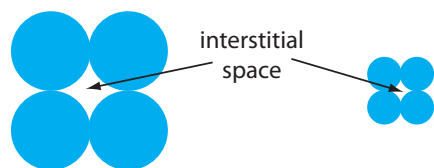


Figure 12.40 The packing of smaller particles creates smaller interstitial spaces than the packing of larger particles. Although reducing particle size by $2\times$ increases efficiency by a factor of 1.4, it also produces a 4-fold increase in back pressure.

¹⁰ Novotny, M. *Science*, **1989**, *246*, 51–57.

Monolithic rods made of a silica-gel polymer typically have macropores with diameters of approximately 2 μm and mesopores—pores within the macropores—with diameters of approximately 13 nm.¹¹

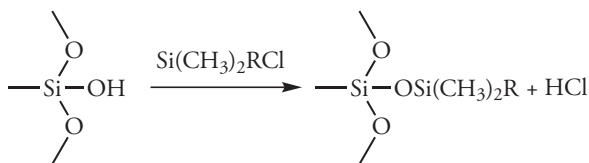
GUARD COLUMNS

Two problems tend to shorten the lifetime of an analytical column. First, solutes binding irreversibly to the stationary phase degrade the column's performance by decreasing the available stationary phase. Second, particulate material injected with the sample may clog the analytical column. To minimize these problems we place a guard column before the analytical column. **GUARD COLUMNS** usually contain the same particulate packing material and stationary phase as the analytical column, but are significantly shorter and less expensive—a length of 7.5 mm and a cost one-tenth of that for the corresponding analytical column is typical. Because they are intended to be sacrificial, guard columns are replaced regularly.

If you look closely at [Figure 12.39](#), you will see the small guard column just above the analytical column.

STATIONARY PHASES FOR GAS-LIQUID CHROMATOGRAPHY

In liquid-liquid chromatography the stationary phase is a liquid film coated on a packing material, typically 3–10 μm porous silica particles. Because the stationary phase may be partially soluble in the mobile phase, it may elute, or bleed from the column over time. To prevent the loss of stationary phase, which shortens the column's lifetime, it is covalently bound to the silica particles. **BONDED STATIONARY PHASES** are created by reacting the silica particles with an organochlorosilane of the general form $\text{Si}(\text{CH}_3)_2\text{RCl}$, where R is an alkyl, or substituted alkyl group.



To prevent unwanted interactions between the solutes and any remaining ---SiOH groups, $\text{Si}(\text{CH}_3)_3\text{Cl}$ is added, converting the unreacted sites to $\text{---SiOSi}(\text{CH}_3)_3$; such columns are designated as end-capped.

The properties of a stationary phase depend on the organosilane's alkyl group. If R is a polar functional group, then the stationary phase is polar. Examples of polar stationary phases include those where R contains a cyano ($\text{---C}_2\text{H}_4\text{CN}$), a diol ($\text{---C}_3\text{H}_6\text{OCH}_2\text{CHOHCH}_2\text{OH}$), or an amino ($\text{---C}_3\text{H}_6\text{NH}_2$) functional group. Because the stationary phase is polar, the mobile phase is a nonpolar or moderately polar solvent. The combination of a polar stationary phase and a nonpolar mobile phase is called **NORMAL-PHASE CHROMATOGRAPHY**.

In **REVERSED-PHASE CHROMATOGRAPHY**, which is the more common form of HPLC, the stationary phase is nonpolar and the mobile phase

It might strike you as odd that the less common form of liquid chromatography is identified as normal-phase. You might recall that one of the earliest examples of chromatography was Mikhail Tswett's separation of plant pigments using a polar column of calcium carbonate and a nonpolar mobile phase of petroleum ether. The assignment of normal and reversed, therefore, is all about precedence.

11 Cabrera, K. [Chromatography Online](#), April 1, 2008.

is polar. The most common nonpolar stationary phases use an organochlorosilane where the R group is an *n*-octyl (C₈) or *n*-octyldecyl (C₁₈) hydrocarbon chain. Most reversed-phase separations are carried out using a buffered aqueous solution as a polar mobile phase, or with other polar solvents, such as methanol and acetonitrile. Because the silica substrate may undergo hydrolysis in basic solutions, the pH of the mobile phase must be less than 7.5.

12E.2 Mobile Phases

The elution order of solutes in HPLC is governed by polarity. For a normal-phase separation, solutes of lower polarity spend proportionally less time in the polar stationary phase and are the first solutes to elute from the column. Given a particular stationary phase, retention times in normal-phase HPLC are controlled by adjusting the mobile phase's properties. For example, if the resolution between two solutes is poor, switching to a less polar mobile phase keeps the solutes on the column for a longer time and provides more opportunity for their separation. In reversed-phase HPLC the order of elution is the opposite of that in a normal-phase separation, with more polar solutes eluting first. Increasing the polarity of the mobile phase leads to longer retention times. Shorter retention times require a mobile phase of lower polarity.

CHOOSING A MOBILE PHASE—USING THE POLARITY INDEX

There are several indices that help in choosing a mobile phase, one of which is the **POLARITY INDEX**.¹² [Table 12.4](#) provides values of the polarity index, P' , for several common mobile phases, where larger values of P' correspond to more polar solvents. Mixing together two or more mobile phases—assuming they are miscible—creates a mobile phase of intermediate polarity. For example, a binary mobile phase made by combining solvents A and B has a polarity index, P'_{AB} , of

$$P'_{AB} = \Phi_A P'_A + \Phi_B P'_B \quad 12.28$$

where P'_A and P'_B are the polarity indices for solvents A and B, and Φ_A and Φ_B are the volume fractions for the two solvents.

Example 12.7

A reversed-phase HPLC separation is carried out using a mobile phase of 60% v/v water and 40% v/v methanol. What is the mobile phase's polarity index?

SOLUTION

Using equation 12.28 and the values in [Table 12.4](#), the polarity index for a 60:40 water–methanol mixture is

12 Snyder, L. R.; Glajch, J. L.; Kirkland, J. J. *Practical HPLC Method Development*, Wiley-Interscience: New York, 1988.

Table 12.4 Properties of HPLC Mobile Phases

mobile phase	polarity index (P')	UV cutoff (nm)
cyclohexane	0.04	210
<i>n</i> -hexane	0.1	210
carbon tetrachloride	1.6	265
<i>i</i> -propyl ether	2.4	220
toluene	2.4	286
diethyl ether	2.8	218
tetrahydrofuran	4.0	220
ethanol	4.3	210
ethyl acetate	4.4	255
dioxane	4.8	215
methanol	5.1	210
acetonitrile	5.8	190
water	10.2	—

$$P'_{AB} = \Phi_{H_2O} P'_{H_2O} + \Phi_{CH_3OH} P'_{CH_3OH}$$

$$P'_{AB} = 0.60 \times 10.2 + 0.40 \times 5.1 = 8.2$$

Practice Exercise 12.7

Suppose you need a mobile phase with a polarity index of 7.5. Explain how you can prepare this mobile phase using methanol and water?

Click [here](#) to review your answer to this exercise.

As a general rule, a two unit change in the polarity index corresponds to approximately a 10-fold change in a solute's retention factor. Here is a simple example. If a solute's retention factor, k , is 22 when using water as a mobile phase ($P' = 10.2$), then switching to a mobile phase of 60:40 water-methanol ($P' = 8.2$) decreases k to approximately 2.2. Note that the retention factor becomes smaller because we are switching from a more polar mobile phase to a less polar mobile phase in a reversed-phase separation.

CHOOSING A MOBILE PHASE—ADJUSTING SELECTIVITY

Changing the mobile phase's polarity index changes a solute's retention factor. As we learned in Section 12C.1, however, a change in k is not an effective method for improving resolution when its initial value is greater than 10. To effect a better separation between two solutes we must improve the selectivity factor, α . There are two commonly used approaches for increasing α : add a reagent to the mobile phase that reacts with the solutes in a secondary equilibrium reaction, or try a different mobile phase.

Acid–base chemistry is not the only example of a secondary equilibrium reaction. Other examples include ion-pairing, complexation, and the interaction of solutes with micelles. We will consider the last of these in [Section 12G.3](#) when we discuss micellar electrokinetic capillary chromatography.

Taking advantage of a secondary equilibrium reaction is a useful strategy for improving a separation.¹³ [Figure 12.17](#), which we considered earlier in this chapter, shows the reversed-phase separation of four weak acids—benzoic acid, terephthalic acid, *p*-aminobenzoic acid, and *p*-hydroxybenzoic acid—on a nonpolar C₁₈ column using an aqueous mobile phase that includes a buffer of acetic acid and sodium acetate. Retention times are shorter for less acidic mobile phases because each solute is present in an anionic, weak base form that is less soluble in the nonpolar stationary phase. If the mobile phase's pH is sufficiently acidic, the solutes are present as neutral weak acids that partition into the stationary phase and take longer to elute. Because these solutes do not have identical p*K*_a values, the pH of the mobile phase affects each solute's retention time differently, allowing us to find the optimum pH for effecting a complete separation of the four solutes.

In [Example 12.7](#) we learned how to adjust the mobile phase's polarity by blending together two solvents. A polarity index, however, is just a guide, and binary mobile phase mixtures with identical polarity indices may not equally resolve a pair of solutes. [Table 12.5](#), for example, shows retention times for four weak acids in two mobile phases with nearly identical values for *P'*. Although the order of elution is the same for both mobile phases, each solute's retention time is affected differently by the choice of organic solvent. If we switch from using acetonitrile to tetrahydrofuran, for example, benzoic acid elutes more quickly and *p*-hydroxybenzoic acid elutes more slowly. Although we can resolve these two solutes using a mobile phase that is 16% v/v acetonitrile, we cannot resolve them if the mobile phase is 10% tetrahydrofuran.

One strategy for finding the best mobile phase is to use the solvent triangle shown in [Figure 12.41](#), which allows us to explore a broad range of mobile phases with only seven experiments. We begin by adjusting the amount of acetonitrile in the mobile phase, producing the best possible separation within the desired analysis time. Next, we use [Table 12.6](#) to es-

¹³ (a) Foley, J. P. *Chromatography*, **1987**, 7, 118–128; (b) Foley, J. P.; May, W. E. *Anal. Chem.* **1987**, 59, 102–109; (c) Foley, J. P.; May, W. E. *Anal. Chem.* **1987**, 59, 110–115.

Table 12.5 Retention Times for Four Weak Acids in Mobile Phases With Similar Polarity Indexes

retention time (min)	16% acetonitrile (CH ₃ CN) 84% pH 4.11 aqueous buffer (<i>P'</i> = 9.5)	10% tetrahydrofuran (THF) 90% pH 4.11 aqueous buffer (<i>P'</i> = 9.6)
<i>t</i> _{r,BA}	5.18	4.01
<i>t</i> _{r,PH}	1.67	2.91
<i>t</i> _{r,PA}	1.21	1.05
<i>t</i> _{r,TP}	0.23	0.54

Key: BA is benzoic acid; PH is *p*-hydroxybenzoic acid; PA is *p*-aminobenzoic acid; TP is terephthalic acid

Source: Harvey, D. T.; Byerly, S.; Bowman, A.; Tomlin, J. "Optimization of HPLC and GC Separations Using Response Surfaces," *J. Chem. Educ.* **1991**, 68, 162–168.

The choice to start with acetonitrile is arbitrary—we can just as easily choose to begin with methanol or with tetrahydrofuran.

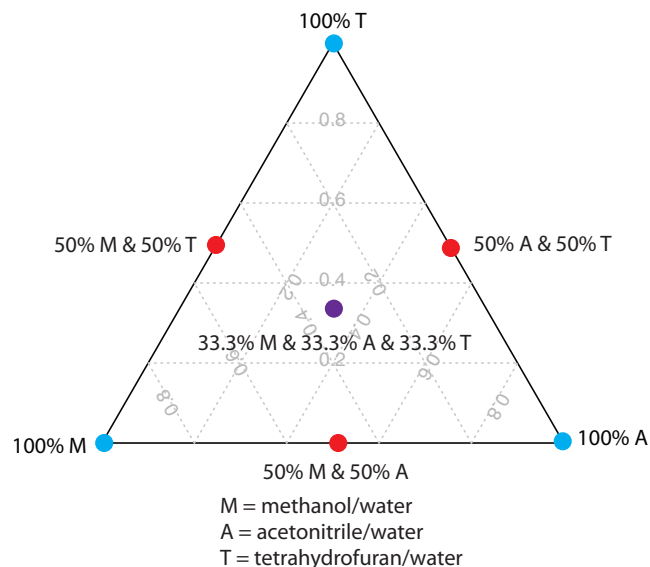


Figure 12.41 Solvent triangle for optimizing a reversed-phase HPLC separation. The three blue circles show mobile phases consisting of an organic solvent and water. The three red circles are binary mobile phases created by combining equal volumes of the pure mobile phases. The ternary mobile phase shown by the purple circle contains all three of the pure mobile phases.

timate the composition of methanol/H₂O and tetrahydrofuran/H₂O mobile phases that will produce similar analysis times. Four additional mobile phases are prepared using the binary and ternary mobile phases shown in Figure 12.41. By evaluating the chromatograms from these seven mobile phases, we may find that one or more provides an adequate separation, or identify a region within the solvent triangle where a separation is feasible. Figure 12.42 shows results for the reversed-phase separation of benzoic acid, terephthalic acid, *p*-aminobenzoic acid, and *p*-hydroxybenzoic acid on a nonpolar C₁₈ column in which the maximum analysis time is set to 6 min.¹⁴ The areas in blue, green, and red show mobile phase compositions that do not provide baseline resolution. The unshaded area represents mobile phase compositions where a separation is possible.

14 Harvey, D. T.; Byerly, S.; Bowman, A.; Tomlin, J. J. *Chem. Educ.* **1991**, 68, 162–168

Table 12.6 Compositions of Mobile Phases with Approximately Equal Solvent Strengths

%v/v CH ₃ OH	%v/v CH ₃ CN	%v/v THF
0	0	0
10	6	4
20	14	10
30	22	16
40	32	24
50	40	30
60	50	36
70	60	44
80	72	52
90	87	62
100	99	71

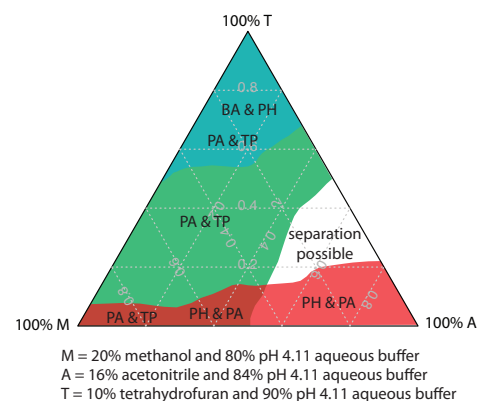


Figure 12.42 Resolution map for the separation of benzoic acid (BA), terephthalic acid (TP), *p*-aminobenzoic acid (PA), and *p*-hydroxybenzoic acid (PH) on a nonpolar C₁₈ column subject to a maximum analysis time of 6 min. The shaded areas represent regions where a separation is not possible, with the unresolved solutes identified. A separation is possible in the unshaded area. See Chapter 14 for a discussion of how we can develop a mathematical model for optimizing separations.

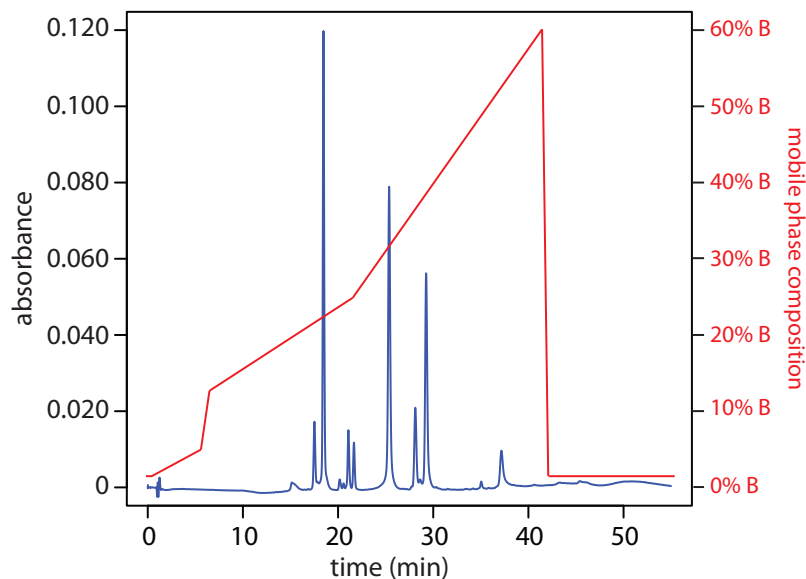


Figure 12.43 Gradient elution separation of a mixture of flavonoids. Mobile phase A is an aqueous solution of 0.1% formic acid and mobile phase B is 0.1% formic acid in acetonitrile. The initial mobile phase is 98% A and 2% B. The percentage of mobile phase B increases in four steps: from 2% to 5% over 5 min, beginning at 0.5 min; from 5% to 12% over 1 min, beginning at 5.5 min; from 12% to 25% over 15 min, beginning at 6.5 min; and from 25% to 60% over 20 min, beginning at 21.5 min. Data provided by Christopher Schardon, Kyle Meinhardt, and Michelle Bushey, Department of Chemistry, Trinity University.

CHOOSING A MOBILE PHASE—ISOCRATIC AND GRADIENT ELUTIONS

A separation using a mobile phase that has a fixed composition is an **ISOCRATIC ELUTION**. One difficulty with an isocratic elution is that an appropriate mobile phase strength for early eluting solutes may lead to unacceptably long retention times for later eluting solutes. Optimizing the mobile phase for late eluting solutes, on the other hand, may provide an inadequate separation of early eluting solutes. Changing the mobile phase's composition as the separation progresses is one solution to this problem. For a reversed-phase separation we use an initial mobile phase that is more polar. As the separation progresses, we adjust the composition of mobile phase so that it becomes less polar (see Figure 12.43). Such separations are called **GRADIENT ELUTIONS**.

12E.3 HPLC Plumbing

In a gas chromatograph the pressure of the compressed gas cylinder containing the mobile phase is sufficient to push it through the column. Pushing a liquid mobile phase through a column takes a great deal more effort, generating pressures in excess of several hundred atmospheres. In this section we consider the basic plumbing needed to move the mobile phase through the column and to inject the sample into the mobile phase.

You may recall that we called this the general elution problem (see [Figure 12.16](#)).

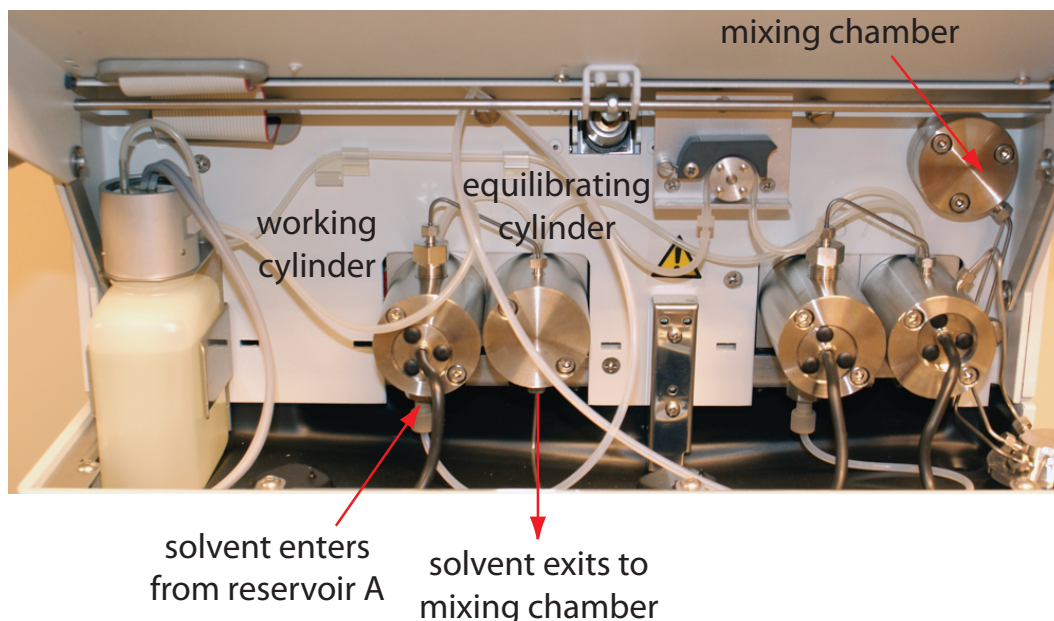


Figure 12.44 Close-up view of the pumps for the instrument shown in [Figure 12.38](#). The working cylinder and equilibrating cylinder for the pump on the left take solvent from reservoir A and send it to the mixing chamber. The pump on the right moves solvent from reservoir B to the mixing chamber. The mobile phase's flow rate is determined by the combined speeds of the two pumps. By changing the relative speeds of the two pumps, different binary mobile phases can be prepared.

MOVING THE MOBILE PHASE

A typical HPLC includes between 1–4 reservoirs for storing mobile phase solvents. The instrument in [Figure 12.38](#), for example, has two mobile phase reservoirs that can be used for an isocratic or a gradient elution by drawing solvents from one or both reservoirs.

Before using a mobile phase solvent we must remove dissolved gases, such as N_2 and O_2 , and small particulate matter, such as dust. Because there is a large drop in pressure across the column—the pressure at the column's entrance may be several hundred atmospheres, but it is atmospheric pressure at its exit—any dissolved gases in the mobile phase are released as gas bubbles that may interfere with the detector's response. Degassing is accomplished in several ways, but the most common are the use of a vacuum pump or sparging with an inert gas, such as He, which has a low solubility in the mobile phase. Particulate material, which may clog the HPLC tubing or column, is removed by filtering the solvents.

The mobile phase solvents are pulled from their reservoirs by the action of one or more pumps. [Figure 12.44](#) shows a close-up view of the pumps for the instrument in [Figure 12.38](#). The working pump and equilibrating pump each have a piston whose back and forth movement is capable both of maintaining a constant flow rate of up to several mL/min and of obtaining the high output pressure needed to push the mobile phase through the chromatographic column. In this particular instrument, each pump sends

Bubbling an inert gas through the mobile phase releases volatile dissolved gases. This process is called sparging.

There are other possible ways to control the mobile phase's composition and flow rate. For example, instead of the two pumps in [Figure 12.45](#), we can place a solvent proportioning valve before a single pump. The solvent proportioning valve connects two or more solvent reservoirs to the pump and determines how much of each solvent is pulled during each of the pump's cycles.

Another approach for eliminating a pulsed flow is to include a pulse damper between the pump and the column. A pulse damper is a chamber filled with an easily compressed fluid and a flexible diaphragm. During the piston's forward stroke the fluid in the pulse damper is compressed. When the piston withdraws to refill the pump, pressure from the expanding fluid in the pulse damper maintains the flow rate.

The instrument in [Figure 12.39](#) uses an autosampler to inject samples. Instead of using a syringe to push the sample into the sample loop, the syringe draws sample into the sample loop.

its mobile phase to a mixing chamber where they combine to form the final mobile phase. The relative speed of the two pumps determines the mobile phase's final composition.

The back and forth movement of a reciprocating pump creates a pulsed flow that contributes noise to the chromatogram. To minimize these pulses, each pump in [Figure 12.44](#) has two cylinders. During the working cylinder's forward stroke it fills the equilibrating cylinder and establishes flow through the column. When the working cylinder is on its reverse stroke, the flow is maintained by the piston in the equilibrating cylinder. The result is a pulse-free flow.

INJECTING THE SAMPLE

The operating pressure within an HPLC is sufficiently high that we cannot inject the sample into the mobile phase by inserting a syringe through a septum. Instead, we inject the sample using a **LOOP INJECTOR**, a diagram of which is shown in [Figure 12.45](#).

In the load position a sample loop—which is available in a variety of sizes ranging from 0.5 μL to 5 mL—is isolated from the mobile phase and open to the atmosphere. The sample loop is filled using a syringe with a capacity several times that of the sample loop, with the excess sample exiting through the waste line. After loading the sample, the injector is turned to the inject position, directing the mobile phase through the sample loop and onto the column.

12E.4 Detectors for HPLC

Many different types of detectors have been used to monitor HPLC separations, most of which use the spectroscopic techniques from Chapter 10 or the electrochemical techniques from Chapter 11.

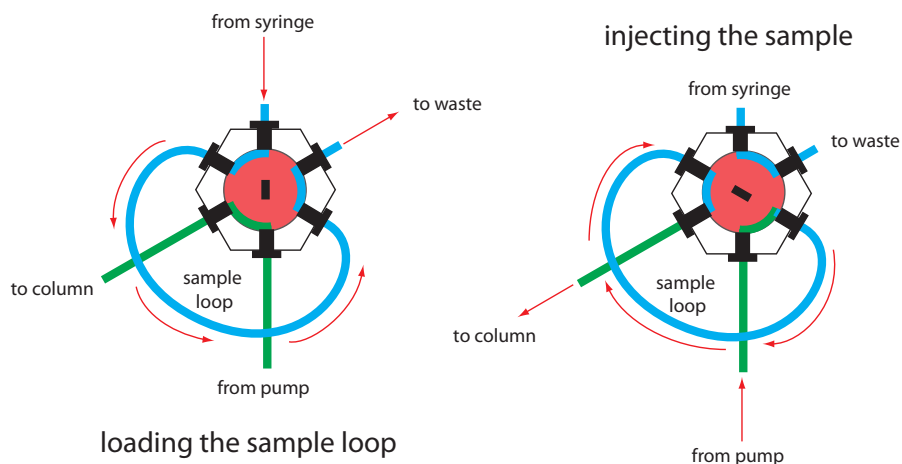


Figure 12.45 Schematic diagram showing a manual loop injector. In the load position the flow of mobile phase from the pump to the column (shown in green) is isolated from the sample loop, which is filled using a syringe (shown in blue). Rotating the inner valve (shown in red) to the inject position directs the mobile phase through the sample loop and onto the column.

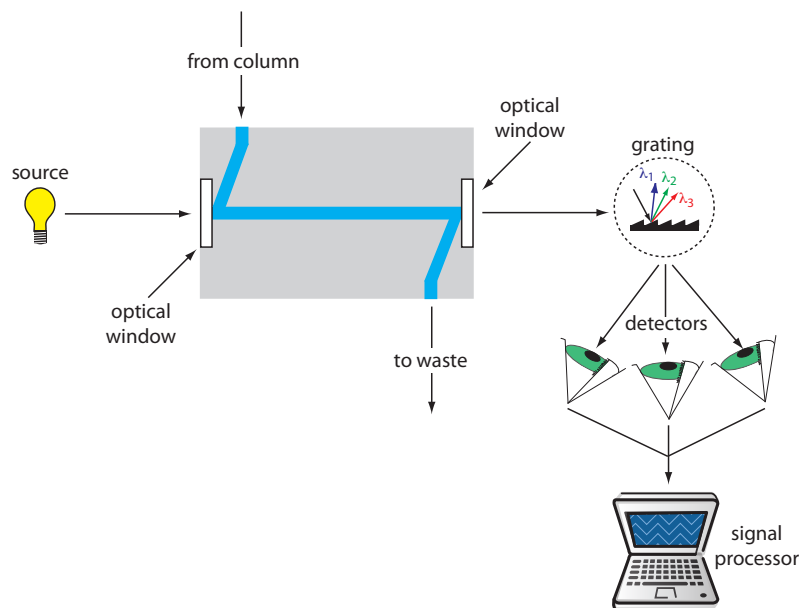


Figure 12.46 Schematic diagram showing a flow cell for a detector using a diode array spectrometer.

SPECTROSCOPIC DETECTORS

The most popular HPLC detectors take advantage of an analyte's UV/Vis absorption spectrum. These detectors range from simple designs, in which the analytical wavelength is selected using appropriate filters, to a modified spectrophotometer in which the sample compartment includes a flow cell. Figure 12.46 shows the design of a typical flow cell for a detector using a diode array spectrometer. The flow cell has a volume of 1–10 μL and a path length of 0.2–1 cm.

When using a UV/Vis detector the resulting chromatogram is a plot of absorbance as a function of elution time (see Figure 12.47). If the detector is a diode array spectrometer, then we also can display the result as a three-dimensional chromatogram showing absorbance as a function of

To review the details of how we measure absorbance, see [Chapter 10B](#). More information about different types of instruments, including the diode array spectrometer, is in [Chapter 10C](#).

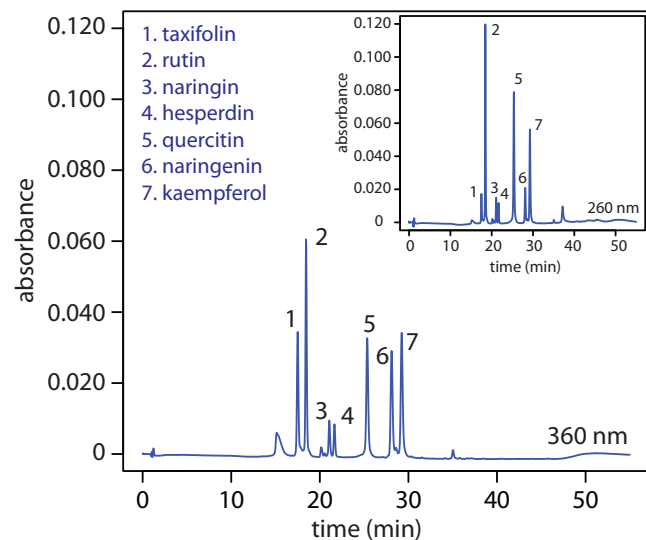
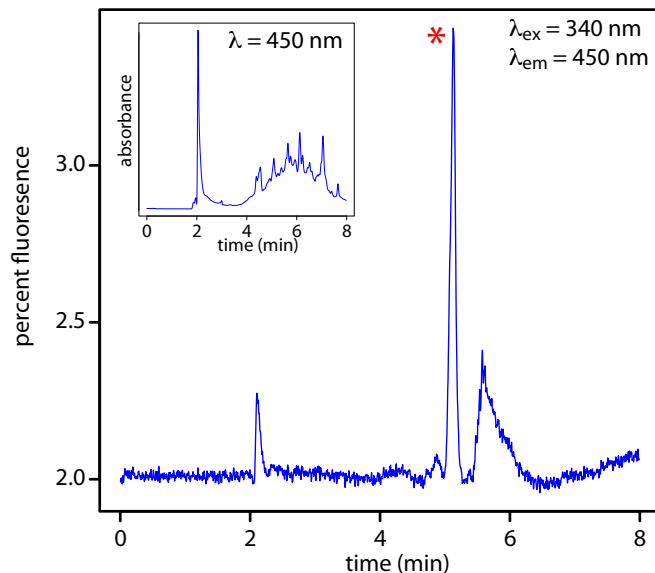


Figure 12.47 HPLC separation of a mixture of flavonoids with UV/Vis detection at 360 nm and 260 nm. The choice of wavelength affects each analyte's signal. By carefully choosing the wavelength, we can enhance the signal for the analytes of greatest interest. Data provided by Christopher Schardon, Kyle Meinhardt, and Michelle Bushey, Department of Chemistry, Trinity University.

Figure 12.48 HPLC chromatogram for the determination of riboflavin in urine using fluorescence detection with excitation at a wavelength of 340 nm and detection at 450 nm. The peak corresponding to riboflavin is marked with a red asterisk (*). The inset shows the same chromatogram when using a less-selective UV/Vis detector at a wavelength of 450 nm. Data provided by Jason Schultz, Jonna Berry, Kaelene Lundstrom, and Dwight Stoll, Department of Chemistry, Gustavus Adolphus College.



wavelength and elution time. One limitation to using absorbance is that the mobile phase cannot absorb at the wavelengths we wish to monitor. [Table 12.4](#) lists the minimum useful UV wavelength for several common HPLC solvents. Absorbance detectors provide detection limits of as little as 100 pg–1 ng of injected analyte.

If an analyte is fluorescent, we can place the flow cell in a spectrofluorimeter. As shown in Figure 12.48, a fluorescence detector provides additional selectivity because only a few of a sample's components are fluorescent. Detection limits are as little as 1–10 pg of injected analyte.

ELECTROCHEMICAL DETECTORS

Another common group of HPLC detectors are those based on electrochemical measurements such as amperometry, voltammetry, coulometry, and conductivity. Figure 12.49, for example, shows an amperometric flow cell. Effluent from the column passes over the working electrode, which is held at a constant potential—relative to a downstream reference electrode—that completely oxidizes or reduces the analytes. The current flow-

See [Chapter 10F](#) for a review of fluorescence spectroscopy and spectrofluorimeters.

See [Chapter 11D.5](#) for a review of amperometry.

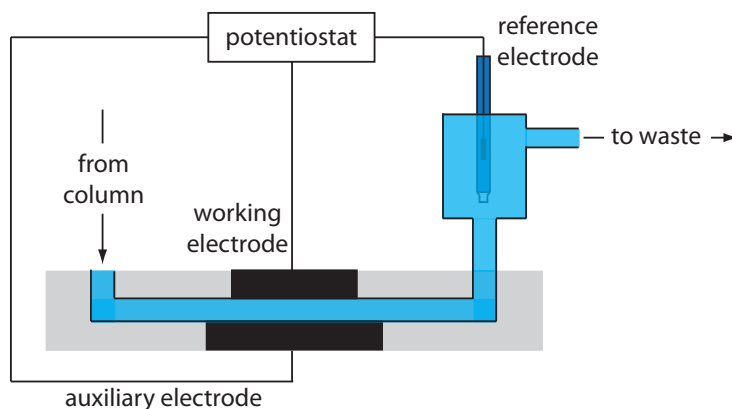


Figure 12.49 Schematic diagram showing a flow cell for an amperometric electrochemical detector.

ing between the working electrode and the auxiliary electrode serves as the analytical signal. Detection limits for amperometric electrochemical detection are from 10 pg–1 ng of injected analyte.

OTHER DETECTORS

Several other detectors have been used in HPLC. Measuring a change in the mobile phase's refractive index is analogous to monitoring the mobile phase's thermal conductivity in gas chromatography. A refractive index detector is nearly universal, responding to almost all compounds, but has a relatively poor detection limit of 100 ng–1 μ g of injected analyte. An additional limitation of a refractive index detector is that it cannot be used for gradient elution unless the mobile phase components have identical refractive indexes.

Another useful detector is a mass spectrometer. Figure 12.50 shows a block diagram of a typical HPLC–MS instrument. The effluent from the column enters the mass spectrometer's ion source using an interface that removes most of the mobile phase, an essential need because of the incompatibility between the liquid mobile phase and the mass spectrometer's high vacuum environment. In the ionization chamber the remaining molecules—a mixture of carrier gas, solvent, and solutes—undergo ionization and fragmentation. The mass spectrometer's mass analyzer separates the ions by their mass-to-charge ratio (m/z). A detector counts the ions and displays the mass spectrum.

There are several options for monitoring the chromatogram when using a mass spectrometer as the detector. The most common method is to continuously scan the entire mass spectrum and report the total signal for all ions reaching the detector during each scan. This total ion scan provides universal detection for all analytes. As seen in Figure 12.51, we can achieve some degree of selectivity by monitoring only specific mass-to-charge ratios, a process called selective-ion monitoring).

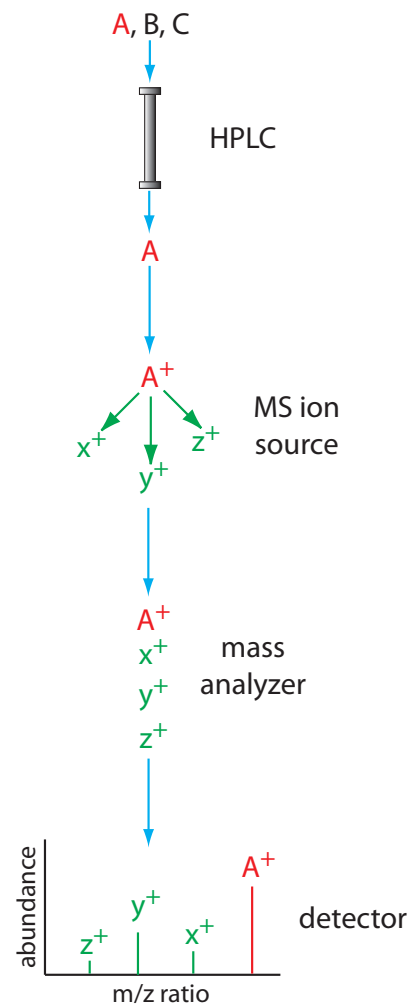


Figure 12.50 Block diagram of an HPLC–MS. A three component mixture enters the HPLC. When component A elutes from the column, it enters the MS ion source and ionizes to form the parent ion (A^+) and several fragment ions. The ions enter the mass analyzer, which separates them by their mass-to-charge ratio, providing the mass spectrum shown at the detector.

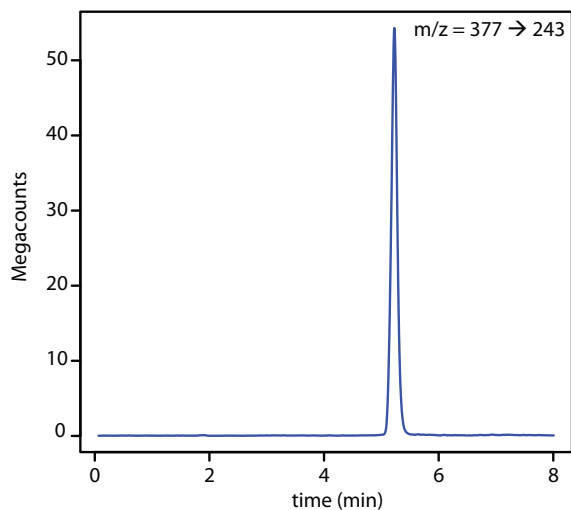


Figure 12.51 HPLC–MS/MS chromatogram for the determination of riboflavin in urine. An initial parent ion with an m/z ratio of 377 enters a second mass spectrometer where it undergoes additional ionization; the fragment ion with an m/z ratio of 243 provides the signal. The selectivity of this detector is evident when you compare this chromatogram to the one in Figure 12.48, which uses fluorescence detection. Data provided by Jason Schultz, Jonna Berry, Kaelene Lundstrom, and Dwight Stoll, Department of Chemistry, Gustavus Adolphus College.

The advantages of using a mass spectrometer in HPLC are the same as for gas chromatography. Detection limits are very good, typically 100 pg–1 ng of injected analyte, with values as low as 1–10 pg for some samples. In addition, a mass spectrometer provides qualitative, structural information that can help in identifying the analytes. The interface between the HPLC and mass spectrometer is technically more difficult than that in a GC–MS because of the incompatibility of a liquid mobile phase with the mass spectrometer's high vacuum requirement.

12E.5 Quantitative Applications

High-performance liquid chromatography is routinely used for both qualitative and quantitative analyses of environmental, pharmaceutical, industrial, forensic, clinical, and consumer product samples.

PREPARING SAMPLES FOR ANALYSIS

Samples in liquid form are injected into the HPLC after a suitable clean-up to remove any particulate materials, or after a suitable extraction to remove matrix interferents. In determining polyaromatic hydrocarbons (PAH) in wastewater, for example, an extraction with CH_2Cl_2 serves the dual purpose of concentrating the analytes and isolating them from matrix interferents. Solid samples are first dissolved in a suitable solvent, or the analytes of interest brought into solution by extraction. For example, an HPLC analysis for the active ingredients and degradation products in a pharmaceutical tablet often begins by extracting the powdered tablet with a portion of mobile phase. Gas samples are collected by bubbling them through a trap containing a suitable solvent. Organic isocyanates in industrial atmospheres are collected by bubbling the air through a solution of 1-(2-methoxyphenyl)piperazine in toluene. The reaction between the isocyanates and 1-(2-methoxyphenyl)piperazine both stabilizes them against degradation before the HPLC analysis and converts them to a chemical form that can be monitored by UV absorption.

QUANTITATIVE CALCULATIONS

A quantitative HPLC analysis is often easier than a quantitative GC analysis because a fixed volume sample loop provides a more precise and accurate injection. As a result, most quantitative HPLC methods do not need an internal standard and, instead, use external standards and a normal calibration curve.

Example 12.8

The concentration of polynuclear aromatic hydrocarbons (PAH) in soil are determined by first extracting the PAHs with methylene chloride. The extract is diluted, if necessary, and the PAHs separated by HPLC using a UV/Vis or fluorescence detector. Calibration is achieved using one or more

An internal standard is necessary when using HPLC–MS because the interface between the HPLC and the mass spectrometer does not allow for a reproducible transfer of the column's eluent into the MS's ionization chamber.

external standards. In a typical analysis a 2.013-g sample of dried soil is extracted with 20.00 mL of methylene chloride. After filtering to remove the soil, a 1.00-mL portion of the extract is removed and diluted to 10.00 mL with acetonitrile. Injecting 5 μL of the diluted extract into an HPLC gives a signal of 0.217 (arbitrary units) for the PAH fluoranthene. When 5 μL of a 20.0-ppm fluoranthene standard is analyzed using the same conditions, a signal of 0.258 is measured. Report the parts per million of fluoranthene in the soil.

SOLUTION

For a single-point external standard, the relationship between the signal, S , and the concentration, C , of fluoranthene is

$$S = kC$$

Substituting in values for the standard's signal and concentration gives the value of k as

$$k = \frac{S}{C} = \frac{0.258}{20.0 \text{ ppm}} = 0.0129 \text{ ppm}^{-1}$$

Using this value for k and the sample's HPLC signal gives a fluoranthene concentration of

$$C = \frac{S}{k} = \frac{0.217}{0.0129 \text{ ppm}^{-1}} = 16.8 \text{ ppm}$$

for the extracted and diluted soil sample. The concentration of fluoranthene in the soil is

$$\frac{16.8 \text{ g/mL} \times \frac{10.00 \text{ mL}}{1.00 \text{ mL}} \times 20.00 \text{ mL}}{2.013 \text{ g sample}} = 1670 \text{ ppm fluoranthene}$$

Practice Exercise 12.8

The concentration of caffeine in beverages can be determined by a reversed-phase HPLC separation using a mobile phase of 20% acetonitrile and 80% water and a nonpolar C_8 column. Results for a series of 10- μL injections of caffeine standards are in the following table.

[caffeine] (mg/L)	peak area (arb. units)
50.0	226724
100.0	453762
125.0	559443
250.0	1 093 637

The data in this problem comes from Kusch, P.; Knupp, G. "Simultaneous Determination of Caffeine in Cola Drinks and Other Beverages by Reversed-Phase HPTLC and Reversed-Phase HPLC," *Chem. Educator*, **2003**, 8, 201–205.

What is the concentration of caffeine in a sample if a 10- μL injection gives a peak area of 424 195?

Click [here](#) to review your answer to this exercise.

The best way to appreciate the theoretical and practical details discussed in this section is to carefully examine a typical analytical method. Although each method is unique, the following description of the determination of fluoxetine in serum provides an instructive example of a typical procedure. The description here is based on Smyth, W. F. *Analytical Chemistry of Complex Matrices*, Wiley Teubner: Chichester, England, 1996, pp. 187–189.

For a review of solid-phase extraction (SPE), see [Section 7E.5](#). [Table 7.8](#) describes the properties of several different types of SPE cartridges. [Figure 7.22](#) shows a photo of SPE cartridges, and [Figure 7.23](#) illustrates the steps in completing a solid-phase extraction.

Representative Method 12.2

Determination of Fluoxetine in Serum

DESCRIPTION OF METHOD

Fluoxetine is another name for the antidepressant drug Prozac. The determination of fluoxetine in serum is an important part of monitoring its therapeutic use. The analysis is complicated by the complex matrix of serum samples. A solid-phase extraction followed by an HPLC analysis using a fluorescence detector provides the necessary selectivity and detection limits.

PROCEDURE

Add a known amount of the antidepressant protriptyline, which serves as an internal standard, to each serum sample and to each external standard. To remove matrix interferences, pass a 0.5-mL aliquot of each serum sample or standard through a C18 solid-phase extraction cartridge. After washing the cartridge to remove the interferences, elute the remaining constituents, including the analyte and the internal standard, by washing the cartridge with 0.25 mL of a 25:75 v/v mixture of 0.1 M HClO₄ and acetonitrile. Inject a 20-μL aliquot onto a 15-cm × 4.6-mm column packed with a 5 μm C8-bonded stationary phase. The isocratic mobile phase is 37.5:62.5 v/v acetonitrile and water (containing 1.5 g of tetramethylammonium perchlorate and 0.1 mL of 70% v/v HClO₄). Monitor the chromatogram using a fluorescence detector set to an excitation wavelength of 235 nm and an emission wavelength of 310 nm.

QUESTIONS

1. The solid-phase extraction is important because it removes constituents in the serum that might interfere with the analysis. What types of interferences are possible?

Blood serum, which is a complex mixture of compounds, is approximately 92% water, 6–8% soluble proteins, and less than 1% each of various salts, lipids, and glucose. A direct injection of serum is not advisable for three reasons. First, any particulate materials in the serum will clog the column and restrict the flow of mobile phase. Second, some of the compounds in the serum may absorb too strongly to the stationary phase, degrading the column's performance. Finally, although an HPLC is capable of separating and analyzing complex mixtures, an analysis may still be difficult if the number of constituents exceeds the column's peak capacity.

2. One advantage of an HPLC analysis is that a loop injector often eliminates the need for an internal standard. Why is an internal standard used in this analysis? What assumption(s) must we make when using the internal standard?

An internal standard is necessary because of uncertainties introduced during the solid-phase extraction. For example, the volume of serum transferred to the solid-phase extraction cartridge, 0.5 mL, and the volume of solvent used to remove the analyte and internal standard, 0.25 mL, are very small. The precision and accuracy with which we can measure these volumes is not as good as when using larger volumes. In addition, the concentration of eluted analytes may vary from trial to trial due to variations in the amount of solution held up by the cartridge. Using an internal standard compensates for these variations. To be useful we must assume that the analyte and the internal standard are completely retained during the initial loading, that they are not lost when the cartridge is washed, and that they are completely extracted during the final elution.

3. Why does the procedure monitor fluorescence instead of monitoring UV absorption?

Fluorescence is a more selective technique for detecting analytes. Many other commonly prescribed antidepressants (and their metabolites) elute with retention times similar to that of fluoxetine. These compounds, however, either do not fluoresce or are only weakly fluorescent.

4. If the peaks for fluoxetine and protriptyline are insufficiently resolved, how might you alter the mobile phase to improve their separation?

Decreasing the amount of acetonitrile and increasing the amount of water in the mobile will increase retention times, providing a better resolution.

If we extract all of the analyte into a volume of 0.24 mL instead of 0.25 mL, the concentration of the analyte increases by slightly more than 4%.

12E.6 Evaluation

With a few exceptions, the scale of operation, accuracy, precision, sensitivity, selectivity, analysis time, and cost for an HPLC method are similar to GC methods. Injection volumes for an HPLC method are usually larger than for a GC method because HPLC columns have a greater capacity. Because it uses a loop injection, the precision of an HPLC method is often better. HPLC is not limited to volatile analytes, which means that we can analyze a broader range of compounds. Capillary GC columns, on the other hand, have more theoretical plates, and can separate more complex mixtures.

See [Section 12D.8](#) for an evaluation of GC methods.

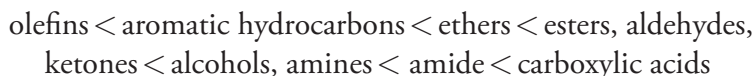
12F Other Forms of Liquid Chromatography

At the beginning of Section 12E, we noted that there are several different types of solute/stationary phase interactions in liquid chromatography. In Section 12E we limited our discussion to liquid–liquid chromatography. In this section we turn our attention to liquid chromatography techniques in

which partitioning occurs by liquid–solid adsorption, ion-exchange, and size exclusion.

12F.1 Liquid-Solid Adsorption Chromatography

In **LIQUID–SOLID ADSORPTION CHROMATOGRAPHY** (LSC) the column packing also serves as the stationary phase. In Tswett's original work the stationary phase was finely divided CaCO_3 , but modern columns employ porous 3–10 μm particles of silica or alumina. Because the stationary phase is polar, the mobile phase is usually a nonpolar or moderately polar solvent. Typical mobile phases include hexane, isooctane, and methylene chloride. The usual order of elution—from shorter to longer retention times—is



Nonpolar stationary phases, such as charcoal-based absorbents, also may be used. For most samples, liquid–solid chromatography does not offer any special advantages over liquid–liquid chromatography. One exception is the analysis of isomers, where LLC excels.

12F.2 Ion-Exchange Chromatography

In **ION-EXCHANGE CHROMATOGRAPHY** (IEC) the stationary phase is a cross-linked polymer resin, usually divinylbenzene cross-linked polystyrene, with covalently attached ionic functional groups (see [Figure 12.52](#) and [Table 12.7](#)). The counterions to these fixed charges are mobile and can be displaced by ions that compete more favorably for the exchange sites. Ion-exchange resins are divided into four categories: strong acid cation exchangers; weak acid cation exchangers; strong base anion exchangers; and weak base anion exchangers.

Strong acid cation exchangers include a sulfonic acid functional group that retains it anionic form—and thus its capacity for ion-exchange—in strongly acidic solutions. The functional groups for a weak acid cation exchanger, however, become fully protonated at pH levels less than 4 and lose their exchange capacity. The strong base anion exchangers include a

Table 12.7 Examples of Common Ion-Exchange Resins

type	functional group (R)	examples
strong acid cation exchanger	sulfonic acid	$-\text{SO}_3^-$ $-\text{CH}_2\text{CH}_2\text{SO}_3^-$
weak acid cation exchanger	carboxylic acid	$-\text{COO}^-$ $-\text{CH}_2\text{COO}^-$
strong base anion exchanger	quaternary amine	$-\text{CH}_2\text{N}(\text{CH}_3)_3^+$ $-\text{CH}_2\text{CH}_2\text{N}(\text{CH}_2\text{CH}_3)_3^+$
weak base anion exchanger	amine	$-\text{NH}_3^+$ $-\text{CH}_2\text{CH}_2\text{NH}(\text{CH}_2\text{CH}_3)_2^+$


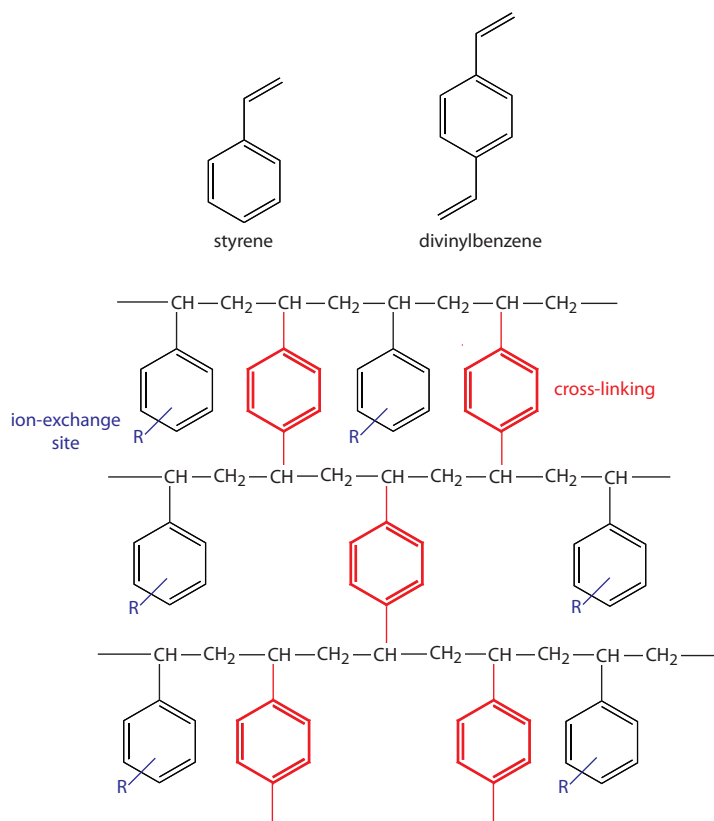
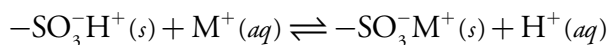


Figure 12.52 Structures of styrene, divinylbenzene, and a styrene–divinylbenzene co-polymer modified for use as an ion-exchange resin. The ion-exchange sites, indicated by R and shown in blue, are mostly in the *para* position and are not necessarily bound to all styrene units. The cross-linking is shown in red. The photo shows an example of the polymer beads. These beads are approximately 0.30–0.85 mm in diameter. Resins for use in ion-exchange chromatography are typically 5–11 μm in diameter.

quaternary amine, which retains a positive charge even in strongly basic solutions. Weak base anion exchangers remain protonated only at pH levels that are moderately basic. Under more basic conditions a weak base anion exchanger loses a proton and its exchange capacity.

The ion-exchange reaction of a monovalent cation, M^+ , at a strong acid exchange site is



The equilibrium constant for this ion-exchange reaction, which we call the selectivity coefficient, K , is

$$K = \frac{\{-\text{SO}_3^-\text{M}^+\}[\text{H}^+]}{\{-\text{SO}_3^-\text{H}^+\}[M^+]} \quad 12.29$$

where we use brackets $\{ \}$ to indicate a surface concentration instead of a solution concentration. Rearranging equation 12.29 shows us that the distribution ratio, D , for the exchange reaction

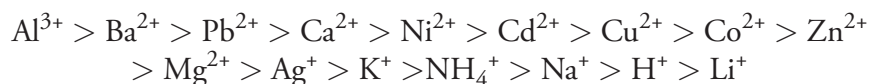
$$D = \frac{\text{amount of } M^+ \text{ in the stationary phase}}{\text{amount of } M^+ \text{ in the mobile phase}}$$

We don't usually think about a solid's concentration. There is a good reason for this. In most cases, a solid's concentration is a constant. If you break a piece of chalk into two parts, for example, the mass and the volume retain the same proportion. When we consider an ion binding to a reactive site on the solid's surface, however, the fraction of sites that are bound, and thus the concentration of bound sites, can take on any value between 0 and some maximum value that is proportional to the density of reactive sites.

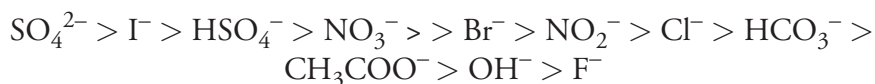
$$D = \frac{\{-\text{SO}_3^-\text{M}^+\}}{[\text{M}^+]} = K \times \frac{\{-\text{SO}_3^-\text{H}^+\}}{[\text{H}^+]} \quad 12.30$$

is a function of the concentration of H^+ and, therefore, the pH of the mobile phase.

An ion-exchange resin's selectivity is somewhat dependent on whether it includes strong or weak exchange sites and on the extent of cross-linking. The latter is particularly important as it controls the resin's permeability, and, therefore, the accessibility of exchange sites. An approximate order of selectivity for a typical strong acid cation exchange resin, in order of decreasing D , is



Note that highly charged ions bind more strongly than ions of lower charge, and that for ions of similar charge, those with a smaller hydrated radius (see [Table 6.2](#) in Chapter 6), or that are more polarizable, bind more strongly. For a strong base anion exchanger the general elution order is



Again, ions of higher charge and of smaller hydrated radius bind more strongly than ions with a lower charge and a larger hydrated radius.

The mobile phase in IEC is usually an aqueous buffer, the pH and ionic composition of which determines a solute's retention time. Gradient elutions are possible in which the mobile phase's ionic strength or pH is changed with time. For example, an IEC separation of cations might use a dilute solution of HCl as the mobile phase. Increasing the concentration of HCl speeds the elution rate for more strongly retained cations because the higher concentration of H^+ allows it to compete more successfully for the ion-exchange sites.

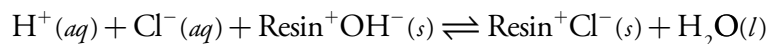
An ion-exchange resin is incorporated into an HPLC column either as 5–11 μm porous polymer beads or by coating the resin on porous silica particles. Columns typically are 250 mm in length with internal diameters ranging from 2–5 mm.

Measuring the conductivity of the mobile phase as it elutes from the column is a universal detector for cationic and anionic analytes. Because the mobile phase contains a high concentration of ions—a mobile phase of dilute HCl, for example, contains significant concentrations of H^+ and Cl^- —we need a method for detecting the analytes in the presence of a significant background conductivity.

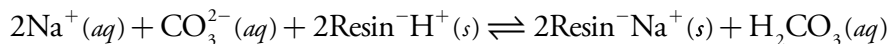
To minimize the mobile phase's contribution to conductivity an **ION-SUPPRESSOR COLUMN** is placed between the analytical column and the detector. This column selectively removes mobile phase ions without removing solute ions. For example, in cation-exchange chromatography using a

From equation 12.30, a cation's distribution ratio, D , becomes smaller when the concentration of H^+ in the mobile phase increases.

dilute solution of HCl as the mobile phase, the suppressor column contains a strong base anion-exchange resin. The exchange reaction



replaces the mobile phase ions H^+ and Cl^- with H_2O . A similar process is used in anion-exchange chromatography where the suppressor column contains a cation-exchange resin. If the mobile phase is a solution of Na_2CO_3 , the exchange reaction



replaces a strong electrolyte, Na_2CO_3 , with a weak electrolyte, H_2CO_3 .

Ion-suppression is necessary when the mobile phase contains a high concentration of ions. **SINGLE-COLUMN ION CHROMATOGRAPHY**, in which an ion-suppressor column is not needed, is possible if the concentration of ions in the mobile phase is small. Typically the stationary phase is a resin with a low capacity for ion-exchange and the mobile phase is a very dilute solution of methane sulfonic acid for cationic analytes, or potassium benzoate or potassium hydrogen phthalate for anionic analytes. Because the background conductivity is sufficiently small, it is possible to monitor a change in conductivity as the analytes elute from the column.

A UV/Vis absorbance detector can also be used if the analytes absorb ultraviolet or visible radiation. Alternatively, we can detect indirectly analytes that do not absorb in the UV/Vis if the mobile phase contains a UV/Vis absorbing species. In this case, when a solute band passes through the detector, a decrease in absorbance is measured at the detector.

Ion-exchange chromatography is an important technique for the analysis of anions and cations in water. For example, an ion-exchange chromatographic analysis for the anions F^- , Cl^- , Br^- , NO_2^- , NO_3^- , PO_4^{3-} , and SO_4^{2-} takes approximately 15 minutes (Figure 12.53). A complete analysis of the same set of anions by a combination of potentiometry and spectrophotometry requires 1–2 days. Ion-exchange chromatography also

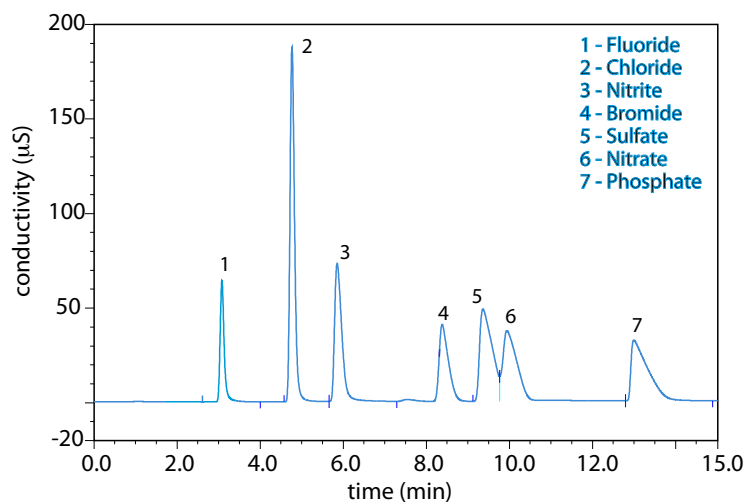


Figure 12.53 Ion-exchange chromatographic analysis of water from Big Walnut Creek in Putnam County, Indiana. Data provided by Jeanette Pope, Department of Geosciences, DePauw University.

has been used for the analysis of proteins, amino acids, sugars, nucleotides, pharmaceuticals, consumer products, and clinical samples.

12F.3 Size-Exclusion Chromatography

We have considered two classes of micron-sized stationary phases in this section: silica particles and cross-linked polymer resin beads. Both materials are porous, with pore sizes ranging from approximately 5–400 nm for silica particles, and from 5 nm to 100 μm for divinylbenzene cross-linked polystyrene resins. In **SIZE-EXCLUSION CHROMATOGRAPHY**—which also is known by the terms molecular-exclusion or gel permeation chromatography—the separation of solutes depends upon their ability to enter into the pores of the stationary phase. Smaller solutes spend proportionally more time within the pores and take longer to elute from the column.

A stationary phase's size selectivity extends over a finite range. All solutes significantly smaller than the pores move through the column's entire volume and elute simultaneously, with a retention volume, V_r , of

$$V_r = V_i + V_o \quad 12.31$$

where V_i is the volume of mobile phase occupying the stationary phase's pore space, and V_o is volume of mobile phase in the remainder of the column. The largest solute for which equation 12.31 holds is the column's **INCLUSION LIMIT**, or permeation limit. Those solutes that are too large to enter the pores elute simultaneously with an retention volume of

$$V_r = V_o \quad 12.32$$

Equation 12.32 defines the column's **EXCLUSION LIMIT**.

For a solute whose size is between the inclusion limit and the exclusion limit, the amount of time it spends in the stationary phase's pore space is proportional to its size. The retention volume for these solutes is

$$V_r = V_o + DV_i \quad 12.33$$

where D is the solute's distribution ratio, which ranges from 0 at the exclusion limit, to 1 at the inclusion limit. Equation 12.33 assumes that size-exclusion is the only interaction between the solute and the stationary phase that affects the separation. For this reason, stationary phases using silica particles are deactivated as described earlier, and polymer resins are synthesized without exchange sites.

Size-exclusion chromatography provides a rapid means for separating larger molecules, including polymers and biomolecules. A stationary phase for proteins consisting of particles with 30 nm pores has an inclusion limit of 7500 g/mol and an exclusion limit of 1.2×10^6 g/mol. Mixtures containing proteins spanning a wider range of molecular weights can be separated by joining together in series several columns with different inclusion and exclusion limits.

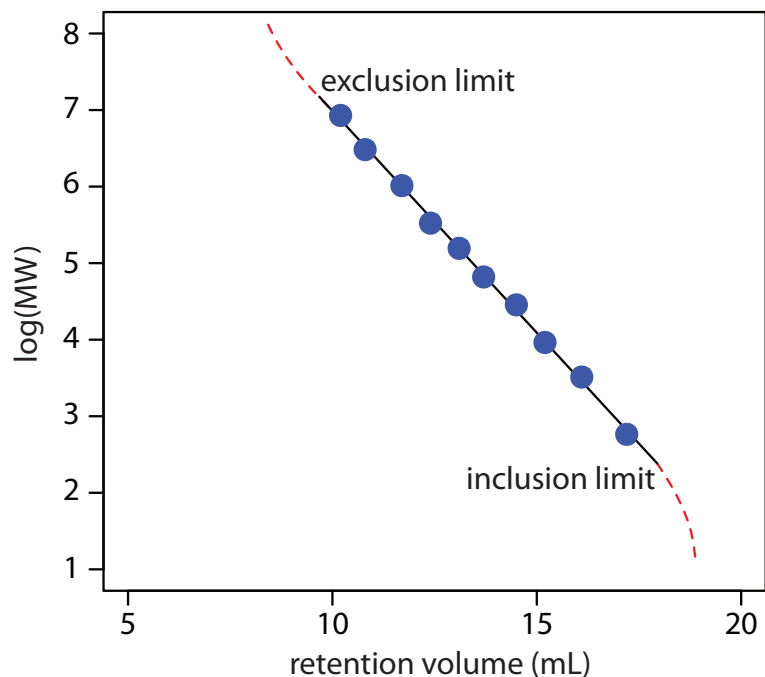


Figure 12.54 Calibration curve for the determination of molecular weight by size-exclusion chromatography. The data shown here are adapted from Rouessac, F.; Rouessac, A. *Chemical Analysis: Modern Instrumentation Methods and Techniques*, Wiley: Chichester, England, 2004, p 141.

Another important application of size-exclusion chromatography is the estimation of a solute's molecular weight (MW). Calibration curves are prepared using a series of standards of known molecular weight and measuring each standard's retention volume. As shown in Figure 12.54, a plot of $\log(\text{MW})$ versus V_r is roughly linear between the exclusion limit and the inclusion limit. Because a solute's retention volume is influenced by both its size and its shape, a reasonably accurate estimation of molecular weight is possible only if the standards are carefully chosen to minimize the effect of shape.

Size-exclusion chromatography can be carried out using conventional HPLC instrumentation, replacing the HPLC column with an appropriate size-exclusion column. A UV/Vis detector is the most common means for obtaining the chromatogram.

12F.4 Supercritical Fluid Chromatography

Although there are many analytical applications of gas chromatography and liquid chromatography, they can not separate and analyze all types of samples. Capillary column GC can separate complex mixtures with excellent resolution and short analysis times. Its application is limited, however, to volatile analytes or to analytes made volatile by a suitable derivatization reaction. Liquid chromatography can separate a wider range of solutes than GC, but the most commonly used detectors—UV, fluorescence, and electrochemical—have poorer detection limits and smaller linear ranges than GC detectors, and are not as nearly universal in their selectivity.

For some samples, **SUPERCritical FLUID CHROMATOGRAPHY** (SFC) provides a useful alternative to gas chromatography and liquid chromatogra-

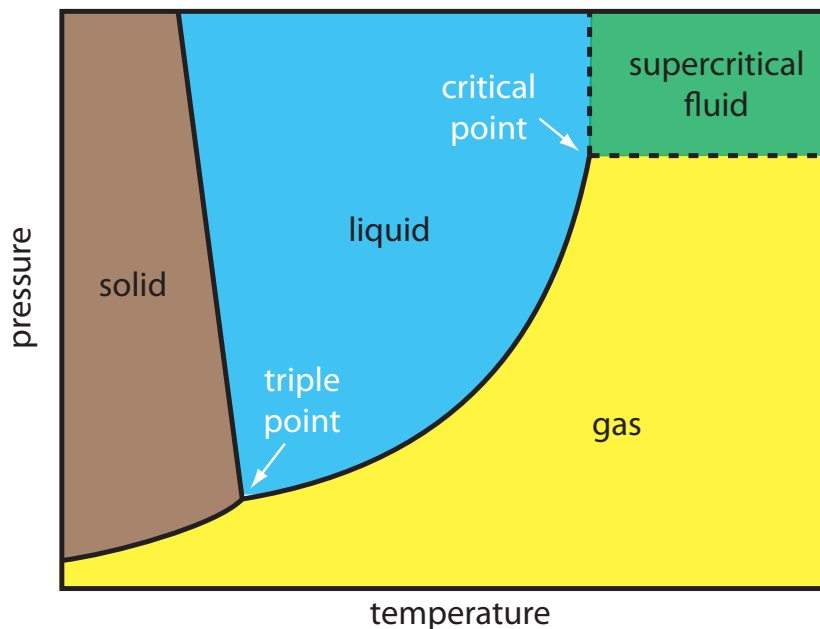


Figure 12.55 Phase diagram showing the combinations of temperature and pressure for which a compound is in its **solid state**, its **liquid state**, and its **gas state**. For pressures and temperatures above the compound's critical point, the compound is a **supercritical fluid** with properties intermediate between a gas and a liquid.

Click [here](#) to see an interesting video demonstration of supercritical fluids from Nottingham Science City at the University of Nottingham.

phy. The mobile phase in supercritical fluid chromatography is a gas held at a temperature and pressure that exceeds its critical point (Figure 12.55). Under these conditions the mobile phase is neither a gas nor a liquid. Instead, the mobile phase is a supercritical fluid.

The properties of a supercritical fluid, as shown in Table 12.8, are intermediate between those of a gas and a liquid. Specifically, the viscosity of a supercritical fluid is similar to that for a gas, which means we can move a supercritical fluid through a capillary or a packed column without the high pressures needed in HPLC. Analysis time and resolution, although not as good as in GC, are usually better than in conventional HPLC. The density of a supercritical fluid is much closer to that of a liquid, which explains why supercritical fluids are good solvents. The mobile phase in SFC, therefore, behaves more like the liquid mobile phase in HPLC than the gaseous mobile phase in GC.

The most common mobile phase for supercritical fluid chromatography is CO_2 . Its low critical temperature, 3°C , and critical pressure, 72.9 atm,

Table 12.8 Typical Properties of Gases, Liquids, and Supercritical Fluids

phase	density (g cm^{-3})	viscosity ($\text{g cm}^{-1} \text{s}^{-1}$)	diffusion coefficient ($\text{cm}^2 \text{s}^{-1}$)
gas	$\approx 10^{-3}$	$\approx 10^{-4}$	≈ 0.1
supercritical fluid	$\approx 0.1\text{--}1$	$\approx 10^{-4}\text{--}10^{-3}$	$\approx 10^{-4}\text{--}10^{-3}$
liquid	≈ 1	$\approx 10^{-2}$	$< 10^{-5}$

Table 12.9 Critical Points for Selected Supercritical Fluids

compound	critical temperature (°C)	critical pressure (atm)
carbon dioxide	31.3	72.9
ethane	32.4	48.3
nitrous oxide	36.5	71.4
ammonia	132.3	111.3
diethyl ether	193.6	36.3
isopropanol	235.3	47.0
methanol	240.5	78.9
ethanol	243.4	63.0
water	374.4	226.8

are relatively easy to achieve and maintain. Although supercritical CO₂ is a good solvent for nonpolar organics, it is less useful for polar solutes. The addition of an organic modifier, such as methanol, improves the mobile phase's elution strength. Other common mobile phases and their critical temperatures and pressures are listed in Table 12.9.

The instrumentation for supercritical fluid chromatography is essentially the same as that for a standard HPLC. The only important additions are a heated oven for the column and a pressure restrictor downstream from the column to maintain the critical pressure. Gradient elutions are accomplished by changing the applied pressure over time. The resulting change in the mobile phase's density affects its solvent strength. Detection can be accomplished using standard GC detectors or HPLC detectors. Supercritical fluid chromatography has found many applications in the analysis of polymers, fossil fuels, waxes, drugs, and food products.

12G Electrophoresis

ELECTROPHORESIS is a class of separation techniques in which we separate analytes by their ability to move through a conductive medium—usually an aqueous buffer—in response to an applied electric field. In the absence of other effects, cations migrate toward the electric field's negatively charged cathode. Cations with larger charge-to-size ratios—which favors ions of larger charge and of smaller size—migrate at a faster rate than larger cations with smaller charges. Anions migrate toward the positively charged anode and neutral species do not experience the electrical field and remain stationary.

There are several forms of electrophoresis. In slab gel electrophoresis the conducting buffer is retained within a porous gel of agarose or polyacrylamide. Slabs are formed by pouring the gel between two glass plates separated by spacers. Typical thicknesses are 0.25–1 mm. Gel electrophoresis is an important technique in biochemistry where it is frequently used for separating DNA fragments and proteins. Although it is a powerful tool for the

As we will see shortly, under normal conditions even neutral species and anions migrate toward the cathode.

qualitative analysis of complex mixtures, it is less useful for quantitative work.

In **CAPILLARY ELECTROPHORESIS** the conducting buffer is retained within a capillary tube whose inner diameter is typically 25–75 μm . Samples are injected into one end of the capillary tube. As the sample migrates through the capillary its components separate and elute from the column at different times. The resulting **ELECTROPHEROGAM** looks similar to a GC or an HPLC chromatogram, providing both qualitative and quantitative information. Only capillary electrophoretic methods receive further consideration in this section.

12G.1 Theory of Capillary Electrophoresis

In capillary electrophoresis we inject the sample into a buffered solution retained within a capillary tube. When an electric field is applied across the capillary tube, the sample's components migrate as the result of two types of action: electrophoretic mobility and electroosmotic mobility. **ELECTROPHORETIC MOBILITY** is the solute's response to the applied electrical field. As described earlier, cations move toward the negatively charged cathode, anions move toward the positively charged anode, and neutral species remain stationary. The other contribution to a solute's migration is **ELECTROOSMOTIC FLOW**, which occurs when the buffer moves through the capillary in response to the applied electrical field. Under normal conditions the buffer moves toward the cathode, sweeping most solutes, including the anions and neutral species, toward the negatively charged cathode.

ELECTROPHORETIC MOBILITY

The velocity with which a solute moves in response to the applied electric field is called its **ELECTROPHORETIC VELOCITY**, v_{ep} ; it is defined as

$$v_{\text{ep}} = \mu_{\text{ep}} E \quad 12.34$$

where μ_{ep} is the solute's electrophoretic mobility, and E is the magnitude of the applied electrical field. A solute's electrophoretic mobility is defined as

$$\mu_{\text{ep}} = \frac{q}{6\pi\eta r} \quad 12.35$$

where q is the solute's charge, η is the buffer viscosity, and r is the solute's radius. Using equation 12.34 and equation 12.35 we can make several important conclusions about a solute's electrophoretic velocity. Electrophoretic mobility and, therefore, electrophoretic velocity, increases for more highly charged solutes and for solutes of smaller size. Because q is positive for a cation and negative for an anion, these species migrate in opposite directions. Neutral species, for which q is zero, have an electrophoretic velocity of zero.

ELECTROSMOTIC MOBILITY

When an electrical field is applied to a capillary filled with an aqueous buffer we expect the buffer's ions to migrate in response to their electrophoretic mobility. Because the solvent, H_2O , is neutral we might reasonably expect it to remain stationary. What we observe under normal conditions, however, is that the buffer solution moves towards the cathode. This phenomenon is called the electroosmotic flow.

Electroosmotic flow occurs because the walls of the capillary tubing are electrically charged. The surface of a silica capillary contains large numbers of silanol groups ($-\text{SiOH}$). At pH levels greater than approximately 2 or 3, the silanol groups ionize to form negatively charged silanate ions ($-\text{SiO}^-$). Cations from the buffer are attracted to the silanate ions. As shown in Figure 12.56, some of these cations bind tightly to the silanate ions, forming a fixed layer. Because the cations in the fixed layer only partially neutralize the negative charge on the capillary walls, the solution adjacent to the fixed layer—what we call the diffuse layer—contains more cations than anions. Together these two layers are known as the double layer. Cations in the diffuse layer migrate toward the cathode. Because these cations are solvated, the solution is also pulled along, producing the electroosmotic flow.

The anions in the diffuse layer, which also are solvated, try to move toward the anode. Because there are more cations than anions, however, the cations win out and the electroosmotic flow moves in the direction of the cathode.

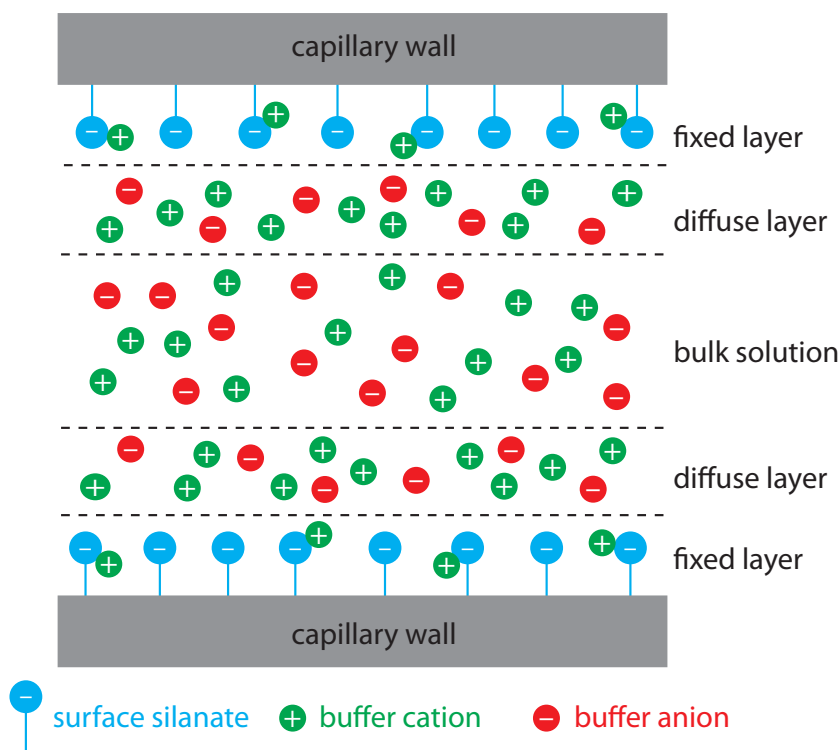


Figure 12.56 Schematic diagram showing the origin of the double layer within a capillary tube. Although the net charge within the capillary is zero, the distribution of charge is not. The walls of the capillary have an excess of negative charge, which decreases across the fixed layer and the diffuse layer, reaching a value of zero in bulk solution.

The rate at which the buffer moves through the capillary, what we call its **ELECTROOSMOTIC FLOW VELOCITY**, v_{cof} is a function of the applied electric field, E , and the buffer's electroosmotic mobility, μ_{cof} .

$$v_{\text{cof}} = \mu_{\text{cof}} E \quad 12.36$$

Electroosmotic mobility is defined as

$$\mu_{\text{cof}} = \frac{\epsilon \zeta}{4\pi\eta} \quad 12.37$$

where ϵ is the buffer dielectric constant, ζ is the zeta potential, and η is the buffer viscosity.

The **ZETA POTENTIAL**—the potential of the diffuse layer at a finite distance from the capillary wall—plays an important role in determining the electroosmotic flow velocity. Two factors determine the zeta potential's value. First, the zeta potential is directly proportional to the charge on the capillary walls, with a greater density of silanate ions corresponding to a larger zeta potential. Below a pH of 2 there are few silanate ions, and the zeta potential and electroosmotic flow velocity are zero. As the pH increases, both the zeta potential and the electroosmotic flow velocity increase. Second, the zeta potential is directly proportional to the thickness of the double layer. Increasing the buffer's ionic strength provides a higher concentration of cations, decreasing the thickness of the double layer and decreasing the electroosmotic flow.

The electroosmotic flow profile is very different from that of a fluid moving under forced pressure. Figure 12.57 compares the electroosmotic flow profile with that the hydrodynamic flow profile in gas chromatography and liquid chromatography. The uniform, flat profile for electroosmosis helps minimize band broadening in capillary electrophoresis, improving separation efficiency.

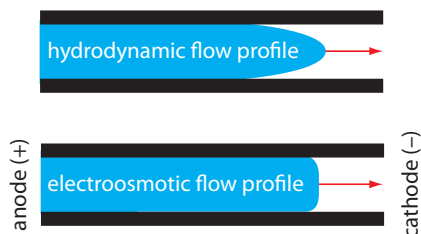


Figure 12.57 Comparison of hydrodynamic flow and electroosmotic flow. The nearly uniform electroosmotic flow profile means that the electroosmotic flow velocity is nearly constant across the capillary.

TOTAL MOBILITY

A solute's total velocity, v_{tot} , as it moves through the capillary is the sum of its electrophoretic velocity and the electroosmotic flow velocity.

$$v_{\text{tot}} = v_{\text{ep}} + v_{\text{cof}}$$

As shown in [Figure 12.58](#), under normal conditions the following general relationships hold true.

$$(v_{\text{tot}})_{\text{cations}} > v_{\text{cof}}$$

$$(v_{\text{tot}})_{\text{neutrals}} = v_{\text{cof}}$$

$$(v_{\text{tot}})_{\text{anions}} < v_{\text{cof}}$$

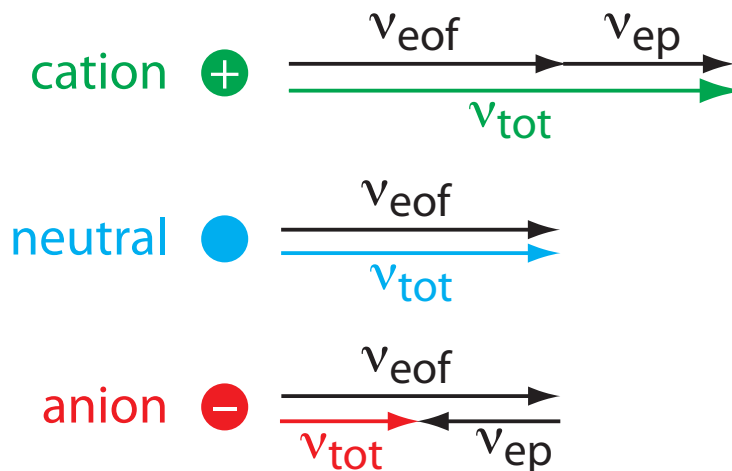


Figure 12.58 Visual explanation for the general elution order in capillary electrophoresis. Each species has the same electroosmotic flow, v_{eof} . Cations elute first because they have a positive electrophoretic velocity, v_{ep} . Anions elute last because their negative electrophoretic velocity partially offsets the electroosmotic flow velocity. Neutrals elute with a velocity equal to the electroosmotic flow.

Cations elute first in an order corresponding to their electrophoretic mobilities, with small, highly charged cations eluting before larger cations of lower charge. Neutral species elute as a single band with an elution rate equal to the electroosmotic flow velocity. Finally, anions are the last components to elute, with smaller, highly charged anions having the longest elution time.

MIGRATION TIME

Another way to express a solute's velocity is to divide the distance it travels by the elapsed time

$$v_{tot} = \frac{l}{t_m} \quad 12.38$$

where l is the distance between the point of injection and the detector, and t_m is the solute's migration time. To understand the experimental variables affecting migration time, we begin by noting that

$$v_{tot} = \mu_{tot} E = (\mu_{ep} + \mu_{eof}) E \quad 12.39$$

Combining equation 12.38 and equation 12.39 and solving for t_m leaves us with

$$t_m = \frac{l}{(\mu_{ep} + \mu_{eof}) E} \quad 12.40$$

Finally, the magnitude of the electrical field is

$$E = \frac{V}{L} \quad 12.41$$

where V is the applied potential and L is the length of the capillary tube. Finally, substituting equation 12.41 into [equation 12.40](#) leaves us with the following equation for a solute's migration time.

$$t_m = \frac{lL}{(\mu_{ep} + \mu_{eof})V} \quad 12.42$$

To decrease a solute's migration time—and shorten the analysis time—we can apply a higher voltage or use a shorter capillary tube. We can also shorten the migration time by increasing the electroosmotic flow, although this decreases resolution.

From [equation 12.10](#) and [equation 12.11](#), we know that the number of theoretical plates for a solute is

$$N = \frac{l^2}{\sigma^2}$$

where l is the distance the solute travels and σ is the standard deviation for the solute's band broadening. For capillary electrophoresis band broadening is due to longitudinal diffusion and is equivalent to $2Dt_m$, where t_m is the migration time.

It is possible to design an electrophoretic experiment so that anions elute before cations—more about this later—in which smaller, more highly charged anions elute with greater efficiencies.

EFFICIENCY

As we learned in Section 12B.4, the efficiency of a separation is given by the number of theoretical plates, N . In capillary electrophoresis the number of theoretic plates is

$$N = \frac{l^2}{2Dt_m} = \frac{(\mu_{ep} + \mu_{eof})Vl}{2DL} \quad 12.43$$

where D is the solute's diffusion coefficient. From equation 12.43, the efficiency of a capillary electrophoretic separation increases with higher voltages. Increasing the electroosmotic flow velocity improves efficiency, but at the expense of resolution. Two additional observations deserve comment. First, solutes with larger electrophoretic mobilities—in the same direction as the electroosmotic flow—have greater efficiencies; thus, smaller, more highly charged cations are not only the first solutes to elute, but do so with greater efficiency. Second, efficiency in capillary electrophoresis is independent of the capillary's length. Theoretical plate counts of approximately 100,000–200,000 are not unusual.

SELECTIVITY

In chromatography we defined the selectivity between two solutes as the ratio of their retention factors (see [equation 12.9](#)). In capillary electrophoresis the analogous expression for selectivity is

$$\alpha = \frac{\mu_{ep,1}}{\mu_{ep,2}}$$

where $\mu_{ep,1}$ and $\mu_{ep,2}$ are the electrophoretic mobilities for the two solutes, chosen such that $\alpha \geq 1$. We can often improve selectivity by adjusting the pH of the buffer solution. For example, NH_4^+ is a weak acid with a $\text{p}K_a$ of 9.75. At a pH of 9.75 the concentrations of NH_4^+ and NH_3 are equal. De-

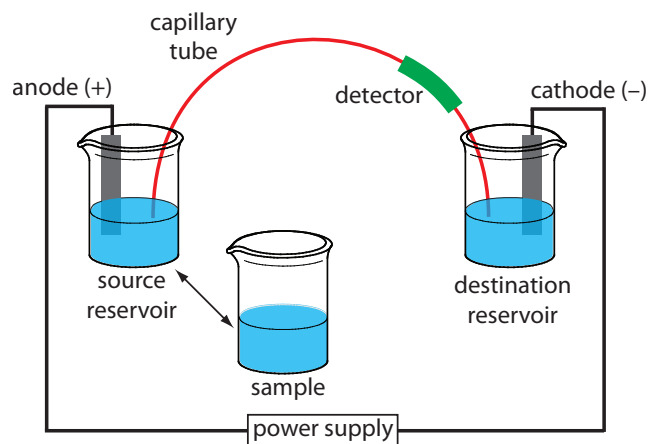


Figure 12.59 Schematic diagram of the basic instrumentation for capillary electrophoresis. The sample and the source reservoir are switched when making injections.

creasing the pH below 9.75 increases its electrophoretic mobility because a greater fraction of the solute is present as the cation NH_4^+ . On the other hand, raising the pH above 9.75 increases the proportion of the neutral NH_3 , decreasing its electrophoretic mobility.

RESOLUTION

The resolution between two solutes is

$$R = \frac{0.177(\mu_{\text{ep},1} - \mu_{\text{ep},2})\sqrt{V}}{\sqrt{D(\mu_{\text{avg}} - \mu_{\text{cof}})}} \quad 12.44$$

where μ_{avg} is the average electrophoretic mobility for the two solutes. Increasing the applied voltage and decreasing the electroosmotic flow velocity improves resolution. The latter effect is particularly important. Although increasing electroosmotic flow improves analysis time and efficiency, it decreases resolution.

12G.2 Instrumentation

The basic instrumentation for capillary electrophoresis is shown in Figure 12.59 and includes a power supply for applying the electric field, anode and cathode compartments containing reservoirs of the buffer solution, a sample vial containing the sample, the capillary tube, and a detector. Each part of the instrument receives further consideration in this section.

CAPILLARY TUBES

Figure 12.60 shows a cross-section of a typical capillary tube. Most capillary tubes are made from fused silica coated with a 15–35 μm layer of polyimide to give it mechanical strength. The inner diameter is typically 25–75 μm —smaller than the internal diameter of a capillary GC column—with an outer diameter of 200–375 μm .

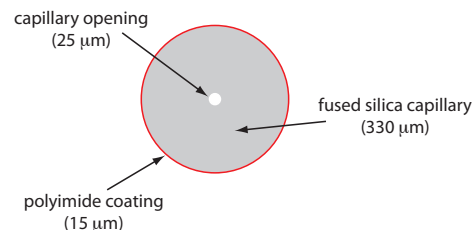


Figure 12.60 Cross section of a capillary column for capillary electrophoresis. The dimensions shown here are typical and are scaled proportionally.

The capillary column's narrow opening and the thickness of its walls are important. When an electric field is applied to the buffer solution within the capillary, current flows through the capillary. This current leads to the release of heat—what we call **JOULE HEATING**. The amount of heat released is proportional to the capillary's radius and the magnitude of the electrical field. Joule heating is a problem because it changes the buffer solution's viscosity, with the solution at the center of the capillary being less viscous than that near the capillary walls. Because a solute's electrophoretic mobility depends on viscosity (see [equation 12.35](#)), solute species in the center of the capillary migrate at a faster rate than those near the capillary walls. The result is an additional source of band broadening that degrades the separation. Capillaries with smaller inner diameters generate less Joule heating, and capillaries with larger outer diameters are more effective at dissipating the heat. Placing the capillary tube inside a thermostated jacket is another method for minimizing the effect of Joule heating; in this case a smaller outer diameter allows for a more rapid dissipation of thermal energy.

INJECTING THE SAMPLE

There are two commonly used methods for injecting a sample into a capillary electrophoresis column: hydrodynamic injection and electrokinetic injection. In both methods the capillary tube is filled with the buffer solution. One end of the capillary tube is placed in the destination reservoir and the other end is placed in the sample vial.

HYDRODYNAMIC INJECTION uses pressure to force a small portion of sample into the capillary tubing. A difference in pressure is applied across the capillary by either pressurizing the sample vial or by applying a vacuum to the destination reservoir. The volume of sample injected, in liters, is given by the following equation

$$V_{\text{inj}} = \frac{Pd^4\pi t}{128\eta L} \times 10^3 \quad 12.45$$

where ΔP is the difference in pressure across the capillary in pascals, d is the capillary's inner diameter in meters, t is the amount of time that the pressure is applied in seconds, η is the buffer's viscosity in $\text{kg m}^{-1} \text{s}^{-1}$, and L is the length of the capillary tubing in meters. The factor of 10^3 changes the units from cubic meters to liters.

Example 12.9

In a hydrodynamic injection we apply a pressure difference of 2.5×10^3 Pa (a $\Delta P \approx 0.02$ atm) for 2 s to a 75-cm long capillary tube with an internal diameter of 50 μm . Assuming that the buffer's viscosity is $10^{-3} \text{ kg m}^{-1} \text{ s}^{-1}$, what volume and length of sample did we inject?



For a hydrodynamic injection we move the capillary from the source reservoir to the sample. The anode remains in the source reservoir.

A hydrodynamic injection is also possible by raising the sample vial above the destination reservoir and briefly inserting the filled capillary.

If you want to verify the units in equation 12.45, recall from [Table 2.2](#) that 1 Pa is equivalent to $1 \text{ kg m}^{-1} \text{ s}^{-2}$.

SOLUTION

Making appropriate substitutions into [equation 12.45](#) gives the sample's volume as

$$V_{\text{inj}} = \frac{(2.5 \times 10^3 \text{ kg m}^{-1} \text{ s}^{-2})(50 \times 10^{-6} \text{ m})^4 (3.14)(2 \text{ s})}{(128)(0.001 \text{ kg m}^{-1} \text{ s}^{-1})(0.75 \text{ m})} \times 10^3 \text{ L/m}^3$$

$$V_{\text{inj}} = 1 \times 10^{-9} \text{ L} = 1 \text{ nL}$$

Because the interior of the capillary is cylindrical, the length of the sample, l , is easy to calculate using the equation for the volume of a cylinder; thus

$$l = \frac{V_{\text{inj}}}{\pi r^2} = \frac{(1.0 \times 10^{-9} \text{ L})(10^{-3} \text{ m}^3/\text{L})}{(3.14)(25 \times 10^{-6} \text{ m})^2} = 5 \times 10^{-4} \text{ m} = 0.5 \text{ mm}$$

Practice Exercise 12.9

Suppose that you need to limit your injection to less than 0.20% of the capillary's length. Using the information from [Example 12.9](#), what is the maximum injection time for a hydrodynamic injection?

Click [here](#) to review your answer to this exercise.

In an **ELECTROKINETIC INJECTION** we place both the capillary and the anode into the sample and briefly apply an potential. The volume of injected sample is the product of the capillary's cross sectional area and the length of the capillary occupied by the sample. In turn, this length is the product of the solute's velocity (see [equation 12.39](#)) and time; thus

$$V_{\text{inj}} = \pi r^2 \times L = \pi r^2 \times (\mu_{\text{ep}} + \mu_{\text{eof}}) E' t \quad 12.46$$

where r is the capillary's radius, L is the length of the capillary, and E' is effective electric field in the sample. An important consequence of equation 12.46 is that an electrokinetic injection is inherently biased toward solutes with larger electrophoretic mobilities. If two solutes have equal concentrations in a sample, we inject a larger volume—and thus more moles—of the solute with the larger μ_{ep} .

When a analyte's concentration is too small to detect reliably, it may be possible to inject it in a manner that increases its concentration in the capillary tube. This method of injection is called **STACKING**. Stacking is accomplished by placing the sample in a solution whose ionic strength is significantly less than that of the buffer in the capillary tube. Because the sample plug has a lower concentration of buffer ions, the effective field strength across the sample plug, E' is larger than that in the rest of the capillary.

We know from [equation 12.34](#) that electrophoretic velocity is directly proportional to the electrical field. As a result, the cations in the sample

The electric field in the sample is different than the electric field in the rest of the capillary because the sample and the buffer have different ionic compositions. In general, the sample's ionic strength is smaller, which makes its conductivity smaller. The effective electric field is

$$E' = E \times \frac{\kappa_{\text{buf}}}{\kappa_{\text{sam}}}$$

where κ_{buf} and κ_{sam} are the conductivities of the buffer and the sample, respectively.

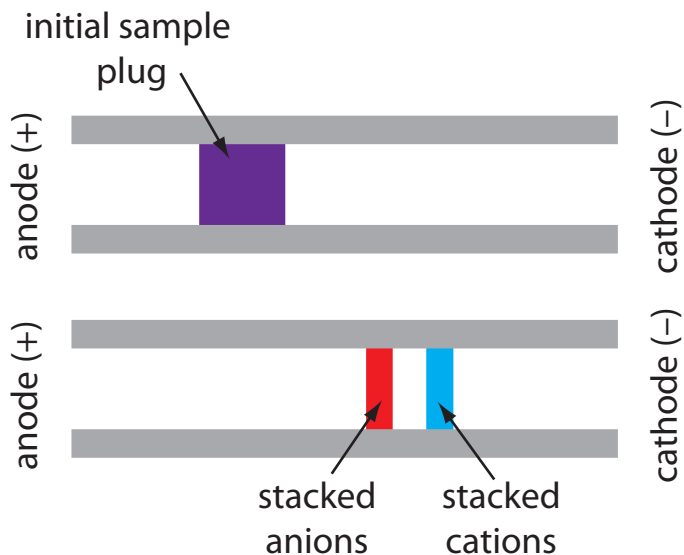


Figure 12.61 The stacking of cations and anions. The top diagram shows the initial sample plug and the bottom diagram shows how the cations and anions become concentrated at opposite sides of the sample plug.

plug migrate toward the cathode with a greater velocity, and the anions migrate more slowly—neutral species are unaffected and move with the electroosmotic flow. When the ions reach their respective boundaries between the sample plug and the buffering solution, the electrical field decreases and the electrophoretic velocity of cations decreases and that for anions increases. As shown in Figure 12.61, the result is a stacking of cations and anions into separate, smaller sampling zones. Over time, the buffer within the capillary becomes more homogeneous and the separation proceeds without additional stacking.

APPLYING THE ELECTRICAL FIELD

Migration in electrophoresis occurs in response to an applied electrical field. The ability to apply a large electrical field is important because higher voltages lead to shorter analysis times (see [equation 12.42](#)), more efficient separations ([equation 12.43](#)), and better resolution ([equation 12.44](#)). Because narrow bored capillary tubes dissipate Joule heating so efficiently, voltages of up to 40 kV are possible.

DETECTORS

Most of the detectors used in HPLC also find use in capillary electrophoresis. Among the more common detectors are those based on the absorption of UV/Vis radiation, fluorescence, conductivity, amperometry, and mass spectrometry. Whenever possible, detection is done “on-column” before the solutes elute from the capillary tube and additional band broadening occurs.

UV/Vis detectors are among the most popular. Because absorbance is directly proportional to path length, the capillary tubing’s small diameter leads to signals that are smaller than those obtained in HPLC. Several approaches have been used to increase the pathlength, including a Z-shaped

Because of the high voltages, be sure to follow your instrument’s safety guidelines.

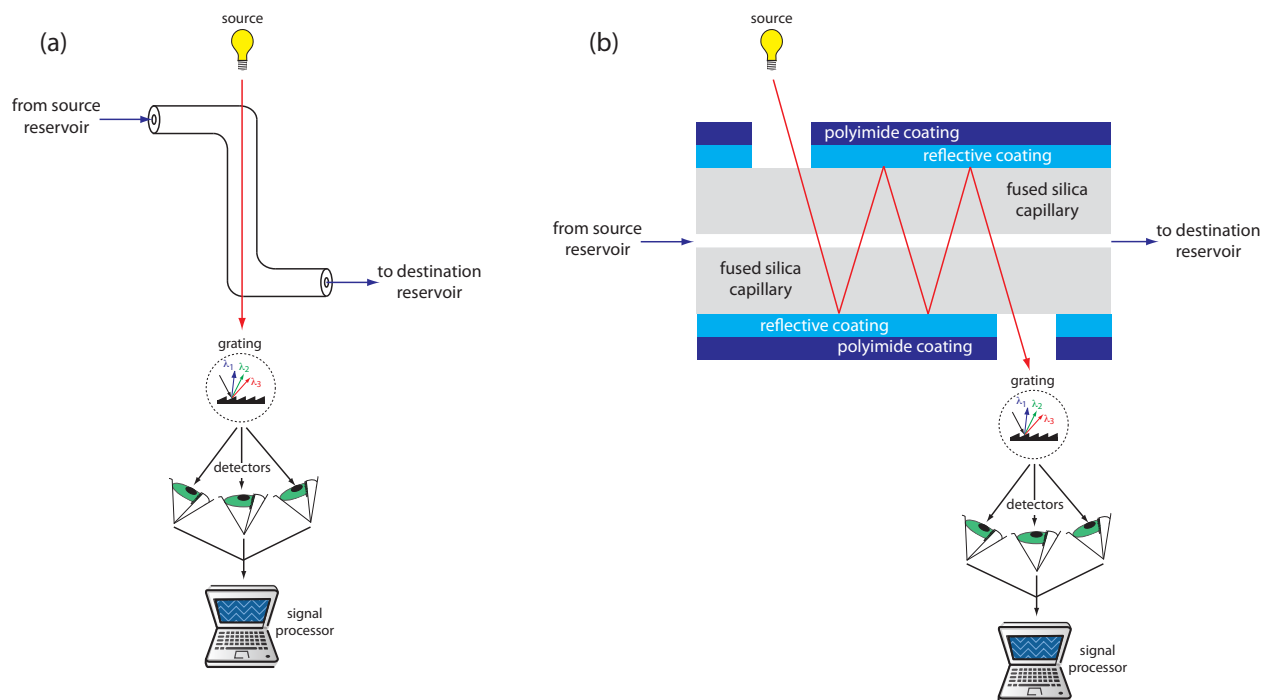


Figure 12.62 Two approaches to on-column detection in capillary electrophoresis using a UV/Vis diode array spectrometer: (a) Z-shaped bend in capillary, and (b) multiple reflections.

sample cell and multiple reflections (see Figure 12.62). Detection limits are about 10^{-7} M.

Better detection limits are obtained using fluorescence, particularly when using a laser as an excitation source. When using fluorescence detection a small portion of the capillary's protective coating is removed and the laser beam is focused on the inner portion of the capillary tubing. Emission is measured at an angle of 90° to the laser. Because the laser provides an intense source of radiation that can be focused to a narrow spot, detection limits are as low as 10^{-16} M.

Solutes that do not absorb UV/Vis radiation or that do not undergo fluorescence can be detected by other detectors. [Table 12.10](#) provides a list of detectors for capillary electrophoresis along with some of their important characteristics.

12G.3 Capillary Electrophoresis Methods

There are several different forms of capillary electrophoresis, each of which has its particular advantages. Four of these methods are briefly described in this section.

CAPILLARY ZONE ELECTROPHORESIS (CZE)

The simplest form of capillary electrophoresis is **CAPILLARY ZONE ELECTROPHORESIS**. In CZE we fill the capillary tube with a buffer solution and, after loading the sample, place the ends of the capillary tube in reservoirs containing additional buffer solution. Usually the end of the capillary con-

Table 12.10 Characteristics of Detectors for Capillary Electrophoresis

detector	selectivity universal or analyte must...	detection limit		on-column detection?
		moles injected	molarity	
UV/Vis absorbance	have a UV/Vis chromophore	10^{-13} – 10^{-16}	10^{-5} – 10^{-7}	yes
indirect absorbance	universal	10^{-12} – 10^{-15}	10^{-4} – 10^{-6}	yes
fluorescence	have a favorable quantum yield	10^{-15} – 10^{-17}	10^{-7} – 10^{-9}	yes
laser fluorescence	have a favorable quantum yield	10^{-18} – 10^{-20}	10^{-13} – 10^{-16}	yes
mass spectrometer	universal (total ion) selective (single ion)	10^{-16} – 10^{-17}	10^{-8} – 10^{-10}	no
amperometry	undergo oxidation or reduction	10^{-18} – 10^{-19}	10^{-7} – 10^{-10}	no
conductivity	universal	10^{-15} – 10^{-16}	10^{-7} – 10^{-9}	no
radiometric	be radioactive	10^{-17} – 10^{-19}	10^{-10} – 10^{-12}	yes

Source: Baker, D. R. *Capillary Electrophoresis*, Wiley-Interscience: New York, 1995.

taining the sample is the anode and solutes migrate toward the cathode at a velocity determined by their electrophoretic mobility and the electroosmotic flow. Cations elute first, with smaller, more highly charged cations eluting before larger cations with smaller charges. Neutral species elute as a single band. Anions are the last species to elute, with smaller, more negatively charged anions being the last to elute.

We can reverse the direction of electroosmotic flow by adding an alkylammonium salt to the buffer solution. As shown in Figure 12.63, the positively charged end of the alkyl ammonium ions bind to the negatively charged silanate ions on the capillary's walls. The tail of the alkyl ammonium ion is hydrophobic and associates with the tail of another alkyl ammonium ion. The result is a layer of positive charges that attract anions in the buffer solution. The migration of these solvated anions toward the anode reverses the electroosmotic flow's direction. The order of elution is exactly opposite of that observed under normal conditions.

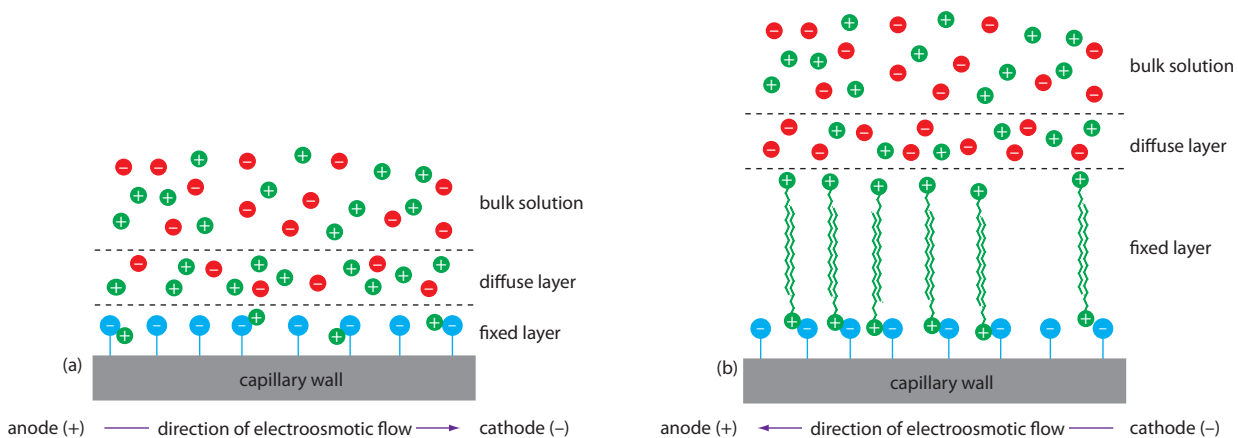


Figure 12.63 Two modes of capillary zone electrophoresis showing (a) normal migration with electroosmotic flow toward the cathode and (b) reversed migration in which the electroosmotic flow is toward the anode.

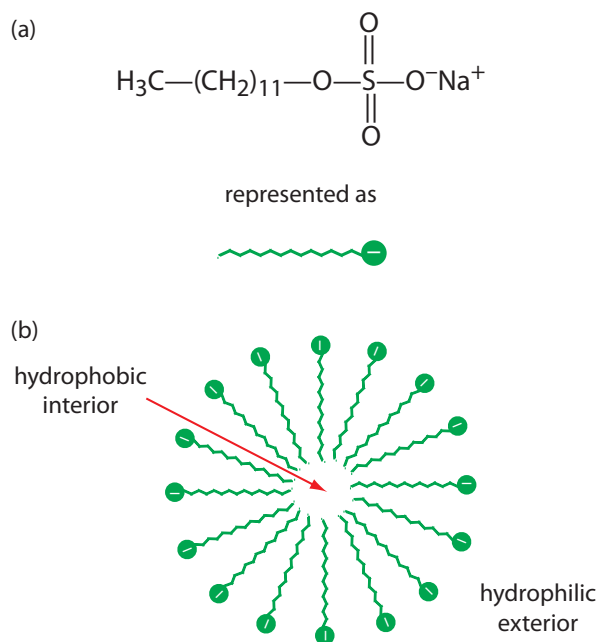


Figure 12.64 (a) Structure of sodium dodecylsulfate and its representation, and (b) cross section through a micelle showing its hydrophobic interior and its hydrophilic exterior.

Coating the capillary's walls with a nonionic reagent eliminates the electroosmotic flow. In this form of CZE the cations migrate from the anode to the cathode. Anions elute into the source reservoir and neutral species remain stationary.

Capillary zone electrophoresis provides effective separations of charged species, including inorganic anions and cations, organic acids and amines, and large biomolecules such as proteins. For example, CZE has been used to separate a mixture of 36 inorganic and organic ions in less than three minutes.¹⁵ A mixture of neutral species, of course, can not be resolved.

MICELLAR ELECTROKINETIC CAPILLARY CHROMATOGRAPHY (MEKC)

One limitation to CZE is its inability to separate neutral species. **MICELLAR ELECTROKINETIC CAPILLARY CHROMATOGRAPHY** overcomes this limitation by adding a surfactant, such as sodium dodecylsulfate (Figure 12.64a) to the buffer solution. Sodium dodecylsulfate, or SDS, has a long-chain hydrophobic tail and a negatively charged ionic functional group at its head. When the concentration of SDS is sufficiently large a micelle forms. A **MICELLE** consists of a spherical agglomeration of 40–100 surfactant molecules in which the hydrocarbon tails point inward and the negatively charged heads point outward (Figure 12.64b).

Because micelles have a negative charge, they migrate toward the cathode with a velocity less than the electroosmotic flow velocity. Neutral species partition themselves between the micelles and the buffer solution in a

¹⁵ Jones, W. R.; Jandik, P. J. *Chromatog.* **1992**, *608*, 385–393.

manner similar to the partitioning of solutes between the two liquid phases in HPLC. Because there is a partitioning between two phases, we include the descriptive term chromatography in the techniques name. Note that in MEKC both phases are mobile.

The elution order for neutral species in MEKC depends on the extent to which each partitions into the micelles. Hydrophilic neutrals are insoluble in the micelle's hydrophobic inner environment and elute as a single band, as they would in CZE. Neutral solutes that are extremely hydrophobic are completely soluble in the micelle, eluting with the micelles as a single band. Those neutral species that exist in a partition equilibrium between the buffer solution and the micelles elute between the completely hydrophilic and completely hydrophobic neutral species. Those neutral species favoring the buffer solution elute before those favoring the micelles. Micellar electrokinetic chromatography has been used to separate a wide variety of samples, including mixtures of pharmaceutical compounds, vitamins, and explosives.

CAPILLARY GEL ELECTROPHORESIS (CGE)

In **CAPILLARY GEL ELECTROPHORESIS** the capillary tubing is filled with a polymeric gel. Because the gel is porous, a solute migrates through the gel with a velocity determined both by its electrophoretic mobility and by its size. The ability to effect a separation using size is helpful when the solutes have similar electrophoretic mobilities. For example, fragments of DNA of varying length have similar charge-to-size ratios, making their separation by CZE difficult. Because the DNA fragments are of different size, a CGE separation is possible.

The capillary used for CGE is usually treated to eliminate electroosmotic flow, preventing the gel's extrusion from the capillary tubing. Samples are injected electrokinetically because the gel provides too much resistance for hydrodynamic sampling. The primary application of CGE is the separation of large biomolecules, including DNA fragments, proteins, and oligonucleotides.

CAPILLARY ELECTROCHROMATOGRAPHY (CEC)

Another approach to separating neutral species is **CAPILLARY ELECTROCHROMATOGRAPHY**. In CEC the capillary tubing is packed with 1.5–3 μm particles coated with a bonded stationary phase. Neutral species separate based on their ability to partition between the stationary phase and the buffer, which is moving as a result of the electroosmotic flow; [Figure 12.65](#) provides a representative example for the separation of a mixture of hydrocarbons. A CEC separation is similar to the analogous HPLC separation, but without the need for high pressure pumps. Efficiency in CEC is better than in HPLC, and analysis times are shorter.

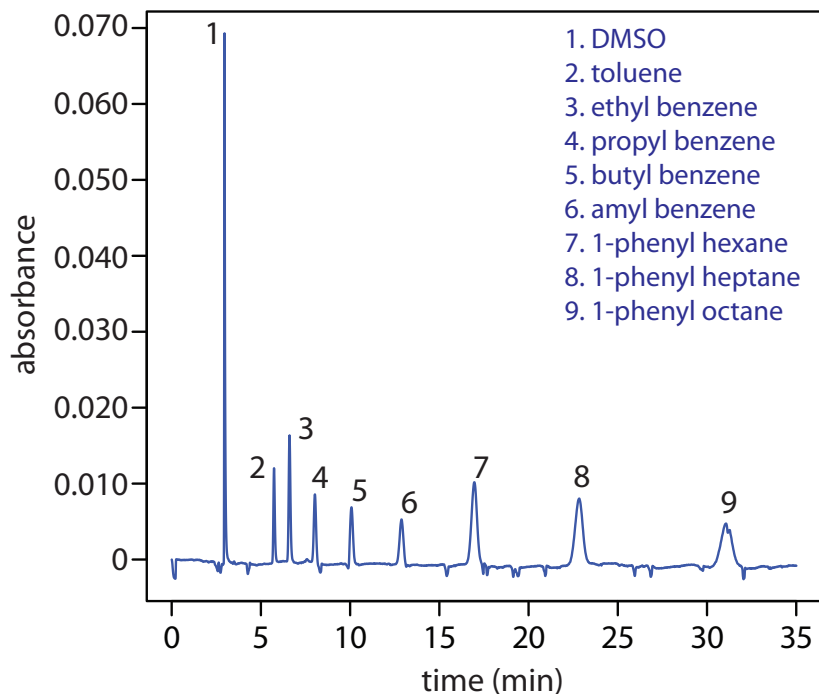


Figure 12.65 Capillary electrochromatographic separation of a mixture of hydrocarbons in DMSO. The column contains a porous polymer of butyl methacrylate and lauryl acrylate (25%:75% mol:mol) with butane dioldacrylate as a crosslinker. Data provided by Zoe LaPier and Michelle Bushey, Department of Chemistry, Trinity University.

Representative Method 12.3

Determination of a Vitamin B Complex by CZE or MEKC

DESCRIPTION OF METHOD

The water soluble vitamins B₁ (thiamine hydrochloride), B₂ (riboflavin), B₃ (niacinamide), and B₆ (pyridoxine hydrochloride) are determined by CZE using a pH 9 sodium tetraborate-sodium dihydrogen phosphate buffer or by MEKC using the same buffer with the addition of sodium dodecyl sulfate. Detection is by UV absorption at 200 nm. An internal standard of *o*-ethoxybenzamide is used to standardize the method.

PROCEDURE

Crush a vitamin B complex tablet and place it in a beaker with 20.00 mL of a 50 % v/v methanol solution that is 20 mM in sodium tetraborate and 100.0 ppm in *o*-ethoxybenzamide. After mixing for 2 min to ensure that the B vitamins are dissolved, pass a 5.00-mL portion through a 0.45- μ m filter to remove insoluble binders. Load an approximately 4 nL sample into a capillary column with an inner diameter of a 50 μ m. For CZE the capillary column contains a 20 mM pH 9 sodium tetraborate-sodium dihydrogen phosphate buffer. For MEKC the buffer is also 150 mM in

The best way to appreciate the theoretical and practical details discussed in this section is to carefully examine a typical analytical method. Although each method is unique, the following description of the determination of a vitamin B complex by capillary zone electrophoresis or by micellar electrokinetic capillary chromatography provides an instructive example of a typical procedure. The description here is based on Smyth, W. F. *Analytical Chemistry of Complex Matrices*, Wiley Teubner: Chichester, England, 1996, pp. 154–156.

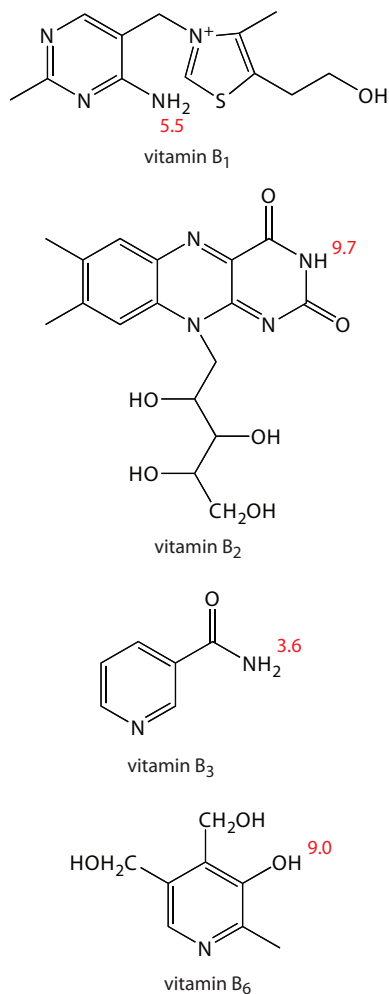


Figure 12.66 Structures of the four water soluble B vitamins in their predominate forms at a pH of 9; pK_a values are shown in red.

You can read more about the use of internal standards in capillary electrophoresis in the following paper: [Altria, K. D. "Improved Performance in Capillary Electrophoresis Using Internal Standards," LC:GC Europe, September 2002.](#)

See [Section 12D.8](#) for an evaluation of gas chromatography, and [Section 12E.6](#) for an evaluation of high-performance liquid chromatography.

sodium dodecyl sulfate. Apply a 40 kV/m electrical field to effect both the CZE and MEKC separations.

QUESTIONS

1. Methanol, which elutes at 4.69 min, is included as a neutral species to indicate the electroosmotic flow. When using standard solutions of each vitamin, CZE peaks are found at 3.41 min, 4.69 min, 6.31 min, and 8.31 min. Examine the structures and pK_a information in Figure 12.66 and identify the order in which the four B vitamins elute.

Vitamin B₁ is a cation and elutes before the neutral species methanol; thus it is the compound that elutes at 3.41 min. Vitamin B₃ is a neutral species and elutes with methanol at 4.69 min. The remaining two B vitamins are weak acids that partially ionize to weak base anions in the pH 9 buffer. Of the two, vitamin B₆ is the stronger acid (a pK_a of 9.0 versus a pK_a of 9.7) and is present to a greater extent in its anionic form. Vitamin B₆, therefore, is the last of the vitamins to elute.

2. The order of elution when using MEKC is vitamin B₃ (5.58 min), vitamin B₆ (6.59 min), vitamin B₂ (8.81 min), and vitamin B₁ (11.21 min). What conclusions can you make about the solubility of the B vitamins in the sodium dodecylsulfate micelles? The micelles elute at 17.7 min.

The elution time for vitamin B₁ shows the greatest change, increasing from 3.41 min to 11.21 minutes. Clearly vitamin B₁ has the greatest solubility in the micelles. Vitamin B₂ and vitamin B₃ have a more limited solubility in the micelles, showing only slightly longer elution times in the presence of the micelles. Interestingly, the elution time for vitamin B₆ decreases in the presence of the micelles.

3. For quantitative work an internal standard of o-ethoxybenzamide is added to all samples and standards. Why is an internal standard necessary?

Although the method of injection is not specified, neither a hydrodynamic injection nor an electrokinetic injection is particularly reproducible. The use of an internal standard compensates for this limitation.

12G.4 Evaluation

When compared to GC and HPLC, capillary electrophoresis provides similar levels of accuracy, precision, and sensitivity, and a comparable degree of selectivity. The amount of material injected into a capillary electrophoretic column is significantly smaller than that for GC and HPLC—typically 1 nL versus 0.1 μ L for capillary GC and 1–100 μ L for HPLC. Detection limits for capillary electrophoresis, however, are 100–1000 times poorer than that for GC and HPLC. The most significant advantages of capillary

electrophoresis are improvements in separation efficiency, time, and cost. Capillary electrophoretic columns contain substantially more theoretical plates ($\approx 10^6$ plates/m) than that found in HPLC ($\approx 10^5$ plates/m) and capillary GC columns ($\approx 10^3$ plates/m), providing unparalleled resolution and peak capacity. Separations in capillary electrophoresis are fast and efficient. Furthermore, the capillary column's small volume means that a capillary electrophoresis separation requires only a few microliters of buffer solution, compared to 20–30 mL of mobile phase for a typical HPLC separation.

12H Key Terms

adjusted retention time	adsorption chromatography	band broadening
baseline width	bleed	bonded stationary phase
capillary column	capillary electrochromatography	capillary electrophoresis
capillary gel electrophoresis	capillary zone electrophoresis	chromatogram
chromatography	column chromatography	counter-current extraction
cryogenic focusing	electrokinetic injection	electroosmotic flow
electroosmotic flow velocity	electron capture detector	electropherogram
electrophoresis	electrophoretic mobility	electrophoretic velocity
exclusion limit	flame ionization detector	fronting
gas chromatography	gas–liquid chromatography	gas–solid chromatography
general elution problem	guard column	gradient elution
headspace sampling	high-performance liquid chromatography	hydrodynamic injection
inclusion limit	ion-exchange chromatography	ion suppressor column
isocratic elution	isothermal	Joule heating
Kovat's retention index	liquid–solid adsorption chromatography	longitudinal diffusion
loop injector	mass spectrometer	mass spectrum
mass transfer	micelle	micellar electrokinetic capillary chromatography
mobile phase	monolithic column	multiple paths
nonretained solutes	normal-phase chromatography	on-column injection
open tubular column	packed columns	partition chromatography
peak capacity	planar chromatography	polarity index
porous-layer open tubular column	purge-and-trap	resolution
retention factor	retention time	reversed-phase chromatography

As you review this chapter, try to define a key term in your own words. Check your answer by clicking on the key term, which will take you to the page where it was first introduced. Clicking on the **KEY TERM** there, will bring you back to this page so that you can continue with another key term.

selectivity factor	single-column ion chromatography	solid-phase microextraction
split injection	splitless injection	stacking
stationary phase	supercritical fluid chromatography	support-coated open tubular column
tailing	temperature programming	theoretical plate
thermal conductivity detector	van Deemter equation	void time
	wall-coated open-tubular column	zeta potential

12I Summary

Chromatography and electrophoresis are powerful analytical techniques that both separate a sample into its components and provide a means for determining each component's concentration. Chromatographic separations utilize the selective partitioning of the sample's components between a stationary phase that is immobilized within a column and a mobile phase that passes through the column.

The effectiveness of a separation is described by the resolution between two chromatographic bands and is a function of each component's retention factor, the column's efficiency, and the column's selectivity. A solute's retention factor is a measure of its partitioning into the stationary phase, with larger retention factors corresponding to more strongly retained solutes. The column's selectivity for two solutes is the ratio of their retention factors, providing a relative measure of the column's ability to retain the two solutes. Column efficiency accounts for those factors that cause a solute's chromatographic band to increase in width during the separation. Column efficiency is defined in terms of the number of theoretical plates and the height of a theoretical plate, the latter of which is a function of a number of parameters, most notably the mobile phase's flow rate. Chromatographic separations are optimized by either increasing the number of theoretical plates, by increasing the column's selectivity, or by increasing the solute retention factor.

In gas chromatography the mobile phase is an inert gas and the stationary phase is a nonpolar or polar organic liquid that is either coated on a particulate material and packed into a wide-bore column, or coated on the walls of a narrow-bore capillary column. Gas chromatography is useful for the analysis of volatile components.

In high-performance liquid chromatography the mobile phase is either a nonpolar solvent (normal phase) or a polar solvent (reversed-phase). A stationary phase of opposite polarity, which is bonded to a particulate material, is packed into a wide-bore column. HPLC can be applied to a wider range of samples than GC; however, the separation efficiency for HPLC is not as good as that for GC.

Together, GC and HPLC account for the largest number of chromatographic separations. Other separation techniques, however, find specialized applications. Of particular importance are: ion-exchange chromatography for separating anions and cations; size-exclusion chromatography for separating large molecules; and supercritical fluid chromatography for the analysis of samples that are not easily analyzed by GC or HPLC.

In capillary zone electrophoresis a sample's components are separated based on their ability to move through a conductive medium under the influence of an applied electric field. Positively charged solutes elute first, with smaller, more highly charged cationic solutes eluting before larger cations of lower charge. Neutral species elute without undergoing further separation. Finally, anions elute last, with smaller, more negatively charged anions being the last to elute. By adding a surfactant, neutral species can be separated by micellar electrokinetic capillary chromatography. Electrophoretic separations also can take advantage of the ability of polymeric gels to separate solutes by size (capillary gel electrophoresis), and the ability of solutes to partition into a stationary phase (capillary electrochromatography). In comparison to GC and HPLC, capillary electrophoresis provides faster and more efficient separations.

12J Problems

- The following data were obtained for four compounds separated on a 20-m capillary column.

compound	t_r (min)	w (min)
A	8.04	0.15
B	8.26	0.15
C	8.43	0.16

- Calculate the number of theoretical plates for each compound and the average number of theoretical plates for the column.
 - Calculate the average height of a theoretical plate.
 - Explain why it is possible for each compound to have a different number of theoretical plates.
- Using the data from Problem 1, calculate the resolution and the selectivity factors for each pair of adjacent compounds. For resolution, use both [equation 12.1](#) and [equation 12.19](#), and compare your results. Discuss how you might improve the resolution between compounds B and C. The retention time for a nonretained solute is 1.19 min.

- 3.. Using the chromatogram in Figure 12.67, obtained using a 2-m column, determine values for t_r , w , t_r' , k , N , and H .
4. Using the partial chromatogram in Figure 12.68, determine the resolution between the two solute bands.
5. The chromatogram in Problem 4 was obtained on a 2-m column with a column dead time of 50 s. Suppose you want to increase the resolution between the two components to 1.5. Without changing the height of a theoretical plate, what length column do you need? What height of a theoretical plate do you need to achieve a resolution of 1.5 without increasing the column's length?
6. Complete the following table.

N_B	α	k_B	R
100 000	1.05	0.50	
10 000	1.10		1.50
10 000		4.0	1.00
	1.05	3.0	1.75

7. Moody studied the efficiency of a GC separation of 2-butanone on a dinonyl phthalate column.¹⁶ Evaluating plate height as a function of flow rate gave a van Deemter equation for which A is 1.65 mm, B is 25.8 mm•mL min⁻¹, and C is 0.0236 mm•min mL⁻¹.

¹⁶ Moody, H. W. *J. Chem. Educ.* **1982**, *59*, 218–219.

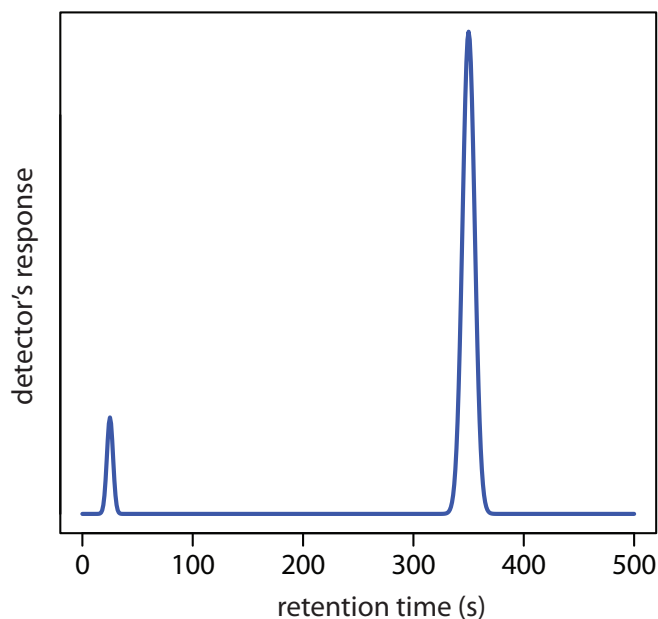


Figure 12.67 Chromatogram for Problem 12.3.

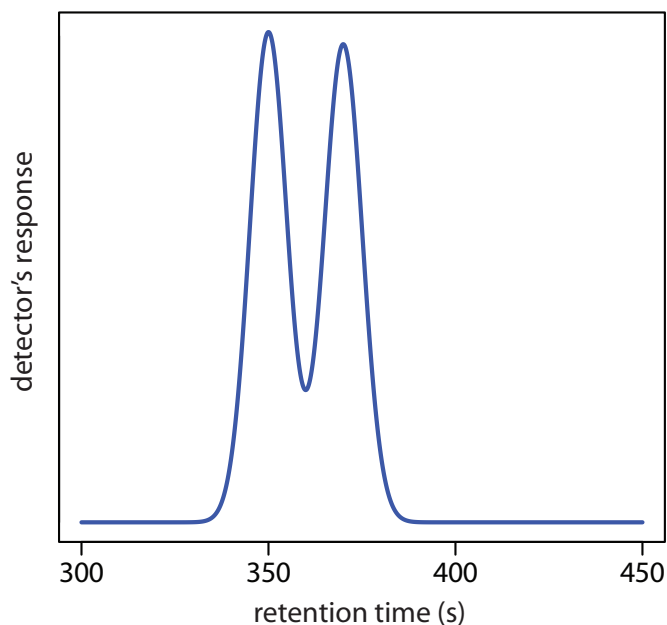


Figure 12.68 Chromatogram for Problem 12.4.

- (a) Prepare a graph of H versus u for flow rates in the range of 5–120 mL/min.
- (b) For what range of flow rates does each term in the Van Deemter equation have the greatest effect?
- (c) What is the optimum flow rate and the corresponding height of a theoretical plate?
- (d) For open-tubular columns the A term is no longer needed. If the B and C terms remain unchanged, what is the optimum flow rate and the corresponding height of a theoretical plate?
- (e) Compared to the packed column, how many more theoretical plates are there in the open-tubular column?
8. Hsieh and Jorgenson prepared 12–33- μm inner diameter HPLC columns packed with 5.44- μm spherical stationary phase particles. To evaluate these columns they measured reduced plate height, h , as a function of reduced flow rate, v ,

$$h = \frac{H}{d_p} \quad v = \frac{ud_p}{D_m}$$

where d_p is the particle diameter and D_m is the solute's diffusion coefficient in the mobile phase. The data were analyzed using van Deemter plots. The following table contains a portion of their results for norepinephrine.

internal diameter (μm)	A	B	C
33	0.63	1.32	0.10
33	0.67	1.30	0.08
23	0.40	1.34	0.09
23	0.58	1.11	0.09
17	0.31	1.47	0.11
17	0.40	1.41	0.11
12	0.22	1.53	0.11
12	0.19	1.27	0.12

- (a) Construct separate van Deemter plots using the data in the first row and the last row for flow rates in the range 0.7–15. Determine the optimum flow rate and plate height for each case given $d_p = 5.44 \mu\text{m}$ and $D_m = 6.23 \times 10^{-6} \text{ cm}^2 \text{ s}^{-1}$.
- (b) The A term in the van Deemter equation appears to be strongly correlated with the column's inner diameter, with smaller diameter columns providing smaller values of A . Offer an explanation for

When comparing columns, chromatographers often use dimensionless, reduced parameters. By including particle size and the solute's diffusion coefficient, the reduced plate height and reduced flow rate correct for differences between the packing material, the solute, and the mobile phase.

this observation. *Hint: consider how many particles can fit across a capillary of each diameter.*

9. A mixture of *n*-heptane, tetrahydrofuran, 2-butanone, and *n*-propanol elutes in this order when using a polar stationary phase such as Carbowax. The elution order is exactly the opposite when using a nonpolar stationary phase such as polydimethyl siloxane. Explain the order of elution in each case.
10. The analysis of trihalomethanes in drinking water is described in Representative Method 12.1. A single standard containing all four trihalomethanes gives the following results.

compound	concentration (ppb)	peak area
CHCl ₃	1.30	1.35×10^4
CHCl ₂ Br	0.90	6.12×10^4
CHClBr ₂	4.00	1.71×10^4
CHBr ₃	1.20	1.52×10^4

Analysis of water from a drinking fountain gives areas of 1.56×10^4 , 5.13×10^4 , 1.49×10^4 , and 1.76×10^4 for CHCl₃, CHCl₂Br, CHClBr₂, and CHBr₃, respectively. All peak areas have been corrected for variations in injection volumes using an internal standard of 1,2-dibromopentane. Determine the concentration of each of the trihalomethanes in the sample of water.

11. Zhou and colleagues determined the %w/w H₂O in methanol by capillary column GC using a nonpolar stationary phase and a thermal conductivity detector.¹⁷ A series of calibration standards gave the following results.

%w/w H ₂ O	peak height (arb. units)
0.00	1.15
0.0145	2.74
0.0472	6.33
0.0951	11.58
0.1757	20.43
0.2901	32.97

- (a) What is the %w/w H₂O in a sample giving a peak height of 8.63?
- (b) The %w/w H₂O in a freeze-dried antibiotic is determined in the following manner. A 0.175-g sample is placed in a vial along with 4.489 g of methanol. Water in the vial extracts into the methanol.

¹⁷ Zhou, X.; Hines, P. A.; White, K. C.; Borer, M. W. *Anal. Chem.* **1998**, *70*, 390–394.

Analysis of the sample gave a peak height of 13.66. What is the %w/w H₂O in the antibiotic?

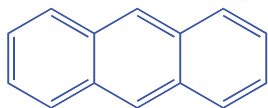
12. Loconto and co-workers describe a method for determining trace levels of water in soil.¹⁸ The method takes advantage of the reaction of water with calcium carbide, CaC₂, to produce acetylene gas, C₂H₂. By carrying out the reaction in a sealed vial, the amount of acetylene produced may be determined by sampling the headspace. In a typical analysis a sample of soil is placed in a sealed vial with CaC₂. Analysis of the headspace gave a blank corrected signal of 2.70×10^5 . A second sample is prepared in the same manner except that a standard addition of 5.0 mg H₂O/g solid is added, giving a blank-corrected signal of 1.06×10^6 . Determine the milligrams H₂O/g soil in the soil sample.
13. Van Atta and Van Atta used gas chromatography to determine the %v/v methyl salicylate in rubbing alcohol.¹⁹ A set of standard additions was prepared by transferring 20.00 mL of rubbing alcohol to separate 25-mL volumetric flasks and pipeting 0.00 mL, 0.20 mL, and 0.50 mL of methyl salicylate to the flasks. All three flasks were then diluted to volume using isopropanol. Analysis of the three samples gave peak heights for methyl salicylate of 57.00 mm, 88.5 mm, and 132.5 mm, respectively. Determine the %v/v methyl salicylate in the rubbing alcohol.
14. The amount of camphor in an analgesic ointment can be determined by GC using the method of internal standards.²⁰ A standard sample was prepared by placing 45.2 mg of camphor and 2.00 mL of a 6.00 mg/mL internal standard solution of terpene hydrate in a 25-mL volumetric flask and diluting to volume with CCl₄. When an approximately 2- μ L sample of the standard was injected, the FID signals for the two components were measured (in arbitrary units) as 67.3 for camphor and 19.8 for terpene hydrate. A 53.6-mg sample of an analgesic ointment was prepared for analysis by placing it in a 50-mL Erlenmeyer flask along with 10 mL of CCl₄. After heating to 50 °C in a water bath, the sample was cooled to below room temperature and filtered. The residue was washed with two 5-mL portions of CCl₄ and the combined filtrates were collected in a 25-mL volumetric flask. After adding 2.00 mL of the internal standard solution, the contents of the flask were diluted to volume with CCl₄. Analysis of an approximately 2- μ L sample gave FID signals of 13.5 for the terpene hydrate and 24.9 for the camphor. Report the %w/w camphor in the analgesic ointment.

18 Loconto, P. R.; Pan, Y. L.; Voice, T. C. *LC•GC* **1996**, *14*, 128–132.

19 Van Atta, R. E.; Van Atta, R. L. *J. Chem. Educ.* **1980**, *57*, 230–231.

20 Pant, S. K.; Gupta, P. N.; Thomas, K. M.; Maitin, B. K.; Jain, C. L. *LC•GC* **1990**, *8*, 322–325.

Anthracene consists of three fused aromatic rings and has the formula $C_{14}H_{10}$.



In anthracene- d_{10} all ten hydrogens are replaced with deuteriums.

15. The concentration of pesticide residues on agricultural products, such as oranges, may be determined by GC-MS.²¹ Pesticide residues are extracted from the sample using methylene chloride and concentrated by evaporating the methylene chloride to a smaller volume. Calibration is accomplished using anthracene- d_{10} as an internal standard. In a study to determine the parts per billion heptachlor epoxide on oranges, a 50.0-g sample of orange rinds was chopped and extracted with 50.00 mL of methylene chloride. After removing any insoluble material by filtration, the methylene chloride was reduced in volume, spiked with a known amount of the internal standard and diluted to 10 mL in a volumetric flask. Analysis of the sample gives a peak-area ratio ($A_{\text{analyte}}/A_{\text{int std}}$) of 0.108. A series of calibration standards, each containing the same amount of anthracene- d_{10} as the sample, gave the following results.

ppb heptachlor epoxide	$A_{\text{analyte}}/A_{\text{int std}}$
20.0	0.065
60.0	0.153
200.0	0.637
500.0	1.554
1000.0	3.198

Report the nanograms per gram of heptachlor epoxide residue on the oranges.

16. The adjusted retention times for octane, toluene, and nonane on a particular GC column are 15.98 min, 17.73 min, and 20.42 min, respectively. What is the retention index for each compound?
17. The following data were collected for a series of normal alkanes using a stationary phase of Carbowax 20M.

alkane	t_r' (min)
pentane	0.79
hexane	1.99
heptane	4.47
octane	14.12
nonane	33.11

What is the retention index for a compound whose adjusted retention time is 9.36 min?

18. The following data have been reported for the gas chromatographic analysis of *p*-xylene and methylisobutylketone (MIBK) on a capillary column.⁹

²¹ Feigel, C. *Varian GC/MS Application Note*, Number 52.

injection mode	compound	t_r (min)	peak area (arb. units)	peak width (min)
split	MIBK	1.878	54 285	0.028
	<i>p</i> -xylene	5.234	123 483	0.044
splitless	MIBK	3.420	2 493 005	1.057
	<i>p</i> -xylene	5.795	3 396 656	1.051

Explain the difference in the retention times, the peak areas, and the peak widths when switching from a split injection to a splitless injection.

19. Otto and Wegscheider report the following retention factors for the reversed-phase separation of 2-aminobenzoic acid on a C₁₈ column when using 10% v/v methanol as a mobile phase.²²

pH	k
2.0	10.5
3.0	16.7
4.0	15.8
5.0	8.0
6.0	2.2
7.0	1.8

Explain why pH affects the retention factor's value.

20. Haddad and associates report the following retention factors for the reversed-phase separation of salicylamide and caffeine.

%v/v methanol	30%	35%	40%	45%	50%	55%
k_{sal}	2.4	1.6	1.6	1.0	0.7	0.7
k_{caff}	4.3	2.8	2.3	1.4	1.1	0.9

- (a) Explain the trends in the retention factors for these compounds.
 (b) What is the advantage of using a mobile phase with a smaller %v/v methanol? Are there any disadvantages?
21. Suppose you need to separate a mixture of benzoic acid, aspartame, and caffeine in a diet soda. The following information is available.

compound	t_r in aqueous mobile phase of pH			
	3.0	3.5	4.0	4.5
benzoic acid	7.4	7.0	6.9	4.4
aspartame	5.9	6.0	7.1	8.1
caffeine	3.6	3.7	4.1	4.4

²² Otto, M.; Wegscheider, W. *J. Chromatog.* **1983**, *258*, 11–22.

- (a) Explain the change in retention time for each compound.
- (b) Prepare a single graph showing the retention time versus pH for each compound. Using your plot, identify a pH level that will yield an acceptable separation.
22. The composition of a multivitamin tablet is conveniently determined using an HPLC with a diode array UV/Vis detector. A 5- μL standard sample containing 170 ppm vitamin C, 130 ppm niacin, 120 ppm niacinamide, 150 ppm pyridoxine, 60 ppm thiamine, 15 ppm folic acid, and 10 ppm riboflavin is injected into the HPLC, giving signals (in arbitrary units) of, respectively, 0.22, 1.35, 0.90, 1.37, 0.82, 0.36, and 0.29. The multivitamin tablet is prepared for analysis by grinding into a powder and transferring to a 125-mL Erlenmeyer flask containing 10 mL of 1% v/v NH_3 in dimethyl sulfoxide. After sonicating in an ultrasonic bath for 2 min, 90 mL of 2% acetic acid is added and the mixture is stirred for 1 min and sonicated at 40°C for 5 min. The extract is then filtered through a 0.45- μm membrane filter. Injection of a 5- μL sample into the HPLC gives signals of 0.87 for vitamin C, 0.00 for niacin, 1.40 for niacinamide, 0.22 for pyridoxine, 0.19 for thiamine, 0.11 for folic acid, and 0.44 for riboflavin. Report the milligrams of each vitamin present in the tablet.
23. The amount of caffeine in an analgesic tablet was determined by HPLC using a normal calibration curve. Standard solutions of caffeine were prepared and analyzed using a 10- μL fixed-volume injection loop. Results for the standards are summarized in the following table.

concentration (ppm)	signal (arb. units)
50.0	8 354
100.0	16 925
150.0	25 218
200.0	33 584
250.0	42 002

The sample was prepared by placing a single analgesic tablet in a small beaker and adding 10 mL of methanol. After allowing the sample to dissolve, the contents of the beaker, including the insoluble binder, were quantitatively transferred to a 25-mL volumetric flask and diluted to volume with methanol. The sample was then filtered, and a 1.00-mL aliquot was transferred to a 10-mL volumetric flask and diluted to volume with methanol. When analyzed by HPLC, the signal for caffeine was found to be 21 469. Report the milligrams of caffeine in the analgesic tablet.

24. Kagel and Farwell report a reversed-phase HPLC method for determining the concentration of acetylsalicylic acid (ASA) and caffeine (CAF) in analgesic tablets using salicylic acid (SA) as an internal standard.²³ A series of standards was prepared by adding known amounts of acetylsalicylic acid and caffeine to 250-mL Erlenmeyer flasks and adding 100 mL of methanol. A 10.00-mL aliquot of a standard solution of salicylic acid was then added to each. The following results are obtained for a typical set of standard solutions.

standard	milligrams of		peak height ratios for	
	ASA	CAF	ASA/SA	CAF/SA
1	200.0	20.0	20.5	10.6
2	250.0	40.0	25.1	23.0
3	300.0	60.0	30.9	36.8

A sample of an analgesic tablet was placed in a 250-mL Erlenmeyer flask and dissolved in 100 mL of methanol. After adding a 10.00-mL portion of the internal standard, the solution was filtered. Analysis of the sample gave a peak height ratio of 23.2 for ASA and of 17.9 for CAF.

- Determine the milligrams of ASA and CAF in the tablet.
 - Why was it necessary to filter the sample?
 - The directions indicate that approximately 100 mL of methanol is used to dissolve the standards and samples. Why is it not necessary to measure this volume more precisely?
 - In the presence of moisture, ASA decomposes to SA and acetic acid. What complication might this present for this analysis? How might you evaluate whether this is a problem?
25. Bohman and colleagues described a reversed-phase HPLC method for the quantitative analysis of vitamin A in food using the method of standard additions.²⁴ In a typical example, a 10.067-g sample of cereal is placed in a 250-mL Erlenmeyer flask along with 1 g of sodium ascorbate, 40 mL of ethanol, and 10 mL of 50% w/v KOH. After refluxing for 30 min, 60 mL of ethanol is added and the solution cooled to room temperature. Vitamin A is extracted using three 100-mL portions of hexane. The combined portions of hexane are evaporated and the residue containing vitamin A transferred to a 5-mL volumetric flask and diluted to volume with methanol. A standard addition is prepared in a similar manner using a 10.093-g sample of the cereal and spiking with 0.0200 mg of vitamin A. Injecting the sample and standard addition into the HPLC gives peak areas of, respectively, 6.77×10^3

²³ Kagel, R. A.; Farwell, S. O. *J. Chem. Educ.* **1983**, *60*, 163–166.

²⁴ Bohman, O.; Engdahl, K. A.; Johnsson, H. *J. Chem. Educ.* **1982**, *59*, 251–252.

and 1.32×10^4 . Report the vitamin A content of the sample in milligrams/100 g cereal.

26. Ohta and Tanaka reported an ion-exchange chromatographic method for the simultaneous analysis of several inorganic anions and the cations Mg^{2+} and Ca^{2+} in water.²⁵ The mobile phase includes 1,2,4-benzenetricarboxylate, which absorbs strongly at 270 nm. Indirect detection of the analytes is possible because their presence in the detector leads to a decrease in absorbance. Unfortunately, Ca^{2+} and Mg^{2+} , which are present at high concentrations in many environmental waters, form stable complexes with 1,2,4-benzenetricarboxylate that interfere with their analysis.

- (a) The procedure calls for adding EDTA to the mobile phase. What role does the EDTA play in this analysis?
- (b) A standard solution containing 1.0 M NaHCO_3 , 0.2 mM NaNO_2 , 0.2 mM MgSO_4 , 0.1 mM CaCl_2 , and 0.1 mM $\text{Ca}(\text{NO}_3)_2$ gives the following peak areas (arbitrary units).

ion	HCO_3^-	Cl^-	NO_2^-	NO_3^-
peak area	373.5	322.5	264.8	262.7
ion	Ca^{2+}	Mg^{2+}	SO_4^{2-}	
peak area	458.9	352.0	341.3	

Analysis of a river water sample (pH of 7.49) gives the following results.

ion	HCO_3^-	Cl^-	NO_2^-	NO_3^-
peak area	310.0	403.1	3.97	157.6
ion	Ca^{2+}	Mg^{2+}	SO_4^{2-}	
peak area	734.3	193.6	324.3	

Determine the concentration of each ion in the sample.

- (c) The detection of HCO_3^- actually gives the total concentration of carbonate in solution ($[\text{CO}_3^{2-}] + [\text{HCO}_3^-] + [\text{H}_2\text{CO}_3]$). Given that the pH of the water is 7.49, what is the actual concentration of HCO_3^- ?
- (d) An independent analysis gives the following additional concentrations for ions in the sample: $[\text{Na}^+] = 0.60$ mM; $[\text{NH}_4^+] = 0.014$ mM; and $[\text{K}^+] = 0.046$ mM. A solution's ion balance is defined as the ratio of the total cation charge to the total anion charge. Determine the ion balance for this sample of water and comment on whether the result is reasonable.

²⁵ Ohta, K.; Tanaka, K. *Anal. Chim. Acta* **1998**, *373*, 189–195.

27. The concentrations of Cl^- , NO_3^- , and SO_4^{2-} may be determined by ion chromatography. A 50- μL standard sample of 10.0 ppm Cl^- , 2.00 ppm NO_3^- , and 5.00 ppm SO_4^{2-} gave signals (in arbitrary units) of 59.3, 16.1, and 6.08 respectively. A sample of effluent from a wastewater treatment plant was diluted tenfold, and a 50 μL portion gave signals of 44.2 for Cl^- , 2.73 for NO_3^- , and 5.04 for SO_4^{2-} . Report the parts per million for each anion in the effluent sample.
28. A series of polyvinylpyridine standards of different molecular weight were analyzed by size-exclusion chromatography, yielding the following results.

formula weight	retention volume (mL)
600 000	6.42
100 000	7.98
20 000	9.30
3 000	10.94

When a preparation of polyvinylpyridine of unknown formula weight is analyzed, the retention volume is 8.45 mL. Report the average formula weight for the preparation.

29. Diet soft drinks contain appreciable quantities of aspartame, benzoic acid, and caffeine. What is the expected order of elution for these compounds in a capillary zone electrophoresis separation using a pH 9.4 buffer solution given that aspartame has $\text{p}K_a$ values of 2.964 and 7.37, benzoic acid has a $\text{p}K_a$ of 4.2, and the $\text{p}K_a$ for caffeine is less than 0. Figure 12.69 provides the structures of these compounds.
30. Janusa and coworkers describe the determination of chloride by CZE.²⁶ Analysis of a series of external standards gives the following calibration curve.

$$\text{area} = -883 + 5590 \times \text{ppm Cl}^-$$

A standard sample of 57.22% w/w Cl^- was analyzed by placing 0.1011-g portions in separate 100-mL volumetric flasks and diluting to volume. Three unknowns were prepared by pipeting 0.250 mL, 0.500 mL, and 0.750 mL of the bulk unknown in separate 50-mL volumetric flasks and diluting to volume. Analysis of the three unknowns gave areas of 15 310, 31 546, and 47 582, respectively. Evaluate the accuracy of this analysis.

31. The analysis of NO_3^- in aquarium water was carried out by CZE using IO_4^- as an internal standard. A standard solution of 15.0 ppm

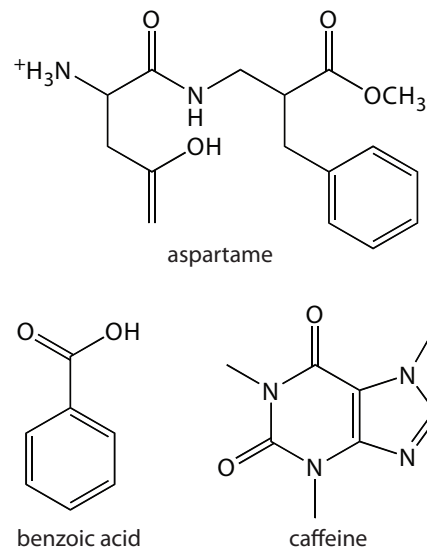
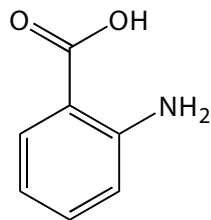
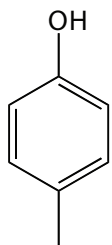


Figure 12.69 Structures for the compounds in Problem 12.29.

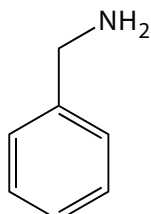
²⁶ Janusa, M. A.; Andermann, L. J.; Kliebert, N. M.; Nannie, M. H. *J. Chem. Educ.* **1998**, *75*, 1463–1465.



2-aminobenzoic acid



4-methylphenol



benzylamine

Figure 12.70 Structures for the compounds in Problem 12.32.

NO_3^- and 10.0 ppm IO_4^- gives peak heights (arbitrary units) of 95.0 and 100.1, respectively. A sample of water from an aquarium is diluted 1:100, and sufficient internal standard added to make its concentration 10.0 ppm. Analysis gives signals of 29.2 and 105.8 for NO_3^- and IO_4^- , respectively. Report the ppm NO_3^- in the sample of aquarium water.

32. Suggest conditions for separating a mixture of 2-aminobenzoic acid ($\text{p}K_{\text{a}1} = 2.08$, $\text{p}K_{\text{a}2} = 4.96$), benzylamine ($\text{p}K_{\text{a}} = 9.35$), and 4-methylphenol ($\text{p}K_{\text{a}2} = 10.26$) by capillary zone electrophoresis. Figure 12.70 provides the structures of these compounds.

33. McKillop and associates examined the electrophoretic separation of some alkylpyridines by CZE.²⁷ Separations were carried out using either 50- μm or 75- μm inner diameter capillaries, with a total length of 57 cm and a length of 50 cm from the point of injection to the detector. The run buffer was a pH 2.5 lithium phosphate buffer. Separations were achieved using an applied voltage of 15 kV. The electroosmotic flow velocity, as measured using a neutral marker, was found to be $6.398 \times 10^{-5} \text{ cm}^2 \text{ V}^{-1} \text{ s}^{-1}$.

- Calculate the electrophoretic mobility for 2-ethylpyridine given that its elution time is 8.20 min.
- How many theoretical plates are there for 2-ethylpyridine?
- The electrophoretic mobilities for 3-ethylpyridine and 4-ethylpyridine are $3.366 \times 10^{-4} \text{ cm}^2 \text{ V}^{-1} \text{ s}^{-1}$ and $3.397 \times 10^{-4} \text{ cm}^2 \text{ V}^{-1} \text{ s}^{-1}$, respectively. What is the expected resolution between these two alkylpyridines?
- Explain the trends in electrophoretic mobility shown in the following table.

alkylpyridine	$\mu_{\text{ep}} (\text{cm}^2 \text{ V}^{-1} \text{ s}^{-1})$
2-methylpyridine	3.581×10^{-4}
2-ethylpyridine	3.222×10^{-4}
2-propylpyridine	2.923×10^{-4}
2-pentylpyridine	2.534×10^{-4}
2-hexylpyridine	2.391×10^{-4}

- Explain the trends in electrophoretic mobility shown in the following table.

alkylpyridine	$\mu_{\text{ep}} (\text{cm}^2 \text{ V}^{-1} \text{ s}^{-1})$
2-ethylpyridine	3.222×10^{-4}

²⁷ McKillop, A. G.; Smith, R. M.; Rowe, R. C.; Wren, S. A. C. *Anal. Chem.* **1999**, *71*, 497–503.

$$3\text{-ethylpyridine} \quad 3.366 \times 10^{-4}$$

$$4\text{-ethylpyridine} \quad 3.397 \times 10^{-4}$$

- (f) The pK_a for pyridine is 5.229. At a pH of 2.5 the electrophoretic mobility of pyridine is $4.176 \times 10^{-4} \text{ cm}^2 \text{ V}^{-1} \text{ s}^{-1}$. What is the expected electrophoretic mobility if the run buffer's pH is 7.5?

12K Solutions to Practice Exercises

Practice Exercise 12.1

Because the relationship between elution time and distance is proportional, we can measure Δt_r , w_A , and w_B using a ruler. My measurements are 8.5 mm for Δt_r , and 12.0 mm each for w_A and w_B . Using these values, the resolution is

$$R_{AB} = \frac{2\Delta t_r}{w_A + w_B} = \frac{2(8.5 \text{ mm})}{12.0 \text{ mm} + 12.0 \text{ mm}} = 0.70$$

Click [here](#) to return to the chapter.

Practice Exercise 12.2

Because the relationship between elution time and distance is proportional, we can measure t_m , $t_{r,1}$, and $t_{r,2}$ using a ruler. My measurements are 7.8 mm, 40.2 mm, and 51.5 mm, respectively. Using these values, the retention factors for solute A and solute B are

$$k_1 = \frac{t_r - t_m}{t_m} = \frac{40.2 \text{ mm} - 7.8 \text{ mm}}{7.8 \text{ mm}} = 4.15$$

$$k_2 = \frac{t_r - t_m}{t_m} = \frac{51.5 \text{ mm} - 7.8 \text{ mm}}{7.8 \text{ mm}} = 5.60$$

Click [here](#) to return to the chapter.

Practice Exercise 12.3

Using the results from Practice Exercise 12.2, the selectivity factor is

$$\alpha = \frac{k_2}{k_1} = \frac{5.60}{4.15} = 1.35$$

Your answer may differ slightly due to differences in your values for the two retention factors.

Click [here](#) to return to the chapter.

The data for this exercise were created so that the actual resolution is 0.75. Given the resolution of my ruler's scale, my answer is a pretty reasonable. Your measurements may be slightly different, but your answer should be close to the actual value.

The data for this exercise were created so that the actual retention factors are 4 for solute 1 and 5.5 for solute 2. Given the resolution of my ruler's scale, my answers are pretty reasonable. Your measurements may be slightly different, but your answers should be close to the actual values.

The data for this exercise were created so that the actual selectivity factor is 1.375. Given the resolution of my ruler's scale, my answer is pretty reasonable. Your measurements may be slightly different, but your answer should be close to the actual values.

Practice Exercise 12.4

Because the relationship between elution time and distance is proportional, we can measure $t_{r,1}$, $t_{r,2}$, w_1 , and w_2 using a ruler. My measurements are 40.2 mm, 51.5 mm, 8.0 mm, and 13.5 mm, respectively. Using these values, the number of theoretical plates for each solute is

$$N_1 = 16 \frac{t_{r,1}^2}{w_1^2} = 16 \frac{(40.2 \text{ mm})^2}{(8.0 \text{ mm})^2} = 400 \text{ theoretical plates}$$

$$N_2 = 16 \frac{t_{r,2}^2}{w_2^2} = 16 \frac{(51.5 \text{ mm})^2}{(13.5 \text{ mm})^2} = 233 \text{ theoretical plates}$$

The height of a theoretical plate for each solute is

$$H_1 = \frac{L}{N_1} = \frac{0.500 \text{ m}}{400 \text{ plates}} \times \frac{1000 \text{ mm}}{\text{m}} = 1.2 \text{ mm/plate}$$

$$H_2 = \frac{L}{N_2} = \frac{0.500 \text{ m}}{233 \text{ plates}} \times \frac{1000 \text{ mm}}{\text{m}} = 2.15 \text{ mm/plate}$$

Click [here](#) to return to the chapter.

Practice Exercise 12.5

The following table summarizes my measurements of the peak heights for each standard and the sample.

[standard] (mg/mL)	peak heights (mm)		peak height ratio
	internal standard	analyte	
0.20	35	7	0.20
0.40	41	16	0.39
0.60	44	27	0.61
0.80	48	39	0.81
1.00	41	41	1.00
sample	39	21	0.54

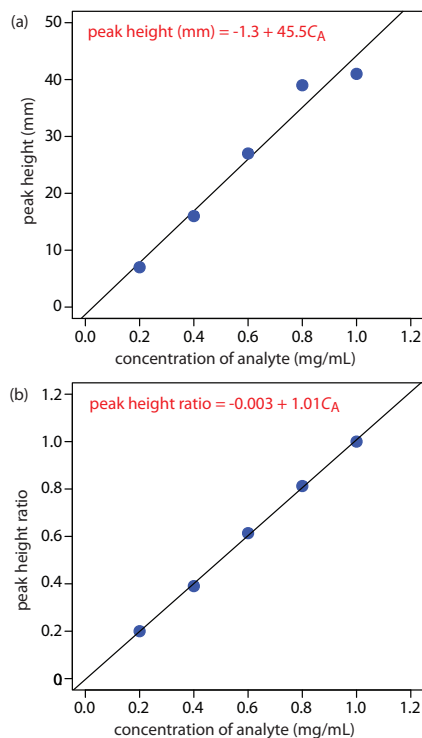


Figure 12.71 Calibration curves for the data in Practice Exercise 12.5.

Figure 12.71a shows the calibration curve and calibration equation when we ignore the internal standard. Substituting the sample's peak height into the calibration equation gives the analyte's concentration in the sample as 0.49 mg/mL. The 95% confidence interval is ± 0.24 mg/mL. The calibration curve shows quite a bit of scatter in the data because of uncertainty in the injection volumes.

Figure 12.71b shows the calibration curve and calibration equation when we include the internal standard. Substituting the sample's peak height

ratio into the calibration equation gives the analyte's concentration in the sample as 0.54 mg/mL. The 95% confidence interval is ± 0.04 mg/mL.

To review the use of Excel or R for regression calculations and confidence intervals, see [Chapter 5E](#).

Click [here](#) to return to the chapter.

Practice Exercise 12.6

Because we are using the same column we can assume that isobutane's retention index of 386 remains unchanged. Using [equation 12.27](#), we have

$$386 = 100 \times \frac{\log x - \log(4.78)}{\log(6.86) - \log(4.78)} + 300$$

where x is the retention time for isobutane. Solving for x , we find that

$$0.86 = \frac{\log x - 0.679}{0.836 - 0.679}$$

$$0.135 = \log x - 0.679$$

$$0.814 = \log x$$

$$x = 6.52$$

the retention time for isobutane is 6.52 min.

Click [here](#) to return to the chapter.

Practice Exercise 12.7

If we let x be the fraction of water in the mobile phase, then $1-x$ is the fraction of methanol. Substituting these values into [equation 12.28](#) and solving for x

$$7.5 = 10.2x + 5.1 \times (1 - x)$$

$$7.5 = 10.2x + 5.1 - 5.1x$$

$$2.4 = 5.1x$$

gives x as 0.47. The mobile phase is 47% v/v water and 53% v/v methanol.

Click [here](#) to return to the chapter.

Practice Exercise 12.8

Figure 12.72 shows the calibration curve and calibration equation for the set of external standards. Substituting the sample's peak area into the

The data for Practice Exercise 12.5 were created so that the analyte's actual concentration is 0.55 mg/mL. Given the resolution of my ruler's scale, my answer is pretty reasonable. Your measurements may be slightly different, but your answers should be close to the actual values.

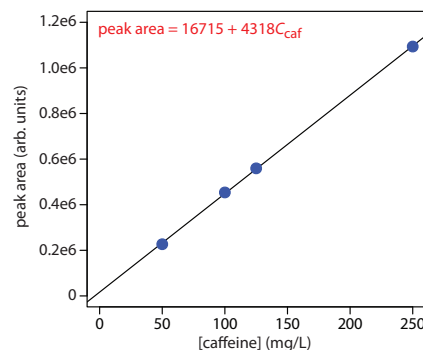


Figure 12.72 Calibration curves for the data in Practice Exercise 12.8.

calibration equation gives the concentration of caffeine in the sample as 94.4 mg/L.

Click [here](#) to return to the chapter.

Practice Exercise 12.9

The capillary is 75 cm long, which means that 0.20% of that sample's maximum length is 0.15 cm. To convert this to the maximum volume of sample we use the equation for the volume of a cylinder.

$$V_{\text{inj}} = l\pi r^2 = (0.15 \text{ cm})(3.14)(25 \times 10^{-4} \text{ cm})^2 = 2.94 \times 10^{-6} \text{ cm}^3$$

Given that 1 cm³ is equivalent to 1 mL, the maximum volume is 2.94 × 10⁻⁶ mL or 2.94 × 10⁻⁹ L. To find the maximum injection time, we first solve [equation 12.45](#) for t

$$t = \frac{128V_{\text{inj}}\eta L}{Pd^4\pi} \times 10^{-3} \text{ m}^3/\text{L}$$

and then make appropriate substitutions.

$$t = \frac{(128)(2.94 \times 10^{-9} \text{ L})(0.001 \text{ kg m}^{-1} \text{ s}^{-1})(0.75 \text{ m})}{(2.5 \times 10^3 \text{ kg m}^{-1} \text{ s}^{-2})(50 \times 10^{-6} \text{ m})^4(3.14)} \times \frac{10^{-3} \text{ m}^3}{\text{L}} = 5.8 \text{ s}$$

The maximum injection time, therefore, is 5.8 s.

Click [here](#) to return to the chapter.

Chapter 13

Kinetic Methods

Chapter Overview

- Section 13A Kinetic Techniques versus Equilibrium Techniques
- Section 13B Chemical Kinetics
- Section 13C Radiochemistry
- Section 13D Flow Injection Analysis
- Section 13E Key Terms
- Section 13F Chapter Summary
- Section 13G Problems
- Section 13H Solutions to Practice Exercises

There are many ways to categorize analytical techniques, several of which we introduced in earlier chapters. In Chapter 3 we classified techniques by whether the signal is proportional to the absolute amount or the relative amount of analyte. For example, precipitation gravimetry is a total analysis technique because the precipitate's mass is proportional to the absolute amount, or moles, of analyte. UV/Vis absorption spectroscopy, on the other hand, is a concentration technique because absorbance is proportional to the relative amount, or concentration, of analyte.

A second method for classifying analytical techniques is to consider the source of the analytical signal. For example, gravimetry encompasses all techniques in which the analytical signal is a measurement of mass or a change in mass. Spectroscopy, on the other hand, includes those techniques in which we probe a sample with an energetic particle, such as the absorption of a photon. This is the classification scheme used in organizing Chapters 8–11.

Another way to classify analytical techniques is by whether the analyte's concentration is determined by an equilibrium reaction or by the kinetics of a chemical reaction or a physical process. The analytical methods described in Chapter 8–11 mostly involve measurements made on systems in which the analyte is always at equilibrium. In this chapter we turn our attention to measurements made under nonequilibrium conditions.

13A Kinetic Methods Versus Equilibrium Methods

In an **EQUILIBRIUM METHOD** the analytical signal is determined by an equilibrium reaction involving the analyte or by a steady-state process that maintains the analyte's concentration. When we determine the concentration of iron in water by measuring the absorbance of the orange-red $\text{Fe}(\text{phen})_3^{2+}$ complex (see [Representative Method 10.1](#)), the signal depends upon the concentration of $\text{Fe}(\text{phen})_3^{2+}$, which, in turn, is determined by the complex's formation constant. In the flame atomic absorption determination of Cu and Zn in tissue samples (see [Representative Method 10.2](#)), the concentration of each metal in the flame remains constant because each step in the process of atomizing the sample is in a steady-state. In a **KINETIC METHOD** the analytical signal is determined by the rate of a reaction involving the analyte, or by a nonsteady-state process. As a result, the analyte's concentration changes during the time in which we are monitoring the signal.

In many cases, we can complete an analysis using either an equilibrium method or a kinetic method by simply changing the time at which we choose to measure the analytical signal. For example, one method for determining the concentration of nitrite, NO_2^- , in groundwater utilizes the two-step diazotization reaction shown in Figure 13.1.¹ The final product, which is a reddish-purple azo dye, absorbs visible light at a wavelength of 543 nm. Because neither reaction in Figure 13.1 is rapid, the absorbance—which is directly proportional to the concentration of NO_2^- —is measured 10 min after adding the last reagent, ensuring that it reaches the steady-state value required of an equilibrium method.

We can use the same set of reactions as the basis for a kinetic method by measuring the absorbance during the 10-min development period, obtaining information about the reaction's rate. If the rate is a function of the concentration of NO_2^- , then we can use the rate to determine its concentration in the sample.²

1 Method 4500- NO_2^- B in *Standard Methods for the Analysis of Waters and Wastewaters*, American Public Health Association: Washington, DC, 20th Ed., 1998.

2 Karayannis, M. I.; Piperaki, E. A.; Maniadaki, M. M. *Anal. Lett.* **1986**, *19*, 13–23.

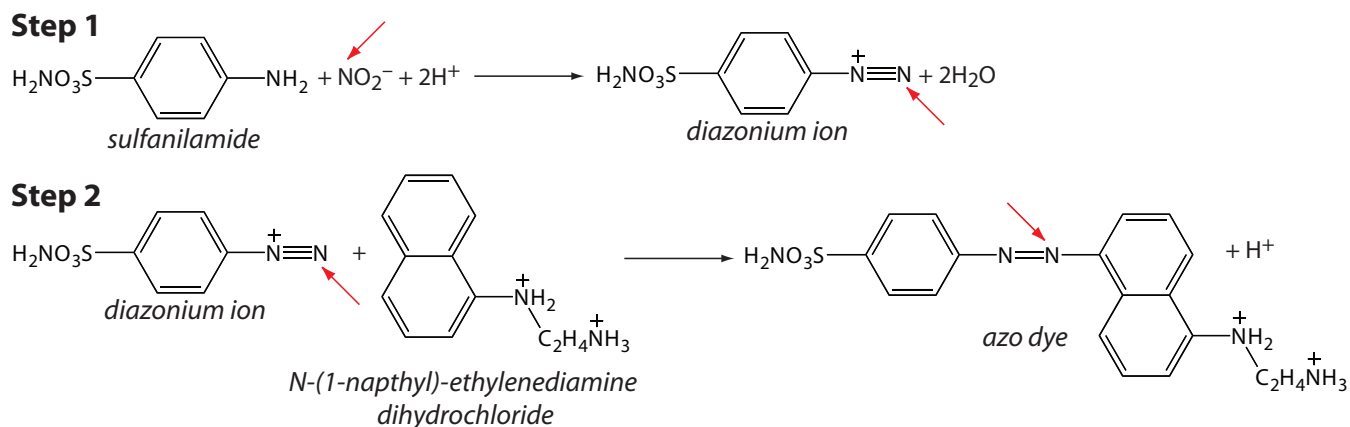


Figure 13.1 Analytical scheme for the analysis of NO_2^- in groundwater. The red arrow highlights the nitrogen in NO_2^- that becomes part of the azo dye.

There are many potential advantages to kinetic methods of analysis, perhaps the most important of which is the ability to use chemical reactions and systems that are slow to reach equilibrium. In this chapter we examine three techniques that rely on measurements made while the analytical system is under kinetic control: chemical kinetic techniques, in which we measure the rate of a chemical reaction; radiochemical techniques, in which we measure the decay of a radioactive element; and flow injection analysis, in which we inject the analyte into a continuously flowing carrier stream, where its mixing with and reaction with reagents in the stream are controlled by the kinetic processes of convection and diffusion.

13B Chemical Kinetics

The earliest analytical methods based on chemical kinetics—which first appear in the late nineteenth century—took advantage of the catalytic activity of enzymes. In a typical method of that era, an enzyme was added to a solution containing a suitable substrate and their reaction monitored for a fixed time. The enzyme's activity was determined by the change in the substrate's concentration. Enzymes also were used for the quantitative analysis of hydrogen peroxide and carbohydrates. The development of chemical kinetic methods continued in the first half of the twentieth century with the introduction of nonenzymatic catalysts and noncatalytic reactions.

Despite the diversity of chemical kinetic methods, by 1960 they were no longer in common use. The principal limitation to their broader acceptance was a susceptibility to significant errors from uncontrolled or poorly controlled variables—temperature and pH are two examples—and the presence of interferents that activate or inhibit catalytic reactions. By the 1980s, improvements in instrumentation and data analysis methods compensated for these limitations, ensuring the further development of chemical kinetic methods of analysis.³

13B.1 Theory and Practice

Every chemical reaction occurs at a finite rate, making it a potential candidate for a chemical kinetic method of analysis. To be effective, however, the chemical reaction must meet three necessary conditions: the reaction must not occur too quickly or too slowly; we must know the reaction's rate law; and we must be able to monitor the change in concentration for at least one species. Let's take a closer look at each of these needs.

REACTION RATE

The **RATE** of the chemical reaction—how quickly the concentrations of reactants and products change during the reaction—must be fast enough that we can complete the analysis in a reasonable time, but also slow enough that the reaction does not reach equilibrium while the reagents are mixing. As

The material in this section assumes some familiarity with chemical kinetics, which is part of most courses in general chemistry. For a review of reaction rates, rate laws, and integrated rate laws, see the material in [Appendix 17](#).

³ Pardue, H. L. *Anal. Chim. Acta* **1989**, *216*, 69–107.

We will discuss two examples of instrumentation for studying reactions with fast kinetics in [Section 13B.3](#).

Because the concentration of A decreases during the reactions, $d[A]$ is negative. The minus sign in equation 13.1 makes the rate positive. If we choose to follow a product, P, then $d[P]$ is positive because the product's concentration increases throughout the reaction. In this case we omit the minus sign; see [equation 13.21](#) for an example.

a practical limit, it is not easy to study a reaction that reaches equilibrium within several seconds without the aid of special equipment for rapidly mixing the reactants.

RATE LAW

The second requirement is that we must know the reaction's **RATE LAW**—the mathematical equation describing how the concentrations of reagents affect the rate—for the period in which we are making measurements. For example, the rate law for a reaction that is first order in the concentration of an analyte, A, is

$$\text{rate} = -\frac{d[A]}{dt} = k[A] \quad 13.1$$

where k is the reaction's **RATE CONSTANT**. An **INTEGRATED RATE LAW** often is a more useful form of the rate law because it is a function of the analyte's initial concentration. For example, the integrated rate law for equation 13.1 is

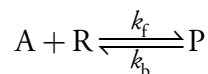
$$\ln[A]_t = \ln[A]_0 - kt \quad 13.2$$

or

$$[A]_t = [A]_0 e^{-kt} \quad 13.3$$

where $[A]_0$ is the analyte's initial concentration and $[A]_t$ is the analyte's concentration at time t .

Unfortunately, most reactions of analytical interest do not follow a simple rate law. Consider, for example, the following reaction between an analyte, A, and a reagent, R, to form a single product, P



where k_f is the rate constant for the forward reaction, and k_b is the rate constant for the reverse reaction. If the forward and reverse reactions occur as single steps, then the rate law is

$$\text{rate} = -\frac{d[A]}{dt} = k_f[A][R] - k_b[P] \quad 13.4$$

Although we know the reaction's rate law, there is no simple integrated form that we can use to determine the analyte's initial concentration. We can simplify equation 13.4 by restricting our measurements to the beginning of the reaction when the product's concentration is negligible. Under these conditions we can ignore the second term in equation 13.4, which simplifies to

$$\text{rate} = -\frac{d[A]}{dt} = k_f[A][R] \quad 13.5$$

The first term, $k_f[A][R]$ accounts for the loss of A as it reacts with R to make P, and the second term, $k_b[P]$ accounts for the formation of A as P converts back to A and R.

The integrated rate law for [equation 13.5](#), however, is still too complicated to be analytically useful. We can further simplify the kinetics by carefully adjusting the reaction conditions.⁴ For example, we can ensure pseudo-first-order kinetics by using a large excess of R so that its concentration remains essentially constant during the time we are monitoring the reaction. Under these conditions [equation 13.5](#) simplifies to

$$\text{rate} = -\frac{d[A]}{dt} = k_f[A][R]_0 = k'[A] \quad 13.6$$

where $k' = k_f[R]_0$. The integrated rate laws for equation 13.6 are

$$\ln[A]_t = \ln[A]_0 - k't \quad 13.7$$

or

$$[A]_t = [A]_0 e^{-k't} \quad 13.8$$

It may even be possible to adjust the conditions so that we use the reaction under pseudo-zero-order conditions.

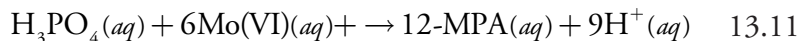
$$\text{rate} = -\frac{d[A]}{dt} = k_f[A]_0[R]_0 = k'' \quad 13.9$$

$$[A]_t = [A]_0 - k''t \quad 13.10$$

where $k'' = k_f[A]_0[R]_0$.

MONITORING THE REACTION

The final requirement is that we must be able to monitor the reaction's progress by following the change in concentration for at least one of its species. Which species we choose to monitor is not important—it can be the analyte, a reagent reacting with the analyte, or a product. For example, we can determine concentration of phosphate in a sample by first reacting it with Mo(VI) to form 12-molybdophosphoric acid (12-MPA).



Next, we reduce 12-MPA to form heteropolyphosphomolybdenum blue, PMB. The rate of formation of PMB is measured spectrophotometrically, and is proportional to the concentration of 12-MPA. The concentration of 12-MPA, in turn, is proportional to the concentration of phosphate.⁵ We also can follow reaction 13.11 spectrophotometrically by monitoring the formation of the yellow-colored 12-MPA.⁶

To say that the reaction is pseudo-first-order in A means that the reaction behaves as if it is first order in A and zero order in R even though the underlying kinetics are more complicated. We call k' the pseudo-first-order rate constant.

To say that a reaction is pseudo-zero-order means that the reaction behaves as if it is zero order in A and zero order in R even though the underlying kinetics are more complicated. We call k'' the pseudo-zero-order rate constant.

Equation 13.10 is the integrated rate law for equation 13.9.

⁴ Mottola, H. A. *Anal. Chim. Acta* **1993**, 280, 279–287.

⁵ (a) Crouch, S. R.; Malmstadt, H. V. *Anal. Chem.* **1967**, 39, 1084–1089; (b) Crouch, S. R.; Malmstadt, H. V. *Anal. Chem.* **1967**, 39, 1090–1093; (c) Malmstadt, H. V.; Cordos, E. A.; Delaney, C. J. *Anal. Chem.* **1972**, 44(12), 26A–41A.

⁶ Javier, A. C.; Crouch, S. R.; Malmstadt, H. V. *Anal. Chem.* **1969**, 41, 239–243.

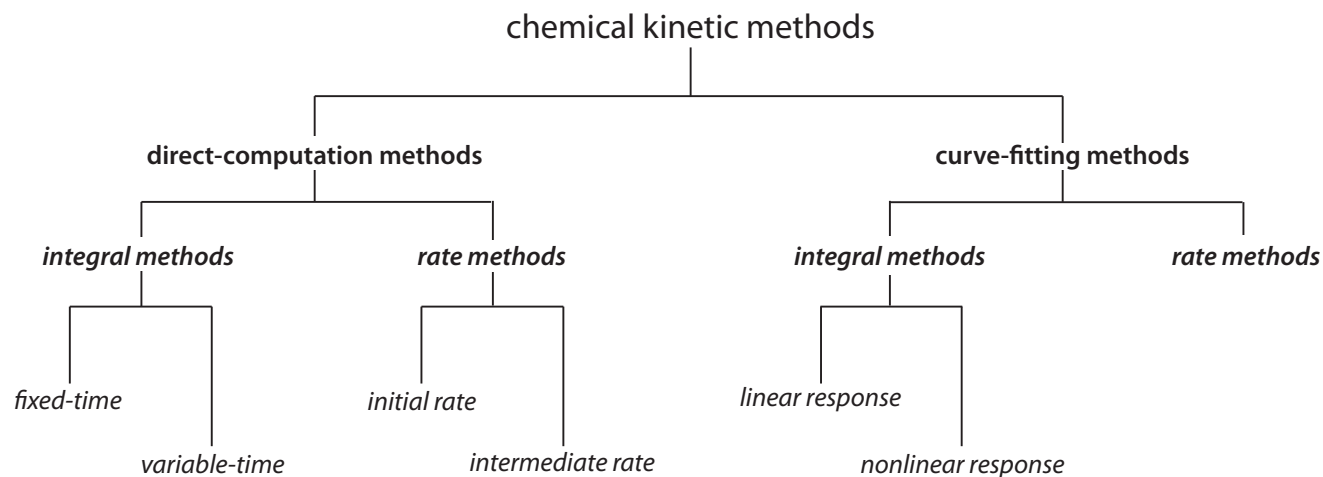


Figure 13.2 Classification of chemical kinetic methods of analysis adapted from Pardue, H. L. “Kinetic Aspects of Analytical Chemistry,” *Anal. Chim. Acta* **1989**, 216, 69–107.

13B.2 Classifying Chemical Kinetic Methods

Figure 13.2 provides one useful scheme for classifying chemical kinetic methods of analysis. Methods are divided into two main categories: direct-computation methods and curve-fitting methods. In a direct-computation method we calculate the analyte’s initial concentration, $[A]_0$, using the appropriate rate law. For example, if the reaction is first-order in analyte, we can use [equation 13.2](#) to determine $[A]_0$ if we have values for k , t , and $[A]_t$. With a curve-fitting method, we use regression to find the best fit between the data—for example, $[A]_t$ as a function of time—and the known mathematical model for the rate law. If the reaction is first-order in analyte, then we fit [equation 13.2](#) to the data using k and $[A]_0$ as adjustable parameters.

DIRECT-COMPUTATION FIXED-TIME INTEGRAL METHODS

A direct-computation integral method uses the integrated form of the rate law. In a **ONE-POINT FIXED-TIME INTEGRAL METHOD**, for example, we determine the analyte’s concentration at a single time and calculate the analyte’s initial concentration, $[A]_0$, using the appropriate integrated rate law. To determine the reaction’s rate constant, k , we run a separate experiment using a standard solution of analyte. Alternatively, we can determine the analyte’s initial concentration by measuring $[A]_t$ for several standards containing known concentrations of analyte and constructing a calibration curve.

Example 13.1

The concentration of nitromethane, CH_3NO_2 , can be determined from the kinetics of its decomposition reaction. In the presence of excess base the reaction is pseudo-first-order in nitromethane. For a standard solution of 0.0100 M nitromethane, the concentration of nitromethane after 2.00 s is 4.24×10^{-4} M. When a sample containing an unknown amount of nitromethane is analyzed, the concentration of nitromethane remaining after

2.00 s is 5.35×10^{-4} M. What is the initial concentration of nitromethane in the sample?

SOLUTION

First, we determine the value for the pseudo-first-order rate constant, k' . Using [equation 13.7](#) and the result for the standard, we find its value is

$$k' = \frac{\ln[A]_0 - \ln[A]_t}{t} = \frac{\ln(0.0100) - \ln(4.24 \times 10^{-4})}{2.00 \text{ s}} = 1.58 \text{ s}^{-1}$$

Next we use [equation 13.8](#) to calculate the initial concentration of nitromethane in the sample.

$$[A]_0 = \frac{[A]_t}{e^{-k't}} = \frac{5.34 \times 10^{-4} \text{ M}}{e^{-(1.58 \text{ s}^{-1})(2.00 \text{ s})}} = 0.0126 \text{ M}$$

[Equation 13.7](#) and [equation 13.8](#) are equally appropriate integrated rate laws for a pseudo-first-order reaction. The decision to use [equation 13.7](#) to calculate k' and [equation 13.8](#) to calculate $[A]_0$ is a matter of convenience.

Practice Exercise 13.1

In a separate determination for nitromethane, a series of external standards gives the following concentrations of nitromethane after a 2.00 s decomposition under pseudo-first-order conditions.

$[\text{CH}_3\text{NO}_2]_0$ (M)	$[\text{CH}_3\text{NO}_2]$ (M) at $t = 2.00 \text{ s}$
0.0100	3.82×10^{-4}
0.0200	8.19×10^{-4}
0.0300	1.15×10^{-3}
0.0400	1.65×10^{-3}
0.0500	2.14×10^{-3}
0.0600	2.53×10^{-3}
0.0700	3.21×10^{-3}
0.0800	3.35×10^{-3}
0.0900	3.99×10^{-3}
0.100	4.15×10^{-3}

Analysis of a sample under the same conditions gives a nitromethane concentration of 2.21×10^{-3} M after 2 s. What is the initial concentration of nitromethane in the sample?

Click [here](#) to review your answer to this exercise.

In [Example 13.1](#) we determined the initial concentration of analyte by measuring the amount of unreacted analyte. Sometimes it is more convenient to measure the concentration of a reagent that reacts with the analyte,

The kinetic method for phosphate described earlier is an example of a method in which we monitor the product. Because the phosphate ion does not absorb visible light, we incorporate it into a reaction that produces a colored product. That product, in turn, is converted into a different product that is even more strongly absorbing.

or to measure the concentration of one of the reaction's products. We can still use a one-point fixed-time integral method if we know the reaction's stoichiometry. For example, if we measure the concentration of the product, P, in the reaction



then the concentration of the analyte at time t is

$$[A]_t = [A]_0 - [P]_t \quad 13.12$$

because the stoichiometry between the analyte and product is 1:1. If the reaction is pseudo-first-order in A, then substituting equation 13.12 into [equation 13.7](#) gives

$$\ln([A]_0 - [P]_t) = \ln[A]_0 - k't \quad 13.13$$

which we simplify by writing in exponential form.

$$[A]_0 - [P]_t = [A]_0 e^{-k't} \quad 13.14$$

Finally, solving equation 13.14 for $[A]_0$ gives the following equation.

$$[A]_0 = \frac{[P]_t}{1 - e^{-k't}} \quad 13.15$$

[Figure 6.15](#) shows the color of a solution containing the $\text{Fe}(\text{SCN})^{2+}$ complex.

Example 13.2

The concentration of thiocyanate, SCN^- , can be determined from the pseudo-first-order kinetics of its reaction with excess Fe^{3+} to form a red-dish colored complex of $\text{Fe}(\text{SCN})^{2+}$. The reaction's progress is monitored by measuring the absorbance of $\text{Fe}(\text{SCN})^{2+}$ at a wavelength of 480 nm. When using a standard solution of 0.100 M SCN^- , the concentration of $\text{Fe}(\text{SCN})^{2+}$ after 10 s is 0.0516 M. The concentration of $\text{Fe}(\text{SCN})^{2+}$ in a sample containing an unknown amount of SCN^- is 0.0420 M after 10 s. What is the initial concentration of SCN^- in the sample?

SOLUTION

First, we must determine a value for the pseudo-first-order rate constant, k' . Using equation 13.13, we find that its value is

$$k' = \frac{\ln[A]_0 - \ln([A]_0 - [P]_t)}{t} = \frac{\ln(0.100) - \ln(0.100 - 0.0516)}{10.0 \text{ s}} = 0.0726 \text{ s}^{-1}$$

Next, we use equation 13.15 to determine the initial concentration of SCN^- in the sample.

$$[A]_0 = \frac{[P]_t}{1 - e^{-k't}} = \frac{0.0420 \text{ M}}{1 - e^{-(0.0726 \text{ s}^{-1})(10.0 \text{ s})}} = 0.0814 \text{ M}$$

Practice Exercise 13.2

In a separate determination for SCN^- , a series of external standards gives the following concentrations of $\text{Fe}(\text{SCN})^{2+}$ after a 10.0 s reaction with excess Fe^{3+} under pseudo-first-order conditions.

$[\text{SCN}^-]_0$ (M)	$[\text{Fe}(\text{SCN})^{2+}]$ (M) at $t = 10.0$ s
5.00×10^{-3}	1.79×10^{-3}
1.50×10^{-2}	8.24×10^{-3}
2.50×10^{-2}	1.28×10^{-2}
3.50×10^{-2}	1.85×10^{-2}
4.50×10^{-2}	2.21×10^{-2}
5.50×10^{-2}	2.81×10^{-2}
6.50×10^{-2}	3.27×10^{-2}
7.50×10^{-2}	3.91×10^{-2}
8.50×10^{-2}	4.34×10^{-2}
9.50×10^{-2}	4.89×10^{-2}

Analysis of a sample under the same conditions gives a $\text{Fe}(\text{SCN})^{2+}$ concentration of 3.52×10^{-2} M after 10 s. What is the initial concentration of SCN^- in the sample?

Click here to [review](#) your answer to this exercise.

A one-point fixed-time integral method has the advantage of simplicity because we need only a single measurement to determine the analyte's initial concentration. As with any method that relies on a single determination, a one-point fixed-time integral method can not compensate for a constant determinate error. In a **TWO-POINT FIXED-TIME INTEGRAL METHOD** we correct for constant determinate errors by making measurements at two points in time and using the difference between the measurements to determine the analyte's initial concentration. Because it affects both measurements equally, the difference between the measurements is independent of a constant determinate error. For a pseudo-first-order reaction in which we measure the analyte's concentration at times t_1 and t_2 , we can write the following two equations.

$$[\text{A}]_{t_1} = [\text{A}]_0 e^{-k't_1} \quad 13.16$$

$$[\text{A}]_{t_2} = [\text{A}]_0 e^{-k't_2} \quad 13.17$$

Subtracting equation 13.17 from equation 13.16 and solving for $[\text{A}]_0$ leaves us with

See Chapter 4 for a review of [constant determinate errors](#) and how they differ from [proportional determinate errors](#).

$$[A]_0 = \frac{[A]_{t_1} - [A]_{t_2}}{e^{-k't_1} - e^{-k't_2}} \quad 13.18$$

To determine the rate constant, k' , we measure $[A]_{t_1}$ and $[A]_{t_2}$ for a standard solution of analyte. Having obtained a value for k' , we can determine $[A]_0$ by measuring the analyte's concentration at t_1 and t_2 . We can also determine the analyte's initial concentration using a calibration curve consisting of a plot of $([A]_{t_1} - [A]_{t_2})$ versus $[A]_0$.

A fixed-time integral method is particularly useful when the signal is a linear function of concentration because we can replace the reactant's concentration terms with the corresponding signal. For example, if we follow a reaction spectrophotometrically under conditions where the analyte's concentration obeys Beer's law

$$(Abs)_t = \epsilon b[A]_t$$

then we can rewrite [equation 13.8](#) and equation 13.18 as

$$c = e^{-k't} \epsilon b$$

$$c' = \frac{1}{(\epsilon b)(e^{-k't_1} - e^{-k't_2})}$$

$$(Abs)_t = [A]_0 e^{-k't} \epsilon b = c[A]_0$$

$$[A]_0 = \frac{(Abs)_{t_1} - (Abs)_{t_2}}{e^{-k't_1} - e^{-k't_2}} \times (\epsilon b)^{-1} = c'[(Abs)_{t_1} - (Abs)_{t_2}]$$

where $(Abs)_t$ is the absorbance at time t , and c and c' are constants.

DIRECT-COMPUTATION VARIABLE-TIME INTEGRAL METHODS

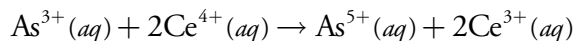
In a **VARIABLE-TIME INTEGRAL METHOD** we measure the total time, Δt , needed to effect a specific change in concentration for one species in the chemical reaction. One important application is for the quantitative analysis of catalysts, which takes advantage of the catalyst's ability to increase the rate of reaction. As the concentration of catalyst increase, Δt decreases. For many catalytic systems the relationship between Δt and the catalyst's concentration is

$$\frac{1}{\Delta t} = F_{\text{cat}}[A]_0 + F_{\text{uncat}} \quad 13.19$$

where $[A]_0$ is the catalyst's concentration, and F_{cat} and F_{uncat} are constants accounting for the rate of the catalyzed and uncatalyzed reactions.⁷

Example 13.3

Sandell and Kolthoff developed a quantitative method for iodide based on its ability to catalyze the following redox reaction.⁸



⁷ Mark, H. B.; Rechnitz, G. A. *Kinetics in Analytical Chemistry*, Interscience: New York, 1968.

⁸ Sandell, E. B.; Kolthoff, I. M. *J. Am. Chem. Soc.* **1934**, *56*, 1426.

An external standards calibration curve was prepared by adding 1 mL of a KI standard to a mixture consisting of 2 mL of 0.05 M As^{3+} , 1 mL of 0.1 M Ce^{4+} , and 1 mL of 3 M H_2SO_4 , and measuring the time for the yellow color of Ce^{4+} to disappear. The following table summarizes the results for one analysis.

$[\text{I}^-]$ ($\mu\text{g/mL}$)	Δt (min)
5.0	0.9
2.5	1.8
1.0	4.5

What is the concentration of I^- in a sample Δt is 3.2 min?

SOLUTION

Figure 13.3 shows the calibration curve and calibration equation for the external standards based on [equation 13.19](#). Substituting 3.2 min for Δt gives the concentration of I^- in the sample as 1.4 $\mu\text{g/mL}$.

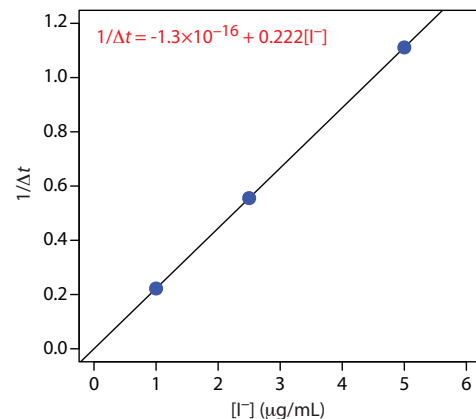


Figure 13.3 Calibration curve and calibration equation for [Example 13.3](#).

DIRECT-COMPUTATION RATE METHODS

In a **RATE METHOD** we use the differential form of the rate law—[equation 13.1](#) is one example of a differential rate law—to determine the analyte's concentration. As shown in Figure 13.4, the rate of a reaction at time t , $(\text{rate})_t$, is the slope of a line tangent to a curve showing the change in concentration as a function of time. For a reaction that is first-order in analyte, the rate at time t is

$$(\text{rate})_t = k[\text{A}]_t$$

Substituting in [equation 13.3](#) leaves us with the following equation relating the rate at time t to the analyte's initial concentration.

$$(\text{rate})_t = k[\text{A}]_0 e^{-kt}$$

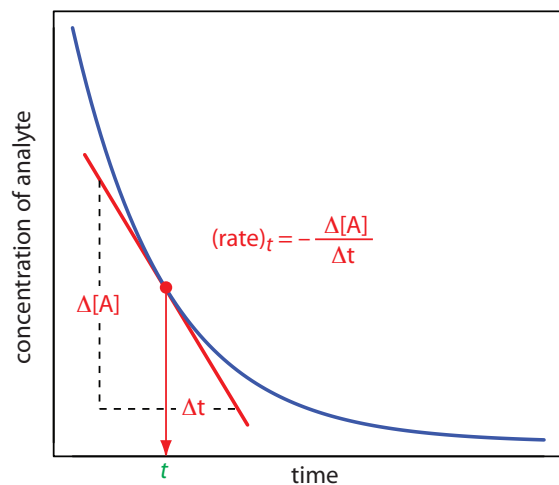
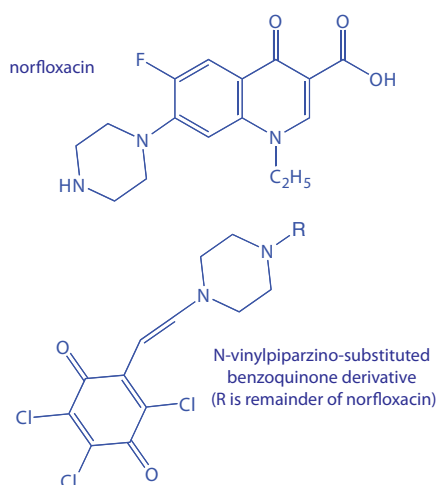


Figure 13.4 Determination of a reaction's intermediate rate from the slope of a line tangent to a curve showing the change in the analyte's concentration as a function of time.

As a general rule (see Mottola, H. A. “Kinetic Determinations of Reactants Utilizing Uncatalyzed Reactions,” *Anal. Chim. Acta* **1993**, 280, 279–287), the time for measuring a reaction’s initial rate should result in the consumption of no more than 2% of the reactants. The smaller this percentage, the more linear the change in concentration as a function of time.



AU stands for absorbance unit.

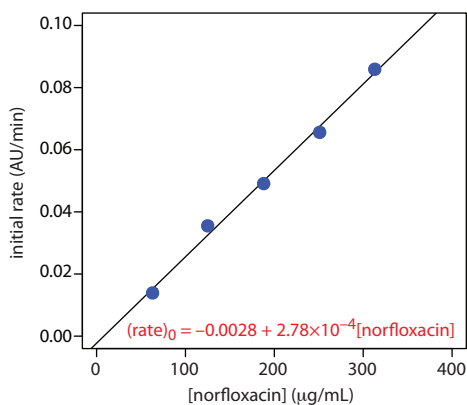


Figure 13.5 Calibration curve and calibration equation for Example 13.4.

If we measure the rate at a fixed time, then both k and e^{-kt} are constant and we can use a calibration curve of $(\text{rate})_t$ versus $[A]_0$ for the quantitative analysis of the analyte.

There are several advantages to using the reaction’s **INITIAL RATE** ($t = 0$). First, because the reaction’s rate decreases over time, the initial rate provides the greatest sensitivity. Second, because the initial rate is measured under nearly pseudo-zero-order conditions, in which the change in concentration with time is effectively linear, the determination of slope is easier. Finally, as the reaction of interest progresses competing reactions may develop, complicating the kinetics—using the initial rate eliminates these complications. One disadvantage of the initial rate method is that there may be insufficient time for completely mixing the reactants. This problem is avoided by using an **INTERMEDIATE RATE** measured at a later time ($t > 0$).

Example 13.4

The concentration of norfloxacin, a commonly prescribed antibacterial agent, is determined using the initial rate method. Norfloxacin is converted to an N-vinylpiperazine derivative and reacted with 2,3,5,6-tetrachloro-1,4-benzoquinone to form an N-vinylpiperazino-substituted benzoquinone derivative that absorbs strongly at 625 nm.⁹ The initial rate of the reaction—as measured by the change in absorbance as a function of time (AU/min)—is pseudo-first order in norfloxacin. The following data were obtained for a series of external norfloxacin standards.

[norfloxacin] (μg/mL)	initial rate (AU/min)
63	0.0139
125	0.0355
188	0.0491
251	0.0656
313	0.0859

To analyze a sample of prescription eye drops, a 10.00-mL portion was extracted with dichloromethane. The extract was dried and the norfloxacin reconstituted in methanol and diluted to 10 mL in a volumetric flask. A 5.00-mL portion of this solution was diluted to volume in a 100-mL volumetric flask. Analysis of this sample gave an initial rate of 0.0394 AU/min. What is the concentration of norfloxacin in the eye drops?

SOLUTION

Figure 13.5 shows the calibration curve and calibration equation for the external standards. Substituting 0.0394 AU/min for the initial rate and solving for the concentration of norfloxacin gives a result of 152 mg/mL. This is the concentration in a diluted sample of the extract. The concentration in the extract before dilution is

9 Darwish, I. A.; Sultan, M. A.; Al-Arfaj, H. A. *Talanta* **2009**, 78, 1383–1388.

$$\frac{152 \text{ g}}{\text{mL}} \times \frac{100.0 \text{ mL}}{5.00 \text{ mL}} \times \frac{1 \text{ g}}{1000 \text{ mg}} = 3.04 \text{ mg/mL}$$

Because the dried extract was reconstituted using a volume identical to that of the original sample, the concentration of norfloxacin in the eye drops is 3.04 mg/mL.

CURVE-FITTING METHODS

In direct-computation methods we determine the analyte's concentration by solving the appropriate rate equation at one or two discrete times. The relationship between the analyte's concentration and the measured response is a function of the rate constant, which we determine in a separate experiment using a single external standard (see [Example 13.1](#) or [Example 13.2](#)), or a calibration curve (see [Example 13.3](#) or [Example 13.4](#)).

In a **CURVE-FITTING METHOD** we continuously monitor the concentration of a reactant or a product as a function of time and use a regression analysis to fit the data to an appropriate differential rate law or integrated rate law. For example, if we are monitoring the concentration of a product for a reaction that is pseudo-first-order in the analyte, then we can fit the data to the following rearranged form of [equation 13.15](#)

$$[P]_t = [A]_0(1 - e^{-k't})$$

using $[A]_0$ and k' as adjustable parameters. Because we are using data from more than one or two discrete times, a curve-fitting method is capable of producing more reliable results.

Example 13.5

The data shown in the following table were collected for a reaction that is known to be pseudo-zero-order in analyte.

time (s)	$[A]_t$ (mM)	time (s)	$[A]_t$ (mM)
3	0.0731	8	0.0448
4	0.0728	9	0.0404
5	0.0681	10	0.0339
6	0.0582	11	0.0217
7	0.0511	12	0.0143

What is the initial concentration of analyte in the sample and the rate constant for the reaction?

SOLUTION

From [equation 13.10](#) we know that for a pseudo-zero-order reaction a plot of $[A]_t$ versus time is linear with a slope of $-k''$, and a y -intercept of

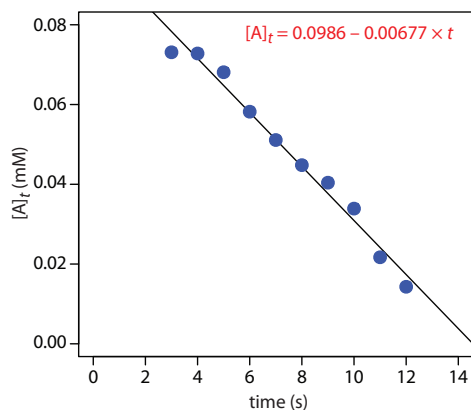
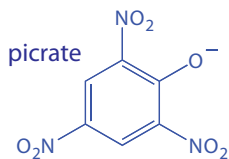
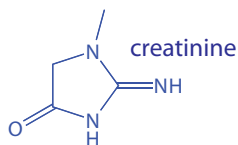
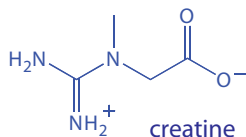


Figure 13.6 Result of fitting [equation 13.10](#) to the data in [Example 13.5](#).

The best way to appreciate the theoretical and practical details discussed in this section is to carefully examine a typical analytical method. Although each method is unique, the following description of the determination of creatinine in urine provides an instructive example of a typical procedure. The description here is based on Diamandis, E. P.; Koupparis, M. A.; Hadjiioannou, T. P. "Kinetic Studies with Ion Selective Electrodes: Determination of Creatinine in Urine with a Picrate Ion Selective Electrode," *J. Chem. Educ.* **1983**, *60*, 74–76.



$[A]_0$. Figure 13.6 shows a plot of the kinetic data and the result of a linear regression analysis. The initial concentration of analyte is 0.0986 mM and the rate constant is $0.00677 \text{ M}^{-1} \text{ s}^{-1}$.

Representative Method 13.1

Determination of Creatinine in Urine

DESCRIPTION OF METHOD

Creatine is an organic acid found in muscle tissue that supplies energy for muscle contractions. One of its metabolic products is creatinine, which is excreted in urine. Because the concentration of creatinine in urine and serum is an important indication of renal function, rapid methods for its analysis are clinically important. In this method the rate of reaction between creatinine and picrate in an alkaline medium is used to determine the concentration of creatinine in urine. Under the conditions of the analysis the reaction is first order in picrate, creatinine, and hydroxide.

$$\text{rate} = k[\text{picrate}][\text{creatinine}][\text{OH}^-]$$

The reaction is monitored using a picrate ion selective electrode.

PROCEDURE

Prepare a set of external standards containing 0.5–3.0 g/L creatinine using a stock solution of 10.00 g/L creatinine in 5 mM H_2SO_4 , diluting each to volume using 5 mM H_2SO_4 . Prepare a solution of $1.00 \times 10^{-2} \text{ M}$ sodium picrate. Pipet 25.00 mL of 0.20 M NaOH, adjusted to an ionic strength of 1.00 M using Na_2SO_4 , into a thermostated reaction cell at 25°C . Add 0.500 mL of the $1.00 \times 10^{-2} \text{ M}$ picrate solution to the reaction cell. Suspend a picrate ion selective in the solution and monitor the potential until it stabilizes. When the potential is stable, add 2.00 mL of a creatinine external standard and record the potential as a function of time. Repeat this procedure using the remaining external standards. Construct a calibration curve of $\Delta E/\Delta t$ versus the initial concentration of creatinine. Use the same procedure to analyze samples, using 2.00 mL of urine in place of the external standard. Determine the concentration of creatinine in the sample using the calibration curve.

QUESTIONS

- The analysis is carried out under conditions that are pseudo-first order in picrate. Show that under these conditions the change in potential as a function of time is linear.

The potential, E , of the picrate ion selective electrode is given by the Nernst equation

$$E = K - \frac{RT}{F} \ln[\text{picrate}]$$

where K is a constant that accounts for the reference electrodes, junction potentials, and the ion selective electrode's asymmetry potential, R is the gas constant, T is the temperature, and F is Faraday's constant. We know from [equation 13.7](#) that for a pseudo-first-order reaction, the concentration of picrate at time t is

$$\ln[\text{picrate}]_t = \ln[\text{picrate}]_0 - k't$$

where k' is the pseudo-first-order rate constant. Substituting this integrated rate law into the ion selective electrode's Nernst equation leave us with the following result.

$$E_t = K - \frac{RT}{F} (\ln[\text{picrate}]_0 - k't)$$

$$E_t = K - \frac{RT}{F} \ln[\text{picrate}]_0 + \frac{RT}{F} k't$$

Because K and $(RT/F)\ln[\text{picrate}]_0$ are constants, a plot of E_t versus t is a straight line with a slope of RTk'/F .

2. Under the conditions of the analysis the rate of the reaction is pseudo-first-order in picrate and pseudo-zero-order in creatinine and OH^- . Explain why it is possible to prepare a calibration curve of $\Delta E/\Delta t$ versus the concentration of creatinine.

The slope of a plot of E_t versus t is $\Delta E/\Delta t = RTk'/F$ (see the previous question). Because the reaction is carried out under conditions where it is pseudo-zero-order in creatinine and OH^- , the rate law is

$$\text{rate} = k[\text{picrate}][\text{creatinine}]_0[\text{OH}^-]_0 = k'[\text{picrate}]$$

The pseudo-first-order rate constant, k' , is

$$k' = k[\text{creatinine}]_0[\text{OH}^-]_0 = c[\text{creatinine}]_0$$

where c is a constant. The slope of a plot of E_t versus t , therefore, is linear function of creatinine's initial concentration

$$\frac{E}{t} = \frac{RTk'}{F} = \frac{RTc}{F} [\text{creatinine}]_0$$

and a plot of $\Delta E/\Delta t$ versus the concentration of creatinine can serve as a calibration curve.

3. Why is it necessary to thermostat the reaction cell?

The rate of a reaction is temperature-dependent. To avoid a determinate error resulting from a systematic change in temperature, or to

For a review of the Nernst equation for ion selective electrodes, see [Section 11B.3](#) in Chapter 11.

minimize indeterminate errors due to fluctuations in temperature, the reaction cell is thermostated to maintain a constant temperature.

4. Why is it necessary to prepare the NaOH solution so that it has an ionic strength of 1.00 M?

The potential of the picrate ion selective electrode actually responds to the activity of the picrate anion in solution. By adjusting the NaOH solution to a high ionic strength we maintain a constant ionic strength in all standards and samples. Because the relationship between activity and concentration is a function of ionic strength, the use of a constant ionic strength allows us to write the Nernst equation in terms of picrate's concentration instead of its activity.

For a review of the relationship between concentration, activity, and ionic strength, see [Chapter 6I](#).

13B.3 Making Kinetic Measurements

When using [Representative Method 13.1](#) to determine the concentration of creatinine in urine, we follow the reactions kinetics using an ion selective electrode. In principle, we can use any of the analytical techniques in Chapters 8–12 to follow a reaction's kinetics provided that the reaction does not proceed to any appreciable extent during the time it takes to make a measurement. As you might expect, this requirement places a serious limitation on kinetic methods of analysis. If the reaction's kinetics are slow relative to the analysis time, then we can make our measurements without the analyte undergoing a significant change in concentration. When the reaction's rate is too fast—which often is the case—then we introduce a significant error if our analysis time is too long.

One solution to this problem is to stop, or **QUENCH** the reaction by adjusting experimental conditions. For example, many reactions show a strong pH dependency, and may be quenched by adding a strong acid or a strong base. Figure 13.7 shows a typical example for the enzymatic analysis of *p*-nitrophenylphosphate using the enzyme wheat germ acid phosphatase

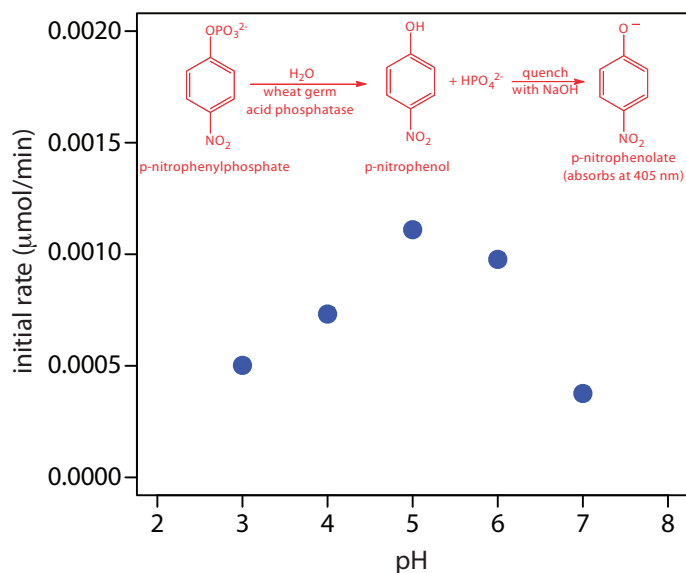


Figure 13.7 Initial rate for the enzymatic hydrolysis of *p*-nitrophenylphosphate using wheat germ acid phosphatase. Increasing the pH quenches the reaction and converts colorless *p*-nitrophenol to the yellow-colored *p*-nitrophenolate, which absorbs at 405 nm. The data are adapted from socrates.hunter.cuny.edu.

to hydrolyze the analyte to *p*-nitrophenol. The reaction has a maximum rate at a pH of 5. Increasing the pH by adding NaOH quenches the reaction and converts the colorless *p*-nitrophenol to the yellow-colored *p*-nitrophenolate, which absorbs at 405 nm.

An additional experimental problem when the reaction's kinetics are fast is ensuring that we rapidly and reproducibly mix the sample and the reagents. For a fast reaction we need to make measurements in a few seconds, or even a few milliseconds. This presents us with both a problem and an important advantage. The problem is that rapidly and reproducibly mixing the sample and the reagent requires a dedicated instrument, which adds an additional expense to the analysis. The advantage is that a rapid, automated analysis allows for a high throughput of samples. Instrumentation for the automated kinetic analysis of phosphate using [reaction 13.11](#), for example, have sampling rates of approximately 3000 determinations per hour.

A variety of instruments have been developed to automate the kinetic analysis of fast reactions. One example, which is shown in Figure 13.8, is the **STOPPED-FLOW ANALYZER**. The sample and reagents are loaded into separate syringes and precisely measured volumes are dispensed into a mixing chamber by the action of a syringe drive. The continued action of the syringe drive pushes the mixture through an observation cell and into a stopping syringe. The back pressure generated when the stopping syringe hits the stopping block completes the mixing, after which the reaction's progress is monitored spectrophotometrically. With a stopped-flow analyzer it is possible to complete the mixing of sample and reagent, and initiate the kinetic measurements in approximately 0.5 ms. By attaching an autosampler to the sample syringe it is possible to analyze up to several hundred samples per hour.

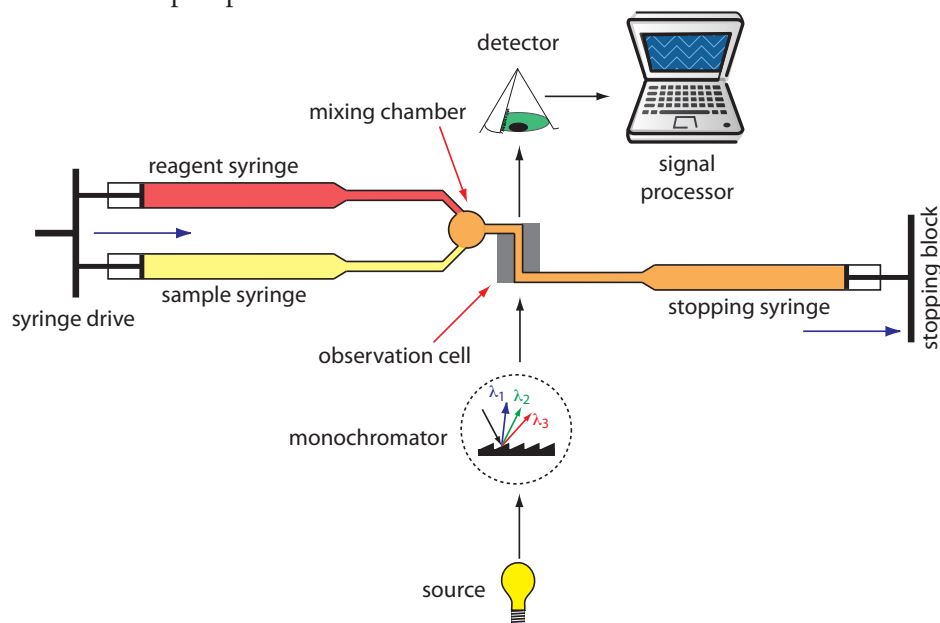


Figure 13.8 Schematic diagram of a stopped-flow analyzer. The blue arrows show the direction in which the syringes are moving.

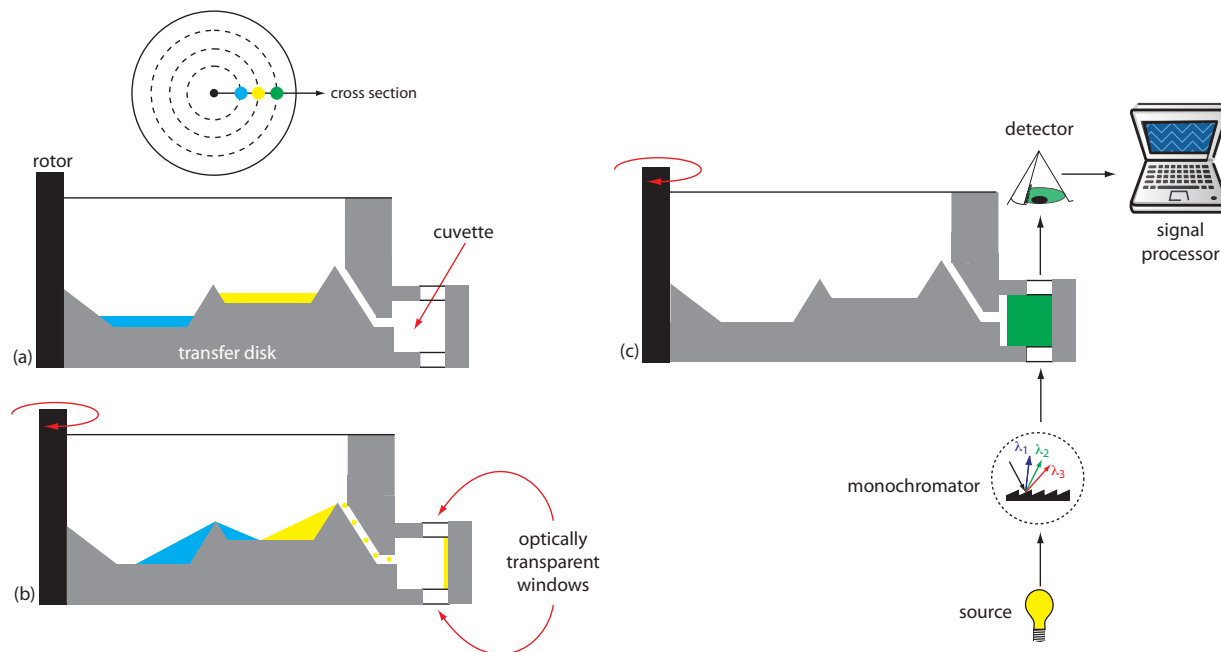


Figure 13.9 Cross sections through a centrifugal analyzer showing (a) the wells holding the sample and the reagents, (b) the mixing of the sample and the reagents, and (c) the configuration of the spectrophotometric detector.

The ability to collect lots of data and to collect it quickly requires appropriate hardware and software. Not surprisingly, automated kinetic analyzers developed in parallel with advances in analog and digital circuitry—the hardware—and computer software for smoothing, integrating, and differentiating the analytical signal. For an early discussion of the importance of hardware and software, see Malmstadt, H. V.; Delaney, C. J.; Cordos, E. A. “Instruments for Rate Determinations,” *Anal. Chem.* **1972**, *44*(12), 79A–89A.

Another instrumental design is the **CENTRIFUGAL ANALYZER**, a partial cross section of which is shown in Figure 13.9. The sample and the reagents are placed in separate wells, which are oriented radially around a circular transfer disk. As the centrifuge spins, the centrifugal force pulls the sample and the reagents into the cuvette where mixing occurs. A single optical source and detector, located below and above the transfer disk’s outer edge, measures the absorbance each time the cuvette passes through the optical beam. When using a transfer disk with 30 cuvettes and rotating at 600 rpm, we can collect 10 data points per second for each sample.

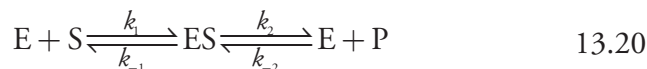
13B.4 Quantitative Applications

Chemical kinetic methods of analysis continue to find use for the analysis of a variety of analytes, most notably in clinical laboratories where automated methods aid in handling the large volume of samples. In this section we consider several general quantitative applications.

ENZYME-CATALYZED REACTIONS

ENZYMES are highly specific catalysts for biochemical reactions, with each enzyme showing a selectivity for a single reactant, or **SUBSTRATE**. For example, the enzyme acetylcholinesterase catalyzes the decomposition of the neurotransmitter acetylcholine to choline and acetic acid. Many enzyme–substrate reactions follow a simple mechanism that consists of the initial

formation of an enzyme–substrate complex, ES, which subsequently decomposes to form product, releasing the enzyme to react again.



where k_1 , k_{-1} , k_2 , and k_{-2} are rate constants. If we make measurement early in the reaction, the concentration of products is negligible and we can ignore the step described by the rate constant k_{-2} . Under these conditions the reaction's rate is

$$\text{rate} = \frac{d[P]}{dt} = k_2[ES] \quad 13.21$$

To be analytically useful we need to write equation 13.21 in terms of the concentrations of enzyme and substrate. To do this we use the **STEADY-STATE APPROXIMATION**, in which we assume that the concentration of ES remains essentially constant. Following an initial period, during which the enzyme–substrate complex first forms, the rate at which ES forms

$$\frac{d[ES]}{dt} = k_1[E][S] = k_1([E]_0 - [ES])[S] \quad 13.22$$

is equal to the rate at which it disappears

$$-\frac{d[ES]}{dt} = k_{-1}[ES] + k_2[ES] \quad 13.23$$

where $[E]_0$ is the enzyme's original concentration. Combining equation 13.22 and equation 13.23 gives

$$k_1([E]_0 - [ES])[S] = k_{-1}[ES] + k_2[ES]$$

which we solve for the concentration of the enzyme–substrate complex

$$[ES] = \frac{[E]_0[S]}{\frac{k_{-1} + k_2}{k_1} + [S]} = \frac{[E]_0[S]}{K_m + [S]} \quad 13.24$$

where K_m is the **MICHAELIS CONSTANT**. Substituting equation 13.24 into equation 13.21 leaves us with our final rate equation.

$$\frac{d[P]}{dt} = \frac{k_2[E]_0[S]}{K_m + [S]} \quad 13.25$$

A plot of equation 13.25, as shown in Figure 13.10, is instructive for defining conditions where we can use the rate of an enzymatic reaction for the quantitative analysis of an enzyme or substrate. For high substrate concentrations, where $[S] \gg K_m$, equation 13.25 simplifies to

$$\frac{d[P]}{dt} = \frac{k_2[E]_0[S]}{K_m + [S]} \approx \frac{k_2[E]_0[S]}{[S]} = k_2[E]_0 = V_{\max} \quad 13.26$$

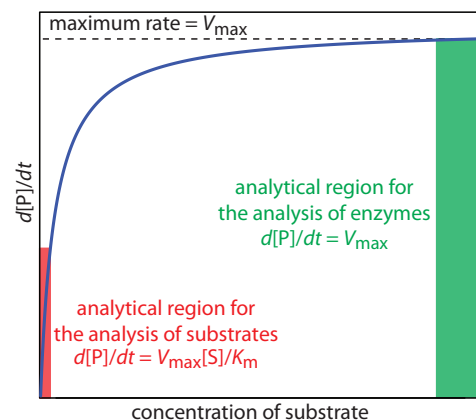


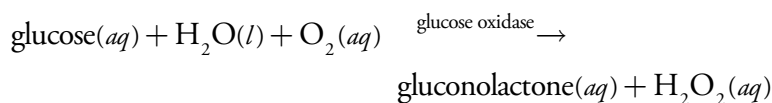
Figure 13.10 Plot of equation 13.25 showing limits for the analysis of substrates and enzymes in an enzyme-catalyzed chemical kinetic method of analysis. The curve in the region highlighted in red obeys [equation 13.27](#) and the curve in the area highlighted in green follows equation 13.26.

where V_{\max} is the maximum rate for the catalyzed reaction. Under these conditions the reaction is pseudo-zero-order in substrate, and we can use V_{\max} to calculate the enzyme's concentration, typically using a variable-time method. At lower substrate concentrations, where $[S] \ll K_m$, [equation 13.25](#) becomes

$$\frac{d[P]}{dt} = \frac{k_2[E]_0[S]}{K_m + [S]} \approx \frac{k_2[E]_0[S]}{K_m} = \frac{V_{\max}[S]}{K_m} \quad 13.27$$

The reaction is now first-order in substrate, and we can use the rate of the reaction to determine the substrate's concentration by a fixed-time method.

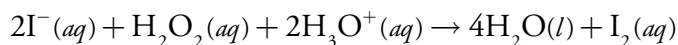
Chemical kinetic methods have been applied to the quantitative analysis of a number of enzymes and substrates.¹⁰ One example, is the determination of glucose based on its oxidation by the enzyme glucose oxidase



under conditions where [equation 13.20](#) is valid. The reaction is monitored by following the rate of change in the concentration of dissolved O_2 using an appropriate voltammetric technique.

NONENZYME-CATALYZED REACTIONS

The variable-time method has also been used to determine the concentration of nonenzymatic catalysts. One of the most commonly used reactions is the reduction of H_2O_2 by reducing agents such as thiosulfate, iodide, and hydroquinone. These reactions are catalyzed by trace amounts of selected metal ions. For example the reduction of H_2O_2 by I^-



is catalyzed by Mo(VI), W(VI), and Zr(IV). A variable-time analysis is conducted by adding a small, fixed amount of ascorbic acid to each solution. As I_2 is produced it rapidly oxidizes the ascorbic acid, and is reduced back to I^- . Once all the ascorbic acid is consumed, the presence of excess I_2 provides a visual endpoint.

NONCATALYTIC REACTIONS

Chemical kinetic methods are not as common for the quantitative analysis of analytes in noncatalytic reactions. Because they lack the enhancement of reaction rate that a catalyst affords, noncatalytic methods generally are not useful for determining small concentrations of analytes. Noncatalytic methods for inorganic analytes are usually based on a complexation reaction. One example is the determination of aluminum in serum by measuring the

¹⁰ Guilbault, G. G. *Handbook of Enzymatic Methods of Analysis*, Marcel Dekker: New York, 1976.

One method for measuring the concentration of dissolved O_2 is the Clark amperometric sensor described in [Chapter 11](#).

initial rate for the formation of its complex with 2-hydroxy-1-naphthaldehyde *p*-methoxybenzoyl-hydrazone.¹¹ The greatest number of noncatalytic methods, however, are for the quantitative analysis of organic analytes. For example, the insecticide methyl parathion has been determined by measuring its rate of hydrolysis in alkaline solutions.¹²

13B.5 Characterization Applications

Chemical kinetic methods also find use in determining rate constants and in elucidating reaction mechanisms. Two examples from the kinetic analysis of enzymes illustrate these applications.

DETERMINING V_{\max} AND K_m FOR ENZYME-CATALYZED REACTIONS

The value of V_{\max} and K_m for an enzymatic reaction are of significant interest in the study of cellular chemistry. For an enzyme following the mechanism in reaction 13.20, V_{\max} is equivalent to $k_2 \times [E]_0$, where $[E]_0$ is the enzyme's concentration and k_2 is the enzyme's turnover number. The turnover number is the maximum number of substrate molecules converted to product by a single active site on the enzyme, per unit time. A turnover number, therefore, provides a direct indication of the active site's catalytic efficiency. The Michaelis constant, K_m , is significant because it provides an estimate of the substrate's intracellular concentration.¹³

As shown in [Figure 13.10](#), we can find values for V_{\max} and K_m by measuring the reaction's rate for small and for large concentrations of the substrate. Unfortunately, this is not always practical as the substrate's limited solubility may prevent us from using the large substrate concentrations needed to determine V_{\max} . Another approach is to rewrite [equation 13.25](#) by taking its reciprocal

$$\frac{1}{d[P]/dt} = \frac{1}{v} = \frac{K_m}{V_{\max}} \times \frac{1}{[S]} + \frac{1}{V_{\max}} \quad 13.28$$

where v is the reaction's rate. As shown in [Figure 13.11](#), a plot of $1/v$ versus $1/[S]$, which is called a double reciprocal or **LINWEAVER–BURK PLOT**, is a straight line with a slope of K_m/V_{\max} , a y -intercept of $1/V_{\max}$, and an x -intercept of $-1/K_m$.

Example 13.6

The reaction between nicotinamide mononucleotide and ATP to form nicotinamide–adenine dinucleotide and pyrophosphate is catalyzed by the enzyme nicotinamide mononucleotide adenylyltransferase.¹⁴ The fol-

An enzyme's turnover number also is known as k_{cat} and is equal to $V_{\max}/[E]_0$. For the mechanism in [reaction 13.20](#), k_{cat} is equivalent to k_2 . For more complicated mechanisms, k_{cat} is a function of additional rate constants.

In [Chapter 5](#) we noted that when faced with a nonlinear model—and [equation 13.25](#) is one example of a nonlinear model—it may be possible to rewrite the equation in a linear form. This is the strategy used here. Linearizing a nonlinear model is not without limitations, two of which deserve a brief mention. First, because we are unlikely to have data for large substrate concentrations, we will not have many data points for small values of $1/[S]$. As a result, our determination of the y -intercept's value relies on a significant extrapolation. Second, taking the reciprocal of the rate distorts the experimental error in a way that may invalidate the assumptions of a linear regression. Nonlinear regression provides a more rigorous method for fitting [equation 13.25](#) to experimental data. The details are beyond the level of this textbook, but you may consult Massart, D. L.; Vandeginste, B. G. M.; Buydens, L. M. C. De Jong, S.; Lewi, P. J.; Smeyers-Verbeke, J. "Nonlinear Regression," Chapter 11 in *Handbook of Chemometrics and Qualimetrics: Part A*, Elsevier: Amsterdam, 1997 for additional details. The simplex algorithm described in Chapter 14 also can be used to fit a nonlinear equation to experimental data.

11 Ioannou, P. C.; Piperaki, E. A. *Clin. Chem.* **1986**, *32*, 1481–1483.

12 Cruces Blanco, C.; Garcia Sanchez, F. *Int. J. Environ. Anal. Chem.* **1990**, *38*, 513–523.

13 (a) Northup, D. B. *J. Chem. Educ.* **1998**, *75*, 1153–1157; (b) Zubay, G. *Biochemistry*, Macmillan Publishing Co.: New York, 2nd Ed., p 269.

14 (a) Atkinson, M. R.; Jackson, J. F.; Morton, R. K. *Biochem. J.* **1961**, *80*, 318–323; (b) Wilkinson, G. N. *Biochem. J.* **1961**, *80*, 324–332.

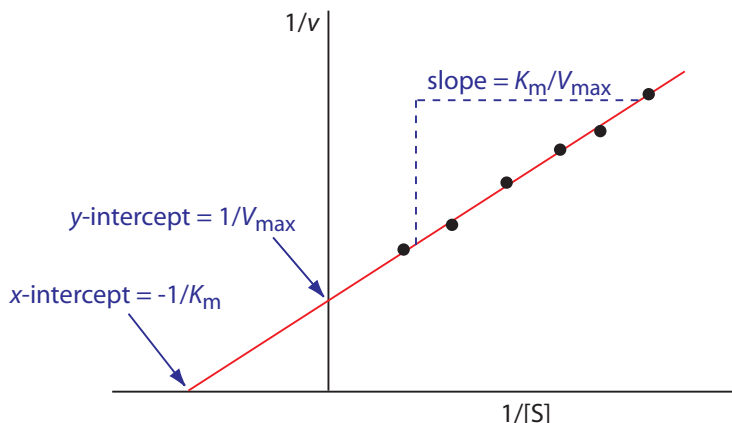


Figure 13.11 Lineweaver–Burk plot of [equation 13.25](#) using [equation 13.28](#).

Following table provides typical data obtained at a pH of 4.95. The substrate, S, is nicotinamide mononucleotide and the initial rate, v , is the μmol of nicotinamide–adenine dinucleotide formed in a 3-min reaction period.

[S] (mM)	v (μmol)	[S] (mM)	v (μmol)
0.138	0.148	0.560	0.324
0.220	0.171	0.766	0.390
0.291	0.234	1.460	0.493

Determine values for V_{max} and K_m .

SOLUTION

Figure 13.12 shows the Lineweaver–Burk plot for this data and the resulting regression equation. Using the y -intercept, we calculate V_{max} as

$$V_{\text{max}} = \frac{1}{y\text{-intercept}} = \frac{1}{1.708 \text{ mol}} = 0.585 \text{ mol}$$

and using the slope we find that K_m is

$$K_m = \text{slope} \times V_{\text{max}} = 0.7528 \text{ mol}^2\text{mM} \times 0.585 \text{ mol} = 0.440 \text{ mM}$$

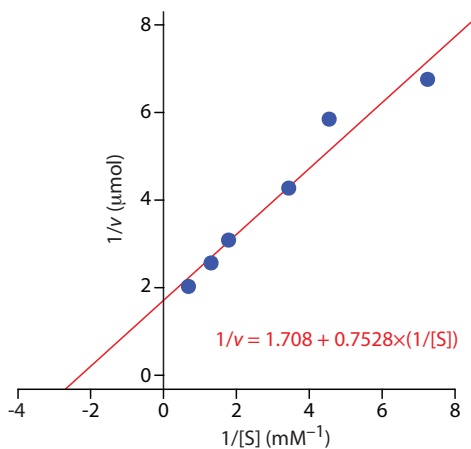
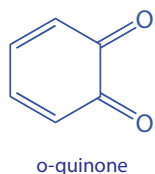
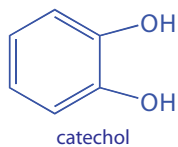


Figure 13.12 Lineweaver–Burk plot and regression equation for the data in [Example 13.6](#).



Practice Exercise 13.3

The following data are for the oxidation of catechol (the substrate) to *o*-quinone by the enzyme *o*-diphenyl oxidase. The reaction is followed by monitoring the change in absorbance at 540 nm. The data in this exercise are adapted from [jkimball](#).

[catechol] (mM)	0.3	0.6	1.2	4.8
rate ($\Delta\text{AU}/\text{min}$)	0.020	0.035	0.048	0.081

Determine values for V_{max} and K_m .

Click [here](#) to review your answer to this exercise.

ELUCIDATING MECHANISMS FOR THE INHIBITION OF ENZYME CATALYSIS

When an **INHIBITOR** interacts with an enzyme it decreases the enzyme's catalytic efficiency. An irreversible inhibitor covalently binds to the enzyme's active site, producing a permanent loss in catalytic efficiency even if we decrease the inhibitor's concentration. A reversible inhibitor forms a noncovalent complex with the enzyme, resulting in a temporary decrease in catalytic efficiency. If we remove the inhibitor, the enzyme's catalytic efficiency returns to its normal level.

There are several pathways for the reversible binding of an inhibitor to an enzyme, as shown in Figure 13.13. In **COMPETITIVE INHIBITION** the substrate and the inhibitor compete for the same active site on the enzyme. Because the substrate cannot bind to an enzyme–inhibitor complex, EI, the enzyme's catalytic efficiency for the substrate decreases. With **NONCOMPETITIVE INHIBITION** the substrate and the inhibitor bind to different active sites on the enzyme, forming an enzyme–substrate–inhibitor, or ESI complex. The formation of an ESI complex decreases catalytic efficiency because only the enzyme–substrate complex reacts to form the product. Finally, in **UNCOMPETITIVE INHIBITION** the inhibitor binds to the enzyme–substrate complex, forming an inactive ESI complex.

We can identify the type of reversible inhibition by observing how a change in the inhibitor's concentration affects the relationship between the rate of reaction and the substrate's concentration. As shown in Figure 13.14, when we display kinetic data using as a Lineweaver-Burk plot it is easy to determine which mechanism is in effect. For example, an increase in slope, a decrease in the x -intercept, and no change in the y -intercept indicates competitive inhibition. Because the inhibitor's binding is reversible, we can still obtain the same maximum velocity—thus the constant value for the y -intercept—by adding enough substrate to completely displace the inhibitor. Because it takes more substrate, the value of K_m increases, which explains the increase in the slope and the decrease in the x -intercept's value.

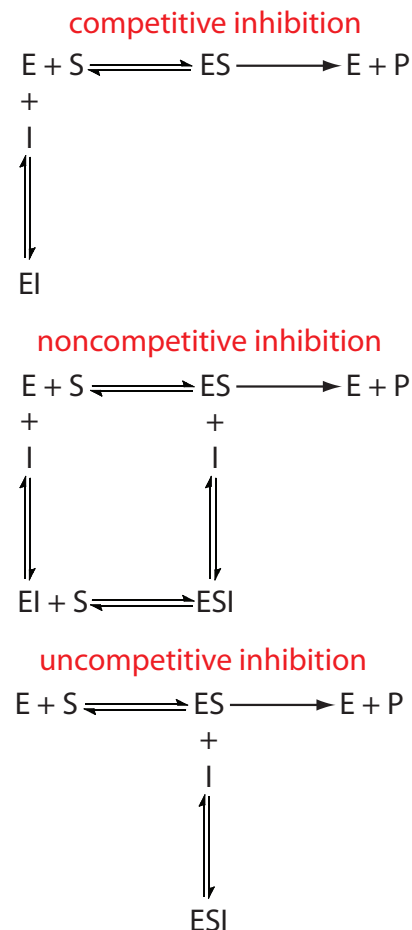


Figure 13.13 Mechanisms for the reversible inhibition of enzyme catalysis. E: enzyme, S: substrate, P: product, I: inhibitor, ES: enzyme–substrate complex, EI: enzyme–inhibitor complex, ESI: enzyme–substrate–inhibitor complex.

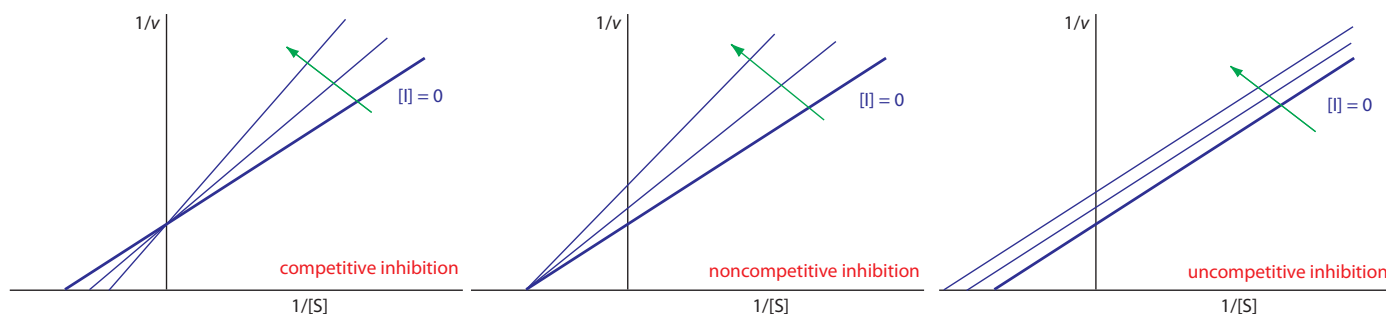


Figure 13.14 Lineweaver–Burk plots for competitive inhibition, noncompetitive inhibition, and uncompetitive inhibition. The thick blue line in each plot shows the kinetic behavior in the absence of inhibitor, and the thin blue lines in each plot show the change in behavior for increasing concentrations of the inhibitor. In each plot, the inhibitor's concentration increases in the direction of the green arrow.

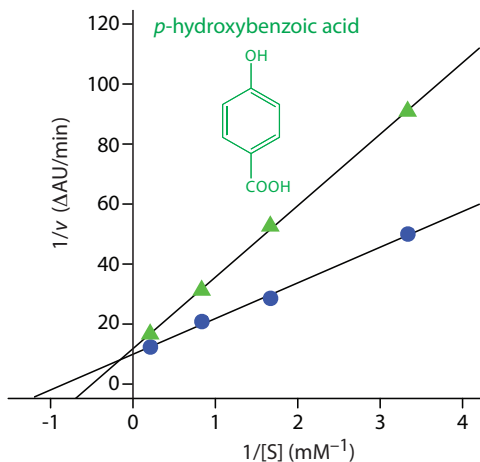


Figure 13.15 Lineweaver–Burk plots for the data in [Practice Exercise 13.3](#) and Example 13.7.

Example 13.7

[Practice Exercise 13.3](#) provides kinetic data for the oxidation of catechol (the substrate) to *o*-quinone by the enzyme *o*-diphenyl oxidase in the absence of an inhibitor. The following additional data are available when the reaction is run in the presence of *p*-hydroxybenzoic acid, PBHA. Is PBHA an inhibitor for this reaction and, if so, what type of inhibitor is it? The data in this exercise are adapted from [jkimball](#).

[catechol] (mM)	0.3	0.6	1.2	4.8
rate (ΔAU/min)	0.011	0.019	0.022	0.060

SOLUTION

Figure 13.15 shows the resulting Lineweaver–Burk plot for the data in [Practice Exercise 13.3](#) and Example 13.7. Although the *y*-intercepts are not identical in value—the result of uncertainty in measuring the rates—the plot suggests that PBHA is a competitive inhibitor for the enzyme’s reaction with catechol.

Practice Exercise 13.4

[Practice Exercise 13.3](#) provides kinetic data for the oxidation of catechol (the substrate) to *o*-quinone by the enzyme *o*-diphenyl oxidase in the absence of an inhibitor. The following additional data are available when the reaction is run in the presence of phenylthiourea. Is phenylthiourea an inhibitor for this reaction and, if so, what type of inhibitor is it? The data in this exercise are adapted from [jkimball](#).

[catechol] (mM)	0.3	0.6	1.2	4.8
rate (ΔAU/min)	0.010	0.016	0.024	0.040

Click [here](#) to review your answer to this exercise.

13B.6 Evaluation of Chemical Kinetic Methods

SCALE OF OPERATION

The detection limit for chemical kinetic methods ranges from minor components to ultratrace components, and is principally determined by two factors: the rate of the reaction and the instrumental technique used to monitor the rate. Because the signal is directly proportional to the reaction rate, faster reactions generally result in lower detection limits. All other factors being equal, detection limits are smaller for catalytic reactions than for noncatalytic reactions. Not surprisingly, some of the earliest chemical kinetic methods took advantage of catalytic reactions. For example, ultratrace levels of Cu (<1 ppb) can be determined by measuring its catalytic effect on the redox reaction between hydroquinone and H₂O₂.

See [Figure 3.5](#) to review the meaning of minor, trace, and ultratrace components.

In the absence of a catalyst, most chemical kinetic methods for organic compounds involve reactions with relatively slow rates, limiting the method to minor and higher concentration trace analytes. Noncatalytic chemical kinetic methods for inorganic compounds involving metal–ligand complexation may be fast or slow, with detection limits ranging from trace to minor analyte.

The second factor influencing a method's detection limit is the instrumental technique used to monitor the reaction's progress. Most reactions are monitored spectrophotometrically or electrochemically. The scale of operation for these techniques are discussed in Chapter 10 and Chapter 11.

Accuracy

As noted earlier, a chemical kinetic method is potentially subject to larger errors than an equilibrium method due to the effect of uncontrolled or poorly controlled variables, such as temperature or pH. Although a direct-computation chemical kinetic method can achieve moderately accurate results (a relative error of 1–5%), the accuracy often is much worse. Curve-fitting methods may provide significant improvements in accuracy because they use more data. In one study, for example, accuracy was improved by two orders of magnitude—from errors of 500% to 5%—by replacing a direct-computation analysis with a curve-fitting analysis.¹⁵ Although not discussed in this chapter, data analysis methods that include the ability to compensate for experimental errors can lead to a significant improvement in accuracy.¹⁶

Precision

The precision of a chemical kinetic method is limited by the signal-to-noise ratio of the instrumental technique used to monitor the reaction's progress. When using an integral method, a precision of 1–2% is routinely possible. The precision for a differential method may be somewhat poorer, particularly when the signal is noisy.

Sensitivity

We can improve the sensitivity of a one-point fixed-time integral method by making measurements under conditions where the concentration of the species we are monitoring is as large as possible. When monitoring the analyte's concentration—or the concentration of any other reactant—we want to take measurements early in the reaction before its concentration decreases. On the other hand, if we choose to monitor one of the reaction's products, then it is better to take measurements at longer times. For a two-point fixed-time integral method, we can improve sensitivity by increasing

¹⁵ Pauch, J. B.; Margerum, D. W. *Anal. Chem.* **1969**, *41*, 226–232.

¹⁶ (a) Holler, F. J.; Calhoun, R. K.; McClanahan, S. F. *Anal. Chem.* **1982**, *54*, 755–761; (b) Wentzel, P. D.; Crouch, S. R. *Anal. Chem.* **1986**, *58*, 2851–2855; (c) Wentzel, P. D.; Crouch, S. R. *Anal. Chem.* **1986**, *58*, 2855–2858.

the difference between times t_1 and t_2 . As discussed earlier, the sensitivity of a rate method improves when we choose to measure the initial rate.

SELECTIVITY

The analysis of closely related compounds, as we have seen in earlier chapters, is often complicated by their tendency to interfere with each other. To overcome this problem we usually need to separate the analyte and the interferent before completing the analysis. One advantage of a chemical kinetic method is that we often can adjust the reaction conditions so that the analyte and the interferent have different reaction rates. If the difference in their respective rates is large enough, then one species reacts completely before the other species has a chance to react.

We can use the appropriate integrated rate laws to find the conditions necessary to separate a faster reacting species from a more slowly reacting species. Let's consider a system consisting of an analyte, A, and an interferent, B, both of which show first-order kinetics with a common reagent. To avoid an interference, the relative magnitudes of their rate constants must be sufficiently different. The fractions, f , of A and B remaining at any point in time, t , are defined by the following equations

$$(f_A)_t = \frac{[A]_t}{[A]_0} \quad 13.29$$

$$(f_B)_t = \frac{[B]_t}{[B]_0} \quad 13.30$$

where $[A]_0$ and $[B]_0$ are the initial concentrations of A and B, respectively. Rearranging [equation 13.2](#) and substituting in equation 13.29 or equation 13.30 leaves use with the following two equation.

$$\ln \frac{[A]_t}{[A]_0} = \ln(f_A)_t = -k_A t \quad 13.31$$

$$\ln \frac{[B]_t}{[B]_0} = \ln(f_B)_t = -k_B t \quad 13.32$$

where k_A and k_B are the rate constants for A and B. Dividing equation 13.31 by equation 13.32 leave us with

$$\frac{k_A}{k_B} = \frac{\ln(f_A)_t}{\ln(f_B)_t}$$

Suppose we want 99% of A react before 1% of B reacts. The fraction of A that remains is 0.01 and the fraction of B remaining is 0.99, which requires that

The need to analyze multiple analytes in complex mixtures is, of course, one of the advantages of the separation techniques covered in [Chapter 12](#). Kinetic techniques provide an alternative approach for simple mixtures.

$$\frac{k_A}{k_B} = \frac{\ln(f_A)_t}{\ln(f_B)_t} = \frac{\ln(0.01)}{\ln(0.99)} = 460$$

the rate constant for A be at least 460 times larger than that for B. Under these conditions we can determine the analyte's concentration before the interferent begins to react. If the analyte has the slower reaction, then we can determine its concentration after allowing the interferent to react to completion.

This method of adjusting reaction rates is useful if we need to analyze for an analyte in the presence of an interferent, but impractical if both A and B are analytes because conditions favoring the analysis of A will not favor the analysis of B. For example, if we adjust our conditions so that 99% of A reacts in 5 s, then 99% of B must react within 0.01 s if it has the faster kinetics, or in 2300 s if it has the slower kinetics. The reaction of B is too fast or too slow to make this a useful analytical method.

What do we do if the difference in the rate constants for A and B are not significantly different? We can still complete an analysis if we can simultaneously monitor both species. Because both A and B react at the same time, the integrated form of the first-order rate law becomes

$$C_t = [A]_t + [B]_t = [A]_0 e^{-k_A t} + [B]_0 e^{-k_B t} \quad 13.33$$

where C_t is the total concentration of A and B at time, t . If we measure C_t at times t_1 and t_2 , we can solve the resulting pair of simultaneous equations to determine values $[A]_0$ and $[B]_0$. The rate constants k_A and k_B are determined in separate experiments using standard solutions of A and B.

Equation 13.33 can also serve as the basis for a curve-fitting method. As shown in Figure 13.16, a plot of $\ln(C_t)$ as a function of time consists of two regions. At shorter times the plot is curved because A and B are reacting simultaneously. At later times, however, the concentration of the faster reacting component, A, decreases to zero, and equation 13.33 simplifies to

$$C_t \approx [B]_t = [B]_0 e^{-k_B t}$$

Under these conditions a plot of $\ln(C_t)$ versus time is linear. Extrapolating the linear portion to $t=0$ gives $[B]_0$, with $[A]_0$ determined by difference.

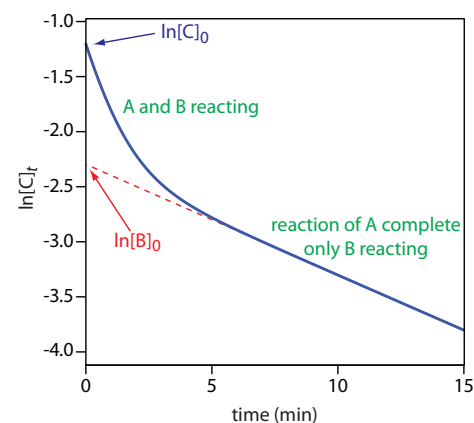


Figure 13.16 Kinetic determination of a slower reacting analyte, B, in the presence of a faster reacting analyte, A. The rate constants for the two analytes are: $k_A = 1 \text{ min}^{-1}$ and $k_B = 0.1 \text{ min}^{-1}$. Example 13.8 asks you to use this data to determine the concentrations of A and B in the original sample.

Example 13.8

Use the data in Figure 13.16 to determine the concentrations of A and B in the original sample.

SOLUTION

Extrapolating the linear part of the curve back to $t=0$ gives $\ln[B]_0$ as -2.3 , or a $[B]_0$ of 0.10 M. At $t=0$, $\ln[C]_0$ is -1.2 , corresponding to a $[C]_0$ of 0.30 M. Because $[C]_0 = [A]_0 + [B]_0$, the concentration of A in the original sample is 0.20 M.

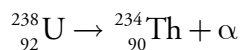
TIME, COST, AND EQUIPMENT

An automated chemical kinetic method of analysis provides a rapid means for analyzing samples, with throughputs ranging from several hundred to several thousand determinations per hour. The initial start-up costs may be fairly high because an automated analysis requires a dedicated instrument designed to meet the specific needs of the analysis. When measurements are handled manually, a chemical kinetic method requires routinely available equipment and instrumentation, although the sample throughput is much lower than with an automated method.

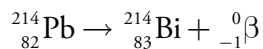
13C Radiochemistry

Atoms having the same number of protons but a different number of neutrons are **ISOTOPES**. To identify an isotope we use the notation ${}^A_Z E$, where E is the element's atomic symbol, Z is the element's atomic number, and A is the element's atomic mass number. Although an element's different isotopes have the same chemical properties, their nuclear properties are different. The most important difference between isotopes is their stability. The nuclear configuration of a stable isotope remains constant with time. Unstable isotopes, however, spontaneously disintegrate, emitting radioactive particles as they transform into a more stable form.

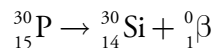
The most important types of radioactive particles are alpha particles, beta particles, gamma rays, and X-rays. An **ALPHA PARTICLE**, α , is equivalent to a helium nucleus, ${}^4_2\text{He}$. When an atom emits an alpha particle, the product is a new atom whose atomic number and atomic mass number are, respectively, 2 and 4 less than its unstable parent. The decay of uranium to thorium is one example of alpha emission.



A **BETA PARTICLE**, β , comes in one of two forms. A **NEGATRON**, ${}^0_{-1}\beta$, is produced when a neutron changes into a proton, increasing the atomic number by one, as shown here for lead.



The conversion of a proton to a neutron results in the emission of a **POSITRON**, ${}^0_1\beta$.



The emission of an alpha or a beta particle often produces an isotope in an unstable, high energy state. This excess energy is released as a **GAMMA RAY**, γ , or as an X-ray. Gamma ray and X-ray emission may also occur without the release of an alpha particle or a beta particle.

An element's atomic number is equal to the number of protons and its atomic mass is equal to the sum of the number of protons and neutrons. We represent an isotope of carbon-13 as



because carbon has 6 protons and 7 neutrons. Sometimes we omit Z from this notation—identifying the element and the atomic number is repetitive because all isotopes of carbon have 6 protons and any atom having 6 protons is an isotope of carbon. Thus, ${}^{13}\text{C}$ and C-13 are alternative notations for this isotope of carbon.

A negatron, which is the more common type of beta particle, is equivalent to an electron. You may recall from [Section 12D.5](#) that the electron capture detector for gas chromatography uses ${}^{63}\text{Ni}$ as a beta emitter.

13C.1 Theory and Practice

A radioactive isotope's rate of decay, or activity, follows first-order kinetics

$$A = -\frac{dN}{dt} = \lambda N \quad 13.34$$

where A is the activity, N is the number of radioactive atoms present in the sample at time t , and λ is the isotope's decay constant. Activity is expressed as the number of disintegrations per unit time.

As with any first-order process, we can rewrite [equation 13.24](#) in an integrated form.

$$N_t = N_0 e^{-\lambda t} \quad 13.35$$

Substituting equation 13.35 into equation 13.34 gives

$$A = \lambda N_0 e^{-\lambda t} = A_0 e^{-\lambda t} \quad 13.36$$

If we measure a sample's activity at time t we can determine the sample's initial activity, A_0 , or the number of radioactive atoms originally present in the sample, N_0 .

An important characteristic property of a radioactive isotope is its **HALF-LIFE**, $t_{1/2}$, which is the amount of time required for half of the radioactive atoms to disintegrate. For first-order kinetics the half-life is

$$t_{1/2} = \frac{0.693}{\lambda} \quad 13.37$$

Because the half-life is independent of the number of radioactive atoms, it remains constant throughout the decay process. For example, if 50% of the radioactive atoms remain after one half-life, then 25% remain after two half-lives, and 12.5% remain after three half-lives.

Kinetic information about a radioactive isotope is usually given in terms of its half-life because it provides a more intuitive sense of the isotope's stability. Knowing, for example, that the decay constant for $^{90}_{38}\text{Sr}$ is 0.0247 yr^{-1} does not give an immediate sense of how fast it disintegrates. On the other hand, knowing that its half-life is 28.1 y makes it clear that the concentration of $^{90}_{38}\text{Sr}$ in a sample remains essentially constant over a short period of time.

13C.2 Instrumentation

Alpha particles, beta particles, gamma rays, and X-rays are measured by using the particle's energy to produce an amplified pulse of electrical current in a detector. These pulses are counted to give the rate of disintegration. Three types of detectors commonly are encountered: gas-filled detectors, scintillation counters, and semiconductor detectors. A gas-filled detector consists of a tube containing an inert gas, such as Ar. When a radioactive particle enters the tube it ionizes the inert gas, producing an Ar^+/e^- ion-pair.

Note the similarity between equation 13.34 and [equation 13.1](#)

$$\text{rate} = -\frac{d[\text{A}]}{dt} = k[\text{A}]$$

where activity is equivalent to rate, N is equivalent to $[\text{A}]$, and λ is equivalent to k .

Suppose we begin with an N_0 of 1200 atoms. During the first half-life, 600 atoms disintegrate and 600 remain. During the second half-life, 300 of the 600 remaining atoms disintegrate, leaving 300 atoms or 25% of the original 1200 atoms. Of the 300 remaining atoms, only 150 remain after the third half-life, or 12.5% of the original 1200 atoms.

You can learn more about these radiation detectors and the signal processors used to count particles by consulting this chapter's additional resources.

Movement of the electron toward the anode and the Ar^+ toward the cathode generates a measurable electrical current. A **GEIGER COUNTER** is one example of a gas-filled detector. A **SCINTILLATION COUNTER** uses a fluorescent material to convert radioactive particles into easily measurable photons. For example, a solid-state scintillation counter consisting of a NaI crystal containing 0.2% TlI produces several thousand photons for each radioactive particle. Finally, in a semiconductor detector, adsorption of a single radioactive particle promotes thousands of electrons to the semiconductor's conduction band, increasing conductivity.

13C.3 Quantitative Applications

In this section we consider three common quantitative radiochemical methods of analysis: the direct analysis of a radioactive isotope by measuring its rate of disintegration, neutron activation, and isotope dilution.

DIRECT ANALYSIS OF RADIOACTIVE ANALYTES

The concentration of a long-lived radioactive isotope remains essentially constant during the period of analysis. As shown in Example 13.9, we can use the sample's activity to calculate the number of radioactive particles in the sample.

Example 13.9

The activity in a 10.00-mL sample of wastewater containing $^{90}_{38}\text{Sr}$ is 9.07×10^6 disintegrations/s. What is the molar concentration of $^{90}_{38}\text{Sr}$ in the sample? The half-life for $^{90}_{38}\text{Sr}$ is 28.1 yr.

SOLUTION

Solving [equation 13.37](#) for λ , substituting into [equation 13.34](#), and solving for N gives

$$N = \frac{A \times t_{1/2}}{0.693}$$

Before we can determine the number of atoms of $^{90}_{38}\text{Sr}$ in the sample we must express its activity and its half-life using the same units. Converting the half-life to seconds gives $t_{1/2}$ as 8.86×10^8 s; thus, there are

$$\frac{(9.07 \times 10^6 \text{ disintegrations/s})(8.86 \times 10^8 \text{ s})}{0.693} = 1.16 \times 10^{16} \text{ atoms } ^{90}_{38}\text{Sr}$$

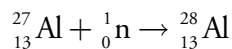
The concentration of $^{90}_{38}\text{Sr}$ in the sample is

$$\frac{1.16 \times 10^{16} \text{ atoms } ^{90}_{38}\text{Sr}}{(6.022 \times 10^{23} \text{ atom/mol})(0.01000 \text{ L})} = 1.93 \times 10^{-6} \text{ M } ^{90}_{38}\text{Sr}$$

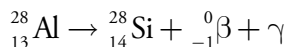
The direct analysis of a short-lived radioactive isotope using the method outlined in [Example 13.9](#) is less useful because it provides only a transient measure of the isotope's concentration. Instead, we can measure its activity after an elapsed time, t , and use [equation 13.36](#) to calculate N_0 .

NEUTRON ACTIVATION ANALYSIS

Few analytes are naturally radioactive. For many analytes, however, we can induce radioactivity by irradiating the sample with neutrons in a process called neutron activation analysis (NAA). The radioactive element formed by **NEUTRON ACTIVATION** decays to a stable isotope by emitting a gamma ray, and, possibly, other nuclear particles. The rate of gamma-ray emission is proportional to the analyte's initial concentration in the sample. For example, if we place a sample containing non-radioactive $^{27}_{13}\text{Al}$ in a nuclear reactor and irradiate it with neutrons, the following nuclear reaction takes place.



The radioactive isotope of $^{28}_{13}\text{Al}$ has a characteristic decay process that includes the release of a beta particle and a gamma ray.



When irradiation is complete, we remove the sample from the nuclear reactor, allow any short-lived radioactive interferences to decay into the background, and measure the rate of gamma-ray emission.

The initial activity at the end of irradiation depends on the number of atoms that are present. This, in turn, is equal to the difference between the rate of formation for $^{28}_{13}\text{Al}$ and its rate of disintegration

$$\frac{dN_{^{28}_{13}\text{Al}}}{dt} = \Phi\sigma N_{^{27}_{13}\text{Al}} - \lambda N_{^{28}_{13}\text{Al}} \quad 13.38$$

where Φ is the neutron flux and σ is the reaction cross-section, or probability that a $^{27}_{13}\text{Al}$ nucleus captures a neutron. Integrating equation 13.38 over the time of irradiation, t_i , and multiplying by λ gives the initial activity, A_0 , at the end of irradiation as

$$A_0 = \lambda N_{^{28}_{13}\text{Al}} = \Phi\sigma N_{^{27}_{13}\text{Al}} (1 - e^{-\lambda t_i})$$

If we know the values for A_0 , Φ , σ , λ , and t_i , then we can calculate the number of atoms of $^{27}_{13}\text{Al}$ initially present in the sample.

A simpler approach is to use one or more external standards. Letting $(A_0)_x$ and $(A_0)_s$ represent the initial activity for the analyte in an unknown and in an external standard, and letting w_x and w_s represent the analyte's

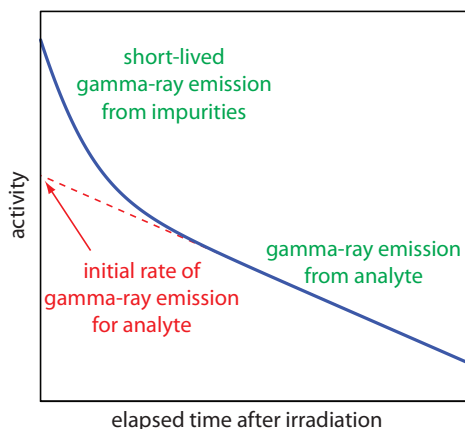


Figure 13.17 Plot of gamma-ray emission as a function of time showing how the analyte's initial activity is determined.

weight in the unknown and in the external standard, we obtain the following pair of equations

$$(A_0)_x = kw_x \quad 13.39$$

$$(A_0)_s = kw_s \quad 13.40$$

that we can solve to determine the analyte's mass in the sample.

As noted earlier, gamma ray emission is measured following a period during which we allow short-lived interferences to decay into the background. As shown in Figure 13.17, we determine the sample's and the standard's initial activity by extrapolating a curve of activity versus time back to $t=0$. Alternatively, if we irradiate the sample and the standard simultaneously, and if we measure their activities at the same time, then we can substitute these activities for $(A_0)_x$ and $(A_0)_s$. This is the strategy used in the following example.

Example 13.10

The concentration of Mn in steel can be determined by a neutron activation analysis using the method of external standards. A 1.000-g sample of an unknown steel sample and a 0.950-g sample of a standard steel known to contain 0.463% w/w Mn are irradiated with neutrons in a nuclear reactor for 10 h. After a 40-min delay the gamma ray emission is 2542 cpm (counts per minute) for the unknown and 1984 cpm for the external standard. What is the %w/w Mn in the unknown steel sample?

SOLUTION

Combining equation 13.39 and equation 13.40 gives

$$w_x = \frac{A_x}{A_s} \times w_s$$

The weight of Mn in the external standard is

$$w_s = \frac{0.00463 \text{ g Mn}}{\text{g steel}} \times 0.950 \text{ g steel} = 0.00440 \text{ g Mn}$$

Substituting into the above equation gives

$$w_x = \frac{2542 \text{ cpm}}{1984 \text{ cpm}} \times 0.00440 \text{ g Mn} = 0.00564 \text{ g Mn}$$

Because the original mass of steel is 1.000 g, the %w/w Mn is 0.564%.

Among the advantages of neutron activation are its applicability to almost all elements in the periodic table and that it is nondestructive to

the sample. Consequently, NAA is an important technique for analyzing archeological and forensic samples, as well as works of art.

ISOTOPE DILUTION

Another important radiochemical method for the analysis of nonradioactive analytes is **ISOTOPE DILUTION**. An external source of analyte is prepared in a radioactive form with a known activity, A_T , for its radioactive decay—we call this form of the analyte a **TRACER**. To prepare a sample for analysis we add a known mass of the tracer, w_T , to a portion of sample containing an unknown mass, w_x , of analyte. After homogenizing the sample and tracer, we isolate w_A grams of analyte by using a series of appropriate chemical and physical treatments. Because our processing techniques cannot distinguish between radioactive and nonradioactive forms of the analyte, the isolated material contains both. Finally, we measure the activity of the isolated sample, A_A . If we recover all the analyte—both the radioactive tracer and the nonradioactive analyte—then A_A and A_T are equal and $w_x = w_A - w_T$. Normally, we fail to recover all the analyte. In this case A_A is less than A_T , and

$$A_A = A_T \times \frac{w_A}{w_x + w_T} \quad 13.41$$

The ratio of weights in equation 13.41 accounts for the loss of the activity resulting from our failure to recover all the analyte. Solving equation 13.41 for w_x gives

$$w_x = \frac{A_T}{A_A} w_A - w_T \quad 13.42$$

Example 13.11

The concentration of insulin in a production vat is determined by isotope dilution. A 1.00-mg sample of insulin labeled with ^{14}C having an activity of 549 cpm is added to a 10.0-mL sample taken from the production vat. After homogenizing the sample, a portion of the insulin is separated and purified, yielding 18.3 mg of pure insulin. The activity for the isolated insulin is measured at 148 cpm. How many mg of insulin are in the original sample?

SOLUTION

Substituting known values into equation 13.42 gives

$$w_x = \frac{549 \text{ cpm}}{148 \text{ cpm}} \times 18.3 \text{ mg} - 1.00 \text{ mg} = 66.9 \text{ mg insulin}$$

Equation 13.41 and equation 13.42 are valid only if the tracer's half-life is considerably longer than the time it takes to conduct the analysis. If this

How we process the sample depends on the analyte and the sample's matrix. We might, for example, digest the sample to bring the analyte into solution. After filtering the sample to remove the residual solids, we might precipitate the analyte, isolate it by filtration, dry it in an oven, and obtain its weight.

Given that the goal of an analysis is to determine the amount of nonradioactive analyte in our sample, the thought that we might not recover all the analyte might strike you as unsettling. Recall from [Chapter 7G](#), that a single liquid–liquid extraction rarely has an extraction efficiency of 100%. One advantage of isotope dilution is that the extraction efficiency for the nonradioactive analyte and the tracer are the same. If we recover 50% of the tracer, then we also recover 50% of the nonradioactive analyte. Because we know how much tracer we added to the sample, we can determine how much of the nonradioactive analyte is in the sample.

Table 13.1 Common Tracers for Isotope Dilution

isotope	half-life
^3H	12.5 years
^{14}C	5730 years
^{32}P	14.3 days
^{35}S	87.1 days
^{45}Ca	152 days
^{55}Fe	2.91 years
^{60}Co	5.3 years
^{131}I	8 days

is not the case, then the decrease in activity is due both to the incomplete recovery and the natural decrease in the tracer's activity. Table 13.1 provides a list of several common tracers for isotope dilution.

An important feature of isotope dilution is that it is not necessary to recover all the analyte to determine the amount of analyte present in the original sample. Isotope dilution, therefore, is useful for the analysis of samples with complex matrices, where a complete recovery of the analyte is difficult.

13C.4 Characterization Applications

One example of a characterization application is the determination of a sample's age based on the decay of a radioactive isotope naturally present in the sample. The most common example is carbon-14 dating, which is used to determine the age of natural organic materials.

As cosmic rays pass through the upper atmosphere, some of the $^{14}_7\text{N}$ atoms in the atmosphere capture high energy neutrons, converting into $^{14}_6\text{C}$. The $^{14}_6\text{C}$ then migrates into the lower atmosphere where it oxidizes to form C-14 labeled CO_2 . Animals and plants subsequently incorporate this labeled CO_2 into their tissues. Because this is a steady-state process, all plants and animals have the same ratio of $^{14}_6\text{C}$ to $^{12}_6\text{C}$ in their tissues. When an organism dies, the radioactive decay of $^{14}_6\text{C}$ to $^{14}_7\text{N}$ by $^0_{-1}\beta$ emission ($t_{1/2}=5730$ years) leads to predictable reduction in the $^{14}_6\text{C}$ to $^{12}_6\text{C}$ ratio. We can use the change in this ratio to date samples that are as much as 30 000 years old, although the precision of the analysis is best when the sample's age is less than 7000 years. The accuracy of carbon-14 dating depends upon our assumption that the $^{14}_6\text{C}$ to $^{12}_6\text{C}$ ratio is constant over time. Some variation in the ratio has occurred as the result of the increased consumption of fossil fuels and the production of $^{14}_6\text{C}$ during the testing of nuclear weapons. A calibration curve prepared using samples of known age—these include tree rings, deep ocean sediments, coral samples, and cave deposits—limits this source of uncertainty.

There is no need to prepare a calibration curve for each analysis. Instead, there is a universal calibration curve known as Int-Cal. The most recent such curve, IntCal04 is described in the following paper: Reimer, P. J., et. al. "IntCal04 Terrestrial Radiocarbon Age Calibration, 0–26 Cal Kyr BP," *Radiocarbon* **2004**, 46, 1029–1058. This calibration spans 26 000 years (Cal Kyr) before the present (BP).

Example 13.12

To determine the age of a fabric sample the relative ratio of $^{14}_6\text{C}$ to $^{12}_6\text{C}$ was measured yielding a result of 80.9% of that found in modern fibers. How old is the fabric?

SOLUTION

Equations 13.36 and 13.37 provide us with a method for converting a change in the ratio of $^{14}_6\text{C}$ to $^{12}_6\text{C}$ to the fabric's age. Letting A_0 be the ratio of $^{14}_6\text{C}$ to $^{12}_6\text{C}$ in modern fibers, we assign it a value of 1.00. The ratio of $^{14}_6\text{C}$ to $^{12}_6\text{C}$ in the sample, A , is 0.809. Solving gives

$$t = \ln \frac{A_0}{A} \times \frac{t_{1/2}}{0.693} = \ln \frac{1.00}{0.809} \times \frac{5730 \text{ yr}}{0.693} = 1750 \text{ yr}$$

Other isotopes can be used to determine a sample's age. The age of rocks, for example, has been determined from the ratio of the number of radioactive $^{238}_{92}\text{U}$ atoms to the number of stable $^{206}_{82}\text{Pb}$ atoms produced by radioactive decay. For rocks that do not contain uranium, dating is accomplished by comparing the ratio of radioactive $^{40}_{19}\text{K}$ to the stable $^{40}_{18}\text{Ar}$. Another example is the dating of sediments collected from lakes by measuring the amount of $^{210}_{82}\text{Pb}$ that is present.

13C.5 Evaluation

Radiochemical methods are routinely used for the analysis of trace analytes in macro and meso samples. The accuracy and precision of radiochemical methods are generally within the range of 1–5%. We can improve the precision—which is limited by the random nature of radioactive decay—by counting the emission of radioactive particles for as long a time as is practical. If the number of counts, M , is reasonably large ($M \geq 100$), and the counting period is significantly less than the isotope's half-life, then the percent relative standard deviation for the activity, $(\sigma_A)_{\text{rel}}$, is approximately

$$(\sigma_A)_{\text{rel}} = \frac{1}{\sqrt{M}} \times 100$$

For example, if we determine the activity by counting 10 000 radioactive particles, then the relative standard deviation is 1%. A radiochemical method's sensitivity is inversely proportional to $(\sigma_A)_{\text{rel}}$, which means we can improve the sensitivity by counting more particles.

Selectivity rarely is of concern when using a radiochemical method because most samples have only a single radioactive isotope. When several radioactive isotopes are present, we can determine each isotope's activity by taking advantage of differences in the energies of their respective radioactive particles or differences in their respective decay rates.

See [Figure 3.5](#) to review the meaning of macro and meso samples.

In comparison to most other analytical techniques, radiochemical methods are usually more expensive and require more time to complete an analysis. Radiochemical methods also are subject to significant safety concerns due to the analyst's potential exposure to high energy radiation and the need to safely dispose of radioactive waste.

13D Flow Injection Analysis

The focus of this chapter is on methods in which we measure a time-dependent signal. Chemical kinetic methods and radiochemical methods are two examples. In this section we consider the technique of flow injection analysis in which we inject the sample into a flowing carrier stream that gives rise to a transient signal at the detector. Because the shape of this transient signal depends on the physical and chemical kinetic processes occurring in the carrier stream during the time between injection and detection, we include flow injection analysis in this chapter.

13D.1 Theory and Practice

FLOW INJECTION ANALYSIS (FIA) was developed in the mid-1970s as a highly efficient technique for the automated analyses of samples.¹⁷ Unlike the centrifugal analyzer described earlier in this chapter, in which the number of samples is limited by the transfer disk's size, FIA allows for the rapid, sequential analysis of an unlimited number of samples. FIA is one example of a continuous-flow analyzer, in which we sequentially introduce samples at regular intervals into a liquid carrier stream that transports them to the detector.

A schematic diagram detailing the basic components of a flow injection analyzer is shown in Figure 13.18. The reagent serving as the carrier is stored in a reservoir, and a propelling unit maintains a constant flow of

17 (a) Ruzicka, J.; Hansen, E. H. *Anal. Chim. Acta* **1975**, *78*, 145–157; (b) Stewart, K. K.; Beecher, G. R.; Hare, P. E. *Anal. Biochem.* **1976**, *70*, 167–173; (c) Valcárcel, M.; Luque de Castro, M. D. *Flow Injection Analysis: Principles and Applications*, Ellis Horwood: Chichester, England, 1987.

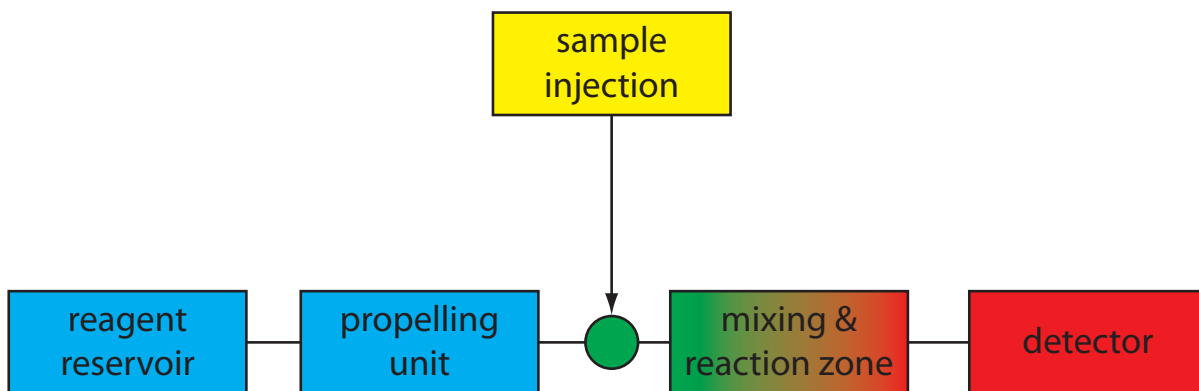


Figure 13.18 Schematic diagram of a simple flow injection analyzer showing its basic components. After its injection into the carrier stream the samples mixes and reacts with the carrier stream's reagents before reaching the detector.

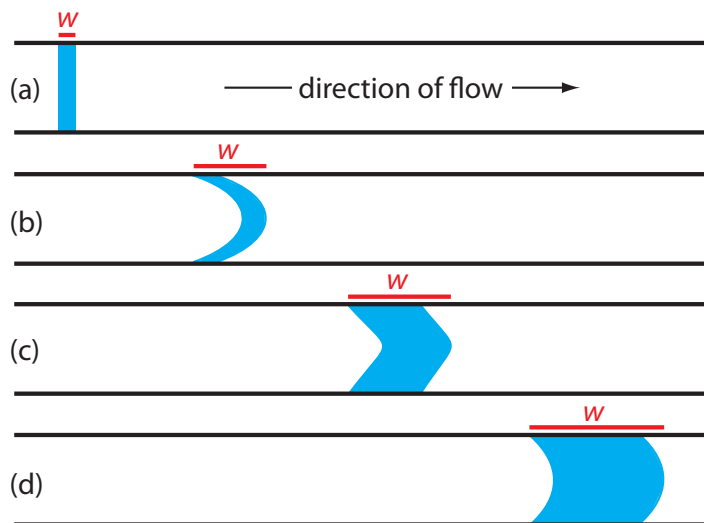


Figure 13.19 Effect of dispersion on the shape of a sample's flow profile at different times during a flow injection analysis: (a) at injection; (b) when convection dominates dispersion; (c) when convection and diffusion contribute to dispersion; and (d) when diffusion dominates dispersion. The red line shows the width, w , of the samples flow profile.

the carrier through a system of tubing that comprises the transport system. We inject the sample directly into the flowing carrier stream, where it travels through one or more mixing and reaction zones before reaching the detector's flow-cell. [Figure 13.18](#) is the simplest design for a flow injection analyzer, consisting of a single channel and one reagent reservoir. Multiple channel instruments that merge together separate channels, each introducing a new reagent into the carrier stream, also are possible. A more detailed discussion of FIA instrumentation is found in the next section.

When we first inject a sample into the carrier stream it has the rectangular flow profile of width w as shown in [Figure 13.19a](#). As the sample moves through the mixing and reaction zone, the width of its flow profile increases as the sample disperses into the carrier stream. Dispersion results from two processes: convection due to the flow of the carrier stream and diffusion due to the concentration gradient between the sample and the carrier stream. Convection occurs by laminar flow. The linear velocity of the sample at the tube's walls is zero, but the sample at the center of the tube moves with a linear velocity twice that of the carrier stream. The result is the parabolic flow profile shown in [Figure 13.19b](#). Convection is the primary means of dispersion in the first 100 ms following the sample's injection.

The second contribution to the sample's dispersion is diffusion due to the concentration gradient between the sample and the carrier stream. As shown in [Figure 13.20](#), diffusion occurs parallel (axially) and perpendicular (radially) to the direction in which the carrier stream is moving. Only radial diffusion is important in flow injection analysis. Radial diffusion decreases the sample's linear velocity at the center of the tubing, while the sample at the edge of the tubing experiences an increase in its linear velocity. Diffusion helps to maintain the integrity of the sample's flow profile ([Figure 13.19c](#)), preventing samples in the carrier stream from dispersing into one another. Both convection and diffusion make significant contributions to dispersion from approximately 3–20 s after the sample's injection. This is

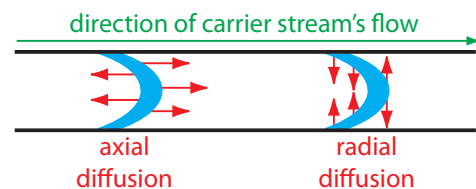


Figure 13.20 Illustration showing axial and radial diffusion. The blue band is the sample's flow profile and the red arrows indicate the direction of diffusion.

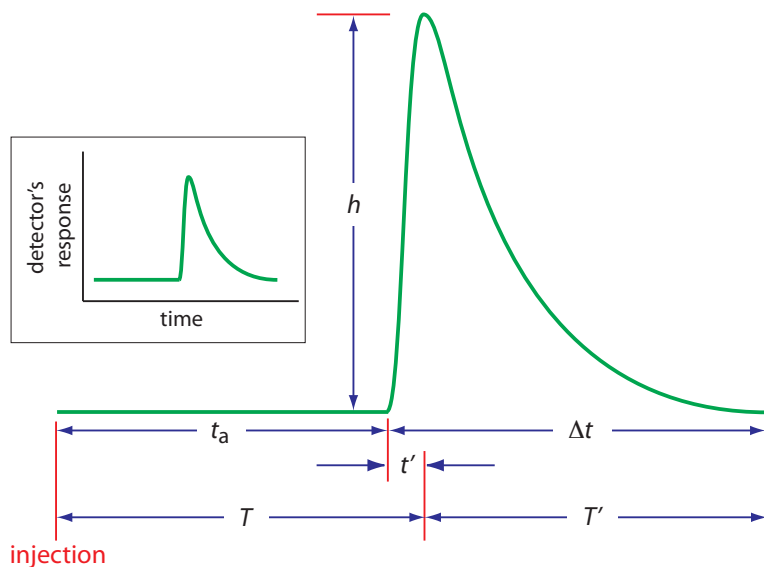


Figure 13.21 Typical diagram for flow injection analysis showing the detector's response as a function of time. See the text for an explanation of the parameters t_a , t' , Δt , T , T' , and h .

the normal time scale for a flow injection analysis. After approximately 25 s, diffusion is the only significant contributor to dispersion, resulting in a flow profile similar to that shown in [Figure 13.19d](#).

An FIA curve, or **FIAGRAM**, is a plot of the detector's signal as a function of time. Figure 13.21 shows a typical diagram for conditions in which both convection and diffusion contribute to the sample's dispersion. Also shown on the figure are several parameters for characterizing a sample's diagram. Two parameters define the time for a sample to move from the injector to the detector. Travel time, t_a , is the time between the sample's injection and the arrival of its leading edge at the detector. Residence time, T , on the other hand, is the time required to obtain the maximum signal. The difference between the residence time and travel time is t' , which approaches zero when convection is the primary means of dispersion, and increases in value as the contribution from diffusion becomes more important.

The time required for the sample to pass through the detector's flow cell—and for the signal to return to the baseline—is also described by two parameters. The baseline-to-baseline time, Δt , is the time between the arrival of the sample's leading edge to the departure of its trailing edge. The elapsed time between the maximum signal and its return to the baseline is the return time, T' . The final characteristic parameter of a fiagram is the sample's peak height, h .

Of the six parameters shown in Figure 13.21, the most important are peak height and return time. Peak height is important because it is directly or indirectly related to the analyte's concentration. The sensitivity of an FIA method, therefore, is determined by the peak height. The return time is important because it determines the frequency with which we may inject samples. [Figure 13.22](#) shows that if we inject a second sample at a time T' after injecting the first sample, there is little overlap of the two FIA curves.

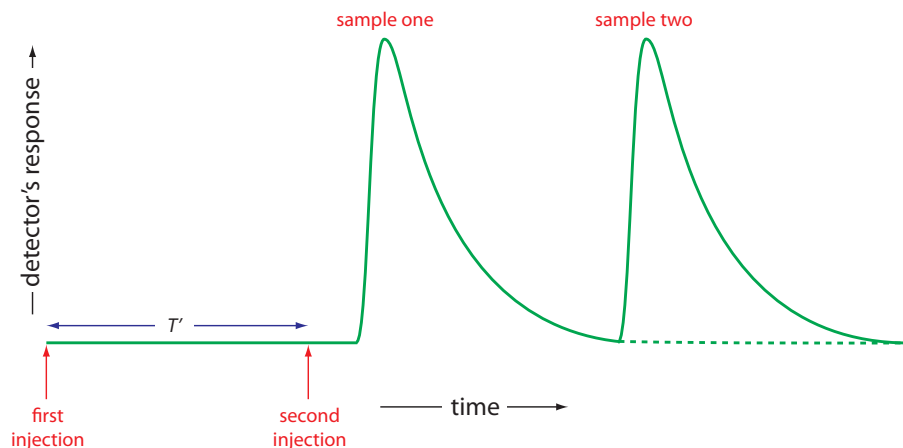


Figure 13.22 Effect of return time, T' , on sampling frequency.

By injecting samples at intervals of T' , we obtain the maximum possible sampling rate.

Peak heights and return times are influenced by the dispersion of the sample's flow profile and by the physical and chemical properties of the flow injection system. Physical parameters affecting h and T' include the volume of sample we inject, the flow rate, the length, diameter and geometry of the mixing and reaction zones, and the presence of mixing points where separate channels merge together. The kinetics of any chemical reactions between the sample and the reagents in the carrier stream also influence the peak height and return time.

Unfortunately, there is no good theory that we can use to consistently predict the peak height and return time for a given set of physical and chemical parameters. The design of a flow injection analyzer for a particular analytical problem still occurs largely by a process of experimentation. Nevertheless, we can make some general observations about the effects of physical and chemical parameters. In the absence of chemical effects, we can improve sensitivity—that is, obtain larger peak heights—by injecting larger samples, increasing the flow rate, decreasing the length and diameter of the tubing in the mixing and reaction zone, and merging separate channels before the point where the sample is injected. With the exception of sample volume, we can increase the sampling rate—that is, decrease the return time—using by the same combination of physical parameters. Larger sample volumes, however, lead to longer return times and a decrease in sample throughput. The effect of chemical reactivity depends on whether the species we are monitoring is a reactant or a product. For example, if we are monitoring a reactant, we can improve sensitivity by choosing conditions that decrease the residence time, T , or by adjusting the carrier stream's composition so that the reaction occurs more slowly.

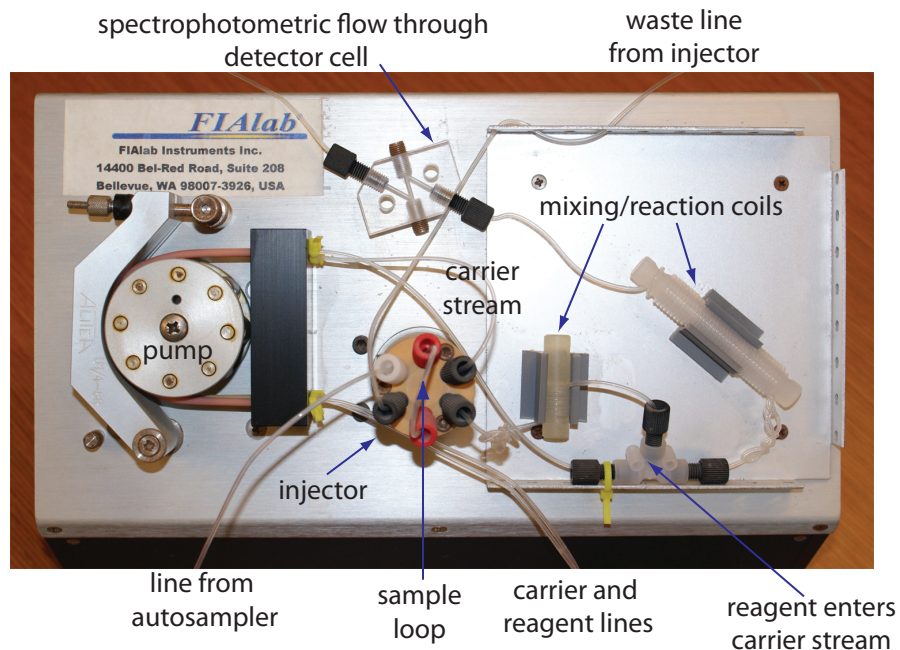


Figure 13.23 Example of a typical flow injection analyzer showing the pump, the injector, the transport system consisting of mixing/reaction coils and junctions, and the detector (minus the spectrophotometer). This particular configuration has two channels: the carrier stream and a reagent line.

13D.2 Instrumentation

The basic components of a flow injection analyzer are shown in Figure 13.23 and include a pump for propelling the carrier stream and reagent streams, a means for injecting the sample into the carrier stream, and a detector for monitoring the composition of the carrier stream. Connecting these units is a transport system that brings together separate channels and provides time for the sample to mix with the carrier stream and to react with the reagent streams. We also can incorporate separation modules into the transport system. Each of these components is considered in greater detail in this section.

PROPELLING UNIT

The propelling unit moves the carrier stream through the flow injection analyzer. Although several different propelling units have been used, the most common is a **PERISTALTIC PUMP**. A peristaltic pump consists of a set of rollers attached to the outside of a rotating drum, as shown in Figure 13.24. Tubing from the reagent reservoirs fits between the rollers and a fixed plate. As the drum rotates the rollers squeeze the tubing, forcing the contents of the tubing to move in the direction of the rotation. Peristaltic pumps provide a constant flow rate, which is controlled by the drum's speed of rotation and the inner diameter of the tubing. Flow rates from 0.0005–40 mL/min are possible, which is more than adequate to meet the needs of FIA where flow rates of 0.5–2.5 mL/min are common. One limitation to

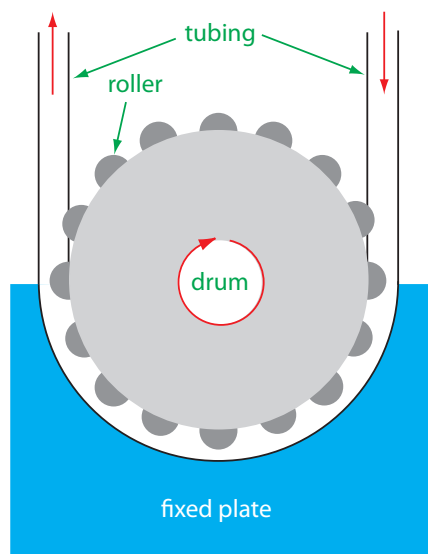


Figure 13.24 Schematic diagram of a peristaltic pump.

a peristaltic pump is that it produces a pulsed flow—particularly at higher flow rates—that may lead to oscillations in the signal.

INJECTOR

The sample, typically 5–200 μL , is injected into the carrier stream. Although syringe injections through a rubber septum are possible, the more common method—as seen in [Figure 13.23](#)—is to use a rotary, or loop injector similar to that used in an HPLC. This type of injector provides for a reproducible sample volume and is easily adaptable to automation, an important feature when high sampling rates are needed.

DETECTOR

The most commonly used detectors for flow injection analysis are the electrochemical and optical detectors used in HPLC. These detectors are discussed in Chapter 12 and are not considered further in this section. FIA detectors also have been designed around the use of ion selective electrodes and atomic absorption spectroscopy.

TRANSPORT SYSTEM

The heart of a flow injection analyzer is the transport system that brings together the carrier stream, the sample, and any reagents that react with the sample. Each reagent stream is considered a separate channel, and all channels must merge before the carrier stream reaches the detector. The complete transport system is called a **MANIFOLD**.

The simplest manifold includes only a single channel, the basic outline of which is shown in [Figure 13.25](#). This type of manifold is commonly used for direct analyses that do not require a chemical reaction. In this case the carrier stream serves only as a means for rapidly and reproducibly transporting the sample to the detector. For example, this manifold design has been used for sample introduction in atomic absorption spectroscopy, achieving sampling rates as high as 700 samples/h. A single-channel manifold also is used for determining a sample's pH or determining the concentration of metal ions using an ion selective electrode.

We can also use the single-channel manifold in [Figure 13.25](#) for systems in which we monitor the product of a chemical reaction between the sample and a reactant. In this case the carrier stream both transports the sample to the detector and reacts with the sample. Because the sample

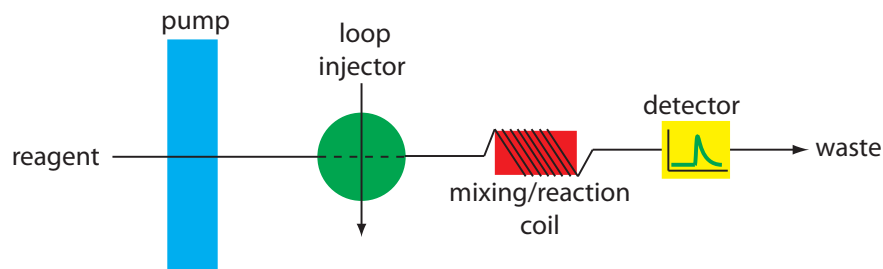
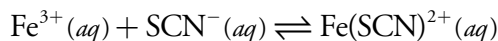
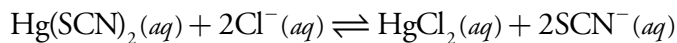


Figure 13.25 Example of a single-channel manifold in which the reagent serves as the carrier stream and as a species that reacts with the sample. The mixing/reaction coil is wrapped around a plastic cylinder.

[Figure 12.39](#) and [Figure 12.45](#) show examples of an HPLC loop injector.

must mix with the carrier stream, a lower flow rate is used. One example is the determination of chloride in water, which is based on the following sequence of reactions.



The carrier stream consists of an acidic solution of $\text{Hg}(\text{SCN})_2$ and Fe^{3+} . Injecting a sample containing chloride into the carrier stream displaces thiocyanate from $\text{Hg}(\text{SCN})_2$. The displaced thiocyanate then reacts with Fe^{3+} to form the red-colored $\text{Fe}(\text{SCN})^{2+}$ complex, the absorbance of which is monitored at a wavelength of 480 nm. Sampling rates of approximately 120 samples per hour have been achieved with this system.¹⁸

Most flow injection analyses that include a chemical reaction use a manifold with two or more channels. Including additional channels provides more control over the mixing of reagents and the interaction between the reagents and the sample. Two configurations are possible for a dual-channel system. A dual-channel manifold, such as the one shown in Figure 13.26a, is used when the reagents cannot be premixed because of their reactivity. For example, in acidic solutions phosphate reacts with molybdate to form the heteropoly acid $\text{H}_3\text{P}(\text{Mo}_{12}\text{O}_{40})$. In the presence of ascorbic acid the molybdenum in the heteropoly acid is reduced from Mo(VI) to Mo(V), forming a blue-colored complex that is monitored spectrophotometrically at 660 nm.¹⁸ Because ascorbic acid reduces molybdate, the two reagents are placed in separate channels that merge just before injecting the sample.

A dual-channel manifold can also be used to add a second reagent after injecting the sample into a carrier stream, as shown in Figure 13.26b. This style of manifold is used for the quantitative analysis of many analytes,

¹⁸ Hansen, E. H.; Ruzicka, J. J. *Chem. Educ.* **1979**, 56, 677–680.

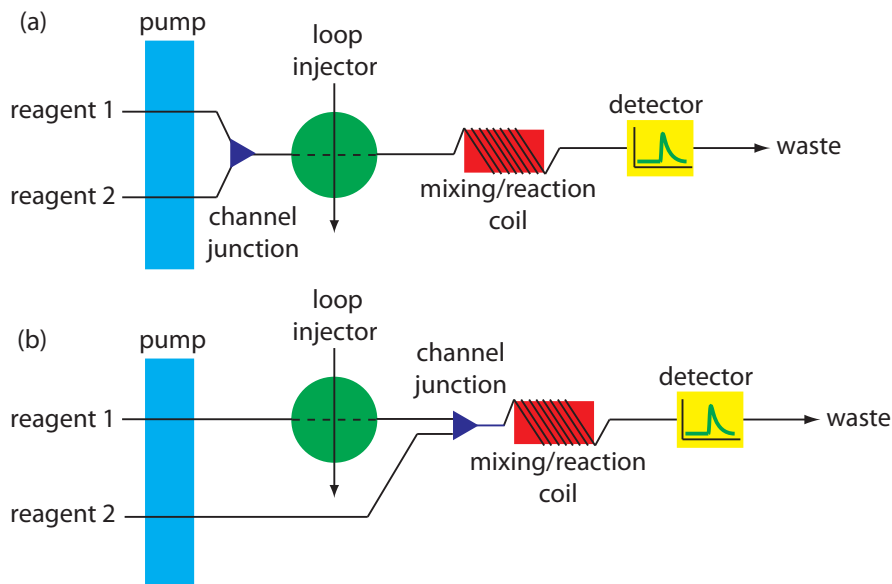


Figure 13.26 Two examples of a dual-channel manifold for flow injection analysis. In (a) the two channels merge before the loop injector, and in (b) the two channels merge after the loop injector.

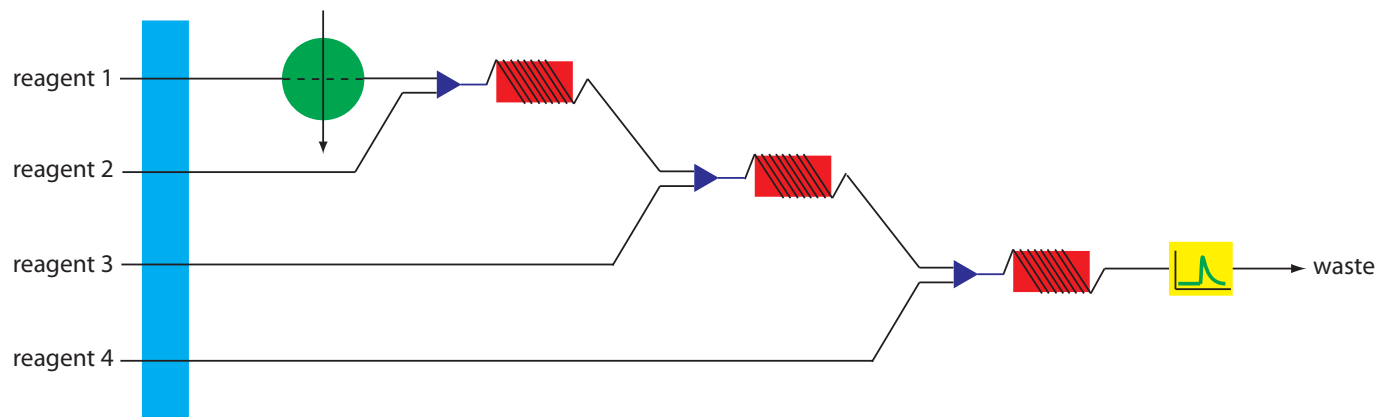


Figure 13.27 Example of a four-channel manifold for a flow injection analysis.

including the determination of a wastewater's chemical oxygen demand (COD).¹⁹ Chemical oxygen demand is a measure of the amount organic matter in the wastewater sample. In the conventional method of analysis, COD is determined by refluxing the sample for 2 h in the presence of acid and a strong oxidizing agent, such as $K_2Cr_2O_7$ or $KMnO_4$. When refluxing is complete, the amount of oxidant consumed in the reaction is determined by a redox titration. In the flow injection version of this analysis, the sample is injected into a carrier stream of aqueous H_2SO_4 , which merges with a solution of the oxidant from a secondary channel. The oxidation reaction is kinetically slow. As a result, the mixing and reaction coils are very long, typically 40 m, and submerged in a thermostated bath. The sampling rate is lower than that for most flow injection analyses, but at 10–30 samples/h it is substantially greater than the redox titrimetric method.

More complex manifolds involving three or more channels are common, but the possible combination of designs is too numerous to discuss. One example of a four-channel manifold is shown in Figure 13.27.

SEPARATION MODULES

By incorporating a separation module in the flow injection manifold we can include a separation—dialysis, gaseous diffusion and liquid-liquid extractions are examples—into a flow injection analysis. Although these separations are never complete, they are reproducible if we carefully control the experimental conditions.

Dialysis and gaseous diffusion are accomplished by placing a semipermeable membrane between the carrier stream containing the sample and an acceptor stream, as shown in [Figure 13.28](#). As the sample stream passes through the separation module, a portion of those species capable of crossing the semipermeable membrane do so, entering the acceptor stream. This type of separation module is common for the analysis of clinical samples, such as serum and urine, where a dialysis membrane separates the analyte from its complex matrix. Semipermeable gaseous diffusion membranes

You will find a more detailed description of the redox titrimetric method for COD in [Chapter 9](#).

¹⁹ Korenaga, T.; Ikatsu, H. *Anal. Chim. Acta* **1982**, *141*, 301–309.

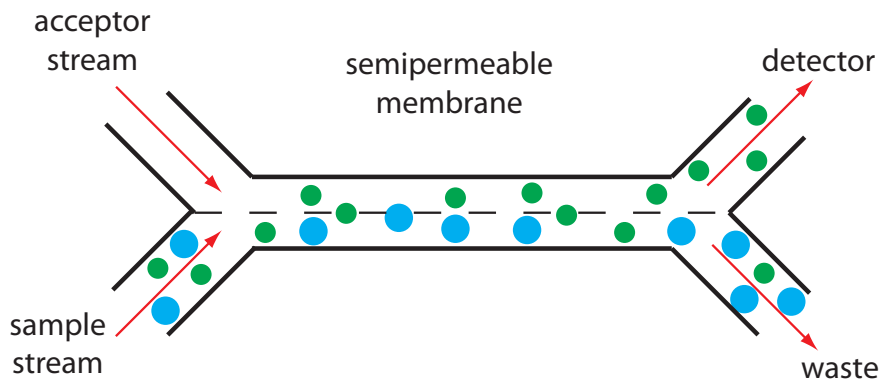


Figure 13.28 Separation module for a flow injection analysis using a semipermeable membrane. The smaller green solutes can pass through the semipermeable membrane and enter the acceptor stream, but the larger blue solutes cannot. Although the separation is not complete—note that some of the green solute remains in the sample stream and exits as waste—it is reproducible if we do not change the experimental conditions.

have been used for the determination of ammonia and carbon dioxide in blood. For example, ammonia is determined by injecting the sample into a carrier stream of aqueous NaOH. Ammonia diffuses across the semipermeable membrane into an acceptor stream containing an acid–base indicator. The resulting acid–base reaction between ammonia and the indicator is monitored spectrophotometrically.

Liquid–liquid extractions are accomplished by merging together two immiscible fluids, each carried in a separate channel. The result is a segmented flow through the separation module, consisting of alternating portions of the two phases. At the outlet of the separation module the two fluids are separated by taking advantage of the difference in their densities. Figure 13.29 shows a typical configuration for a separation module in which the sample is injected into an aqueous phase and extracted into a less dense organic phase that passes through the detector.

13D.3 Quantitative Applications

In a quantitative flow injection method a calibration curve is determined by injecting a series of external standards containing known concentrations of

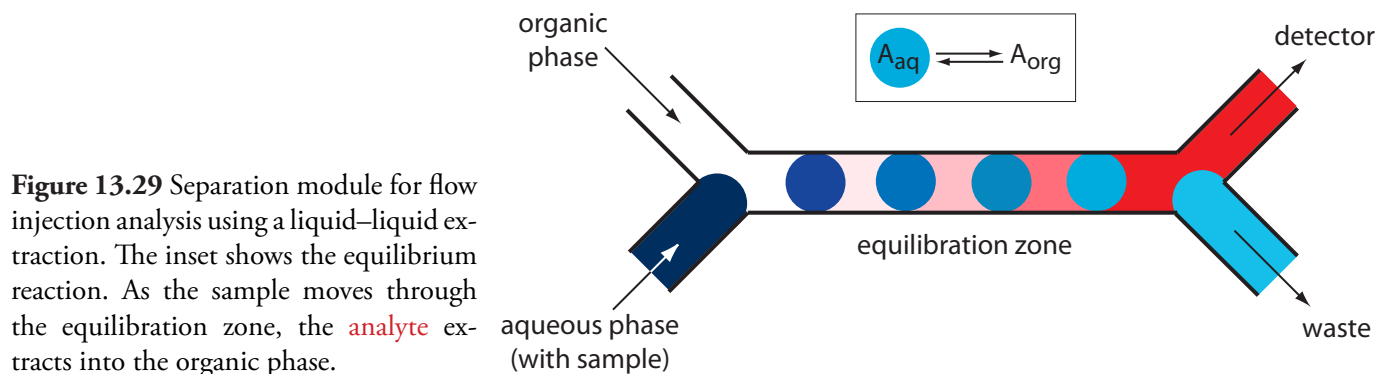


Figure 13.29 Separation module for flow injection analysis using a liquid–liquid extraction. The inset shows the equilibrium reaction. As the sample moves through the equilibration zone, the analyte extracts into the organic phase.

Table 13.2 Selected Flow Injection Analysis Methods for Environmental Samples

analyte	sample	sample volume (μL)	concentration range	sampling frequency (h^{-1})
Ca^{2+}	freshwater	20	0.8–7.2 ppm	80
Cu^{2+}	groundwater	70–700	100–400 ppb	20
Pb^{2+}	groundwater	70–700	0–40 ppb	20
Zn^{2+}	sea water	1000	1–100 ppb	30–60
NH_4^+	sea water	60	0.18–18.1 ppb	288
NO_3^-	rain water	1000	1–10 ppm	40
SO_4^{2-}	fresh water	400	4–140 ppm	180
CN^-	industrial	10	0.3–100 ppm	40

Source: Adapted from Valcárcel, M.; Luque de Castro, M. D. *Flow-Injection Analysis: Principles and Practice*, Ellis Horwood: Chichester, England, 1987.

analyte. The calibration curve's format—examples include plots of absorbance versus concentration and potential versus concentration—depends on the method of detection. Calibration curves for standard spectroscopic and electrochemical methods are discussed in Chapters 10 and 11 and are not considered further in this chapter.

Flow injection analysis has been used to analyze a wide variety of samples, including environmental, clinical, agricultural, industrial, and pharmaceutical samples. The majority of analyses involve environmental and clinical samples, which is the focus of this section.

Quantitative analytical flow injection analytical methods have been developed for cationic, anionic, and molecular pollutants in wastewater, freshwaters, groundwaters, and marine waters, three examples of which we described in the previous section. Table 13.2 provides a partial listing of other analytes that have been determined using FIA, many of which are modifications of standard spectrophotometric and potentiometric methods. An additional advantage of FIA for environmental analysis is the ability to provide for the continuous, in situ monitoring of pollutants in the field.²⁰

As noted in Chapter 9, several standard methods for the analysis of water involve an acid–base, complexation, or redox titration. It is easy to adapt these titrations to FIA using a single-channel manifold similar to that shown in [Figure 13.25](#).²¹ The titrant—whose concentration must be stoichiometrically less than that of the analyte—and a visual indicator are placed in the reagent reservoir and continuously pumped through the manifold. When we inject the sample it thoroughly mixes with the titrant in the carrier stream. The reaction between the analyte, which is in excess, and the titrant produces a relatively broad rectangular flow profile for the sample. As the sample moves toward the detector, additional mixing occurs and the width of its flow profile decreases. When the sample passes through the detector, we determine the width of its flow profile, Δt , by monitoring

[Example 13.13](#) shows a typical example of a calibration curve for a flow injection analysis.

The three examples are: the determination of chloride, the determination of phosphate, and the determination of chemical oxygen demand.

20 Andrew, K. N.; Blundell, N. J.; Price, D.; Worsfold, P. J. *Anal. Chem.* **1994**, *66*, 916A–922A.

21 Ramsing, A. U.; Ruzicka, J.; Hansen, E. H. *Anal. Chim. Acta* **1981**, *129*, 1–17.

Table 13.3 Selected Flow Injection Analysis Methods for Clinical Samples

analyte	sample	sample volume (μL)	concentration range	sampling frequency (h^{-1})
<i>nonenzymatic methods</i>				
Cu^{2+}	serum	20	0.7–1.5 ppm	70
Cl^-	serum	60	50–150 meq/L	125
PO_4^{3-}	serum	200	10–60 ppm	130
total CO_2	serum	50	10–50 mM	70
chloropromazine	blood plasma	200	1.5–9 μM	24
<i>enzymatic methods</i>				
glucose	blood serum	26.5	0.5–15 mM	60
urea	blood serum	30	4–20 mM	60
ethanol	blood	30	5–30 ppm	50

Source: Adapted from Valcárcel, M.; Luque de Castro, M. D. *Flow-Injection Analysis: Principles and Practice*, Ellis Horwood: Chichester, England, 1987.

the indicator's absorbance. A calibration curve of Δt versus $\log[\text{analyte}]$ is prepared using standard solutions of analyte.

Flow injection analysis has also found numerous applications in the analysis of clinical samples, using both enzymatic and nonenzymatic methods. Table 13.3 summarizes several examples.

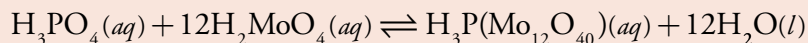
The best way to appreciate the theoretical and practical details discussed in this section is to carefully examine a typical analytical method. Although each method is unique, the following description of the determination of phosphate provides an instructive example of a typical procedure. The description here is based on Guy, R. D.; Ramaley, L.; Wentzell, P. D. "An Experiment in the Sampling of Solids for Chemical Analysis," *J. Chem. Educ.* **1998**, *75*, 1028–1033. As the title suggests, the primary focus of this chapter is on sampling. A flow injection analysis, however, is used to analyze samples.

Representative Method 13.2

Determination of Phosphate by FIA

DESCRIPTION OF METHOD

The FIA determination of phosphate is an adaptation of a standard spectrophotometric analysis for phosphate. In the presence of acid, phosphate reacts with ammonium molybdate to form a yellow-colored complex in which molybdenum is present as Mo(VI).



In the presence of a reducing agent, such as ascorbic acid, the yellow-colored complex is reduced to a blue-colored complex of Mo(V).

PROCEDURE

Prepare the following three solutions: (a) 5.0 mM ammonium molybdate in 0.40 M HNO_3 ; (b) 0.7% w/v ascorbic acid in 1% v/v glycerin; and (c) 100.0 ppm phosphate standard using KH_2PO_4 . Using the phosphate standard, prepare a set of external standards with phosphate concentrations of 10, 20, 30, 40, 50 and 60 ppm. Use a manifold similar to that shown in Figure 13.26a, placing a 50-cm mixing coil between the pump and the loop injector and a 50-cm reaction coil between the loop injector and the detector. For both coils, use PTFE tubing with an internal diam-

eter of 0.8 mm. Set the flow rate to 0.5 mL/min. Prepare a calibration curve by injecting 50 μL of each standard, measuring the absorbance at 650 nm. Samples are analyzed in the same manner.

QUESTIONS

1. How long does it take a sample to move from the loop injector to the detector?

The reaction coil is 50-cm long with an internal diameter of 0.8 mm. The volume of this tubing is

$$V = l \times \pi r^2 = 50 \text{ cm} \times \left(\frac{0.08 \text{ cm}}{2} \right)^2 \times \pi = 0.25 \text{ cm}^3 = 0.25 \text{ mL}$$

With a flow rate of 0.5 mL/min, it takes about 30 s for a sample to pass through the system.

2. The instructions for the standard spectrophotometric method indicate that the absorbance should be measured 5–10 min after adding the ascorbic acid. Why is this waiting period necessary in the spectrophotometric method, but not necessary in the FIA method?

The reduction of the yellow-colored Mo(VI) complex to the blue-colored Mo(V) complex is a slow reaction. In the standard spectrophotometric method it is difficult to reproducibly control the time between adding the reagents to the sample and measuring the sample's absorbance. To achieve good precision we allow the reaction to proceed to completion before we measure the absorbance. As seen by the answer to the previous question, in the FIA method the flow rate and the dimensions of the reaction coil determine the reaction time. Because this time is precisely controlled, the reaction occurs to the same extent for all standards and samples. A shorter reaction time has the advantage of allowing for a higher throughput of samples.

3. The spectrophotometric method recommends using phosphate standards of 2–10 ppm. Explain why the FIA method uses a different range of standards.

In the FIA method we measure the absorbance before the formation of the blue-colored Mo(V) complex is complete. Because the absorbance for any standard solution of phosphate is always smaller when using the FIA method, the FIA method is less sensitive and higher concentrations of phosphate are necessary.

4. How would you incorporate a reagent blank into the FIA analysis?

A reagent blank can be obtained by injecting a sample of distilled water in place of the external standard or sample. The reagent blank's absorbance is subtracted from the absorbances obtained for the standards and samples.

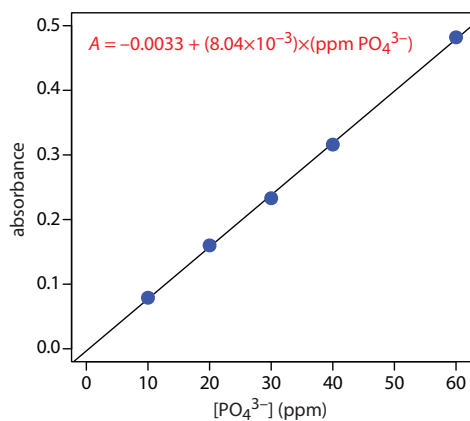


Figure 13.30 Calibration curve and equation for the data in Example 13.13.

Example 13.13

The following data were obtained for a set of external standards when using [Representative Method 13.2](#) to analyze phosphate in a wastewater sample.

[PO ₄ ³⁻] (ppm)	absorbance
10.00	0.079
20.00	0.160
30.00	0.233
40.00	0.316
50.00	0.482

What is the concentration of phosphate in a sample if it gives an absorbance of 0.287?

SOLUTION

Figure 13.30 shows the external standards calibration curve and equation. Substituting in the sample's absorbance gives the concentration of phosphate in the sample as 36.1 ppm.

13D.4 Evaluation

The majority of flow injection analysis applications are modifications of conventional titrimetric, spectrophotometric, and electrochemical methods of analysis; thus, it is appropriate to compare FIA methods to conventional methods. The scale of operations for FIA allows for the routine analysis of minor and trace analytes, and for macro, meso, and micro samples. The ability to work with microliter injection volumes is useful when the sample is scarce. Conventional methods of analysis usually have smaller detection limits.

The accuracy and precision of FIA methods are comparable to conventional methods of analysis. The precision of a flow injection analysis is influenced by several variables that do not affect conventional methods, including the stability of the flow rate and the reproducibility of the sample's injection. In addition, results from FIA may be more susceptible to temperature variations.

In general, the sensitivity of FIA is less than that for conventional methods of analysis for at least two reasons. First, as with chemical kinetic methods, measurements in FIA are made under nonequilibrium conditions when the signal has yet to reach its maximum value. Second, dispersion dilutes the sample as it moves through the manifold. Because the variables that affect sensitivity are known, we can design the FIA manifold to optimize the method's sensitivity.

Selectivity for an FIA method is often better than that for the corresponding conventional method of analysis. In many cases this is due to

See [Figure 3.5](#) to review the meaning minor and trace analytes, and the meaning of macro, meso and micro samples.

the kinetic nature of the measurement process, in which potential interferents may react more slowly than the analyte. Contamination from external sources also is less of a problem because reagents are stored in closed reservoirs and are pumped through a system of transport tubing that is closed to the environment.

Finally, FIA is an attractive technique when considering time, cost, and equipment. When using an autosampler, a flow injection method can achieve very high sampling rates. A sampling rate of 20–120 samples/h is not unusual and sampling rates as high as 1700 samples/h are possible. Because the volume of the flow injection manifold is small, typically less than 2 mL, the consumption of reagents is substantially smaller than that for a conventional method. This can lead to a significant decrease in the cost per analysis. Flow injection analysis does require the need for additional equipment—a pump, a loop injector, and a manifold—which adds to the cost of an analysis.

13E Key Terms

alpha particle	beta particle	centrifugal analyzer
competitive inhibitor	curve-fitting method	enzyme
equilibrium method	fiagram	flow injection analysis
gamma ray	Geiger counter	half-life
inhibitor	initial rate	integrated rate law
intermediate rate	isotope	isotope dilution
kinetic method	Lineweaver-Burk plot	manifold
Michaelis constant	negatron	neutron activation
noncompetitive inhibitor	one-point fixed-time integral method	peristaltic pump
positron	quench	rate
rate constant	rate law	rate method
scintillation counter	steady-state approximation	stopped-flow analyzer
substrate	tracer	two-point fixed-time integral method
uncompetitive inhibitor	variable time integral method	

As you review this chapter, try to define a key term in your own words. Check your answer by clicking on the key term, which will take you to the page where it was first introduced. Clicking on the **KEY TERM** there, will bring you back to this page so that you can continue with another key term.

13F Summary

Kinetic methods of analysis use the rate of a chemical or physical process to determine an analyte's concentration. Three types of kinetic methods are discussed in this chapter: chemical kinetic methods, radiochemical methods, and flow injection methods.

Chemical kinetic methods use the rate of a chemical reaction and either its integrated or differential rate law. For an integral method, we determine the concentration of analyte—or the concentration of a reactant or product

stoichiometrically related to the analyte—at one or more points in time following the reaction's initiation. The initial concentration of analyte is then determined using the integral form of the reaction's rate law. Alternatively, we can measure the time required to effect a given change in concentration. In a differential kinetic method we measure the rate of the reaction at a time t , and use the differential form of the rate law to determine the analyte's concentration.

Chemical kinetic methods are particularly useful for reactions that are too slow for other analytical methods. For reactions with fast kinetics, automation allows for sampling rates of more than 100 samples/h. Another important application of chemical kinetic methods is the quantitative analysis of enzymes and their substrates, and the characterization of enzyme catalysis.

Radiochemical methods of analysis take advantage of the decay of radioactive isotopes. A direct measurement of the rate at which a radioactive isotope decays may be used to determine its concentration in a sample. For an analyte that is not naturally radioactive, neutron activation often can be used to induce radioactivity. Isotope dilution, in which we spike a radioactively-labeled form of analyte into the sample, can be used as an internal standard for quantitative work.

In flow injection analysis we inject the sample into a flowing carrier stream that often merges with additional streams of reagents. As the sample moves with the carrier stream it both reacts with the contents of the carrier stream and any additional reagent streams, and undergoes dispersion. The resulting diagram of signal versus time bears some resemblance to a chromatogram. Unlike chromatography, however, flow injection analysis is not a separation technique. Because all components in a sample move with the carrier stream's flow rate, it is possible to introduce a second sample before the first sample reaches the detector. As a result, flow injection analysis is ideally suited for the rapid throughput of samples.

13G Problems

1. [Equation 13.18](#) shows how $[A]_0$ is determined using a two-point fixed-time integral method in which the concentration of A for the pseudo-first-order reaction

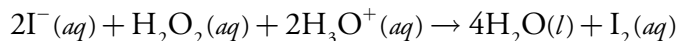


is measured at times t_1 and t_2 . Derive a similar equation for the case where the product is monitored under pseudo-first order conditions.

2. The concentration of phenylacetate can be determined from the kinetics of its pseudo-first order hydrolysis reaction in an ethylamine buffer. When a standard solution of 0.55 mM phenylacetate is analyzed, the concentration of phenylacetate after 60 s is 0.17 mM. When an sample

is analyzed the concentration of phenylacetate remaining after 60 s is 0.23 mM. What is the initial concentration of phenylacetate in the sample?

3. In the presence of acid, solutions of iodide are oxidized by hydrogen peroxide



When I^{-} and H_3O^{+} are present in excess we can use the kinetics of the reaction—which is pseudo-first order in H_2O_2 —to determine the concentration of H_2O_2 by following the production of I_2 with time. In one analysis the absorbance of the solution was measured after 240 s at 348 nm. Analysis of a set of standard solutions of H_2O_2 gives the results shown in the following table.

$[\text{H}_2\text{O}_2]$ (μM)	absorbance
100.0	0.236
200.0	0.471
400.0	0.933
800.0	1.872

What is the concentration of H_2O_2 in a sample if its absorbance is 0.669 after 240 s?

4. The concentration of chromic acid can be determined by reducing it with an alcohol under conditions that are pseudo-first order in analyte. One approach is to monitor the reaction mixture's absorbance at a wavelength of 355 nm. A standard of 5.1×10^{-4} M chromic acid yields absorbances of 0.855 and 0.709 at 100 s and 300 s after the reaction's initiation. When a sample with an unknown amount of chromic acid is analyzed under identical conditions, the absorbances are 0.883 and 0.706. What is the concentration of chromic acid in the sample?
5. Malmstadt and Pardue developed a variable time method for the determination of glucose based on its oxidation by the enzyme glucose oxidase.²² To monitor the reaction's progress, iodide is added to the samples and standards. The H_2O_2 produced by the oxidation of glucose reacts with I^{-} , forming I_2 as a product. The time required to produce a fixed amount of I_2 is determined spectrophotometrically. The following data was reported for a set of calibration standards

[glucose] (ppm)	time (s)		
5.0	146.5	150.0	149.6
10.0	69.2	67.1	66.0

22 Malmstadt, H. V.; Pardue, H. L. *Anal. Chem.* **1961** *33*, 1040–1047.

20.0	34.8	35.0	34.0
30.0	22.3	22.7	22.6
40.0	16.7	16.5	17.0
50.0	13.3	13.3	13.8

To verify the method a 1.00-mL aliquot of a standard solution of 40.0 ppm glucose was added to 1.00 mL of the combined reagents, requiring 34.6 s to produce the same extent of reaction. Determine the concentration of glucose in the standard and the percent error for the analysis.

6. Deming and Pardue studied the kinetics for the hydrolysis of *p*-nitrophenyl phosphate by the enzyme alkaline phosphatase.²³ The reaction's progress was monitored by measuring the absorbance of *p*-nitrophenol, which is one of the reaction's products. A plot of the reaction's rate (with units of $\mu\text{mol mL}^{-1} \text{sec}^{-1}$) versus the volume, V , in milliliters of a serum calibration standard containing the enzyme, yielded a straight line with the following equation.

$$\text{rate} = 2.7 \times 10^{-7} + 3.485 \times 10^{-5} V$$

A 10.00-mL sample of serum is analyzed, yielding a rate of $6.84 \times 10^{-5} \mu\text{mol mL}^{-1} \text{sec}^{-1}$. How much more dilute is the enzyme in the serum sample than in the serum calibration standard?

7. The following data were collected for a reaction known to be pseudo-first order in analyte, A, during the time in which the reaction is monitored.

time (s)	$[A]_t$ (mM)
2	1.36
4	1.24
6	1.12
8	1.02
10	0.924
12	0.838
14	0.760
16	0.690
18	0.626
20	0.568

What are the rate constant and the initial concentration of analyte in the sample?

²³ Deming, S. N.; Pardue, H. L. *Anal. Chem.* **1971**, *43*, 192–200.

8. The enzyme acetylcholinesterase catalyzes the decomposition of acetylcholine to choline and acetic acid. Under a given set of conditions the enzyme has a K_m of 9×10^{-5} M and a k_2 of 1.4×10^4 s⁻¹. What is the concentration of acetylcholine in a sample if the rate of reaction in the presence of 6.61×10^{-7} M enzyme is $12.33 \mu\text{M s}^{-1}$? You may assume that the concentration of acetylcholine is significantly smaller than K_m .
9. The enzyme fumarase catalyzes the stereospecific addition of water to fumarate to form L-malate. A standard $0.150 \mu\text{M}$ solution of fumarase has a rate of reaction of $2.00 \mu\text{M min}^{-1}$ under conditions in which the substrate's concentration is significantly greater than K_m . The rate of reaction for a sample under identical condition is $1.15 \mu\text{M min}^{-1}$. What is the concentration of fumarase in the sample?
10. The enzyme urease catalyzes the hydrolysis of urea. The rate of this reaction was determined for a series of solutions in which the concentration of urea was changed while maintaining a fixed urease concentration of $5.0 \mu\text{M}$. The following data were obtained.

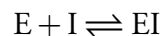
[urea] (mM)	rate (mM s ⁻¹)
0.100	6.25
0.200	12.5
0.300	18.8
0.400	25.0
0.500	31.2
0.600	37.5
0.700	43.7
0.800	50.0
0.900	56.2
1.00	62.5

Determine the values of V_{\max} , k_2 , and K_m for urease.

11. To study the effect of an enzyme inhibitor V_{\max} and K_m are measured for several concentrations of inhibitor. As the concentration of the inhibitor increases V_{\max} remains essentially constant, but the value of K_m increases. Which mechanism for enzyme inhibition is in effect?
12. In the case of competitive inhibition, the equilibrium between the enzyme, E, the inhibitor, I, and the enzyme-inhibitor complex, EI, is described by the equilibrium constant K_I . Show that for competitive inhibition the equation for the rate of reaction is

$$\frac{d[\text{P}]}{dt} = \frac{V_{\text{max}}[\text{S}]}{K_{\text{m}}\{1 + ([\text{I}] / K_{\text{I}})\} + [\text{S}]}$$

where K_{I} is the formation constant for the EI complex



You may assume that $k_2 \ll k_{-1}$.

13. Analytes A and B react with a common reagent R with first-order kinetics. If 99.9% of A must react before 0.1% of B has reacted, what is the minimum acceptable ratio for their respective rate constants?
14. A mixture of two analytes, A and B, is analyzed simultaneously by monitoring their combined concentration, $C = [\text{A}] + [\text{B}]$, as a function of time when they react with a common reagent. Both A and B are known to follow first-order kinetics with the reagent, and A is known to react faster than B. Given the data in the following table, determine the initial concentrations of A and B, and the first-order rate constants, k_{A} and k_{B} .

time (min)	[C] (mM)
1	0.313
6	0.200
11	0.136
16	0.098
21	0.074
26	0.058
31	0.047
36	0.038
41	0.032
46	0.027
51	0.023
56	0.019
61	0.016
66	0.014
71	0.012

15. [Table 13.1](#) provides a list of several isotopes commonly used as tracers. The half-lives for these isotopes also are listed. What is the rate constant for the radioactive decay of each isotope?
16. ^{60}Co is a long-lived isotope ($t_{1/2} = 5.3$ yr) frequently used as a radiotracer. The activity in a 5.00-mL sample of a solution of ^{60}Co is 2.1×10^7

- disintegrations/sec. What is the molar concentration of ^{60}Co in the sample?
17. The concentration of Ni in a new alloy is determined by a neutron activation analysis. A 0.500-g sample of the alloy and a 1.000-g sample of a standard alloy that is 5.93% w/w Ni are irradiated with neutrons in a nuclear reactor. When irradiation is complete, the sample and standard are allowed to cool and the gamma ray activities measured. Given that the activity is 1020 cpm for the sample and 3540 cpm for the standard, determine the %w/w Ni in the alloy.
 18. The vitamin B₁₂ content of a multivitamin tablet is determined by the following procedure. A sample of 10 tablets is dissolved in water and diluted to volume in a 100-mL volumetric flask. A 50.00-mL portion is removed and treated with 0.500 mg of radioactive vitamin B₁₂ having an activity of 572 cpm. After homogenization, the vitamin B₁₂ in the sample is isolated and purified, producing 18.6 mg with an activity of 361 cpm. Calculate the milligrams of vitamin B₁₂ in a multivitamin tablet.
 19. The oldest sample that can be dated by ^{14}C is approximately 30 000 years. What percentage of the ^{14}C still remains after this time span?
 20. Potassium–argon dating is based on the nuclear decay of ^{40}K to ^{40}Ar ($t_{1/2} = 1.3 \times 10^9$ yr). If no ^{40}Ar is originally present in the rock, and if ^{40}Ar can not escape to the atmosphere, then the relative amounts of ^{40}K and ^{40}Ar can be used to determine the age of the rock. When a 100.0-mg rock sample was analyzed it contains 4.63×10^{-6} mol of ^{40}K and 2.09×10^{-6} mol ^{40}Ar . How old is the rock sample?
 21. The steady state activity for ^{14}C is 15 cpm of carbon. If counting is limited to 1 hr, what mass of carbon is needed to give a percent relative standard deviation of 1% for the sample's activity? How long must we monitor the radioactive decay from a 0.50-gram sample of carbon to give a percent relative standard deviation of 1% for the activity?
 22. To improve the sensitivity of a FIA analysis you might do any of the following: inject a larger volume of sample, increase the flow rate, decrease the length and the diameter of the manifold's tubing, or merge separate channels before injecting the sample. For each action, explain why it leads to an improvement in sensitivity.
 23. [Figure 13.31](#) shows a diagram for a solution of 50.0-ppm PO_4^{3-} using the method in [Representative Method 13.2](#). Determine values for h , t_a , T , t' , Δt , and T' . What is the sensitivity of this FIA method, assuming a

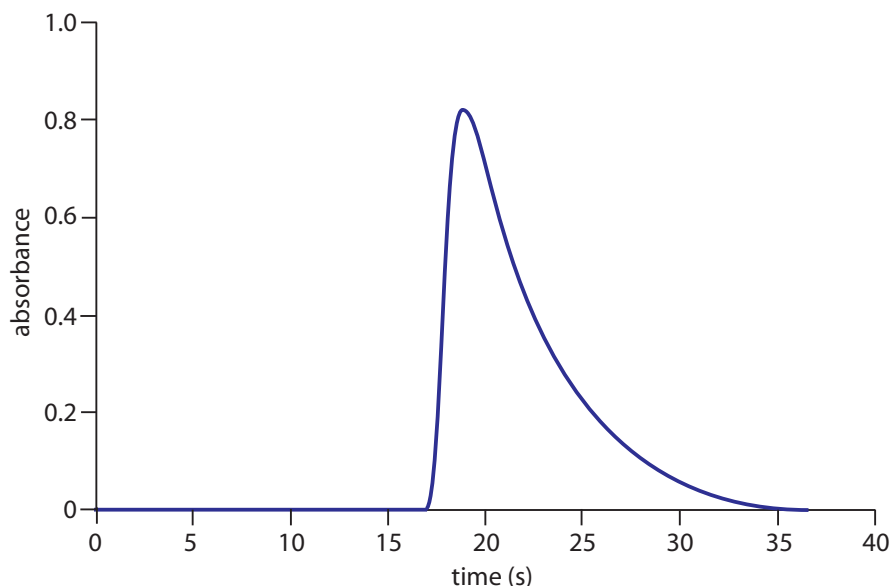


Figure 13.31 Diagram for [Problem 13.23](#).

linear relationship between absorbance and concentration? How many samples can be analyzed per hour?

23. A sensitive method for the flow injection analysis of Cu^{2+} is based on its ability to catalyze the oxidation of di-2-pyridyl ketone hydrazone (DPKH).²⁴ The product of the reaction is fluorescent and can be used to generate a signal when using a fluorimeter as a detector. The yield of the reaction is at a maximum when the solution is made basic with NaOH. The fluorescence, however, is greatest in the presence of HCl. Sketch an appropriate FIA manifold for this analysis.
24. The concentration of chloride in seawater can be determined by a flow injection analysis. The analysis of a set of calibration standards gives the following results.

[Cl ⁻] (ppm)	absorbance
5.00	0.057
10.00	0.099
20.00	0.230
30.00	0.354
40.00	0.478
50.00	0.594
75.00	0.840

A 1.00-mL sample of seawater is placed in a 500-mL volumetric flask and diluted to volume with distilled water. When injected into the flow injection analyzer an absorbance of 0.317 is measured. What is the concentration of Cl^- in the sample?

²⁴ Lazaro, F.; Luque de Castro, M. D.; Valcárcel, M. *Analyst*, 1984, 109, 333–337.

25. Ramsing and co-workers developed an FIA method for acid–base titrations using a carrier stream consisting of 2.0×10^{-3} M NaOH and the acid–base indicator bromothymol blue.²⁵ Standard solutions of HCl were injected, and the following values of Δt were measured from the resulting fiagrams.

[HCl] (M)	Δt (s)	[HCl] (M)	Δt (s)
0.008	3.13	0.080	7.71
0.010	3.59	0.100	8.13
0.020	5.11	0.200	9.27
0.040	6.39	0.400	10.45
0.060	7.06	0.600	11.40

A sample with an unknown concentration of HCl is analyzed five times, giving values of 7.43, 7.28, 7.41, 7.37, and 7.33 s for Δt . Determine the concentration of HCl in the sample and its 95% confidence interval.

26. Milardović and colleagues used a flow injection analysis method with an amperometric biosensor to determine the concentration of glucose in blood.²⁶ Given that a blood sample that is 6.93 mM in glucose has a signal of 7.13 nA, what is the concentration of glucose in a sample of blood if its signal is 11.50 nA?
27. Fernández-Abedul and Costa-García developed an FIA method for detecting cocaine in samples using an amperometric detector.²⁷ The following signals (arbitrary units) were collected for 12 replicate injections of a 6.2×10^{-6} M sample of cocaine.

24.5	24.1	24.1
23.8	23.9	25.1
23.9	24.8	23.7
23.3	23.2	23.2

- (a) What is the relative standard deviation for this sample?
- (b) If it took 10.5 min to obtain these replicate analyses, what is the expected sample throughput in samples per hour?
- (c) The following calibration data are available

[cocaine] (μ M)	signal (arb. units)
0.18	0.8
0.36	2.1
0.60	2.4

25 Ramsing, A. U.; Ruzicka, J.; Hansen, E. H. *Anal. Chim. Acta* **1981**, *129*, 1–17.

26 Milardović, S.; Kruhac, I.; Iveković, D.; Rumenjak, V.; Tkalčec, M.; Grabarić, B. S. *Anal. Chim. Acta* **1997**, *350*, 91–96.

27 Fernández-Abedul, M.; Costa-García, A. *Anal. Chim. Acta* **1996**, *328*, 67–71.

0.81	3.2
1.0	4.5
2.0	8.1
4.0	14.4
6.0	21.6
8.0	27.1
10.0	32.9

In a typical analysis a 10.0-mg sample is dissolved in water and diluted to volume in a 25-mL volumetric flask. A 125- μ L aliquot is transferred to a 25-mL volumetric flask and diluted to volume with a pH 9 buffer. When injected into the flow injection apparatus a signal of 21.4 (arb. units) is obtained. What is the %w/w cocaine in the sample?

28. Holman, Christian, and Ruzicka described an FIA method for determining the concentration of H_2SO_4 in nonaqueous solvents.²⁸ Agarose beads (22–45 μm diameter) with a bonded acid–base indicator are soaked in NaOH and immobilized in the detector's flow cell. Samples of H_2SO_4 in *n*-butanol are injected into the carrier stream. As a sample passes through the flow cell, an acid–base reaction takes place between H_2SO_4 and NaOH. The endpoint of the neutralization reaction is signaled by a change in the bound indicator's color and is detected spectrophotometrically. The elution volume needed to reach the titration's endpoint is inversely proportional to the concentration of H_2SO_4 ; thus, a plot of endpoint volume versus $[\text{H}_2\text{SO}_4]^{-1}$ is linear. The following data is typical of that obtained using a set of external standards.

$[\text{H}_2\text{SO}_4]$ (mM)	end point volume (mL)
0.358	0.266
0.436	0.227
0.560	0.176
0.752	0.136
1.38	0.075
2.98	0.037
5.62	0.017

What is the concentration of H_2SO_4 in a sample if its endpoint volume is 0.157 mL?

28 Holman, D. A.; Christian, G. D.; Ruzicka, J. *Anal. Chem.* **1997**, *69*, 1763–1765.

13H Solutions to Practice Exercises

Practice Exercise 13.1

Figure 13.32 shows the calibration curve and calibration equation for the external standards. Substituting 2.21×10^{-3} M for $[\text{CH}_3\text{NO}_2]_{t=2s}$ gives $[\text{CH}_3\text{NO}_2]_0$ as 5.21×10^{-2} M.

Click [here](#) to return to the chapter.

Practice Exercise 13.2

Figure 13.33 shows the calibration curve and calibration equation for the external standards. Substituting 3.52×10^{-2} M for $[\text{Fe}(\text{SCN})^{2+}]_{t=10s}$ gives $[\text{SCN}^-]_0$ as 6.87×10^{-2} M.

Click [here](#) to return to the chapter.

Practice Exercise 13.3

Figure 13.34 shows the Lineweaver–Burk plot and equation for the data in [Practice Exercise 13.3](#). The y -intercept of $9.974 \text{ min}/\Delta\text{AU}$ is equivalent to $1/V_{\text{max}}$; thus, V_{max} is $0.10 \Delta\text{AU}/\text{min}$. The slope of $11.89 \text{ min}/\Delta\text{AU}\cdot\text{mM}$ is equivalent to K_m/V_{max} ; thus, K_m is 1.2 mM .

Click [here](#) to return to the chapter.

Practice Exercise 13.4

Figure 13.35 shows the Lineweaver–Burk plots for the two sets of data in [Practice Exercise 13.4](#). The nearly identical x -intercepts suggests that phenylthiourea is a noncompetitive inhibitor.

Click [here](#) to return to the chapter.

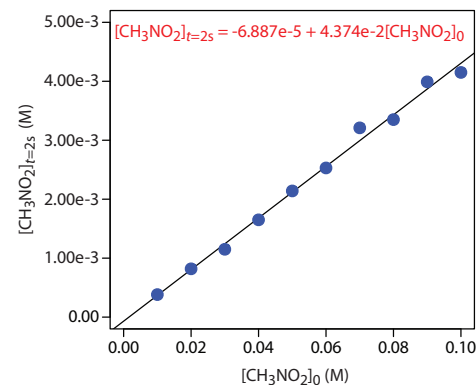


Figure 13.32 Calibration curve and calibration equation for [Practice Exercise 13.1](#).

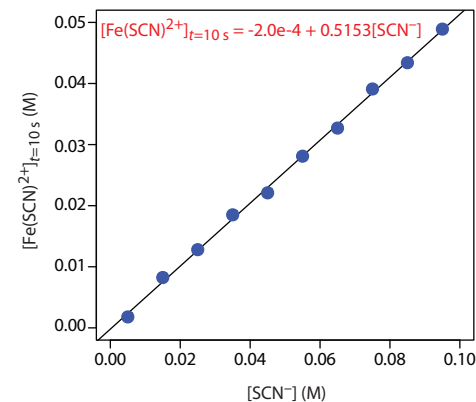


Figure 13.33 Calibration curve and calibration equation for [Practice Exercise 13.2](#).

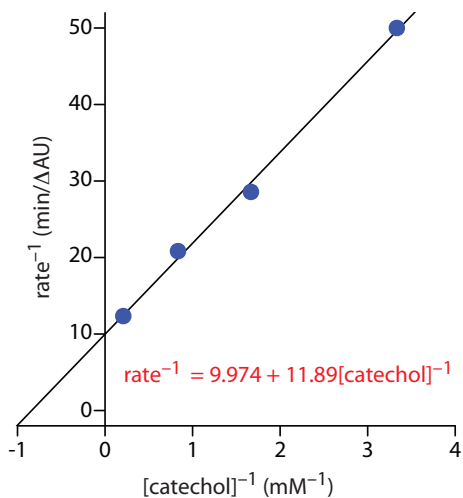


Figure 13.34 Lineweaver–Burk plot and equation for [Practice Exercise 13.3](#).

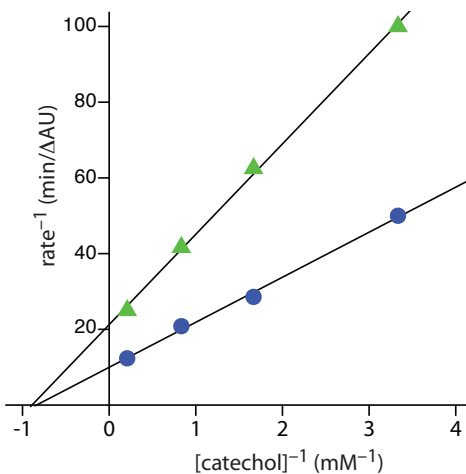


Figure 13.35 Lineweaver–Burk plots for [Practice Exercise 13.4](#).

Chapter 14

Developing a Standard Method

Chapter Overview

Section 14A Optimizing the Experimental Procedure

Section 14B Verifying the Method

Section 14C Validating the Method as a Standard Method

Section 14D Using Excel and R for an Analysis of Variance

Section 14E Key Terms

Section 14F Summary

Section 14G Problems

Section 14H Solutions to Practice Exercises

In Chapter 1 we made a distinction between analytical chemistry and chemical analysis. Among the goals of analytical chemistry are improving established methods of analysis, extending existing methods of analysis to new types of samples, and developing new analytical methods. Once we develop a new method, its routine application is best described as chemical analysis. We recognize the status of these methods by calling them standard methods.

Numerous examples of standard methods are presented and discussed in Chapters 8–13. What we have not yet considered is what constitutes a standard method. In this chapter we discuss how we develop a standard method, including optimizing the experimental procedure, verifying that the method produces acceptable precision and accuracy in the hands of a single analyst, and validating the method for general use.

14A Optimizing the Experimental Procedure

In the presence of H_2O_2 and H_2SO_4 , a solution of vanadium forms a reddish brown color that is believed to be a compound with the general formula $(\text{VO})_2(\text{SO}_4)_3$. The intensity of the solution's color depends on the concentration of vanadium, which means we can use its absorbance at a wavelength of 450 nm to develop a quantitative method for vanadium.

The intensity of the solution's color also depends on the amounts of H_2O_2 and H_2SO_4 that we add to the sample—in particular, a large excess of H_2O_2 decreases the solution's absorbance as it changes from a reddish brown color to a yellowish color.¹ Developing a **STANDARD METHOD** for vanadium based on this reaction requires that we optimize the additions of H_2O_2 and H_2SO_4 to maximize the absorbance at 450 nm. Using the terminology of statisticians, we call the solution's absorbance the system's **RESPONSE**. Hydrogen peroxide and sulfuric acid are **FACTORS** whose concentrations, or **FACTOR LEVELS**, determine the system's response. To optimize the method we need to find the best combination of factor levels. Usually we seek a maximum response, as is the case for the quantitative analysis of vanadium as $(\text{VO})_2(\text{SO}_4)_3$. In other situations, such as minimizing an analysis's percent error, we are looking for a minimum response.

14A.1 Response Surfaces

One of the most effective ways to think about an optimization is to visualize how a system's response changes when we increase or decrease the levels of one or more of its factors. We call a plot of the system's response as a function of the factor levels a **RESPONSE SURFACE**. The simplest response surface has only one factor and is displayed graphically in two dimensions by placing the response on the y -axis and the factor's levels on the x -axis. The calibration curve in Figure 14.1 is an example of a one-factor response surface. We also can define the response surface mathematically. The response surface in Figure 14.1, for example, is

$$A = 0.008 + 0.0896C_A$$

where A is the absorbance and C_A is the analyte's concentration in ppm.

For a two-factor system, such as the quantitative analysis for vanadium described earlier, the response surface is a flat or curved plane in three dimensions. As shown in Figure 14.2a, we place the response on the z -axis and the factor levels on the x -axis and the y -axis. Figure 14.2a shows a pseudo-three dimensional wireframe plot for a system obeying the equation

$$R = 3.0 - 0.30A + 0.020AB$$

where R is the response, and A and B are the factors. We can also represent a two-factor response surface using the two-dimensional level plot in Figure 12.4b, which uses a color gradient to show the response on a two-

¹ Vogel's *Textbook of Quantitative Inorganic Analysis*, Longman: London, 1978, p. 752.

We will return to this analytical method for vanadium in [Example 14.4](#) and in [Problem 14.11](#).

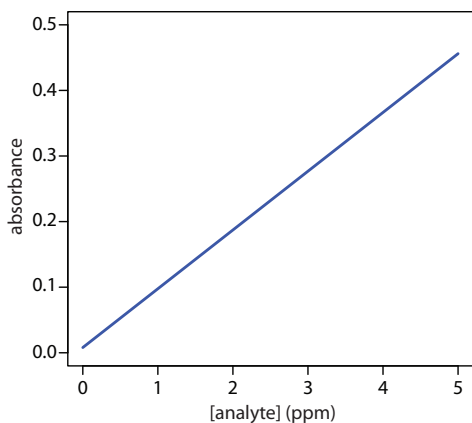


Figure 14.1 A calibration curve is an example of a one-factor response surface. The response (absorbance) is plotted on the y -axis and the factor levels (concentration of analyte) is plotted on the x -axis.

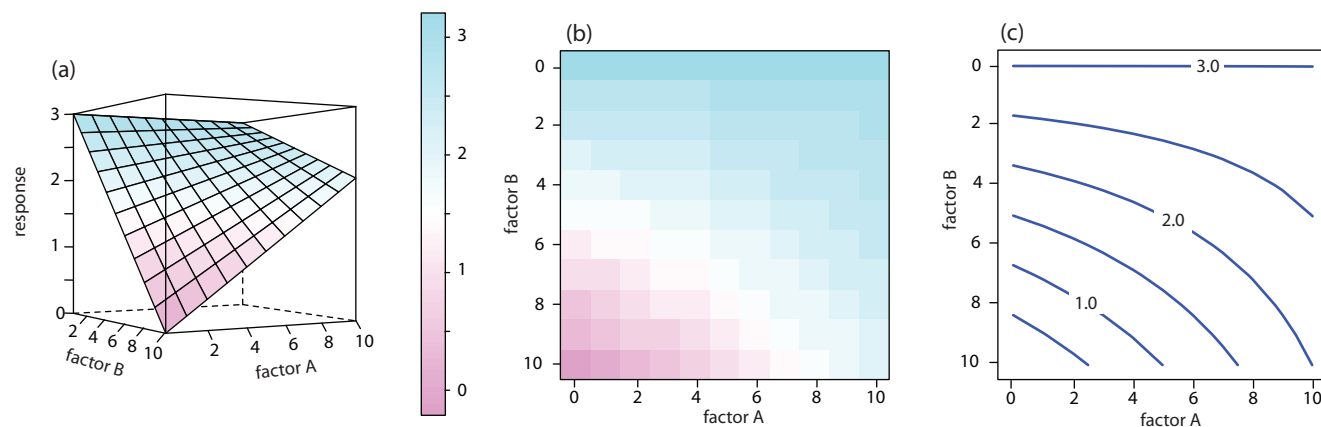


Figure 14.2 Three examples of a two-factor response surface displayed as (a) a pseudo-three-dimensional wireframe plot, (b) a two-dimensional level plot, and (c) a two-dimensional contour plot. We call the display in (a) a pseudo-three dimensional response surface because we show the presence of three dimensions on the page's flat, two-dimensional surface.

dimensional grid, or using the two-dimensional contour plot in Figure 14.2c, which uses contour lines to display the response surface.

The response surfaces in Figure 14.2 cover a limited range of factor levels ($0 \leq A \leq 10$, $0 \leq B \leq 10$), but we can extend each to more positive or more negative values because there are no constraints on the factors. Most response surfaces of interest to an analytical chemist have natural constraints imposed by the factors or have practical limits set by the analyst. The response surface in Figure 14.1, for example, has a natural constraint on its factor because the analyte's concentration cannot be smaller than zero.

If we have an equation for the response surface, then it is relatively easy to find the optimum response. Unfortunately, we rarely know any useful details about the response surface. Instead, we must determine the response surface's shape and locate the optimum response by running appropriate experiments. The focus of this section is on useful experimental designs for characterizing response surfaces. These experimental designs are divided into two broad categories: searching methods, in which an algorithm guides a systematic search for the optimum response, and modeling methods, in which we use a theoretical or empirical model of the response surface to predict the optimum response.

14A.2 Searching Algorithms for Response Surfaces

Figure 14.3 shows a portion of the South Dakota Badlands, a landscape that includes many narrow ridges formed through erosion. Suppose you wish to climb to the highest point of this ridge. Because the shortest path to the summit is not obvious, you might adopt the following simple rule—look around you and take a step in the direction that has the greatest change in elevation. The route you follow is the result of a systematic search using a **SEARCHING ALGORITHM**. Of course there are as many possible routes as there are starting points, three examples of which are shown in Figure 14.3. Note that some routes do not reach the highest point—what we call

We also can overlay a level plot and a contour plot. See Figure 14.7b for a typical example.

We express this constraint as $C_A \geq 0$.

Searching algorithms have names—the one described here is the method of steepest ascent.

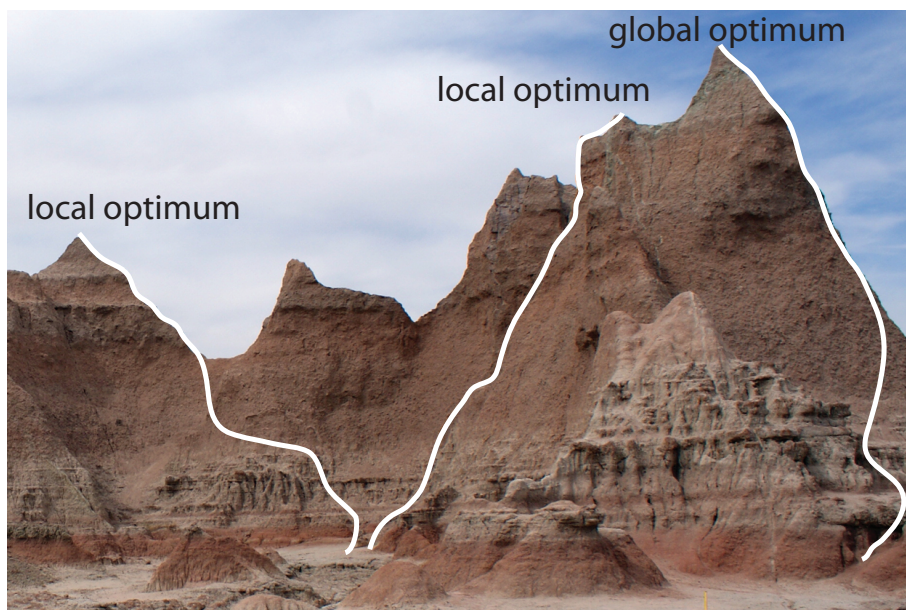


Figure 14.3 Finding the highest point on a ridge using a searching algorithm is one useful model for finding the optimum on a response surface. The path on the far right reaches the highest point, or the global optimum. The other two paths reach local optima. This ridge is part of the South Dakota Badlands National Park. You can read about the geology of the park as www.nps.gov/badll/.

the **GLOBAL OPTIMUM**. Instead, many routes reach a **LOCAL OPTIMUM** from which further movement is impossible.

We can use a systematic searching algorithm to locate the optimum response for an analytical method. We begin by selecting an initial set of factor levels and measure the response. Next, we apply the rules of our searching algorithm to determine a new set of factor levels, continuing this process until we reach an optimum response. Before we consider two common searching algorithms, let's consider how we evaluate a searching algorithm.

EFFECTIVENESS AND EFFICIENCY

A searching algorithm is characterized by its effectiveness and its efficiency. To be effective, a searching algorithm must find the response surface's global optimum, or at least reach a point near the global optimum. A searching algorithm may fail to find the global optimum for several reasons, including a poorly designed algorithm, uncertainty in measuring the response, and the presence of local optima. Let's consider each of these potential problems.

A poorly designed algorithm may prematurely end the search before it reaches the response surface's global optimum. As shown in Figure 14.4, an algorithm for climbing a ridge that slopes to the northeast is likely to fail if it allows you to take steps only to the north, south, east, or west. An algorithm must be that responds to a change in the direction of steepest ascent is **EFFECTIVE**.

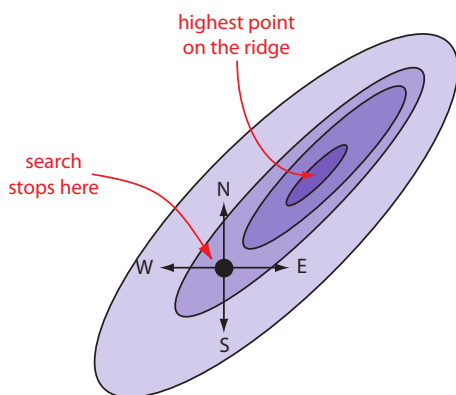


Figure 14.4 Example showing how a poorly designed searching algorithm can fail to find a response surface's global optimum.

All measurements contain uncertainty, or noise, that affects our ability to characterize the underlying signal. When the noise is greater than the local change in the signal, then a searching algorithm is likely to end before it reaches the global optimum. Figure 14.5 provides a different view of [Figure 14.3](#), showing us that the relatively flat terrain leading up to the ridge is heavily weathered and uneven. Because the variation in local height exceeds the slope, our searching algorithm stops the first time we step up onto a less weathered surface.

Finally, a response surface may contain several local optima, only one of which is the global optimum. If we begin the search near a local optimum, our searching algorithm may not be capable of reaching the global optimum. The ridge in [Figure 14.3](#), for example, has many peaks. Only those searches beginning at the far right reach the highest point on the ridge. Ideally, a searching algorithm should reach the global optimum regardless of where it starts.

A searching algorithm always reaches an optimum. Our problem, of course, is that we do not know if it is the global optimum. One method for evaluating a searching algorithm's effectiveness is to use several sets of initial factor levels, finding the optimum response for each, and comparing the results. If we arrive at the same optimum response after starting from very different locations on the response surface, then we are more confident that it is the global optimum.

EFFICIENCY is the second desirable characteristic for a searching algorithm. An efficient algorithm moves from the initial set of factor levels to the optimum response in as few steps as possible. We can increase the rate at which we approach the optimum by taking larger steps. If the step size is too large, however, the difference between the experimental optimum and the true optimum may be unacceptably large. One solution is to adjust the step size during the search, using larger steps at the beginning and smaller steps as we approach the global optimum.

ONE-FACTOR-AT-A-TIME OPTIMIZATION

A simple algorithm for optimizing the quantitative method for vanadium described earlier is to select initial concentrations for H_2O_2 and H_2SO_4 and measure the absorbance. Next, we optimize one reagent by increasing or decreasing its concentration—holding constant the second reagent's concentration—until the absorbance decreases. We then vary the concentration of the second reagent—maintaining the first reagent's optimum concentration—until we observe a decrease in absorbance. We can stop this process, which we call a **ONE-FACTOR-AT-A-TIME OPTIMIZATION**, after one cycle or repeat it until the absorbance reaches a maximum value or it exceeds an acceptable threshold value.

A one-factor-at-a-time optimization is consistent with a notion that to determine the influence of one factor we must hold constant all other factors. This is an effective, although not necessarily an efficient experimental



Figure 14.5 Another view of the ridge in [Figure 14.3](#) showing the weathered terrain leading up to the ridge. The yellow rod at the bottom of the figure, which marks a trail, is about 18 in high.

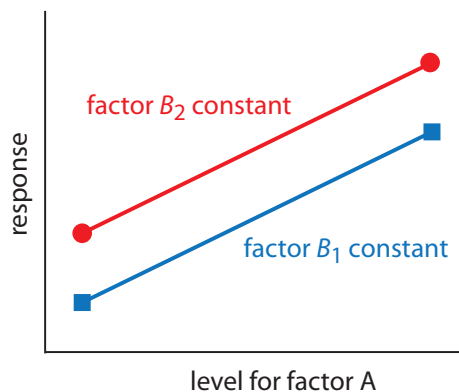


Figure 14.6 Factor effect plot for two independent factors. Note that the two lines are parallel, indicating that the level for factor B does not influence how factor A's level affects the response.

Practice Exercise 14.1

Using the data in Table 14.1, show that factor B's affect on the response is independent of factor A.

Click [here](#) to review your answer to this exercise.

Table 14.1 Example of Two Independent Factors

factor A	factor B	response
A_1	B_1	40
A_2	B_1	80
A_1	B_2	60
A_2	B_2	100

design when the factors are independent.² Two factors are **INDEPENDENT** when changing the level of one factor does not influence the effect of changing the other factor's level. Table 14.1 provides an example of two independent factors. If we hold factor B at level B_1 , changing factor A from level A_1 to level A_2 increases the response from 40 to 80, or a change in response, ΔR , of

$$R = 80 - 40 = 40$$

If we hold factor B at level B_2 , we find that we have the same change in response when the level of factor A changes from A_1 to A_2 .

$$R = 100 - 60 = 40$$

We can see this independence graphically by plotting the response versus factor A's level, as shown in Figure 14.6. The parallel lines show that the level of factor B does not influence factor A's effect on the response.

Mathematically, two factors are independent if they do not appear in the same term in the equation describing the response surface. Equation 14.1, for example, describes a response surface with independent factors because no term in the equation includes both factor A and factor B.

$$R = 2.0 + 0.12A + 0.48B - 0.03A^2 - 0.03B^2 \quad 14.1$$

[Figure 14.7](#) shows the resulting pseudo-three-dimensional surface and a contour map for equation 14.1.

The easiest way to follow the progress of a searching algorithm is to map its path on a contour plot of the response surface. Positions on the response surface are identified as (a, b) where a and b are the levels for factors A and B. The contour plot in [Figure 14.7b](#), for example, shows four one-factor-at-a-time optimizations of the response surface for equation 14.1. The effectiveness and efficiency of this algorithm when optimizing independent factors is clear—each trial reaches the optimum response at $(2, 8)$ in a single cycle.

Unfortunately, factors usually do not behave independently. Consider, for example, the data in [Table 14.2](#). Changing the level of factor B from level B_1 to level B_2 has a significant effect on the response when factor A is at level A_1

² Sharaf, M. A.; Illman, D. L.; Kowalski, B. R. *Chemometrics*, Wiley-Interscience: New York, 1986.

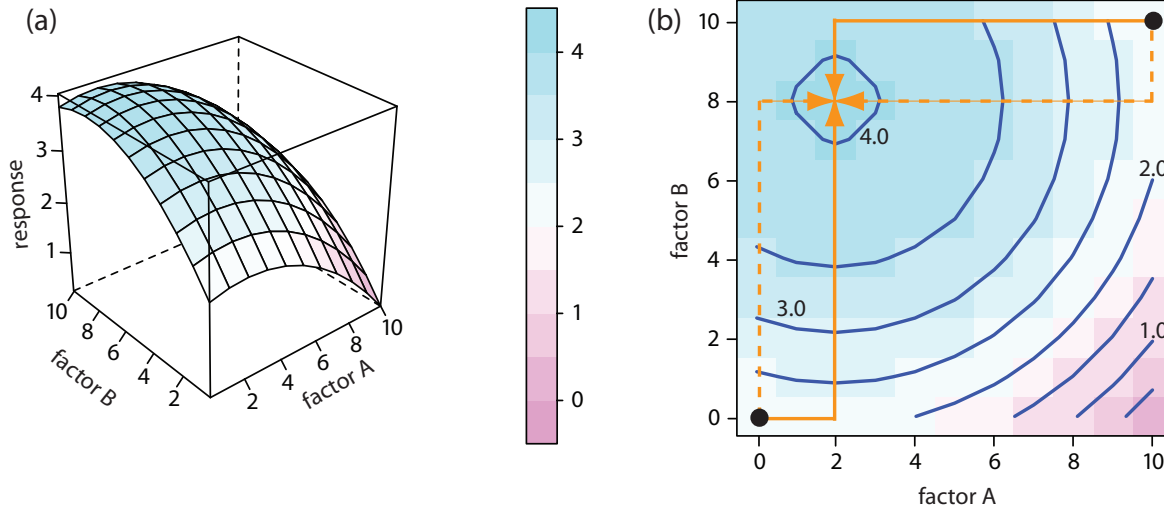


Figure 14.7 The response surface for two independent factors based on [equation 14.1](#), displayed as (a) a wireframe, and (b) an overlaid contour plot and level plot. The orange lines in (b) show the progress of one-factor-at-a-time optimizations beginning from two starting points (•) and optimizing factor A first (solid line) or factor B first (dashed line). All four trials reach the optimum response of (2,8) in a single cycle.

$$R = 60 - 20 = 40$$

but no effect when factor A is at level A_2 .

$$R = 80 - 80 = 0$$

Figure 14.8 shows this **DEPENDENT** relationship between the two factors. Factors that are dependent are said to interact and the response surface's equation includes an interaction term containing both factors A and B. The final term in equation 14.2, for example, accounts for the interaction between the factors A and B.

$$R = 5.5 + 1.5A + 0.6B - 0.15A^2 - 0.0245B^2 - 0.0857AB \quad 14.2$$

[Figure 14.9](#) shows the resulting pseudo-three-dimensional surface and a contour map for equation 14.2.

The progress of a one-factor-at-a-time optimization for equation 14.2 is shown in [Figure 14.9b](#). Although the optimization for dependent factors is effective, it is less efficient than that for independent factors. In this case it takes four cycles to reach the optimum response of (3, 7) if we begin at (0, 0).

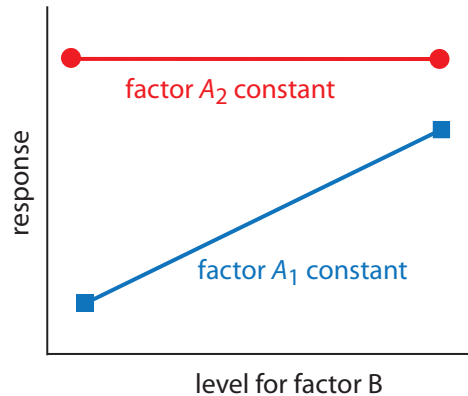


Figure 14.8 Factor effect plot for two dependent factors. Note that the two lines are not parallel, indicating that the level for factor A influences how factor B's level affects the response.

Practice Exercise 14.2

Using the data in [Table 14.2](#), show that factor A's affect on the response is independent of factor B.

Click [here](#) to review your answer to this exercise.

Table 14.2 Example of Two Dependent Factors

factor A	factor B	response
A_1	B_1	20
A_2	B_1	80
A_1	B_2	60
A_2	B_2	80

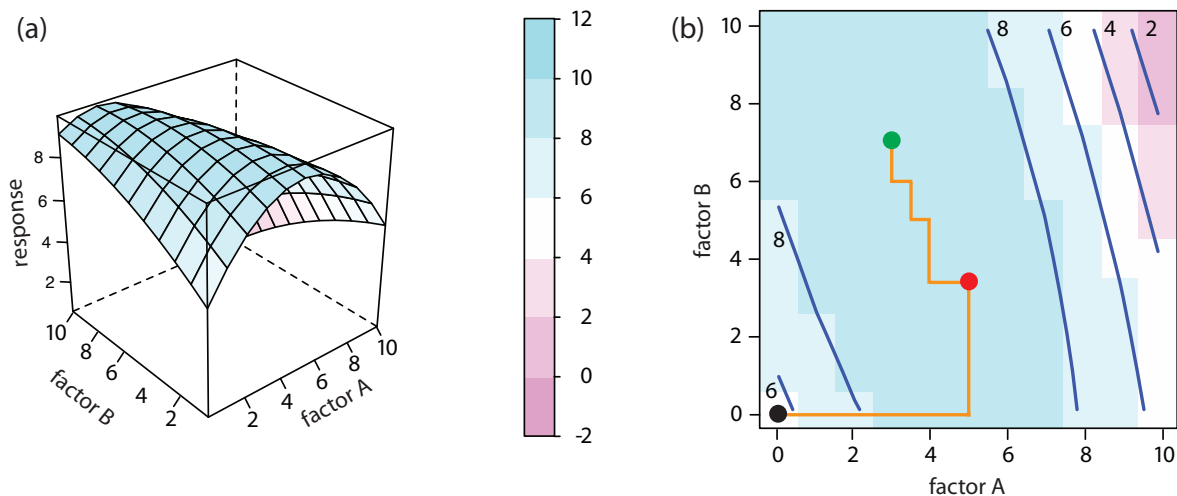


Figure 14.9 The response surface for two dependent factors based on [equation 14.2](#), displayed as (a) a wireframe, and (b) an overlaid contour plot and level plot. The orange lines in (b) show the progress of one-factor-at-a-time optimization beginning from the starting point (•) and optimizing factor A first. The red dot (•) marks the end of the first cycle. It takes four cycles to reach the optimum response of (3, 7) as shown by the green dot (•).

SIMPLEX OPTIMIZATION

One strategy for improving the efficiency of a searching algorithm is to change more than one factor at a time. A convenient way to accomplish this when there are two factors is to begin with three sets of initial factor levels, which form the vertices of a triangle. After measuring the response for each set of factor levels, we identify the combination giving the worst response and replace it with a new set of factor levels using a set of rules (Figure 14.10). This process continues until we reach the global optimum or until no further optimization is possible. The set of factor levels is called a **SIMPLEX**. In general, for k factors a simplex is a $k + 1$ dimensional geometric figure.³

3 (a) Spendley, W.; Hext, G. R.; Himsforth, F. R. *Technometrics* **1962**, *4*, 441–461; (b) Deming, S. N.; Parker, L. R. *CRC Crit. Rev. Anal. Chem.* **1978** *7*(3), 187–202.

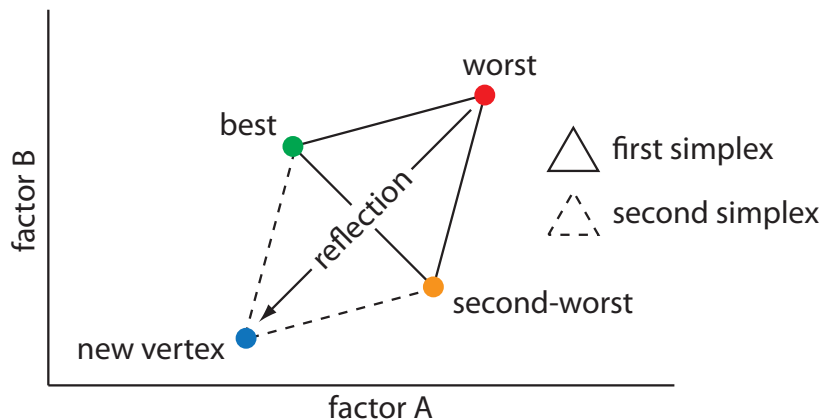


Figure 14.10 Example of a two-factor simplex. The original simplex is formed by the green, orange, and red vertices. Replacing the worst vertex with a new vertex moves the simplex into a new position on the response surface.

Thus, for two factors the simplex is a triangle. For three factors the simplex is a tetrahedron.

To place the initial two-factor simplex on the response surface, we choose a starting point (a, b) for the first vertex and place the remaining two vertices at $(a + s_a, b)$ and $(a + 0.5s_a, b + 0.87s_b)$ where s_a and s_b are step sizes for factors A and B.⁴ The following set of rules moves the simplex across the response surface in search of the optimum response:

Rule 1. Rank the vertices from best (v_b) to worst (v_w).

Rule 2. Reject the worst vertex (v_w) and replace it with a new vertex (v_n) by reflecting the worst vertex through the midpoint of the remaining vertices. The new vertex's factor levels are twice the average factor levels for the retained vertices minus the factor levels for the worst vertex. For a two-factor optimization, the equations are shown here where v_s is the third vertex.

$$a_{v_n} = 2\left(\frac{a_{v_b} + a_{v_s}}{2}\right) - a_{v_w} \quad 14.3$$

$$b_{v_n} = 2\left(\frac{b_{v_b} + b_{v_s}}{2}\right) - b_{v_w} \quad 14.4$$

The variables a and b in equation 14.3 and equation 14.4 are the factor levels for factors A and B, respectively. [Problem 14.3](#) in the end-of-chapter problems asks you to derive these equations.

Rule 3. If the new vertex has the worst response, then return to the previous vertex and reject the vertex with the second worst response, (v_s) calculating the new vertex's factor levels using rule 2. This rule ensures that the simplex does not return to the previous simplex.

Rule 4. Boundary conditions are a useful way to limit the range of possible factor levels. For example, it may be necessary to limit a factor's concentration for solubility reasons, or to limit the temperature because a reagent is thermally unstable. If the new vertex exceeds a boundary condition, then assign it the worst response and follow rule 3.

Because the size of the simplex remains constant during the search, this algorithm is called a **FIXED-SIZED SIMPLEX OPTIMIZATION**. Example 14.1 illustrates the application of these rules.

Example 14.1

Find the optimum response for the response surface in [Figure 14.9](#) using the fixed-sized simplex searching algorithm. Use $(0, 0)$ for the initial factor levels and set each factor's step size to 1.00.

SOLUTION

Letting $a = 0$, $b = 0$, $s_a = 1$, and $s_b = 1$ gives the vertices for the initial simplex as

$$\text{Vertex 1: } (a, b) = (0, 0)$$

⁴ Long, D. E. *Anal. Chim. Acta* **1969**, *46*, 193–206.

$$\text{Vertex 2: } (a + s_a, b) = (1.00, 0)$$

$$\text{Vertex 3: } (a + 0.50s_a, b + 0.87s_b) = (0.50, 0.87)$$

The responses, from [equation 14.2](#), for the three vertices are shown in the following table

vertex	a	b	response
v_1	0	0	5.50
v_2	1.00	0	6.85
v_3	0.50	0.87	6.68

with v_1 giving the worst response and v_3 the best response. Following Rule 1, we reject v_1 and replace it with a new vertex using [equation 14.3](#) and [equation 14.4](#); thus

$$a_{v_4} = 2 \times \frac{1.00 + 0.50}{2} - 0 = 1.50 \quad b_{v_4} = 2 \times \frac{0 + 0.87}{2} - 0 = 0.87$$

The following table gives the vertices of the second simplex.

vertex	a	b	response
v_2	1.50	0	6.85
v_3	0.50	0.87	6.68
v_4	1.50	0.87	7.80

with v_3 giving the worst response and v_4 the best response. Following Rule 1, we reject v_3 and replace it with a new vertex using [equation 14.3](#) and [equation 14.4](#); thus

$$a_{v_5} = 2 \times \frac{1.00 + 1.50}{2} - 0.50 = 2.00 \quad b_{v_5} = 2 \times \frac{0 + 0.87}{2} - 0.87 = 0$$

The following table gives the vertices of the third simplex.

vertex	a	b	response
v_2	1.50	0	6.85
v_4	1.50	0.87	7.80
v_5	2.00	0	7.90

The calculation of the remaining vertices is left as an exercise. [Figure 14.11](#) shows the progress of the complete optimization. After 29 steps the simplex begins to repeat itself, circling around the optimum response of (3, 7).

14A.3 Mathematical Models of Response Surfaces

A response surface is described mathematically by an equation relating the response to its factors. [Equation 14.1](#) and [equation 14.2](#) provide two ex-

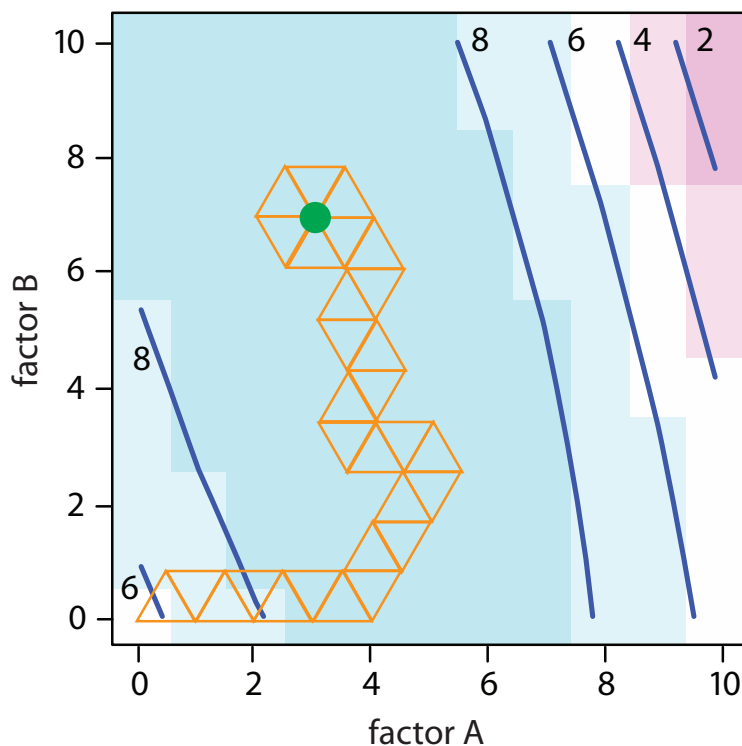


Figure 14.11 Progress of the fixed-size simplex optimization in [Example 14.1](#). The green dot marks the optimum response of (3,7). Optimization ends when the simplexes begin to circle around a single vertex.

amples. If we measure the response for several combinations of factor levels, then we can model the response surface by using a linear regression analysis to fit an appropriate equation to the data. There are two broad categories of models that we can use in a regression analysis: theoretical models and empirical models.

THEORETICAL MODELS OF THE RESPONSE SURFACE

A **THEORETICAL MODEL** is derived from the known chemical and physical relationships between the response and its factors. In spectrophotometry,

Practice Exercise 14.3

The following exercise will help you evaluate the efficiency and effectiveness of three common searching algorithms: one-factor-at-a-time, fixed-size simplex, and variable-sized simplex (see the side bar comment on this page for a brief description and a link to additional information). Click on this [link](#), which opens a java applet. Scroll down to read the applet's instructions and then experiment with the controls. When you are comfortable with the applet's interface, answer the following questions: (a) How sensitive is each algorithm to its initial starting point and to the size of the initial simplex or step? In your answer, consider both effectiveness and efficiency. (b) Are the optimizations for some response surfaces particularly sensitive to the initial position? If so, what are the characteristics of these response surfaces?

Click [here](#) to review your answer to this exercise.

The size of the initial simplex ultimately limits the effectiveness and the efficiency of a fixed-size simplex searching algorithm. We can increase its efficiency by allowing the size of the simplex to expand or contract in response to the rate at which we are approaching the optimum. For example, if we find that a new vertex is better than any of the vertices in the preceding simplex, then we expand the simplex further in this direction on the assumption that we are moving directly toward the optimum. Other conditions cause us to contract the simplex—making it smaller—to encourage the optimization to move in a different direction. We call this a **VARIABLE-SIZED SIMPLEX OPTIMIZATION**.

Consult this chapter's [additional resources](#) for further details of the variable-sized simplex optimization.

For a review of Beer's law, see [Section 10B.3](#) in Chapter 10. [Figure 14.1](#) is an example of a Beer's law calibration curve.

The calculations for a linear regression when the model is first-order in one factor (a straight line) is described in [Chapter 5D](#). A complete mathematical treatment of linear regression for models that are second-order in one factor or which contain more than one factor is beyond the scope of this text. The computations for a few special cases, however, are straightforward and are considered in this section. A more comprehensive treatment of linear regression can be found in several of this chapter's [additional resources](#).

Another system of notation is to use a plus sign (+) to indicate a factor's high level and a minus sign (-) to indicate its low level. We will use *H* or *L* when writing an equation and a plus sign or a minus sign in tables.

for example, Beer's law is a theoretical model that relates a substance's absorbance, A , to its concentration, C_A

$$A = \epsilon b C_A$$

where ϵ is the molar absorptivity and b is the pathlength of the electromagnetic radiation passing through the sample. A Beer's law calibration curve, therefore, is a theoretical model of a response surface.

EMPIRICAL MODELS OF THE RESPONSE SURFACE

In many cases the underlying theoretical relationship between the response and its factors is unknown. We can still develop a model of the response surface if we make some reasonable assumptions about the underlying relationship between the factors and the response. For example, if we believe that the factors A and B are independent and that each has only a first-order effect on the response, then the following equation is a suitable model.

$$R = \beta_0 + \beta_a A + \beta_b B$$

where R is the response, A and B are the factor levels, and β_0 , β_a , and β_b are adjustable parameters whose values are determined by a linear regression analysis. Other examples of equations include those for dependent factors

$$R = \beta_0 + \beta_a A + \beta_b B + \beta_{ab} AB$$

and those with higher-order terms.

$$R = \beta_0 + \beta_a A + \beta_b B + \beta_{aa} A^2 + \beta_{bb} B^2$$

Each of these equations provides an **EMPIRICAL MODEL** of the response surface because it has no basis in a theoretical understanding of the relationship between the response and its factors. Although an empirical model may provide an excellent description of the response surface over a limited range of factor levels, it has no basis in theory and cannot be extended to unexplored parts of the response surface.

FACTORIAL DESIGNS

To build an empirical model we measure the response for at least two levels for each factor. For convenience we label these levels as high, H_f and low, L_f where f is the factor; thus H_A is the high level for factor A and L_B is the low level for factor B . If our empirical model contains more than one factor, then each factor's high level is paired with both the high level and the low level for all other factors. In the same way, the low level for each factor is paired with the high level and the low level for all other factors. As shown in [Figure 14.12](#), this requires 2^k experiments where k is the number of factors. This experimental design is known as a **2^k FACTORIAL DESIGN**.

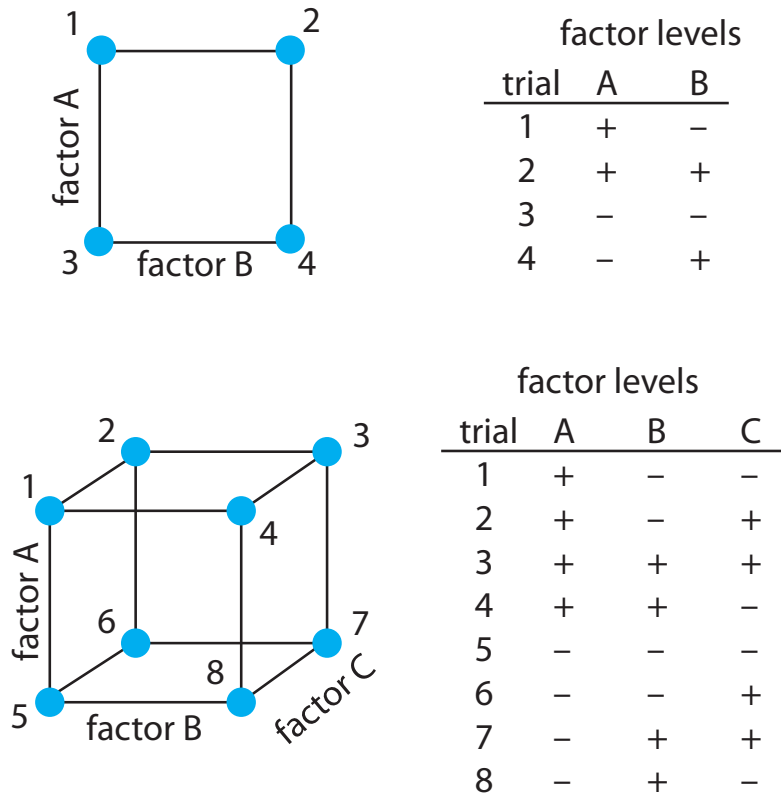


Figure 14.12 2^k factorial designs for (top) $k = 2$, and (bottom) $k = 3$. A 2^2 factorial design requires four experiments and a 2^3 factorial design requires eight experiments.

CODED FACTOR LEVELS

The calculations for a 2^k factorial design are straightforward and easy to complete with a calculator or spreadsheet. To simplify the calculations, we code the factor levels using +1 for a high level and -1 for a low level. Coding has two additional advantages: scaling the factors to the same magnitude makes it easier to evaluate each factor's relative importance, and it places the model's intercept, β_0 , at the center of the experimental design. As shown in Example 14.2, it is easy to convert between coded and uncoded factor levels.

Example 14.2

To explore the effect of temperature on a reaction, we assign 30°C to a coded factor level of -1, and assign a coded level +1 to a temperature of 50°C. What temperature corresponds to a coded level of -0.5 and what is the coded level for a temperature of 60°C?

SOLUTION

The difference between -1 and +1 is 2, and the difference between 30°C and 50°C is 20°C; thus, each unit in coded form is equivalent to 10°C in uncoded form. With this information, it is easy to create a simple scale

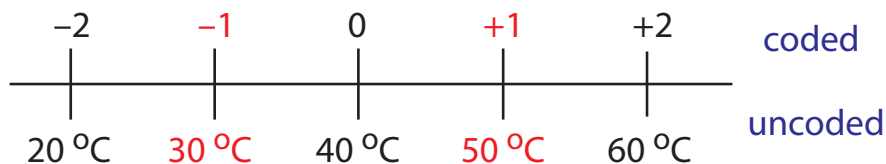


Figure 14.13 The relationship between the coded factor levels and the uncoded factor levels for [Example 14.2](#). The numbers in red are the values defined in the 2^2 factorial design.

between the coded and the uncoded values, as shown in Figure 14.13. A temperature of 35°C corresponding to a coded level of -0.5 and a coded level of $+2$ corresponds to a temperature of 60°C .

DETERMINING THE EMPIRICAL MODEL

Let's begin by considering a simple example involving two factors, A and B, and the following empirical model.

$$R = \beta_0 + \beta_a A + \beta_b B + \beta_{ab} AB \quad 14.5$$

A 2^k factorial design with two factors requires four runs. Table 14.3 provides the uncoded levels (A and B), the coded levels (A^* and B^*), and the responses (R) for these experiments. The terms β_0 , β_a , β_b , and β_{ab} in equation 14.5 account for, respectively, the mean effect (which is the average response), first-order effects due to factors A and B, and the interaction between the two factors.

Equation 14.5 has four unknowns—the four beta terms—and Table 14.3 describes four experiments. We have just enough information to calculate values for β_0 , β_a , β_b , and β_{ab} . When working with the coded factor levels, the values of these parameters are easy to calculate using the following equations, where n is the number of runs.

$$\beta_0 \approx b_0 = \frac{1}{n} \sum_i R_i \quad 14.6$$

$$\beta_a \approx b_a = \frac{1}{n} \sum_i A_i^* R_i \quad 14.7$$

Recall that we introduced coded factor levels with the promise that they simplify calculations.

Table 14.3 Example of Uncoded and Coded Factor Levels and Responses for a 2^2 Factorial Design

run	A	B	A^*	B^*	R
1	15	30	+1	+1	22.5
2	15	10	+1	-1	11.5
3	5	30	-1	+1	17.5
4	5	10	-1	-1	8.5

$$\beta_b \approx b_b = \frac{1}{n} \sum_i B_i^* R_i \quad 14.8$$

$$\beta_{ab} \approx b_{ab} = \frac{1}{n} \sum_i A_i^* B_i^* R_i \quad 14.9$$

In [Section 5D.1](#) of Chapter 5 we introduced the convention of using β to indicate the true value of a regression's model's parameter's and b to indicate its calculated value. We estimate β from b .

Solving for the estimated parameters using the data in [Table 14.3](#)

$$b_0 = \frac{22.5 + 11.5 + 17.5 + 8.5}{4} = 15.0$$

$$b_a = \frac{22.5 + 11.5 - 17.5 - 8.5}{4} = 2.0$$

$$b_b = \frac{22.5 - 11.5 + 17.5 - 8.5}{4} = 5.0$$

$$b_{ab} = \frac{22.5 - 11.5 - 17.5 + 8.5}{4} = 0.5$$

leaves us with the following coded empirical model for the response surface.

$$R = 15.0 + 2.0A^* + 5.0B^* + 0.5A^*B^* \quad 14.10$$

We can extend this approach to any number of factors. For a system with three factors—A, B, and C—we can use a 2^3 factorial design to determine the parameters in the following empirical model

$$R = \beta_0 + \beta_a A + \beta_b B + \beta_c C + \beta_{ab} AB + \beta_{ac} AC + \beta_{bc} BC + \beta_{abc} ABC \quad 14.11$$

where A , B , and C are the factor levels. The terms β_0 , β_a , β_b , and β_{ab} are estimated using [equation 14.6](#), [equation 14.7](#), [equation 14.8](#), and [equation 14.9](#), respectively. To find estimates for the remaining parameters we use the following equations.

$$\beta_c = b_c = \frac{1}{n} \sum_i C_i^* R_i \quad 14.12$$

$$\beta_{ac} = b_{ac} = \frac{1}{n} \sum_i A_i^* C_i^* R_i \quad 14.13$$

$$\beta_{bc} = b_{bc} = \frac{1}{n} \sum_i B_i^* C_i^* R_i \quad 14.14$$

Although we can convert this coded model into its uncoded form, there is no need to do so. If we need to know the response for a new set of factor levels, we just convert them into coded form and calculate the response. For example, if A is 10 and B is 15, then A^* is 0 and B^* is -0.5 . Substituting these values into equation 14.10 gives a response of 12.5.

$$\beta_{abc} = b_{abc} = \frac{1}{n} \sum A_i^* B_i^* C_i^* R_i \quad 14.15$$

Example 14.3

Table 14.4 lists the uncoded factor levels, the coded factor levels, and the responses for a 2^3 factorial design. Determine the coded empirical model for the response surface based on [equation 14.11](#). What is the expected response when A is 10, B is 15, and C is 50?

SOLUTION

[Equation 14.5](#) has eight unknowns—the eight beta terms—and Table 14.4 describes eight experiments. We have just enough information to calculate values for β_0 , β_a , β_b , β_c , β_{ab} , β_{ac} , β_{bc} , and β_{abc} ; these values are

See [equation 14.6](#).

$$b_0 = \frac{1}{8} \left(\begin{array}{l} 137.25 + 54.75 + 73.75 + 30.25 + \\ 61.75 + 30.25 + 41.25 + 18.75 \end{array} \right) = 56.0$$

See [equation 14.7](#).

$$b_a = \frac{1}{8} \left(\begin{array}{l} 137.25 + 54.75 + 73.75 + 30.25 - \\ 61.75 - 30.25 - 41.25 - 18.75 \end{array} \right) = 18.0$$

See [equation 14.8](#).

$$b_b = \frac{1}{8} \left(\begin{array}{l} 137.25 + 54.75 - 73.75 - 30.25 + \\ 61.75 + 30.25 - 41.25 - 18.75 \end{array} \right) = 15.0$$

See [equation 14.9](#).

$$b_c = \frac{1}{8} \left(\begin{array}{l} 137.25 - 54.75 + 73.75 - 30.25 + \\ 61.75 - 30.25 + 41.25 - 18.75 \end{array} \right) = 22.5$$

See [equation 14.12](#).

$$b_{ab} = \frac{1}{8} \left(\begin{array}{l} 137.25 + 54.75 - 73.75 - 30.25 - \\ 61.75 - 30.25 + 41.25 + 18.75 \end{array} \right) = 7.0$$

Table 14.4 Example of Uncoded and Coded Factor Levels and Responses for the 2^3 Factorial Design in Example 14.3

run	A	B	C	A^*	B^*	C^*	R
1	15	30	45	+1	+1	+1	137.25
2	15	30	15	+1	+1	-1	54.75
3	15	10	45	+1	-1	+1	73.75
4	15	10	15	+1	-1	-1	30.25
5	5	30	45	-1	+1	+1	61.75
6	5	30	15	-1	+1	-1	30.25
7	5	10	45	-1	-1	+1	41.25
8	5	10	15	-1	-1	-1	18.75

	-2	-1	0	+1	+2	
						coded
A	0	5	10	15	20	uncoded
B	0	10	20	30	40	
C	0	15	30	45	60	

Figure 14.14 The relationship between the coded factor levels and the uncoded factor levels for [Example 14.3](#). The numbers in red are the values defined in the 2^3 factorial design.

$$b_{ac} = \frac{1}{8} \left(137.25 - 54.75 + 73.75 - 30.25 - 61.75 + 30.25 - 41.25 + 18.75 \right) = 9.0$$

See [equation 14.13](#).

$$b_{bc} = \frac{1}{8} \left(137.25 - 54.75 - 73.75 + 30.25 + 61.75 - 30.25 - 41.25 + 18.75 \right) = 6.0$$

See [equation 14.14](#).

$$b_{abc} = \frac{1}{8} \left(137.25 - 54.75 - 73.75 + 30.25 - 61.75 + 30.25 + 41.25 - 18.75 \right) = 3.75$$

See [equation 14.15](#).

The coded empirical model, therefore, is

$$R = 56.0 + 18.0A^* + 15.0B^* + 22.5C^* + 7.0A^*B^* + 9.0A^*C^* + 6.0B^*C^* + 3.75A^*B^*C^*$$

To find the response when A is 10, B is 15, and C is 50, we first convert these values into their coded form. Figure 14.14 helps us make the appropriate conversions; thus, A^* is 0, B^* is -0.5 , and C^* is $+1.33$. Substituting back into the empirical model gives a response of

$$\begin{aligned} R &= 56.0 + 18.0(0) + 15.0(-0.5) + 22.5(1.33) \\ &\quad + 7.0(0)(-0.5) + 9.0(0)(1.33) + 6.0(-0.5)(1.33) \\ &\quad + 3.75(0)(-0.5)(1.33) = 74.435 \end{aligned}$$

A 2^k factorial design can model only a factor's first-order effect on the response. A 2^2 factorial design, for example, includes each factor's first-order effect (β_a and β_b) and a first-order interaction between the factors (β_{ab}). A 2^k factorial design cannot model higher-order effects because there is insufficient information. Here is simple example that illustrates the problem. Suppose we need to model a system in which the response is a function of a single factor. [Figure 14.15a](#) shows the result of an experiment using a 2^1 factorial design. The only empirical model we can fit to the data is a straight line.

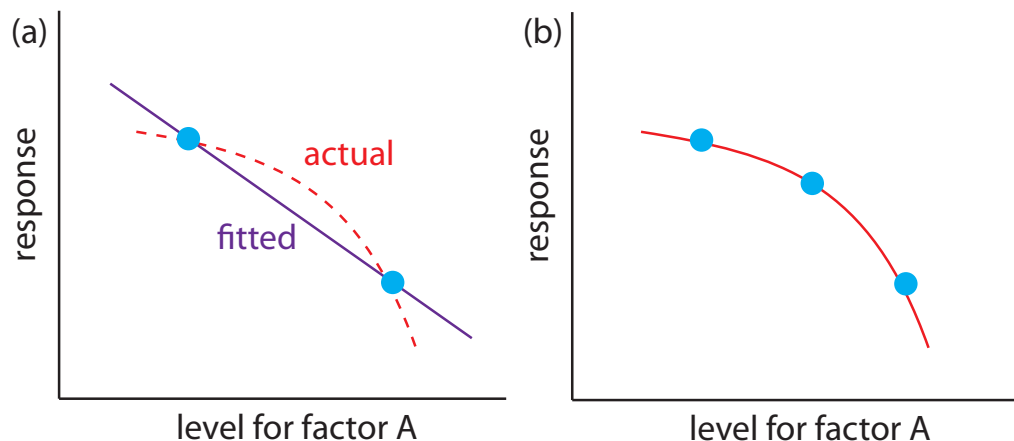


Figure 14.15 A curved one-factor response surface, in red, showing (a) the limitation of using a 2^1 factorial design, which can only fit a straight-line to the data, and (b) the application of a 3^1 factorial design that takes into account second-order effects.

$$R = \beta_0 + \beta_a A$$

If the actual response is a curve instead of a straight-line, then the empirical model is in error. To see evidence of curvature we must measure the response for at least three levels for each factor. We can fit the 3^1 factorial design in Figure 14.15b to an empirical model that includes second-order factor effects.

$$R = \beta_0 + \beta_a A + \beta_{aa} A^2$$

In general, an n -level factorial design can model single-factor and interaction terms up to the $(n-1)$ th order.

We can judge the effectiveness of a first-order empirical model by measuring the response at the center of the factorial design. If there are no higher-order effects, the average response of the trials in a 2^k factorial design should equal the measured response at the center of the factorial design. To account for influence of random error we make several determinations of the response at the center of the factorial design and establish a suitable confidence interval. If the difference between the two responses is significant, then a first-order empirical model is probably inappropriate.

Example 14.4

One method for the quantitative analysis of vanadium is to acidify the solution by adding H_2SO_4 and oxidizing the vanadium with H_2O_2 to form a red-brown soluble compound with the general formula $(\text{VO})_2(\text{SO}_4)_3$. Palasota and Deming studied the effect of the relative amounts of H_2SO_4 and H_2O_2 on the solution's absorbance, reporting the following results for a 2^2 factorial design.⁵

⁵ Palasota, J. A.; Deming, S. N. *J. Chem. Educ.* **1992**, *62*, 560–563.

One of the advantages of working with a coded empirical model is that b_0 is the average response of the $2 \times k$ trials in a 2^k factorial design.

H ₂ SO ₄	H ₂ O ₂	absorbance
+1	+1	0.330
+1	-1	0.359
-1	+1	0.293
-1	-1	0.420

Four replicate measurements at the center of the factorial design give absorbances of 0.334, 0.336, 0.346, and 0.323. Determine if a first-order empirical model is appropriate for this system. Use a 90% confidence interval when accounting for the effect of random error.

SOLUTION

We begin by determining the confidence interval for the response at the center of the factorial design. The mean response is 0.335 with a standard deviation of 0.0094, which gives a 90% confidence interval of

$$= \bar{X} \pm \frac{ts}{\sqrt{n}} = 0.335 \pm \frac{(2.35)(0.0094)}{\sqrt{4}} = 0.335 \pm 0.011$$

The average response, \bar{R} , from the factorial design is

$$\bar{R} = \frac{0.330 + 0.359 + 0.293 + 0.420}{4} = 0.350$$

Because \bar{R} exceeds the confidence interval's upper limit of 0.346, we can reasonably assume that a 2^2 factorial design and a first-order empirical model are inappropriate for this system at the 95% confidence level.

[Problem 14.11](#) in the end-of-chapter problems provides a complete empirical model for this system.

If we cannot fit a first-order empirical model to our data, we may be able to model it using a full second-order polynomial equation, such as that shown here for a two factors.

$$R = \beta_0 + \beta_a A + \beta_b B + \beta_{aa} A^2 + \beta_{bb} B^2 + \beta_{ab} AB$$

Because we must measure each factor for at least three levels if we are to detect curvature (see [Figure 14.15b](#)), a convenient experimental design is a 3^k factorial design. A 3^2 factorial design for two factors, for example, is shown in [Figure 14.16](#). The computations for 3^k factorial designs are not as easy to generalize as those for a 2^k factorial design and are not considered in this text. See this chapter's additional resources for details about the calculations.

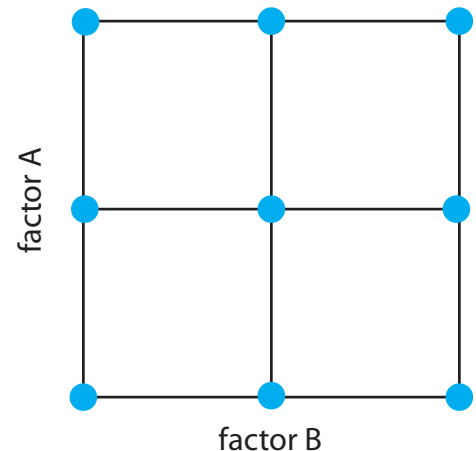


Figure 14.16 A 3^k factorial design for $k=2$.

CENTRAL COMPOSITE DESIGNS

One limitation to a 3^k factorial design is the number of trials we need to run. As shown in [Figure 14.16](#), a 3^2 factorial design requires 9 trials. This number increases to 27 for three factors and to 81 for 4 factors. A more ef-

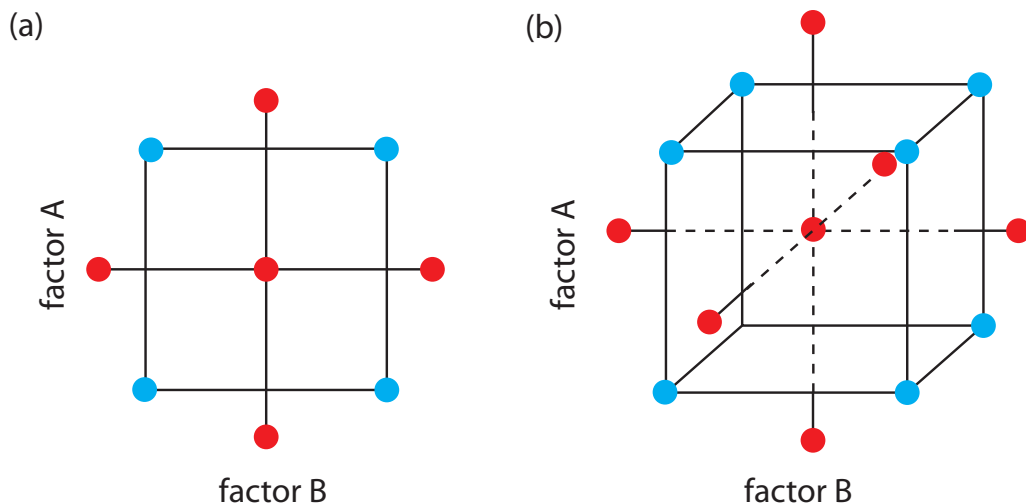


Figure 14.17 Two examples of a central composite design for (a) $k=2$ and (b) $k=3$. The points in blue are a 2^k factorial design, and the points in red are a star design.

efficient experimental design for systems containing more than two factors is a **CENTRAL COMPOSITE DESIGN**, two examples of which are shown in Figure 14.17. The central composite design consists of a 2^k factorial design, which provides data for estimating each factor's first-order effect and interactions between the factors, and a star design consisting of $2k+1$ points, which provides data for estimating second-order effects. Although a central composite design for two factors requires the same number of trials, 9, as a 3^2 factorial design, it requires only 15 trials and 25 trials for systems involving three factors or four factors. See this chapter's additional resources for details about the central composite designs.

14B Verifying the Method

After developing and optimizing a method, the next step is to determine how well it works in the hands of a single analyst. Three steps make up this process: determining single-operator characteristics, completing a blind analysis of standards, and determining the method's ruggedness. If another standard method is available, then we can analyze the same sample using both the standard method and the new method, and compare the results. If the result for any single test is unacceptable, then the method is not a suitable standard method.

14B.1 Single Operator Characteristics

The first step in verifying a method is to determine the precision, accuracy, and detection limit when a single analyst uses the method to analyze a standard sample. The detection limit is determined by analyzing an appropriate reagent blank. Precision is determined by analyzing replicate portions of the sample, preferably more than ten. Accuracy is evaluated using a t -test

See [Chapter 4G](#) for a discussion of detection limits. Pay particular attention to the difference between a detection limit, a limit of identification, and a limit of quantitation.

See [Section 4F.1](#) for a review of the t -test.

comparing the experimental results to the known amount of analyte in the standard. Precision and accuracy are evaluated for several different concentrations of analyte, including at least one concentration near the detection limit, and for each different sample matrix. Including different concentrations of analyte helps identify constant sources of determinate error and establishes the range of concentrations for which the method is applicable.

14B.2 Blind Analysis of Standard Samples

Single-operator characteristics are determined by analyzing a standard sample that has a concentration of analyte known to the analyst. The second step in verifying a method is a **BLIND ANALYSIS** of standard samples. Although the concentration of analyte in the standard is known to a supervisor, the information is withheld from the analyst. After analyzing the standard sample several times, the analyte's average concentration is reported to the test's supervisor. To be accepted, the experimental mean should be within three standard deviations—as determined from the single-operator characteristics—of the analyte's known concentration.

14B.3 Ruggedness Testing

An optimized method may produce excellent results in the laboratory that develops a method, but poor results in other laboratories. This is not particularly surprising because a method typically is optimized by a single analyst using the same reagents, equipment, and instrumentation for each trial. Any variability introduced by the analysts, the reagents, the equipment, and the instrumentation is not included in the single-operator characteristics. Other less obvious factors may affect an analysis, including environmental factors, such as the temperature or relative humidity in the laboratory. If the procedure does not require their control, then they may contribute to variability. Finally, the analyst optimizing usually takes particular care to perform the analysis in exactly the same way during every trial, which may minimize the run to run variability.

An important step in developing a standard method is to determine which factors have a pronounced effect on the quality of the results. Once we identify these factors, we can write into the procedure instructions that specify how these factors must be controlled. A procedure that, when carefully followed, produces results of high quality in different laboratories is considered rugged. The method by which the critical factors are discovered is called **RUGGEDNESS TESTING**.⁶

Ruggedness testing usually is performed by the laboratory developing the standard method. After identifying potential factors, their effects are evaluated by performing the analysis at two levels for each factor. Normally one level is that specified in the procedure, and the other is a level likely to be encountered when the procedure is used by other laboratories.

See [Chapter 4B](#) for a review of constant determinate errors. [Figure 4.5](#) illustrates how we can detect a constant determinate error by analyzing samples containing different amounts of analyte.

An even more stringent requirement is to require that the experimental mean be within two standard deviations of the analyte's known concentration.

For example, if temperature is a concern, we might specify that it be held at $25 \pm 2^\circ\text{C}$.

6 Youden, W. J. *Anal. Chem.* **1960**, *32*(13), 23A–37A.

Table 14.5 Experimental Design for a Ruggedness Test Involving Seven Factors

run	factors							response
	A	B	C	D	E	F	G	
1	<i>A</i>	<i>B</i>	<i>C</i>	<i>D</i>	<i>E</i>	<i>F</i>	<i>G</i>	R_1
2	<i>A</i>	<i>B</i>	<i>c</i>	<i>D</i>	<i>e</i>	<i>f</i>	<i>g</i>	R_2
3	<i>A</i>	<i>b</i>	<i>C</i>	<i>d</i>	<i>E</i>	<i>f</i>	<i>g</i>	R_3
4	<i>A</i>	<i>b</i>	<i>c</i>	<i>d</i>	<i>e</i>	<i>F</i>	<i>G</i>	R_4
5	<i>a</i>	<i>B</i>	<i>C</i>	<i>d</i>	<i>e</i>	<i>F</i>	<i>g</i>	R_5
6	<i>a</i>	<i>B</i>	<i>c</i>	<i>d</i>	<i>E</i>	<i>f</i>	<i>G</i>	R_6
7	<i>a</i>	<i>b</i>	<i>C</i>	<i>D</i>	<i>e</i>	<i>f</i>	<i>G</i>	R_7
8	<i>a</i>	<i>b</i>	<i>c</i>	<i>D</i>	<i>E</i>	<i>F</i>	<i>g</i>	R_8

Why does this model estimate the seven first-order factor effects and not seven of the 20 possible first-order interactions? With eight experiments, we can only choose to calculate seven parameters (plus the average response). The calculation of E_D , for example, also gives the value for E_{AB} . You can convince yourself of this by replacing each upper case letter with a +1 and each lower case letter with a -1 and noting that $A \times B = D$. We choose to report the first-order factor effects because they are likely to be more important than interactions between factors.

To see that this design is balanced, look closely at the last four runs. Factor A is present at its level *a* for all four of these runs. For each of the remaining factors, two levels are upper case and two levels are lower case. Runs 5–8 provide information about the effect of *a* on the response, but do not provide information about the effect of any other factor. Runs 1, 2, 5, and 6 provide information about the effect of *B*, but not of the remaining factors. Try a few other examples to convince yourself that this relationship is general.

This approach to ruggedness testing can be time consuming. If there are seven potential factors, for example, a 2^7 factorial design can evaluate each factor's first-order effect. Unfortunately, this requires a total of 128 trials—too many trials to be a practical solution. A simpler experimental design is shown in Table 14.5, in which the two factor levels are identified by upper case and lower case letters. This design, which is similar to a 2^3 factorial design, is called a fractional factorial design. Because it includes only eight runs, the design provides information about only the eight first-order factor effects. It does not provide sufficient information to evaluate higher-order effects or interactions between factors, both of which are probably less important than the first-order effects.

The experimental design in Table 14.5 is balanced in that each of a factor's two levels is paired an equal number of times with the upper case and lower case levels for every other factor. To determine the effect, E_f , of changing a factor's level, we subtract the average response when the factor is at its upper case level from the average value when it is at its lower case level.

$$E_f = \frac{(\sum R_i)_{\text{upper case}}}{4} - \frac{(\sum R_i)_{\text{lower case}}}{4} \quad 14.16$$

Because the design is balanced, the levels for the remaining factors appear an equal number of times in both summation terms, canceling their effect on E_f . For example, to determine the effect of factor A, E_A , we subtract the average response for runs 5–8 from the average response for runs 1–4. Factor B does not affect E_A because its upper case levels in runs 1 and 2 are canceled by the upper case levels in runs 5 and 6, and its lower case levels in runs 3 and 4 are canceled by the lower case levels in runs 7 and 8. After calculating each of the factor effects we rank them from largest to smallest without regard to sign, identifying those factors whose effects are substantially larger than the other factors.

We also can use this experimental design to estimate the method's expected standard deviation due to the effects of small changes in uncontrolled or poorly controlled factors.⁷

$$s = \sqrt{\frac{2}{7} \sum E_f^2} \quad 14.17$$

If this standard deviation is unacceptably large, then the procedure is modified to bring under greater control those factors having the greatest effect on the response.

Example 14.5

The concentration of trace metals in sediment samples collected from rivers and lakes can be determined by extracting with acid and analyzing the extract by atomic absorption spectrophotometry. One procedure calls for an overnight extraction using dilute HCl or HNO₃. The samples are placed in plastic bottles with 25 mL of acid and placed on a shaker operated at a moderate speed and at ambient temperature. To determine the method's ruggedness, the effect of the following factors was studied using the experimental design in [Table 14.5](#).

Factor A: extraction time	$A = 24 \text{ h}$	$a = 12 \text{ h}$
Factor B: shaking speed	$B = \text{medium}$	$b = \text{high}$
Factor C: acid type	$C = \text{HCl}$	$c = \text{HNO}_3$
Factor D: acid concentration	$D = 0.1 \text{ M}$	$d = 0.05 \text{ M}$
Factor E: volume of acid	$E = 25 \text{ mL}$	$e = 35 \text{ mL}$
Factor F: type of container	$F = \text{plastic}$	$f = \text{glass}$
Factor G: temperature	$G = \text{ambient}$	$g = 25^\circ\text{C}$

Eight replicates of a standard sample containing a known amount of analyte were carried through the procedure. The analyte's recovery in the samples, given as a percentage, are shown here.

$$\begin{array}{cccc} R_1 = 98.9 & R_2 = 99.0 & R_3 = 97.5 & R_4 = 97.7 \\ R_5 = 97.4 & R_6 = 97.3 & R_7 = 98.6 & R_8 = 98.6 \end{array}$$

Determine which factors appear to have a significant effect on the response and estimate the method's expected standard deviation.

SOLUTION

To calculate the effect of changing each factor's level we use [equation 14.16](#) and substitute in appropriate values. For example, E_A is

⁷ Youden, W. J. "Statistical Techniques for Collaborative Tests," in *Statistical Manual of the Association of Official Analytical Chemists*, Association of Official Analytical Chemists: Washington, D. C., 1975, p. 35.

$$E_A = \frac{98.9 + 99.0 + 97.5 + 97.7}{4} - \frac{97.4 + 97.3 + 98.6 + 98.6}{4} = 0.30$$

and E_G is

$$E_A = \frac{98.9 + 97.7 + 97.3 + 98.6}{4} - \frac{99.0 + 97.5 + 97.4 + 98.6}{4} = 0.00$$

Completing the remaining calculations and ordering the factors by the absolute values of their effects

Factor D	1.30
Factor A	0.35
Factor E	-0.10
Factor B	0.05
Factor C	-0.05
Factor F	0.05
Factor G	0.00

shows us that the concentration of acid (Factor D) has a substantial effect on the response, with a concentration of 0.05 M providing a much lower percent recovery. The extraction time (Factor A) also appears significant, but its effect is not as important as the acid's concentration. All other factors appear insignificant. The method's estimated standard deviation, from [equation 14.27](#), is

$$s = \sqrt{\frac{2}{7} \left[(1.30)^2 + (0.35)^2 + (-0.10)^2 + (0.05)^2 + (-0.05)^2 + (0.05)^2 + (0.00)^2 \right]} = 0.72$$

which, for an average recovery of 98.1% gives a relative standard deviation of approximately 0.7%. If we control the acid's concentration so that its effect approaches that for factors B, C, and F, then the relative standard deviation becomes 0.18, or approximately 0.2%.

14B.4 Equivalency Testing

If an approved standard method is available, then the new method should be evaluated by comparing results to those obtained with the standard method. Normally this comparison is made at a minimum of three concentrations of analyte to evaluate the new method over a wide dynamic range. Alternatively, we can plot the results using the new method against the results using the approved standard method. A slope of 1.00 and a y -intercept of 0.0 provides evidence that the two methods are equivalent.

14C Validating the Method as a Standard Method

For an analytical method to be useful, an analyst must be able to achieve results of acceptable accuracy and precision. Verifying a method, as described in the previous section, establishes this goal for a single analyst. Another requirement for a useful analytical method is that an analyst should obtain the same result from day to day, and different labs should obtain the same result when analyzing the same sample. The process by which we approve method for general use is known as **VALIDATION** and it involves a collaborative test of the method by analysts in several laboratories. Collaborative testing is used routinely by regulatory agencies and professional organizations, such as the U. S. Environmental Protection Agency, the American Society for Testing and Materials, the Association of Official Analytical Chemists, and the American Public Health Association. Many of the representative methods in earlier chapters are identified by these agencies as validated methods.

When an analyst performs a single analysis on a sample the difference between the experimentally determined value and the expected value is influenced by three sources of error: random errors, systematic errors inherent to the method, and systematic errors unique to the analyst. If the analyst performs enough replicate analyses, then we can plot a distribution of results, as shown in Figure 14.18a. The width of this distribution is described by a standard deviation, providing an estimate of the random errors effecting the analysis. The position of the distribution's mean, \bar{X} , relative to the sample's true value, μ , is determined both by systematic errors inherent to the method and those systematic errors unique to the analyst. For a single analyst there is no way to separate the total systematic error into its component parts.

The goal of a **COLLABORATIVE TEST** is to determine the magnitude of all three sources of error. If several analysts each analyze the same sample one time, the variation in their collective results, as shown in Figure 14.18b, includes contributions from random errors and those systematic errors (biases) unique to the analysts. Without additional information, we cannot separate the standard deviation for this pooled data into the precision of the analysis and the systematic errors introduced by the analysts. We can use the position of the distribution, to detect the presence of a systematic error in the method.

14C.1 Two-Sample Collaborative Testing

The design of a collaborative test must provide the additional information we need to separate random errors from the systematic errors introduced by the analysts. One simple approach—accepted by the Association of Official Analytical Chemists—is to have each analyst analyze two samples that are similar in both their matrix and in their concentration of analyte. To analyze their results we represent each analyst as a single point on a two-sample

[Representative Method 10.1](#) for the determination of iron in water and wastewater, and [Representative Method 10.5](#) for the determination of sulfate in water, are two examples of standard methods validated through collaborative testing.

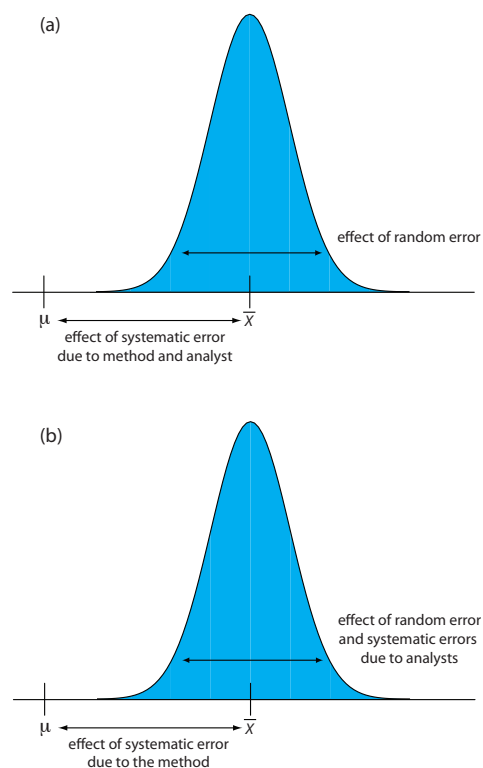


Figure 14.18 Partitioning of random errors, systematic errors due to the analyst, and systematic errors due to the method for (a) replicate analyses performed by a single analyst, and (b) single determinations performed by several analysts.

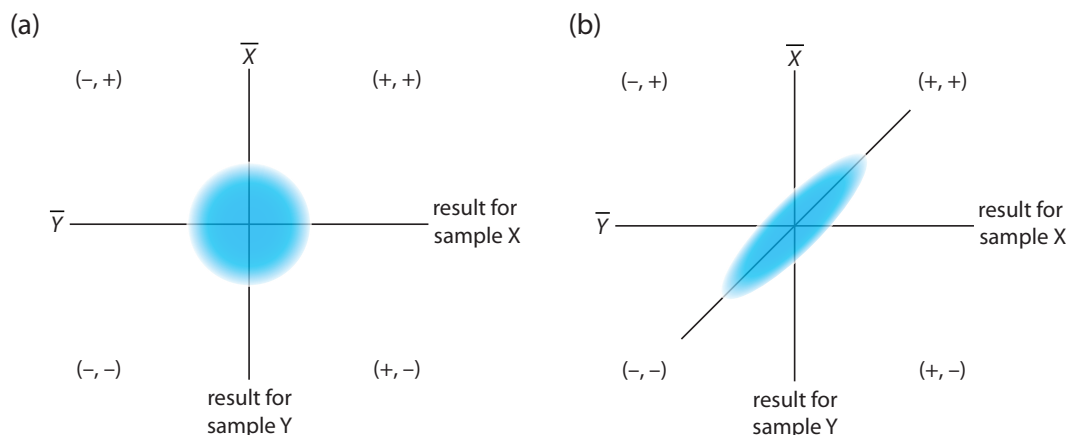


Figure 14.19 Typical two-sample plots when (a) random errors are significantly larger than systematic errors due to the analysts, and (b) when systematic errors due to the analysts are significantly larger than the random errors.

chart, using the result for one sample as the x -coordinate and the result for the other sample as the y -coordinate.⁸

As shown in Figure 14.19, a two-sample chart divides the results into four quadrants, which we identify as $(+, +)$, $(-, +)$, $(-, -)$ and $(+, -)$, where a plus sign indicates that the analyst's result exceeds the mean for all analysts and a minus sign indicates that the analyst's result is smaller than the mean for all analysts. The quadrant $(+, -)$, for example, contains results for analysts that exceeded the mean for sample X and that undershot the mean for sample Y. If the variation in results is dominated by random errors, then we expect the points to be distributed randomly in all four quadrants, with an equal number of points in each quadrant. Furthermore, as shown in Figure 14.19a, the points will cluster in a circular pattern whose center is the mean values for the two samples. When systematic errors are significantly larger than random errors, then the points occur primarily in the $(+, +)$ and the $(-, -)$ quadrants, forming an elliptical pattern around a line bisecting these quadrants at a 45° angle, as seen in Figure 14.19b.

A visual inspection of a two-sample chart is an effective method for qualitatively evaluating the results of analysts and the capabilities of a proposed standard method. If random errors are insignificant, then the points fall on the 45° line. The length of a perpendicular line from any point to the 45° line, therefore, is proportional to the effect of random error on that analyst's results. The distance from the intersection of the axes—corresponding to the mean values for samples X and Y—to the perpendicular projection of a point on the 45° line is proportional to the analyst's systematic error. Figure 14.20 illustrates these relationships. An ideal standard method has small random errors and small systematic errors due to the analysts, and has a compact clustering of points that is more circular than elliptical.

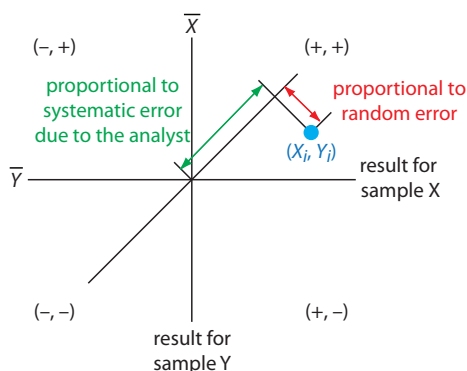


Figure 14.20 Relationship between the result for a single analyst (in blue) and the contribution of random error (red arrow) and the contribution from the analyst's systematic error (green arrow).

⁸ Youden, W. J. "Statistical Techniques for Collaborative Tests," in *Statistical Manual of the Association of Official Analytical Chemists*, Association of Official Analytical Chemists: Washington, D. C., 1975, pp 10–11.

We also can use the data in a two-sample chart to separate the total variation in the data, σ_{tot} , into contributions from random error, σ_{rand} , and systematic errors due to the analysts, σ_{syst} .⁹ Because an analyst's systematic errors are present in his or her analysis of both samples, the difference, D , between the results

$$D_i = X_i - Y_i$$

is the result of random error. To estimate the total contribution from random error we use the standard deviation of these differences, s_D , for all analysts

$$s_D = \sqrt{\frac{\sum (D_i - \bar{D})^2}{2(n-1)}} = s_{\text{rand}} \approx \sigma_{\text{rand}} \quad 14.18$$

where n is the number of analysts. The factor of 2 in the denominator of equation 14.18 is the result of using two values to determine D_i . The total, T , of each analyst's results

$$T_i = X_i + Y_i$$

contains contributions from both random error and twice the analyst's systematic error.

$$\sigma_{\text{tot}}^2 = \sigma_{\text{rand}}^2 + 2\sigma_{\text{syst}}^2 \quad 14.19$$

The standard deviation of the totals, s_T , provides an estimate for σ_{tot} .

$$s_T = \sqrt{\frac{\sum (T_i - \bar{T})^2}{2(n-1)}} = s_{\text{tot}} \approx \sigma_{\text{tot}} \quad 14.20$$

Again, the factor of 2 in the denominator is the result of using two values to determine T_i .

If the systematic errors are significantly larger than the random errors, then s_T is larger than s_D , a hypothesis we can evaluate using a one-tailed F-test

$$F = \frac{s_T^2}{s_D^2}$$

where the degrees of freedom for both the numerator and the denominator are $n-1$. As shown in the following example, if s_T is significantly larger than s_D we can use equation 14.19 to separate σ_{tot}^2 into components representing random error and systematic error.

We double the analyst's systematic error in equation 14.19 because it is the same in each analysis.

For a review of the F -test, see [Section 4F.2](#) and [Section 4F.3](#). [Example 4.18](#) illustrates a typical application.

⁹ Youden, W. J. "Statistical Techniques for Collaborative Tests," in *Statistical Manual of the Association of Official Analytical Chemists*, Association of Official Analytical Chemists: Washington, D. C., 1975, pp 22–24.

Example 14.6

As part of a collaborative study of a new method for determining the amount of total cholesterol in blood, you send two samples to 10 analysts with instructions to analyze each sample one time. The following results, in mg total cholesterol per 100 mL of serum, are returned to you.

analyst	sample 1	sample 2
1	245.0	229.4
2	247.4	249.7
3	246.0	240.4
4	244.9	235.5
5	255.7	261.7
6	248.0	239.4
7	249.2	255.5
8	255.1	224.3
9	255.0	246.3
10	243.1	253.1

Use this data estimate σ_{rand} and σ_{syst} for the method.

SOLUTION

Figure 14.21 provides a two-sample plot of the results. The clustering of points suggests that the systematic errors of the analysts are significant. The vertical line at 245.9 mg/100 mL is the average value for sample 1 and the average value for sample 2 is shown by the horizontal line at 243.5 mg/100 mL. To estimate σ_{rand} and σ_{syst} we first calculate values for D_i and T_i .

analyst	D_i	T_i
1	15.6	474.4
2	-2.3	497.1
3	5.6	486.4
4	9.4	480.4
5	-6.0	517.4
6	8.6	487.4
7	-6.3	504.7
8	0.8	449.4
9	8.7	501.3
10	-10.0	496.2

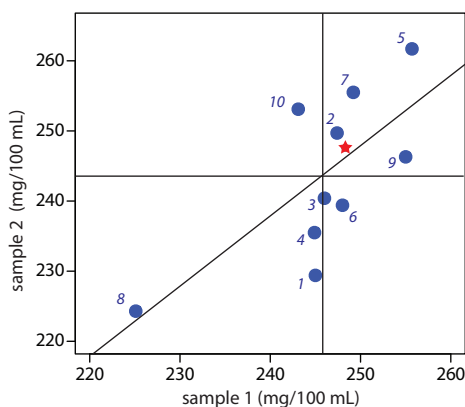


Figure 14.21 Two-sample plot for the data in Example 14.6. The number by each blue point indicates the analyst. The true values for each sample (see Example 14.7) are indicated by the red star.

Next, we calculate the standard deviations for the differences, s_D , and the totals, s_T , using equations 14.18 and 14.20, giving $s_D = 5.95$ and $s_T = 13.3$. To determine if the systematic errors between the analysts are significant, we use an F -test to compare s_T and s_D .

$$F = \frac{s_T^2}{s_D^2} = \frac{(13.3)^2}{(5.95)^2} = 5.00$$

Because the F -ratio is larger than $F(0.05, 9, 9)$, which is 3.179, we conclude that the systematic errors between the analysts are significant at the 95% confidence level. The estimated precision for a single analyst is

$$\sigma_{\text{rand}} \approx s_D = 5.95$$

The estimated standard deviation due to systematic errors between analysts is calculated from [equation 14.18](#).

$$\sigma_{\text{syst}} \approx \sqrt{\frac{\sigma_{\text{tot}}^2 - \sigma_{\text{rand}}^2}{2}} \approx \sqrt{\frac{s_T^2 - s_D^2}{2}} = \sqrt{\frac{(13.3)^2 - (5.95)^2}{2}} = 8.41$$

If the true values for the two samples are known, we also can test for the presence of a systematic error in the method. If there are no systematic method errors, then the sum of the true values, μ_{tot} , for samples X and Y

$$\mu_{\text{tot}} = \mu_X + \mu_Y$$

should fall within the confidence interval around \bar{T} . We can use a two-tailed t -test of the following null and alternate hypotheses

$$H_0 : \bar{T} = \mu_{\text{tot}} \quad H_A : \bar{T} \neq \mu_{\text{tot}}$$

to determine if there is evidence for a systematic error in the method. The test statistic, t_{exp} , is

$$t_{\text{exp}} = \frac{|\bar{T} - \mu_{\text{tot}}| \sqrt{n}}{s_T \sqrt{2}} \quad 14.21$$

with $n-1$ degrees of freedom. We include the $\sqrt{2}$ in the denominator because s_T (see [equation 14.20](#)) underestimates the standard deviation when comparing \bar{T} to μ_{tot} .

Example 14.7

The two samples analyzed in [Example 14.6](#) are known to contain the following concentrations of cholesterol

$$\mu_{\text{samp 1}} = 248.3 \text{ mg/100 mL} \quad \mu_{\text{samp 2}} = 247.6 \text{ mg/100 mL}$$

Determine if there is any evidence for a systematic error in the method at the 95% confidence level.

Critical values for the F -test are in [Appendix 5](#).

For a review of the t -test of an experimental mean to a known mean, see [Section 4E.1](#). [Example 4.16](#) illustrates a typical application.

SOLUTION

Using the data from [Example 14.6](#) and the true values for the samples, we know that s_T is 13.3, and that

$$\bar{T} = \bar{X}_{\text{samp 1}} + \bar{X}_{\text{samp 2}} = 245.9 + 243.5 = 489.4 \text{ mg/100 mL}$$

$$\mu_{\text{tot}} = \mu_{\text{samp 1}} + \mu_{\text{samp 2}} = 248.3 + 247.6 = 495.9 \text{ mg/100 mL}$$

Substituting these values into [equation 14.21](#) gives

$$t_{\text{exp}} = \frac{|489.4 - 495.9| \sqrt{10}}{13.3 \sqrt{2}} = 1.09$$

Because this value for t_{exp} is smaller than the critical value of 2.26 for $t(0.05, 9)$, there is no evidence for a systematic error in the method at the 95% confidence level.

Critical values for the t -test are in [Appendix 4](#).

[Example 14.6](#) and [Example 14.7](#) illustrate how we can use a pair of similar samples in a collaborative test of a new method. Ideally, a collaborative test involves several pairs of samples that span the range of analyte concentrations for which we plan to use the method. In doing so, we evaluate the method for constant sources of error and establish the expected relative standard deviation and bias for different levels of analyte.

14C.2 Collaborative Testing and Analysis of Variance

In a two-sample collaborative test we ask each analyst to perform a single determination on each of two separate samples. After reducing the data to a set of differences, D , and a set of totals, T , each characterized by a mean and a standard deviation, we extract values for the random errors affecting precision and the systematic differences between then analysts. The calculations are relatively simple and straightforward.

An alternative approach for completing a collaborative test is to have each analyst perform several replicate determinations on a single, common sample. This approach generates a separate data set for each analyst, requiring a different statistical treatment to arrive at estimates for σ_{rand} and σ_{syst} .

There are several statistical methods for comparing three or more sets of data. The approach we consider in this section is an **ANALYSIS OF VARIANCE** (ANOVA). In its simplest form, a one-way ANOVA allows us to explore the importance of a single variable—the identity of the analyst is one example—on the total variance. To evaluate the importance of this variable, we compare its variance to the variance explained by indeterminate sources of error.

We first introduced variance in [Chapter 4](#) as one measure of a data set's spread around its central tendency. In the context of an analysis of variance,

Table 14.6 Determination of the %Purity of a Sulfanilamide Preparation by Four Analysts

replicate	analyst A	analyst B	analyst C	analyst D
1	94.09	99.55	95.14	93.88
2	94.64	98.24	94.62	94.23
3	95.08	101.1	95.28	96.05
4	94.54	100.4	94.59	93.89
5	95.38	100.1	94.24	94.95
6	93.62			95.49
\bar{X}	94.56	99.88	95.86	94.77
s	0.630	1.073	0.428	0.899

it is useful for us to understand that variance is simply a ratio of two terms: a sum of squares for the differences between individual values and their mean, and the available degrees of freedom. For example, the variance, s^2 , of a data set consisting of n measurements is

$$s^2 = \frac{\sum (X_i - \bar{X})^2}{n - 1} = \frac{\text{sum of squares}}{\text{degrees of freedom}}$$

where X_i is the value of a single measurement and \bar{X} is the mean. The ability to partition the variance into a sum of squares and the degrees of freedom greatly simplifies the calculations in a one-way ANOVA.

Let's use a simple example to develop the rationale behind a one-way ANOVA calculation. The data in Table 14.6 are from four analysts, each asked to determine the purity of a single pharmaceutical preparation of sulfanilamide. Each column in Table 14.6 provides the results for an individual analyst. To help us keep track of this data, we will represent each result as X_{ij} , where i identifies the analyst and j indicates the replicate. For example, $X_{3,5}$ is the fifth replicate for the third analyst, or 94.24%.

The data in Table 14.6 show variability, both in the results obtained by each analyst and in the difference in the results between the analysts. There are two sources for this variability: indeterminate errors associated with the analytical procedure experienced equally by each analyst, and systematic or determinate errors introduced by individual analysts.

One way to view the data in Table 14.6 is to treat it as a single large sample, characterized by a global mean and a global variance

$$\bar{X} = \frac{\sum_{i=1}^b \sum_{j=1}^{n_i} X_{ij}}{N} \quad 14.22$$

$$s^2 = \frac{\sum_{i=1}^b \sum_{j=1}^{n_i} (X_{ij} - \bar{X})^2}{N - 1} \quad 14.23$$

where b is the total number of samples (in this case the number of analysts), n_i is the number of replicates for the i th sample (in this case the i th analyst), and N is the total number of data points (in this case 22). The global variance—which includes all sources of variability affecting the data—provides an estimate of the combined influence of indeterminate errors and systematic errors.

A second way to work with the data in [Table 14.6](#) is to treat the results for each analyst separately. If we assume that each analyst experiences the same indeterminate errors, then the variance, s^2 , for each analyst provides a separate estimate of σ_{rand}^2 . To pool these individual variances, which we call the **WITHIN-SAMPLE VARIANCE**, s_w^2 , we square the difference between each replicate and its corresponding mean, add them up, and divide by the degrees of freedom.

$$\sigma_{\text{rand}}^2 \approx s_w^2 = \frac{\sum_{i=1}^b \sum_{j=1}^{n_i} (X_{ij} - \bar{X}_i)^2}{N - b} \quad 14.24$$

Equation 14.24 provides an estimate for σ_{rand}^2 . To estimate the systematic errors, σ_{sys}^2 , affecting the results in [Table 14.6](#) we need to consider the differences between the analysts. The variance of the individual mean values about the global mean, which we call the **BETWEEN-SAMPLE VARIANCE**, s_b^2 , provides this estimate.

$$\sigma_{\text{sys}}^2 \approx s_b^2 = \frac{\sum_{i=1}^b n_i (\bar{X}_i - \bar{X})^2}{b - 1} \quad 14.25$$

The between-sample variance includes contributions from both indeterminate errors and systematic errors

$$s_b^2 = \sigma_{\text{rand}}^2 + \bar{n} \sigma_{\text{sys}}^2 \quad 14.26$$

where \bar{n} is the average number of replicates per analyst.

$$\bar{n} = \frac{\sum_{i=1}^b n_i}{b}$$

In a one-way ANOVA of the data in [Table 14.6](#) we make the null hypothesis that there are no significant differences between the mean values for each analyst. The alternative hypothesis is that at least one of the means is significantly different. If the null hypothesis is true, then σ_{sys}^2 must be

Carefully compare our description of equation 14.24 to the equation itself. It is important that you understand why equation 14.24 provides our best estimate of the indeterminate errors affecting the data in [Table 14.6](#). Note that we lose one degree of freedom for each of the b means included in the calculation.

We lose one degree of freedom for the global mean.

Note the similarity between equation 14.26 and [equation 14.19](#). The analysis of the data in a two-sample plot is the same as a one-way analysis of variance with $b=2$.

zero, and s_w^2 and s_b^2 should have similar values. If s_b^2 is significantly greater than s_w^2 , then σ_{sys}^2 is greater than zero. In this case we must accept the alternative hypothesis that there is a significant difference between the means for the analysts. The test statistic is the F -ratio

$$F_{\text{exp}} = \frac{s_b^2}{s_w^2}$$

which is compared to the critical value $F(\alpha, h-1, N-h)$. This is a one-tailed significance test because we are only interested in whether s_b^2 is significantly greater than s_w^2 .

Both s_b^2 and s_w^2 are easy to calculate for small data sets. For larger data sets, calculating s_w^2 is tedious. We can simplify the calculations by taking advantage of the relationship between the sum-of-squares terms for the global variance (equation 14.23), the within-sample variance (equation 14.24), and the between-sample variance (equation 14.25). We can split the numerator of equation 14.23, which is the total sum-of-squares, SS_t , into two terms

$$SS_t = SS_w + SS_b$$

where SS_w is the sum-of-squares for the within-sample variance and SS_b is the sum-of-squares for the between-sample variance. Calculating SS_t and SS_b gives SS_w by difference. Finally, dividing SS_w and SS_b by their respective degrees of freedom gives s_w^2 and s_b^2 . Table 14.7 summarizes the equations for a one-way ANOVA calculation. Example 14.8 walks you through the calculations, using the data in Table 14.6. Section 14E provides instructions on using Excel and R to complete a one-way analysis of variance.

Problem 14.17 in the end of chapter problems asks you to verify this relationship between the sum-of-squares.

Table 14.7 Summary of Calculations for a One-Way Analysis of Variance

source	sum-of-squares	degrees of freedom	variance	expected variance	F-ratio
between samples	$SS_b = \sum_{i=1}^h n_i (\bar{X}_i - \bar{\bar{X}})^2$	$h-1$	$s_b^2 = \frac{SS_b}{h-1}$	$s_b^2 = \sigma_{\text{rand}}^2 + \bar{n}\sigma_{\text{sys}}^2$	$F_{\text{exp}} = \frac{s_b^2}{s_w^2}$
within samples	$SS_t = SS_w + SS_b$	$N-h$	$s_w^2 = \frac{SS_w}{N-h}$	$s_w^2 = \sigma_{\text{rand}}^2$	
total	$SS_t = \sum_{i=1}^h \sum_{j=1}^{n_i} (X_{ij} - \bar{\bar{X}})^2$ $= \bar{s}^2(N-1)$	$N-1$			

Example 14.8

The data in [Table 14.6](#) are from four analysts, each asked to determine the purity of a single pharmaceutical preparation of sulfanilamide. Determine if the difference in their results is significant at $\alpha = 0.05$. If such a difference exists, estimate values for σ_{rand}^2 and σ_{sys}^2 .

SOLUTION

To begin we calculate the global mean ([equation 14.22](#)) and the global variance ([equation 14.23](#)) for the pooled data, and the means for each analyst; these values are summarized here.

$$\begin{aligned} \bar{X} &= 95.87 & s^2 &= 5.506 \\ \bar{X}_A &= 94.56 & \bar{X}_B &= 99.88 & \bar{X}_C &= 94.77 & \bar{X}_D &= 94.75 \end{aligned}$$

Using these values we calculate the total sum of squares

$$SS_t = s^2(N - 1) = (5.506)(22 - 1)$$

the between sample sum of squares

$$\begin{aligned} SS_b &= \sum_{i=1}^h n_i (\bar{X}_i - \bar{X})^2 = 6(94.56 - 95.87)^2 \\ &+ 5(99.88 - 95.87)^2 + 5(94.77 - 95.87)^2 \\ &+ 6(94.75 - 95.87)^2 = 104.27 \end{aligned}$$

and the within sample sum of squares

$$SS_w = SS_t - SS_b = 115.63 - 104.27 = 11.36$$

The remainder of the necessary calculations are summarized in the following table.

source	sum-of-squares	degrees of freedom	variance
between samples	104.27	$h - 1 = 4 - 1 = 3$	34.76
within samples	11.36	$N - h = 22 - 4 = 18$	0.631

Comparing the variances we find that

$$F_{\text{exp}} = \frac{s_b^2}{s_w^2} = \frac{34.76}{0.631} = 55.08$$

Because F_{exp} is greater than $F(0.05, 3, 18)$, which is 3.16, we reject the null hypothesis and accept the alternative hypothesis that the work of at least one analyst is significantly different from the remaining analysts. Our best estimate of the within sample variance is

$$\sigma_{\text{rand}}^2 \approx s_w^2 = 0.631$$

and our best estimate of the between sample variance is

$$\sigma_{\text{sys}}^2 \approx \frac{s_b^2 - s_w^2}{\bar{n}} = \frac{34.76 - 0.631}{22 / 4} = 6.205$$

In this example the variance due to systematic differences between the analysts is almost an order of magnitude greater than the variance due to the method's precision.

Having demonstrated that there is significant difference between the analysts, we can use a modified version of the t -test, known as **FISHER'S LEAST SIGNIFICANT DIFFERENCE**, to determine which analyst or analysts are responsible for the difference. The test statistic for comparing two mean values is the t -test given in [equation 4.21](#) in Chapter 4, except we replace the pooled standard deviation, s_{pool} , by the square root of the within-sample variance from the analysis of variance.

$$t_{\text{exp}} = \frac{|\bar{X}_1 - \bar{X}_2|}{\sqrt{s_w^2} \sqrt{\frac{1}{n_A} + \frac{1}{n_B}}} = \frac{|\bar{X}_1 - \bar{X}_2|}{\sqrt{s_w^2}} \times \sqrt{\frac{n_A n_B}{n_A + n_B}} \quad 14.27$$

We compare t_{exp} to its critical value $t(\alpha, \nu)$ using the same significance level as the ANOVA calculation. The degrees of freedom are the same as that for the within sample variance. Since we are interested in whether the larger of the two means is significantly greater than the other mean, the value of $t(\alpha, \nu)$ is that for a one-tailed significance test.

Example 14.9

In [Example 14.8](#) we showed that there is a significant difference between the work of the four analysts in [Table 14.6](#). Determine the source of this significant difference.

SOLUTION

Individual comparisons using Fisher's least significant difference test are based on the following null hypothesis and the appropriate one-tailed alternative hypothesis.

$$H_0 : \bar{X}_i = \bar{X}_j \quad H_A : \text{one of the following } \bar{X}_i > \bar{X}_j \text{ or } \bar{X}_i < \bar{X}_j$$

Using equation 14.27 we calculate values of t_{exp} for each possible comparison and compare them to the one-tailed critical value of 1.73 for $t(0.05, 18)$. For example, t_{exp} for analysts A and B is

You might ask why we bother with the analysis of variance if we are planning to use a t -test to compare pairs of analysts. Each t -test carries a probability, α , of claiming that a difference is significant even though it is not (a type 1 error). If we set α to 0.05 and complete six t -tests, the probability of a type 1 error increases to 0.265. Knowing that there is a significant difference within a data set—what we gain from the analysis of variance—protects the t -test.

$$(t_{\text{exp}})_{A,B} = \frac{|\bar{X}_1 - \bar{X}_2|}{\sqrt{s_w^2}} \times \sqrt{\frac{n_A n_B}{n_A + n_B}} = \frac{|94.56 - 99.88|}{\sqrt{0.631}} \times \sqrt{\frac{6 \times 5}{6 + 5}} = 11.06$$

We know that analyst B's result is significantly different than the results for analysts A, C, and D, and that we have no evidence that there is any significant difference between the results of analysts A, C, and D. We do not know if analyst B's results is accurate, or if the results of analysts A, C, and D are accurate. In fact, it is possible that none of the results in [Table 14.6](#) are accurate.

Because $(t_{\text{exp}})_{A,B}$ is greater than $t(0.05, 18)$ we reject the null hypothesis and accept the alternative hypothesis that the results for analyst B are significantly greater than those for analyst A. Continuing with the other pairs it is easy to show that $(t_{\text{exp}})_{A,C}$ is 0.437, $(t_{\text{exp}})_{A,D}$ is 0.414, $(t_{\text{exp}})_{B,C}$ is 10.17, $(t_{\text{exp}})_{B,D}$ is 10.67, and $(t_{\text{exp}})_{C,D}$ is 0.04. Collectively, these results suggest that there is a significant systematic difference between the work of analyst B and the work of the other analysts. There is no way to decide whether any of the four analysts has done accurate work.

We can extend an analysis of variance to systems involving more than a single variable. For example, we can use a two-way ANOVA to determine the effect on an analytical method of both the analyst and the instrumentation. The treatment of multivariate ANOVA is beyond the scope of this text, but is covered in several of the texts listed in this chapter's additional resources.

14C.3 What is a Reasonable Result for a Collaborative Study?

Collaborative testing provides us with a method for estimating the variability (or reproducibility) between analysts in different labs. If the variability is significant, we can determine what portion is due to indeterminate method errors (σ_{rand}^2) and what portion is due to systematic differences between the analysts (σ_{syst}^2). What we have left unanswered is the following important question: What is a reasonable value for a method's reproducibility?

An analysis of nearly 10 000 collaborative studies suggests that a reasonable estimate for a method's reproducibility is

$$R = 2^{(1-0.5 \log C)} \quad 14.28$$

where R is the percent relative standard deviation for the results included in the collaborative study and C is the fractional amount of analyte in the sample on a weight-to-weight basis.¹⁰ Equation 14.28 appears to be independent of the type of analyte, the type of matrix, and the method of analysis. For example, when a sample in a collaborative study contains 1 microgram of analyte per gram of sample, C is 10^{-6} and the estimated relative standard deviation is

$$R = 2^{(1-0.5 \log 10^{-6})} = 16\%$$

For a discussion of the limitations of equation 14.28, see Linsinger, T. P. J.; Josephs, R. D. "Limitations of the Application of the Horwitz Equation," *Trends Anal. Chem.* **2006**, *25*, 1125–1130, as well as a rebuttal (Thompson, M. "Limitations of the Application of the Horwitz Equation: A Rebuttal," *Trends Anal. Chem.* **2007**, *26*, 659–661) and response (Linsinger, T. P. J.; Josephs, R. D. "Reply to Professor Michael Thompson's Rebuttal," *Trends Anal. Chem.* **2007**, *26*, 662–663).

¹⁰ (a) Horwitz, W. *Anal. Chem.* **1982**, *54*, 67A–76A; (b) Hall, P.; Selinger, B. *Anal. Chem.* **1989**, *61*, 1465–1466; (c) Albert, R.; Horwitz, W. *Anal. Chem.* **1997**, *69*, 789–790, (d) "The Amazing Horowitz Function," *AMC Technical Brief* **17**, July 2004; (e) Linsinger, T. P. J. *Trends Anal. Chem.* **2006**, *25*, 1125

Example 14.10

What is the estimated relative standard deviation for the results of a collaborative study when the sample is pure analyte (100% w/w analyte)? Repeat for the case where the analyte's concentration is 0.1% w/w.

SOLUTION

When the sample is 100% w/w analyte ($C = 1$) the estimated relative standard deviation is

$$R = 2^{(1-0.5\log 1)} = 2\%$$

We expect that approximately 67% of the participants in the collaborative study ($\pm 1\sigma$) will report the analyte's concentration within the range of 98% w/w to 102% w/w. If the analyte's concentration is 0.1% w/w ($C = 0.001$), the estimated relative standard deviation is

$$R = 2^{(1-0.5\log 0.001)} = 5.7\%$$

and we expect that 67% of the analysts will report the analyte's concentration within the range of 0.094% w/w to 0.106% w/w.

For a normal distribution, 68.26% of the results fall within $\pm 1s$ of the population's mean (see Table 4.12).

Of course, [equation 14.28](#) only estimates the expected relative standard. If the method's relative standard deviation falls with a range of one-half to twice the estimated value, then it is acceptable for use by analysts in different laboratories. The percent relative standard deviation for a single analyst should be one-half to two-thirds of that for the variability between analysts.

14D Using Excel and R for an Analysis of Variance

Although the calculations for an analysis of variance are relatively straightforward, they can be tedious for large data sets. Both Excel and R include functions for completing an analysis of variance. In addition, R provides a function for identifying the source(s) of significant differences within the data set.

14D.1 Excel

Excel's Analysis ToolPak includes a tool to help you complete an analysis of variance. Let's use the ToolPak to complete an analysis of variance on the data in [Table 14.6](#). Enter the data from [Table 14.6](#) into a spreadsheet as shown in [Figure 14.22](#). To complete the analysis of variance select **Data Analysis...** from the **Tools** menu, which opens a window entitled "Data Analysis." Scroll through the window, select **Analysis: Single Factor** from the available options, and click **OK**. Place the cursor in the box for the "Input range" and then click and drag over the cells B1:E7. Select the radio button for "Grouped by: columns" and check the box for "Labels in the first

	A	B	C	D	E
1	replicate	analyst A	analyst B	analyst C	analyst D
2	1	94.09	99.55	95.14	93.88
3	2	94.64	98.24	94.62	94.23
4	3	95.08	101.1	95.28	96.05
5	4	94.54	100.4	94.59	93.89
6	5	95.38	100.1	94.24	94.59
7	6	93.62			95.49

Figure 14.22 Portion of a spreadsheet containing the data from [Table 14.6](#).

row.” In the box for “Alpha” enter 0.05 for α . Select the radio button for “Output range,” place the cursor in the box and click on an empty cell; this is where Excel will place the results. Clicking **OK** generates the information shown in Figure 14.23. The small value of 3.05×10^{-9} for falsely rejecting the null hypothesis indicates that there is a significant source of variation between the analysts.

14D.2 R

To complete an analysis of variance for the data in [Table 14.6](#) using R, we first need to create several objects. The first object contains each result from [Table 14.6](#).

```
> results=c(94.090, 94.640, 95.008, 94.540, 95.380, 93.620,
99.550, 98.240, 101.100, 100.400, 100.100, 95.140, 94.620,
95.280, 94.590, 94.240, 93.880, 94.230, 96.050, 93.890,
94.950, 95.490)
```

The second object contains labels to identify the source of each entry in the first object. The following code creates this object.

```
> analyst = c(rep("a",6), rep("b",5), rep("c",5), rep("d",6))
```

You can arrange the results in any order. In creating this object, I choose to list the results for analyst A, followed by the results for analyst B, C, and D.

The command **rep** (for repeat) has two variables: the item to repeat and the number of times it is repeated. The object analyst is the vector (“a”, “a”, “a”, “a”, “a”, “a”, “b”, “b”, “b”, “b”, “b”, “c”, “c”, “c”, “c”, “c”, “d”, “d”, “d”, “d”, “d”, “d”).

Anova: Single Factor						
SUMMARY						
Groups	Count	Sum	Average	Variance		
analyst A	6	567.35	94.5583333	0.41081667		
analyst B	5	499.39	99.878	1.15142		
analyst C	5	473.87	94.774	0.18318		
analyst D	6	568.49	94.7483333	0.80889667		
ANOVA						
Source of Variation	SS	df	MS	F	P-value	F crit
Between Groups	104.197961	3	34.7326535	54.6637742	3.0463E-09	3.1599076
Within Groups	11.4369667	18	0.63538704			
Total	115.634927	21				

Figure 14.23 Output from Excel’s one-way analysis of variance of the data in [Table 14.6](#). The summary table provides the mean and variance for each analyst. The ANOVA table summarizes the sum-of-squares terms (*SS*), the degrees of freedom (*df*), the variances (*MS* for mean square), the value of F_{exp} and the critical value of F , and the probability of incorrectly rejecting the null hypothesis that there is no significant difference between the analysts.

```
> anova(lm(results ~ labels, data = df))

Analysis of Variance Table

Response: results
      Df  Sum Sq  Mean Sq  F value  Pr(>F)
labels  3  104.198  34.733   54.664  3.04e-09 ***
Residuals 18   11.366   0.631
---
Signif. codes:  0 '***' 0.001 '**' 0.01 '*' 0.05 '.' 0.1 ' ' 1
```

Figure 14.24 Output of an R session for an analysis of variance for the data in [Table 14.6](#). In the table, “labels” is the between-sample variance and “residuals” is the within-sample variance. The p-value of $3.04e-09$ is the probability of incorrectly rejecting the null hypothesis that the within-sample and between-sample variances are the same.

Next, we combine the two objects into a table with two columns, one containing the data (*results*) and one containing the labels (*analyst*).

```
> df = data.frame(results, labels = factor(analyst))
```

The command **factor** indicates that the object *analyst* contains the categorical factors for the analysis of variance. The command for an analysis of variance takes the following form

```
anova(lm(data ~ factors), data = data.frame)
```

where *data* and *factors* are the columns containing the data and the categorical factors, and *data.frame* is the name we assigned to the data table. [Figure 14.24](#) shows the output for an analysis of variance of the data in [Table 14.6](#). The small value of 3.04×10^{-9} for falsely rejecting the null hypothesis indicates that there is a significant source of variation between the analysts.

Having found a significant difference between the analysts, we want to identify the source of this difference. R does not include Fisher’s least significant difference test, but it does include a function for a related method called Tukey’s honest significant difference test. The command for this test takes the following form

```
> TukeyHSD(aov(lm(data ~ factors), data = data.frame), conf,
  level = 0.95)
```

where *data* and *factors* are the columns containing the data and the categorical factors, and *data.frame* is the name we assigned to the data table. [Figure 14.25](#) shows the output of this command and its interpretation. The small probability values when comparing analyst B to each of the other analysts indicates that this is the source of the significant difference identified in the analysis of variance.

We call this table a data frame. Many functions in R work on the columns in a data frame.

The command **lm** stands for linear model. See [Section 5E.2](#) in Chapter 5 for a discussion of linear models in R.

You may recall that an underlined command is the default value. If are using an α of 0.05 (a 95% confidence level), then you do not need to include the entry for `conf.level`. If you wish to use an α of 0.10, then enter `conf.level = 0.90`.

Note that *p* value is small when the confidence interval for the difference includes zero.

```
> TukeyHSD(aov(results ~ labels, data = df))

Tukey multiple comparisons of means
 95% family-wise confidence level

Fit: aov(formula = results ~ labels, data = df)

$labels
      diff      lwr      upr      p adj
b-a  5.31966667  3.928277  6.711057  0.0000000
c-a  0.21566667 -1.175723  1.607057  0.9710635
d-a  0.28000000 -1.046638  1.606638  0.9318110
c-b -5.10400000 -6.557260 -3.650740  0.0000001
d-b -5.03966667 -6.431057 -3.648277  0.0000000
d-c  0.06433333 -1.327057  1.455723  0.9991718
```

Figure 14.25 Output of an R session for a Tukey honest significance difference test for the data in [Table 14.6](#). For each possible comparison of analysts, the table gives the actual difference between the analysts, “diff,” and the smallest, “lwr,” and the largest, “upr,” differences for a 95% confidence interval. The “p adj” is the probability that a difference of zero falls within this confidence interval. The smaller the p-value, the greater the probability that the difference between the analysts is significant.

As you review this chapter, try to define a key term in your own words. Check your answer by clicking on the key term, which will take you to the page where it was first introduced. Clicking on the **KEY TERM** there, will bring you back to this page so that you can continue with another key term.

14E Key Terms

2^k factorial design	analysis of variance	between-sample variance
blind analysis	central composite design	collaborative testing
dependent	effective	efficiency
empirical model	factor	factor level
Fisher's least significant difference	fixed-size simplex optimization	global optimum
independent	local optimum	one-factor-at-a-time optimization
response	response surface	ruggedness testing
searching algorithm	simplex	standard method
theoretical model	validation	variable-sized simplex optimization
within-sample variance		

14F Summary

One of the goals of analytical chemistry is to develop new analytical methods that are accepted as standard methods. In this chapter we have considered how a standard method is developed, including finding the optimum experimental conditions, verifying that the method produces acceptable precision and accuracy, and validating the method for general use.

To optimize a method we try to find the combination of experimental parameters producing the best result or response. We can visualize this

process as being similar to finding the highest point on a mountain. In this analogy, the mountain's topography corresponds to a response surface, which is a plot of the system's response as a function of the factors under our control.

One method for finding the optimum response is to use a searching algorithm. In a one-factor-at-a-time optimization, we change one factor, while holding constant all other factors until there is no further improvement in the response. The process continues with the next factor, cycling through the factors until there is no further improvement in the response. This approach to finding the optimum response is often effective, but not efficient. A searching algorithm that is both effective and efficient is a simplex optimization, the rules of which allow us to change the levels of all factors simultaneously.

Another approach to optimizing a method is to develop a mathematical model of the response surface. Such models can be theoretical, in that they are derived from a known chemical and physical relationship between the response and its factors. Alternatively, we can develop an empirical model, which does not have a firm theoretical basis, by fitting an empirical equation to our experimental data. One approach is to use a 2^k factorial design in which each factor is tested at both a high level and a low level, and paired with the high level and the low level for all other factors.

After optimizing a method it is necessary to demonstrate that it can produce acceptable results. Verifying a method usually includes establishing single-operator characteristics, the blind analysis of standard samples, and determining the method's ruggedness. Single-operator characteristics include the method's precision, accuracy, and detection limit when used by a single analyst. To test against possible bias on the part of the analyst, he or she analyzes a set of blind samples in which the analyst does not know the concentration of analyte. Finally, we use ruggedness testing to determine which experimental factors must be carefully controlled to avoid unexpectedly large determinate or indeterminate sources of error.

The last step in establishing a standard method is to validate its transferability to other laboratories. An important step in the process of validating a method is collaborative testing, in which a common set of samples is analyzed by different laboratories. In a well-designed collaborative test it is possible to establish limits for the method's precision and accuracy.

14G Problems

1. For each of the following equations determine the optimum response using the one-factor-at-a-time searching algorithm. Begin the search at (0,0) by first changing factor A, using a step-size of 1 for both factors. The boundary conditions for each response surface are $0 \leq A \leq 10$ and $0 \leq B \leq 10$. Continue the search through as many cycles as neces-

Note: These equations are from Deming, S. N.; Morgan, S. L. *Experimental Design: A Chemometric Approach*, Elsevier: Amsterdam, 1987, and pseudo-three dimensional plots of the response surfaces can be found in their Figures 11.4, 11.5 and 11.14.

sary until you find the optimum response. Compare your optimum response for each equation to the true optimum.

$$(a) R = 1.68 + 0.24A + 0.56B - 0.04A^2 - 0.04B^2 \quad \mu_{\text{opt}} = (3, 7)$$

$$(b) R = 4.0 - 0.4A + 0.08B \quad \mu_{\text{opt}} = (10, 10)$$

$$(c) R = 3.264 + 1.537A + 0.5664B - 0.1505A^2 - 0.02734B^2 - 0.05785AB \quad \mu_{\text{opt}} = (391, 6.22)$$

- Determine the optimum response for the equation in Problem 1c, using the fixed-sized simplex searching algorithm. Compare your optimum response to the true optimum.
- Show that [equation 14.3](#) and [equation 14.4](#) are correct.
- A 2^k factorial design was used to determine the equation for the response surface in Problem 1b. The uncoded levels, coded levels, and the responses are shown in the following table.

A	B	A^*	B^*	response
8	8	+1	+1	5.92
8	2	+1	-1	2.08
2	8	-1	+1	4.48
2	2	-1	-1	3.52

Determine the uncoded equation for the response surface.

- Koscielniak and Parczewski investigated the influence of Al on the determination of Ca by atomic absorption spectrophotometry using the 2^k factorial design shown in the following table.¹¹

Ca^{2+} (ppm)	Al^{3+} (ppm)	Ca^*	Al^*	response
10	160	+1	+1	54.92
10	0	+1	-1	98.44
4	160	-1	+1	19.18
4	0	-1	-1	38.52

- Determine the uncoded equation for the response surface.
- If you wish to analyze a sample that is 6.0 ppm Ca^{2+} , what is the maximum concentration of Al^{3+} that can be present if the error in the response must be less than 5.0%?

¹¹ Koscielniak, P.; Parczewski, A. *Anal. Chim. Acta* **1983**, *153*, 111–119.

6. Strange reports the following information for a 2^3 factorial design used to investigate the yield of a chemical process.¹²

factor	high (+1) level	low (-1) level
X: temperature	140 °C	120 °C
Y: catalyst	type B	type A
Z: [reactant]	0.50 M	0.25 M

run	X^*	Y^*	Z^*	% yield
1	-1	-1	-1	28
2	+1	-1	-1	17
3	-1	+1	-1	41
4	+1	+1	-1	34
5	-1	-1	+1	56
6	+1	-1	+1	51
7	-1	+1	+1	42
8	+1	+1	+1	36

- (a) Determine the coded equation for this data.
- (b) If β terms of less than ± 1 are insignificant, what main effects and interaction terms in the coded equation are important? Write down this simpler form for the coded equation.
- (c) Explain why the coded equation for this data can not be transformed into an uncoded form.
- (d) Which is the better catalyst, A or B?
- (e) What is the yield using this catalyst if the temperature is set to 125 °C and the concentration of the reactant is 0.45 M?
7. Pharmaceutical tablets coated with lactose often develop a brown discoloration. The primary factors affecting the discoloration are temperature, relative humidity, and the presence of a base acting as a catalyst. The following data have been reported for a 2^3 factorial design.¹³

factor	high (+1) level	low (-1) level
X: benzocaine	present	absent
Y: temperature	40 °C	25 °C
Z: relative humidity	75%	50%

¹² Strange, R. S. *J. Chem. Educ.* **1990**, *67*, 113–115.

¹³ Armstrong, N. A.; James, K. C. *Pharmaceutical Experimental Design and Interpretation*, Taylor and Francis: London, 1996 as cited in Gonzalez, A. G. *Anal. Chim. Acta* **1998**, *360*, 227–241.

run	X^*	Y^*	Z^*	color (arb. units)
1	-1	-1	-1	1.55
2	+1	-1	-1	5.40
3	-1	+1	-1	3.50
4	+1	+1	-1	6.75
5	-1	-1	+1	2.45
6	+1	-1	+1	3.60
7	-1	+1	+1	3.05
8	+1	+1	+1	7.10

- (a) Determine the coded equation for this data.
- (b) If β terms of less than 0.5 are insignificant, what main effects and interaction terms in the coded equation are important? Write down this simpler form for the coded equation.
8. The following data for a 2^3 factorial design were collected during a study of the effect of temperature, pressure, and residence time on the % yield of a reaction.¹⁴

factor	high (+1) level	low (-1) level
X: temperature	200 °C	100 °C
Y: pressure	0.6 MPa	0.2 MPa
Z: residence time	20 min	10 min

run	X^*	Y^*	Z^*	percent yield
1	-1	-1	-1	2
2	+1	-1	-1	6
3	-1	+1	-1	4
4	+1	+1	-1	8
5	-1	-1	+1	10
6	+1	-1	+1	18
7	-1	+1	+1	8
8	+1	+1	+1	12

- (a) Determine the coded equation for this data.

¹⁴ Akhnazarova, S.; Kafarov, V. *Experimental Optimization in Chemistry and Chemical Engineering*, MIR Publishers: Moscow, 1982 as cited in Gonzalez, A. G. *Anal. Chim. Acta* **1998**, *360*, 227–241.

- (b) If β terms of less than 0.5 are insignificant, what main effects and interaction terms in the coded equation are important? Write down this simpler form for the coded equation.
- (c) Three runs at the center of the factorial design—a temperature of 150 °C, a pressure of 0.4 MPa, and a residence time of 15 min—give percent yields of 12%, 8%, 9%, and 8.8%. Determine if a first-order empirical model is appropriate for this system at $\alpha=0.05$.
9. Duarte and colleagues used a factorial design to optimize a flow-injection analysis method for determining penicillin.¹⁵ Three factors were studied: reactor length, carrier flow rate, and sample volume, with the high and low values summarized in the following table.

factor	high (+1) level	low (-1) level
X: reactor length	1.5 cm	2.0 cm
Y: carrier flow rate	1.6 mL/min	2.2 mL/min
Z: sample volume	100 μ L	150 μ L

The authors determined the optimum response using two criteria: the greatest sensitivity, as determined by the change in potential for the potentiometric detector, and the largest sampling rate. The following table summarizes their optimization results.

run	X^*	Y^*	Z^*	ΔE (mV)	samples/h
1	-1	-1	-1	37.45	21.5
2	+1	-1	-1	31.70	26.0
3	-1	+1	-1	32.10	30.0
4	+1	+1	-1	27.20	33.0
5	-1	-1	+1	39.85	21.0
6	+1	-1	+1	32.85	19.5
7	-1	+1	+1	35.00	30.0
8	+1	+1	+1	32.15	34.0

- (a) Determine the coded equation for the response surface where ΔE is the response.
- (b) Determine the coded equation for the response surface where sample/h is the response.
- (c) Based on the coded equations, do conditions favoring sensitivity also improve the sampling rate?
- (c) What conditions would you choose if your goal is to optimize both sensitivity and sampling rate?

15 Duarte, M. M. M. B.; de O. Netto, G.; Kubota, L. T.; Filho, J. L. L.; Pimentel, M. F.; Lima, F.; Lins, V. *Anal. Chim. Acta* **1997**, *350*, 353–357.

10. Here is a challenge! McMinn, Eatherton, and Hill investigated the effect of five factors for optimizing an H₂-atmosphere flame ionization detector using a 2⁵ factorial design.¹⁶ The factors and their levels were

factor	high (+1) level	low (-1) level
A: H ₂ flow rate	1460 mL/min	1382 mL/min
B: SiH ₄	20.0 ppm	12.2 ppm
C: O ₂ +N ₂ flow rate	255 mL/min	210 mL/min
D: O ₂ /N ₂	1.36	1.19
E: electrode height	75 (arb. unit)	55 (arb. unit)

The coded (“+” = +1, “-” = -1) factor levels and responses, *R*, for the 32 experiments are shown in the following table

run	A*	B*	C*	D*	E*	run	A*	B*	C*	D*	E*
1	-	-	-	-	-	17	-	-	-	-	+
2	+	-	-	-	-	18	+	-	-	-	+
3	-	+	-	-	-	19	-	+	-	-	+
4	+	+	-	-	-	20	+	+	-	-	+
5	-	-	+	-	-	21	-	-	+	-	+
6	+	-	+	-	-	22	+	-	+	-	+
7	-	+	+	-	-	23	-	+	+	-	+
8	+	+	+	-	-	24	+	+	+	-	+
9	-	-	-	+	-	25	-	-	-	+	+
10	+	-	-	+	-	26	+	-	-	+	+
11	-	+	-	+	-	27	-	+	-	+	+
12	+	+	-	+	-	28	+	+	-	+	+
13	-	+	+	+	-	29	-	-	+	+	+
14	+	-	+	+	-	30	+	-	+	+	+
15	-	+	+	+	-	31	-	+	+	+	+
16	+	+	+	+	-	32	+	+	+	+	+

- (a) Determine the coded equation for this response surface, ignoring β terms less than ± 0.03 .
- (b) A simplex optimization of this system finds optimal values for the factors of $A = 2278$ mL/min, $B = 9.90$ ppm, $C = 260.6$ mL/min, and $D = 1.71$. The value of E was maintained at its high level. Are these values consistent with your analysis of the factorial design.

¹⁶ McMinn, D. G.; Eatherton, R. L.; Hill, H. H. *Anal. Chem.* **1984**, *56*, 1293–1298.

11. A good empirical model provides an accurate picture of the response surface over the range of factor levels within the experimental design. The same model, however, may yield an inaccurate prediction for the response at other factor levels. For this reason, an empirical model, is tested before extrapolating to conditions other than those used in determining the model. For example, Palasota and Deming studied the effect of the relative amounts of H_2SO_4 and H_2O_2 on the absorbance of solutions of vanadium using the following central composite design.¹⁷

run	drops 1% H_2SO_4	drops 20% H_2O_2
1	15	22
2	10	20
3	20	20
4	8	15
5	15	15
6	15	15
7	15	15
8	15	15
9	22	15
10	10	10
11	20	10
12	15	8

The reaction of H_2SO_4 and H_2O_2 generates a red-brown solution whose absorbance is measured at a wavelength of 450 nm. A regression analysis on their data yielded the following uncoded equation for the response (absorbance \times 1000).

$$R = 835.90 - 36.82X_1 - 21.34X_2 + 0.52(X_1)^2 + 0.15(X_2)^2 + 0.98X_1X_2$$

where X_1 is the drops of H_2O_2 , and X_2 is the drops of H_2SO_4 . Calculate the predicted absorbances for 10 drops of H_2O_2 and 0 drops of H_2SO_4 , 0 drops of H_2O_2 and 10 drops of H_2SO_4 , and for 0 drops of each reagent. Are these results reasonable? Explain. What does your answer tell you about this empirical model?

12. A newly proposed method is to be tested for its single-operator characteristics. To be competitive with the standard method, the new method must have a relative standard deviation of less than 10%, with a bias of less than 10%. To test the method, an analyst performs 10 replicate analyses on a standard sample known to contain 1.30 ppm of analyte. The results for the 10 trials are

¹⁷ Palasota, J. A.; Deming, S. N. *J. Chem. Educ.* **1992**, *62*, 560–563.

1.25 1.26 1.29 1.56 1.46 1.23 1.49 1.27 1.31 1.43

Are the single-operator characteristics for this method acceptable?

13. A proposed gravimetric method was evaluated for its ruggedness by varying the following factors.

Factor A: sample size	$A = 1 \text{ g}$	$a = 1.1 \text{ g}$
Factor B: pH	$B = 6.5$	$b = 6.0$
Factor C: digestion time	$C = 3 \text{ h}$	$c = 1 \text{ h}$
Factor D: number rinses	$D = 3$	$d = 5$
Factor E: precipitant	$E = \text{reagent 1}$	$e = \text{reagent 2}$
Factor F: digestion temperature	$F = 50^\circ\text{C}$	$f = 60^\circ\text{C}$
Factor G: drying temperature	$G = 110^\circ\text{C}$	$g = 140^\circ\text{C}$

A standard sample containing a known amount of analyte was carried through the procedure using the experimental design in [Table 14.5](#). The percentage of analyte actually found in the eight trials were found to be

$$\begin{array}{cccc} R_1 = 98.9 & R_2 = 98.5 & R_3 = 97.7 & R_4 = 97.0 \\ R_5 = 98.8 & R_6 = 98.5 & R_7 = 97.7 & R_8 = 97.3 \end{array}$$

Determine which factors, if any, appear to have a significant affect on the response, and estimate the expected standard deviation for the method.

14. The two-sample plot for the data in [Example 14.6](#) is shown in [Figure 14.21](#). Identify the analyst whose work is (a) the most accurate, (b) the most precise, (c) the least accurate, and (d) the least precise.
15. Chichilo reports the following data for the determination of the %w/w Al in two samples of limestone.¹⁸

analyst	sample 1	sample 2
1	1.35	1.57
2	1.35	1.33
3	1.34	1.47
4	1.50	1.60
5	1.52	1.62

¹⁸ Chichilo, P. J. *J. Assoc. Offic. Agr. Chemists* **1964**, *47*, 1019 as reported in Youden, W. J. "Statistical Techniques for Collaborative Tests," in *Statistical Manual of the Association of Official Analytical Chemists*, Association of Official Analytical Chemists: Washington, D. C., 1975

6	1.39	1.52
7	1.30	1.36
8	1.32	1.53

Construct a two-sample plot for this data and estimate values for σ_{rand} and σ_{sys} .

16. The importance of between-laboratory variability on the results of an analytical method can be determined by having several laboratories analyze the same sample. In one such study, seven laboratories analyzed a sample of homogenized milk for a selected aflatoxin.¹⁹ The results, in ppb, are summarized below.

lab A	lab B	lab C	lab D	lab E	lab F	lab G
1.6	4.6	1.2	1/5	6.0	6.2	3.3
2.9	2.8	1.9	2.17	3.9	3.8	3.8
3.5	3.0	2.9	3.4	4.3	5.5	5.5
1.8	4.5	1.1	2.0	5.8	4.2	4.9
2.2	3.1	2.9	3.4	4.0	5.3	4.5

- (a) Determine if the between-laboratory variability is significantly greater than the within-laboratory variability at $\alpha = 0.05$. If the between-laboratory variability is significant, then determine the source(s) of that variability.
- (b) Estimate values for σ_{rand}^2 and σ_{sys}^2 .
17. Show that the total sum-of-squares (SS_t) is the sum of the within-sample sum-of-squares (SS_w) and the between-sample sum-of-squares (SS_b). See [Table 14.7](#) for the relevant equations.
18. Eighteen analytical students are asked to determine the %w/w Mn in a sample of steel, with the results shown here.

0.26% 0.28% 0.27% 0.24% 0.26% 0.25%

0.26% 0.28% 0.25% 0.24% 0.26% 0.25%

0.29% 0.24% 0.27% 0.23% 0.26% 0.24%

- (a) Given that the steel sample is 0.26% w/w Mn, estimate the expected relative standard deviation for the class' results.
- (b) The actual results obtained by the students are shown here. Are these results consistent with the estimated relative standard deviation?

¹⁹ Massart, D. L.; Vandeginste, B. G. M.; Deming, S. N.; Michotte, Y.; Kaufman, L. *Chemometrics: A Textbook*, Elsevier: Amsterdam, 1988.

14H Solutions to Practice Exercises

Practice Exercise 14.1

If we hold factor A at level A_1 , changing factor B from level B_1 to level B_2 increases the response from 40 to 60, or a change ΔR , of

$$R = 60 - 40 = 20$$

If we hold factor A at level A_2 , we find that we have the same change in response when the level of factor B changes from B_1 to B_2 .

$$R = 100 - 80 = 20$$

Click [here](#) to return to the chapter.

Practice Exercise 14.2

If we hold factor B at level B_1 , changing factor A from level A_1 to level A_2 increases the response from 20 to 80, or a change ΔR , of

$$R = 80 - 20 = 60$$

If we hold factor B at level B_2 , we find that the change in response when the level of factor A changes from A_1 to A_2 is now 20.

$$R = 80 - 60 = 20$$

Click [here](#) to return to the chapter.

Practice Exercise 14.3

Answers will vary here depending on the options you decided to explore. The last response surface is an interesting one to explore. Figure 14.26 shows the response surface as a level plot and a contour plot. The interesting feature of this surface is the saddle point on a ridge connecting a local optimum (maximum response of 4.45) and the global optimum (maximum response of 10.0). All three optimization strategies are very sensitive to the initial position and the step-size.

Click [here](#) to return to the chapter.

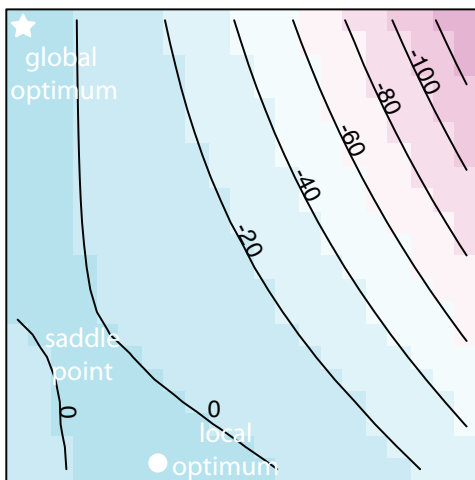


Figure 14.26 Level plot and contour plot for the fifth response surface in [Practice Exercise 14.3](#).

Chapter 15

Quality Assurance

Chapter Overview

Section 15A The Analytical Perspective—Revisited

Section 15B Quality Control

Section 15C Quality Assessment

Section 15D Evaluating Quality Assurance Data

Section 15E Key Terms

Section 15F Summary

Section 15G Problems

Section 15H Solutions to Practice Exercises

In Chapter 14 we discussed the process of developing a standard method, including optimizing the experimental procedure, verifying that the method produces acceptable precision and accuracy in the hands of a signal analyst, and validating the method for general use by the broader analytical community. Knowing that a method meets suitable standards is important if we are to have confidence in our results. Even so, using a standard method does not guarantee that the result of an analysis is acceptable. In this chapter we introduce the quality assurance procedures used in industry and government labs for monitoring routine chemical analyses.

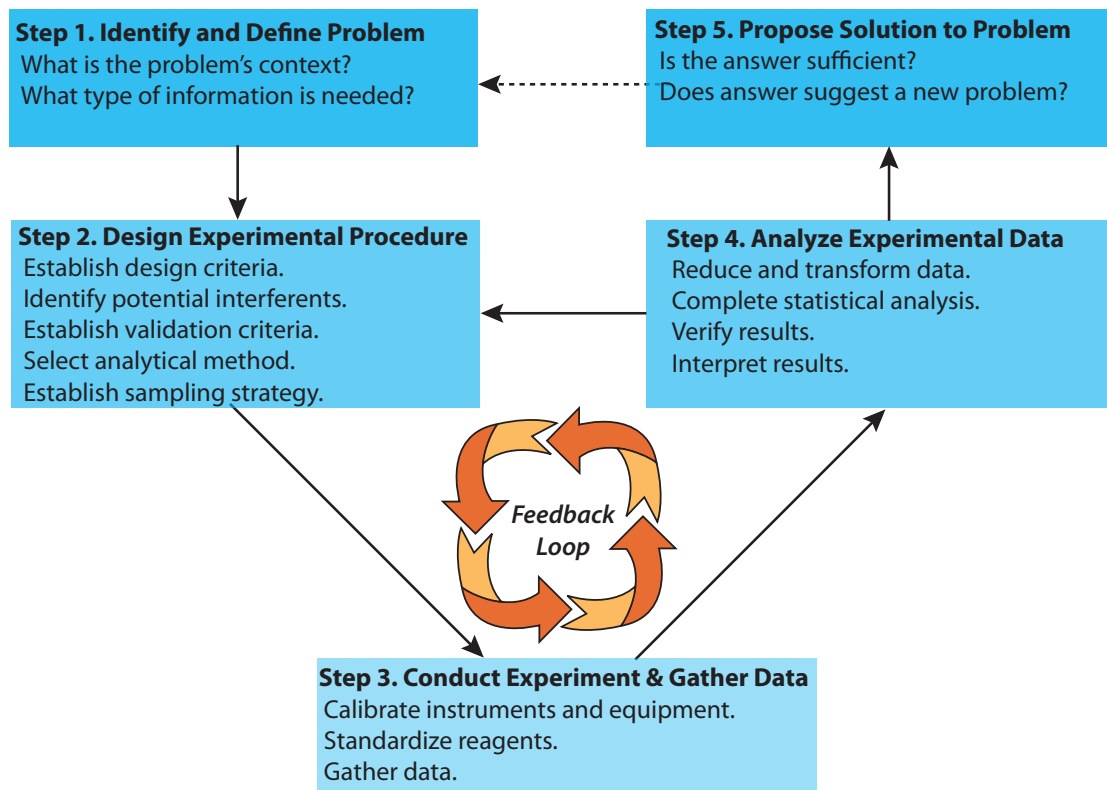


Figure 15.1 Flow diagram showing one view of the analytical approach to solving problems. This diagram is modified after Atkinson, G. F. *J. Chem. Educ.* **1982**, *59*, 201–202.

15A The Analytical Perspective—Revisited

Figure 15.1 is the same as [Figure 1.3](#). You may wish to review our earlier discussion of this figure and of the [analytical approach to solving problem](#).

As we noted in Chapter 1, each area of chemistry brings a unique perspective to the broader discipline of chemistry. For analytical chemistry this perspective is as an approach to solving problem, one representation of which is shown in Figure 15.1.

If you examine the procedure for a standard method it appears, it often seems that its development was a straightforward process of moving from a problem to a solution. Unfortunately—or, perhaps, fortunately for those who consider themselves to be analytical chemists!—developing a standard method is seldom routine. Even a well-established standard method, carefully followed, can yield poor data.

An important feature of the analytical approach outlined in Figure 15.1 is the feedback loop involving steps 2, 3, and 4, in which the outcome of one step may lead us to reevaluate the other steps. For example, after standardizing a spectrophotometric method for the analysis of iron (step 3), we may find that its sensitivity does not meet the original design criteria (step 2). In response, we might choose a different method, change the original design criteria, or improve the sensitivity.

The feedback loop in Figure 15.1 is maintained by a quality assurance program, whose objective is to control systematic and random sources of

error.¹ The underlying assumption of a quality assurance program is that results obtained when an analysis is under **STATISTICAL CONTROL** are free of bias and are characterized by well-defined confidence intervals. When used properly, a quality assurance program identifies the practices necessary to bring a system into statistical control, allows us to determine if the system remains in statistical control, and suggests a course of corrective action if the system falls out of statistical control.

The focus of this chapter is on the two principal components of a **QUALITY ASSURANCE PROGRAM**: quality control and quality assessment. In addition, considerable attention is given to the use of control charts for routinely monitoring the quality of analytical data.

15B Quality Control

QUALITY CONTROL encompasses all activities that bring an analysis into statistical control. The most important facet of quality control is a set of written directives describing the relevant laboratory-specific, technique-specific, sample-specific, method-specific, and protocol-specific operations. **GOOD LABORATORY PRACTICES** (GLPs) describe the general laboratory operations that we must follow in any analysis. These practices include properly recording data and maintaining records, using chain-of-custody forms for samples, specifying and purifying chemical reagents, preparing commonly used reagents, cleaning and calibrating glassware, training laboratory personnel, and maintaining the laboratory facilities and general laboratory equipment.

GOOD MEASUREMENT PRACTICES (GMPs) describe operations specific to a technique. In general, GMPs provide instructions for maintaining, calibrating, and using equipment and instrumentation. For example, a GMP for a titration describes how to calibrate the buret (if required), how to fill the buret with titrant, the correct way to read the volume of titrant in the buret, and the correct way to dispense the titrant.

The directions for analyzing a specific analyte in a specific matrix are described by a **STANDARD OPERATIONS PROCEDURE** (SOP). The SOP indicates how we process the sample in the laboratory, how we separate the analyte from potential interferents, how we standardize the method, how we measure the analytical signal, how we transform the data into the desired result, and how we use the quality assessment tools to maintain quality control. If the laboratory is responsible for sampling, then the SOP will also states how we are to collect, process, and preserve the sample in the field. An SOP may be developed and used by a single laboratory, or it may be a standard procedure approved by an organization such as the American Society for

An analysis is in a state of statistical control when it is reproducible and free from bias.

For one example of quality control, see Keith, L. H.; Crummett, W.; Deegan, J., Jr.; Libby, R. A.; Taylor, J. K.; Wentler, G. "Principles of Environmental Analysis," *Anal. Chem.* **1983**, *55*, 2210–2218. This article describes guidelines developed by the Subcommittee on Environmental Analytical Chemistry, a subcommittee of the American Chemical Society's Committee on Environmental Improvement.

¹ (a) Taylor, J. K. *Anal. Chem.* **1981**, *53*, 1588A–1596A; (b) Taylor, J. K. *Anal. Chem.* **1983**, *55*, 600A–608A; (c) Taylor, J. K. *Am. Lab* October 1985, *53*, 67–75; (d) Nadkarni, R. A. *Anal. Chem.* **1991**, *63*, 675A–682A; (e) Valcárcel, M.; Ríos, A. *Trends Anal. Chem.* **1994**, *13*, 17–23.

Testing Materials or the Federal Food and Drug Administration. A typical SOP is provided in the following example.

Example 15.1

Provide an SOP for the determination of cadmium in lake sediments using atomic absorption spectroscopy and a normal calibration curve.

SOLUTION

Collect sediment samples using a bottom grab sampler and store them at 4 °C in acid-washed polyethylene bottles during transportation to the laboratory. Dry the samples to constant weight at 105 °C and grind them to a uniform particle size. Extract the cadmium in a 1-g sample of sediment by adding the sediment and 25 mL of 0.5 M HCl to an acid-washed 100-mL polyethylene bottle and shaking for 24 h. After filtering, analyze the sample by atomic absorption spectroscopy using an air-acetylene flame, a wavelength of 228.8 nm, and a slit width of 0.5 nm. Prepare a normal calibration curve using five standards with nominal concentrations of 0.20, 0.50, 1.00, 2.00, and 3.00 ppm. Periodically check the accuracy of the calibration curve by analyzing the 1.00-ppm standard. An accuracy of $\pm 10\%$ is considered acceptable.

Although an SOP provides a written procedure, it is not necessary to follow the procedure exactly as long as we are careful to identify any modifications. On the other hand, we must follow all instructions in a **PROTOCOL FOR A SPECIFIC PURPOSE** (PSP)—the most detailed of the written quality control directives—before agencies or clients will accept our results. In many cases the required elements of a PSP are established by the agency sponsoring the analysis. For example, labs working under contract with the Environmental Protection Agency must develop a PSP that addresses such items as sampling and sample custody, frequency of calibration, schedules for the preventive maintenance of equipment and instrumentation, and management of the quality assurance program.

Two additional aspects of a quality control program deserve mention. The first is that the individuals responsible for collecting and analyzing the samples can critically examine and reject individual samples, measurements, and results. For example, when analyzing sediments for cadmium (see the SOP in Example 15.1) we might choose to screen sediment samples, discarding those containing foreign objects—such as rocks, twigs, or trash—replacing them with additional samples. If we observe a sudden change in the performance of the atomic absorption spectrometer, we may choose to reanalyze the affected samples. We may also decide to reanalyze a sample if the result of its analysis is clearly unreasonable. By identifying those samples, measurements, and results subject to gross systematic errors, inspection helps control the quality of an analysis.

Figure 7.7 in Chapter 7 shows an example of a bottom grab sampler.

The second additional consideration is the certification of an analyst's competence to perform the analysis for which he or she is responsible. Before an analyst is allowed to perform a new analytical method, he or she may be required to successfully analyze an independent check sample with acceptable accuracy and precision. The check sample is similar in composition to samples that the analyst will routinely encounter, with a concentration that is 5 to 50 times that of the method's detection limit.

15C Quality Assessment

The written directives of a quality control program are a necessary, but not a sufficient, condition for obtaining and maintaining a state of statistical control. Although quality control directives explain how we are to conduct an analysis, they do not indicate whether the system is under statistical control. This is the role of **QUALITY ASSESSMENT**, the second component of a quality assurance program.

The goals of quality assessment are to determine when an analysis has reached a state of statistical control, to detect when an analysis falls out of statistical control, and to suggest the reason(s) for this loss of statistical control. For convenience, we divide quality assessment into two categories: internal methods coordinated within the laboratory, and external methods organized and maintained by an outside agency.

15C.1 Internal Methods of Quality Assessment

The most useful methods for quality assessment are those coordinated by the laboratory, providing immediate feedback about the analytical method's state of statistical control. Internal methods of quality assessment include the analysis of duplicate samples, the analysis of blanks, the analysis of standard samples, and spike recoveries.

ANALYSIS OF DUPLICATE SAMPLES

An effective method for determining the precision of an analysis is to analyze **DUPLICATE SAMPLES**. Duplicate samples are obtained by dividing a single gross sample into two parts, although in some cases the duplicate samples are independently collected gross samples. We report the results for the duplicate samples, X_1 and X_2 , by determining the difference, d , or the relative difference, $(d)_r$, between the two samples

$$d = X_1 - X_2$$

$$(d)_r = \frac{d}{(X_1 + X_2)/2} \times 100$$

A split sample is another name for duplicate samples created from a single gross sample.

Table 15.1 Quality Assessment Limits for the Analysis of Waters and Wastewaters

analyte	$(d)_r$ when [analyte] < 20×MDL (±%)	$(d)_r$ when [analyte] > 20×MDL (±%)	spike recovery limit (%)
acids	40	20	60–140
anions	25	10	80–120
bases or neutrals	40	20	70–130
carbamate pesticides	40	20	50–150
herbicides	40	20	40–160
metals	25	10	80–120
other inorganics	25	10	80–120
volatile organics	40	20	70–130

Abbreviation: MDL = method's detection limit

Source: Table 1020.I in *Standard Methods for the Analysis of Water and Wastewater*, American Public Health Association: Washington, D. C., 18th Ed., 1992.

and comparing to accepted values, such as those shown in Table 15.1 for the analysis of waters and wastewaters. Alternatively, we can estimate the standard deviation using the results for a set of n duplicates

$$s = \sqrt{\frac{\sum d_i^2}{2n}}$$

where d_i is the difference between the i th pair of duplicates. The degrees of freedom for the standard deviation is the same as the number of duplicate samples. If we combine duplicate samples from several sources, then the precision of the measurement process must be approximately the same for each.

Example 15.2

To evaluate the precision for the determination of potassium in blood serum, duplicate analyses were performed on six samples, yielding the following results in mg K/L.

duplicate	X_1	X_2
1	160	147
2	196	202
3	207	196
4	185	193
5	172	188
6	133	119

Estimate the standard deviation for the analysis.

SOLUTION

To estimate the standard deviation we first calculate the difference, d , and the squared difference, d^2 , for each duplicate. The results of these calculations are summarized in the following table.

duplicate	$d = X_1 - X_2$	d^2
1	13	169
2	-6	36
3	11	121
4	-8	64
5	-16	256
6	14	196

Finally, we calculate the standard deviation.

$$s = \sqrt{\frac{169 + 36 + 121 + 64 + 256 + 196}{2 \times 6}} = 8.4$$

Practice Exercise 15.1

To evaluate the precision of a glucometer—a device a patient uses at home to monitor his or her blood glucose level—duplicate analyses were performed on samples from five individuals, yielding the following results in mg glucose/100 mL.

duplicate	X_1	X_2
1	148.5	149.1
2	96.5	98.8
3	174.9	174.5
4	118.1	118.9
5	72.7	70.4

Estimate the standard deviation for the analysis.

Click [here](#) to review your answer to this exercise.

THE ANALYSIS OF BLANKS

We introduced the use of a blank in [Chapter 3](#) as a way to correct the signal for contributions from sources other than the analyte. The most common blank is a **METHOD BLANK** in which we take an analyte free sample through the analysis using the same reagents, glassware, and instrumentation. A method blank allows us to identify and correct systematic errors due to impurities in the reagents, contaminated glassware, and poorly calibrated instrumentation. At a minimum, a method blank is analyzed whenever we prepare a new reagent. Even better, the regular analysis of method blanks

A method blank also is called a **REAGENT BLANK**.

The contamination of reagents over time is a significant concern. The regular use of a method blank compensates for this contamination.

provides an ongoing monitoring for potential systematic errors. A new method blank is run whenever we analyze a sample with a high concentration of the analyte, because any residual carryover of analyte produces a positive determinate error.

When we collect samples in the field, additional blanks are needed to correct for potential sampling errors.² A **FIELD BLANK** is an analyte-free sample carried from the laboratory to the sampling site. At the sampling site the blank is transferred to a clean sample container, exposing it to the local environment in the process. The field blank is then preserved and transported back to the laboratory for analysis. A field blank helps identify systematic errors due to sampling, transport, and analysis. A **TRIP BLANK** is an analyte-free sample carried from the laboratory to the sampling site and back to the laboratory without being opened. A trip blank helps to identify systematic errors due to cross-contamination of volatile organic compounds during transport, handling, storage, and analysis.

ANALYSIS OF STANDARDS

Another tool for monitoring an analytical method's state of statistical control is to analyze a standard containing a known concentration of analyte. A standard reference material (SRM) is the ideal choice, provided that the SRM's matrix is similar to that of our samples. A variety of SRMs are available from the National Institute of Standards and Technology (NIST). If a suitable SRM is not available, then we can use an independently prepared synthetic sample if it is prepared from reagents of known purity. In all cases, the analyte's experimentally determined concentration in the standard must fall within predetermined limits before the analysis is considered under statistical control.

SPIKE RECOVERIES

One of the most important quality assessment tools is the recovery of a known addition, or spike, of analyte to a method blank, a field blank, or a sample. To determine a **SPIKE RECOVERY**, the blank or sample is split into two portions and a known amount of a standard solution of analyte is added to one portion. The concentration of the analyte is determined for both the spiked, F , and unspiked portions, I , and the percent recovery, $\%R$, is calculated as

$$\%R = \frac{F - I}{A} \times 100$$

where A is the concentration of analyte added to the spiked portion.

[Table 4.7](#) in Chapter 4 provides a summary of SRM 2346, a standard sample of Ginkgo biloba leaves with certified values for the concentrations of flavonoids, terpene ketones, and toxic elements, such as mercury and lead.

² Keith, L. H. *Environmental Sampling and Analysis: A Practical Guide*, Lewis Publishers: Chelsea, MI, 1991.

Example 15.3

A spike recovery for the analysis of chloride in well water was performed by adding 5.00 mL of a 25 000 ppm solution of Cl^- to a 50-mL volumetric flask and diluting to volume with the sample. An unspiked sample was prepared by adding 5.00 mL of distilled water to a separate 50-mL volumetric flask and diluting to volume with the sample. Analysis of the sample and the spiked sample return chloride concentrations of 18.3 ppm and 40.9 ppm, respectively. Determine the spike recovery.

SOLUTION

To calculate the concentration of the analyte added in the spike, we take into account the effect of dilution.

$$A = 250.0 \text{ ppm} \times \frac{5.00 \text{ mL}}{50.00 \text{ mL}} = 25.0 \text{ ppm}$$

Thus, the spike recovery is

$$\%R = \frac{40.9 - 18.3}{25.0} \times 100 = \frac{22.6}{25.0} \times 100 = 90.4\%$$

Practice Exercise 15.2

To test a glucometer, a spike recovery is carried out by measuring the amount of glucose in a sample of a patient's blood before and after spiking it with a standard solution of glucose. Before spiking the sample the glucose level is 86.7 mg/100 mL and after spiking the sample it is 110.3 mg/100 mL. The spike is prepared by adding 10.0 μL of a 25 000 mg/100mL standard to a 10.0-mL portion of the blood. What is the spike recovery for this sample.

Click [here](#) to review your answer to this exercise.

We can use spike recoveries on method blanks and field blanks to evaluate the general performance of an analytical procedure. A known concentration of analyte is added to the blank that is 5 to 50 times the method's detection limit. A systematic error during sampling and transport results in an unacceptable recovery for the field blank, but not for the method blank. A systematic error in the laboratory, however, affects the recoveries for both the field blank and the method blank.

Spike recoveries on samples are used to detect systematic errors due to the sample matrix, or to evaluate the stability of a sample after its collection. Ideally, samples are spiked in the field at a concentration that is 1 to 10 times the analyte's expected concentration or 5 to 50 times the method's detection limit, whichever is larger. If the recovery for a field spike is unacceptable, then a sample is spiked in the laboratory and analyzed immediately. If the laboratory spike's recovery is acceptable, then the poor recovery for the

[Figure 15.2](#), which we will discuss in [Section 15D](#), illustrates the use of spike recoveries as part of a quality assessment program.

field spike may be the result of the sample's deterioration during storage. If the recovery for the laboratory spike also is unacceptable, the most probable cause is a matrix-dependent relationship between the analytical signal and the analyte's concentration. In this case the sample is analyzed by the method of standard additions. Typical limits for acceptable spike recoveries for the analysis of waters and wastewaters are shown in [Table 15.1](#).

15C.2 External Methods of Quality Assessment

Internal methods of quality assessment always carry some level of suspicion because there is a potential for bias in their execution and interpretation. For this reason, external methods of quality assessment also play an important role in quality assurance programs. One external method of quality assessment is the certification of a laboratory by a sponsoring agency. Certification is based on the successful analysis of a set of **PROFICIENCY STANDARDS** prepared by the sponsoring agency. For example, laboratories involved in environmental analyses may be required to analyze standard samples prepared by the Environmental Protection Agency. A second example of an external method of quality assessment is a laboratory's voluntary participation in a collaborative test sponsored by a professional organization such as the Association of Official Analytical Chemists. Finally, an individual contracting with a laboratory can perform his or her own external quality assessment by submitting blind duplicate samples and blind standards to the laboratory for analysis. If the results for the quality assessment samples are unacceptable, then there is good reason to question the laboratory's results for other samples.

15D Evaluating Quality Assurance Data

In the previous section we described several internal methods of quality assessment that provide quantitative estimates of the systematic errors and the random errors in an analytical method. Now we turn our attention to how we incorporate this quality assessment data into a complete quality assurance program. There are two general approaches to developing a quality assurance program: a prescriptive approach, in which we prescribe an exact method of quality assessment, and a performance-based approach in which we can use any form of quality assessment, provided that we can demonstrate an acceptable level of statistical control.³

15D.1 Prescriptive Approach

With a prescriptive approach to quality assessment, duplicate samples, blanks, standards, and spike recoveries are measured following a specific protocol. We compare the result for each analysis to a single predetermined limit, taking an appropriate corrective action if the limit is exceeded. Prescriptive approaches to quality assurance are common for programs and

See [Chapter 14](#) for a more detailed description of collaborative testing.

3 Poppiti, J. *Environ. Sci. Technol.* **1994**, *28*, 151A–152A.

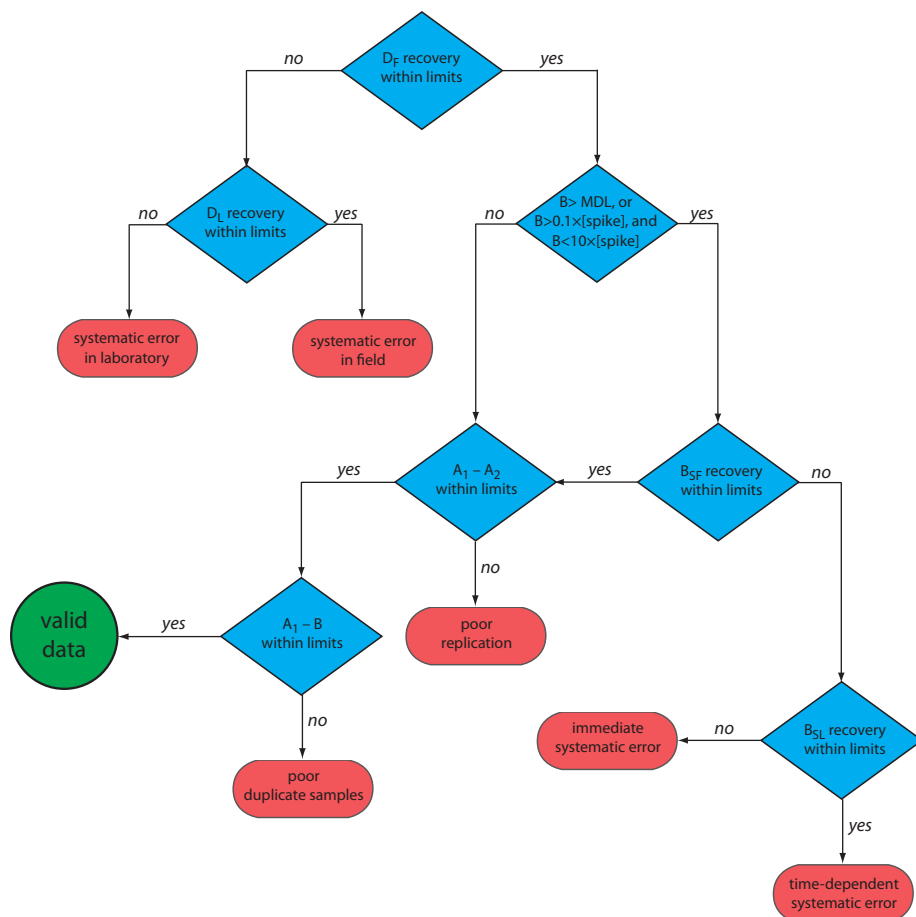


Figure 15.2 Example of a prescriptive approach to quality assurance for laboratories monitoring waters and wastewaters. Adapted from Environmental Monitoring and Support Laboratory, U. S. Environmental Protection Agency, “Handbook for Analytical Quality Control in Water and Wastewater Laboratories,” March 1979.

laboratories subject to federal regulation. For example, the Food and Drug Administration (FDA) specifies quality assurance practices that must be followed by laboratories analyzing products regulated by the FDA.

Figure 15.2 provides a typical example of a prescriptive approach to quality assessment. Two samples, A and B, are collected at the sample site. Sample A is split into two equal-volume samples, A_1 and A_2 . Sample B is also split into two equal-volume samples, one of which, B_{SF} , is spiked in the field with a known amount of analyte. A field blank, D_F , also is spiked with the same amount of analyte. All five samples (A_1 , A_2 , B, B_{SF} , and D_F) are preserved if necessary and transported to the laboratory for analysis.

After returning to the lab, the first sample that is analyzed is the field blank. If its spike recovery is unacceptable—an indication of a systematic error in the field or in the lab—then a laboratory method blank, D_L , is prepared and analyzed. If the spike recovery for the method blank is unsatisfactory, then the systematic error originated in the laboratory; this is something we can find and correct before proceeding with the analysis. An acceptable spike recovery for the method blank, however, indicates that the systematic error occurred in the field or during transport to the laboratory, casting uncertainty on the quality of the samples. The only recourse is to discard the samples and return to the field to collect new samples.

If the field blank is satisfactory, then sample B is analyzed. If the result for B is above the method's detection limit, or if it is within the range of 0.1 to 10 times the amount of analyte spiked into B_{SF} , then a spike recovery for B_{SF} is determined. An unacceptable spike recovery for B_{SF} indicates the presence of a systematic error involving the sample. To determine the source of the systematic error, a laboratory spike, B_{SL} , is prepared using sample B, and analyzed. If the spike recovery for B_{SL} is acceptable, then the systematic error requires a long time to have a noticeable effect on the spike recovery. One possible explanation is that the analyte has not been properly preserved or it has been held beyond the acceptable holding time. An unacceptable spike recovery for B_{SL} suggests an immediate systematic error, such as that due to the influence of the sample's matrix. In either case the systematic errors are fatal and must be corrected before the sample is reanalyzed.

If the spike recovery for B_{SF} is acceptable, or if the result for sample B is below the method's detection limit, or outside the range of 0.1 to 10 times the amount of analyte spiked in B_{SF} , then the duplicate samples A_1 and A_2 are analyzed. The results for A_1 and A_2 are discarded if the difference between their values is excessive. If the difference between the results for A_1 and A_2 is within the accepted limits, then the results for samples A_1 and B are compared. Because samples collected from the same sampling site at the same time should be identical in composition, the results are discarded if the difference between their values is unsatisfactory, and accepted if the difference is satisfactory.

The protocol in [Figure 15.2](#) requires four to five evaluations of quality assessment data before the result for a single sample is accepted, a process that we must repeat for each analyte and for each sample. Other prescriptive protocols are equally demanding. For example, [Figure 3.7](#) in Chapter 3 shows a portion of a quality assurance protocol for the graphite furnace atomic absorption analysis of trace metals in aqueous solutions. This protocol involves the analysis of an initial calibration verification standard and an initial calibration blank, followed by the analysis of samples in groups of ten. Each group of samples is preceded and followed by continuing calibration verification (CCV) and continuing calibration blank (CCB) quality assessment samples. Results for each group of ten samples are accepted only if both sets of CCV and CCB quality assessment samples are acceptable.

The advantage of a prescriptive approach to quality assurance is that all laboratories use a single consistent set of guideline. A significant disadvantage is that it does not take into account a laboratory's ability to produce quality results when determining the frequency of collecting and analyzing quality assessment data. A laboratory with a record of producing high quality results is forced to spend more time and money on quality assessment than is perhaps necessary. At the same time, the frequency of quality assessment may be insufficient for a laboratory with a history of producing results of poor quality.

This is one reason that environmental testing is so expensive.

15D.2 Performance-Based Approach

In a performance-based approach to quality assurance, a laboratory is free to use its experience to determine the best way to gather and monitor quality assessment data. The quality assessment methods remain the same—duplicate samples, blanks, standards, and spike recoveries—because they provide the necessary information about precision and bias. What a laboratory can control is the frequency with which it analyzes quality assessment samples and the conditions it chooses to identify when an analysis falls out of a state of statistical control.

The principal tool for performance-based quality assessment is a **CONTROL CHART**, which provides a continuous record of quality assessment results. Our fundamental assumption is that if an analysis is under statistical control, individual quality assessment results are randomly distributed around a known mean with a known standard deviation. When an analysis moves out of statistical control, the quality assessment data is influenced by additional sources of error, increasing the standard deviation or changing the mean value.

Control charts were originally developed in the 1920s as a quality assurance tool for the control of manufactured products.⁴ Although there are many types of control charts, two are common in quality assessment programs: a property control chart, in which we record single measurements or the means for several replicate measurements, and a precision control chart, in which we record ranges or standard deviations. In either case, the control chart consists of a line representing the mean value for the measured property or the precision, and two or more boundary lines whose positions are determined by the precision of the measurement process. The position of the data points about the boundary lines determines whether the analysis is in statistical control.

CONSTRUCTING A PROPERTY CONTROL CHART

The simplest property control chart is a sequence of points, each representing a single determination of the property we are monitoring. To construct the control chart, we analyze a minimum of 7–15 samples while the system is under statistical control. The center line (*CL*) of the control chart is the average of these n samples.

$$CL = \bar{X} = \frac{\sum X_i}{n}$$

Boundary lines around the center line are determined by the standard deviation, S , of the n points

The more samples in the original control chart, the easier it is to detect when an analysis is beginning to drift out of statistical control. Building a control chart with an initial run of 30 or more samples is not an unusual choice.

⁴ Shewhart, W. A. *Economic Control of the Quality of Manufactured Products*, Macmillan: London, 1931.

$$S = \sqrt{\frac{\sum (X_i - \bar{X})^2}{n-1}}$$

The upper and lower warning limits (*UWL* and *LWL*) and the upper and lower control limits (*UCL* and *LCL*) are given by the following equations.

$$UWL = CL + 2S \quad LWL = CL - 2S$$

$$UCL = CL + 3S \quad LCL = CL - 3S$$

Why these limits? Examine [Table 4.12](#) in Chapter 4 and consider your answer to this question. We will return to this point later in this chapter when we consider how to use a control chart.

Example 15.4

Construct a property control chart using the following spike recovery data (all values are for percentage of spike recovered).

sample:	1	2	3	4	5
result:	97.3	98.1	100.3	99.5	100.9
sample:	6	7	8	9	10
result:	98.6	96.9	99.6	101.1	100.4
sample:	11	12	13	14	15
result:	100.0	95.9	98.3	99.2	102.1
sample:	16	17	18	19	20
result:	98.5	101.7	100.4	99.1	100.3

SOLUTION

The mean and the standard deviation for the 20 data points are 99.4% and 1.6%, respectively. Using these values, we find that the *UCL* is 104.2%, the *UWL* is 102.6%, the *LWL* is 96.2%, and the *LCL* is 94.6%. To construct the control chart, we plot the data points sequentially and draw horizontal lines for the center line and the four boundary lines. The resulting property control chart is shown in [Figure 15.3](#).

Practice Exercise 15.3

A control chart is a useful method for monitoring a glucometer's performance over time. One approach is to use the glucometer to measure the glucose level of a standard solution. An initial analysis of the standard yields a mean value of 249.4 mg/100 mL and a standard deviation of 2.5 mg/100 mL. An analysis of the standard over 20 consecutive days gives the following results.

day:	1	2	3	4	5	6	7	8	9	10
result:	248.1	246.0	247.9	249.4	250.9	249.7	250.2	250.3	247.3	245.6
day:	11	12	13	14	15	16	17	18	19	20
result:	246.2	250.8	249.0	254.3	246.1	250.8	248.1	246.7	253.5	251.0

Construct a control chart and evaluate the glucometer's performance.

Click [here](#) to review your answer to this exercise.

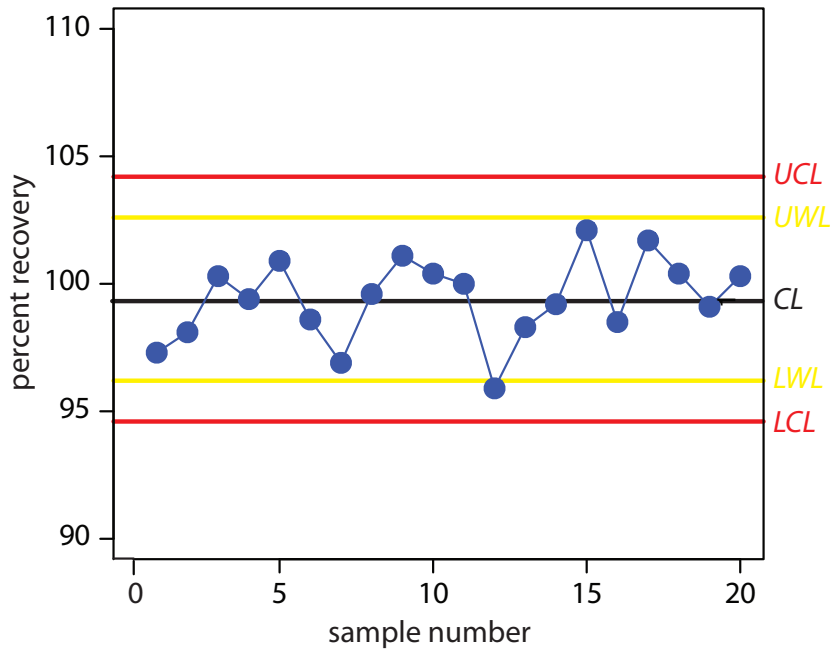


Figure 15.3 Property control chart for [Example 15.4](#). The warning limits are shown in yellow and the control limits in red.

We also can construct a control chart using the means for a set of replicate determinations on each sample. The mean for the i th sample is

$$\bar{X}_i = \frac{\sum_j X_{ij}}{n_{\text{rep}}}$$

where X_{ij} is the j th replicate and n_{rep} is the number of replicate determinations for each sample. The control chart's center line is

$$CL = \frac{\sum \bar{X}_i}{n}$$

where n is the number of samples used in constructing the control chart. To determine the standard deviation for the warning limits and the control limits, we first calculate the variance for each sample.

$$s_i^2 = \frac{\sum_j (X_{ij} - \bar{X}_i)^2}{n_{\text{rep}} - 1}$$

The overall standard deviation, S , is the square root of the average variance for the samples used in constructing the control plot.

$$S = \sqrt{\frac{\sum s_i^2}{n}}$$

When using means to construct a property control chart, all samples must have the same number of replicates.

Table 15.2 Statistical Factors for the Upper Warning Limit and the Upper Control Limit of a Precision Control Chart

replicates	f_{UWL}	f_{UCL}
2	2.512	3.267
3	2.050	2.575
4	1.855	2.282
5	1.743	2.115
6	1.669	2.004

The resulting warning and control limits are given by the following four equations.

$$UWL = CL + \frac{2S}{\sqrt{n_{\text{rep}}}} \quad LWL = CL - \frac{2S}{\sqrt{n_{\text{rep}}}}$$

$$UCL = CL + \frac{3S}{\sqrt{n_{\text{rep}}}} \quad LCL = CL - \frac{3S}{\sqrt{n_{\text{rep}}}}$$

CONSTRUCTING A PRECISION CONTROL CHART

A precision control chart shows how the precision of an analysis changes over time. The most common measure of precision is the range, R , between the largest and the smallest results for n_{rep} analyses on a sample.

$$R = X_{\text{largest}} - X_{\text{smallest}}$$

To construct the control chart, we analyze a minimum of 15–20 samples while the system is under statistical control. The center line (CL) of the control chart is the average range of these n samples.

$$\bar{R} = \frac{\sum R_i}{n}$$

The upper warning line and the upper control line are given by the following equations

$$UWL = f_{UWL} \times \bar{R}$$

$$UCL = f_{UCL} \times \bar{R}$$

where f_{UWL} and f_{UCL} are statistical factors determined by the number of replicates used in determining the range. Table 15.2 provides representative values for f_{UWL} and f_{UCL} . Because the range is greater than or equal to zero, there is no lower control limit or lower warning limit.

The more samples in the original control chart, the easier it is to detect when an analysis is beginning to drift out of statistical control. Building a control chart with an initial run of 30 or more samples is not an unusual choice.

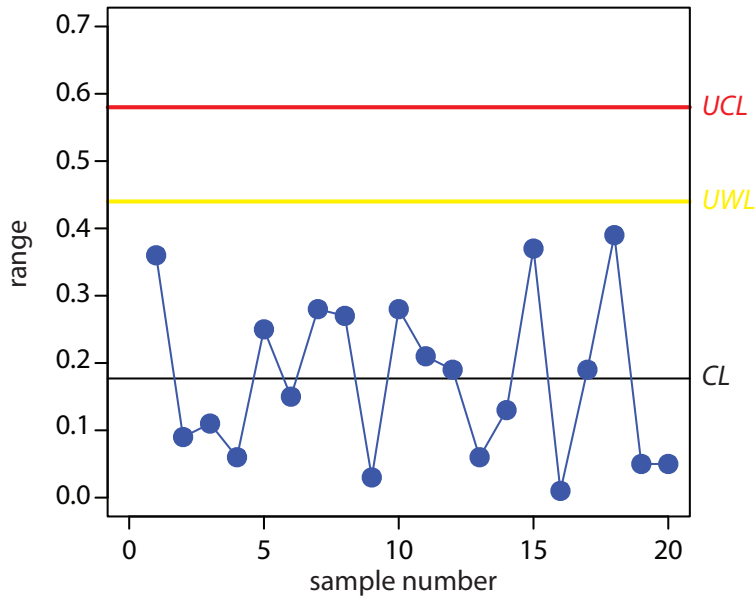


Figure 15.4 Precision control chart for Example 15.5. The warning limits are shown in yellow and the control limits in red.

Example 15.5

Construct a precision control chart using the following ranges, each determined from a duplicate analysis of a 10.0-ppm calibration standard.

sample:	1	2	3	4	5
result:	0.36	0.09	0.11	0.06	0.25
sample:	6	7	8	9	10
result:	0.15	0.28	0.27	0.03	0.28
sample:	11	12	13	14	15
result:	0.21	0.19	0.06	0.13	0.37
sample:	16	17	18	19	20
result:	0.01	0.19	0.39	0.05	0.05

SOLUTION

The average range for the duplicate samples is 0.177. Because two replicates were used for each point the *UWL* and *UCL* are

$$UWL = 2.512 \times 0.177 = 0.44$$

$$UCL = 3.267 \times 0.177 = 0.58$$

The resulting property control chart is shown in Figure 15.4.

The precision control chart in Figure 15.4 is strictly valid only for the replicate analysis of identical samples, such as a calibration standard or a standard reference material. Its use for the analysis of nonidentical samples—as often is the case in clinical analyses and environmental analyses—is complicated by the fact that the range usually is not independent of the magnitude of the measurements. For example, [Table 15.3](#) shows the

Table 15.3 Average Range for the Concentration of Chromium in Duplicate Water Samples

[Cr] (ppb)	number of duplicate samples	\bar{R}
5 to < 10	32	0.32
10 to < 25	15	0.57
25 to < 50	16	1.12
50 to < 150	15	3.80
150 to < 500	8	5.25
> 500	5	76.0

Source: Environmental Monitoring and Support Laboratory, U. S. Environmental Protection Agency, "Handbook for Analytical Quality Control in Water and Wastewater Laboratories," March 1979.

relationship between the average range and the concentration of chromium in 91 water samples. The significant difference in the average range for different concentrations of chromium makes a single precision control chart impossible. As shown in figure 15.5, one solution is to prepare separate precision control charts, each of which covers a range of concentrations for which \bar{R} is approximately constant.

INTERPRETING CONTROL CHARTS

The purpose of a control chart is to determine if an analysis is in a state of statistical control. We make this determination by examining the location

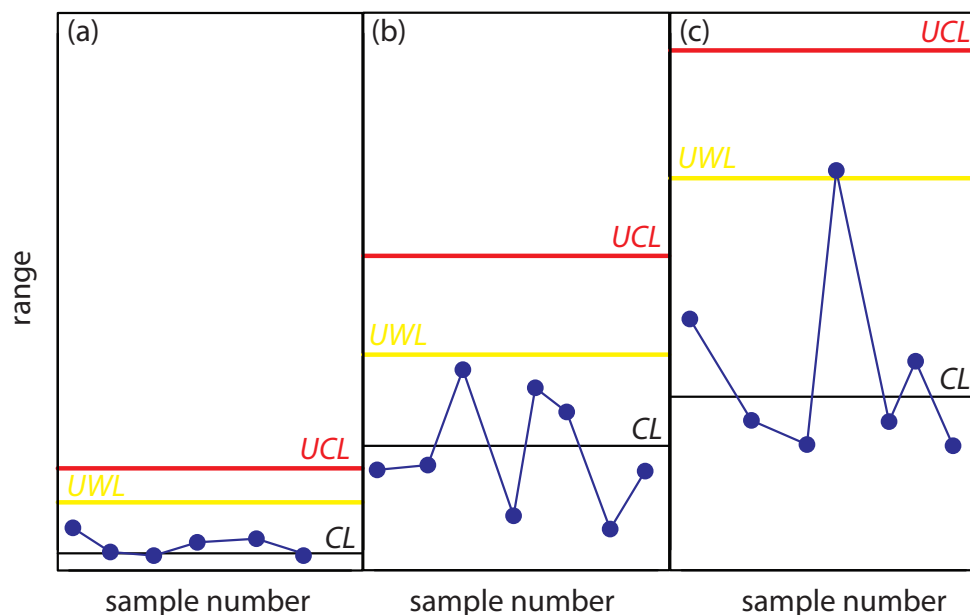


Figure 15.5 Example showing the use of a precision control chart for samples that span a range of analyte concentrations. The precision control charts are for (a) low concentrations of analyte; (b) intermediate concentrations of analyte; and (c) high concentrations of analyte.

of individual results relative to the warning limits and the control limits, and by examining the distribution of results around the central line. If we assume that the individual results are normally distributed, then the probability of finding a point at any distance from the control limit is determined by the properties of a normal distribution.⁵ We set the upper and lower control limits for a property control chart to $CL \pm 3S$ because 99.74% of a normally distributed population is within three standard deviations of the population's mean. This means that there is only a 0.26% probability of obtaining a result larger than the *UCL* or smaller than the *LCL*. When a result exceeds a control limit, the most likely explanation is a systematic error in the analysis or a loss of precision. In either case, we assume that the analysis no longer is in a state of statistical control.

Rule 1. An analysis is no longer under statistical control if any single point exceeds either the *UCL* or the *LCL*.

By setting the upper and lower warning limits to $CL \pm 2S$, we expect that no more than 5% of the results will exceed one of these limits; thus

Rule 2. An analysis is no longer under statistical control if two out of three consecutive points are between the *UWL* and the *UCL* or between the *LWL* and the *LCL*.

If an analysis is under statistical control, then we expect a random distribution of results about the center line. The presence of an unlikely pattern in the data is another indication that the analysis is no longer under statistical control.

Rule 3. An analysis is no longer under statistical control if seven consecutive results fall completely above or completely below the center line.

Rule 4. An analysis is no longer under statistical control if six consecutive results increase or decrease in value.

Rule 5. An analysis is no longer under statistical control if 14 consecutive alternate up and down in value.

Rule 6. An analysis is no longer under statistical control if there is any obvious nonrandom pattern to the results.

Figure 15.6 shows three examples of control charts in which the results show an analysis that has fallen out of statistical control. The same rules apply to precision control charts with the exception that there are no lower warning limits and lower control limits.

USING CONTROL CHARTS FOR QUALITY ASSURANCE

Control charts play an important role in a performance-based program of quality assurance because they provide an easily interpreted picture of the statistical state of an analysis. Quality assessment samples such as blanks,

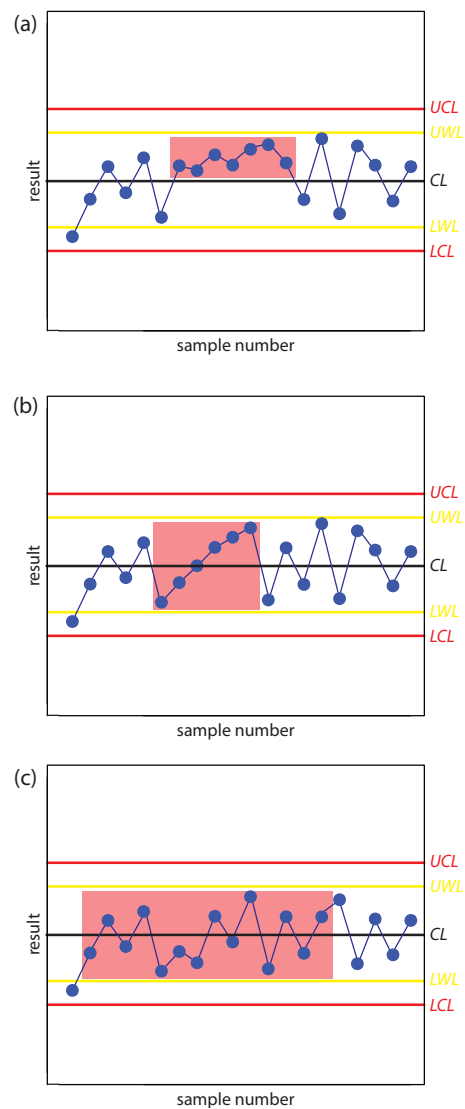


Figure 15.6 Examples of property control charts that show a sequence of results—indicated by the highlighting—that violate (a) rule 3; (b) rule 4; and (c) rule 5.

Practice Exercise 15.4

In [Practice Exercise 15.3](#) you created a property control chart for a glucometer. Examine your property control chart and evaluate the glucometer's performance. Does your conclusion change if the next three results are 255.6, 253.9, and 255.8 mg/100 mL?

Click [here](#) to review your answer to this exercise.

⁵ Mullins, E. *Analyst*, 1994, 119, 369–375.

standards, and spike recoveries are monitored with property control charts. A precision control chart is used to monitor duplicate samples.

The first step in using a control chart is to determine the mean value and the standard deviation (or range) for the property being measured while the analysis is under statistical control. These values must be established using the same conditions that will be present during subsequent analyses. Preliminary data is collected both throughout the day and over several days to account for short-term and long-term variability. An initial control chart is prepared using this preliminary data and discrepant points identified using the rules discussed in the previous section. After eliminating questionable points, the control chart is replotted. Once the control chart is in use, the original limits may be adjusted if the number of new data points is at least equivalent to the amount of data used to construct the original control chart. For example, if the original control chart includes 15 points, new limits can be calculated after collecting 15 additional points. The 30 points are pooled together to calculate the new limits. A second modification can be made after collecting an addition 30 points. Another indication that a control chart needs to be modified is when points rarely exceed the warning limits. In this case the new limits can be recalculated using the last 20 points.

Once a control chart is in use, new quality assessment data is added at a rate sufficient to ensure that the analysis remains in statistical control. As with prescriptive approaches to quality assurance, when the analysis falls out of statistical control, all samples analyzed since the last successful verification of statistical control must be reanalyzed. The advantage of a performance-based approach to quality assurance is that a laboratory may use its experience, guided by control charts, to determine the frequency for collecting quality assessment samples. When the system is stable, quality assessment samples can be acquired less frequently.

15E Key Terms

control chart	duplicate samples	field blank
good laboratory practices	good measurement practices	method blank
proficiency standard	protocol for a specific purpose	quality assessment
quality assurance program	quality control	reagent blank
spike recovery	standard operations procedure	statistical control
trip blank		

15F Summary

Few analyses are so straightforward that high quality results are easily obtained. Good analytical work requires careful planning and an attention to detail. Creating and maintaining a quality assurance program is one way

As you review this chapter, try to define a key term in your own words. Check your answer by clicking on the key term, which will take you to the page where it was first introduced. Clicking on the **KEY TERM** there, will bring you back to this page so that you can continue with another key term.

to help ensure the quality of analytical results. Quality assurance programs usually include elements of quality control and quality assessment.

Quality control encompasses all activities used to bring a system into statistical control. The most important facet of quality control is written documentation, including statements of good laboratory practices, good measurement practices, standard operating procedures, and protocols for a specific purpose.

Quality assessment includes the statistical tools used to determine whether an analysis is in a state of statistical control, and, if possible, to suggest why an analysis has drifted out of statistical control. Among the tools included in quality assessment are the analysis of duplicate samples, the analysis of blanks, the analysis of standards, and the analysis of spike recoveries.

Another important quality assessment tool, which provides an ongoing evaluation of an analysis, is a control chart. A control chart plots a property, such as a spike recovery, as a function of time. Results exceeding warning and control limits, or unusual patterns of data indicate that an analysis is no longer under statistical control.

15G Problems

1. Make a list of good laboratory practices for the lab accompanying this course, or another lab if this course does not have an associated laboratory. Explain the rationale for each item on your list.
2. Write directives outlining good measurement practices for a buret, a pH meter, and a spectrophotometer.
3. A atomic absorption method for the analysis of lead in an industrial wastewater has a method detection limit of 10 ppb. The relationship between the absorbance and the concentration of lead, as determined from a calibration curve, is

$$A = 0.349 \times (\text{ppm Pb})$$

Analysis of a sample in duplicate gives absorbance values of 0.554 and 0.516. Is the precision between these two duplicates acceptable based on the limits in [Table 15.1](#)?

4. The following data were obtained for the duplicate analysis of a 5.00 ppm NO_3^- standard.

sample	X1 (ppm)	X2 (ppm)
1	5.02	4.90
2	5.10	5.18
3	5.07	4.95

4	4.96	5.01
5	4.88	4.98
6	5.04	4.97

Calculate the standard deviation for these duplicate samples. If the maximum limit for the relative standard deviation is 1.5%, are these results acceptable?

- Gonzalez and colleagues developed a voltammetric method for the determination of *tert*-butylhydroxyanisole (BHA) in chewing gum.⁶ Analysis of a commercial chewing gum gave results of 0.20 mg/g. To evaluate the accuracy of their results, they performed five spike recoveries, adding an amount of BHA equivalent to 0.135 mg/g to each sample. The experimentally determined concentrations of BHA in these samples were reported as 0.342, 0.340, 0.340, 0.324, and 0.322 mg/g. Determine the percent recovery for each sample and the average percent recovery.
- A sample is analyzed following the protocol shown in [Figure 15.2](#), using a method with a detection limit of 0.05 ppm. The relationship between the analytical signal, S_{meas} , and the concentration of the analyte, C_A , as determined from a calibration curve, is

$$S_{\text{meas}} = 0.273 \times (\text{ppm analyte})$$

Answer the following questions if the limit for a successful spike recovery is $\pm 10\%$.

- A field blank is spiked with the analyte to a concentration of 2.00 ppm and returned to the lab. Analysis of the spiked field blank gives a signal of 0.573. Is the spike recovery for the field blank acceptable?
- The analysis of a spiked field blank is unacceptable. To determine the source of the problem, a spiked method blank is prepared by spiking distilled water with the analyte to a concentration of 2.00 ppm. Analysis of the spiked method blank gives a signal of 0.464. Is the source of the problem in the laboratory or in the field?
- The analysis for a spiked field sample, B_{SF} , is unacceptable. To determine the source of the problem, the sample was spiked in the laboratory by adding sufficient analyte to increase the concentration by 2.00 ppm. Analysis of the sample before and after the spike gives signals of 0.456 for B and 1.03 for B_{SL} . Considering this data, what is the most likely source of the systematic error?

⁶ Gonzalez, A.; Ruiz, M. A.; Yanez-Sedeno, P.; Pingarron, J. M. *Anal. Chim. Acta* **1994**, *285*, 63–71.

7. The following data were obtained for the repetitive analysis of a stable standard.⁷

sample	X_i (ppm)	sample	X_i (ppm)	sample	X_i (ppm)
1	35.1	10	35.0	18	36.4
2	33.2	11	31.4	19	32.1
3	33.7	12	35.6	20	38.2
4	35.9	13	30.2	21	33.1
5	34.5	14	31.1	22	36.2
6	34.5	15	31.1	23	36.2
7	34.4	16	34.8	24	34.0
8	34.3	17	34.3	25	33.8
9	31.8				

Construct a property control chart for these data and evaluate the state of statistical control.

8. The following data were obtained for the repetitive spike recoveries of field samples.⁸

sample	% recovery	sample	% recovery	sample	% recovery
1	94.6	10	104.6	18	104.6
2	93.1	11	123.8	19	91.5
3	100.0	12	93.8	20	83.1
4	122.3	13	80.0	21	100.8
5	120.8	14	99.2	22	123.1
6	93.1	15	101.5	23	96.2
7	117.7	16	74.6	24	96.9
8	96.2	17	108.5	25	102.3
9	73.8				

Construct a property control chart for these data and evaluate the state of statistical control.

9. The following data were obtained for the duplicate analysis of a stable standard.⁹

sample	X_1 (ppm)	X_2 (ppm)	sample	X_1 (ppm)	X_2 (ppm)
1	50	46	14	36	36
2	37	36	15	47	45

7 *Standard Methods for the Analysis of Waters and Wastewaters*, American Public Health Association: Washington, D. C., 18th Ed., 1992. The data is from Table 1030:I.

8 *Standard Methods for the Analysis of Waters and Wastewaters*, American Public Health Association: Washington, D. C., 18th Ed., 1992. The data is from Table 1030:II.

9 *Standard Methods for the Analysis of Waters and Wastewaters*, American Public Health Association: Washington, D. C., 18th Ed., 1992. The data is from Table 1030:I.

3	22	19	16	16	20
4	17	20	17	18	21
5	32	34	18	26	22
6	46	46	19	35	36
7	26	28	20	26	25
8	26	30	21	49	51
9	61	58	22	33	32
10	44	45	23	40	38
11	40	44	24	16	13
12	36	35	25	39	42
13	29	31			

Construct a precision control chart for these data and evaluate the state of statistical control.

15H Solutions to Practice Exercises

Practice Exercise 15.1

To estimate the standard deviation we first calculate the difference, d , and the squared difference, d^2 , for each duplicate. The results of these calculations are summarized in the following table.

duplicate	$d = X_1 - X_2$	d^2
1	-0.6	0.36
2	-2.3	5.29
3	0.4	0.16
4	-0.8	0.64
5	2.3	5.29

Finally, we calculate the standard deviation.

$$s = \sqrt{\frac{0.36 + 5.29 + 0.16 + 0.64 + 5.29}{2 \times 5}} = 1.08$$

Click [here](#) to return to the chapter.

Practice Exercise 15.2

Adding a 10.0- μ L spike to a 10.0-mL sample is a 1000-fold dilution; thus, the concentration of added glucose is 25.0 mg/100 mL and the spike recovery is

$$\%R = \frac{110.3 - 86.7}{25.0} \times 100 = \frac{23.6}{25.0} \times 100 = 94.4\%$$

Click [here](#) to return to the chapter.

Practice Exercise 15.3

The *UCL* is 256.9, the *UWL* is 254.4, the *CL* is 249.4, the *LWL* is 244.4, and the *LCL* is 241.9 mg glucose/100 mL. Figure 15.7 shows the resulting property control plot.

Click [here](#) to return to the chapter.

Practice Exercise 15.4

Although the variation in the results appears to be greater for the second 10 samples, the results do not violate any of the six rules. There is no evidence in Figure 15.7 that the analysis is out of statistical control. The next three results, in which two of the three results are between the *UWL* and the *UCL*, violates the second rule. Because the analysis is no longer under statistical control, we must stop using the glucometer until we determine the source of the problem.

Click [here](#) to return to the chapter.

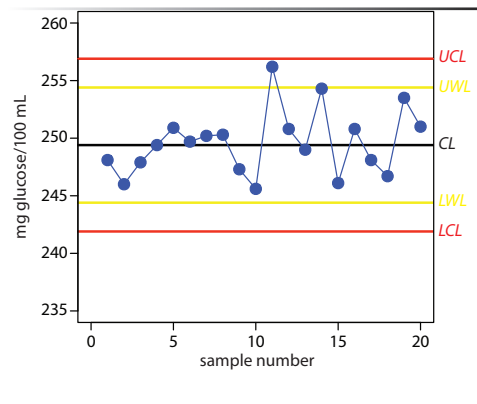


Figure 15.7 Property control plot for [Practice Exercise 15.3](#).

Additional Resources

Resource Overview

- Chapter 1: Introduction to Analytical Chemistry
- Chapter 2: Basic Tools of Analytical Chemistry
- Chapter 3: The Vocabulary of Analytical Chemistry
- Chapter 4: Evaluating Analytical Data
- Chapter 5: Standardizing Analytical Methods
- Chapter 6: Equilibrium Chemistry
- Chapter 7: Collecting and Preparing Samples
- Chapter 8: Gravimetric Methods
- Chapter 9: Titrimetric Methods
- Chapter 10: Spectroscopic Methods
- Chapter 11: Electrochemical Methods
- Chapter 12: Chromatographic and Electrophoretic Methods
- Chapter 13: Kinetic Methods
- Chapter 14: Developing a Standard Method
- Chapter 15: Quality Assurance

Gathered here are three types of resources: suggested experiments, mostly from the *Journal of Chemical Education* and *The Chemical Educator*, that provide practical examples of concepts in the textbook; additional readings from the analytical literature that extend and supplement topics covered in the textbook; and electronic resources, many of which are cataloged in the Analytical Sciences Digital Library, that help illustrate concepts from the textbook. Although primarily intended for the use of instructors, these resources also will benefit students who wish to pursue a topic at more depth.

Chapter 1

The role of analytical chemistry within the broader discipline of chemistry has been discussed by many prominent analytical chemists. Several notable examples are listed here.

- Baiulescu, G. E.; Patroescu, C; Chalmers, R. A. *Education and Teaching in Analytical Chemistry*, Ellis Horwood: Chichester, 1982.
- de Haseth, J. “What is Analytical Chemistry?,” *Spectroscopy* **1990**, 5, 19-21.
- Heftje, G. M. “The Two Sides of Analytical Chemistry,” *Anal. Chem.* **1985**, 57, 256A-267A.
- Heftje, G. M. “But is it analytical chemistry?,” *Am. Lab.* **1993**, October, 53-61.
- Kissinger, P. T. “Analytical Chemistry—What is It? Why Teach It?,” *Trends Anal. Chem.* **1992**, 11, 57-57.
- Laitinen, H. A.; Ewing, G. (eds.) *A History of Analytical Chemistry*, The Division of Analytical Chemistry of the American Chemical Society: Washington, D. C., 1972.
- Laitinen, H. A. “Analytical Chemistry in a Changing World,” *Anal. Chem.* **1980**, 52, 605A-609A.
- Laitinen, H. A. “History of Analytical Chemistry in the U. S. A.,” *Talanta*, **1989**, 36, 1-9.
- McLafferty, F. W. “Analytical Chemistry: Historic and Modern,” *Acc. Chem. Res.* **1990**, 23, 63-64.
- Mottola, H. A. “The Interdisciplinary and Multidisciplinary Nature of Contemporary Analytical Chemistry and its Core Components,” *Anal. Chim. Acta* **1991**, 242, 1-3.
- Noble, D. “From Wet Chemistry to Instrumental Analysis: A Perspective on Analytical Sciences,” *Anal. Chem.* **1994**, 66, 251A-263A.
- Tyson, J. *Analysis: What Analytical Chemists Do*, Royal Society of Chemistry: Cambridge, England 1988.

For additional discussion of clinical assays based on paper-based microfluidic devices, see the following papers.

- Ellerbee, A. K.; Phillips, S. T.; Siegel, A. C.; Mirica, K. A.; Martinez, A. W.; Striehl, P.; Jain, N.; Prentiss, M.; Whitesides, G. M. “Quantifying Colorimetric Assays in Paper-Based Microfluidic Devices by Measuring the Transmission of Light Through Paper,” *Anal. Chem.* **2009**, 81, 8447–8452.
- Martinez, A. W.; Phillips, S. T.; Whitesides, G. M. “Diagnostics for the Developing World: Microfluidic Paper-Based Analytical Devices,” *Anal. Chem.* **2010**, 82, 3–10.

This textbook provides one presentation introducing the discipline of analytical chemistry. There are other textbooks for introductory courses in analytical chemistry and you may find it useful to consult them when you encounter a difficult concept; often a fresh perspective will help crystallize your understanding. The textbooks listed here are excellent resources.

- Enke, C. *The Art and Science of Chemical Analysis*, Wiley: New York.
- Harris, D. *Quantitative Chemical Analysis*, W. H. Freeman and Company: New York.
- Kellner, R.; Mermet, J.-M.; Otto, M.; Valcárcel, M.; Widmer, H. M. *Analytical Chemistry*, Wiley-VCH: Weinheim, Germany.
- Rubinson, J. F.; Rubinson, K. A. *Contemporary Chemical Analysis*, Prentice Hall: Upper Saddle River, NJ.

- Skoog, D. A.; West, D. M.; Holler, F. J. *Fundamentals of Analytical Chemistry*, Saunders: Philadelphia.

To explore the practice of modern analytical chemistry there is no better resource than the primary literature. The following journals publish broadly in the area of analytical chemistry.

- [Analytical Chemistry](#) [Analytical Chimica Acta](#) [Analyst](#) [Talanta](#)

Chapter 2

The following two web sites contain useful information about the SI system of units.

- <http://www.bipm.org/en/home/> – The home page for the Bureau International des Poids and Measures.
- <http://physics.nist.gov/cuu/Units/index.html> – The National Institute of Standards and Technology's introduction to SI units.

For a chemist's perspective on the SI units for mass and amount, consult the following papers.

- Freeman, R. D. "SI for Chemists: Persistent Problems, Solid Solutions," *J. Chem. Educ.* **2003**, *80*, 16-20.
- Gorin, G. "Mole, Mole per Liter, and Molar: A Primer on SI and Related Units for Chemistry Students," *J. Chem. Educ.* **2003**, *80*, 103-104.

The following are useful resources for maintaining a laboratory notebook and for preparing laboratory reports.

- Coghill, A. M.; Garson, L. M. (eds) *The ACS Style Guide: Effective Communication of Scientific Information*, 3rd Edition, American Chemical Society: Washington, D. C.; 2006.
- Kanare, H. M. *Writing the Laboratory Notebook*, American Chemical Society: Washington, D. C.; 1985.

The following texts provide instructions for using spreadsheets in analytical chemistry.

- de Levie, R. *How to Use Excel[®] in Analytical Chemistry and in General Scientific Data Analysis*, Cambridge University Press: Cambridge, UK, 2001.
- Diamond, D.; Hanratty, V. C. A., *Spreadsheet Applications in Chemistry*, Wiley-Interscience: New York, 1997.
- Feiser, H. *Concepts and Calculations in Analytical Chemistry: A Spreadsheet Approach*, CRC Press: Boca Raton, FL, 1992.

The following is a classical text emphasizing the application of intuitive thinking when solving problems.

- Harte, J. *Consider a Spherical Cow: A Course in Environmental Problem Solving*, University Science Books: Sausalito, CA, 1988.

Chapter 3

The International Union of Pure and Applied Chemistry (IUPAC) maintains a web-based compendium of analytical terminology. You can find it at the following web site.

- http://old.iupac.org/publications/analytical_compendium/

The following papers provide alternative schemes for classifying analytical methods.

- Booksh, K. S.; Kowalski, B. R. "Theory of Analytical Chemistry," *Anal. Chem.* **1994**, *66*, 782A–791A.
- Phillips, J. B. "Classification of Analytical Methods," *Anal. Chem.* **1981**, *53*, 1463A–1470A.
- Valcárcel, M.; Luque de Castro, M. D. "A Hierarchical Approach to Analytical Chemistry," *Trends Anal. Chem.* **1995**, *14*, 242–250.
- Valcárcel, M.; Simonet, B. M. "Types of Analytical Information and Their Mutual Relationships," *Trends Anal. Chem.* **1995**, *14*, 490–495.

Further details on criteria for evaluating analytical methods may be found in the following series of papers.

- Wilson, A. L. "The Performance-Characteristics of Analytical Methods", Part I-*Talanta*, **1970**, *17*, 21–29; Part II-*Talanta*, **1970**, *17*, 31–44; Part III-*Talanta*, **1973**, *20*, 725–732; Part IV-*Talanta*, **1974**, *21*, 1109–1121.

For a point/counterpoint debate on the meaning of sensitivity consult the following two papers and two letters of response.

- Ekins, R.; Edwards, P. "On the Meaning of 'Sensitivity'," *Clin. Chem.* **1997**, *43*, 1824–1831.
- Ekins, R.; Edwards, P. "On the Meaning of 'Sensitivity:' A Rejoinder," *Clin. Chem.* **1998**, *44*, 1773–1776.
- Pardue, H. L. "The Inseparable Triangle: Analytical Sensitivity, Measurement Uncertainty, and Quantitative Resolution," *Clin. Chem.* **1997**, *43*, 1831–1837.
- Pardue, H. L. "Reply to 'On the Meaning of 'Sensitivity:' A Rejoinder'," *Clin. Chem.* **1998**, *44*, 1776–1778.

Several texts provide analytical procedures for specific analytes in well-defined matrices.

- Basset, J.; Denney, R. C.; Jeffery, G. H.; Mendham, J. *Vogel's Textbook of Quantitative Inorganic Analysis*, 4th Edition; Longman: London, 1981.
- Csuros, M. *Environmental Sampling and Analysis for Technicians*, Lewis: Boca Raton, 1994.
- Keith, L. H. (ed) *Compilation of EPA's Sampling and Analysis Methods*, Lewis: Boca Raton, 1996
- Rump, H. H.; Krist, H. *Laboratory Methods for the Examination of Water, Wastewater and Soil*, VCH Publishers: NY, 1988.
- *Standard Methods for the Analysis of Waters and Wastewaters*, 21st Edition, American Public Health Association: Washington, D. C.; 2005.

For a review of the importance of analytical methodology in today's regulatory environment, consult the following text.

- Miller, J. M.; Crowther, J. B. (eds) *Analytical Chemistry in a GMP Environment*, John Wiley & Sons: New York, 2000.

Chapter 4

The following experiments provide useful introductions to the statistical analysis of data in the analytical chemistry laboratory.

- Bularzik, J. “The Penny Experiment Revisited: An Illustration of Significant Figures, Accuracy, Precision, and Data Analysis,” *J. Chem. Educ.* **2007**, *84*, 1456–1458.
- Columbia, M. R. “The Statistics of Coffee: 1. Evaluation of Trace Metals for Establishing a Coffee’s Country of Origin Based on a Means Comparison,” *Chem. Educator* **2007**, *12*, 260–262.
- Cunningham, C. C.; Brown, G. R.; St Pierre, L. E. “Evaluation of Experimental Data,” *J. Chem. Educ.* **1981**, *58*, 509–511.
- Edminston, P. L.; Williams, T. R. “An Analytical Laboratory Experiment in Error Analysis: Repeated Determination of Glucose Using Commercial Glucometers,” *J. Chem. Educ.* **2000**, *77*, 377–379.
- Gordus, A. A. “Statistical Evaluation of Class Data for Two Buret Readings,” *J. Chem. Educ.* **1987**, *64*, 376–377.
- Harvey, D. T. “Statistical Evaluation of Acid/Base Indicators,” *J. Chem. Educ.* **1991**, *68*, 329–331.
- Hibbert, D. B. “Teaching modern data analysis with The Royal Austrian Chemical Institute’s titration competition,” *Aust. J. Ed. Chem.* **2006**, *66*, 5–11.
- Johll, M. E.; Poister, D.; Ferguson, J. “Statistical Comparison of Multiple Methods for the Determination of Dissolved Oxygen Levels in Natural Water,” *Chem. Educator* **2002**, *7*, 146–148.
- Jordon, A. D. “Which Method is Most Precise; Which is Most Accurate?,” *J. Chem. Educ.* **2007**, *84*, 1459–1460.
- Olsen, R. J. “Using Pooled Data and Data Visualization To Introduce Statistical Concepts in the General Chemistry Laboratory,” *J. Chem. Educ.* **2008**, *85*, 544–545.
- O’Reilly, J. E. “The Length of a Pestle,” *J. Chem. Educ.* **1986**, *63*, 894–896.
- Paselk, R. A. “An Experiment for Introducing Statistics to Students of Analytical and Clinical Chemistry,” *J. Chem. Educ.* **1985**, *62*, 536.
- Puignou, L.; Llauradó, M. “An Experimental Introduction to Interlaboratory Exercises in Analytical Chemistry,” *J. Chem. Educ.* **2005**, *82*, 1079–1081.
- Quintar, S. E.; Santagata, J. P.; Villegas, O. I.; Cortinez, V. A. “Detection of Method Effects on Quality of Analytical Data,” *J. Chem. Educ.* **2003**, *80*, 326–329.
- Richardson, T. H. “Reproducible Bad Data for Instruction in Statistical Methods,” *J. Chem. Educ.* **1991**, *68*, 310–311.
- Salzsieder, J. C. “Statistical Analysis Experiment for Freshman Chemistry Lab,” *J. Chem. Educ.* **1995**, *72*, 623.
- Samide, M. J. “Statistical Comparison of Data in the Analytical Laboratory,” *J. Chem. Educ.* **2004**, *81*, 1641–1643.
- Sheeran, D. “Copper Content in Synthetic Copper Carbonate: A Statistical Comparison of Experimental and Expected Results,” *J. Chem. Educ.* **1998**, *75*, 453–456.
- Spencer, R. D. “The Dependence of Strength in Plastics upon Polymer Chain Length and Chain Orientation,” *J. Chem. Educ.* **1984**, *61*, 555–563.

- Stolzberg, R. J. “Do New Pennies Lose Their Shells? Hypothesis Testing in the Sophomore Analytical Chemistry Laboratory,” *J. Chem. Educ.* **1998**, *75*, 1453–1455.
- Stone, C. A.; Mumaw, L. D. “Practical Experiments in Statistics,” *J. Chem. Educ.* **1995**, *72*, 518–524.
- Thomasson, K.; Lofthus-Merschman, S.; Humbert, M.; Kulevsky, N. “Applying Statistics in the Undergraduate Chemistry Laboratory: Experiments with Food Dyes,” *J. Chem. Educ.* **1998**, *75*, 231–233.
- Vitha, M. F.; Carr, P. W. “A Laboratory Exercise in Statistical Analysis of Data,” *J. Chem. Educ.* **1997**, *74*, 998–1000.

A more comprehensive discussion of the analysis of data, covering all topics considered in this chapter as well as additional material, can be found in any textbook on statistics or data analysis; several such texts are listed here.

- Anderson, R. L. *Practical Statistics for Analytical Chemists*, Van Nostrand Reinhold: New York; 1987.
- Graham, R. C. *Data Analysis for the Chemical Sciences*, VCH Publishers: New York; 1993.
- Mark, H.; Workman, J. *Statistics in Spectroscopy*, Academic Press: Boston; 1991.
- Mason, R. L.; Gunst, R. F.; Hess, J. L. *Statistical Design and Analysis of Experiments*; Wiley: New York, 1989.
- Massart, D. L.; Vandeginste, B. G. M.; Buydens, L. M. C.; De Jong, S.; Lewi, P. J.; Smeyers-Verbeke, J. *Handbook of Chemometrics and Qualimetrics*, Elsevier: Amsterdam, 1997.
- Miller, J. C.; Miller, J. N. *Statistics for Analytical Chemistry*, Ellis Horwood PTR Prentice-Hall: New York; 3rd Edition, 1993.
- *NIST/SEMATECH e-Handbook of Statistical Methods*, <http://www.itl.nist.gov/div898/handbook/>, 2006.
- Sharaf, M. H.; Illman, D. L.; Kowalski, B. R. *Chemometrics*, Wiley-Interscience: New York; 1986.

The importance of defining statistical terms is covered in the following papers.

- Analytical Methods Committee “Terminology—the key to understanding analytical science. Part 1: Accuracy, precision and uncertainty,” AMC Technical Brief No. 13, Sept. 2003 (http://www.rsc.org/lap/rsccom/amc/amc_index.htm).
- Goedart, M. J.; Verdonk, A. H. “The Development of Statistical Concepts in a Design-Oriented Laboratory Course in Scientific Measuring,” *J. Chem. Educ.* **1991**, *68*, 1005–1009.
- Sánchez, J. M. “Teaching Basic Applied Statistics in University Chemistry Courses: Students’ Misconceptions,” *Chem. Educator* **2006**, *11*, 1–4.
- Thompson, M. “Towards a unified model of errors in analytical measurements,” *Analyst* **2000**, *125*, 2020–2025.
- Treptow, R. S. “Precision and Accuracy in Measurements,” *J. Chem. Educ.* **1998**, *75*, 992–995.

The detection of outliers, particularly when working with a small number of samples, is discussed in the following papers.

- Analytical Methods Committee “Robust Statistics—How Not To Reject Outliers Part 1. Basic Concepts,” *Analyst* **1989**, *114*, 1693–1697.

- Analytical Methods Committee “Robust Statistics—How Not to Reject Outliers Part 2. Inter-laboratory Trials,” *Analyst* **1989**, *114*, 1699–1702.
- Analytical Methods Committee “Robust statistics: a method of coping with outliers,” AMC Technical Brief No. 6, April 2001 (http://www.rsc.org/lap/rsccom/amc/amc_index.htm).
- Efstathiou, C. “Stochastic Calculation of Critical Q-Test Values for the Detection of Outliers in Measurements,” *J. Chem. Educ.* **1992**, *69*, 773–736.
- Efstathiou, C. “Estimation of type 1 error probability from experimental Dixon’s Q parameter on testing for outliers within small data sets,” *Talanta* **2006**, *69*, 1068–1071.
- Kelly, P. C. “Outlier Detection in Collaborative Studies,” *Anal. Chem.* **1990**, *73*, 58–64.
- Mitschele, J. “Small Sample Statistics,” *J. Chem. Educ.* **1991**, *68*, 470–473.

The following papers provide additional information on error and uncertainty, including the propagation of uncertainty.

- Andraos, J. “On the Propagation of Statistical Errors for a Function of Several Variables,” *J. Chem. Educ.* **1996**, *73*, 150–154.
- Donato, H.; Metz, C. “A Direct Method for the Propagation of Error Using a Personal Computer Spreadsheet Program,” *J. Chem. Educ.* **1988**, *65*, 867–868.
- Gordon, R.; Pickering, M.; Bisson, D. “Uncertainty Analysis by the ‘Worst Case’ Method,” *J. Chem. Educ.* **1984**, *61*, 780–781.
- Guare, C. J. “Error, Precision and Uncertainty,” *J. Chem. Educ.* **1991**, *68*, 649–652.
- Guedens, W. J.; Yperman, J.; Mullens, J.; Van Poucke, L. C.; Pauwels, E. J. “Statistical Analysis of Errors: A Practical Approach for an Undergraduate Chemistry Lab Part 1. The Concept,” *J. Chem. Educ.* **1993**, *70*, 776–779
- Guedens, W. J.; Yperman, J.; Mullens, J.; Van Poucke, L. C.; Pauwels, E. J. “Statistical Analysis of Errors: A Practical Approach for an Undergraduate Chemistry Lab Part 2. Some Worked Examples,” *J. Chem. Educ.* **1993**, *70*, 838–841.
- Heydorn, K. “Detecting Errors in Micro and Trace Analysis by Using Statistics,” *Anal. Chim. Acta* **1993**, *283*, 494–499.
- Hund, E.; Massart, D. L.; Smeyers-Verbeke, J. “Operational definitions of uncertainty,” *Trends Anal. Chem.* **2001**, *20*, 394–406.
- Kragten, J. “Calculating Standard Deviations and Confidence Intervals with a Universally Applicable Spreadsheet Technique,” *Analyst* **1994**, *119*, 2161–2165.
- Taylor, B. N.; Kuyatt, C. E. “Guidelines for Evaluating and Expressing the Uncertainty of NIST Measurement Results,” NIST Technical Note 1297, 1994.
- Yates, P. C. “A Simple Method for Illustrating Uncertainty Analysis,” *J. Chem. Educ.* **2001**, *78*, 770–771.

Consult the following resources for a further discussion of detection limits.

- Boumans, P. W. J. M. “Detection Limits and Spectral Interferences in Atomic Emission Spectrometry,” *Anal. Chem.* **1984**, *66*, 459A–467A.
- Currie, L. A. “Limits for Qualitative Detection and Quantitative Determination: Application to Radiochemistry,” *Anal. Chem.* **1968**, *40*, 586–593.

- Currie, L. A. (ed.) *Detection in Analytical Chemistry: Importance, Theory and Practice*, American Chemical Society: Washington, D. C., 1988.
- Ferrus, R.; Egea, M. R. “Limit of discrimination, limit of detection and sensitivity in analytical systems,” *Anal. Chim. Acta* **1994**, *287*, 119–145.
- Glaser, J. A.; Foerst, D. L.; McKee, G. D.; Quave, S. A.; Budde, W. L. “Trace analyses for wastewaters,” *Environ. Sci. Technol.* **1981**, *15*, 1426–1435.
- Kimbrough, D. E.; Wakakuwa, J. “Quality Control Level: An Introduction to Detection Levels,” *Environ. Sci. Technol.* **1994**, *28*, 338–345.

The following resources provide additional information on using Excel, including reports of errors in its handling of some statistical procedures.

- McCollough, B. D.; Wilson, B. “On the accuracy of statistical procedures in Microsoft Excel 2000 and Excel XP,” *Comput. Statist. Data Anal.* **2002**, *40*, 713–721.
- Morgon, S. L.; Deming, S. N. “Guide to Microsoft *Excel* for calculations, statistics, and plotting data,” (http://www.chem.sc.edu/faculty/morgan/resources/Excel/Excel_Guide_Morgan.pdf).
- Pottel, H. “Statistical flaws in Excel,” (<http://www.coventry.ac.uk/ec/~nhunt/pottel.pdf>).

To learn more about using R, consult the following resources.

- Chambers, J. M. *Software for Data Analysis: Programming with R*, Springer: New York, 2008.
- Maindonald, J.; Braun, J. *Data Analysis and Graphics Using R*, Cambridge University Press: Cambridge, UK, 2003.
- Sarkar, D. *Lattice: Multivariate Data Visualization With R*, Springer: New York, 2008.

The following papers provide insight into visualizing data.

- Analytical Methods Committee “Representing data distributions with kernel density estimates,” AMC Technical Brief, March 2006 (http://www.rsc.org/lap/rsccom/amc/amc_index.htm).
- Frigge, M.; Hoaglin, D. C.; Iglewicz, B. “Some Implementations of the Boxplot,” *The American Statistician* **1989**, *43*, 50–54.

Gathered here are links to on-line computational tools, simulations, and tutorials, many of which are found on the Analytical Sciences Digital Library.

- Applets for Statistics ([link](#)).
- GraphPad QuickCalcs: Free On-Line Calculators ([link](#)).
- Introduction to Data Analysis ([link](#)).
- Introduction to Probability and Statistics ([link](#)).
- Overway, K. “Population versus Sampling Statistics: A Spreadsheet Exercise,” *J. Chem. Educ.* **2008** *85*, 749 ([link](#)).
- Van Bramer, S. E. “A Brief Introduction to the Gaussian Distribution, Sample Statistics, and the Student’s t Statistic,” *J. Chem. Educ.* **2007**, *84*, 1231 ([link](#)).
- Web Tutorials in Chemistry—Statistics ([link](#)).

Chapter 5

Although there are many experiments in the literature that incorporate external standards, the method of standard additions, or internal standards, the issue of choosing a method standardization is not the experiment's focus. One experiment designed to consider the issue of selecting a method of standardization is given here.

- Harvey, D. T. "External Standards or Standard Additions? Selecting and Validating a Method of Standardization," *J. Chem. Educ.* **2002**, *79*, 613–615.

In addition to the texts listed as suggested readings in Chapter 4, the following text provide additional details on linear regression.

- Draper, N. R.; Smith, H. *Applied Regression Analysis*, 2nd. ed.; Wiley: New York, 1981.

The following articles providing more details about linear regression.

- Analytical Methods Committee "Is my calibration linear?" AMC Technical Brief, December 2005 (<http://www.rsc.org/pdf/amc/brief3.pdf>).
- Badertscher, M.; Pretsch, E. "Bad results from good data," *Trends Anal. Chem.* **2006**, *25*, 1131–1138.
- Boqué, R.; Rius, F. X.; Massart, D. L. "Straight Line Calibration: Something More Than Slopes, Intercepts, and Correlation Coefficients," *J. Chem. Educ.* **1993**, *70*, 230–232.
- Danzer, K.; Currie, L. A. "Guidelines for Calibration in Analytical Chemistry. Part 1. Fundamentals and Single Component Calibration," *Pure Appl. Chem.* **1998**, *70*, 993–1014.
- Henderson, G. "Lecture Graphic Aids for Least-Squares Analysis," *J. Chem. Educ.* **1988**, *65*, 1001–1003.
- Logan, S. R. "How to Determine the Best Straight Line," *J. Chem. Educ.* **1995**, *72*, 896–898.
- Miller, J. N. "Basic Statistical Methods for Analytical Chemistry. Part 2. Calibration and Regression Methods," *Analyst* **1991**, *116*, 3–14.
- Renman, L., Jagner, D. "Asymmetric Distribution of Results in Calibration Curve and Standard Addition Evaluations," *Anal. Chim. Acta* **1997**, *357*, 157–166.
- Rodriguez, L. C.; Gamiz-Gracia; Almansa-Lopez, E. M.; Bosque-Sendra, J. M. "Calibration in chemical measurement processes. II. A methodological approach," *Trends Anal. Chem.* **2001**, *20*, 620–636.

Useful papers providing additional details on the method of standard additions are gathered here.

- Bader, M. "A Systematic Approach to Standard Addition Methods in Instrumental Analysis," *J. Chem. Educ.* **1980**, *57*, 703–706.
- Brown, R. J. C.; Roberts, M. R.; Milton, M. J. T. "Systematic error arising from 'Sequential' Standard Addition Calibrations. 2. Determination of Analyte Mass Fraction in Blank Solutions," *Anal. Chim. Acta* **2009**, *648*, 153–156.
- Brown, R. J. C.; Roberts, M. R.; Milton, M. J. T. "Systematic error arising from 'Sequential' Standard Addition Calibrations: Quantification and correction," *Anal. Chim. Acta* **2007**, *587*, 158–163.
- Bruce, G. R.; Gill, P. S. "Estimates of Precision in a Standard Additions Analysis," *J. Chem. Educ.* **1999**, *76*, 805–807.
- Kelly, W. R.; MacDonald, B. S.; Guthrie "Gravimetric Approach to the Standard Addition Method in Instrumental Analysis. 1." *Anal. Chem.* **2008**, *80*, 6154–6158.

- Nimura, Y.; Carr, M. R. "Reduction of the Relative Error in the Standard Additions Method," *Analyst* **1990**, *115*, 1589–1595.

The following papers discuss the importance of weighting experimental data when use linear regression.

- Analytical Methods Committee "Why are we weighting?" AMC Technical Brief, June 2007 (http://www.rsc.org/images/brief27_tcm18-92066.pdf)
- Karolczak, M. "To Weight or Not to Weight? An Analyst's Dilemma," *Current Separations* **1995**, *13*, 98–104.

Algorithms for performing a linear regression with errors in both X and Y are discussed in the following papers. Also included here are papers that address the difficulty of using linear regression to compare two analytical methods.

- Irvin, J. A.; Quickenden, T. L. "Linear Least Squares Treatment When There are Errors in Both x and y ," *J. Chem. Educ.* **1983**, *60*, 711–712.
- Kalantar, A. H. "Kerrich's Method for $y = \alpha x$ Data When Both y and x Are Uncertain," *J. Chem. Educ.* **1991**, *68*, 368–370.
- Macdonald, J. R.; Thompson, W. J. "Least-Squares Fitting When Both Variables Contain Errors: Pitfalls and Possibilities," *Am. J. Phys.* **1992**, *60*, 66–73.
- Martin, R. F. "General Deming Regression for Estimating Systematic Bias and Its Confidence Interval in Method-Comparison Studies," *Clin. Chem.* **2000**, *46*, 100–104.
- Ogren, P. J.; Norton, J. R. "Applying a Simple Linear Least-Squares Algorithm to Data with Uncertainties in Both Variables," *J. Chem. Educ.* **1992**, *69*, A130–A131.
- Ripley, B. D.; Thompson, M. "Regression Techniques for the Detection of Analytical Bias," *Analyst* **1987**, *112*, 377–383.

Outliers present a problem for a linear regression analysis. The following papers discuss the use of robust linear regression techniques.

- Glaister, P. "Robust Linear Regression Using Thiel's Method," *J. Chem. Educ.* **2005**, *82*, 1472–1473.
- Glasser, L. "Dealing with Outliers: Robust, Resistant Regression," *J. Chem. Educ.* **2007**, *84*, 533–534.
- Ortiz, M. C.; Sarabia, L. A.; Herrero, A. "Robust regression techniques. A useful alternative for the detection of outlier data in chemical analysis," *Talanta* **2006**, *70*, 499–512.

The following papers discuss some of the problems with using linear regression to analyze data that has been mathematically transformed into a linear form, as well as alternative methods of evaluating curvilinear data.

- Chong, D. P. "On the Use of Least Squares to Fit Data in Linear Form," *J. Chem. Educ.* **1994**, *71*, 489–490.
- Hinshaw, J. V. "Nonlinear Calibration," *LCGC* **2002**, *20*, 350–355.
- Lieb, S. G. "Simplex Method of Nonlinear Least-Squares - A Logical Complementary Method to Linear Least-Squares Analysis of Data," *J. Chem. Educ.* **1997**, *74*, 1008–1011.
- Zielinski, T. J.; Allendoerfer, R. D. "Least Squares Fitting of Nonlinear Data in the Undergraduate Laboratory," *J. Chem. Educ.* **1997**, *74*, 1001–1007.

More information on multivariate and multiple regression can be found in the following papers.

- Danzer, K.; Otto, M.; Currie, L. A. "Guidelines for Calibration in Analytical Chemistry. Part 2. Multispecies Calibration," *Pure Appl. Chem.* 2004, 76, 1215–1225.
- Escandar, G. M.; Faber, N. M.; Goicoechea, H. C.; de la Pena, A. M.; Olivieri, A.; Poppi, R. J. "Second- and third-order multivariate calibration: data, algorithms and applications," *Trends Anal. Chem.* **2007**, 26, 752–765.
- Kowalski, B. R.; Seasholtz, M. B. "Recent Developments in Multivariate Calibration," *J. Chemometrics* **1991**, 5, 129–145.
- Lang, P. M.; Kalivas, J. H. "A Global Perspective on Multivariate Calibration Methods," *J. Chemometrics* **1993**, 7, 153–164.
- Madden, S. P.; Wilson, W.; Dong, A.; Geiger, L.; Mecklin, C. J. "Multiple Linear Regression Using a Graphing Calculator," *J. Chem. Educ.* 2004, 81, 903–907.
- Olivieri, A. C.; Faber, N. M.; Ferré, J.; Boqué, R.; Kalivas, J. H.; Mark, H. "Uncertainty Estimation and Figures of Merit for Multivariate Calibration," *Pure Appl. Chem.* **2006**, 78, 633–661.

An additional discussion on method blanks, including the use of the total Youden blank, is found in the following papers.

- Cardone, M. J. "Detection and Determination of Error in Analytical Methodology. Part II. Correction for Corrigible Systematic Error in the Course of Real Sample Analysis," *J. Assoc. Off. Anal. Chem.* **1983**, 66, 1283–1294.
- Cardone, M. J. "Detection and Determination of Error in Analytical Methodology. Part IIB. Direct Computational Technique for Making Corrigible Systematic Error Corrections," *J. Assoc. Off. Anal. Chem.* **1985**, 68, 199–202.
- Ferrus, R.; Torrades, F. "Bias-Free Adjustment of Analytical Methods to Laboratory Samples in Routine Analytical Procedures," *Anal. Chem.* **1988**, 60, 1281–1285.
- Vitha, M. F.; Carr, P. W.; Mabbott, G. A. "Appropriate Use of Blanks, Standards, and Controls in Chemical Measurements," *J. Chem. Educ.* **2005**, 82, 901–902.

There are a variety of computational packages for completing linear regression analyses. These papers provide details on their use in a variety of contexts.

- Espinosa-Mansilla, A.; de la Peña, A. M.; González-Gómez, D. "Using Univariate Linear Regression Calibration Software in the MATLAB Environment. Application to Chemistry Laboratory Practices," *Chem. Educator* **2005**, 10, 1–9.
- Harris, D. C. "Nonlinear Least-Squares Curve Fitting with Microsoft Excel Solver," *J. Chem. Educ.* **1998**, 75, 119–121.
- Kim, M. S.; Bukart, M.; Kim, M. H. "A Method Visual Interactive Regression," *J. Chem. Educ.* **2006**, 83, 1884.
- Machuca-Herrera, J. G. "Nonlinear Curve Fitting with Spreadsheets," *J. Chem. Educ.* **1997**, 74, 448–449.
- Smith, E. T.; Belogay, E. A.; Hóim "Linear Regression and Error Analysis for Calibration Curves and Standard Additions: An Excel Spreadsheet Exercise for Undergraduates," *Chem. Educator* 2010, 15, 100–102.

- Smith, E. T.; Belogay, E. A.; Hóim “Using Multiple Linear Regression to Analyze Mixtures: An Excel Spreadsheet Exercise for Undergraduates,” *Chem. Educator* 2010, 15, 103–107.
- Young, S. H.; Wierzbicki, A. “Mathcad in the Chemistry Curriculum. Linear Least-Squares Regression,” *J. Chem. Educ.* **2000**, 77, 669.
- Young, S. H.; Wierzbicki, A. “Mathcad in the Chemistry Curriculum. Non-Linear Least-Squares Regression,” *J. Chem. Educ.* **2000**, 77, 669.

Gathered here are links to on-line computational tools, simulations, and tutorials, many of which are found on the Analytical Sciences Digital Library.

- Multiple Regression ([link](#)).
- Non-Parametric Regression with Errors in X and Y ([link](#)).
- Linear Regression Tutorial ([link](#)).
- Modeling Data Tutorial ([link](#)).

Chapter 6

The following experiments involve the experimental determination of equilibrium constants, the characterization of buffers, and, in some cases, demonstrate the importance of activity effects.

- “The Effect of Ionic Strength on an Equilibrium Constant (A Class Study)” in *Chemical Principles in Practice*, J. A. Bell, Ed., Addison-Wesley: Reading, MA, 1967.
- “Equilibrium Constants for Calcium Iodate Solubility and Iodic Acid Dissociation” in *Chemical Principles in Practice*, J. A. Bell, Ed., Addison-Wesley: Reading, MA, 1967.
- “The Solubility of Silver Acetate” in *Chemical Principles in Practice*, J. A. Bell, Ed., Addison-Wesley: Reading, MA, 1967.
- Cobb, C. L.; Love, G. A. “Iron(III) Thiocyanate Revisited: A Physical Chemistry Equilibrium Lab Incorporating Ionic Strength Effects,” *J. Chem. Educ.* **1998**, *75*, 90–92.
- Green, D. B.; Rechtsteiner, G.; Honodel, A. “Determination of the Thermodynamic Solubility Product, K_{sp} , of PbI_2 Assuming Nonideal Behavior,” *J. Chem. Educ.* **1996**, *73*, 789–792.
- Russo, S. O.; Hanania, I. H. “Buffer Capacity,” *J. Chem. Educ.* **1987**, *64*, 817–819.
- Stolzberg, R. J. “Discovering a Change in Equilibrium Constant with Change in Ionic Strength,” *J. Chem. Educ.* **1999**, *76*, 640–641.
- Wiley, J. D. “The Effect of Ionic Strength on the Solubility of an Electrolyte,” *J. Chem. Educ.* **2004**, *81*, 1644–1646.

A nice discussion of Berthollet’s discovery of the reversibility of reactions is found in

- Roots-Bernstein, R. S. *Discovering*, Harvard University Press: Cambridge, MA, 1989.

The following texts provide additional coverage of equilibrium chemistry.

- Butler, J. N. *Ionic Equilibria: A Mathematical Approach*; Addison-Wesley: Reading, MA, 1964.
- Butler, J. N. *Solubility and pH Calculations*; Addison-Wesley: Reading, MA, 1973.
- Fernando, Q.; Ryan, M. D. *Calculations in Analytical Chemistry*, Harcourt Brace Jovanovich: New York, 1982.
- Freiser, H.; Fernando, Q. *Ionic Equilibria in Analytical Chemistry*, Wiley: New York, 1963.
- Freiser, H. *Concepts and Calculations in Analytical Chemistry*, CRC Press: Boca Raton, 1992.
- Gordus, A. A. *Schaum’s Outline of Analytical Chemistry*; McGraw-Hill: New York, 1985.
- Ramette, R. W. *Chemical Equilibrium and Analysis*, Addison-Wesley: Reading, MA, 1981.

The following papers discuss a variety of general aspects of equilibrium chemistry.

- Gordus, A. A. “Chemical Equilibrium I. The Thermodynamic Equilibrium Concept,” *J. Chem. Educ.* **1991**, *68*, 138–140.
- Gordus, A. A. “Chemical Equilibrium II. Deriving an Exact Equilibrium Equation,” *J. Chem. Educ.* **1991**, *68*, 215–217.
- Gordus, A. A. “Chemical Equilibrium III. A Few Math Tricks,” *J. Chem. Educ.* **1991**, *68*, 291–293.
- Gordus, A. A. “Chemical Equilibrium IV. Weak Acids and Bases,” *J. Chem. Educ.* **1991**, *68*, 397–399.
- Gordus, A. A. “Chemical Equilibrium VI. Buffer Solutions,” *J. Chem. Educ.* **1991**, *68*, 656–658.

- Gordus, A. A. "Chemical Equilibrium VII. Precipitates," *J. Chem. Educ.* **1991**, *68*, 927–930.
- Thomson, B. M.; Kessick, M. A. "On the Preparation of Buffer Solutions," *J. Chem. Educ.* **1981**, *58*, 743–746.
- Weltin, E. "Are the Equilibrium Concentrations for a Chemical Reaction Always Uniquely Determined by the Initial Concentrations?" *J. Chem. Educ.* **1990**, *67*, 548.
- Weltin, E. "Are the Equilibrium Compositions Uniquely Determined by the Initial Compositions? Properties of the Gibbs Free Energy Function," *J. Chem. Educ.* **1995**, *72*, 508–511.

Collected here are a papers discussing a variety of approaches to solving equilibrium problems.

- Ault, A. "Do pH in Your Head," *J. Chem. Educ.* **1999**, *76*, 936–938.
- Chaston, S. "Calculating Complex Equilibrium Concentrations by a Next Guess Factor Method," *J. Chem. Educ.* **1993**, *70*, 622–624.
- Donato, H. "Graphing Calculator Strategies for Solving Chemical Equilibrium Problems," *J. Chem. Educ.* **1999**, *76*, 632–634.
- Olivieri, A. C. "Solution of Acid-Base Equilibria by Successive Approximations," *J. Chem. Educ.* **1990**, *67*, 229–231.
- Weltin, E. "A Numerical Method to Calculate Equilibrium Concentrations for Single-Equation Systems," *J. Chem. Educ.* **1991**, *68*, 486–487.
- Weltin, E. "Calculating Equilibrium Concentrations," *J. Chem. Educ.* **1992**, *69*, 393–396.
- Weltin, E. "Calculating Equilibrium Concentrations for Stepwise Binding of Ligands and Polyprotic Acid-Base Systems," *J. Chem. Educ.* **1993**, *70*, 568–571.
- Weltin, E. "Equilibrium Calculations are Easier Than You Think - But You do Have to Think!" *J. Chem. Educ.* **1993**, *70*, 571–573.
- Weltin, E. "Calculating Equilibrium Concentrations by Iteration: Recycle Your Approximations," *J. Chem. Educ.* **1995**, *72*, 36–38.

Additional historical background on the development of the Henderson-Hasselbalch equation is provided by the following papers.

- de Levie, R. "The Henderson Approximation and the Mass Action Law of Guldberg and Waage," *Chem. Educator* **2002**, *7*, 132–135.
- de Levie, R. "The Henderson-Hasselbalch Equation: Its History and Limitations," *J. Chem. Educ.* **2003**, *80*, 146.

A simulation is a useful tool for helping students gain an intuitive understanding of a topic. Gathered here are some simulations for teaching equilibrium chemistry.

- Edmonson, L. J.; Lewis, D. L. "Equilibrium Principles: A Game for Students," *J. Chem. Educ.* **1999**, *76*, 502.
- Huddle, P. A.; White, M. W.; Rogers, F. "Simulations for Teaching Chemical Equilibrium," *J. Chem. Educ.* **2000**, *77*, 920–926.

The following papers provide additional resources on ionic strength, activity, and the effect of ionic strength and activity on equilibrium reactions and pH.

- Clark, R. W.; Bonicamp, J. M. "The K_{sp}-Solubility Conundrum," *J. Chem. Educ.* **1998**, *75*, 1182–1185.
- de Levie, R. "On Teaching Ionic Activity Effects: What, When, and Where?" *J. Chem. Educ.* **2005**, *82*, 878–884.
- McCarty, C. G.; Vitz, E. "pH Paradoxes: Demonstrating That It Is Not True That $\text{pH} = -\log[\text{H}^+]$," *J. Chem. Educ.* **2006**, *83*, 752–757.
- Ramshaw, J. D. "Fugacity and Activity in a Nutshell," *J. Chem. Educ.* **1995**, *72*, 601–603.
- Sastre de Vicente, M. E. "The Concept of Ionic Strength Eighty Years After Its Introduction," *J. Chem. Educ.* **2004**, *81*, 750–753.
- Solomon, T. "The Definition and Unit of Ionic Strength," *J. Chem. Educ.* **2001**, *78*, 1691–1692.

For a contrarian's view of equilibrium chemistry, please see the following papers.

- Hawkes, S. J. "Buffer Calculations Deceive and Obscure," *Chem. Educator*, **1996**, *1*, 1–8.
- Hawkes, S. J. "What Should We Teach Beginners About Solubility and Solubility Products?" *J. Chem. Educ.* **1998**, *75*, 1179–1181.
- Hawkes, S. J. "Complexation Calculations are Worse Than Useless," *J. Chem. Educ.* **1999**, *76*, 1099–1100.
- Hawkes, S. J. "Easy Deviation of $\text{pH} \approx (\text{p}K_{\text{a}1} + \text{p}K_{\text{a}2})/2$ Using Autoprotolysis of HA^- : Doubtful Value of the Supposedly More Rigorous Equation," *J. Chem. Educ.* **2000**, *77*, 1183–1184. See, also, an exchange of letters between J. J. Roberts and S. J. Hawkes, *J. Chem. Educ.* **2002**, *79*, 161–162.

Chapter 7

The following set of experiments and class exercises introduce students to the importance of sampling on the quality of analytical results.

- Bauer, C. F. "Sampling Error Lecture Demonstration," *J. Chem. Educ.* **1985**, *62*, 253.
- Canaes, L. S.; Brancalion, M. L.; Rossi, A. V.; Rath, S. "Using Candy Samples to Learn About Sampling Techniques and Statistical Evaluation of Data," *J. Chem. Educ.* **2008**, *85*, 1083–1088.
- Clement, R. E. "Environmental Sampling for Trace Analysis," *Anal. Chem.* **1992**, *64*, 1076A–1081A.
- Dunn, J. G.; Phillips, D. N.; van Bronswijk, W. "An Exercise to Illustrate the Importance of Sample Preparation in Chemical Analysis," *J. Chem. Educ.* **1997**, *74*, 1188–1191.
- Fritz, M. D. "A Demonstration of Sample Segregation," *J. Chem. Educ.* **2005**, *82*, 255–256.
- Guy, R. D.; Ramaley, L.; Wentzell, P. D. "An Experiment in the Sampling of Solids for Chemical Analysis," *J. Chem. Educ.* **1998**, *75*, 1028–1033.
- Hartman, J. R. "An In-Class Experiment to Illustrate the Importance of Sampling Techniques and Statistical Analysis of Data to Quantitative Analysis Students," *J. Chem. Educ.* **2000**, *77*, 1017–1018.
- Harvey, D. T. "Two Experiments Illustrating the Importance of Sampling in a Quantitative Chemical Analysis," *J. Chem. Educ.* **2002**, *79*, 360–363.
- Herrington, B. L. "A Demonstration of the Necessity for Care in Sampling," *J. Chem. Educ.* **1937**, *14*, 544.
- Kratochvil, B.; Reid, R. S.; Harris, W. E. "Sampling Error in a Particulate Mixture," *J. Chem. Educ.* **1980**, *57*, 518–520.
- Lochmuler, C. "Atomic Spectroscopy - Determination of Calcium and Magnesium in Sand with a Statistical Treatment of Measurements," published on the web at <http://www.chem.duke.edu/~clochmul/exp4/exp4.html>.
- Ross, M. R. "A Classroom Exercise in Sampling Technique," *J. Chem. Educ.* **2000**, *77*, 1015–1016.
- Settle, F. A.; Pleva, M. "The Weakest Link Exercise," *Anal. Chem.* **1999**, *71*, 538A–540A.
- Vitt, J. E.; Engstrom, R. C. "Effect of Sample Size on Sampling Error," *J. Chem. Educ.* **1999**, *76*, 99–100.

The following experiments describe homemade sampling devices for collecting samples in the field.

- Delumyea, R. D.; McCleary, D. L. "A Device to Collect Sediment Cores," *J. Chem. Educ.* **1993**, *70*, 172–173.
- Rockwell, D. M.; Hansen, T. "Sampling and Analyzing Air Pollution," *J. Chem. Educ.* **1994**, *71*, 318–322.
- Saxena, S.; Upadhyay, R.; Upadhyay, P. "A Simple and Low-Cost Air Sampler," *J. Chem. Educ.* **1996**, *73*, 787–788.
- Shooter, D. "Nitrogen Dioxide and Its Determination in the Atmosphere," *J. Chem. Educ.* **1993**, *70*, A133–A140.

The following experiments introduce students to methods for extracting analytes from their matrix.

- “Extract-Clean™ SPE Sample Preparation Guide Volume 1”, Bulletin No. 83, Alltech Associates, Inc. Deerfield, IL.
- Freeman, R. G.; McCurdy, D. L. “Using Microwave Sample Decomposition in Undergraduate Analytical Chemistry,” *J. Chem. Educ.* **1998**, *75*, 1033–1032.
- Snow, N. H.; Dunn, M.; Patel, S. “Determination of Crude Fat in Food Products by Supercritical Fluid Extraction and Gravimetric Analysis,” *J. Chem. Educ.* **1997**, *74*, 1108–1111.
- Yang, M. J.; Orton, M. L.; Pawliszyn, J. “Quantitative Determination of Caffeine in Beverages Using a Combined SPME-GC/MS Method,” *J. Chem. Educ.* **1997**, *74*, 1130–1132.

The following paper provides a general introduction to the terminology used in describing sampling.

- “Terminology—The key to understanding analytical science. Part 2: Sampling and sample preparation,” AMC Technical Brief No. 19, March 2005 ([link](#)).
- Majors, R. E. “Nomenclature for Sampling in Analytical Chemistry” *LC•GC* **1992**, *10*, 500–506.

Further information on the statistics of sampling is covered in the following papers and textbooks.

- “What is uncertainty from sampling, and why is it important?” AMC Technical Brief No. 16A, June 2004 ([link](#)).
- “Analytical and sampling strategy, fitness for purpose, and computer games,” AMC Technical Brief No. 20, August 2005 ([link](#)).
- “Measurement uncertainty arising from sampling: the new Eurachem Guide,” AMC Technical Brief No. 31, July 2008 ([link](#)).
- *Sampling for Analytical Purpose*, Gy, P. ed., Wiley: NY, 1998.
- Baiulescu, G. E.; Dumitrescu, P.; Zuaravescu, P. G. *Sampling*, Ellis Horwood: NY, 1991.
- Cohen, R. D. “How the Size of a Random Sample Affects How Accurately It Represents a Population,” *J. Chem. Educ.* **1992**, *74*, 1130–1132.
- Efstathiou, C. E. “On the sampling variance of ultra-dilute solutions,” *Talanta* **2000**, *52*, 711–715.
- Gerlach, R. W.; Dobb, D. E.; Raab, G. A.; Nocerino, J. M. *J. Chemom.* **2002**, *16*, 321–328.
- Gy, P. M. *Sampling of Particulate Materials: Theory and Practice*; Elsevier: Amsterdam, 1979.
- Gy, P. M. *Sampling of Heterogeneous and Dynamic Materials: Theories of Heterogeneity, Sampling and Homogenizing*; Elsevier: Amsterdam, 1992.
- Kratochvil, B.; Taylor, J. K. “Sampling for Chemical Analysis,” *Anal. Chem.* **1981**, *53*, 924A–938A.
- Kratochvil, B.; Goewie, C. E.; Taylor, J. K. “Sampling Theory for Environmental Analysis,” *Trends Anal. Chem.* **1986**, *5*, 253–256.
- Meyer, V. R. *LC•GC* **2002**, *20*, 106–112.
- Rohlf, F. J.; Akçakaya, H. R.; Ferraro, S. P. “Optimizing Composite Sampling Protocols,” *Environ. Sci. Technol.* **1996**, *30*, 2899–2905.
- Smith, R.; James, G. V. *The Sampling of Bulk Materials*; Royal Society of Chemistry: London, 1981.

The process of collecting a sample presents a variety of difficulties, particularly with respect to the analyte's integrity. The following papers provide representative examples of sampling problems.

- Barceló, D.; Hennion, M. C. "Sampling of Polar Pesticides from Water Matrices," *Anal. Chim. Acta* **1997**, *338*, 3–18.
- Batley, G. E.; Gardner, D. "Sampling and Storage of Natural Waters for Trace Metal Analysis," *Wat. Res.* **1977**, *11*, 745–756.
- Benoit, G.; Hunter, K. S.; Rozan, T. F. "Sources of Trace Metal Contamination Artifacts during Collection, Handling, and Analysis of Freshwaters," *Anal. Chem.* **1997**, *69*, 1006–1011
- Brittain, H. G. "Particle-Size Distribution II: The Problem of Sampling Powdered Solids," *Pharm. Technol.* July **2002**, 67–73.
- Ramsey, M. H. "Measurement Uncertainty Arising from Sampling: Implications for the Objectives of Geoanalysis," *Analyst*, **1997**, *122*, 1255–1260.
- Seiler, T-B; Schulze, T.; Hollert, H. "The risk of altering soil and sediment samples upon extract preparation for analytical and bio-analytical investigations—a review," *Anal. Bioanal. Chem.* **2008**, *390*, 1975–1985.

The following texts and articles provide additional information on methods for separating analytes and interferences.

- "Guide to Solid Phase Extraction," Bulletin 910, Sigma-Aldrich, 1998.
- "Solid Phase Microextraction: Theory and Optimization of Conditions," Bulletin 923, Sigma-Aldrich, 1998.
- *Microwave-Enhanced Chemistry: Fundamentals, Sample Preparation, and Applications*, Kingston, H. M.; Haswell, S. J., eds.; American Chemical Society: Washington, D.C., 1997.
- Anderson, R. *Sample Pretreatment and Separation*, Wiley: Chichester, 1987.
- Bettiol, C.; Stievano, L.; Bertelle, M.; Delfino, F.; Argese, E. "Evaluation of microwave-assisted acid extraction procedures for the determination of metal content and potential bioavailability in sediments," *Appl. Geochem.* **2008**, *23*, 1140–1151.
- Compton, T. R. *Direct Preconcentration Techniques*, Oxford Science Publications: Oxford, 1993.
- Compton, T. R. *Complex-Formation Preconcentration Techniques*, Oxford Science Publications: Oxford, 1993.
- Hinshaw, J. V. "Solid-Phase Microextraction," *LC•GC Europe* **2003**, *December*, 2–5.
- Karger, B. L.; Snyder, L. R.; Harvath, C. *An Introduction to Separation Science*, Wiley-Interscience: N. Y.; 1973.
- Majors, R. E.; Raynie, D. E. "Sample Preparation and Solid-Phase Extraction", *LC•GC* **1997**, *15*, 1106–1117.
- Luque de Castro, M. D.; Priego-Capote, F.; Sánchez-Ávila, N. "Is dialysis alive as a membrane-based separation technique?" *Trends Anal. Chem.* **2008**, *27*, 315–326.
- Mary, P.; Studer, V.; Tabeling, P. "Microfluidic Droplet-Based Liquid–Liquid Extraction," *Anal. Chem.* **2008**, *80*, 2680–2687.
- Miller, J. M. *Separation Methods in Chemical Analysis*, Wiley-Interscience: N. Y.; 1975.

- Morrison, G. H.; Freiser, H. *Solvent Extraction in Analytical Chemistry*, John Wiley and Sons: N. Y.; 1957.
- Pawliszyn, J. *Solid-Phase Microextraction: Theory and Practice*, Wiley: NY, 1997.
- Pawliszyn, J. "Sample Preparation: Quo Vadis?" *Anal. Chem.* **2003**, *75*, 2543–2558.
- Sulcek, Z.; Povondra, P. *Methods of Decomposition in Inorganic Analysis*; CRC Press: Boca Raton, FL, 1989.
- Theis, A. L.; Waldack, A. J.; Hansen, S. M.; Jeannot, M. A. "Headspace Solvent Microextraction," *Anal. Chem.* **2001**, *73*, 5651–5654.
- Thurman, E. M.; Mills, M. S. *Solid-Phase Extraction: Principles and Practice*, Wiley: NY, 1998.
- Zhang, Z.; Yang, M.; Pawliszyn, J. "Solid-Phase Microextraction," *Anal. Chem.* **1994**, *66*, 844A–853A.

Chapter 8

The following set of experiments introduce students to the applications of gravimetry.

- Burrows, H. D.; Ellis, H. A.; Odilora, C. A. "The Dehydrochlorination of PVC," *J. Chem. Educ.* **1995**, *72*, 448–450.
- Carmosini, N.; Ghoreshy, S. Koether, M. C. "The Gravimetric Analysis of Nickel Using a Microwave Oven," *J. Chem. Educ.* **1997**, *74*, 986–987.
- Harris, T. M. "Revitalizing the Gravimetric Determination in Quantitative Analysis Laboratory," *J. Chem. Educ.* **1995**, *72*, 355–356.
- Henrickson, C. H.; Robinson, P. R. "Gravimetric Determination of Calcium as $\text{CaC}_2\text{O}_4 \cdot \text{H}_2\text{O}$," *J. Chem. Educ.* **1979**, *56*, 341–342.
- Shaver, L. A. "Determination of Phosphates by the Gravimetric Quimociac Technique," *J. Chem. Educ.* **2008**, *85*, 1097–1098.
- Snow, N. H.; Dunn, M.; Patel, S. "Determination of Crude Fat in Food Products by Supercritical Fluid Extraction and Gravimetric Analysis," *J. Chem. Educ.* **1997**, *74*, 1108–1111.
- Thompson, R. Q.; Ghadiali, M. "Microwave Drying of Precipitates for Gravimetric Analysis," *J. Chem. Educ.* **1993**, *70*, 170–171.
- Wynne, A. M. "The Thermal Decomposition of Urea," *J. Chem. Educ.* **1987**, *64*, 180–182.

The following resources provide a general history of gravimetry.

- A History of Analytical Chemistry; Laitinen, H. A.; Ewing, G. W., Eds.; The Division of Analytical Chemistry of the American Chemical Society: Washington, D. C., 1977, pp. 10–24.
- Beck, C. M. "Classical Analysis: A Look at the Past, Present, and Future," *Anal. Chem.* **1991**, *63*, 993A–1003A; *Anal. Chem.* **1994**, *66*, 224A–239A

Consult the following texts for additional examples of inorganic and organic gravimetric methods include the following texts.

- Bassett, J.; Denney, R. C.; Jeffery, G. H.; Mendham, J. *Vogel's Textbook of Quantitative Inorganic Analysis*, Longman: London, 4th Ed., 1981.
- Erdey, L. *Gravimetric Analysis*, Pergamon: Oxford, 1965.
- Steymark, A. *Quantitative Organic Microanalysis*, The Blakiston Co.: NY, 1951.
- Wendlandt, W. W. *Thermal Methods of Analysis*, 2nd Ed. Wiley: NY. 1986.

For a review of isotope dilution mass spectrometry see the following article.

- Fassett, J. D.; Paulsen, P. J. "Isotope Dilution Mass Spectrometry for Accurate Elemental Analysis," *Anal. Chem.* **1989**, *61*, 643A–649A.

Chapter 9

The following set of experiments introduce students to the applications of titrimetry. Experiments are grouped into four categories based on the type of reaction (acid–base, complexation, redox, and precipitation). Additional experiments emphasizing potentiometric electrodes are found in Chapter 11.

Acid–base titrimetry

- Boiani, J. A. “The Gran Plot Analysis of an Acid Mixture,” *J. Chem. Educ.* **1986**, *63*, 724–726.
- Castillo, C. A.; Jaramillo, A. “An Alternative Procedure for Titration Curves of a Mixture of Acids of Different Strengths,” *J. Chem. Educ.* **1989**, *66*, 341.
- Clark, R. W.; White, G. D.; Bonicamp, J. M.; Watts, E. D. “From Titration Data to Buffer Capacities: A Computer Experiment for the Chemistry Lab or Lecture,” *J. Chem. Educ.* **1995**, *72*, 746–750.
- Clay, J. T.; Walters, E. A.; Brabson, G. D. “A Dibasic Acid Titration for the Physical Chemistry Laboratory” *J. Chem. Educ.* **1995**, *72*, 665–667.
- Crossno, S. K; Kalbus, L. H.; Kalbus, G. E. “Determinations of Carbon Dioxide by Titration,” *J. Chem. Educ.* **1996**, *73*, 175–176.
- Flowers, P. A. “Potentiometric Measurement of Transition Ranges and Titration Errors for Acid/Base Indicators,” *J. Chem. Educ.* **1997**, *74*, 846–847.
- Fuchsam, W. H.; Garg, Sandhya “Acid Content of Beverages,” *J. Chem. Educ.* **1990**, *67*, 67–68
- Graham. R.C.; DePew, S. “Determination of Ammonia in Household Cleaners,” *J. Chem. Educ.* **1983**, *60*, 765–766.
- Kalbus, L. H.; Petrucci, R. H.; Forman, J. E.; Kalbus, G. E. “Titration of Chromate-Dichromate Mixtures,” *J. Chem. Educ.* **1991**, *68*, 677–678.
- Kooser, A. S.; Jenkins, J. L.; Welch, L. E. “Acid–Base Indicators: A New Look at an Old Topic,” *J. Chem. Educ.* **2001**, *78*, 1504–1506.
- Kraft, A. “The Determination of the pK_a of Multiprotic, Weak Acids by Analyzing Potentiometric Acid–Base Titration Data with Difference Plots,” *J. Chem. Educ.* **2003**, *80*, 554–559.
- Murphy, J. “Determination of Phosphoric Acid in Cola Beverages,” *J. Chem. Educ.* **1983**, *60*, 420–421.
- Nyasulu, F.; Barlag, R.; Macklin, J. *Chem. Educator* **2008**, *13*, 289–294.
- Ophardt, C. E. “Acid Rain Analysis by Standard Addition Titration,” *J. Chem. Educ.* **1985**, *62*, 257–258.
- Partanen, J. I.; Kärki, M. H. “Determination of the Thermodynamic Dissociation Constant of a Weak Acid by Potentiometric Acid-Base Titration,” *J. Chem. Educ.* **1994**, *71*, A120–A122.
- Thompson, R. Q. “Identification of Weak Acids and Bases by Titration with Primary Standards,” *J. Chem. Educ.* **1988**, *65*, 179–180.
- Tucker, S. A.; Amszi, V. L.; Acree, Jr. W. E. “Studying Acid-Base Equilibria in Two-Phase Solvent Media,” *J. Chem. Educ.* **1993**, *70*, 80–82.

- Tucker, S. A.; Acree, Jr., W. E. "A Student-Designed Analytical Laboratory Method," *J. Chem. Educ.* **1994**, *71*, 71–74.
- Werner, J. A.; Werner, T. C. "Multifunctional Base Unknowns in the Introductory Analytical Chemistry Lab," *J. Chem. Educ.* **1991**, *68*, 600–601.

Complexation Titrimetry

- Ceretti, H.; Hughes, E. A.; Zalts, A. "The Softening of Hard Water and Complexometric Titrations," *J. Chem. Educ.* **1999**, *76*, 1420–1421.
- Fulton, R.; Ross, M.; Schroeder, K. "Spectrophotometric Titration of a Mixture of Calcium and Magnesium," *J. Chem. Educ.* **1986**, *63*, 721–723.
- Novick, S. G. "Complexometric Titration of Zinc," *J. Chem. Educ.* **1997**, *74*, 1463.
- Olsen, K. G.; Ulicny, L. J. "Reduction of Calcium Concentrations by the Brita Water Filtration System: A Practical Experiment in Titrimetry and Atomic Absorption Spectroscopy," *J. Chem. Educ.* **2001**, *78*, 941.
- Smith, R. L.; Popham, R. E. "The Quantitative Resolution of a Mixture of Group II Metal Ions by Thermometric Titration with EDTA," *J. Chem. Educ.* **1983**, *60*, 1076–1077.
- Yappert, M. C.; DuPré, D. B. "Complexometric Titrations: Competition of Complexing Agents in the Determination of Water Hardness with EDTA," *J. Chem. Educ.* **1997**, *74*, 1422–1423.

Redox Titrimetry

- Guenther, W. B. "Supertitrations: High-Precision Methods," *J. Chem. Educ.* **1988**, *65*, 1097–1098.
- Haddad, P. "Vitamin C Content of Commercial Orange Juices," *J. Chem. Educ.* **1977**, *54*, 192–193.
- Harris, D. C.; Hills, M. E.; Hewston, T. A. "Preparation, Iodometric Analysis and Classroom Demonstration of Superconductivity in $\text{YBa}_2\text{Cu}_3\text{O}_{8-x}$," *J. Chem. Educ.* **1987**, *64*, 847–850.
- Lau, O.-W.; Luk, S.-F.; Cheng, N. L. N.; Woo, H.-O. "Determination of Free Lime in Clinker and Cement by Iodometry," *J. Chem. Educ.* **2001**, *78*, 1671–1673.
- Phinyocheep, P.; Tang, I. M. "Determination of the Hole Concentration (Copper Valency) in the High T_c Superconductors," *J. Chem. Educ.* **1994**, *71*, A115–A118.
- Powell, J. R.; Tucker, S. A.; Acree, Jr., W. E.; Sees, J. A.; Hall, L. M. "A Student-Designed Potentiometric Titration: Quantitative Determination of Iron(II) by Caro's Acid Titration," *J. Chem. Educ.* **1996**, *73*, 984–986.

Precipitation Titrimetry

- Ueno, K.; Kina, K. "Colloid Titration - A Rapid Method for the Determination of Charged Colloid," *J. Chem. Educ.* **1985**, *62*, 627–629.

For a general history of titrimetry, see the following sources.

- *A History of Analytical Chemistry*; Laitinen, H. A.; Ewing, G. W., Eds.; The Division of Analytical Chemistry of the American Chemical Society: Washington, D. C., 1977, pp. 52–93.
- Kolthoff, I. M. "Analytical Chemistry in the USA in the First Quarter of This Century," *Anal. Chem.* **1994**, *66*, 241A–249A.

The use of weight instead of volume as a signal for titrimetry is reviewed in the following paper.

- Kratochvil, B.; Maitra, C. "Weight Titrations: Past and Present," *Am. Lab.* **1983**, January, 22–29.

A more thorough discussion of non-aqueous titrations, with numerous practical examples, is provided in the following text.

- Fritz, J. S. *Acid-Base Titrations in Nonaqueous Solvents*; Allyn and Bacon, Boston; 1973.

The sources listed below provides more details on the how potentiometric titration data may be used to calculate equilibrium constants.

- Babić, S.; Horvat, A. J. M.; Pavlović, D. M.; Kaštelan-Macan, M. "Determination of pKa values of active pharmaceutical ingredients," *Trends Anal. Chem.* **2007**, *26*, 1043–1061.
- Meloun, M.; Havel, J.; Högfeltdt, E. *Computation of Solution Equilibria*, Ellis Horwood Limited: Chichester, England; 1988.

The following provides additional information about Gran plots.

- Michalowski, T.; Kupiec, K.; Rymanowski, M. *Anal. Chim. Acta* **2008**, *606*, 172–183.
- Schwartz, L. M. "Advances in Acid-Base Gran Plot Methodology," *J. Chem. Educ.* **1987**, *64*, 947–950.
- Schwartz, L. M. "Uncertainty of a Titration Equivalence Point," *J. Chem. Educ.* **1992**, *69*, 879–883.

The following provide additional information about calculating or sketching titration curves.

- Barnum, D. "Predicting Acid–Base Titration Curves without Calculations," *J. Chem. Educ.* **1999**, *76*, 938–942.
- de Levie, R. "A simple expression for the redox titration curve," *J. Electroanal. Chem.* **1992**, *323*, 347–355.
- King, D. W. "A General Approach for Calculating Speciation and Posing Capacity of Redox Systems with Multiple Oxidation States: Application to Redox Titrations and the Generation of $p\varepsilon$ –pH," *J. Chem. Educ.* **2002**, *79*, 1135–1140.

For a complete discussion of the application of complexation titrimetry see the texts listed below.

- Pribil, R. *Applied Complexometry*, Pergamon Press: Oxford, 1982.
- Ringbom, A. *Complexation in Analytical Chemistry*, John Wiley and Sons, Inc.: New York, 1963.
- Schwarzenbach, G. *Complexometric Titrations*, Methuen & Co. Ltd: London, 1957.

A good source for additional examples of the application of all forms of titrimetry is

- *Vogel's Textbook of Quantitative Inorganic Analysis*, Longman: London, 4th Ed., 1981.

Chapter 10

The following set of experiments introduce students to the applications of spectroscopy. Experiments are grouped into five categories: UV/Vis spectroscopy, IR spectroscopy, atomic absorption and atomic emission, fluorescence and phosphorescence, and signal averaging.

UV/Vis Spectroscopy

- Abney, J. R.; Scalettar, B. A. "Saving Your Students' Skin. Undergraduate Experiments That Probe UV Protection by Sunscreens and Sunglasses," *J. Chem. Educ.* **1998**, *75*, 757–760.
- Ainscough, E. W.; Brodie, A. M. "The Determination of Vanillin in Vanilla Extract," *J. Chem. Educ.* **1990**, *67*, 1070–1071.
- Allen, H. C.; Brauers, T.; Finlayson-Pitts, B. J. "Illustrating Deviations in the Beer-Lambert Law in an Instrumental Analysis Laboratory: Measuring Atmospheric Pollutants by Differential Optical Absorption Spectrometry," *J. Chem. Educ.* **1997**, *74*, 1459–1462.
- Blanco, M.; Iturriaga, H.; Maspoch, S.; Tarín, P. "A Simple Method for Spectrophotometric Determination of Two-Components with Overlapped Spectra," *J. Chem. Educ.* **1989**, *66*, 178–180.
- Bonicamp, J. M.; Martin, K. L.; McBride, G. R.; Clark, R. W. "Beer's Law is Not a Straight Line: Amplification of Errors by Transformation," *Chem. Educator* **1999**, *4*, 81–88.
- Bruneau, E.; Lavabre, D.; Levy, G.; Micheau, J. C. "Quantitative Analysis of Continuous-Variation Plots with a Comparison of Several Methods," *J. Chem. Educ.* **1992**, *69*, 833–837.
- Cappas, C.; Hoffman, N.; Jones, J.; Young, S. "Determination of Concentrations of Species Whose Absorption Bands Overlap Extensively," *J. Chem. Educ.* **1991**, *68*, 300–303.
- Crisp, P. T.; Eckert, J. M.; Gibson, N. A. "The Determination of Anionic Surfactants in Natural and Waste Waters," *J. Chem. Educ.* **1983**, *60*, 236–238.
- Dilbeck, C. W.; Ganske, J. A. "Detection of NO_x in Automobile Exhaust: An Applied Experiment in Atmospheric/Environmental Chemistry for the General Chemistry Laboratory," *Chem. Educator* **2008**, *13*, 1–5.
- Domínguez, A.; Fernández, A.; González, N.; Iglesias, E.; Montenegro, L. "Determination of Critical Micelle Concentration of Some Surfactants by Three Techniques," *J. Chem. Educ.* **1997**, *74*, 1227–1231.
- Gilbert, D. D. "Determining Optimum Spectral Bandwidth," *J. Chem. Educ.* **1991**, *68*, A278–A281.
- Han, J.; Story, T.; Han, G. "A Spectrophotometric Method for Quantitative Determination of Bromine Using Tris(2-carboxyethyl)phosphine," *J. Chem. Educ.* **1999**, *76*, 976–977.
- Higginbotham, C.; Pike, C. F.; Rice, J. K. "Spectroscopy in Sol-Gel Matrices," *J. Chem. Educ.* **1998**, *75*, 461–464.
- Hill, Z. D.; MacCarthy, P. "Novel Approach to Job's Method," *J. Chem. Educ.* **1986**, *63*, 162–167.
- Ibañez, G. A.; Olivieri, A. C.; Escandar, G. M. "Determination of Equilibrium Constants of Metal Complexes from Spectrophotometric Measurements," *J. Chem. Educ.* **1999**, *76*, 1277–1281.
- Long, J. R.; Drago, R. S. "The Rigorous Evaluation of Spectrophotometric Data to Obtain an Equilibrium Constant," *J. Chem. Educ.* **1982**, *59*, 1037–1039.

- Lozano-Calero; D.; Martin-Palomeque, P. "Determination of Phosphorous in Cola Drinks," *J. Chem. Educ.* **1996**, *73*, 1173–1174.
- Maloney, K. M.; Quiazon, E. M.; Indralingam, R. "Measurement of Iron in Egg Yolk: An Instrumental Analysis Measurement Using Biochemical Principles," *J. Chem. Educ.* **2008**, *85*, 399–400.
- Mascotti, D. P.; Waner, M. J. "Complementary Spectroscopic Assays for Investigation Protein-Ligand Binding Activity: A Project for the Advanced Chemistry Laboratory," *J. Chem. Educ.* **2010**, *87*, 735–738.
- McDevitt, V. L.; Rodriguez, A.; Williams, K. R. "Analysis of Soft Drinks: UV Spectrophotometry, Liquid Chromatography, and Capillary Electrophoresis," *J. Chem. Educ.* **1998**, *75*, 625–629.
- Mehra, M. C.; Rioux, J. "An Analytical Chemistry Experiment in Simultaneous Spectrophotometric Determination of Fe(III) and Cu(II) with Hexacyanoruthenate(II) Reagent," *J. Chem. Educ.* **1982**, *59*, 688–689.
- Mitchell-Koch, J. T.; Reid, K. R.; Meyerhoff, M. E. "Salicylate Detection by Complexation with Iron(III) and Optical Absorbance Spectroscopy," *J. Chem. Educ.* **2008**, *85*, 1658–1659.
- Msimanga, H. Z.; Wiese, J. "Determination of Acetaminophen in Analgesics by the Standard Addition Method: A Quantitative Analytical Chemistry Laboratory," *Chem. Educator* **2005**, *10*, 1–7.
- Örstan, A.; Wojcik, J. F. "Spectroscopic Determination of Protein-Ligand Binding Constants," *J. Chem. Educ.* **1987**, *64*, 814–816.
- Pandey, S.; Powell, J. R.; McHale, M. E. R.; Acree Jr., W. E. "Quantitative Determination of Cr(III) and Co(II) Using a Spectroscopic H-Point Standard Addition," *J. Chem. Educ.* **1997**, *74*, 848–850.
- Parody-Morreale, A.; Cámara-Artigas, A.; Sánchez-Ruiz, J. M. "Spectrophotometric Determination of the Binding Constants of Succinate and Chloride to Glutamic Oxalacetic Transaminase," *J. Chem. Educ.* **1990**, *67*, 988–990.
- Ravelo-Perez, L. M.; Hernández-Borges, J.; Rodríguez-Delgado, M. A.; Borges-Miquel, T. "Spectrophotometric Analysis of Lycopene in Tomatoes and Watermelons: A Practical Class," *Chem. Educator* **2008**, *13*, 1–3.
- Russell, D. D.; Potts, J.; Russell, R. M.; Olson, C.; Schimpf, M. "Spectroscopic and Potentiometric Investigation of a Diprotic Acid: An Experimental Approach to Understanding Alpha Functions," *Chem. Educator* **1999**, *4*, 68–72.
- Smith, E. T.; Matachek, J. R. "A Colorful Investigation of a Diprotic Acid: A General Chemistry Laboratory Exercise," *Chem. Educator* **2002**, *7*, 359–363.
- Tello-Solis, S. R. "Thermal Unfolding of Lysozyme Studied by UV Difference Spectroscopy," *Chem. Educator* **2008**, *13*, 16–18.
- Tucker, S.; Robinson, R.; Keane, C.; Boff, M.; Zenko, M.; Batish, S.; Street, Jr., K. W. "Colorimetric Determination of pH," *J. Chem. Educ.* **1989**, *66*, 769–771.
- Vitt, J. E. "Troubleshooting 101: An Instrumental Analysis Experiment," *J. Chem. Educ.* **2008**, *85*, 1660–1662.
- Williams, K. R.; Cole, S. R.; Boyette, S. E.; Schulman, S. G. "The Use of Dristan Nasal Spray as the Unknown for Simultaneous Spectrophotometric Analysis of a Mixture," *J. Chem. Educ.* **1990**, *67*, 535.
- Walmsley, F. "Aggregation in Dyes: A Spectrophotometric Study," *J. Chem. Educ.* **1992**, *69*, 583.

- Wells, T. A. “Construction of a Simple Myoglobin-Based Optical Biosensor,” *Chem. Educator* **2007**, *12*, 1–3.
- Yarnelle, M. K.; West, K. J. “Modification of an Ultraviolet Spectrophotometric Determination of the Active Ingredients in APC Tablets,” *J. Chem. Educ.* **1989**, *66*, 601–602.

IR Spectroscopy

- Dragon, S.; Fitch, A. “Infrared Spectroscopy Determination of Lead Binding to Ethylenediaminetetraacetic Acid,” *J. Chem. Educ.* **1998**, *75*, 1018–1021.
- Frohlich, H. “Using Infrared Spectroscopy Measurements to Study Intermolecular Hydrogen Bonding,” *J. Chem. Educ.* **1993**, *70*, A3–A6.
- Garizi, N.; Macias, A.; Furch, T.; Fan, R.; Wagenknecht, P.; Singmaster, K. A. “Cigarette Smoke Analysis Using an Inexpensive Gas-Phase IR Cell,” *J. Chem. Educ.* **2001**, *78*, 1665–1666.
- Indralingam, R.; Nepomuceno, A. I. “The Use of Disposable IR Cards for Quantitative Analysis Using an Internal Standard,” *J. Chem. Educ.* **2001**, *78*, 958–960.
- Mathias, L. J.; Hankins, M. G.; Bertolucci, C. M.; Grubb, T. L.; Muthiah, J. “Quantitative Analysis by FTIR: Thin Films of Copolymers of Ethylene and Vinyl Acetate,” *J. Chem. Educ.* **1992**, *69*, A217–A219.
- Schuttlefield, J. D.; Grassian, V. H. “ATR-FTIR Spectroscopy in the Undergraduate Chemistry Laboratory. Part I: Fundamentals and Examples,” *J. Chem. Educ.* **2008**, *85*, 279–281.
- Schuttlefield, J. D.; Larsen, S. C.; Grassian, V. H. “ATR-FTIR Spectroscopy in the Undergraduate Chemistry Laboratory. Part II: A Physical Chemistry Laboratory Experiment on Surface Adsorption,” *J. Chem. Educ.* **2008**, *85*, 282–284.
- Seasholtz, M. B.; Pence, L. E.; Moe Jr., O. A. “Determination of Carbon Monoxide in Automobile Exhaust by FTIR Spectroscopy,” *J. Chem. Educ.* **1988**, *65*, 820–823.

Atomic Absorption and Atomic Emission Spectroscopy

- Amarasiriwardena, D. “Teaching analytical atomic spectroscopy advances in an environmental chemistry class using a project-based laboratory approach: investigation of lead and arsenic distributions in a lead arsenate contaminated apple orchard,” *Anal. Bioanal. Chem.* **2007**, *388*, 307–314.
- Buffen, B. P. “Removal of Heavy Metals from Water: An Environmentally Significant Atomic Absorption Spectrometry Experiment,” *J. Chem. Educ.* **1999**, *76*, 1678–1679.
- Dockery, C. R.; Blew, M. J.; Goode, S. R. “Visualizing the Solute Vaporization Interference in Flame Atomic Absorption Spectroscopy,” *J. Chem. Educ.* **2008**, *85*, 854–858.
- Donas, M. K.; Whissel, G.; Dumas, A.; Golden, K. “Analyzing Lead Content in Ancient Bronze Coins by Flame Atomic Absorption Spectroscopy,” *J. Chem. Educ.* **2009**, *86*, 343–346.
- Gilles de Pelichy, L. D.; Adams, C.; Smith, E. T. “Analysis of the Essential Nutrient Strontium in Marine Aquariums by Atomic Absorption Spectroscopy,” *J. Chem. Educ.* **1997**, *74*, 1192–1194.
- Hoskins, L. C.; Reichardt, P. B.; Stolzberg, R. J. “Determination of the Extraction Constant for Zinc Pyrrolidinecarbodithioate,” *J. Chem. Educ.* **1981**, *58*, 580–581.
- Kooser, A. S.; Jenkins, J. L.; Welch, L. E. “Inductively Coupled Plasma-Atomic Emission Spectroscopy: Two Laboratory Activities for the Undergraduate Instrumental Analysis Course,” *J. Chem. Educ.* **2003**, *80*, 86–88.

- Kostecka, K. S. "Atomic Absorption Spectroscopy of Calcium in Foodstuffs in Non-Science-Major Courses," *J. Chem. Educ.* **2000**, *77*, 1321–1323.
- Lehman, T. A.; Everett, W. W. "Solubility of Lead Sulfate in Water and in Sodium Sulfate Solutions," *J. Chem. Educ.* **1982**, *59*, 797.
- Markow, P. G. "Determining the Lead Content of Paint Chips," *J. Chem. Educ.* **1996**, *73*, 178–179.
- Masina, M. R.; Nkosi, P. A.; Rasmussen, P. W.; Shelembe, J. S.; Tyobeka, T. E. "Determination of Metal Ions in Pineapple Juice and Effluent of a Fruit Canning Industry," *J. Chem. Educ.* **1989**, *66*, 342–343.
- Quigley, M. N. "Determination of Calcium in Analgesic Tablets using Atomic Absorption Spectrophotometry," *J. Chem. Educ.* **1994**, *71*, 800.
- Quigley, M. N.; Vernon, F. "Determination of Trace Metal Ion Concentrations in Seawater," *J. Chem. Educ.* **1996**, *73*, 671–675.
- Quigley, M. N.; Vernon, F. "A Matrix Modification Experiment for Use in Electrothermal Atomic Absorption Spectrophotometry," *J. Chem. Educ.* **1996**, *73*, 980–981.
- Rheingold, A. L.; Hues, S.; Cohen, M. N. "Strontium and Zinc Content in Bones as an Indication of Diet," *J. Chem. Educ.* **1983**, *60*, 233–234.
- Rocha, F. R. P.; Nóbrega, J. A. "Effects of Solution Physical Properties on Copper and Chromium Signals in Flame Atomic Absorption Spectrometry," *J. Chem. Educ.* **1996**, *73*, 982–984.

Fluorescence and Phosphorescence Spectroscopy

- Buccigross, J. M.; Bedell, C. M.; Suding-Moster, H. L. "Fluorescent Measurement of TNS Binding to Calmodulin," *J. Chem. Educ.* **1996**, *73*, 275–278.
- Henderleiter, J. A.; Hyslopo, R. M. "The Analysis of Riboflavin in Urine by Fluorescence," *J. Chem. Educ.* **1996**, *73*, 563–564.
- Lagoria, M. G.; Román, E. S. "How Does Light Scattering Affect Luminescence? Fluorescence Spectra and Quantum Yields in the Solid Form," *J. Chem. Educ.* **2002**, *79*, 1362–1367.
- Richardson, D. P.; Chang, R. "Lecture Demonstrations of Fluorescence and Phosphorescence," *Chem. Educator* **2007**, *12*, 272–274.
- Seixas de Melo, J. S.; Cabral, C.; Burrows, H. D. "Photochemistry and Photophysics in the Laboratory. Showing the Role of Radiationless and Radiative Decay of Excited States," *Chem. Educator* **2007**, *12*, 1–6.
- Sheffield, M. C.; Nahir, T. M. "Analysis of Selenium in Brazil Nuts by Microwave Digestion and Fluorescence Detection," *J. Chem. Educ.* **2002**, *79*, 1345–1347.

Signal Averaging

- Blitz, J. P.; Klarup, D. G. "Signal-to-Noise Ratio, Signal Processing, and Spectral Information in the Instrumental Analysis Laboratory," *J. Chem. Educ.* **2002**, *79*, 1358–1360.
- Stolzberg, R. J. "Introduction to Signals and Noise in an Instrumental Method Course," *J. Chem. Educ.* **1983**, *60*, 171–172.
- Tardy, D. C. "Signal Averaging. A Signal-to-Noise Enhancement Experiment for the Advanced Chemistry Laboratory," *J. Chem. Educ.* **1986**, *63*, 648–650.

The following sources provide additional information on spectroscopy in the following areas: general spectroscopy, Beer's law, instrumentation, Fourier transforms, IR spectroscopy, atomic absorption and emission, luminescence, and applications.

General Spectroscopy

- Ball, D. W. "Units! Units! Units!" *Spectroscopy* **1995**, *10*(8), 44–47.
- *A History of Analytical Chemistry*, Laitinen, H. A.; Ewing, G. W, Eds. The Division of Analytical Chemistry of the American Chemical Society: Washington, D. C., 1977, p103–243.
- Ingle, J. D.; Crouch, S. R. *Spectrochemical Analysis*, Prentice Hall, Englewood Cliffs, N. J.; 1988.
- Macomber, R. S. "A Unifying Approach to Absorption Spectroscopy at the Undergraduate Level," *J. Chem. Educ.* **1997**, *74*, 65–67.
- Orchin, M.; Jaffe, H. H. *Symmetry, Orbitals and Spectra*, Wiley-Interscience: New York, 1971.
- Thomas, N. C. "The Early History of Spectroscopy," *J. Chem. Educ.* **1991**, *68*, 631–633.

Beer's Law

- Lykos, P. "The Beer-Lambert Law Revisited: A Development without Calculus," *J. Chem. Educ.* **1992**, *69*, 730–732.
- Ricci, R. W.; Ditzler, M. A.; Nestor, L. P. "Discovering the Beer-Lambert Law," *J. Chem. Educ.* **1994**, *71*, 983–985.

Instrumentation

- Altermose, I. R. "Evolution of Instrumentation for UV-Visible Spectrophotometry: Part I," *J. Chem. Educ.* **1986**, *63*, A216–A223.
- Altermose, I. R. "Evolution of Instrumentation for UV-Visible Spectrophotometry: Part II," *J. Chem. Educ.* **1986**, *63*, A262–A266.
- Grossman, W. E. L. "The Optical Characteristics and Production of Diffraction Gratings," *J. Chem. Educ.* **1993**, *70*, 741–748.
- Jones, D. G. "Photodiode Array Detectors in UV-Vis Spectroscopy: Part I," *Anal. Chem.* **1985**, *57*, 1057A–1073A.
- Jones, D. G. "Photodiode Array Detectors in UV-Vis Spectroscopy: Part II," *Anal. Chem.* **1985**, *11*, 1207A–1214A.
- Palmer, C. "Diffraction Gratings," *Spectroscopy*, **1995**, *10*(2), 14–15.

Fourier Transforms

- Bracewell, R. N. "The Fourier Transform," *Sci. American* **1989**, *260*(6), 85–95.
- Glasser, L. "Fourier Transforms for Chemists: Part I. Introduction to the Fourier Transform," *J. Chem. Educ.* **1987**, *64*, A228–A233.
- Glasser, L. "Fourier Transforms for Chemists: Part II. Fourier Transforms in Chemistry and Spectroscopy," *J. Chem. Educ.* **1987**, *64*, A260–A266.
- Glasser, L. "Fourier Transforms for Chemists: Part III. Fourier Transforms in Data Treatment," *J. Chem. Educ.* **1987**, *64*, A306–A313.
- Graff, D. K. "Fourier and Hadamard: Transforms in Spectroscopy," *J. Chem. Educ.* **1995**, *72*, 304–309.

- Griffiths, P. R. *Chemical Fourier Transform Spectroscopy*, Wiley-Interscience: New York, 1975.
- *Transform Techniques in Chemistry*, Griffiths, P. R. Ed., Plenum Press: New York, 1978.
- Perkins, W. E. "Fourier Transform Infrared Spectroscopy: Part I. Instrumentation," *J. Chem. Educ.* **1986**, *63*, A5–A10.
- Perkins, W. E. "Fourier Transform Infrared Spectroscopy: Part II. Advantages of FT-IR," *J. Chem. Educ.* **1987**, *64*, A269–A271.
- Perkins, W. E. "Fourier Transform Infrared Spectroscopy: Part III. Applications," *J. Chem. Educ.* **1987**, *64*, A296–A305.
- Strong III, F. C. "How the Fourier Transform Infrared Spectrophotometer Works," *J. Chem. Educ.* **1979**, *56*, 681–684.

IR Spectroscopy.

- *Optical Spectroscopy: Sampling Techniques Manual*, Harrick Scientific Corporation: Ossining, N. Y., 1987.
- Leyden, D. E.; Shreedhara Murthy, R. S. "Surface-Selective Sampling Techniques in Fourier Transform Infrared Spectroscopy," *Spectroscopy* **1987**, *2*(2), 28–36.
- Porro, T. J.; Pattacini, S. C. "Sample Handling for Mid-Infrared Spectroscopy, Part I: Solid and Liquid Sampling," *Spectroscopy* **1993**, *8*(7), 40–47.
- Porro, T. J.; Pattacini, S. C. "Sample Handling for Mid-Infrared Spectroscopy, Part II: Specialized Techniques," *Spectroscopy* **1993**, *8*(8), 39–44.

Atomic Absorption and Emission

- Blades, M. W.; Weir, D. G. "Fundamental Studies of the Inductively Coupled Plasma," *Spectroscopy* **1994**, *9*, 14–21.
- Greenfield, S. "Invention of the Annular Inductively Coupled Plasma as a Spectroscopic Source," *J. Chem. Educ.* **2000**, *77*, 584–591.
- Hieftje, G. M. "Atomic Absorption Spectrometry - Has it Gone or Where is it Going?" *J. Anal. At. Spectrom.* **1989**, *4*, 117–122.
- Jarrell, R. F. "A Brief History of Atomic Emission Spectrochemical Analysis, 1666-1950," *J. Chem. Educ.* **2000**, *77*, 573–576
- Koirtiyohann, S. R. "A History of Atomic Absorption Spectrometry From an Academic Perspective," *Anal. Chem.* **1991**, *63*, 1024A–1031A.
- L'Vov, B. V. "Graphite Furnace Atomic Absorption Spectrometry," *Anal. Chem.* **1991**, *63*, 924A–931A.
- Slavin, W. "A Comparison of Atomic Spectroscopic Analytical Techniques," *Spectroscopy*, **1991**, *6*, 16–21.
- Van Loon, J. C. *Analytical Atomic Absorption Spectroscopy*, Academic Press: New York, 1980.
- Walsh, A. "The Development of Atomic Absorption Methods of Elemental Analysis 1952-1962," *Anal. Chem.* **1991**, *63*, 933A–941A.
- Welz, B. *Atomic Absorption Spectroscopy*, VCH: Deerfield Beach, FL, 1985.

Luminescence Spectroscopy

- Guilbault, G. G. *Practical Fluorescence*, Decker: New York, 1990.
- Schenk, G. “Historical Overview of Fluorescence Analysis to 1980,” *Spectroscopy* **1997**, *12*, 47–56.
- Vo-Dinh, T. *Room-Temperature Phosphorimetry for Chemical Analysis*, Wiley-Interscience: New York, 1984.
- Winefordner, J. D.; Schulman, S. G.; O’Haver, T. C. *Luminescence Spectroscopy in Analytical Chemistry*, Wiley-Interscience: New York, 1969.

Applications

- *Trace Analysis and Spectroscopic Methods for Molecules*, Christian, G. D.; Callis, J. B. Eds., Wiley-Interscience: New York, 1986.
- Vandecasteele, C.; Block, C. B. *Modern Methods for Trace Element Determination*, Wiley: Chichester, England, 1994.
- Skoog, D. A.; Holler, F. J.; Nieman, T. A. *Principles of Instrumental Analysis*, Saunders: Philadelphia, 1998.
- Van Loon, J. C. *Selected Methods of Trace Metal Analysis: Biological and Environmental Samples*, Wiley-Interscience: New York, 1985.

Gathered here are resources and experiments for analyzing multicomponent samples using mathematical techniques not covered in this textbook.

- Aberasturi, F.; Jimenez, A. I.; Jimenez, F.; Arias, J. J. “UV-Visible First-Derivative Spectrophotometry Applied to an Analysis of a Vitamin Mixture,” *J. Chem. Educ.* **2001**, *78*, 793–795.
- Afkhami, A.; Abbasi-Tarighat, M.; Bahram, M.; Abdollahi, H. “A new strategy for solving matrix effect in multivariate calibration standard addition data using combination of H-point curve isolation and H-point standard addition methods,” *Anal. Chim. Acta* **2008**, *613*, 144–151.
- Brown, C. W.; Obremski, R. J. “Multicomponent Quantitative Analysis,” *Appl. Spectrosc. Rev.* **1984**, *20*, 373–418.
- Charles, M. J.; Martin, N. W.; Msimanga, H. Z. “Simultaneous Determination of Aspirin, Salicylamide, and Caffeine in Pain Relievers by Target Factor Analysis,” *J. Chem. Educ.* **1997**, *74*, 1114–1117.
- Dado, G.; Rosenthal, J. “Simultaneous Determination of Cobalt, Copper, and Nickel by Multivariate Linear Regression,” *J. Chem. Educ.* **1990**, *67*, 797–800.
- DiTusa, M. R.; Schilt, A. A. “Selection of Wavelengths for Optimum Precision in Simultaneous Spectrophotometric Determinations,” *J. Chem. Educ.* **1985**, *62*, 541–542.
- Gómez, D. G.; de la Peña, A. M.; Mansilla, A. E.; Olivieri, A. C. “Spectrophotometric Analysis of Mixtures by Classical Least-Squares Calibration: An Advanced Experiment Introducing MATLAB,” *Chem. Educator* **2003**, *8*, 187–191.
- Harvey, D. T.; Bowman, A. “Factor Analysis of Multicomponent Samples,” *J. Chem. Educ.* **1990**, *67*, 470–472.
- Lucio-Gutierrez, J. R.; Salazar-Cavazos, M. L.; de Torres, N. W. “Chemometrics in the Teaching Lab. Quantification of a Ternary Mixture of Common Pharmaceuticals by First- and Second-Derivative IR Spectroscopy,” *Chem. Educator* **2004**, *9*, 234–238.

- Padney, S.; McHale, M. E. R.; Coym, K. S.; Acree Jr., W. E. "Bilinear Regression Analysis as a Means to Reduce Matrix Effects in Simultaneous Spectrophotometric Determination of Cr(III) and Co(II)," *J. Chem. Educ.* **1998**, *75*, 878–880.
- Raymond, M.; Jochum, C.; Kowalski, B. R. "Optimal Multicomponent Analysis Using the Generalized Standard Addition Method," *J. Chem. Educ.* **1983**, *60*, 1072–1073.
- Ribone, M. E.; Pagani, A. P.; Olivieri, A. C.; Goicoechea, H. C. "Determination of the Active Principle in a Spectrophotometry and Principal Component Regression Analysis," *J. Chem. Educ.* **2000**, *77*, 1330–1333.
- Rojas, F. S.; Ojeda, C. B. "Recent developments in derivative ultraviolet/visible absorption spectrophotometry: 2004-2008," *Anal. Chim. Acta* **2009**, *635*, 22–44.

Chapter 11

The following set of experiments introduce students to the applications of electrochemistry. Experiments are grouped into four categories: general electrochemistry, preparation of electrodes, potentiometry, coulometry, and voltammetry and amperometry.

General Electrochemistry

- Mills, K. V.; Herrick, R. S.; Guilmette, L. W.; Nestor, L. P.; Shafer, H.; Ditzler, M. A. "Introducing Undergraduate Students to Electrochemistry: A Two-Week Discovery Chemistry Experiment," *J. Chem. Educ.* **2008**, *85*, 1116–1119.

Preparation of Electrodes

- Christopoulos, T. K.; Diamandis, E. P. "Use of a Sintered Glass Crucible for Easy Construction of Liquid-Membrane Ion-Selective Electrodes," *J. Chem. Educ.* **1988**, *65*, 648.
- Fricke, G. H.; Kuntz, M. J. "Inexpensive Solid-State Ion-Selective Electrodes for Student Use," *J. Chem. Educ.* **1977**, *54*, 517–520.
- Inamdar, S. N.; Bhat, M. A.; Haram, S. K. "Construction of Ag/AgCl Reference Electrode form Used Felt-Tipped Pen Barrel for Undergraduate Laboratory," *J. Chem. Educ.* **2009**, *86*, 355–356.
- Lloyd, B. W.; O'Brien, F. L.; Wilson, W. D. "Student Preparation and Analysis of Chloride and Calcium Ion Selective Electrodes," *J. Chem. Educ.* **1976**, *53*, 328–330.
- Mifflin, T. E.; Andriano, K. M.; Robbins, W. B. "Determination of Penicillin Using an Immobilized Enzyme Electrode," *J. Chem. Educ.* **1984**, *61*, 638–639.
- Palanivel, A.; Riyazuddin, P. "Fabrication of an Inexpensive Ion-Selective Electrode," *J. Chem. Educ.* **1984**, *61*, 290.
- Ramaley, L.; Wedge, P. J.; Crain, S. M. "Inexpensive Instrumental Analysis: Part 1. Ion-Selective Electrodes," *J. Chem. Educ.* **1994**, *71*, 164–167.
- Selig, W. S. "Potentiometric Titrations Using Pencil and Graphite Sensors," *J. Chem. Educ.* **1984**, *61*, 80–81.

Potentiometry

- Chan, W. H.; Wong, M. S.; Yip, C. W. "Ion-Selective Electrode in Organic Analysis: A Salicylate Electrode," *J. Chem. Educ.* **1986**, *63*, 915–916.
- Harris, T. M. "Potentiometric Measurement in a Freshwater Aquarium," *J. Chem. Educ.* **1993**, *70*, 340–341.
- Kauffman, C. A.; Muza, A. L.; Porambo, M. W.; Marsh, A. L. "Use of a Commercial Silver-Silver Chloride Electrode for the Measurement of Cell Potentials to Determine Mean Ionic Activity Coefficients," *Chem. Educator* **2010**, *15*, 178–180.
- Martínez-Fàbregas, E.; Alegret, S. "A Practical Approach to Chemical Sensors through Potentiometric Transducers: Determination of Urea in Serum by Means of a Biosensor," *J. Chem. Educ.* **1994**, *71*, A67–A70.
- Moresco, H.; Sansón, P.; Seoane, G. "Simple Potentiometric Determination of Reducing Sugars," *J. Chem. Educ.* **2008**, *85*, 1091–1093.

- Radic, N.; Komijenovic, J. "Potentiometric Determination of an Overall Formation Constant Using an Ion-Selective Membrane Electrode," *J. Chem. Educ.* **1993**, *70*, 509–511.
- Riyazuddin, P.; Devika, D. "Potentiometric Acid–Base Titrations with Activated Graphite Electrodes," *J. Chem. Educ.* **1997**, *74*, 1198–1199.

Coulometry

- Bertotti, M.; Vaz, J. M.; Telles, R. "Ascorbic Acid Determination in Natural Orange Juice," *J. Chem. Educ.* **1995**, *72*, 445–447.
- Kalbus, G. E.; Lieu, V. T. "Dietary Fat and Health: An Experiment on the Determination of Iodine Number of Fats and Oils by Coulometric Titration," *J. Chem. Educ.* **1991**, *68*, 64–65.
- Lötze, A. "A Variety of Electrochemical Methods in a Coulometric Titration Experiment," *J. Chem. Educ.* **1998**, *75*, 775–777.
- Swim, J.; Earps, E.; Reed, L. M.; Paul, D. "Constant-Current Coulometric Titration of Hydrochloric Acid," *J. Chem. Educ.* **1996**, *73*, 679–683.

Voltammetry and Amperometry

- Blanco-López, M. C.; Lobo-Castañón, M. J.; Miranda-Ordieres, A. J. "Homemade Bionzymatic-Amperometric Biosensor for Beverages Analysis," *J. Chem. Educ.* **2007**, *84*, 677–680.
- García-Armada, P.; Losada, J.; de Vicente-Pérez, S. "Cation Analysis Scheme by Differential Pulse Polarography," *J. Chem. Educ.* **1996**, *73*, 544–547.
- Herrera-Melián, J. A.; Doña-Rodríguez, J. M.; Hernández-Brito, J.; Pérez-Peña, J. "Voltammetric Determination of Ni and Co in Water Samples," *J. Chem. Educ.* **1997**, *74*, 1444–1445.
- King, D.; Friend, J.; Kariuki, J. "Measuring Vitamin C Content of Commercial Orange Juice Using a Pencil Lead Electrode," *J. Chem. Educ.* **2010**, *87*, 507–509.
- Marin, D.; Mendicuti, F. "Polarographic Determination of Composition and Thermodynamic Stability Constant of a Complex Metal Ion," *J. Chem. Educ.* **1988**, *65*, 916–918.
- Sadik, O. A.; Brenda, S.; Joasil, P.; Lord, J. "Electropolymerized Conducting Polymers as Glucose Sensors," *J. Chem. Educ.* **1999**, *76*, 967–970.
- Sittampalam, G.; Wilson, G. S. "Amperometric Determination of Glucose at Parts Per Million Levels with Immobilized Glucose Oxidase," *J. Chem. Educ.* **1982**, *59*, 70–73.
- Town, J. L.; MacLaren, F.; Dewald, H. D. "Rotating Disk Voltammetry Experiment," *J. Chem. Educ.* **1991**, *68*, 352–354.
- Wang, J. "Sensitive Electroanalysis Using Solid Electrodes," *J. Chem. Educ.* **1982**, *59*, 691–692.
- Wang, J. "Anodic Stripping Voltammetry," *J. Chem. Educ.* **1983**, *60*, 1074–1075.
- Wang, J.; Maccà, C. "Use of Blood-Glucose Test Strips for Introducing Enzyme Electrodes and Modern Biosensors," *J. Chem. Educ.* **1996**, *73*, 797–800.
- Wang, Q.; Geiger, A.; Frias, R.; Golden, T. D. "An Introduction to Electrochemistry for Undergraduates: Detection of Vitamin C (Ascorbic Acid) by Inexpensive Electrode Sensors," *Chem. Educator* **2000**, *5*, 58–60.

The following general references providing a broad introduction to electrochemistry.

- Adams, R. N. *Electrochemistry at Solid Surfaces*, Marcel Dekker: New York, 1969.

- Bard, A. J.; Faulkner, L. R. *Electrochemical Methods*, Wiley: New York, 1980.
- Faulkner, L. R. “Electrochemical Characterization of Chemical Systems” in Kuwana, T. E., ed. *Physical Methods in Modern Chemical Analysis*, Vol. 3, Academic Press: New York, 1983, pp. 137–248.
- Kissinger, P. T.; Heineman, W. R. *Laboratory Techniques in Electroanalytical Chemistry*, Marcel Dekker: New York, 1984.
- Lingane, J. J. *Electroanalytical Chemistry*, 2nd Ed., Interscience: New York, 1958.
- Sawyer, D. T.; Roberts, J. L., Jr. *Experimental Electrochemistry for Chemists*, Wiley-Interscience: New York, 1974.
- Vassos, B. H.; Ewing, G. W. *Electroanalytical Chemistry*, Wiley-Interscience: New York, 1983.

These short articles provide a good introduction to important principles of electrochemistry.

- Faulkner, L. R. “Understanding Electrochemistry: Some Distinctive Concepts,” *J. Chem. Educ.* **1983**, *60*, 262–264.
- Huddle, P. A.; White, M. D.; Rogers, F. “Using a Teaching Model to Correct Known Misconceptions in Electrochemistry,” *J. Chem. Educ.* **2000**, *77*, 104–110.
- Maloy, J. T. “Factors Affecting the Shape of Current-Potential Curves,” *J. Chem. Educ.* **1983**, *60*, 285–289.
- Thompson, R. Q.; Craig, N. C. “Unified Electroanalytical Chemistry: Application of the Concept of Equilibrium,” *J. Chem. Educ.* **2001**, *78*, 928–934.
- Zoski, C. G. “Charging Current Discrimination in Analytical Voltammetry,” *J. Chem. Educ.* **1986**, *63*, 910–914.

Additional information on potentiometry and ion-selective electrodes can be found in the following sources.

- Bakker, E.; Diamond, D.; Lewenstam, A.; Pretsch, E. “Ions Sensors: Current Limits and New Trends,” *Anal. Chim. Acta* **1999**, *393*, 11–18.
- Bates, R. G. *Determination of pH: Theory and Practice*, 2nd ed., Wiley: New York, 1973.
- Buck, R. P. “Potentiometry: pH Measurements and Ion Selective Electrodes” in Weissberger, A., ed. *Physical Methods of Organic Chemistry*, Vol. 1, Part IIA, Wiley: New York, 1971, pp. 61–162.
- Cammann, K. *Working With Ion-Selective Electrodes*, Springer-Verlag: Berlin, 1977.
- Evans, A. *Potentiometry and Ion-Selective Electrodes*, Wiley: New York, 1987.
- Frant, M. S. “Where Did Ion Selective Electrodes Come From?” *J. Chem. Educ.* **1997**, *74*, 159–166.
- Light, T. S. “Industrial Use and Application of Ion-Selective Electrodes,” *J. Chem. Educ.* **1997**, *74*, 171–177.
- Rechnitz, G. A. “Ion and Bio-Selective Membrane Electrodes,” *J. Chem. Educ.* **1983**, *60*, 282–284.
- Ruzicka, J. “The Seventies—Golden Age for Ion-Selective Electrodes,” *J. Chem. Educ.* **1997**, *74*, 167–170.
- Young, C. C. “Evolution of Blood Chemistry Analyzers Based on Ion Selective Electrodes,” *J. Chem. Educ.* **1997**, *74*, 177–182.

The following sources provide additional information on electrochemical biosensors.

- Alvarez-Icasa, M.; Bilitewski, U. “Mass Production of Biosensors,” *Anal. Chem.* **1993**, *65*, 525A–533A.

- Meyerhoff, M. E.; Fu, B.; Bakker, E. Yun, J-H; Yang, V. C. “Polyion-Sensitive Membrane Electrodes for Biomedical Analysis,” *Anal. Chem.* **1996**, *68*, 168A–175A.
- Nicolini, C.; Adami, M; Antolini, F; Beltram, F; Sartore, M.; Vakula, S. “Biosensors: A Step to Bioelectronics,” *Phys. World*, May 1992, 30–34.
- Rogers, K. R.; Williams, L. R. “Biosensors for Environmental Monitoring: A Regulatory Perspective,” *Trends Anal. Chem.* **1995**, *14*, 289–294.
- Schultz, J. S. “Biosensors,” *Sci. Am.* August 1991, 64–69.
- Thompson, M.; Krull, U. “Biosensors and the Transduction of Molecular Recognition,” *Anal. Chem.* **1991**, *63*, 393A–405A.
- Vadgama, P. “Designing Biosensors,” *Chem. Brit.* **1992**, *28*, 249–252.

A good source covering the clinical application of electrochemistry is listed below.

- Wang, J. *Electroanalytical Techniques in Clinical Chemistry and Laboratory Medicine*, VCH: New York, 1998.

Coulometry is covered in the following texts.

- Rechnitz, G. A. *Controlled-Potential Analysis*, Macmillan: New York, 1963.
- Milner, G. W. C.; Philips, G. *Coulometry in Analytical Chemistry*, Pergamon: New York, 1967.

For a description of electrogravimetry, see the following resource.

- Tanaka, N. “Electrodeposition”, in Kolthoff, I. M.; Elving, P. J., eds. *Treatise on Analytical Chemistry, Part I: Theory and Practice*, Vol. 4, Interscience: New York, 1963.

The following sources provide additional information on polarography and pulse polarography.

- Flato, J. B. “The Renaissance in Polarographic and Voltammetric Analysis,” *Anal. Chem.* **1972**, *44*(11), 75A–87A.
- Kolthoff, I. M.; Lingane, J. J. *Polarography*, Interscience: New York, 1952.
- Osteryoung, J. “Pulse Voltammetry,” *J. Chem. Educ.* **1983**, *60*, 296–298.

Additional information on stripping voltammetry is available in the following text.

- Wang, J. *Stripping Analysis*, VCH Publishers: Deerfield Beach, FL, 1985.

The following papers discuss the numerical simulation of voltammetry.

- Bozzini, B. “A Simple Numerical Procedure for the Simulation of “Lifelike” Linear-Sweep Voltammograms,” *J. Chem. Educ.* **2000**, *77*, 100–103.
- Howard, E.; Cassidy, J. “Analysis with Microelectrodes Using Microsoft Excel Solver,” *J. Chem. Educ.* **2000**, *77*, 409–411.

Gathered together here are many useful resources for cyclic voltammetry, including experiments.

- Carriedo, G. A. “The Use of Cyclic Voltammetry in the Study of the Chemistry of Metal–Carbonyls,” *J. Chem. Educ.* **1988**, *65*, 1020–1022.
- García-Jareño, J. J.; Benito, D.; Navarro-Laboulais, J.; Vicente, F. “Electrochemical Behavior of Electrodeposited Prussian Blue Films on ITO Electrodes,” *J. Chem. Educ.* **1998**, *75*, 881–884.
- Gilles de Pelichy, L. D.; Smith, E. T. “A Study of the Oxidation Pathway of Adrenaline by Cyclic Voltammetry,” *Chem. Educator* **1997**, *2*(2), 1–13.

- Gomez, M. E.; Kaifer, A. E. "Voltammetric Behavior of a Ferrocene Derivative," *J. Chem. Educ.* **1992**, *69*, 502–505.
- Heffner, J. E.; Raber, J. C.; Moe, O. A.; Wigal, C. T. "Using Cyclic Voltammetry and Molecular Modeling to Determine Substituent Effects in the One-Electron Reduction of Benzoquinones," *J. Chem. Educ.* **1998**, *75*, 365–367.
- Heinze, J. "Cyclic Voltammetry—Electrochemical Spectroscopy," *Angew. Chem, Int. Ed. Eng.* **1984**, *23*, 831–918.
- Holder, G. N.; Farrar, D. G.; McClure, L. L. "Voltammetric Reductions of Ring-Substituted Acetophenones. 1. Determination of an Electron-Transfer Mechanism Using Cyclic Voltammetry and Computer Modeling: The Formation and Fate of a Radical Anion," *Chem. Educator* **2001**, *6*, 343–349.
- Ibanez, J. G.; Gonzalez, I.; Cardenas, M. A. "The Effect of Complex Formation Upon the Redox Potentials of Metal Ions: Cyclic Voltammetry Experiments," *J. Chem. Educ.* **1988**, *65*, 173–175.
- Ito, T.; Perara, D. M. N. T.; Nagasaka, S. "Gold Electrodes Modified with Self-Assembled Monolayers for Measuring L-Ascorbic acid," *J. Chem. Educ.* **2008**, *85*, 1112–1115.
- Kissinger, P. T.; Heineman, W. R. "Cyclic Voltammetry," *J. Chem. Educ.* **1983**, *60*, 702–706.
- Mabbott, G. A. "An Introduction to Cyclic Voltammetry," *J. Chem. Educ.* **1983**, *60*, 697–702.
- Petrovic, S. "Cyclic Voltammetry of Hexachloroiridate (IV): An Alternative to the Electrochemical Study of the Ferricyanide Ion," *Chem. Educator* **2000**, *5*, 231–235.
- Toma, H. E.; Araki, K.; Dovidauskas, S. "A Cyclic Voltammetry Experiment Illustrating Redox Potentials, Equilibrium Constants and Substitution Reaction in Coordination Chemistry," *J. Chem. Educ.* **2000**, *77*, 1351–1353.
- Walczak, M. W.; Dryer, D. A.; Jacobson, D. D.; Foss, M. G.; Flynn, N. T. "pH-Dependent Redox Couple: Illustrating the Nernst Equation Using Cyclic Voltammetry," *J. Chem. Educ.* **1997**, *74*, 1195–1197.

Chapter 12

The following set of experiments introduce students to the applications of chromatography and electrophoresis. Experiments are grouped into five categories: gas chromatography, high-performance liquid chromatography, ion-exchange chromatography, size-exclusion chromatography, and electrophoresis.

Gas Chromatography

- Bishop, R. D., Jr. "Using GC–MS to Determine Relative Reactivity Ratios," *J. Chem. Educ.* **1995**, *72*, 743–745.
- Elder, D. M.; Kildahl, N. K.; Berka, L. H. "Experiments for Modern Introductory Chemistry: Identification of Arson Accelerants by Gas Chromatography," *J. Chem. Educ.* **1996**, *73*, 675–677.
- Fleurat-Lessard, P.; Pointet, K.; Renou-Gonnord, M.-F. "Quantitative Determination of PAHs in Diesel Engine Exhausts by GC–MS," *J. Chem. Educ.* **1999**, *76*, 962–965.
- Galipo, R. C.; Canhoto, A. J.; Walla, M. D.; Morgan, S. L. "Analysis of Volatile Fragrance and Flavor Compounds by Headspace Solid Phase Microextraction and GC–MS," *J. Chem. Educ.* **1999**, *76*, 245–248.
- Graham, R. C.; Robertson, J. K. "Analysis of Trihalomethanes in Soft Drinks," *J. Chem. Educ.* **1988**, *65*, 735–737.
- Heinzen, H.; Moyan, P.; Grompone, A. "Gas Chromatographic Determination of Fatty Acid Compositions," *J. Chem. Educ.* **1985**, *62*, 449–450.
- Kegley, S. E.; Hansen, K. J.; Cunningham, K. L. "Determination of Polychlorinated Biphenyls (PCBs) in River and Bay Sediments," *J. Chem. Educ.* **1996**, *73*, 558–562.
- Kostecka, K. S.; Rabah, A.; Palmer, C. F., Jr. "GC/MS Analysis of the Aromatic Composition of Gasoline," *J. Chem. Educ.* **1995**, *72*, 853–854.
- Quach, D. T.; Ciszkowski, N. A.; Finlayson-Pitts, B. J. "A New GC-MS Experiment for the Undergraduate Instrumental Analysis Laboratory in Environmental Chemistry: Methyl-t-butyl Ether and Benzene in Gasoline," *J. Chem. Educ.* **1998**, *75*, 1595–1598.
- Ramachandran, B. R.; Allen, J. M.; Halpern, A. M. "Air–Water Partitioning of Environmentally Important Organic Compounds," *J. Chem. Educ.* **1996**, *73*, 1058–1061.
- Rice, G. W. "Determination of Impurities in Whiskey Using Internal Standard Techniques," *J. Chem. Educ.* **1987**, *64*, 1055–1056.
- Rubinson, J. F.; Neyer-Hilvert, J. "Integration of GC-MS Instrumentation into the Undergraduate Laboratory: Separation and Identification of Fatty Acids in Commercial Fats and Oils," *J. Chem. Educ.* **1997**, *74*, 1106–1108.
- Rudzinski, W. E.; Beu, S. "Gas Chromatographic Determination of Environmentally Significant Pesticides," *J. Chem. Educ.* **1982**, *59*, 614–615.
- Sobel, R. M.; Ballantine, D. S.; Ryzhov, V. "Quantitation of Phenol Levels in Oil of Wintergreen Using Gas Chromatography–Mass Spectrometry with Selected Ion Monitoring," *J. Chem. Educ.* **2005**, *82*, 601–603.
- Welch, W. C.; Greco, T. G. "An Experiment in Manual Multiple Headspace Extraction for Gas Chromatography," *J. Chem. Educ.* **1993**, *70*, 333–335.

- Williams, K. R.; Pierce, R. E. "The Analysis of Orange Oil and the Aqueous Solubility of d-Limonene," *J. Chem. Educ.* **1998**, *75*, 223–226.
- Wong, J. W.; Ngim, K. K.; Shibamoto, T.; Mabury, S. A.; Eiserich, J. P.; Yeo, H. C. H. "Determination of Formaldehyde in Cigarette Smoke," *J. Chem. Educ.* **1997**, *74*, 1100–1103.
- Yang, M. J.; Orton, M. L.; Pawliszyn, J. "Quantitative Determination of Caffeine in Beverages Using a Combined SPME-GC/MS Method," *J. Chem. Educ.* **1997**, *74*, 1130–1132.

High-Performance Liquid Chromatography

- Batchelor, J. D.; Jones, B. T. "Determination of the Scoville Heat Value for Hot Sauces and Chilies: An HPLC Experiment," *J. Chem. Educ.* **2000**, *77*, 266–267.
- Beckers, J. L. "The Determination of Caffeine in Coffee: Sense or Nonsense?" *J. Chem. Educ.* **2004**, *81*, 90–93.
- Betts, T. A. "Pungency Quantitation of Hot Pepper Sauces Using HPLC," *J. Chem. Educ.* **1999**, *76*, 240–244.
- Bidlingmeyer, B. A.; Schmitz, S. "The Analysis of Artificial Sweeteners and Additives in Beverages by HPLC," *J. Chem. Educ.* **1991**, *68*, A195–A200.
- Bohman, O.; Engdahl, K.-A.; Johnsson, H. "High Performance Liquid Chromatography of Vitamin A: A Quantitative Determination," *J. Chem. Educ.* **1982**, *59*, 251–252.
- Brenneman, C. A.; Ebeler, S. E. "Chromatographic Separations Using Solid-Phase Extraction Cartridges: Separation of Wine Phenolics," *J. Chem. Educ.* **1999**, *76*, 1710–1711.
- Cantwell, F. F.; Brown, D. W. "Liquid Chromatographic Determination of Nitroanilines," *J. Chem. Educ.* **1981**, *58*, 820–823.
- DiNunzio, J. E. "Determination of Caffeine in Beverages by High Performance Liquid Chromatography," *J. Chem. Educ.* **1985**, *62*, 446–447.
- Ferguson, G. K. "Quantitative HPLC Analysis of an Analgesic/Caffeine Formulation: Determination of Caffeine," *J. Chem. Educ.* **1998**, *75*, 467–469.
- Ferguson, G. K. "Quantitative HPLC Analysis of a Psychotherapeutic Medication: Simultaneous Determination of Amitriptyline Hydrochloride and Perphenazine," *J. Chem. Educ.* **1998**, *75*, 1615–1618.
- Goodney, D. E. "Analysis of Vitamin C by High-Pressure Liquid Chromatography," *J. Chem. Educ.* **1987**, *64*, 187–188.
- Guevremont, R.; Quigley, M. N. "Determination of Paralytic Shellfish Poisons Using Liquid Chromatography," *J. Chem. Educ.* **1994**, *71*, 80–81.
- Haddad, P.; Hutchins, S.; Tuffy, M. "High Performance Liquid Chromatography of Some Analgesic Compounds," *J. Chem. Educ.* **1983**, *60*, 166–168.
- Huang, J.; Mabury, S. A.; Sagebiel, J. C. "Hot Chili Peppers: Extraction, Cleanup, and Measurement of Capsaicin," *J. Chem. Educ.* **2000**, *77*, 1630–1631.
- Joeseeph, S. M.; Palasota, J. A. "The Combined Effect of pH and Percent Methanol on the HPLC Separation of Benzoic Acid and Phenol," *J. Chem. Educ.* **2001**, *78*, 1381–1383.
- Lehame, S. "The Separation of Copper, Iron, and Cobalt Tetramethylene Dithiocarbamates by HPLC," *J. Chem. Educ.* **1986**, *63*, 727–728.

- Luo, P.; Luo, M. Z.; Baldwin, R. P. "Determination of Sugars in Food Products," *J. Chem. Educ.* **1993**, *70*, 679–681.
- Mueller, B. L.; Potts, L. W. "HPLC Analysis of an Asthma Medication," *J. Chem. Educ.* **1988**, *65*, 905–906.
- Munari, M.; Miurin, M.; Goi, G. "Didactic Application to Riboflavin HPLC Analysis," *J. Chem. Educ.* **1991**, *68*, 78–79.
- Orth, D. L. "HPLC Determination of Taurine in Sports Drinks," *J. Chem. Educ.* **2001**, *78*, 791–792.
- Remcho, V. T.; McNair, H. M.; Rasmussen, H. T. "HPLC Method Development with the Photodiode Array Detector," *J. Chem. Educ.* **1992**, *69*, A117–A119.
- Richardson, W. W., III; Burns, L. "HPLC of the Polypeptides in a Hydrolyzate of Egg-White Lysozyme," *J. Chem. Educ.* **1988**, *65*, 162–163.
- Silveira, A., Jr.; Koehler, J. A.; Beadel, E. F., Jr.; Monore, P. A. "HPLC Analysis of Chlorophyll a, Chlorophyll b, and β -Carotene in Collard Greens," *J. Chem. Educ.* **1984**, *61*, 264–265.
- Situmorang, M.; Lee, M. T. B.; Witzeman, L. K.; Heineman, W. R. "Liquid Chromatography with Electrochemical Detection (LC-EC): An Experiment Using 4-Aminophenol," *J. Chem. Educ.* **1998**, *75*, 1035–1038.
- Sottofattori, E.; Raggio, R.; Bruno, O. "Milk as a Drug Analysis Medium: HPLC Determination of Isoniazid," *J. Chem. Educ.* **2003**, *80*, 547–549.
- Strohl, A. N. "A Study of Colas: An HPLC Experiment," *J. Chem. Educ.* **1985**, *62*, 447–448.
- Tran, C. D.; Dotlich, M. "Enantiomeric Separation of Beta-Blockers by High Performance Liquid Chromatography," *J. Chem. Educ.* **1995**, *72*, 71–73.
- Van Arman, S. A.; Thomsen, M. W. "HPLC for Undergraduate Introductory Laboratories," *J. Chem. Educ.* **1997**, *74*, 49–50.
- Wingen, L. M.; Low, J. C.; Finlayson-Pitts, B. J. "Chromatography, Absorption, and Fluorescence: A New Instrumental Analysis Experiment on the Measurement of Polycyclic Aromatic Hydrocarbons in Cigarette Smoke," *J. Chem. Educ.* **1998**, *75*, 1599–1603.

Ion-Exchange Chromatography

- Bello, M. A.; Gustavo González, A. "Determination of Phosphate in Cola Beverages Using Nonsuppressed Ion Chromatography," *J. Chem. Educ.* **1996**, *73*, 1174–1176.
- Kieber, R. J.; Jones, S. B. "An Undergraduate Laboratory for the Determination of Sodium, Potassium, and Chloride," *J. Chem. Educ.* **1994**, *71*, A218–A222.
- Koubek, E.; Stewart, A. E. "The Analysis of Sulfur in Coal," *J. Chem. Educ.* **1992**, *69*, A146–A148.
- Sinniah, K.; Piers, K. "Ion Chromatography: Analysis of Ions in Pond Water," *J. Chem. Educ.* **2001**, *78*, 358–362.
- Xia, K.; Pierzynski, G. "Competitive Sorption between Oxalate and Phosphate in Soil: An Environmental Chemistry Laboratory Using Ion Chromatography," *J. Chem. Educ.* **2003**, *80*, 71–75.

Size-Exchange Chromatography

- Brunauer, L. S.; Davis, K. K. "Size Exclusion Chromatography: An Experiment for High School and Community College Chemistry and Biotechnology Laboratory Programs," *J. Chem. Educ.* **2008**, *85*, 683–685.
- Saiz, E.; Tarazona, M. P. "Size-Exclusion Chromatography Using Dual Detection," *Chem. Educator* **2000**, *5*, 324–328.

Electrophoresis

- Almarez, R. T.; Kochis, M. "Microscale Capillary Electrophoresis: A Complete Instrumentation Experiment for Chemistry Students at the Undergraduate Junior or Senior Level," *J. Chem. Educ.* **2003**, *80*, 316–319.
- Beckers, J. L. "The Determination of Caffeine in Coffee: Sense or Nonsense?" *J. Chem. Educ.* **2004**, *81*, 90–93.
- Beckers, J. L. "The Determination of Vanillin in a Vanilla Extract," *J. Chem. Educ.* **2005**, *82*, 604–606.
- Boyce, M. "Separation and Quantification of Simple Ions by Capillary Zone Electrophoresis," *J. Chem. Educ.* **1999**, *76*, 815–819.
- Conradi, S.; Vogt, C.; Rohde, E. "Separation of Enantiomeric Barbiturates by Capillary Electrophoresis Using a Cyclodextrin-Containing Run Buffer," *J. Chem. Educ.* **1997**, *74*, 1122–1125.
- Conte, E. D.; Barry, E. F.; Rubinstein, H. "Determination of Caffeine in Beverages by Capillary Zone Electrophoresis," *J. Chem. Educ.* **1996**, *73*, 1169–1170.
- Demay, S.; Martin-Girardeau, A.; Gonnord, M.-F. "Capillary Electrophoretic Quantitative Analysis of Anions in Drinking Water," *J. Chem. Educ.* **1999**, *76*, 812–815.
- Emry, R.; Cutright, R. D.; Wright, J.; Markwell, J. "Candies to Dye for: Cooperative, Open-Ended Student Activities to Promote Understanding of Electrophoretic Fractionation," *J. Chem. Educ.* **2000**, *77*, 1323–1324.
- Gardner, W. P.; Girard, J. E. "Analysis of Common Household Cleaner-Disinfectants by Capillary Electrophoresis," *J. Chem. Educ.* **2000**, *77*, 1335–1338.
- Gruenhagen, J. A.; Delaware, D.; Ma, Y. "Quantitative Analysis of Non-UV-Absorbing Cations in Soil Samples by High-Performance Capillary Electrophoresis," *J. Chem. Educ.* **2000**, *77*, 1613–1616.
- Hage, D. S.; Chattopadhyay, A.; Wolfe, C. A. C.; Grundman, J.; Kelter, P. B. "Determination of Nitrate and Nitrite in Water by Capillary Electrophoresis," *J. Chem. Educ.* **1998**, *75*, 1588–1590.
- Herman, H. B.; Jezorek, J. R.; Tang, Z. "Analysis of Diet Tonic Water Using Capillary Electrophoresis," *J. Chem. Educ.* **2000**, *77*, 743–744.
- Janusa, M. A.; Andermann, L. J.; Kliebert, N. M.; Nannie, M. H. "Determination of Chloride Concentration Using Capillary Electrophoresis," *J. Chem. Educ.* **1998**, *75*, 1463–1465.
- McDevitt, V. L.; Rodríguez, A.; Williams, K. R. "Analysis of Soft Drinks: UV Spectrophotometry, Liquid Chromatography, and Capillary Electrophoresis," *J. Chem. Educ.* **1998**, *75*, 625–629.
- Palmer, C. P. "Demonstrating Chemical and Analytical Concepts in the Undergraduate Laboratory Using Capillary Electrophoresis and Micellar Electrokinetic Chromatography," *J. Chem. Educ.* **1999**, *76*, 1542–1543.

- Pursell, C. J.; Chandler, B.; Bushey, M. M. "Capillary Electrophoresis Analysis of Cations in Water Samples," *J. Chem. Educ.* **2004**, *81*, 1783–1786.
- Solow, M. "Weak Acid pK_a Determination Using Capillary Zone Electrophoresis," *J. Chem. Educ.* **2006**, *83*, 1194–1195.
- Thompson, L.; Veening, H.; Strain, T. G. "Capillary Electrophoresis in the Undergraduate Instrumental Analysis Laboratory: Determination of Common Analgesic Formulations," *J. Chem. Educ.* **1997**, *74*, 1117–1121.
- Vogt, C.; Conradi, S.; Rhode, E. "Determination of Caffeine and Other Purine Compounds in Food and Pharmaceuticals by Micellar Electrokinetic Chromatography" *J. Chem. Educ.* **1997**, *74*, 1126–1130.
- Weber, P. L.; Buck, D. R. "Capillary Electrophoresis: A Fast and Simple Method for the Determination of the Amino Acid Composition of Proteins," *J. Chem. Educ.* **1994**, *71*, 609–612.
- Welder, F.; Colyer, C. L. "Using Capillary Electrophoresis to Determine the Purity of Acetylsalicylic Acid Synthesized in the Undergraduate Laboratory," *J. Chem. Educ.* **2001**, *78*, 1525–1527.
- Williams, K. R.; Adhyaru, B.; German, I.; Russell, T. "Determination of a Diffusion Coefficient by Capillary Electrophoresis," *J. Chem. Educ.* **2002**, *79*, 1475–1476.

The following texts provide a good introduction to the broad field of separations, including chromatography and electrophoresis.

- Giddings, J. C. *Unified Separation Science*, Wiley-Interscience: New York 1991.
- Karger, B. L.; Snyder, L. R.; Harvath, C. *An Introduction to Separation Science*, Wiley-Interscience: New York, 1973
- Miller, J. M. *Separation Methods in Chemical Analysis*, Wiley-Interscience: New York, 1975.
- Poole, C. F. *The Essence of Chromatography*, Elsevier: Amsterdam, 2003.

A more recent discussion of peak capacity is presented in the following paper.

- Davis, J. M.; Stoll, D. R.; Carr, P. W. "Dependence of Effective Peak Capacity in Comprehensive Two-Dimensional Separations on the Distribution of Peak Capacity between the Two Dimensions," *Anal. Chem.* **2008**, *80*, 8122–8134.
- Li, X.; Stoll, D. R.; Carr, P. W. "Equation for Peak Capacity Estimation in Two-Dimensional Liquid Chromatography," *Anal. Chem.* **2009**, *81*, 845–850.
- Shen, Y.; Lee, M. "General Equation for Peak Capacity in Column Chromatography," *Anal. Chem.* **1998**, *70*, 3853–3856.

The following references may be consulted for more information on gas chromatography.

- Grob, R. L., ed, *Modern Practice of Gas Chromatography*, Wiley-Interscience: New York, 1972.
- Hinshaw, J. V. "A Compendium of GC Terms and Techniques," *LC•GC* **1992**, *10*, 516–522.
- Ioffe, B. V.; Vitenberg, A. G. *Head-Space Analysis and Related Methods in Gas Chromatography*, Wiley-Interscience: New York, 1982.
- Kitson, F. G.; Larsen, B. S.; McEwen, C. N. *Gas Chromatography and Mass Spectrometry: A Practical Guide*, Academic Press: San Diego, 1996.
- McMaster, M. C. *GC/MS: A Practical User's Guide*, Wiley-Interscience: Hoboken, NJ, 2008.

The following references provide more information on high-performance liquid chromatography.

- Dorschel, C. A.; Ekmanis, J. L.; Oberholtzer, J. E.; Warren, Jr. F. V.; Bidlingmeyer, B. A. "LC Detectors," *Anal. Chem.* **1989**, *61*, 951A–968A.
- Ehlert, S.; Tallarek, U. "High-pressure liquid chromatography in lab-on-a-chip devices," *Anal. Bioanal. Chem.* **2007**, *388*, 517–520.
- Francois, I.; Sandra, K.; Sandra, P. "Comprehensive liquid chromatography: Fundamental aspects and practical considerations—A review," *Anal. Chim. Acta* **2009**, *641*, 14–31.
- Harris, C. M. "Shrinking the LC Landscape," *Anal. Chem.* **2003**, *75*, 64A–69A.
- Meyer, V. R. *Pitfalls and Errors of HPLC in Pictures*, Wiley-VCH: Weinheim, Germany, 2006.
- Pozo, O. J.; Van Eenoo, P.; Deventer, K.; Delbeke, F. T. "Detection and characterization of anabolic steroids in doping analysis by LC–MS," *Trends Anal. Chem.* **2008**, *27*, 657–671.
- Scott, R. P. W. "Modern Liquid Chromatography," *Chem. Soc. Rev.* **1992**, *21*, 137–145.
- Simpson, C. E., ed. *Techniques in Liquid Chromatography*, Wiley-Hayden: Chichester, England; 1982.
- Snyder, L. R.; Glajch, J. L.; Kirkland, J. J. *Practical HPLC Method Development*, Wiley-Interscience: New York, 1988.
- van de Merbel, N. C. "Quantitative determination of endogenous compounds in biological samples using chromatographic techniques," *Trends Anal. Chem.* **2008**, *27*, 924–933.
- Yeung, E. S. "Chromatographic Detectors: Current Status and Future Prospects," *LC•GC* **1989**, *7*, 118–128.

The following references may be consulted for more information on ion chromatography.

- Shpigun, O. A.; Zolotov, Y. A. *Ion Chromatography in Water Analysis*, Ellis Horwood: Chichester, England, 1988.
- Smith, F. C. Jr.; Chang, R. C. *The Practice of Ion Chromatography*, Wiley-Interscience: New York, 1983.

The following references may be consulted for more information on supercritical fluid chromatography.

- Palmieri, M. D. "An Introduction to Supercritical Fluid Chromatography. Part I: Principles and Applications," *J. Chem. Educ.* **1988**, *65*, A254–A259.
- Palmieri, M. D. "An Introduction to Supercritical Fluid Chromatography. Part II: Applications and Future Trends," *J. Chem. Educ.* **1989**, *66*, A141–A147.

The following references may be consulted for more information on capillary electrophoresis.

- Baker, D. R. *Capillary Electrophoresis*, Wiley-Interscience: New York, 1995.
- Copper, C. L. "Capillary Electrophoresis: Part I. Theoretical and Experimental Background," *J. Chem. Educ.* **1998**, *75*, 343–347.
- Copper, C. L.; Whitaker, K. W. "Capillary Electrophoresis: Part II. Applications," *J. Chem. Educ.* **1998**, *75*, 347–351.
- DeFrancesco, L. "Capillary Electrophoresis: Finding a Niche," *Today's Chemist at Work*, February 2002, 59–64.

- Ekins, R. P. “Immunoassay, DNA Analysis, and Other Ligand Binding Assay Techniques: From Electropherograms to Multiplexed, Ultrasensitive Microarrays on a Chip,” *J. Chem. Educ.* **1999**, *76*, 769–780.
- Revermann, T.; Götz, S.; Künnemeyer, J.; Karst, U. “Quantitative analysis by microchip capillary electrophoresis—current limitations and problem-solving strategies,” *Analyst* **2008**, *133*, 167–174.
- Timerbaev, A. R. “Capillary electrophoresis coupled to mass spectrometry for biospeciation analysis: critical evaluation,” *Trends Anal. Chem.* **2009**, *28*, 416–425.
- Unger, K. K.; Huber, M.; Hennessy, T. P.; Hearn, M. T. W.; Walhagen, K. “A Critical Appraisal of Capillary Electrochromatography,” *Anal. Chem.* **2002**, *74*, 200A–207A.
- Varenne, A.; Descroix, S. “Recent strategies to improve resolution in capillary electrophoresis—A review,” *Anal. Chim. Acta* **2008**, *628*, 9–23.
- Vetter, A. J.; McGowan, G. J. “The Escalator—An Analogy for Explaining Electroosmotic Flow,” *J. Chem. Educ.* **2001**, *78*, 209–211.
- Xu, Y. “Tutorial: Capillary Electrophoresis,” *Chem. Educator*, **1996**, *1*(2), 1–14.

The application of spreadsheets and computer programs for modeling chromatography is described in the following papers.

- Abbay, G. N.; Barry, E. F.; Leepipatpiboon, S.; Ramstad, T.; Roman, M. C.; Siergiej, R. W.; Snyder, L. R.; Winniford, W. L. “Practical Applications of Computer Simulation for Gas Chromatography Method Development,” *LC•GC* **1991**, *9*, 100–114.
- Drouen, A.; Dolan, J. W.; Snyder, L. R.; Poile, A.; Schoenmakers, P. J. “Software for Chromatographic Method Development,” *LC•GC* **1991**, *9*, 714–724.
- Kevra, S. A.; Bergman, D. L.; Maloy, J. T. “A Computational Introduction to Chromatographic Bandshape Analysis,” *J. Chem. Educ.* **1994**, *71*, 1023–1028.
- Rittenhouse, R. C. “HPLC for Windows: A Computer Simulation of High-Performance Liquid Chromatography,” *J. Chem. Educ.* **1995**, *72*, 1086–1087.
- Shalliker, R. A.; Kayillo, S.; Dennis, G. R. “Optimizing Chromatographic Separations: An Experiment Using an HPLC Simulator,” *J. Chem. Educ.* **2008**, *85*, 1265–1268.
- Sundheim, B. R. “Column Operations: A Spreadsheet Model,” *J. Chem. Educ.* **1992**, *69*, 1003–1005.

The following papers discuss column efficiency, peak shapes, and overlapping chromatographic peaks.

- Bildingmeyer, B. A.; Warren, F. V., Jr. “Column Efficiency Measurement,” *Anal. Chem.* **1984**, *56*, 1583A–1596A.
- Hawkes, S. J. “Distorted Chromatographic Peaks,” *J. Chem. Educ.* **1994**, *71*, 1032–1033.
- Hinshaw, J. “Pinning Down Tailing Peaks,” *LC•GC* **1992**, *10*, 516–522.
- Meyer, V. K. “Chromatographic Integration Errors: A Closer Look at a Small Peak,” *LC•GC North America* **2009**, *27*, 232–244.
- Reid, V. R.; Synovec, R. E. “High-speed gas chromatography: The importance of instrumentation optimization and the elimination of extra-column band broadening,” *Talanta* **2008**, *76*, 703–717.

Chapter 13

The following set of experiments introduce students to the applications of chemical kinetic methods, including enzyme kinetic methods, and flow injection analysis.

Chemical Kinetic Methods

- Abramovitch, D. A.; Cunningham, L. K.; Litwer, M. R. "Decomposition Kinetics of Hydrogen Peroxide: Novel Lab Experiments Employing Computer Technology," *J. Chem. Educ.* **2003**, *80*, 790–792.
- Bateman, Jr. R. C.; Evans, J. A. "Using the Glucose Oxidase/Peroxidase Systems in Enzyme Kinetics," *J. Chem. Educ.* **1995**, *72*, A240–A241.
- Bendinskas, K.; DiJacomio, C.; Krill, A.; Vitz, E. "Kinetics of Alcohol Dehydrogenase-Catalyzed Oxidation of Ethanol Followed by Visible Spectroscopy," *J. Chem. Educ.* **1068**, *82*, 1068–1070.
- Clark, C. R. "A Stopped-Flow Kinetics Experiment for Advanced Undergraduate Laboratories: Formation of Iron(III) Thiocyanate," *J. Chem. Educ.* **1997**, *74*, 1214–1217.
- Diamandis, E. P.; Koupparis, M. A.; Hadjiionnou, T. P. "Kinetic Studies with Ion-Selective Electrodes: Determination of Creatinine in Urine with a Picrate Ion-Selective Electrode," *J. Chem. Educ.* **1983**, *60*, 74–76.
- Frey, M. W.; Frey, S. T.; Soltau, S. R. "Exploring the pH Dependence of L-leucine-*p*-nitroanilide Cleavage by Aminopeptidase *Aeromonas Proteolytica*: A Combined Buffer-Enzyme Kinetics Experiment for the General Chemistry Laboratory," *Chem. Educator* **2010**, *15*, 117–120.
- Gooding, J. J.; Yang, W.; Situmorang, M. "Bioanalytical Experiments for the Undergraduate Laboratory: Monitoring Glucose in Sport Drinks," *J. Chem. Educ.* **2001**, *78*, 788–790.
- Hamilton, T. M.; Dobie-Galuska, A. A.; Wietstock, S. M. "The *o*-Phenylenediamine-Horseradish Peroxidase System: Enzyme Kinetics in the General Chemistry Lab," *J. Chem. Educ.* **1999**, *76*, 642–644.
- Johnson, K. A. "Factors Affecting Reaction Kinetics of Glucose Oxidase," *J. Chem. Educ.* **2002**, *79*, 74–76.
- Mowry, S.; Ogren, P. J. "Kinetics of Methylene Blue Reduction by Ascorbic Acid," *J. Chem. Educ.* **1999**, *76*, 970–974.
- Nyasulu, F. W.; Barlag, R. "Gas Pressure Sensor Monitored Iodide-Catalyzed Decomposition Kinetics of Hydrogen Peroxide: An Initial Rate Approach," *Chem. Educator* **2008**, *13*, 227–230.
- Nyasulu, F. W.; Barlag, R. "Thermokinetics: Iodide-Catalyzed Decomposition Kinetics of Hydrogen Peroxide; An Integrated Rate Approach," *Chem. Educator* **2010**, *15*, 168–170.
- Pandey, S.; McHale, M. E. R.; Horton, A. M.; Padilla, S. A.; Trufant, A. L.; De La Sancha, N. U.; Vela, E.; Acree, Jr., W. E. "Kinetics-Based Indirect Spectrophotometric Method for the Simultaneous Determination of MnO_4^- and $\text{Cr}_2\text{O}_7^{2-}$," *J. Chem. Educ.* **1998**, *75*, 450–452.
- Stock, E.; Morgan, M. "A Spectroscopic Analysis of the Kinetics of the Iodine Clock Reaction without Starch," *Chem. Educator* **2010**, *15*, 158–161.
- Vasilarou, A.-M. G.; Georgiou, C. A. "Enzymatic Spectrophotometric Reaction Rate Determination of Glucose in Fruit Drinks and Carbonated Beverages," *J. Chem. Educ.* **2000**, *77*, 1327–1329.

- Williams, K. R.; Adhyaru, B.; Timofeev, J.; Blankenship, M. K. "Decomposition of Aspartame. A Kinetics Experiment for Upper-Level Chemistry Laboratories," *J. Chem. Educ.* **2005**, *82*, 924–925.

Flow Injection Methods

- Carroll, M. K.; Tyson, J. F. "An Experiment Using Time-Based Detection in Flow Injection Analysis," *J. Chem. Educ.* **1993**, *70*, A210–A216.
- Conceição, A. C. L.; Minas da Piedade, M. E. "Determination of Acidity Constants by Gradient Flow-Injection Titration," *J. Chem. Educ.* **2006**, *83*, 1853–1856.
- Hansen, E. H.; Ruzicka, J. "The Principles of Flow Injection Analysis as Demonstrated by Three Lab Exercises," *J. Chem. Educ.* **1979**, *56*, 677–680.
- McKelvie, I. D.; Cardwell, T. J.; Cattrall, R. W. "A Microconduit Flow Injection Analysis Demonstration using a 35-mm Slide Projector," *J. Chem. Educ.* **1990**, *67*, 262–263.
- Meyerhoff, M. E.; Kovach, P. M. "An Ion-Selective Electrode/Flow Injection Analysis Experiment: Determination of Potassium in Serum," *J. Chem. Educ.* **1983**, *60*, 766–768.
- Nóbrega, J. A.; Rocha, F. R. P. "Ionic Strength Effect on the Rate of Reduction of Hexacyanoferrate(II) by Ascorbic Acid," *J. Chem. Educ.* **1997**, *74*, 560–562.
- Ríos, A.; Luque de Castro, M.; Valcárcel, M. "Determination of Reaction Stoichiometries by Flow Injection Analysis," *J. Chem. Educ.* **1986**, *63*, 552–553.
- Stults, C. L. M.; Wade, A. P.; Crouch, S. R. "Investigation of Temperature Effects on Dispersion in a Flow Injection Analyzer," *J. Chem. Educ.* **1988**, *65*, 645–647.
- Wolfe, C. A. C.; Oates, M. R.; Hage, D. S. "Automated Protein Assay Using Flow Injection Analysis," *J. Chem. Educ.* **1998**, *75*, 1025–1028.

The following sources provides a general review of the importance of chemical kinetics in analytical chemistry.

- Bergmyer, H. U.; Grassl, M. *Methods of Enzymatic Analysis*, Verlag Chemie: Deerfield Beach, FL, 3rd Ed., 1983.
- Laitinen, H. A.; Ewing, G. W., eds., *A History of Analytical Chemistry*, The Division of Analytical Chemistry of the American Chemical Society: Washington, D. C., 1977, pp. 97–102.
- Malmstadt, H. V.; Delaney, C. J.; Cordos, E. A. "Reaction-Rate Methods of Chemical Analysis," *Crit. Rev. Anal. Chem.* **1972**, *2*, 559–619.
- Mark, H. B.; Rechnitz, G. A. *Kinetics in Analytical Chemistry*, Wiley: New York, 1968.
- Mottola, H. A. "Catalytic and Differential Reaction-Rate Methods of Chemical Analysis," *Crit. Rev. Anal. Chem.* **1974**, *4*, 229–280.
- Mottola, H. A. "Some Kinetic Aspects Relevant to Contemporary Analytical Chemistry," *J. Chem. Educ.* **1981**, *58*, 399–403.
- Mottola, H. A. *Kinetic Aspects of Analytical Chemistry*, Wiley: New York, 1988.
- Pardue, H. L. "A Comprehensive Classification of Kinetic Methods of Analysis Used in Clinical Chemistry," *Clin. Chem.* **1977**, *23*, 2189–2201.
- Pardue, H. L. "Kinetic Aspects of Analytical Chemistry," *Anal. Chim. Acta*, **1989**, *216*, 69–107.
- Perez-Bendito, D.; Silva, M. *Kinetic Methods in Analytical Chemistry*, Ellis Horwood: Chichester, 1988.

- Pisakiewicz, D. *Kinetics of Chemical and Enzyme-Catalyzed Reactions*, Oxford University Press: New York, 1977.

The following instrumental analysis textbooks may be consulted for further information on the detectors and signal analyzers used in radiochemical methods of analysis.

- Skoog, D. A.; Holler, F. J.; Nieman, T. A. *Principles of Instrumental Analysis*, 5th Ed., Saunders College Publishing/Harcourt Brace and Co.: Philadelphia., 1998, Chapter 32.
- Strobel, H. A.; Heineman, W. R. *Chemical Instrumentation: A Systematic Approach*, 3rd Ed., Wiley-Interscience: New York, 1989.

The following resources provide additional information on the theory and application of flow injection analysis.

- Andrew, K. N.; Blundell, N. J.; Price, D.; Worsfold, P. J. "Flow Injection Techniques for Water Monitoring," *Anal. Chem.* **1994**, *66*, 916A–922A.
- Betteridge, D. "Flow Injection Analysis," *Anal. Chem.* **1978**, *50*, 832A–846A.
- Kowalski, B. R.; Ruzicka, J. Christian, G. D. "Flow Chemography - The Future of Chemical Education," *Trends Anal. Chem.* **1990**, *9*, 8–13.
- Mottola, H. A. "Continuous Flow Analysis Revisited," *Anal. Chem.* **1981**, *53*, 1312A–1316A.
- Ruzicka, J. "Flow Injection Analysis: From Test Tube to Integrated Microconduits," *Anal. Chem.* **1983**, *55*, 1040A–1053A.
- Ruzicka, J.; Hansen, E. H. *Flow-Injection Analysis*, Wiley-Interscience: New York, 1989.
- Ruzicka, J.; Hansen, E. H. "Retro-Review of Flow-Injection Analysis," *Trends Anal. Chem.* **2008**, *27*, 390–393.
- Silvestre, C. I. C.; Santos, J. L. M.; Lima, J. L. F. C.; Zagatto, E. A. G. "Liquid-Liquid Extraction in Flow Analysis: A Critical Review," *Anal. Chim. Acta* **2009**, *652*, 54–65.
- Stewart, K. K. "Flow Injection Analysis: New Tools for Old Assays, New Approaches to Analytical Measurements," *Anal. Chem.* **1983**, *55*, 931A–940A.
- Tyson, J. F. "Atomic Spectrometry and Flow Injection Analysis: A Synergic Combination," *Anal. Chim. Acta*, **1988**, *214*, 57–75.
- Valcarcel, M.; Luque de Castro, M. D. *Flow-Injection Analysis: Principles and Applications*, Ellis Horwood: Chichester, England, 1987.

Chapter 14

The following set of experiments provide practical examples of the optimization of experimental conditions. Examples include simplex optimization, factorial designs for developing empirical models of response surfaces, and fitting experimental data to theoretical models of the response surface.

- Amenta, D. S.; Lamb, C. E.; Leary, J. J. "Simplex Optimization of Yield of *sec*-Butylbenzene in a Friedel-Crafts Alkylation," *J. Chem. Educ.* **1979**, *56*, 557–558.
- Harvey, D. T.; Byerly, S.; Bowman, A.; Tomlin, J. "Optimization of HPLC and GC Separations Using Response Surfaces," *J. Chem. Educ.* **1991**, *68*, 162–168.
- Leggett, D. L. "Instrumental Simplex Optimization," *J. Chem. Educ.* **1983**, *60*, 707–710.
- Oles, P. J. "Fractional Factorial Experimental Design as a Teaching Tool for Quantitative Analysis," *J. Chem. Educ.* **1998**, *75*, 357–359.
- Palasota, J. A.; Deming, S.N. "Central Composite Experimental Design," *J. Chem. Educ.* **1992**, *69*, 560–561.
- Sangsila, S.; Labinaz, G.; Poland, J. S.; vanLoon, G. W. "An Experiment on Sequential Simplex Optimization of an Atomic Absorption Analysis Procedure," *J. Chem. Educ.* **1989**, *66*, 351–353.
- Santos-Delgado, M. J.; Larrea-Tarruella, L. "A Didactic Experience of Statistical Analysis for the Determination of Glycine in a Nonaqueous Medium using ANOVA and a Computer Program," *J. Chem. Educ.* **2004**, *81*, 97–99.
- Shavers, C. L.; Parsons, M. L.; Deming, S. N. "Simplex Optimization of Chemical Systems," *J. Chem. Educ.* **1979**, *56*, 307–309.
- Stieg, S. "A Low-Noise Simplex Optimization Experiment," *J. Chem. Educ.* **1986**, *63*, 547–548.
- Stolzberg, R. J. "Screening and Sequential Experimentation: Simulations and Flame Atomic Absorption Spectrometry Experiments," *J. Chem. Educ.* **1997**, *74*, 216–220.
- Van Ryswyk, H.; Van Hecke, G. R. "Attaining Optimal Conditions," *J. Chem. Educ.* **1991**, *66*, 878–882.

The following texts and articles provide an excellent discussion of optimization methods based on searching algorithms and mathematical modeling use factorial designs, including a discussion of the relevant calculations. A few of these sources discuss other types of experimental designs.

- Bayne, C. K.; Rubin, I. B. *Practical Experimental Designs and Optimization Methods for Chemists*, VCH Publishers: Deerfield Beach, FL; 1986.
- Box, G. E. P. "Statistical Design in the Study of Analytical Methods," *Analyst* **1952**, *77*, 879–891.
- Deming, S. N.; Morgan, S. L. *Experimental Design: A Chemometric Approach*, Elsevier: Amsterdam, 1987.
- Ferreira, S. L. C.; dos Santos, W. N. L.; Quintella, C. M.; Neto, B. B.; Bosque-Sendra, J. M. "Doehlert Matrix: A Chemometric Tool for Analytical Chemistry—Review," *Talanta* **2004**, *63*, 1061–1067.
- Ferreira, S. L. C.; Bruns, R. E.; Ferreira, H. S.; Matos, G. D.; David, J. M.; Brandão, G. C.; da Silva, E. G. P.; Portugal, L. A.; dos Reis, P. S.; Souza, A. S.; dos Santos, W. N. L. "Box-Behnken Design: An Alternative for the Optimization of Analytical Methods," *Anal. Chim. Acta* **2007**, *597*, 179–186.

- Gonzalez, A. G. “Two Level Factorial Experimental Designs Based on Multiple Linear Regression Models: A Tutorial Digest Illustrated by Case Studies,” *Anal. Chim. Acta* **1998**, 360, 227–241.
- Goupy, J. “What Kind of Experimental Design for Finding and Checking Robustness of Analytical Methods?” *Anal. Chim. Acta* **2005**, 544, 184–190.
- Hendrix, C. D. “What Every Technologist Should Know About Experimental Design,” *Chemtech* **1979**, 9, 167–174.
- Hendrix, C. D. “Through the Response Surface with Test Tube and Pipe Wrench,” *Chemtech* **1980**, 10, 488–497.
- Leardi, R. “Experimental Design: A Tutorial,” *Anal. Chim. Acta* **2009**, 652, 161–172.
- Liang, Y. “Comparison of Optimization Methods,” *Chromatography Review* **1985**, 12(2), 6–9.
- Morgan, E. *Chemometrics: Experimental Design*, John Wiley and Sons: Chichester, 1991.
- Thompson, M., ed. “Experimental Design and Optimization (1): An Introduction to Some Basic Concepts,” [AMC Technical Brief 24](#), June 2006.
- Thompson, M., ed. “Experimental Design and Optimization (2): Handling Uncontrolled Factors” [AMC Technical Brief 26](#), December 2006.
- Thompson, M., ed. “Experimental Design and Optimization (3): Some Fractional Factorial Designs,” [AMC Technical Brief 36](#), January 2009.
- Walters, F. H.; Morgan, S. L.; Parker, L. P., Jr.; Deming, S. N. *Sequential Simplex Optimization*, CRC Press: Boca Raton, FL, 1991. (an electronic version of this text is freely available from Multisimplex AB and is available [here](#).)

The following texts provide additional information about ANOVA calculations, including discussions of two-way analysis of variance.

- Graham, R. C. *Data Analysis for the Chemical Sciences*, VCH Publishers: New York, 1993.
- Miller, J. C.; Miller, J. N. *Statistics for Analytical Chemistry*, Ellis Horwood Limited: Chichester, 1988.

The following resources provide additional information on the validation of analytical methods.

- Gonzalez, A. G.; Herrador, M. A. “A Practical Guide to Analytical Method Validation, Including Measurement Uncertainty and Accuracy Profiles,” *Trends Anal. Chem.* **2007**, 26, 227–238.
- Thompson, M.; Ellison, S. L. R.; Wood, R. “Harmonized Guidelines for Single-Laboratory Validation of Analytical Methods,” *Pure Appl. Chem.* **2002**, 74, 835–855.

Chapter 15

The following three experiments introduce aspects of quality assurance and quality control.

- Bell, S. C.; Moore, J. “Integration of Quality Assurance/Quality Control into Quantitative Analysis,” *J. Chem. Educ.* **1998**, *75*, 874–877.
- Cancilla, D. A. “Integration of Environmental Analytical Chemistry with Environmental Law: The Development of a Problem-Based Laboratory,” *J. Chem. Educ.* **2001**, *78*, 1652–1660.
- Laquer, F. C. “Quality Control Charts in the Quantitative Analysis Laboratory Using Conductance Measurement,” *J. Chem. Educ.* **1990**, *67*, 900–902.
- Marcos, J.; Ríos, A.; Valcárcel, M. “Practicing Quality Control in a Bioanalytical Experiment,” *J. Chem. Educ.* **1995**, *72*, 947–949.

The following texts and articles may be consulted for an additional discussion of quality assurance and quality control.

- Amore, F. “Good Analytical Practices,” *Anal. Chem.* **1979**, *51*, 1105A–1110A.
- Barnard, Jr. A. J.; Mitchell, R. M.; Wolf, G. E. “Good Analytical Practices in Quality Control,” *Anal. Chem.* **1978**, *50*, 1079A–1086A.
- Cairns, T.; Rogers, W. M. “Acceptable Analytical Data for Trace Analysis,” *Anal. Chem.* **1993**, *55*, 54A–57A.
- Taylor, J. K. *Quality Assurance of Chemical Measurements*, Lewis Publishers: Chelsea, MI, 1987.

Additional information about the construction and use of control charts may be found in the following sources.

- Miller, J. C.; Miller, J. N. *Statistics for Analytical Chemistry*, 2nd Ed., Ellis Horwood Limited: Chichester, 1988.
- Ouchi, G. I. “Creating Control Charts with a Spreadsheet Program,” *LC•GC* **1993**, *11*, 416–423.
- Ouchi, G. I. “Creating Control Charts with a Spreadsheet Program,” *LC•GC* **1997**, *15*, 336–344.
- Simpson, J. M. “Spreadsheet Statistics,” *J. Chem. Educ.* **1994**, *71*, A88–A89.

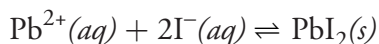
Appendix

- Appendix 1: Normality
- Appendix 2: Propagation of Uncertainty
- Appendix 3: Single-Sided Normal Distribution
- Appendix 4: Critical Values for the t -Test
- Appendix 5: Critical Values for the F -Test
- Appendix 6: Critical Values for Dixon's Q -Test
- Appendix 7: Critical Values for Grubb's Test
- Appendix 8: Recommended Primary Standards
- Appendix 9: Correcting Mass for the Buoyancy of Air
- Appendix 10: Solubility Products
- Appendix 11: Acid–Base Dissociation Constants
- Appendix 12: Metal–Ligand Formation Constants
- Appendix 13: Standard Reduction Potentials
- Appendix 14: Random Number Table
- Appendix 15: Polarographic Half-Wave Potentials
- Appendix 16: Countercurrent Separations
- Appendix 17: Review of Chemical Kinetics

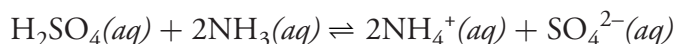
Appendix 1: Normality

Normality expresses concentration in terms of the equivalents of one chemical species reacting stoichiometrically with another chemical species. Note that this definition makes an equivalent, and thus normality, a function of the chemical reaction. Although a solution of H_2SO_4 has a single molarity, its normality depends on its reaction.

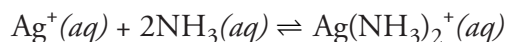
We define the number of equivalents, n , using a reaction unit, which is the part of a chemical species participating in the chemical reaction. In a precipitation reaction, for example, the reaction unit is the charge of the cation or anion participating in the reaction; thus, for the reaction



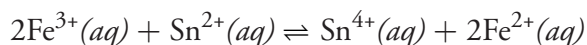
$n = 2$ for $\text{Pb}^{2+}(\text{aq})$ and $n = 1$ for $2\text{I}^{-}(\text{aq})$. In an acid–base reaction, the reaction unit is the number of H^{+} ions that an acid donates or that a base accepts. For the reaction between sulfuric acid and ammonia



$n = 2$ for $\text{H}_2\text{SO}_4(\text{aq})$ because sulfuric acid donates two protons, and $n = 1$ for $\text{NH}_3(\text{aq})$ because each ammonia accepts one proton. For a complexation reaction, the reaction unit is the number of electron pairs that the metal accepts or that the ligand donates. In the reaction between Ag^{+} and NH_3



$n = 2$ for $\text{Ag}^{+}(\text{aq})$ because the silver ion accepts two pairs of electrons, and $n = 1$ for NH_3 because each ammonia has one pair of electrons to donate. Finally, in an oxidation–reduction reaction the reaction unit is the number of electrons released by the reducing agent or accepted by the oxidizing agent; thus, for the reaction



$n = 1$ for $\text{Fe}^{3+}(\text{aq})$ and $n = 2$ for $\text{Sn}^{2+}(\text{aq})$. Clearly, determining the number of equivalents for a chemical species requires an understanding of how it reacts.

Normality is the number of equivalent weights, EW , per unit volume. An equivalent weight is the ratio of a chemical species' formula weight, FW , to the number of its equivalents, n .

$$EW = \frac{FW}{n}$$

The following simple relationship exists between normality, N , and molarity, M .

$$N = n \times M$$

Appendix 2: Propagation of Uncertainty

In Chapter 4 we considered the basic mathematical details of a propagation of uncertainty, limiting our treatment to the propagation of measurement error. This treatment is incomplete because it omits other sources of uncertainty that influence the overall uncertainty in our results. Consider, for example, [Practice Exercise 4.2](#), in which we determined the uncertainty in a standard solution of Cu^{2+} prepared by dissolving a known mass of Cu wire with HNO_3 , diluting to volume in a 500-mL volumetric flask, and then diluting a 1-mL portion of this stock solution to volume in a 250-mL volumetric flask. To calculate the overall uncertainty we included the uncertainty in the sample's mass and the uncertainty of the volumetric glassware. We did not consider other sources of uncertainty, including the purity of the Cu wire, the effect of temperature on the volumetric glassware, and the repeatability of our measurements. In this appendix we take a more detailed look at the propagation of uncertainty, using the standardization of NaOH as an example.

Standardizing a Solution of NaOH¹

Because solid NaOH is an impure material, we cannot directly prepare a stock solution by weighing a sample of NaOH and diluting to volume. Instead, we determine the solution's concentration through a process called a standardization.² A fairly typical procedure is to use the NaOH solution to titrate a carefully weighed sample of previously dried potassium hydrogen phthalate, $\text{C}_8\text{H}_5\text{O}_4\text{K}$, which we will write here, in shorthand notation, as KHP. For example, after preparing a nominally 0.1 M solution of NaOH, we place an accurately weighed 0.4-g sample of dried KHP in the reaction vessel of an automated titrator and dissolve it in approximately 50 mL of water (the exact amount of water is not important). The automated titrator adds the NaOH to the KHP solution and records the pH as a function of the volume of NaOH. The resulting titration curve provides us with the volume of NaOH needed to reach the titration's endpoint.³

The end point of the titration is the volume of NaOH corresponding to a stoichiometric reaction between NaOH and KHP.



Knowing the mass of KHP and the volume of NaOH needed to reach the endpoint, we use the following equation to calculate the molarity of the NaOH solution.

$$C_{\text{NaOH}} = \frac{1000 \times m_{\text{KHP}} \times P_{\text{KHP}}}{M_{\text{KHP}} \times V_{\text{NaOH}}}$$

where C_{NaOH} is the concentration of NaOH (in mol KHP/L), m_{KHP} is the mass of KHP taken (in g), P_{KHP} is the purity of the KHP (where $P_{\text{KHP}} = 1$ means that the KHP is pure and has no impurities), M_{KHP} is the molar mass of KHP (in g KHP/mol KHP), and V_{NaOH} is the volume of NaOH (in mL). The factor of 1000 simply converts the volume in mL to L.

Identifying and Analyzing Sources of Uncertainty

Although it seems straightforward, identifying sources of uncertainty requires care as it is easy to overlook important sources of uncertainty. One approach is to use a cause-and-effect diagram, also known as an Ishikawa

1 This example is adapted from Ellison, S. L. R.; Rosslein, M.; Williams, A. EURACHEM/CITAC Guide: Quantifying Uncertainty in Analytical Measurement, 2nd Edition, 2000 (available at <http://www.measurementuncertainty.org/>).

2 See [Chapter 5](#) for further details about standardizations.

3 For further details about titrations, see [Chapter 9](#).

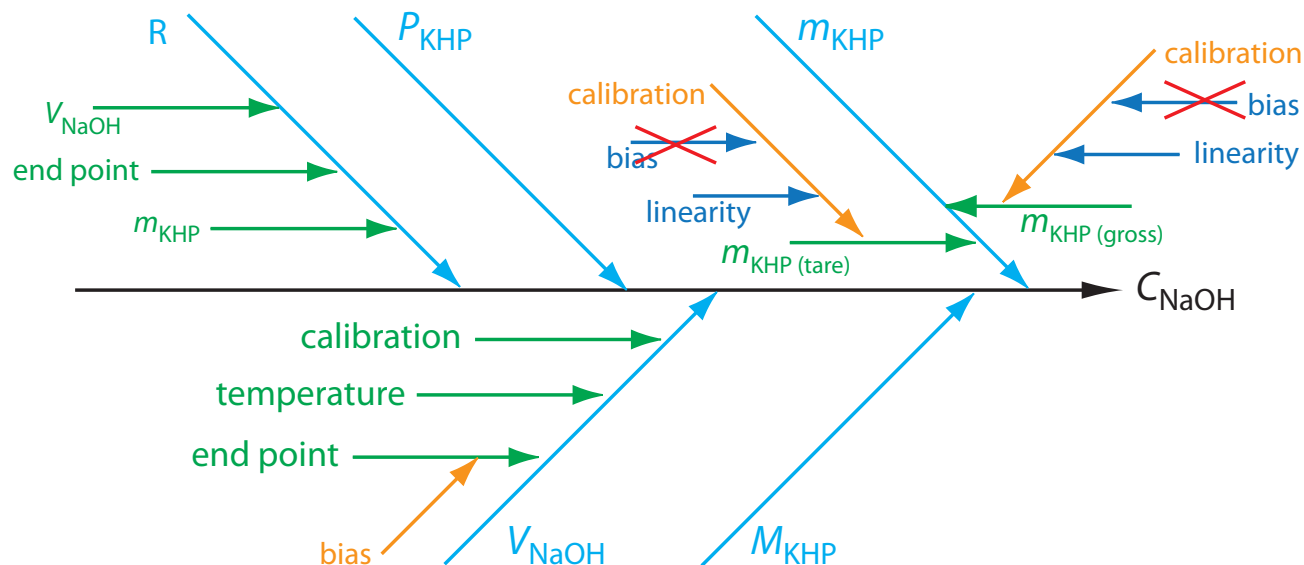


Figure A2.1 Cause-and-effect diagram for the standardization of NaOH by titration against KHP. The trunk, shown in black, represents the the concentration of NaOH. The remaining arrows represent the sources of uncertainty that affect C_{NaOH} . Light blue arrows, for example, represent the primary sources of uncertainty affecting C_{NaOH} , and green arrows represent secondary sources of uncertainty that affect the primary sources of uncertainty. See the text for additional details.

diagram—named for its inventor, Kaoru Ishikawa—or a fish bone diagram. To construct a cause-and-effect diagram, we first draw an arrow pointing to the desired result; this is the diagram's trunk. We then add five main branch lines to the trunk, one for each of the four parameters that determine the concentration of NaOH and one for the method's repeatability. Next we add additional branches to the main branch for each of these five factors, continuing until we account for all potential sources of uncertainty. Figure A2.1 shows the complete cause-and-effect diagram for this analysis.

Before we continue, let's take a closer look at Figure A2.1 to be sure we understand each branch of the diagram. To determine the mass of KHP we make two measurements: taring the balance and weighing the gross sample. Each measurement of mass is subject to a calibration uncertainty. When we calibrate a balance, we are essentially creating a calibration curve of the balance's signal as a function of mass. Any calibration curve is subject to a systematic uncertainty in the y -intercept (bias) and an uncertainty in the slope (linearity). We can ignore the calibration bias because it contributes equally to both $m_{\text{KHP}(\text{gross})}$ and $m_{\text{KHP}(\text{tare})}$, and because we determine the mass of KHP by difference.

$$m_{\text{KHP}} = m_{\text{KHP}(\text{gross})} - m_{\text{KHP}(\text{tare})}$$

The volume of NaOH at the end point has three sources of uncertainty. First, an automated titrator uses a piston to deliver the NaOH to the reaction vessel, which means the volume of NaOH is subject to an uncertainty in the piston's calibration. Second, because a solution's volume varies with temperature, there is an additional source of uncertainty due to any fluctuation in the ambient temperature during the analysis. Finally, there is a bias in the titration's end point if the NaOH reacts with any species other than the KHP.

Repeatability, R , is a measure of how consistently we can repeat the analysis. Each instrument we use—the balance and the automatic titrator—contributes to this uncertainty. In addition, our ability to consistently

detect the end point also contributes to repeatability. Finally, there are no additional factors that affect the uncertainty of the KHP's purity or molar mass.

Estimating the Standard Deviation for Measurements

To complete a propagation of uncertainty we must express each measurement's uncertainty in the same way, usually as a standard deviation. Measuring the standard deviation for each measurement requires time and may not be practical. Fortunately, most manufacture provides a tolerance range for glassware and instruments. A 100-mL volumetric glassware, for example, has a tolerance of ± 0.1 mL at a temperature of 20°C . We can convert a tolerance range to a standard deviation using one of the following three approaches.

Assume a Uniform Distribution. Figure A2.2a shows a uniform distribution between the limits of $\pm x$, in which each result between the limits is equally likely. A uniform distribution is the choice when the manufacturer provides a tolerance range without specifying a level of confidence and when there is no reason to believe that results near the center of the range are more likely than results at the ends of the range. For a uniform distribution the estimated standard deviation, s , is

$$s = \frac{x}{\sqrt{3}}$$

This is the most conservative estimate of uncertainty as it gives the largest estimate for the standard deviation.

Assume a Triangular Distribution. Figure A2.2b shows a triangular distribution between the limits of $\pm x$, in which the most likely result is at the center of the distribution, decreasing linearly toward each limit. A triangular distribution is the choice when the manufacturer provides a tolerance range without specifying a level of confidence and when there is a good reason to believe that results near the center of the range are more likely than results at the ends of the range. For a uniform distribution the estimated standard deviation, s , is

$$s = \frac{x}{\sqrt{6}}$$

This is a less conservative estimate of uncertainty as, for any value of x , the standard deviation is smaller than that for a uniform distribution.

Assume a Normal Distribution. Figure A2.3c shows a normal distribution that extends, as it must, beyond the limits of $\pm x$, and which is centered at the mid-point between $-x$ and x . A normal distribution is the choice when we know the confidence interval for the range. For a normal distribution the estimated standard deviation, s , is

$$s = \frac{x}{z}$$

where z is 1.96 for a 95% confidence interval and 3.00 for a 99.7% confidence interval.

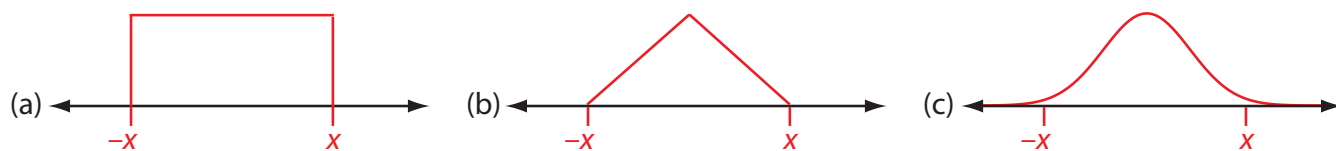


Figure A2.2 Three possible distributions for estimating the standard deviation from a range: (a) a uniform distribution; (b) a triangular distribution; and (c) a normal distribution.

Completing the Propagation of Uncertainty

Now we are ready to return to our example and determine the uncertainty for the standardization of NaOH. First we establish the uncertainty for each of the five primary sources—the mass of KHP, the volume of NaOH at the end point, the purity of the KHP, the molar mass for KHP, and the titration's repeatability. Having established these, we can combine them to arrive at the final uncertainty.

Uncertainty in the Mass of KHP. After drying the KHP, we store it in a sealed container to prevent it from reabsorbing moisture. To find the mass of KHP we first weigh the container, obtaining a value of 60.5450 g, and then weigh the container after removing a portion of KHP, obtaining a value of 60.1562 g. The mass of KHP, therefore, is 0.3888 g, or 388.8 mg.

To find the uncertainty in this mass we examine the balance's calibration certificate, which indicates that its tolerance for linearity is ± 0.15 mg. We will assume a uniform distribution because there is no reason to believe that any result within this range is more likely than any other result. Our estimate of the uncertainty for any single measurement of mass, $u(m)$, is

$$u(m) = \frac{0.15 \text{ mg}}{\sqrt{3}} = 0.09 \text{ mg}$$

Because we determine the mass of KHP by subtracting the container's final mass from its initial mass, the uncertainty of the mass of KHP $u(m_{\text{KHP}})$, is given by the following propagation of uncertainty.

$$u(m_{\text{KHP}}) = \sqrt{(0.09 \text{ mg})^2 + (0.09 \text{ mg})^2} = 0.13 \text{ mg}$$

Uncertainty in the Volume of NaOH. After placing the sample of KHP in the automatic titrator's reaction vessel and dissolving with water, we complete the titration and find that it takes 18.64 mL of NaOH to reach the end point. To find the uncertainty in this volume we need to consider, as shown in [Figure A2.1](#), three sources of uncertainty: the automatic titrator's calibration, the ambient temperature, and any bias in determining the end point.

To find the uncertainty resulting from the titrator's calibration we examine the instrument's certificate, which indicates a range of ± 0.03 mL for a 20-mL piston. Because we expect that an effective manufacturing process is more likely to produce a piston that operates near the center of this range than at the extremes, we will assume a triangular distribution. Our estimate of the uncertainty due to the calibration, $u(V_{\text{cal}})$ is

$$u(V_{\text{cal}}) = \frac{0.03 \text{ mL}}{\sqrt{6}} = 0.012 \text{ mL}$$

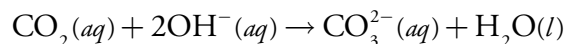
To determine the uncertainty due to the lack of temperature control, we draw on our prior work in the lab, which has established a temperature variation of $\pm 3^\circ\text{C}$ with a confidence level of 95%. To find the uncertainty, we convert the temperature range to a range of volumes using water's coefficient of expansion

$$(2.1 \times 10^{-4} \text{ }^\circ\text{C}^{-1}) \times (\pm 3^\circ\text{C}) \times 18.64 \text{ mL} = \pm 0.012 \text{ mL}$$

and then estimate the uncertainty due to temperature, $u(V_{\text{temp}})$ as

$$u(V_{\text{temp}}) = \frac{0.012 \text{ mL}}{1.96} = 0.006 \text{ mL}$$

Titration using NaOH are subject to a bias due to the adsorption of CO₂, which can react with OH⁻, as shown here.



If CO₂ is present, the volume of NaOH at the end point includes both the NaOH reacting with the KHP and the NaOH reacting with CO₂. Rather than trying to estimate this bias, it is easier to bathe the reaction vessel in a stream of argon, which excludes CO₂ from the titrator's reaction vessel.

Adding together the uncertainties for the piston's calibration and the lab's temperature fluctuation gives the uncertainty in the volume of NaOH, $u(V_{\text{NaOH}})$ as

$$u(V_{\text{NaOH}}) = \sqrt{(0.012 \text{ mL})^2 + (0.006 \text{ mL})^2} = 0.013 \text{ mL}$$

Uncertainty in the Purity of KHP. According to the manufacturer, the purity of KHP is 100% ± 0.05%, or 1.0 ± 0.0005. Assuming a rectangular distribution, we report the uncertainty, $u(P_{\text{KHP}})$ as

$$u(P_{\text{KHP}}) = \frac{0.0005}{\sqrt{3}} = 0.00029$$

Uncertainty in the Molar Mass of KHP. The molar mass of C₈H₅O₄K is 204.2212 g/mol, based on the following atomic weights: 12.0107 for carbon, 1.00794 for hydrogen, 15.9994 for oxygen, and 39.0983 for potassium. Each of these atomic weights has an quoted uncertainty that we can convert to a standard uncertainty assuming a rectangular distribution, as shown here (the details of the calculations are left to you).

element	quoted uncertainty	standard uncertainty
carbon	±0.0008	±0.00046
hydrogen	±0.00007	±0.000040
oxygen	±0.0003	±0.00017
potassium	±0.0001	±0.000058

Adding together the uncertainties gives the uncertainty in the molar mass, $u(M_{\text{KHP}})$, as

$$u(M_{\text{KHP}}) = \sqrt{8 \times (0.00046)^2 + 5 \times (0.000040)^2 + 4 \times (0.00017)^2 + (0.000058)^2} = 0.0038 \text{ g/mol}$$

Uncertainty in the Titration's Repeatability. To estimate the uncertainty due to repeatability we complete five titrations, obtaining results for the concentration of NaOH of 0.1021 M, 0.1022 M, 0.1022 M, 0.1021 M, and 0.1021 M. The relative standard deviation, s_r , for these titrations is

$$s_r = \frac{5.477 \times 10^{-5}}{0.1021} = 0.0005$$

If we treat the ideal repeatability as 1.0, then the uncertainty due to repeatability, $u(R)$, is equal to the relative standard deviation, or, in this case, 0.0005.

Combining the Uncertainties. [Table A2.1](#) summarizes the five primary sources of uncertainty. As described earlier, we calculate the concentration of NaOH we use the following equation, which is slightly modified to include a term for the titration's repeatability, which, as described above, has a value of 1.0.

Table A2.1 Values and Uncertainties for the Standardization of NaOH

	source	value, x	uncertainty, $u(x)$
m_{KHP}	mass of KHP	0.3888 g	0.00013 g
V_{NaOH}	volume of NaOH at end point	18.64 mL	0.013 mL
P_{KHP}	purity of KHP	1.0	0.00029
M_{KHP}	molar mass of KHP	204.2212 g/mol	0.0038 g/mol
R	repeatability	1.0	0.0005

$$C_{\text{NaOH}} = \frac{1000 \times m_{\text{KHP}} \times P_{\text{KHP}}}{M_{\text{KHP}} \times V_{\text{NaOH}}} \times R$$

Using the values from Table A2.1, we find that the concentration of NaOH is

$$C_{\text{NaOH}} = \frac{1000 \times 0.3888 \times 1.0}{204.2212 \times 18.64} \times 1.0 = 0.1021 \text{ M}$$

Because the calculation of C_{NaOH} includes only multiplication and division, the uncertainty in the concentration, $u(C_{\text{NaOH}})$ is given by the following propagation of uncertainty.

$$\frac{u(C_{\text{NaOH}})}{C_{\text{NaOH}}} = \frac{u(C_{\text{NaOH}})}{0.1021 \text{ M}} = \sqrt{\frac{(0.00013)^2}{(0.3888)^2} + \frac{(0.00029)^2}{(1.0)^2} + \frac{(0.0038)^2}{(204.2212)^2} + \frac{(0.013)^2}{(18.64)^2} + \frac{(0.0005)^2}{(1.0)^2}}$$

Solving for $u(C_{\text{NaOH}})$ gives its value as $\pm 0.00010 \text{ M}$, which is the final uncertainty for the analysis.

Evaluating the Sources of Uncertainty

Figure A2.3 shows the relative uncertainty in the concentration of NaOH and the relative uncertainties for each of the five contributions to the total uncertainty. Of the contributions, the most important is the volume of NaOH, and it is here to which we should focus our attention if we wish to improve the overall uncertainty for the standardization.

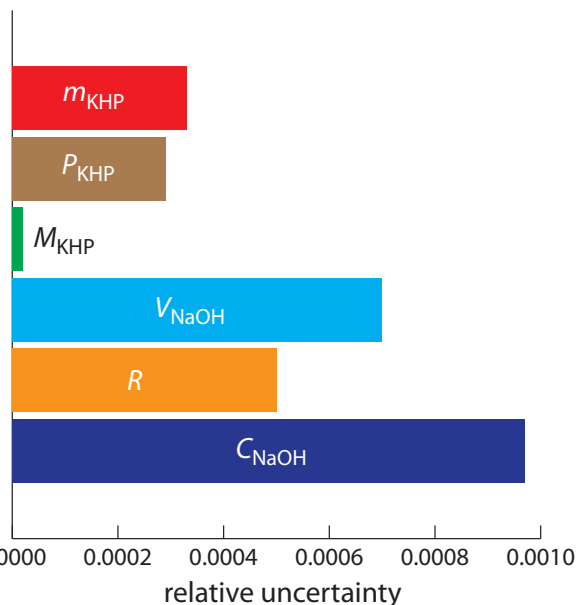


Figure A2.3 Bar graph showing the relative uncertainty in C_{NaOH} , and the relative uncertainty in each of the main factors affecting the overall uncertainty.

Appendix 3: Single-Sided Normal Distribution

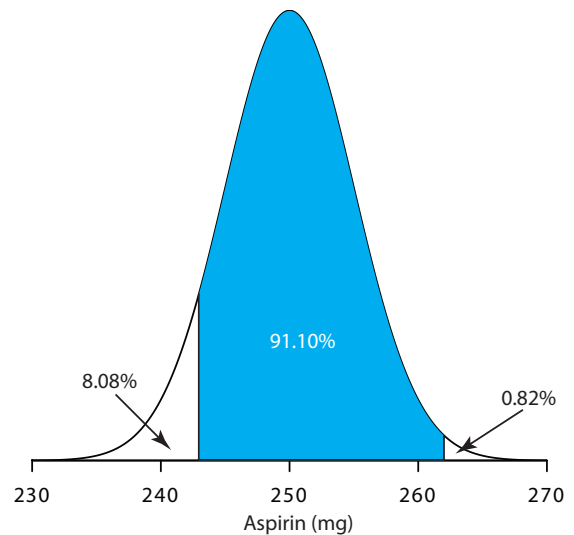
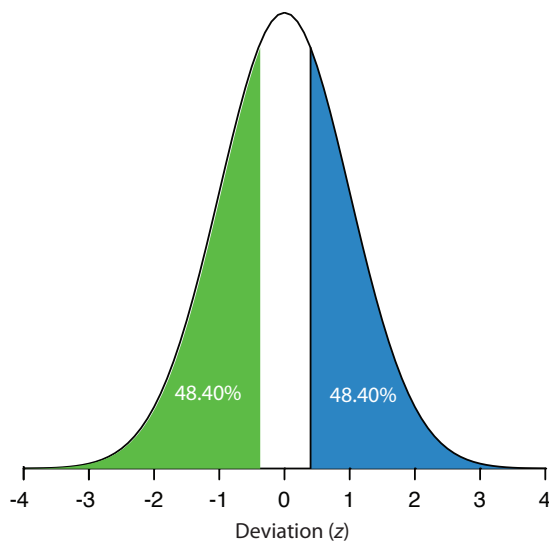
The table in this appendix gives the proportion, P , of the area under a normal distribution curve that lies to the right of a deviation, z

$$z = \frac{X - \mu}{\sigma}$$

where X is the value for which the deviation is being defined, μ is the distribution's mean value and σ is the distribution's standard deviation. For example, the proportion of the area under a normal distribution to the right of a deviation of 0.04 is 0.4840 (see entry in red in the table), or 48.40% of the total area (see the area shaded blue in the figure to the right). The proportion of the area to the left of the deviation is $1 - P$. For a deviation of 0.04, this is $1 - 0.4840$, or 51.60%.

When the deviation is negative—that is, when X is smaller than μ —the value of z is negative. In this case, the values in the table give the area to the left of z . For example, if z is -0.04 , then 48.40% of the area lies to the left of the deviation (see area shaded green in the figure shown below on the left).

To use the single-sided normal distribution table, sketch the normal distribution curve for your problem and shade the area corresponding to your answer (for example, see the figure shown above on the right, which



is for [Example 4.11](#)). This divides the normal distribution curve into three regions: the area corresponding to your answer (shown in blue), the area to the right of this, and the area to the left of this. Calculate the values of z for the limits of the area corresponding to your answer. Use the table to find the areas to the right and to the left of these deviations. Subtract these values from 100% and, voilà, you have your answer.

Appendix 4: Critical Values for t -Test

Assuming you have calculated t_{exp} , there are two approaches to interpreting a t -test. In the first approach you choose a value of α for rejecting the null hypothesis and read the value of $t(\alpha, \nu)$ from the table shown below. If $t_{\text{exp}} > t(\alpha, \nu)$, you reject the null hypothesis and accept the alternative hypothesis. In the second approach, you find the row in the table below corresponding to your degrees of freedom and move across the row to find (or estimate) the α corresponding to $t_{\text{exp}} = t(\alpha, \nu)$; this establishes largest value of α for which you can retain the null hypothesis. Finding, for example, that α is 0.10 means that you would retain the null hypothesis at the 90% confidence level, but reject it at the 89% confidence level. The examples in this textbook use the first approach.

Values of t for...				
...a confidence interval of:	90%	95%	98%	99%
...an α value of:	0.10	0.05	0.02	0.01
Degrees of Freedom				
1	6.314	12.706	31.821	63.657
2	2.920	4.303	6.965	9.925
3	2.353	3.182	4.541	5.841
4	2.132	2.776	3.747	4.604
5	2.015	2.571	3.365	4.032
6	1.943	2.447	3.143	3.707
7	1.895	2.365	2.998	3.499
8	1.860	2.306	2.896	3.255
9	1.833	2.262	2.821	3.250
10	1.812	2.228	2.764	3.169
12	1.782	2.179	2.681	3.055
14	1.761	2.145	2.624	2.977
16	1.746	2.120	2.583	2.921
18	1.734	2.101	2.552	2.878
20	1.725	2.086	2.528	2.845
30	1.697	2.042	2.457	2.750
50	1.676	2.009	2.311	2.678
∞	1.645	1.960	2.326	2.576

The values in this table are for a two-tailed t -test. For a one-tail t -test, divide the α values by 2. For example, the last column has an α value of 0.005 and a confidence interval of 99.5% when conducting a one-tailed t -test.

Appendix 5: Critical Values for the F-Test

The following tables provide values for $F(0.05, \nu_{\text{num}}, \nu_{\text{denom}})$ for one-tailed and for two-tailed F-tests. To use these tables, decide whether the situation calls for a one-tailed or a two-tailed analysis and calculate F_{exp}

$$F_{\text{exp}} = \frac{s_A^2}{s_B^2}$$

where s_A^2 is greater than s_B^2 . Compare F_{exp} to $F(0.05, \nu_{\text{num}}, \nu_{\text{denom}})$ and reject the null hypothesis if $F_{\text{exp}} > F(0.05, \nu_{\text{num}}, \nu_{\text{denom}})$. You may replace s with σ if you know the population's standard deviation.

$F(0.05, \nu_{\text{num}}, \nu_{\text{denom}})$ for a One-Tailed F-Test													
$\begin{matrix} \nu_{\text{num}} \Rightarrow \\ \downarrow \nu_{\text{denom}} \end{matrix}$	1	2	3	4	5	6	7	8	9	10	15	20	∞
1	161.4	199.5	215.7	224.6	230.2	234.0	236.8	238.9	240.5	241.9	245.9	248.0	254.3
2	18.51	19.00	19.16	19.25	19.30	19.33	19.35	19.37	19.38	19.40	19.43	19.45	19.50
3	10.13	9.552	9.277	9.117	9.013	8.941	8.887	8.845	8.812	8.786	8.703	8.660	8.526
4	7.709	6.994	6.591	6.388	6.256	6.163	6.094	6.041	5.999	5.964	5.858	5.803	5.628
5	6.608	5.786	5.409	5.192	5.050	4.950	4.876	4.818	4.722	4.753	4.619	4.558	4.365
6	5.591	5.143	4.757	4.534	4.387	4.284	4.207	4.147	4.099	4.060	3.938	3.874	3.669
7	5.591	4.737	4.347	4.120	3.972	3.866	3.787	3.726	3.677	3.637	3.511	3.445	3.230
8	5.318	4.459	4.066	3.838	3.687	3.581	3.500	3.438	3.388	3.347	3.218	3.150	2.928
9	5.117	4.256	3.863	3.633	3.482	3.374	3.293	3.230	3.179	3.137	3.006	2.936	2.707
10	4.965	4.103	3.708	3.478	3.326	3.217	3.135	3.072	3.020	2.978	2.845	2.774	2.538
11	4.844	3.982	3.587	3.257	3.204	3.095	3.012	2.948	2.896	2.854	2.719	2.646	2.404
12	4.747	3.885	3.490	3.259	3.106	2.996	2.913	2.849	2.796	2.753	2.617	2.544	2.296
13	4.667	3.806	3.411	3.179	3.025	2.915	2.832	2.767	2.714	2.671	2.533	2.459	2.206
14	4.600	3.739	3.344	3.112	2.958	2.848	2.764	2.699	2.646	2.602	2.463	2.388	2.131
15	4.534	3.682	3.287	3.056	2.901	2.790	2.707	2.641	2.588	2.544	2.403	2.328	2.066
16	4.494	3.634	3.239	3.007	2.852	2.741	2.657	2.591	2.538	2.494	2.352	2.276	2.010
17	4.451	3.592	3.197	2.965	2.810	2.699	2.614	2.548	2.494	2.450	2.308	2.230	1.960
18	4.414	3.555	3.160	2.928	2.773	2.661	2.577	2.510	2.456	2.412	2.269	2.191	1.917
19	4.381	3.522	3.127	2.895	2.740	2.628	2.544	2.477	2.423	2.378	2.234	2.155	1.878
20	4.351	3.493	3.098	2.866	2.711	2.599	2.514	2.447	2.393	2.348	2.203	2.124	1.843
∞	3.842	2.996	2.605	2.372	2.214	2.099	2.010	1.938	1.880	1.831	1.666	1.570	1.000

$F(0.05, \nu_{\text{num}}, \nu_{\text{denom}})$ for a Two-Tailed F-Test

$\frac{\nu_{\text{num}} \Rightarrow}{\downarrow \nu_{\text{denom}}}$	1	2	3	4	5	6	7	8	9	10	15	20	∞
1	647.8	799.5	864.2	899.6	921.8	937.1	948.2	956.7	963.3	968.6	984.9	993.1	1018
2	38.51	39.00	39.17	39.25	39.30	39.33	39.36	39.37	39.39	39.40	39.43	39.45	39.50
3	17.44	16.04	15.44	15.10	14.88	14.73	14.62	14.54	14.47	14.42	14.25	14.17	13.90
4	12.22	10.65	9.979	9.605	9.364	9.197	9.074	8.980	8.905	8.444	8.657	8.560	8.257
5	10.01	8.434	7.764	7.388	7.146	6.978	6.853	6.757	6.681	6.619	6.428	6.329	6.015
6	8.813	7.260	6.599	6.227	5.988	5.820	5.695	5.600	5.523	5.461	5.269	5.168	4.894
7	8.073	6.542	5.890	5.523	5.285	5.119	4.995	4.899	4.823	4.761	4.568	4.467	4.142
8	7.571	6.059	5.416	5.053	4.817	4.652	4.529	4.433	4.357	4.259	4.101	3.999	3.670
9	7.209	5.715	5.078	4.718	4.484	4.320	4.197	4.102	4.026	3.964	3.769	3.667	3.333
10	6.937	5.456	4.826	4.468	4.236	4.072	3.950	3.855	3.779	3.717	3.522	3.419	3.080
11	6.724	5.256	4.630	4.275	4.044	3.881	3.759	3.644	3.588	3.526	3.330	3.226	2.883
12	6.544	5.096	4.474	4.121	3.891	3.728	3.607	3.512	3.436	3.374	3.177	3.073	2.725
13	6.414	4.965	4.347	3.996	3.767	3.604	3.483	3.388	3.312	3.250	3.053	2.948	2.596
14	6.298	4.857	4.242	3.892	3.663	3.501	3.380	3.285	3.209	3.147	2.949	2.844	2.487
15	6.200	4.765	4.153	3.804	3.576	3.415	3.293	3.199	3.123	3.060	2.862	2.756	2.395
16	6.115	4.687	4.077	3.729	3.502	3.341	3.219	3.125	3.049	2.986	2.788	2.681	2.316
17	6.042	4.619	4.011	3.665	3.438	3.277	3.156	3.061	2.985	2.922	2.723	2.616	2.247
18	5.978	4.560	3.954	3.608	3.382	3.221	3.100	3.005	2.929	2.866	2.667	2.559	2.187
19	5.922	4.508	3.903	3.559	3.333	3.172	3.051	2.956	2.880	2.817	2.617	2.509	2.133
20	5.871	4.461	3.859	3.515	3.289	3.128	3.007	2.913	2.837	2.774	2.573	2.464	2.085
∞	5.024	3.689	3.116	2.786	2.567	2.408	2.288	2.192	2.114	2.048	1.833	1.708	1.000

Appendix 6: Critical Values for Dixon's Q-Test

The following table provides critical values for $Q(\alpha, n)$, where α is the probability of incorrectly rejecting the suspected outlier and n is the number of samples in the data set. There are several versions of Dixon's Q-Test, each of which calculates a value for Q_{ij} where i is the number of suspected outliers on one end of the data set and j is the number of suspected outliers on the opposite end of the data set. The values given here are for Q_{10} , where

$$Q_{\text{exp}} = Q_{10} = \frac{|\text{outlier's value} - \text{nearest value}|}{\text{largest value} - \text{smallest value}}$$

The suspected outlier is rejected if Q_{exp} is greater than $Q(\alpha, n)$. For additional information consult Rorabacher, D. B. "Statistical Treatment for Rejection of Deviant Values: Critical Values of Dixon's 'Q' Parameter and Related Subrange Ratios at the 95% confidence Level," *Anal. Chem.* **1991**, *63*, 139–146.

Critical Values for the Q-Test of a Single Outlier (Q_{10})

$\alpha \Rightarrow$ $\Downarrow n$	0.1	0.05	0.04	0.02	0.01
3	0.941	0.970	0.976	0.988	0.994
4	0.765	0.829	0.846	0.889	0.926
5	0.642	0.710	0.729	0.780	0.821
6	0.560	0.625	0.644	0.698	0.740
7	0.507	0.568	0.586	0.637	0.680
8	0.468	0.526	0.543	0.590	0.634
9	0.437	0.493	0.510	0.555	0.598
10	0.412	0.466	0.483	0.527	0.568

Appendix 7: Critical Values for Grubb's Test

The following table provides critical values for $G(\alpha, n)$, where α is the probability of incorrectly rejecting the suspected outlier and n is the number of samples in the data set. There are several versions of Grubb's Test, each of which calculates a value for G_{ij} where i is the number of suspected outliers on one end of the data set and j is the number of suspected outliers on the opposite end of the data set. The values given here are for G_{10} , where

$$G_{\text{exp}} = G_{10} = \frac{|X_{\text{out}} - \bar{X}|}{s}$$

The suspected outlier is rejected if G_{exp} is greater than $G(\alpha, n)$.

$G(\alpha, n)$ for Grubb's Test of a Single Outlier

$\frac{\alpha}{\downarrow n}$	0.05	0.01
3	1.155	1.155
4	1.481	1.496
5	1.715	1.764
6	1.887	1.973
7	2.202	2.139
8	2.126	2.274
9	2.215	2.387
10	2.290	2.482
11	2.355	2.564
12	2.412	2.636
13	2.462	2.699
14	2.507	2.755
15	2.549	2.755

Appendix 8: Recommended Primary Standards

All compounds should be of the highest available purity. Metals should be cleaned with dilute acid to remove any surface impurities and rinsed with distilled water. Unless otherwise indicated, compounds should be dried to a constant weight at 110 °C. Most of these compounds are soluble in dilute acid (1:1 HCl or 1:1 HNO₃), with gentle heating if necessary; some of the compounds are water soluble.

Element	Compound	FW (g/mol)	Comments
aluminum	Al metal	26.982	
antimony	Sb metal	121.760	
	KSbOC ₄ H ₄ O ₆	324.92	prepared by drying KSbC ₄ H ₄ O ₆ •1/2H ₂ O at 110 °C and storing in a desiccator
arsenic	As metal	74.922	
	As ₂ O ₃	197.84	toxic
barium	BaCO ₃	197.84	dry at 200 °C for 4 h
bismuth	Bi metal	208.98	
boron	H ₃ BO ₃	61.83	do not dry
bromine	KBr	119.01	
cadmium	Cd metal	112.411	
	CdO	128.40	
calcium	CaCO ₃	100.09	
cerium	Ce metal	140.116	
	(NH ₄) ₂ Ce(NO ₃) ₄	548.23	
cesium	Cs ₂ CO ₃	325.82	
	Cs ₂ SO ₄	361.87	
chlorine	NaCl	58.44	
chromium	Cr metal	51.996	
	K ₂ Cr ₂ O ₇	294.19	
cobalt	Co metal	58.933	
copper	Cu metal	63.546	
	CuO	79.54	
fluorine	NaF	41.99	do not store solutions in glass containers
iodine	KI	166.00	
	KIO ₃	214.00	
iron	Fe metal	55.845	
lead	Pb metal	207.2	
lithium	Li ₂ CO ₃	73.89	
magnesium	Mg metal	24.305	
manganese	Mn metal	54.938	

Element	Compound	FW (g/mol)	Comments
mercury	Hg metal	200.59	
molybdenum	Mo metal	95.94	
nickel	Ni metal	58.693	
phosphorous	KH ₂ PO ₄	136.09	
	P ₂ O ₅	141.94	
potassium	KCl	74.56	
	K ₂ CO ₃	138.21	
	K ₂ Cr ₂ O ₇	294.19	
	KHC ₈ H ₄ O ₂	204.23	
silicon	Si metal	28.085	
	SiO ₂	60.08	
silver	Ag metal	107.868	
	AgNO ₃	169.87	
sodium	NaCl	58.44	
	Na ₂ CO ₃	106.00	
	Na ₂ C ₂ O ₄	134.00	
strontium	SrCO ₃	147.63	
sulfur	elemental S	32.066	
	K ₂ SO ₄	174.27	
	Na ₂ SO ₄	142.04	
tin	Sn metal	118.710	
titanium	Ti metal	47.867	
tungsten	W metal	183.84	
uranium	U metal	238.029	
	U ₃ O ₈	842.09	
vanadium	V metal	50.942	
zinc	Zn metal	81.37	

Sources: (a) Smith, B. W.; Parsons, M. L. *J. Chem. Educ.* **1973**, *50*, 679–681; (b) Moody, J. R.; Greenburg, P. R.; Pratt, K. W.; Rains, T. C. *Anal. Chem.* **1988**, *60*, 1203A–1218A.

Appendix 9: Correcting Mass for the Buoyancy of Air

Calibrating a balance does not eliminate all sources of determinate error in the signal. Because of the buoyancy of air, an object always weighs less in air than it does in a vacuum. If there is a difference between the object's density and the density of the weights used to calibrate the balance, then we can make a correction for buoyancy.¹ An object's true weight in vacuo, W_v , is related to its weight in air, W_a , by the equation

$$W_v = W_a \times \left[1 + \left(\frac{1}{D_o} - \frac{1}{D_w} \right) \times 0.0012 \right] \quad \text{A9.1}$$

where D_o is the object's density, D_w is the density of the calibration weight, and 0.0012 is the density of air under normal laboratory conditions (all densities are in units of g/cm^3). The greater the difference between D_o and D_w the more serious the error in the object's measured weight.

The buoyancy correction for a solid is small, and frequently ignored. It may be significant, however, for low density liquids and gases. This is particularly important when calibrating glassware. For example, we can calibrate a volumetric pipet by carefully filling the pipet with water to its calibration mark, dispensing the water into a tared beaker, and determining the water's mass. After correcting for the buoyancy of air, we use the water's density to calculate the volume dispensed by the pipet.

Example

A 10-mL volumetric pipet was calibrated following the procedure just outlined, using a balance calibrated with brass weights having a density of $8.40 \text{ g}/\text{cm}^3$. At 25°C the pipet dispensed 9.9736 g of water. What is the actual volume dispensed by the pipet and what is the determinate error in this volume if we ignore the buoyancy correction? At 25°C the density of water is $0.99705 \text{ g}/\text{cm}^3$.

SOLUTION

Using equation A9.1 the water's true weight is

$$W_v = 9.9736 \text{ g} \times \left[1 + \left(\frac{1}{0.99705} - \frac{1}{8.40} \right) \times 0.0012 \right] = 9.9842 \text{ g}$$

and the actual volume of water dispensed by the pipet is

$$\frac{9.9842 \text{ g}}{0.99705 \text{ g}/\text{cm}^3} = 10.014 \text{ cm}^3 = 10.014 \text{ mL}$$

If we ignore the buoyancy correction, then we report the pipet's volume as

$$\frac{9.9736 \text{ g}}{0.99705 \text{ g}/\text{cm}^3} = 10.003 \text{ cm}^3 = 10.003 \text{ mL}$$

introducing a negative determinate error of -0.11% .

¹ Battino, R.; Williamson, A. G. *J. Chem. Educ.* **1984**, *61*, 51–52.

PROBLEMS

The following problems will help you in considering the effect of buoyancy on the measurement of mass.

1. In calibrating a 10-mL pipet a measured volume of water was transferred to a tared flask and weighed, yielding a mass of 9.9814 grams. (a) Calculate, with and without correcting for buoyancy, the volume of water delivered by the pipet. Assume that the density of water is 0.99707 g/cm³ and that the density of the weights is 8.40 g/cm³. (b) What are the absolute and relative errors introduced by failing to account for the effect of buoyancy? Is this a significant source of determinate error for the calibration of a pipet? Explain.
2. Repeat the questions in problem 1 for the case where a mass of 0.2500 g is measured for a solid that has a density of 2.50 g/cm³.
3. Is the failure to correct for buoyancy a constant or proportional source of determinate error?
4. What is the minimum density of a substance necessary to keep the buoyancy correction to less than 0.01% when using brass calibration weights with a density of 8.40 g/cm³?

Appendix 10: Solubility Products

The following table provides pK_{sp} and K_{sp} values for selected compounds, organized by the anion. All values are from Martell, A. E.; Smith, R. M. *Critical Stability Constants*, Vol. 4. Plenum Press: New York, 1976. Unless otherwise stated, values are for 25 °C and zero ionic strength.

Bromide (Br^-)	pK_{sp}	K_{sp}
CuBr	8.3	$5. \times 10^{-9}$
AgBr	12.30	5.0×10^{-13}
Hg ₂ Br ₂	22.25	5.6×10^{-13}
HgBr ₂ ($\mu = 0.5$ M)	18.9	1.3×10^{-19}
PbBr ₂ ($\mu = 4.0$ M)	5.68	2.1×10^{-6}

Carbonate (CO_3^{2-})	pK_{sp}	K_{sp}
MgCO ₃	7.46	3.5×10^{-8}
CaCO ₃ (calcite)	8.35	4.5×10^{-9}
CaCO ₃ (aragonite)	8.22	6.0×10^{-9}
SrCO ₃	9.03	9.3×10^{-10}
BaCO ₃	8.30	5.0×10^{-9}
MnCO ₃	9.30	5.0×10^{-10}
FeCO ₃	10.68	2.1×10^{-11}
CoCO ₃	9.98	1.0×10^{-10}
NiCO ₃	6.87	1.3×10^{-7}
Ag ₂ CO ₃	11.09	8.1×10^{-12}
Hg ₂ CO ₃	16.05	8.9×10^{-17}
ZnCO ₃	10.00	1.0×10^{-10}
CdCO ₃	13.74	1.8×10^{-14}
PbCO ₃	13.13	7.4×10^{-14}

Chloride (Cl^-)	pK_{sp}	K_{sp}
CuCl	6.73	1.9×10^{-7}
AgCl	9.74	1.8×10^{-10}
Hg ₂ Cl ₂	17.91	1.2×10^{-18}
PbCl ₂	4.78	2.0×10^{-19}

Chromate (CrO_4^{2-})	$\text{p}K_{\text{sp}}$	K_{sp}
BaCrO_4	9.67	2.1×10^{-10}
CuCrO_4	5.44	3.6×10^{-6}
Ag_2CrO_4	11.92	1.2×10^{-12}
Hg_2CrO_4	8.70	2.0×10^{-9}

Cyanide (CN^-)	$\text{p}K_{\text{sp}}$	K_{sp}
AgCN	15.66	2.2×10^{-16}
$\text{Zn}(\text{CN})_2$ ($\mu = 3.0 \text{ M}$)	15.5	$3. \times 10^{-16}$
$\text{Hg}_2(\text{CN})_2$	39.3	$5. \times 10^{-40}$

Ferrocyanide [$\text{Fe}(\text{CN})_6^{4-}$]	$\text{p}K_{\text{sp}}$	K_{sp}
$\text{Zn}_2[\text{Fe}(\text{CN})_6]$	15.68	2.1×10^{-16}
$\text{Cd}_2[\text{Fe}(\text{CN})_6]$	17.38	4.2×10^{-18}
$\text{Pb}_2[\text{Fe}(\text{CN})_6]$	18.02	9.5×10^{-19}

Fluoride (F^-)	$\text{p}K_{\text{sp}}$	K_{sp}
MgF_2	8.18	6.6×10^{-9}
CaF_2	10.41	3.9×10^{-11}
SrF_2	8.54	2.9×10^{-9}
BaF_2	5.76	1.7×10^{-6}
PbF_2	7.44	3.6×10^{-8}

Hydroxide (OH^-)	$\text{p}K_{\text{sp}}$	K_{sp}
$\text{Mg}(\text{OH})_2$	11.15	7.1×10^{-12}
$\text{Ca}(\text{OH})_2$	5.19	6.5×10^{-6}
$\text{Ba}(\text{OH})_2 \cdot 8\text{H}_2\text{O}$	3.6	$3. \times 10^{-4}$
$\text{La}(\text{OH})_3$	20.7	$2. \times 10^{-21}$
$\text{Mn}(\text{OH})_2$	12.8	1.6×10^{-13}
$\text{Fe}(\text{OH})_2$	15.1	$8. \times 10^{-16}$
$\text{Co}(\text{OH})_2$	14.9	1.3×10^{-15}
$\text{Ni}(\text{OH})_2$	15.2	$6. \times 10^{-16}$
$\text{Cu}(\text{OH})_2$	19.32	4.8×10^{-20}
$\text{Fe}(\text{OH})_3$	38.8	1.6×10^{-39}

Co(OH) ₃ (<i>T</i> = 19 °C)	44.5	3. × 10 ⁻⁴⁵
Ag ₂ O (+ H ₂ O ⇌ 2Ag ⁺ + 2OH ⁻)	15.42	3.8 × 10 ⁻¹⁶
Cu ₂ O (+ H ₂ O ⇌ 2Cu ⁺ + 2OH ⁻)	29.4	4. × 10 ⁻³⁰
Zn(OH) ₂ (amorphous)	15.52	3.0 × 10 ⁻¹⁶
Cd(OH) ₂ (β)	14.35	4.5 × 10 ⁻¹⁵
HgO (red) (+ H ₂ O ⇌ Hg ²⁺ + 2OH ⁻)	25.44	3.6 × 10 ⁻²⁶
SnO (+ H ₂ O ⇌ Sn ²⁺ + 2OH ⁻)	26.2	6. × 10 ⁻²⁷
PbO (yellow) (+ H ₂ O ⇌ Pb ²⁺ + 2OH ⁻)	15.1	8. × 10 ⁻¹⁶
Al(OH) ₃ (α)	33.5	3. × 10 ⁻³⁴

Iodate (IO ₃ ⁻)	p <i>K</i> _{sp}	<i>K</i> _{sp}
Ca(IO ₃) ₂	6.15	7.1 × 10 ⁻⁷
Ba(IO ₃) ₂	8.81	1.5 × 10 ⁻⁹
AgIO ₃	7.51	3.1 × 10 ⁻⁸
Hg ₂ (IO ₃) ₂	17.89	1.3 × 10 ⁻¹⁸
Zn(IO ₃) ₂	5.41	3.9 × 10 ⁻⁶
Cd(IO ₃) ₂	7.64	2.3 × 10 ⁻⁸
Pb(IO ₃) ₂	12.61	2.5 × 10 ⁻¹³

Iodide (I ⁻)	p <i>K</i> _{sp}	<i>K</i> _{sp}
AgI	16.08	8.3 × 10 ⁻¹⁷
Hg ₂ I ₂	28.33	4.7 × 10 ⁻²⁹
HgI ₂ (μ = 0.5 M)	27.95	1.1 × 10 ⁻²⁸
PbI ₂	8.10	7.9 × 10 ⁻⁹

Oxalate (C ₂ O ₄ ²⁻)	p <i>K</i> _{sp}	<i>K</i> _{sp}
CaC ₂ O ₄ (μ = 0.1 M, <i>T</i> = 20 °C)	7.9	1.3 × 10 ⁻⁸
BaC ₂ O ₄ (μ = 0.1 M, <i>T</i> = 20 °C)	6.0	1. × 10 ⁻⁶
SrC ₂ O ₄ (μ = 0.1 M, <i>T</i> = 20 °C)	6.4	4. × 10 ⁻⁷

Phosphate (PO ₄ ³⁻)	p <i>K</i> _{sp}	<i>K</i> _{sp}
Fe ₃ (PO ₄) ₂ • 8H ₂ O	36.0	1. × 10 ⁻³⁶
Zn ₃ (PO ₄) ₂ • 4H ₂ O	35.3	5. × 10 ⁻³⁶
Ag ₃ PO ₄	17.55	2.8 × 10 ⁻¹⁸

$\text{Pb}_3(\text{PO}_4)_2$ ($T = 38^\circ\text{C}$)	43.55	3.0×10^{-44}
---	-------	-----------------------

Sulfate (SO_4^{2-})	$\text{p}K_{\text{sp}}$	K_{sp}
CaSO_4	4.62	2.4×10^{-5}
SrSO_4	6.50	3.2×10^{-7}
BaSO_4	9.96	1.1×10^{-10}
Ag_2SO_4	4.83	1.5×10^{-5}
Hg_2SO_4	6.13	7.4×10^{-7}
PbSO_4	7.79	1.6×10^{-8}

Sulfide (S^{2-})	$\text{p}K_{\text{sp}}$	K_{sp}
MnS (green)	13.5	$3. \times 10^{-14}$
FeS	18.1	$8. \times 10^{-19}$
CoS (β)	25.6	$3. \times 10^{-26}$
NiS (γ)	26.6	$3. \times 10^{-27}$
CuS	36.1	$8. \times 10^{-37}$
Cu_2S	48.5	$3. \times 10^{-49}$
Ag_2S	50.1	$8. \times 10^{-51}$
ZnS (α)	24.7	$2. \times 10^{-25}$
CdS	27.0	$1. \times 10^{-27}$
Hg_2S (red)	53.3	$5. \times 10^{-54}$
PbS	27.5	$3. \times 10^{-28}$

Thiocyanate (SCN^-)	$\text{p}K_{\text{sp}}$	K_{sp}
CuSCN ($\mu = 5.0$ M)	13.40	4.0×10^{-14}
AgSCN	11.97	1.1×10^{-12}
$\text{Hg}_2(\text{SCN})_2$	19.52	3.0×10^{-20}
$\text{Hg}(\text{SCN})_2$ ($\mu = 1.0$ M)	19.56	2.8×10^{-20}

Appendix 11: Acid Dissociation Constants

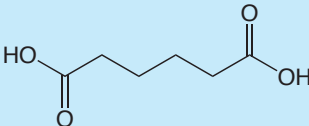
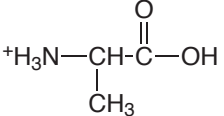
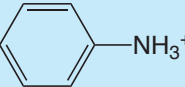
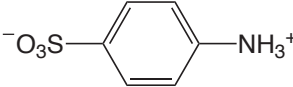
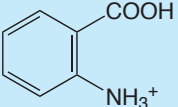
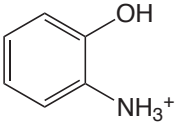
The following table provides pK_a and K_a values for selected weak acids. All values are from Martell, A. E.; Smith, R. M. *Critical Stability Constants*, Vols. 1–4. Plenum Press: New York, 1976. Unless otherwise stated, values are for 25 °C and zero ionic strength. Those values in brackets are considered less reliable.

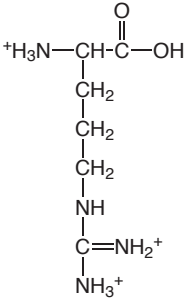
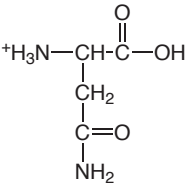
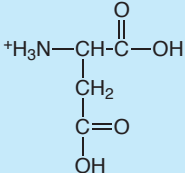
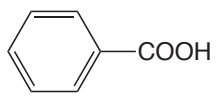
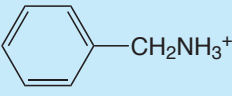
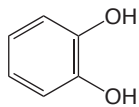
Weak acids are arranged alphabetically by the names of the neutral compounds from which they are derived. In some cases—such as acetic acid—the compound is the weak acid. In other cases—such as for the ammonium ion—the neutral compound is the conjugate base. Chemical formulas or structural formulas are shown for the fully protonated weak acid. Successive acid dissociation constants are provided for polyprotic weak acids; where there is ambiguity, the specific acidic proton is identified.

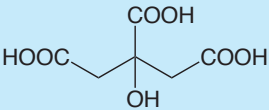
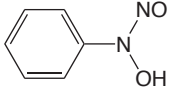
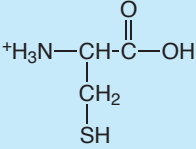
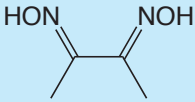
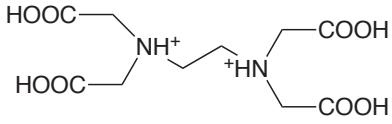
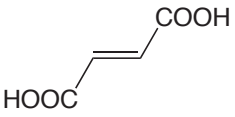
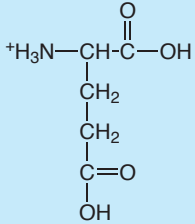
To find the K_b value for a conjugate weak base, recall that

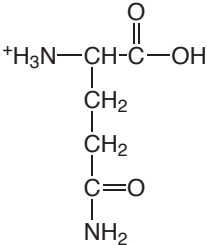
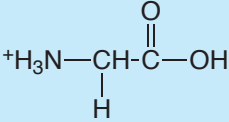
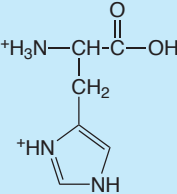
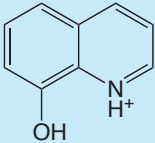
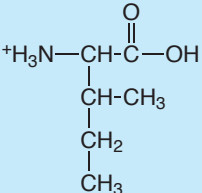
$$K_a \times K_b = K_w$$

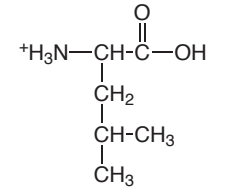
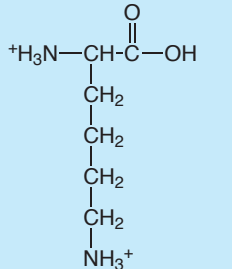
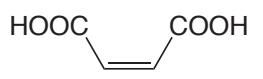
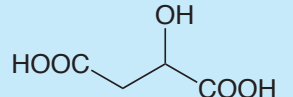
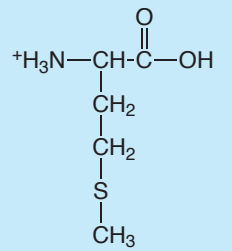
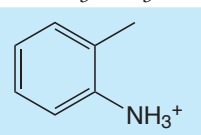
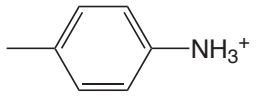
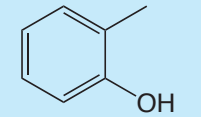
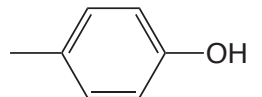
for a conjugate weak acid, HA, and its conjugate weak base, A^- .

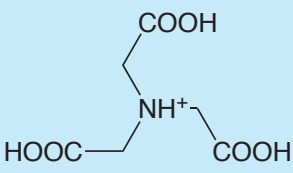
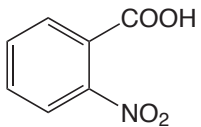
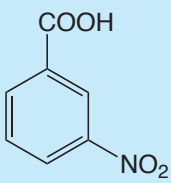
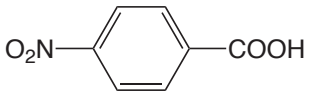
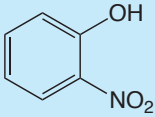
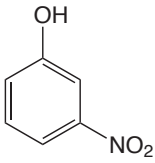
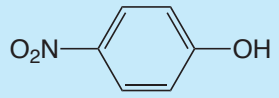
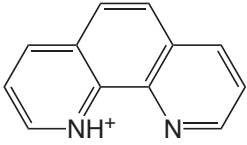
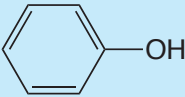
Compound	Conjugate Acid	pK_a	K_a
acetic acid	CH_3COOH	4.757	1.75×10^{-5}
adipic acid		4.42 5.42	3.8×10^{-5} 3.8×10^{-6}
alanine		2.348 (COOH) 9.867 (NH ₃)	4.49×10^{-3} 1.36×10^{-10}
aminobenzene		4.601	2.51×10^{-5}
4-aminobenzene sulfonic acid		3.232	5.86×10^{-4}
2-aminobenzoic acid		2.08 (COOH) 4.96 (NH ₃)	8.3×10^{-3} 1.1×10^{-5}
2-aminophenol ($T=20^\circ C$)		4.78 (NH ₃) 9.97 (OH)	1.7×10^{-5} 1.05×10^{-10}
ammonia	NH_4^+	9.244	5.70×10^{-10}

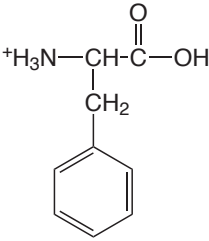
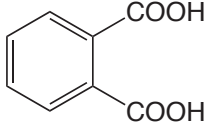
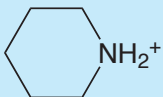
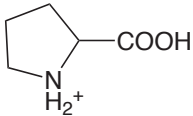
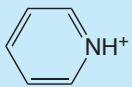
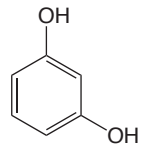
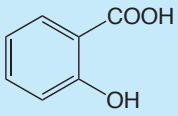
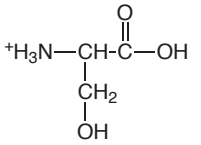
Compound	Conjugate Acid	pK_a	K_a
arginine		1.823 (COOH) 8.991 (NH ₃) [12.48] (NH ₂)	1.50×10^{-2} 1.02×10^{-9} [3.3×10^{-13}]
arsenic acid	H ₃ AsO ₄	2.24 6.96 11.50	5.8×10^{-3} 1.1×10^{-7} 3.2×10^{-12}
asparagine ($\mu = 0.1$ M)		2.14 (COOH) 8.72 (NH ₃)	7.2×10^{-3} 1.9×10^{-9}
aspartic acid		1.990 (α -COOH) 3.900 (β -COOH) 10.002 (NH ₃)	1.02×10^{-2} 1.26×10^{-4} 9.95×10^{-11}
benzoic acid		4.202	6.28×10^{-5}
benzylamine		9.35	4.5×10^{-10}
boric acid ($pK_{a2}, pK_{a3}: T = 20^\circ\text{C}$)	H ₃ BO ₃	9.236 [12.74] [13.80]	5.81×10^{-10} [1.82×10^{-13}] [1.58×10^{-14}]
carbonic acid	H ₂ CO ₃	6.352 10.329	4.45×10^{-7} 4.69×10^{-11}
catechol		9.40 12.8	4.0×10^{-10} 1.6×10^{-13}
chloroacetic acid	ClCH ₂ COOH	2.865	1.36×10^{-3}
chromic acid ($pK_{a1}: T = 20^\circ\text{C}$)	H ₂ CrO ₄	-0.2 6.51	1.6 3.1×10^{-7}

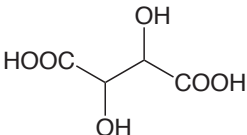
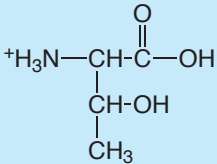
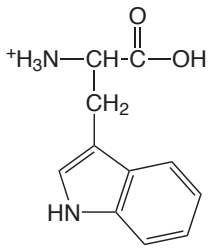
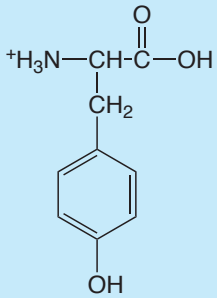
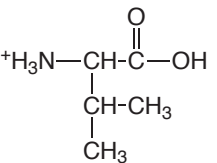
Compound	Conjugate Acid	pK _a	K _a
citric acid		3.128 (COOH)	7.45×10^{-4}
		4.761 (COOH)	1.73×10^{-5}
		6.396 (COOH)	4.02×10^{-7}
cupferron ($\mu = 0.1$ M)		4.16	6.9×10^{-5}
cysteine		[1.71] (COOH)	$[1.9 \times 10^{-2}]$
		8.36 (SH)	4.4×10^{-9}
		10.77 (NH ₃)	1.7×10^{-11}
dichloroacetic acid	Cl ₂ CHCOOH	1.30	5.0×10^{-2}
diethylamine	(CH ₃ CH ₂) ₂ NH ₂ ⁺	10.933	1.17×10^{-11}
dimethylamine	(CH ₃) ₂ NH ₂ ⁺	10.774	1.68×10^{-11}
dimethylglyoxime		10.66	2.2×10^{-11}
		12.0	$1. \times 10^{-12}$
ethylamine	CH ₃ CH ₂ NH ₃ ⁺	10.636	2.31×10^{-11}
ethylenediamine	⁺ H ₃ NCH ₂ CH ₂ NH ₃ ⁺	6.848	1.42×10^{-7}
		9.928	1.18×10^{-10}
ethylenediaminetetraacetic acid (EDTA) ($\mu = 0.1$ M)		0.0 (COOH)	1.0
		1.5 (COOH)	3.2×10^{-2}
		2.0 (COOH)	1.0×10^{-2}
		2.66 (COOH)	2.2×10^{-3}
		6.16 (NH)	6.9×10^{-7}
		10.24 (NH)	5.8×10^{-11}
formic acid	HCOOH	3.745	1.80×10^{-4}
fumaric acid		3.053	8.85×10^{-4}
		4.494	3.21×10^{-5}
glutamic acid		2.33 (α -COOH)	5.9×10^{-3}
		4.42 (λ -COOH)	3.8×10^{-5}
		9.95 (NH ₃)	1.12×10^{-10}

Compound	Conjugate Acid	pK _a	K _a
glutamine ($\mu = 0.1$ M)		2.17 (COOH) 9.01 (NH ₃)	6.8×10^{-3} 9.8×10^{-10}
glycine ^{+H₃NCH₂COOH}		2.350 (COOH) 9.778 (NH ₃)	4.47×10^{-3} 1.67×10^{-10}
glycolic acid	HOOCH ₂ COOH	3.831 (COOH)	1.48×10^{-4}
histidine ($\mu = 0.1$ M)		1.7 (COOH) 6.02 (NH) 9.08 (NH ₃)	$2. \times 10^{-2}$ 9.5×10^{-7} 8.3×10^{-10}
hydrogen cyanide	HCN	9.21	6.2×10^{-10}
hydrogen fluoride	HF	3.17	6.8×10^{-4}
hydrogen peroxide	H ₂ O ₂	11.65	2.2×10^{-12}
hydrogen sulfide	H ₂ S	7.02 13.9	9.5×10^{-8} 1.3×10^{-14}
hydrogen thiocyanate	HSCN	0.9	1.3×10^{-1}
8-hydroxyquinoline		4.91 (NH) 9.81 (OH)	1.2×10^{-5} 1.6×10^{-10}
hydroxylamine	HONH ₃ ⁺	5.96	1.1×10^{-6}
hypobromous acid	HOBr	8.63	2.3×10^{-9}
hypochlorous acid	HOCl	7.53	3.0×10^{-8}
hypoiodous acid	HOI	10.64	2.3×10^{-11}
iodic acid	HIO ₃	0.77	1.7×10^{-1}
isoleucine		2.319 (COOH) 9.754 (NH ₃)	4.80×10^{-3} 1.76×10^{-10}

Compound	Conjugate Acid	pK _a	K _a
leucine		2.329 (COOH) 9.747 (NH ₃)	4.69 × 10 ⁻³ 1.79 × 10 ⁻¹⁰
lysine (μ = 0.1 M)		2.04 (COOH) 9.08 (α-NH ₃) 10.69 (ε-NH ₃)	9.1 × 10 ⁻³ 8.3 × 10 ⁻¹⁰ 2.0 × 10 ⁻¹¹
maleic acid		1.910 6.332	9.1 × 10 ⁻³ 9.1 × 10 ⁻³
malic acid		3.459 (COOH) 5.097 (COOH)	9.1 × 10 ⁻³ 9.1 × 10 ⁻³
malonic acid	HOOCCH ₂ COOH	2.847 5.696	9.1 × 10 ⁻³ 9.1 × 10 ⁻³
methionine (μ = 0.1 M)		2.20 (COOH) 9.05 (NH ₃)	9.1 × 10 ⁻³ 9.1 × 10 ⁻³
methylamine	CH ₃ NH ₃ ⁺	10.64	9.1 × 10 ⁻³
2-methylaniline		4.447	9.1 × 10 ⁻³
4-methylaniline		5.084	9.1 × 10 ⁻³
2-methylphenol		10.28	9.1 × 10 ⁻³
4-methylphenol		10.26	9.1 × 10 ⁻³

Compound	Conjugate Acid	pK_a	K_a
nitrilotriacetic acid ($T=20^\circ\text{C}$) ($pK_{a1}:\mu=0.1\text{ m}$)		1.1 (COOH) 1.650 (COOH) 2.940 (COOH) 10.334 (NH ₃)	9.1×10^{-3} 9.1×10^{-3} 9.1×10^{-3} 9.1×10^{-3}
2-nitrobenzoic acid		2.179	9.1×10^{-3}
3-nitrobenzoic acid		3.449	9.1×10^{-3}
4-nitrobenzoic acid		3.442	3.61×10^{-4}
2-nitrophenol		7.21	6.2×10^{-8}
3-nitrophenol		8.39	4.1×10^{-9}
4-nitrophenol		7.15	7.1×10^{-8}
nitrous acid	HNO_2	3.15	7.1×10^{-4}
oxalic acid	$\text{H}_2\text{C}_2\text{O}_4$	1.252 4.266	5.60×10^{-2} 5.42×10^{-5}
1,10-phenanthroline		4.86	1.38×10^{-5}
phenol		9.98	1.05×10^{-10}

Compound	Conjugate Acid	pK _a	K _a
phenylalanine		2.20 (COOH) 9.31 (NH ₃)	6.3 × 10 ⁻³ 4.9 × 10 ⁻¹⁰
phosphoric acid	H ₃ PO ₄	2.148 7.199 12.35	7.11 × 10 ⁻³ 6.32 × 10 ⁻⁸ 4.5 × 10 ⁻¹³
phthalic acid		2.950 5.408	1.12 × 10 ⁻³ 3.91 × 10 ⁻⁶
piperidine		11.123	7.53 × 10 ⁻¹²
proline		1.952 (COOH) 10.640 (NH)	1.12 × 10 ⁻² 2.29 × 10 ⁻¹¹
propanoic acid	CH ₃ CH ₂ COOH	4.874	1.34 × 10 ⁻⁵
propylamine	CH ₃ CH ₂ CH ₂ NH ₃ ⁺	10.566	2.72 × 10 ⁻¹¹
pyridine		5.229	5.90 × 10 ⁻⁶
resorcinol		9.30 11.06	5.0 × 10 ⁻¹⁰ 8.7 × 10 ⁻¹²
salicylic acid		2.97 (COOH) 13.74 (OH)	1.1 × 10 ⁻³ 1.8 × 10 ⁻¹⁴
serine		2.187 (COOH) 9.209 (NH ₃)	6.50 × 10 ⁻³ 6.18 × 10 ⁻¹⁰
succinic acid	HOOC-CH ₂ -CH ₂ -COOH	4.207 5.636	6.21 × 10 ⁻⁵ 2.31 × 10 ⁻⁶
sulfuric acid	H ₂ SO ₄	strong 1.99	— 1.0 × 10 ⁻²

Compound	Conjugate Acid	pK _a	K _a
sulfurous acid	H ₂ SO ₃	1.91 7.18	1.2 × 10 ⁻² 6.6 × 10 ⁻⁸
D-tartaric acid		3.036 (COOH) 4.366 (COOH)	9.20 × 10 ⁻⁴ 4.31 × 10 ⁻⁵
threonine		2.088 (COOH) 9.100 (NH ₃)	8.17 × 10 ⁻³ 7.94 × 10 ⁻¹⁰
thiosulfuric acid	H ₂ S ₂ O ₃	0.6 1.6	3. × 10 ⁻¹ 3. × 10 ⁻²
trichloroacetic acid (μ = 0.1 M)	Cl ₃ CCOOH	0.66	2.2 × 10 ⁻¹
triethanolamine	(HOCH ₂ CH ₂) ₃ NH ⁺	7.762	1.73 × 10 ⁻⁸
triethylamine	(CH ₃ CH ₂) ₃ NH ⁺	10.715	1.93 × 10 ⁻¹¹
trimethylamine	(CH ₃) ₃ NH ⁺	9.800	1.58 × 10 ⁻¹⁰
tris(hydroxymethyl)amino methane (TRIS or THAM)	(HOCH ₂) ₃ CNH ₃ ⁺	8.075	8.41 × 10 ⁻⁹
tryptophan (μ = 0.1 M)		2.35 (COOH) 9.33 (NH ₃)	4.5 × 10 ⁻³ 4.7 × 10 ⁻¹⁰
tyrosine (pK _{a1} : μ = 0.1 M)		2.17 (COOH) 9.19 (NH ₃) 10.47 (OH)	6.8 × 10 ⁻³ 6.5 × 10 ⁻¹⁰ 3.4 × 10 ⁻¹¹
valine		2.286 (COOH) 9.718 (NH ₃)	5.18 × 10 ⁻³ 1.91 × 10 ⁻¹⁰

Appendix 12: Formation Constants


The following table provides K_i and β_i values for selected metal–ligand complexes, arranged by the ligand. All values are from Martell, A. E.; Smith, R. M. *Critical Stability Constants*, Vols. 1–4. Plenum Press: New York, 1976. Unless otherwise stated, values are for 25 °C and zero ionic strength. Those values in brackets are considered less reliable.

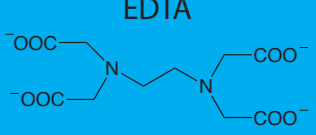
Acetate CH_3COO^-	$\log K_1$	$\log K_2$	$\log K_3$	$\log K_4$	$\log K_5$	$\log K_6$
Mg^{2+}	1.27					
Ca^{2+}	1.18					
Ba^{2+}	1.07					
Mn^{2+}	1.40					
Fe^{2+}	1.40					
Co^{2+}	1.46					
Ni^{2+}	1.43					
Cu^{2+}	2.22	1.41				
Ag^{2+}	0.73	-0.09				
Zn^{2+}	1.57					
Cd^{2+}	1.93	1.22	-0.89			
Pb^{2+}	2.68	1.40				

Ammonia NH_3	$\log K_1$	$\log K_2$	$\log K_3$	$\log K_4$	$\log K_5$	$\log K_6$
Ag^+	3.31	3.91				
Co^{2+} ($T=20^\circ\text{C}$)	1.99	1.51	0.93	0.64	0.06	-0.73
Ni^{2+}	2.72	2.17	1.66	1.12	0.67	-0.03
Cu^{2+}	4.04	3.43	2.80	1.48		
Zn^{2+}	2.21	2.29	2.36	2.03		
Cd^{2+}	2.55	2.01	1.34	0.84		

Chloride Cl^-	$\log K_1$	$\log K_2$	$\log K_3$	$\log K_4$	$\log K_5$	$\log K_6$
Cu^{2+}	0.40					
Fe^{3+}	1.48	0.65				
Ag^+ ($\mu = 5.0 \text{ M}$)	3.70	1.92	0.78	-0.3		
Zn^{2+}	0.43	0.18	-0.11	-0.3		
Cd^{2+}	1.98	1.62	-0.2	-0.7		
Pb^{2+}	1.59	0.21	-0.1	-0.3		

Cyanide CN ⁻	log K ₁	log K ₂	log K ₃	log K ₄	log K ₅	log K ₆
Fe ²⁺						35.4 (β ₆)
Fe ³⁺						43.6 (β ₆)
Ag ⁺		20.48 β ₂	0.92			
Zn ²⁺		11.07 β ₂	4.98	3.57		
Cd ²⁺	6.01	5.11	4.53	2.27		
Hg ²⁺	17.00	15.75	3.56	2.66		
Ni ²⁺					30.22 (β ₄)	

Ethylenediamine 	log K ₁	log K ₂	log K ₃	log K ₄	log K ₅	log K ₆
Ni ²⁺	7.38	6.18	4.11			
Cu ²⁺	10.48	9.07				
Ag ⁺ (T=20 °C, μ=0.1 M)	4.700	3.00				
Zn ²⁺	5.66	4.98	3.25			
Cd ²⁺	5.41	4.50	2.78			

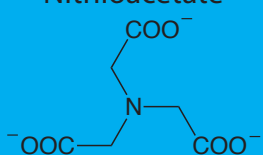
EDTA 	log K ₁	log K ₂	log K ₃	log K ₄	log K ₅	log K ₆
Mg ²⁺ (T=20 °C, μ=0.1 M)	8.79					
Ca ²⁺ (T=20 °C, μ=0.1 M)	10.69					
Ba ²⁺ (T=20 °C, μ=0.1 M)	7.86					
Bi ³⁺ (T=20 °C, μ=0.1 M)	27.8					
Co ²⁺ (T=20 °C, μ=0.1 M)	16.31					
Ni ²⁺ (T=20 °C, μ=0.1 M)	18.62					
Cu ²⁺ (T=20 °C, μ=0.1 M)	18.80					
Cr ³⁺ (T=20 °C, μ=0.1 M)	[23.4]					
Fe ³⁺ (T=20 °C, μ=0.1 M)	25.1					
Ag ⁺ (T=20 °C, μ=0.1 M)	7.32					
Zn ²⁺ (T=20 °C, μ=0.1 M)	16.50					
Cd ²⁺ (T=20 °C, μ=0.1 M)	16.46					
Hg ²⁺ (T=20 °C, μ=0.1 M)	21.7					
Pb ²⁺ (T=20 °C, μ=0.1 M)	18.04					

Al^{3+} ($T=20^\circ\text{C}$, $\mu=0.1\text{ M}$) 16.3

Fluoride F^-	$\log K_1$	$\log K_2$	$\log K_3$	$\log K_4$	$\log K_5$	$\log K_6$
Al^{3+} ($\mu=0.5\text{ M}$)	6.11	5.01	3.88	3.0	1.4	0.4

Hydroxide OH^-	$\log K_1$	$\log K_2$	$\log K_3$	$\log K_4$	$\log K_5$	$\log K_6$
Al^{3+}	9.01	[9.69]	[8.3]	6.0		
Co^{2+}	4.3	4.1	1.3	0.5		
Fe^{2+}	4.5	[2.9]	2.6	-0.4		
Fe^{3+}	11.81	10.5	12.1			
Ni^{2+}	4.1	3.9	3.			
Pb^{2+}	6.3	4.6	3.0			
Zn^{2+}	5.0	[6.1]	2.5	[1.2]		

Iodide I^-	$\log K_1$	$\log K_2$	$\log K_3$	$\log K_4$	$\log K_5$	$\log K_6$
Ag^+ ($T=18^\circ\text{C}$)	6.58	[5.12]	[1.4]			
Cd^{2+}	2.28	1.64	1.08	1.0		
Pb^{2+}	1.92	1.28	0.7	0.6		

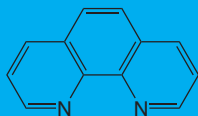
Nitriloacetate 	$\log K_1$	$\log K_2$	$\log K_3$	$\log K_4$	$\log K_5$	$\log K_6$
Mg^{2+} ($T=20^\circ\text{C}$, $\mu=0.1\text{ M}$)	5.41					
Ca^{2+} ($T=20^\circ\text{C}$, $\mu=0.1\text{ M}$)	6.41					
Ba^{2+} ($T=20^\circ\text{C}$, $\mu=0.1\text{ M}$)	4.82					
Mn^{2+} ($T=20^\circ\text{C}$, $\mu=0.1\text{ M}$)	7.44					
Fe^{2+} ($T=20^\circ\text{C}$, $\mu=0.1\text{ M}$)	8.33					
Co^{2+} ($T=20^\circ\text{C}$, $\mu=0.1\text{ M}$)	10.38					
Ni^{2+} ($T=20^\circ\text{C}$, $\mu=0.1\text{ M}$)	11.53					
Cu^{2+} ($T=20^\circ\text{C}$, $\mu=0.1\text{ M}$)	12.96					
Fe^{3+} ($T=20^\circ\text{C}$, $\mu=0.1\text{ M}$)	15.9					
Zn^{2+} ($T=20^\circ\text{C}$, $\mu=0.1\text{ M}$)	10.67					

Cd^{2+} ($T=20^\circ\text{C}$, $\mu=0.1\text{ M}$) 9.83

Pb^{2+} ($T=20^\circ\text{C}$, $\mu=0.1\text{ M}$) 11.39

Oxalate $\text{C}_2\text{O}_4^{2-}$	$\log K_1$	$\log K_2$	$\log K_3$	$\log K_4$	$\log K_5$	$\log K_6$
Ca^{2+} ($\mu=1\text{ M}$)	1.66	1.03				
Fe^{2+} ($\mu=1\text{ M}$)	3.05	2.10				
Co^{2+}	4.72	2.28				
Ni^{2+}	5.16					
Cu^{2+}	6.23	4.04				
Fe^{3+} ($\mu=0.5\text{ M}$)	7.53	6.11	4.85			
Zn^{2+}	4.87	2.78				

1,10-Phenanthroline



	$\log K_1$	$\log K_2$	$\log K_3$	$\log K_4$	$\log K_5$	$\log K_6$
Fe^{2+}			20.7 (β_3)			
Mn^{2+} ($\mu=0.1\text{ M}$)	4.0	3.3	3.0			
Co^{2+} ($\mu=0.1\text{ M}$)	7.08	6.64	6.08			
Ni^{2+}	8.6	8.1	7.6			
Fe^{3+}			13.8 (β_3)			
Ag^+ ($\mu=0.1\text{ M}$)	5.02	7.04				
Zn^{2+}	6.2	[5.9]	[5.2]			

Thiosulfate $\text{S}_2\text{O}_3^{2-}$	$\log K_1$	$\log K_2$	$\log K_3$	$\log K_4$	$\log K_5$	$\log K_6$
Ag^+ ($T=20^\circ\text{C}$)	8.82	4.85	0.53			

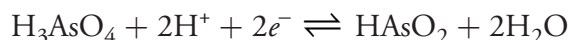
Thiocyanate SCN^-	$\log K_1$	$\log K_2$	$\log K_3$	$\log K_4$	$\log K_5$	$\log K_6$
Mn^{2+}	1.23					
Fe^{2+}	1.31					
Co^{2+}	1.72					
Ni^{2+}	1.76					
Cu^{2+}	2.33					
Fe^{3+}	3.02					

Ag ⁺	4.8	3.43	1.27	0.2
Zn ²⁺	1.33	0.58	0.09	-0.4
Cd ²⁺	1.89	0.89	0.02	-0.5
Hg ²⁺		17.26(β_2)	2.71	1.83

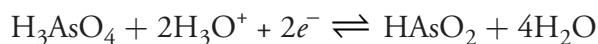
Appendix 13: Standard Reduction Potentials

The following table provides E° and E°' values for selected reduction reactions. Values are from the following sources: Bard, A. J.; Parsons, B.; Jordon, J., eds. *Standard Potentials in Aqueous Solutions*, Dekker: New York, 1985; Milazzo, G.; Caroli, S.; Sharma, V. K. *Tables of Standard Electrode Potentials*, Wiley: London, 1978; Swift, E. H.; Butler, E. A. *Quantitative Measurements and Chemical Equilibria*, Freeman: New York, 1972.

Solids, gases, and liquids are identified; all other species are aqueous. Reduction reactions in acidic solution are written using H^+ in place of H_3O^+ . You may rewrite a reaction by replacing H^+ with H_3O^+ and adding to the opposite side of the reaction one molecule of H_2O per H^+ ; thus



becomes



Conditions for formal potentials (E°') are listed next to the potential.

Aluminum	E° (V)	E°' (V)
$Al^{3+} + 3e^- \rightleftharpoons Al(s)$	-1.676	
$Al(OH)_4^- + 3e^- \rightleftharpoons Al(s) + 4OH^-$	-2.310	
$AlF_6^{3-} + 3e^- \rightleftharpoons Al(s) + 6F^-$	-2.07	
Antimony	E° (V)	E°' (V)
$Sb + 3H^+ + 3e^- \rightleftharpoons SbH_3(g)$	-0.510	
$Sb_2O_5(s) + 6H^+ + 4e^- \rightleftharpoons 2SbO^+ + 3H_2O(l)$	0.605	
$SbO^+ + 2H^+ + 3e^- \rightleftharpoons Sb(s) + H_2O(l)$	0.212	
Arsenic	E° (V)	E°' (V)
$As + 3H^+ + 3e^- \rightleftharpoons AsH_3(g)$	-0.225	
$H_3AsO_4 + 2H^+ + 2e^- \rightleftharpoons HAsO_2 + 2H_2O(l)$	0.560	
$HAsO_2 + 3H^+ + 3e^- \rightleftharpoons As(s) + 2H_2O(l)$	0.240	
Barium	E° (V)	E°' (V)
$Ba^{2+} + 2e^- \rightleftharpoons Ba(s)$	-2.92	
$BaO(s) + 2H^+ + 2e^- \rightleftharpoons Ba(s) + H_2O(l)$	2.365	

Beryllium	E° (V)	E'° (V)
$\text{Be}^{2+} + 2e^- \rightleftharpoons \text{Be}(s)$	-1.99	
Bismuth	E° (V)	E'° (V)
$\text{Bi}^{3+} + 3e^- \rightleftharpoons \text{Bi}(s)$	0.317	
$\text{BiCl}_4^- + 3e^- \rightleftharpoons \text{Bi}(s) + 4\text{Cl}^-$	0.199	
Boron	E° (V)	E'° (V)
$\text{B}(\text{OH})_3 + 3\text{H}^+ + 3e^- \rightleftharpoons \text{B}(s) + 3\text{H}_2\text{O}(l)$	-0.890	
$\text{B}(\text{OH})_4^- + 3e^- \rightleftharpoons \text{B}(s) + 4\text{OH}^-$	-1.811	
Bromine	E° (V)	E'° (V)
$\text{Br}_2 + 2e^- \rightleftharpoons 2\text{Br}^-$	1.087	
$\text{HOBr} + \text{H}^+ + 2e^- \rightleftharpoons \text{Br}^- + \text{H}_2\text{O}(l)$	1.341	
$\text{HOBr} + \text{H}^+ + e^- \rightleftharpoons \frac{1}{2}\text{Br}^- + \text{H}_2\text{O}(l)$	1.604	
$\text{BrO}^- + \text{H}_2\text{O}(l) + 2e^- \rightleftharpoons \text{Br}^- + 2\text{OH}^-$		0.76 in 1 M NaOH
$\text{BrO}_3^- + 6\text{H}^+ + 5e^- \rightleftharpoons \frac{1}{2}\text{Br}_2(l) + 3\text{H}_2\text{O}$	1.5	
$\text{BrO}_3^- + 6\text{H}^+ + 6e^- \rightleftharpoons \text{Br}^- + 3\text{H}_2\text{O}$	1.478	
Cadmium	E° (V)	E'° (V)
$\text{Cd}^{2+} + 2e^- \rightleftharpoons \text{Cd}(s)$	-0.4030	
$\text{Cd}(\text{CN})_4^{2-} + 2e^- \rightleftharpoons \text{Cd}(s) + 4\text{CN}^-$	-0.943	
$\text{Cd}(\text{NH}_3)_4^{2+} + 2e^- \rightleftharpoons \text{Cd}(s) + 4\text{NH}_3$	-0.622	
Calcium	E° (V)	E'° (V)
$\text{Ca}^{2+} + 2e^- \rightleftharpoons \text{Ca}(s)$	-2.84	

Carbon	E° (V)	E° (V)
$\text{CO}_2(g) + 2\text{H}^+ + 2e^- \rightleftharpoons \text{CO}(g) + \text{H}_2\text{O}(l)$	-0.106	
$\text{CO}_2(g) + 2\text{H}^+ + 2e^- \rightleftharpoons \text{HCO}_2\text{H}$	-0.20	
$2\text{CO}_2(g) + 2\text{H}^+ + 2e^- \rightleftharpoons \text{H}_2\text{C}_2\text{O}_4$	-0.481	
$\text{HCHO} + 2\text{H}^+ + 2e^- \rightleftharpoons \text{CH}_3\text{OH}$	0.2323	
Cerium	E° (V)	E° (V)
$\text{Ce}^{3+} + 3e^- \rightleftharpoons \text{Ce}(s)$	-2.336	
$\text{Ce}^{4+} + e^- \rightleftharpoons \text{Ce}^{3+}$	1.72	1.70 in 1 M HClO_4 1.44 in 1 M H_2SO_4 1.61 in 1 M HNO_3 1.28 in 1 M HCl
Chlorine	E° (V)	E° (V)
$\text{Cl}_2(g) + 2e^- \rightleftharpoons 2\text{Cl}^-$	1.396	
$\text{ClO}^- + \text{H}_2\text{O}(l) + e^- \rightleftharpoons \frac{1}{2}\text{Cl}_2(g) + 2\text{OH}^-$		0.421 in 1 M NaOH
$\text{ClO}^- + \text{H}_2\text{O}(l) + 2e^- \rightleftharpoons \text{Cl}^- + 2\text{OH}^-$		0.890 in 1 M NaOH
$\text{HClO}_2 + 2\text{H}^+ + 2e^- \rightleftharpoons \text{HOCl} + \text{H}_2\text{O}$	1.64	
$\text{ClO}_3^- + 2\text{H}^+ + e^- \rightleftharpoons \text{ClO}_2(g) + \text{H}_2\text{O}$	1.175	
$\text{ClO}_3^- + 3\text{H}^+ + 2e^- \rightleftharpoons \text{HClO}_2 + \text{H}_2\text{O}$	1.181	
$\text{ClO}_4^- + 2\text{H}^+ + 2e^- \rightleftharpoons \text{ClO}_3^- + \text{H}_2\text{O}$	1.201	
Chromium	E° (V)	E° (V)
$\text{Cr}^{3+} + e^- \rightleftharpoons \text{Cr}^{2+}$	-0.424	
$\text{Cr}^{2+} + 2e^- \rightleftharpoons \text{Cr}(s)$	-0.90	
$\text{Cr}_2\text{O}_7^{2-} + 14\text{H}^+ + 6e^- \rightleftharpoons 2\text{Cr}^{3+} + 7\text{H}_2\text{O}(l)$	1.36	
$\text{CrO}_4^{2-} + 4\text{H}_2\text{O}(l) + 3e^- \rightleftharpoons 2\text{Cr}(\text{OH})_4^- + 4\text{OH}^-$		-0.13 in 1 M NaOH

Cobalt	E° (V)	E° '(V)
$\text{Co}^{2+} + 2e^- \rightleftharpoons \text{Co}(s)$	-0.277	
$\text{Co}^{3+} + e^- \rightleftharpoons \text{Co}^{2+}$	1.92	
$\text{Co}(\text{NH}_3)_6^{3+} + e^- \rightleftharpoons \text{Co}(\text{NH}_3)_6^{2+}$	0.1	
$\text{Co}(\text{OH})_3(s) + e^- \rightleftharpoons \text{Co}(\text{OH})_2(s) + \text{OH}^-$	0.17	
$\text{Co}(\text{OH})_2(s) + 2e^- \rightleftharpoons \text{Co}(s) + 2\text{OH}^-$	-0.746	

Copper	E° (V)	E° '(V)
$\text{Cu}^+ + e^- \rightleftharpoons \text{Cu}(s)$	0.520	
$\text{Cu}^{2+} + e^- \rightleftharpoons \text{Cu}^+$	0.159	
$\text{Cu}^{2+} + 2e^- \rightleftharpoons \text{Cu}(s)$	0.3419	
$\text{Cu}^{2+} + \text{I}^- + e^- \rightleftharpoons \text{CuI}(s)$	0.86	
$\text{Cu}^{2+} + \text{Cl}^- + e^- \rightleftharpoons \text{CuCl}(s)$	0.559	

Fluorine	E° (V)	E° '(V)
$\text{F}_2(g) + 2\text{H}^+ + 2e^- \rightleftharpoons 2\text{HF}$	3.053	
$\text{F}_2(g) + 2e^- \rightleftharpoons 2\text{F}^-$	2.87	

Gallium	E° (V)	E° '(V)
$\text{Ga}^{3+} + 3e^- \rightleftharpoons \text{Ga}(s)$		

Gold	E° (V)	E° '(V)
$\text{Au}^+ + e^- \rightleftharpoons \text{Au}(s)$	1.83	
$\text{Au}^{3+} + 2e^- \rightleftharpoons \text{Au}^+$	1.36	
$\text{Au}^{3+} + 3e^- \rightleftharpoons \text{Au}(s)$	1.52	
$\text{AuCl}_4^- + 3e^- \rightleftharpoons \text{Au}(s) + 4\text{Cl}^-$	1.002	

Hydrogen	E° (V)	E° '(V)
$2\text{H}^+ + 2e^- \rightleftharpoons \text{H}_2(g)$	0.00000	
$\text{H}_2\text{O} + e^- \rightleftharpoons \frac{1}{2}\text{H}_2(g) + \text{OH}^-$	-0.828	
Iodine	E° (V)	E° '(V)
$\text{I}_2(s) + 2e^- \rightleftharpoons 2\text{I}^-$	0.5355	
$\text{I}_3^- + 2e^- \rightleftharpoons 3\text{I}^-$	0.536	
$\text{HIO} + \text{H}^+ + 2e^- \rightleftharpoons \text{I}^- + \text{H}_2\text{O}(l)$	0.985	
$\text{IO}_3^- + 6\text{H}^+ + 5e^- \rightleftharpoons \frac{1}{2}\text{I}_2(s) + 3\text{H}_2\text{O}(l)$	1.195	
$\text{IO}_3^- + 3\text{H}_2\text{O}(l) + 6e^- \rightleftharpoons \text{I}^- + 6\text{OH}^-$	0.257	
Iron	E° (V)	E° '(V)
$\text{Fe}^{2+} + 2e^- \rightleftharpoons \text{Fe}(s)$	-0.44	
$\text{Fe}^{3+} + 3e^- \rightleftharpoons \text{Fe}(s)$	-0.037	
$\text{Fe}^{3+} + e^- \rightleftharpoons \text{Fe}^{2+}$	0.771	0.70 in 1 M HCl 0.767 in 1 M HClO ₄ 0.746 in 1 M HNO ₃ 0.68 in 1 M H ₂ SO ₄ 0.44 in 0.3 M H ₃ PO ₄
$\text{Fe}(\text{CN})_6^{3-} + e^- \rightleftharpoons \text{Fe}(\text{CN})_6^{4-}$	0.356	
$\text{Fe}(\text{phen})_6^{3+} + e^- \rightleftharpoons \text{Fe}(\text{phen})_6^{2+}$	1.147	
Lanthanum	E° (V)	E° '(V)
$\text{La}^{3+} + 3e^- \rightleftharpoons \text{La}(s)$	-2.38	
Lead	E° (V)	E° '(V)
$\text{Pb}^{2+} + 2e^- \rightleftharpoons \text{Pb}(s)$	-0.126	
$\text{PbO}_2(s) + 4\text{OH}^- + 2e^- \rightleftharpoons \text{Pb}^{2+} + 2\text{H}_2\text{O}(l)$	1.46	
$\text{PbO}_2(s) + 4\text{SO}_4^{2-} + 4\text{H}^+ + 2e^- \rightleftharpoons \text{PbSO}_4(s) + 2\text{H}_2\text{O}(l)$	1.690	
$\text{PbSO}_4(s) + 2e^- \rightleftharpoons \text{Pb}(s) + \text{SO}_4^{2-}$	-0.356	

Lithium	E° (V)	$E^{\circ'}$ (V)
$\text{Li}^+ + e^- \rightleftharpoons \text{Li}(s)$	-3.040	
Magnesium	E° (V)	$E^{\circ'}$ (V)
$\text{Mg}^{2+} + 2e^- \rightleftharpoons \text{Mg}(s)$	-2.356	
$\text{Mg}(\text{OH})_2(s) + 2e^- \rightleftharpoons \text{Mg}(s) + 2\text{OH}^-$	-2.687	
Manganese	E° (V)	$E^{\circ'}$ (V)
$\text{Mn}^{2+} + 2e^- \rightleftharpoons \text{Mn}(s)$	-1.17	
$\text{Mn}^{3+} + e^- \rightleftharpoons \text{Mn}^{2+}$	1.5	
$\text{MnO}_2(s) + 4\text{H}^+ + 2e^- \rightleftharpoons \text{Mn}^{2+} + 2\text{H}_2\text{O}(l)$	1.23	
$\text{MnO}_4^- + 4\text{H}^+ + 3e^- \rightleftharpoons \text{MnO}_2(s) + 2\text{H}_2\text{O}(l)$	1.70	
$\text{MnO}_4^- + 8\text{H}^+ + 5e^- \rightleftharpoons \text{Mn}^{2+} + 4\text{H}_2\text{O}(l)$	1.51	
$\text{MnO}_4^- + 2\text{H}_2\text{O}(l) + 3e^- \rightleftharpoons \text{MnO}_2(s) + 4\text{OH}^-$	0.60	
Mercury	E° (V)	$E^{\circ'}$ (V)
$\text{Hg}^{2+} + 2e^- \rightleftharpoons \text{Hg}(l)$	0.8535	
$2\text{Hg}^{2+} + 2e^- \rightleftharpoons \text{Hg}_2^{2+}$	0.911	
$\text{Hg}_2^{2+} + 2e^- \rightleftharpoons 2\text{Hg}(l)$	0.7960	
$\text{Hg}_2\text{Cl}_2(s) + 2e^- \rightleftharpoons 2\text{Hg}(l) + 2\text{Cl}^-$	0.2682	
$\text{HgO}(s) + 2\text{H}^+ + 2e^- \rightleftharpoons \text{Hg}(l) + \text{H}_2\text{O}(l)$	0.926	
$\text{Hg}_2\text{Br}_2(s) + 2e^- \rightleftharpoons 2\text{Hg}(l) + 2\text{Br}^-$	1.392	
$\text{Hg}_2\text{I}_2(s) + 2e^- \rightleftharpoons 2\text{Hg}(l) + 2\text{I}^-$	-0.0405	

Molybdenum	E° (V)	E° '(V)
$\text{Mo}^{3+} + 3e^- \rightleftharpoons \text{Mo}(s)$	-0.2	
$\text{MoO}_2(s) + 4\text{H}^+ + 4e^- \rightleftharpoons \text{Mo}(s) + 2\text{H}_2\text{O}(l)$	-0.152	
$\text{MoO}_4^{2-} + 4\text{H}_2\text{O}(l) + 6e^- \rightleftharpoons \text{Mo}(s) + 8\text{OH}^-$	-0.913	
Nickel	E° (V)	E° '(V)
$\text{Ni}^{2+} + 2e^- \rightleftharpoons \text{Ni}(s)$	-0.257	
$\text{Ni}(\text{OH})_2 + 2e^- \rightleftharpoons \text{Ni}(s) + 2\text{OH}^-$	-0.72	
$\text{Ni}(\text{NH}_3)_6^{2+} + 2e^- \rightleftharpoons \text{Ni}(s) + 6\text{NH}_3$	-0.49	
Nitrogen	E° (V)	E° '(V)
$\text{N}_2(g) + 5\text{H}^+ + 4e^- \rightleftharpoons \text{N}_2\text{H}_5^+$	-0.23	
$\text{N}_2\text{O}(g) + 2\text{H}^+ + 2e^- \rightleftharpoons \text{N}_2(g) + \text{H}_2\text{O}(l)$	1.77	
$2\text{NO}(g) + 2\text{H}^+ + 2e^- \rightleftharpoons \text{N}_2\text{O}(g) + \text{H}_2\text{O}(l)$	1.59	
$\text{HNO}_2 + \text{H}^+ + e^- \rightleftharpoons \text{NO}(g) + \text{H}_2\text{O}(l)$	0.996	
$2\text{HNO}_2 + 4\text{H}^+ + 4e^- \rightleftharpoons \text{N}_2\text{O}(g) + 3\text{H}_2\text{O}(l)$	1.297	
$\text{NO}_3^- + 3\text{H}^+ + 2e^- \rightleftharpoons \text{HNO}_2 + \text{H}_2\text{O}(l)$	0.94	
Oxygen	E° (V)	E° '(V)
$\text{O}_2(g) + 2\text{H}^+ + 2e^- \rightleftharpoons \text{H}_2\text{O}_2$	0.695	
$\text{O}_2(g) + 4\text{H}^+ + 4e^- \rightleftharpoons 2\text{H}_2\text{O}(l)$	1.229	
$\text{H}_2\text{O}_2 + 2\text{H}^+ + 2e^- \rightleftharpoons 2\text{H}_2\text{O}(l)$	1.763	
$\text{O}_2(g) + 2\text{H}_2\text{O}(l) + 4e^- \rightleftharpoons 4\text{OH}^-$	0.401	
$\text{O}_3(g) + 2\text{H}^+ + 2e^- \rightleftharpoons \text{O}_2(g) + \text{H}_2\text{O}(l)$	2.07	

Phosphorous	E° (V)	$E^{\circ'}$ (V)
$P(s, \text{white}) + 3H^+ + 3e^- \rightleftharpoons PH_3(g)$		
$H_3PO_3 + 2H^+ + 2e^- \rightleftharpoons H_3PO_2 + H_2O(l)$		
$H_3PO_4 + 2H^+ + 2e^- \rightleftharpoons H_3PO_3 + H_2O(l)$		
Platinum	E° (V)	$E^{\circ'}$ (V)
$Pt^{2+} + 2e^- \rightleftharpoons Pt(s)$		
$PtCl_4^{2-} + 2e^- \rightleftharpoons Pt(s) + 4Cl^-$		
Potassium	E° (V)	$E^{\circ'}$ (V)
$K^+ + e^- \rightleftharpoons K(s)$		
Ruthenium	E° (V)	$E^{\circ'}$ (V)
$Ru^{3+} + e^- \rightleftharpoons Ru^{2+}$	0.249	
$RuO_2(s) + 4H^+ + 4e^- \rightleftharpoons Ru(s) + 2H_2O(l)$	0.68	
$Ru(NH_3)_6^{3+} + e^- \rightleftharpoons Ru(s) + Ru(NH_3)_6^{2+}$	0.10	
$Ru(CN)_6^{3-} + e^- \rightleftharpoons Ru(s) + Ru(CN)_6^{4-}$	0.86	
Selenium	E° (V)	$E^{\circ'}$ (V)
$Se(s) + 2e^- \rightleftharpoons Se^{2-}$		-0.67 in 1 M NaOH
$Se(s) + 2H^+ + 2e^- \rightleftharpoons H_2Se(g)$	-0.115	
$H_2SeO_3 + 4H^+ + 4e^- \rightleftharpoons Se(s) + 3H_2O(l)$	0.74	
$SeO_4^{3-} + 4H^+ + e^- \rightleftharpoons H_2SeO_3 + H_2O(l)$	1.151	
Silicon	E° (V)	$E^{\circ'}$ (V)
$SiF_6^{2-} + 4e^- \rightleftharpoons Si(s) + 6F^-$	-1.37	
$SiO_2(s) + 4H^+ + 4e^- \rightleftharpoons Si(s) + 2H_2O(l)$	-0.909	
$SiO_2(s) + 8H^+ + 8e^- \rightleftharpoons SiH_4(g) + 2H_2O(l)$	-0.516	

Silver	E° (V)	$E^{\circ'}$ (V)
$\text{Ag}^+ + e^- \rightleftharpoons \text{Ag}(s)$	0.7996	
$\text{AgBr}(s) + e^- \rightleftharpoons \text{Ag}(s) + \text{Br}^-$	0.071	
$\text{Ag}_2\text{C}_2\text{O}_4(s) + 2e^- \rightleftharpoons 2\text{Ag}(s) + \text{C}_2\text{O}_4^{2-}$	0.47	
$\text{AgCl}(s) + e^- \rightleftharpoons \text{Ag}(s) + \text{Cl}^-$	0.2223	
$\text{AgI}(s) + e^- \rightleftharpoons \text{Ag}(s) + \text{I}^-$	-0.152	
$\text{Ag}_2\text{S}(s) + 2e^- \rightleftharpoons 2\text{Ag}(s) + \text{S}^{2-}$	-0.71	
$\text{Ag}(\text{NH}_3)_2^+ + e^- \rightleftharpoons \text{Ag}(s) + 2\text{NH}_3$	-0.373	
Sodium	E° (V)	$E^{\circ'}$ (V)
$\text{Na}^+ + e^- \rightleftharpoons \text{Na}(s)$	-2.713	
Strontium	E° (V)	$E^{\circ'}$ (V)
$\text{Sr}^{2+} + 2e^- \rightleftharpoons \text{Sr}(s)$	-2.89	
Sulfur	E° (V)	$E^{\circ'}$ (V)
$\text{S}(s) + 2e^- \rightleftharpoons \text{S}^{2-}$	-0.407	
$\text{S}(s) + 2\text{H}^+ + 2e^- \rightleftharpoons \text{H}_2\text{S}$	0.144	
$\text{S}_2\text{O}_6^{2-} + 4\text{H}^+ + 2e^- \rightleftharpoons 2\text{H}_2\text{SO}_3$	0.569	
$\text{S}_2\text{O}_8^{2-} + 2e^- \rightleftharpoons 2\text{SO}_4^{2-}$	1.96	
$\text{S}_4\text{O}_6^{2-} + 2e^- \rightleftharpoons 2\text{S}_2\text{O}_3^{2-}$	0.080	
$2\text{SO}_3^{2-} + 2\text{H}_2\text{O}(l) + 2e^- \rightleftharpoons \text{S}_2\text{O}_4^{2-} + 4\text{OH}^-$	-1.13	
$2\text{SO}_3^{2-} + 3\text{H}_2\text{O}(l) + 4e^- \rightleftharpoons \text{S}_2\text{O}_3^{2-} + 6\text{OH}^-$		-0.576 in 1 M NaOH
$2\text{SO}_4^{2-} + 4\text{H}^+ + 2e^- \rightleftharpoons \text{S}_2\text{O}_6^{2-} + 2\text{H}_2\text{O}(l)$	-0.25	
$\text{SO}_4^{2-} + \text{H}_2\text{O}(l) + 2e^- \rightleftharpoons \text{SO}_3^{2-} + 2\text{OH}^-$	-0.936	
$\text{SO}_4^{2-} + 4\text{H}^+ + 2e^- \rightleftharpoons \text{H}_2\text{SO}_3^{2-} + \text{H}_2\text{O}(l)$	0.172	

Thallium	E° (V)	E° '(V)
$\text{Tl}^{3+} + 2e^- \rightleftharpoons \text{Tl}^+$		1.25 in 1 M HClO_4 0.77 in 1 M HCl
$\text{Tl}^{3+} + 3e^- \rightleftharpoons \text{Tl}(s)$	0.742	
Tin	E° (V)	E° '(V)
$\text{Sn}^{2+} + 2e^- \rightleftharpoons \text{Sn}(s)$		-0.19 in 1 M HCl
$\text{Sn}^{4+} + 2e^- \rightleftharpoons \text{Sn}^{2+}$	0.154	0.139 in 1 M HCl
Titanium	E° (V)	E° '(V)
$\text{Ti}^{2+} + 2e^- \rightleftharpoons \text{Ti}(s)$	-0.163	
$\text{Ti}^{3+} + e^- \rightleftharpoons \text{Ti}^{2+}$	-0.37	
Tungsten	E° (V)	E° '(V)
$\text{WO}_2(s) + 4\text{H}^+ + 4e^- \rightleftharpoons \text{W}(s) + 2\text{H}_2\text{O}(l)$	-0.119	
$\text{WO}_3(s) + 6\text{H}^+ + 6e^- \rightleftharpoons \text{W}(s) + 3\text{H}_2\text{O}(l)$	-0.090	
Uranium	E° (V)	E° '(V)
$\text{U}^{3+} + 3e^- \rightleftharpoons \text{U}(s)$	-1.66	
$\text{U}^{4+} + e^- \rightleftharpoons \text{U}^{3+}$	-0.52	
$\text{UO}_2^+ + 4\text{H}^+ + e^- \rightleftharpoons \text{U}^{4+} + 2\text{H}_2\text{O}(l)$	0.27	
$\text{UO}_2^{2+} + e^- \rightleftharpoons \text{UO}_2^+$	0.16	
$\text{UO}_2^{2+} + 4\text{H}^+ + 2e^- \rightleftharpoons \text{U}^{4+} + 2\text{H}_2\text{O}(l)$	0.327	
Vanadium	E° (V)	E° '(V)
$\text{V}^{2+} + 2e^- \rightleftharpoons \text{V}(s)$	-1.13	
$\text{V}^{3+} + e^- \rightleftharpoons \text{V}^{2+}$	-0.255	
$\text{VO}^{2+} + 2\text{H}^+ + e^- \rightleftharpoons \text{V}^{3+} + \text{H}_2\text{O}(l)$	0.337	
$\text{VO}_2^{2+} + 2\text{H}^+ + e^- \rightleftharpoons \text{VO}^{2+} + \text{H}_2\text{O}(l)$	1.000	

Zinc	E° (V)	$E^{\circ'}$ (V)
$\text{Zn}^{2+} + 2e^- \rightleftharpoons \text{Zn}(s)$	-0.7618	
$\text{Zn}(\text{OH})_4^{2-} + 2e^- \rightleftharpoons \text{Zn}(s) + 4\text{OH}^-$	-1.285	
$\text{Zn}(\text{NH}_3)_4^{2+} + 2e^- \rightleftharpoons \text{Zn}(s) + 4\text{NH}_3$	-1.04	
$\text{Zn}(\text{CN})_4^{2-} + 2e^- \rightleftharpoons \text{Zn}(s) + 4\text{CN}$	-1.34	

Appendix 14: Random Number Table

The following table provides a list of random numbers in which the digits 0 through 9 appear with approximately equal frequency. Numbers are arranged in groups of five to make the table easier to view. This arrangement is arbitrary, and you can treat the table as a sequence of random individual digits (1, 2, 1, 3, 7, 4...going down the first column of digits on the left side of the table), as a sequence of three digit numbers (111, 212, 104, 367, 739... using the first three columns of digits on the left side of the table), or in any other similar manner.

Let's use the table to pick 10 random numbers between 1 and 50. To do so, we choose a random starting point, perhaps by dropping a pencil onto the table. For this exercise, we will assume that the starting point is the fifth row of the third column, or 12032. Because the numbers must be between 1 and 50, we will use the last two digits, ignoring all two-digit numbers less than 01 or greater than 50, and rejecting any duplicates. Proceeding down the third column, and moving to the top of the fourth column when necessary, gives the following 10 random numbers: 32, 01, 05, 16, 15, 38, 24, 10, 26, 14.

These random numbers (1000 total digits) are a small subset of values from the publication *Million Random Digits* (Rand Corporation, 2001) and used with permission. Information about the publication, and a link to a text file containing the million random digits is available at http://www.rand.org/pubs/monograph_reports/MR1418/.

11164	36318	75061	37674	26320	75100	10431	20418	19228	91792
21215	91791	76831	58678	87054	31687	93205	43685	19732	08468
10438	44482	66558	37649	08882	90870	12462	41810	01806	02977
36792	26236	33266	66583	60881	97395	20461	36742	02852	50564
73944	04773	12032	51414	82384	38370	00249	80709	72605	67497
49563	12872	14063	93104	78483	72717	68714	18048	25005	04151
64208	48237	41701	73117	33242	42314	83049	21933	92813	04763
51486	72875	38605	29341	80749	80151	33835	52602	79147	08868
99756	26360	64516	17971	48478	09610	04638	17141	09227	10606
71325	55217	13015	72907	00431	45117	33827	92873	02953	85474
65285	97198	12138	53010	95601	15838	16805	61004	43516	17020
17264	57327	38224	29301	31381	38109	34976	65692	98566	29550
95639	99754	31199	92558	68368	04985	51092	37780	40261	14479
61555	76404	86210	11808	12841	45147	97438	60022	12645	62000
78137	98768	04689	87130	79225	08153	84967	64539	79493	74917
62490	99215	84987	28759	19177	14733	24550	28067	68894	38490
24216	63444	21283	07044	92729	37284	13211	37485	10415	36457
16975	95428	33226	55903	31605	43817	22250	03918	46999	98501
59138	39542	71168	57609	91510	77904	74244	50940	31553	62562
29478	59652	50414	31966	87912	87514	12944	49862	96566	48825

Appendix 15: Polarographic Half-Wave Potentials

The following table provides $E_{1/2}$ values for selected reduction reactions. Values are from Dean, J. A. *Analytical Chemistry Handbook*, McGraw-Hill: New York, 1995.

Element	$E_{1/2}$ (volts vs. SCE)	Matrix
$\text{Al}^{3+} + 3e^- \rightleftharpoons \text{Al}(s)$	-0.5	0.2 M acetate (pH 4.5–4.7)
$\text{Cd}^{2+} + 2e^- \rightleftharpoons \text{Cd}(s)$	-0.60	0.1 M KCl 0.05 M H_2SO_4 1 M HNO_3
$\text{Cr}^{3+} + 3e^- \rightleftharpoons \text{Cr}(s)$	-0.35 (+3 \rightarrow +2) -1.70 (+2 \rightarrow 0)	1 M NH_4Cl plus 1 M NH_3 1 M $\text{NH}_4^+/\text{NH}_3$ buffer (pH 8–9)
$\text{Co}^{3+} + 3e^- \rightleftharpoons \text{Co}(s)$	-0.5 (+3 \rightarrow +2) -1.3 (+2 \rightarrow 0)	1 M NH_4Cl plus 1 M NH_3
$\text{Co}^{2+} + 2e^- \rightleftharpoons \text{Co}(s)$	-1.03	1 M KSCN
$\text{Cu}^{2+} + 2e^- \rightleftharpoons \text{Cu}(s)$	0.04 -0.22	0.1 M KSCN 0.1 M NH_4ClO_4 1 M Na_2SO_4 0.5 M potassium citrate (pH 7.5)
$\text{Fe}^{3+} + 3e^- \rightleftharpoons \text{Fe}(s)$	-0.17 (+3 \rightarrow +2) -1.52 (+2 \rightarrow 0)	0.5 M sodium tartrate (pH 5.8)
$\text{Fe}^{3+} + e^- \rightleftharpoons \text{Fe}^{2+}$	-0.27	0.2 M $\text{Na}_2\text{C}_2\text{O}_4$ (pH < 7.9)
$\text{Pb}^{2+} + 2e^- \rightleftharpoons \text{Pb}(s)$	-0.405 -0.435	1 M HNO_3 1 M KCl
$\text{Mn}^{2+} + 2e^- \rightleftharpoons \text{Mn}(s)$	-1.65	1 M NH_4Cl plus 1 M NH_3
$\text{Ni}^{2+} + 2e^- \rightleftharpoons \text{Ni}(s)$	-0.70 -1.09	1 M KSCN 1 M NH_4Cl plus 1 M NH_3
$\text{Zn}^{2+} + 2e^- \rightleftharpoons \text{Zn}(s)$	-0.995 -1.33	0.1 M KCl 1 M NH_4Cl plus 1 M NH_3

Appendix 16: Countercurrent Separations

In 1949, Lyman Craig introduced an improved method for separating analytes with similar distribution ratios.¹ The technique, which is known as a countercurrent liquid–liquid extraction, is outlined in [Figure A16.1](#) and discussed in detail below. In contrast to a sequential liquid–liquid extraction, in which we repeatedly extract the sample containing the analyte, a countercurrent extraction uses a serial extraction of both the sample and the extracting phases. Although countercurrent separations are no longer common—chromatographic separations are far more efficient in terms of resolution, time, and ease of use—the theory behind a countercurrent extraction remains useful as an introduction to the theory of chromatographic separations.

To track the progress of a countercurrent liquid-liquid extraction we need to adopt a labeling convention. As shown in [Figure A16.1](#), in each step of a countercurrent extraction we first complete the extraction and then transfer the upper phase to a new tube containing a portion of the fresh lower phase. Steps are labeled sequentially beginning with zero. Extractions take place in a series of tubes that also are labeled sequentially, starting with zero. The upper and lower phases in each tube are identified by a letter and number, with the letters U and L representing, respectively, the upper phase and the lower phase, and the number indicating the step in the countercurrent extraction in which the phase was first introduced. For example, U_0 is the upper phase introduced at step 0 (during the first extraction), and L_2 is the lower phase introduced at step 2 (during the third extraction). Finally, the partitioning of analyte in any extraction tube results in a fraction p remaining in the upper phase, and a fraction q remaining in the lower phase. Values of q are calculated using equation A16.1, which is identical to [equation 7.26](#) in Chapter 7.

$$(q_{\text{aq}})_1 = \frac{(\text{moles aq})_1}{(\text{moles aq})_0} = \frac{V_{\text{aq}}}{DV_{\text{org}} + V_{\text{aq}}} \quad \text{A16.1}$$

The fraction p , of course is equal to $1 - q$. Typically V_{aq} and V_{org} are equal in a countercurrent extraction, although this is not a requirement.

Let's assume that the analyte we wish to isolate is present in an aqueous phase of 1 M HCl, and that the organic phase is benzene. Because benzene has the smaller density, it is the upper phase, and 1 M HCl is the lower phase. To begin the countercurrent extraction we place the aqueous sample containing the analyte in tube 0 along with an equal volume of benzene. As shown in [Figure A16.1a](#), before the extraction all the analyte is present in phase L_0 . When the extraction is complete, as shown in [Figure A16.1b](#), a fraction p of the analyte is present in phase U_0 , and a fraction q is in phase L_0 . This completes step 0 of the countercurrent extraction. If we stop here, there is no difference between a simple liquid–liquid extraction and a countercurrent extraction.

After completing step 0, we remove phase U_0 and add a fresh portion of benzene, U_1 , to tube 0 (see [Figure A16.1c](#)). This, too, is identical to a simple liquid-liquid extraction. Here is where the power of the countercurrent extraction begins—instead of setting aside the phase U_0 , we place it in tube 1 along with a portion of analyte-free aqueous 1 M HCl as phase L_1 (see [Figure A16.1c](#)). Tube 0 now contains a fraction q of the analyte, and tube 1 contains a fraction p of the analyte. Completing the extraction in tube 0 results in a fraction p of its contents remaining in the upper phase, and a fraction q remaining in the lower phase. Thus, phases U_1 and L_0 now contain, respectively, fractions pq and q^2 of the original amount of analyte. Following the same logic, it is easy to show that the phases U_0 and L_1 in tube 1 contain, respectively, fractions p^2 and pq of analyte. This completes step 1 of the extraction (see [Figure A16.1d](#)). As shown in the remainder of [Figure A16.1](#), the countercurrent extraction continues with this cycle of phase transfers and extractions.

1 Craig, L. C. *J. Biol. Chem.* **1944**, *155*, 519–534.

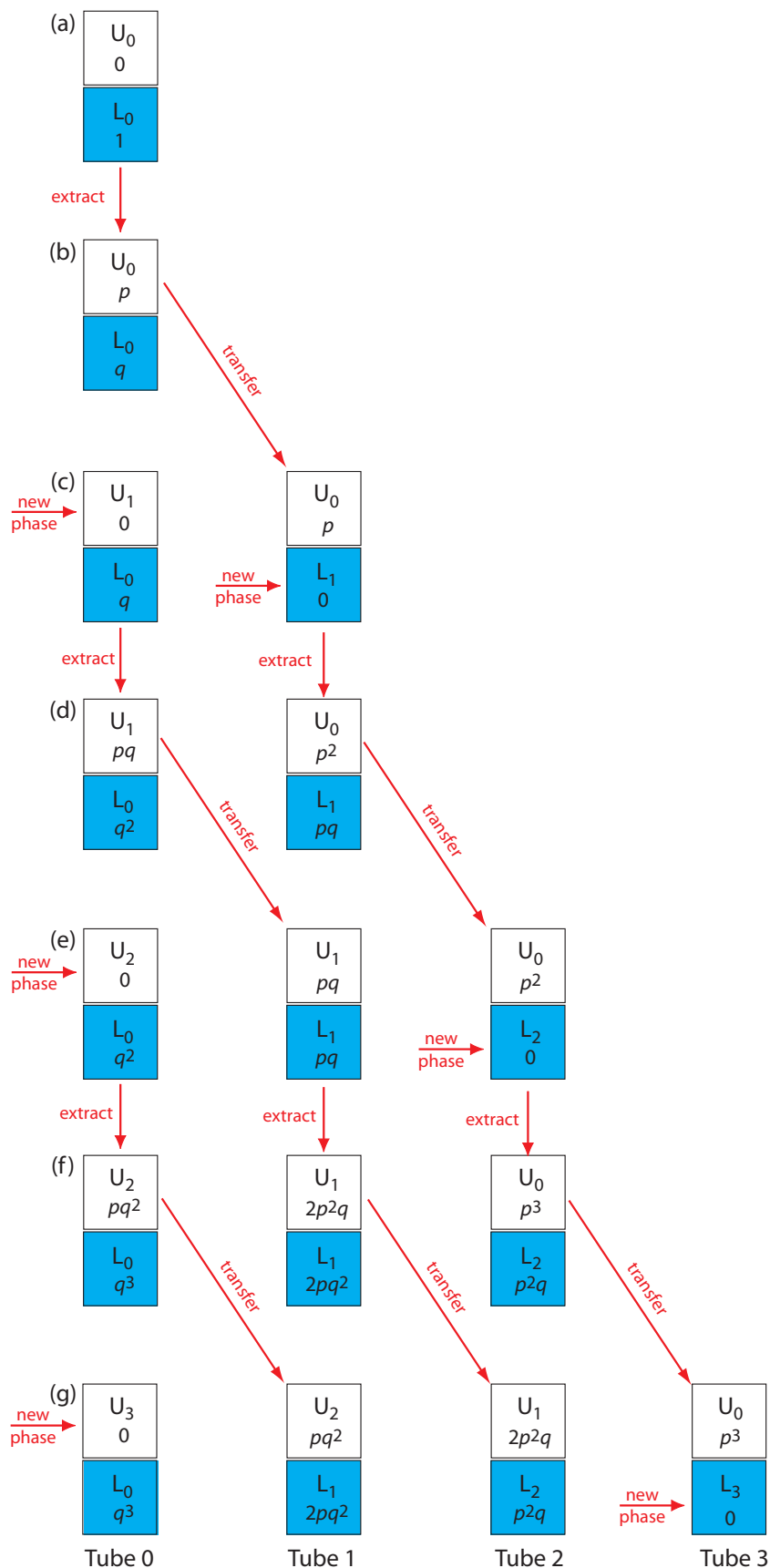


Figure A16.1 Scheme for a countercurrent extraction: (a) The sample containing the analyte begins in L_0 and is extracted with a fresh portion of the upper, or mobile phase; (b) The extraction takes place, transferring a fraction p of analyte to the upper phase and leaving a fraction q of analyte in the lower, or stationary phase; (c) When the extraction is complete, the upper phase is transferred to the next tube, which contains a fresh portion of the sample's solvent, and a fresh portion of the upper phase is added to tube 0. In (d) through (g), the process continues, with the addition of two more tubes.

$n \downarrow r \rightarrow$	0	1	2	3
0	1	—	—	—
1	q	p	—	—
2	q^2	$2pq$	p^2	—
3	q^3	$3pq^2$	$3p^2q$	p^3

In a countercurrent liquid–liquid extraction, the lower phase in each tube remains in place, and the upper phase moves from tube 0 to successively higher numbered tubes. We recognize this difference in the movement of the two phases by referring to the lower phase as a stationary phase and the upper phase as a mobile phase. With each transfer some of the analyte in tube r moves to tube $r + 1$, while a portion of the analyte in tube $r - 1$ moves to tube r . Analyte introduced at tube 0 moves with the mobile phase, but at a rate that is slower than the mobile phase because, at each step, a portion of the analyte transfers into the stationary phase. An analyte that preferentially extracts into the stationary phase spends proportionally less time in the mobile phase and moves at a slower rate. As the number of steps increases, analytes with different values of q eventually separate into completely different sets of extraction tubes.

We can judge the effectiveness of a countercurrent extraction using a histogram showing the fraction of analyte present in each tube. To determine the total amount of analyte in an extraction tube we add together the fraction of analyte present in the tube's upper and lower phases following each transfer. For example, at the beginning of step 3 (see [Figure A16.1g](#)) the upper and lower phases of tube 1 contain fractions pq^2 and $2pq^2$ of the analyte, respectively; thus, the total fraction of analyte in the tube is $3pq^2$. Table A16.1 summarizes this for the steps outlined in [Figure A16.1](#). A typical histogram, calculated assuming distribution ratios of 5.0 for analyte A and 0.5 for analyte B, is shown in Figure A16.2. Although four steps is not enough to separate the

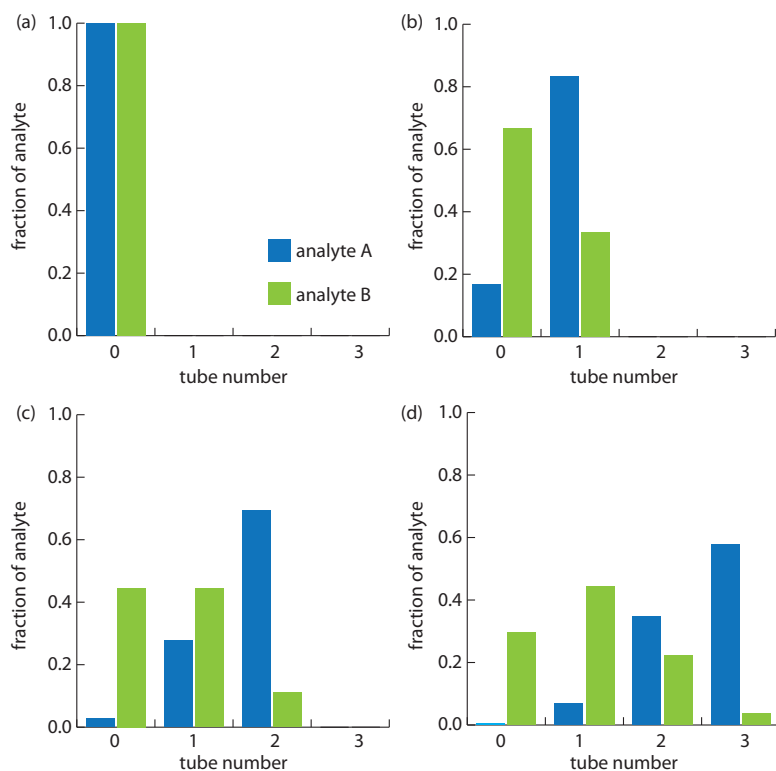


Figure A16.2 Progress of a countercurrent extraction for the separation of analytes A and B showing the fraction of analyte in each tube after (a) step 0, (b) step 1, (c) step 2, and (d) step 3. The distribution ratio, D , is 5.0 for analyte A and 0.5 for analyte B. The volumes of the two phases are identical.

analytes in this instance, it is clear that if we extend the countercurrent extraction to additional tubes, we will eventually separate the analytes.

[Figure A16.1](#) and [Table A16.1](#) show how an analyte's distribution changes during the first four steps of a countercurrent extraction. Now we consider how we can generalize these results to calculate the amount of analyte in any tube, at any step during the extraction. You may recognize the pattern of entries in [Table A16.1](#) as following the binomial distribution

$$f(r, n) = \frac{n!}{(n-r)!r!} p^r q^{n-r} \quad \text{A16.2}$$

where $f(r, n)$ is the fraction of analyte present in tube r at step n of the countercurrent extraction, with the upper phase containing a fraction $p \times f(r, n)$ of analyte and the lower phase containing a fraction $q \times f(r, n)$ of the analyte.

Example A16.1

The countercurrent extraction shown in [Figure A16.2](#) is carried out through step 30. Calculate the fraction of analytes A and B in tubes 5, 10, 15, 20, 25, and 30.

SOLUTION

To calculate the fraction, q , for each analyte in the lower phase we use equation A6.1. Because the volumes of the lower and upper phases are equal, we get

$$q_A = \frac{1}{D_A + 1} = \frac{1}{5 + 1} = 0.167 \quad q_B = \frac{1}{D_B + 1} = \frac{1}{4 + 1} = 0.200$$

Because we know that $p + q = 1$, we also know that p_A is 0.833 and that p_B is 0.333. For analyte A, the fraction in tubes 5, 10, 15, 20, 25, and 30 after the 30th step are

$$f(5, 30) = \frac{30!}{(30-5)!5!} (0.833)^5 (0.167)^{30-5} = 2.1 \times 10^{-15} \approx 0$$

$$f(10, 30) = \frac{30!}{(30-10)!10!} (0.833)^{10} (0.167)^{30-10} = 1.4 \times 10^{-9} \approx 0$$

$$f(15, 30) = \frac{30!}{(30-15)!15!} (0.833)^{15} (0.167)^{30-15} = 2.2 \times 10^{-5} \approx 0$$

$$f(20, 30) = \frac{30!}{(30-20)!20!} (0.833)^{20} (0.167)^{30-20} = 0.013$$

$$f(25, 30) = \frac{30!}{(30-25)!25!} (0.833)^{25} (0.167)^{30-25} = 0.192$$

$$f(30, 30) = \frac{30!}{(30-30)!30!} (0.833)^{30} (0.167)^{30-30} = 0.004$$

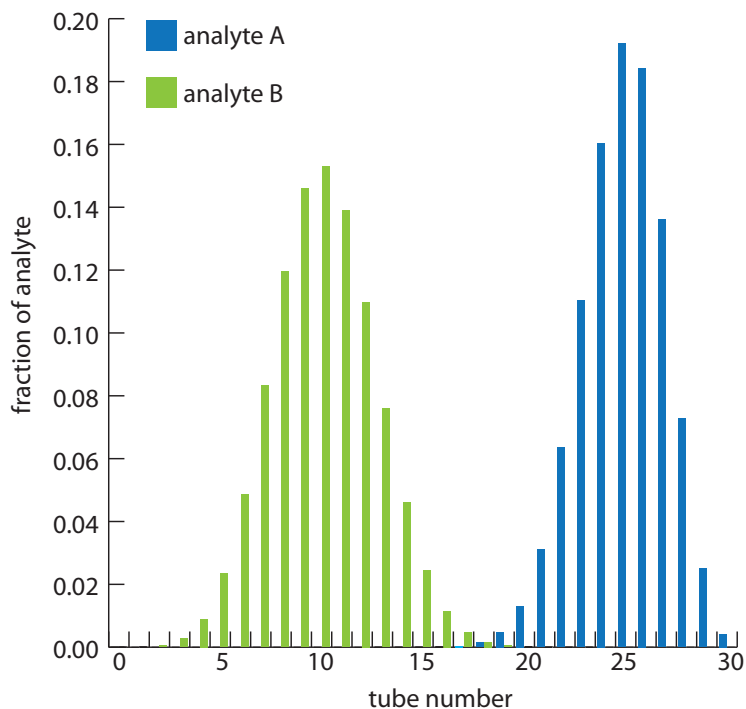


Figure A16.3 Progress of a countercurrent extraction for the separation of analyte A and B showing the fraction of analyte in each tube after 30 steps. The distribution ratio, D , is 5.0 for analyte A and 0.5 for analyte B. The volumes of the two phases are identical. See [Example A16.1](#) for further details.

The fraction of analyte B in tubes 5, 10, 15, 20, 25, and 30 is calculated in the same way, yielding respective values of 0.023, 0.153, 0.025, 0, 0, and 0. Figure A16.3, which provides the complete histogram for the distribution of analytes A and B, shows that 30 steps is sufficient to separate the two analytes.

Constructing a histogram using [equation A16.2](#) is tedious, particularly when the number of steps is large. Because the fraction of analyte in most tubes is approximately zero, we can simplify the histogram's construction by solving [equation A16.2](#) only for those tubes containing an amount of analyte exceeding a threshold value. For a binomial distribution, we can use the mean and standard deviation to determine which tubes contain a significant fraction of analyte. The properties of a binomial distribution were covered in [Chapter 4](#), with the mean, μ , and the standard deviation, s , given as

$$\mu = np$$

$$\sigma = \sqrt{np(1-p)} = \sqrt{npq}$$

Furthermore, if both np and nq are greater than 5, the binomial distribution is closely approximated by the normal distribution and we can use the properties of a normal distribution to determine the location of the analyte and its recovery.²

Example A16.2

Two analytes, A and B, with distribution ratios of 9 and 4, respectively, are separated using a countercurrent extraction in which the volumes of the upper and lower phases are equal. After 100 steps determine the 99% confidence interval for the location of each analyte.

² Mark, H.; Workman, J. *Spectroscopy* **1990**, 5(3), 55–56.

SOLUTION

The fraction, q , of each analyte remaining in the lower phase is calculated using [equation A16.1](#). Because the volumes of the lower and upper phases are equal, we find that

$$q_A = \frac{1}{D_A + 1} = \frac{1}{9 + 1} = 0.10$$

$$q_B = \frac{1}{D_B + 1} = \frac{1}{4 + 1} = 0.20$$

Because we know that $p + q = 1$, we also know that p_A is 0.90 and p_B is 0.80. After 100 steps, the mean and the standard deviation for the distribution of analytes A and B are

$$\mu_A = np_A = (100)(0.90) = 90 \text{ and } \sigma_A = \sqrt{np_A q_A} = \sqrt{(100)(0.90)(0.10)} = 3$$

$$\mu_B = np_B = (100)(0.80) = 80 \text{ and } \sigma_B = \sqrt{np_B q_B} = \sqrt{(100)(0.80)(0.20)} = 4$$

Given that np_A , np_B , nq_A , and nq_B are all greater than 5, we can assume that the distribution of analytes follows a normal distribution and that the confidence interval for the tubes containing each analyte is

$$r = \mu \pm z\sigma$$

where r is the tube's number and the value of z is determined by the desired significance level. For a 99% confidence interval the value of z is 2.58 ([Appendix 4](#)); thus,

$$r_A = 90 \pm (2.58)(3) = 90 \pm 8$$

$$r_B = 80 \pm (2.58)(4) = 80 \pm 10$$

Because the two confidence intervals overlap, a complete separation of the two analytes is not possible using a 100 step countercurrent extraction. The complete distribution of the analytes is shown in [Figure A16.4](#).

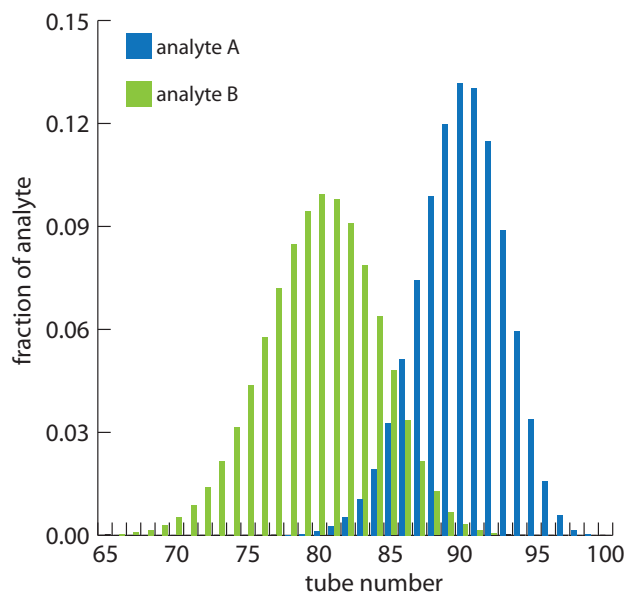


Figure A16.4 Progress of the countercurrent extraction in [Example A16.2](#) after 100 steps. Although analyte A moves more quickly than analyte B, the similarity of their distribution ratios, and thus the similarity in their values of q , means the separation of analytes A and B is not yet complete.

Example A16.3

For the countercurrent extraction in [Example A16.2](#), calculate the recovery and separation factor for analyte A if the contents of tubes 85–99 are pooled together.

SOLUTION

From [Example A16.2](#) we know that after 100 steps of the countercurrent extraction, analyte A is normally distributed about tube 90 with a standard deviation of 3. To determine the fraction of analyte A in tubes 85–99, we use the single-sided normal distribution in [Appendix 3](#) to determine the fraction of analyte in tubes 0–84, and in tube 100. The fraction of analyte A in tube 100 is determined by calculating the deviation z

$$z = \frac{r - \mu}{\sigma} = \frac{99 - 90}{3} = 3$$

and using the table in [Appendix 3](#) to determine the corresponding fraction. For $z = 3$ this corresponds to 0.135% of analyte A. To determine the fraction of analyte A in tubes 0–84 we again calculate the deviation

$$z = \frac{r - \mu}{\sigma} = \frac{85 - 90}{3} = -1.67$$

From [Appendix 3](#) we find that 4.75% of analyte A is present in tubes 0–84. Analyte A's recovery, therefore, is

$$100\% - 4.75\% - 0.135\% \approx 95\%$$

To calculate the separation factor we determine the recovery of analyte B in tubes 85–99 using the same general approach as for analyte A, finding that approximately 89.4% of analyte B remains in tubes 0–84 and that essentially no analyte B is in tube 100. The recover for B, therefore, is

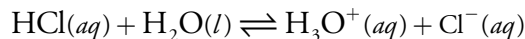
$$100\% - 89.4\% - 0\% \approx 10.6\%$$

and the separation factor is

$$S_{B,A} = \frac{R_A}{R_B} = \frac{10.6}{95} = 0.112$$

Appendix 17: Review of Chemical Kinetics

A reaction's equilibrium position defines the extent to which the reaction can occur. For example, we expect a reaction with a large equilibrium constant, such as the dissociation of HCl in water



to proceed nearly to completion. A large equilibrium constant, however, does not guarantee that a reaction will reach its equilibrium position. Many reactions with large equilibrium constants, such as the reduction of MnO_4^- by H_2O



do not occur to an appreciable extent. The study of the rate at which a chemical reaction approaches its equilibrium position is called kinetics.

A17.1 Chemical Reaction Rates

A study of a reaction's kinetics begins with the measurement of its reaction rate. Consider, for example, the general reaction shown below, involving the aqueous solutes A, B, C, and D, with stoichiometries of a , b , c , and d .



The rate, or velocity, at which this reaction approaches its equilibrium position is determined by following the change in concentration of one reactant or one product as a function of time. For example, if we monitor the concentration of reactant A, we express the rate as

$$R = -\frac{d[\text{A}]}{dt} \quad \text{A17.2}$$

where R is the measured rate expressed as a change in concentration of A as a function of time. Because a reactant's concentration decreases with time, we include a negative sign so that the rate has a positive value.

We also can determine the rate by following the change in concentration of a product as a function of time, which we express as

$$R' = \frac{d[\text{C}]}{dt} \quad \text{A17.3}$$

Rates determined by monitoring different species do not necessarily have the same value. The rate R in equation A17.2 and the rate R' in equation A17.3 have the same value only if the stoichiometric coefficients of A and C in reaction A17.1 are identical. In general, the relationship between the rates R and R' is

$$R = \frac{a}{c} \times R'$$

A17.2 The Rate Law

A rate law describes how a reaction's rate is affected by the concentration of each species in the reaction mixture. The rate law for [reaction A17.1](#) takes the general form of

$$R = k[A]^\alpha[B]^\beta[C]^\gamma[D]^\delta[E]^\varepsilon \dots \quad \text{A17.4}$$

where k is the rate constant, and α , β , γ , δ , and ε are the reaction orders of the reaction for each species present in the reaction.

There are several important points about the rate law in equation A17.4. First, a reaction's rate may depend on the concentrations of both reactants and products, as well as the concentration of a species that does not appear in the reaction's overall stoichiometry. Species E in equation A17.4, for example, may be a catalyst that does not appear in the reaction's overall stoichiometry, but which increases the reaction's rate. Second, the reaction order for a given species is not necessarily the same as its stoichiometry in the chemical reaction. Reaction orders may be positive, negative, or zero, and may take integer or non-integer values. Finally, the reaction's overall reaction order is the sum of the individual reaction orders for each species. Thus, the overall reaction order for equation A17.4 is $\alpha + \beta + \gamma + \delta + \varepsilon$.

A17.3 Kinetic Analysis of Selected Reactions

In this section we review the application of kinetics to several simple chemical reactions, focusing on how we can use the integrated form of the rate law to determine reaction orders. In addition, we consider how we can determine the rate law for a more complex system.

FIRST-ORDER REACTIONS

The simplest case we can treat is a first-order reaction in which the reaction's rate depends on the concentration of only one species. The best example of a first-order reaction is an irreversible thermal decomposition of a single reactant, which we represent as



with a rate law of

$$R = -\frac{d[A]}{dt} = k[A] \quad \text{A17.6}$$

The simplest way to demonstrate that a reaction is first-order in A, is to double the concentration of A and note the effect on the reaction's rate. If the observed rate doubles, then the reaction must be first-order in A. Alternatively, we can derive a relationship between the concentration of A and time by rearranging equation A17.6 and integrating.

$$\frac{d[A]}{[A]} = -k dt$$

$$\int_{[A]_0}^{[A]_t} \frac{d[A]}{[A]} = -k \int_0^t dt \quad \text{A17.7}$$

Evaluating the integrals in equation A17.7 and rearranging

$$\ln \frac{[A]_t}{[A]_0} = -kt \quad \text{A17.8}$$


$$\ln[A]_t = -kt + \ln[A]_0 \quad \text{A17.9}$$

shows that for a first-order reaction, a plot of $\ln[A]_t$ versus time is linear with a slope of $-k$ and a y -intercept of $\ln[A]_0$. [Equation A17.8](#) and [equation A17.9](#) are known as integrated forms of the rate law.

[Reaction A17.5](#) is not the only possible form of a first-order reaction. For example, the reaction



will follow first-order kinetics if the reaction is first-order in A and if the concentration of B does not affect the reaction's rate. This may happen if the reaction's mechanism involves at least two steps. Imagine that in the first step, A slowly converts to an intermediate species, C, which rapidly reacts with the remaining reactant, B, in one or more steps, to form the products.



Because a reaction's rate depends only on those species in the slowest step—usually called the rate-determining step—and any preceding steps, species B will not appear in the rate law.

SECOND-ORDER REACTIONS

The simplest reaction demonstrating second-order behavior is



for which the rate law is

$$R = -\frac{d[A]}{dt} = k[A]^2$$

Proceeding as we did earlier for a first-order reaction, we can easily derive the integrated form of the rate law.

$$\frac{d[A]}{[A]^2} = -k dt$$

$$\int_{[A]_0}^{[A]_t} \frac{d[A]}{[A]^2} = -k \int_0^t dt$$

$$\frac{1}{[A]_t} = kt + \frac{1}{[A]_0}$$

For a second-order reaction, therefore, a plot of $[A]_t^{-1}$ versus t is linear with a slope of k and a y -intercept of $[A]_0^{-1}$. Alternatively, we can show that a reaction is second-order in A by observing the effect on the rate when we change the concentration of A. In this case, doubling the concentration of A produces a four-fold increase in the reaction's rate.

Example A17.1

The following data were obtained during a kinetic study of the hydration of *p*-methoxyphenylacetylene by measuring the relative amounts of reactants and products by NMR.¹

¹ Kaufman, D.; Sterner, C.; Masek, B.; Svenningsen, R.; Samuelson, G. J. *Chem. Educ.* **1982**, *59*, 885–886.

time (min)	% <i>p</i> -methoxyphenylacetylene
67	85.9
161	70.0
241	57.6
381	40.7
479	32.4
545	27.7
604	24

Determine whether this reaction is first-order or second-order in *p*-methoxyphenylacetylene.

SOLUTION

To determine the reaction's order we plot $\ln(\%p\text{-methoxyphenylacetylene})$ versus time for a first-order reaction, and $(\%p\text{-methoxyphenylacetylene})^{-1}$ versus time for a second-order reaction (see Figure A17.1). Because a straight-line for the first-order plot fits the data nicely, we conclude that the reaction is first-order in *p*-methoxyphenylacetylene. Note that when we plot the data using the equation for a second-order reaction, the data show curvature that does not fit the straight-line model.

PSEUDO-ORDER REACTIONS AND THE METHOD OF INITIAL RATES

Unfortunately, most reactions of importance in analytical chemistry do not follow the simple first-order or second-order rate laws discussed above. We are more likely to encounter the second-order rate law given in equation A17.11 than that in [equation A17.10](#).

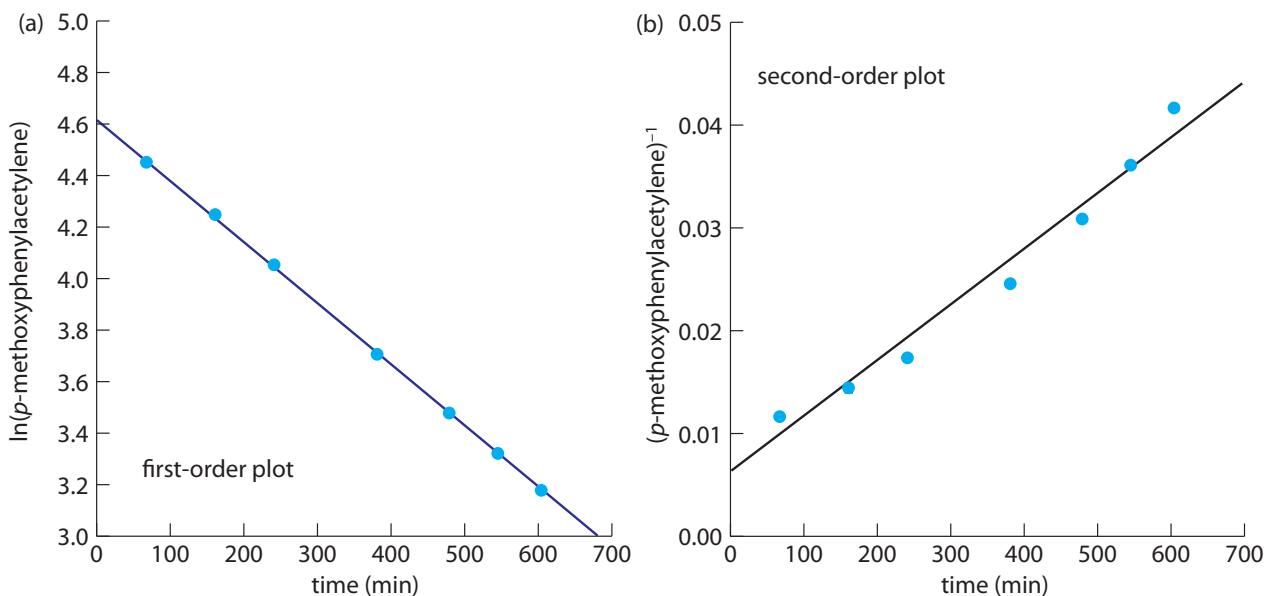


Figure A17.1 Integrated rate law plots for the data in Example A17.1 assuming (a) first-order kinetics and (b) second-order kinetics.

Demonstrating that a reaction obeys the rate law in equation A17.11 is complicated by the lack of a simple integrated form of the rate law. Often we can simplify the kinetics by carrying out the analysis under conditions where the concentrations of all species but one are so large that their concentrations remain effectively constant during the reaction. For example, if the concentration of B is selected such that $[B] \gg [A]$, then equation A17.11 simplifies to

$$R = k'[A]$$

where the rate constant k' is equal to $k[B]$. Under these conditions, the reaction appears to follow first-order kinetics in A and, for this reason we identify the reaction as pseudo-first-order in A. We can verify the reaction order for A using either the integrated rate law or by observing the effect on the reaction's rate of changing the concentration of A. To find the reaction order for B, we repeat the process under conditions where $[A] \gg [B]$.

A variation on the use of pseudo-ordered reactions is the initial rate method. In this approach we run a series of experiments in which we change one at a time the concentration of those species expected to affect the reaction's rate and measure the resulting initial rate. Comparing the reaction's initial rate for two experiments in which only the concentration of one species is different allows us to determine the reaction order for that species. The application of this method is outlined in the following example.

Example A17.2

The following data was collected during a kinetic study of the iodation of acetone by measuring the concentration of unreacted I_2 in solution.²

experiment number	$[C_3H_6O]$ (M)	$[H_3O^+]$ (M)	$[I_2]$ (M)	Rate ($M s^{-1}$)
1	1.33	0.0404	6.65×10^{-3}	1.78×10^{-6}
2	1.33	0.0809	6.65×10^{-3}	3.89×10^{-6}
3	1.33	0.162	6.65×10^{-3}	8.11×10^{-6}
4	1.33	0.323	6.65×10^{-3}	1.66×10^{-5}
5	0.167	0.323	6.65×10^{-3}	1.64×10^{-6}
6	0.333	0.323	6.65×10^{-3}	3.76×10^{-6}
7	0.667	0.323	6.65×10^{-3}	7.55×10^{-6}
8	0.333	0.323	3.32×10^{-3}	3.57×10^{-6}

SOLUTION

The order of the rate law with respect to the three reactants is determined by comparing the rates of two experiments in which there is a change in concentration for only one of the reactants. For example, in experiment 2 the $[H_3O^+]$ and the rate are approximately twice as large as in experiment 1, indicating that the reaction is first-order in $[H_3O^+]$. Working in the same manner, experiments 6 and 7 show that the reaction is also first order with respect to $[C_3H_6O]$, and experiments 6 and 8 show that the rate of the reaction is independent of the $[I_2]$. Thus, the rate law is

$$R = k[C_3H_6O][H_3O^+]$$

To determine the value of the rate constant, we substitute the rate, the $[\text{C}_3\text{H}_6\text{O}]$, and the $[\text{H}_3\text{O}^+]$ for each experiment into the rate law and solve for k . Using the data from experiment 1, for example, gives a rate constant of $3.31 \times 10^{-5} \text{ M}^{-1} \text{ sec}^{-1}$. The average rate constant for the eight experiments is $3.49 \times 10^{-5} \text{ M}^{-1} \text{ sec}^{-1}$.

Copyright Information for Reused Figures and Illustrations

CHAPTER 2

Figure 2.4: Creative Commons CC-BY-SA-2.5

Figure 2.6: Creative Commons Attribution-Share Alike 3.0 Unported license

Figure 2.7: Creative Commons CC-BY-SA-2.5

Figure 2.11: Creative Commons Attribution 3.0 Unported

CHAPTER 3

Figure 3.1: http://www.usda.gov/wps/portal/usda/?navtype=FT&navid=POLICY_LINK

CHAPTER 4

Figure 4.1: <http://www.usmint.gov/consumer/?action=circCoinPolicy>

CHAPTER 7

Figure 7.3: <http://eol.jsc.nasa.gov/info/use.htm>

Figure 7.6: <http://beta.photolib.noaa.gov/about.html>

Figure 7.7: <http://beta.photolib.noaa.gov/about.html>

Figure 7.16: Creative Commons Attribution License 2.0

Figure 7.19: public domain

Figure 7.22: GNU Free Documentation License, Version 1.2

CHAPTER 8

Figure 8.12: Creative Commons Attribution-Share Alike 2.0 Germany license

Figure 8.14: http://www.usda.gov/wps/portal/usda/?navtype=FT&navid=POLICY_LINK

CHAPTER 9

Figure 9.5: public domain

CHAPTER 10

Figure 10.1: GNU Free Documentation License, Version 1.2

Figure 10.3: GNU Free Documentation License, Version 1.2

Figure 10.26: GNU Free Documentation License, Version 1.2

Figure 10.49: public domain

Figure 10.50: public domain

Figure 10.51: GNU Free Documentation License, Version 1.2

Figure 10.58: GNU Free Documentation License, Version 1.2

Figure 10.59: GNU Free Documentation License, Version 1.2

Click [here](#) for information regarding Creative Commons licenses, and [here](#) for information regarding GNU licenses.

